

QID : 1 -

In the following question, select the number which can be placed at the sign of question mark (?) from the given alternatives.

निम्नलिखित प्रश्न में दिए गए विकल्पों में से प्रश्न चिह्न (?) के स्थान पर आने वाली संख्या को चुनिए।

6	5	22
2	3	10
6	2	?

Options:

1) 18

2) 16

3) 15

4) 13

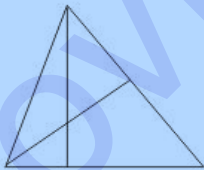
Correct Answer: 16

Candidate Answer: 16

QID : 2 -

How many triangles are there in the given figure?

दी गई आकृति में कितने त्रिभुज हैं?



Options:

1) 3

2) 4

3) 7

4) 8

Correct Answer: 8

Candidate Answer: 8

QID : 3 -

A word is represented by only one set of numbers as given in any one of the alternatives. The sets of numbers given in the alternatives are represented by two classes of alphabets as shown in the given two matrices. The columns and rows of **Matrix-I** are numbered from 0 to 4 and that of **Matrix-II** are numbered from 5 to 9. A letter from these matrices can be represented first by its row and next by its column, for example, 'T' can be represented by 24, 97, etc., and 'M' can be represented by 11, 66, etc. Similarly, you have to identify the set for the word "GAIN".

एक शब्द केवल एक संख्या-समूह द्वारा दर्शाया गया है, जैसा कि विकल्पों में से किसी एक में दिया गया है। विकल्पों में दिए गए संख्या-समूह अक्षरों के दो वर्गों द्वारा दर्शाए गए हैं, जैसा कि दिए गए दो आव्यूहों में है। **आव्यूह-I** के स्तम्भ और पंक्ति की संख्या 0 से 4 है और **आव्यूह-II** की 5 से 9। इन आव्यूहों से एक अक्षर को पहले उसकी पंक्ति और बाद में स्तम्भ संख्या द्वारा दर्शाया जा सकता है। उदाहरण के लिए 'T' को 24, 97, आदि द्वारा दर्शाया जा सकता है तथा 'M' को 11, 66, आदि द्वारा दर्शाया जा सकता है। इसी तरह से आपको प्रश्न में दिए शब्द "GAIN" के लिए समूह को पहचानना है।

Matrix-I आव्यूह-I						Matrix-II आव्यूह-II					
	0	1	2	3	4		5	6	7	8	9
0	X	K	D	F	X	5	Z	C	W	G	I
1	G	M	N	H	V	6	K	M	O	Q	S
2	E	O	Y	J	T	7	U	W	Y	B	A
3	C	F	I	L	R	8	F	H	G	L	N
4	A	S	U	N	P	9	A	R	T	V	X

Options:

- 1) 10, 79, 59, 41
- 2) 87, 40, 32, 12
- 3) 56, 79, 32, 43
- 4) 58, 69, 59, 89

Correct Answer: 87, 40, 32, 12

Candidate Answer: 87, 40, 32, 12

QID : 4 -

From the given answer figures, select the one in which the question figure is hidden/embedded.

दी गई उत्तर आकृतियों में से उस उत्तर आकृति को चुनिए जिस में प्रश्न आकृति निहित है।



Options:

1)



2)



3)



4)



Correct Answer:



Candidate Answer:



QID : 5 -

Which answer figure will complete the pattern in the question figure?

कौन सी उत्तर आकृति प्रश्न आकृति के प्रतिरूप को पूरा करेगी?



Options:

1)



2)



3)



4)



Correct Answer:



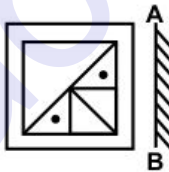
Candidate Answer:



QID : 6 -

If a mirror is placed on the line AB, then which of the answer figures is the right image of the given figure?

यदि एक दर्पण को AB रेखा पर रखा जाए, तो दी गई उत्तर आकृतियों में से कौन सी आकृति प्रश्न आकृति की सही प्रतिबिम्ब होगी?



Options:

1)



2)



3)



4)



Correct Answer:



Candidate Answer:



QID : 7 -

A piece of paper is folded and punched as shown below in the question figures. From the given answer figures, indicate how it will appear when opened?

नीचे के प्रश्न आकृतियों में दिखाए अनुसार कागज को मोड़कर छेदने तथा खोलने के बाद वह किस उत्तर आकृति जैसा दिखाई देगा?



Options:

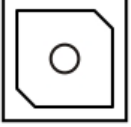
1)



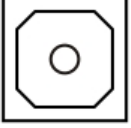
2)



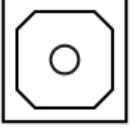
3)



4)



Correct Answer:



Candidate Answer:



QID : 8 - If 'A' means '+', 'B' means '-', 'C' means '÷' and 'D' means '×', then

14 A 7 C 2 D 6 B 1 = ?

यदि 'A' का अर्थ '+', 'B' का अर्थ '-', 'C' का अर्थ '÷' तथा 'D' का अर्थ '×' हो, तो

14 A 7 C 2 D 6 B 1 = ?

Options:

- 1) 34
- 2) 74
- 3) 35
- 4) 46

Correct Answer: 34

Candidate Answer: 34

QID : 9 - If $12 \% 6 \div 3 = 15$ and $15 \% 3 \div 4 = 14$, then

$17 \% 6 \div 2 = ?$

यदि $12 \% 6 \div 3 = 15$ तथा $15 \% 3 \div 4 = 14$ हो, तो

$17 \% 6 \div 2 = ?$

Options:

- 1) 23
- 2) 22
- 3) 21
- 4) 25

Correct Answer: 21

Candidate Answer: 21

Download More Papers From GovtJobsAlert.In

QID : 10 - Arrange the given words in the sequence in which they occur in the dictionary.

1. Nest
2. Needle
3. Nested
4. Newly
5. Needy

निम्नलिखित शब्दों को शब्दकोश में आने वाले क्रम के अनुसार लिखें।

1. Nest
2. Needle
3. Nested
4. Newly
5. Needy

Options:

- 1) 25134
- 2) 25143
- 3) 52143
- 4) 52134

Correct Answer: 25134

Candidate Answer: 52134

QID : 11 - In the following question, select the missing number from the given series.

39, 41, 44, 46, 49, ?

निम्नलिखित प्रश्न में दिए गए विकल्पों में से लुप्त अंक ज्ञात कीजिए।

39, 41, 44, 46, 49, ?

Options:

- 1) 52
- 2) 56
- 3) 51
- 4) 61

Correct Answer: 51

Candidate Answer: 51

QID : 12 - A series is given with one term missing. Select the correct alternative from the given ones that will complete the series.

ABC, FGH, KLM, ?

एक अनुक्रम दिया गया है, जिसमें से एक पद लुप्त है। दिए गए विकल्पों में से वह सही विकल्प चुनिए, जो अनुक्रम को पूरा करे।

ABC, FGH, KLM, ?

Options:

- 1) PMO
- 2) NOP
- 3) PQR
- 4) OPQ

Correct Answer: PQR

Candidate Answer: PQR

QID : 13 - In the following question, select the odd word from the given alternatives.

निम्नलिखित प्रश्न में दिए गए विकल्पों में से विषम शब्द को चुनिए।

Options:

- 1) Cake
केक
- 2) Cup
कप
- 3) Plate
प्लेट
- 4) Spoon
चम्मच

Correct Answer: Cake

केक

Candidate Answer: Cake

केक

QID : 14 - In the following question, select the odd number pair from the given alternatives.

निम्नलिखित प्रश्न में दिए गए विकल्पों में से विषम संख्या युग्म को चुनिए।

Options:

1) 11 - 122

2) 9 - 82

3) 5 - 26

4) 10 - 84

Correct Answer: 10 - 84

Candidate Answer: 10 - 84

QID : 15 - In the following question, select the odd letters from the given alternatives.

निम्नलिखित प्रश्न में दिए गए विकल्पों में से विषम अक्षरों को चुनिए।

Options:

1) AZ

2) HS

3) IR

4) CF

Correct Answer: CF

Candidate Answer: AZ

QID : 16 - Identify the diagram that best represents the relationship among the given classes.

House, Bathroom, Kitchen

वह आरेख चुनिए जो नीचे दिए गए वर्गों के बीच के संबंध का सही निरूपण करता है।

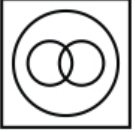
घर, स्नानघर, रसोई

Options:

1)



2)



3)



4)



Correct Answer:



Candidate Answer:



QID : 17 - In the following question, select the related word from the given alternatives.

Pen : Stationery :: Chair : ?

निम्नलिखित प्रश्न में दिए गए विकल्पों में से संबंधित शब्द को चुनिए।

कलम : लेखन सामग्री :: कुर्सी : ?

Options:

- 1) Garment
कपड़ा
- 2) Furniture
फर्नीचर
- 3) Wood
लकड़ी
- 4) Steel
इस्पात

Correct Answer: Furniture
फर्नीचर

Candidate Answer: Furniture
फर्नीचर

QID : 18 - In the following question, select the related number from the given alternatives.

11 : 123 :: 13 : ?

निम्नलिखित प्रश्न में दिए गए विकल्पों में से संबंधित संख्या को चुनिए।

11 : 123 :: 13 : ?

Options:
1) 169

2) 122

3) 171

4) 146

Correct Answer: 171

Candidate Answer: 171

QID : 19 - In the following question, select the related letters from the given alternatives.

ANPO : NAOP :: PQRS : ?

निम्नलिखित प्रश्न में दिए गए विकल्पों में से संबंधित अक्षरों को चुनिए।

ANPO : NAOP :: PQRS : ?

Options:
1) QPRS

2) PQRS

3) PQSR

4) QPSR

Correct Answer: QPSR

Candidate Answer: QPSR

QID : 20 - In the following question, select the word which cannot be formed using the letters of the given word.

OBSCURE

निम्नलिखित विकल्पों में से वह शब्द चुनिए जो दिए गए शब्द के अक्षरों का प्रयोग करके नहीं बनाया जा सकता।

OBSCURE

Options:
1) BOSE

2) CURE

3) RUST

4) SURE

Correct Answer: RUST

Candidate Answer: RUST

QID : 21 - Present age of A is 48 years. 7 years hence ages of A and B will be in ratio 5 : 6. What is the present age (in years) of B?

A की वर्तमान आयु 48 वर्ष है। 7 वर्ष बाद A तथा B की आयु 5 : 6 के अनुपात में होगी। B की वर्तमान आयु (वर्षों में) क्या है?

Options:

1) 59

2) 60

3) 62

4) 54

Correct Answer: 59

Candidate Answer: [NOT ANSWERED]

QID : 22 - Weight of P is thrice that of Q. Weight of Q is 1/2 of R. Weight of R is 4 times of S. Weight of S is 1/5 of T. Who is the lightest?

P का भार Q का तिगुना है। Q का भार R का 1/2 है। R का भार S का 4 गुना है। S का भार T का 1/5 है। सबसे हल्का कौन है?

Options:

1) Q

2) S

3) P

4) R

Correct Answer: S

Candidate Answer: S

QID : 23 - In the following question below are given some statements followed by some conclusions. Taking the given statements to be true even if they seem to be at variance from commonly known facts, read all the conclusions and then decide which of the given conclusion logically follows the given statements.

Statements:

- I. All cups are plates.
- II. All books are cups.

Conclusions:

- I. All plates are books.
- II. All books are plates.

नीचे दिए गए प्रश्न में कुछ कथन और उनके बाद उन कथनों पर आधारित कुछ निष्कर्ष दिए गए हैं, हालांकि उनमें सामान्य ज्ञात तथ्यों से भिन्नता हो सकती है। सभी निष्कर्ष पढ़ें और फिर निर्धारित करें कि दिए गए कौन से निष्कर्ष, दिए गए कथनों के आधार पर युक्तिसंगत हैं।

कथन:

- I. सभी कप प्लेट हैं।
- II. सभी पुस्तकें कप हैं।

निष्कर्ष:

- I. सभी प्लेट पुस्तकें हैं।
- II. सभी पुस्तकें प्लेट हैं।

Options:

- 1) Only conclusion (I) follows.
केवल निष्कर्ष (I) सही है।
- 2) Only conclusion (II) follows.
केवल निष्कर्ष (II) सही है।
- 3) Both conclusion follow.
दोनों ही निष्कर्ष सही हैं।
- 4) Neither conclusion (I) nor conclusion (II) follows.
न तो निष्कर्ष (I) न ही निष्कर्ष (II) सही है।

Correct Answer: Only conclusion (II) follows.
केवल निष्कर्ष (II) सही है।

Candidate Answer: Neither conclusion (I) nor conclusion (II) follows.
न तो निष्कर्ष (I) न ही निष्कर्ष (II) सही है।

QID : 24 - In a certain code language, "TWINKLE" is written as "GDRMPOV". How is "SHINE" written in that code language?

एक विशिष्ट कोड भाषा में, "TWINKLE" को "GDRMPOV" लिखा जाता है। इस कोड भाषा में "SHINE" को किस प्रकार लिखा जाएगा?

Options:

- 1) HMVRS
- 2) TIRMH
- 3) HSRMV
- 4) HVRTG

Correct Answer: HSRMV

Candidate Answer: HSRMV

QID : 25 - In a certain code language, "TALKS" is written as "76342" and "PORE" is written as "9510". How is "AROSE" written in that code language?

एक विशिष्ट कोड भाषा में, "TALKS" को "76342" तथा "PORE" को "9510" लिखा जाता है। इस कोड भाषा में "AROSE" को किस प्रकार लिखा जाएगा?

Options:

- 1) 63521
- 2) 61520
- 3) 76590
- 4) 59142

Correct Answer: 61520

Candidate Answer: 61520

QID : 26 - If $A = 2^7 \times 3^5$ and $B = 3^5 \times 2^3$, then what is the value of $A \times B$?

यदि $A = 2^7 \times 3^5$ तथा $B = 3^5 \times 2^3$ है, तो $A \times B$ का मान क्या है?

Options:

- 1) $2^{10} \times 3^{10}$
- 2) $2^{12} \times 3^8$
- 3) $6^{12} \times 6^8$
- 4) $2^{21} \times 3^{35}$

Correct Answer: $2^{10} \times 3^{10}$

Candidate Answer: $2^{10} \times 3^{10}$

QID : 27 - Which of the following is NOT a prime number?

निम्नलिखित में से कौन सी संख्या एक अभाज्य संख्या नहीं है?

Options:

- 1) 61
- 2) 71
- 3) 69
- 4) 67

Correct Answer: 69

Candidate Answer: 69

QID : 28 - Which of the following statement(s) is/are true?

I. 2 is a prime number.

II. 4 is a composite number.

निम्नलिखित में से कौन सा/से कथन सत्य है/हैं?

I. 2 एक अभाज्य संख्या है।

II. 4 एक संयुक्त संख्या है।

Options:

- 1) Only I
केवल I
- 2) Only II
केवल II
- 3) Both I and II
I तथा II दोनों
- 4) Neither I nor II
न तो I न ही II

Correct Answer: Both I and II

I तथा II दोनों

Candidate Answer: Only I

केवल I

QID : 29 - What is the value of $(0.2)^2 + (0.02)^2 + (0.002)^2$?

$(0.2)^2 + (0.02)^2 + (0.002)^2$ का मान क्या है?

Options:

- 1) 2.404404
- 2) 0.040404
- 3) 0.00404
- 4) 0.00044

Correct Answer: 0.040404

Candidate Answer: 0.040404

QID : 30 -

What is the value of $\sqrt{231 + \sqrt{81 + \sqrt{256}}}$?

$\sqrt{231 + \sqrt{81 + \sqrt{256}}}$ का मान क्या है?

Options:

- 1) 12
- 2) 14
- 3) 15
- 4) 16

Correct Answer: 16

Candidate Answer: 14

QID : 31 - How many positive factors of 132 are there?

132 के धनात्मक गुणनखंड कितने हैं?

Options:

- 1) 10
- 2) 12
- 3) 9
- 4) 11

Correct Answer: 12

Candidate Answer: 9

Download More Papers From GovtJobsAlert.In

QID : 32 - P, Q and R undertook a work for Rs 55000. Together P and Q complete $(8/11)^{th}$ part of the work. What is the share (in Rs) of R?

P, Q तथा R ने एक कार्य को 55000 रु में लिया। P तथा Q मिलकर कार्य का $(8/11)$ -वां भाग पूरा करते हैं। R का हिस्सा (रु में) क्या है?

Options:

- 1) 20000
- 2) 22000
- 3) 15000
- 4) 6000

Correct Answer: 15000

Candidate Answer: 15000

QID : 33 - Two pipes A and B can fill a tank in 100 minutes and 120 minutes respectively. Pipe C can alone empty the same tank in 200 minutes. If all three pipes are opened together, then in how many minutes will the tank be filled?

दो पाईप A तथा B एक टंकी को क्रमशः 100 मिनट तथा 120 मिनट में भर सकते हैं। पाईप C उसी टंकी को अकेला 200 मिनट में खाली कर सकता है। यदि सभी तीनों पाईपों को एक साथ खोल दिया जाये, तो टंकी कितने मिनट में भर जायेगी?

Options:

- 1) 100
- 2) 80
- 3) 75
- 4) 120

Correct Answer: 75

Candidate Answer: 75

QID : 34 - What is the area (in cm^2) of the rhombus having side as 5 cm and one of the diagonal as 8 cm?

एक समचतुर्भुज जिसकी भुजा 5 से.मी. है तथा एक विकर्ण 8 से.मी. है, का क्षेत्रफल (से.मी.² में) क्या है?

Options:

- 1) 25
- 2) 24
- 3) 26
- 4) 23

Correct Answer: 24

Candidate Answer: 24

QID : 35 - Aman purchased an article at a discount of 30% and sold it to Param at 40% profit. What is the ratio between the marked price and the price for which Param purchased the article?

अमन किसी एक वस्तु को 30% की छूट पर खरीदता है तथा इसे परम को 40% के लाभ पर बेच देता है। अंकित मूल्य तथा जिस मूल्य पर परम ने वस्तु को खरीदा है, के बीच का अनुपात क्या है?

Options:

- 1) 10 : 9
- 2) 15 : 14
- 3) 25 : 24
- 4) 50 : 49

Correct Answer: 50 : 49

Candidate Answer: 50 : 49

QID : 36 - An article has marked price of Rs 6500 and is available at a discount of 20%. The shopkeeper gives another discount to the buyer and sells the article for Rs 4160. What is the second discount (in %) offered?

एक वस्तु का अंकित मूल्य 6500 रु है तथा 20% की छूट पर उपलब्ध है। दुकानदार ग्राहक को एक अतिरिक्त छूट देता है तथा वस्तु को 4160 रु में बेच देता है। दूसरी बार दी गई छूट (% में) कितनी है?

Options:

- 1) 20
- 2) 10
- 3) 30
- 4) 15

Correct Answer: 20

Candidate Answer: 20

QID : 37 - Divide Rs 5100 among M, N and O so that M get $(8/11)^{th}$ of N's share and O gets $(7/6)^{th}$ of M's share. What is the share (in Rs) of N?

5100 रु को M, N तथा O में इस प्रकार विभाजित करें की M को N के हिस्से का $(8/11)$ -वां भाग मिले तथा O को M के हिस्से का $(7/6)$ -वां भाग मिले। N का हिस्सा (रु में) क्या है?

Options:

- 1) 1488
- 2) 1980
- 3) 1680
- 4) 2200

Correct Answer: 1980

Candidate Answer: 1980

QID : 38 - Three numbers are in the ratio 2 : 4 : 5. If the sum of their squares is 1620, then what are the numbers?

तीन संख्याएँ 2 : 4 : 5 के अनुपात में हैं। यदि उनके वर्गों का योग 1620 है, तो संख्याएँ क्या हैं?

Options:

1) 30, 36, 12

2) 12, 24, 30

3) 12, 30, 20

4) 10, 12, 36

Correct Answer: 12, 24, 30

Candidate Answer: 12, 24, 30

QID : 39 - The average of 6 consecutive numbers is 12.5. If next 3 numbers are also included, then what will be the new average?

6 क्रमागत संख्याओं का औसत 12.5 है। यदि अगली 3 संख्याओं को भी शामिल कर लिया जाए, तो नया औसत क्या होगा?

Options:

1) 13

2) 13.5

3) 14

4) 14.5

Correct Answer: 14

Candidate Answer: [NOT ANSWERED]

QID : 40 - A man buys a fan for Rs 35 and sells it for Rs 30. What is his loss percent?

एक व्यक्ति एक पंखा 35 रु में खरीदता है तथा उसे 30 रु में बेचता है। उसका हानि प्रतिशत क्या है?

Options:

1) 16.67

2) 25

3) 20

4) 14.28

Correct Answer: 14.28

Candidate Answer: 14.28

QID : 41 - An article is sold at a loss of 15%. If the selling price is doubled, then what will be the profit percentage?

एक वस्तु को 15% की हानि पर बेचा जाता है। यदि विक्रय मूल्य दोगुना कर दिया जाए, तो लाभ प्रतिशत क्या होगा?

Options:

1) 75

2) 50

3) 70

4) 100

Correct Answer: 70

Candidate Answer: 70

QID : 42 - Out of the total pens, 10% of pens are black. 10% of remaining pens are blue. 20% of remaining pens are red. The remaining 648 pens are green. How many total pens are there?

कुल कलमों में से 10% कलमों काली हैं। शेष कलमों में से 10% नीली हैं। बचे शेष कलमों में से 20% लाल हैं। बची हुई शेष 648 कलमों हरी हैं। कुल कलमों कितनी हैं?

Options:

1) 1000

2) 1500

3) 2000

4) 2500

Correct Answer: 1000

Candidate Answer: [NOT ANSWERED]

QID : 43 - A number is increased by 18%. To obtain the old number, by how much percentage should it be decreased?

एक संख्या को 18% से बढ़ाया गया। पुरानी संख्या प्राप्त करने के लिए, उसे कितने प्रतिशत से घटाया जाए?

Options:

1) 16.88

2) 15.25

3) 17.3

4) 14.28

Correct Answer: 15.25

Candidate Answer: 15.25

QID : 44 - Two men are standing on opposite ends of a 1000 metres long bridge. If they walk towards each other with speeds of 20 m/s and 5 m/s respectively, then how much time (in seconds) will they take to meet each other?

दो व्यक्ति 1000 मीटर लम्बे एक पुल के विपरीत किनारों पर खड़े हैं। यदि वे क्रमशः 20 मी./से. तथा 5 मी./से. की गति से एक दूसरे की ओर चलना प्रारंभ करें, तो वे आपस में मिलने में कितना समय (सेकण्डों में) लेंगे?

Options:

- 1) 50
- 2) 30
- 3) 40
- 4) 60

Correct Answer: 40

Candidate Answer: 40

QID : 45 - A man goes to a place at a speed of 80 km/hr and comes back with a different speed. If the average speed is 32 km/hr, then what is the return speed (in km/hr)?

एक व्यक्ति 80 कि.मी./घंटा की गति से किसी एक स्थान पर जाता है तथा एक भिन्न गति से वापस आता है। यदि औसत गति 32 कि.मी./घंटा है, तो वापस आते समय गति (कि.मी./घंटा में) क्या है?

Options:

- 1) 25
- 2) 22
- 3) 20
- 4) 24

Correct Answer: 20

Candidate Answer: 20

QID : 46 - What is the simple interest (in Rs) on a principal of Rs 1800 at the rate of 8% per annum for 3 years?

1800 रु के मूलधन पर 8% की वार्षिक दर से 3 वर्षों का साधारण ब्याज (रु में) क्या है?

Options:

- 1) 420
- 2) 432
- 3) 440
- 4) 380

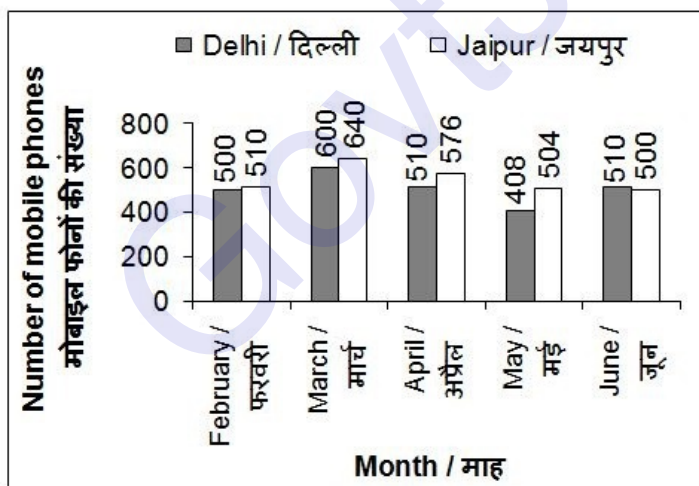
Correct Answer: 432

Candidate Answer: 432

QID : 47 -

The bar chart given below shows the number of mobile phone thefts in 2 cities Delhi and Jaipur from month February 2015 to June 2015.

नीचे दिए गए दण्ड चित्र में माह फरवरी 2015 से जून 2015 तक 2 शहरों दिल्ली तथा जयपुर में चोरी हुए मोबाइल फोनों की संख्या को दर्शाया गया है।



For how many months, was the number of mobile phones thefts in Jaipur higher than that in Delhi?

कितने महीनों में, जयपुर में चोरी हुए मोबाइल फोनों की संख्या दिल्ली से अधिक थी?

Options:

- 1) 5
- 2) 4
- 3) 0
- 4) 3

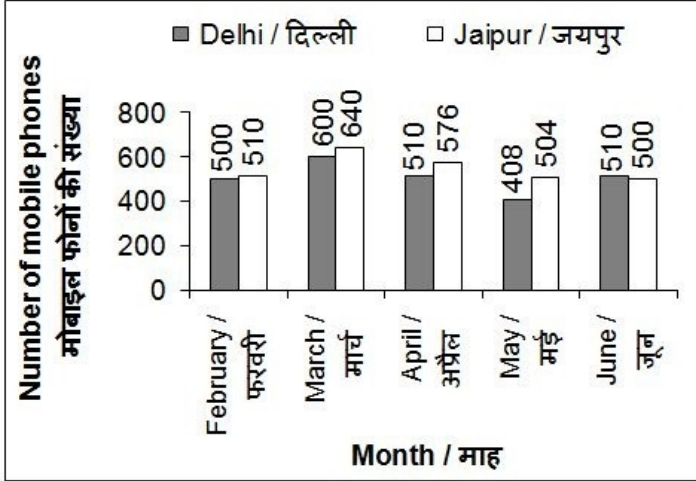
Correct Answer: 4

Candidate Answer: 4

QID : 48 -

The bar chart given below shows the number of mobile phone thefts in 2 cities Delhi and Jaipur from month February 2015 to June 2015.

नीचे दिए गए दण्ड चित्र में माह फरवरी 2015 से जून 2015 तक 2 शहरों दिल्ली तथा जयपुर में चोरी हुए मोबाइल फोनों की संख्या को दर्शाया गया है।



What is the percentage change in the number of mobile phones thefts in Jaipur from February 2015 to April 2015?

फरवरी 2015 से अप्रैल 2015 तक, जयपुर में चोरी हुए मोबाइल फोनों की संख्या में प्रतिशत परिवर्तन क्या है?

Options:

- 1) 66
- 2) 15.15
- 3) 12.94
- 4) 50

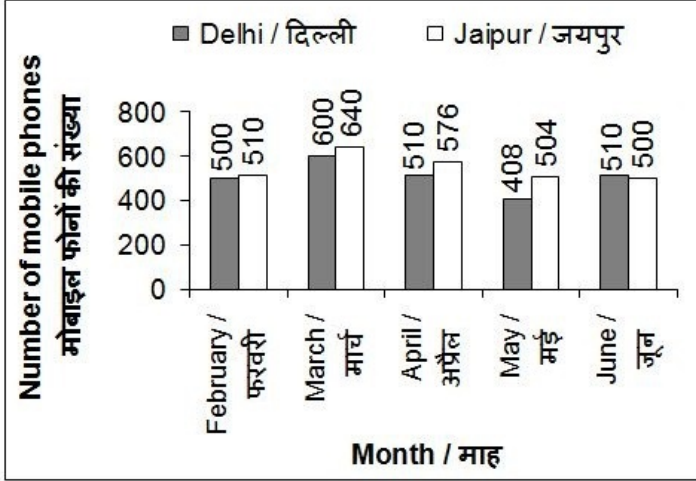
Correct Answer: 12.94

Candidate Answer: [NOT ANSWERED]

QID : 49 -

The bar chart given below shows the number of mobile phone thefts in 2 cities Delhi and Jaipur from month February 2015 to June 2015.

नीचे दिए गए दण्ड चित्र में माह फरवरी 2015 से जून 2015 तक 2 शहरों दिल्ली तथा जयपुर में चोरी हुए मोबाइल फोनों की संख्या को दर्शाया गया है।



In Delhi, what was the percentage change in the number of mobile phones theft from April 2015 to May 2015?

दिल्ली में, अप्रैल 2015 से मई 2015 तक चोरी हुए मोबाइल फोनों की संख्या में प्रतिशत परिवर्तन क्या था?

Options:

- 1) 30%
- 2) 28%
- 3) 20%
- 4) 25%

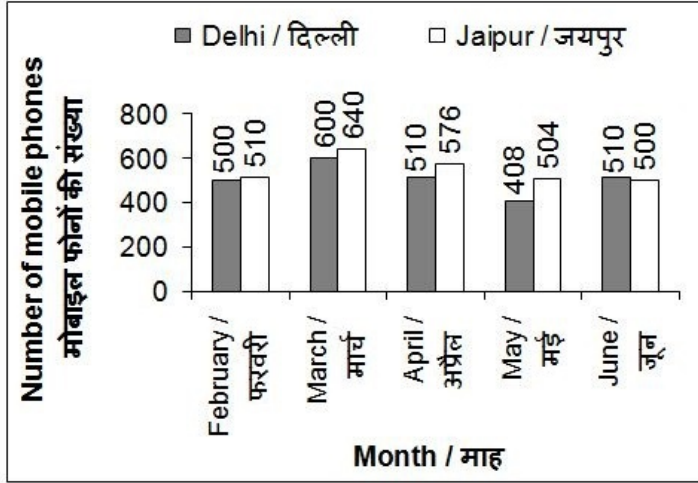
Correct Answer: 20%

Candidate Answer: [NOT ANSWERED]

QID : 50 -

The bar chart given below shows the number of mobile phone thefts in 2 cities Delhi and Jaipur from month February 2015 to June 2015.

नीचे दिए गए दण्ड चित्र में माह फरवरी 2015 से जून 2015 तक 2 शहरों दिल्ली तथा जयपुर में चोरी हुए मोबाइल फोनों की संख्या को दर्शाया गया है।



What was the average number of mobile phones thefts in Jaipur from February 2015 to June 2015?

फरवरी 2015 से जून 2015 तक, जयपुर में चोरी हुए मोबाइल फोनों की औसत संख्या क्या थी?

Options:

- 1) 550
- 2) 576
- 3) 408
- 4) 546

Correct Answer: 546

Candidate Answer: 546

QID : 51 - In the following question, some part of the sentence may have errors. Find out which part of the sentence has an error and select the appropriate option. If a sentence is free from error, select 'No Error'.

Meera has a fetish for oranges (1)/ and takes a dozen to school (2)/ every another day (3)/ No error (4)

Options:

- 1) 1
- 2) 2
- 3) 3
- 4) 4

Correct Answer: 3

Candidate Answer: 2

QID : 52 - In the following question, some part of the sentence may have errors. Find out which part of the sentence has an error and select the appropriate option. If a sentence is free from error, select 'No Error'.

Neither mother (1)/ nor the boys (2)/ was going to the party (3)/ No error (4)

Options:

- 1) 1
- 2) 2
- 3) 3
- 4) 4

Correct Answer: 3

Candidate Answer: 2

QID : 53 - In the following question, the sentence given with blank to be filled in with an appropriate word. Select the correct alternative out of the four and indicate it by selecting the appropriate option.

There are plenty of people suffering with _____ disease called asthma.

Options:

- 1) a
- 2) an
- 3) the
- 4) No option is correct.

Correct Answer: the

Candidate Answer: a

Download More Papers From GovtJobsAlert.In

QID : 54 - In the following question, the sentence given with blank to be filled in with an appropriate word. Select the correct alternative out of the four and indicate it by selecting the appropriate option.

I have _____ fetish for some specific fragrances.

Options:

- 1) a
- 2) an
- 3) the
- 4) No option is correct.

Correct Answer: a

Candidate Answer: a

QID : 55 - In the following question, out of the given four alternatives, select the one which best expresses the meaning of the given word.

Longing

Options:

- 1) Change
- 2) Fortitude
- 3) Fast
- 4) Yearning

Correct Answer: Yearning

Candidate Answer: Fortitude

QID : 56 - In the following question, out of the given four alternatives, select the one which best expresses the meaning of the given word.

Embezzle

Options:

- 1) Remunerate
- 2) Clear
- 3) Balance
- 4) Misappropriate

Correct Answer: Misappropriate

Candidate Answer: Clear

QID : 57 - In the following question, out of the given four alternatives, select the one which best expresses the meaning of the given word.

Exude

Options:

- 1) Ooze
- 2) Overflow
- 3) Wither
- 4) Evaporate

Correct Answer: Ooze

Candidate Answer: [NOT ANSWERED]

QID : 58 - In the following question, out of the given four alternatives, select the one which is opposite in meaning of the given word.

Capable

Options:

- 1) Deserving
- 2) Palpable
- 3) Inept
- 4) Incognito

Correct Answer: Inept

Candidate Answer: [NOT ANSWERED]

QID : 59 - In the following question, out of the given four alternatives, select the one which is opposite in meaning of the given word.

Brief

Options:

- 1) Efficient
- 2) Evident
- 3) Elaborate
- 4) Educate

Correct Answer: Elaborate

Candidate Answer: Elaborate

Download More Papers From GovtJobsAlert.In

Download More Papers From GovtJobsAlert.In

QID : 60 - In the following question, out of the given four alternatives, select the one which is opposite in meaning of the given word.

Barren

Options:

- 1) Desert
- 2) Depleted
- 3) Fertile
- 4) Arid

Correct Answer: Fertile

Candidate Answer: Fertile

QID : 61 - In the following question, out of the four given alternatives, select the alternative which best expresses the meaning of the Idiom/Phrase.

Kill two birds with one stone

Options:

- 1) To accomplish two different things at the same time
- 2) To fail at both things
- 3) To achieve nothing in life
- 4) To kill someone with a stone

Correct Answer: To accomplish two different things at the same time

Candidate Answer: To accomplish two different things at the same time

QID : 62 - In the following question, out of the four given alternatives, select the alternative which best expresses the meaning of the Idiom/Phrase.

To come clean

Options:

- 1) Cleaning a place
- 2) No idea about an incident
- 3) To make a honest disclosure
- 4) To deny the crime

Correct Answer: To make a honest disclosure

Candidate Answer: To make a honest disclosure

QID : 63 - In the following question, out of the four alternatives, select the alternative which will improve the bracketed part of the sentence. In case no improvement is needed, select "no improvement".

One should (**be preparing**) for the challenges in life.

Options:

- 1) be ready
- 2) be prepare
- 3) be prepared
- 4) No improvement

Correct Answer: be prepared

Candidate Answer: be ready

QID : 64 - In the following question, out of the four alternatives, select the alternative which will improve the bracketed part of the sentence. In case no improvement is needed, select "no improvement".

You must to do your assignments, (mustn't) you?

Options:

- 1) shouldn't
- 2) must
- 3) ought
- 4) No improvement

Correct Answer: No improvement

Candidate Answer: No improvement

QID : 65 - In the following question, out of the four alternatives, select the alternative which is best substitute of the phrase.

an elaborate musical composition for full orchestra, typically in four movements, at least one of which is traditionally in sonata form

Options:

- 1) Sound
- 2) Symphony
- 3) Melodious
- 4) Musical

Correct Answer: Symphony

Candidate Answer: Musical

QID : 66 - In the following question, out of the four alternatives, select the alternative which is best substitute of the phrase.

a thing that is not genuine

Options:

- 1) Fake
- 2) Honest
- 3) Interesting
- 4) Intriguing

Correct Answer: Fake

Candidate Answer: Fake

QID : 67 - In the following question, a word has been written in four different ways out of which only one is correctly spelt. Select the correctly spelt word.

Options:

- 1) Willingness
- 2) Willingness
- 3) Villingness
- 4) Vilingness

Correct Answer: Willingness

Candidate Answer: Willingness

QID : 68 - In the following question, a word has been written in four different ways out of which only one is correctly spelt. Select the correctly spelt word.

Options:

- 1) Grawity
- 2) Gravity
- 3) Gravitty
- 4) Graveety

Correct Answer: Gravity

Candidate Answer: Gravity

QID : 69 - The question below consists of a set of labelled sentences. These sentences, when properly sequenced form a coherent paragraph. Select the most logical order of sentences from among the options.

Tanya's

P- is the reason behind

Q- her popularity

R- great sense of humour

Options:

- 1) QRP
- 2) RPQ
- 3) PQR
- 4) QPR

Correct Answer: RPQ

Candidate Answer: QPR

QID : 70 - The question below consists of a set of labelled sentences. These sentences, when properly sequenced form a coherent paragraph. Select the most logical order of sentences from among the options.

The brave

P- soldiers on the border

Q- from all enemies and threats

R- save us

Options:

- 1) QRP
- 2) RPQ
- 3) PQR
- 4) PRQ

Correct Answer: PRQ

Candidate Answer: PRQ

QID : 71 - In the following passage, some of the words have been left out. Read the passage carefully and select the correct answer for the given blank out of the four alternatives.

Think of the Taj Mahal and a gleaming marble monument comes to the _____. But if you look closely, you'd _____ that the marble is not the gleaming white as it was. The burning of waste from the city of Agra, where the Taj Mahal is _____, is leading to the deposit of fine particles of matter on the monument. Over the past many _____, the Taj has been losing its shine due to Agra's pollution. The government too has tried various things, such as not _____ too many vehicles near the monument and even applying pastes to the marble walls to get the stain off.

Think of the Taj Mahal and a gleaming marble monument comes to the _____.

Options:

- 1) grind
- 2) side
- 3) mind
- 4) need

Correct Answer: mind

Candidate Answer: [NOT ANSWERED]

QID : 72 - In the following passage, some of the words have been left out. Read the passage carefully and select the correct answer for the given blank out of the four alternatives.

Think of the Taj Mahal and a gleaming marble monument comes to the _____. But if you look closely, you'd _____ that the marble is not the gleaming white as it was. The burning of waste from the city of Agra, where the Taj Mahal is _____, is leading to the deposit of fine particles of matter on the monument. Over the past many _____, the Taj has been losing its shine due to Agra's pollution. The government too has tried various things, such as not _____ too many vehicles near the monument and even applying pastes to the marble walls to get the stain off.

But if you look closely, you'd _____ that the marble is not the gleaming white as it was.

Options:

- 1) note
- 2) jolt
- 3) throat
- 4) gloat

Correct Answer: note

Candidate Answer: [NOT ANSWERED]

QID : 73 - In the following passage, some of the words have been left out. Read the passage carefully and select the correct answer for the given blank out of the four alternatives.

Think of the Taj Mahal and a gleaming marble monument comes to the _____. But if you look closely, you'd _____ that the marble is not the gleaming white as it was. The burning of waste from the city of Agra, where the Taj Mahal is _____, is leading to the deposit of fine particles of matter on the monument. Over the past many _____, the Taj has been losing its shine due to Agra's pollution. The government too has tried various things, such as not _____ too many vehicles near the monument and even applying pastes to the marble walls to get the stain off.

where the Taj Mahal is _____, is leading to the deposit of fine particles of matter on the monument.

Options:

- 1) stand
- 2) locate
- 3) located
- 4) locating

Correct Answer: located

Candidate Answer: [NOT ANSWERED]

QID : 74 - In the following passage, some of the words have been left out. Read the passage carefully and select the correct answer for the given blank out of the four alternatives.

Think of the Taj Mahal and a gleaming marble monument comes to the _____. But if you look closely, you'd _____ that the marble is not the gleaming white as it was. The burning of waste from the city of Agra, where the Taj Mahal is _____, is leading to the deposit of fine particles of matter on the monument. Over the past many _____, the Taj has been losing its shine due to Agra's pollution. The government too has tried various things, such as not _____ too many vehicles near the monument and even applying pastes to the marble walls to get the stain off.

Over the past many _____, the Taj has been losing its shine due to Agra's pollution.

Options:

- 1) ears
- 2) years
- 3) fears
- 4) cheers

Correct Answer: years

Candidate Answer: [NOT ANSWERED]

QID : 75 - In the following passage, some of the words have been left out. Read the passage carefully and select the correct answer for the given blank out of the four alternatives.

Think of the Taj Mahal and a gleaming marble monument comes to the _____. But if you look closely, you'd _____ that the marble is not the gleaming white as it was. The burning of waste from the city of Agra, where the Taj Mahal is _____, is leading to the deposit of fine particles of matter on the monument. Over the past many _____, the Taj has been losing its shine due to Agra's pollution. The government too has tried various things, such as not _____ too many vehicles near the monument and even applying pastes to the marble walls to get the stain off.

The government too has tried various things, such as not _____ too many vehicles near the monument

Options:

- 1) firing
- 2) marrying
- 3) having
- 4) giving

Correct Answer: having

Candidate Answer: [NOT ANSWERED]

QID : 76 - Which of these crops was NOT known by the people of the Vedic period?

इनमें से किस फसल का ज्ञान वैदिक काल के लोगों को नहीं था ?

Options:

- 1) Barley
जौ
- 2) Wheat
गेहूँ
- 3) Rice
चावल
- 4) Tobacco
तम्बाकू

Correct Answer: Tobacco

तम्बाकू

Candidate Answer: Tobacco

तम्बाकू

QID : 77 - Where was the first Jain Mahasabha held?

प्रथम जैन महासभा का उपयोजन कहाँ हुआ था ?

Options:

- 1) Pataliputra
पाटलिपुत्र
- 2) Vallabhi
वल्लभी
- 3) Abu
आबू
- 4) Pavapuri
पावापुरी

Correct Answer: Pataliputra
पाटलिपुत्र

Candidate Answer: Pavapuri
पावापुरी

QID : 78 - The international date line is called _____.

अंतर्राष्ट्रीय तिथि रेखा कहलाता है _____।

Options:

- 1) 0⁰ latitude
0⁰ अक्षांश
- 2) 0⁰ longitude
0⁰ देशांतर
- 3) 66½⁰ latitude
66½⁰ अक्षांश
- 4) 180⁰ longitude
180⁰ देशांतर

Correct Answer: 180⁰ longitude
180⁰ देशांतर

Candidate Answer: 180⁰ longitude
180⁰ देशांतर

QID : 79 - The landscape formed by the erosion work of river is _____.

नदी के अपरदन कार्य से बनी स्थलाकृति _____ है।

Options:

- 1) Delta
डेल्टा
- 2) Flood plain
बाढ़ का मैदान
- 3) Gorge
गॉर्ज
- 4) Natural embankment
प्राकृतिक तटबंध

Correct Answer: Gorge
गॉर्ज

Candidate Answer: Delta
डेल्टा

QID : 80 - Who was the temporary president of the Constituent Assembly?

संविधान सभा के अस्थायी अध्यक्ष कौन थे ?

Options:

- 1) B.R Ambedkar
बी.आर. अंबेडकर
- 2) Dr. Rajendra Prasad
डॉ. राजेंद्र प्रसाद
- 3) Sachidanad Sinha
सच्चिदानंद सिन्हा
- 4) K.M. Munshi
के.एम.मुंशी

Correct Answer: Sachidanad Sinha
सच्चिदानंद सिन्हा

Candidate Answer: Sachidanad Sinha
सच्चिदानंद सिन्हा

QID : 81 - Which special provision of Indian Constitution has been taken from the British Constitution?

कौन का विशेष प्रावधान भारतीय संविधान में ब्रिटिश संविधान से लिया गया है?

Options:

- 1) Parliamentary system
संसदीय प्रणाली
- 2) Federal system
संघीय प्रणाली
- 3) Fundamental right
मूल अधिकार
- 4) Supreme judiciary
सर्वोच्च न्यायपालिका

Correct Answer: Parliamentary system
संसदीय प्रणाली

Candidate Answer: Parliamentary system
संसदीय प्रणाली

QID : 82 - Soft Currency refers to _____.

सॉफ्ट करेंसी से तात्पर्य है _____।

Options:

1) The currency whose supply is less than demand

वह मुद्रा जिसकी आपूर्ति माँग की अपेक्षा कम हो

2) The currency whose supply is more than demand

वह मुद्रा जिसकी आपूर्ति माँग की अपेक्षा अधिक हो

3) That currency whose supply and demand are both stable

वह मुद्रा जिसकी आपूर्ति तथा माँग दोनों स्थिर हो

4) No option is correct.

कोई भी विकल्प सही नहीं है

Correct Answer: The currency whose supply is more than demand

वह मुद्रा जिसकी आपूर्ति माँग की अपेक्षा अधिक हो

Candidate Answer: [NOT ANSWERED]

QID : 83 - When was the Life Insurance Corporation (LIC) established?

भारतीय जीवन बीमा निगम (LIC) की स्थापना कब हुई ?

Options:

1) In 1956

1956 में

2) In 1944

1944 में

3) In 1950

1950 में

4) In 1947

1947 में

Correct Answer: In 1956

1956 में

Candidate Answer: [NOT ANSWERED]

QID : 84 - Which of the following element is **NOT** radioactive?

निम्नलिखित में से कौन एक रेडियोएक्टिव तत्व **नहीं** है?

Options:

1) Astatine

एस्टेटिन

2) Francium

फ्रान्सियम

3) Tritium

ट्रिटियम

4) Zirconium

जर्कोनियम

Correct Answer: Zirconium

जर्कोनियम

Candidate Answer: Astatine

एस्टेटिन

QID : 85 - The base which is soluble in water called _____.

जल में धुलनशील भस्म (Base) को कहते हैं _____।

Options:

1) Acid

अम्ल

2) Alkali

क्षार

3) Salts

लवण

4) No option is correct.

कोई भी विकल्प सही नहीं है

Correct Answer: Alkali

क्षार

Candidate Answer: Alkali

क्षार

QID : 86 - Newton's _____ gives definition of force.

बल की परिभाषा आती न्यूटन के _____ है।

Options:

1) first law of motion

गति के पहले नियम से

2) second law of motion

गति के दूसरे नियम से

3) third law of motion

गति के तीसरे नियम से

4) gravitational Law

गुरुत्वाकर्षण नियम से

Correct Answer: first law of motion
गति के पहले नियम से

Candidate Answer: first law of motion
गति के पहले नियम से

QID : 87 - Which of the following **doesn't** have kinetic energy?

निम्नलिखित में से किसमें गतिज उर्जा **नहीं** है?

Options:

- 1) Fired bullet
चली हुई गोली
- 2) Running water
बहता हुआ पानी
- 3) Working hammer
चलता हुआ हथौड़ा
- 4) Stretched bow
खिंचा हुआ धनुष

Correct Answer: Stretched bow
खिंचा हुआ धनुष

Candidate Answer: Stretched bow
खिंचा हुआ धनुष

QID : 88 - What is a mushroom?

मशरूम क्या है ?

Options:

- 1) Fungus
कवक
- 2) Plant
पौधा
- 3) Animal
पशु
- 4) Bacteria
बैक्टीरिया

Correct Answer: Fungus
कवक

Candidate Answer: Fungus
कवक

QID : 89 - The outer cover of plant cell is called _____।

पादप कोशिका का सबसे बाहरी आवरण कहलाता है _____।

Options:

- 1) cell membrane
कोशिका झिल्ली
- 2) Cell wall
कोशिका भित्ति
- 3) Tonoplast
टोनोप्लास्ट
- 4) Endoplasmic reticulum
अन्तः प्रद्रव्यी जालिका

Correct Answer: Cell wall
कोशिका भित्ति

Candidate Answer: cell membrane
कोशिका झिल्ली

QID : 90 - Under which branch of the Science is the study of bones done?

अस्थियों का अध्ययन विज्ञान की किस शाखा के अंतर्गत किया जाता है ?

Options:

- 1) Orology
ओरोलॉजी
- 2) Osteology
ऑस्टियोलॉजी
- 3) Serology
सेरोलॉजी
- 4) Geology
जियोलॉजी

Correct Answer: Osteology
ऑस्टियोलॉजी

Candidate Answer: Osteology
ऑस्टियोलॉजी

QID : 91 - Flood can be prevented _____.

बाढ़ को _____ रोक जा सकता है।

Options:

1) by making slope on land

स्थल को ढालदार बनाकर

2) by removing the water cover

जल आवरण को हटाकर

3) Cutting of forests

वनों को काटकर

4) By making a dam on the rivers and planting trees

नदियों पर बांध बनाकर व वृक्षारोपण करके

Correct Answer: By making a dam on the rivers and planting trees

नदियों पर बांध बनाकर व वृक्षारोपण करके

Candidate Answer: By making a dam on the rivers and planting trees

नदियों पर बांध बनाकर व वृक्षारोपण करके

QID : 92 - 1024 Byte is equal to _____.

1024 बाइट _____ बराबर है।

Options:

1) 1TB

1 टी बी

2) 1 GB

1 जी बी

3) 1 MB

1 एम बी

4) 1 KB

1 के बी

Correct Answer: 1 KB

1 के बी

Candidate Answer: 1 KB

1 के बी

QID : 93 - Number of players in each side in the game of Kabaddi is _____.

कबड्डी के खेल में प्रत्येक पक्ष में खिलाड़ियों की संख्या _____ होती है।

Options:

1) 5

2) 6

3) 7

4) 8

Correct Answer: 7

Candidate Answer: 7

QID : 94 - On which subject is the book "Arthashastra" written?

अर्थशास्त्र" किस विषय पर लिखी गई पुस्तक है?

Options:

1) Economy

अर्थव्यवस्था

2) Monarchy

राजतंत्र

3) Politics

राजनीति

4) Literature

साहित्य

Correct Answer: Politics

राजनीति

Candidate Answer: Politics

राजनीति

QID : 95 - When was the Rashtriya Vayoshri Yojana started?

राष्ट्रीय वयोश्री योजना' का शुभारम्भ कब हुआ?

Options:

1) April 10, 2016

10 अप्रैल, 2016

2) March 5, 2017

5 मार्च, 2017

3) April 1, 2017

1 अप्रैल, 2017

4) October 8, 2016

8 अक्टूबर, 2016

Correct Answer: April 1, 2017

1 अप्रैल, 2017

Candidate Answer: [NOT ANSWERED]

QID : 96 - G. S. Ohm is the discoverer of the following?

जी. एस. ओम निम्नलिखित में से किसके खोजकर्ता हैं?

Options:

- 1) Law of Electrostatic Attraction
स्थिरवैद्युत आकर्षण
- 2) Photoelectric effect
प्रकाश विद्युत प्रभाव
- 3) Law of Electric Resistance
विद्युत प्रतिरोध का नियम
- 4) Thermionic Emission (Electrons emitting from hot-source)
थर्मियोनिक इमीशन (उष्ण-स्रोत से इलेक्ट्रान उत्सर्जन)

Correct Answer: Law of Electric Resistance
विद्युत प्रतिरोध का नियम

Candidate Answer: Law of Electric Resistance
विद्युत प्रतिरोध का नियम

QID : 97 - To which state is the "Sua" dance related?

"सुआ" नृत्य किस राज्य से संबंधित है?

Options:

- 1) Chhattisgarh
छत्तीसगढ़
- 2) Odisha
ओड़ीसा
- 3) Maharashtra
महाराष्ट्र
- 4) Rajasthan
राजस्थान

Correct Answer: Chhattisgarh
छत्तीसगढ़

Candidate Answer: Chhattisgarh
छत्तीसगढ़

QID : 98 - In which field is the Dhanvantari Award given?

धन्वन्तरि पुरस्कार' किस क्षेत्र में प्रदान किया जाता है?

Options:

- 1) Social sector
सामाजिक क्षेत्र
- 2) Medical field
चिकित्सा क्षेत्र
- 3) Agricultural sector
कृषि क्षेत्र
- 4) Space field
अन्तरिक्ष क्षेत्र

Correct Answer: Medical field
चिकित्सा क्षेत्र

Candidate Answer: Agricultural sector
कृषि क्षेत्र

QID : 99 - Which country is associated with the "wet foot-dry foot" policy of America?

अमेरिका की "वेटफूट-ड्राईफूट" नीति का संबंध किस देश से जुड़ा है?

Options:

- 1) Iraq
ईराक
- 2) Mexico
मेक्सिको
- 3) Cuba
क्यूबा
- 4) Britain
ब्रिटेन

Correct Answer: Cuba
क्यूबा

Candidate Answer: Britain
ब्रिटेन

QID : 100 - Which is the longest river in Pakistan?

पाकिस्तान की सबसे लम्बी नदी कौन सी है?

Options:

- 1) Sutlej River
सतलज नदी
- 2) Chenab River
चिनाब नदी
- 3) Indus River
सिंधु नदी
- 4) Jhelum River
झेलम नदी

Correct Answer: Indus River
सिंधु नदी

Candidate Answer: Chenab River
चिनाब नदी