

QID : 201 -

In the following question, select the number which can be placed at the sign of question mark (?) from the given alternatives.

निम्नलिखित प्रश्न में दिए गए विकल्पों में से प्रश्न चिह्न (?) के स्थान पर आने वाली संख्या को चुनिए।

3	4
9	7

8	6
4	5

5	2
10	?

Options:

1) 5

2) 6

3) 7

4) 8

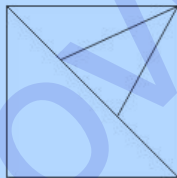
Correct Answer: 6

Candidate Answer: 6

QID : 202 -

How many triangles are there in the given figure?

दी गई आकृति में कितने त्रिभुज हैं?



Options:

1) 5

2) 6

3) 7

4) 8

Correct Answer: 7

Candidate Answer: 7

QID : 203 -

A word is represented by only one set of numbers as given in any one of the alternatives. The sets of numbers given in the alternatives are represented by two classes of alphabets as shown in the given two matrices. The columns and rows of **Matrix-I** are numbered from 0 to 4 and that of **Matrix-II** are numbered from 5 to 9. A letter from these matrices can be represented first by its row and next by its column, for example, 'B' can be represented by 20, 67, etc., and 'L' can be represented by 32, 75, etc. Similarly, you have to identify the set for the word "TRUNK".

एक शब्द केवल एक संख्या-समूह द्वारा दर्शाया गया है, जैसा कि विकल्पों में से किसी एक में दिया गया है। विकल्पों में दिए गए संख्या-समूह अक्षरों के दो वर्गों द्वारा दर्शाए गए हैं, जैसा कि दिए गए दो आव्यूहों में है। **आव्यूह-I** के स्तम्भ और पंक्ति की संख्या 0 से 4 है और **आव्यूह-II** की 5 से 9। इन आव्यूहों से एक अक्षर को पहले उसकी पंक्ति और बाद में स्तम्भ संख्या द्वारा दर्शाया जा सकता है। उदाहरण के लिए 'B' को 20, 67, आदि द्वारा दर्शाया जा सकता है तथा 'L' को 32, 75, आदि द्वारा दर्शाया जा सकता है। इसी तरह से आपको प्रश्न में दिए शब्द "TRUNK" के लिए समूह को पहचानना है।

Matrix-I						Matrix-II					
आव्यूह-I						आव्यूह-II					
	0	1	2	3	4		5	6	7	8	9
0	G	C	O	Q	J	5	N	P	R	T	V
1	K	P	H	B	L	6	X	Z	B	E	H
2	B	R	Q	J	H	7	L	J	M	D	E
3	S	A	L	T	B	8	F	I	O	C	N
4	O	K	Y	G	U	9	Q	X	P	Y	G

Options:

- 1) 58, 21, 44, 88, 11
- 2) 33, 22, 44, 89, 40
- 3) 33, 57, 44, 89, 41
- 4) 58, 57, 44, 30, 10

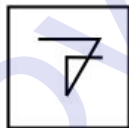
Correct Answer: 33, 57, 44, 89, 41

Candidate Answer: 33, 57, 44, 89, 41

QID : 204 -

From the given answer figures, select the one in which the question figure is hidden/embedded.

दी गई उत्तर आकृतियों में से उस उत्तर आकृति को चुनिए जिस में प्रश्न आकृति निहित है।



Options:

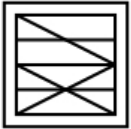
1)



2)



3)



4)



Correct Answer:



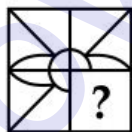
Candidate Answer:



QID : 205 -

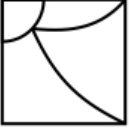
Which answer figure will complete the pattern in the question figure?

कौन सी उत्तर आकृति प्रश्न आकृति के प्रतिरूप को पूरा करेगी?



Options:

1)



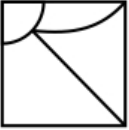
2)



3)



4)



Correct Answer:



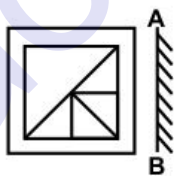
Candidate Answer:



QID : 206 -

If a mirror is placed on the line AB, then which of the answer figures is the right image of the given figure?

यदि एक दर्पण को AB रेखा पर रखा जाए, तो दी गई उत्तर आकृतियों में से कौन सी आकृति प्रश्न आकृति की सही प्रतिबिम्ब होगी?



Options:

1)



2)



3)



4)



Correct Answer:



Candidate Answer:



QID : 207 -

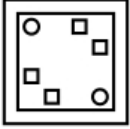
A piece of paper is folded and punched as shown below in the question figures. From the given answer figures, indicate how it will appear when opened?

नीचे के प्रश्न आकृतियों में दिखाए अनुसार कागज को मोड़कर छेदने तथा खोलने के बाद वह किस उत्तर आकृति जैसा दिखाई देगा?



Options:

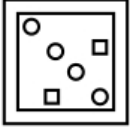
1)



2)



3)



4)



Correct Answer:



Candidate Answer:



QID : 208 - By interchanging which two signs the equation will be correct?

$$36 + 4 \div 19 \times 2 = 47$$

किन दो चिह्नों को आपस में परस्पर बदलने पर समीकरण ठीक हो जाएगा?

$$36 + 4 \div 19 \times 2 = 47$$

Options:

1) \div and \times

\div तथा \times

2) $=$ and \div

$=$ तथा \div

3) $+$ and \div

$+$ तथा \div

4) \times and $+$

\times तथा $+$

Correct Answer: $+$ and \div

$+$ तथा \div

Candidate Answer: $+$ and \div

$+$ तथा \div

QID : 209 - If $4 \# 3 \# 2 = 210$ and $9 \# 6 \# 5 = 743$, then

$$7 \# 8 \# 2 = ?$$

यदि $4 \# 3 \# 2 = 210$ तथा $9 \# 6 \# 5 = 743$ हो, तो

$$7 \# 8 \# 2 = ?$$

Options:

1) 932

2) 560

3) 650

4) 653

Correct Answer: 560

Candidate Answer: 560

QID : 210 - Arrange the given words in the sequence in which they occur in the dictionary.

1. Angered
2. Angry
3. Anger
4. Ample
5. Ankle

निम्नलिखित शब्दों को शब्दकोश में आने वाले क्रम के अनुसार लिखें।

1. Angered
2. Angry
3. Anger
4. Ample
5. Ankle

Options:

1) 41325

2) 45123

3) 42135

4) 43125

Correct Answer: 43125

Candidate Answer: 43125

QID : 211 - In the following question, select the missing number from the given series.

3, 5, 9, 17, 33, 65, ?

निम्नलिखित प्रश्न में दिए गए विकल्पों में से लुप्त अंक ज्ञात कीजिए।

3, 5, 9, 17, 33, 65, ?

Options:

1) 126

2) 127

3) 128

4) 129

Correct Answer: 129

Candidate Answer: 129

QID : 212 - A series is given with one term missing. Select the correct alternative from the given ones that will complete the series.

M, P, S, V, ?

एक अनुक्रम दिया गया है, जिसमें से एक पद लुप्त है। दिए गए विकल्पों में से वह सही विकल्प चुनिए, जो अनुक्रम को पूरा करे।

M, P, S, V, ?

Options:

1) V

2) W

3) X

4) Y

Correct Answer: Y

Candidate Answer: Y

QID : 213 - In the following question, select the odd word from the given alternatives.

निम्नलिखित प्रश्न में दिए गए विकल्पों में से विषम शब्द को चुनिए।

Options:

1) Guitar

गिटार

2) Sitar

सितार

3) Harmonium

हारमोनियम

4) Violin

सारंगी

Correct Answer: Harmonium

हारमोनियम

Candidate Answer: Violin

सारंगी

QID : 214 - In the following question, select the odd number pair from the given alternatives.

निम्नलिखित प्रश्न में दिए गए विकल्पों में से विषम संख्या युग्म को चुनिए।

Options:

1) 25 – 125

2) 36 – 216

3) 16 – 128

4) 64 – 512

Correct Answer: 16 – 128

Candidate Answer: 16 – 128

QID : 215 - In the following question, select the odd letters from the given alternatives.

निम्नलिखित प्रश्न में दिए गए विकल्पों में से विषम अक्षरों को चुनिए।

Options:

1) EFJ

2) MNR

3) STX

4) DEJ

Correct Answer: DEJ

Candidate Answer: DEJ

QID : 216 - Identify the diagram that best represents the relationship among the given classes.

Male, Teacher, Truck

वह आरेख चुनिए जो नीचे दिए गए वर्गों के बीच के संबंध का सही निरूपण करता है।

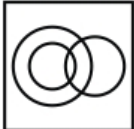
पुरुष, अध्यापक, ट्रक

Options:

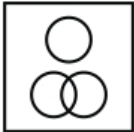
1)



2)



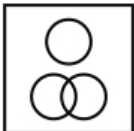
3)



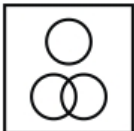
4)



Correct Answer:



Candidate Answer:



QID : 217 - In the following question, select the related word from the given alternatives.

Vacant : Empty :: Abduct : ?

निम्नलिखित प्रश्न में दिए गए विकल्पों में से संबंधित शब्द को चुनिए।

खाली : रिक्त :: भगा ले जाना : ?

Options:

1) Distort

ऐंठना

2) Grace

आकर्षण

3) Favour

अनुग्रह

4) Kidnap

अपहरण

Correct Answer: Kidnap

अपहरण

Candidate Answer: Kidnap

अपहरण

QID : 218 - In the following question, select the related number from the given alternatives.

82 : 36 :: 91 : ?

निम्नलिखित प्रश्न में दिए गए विकल्पों में से संबंधित संख्या को चुनिए।

82 : 36 :: 91 : ?

Options:

1) 169

2) 100

3) 36

4) 64

Correct Answer: 64

Candidate Answer: 64

QID : 219 - In the following question, select the related letters from the given alternatives.

BAKE : ZYIC :: MOUN : ?

निम्नलिखित प्रश्न में दिए गए विकल्पों में से संबंधित अक्षरों को चुनिए।

BAKE : ZYIC :: MOUN : ?

Options:

1) KLSK

2) JL RK

3) KMSL

4) JMRL

Correct Answer: KMSL

Candidate Answer: KMSL

QID : 220 - In the following question, select the word which cannot be formed using the letters of the given word.

INVESTIGATION

निम्नलिखित विकल्पों में से वह शब्द चुनिए जो दिए गए शब्द के अक्षरों का प्रयोग करके नहीं बनाया जा सकता।

INVESTIGATION

Options:

1) INVEST

2) NOISE

3) STIGMA

4) SENT

Correct Answer: STIGMA

Candidate Answer: STIGMA

QID : 221 - P is younger than Q, Q is elder than R, R is younger than P and S is elder than Q. Who is the eldest among P, Q, R and S?

P, Q से छोटा है, Q, R से बड़ा है, R, P से छोटा है तथा S, Q से बड़ा है। P, Q, R तथा S में से सबसे बड़ा कौन है?

Options:

1) P

2) Q

3) R

4) S

Correct Answer: S

Candidate Answer: S

QID : 222 - Ashok remembers his birthday is after 21st December. While his mother remembers his birthday is before 23rd December. On which date of December is his birthday?

अशोक को याद है कि उसका जन्मदिन 21 दिसम्बर के बाद है। जबकि उसकी माता को याद है कि उसका जन्मदिन 23 दिसम्बर से पहले है। उसका जन्मदिन दिसम्बर की किस तिथि को है?

Options:

1) 21

2) 24

3) 22

4) 23

Correct Answer: 22

Candidate Answer: 22

QID : 223 - In the following question below are given some statements followed by some conclusions. Taking the given statements to be true even if they seem to be at variance from commonly known facts, read all the conclusions and then decide which of the given conclusion logically follows the given statements.

Statements:

I. Some curtains are long.

II. Some long are short.

Conclusions:

I. Some long are curtains.

II. Some short are curtains

नीचे दिए गए प्रश्न में कुछ कथन और उनके बाद उन कथनों पर आधारित कुछ निष्कर्ष दिए गए हैं, हालांकि उनमें सामान्य ज्ञात तथ्यों से भिन्नता हो सकती है। सभी निष्कर्ष पढ़ें और फिर निर्धारित करें कि दिए गए कौन से निष्कर्ष, दिए गए कथनों के आधार पर युक्तिसंगत हैं।

कथन:

I. कुछ परदे लम्बे हैं।

II. कुछ लम्बे छोटे हैं।

निष्कर्ष:

I. कुछ लम्बे परदे हैं।

II. कुछ छोटे परदे हैं।

Options:

1) Only conclusion (I) follows.

केवल निष्कर्ष (I) सही है।

2) Only conclusion (II) follows.

केवल निष्कर्ष (II) सही है।

3) Both conclusion follow.

दोनों ही निष्कर्ष सही हैं।

4) Neither conclusion (I) nor conclusion (II) follows.

न तो निष्कर्ष (I) न ही निष्कर्ष (II) सही है।

Correct Answer: Only conclusion (I) follows.

केवल निष्कर्ष (I) सही है।

Candidate Answer: Only conclusion (I) follows.

केवल निष्कर्ष (I) सही है।

QID : 224 - In a certain code language, "AGO" is written as "BHP". How is "CRY" written in that code language?

एक विशिष्ट कोड भाषा में, "AGO" को "BHP" लिखा जाता है। इस कोड भाषा में "CRY" को किस प्रकार लिखा जाएगा?

Options:

1) DTA

2) DSZ

3) DSX

4) BSA

Correct Answer: DSZ

Candidate Answer: DSZ

QID : 225 - In a certain code language, "MAT" is written as "32" and "MAD" is written as "16". How is "MEN" written in that code language?

एक विशिष्ट कोड भाषा में, "MAT" को "32" तथा "MAD" को "16" लिखा जाता है। इस कोड भाषा में "MEN" को किस प्रकार लिखा जाएगा?

Options:

1) 30

2) 31

3) 32

4) 34

Correct Answer: 30

Candidate Answer: 30

QID : 226 - Which of the following number is divisible by 3?

निम्नलिखित में से कौन सी संख्या 3 से विभाज्य है?

Options:

1) 123451

2) 34571

3) 111111

4) 222211

Correct Answer: 111111

Candidate Answer: 111111

QID : 227 - What is the smallest number to be added to 200, so that the obtained number is exactly divisible by 7?

200 में ऐसी कौन सी सबसे छोटी संख्या जोड़ी जाए, ताकि प्राप्त संख्या 7 से पूर्णतः विभाजित हो जाए?

Options:

1) 4

2) 5

3) 3

4) 1

Correct Answer: 3

Candidate Answer: 4

QID : 228 -

What is the value of $11\frac{1}{3} + 12\frac{2}{3} + 13\frac{3}{4} + 15\frac{1}{4}$?

$11\frac{1}{3} + 12\frac{2}{3} + 13\frac{3}{4} + 15\frac{1}{4}$ का मान क्या है?

Options:

1) 51

2) 53

3) 55

4) 49

Correct Answer: 53

Candidate Answer: 53

QID : 229 - What is the sum of first 50 odd natural numbers?

प्रथम 50 विषम प्राकृत संख्याओं का योग क्या है?

Options:

1) 2500

2) 2550

3) 2475

4) 2525

Correct Answer: 2500

Candidate Answer: 2500

QID : 230 - The smallest number to be subtracted from 600, so that the obtained number is completely divisible by 9?

600 से ऐसी कौन सी सबसे छोटी संख्या घटाई जाए, ताकि प्राप्त संख्या 9 से पूर्णतः विभाजित हो जाए?

Options:

1) 3

2) 6

3) 7

4) 4

Correct Answer: 6

Candidate Answer: 6

QID : 231 - The sum of three consecutive even integers is 156. What is the smallest integer among them?

तीन क्रमागत सम पूर्णाकों का योग 156 है। उनमें से सबसे छोटा पूर्णांक क्या है?

Options:

- 1) 50
- 2) 52
- 3) 54
- 4) 48

Correct Answer: 50

Candidate Answer: 50

QID : 232 - A can do a piece of work in 16 days. He worked for 4 days and B finished the remaining work in 24 days. B alone can do the whole work in how many days?

A किसी कार्य को 16 दिनों में कर सकता है। उसने 4 दिन कार्य किया तथा शेष कार्य B ने 24 दिनों में पूरा किया। B अकेला पूरे कार्य को कितने दिनों में पूरा कर सकता है?

Options:

- 1) 28
- 2) 32
- 3) 36
- 4) 42

Correct Answer: 32

Candidate Answer: 32

QID : 233 - Three taps A, B and C can fill a tank in 30, 36 and 45 hours respectively. How long (in hours) would the three taps take to fill the tank if all of them are opened together?

तीन नल A, B तथा C किसी टंकी को क्रमशः 30, 36 तथा 45 घंटे में भर सकते हैं। यदि तीनों नल एक साथ खोल दिए जाते हैं, तो सभी नल टंकी को भरने में कितना समय (घंटों में) लेंगे?

Options:

- 1) 4
- 2) 8
- 3) 12
- 4) 7

Correct Answer: 12

Candidate Answer: 12

QID : 234 - If the diagonal of a square is 20 cm, then what is the area (in cm^2) of the square?

यदि किसी वर्ग का विकर्ण 20 से.मी. है, तो वर्ग का क्षेत्रफल (से.मी.² में) क्या है?

Options:

- 1) 200
- 2) $100\sqrt{2}$
- 3) $200\sqrt{2}$
- 4) 100

Correct Answer: 200

Candidate Answer: 200

QID : 235 - The marked price of an article is Rs 1320 and is sold at a discount of Rs 462. What is the discount percentage?

एक वस्तु का अंकित मूल्य 1320 रु है तथा उसे 462 रु की छूट पर बेचा जाता है। छूट प्रतिशत क्या है?

Options:

- 1) 20
- 2) 25
- 3) 35
- 4) 45

Correct Answer: 35

Candidate Answer: 35

QID : 236 - The marked price of an article is 30% more than its cost price. If a discount of 10% is given, then what is the profit percentage?

एक वस्तु का अंकित मूल्य उसके क्रय मूल्य से 30% अधिक है। यदि 10% की छूट दी जाए, तो लाभ प्रतिशत क्या है?

Options:

- 1) 12
- 2) 15
- 3) 17
- 4) 14

Correct Answer: 17

Candidate Answer: 17

QID : 237 - Two numbers are in the ratio of 4 : 5. If 8 is subtracted from each, then the new ratio becomes 16 : 21. What are the two numbers?

दो संख्याएँ 4 : 5 अनुपात में हैं। यदि प्रत्येक में से 8 घटाया जाए, तो नया अनुपात 16 : 21 हो जाता है। दोनों संख्याएँ क्या हैं?

Options:

- 1) 40 & 50
- 2) 15 & 20
- 3) 60 & 75
- 4) 48 & 60

Correct Answer: 40 & 50

Candidate Answer: 40 & 50

QID : 238 - If $A : B = 3 : 7$ and $B : C = 2 : 3$, then what is $A : B : C$?

यदि $A : B = 3 : 7$ तथा $B : C = 2 : 3$ हो, तो $A : B : C$ क्या है?

Options:

- 1) 6 : 7 : 21
- 2) 6 : 14 : 21
- 3) 6 : 7 : 8
- 4) 7 : 6 : 14

Correct Answer: 6 : 14 : 21

Candidate Answer: 6 : 14 : 21

QID : 239 - The average of 16 numbers is 6. If one number is excluded, the average becomes 5. What is the excluded number?

16 संख्याओं का औसत 6 है। यदि एक संख्या हटा दी जाए, तो औसत 5 हो जाता है। हटाई गई संख्या क्या है?

Options:

- 1) 21
- 2) 23
- 3) 24
- 4) 20

Correct Answer: 21

Candidate Answer: 21

QID : 240 - By selling an article for Rs 420, a shopkeeper gains 5%. To gain 10% what should be the selling price (in Rs)?

एक वस्तु को 420 रु में बेचने पर एक दुकानदार को 5% लाभ होता है। 10% लाभ कमाने के लिए विक्रय मूल्य (रु में) क्या होना चाहिए?

Options:

- 1) 380
- 2) 440
- 3) 460
- 4) 465

Correct Answer: 440

Candidate Answer: 440

QID : 241 - If the profit is 50%, then what will be the ratio of cost price to selling price respectively?

यदि लाभ 50% है, तो क्रमशः क्रय मूल्य तथा विक्रय मूल्य का अनुपात क्या होगा?

Options:

- 1) 2 : 3
- 2) 3 : 4
- 3) 4 : 5
- 4) 5 : 6

Correct Answer: 2 : 3

Candidate Answer: 2 : 3

QID : 242 - In a school 40% of the students are girls. If number of boys is 420, then what is the total number of students in the school?

एक विद्यालय में 40% विद्यार्थी लड़कियाँ हैं। यदि लड़कों की संख्या 420 है, तो विद्यालय में कुल कितने विद्यार्थी हैं?

Options:

- 1) 700
- 2) 1200
- 3) 1320
- 4) 1440

Correct Answer: 700

Candidate Answer: 700

QID : 243 - A number is first decreased by 40% and then increased by 40%. If the number so obtained is 64 less than the original number, then what is the value of the original number?

एक संख्या को पहले 40% से घटाया जाता है तथा फिर 40% से बढ़ाया जाता है। यदि प्राप्त संख्या वास्तविक संख्या से 64 कम है, तो वास्तविक संख्या का मान क्या है?

Options:

1) 480

2) 400

3) 360

4) 420

Correct Answer: 400

Candidate Answer: 400

QID : 244 - Speed of a boat along the current and against the current are 16 km/hr and 14 km/hr respectively. What is the speed of boat (in km/hr) in still water?

एक नाव की गति धारा के अनुकूल तथा धारा के प्रतिकूल क्रमशः 16 कि.मी./घंटा तथा 14 कि.मी./घंटा है। शांत जल में नाव की गति (कि.मी./घंटा में) क्या है?

Options:

1) 1

2) 3

3) 7.5

4) 15

Correct Answer: 15

Candidate Answer: 15

QID : 245 - A man travels 2 hours of the journey at a speed of 40 km/hr and remaining 3 hours of the journey at 50 km/hr. What is the average speed (in km/hr) of the entire journey?

एक व्यक्ति यात्रा के 2 घंटे, 40 कि.मी./घंटा की गति से तथा शेष 3 घंटे, 50 कि.मी./घंटा गति से तय करता है। सम्पूर्ण यात्रा की औसत गति (कि.मी./घंटा में) क्या है?

Options:

1) 45

2) 46

3) 38

4) 47

Correct Answer: 46

Candidate Answer: 46

QID : 246 - A certain principal invested in a scheme of compound interest. The amount obtained after 2 year is Rs 2420 and the amount obtained after 3 years is Rs 2662. What is the rate of interest (in percentage)?

एक निश्चित मूलधन चक्रवृद्धि ब्याज की एक योजना में निवेश किया गया। 2 वर्ष पश्चात प्राप्त हुआ मिश्रधन 2420 रु है तथा 3 वर्ष पश्चात प्राप्त हुआ मिश्रधन 2662 रु है। ब्याज की दर (प्रतिशत में) क्या है?

Options:

1) 10

2) 12

3) 18

4) 15

Correct Answer: 10

Candidate Answer: 10

QID : 247 -

The table given below shows the sales (in crores) of 2 companies X and Y from years 2010 to 2015.

नीचे दी गई तालिका में वर्ष 2010 से 2015 तक 2 कंपनियों X तथा Y की बिक्री (करोड़ में) को दर्शाया गया है।

Year / वर्ष	Company / कंपनी	
	X	Y
2010	300	200
2011	240	300
2012	720	750
2013	800	800
2014	900	700
2015	800	1000

What is the average sale (in crores) of company X from year 2010 to 2015?

वर्ष 2010 से वर्ष 2015 तक कंपनी X की औसत बिक्री (करोड़ में) क्या है?

Options:

- 1) 630
- 2) 262.66
- 3) 700
- 4) 626.66

Correct Answer: 626.66

Candidate Answer: 626.66

QID : 248 -

The table given below shows the sales (in crores) of 2 companies X and Y from years 2010 to 2015.

नीचे दी गई तालिका में वर्ष 2010 से 2015 तक 2 कंपनियों X तथा Y की बिक्री (करोड़ में) को दर्शाया गया है।

Year / वर्ष	Company / कंपनी	
	X	Y
2010	300	200
2011	240	300
2012	720	750
2013	800	800
2014	900	700
2015	800	1000

For how many years, the sale of company X was greater than that of company Y?

कितने वर्षों के लिए, कंपनी X की बिक्री कंपनी Y से अधिक थी?

Options:

- 1) 1
- 2) 2
- 3) 3
- 4) 4

Correct Answer: 2

Candidate Answer: 2

QID : 249 -

The table given below shows the sales (in crores) of 2 companies X and Y from years 2010 to 2015.

नीचे दी गई तालिका में वर्ष 2010 से 2015 तक 2 कंपनियों X तथा Y की बिक्री (करोड़ में) को दर्शाया गया है।

Year / वर्ष	Company / कंपनी	
	X	Y
2010	300	200
2011	240	300
2012	720	750
2013	800	800
2014	900	700
2015	800	1000

What is the percentage change in sale of company Y from year 2011 to 2012?

वर्ष 2011 से वर्ष 2012 तक कंपनी Y की बिक्री में कितना प्रतिशत परिवर्तन हुआ है?

Options:

1) 100

2) 225

3) 150

4) 125

Correct Answer: 150

Candidate Answer: 150

QID : 250 -

The table given below shows the sales (in crores) of 2 companies X and Y from years 2010 to 2015.

नीचे दी गई तालिका में वर्ष 2010 से 2015 तक 2 कंपनियों X तथा Y की बिक्री (करोड़ में) को दर्शाया गया है।

Year / वर्ष	Company / कंपनी	
	X	Y
2010	300	200
2011	240	300
2012	720	750
2013	800	800
2014	900	700
2015	800	1000

What is the difference (in crores) between the sale of company X in 2012 and company Y in 2015?

वर्ष 2012 में कंपनी X तथा वर्ष 2015 में कंपनी Y की बिक्री के मध्य अंतर (करोड़ में) क्या है?

Options:

1) 30

2) 300

3) 80

4) 280

Correct Answer: 280

Candidate Answer: 280

QID : 251 - In the following question, some part of the sentence may have errors. Find out which part of the sentence has an error and select the appropriate option. If a sentence is free from error, select 'No Error'.

Even as the city was pummelled **(1)/** by heavy rains, people in Mumbai **(2)/** opened their homes and hearts for strangers. **(3)/** No Error **(4)**

Options:

- 1) 1
- 2) 2
- 3) 3
- 4) 4

Correct Answer: 3

Candidate Answer: 3

QID : 252 - In the following question, some part of the sentence may have errors. Find out which part of the sentence has an error and select the appropriate option. If a sentence is free from error, select 'No Error'.

Meanwhile, heavy rains has continue **(1)/** in Marathwada region while rivers **(2)/** in adjoining Raigad district were in full spate. **(3)/** No Error **(4)**

Options:

- 1) 1
- 2) 2
- 3) 3
- 4) 4

Correct Answer: 1

Candidate Answer: 1

QID : 253 - In the following question, the sentence given with blank to be filled in with an appropriate word. Select the correct alternative out of the four and indicate it by selecting the appropriate option.

How much have you spent _____ your car?

Options:

- 1) of
- 2) on
- 3) from
- 4) in

Correct Answer: on

Candidate Answer: on

QID : 254 - In the following question, the sentence given with blank to be filled in with an appropriate word. Select the correct alternative out of the four and indicate it by selecting the appropriate option.

Do not laugh _____ other's bad times.

Options:

- 1) for
- 2) at
- 3) about
- 4) on

Correct Answer: at

Candidate Answer: at

QID : 255 - In the following question, out of the given four alternatives, select the one which best expresses the meaning of the given word.

Revolt

Options:

- 1) Harmony
- 2) Riot
- 3) Peace
- 4) Submit

Correct Answer: Riot

Candidate Answer: Riot

QID : 256 - In the following question, out of the given four alternatives, select the one which best expresses the meaning of the given word.

Scowl

Options:

- 1) Grin
- 2) Frown
- 3) Smile
- 4) Laugh

Correct Answer: Frown

Candidate Answer: Grin

QID : 257 - In the following question, out of the given four alternatives, select the one which best expresses the meaning of the given word.

Stable

Options:

- 1) Anchored
- 2) Shaky
- 3) Wobbly
- 4) Inconstant

Correct Answer: Anchored

Candidate Answer: Wobbly

QID : 258 - In the following question, out of the given four alternatives, select the one which is opposite in meaning of the given word.

Notion

Options:

- 1) Idea
- 2) Clue
- 3) Concept
- 4) Need

Correct Answer: Need

Candidate Answer: Need

QID : 259 - In the following question, out of the given four alternatives, select the one which is opposite in meaning of the given word.

Loathe

Options:

- 1) Love
- 2) Hate
- 3) Refuse
- 4) Reject

Correct Answer: Love

Candidate Answer: Love

QID : 260 - In the following question, out of the given four alternatives, select the one which is opposite in meaning of the given word.

Accede

Options:

- 1) Admit
- 2) Comply
- 3) Permit
- 4) Deny

Correct Answer: Deny

Candidate Answer: Deny

QID : 261 - In the following question, out of the four given alternatives, select the alternative which best expresses the meaning of the Idiom/Phrase.

To hammer out

Options:

- 1) To arrive at an agreement
- 2) To dig
- 3) To hurt
- 4) To shrink

Correct Answer: To arrive at an agreement

Candidate Answer: To hurt

QID : 262 - In the following question, out of the four given alternatives, select the alternative which best expresses the meaning of the Idiom/Phrase.

To look blue

Options:

- 1) To be happy
- 2) To be excited
- 3) To be disheartened
- 4) To be shocked

Correct Answer: To be disheartened

Candidate Answer: To be shocked

QID : 263 - Improve the bracketed part of the sentence.

Any meaningful negotiation on a future trade agreement (**in midst the two**) parties hinges on a resolution of these outstanding issues.

Options:

- 1) amongst the two
- 2) throughout the two
- 3) between the two
- 4) No improvement

Correct Answer: between the two

Candidate Answer: between the two

QID : 264 - Improve the bracketed part of the sentence.

It was an epic final at badminton's biggest stage, **(but it stand out)** as the finest advertisement for the women's game.

Options:

- 1) and it stood out
- 2) so it stand out
- 3) then it stood out
- 4) No improvement

Correct Answer: and it stood out

Candidate Answer: so it stand out

QID : 265 - In the following question, out of the four given alternatives, select the alternative which is the best substitute of the phrase.

A person who is forced to flee for shelter.

Options:

- 1) Alien
- 2) Refugee
- 3) Traitor
- 4) Dacoit

Correct Answer: Refugee

Candidate Answer: Refugee

QID : 266 - In the following question, out of the four given alternatives, select the alternative which is the best substitute of the phrase.

An avid book reader.

Options:

- 1) Bookworm
- 2) Astronaut
- 3) Stenographer
- 4) Calligrapher

Correct Answer: Bookworm

Candidate Answer: Bookworm

QID : 267 - In the following question, a word has been written in four different ways out of which only one is correctly spelt. Select the correctly spelt word.

Options:

- 1) Taraceable
- 2) Traceable
- 3) Traceble
- 4) Tracable

Correct Answer: Traceable

Candidate Answer: Traceable

QID : 268 - In the following question, a word has been written in four different ways out of which only one is correctly spelt. Select the correctly spelt word.

Options:

- 1) Vealuable
- 2) Vaeluable
- 3) Valuable
- 4) Valueable

Correct Answer: Valuable

Candidate Answer: Valuable

QID : 269 - Rearrange the parts of the sentence in correct order.

Vocational education

P: termed as

Q: can also be

R: job oriented education

Options:

- 1) PRQ
- 2) QPR
- 3) RPQ
- 4) RQP

Correct Answer: QPR

Candidate Answer: QPR

QID : 270 - Rearrange the parts of the sentence in correct order.

Afforestation means massive

P: program of social forestry

Q: people for fuel, fodder, timber etc.

R: to meet demands to local

Options:

1) QRP

2) QPR

3) PRQ

4) PQR

Correct Answer: PRQ

Candidate Answer: PRQ

QID : 271 - In the following passage some of the words have been left out. Read the passage carefully and select the correct answer for the given blank out of the four alternatives.

Corruption can be defined as the dishonest or _____ conduct by a person entrusted with a position of authority, often to _____ personal benefits. In simple words, it can be understood that when a person who is responsible for a task, he/she misuses that position for his/her own benefits. Corruption may include many activities _____ bribery and embezzlement. Corruption has impacted Indian economy and government so much that it has its existence from the lower level to the highest level in the hierarchy of power, from a small village Sarpanch to the Cabinet Ministers of India. Corruption is _____ by the people in power as well as normal people. Even people bribe government individuals to _____ their work process or to get out of the crime. The level of corruption can be as low as bribing traffic police officer for not wearing a helmet to the extreme level when private contractors bribe government individuals to get the tender of a public work or to get the job done.

dishonest or _____ conduct by a person entrusted

Options:

1) unethical

2) ethical

3) crucial

4) sore

Correct Answer: unethical

Candidate Answer: unethical

QID : 272 - In the following passage some of the words have been left out. Read the passage carefully and select the correct answer for the given blank out of the four alternatives.

Corruption can be defined as the dishonest or _____ conduct by a person entrusted with a position of authority, often to _____ personal benefits. In simple words, it can be understood that when a person who is responsible for a task, he/she misuses that position for his/her own benefits. Corruption may include many activities _____ bribery and embezzlement. Corruption has impacted Indian economy and government so much that it has its existence from the lower level to the highest level in the hierarchy of power, from a small village Sarpanch to the Cabinet Ministers of India. Corruption is _____ by the people in power as well as normal people. Even people bribe government individuals to _____ their work process or to get out of the crime. The level of corruption can be as low as bribing traffic police officer for not wearing a helmet to the extreme level when private contractors bribe government individuals to get the tender of a public work or to get the job done.

often to _____ personal benefits.

Options:

1) respire

2) acquire

3) inspire

4) desire

Correct Answer: acquire

Candidate Answer: desire

QID : 273 - In the following passage some of the words have been left out. Read the passage carefully and select the correct answer for the given blank out of the four alternatives.

Corruption can be defined as the dishonest or _____ conduct by a person entrusted with a position of authority, often to _____ personal benefits. In simple words, it can be understood that when a person who is responsible for a task, he/she misuses that position for his/her own benefits. Corruption may include many activities _____ bribery and embezzlement. Corruption has impacted Indian economy and government so much that it has its existence from the lower level to the highest level in the hierarchy of power, from a small village Sarpanch to the Cabinet Ministers of India. Corruption is _____ by the people in power as well as normal people. Even people bribe government individuals to _____ their work process or to get out of the crime. The level of corruption can be as low as bribing traffic police officer for not wearing a helmet to the extreme level when private contractors bribe government individuals to get the tender of a public work or to get the job done.

many activities _____ bribery

Options:

1) excluding

2) including

3) relieving

4) imbibing

Correct Answer: including

Candidate Answer: including

Download More Papers From GovtJobsAlert.In

QID : 274 - In the following passage some of the words have been left out. Read the passage carefully and select the correct answer for the given blank out of the four alternatives.

Corruption can be defined as the dishonest or _____ conduct by a person entrusted with a position of authority, often to _____ personal benefits. In simple words, it can be understood that when a person who is responsible for a task, he/she misuses that position for his/her own benefits. Corruption may include many activities _____ bribery and embezzlement. Corruption has impacted Indian economy and government so much that it has its existence from the lower level to the highest level in the hierarchy of power, from a small village Sarpanch to the Cabinet Ministers of India. Corruption is _____ by the people in power as well as normal people. Even people bribe government individuals to _____ their work process or to get out of the crime. The level of corruption can be as low as bribing traffic police officer for not wearing a helmet to the extreme level when private contractors bribe government individuals to get the tender of a public work or to get the job done.

Corruption is _____ by the people in power

Options:

- 1) organised
- 2) reflected
- 3) initiated
- 4) created

Correct Answer: initiated

Candidate Answer: created

QID : 275 - In the following passage some of the words have been left out. Read the passage carefully and select the correct answer for the given blank out of the four alternatives.

Corruption can be defined as the dishonest or _____ conduct by a person entrusted with a position of authority, often to _____ personal benefits. In simple words, it can be understood that when a person who is responsible for a task, he/she misuses that position for his/her own benefits. Corruption may include many activities _____ bribery and embezzlement. Corruption has impacted Indian economy and government so much that it has its existence from the lower level to the highest level in the hierarchy of power, from a small village Sarpanch to the Cabinet Ministers of India. Corruption is _____ by the people in power as well as normal people. Even people bribe government individuals to _____ their work process or to get out of the crime. The level of corruption can be as low as bribing traffic police officer for not wearing a helmet to the extreme level when private contractors bribe government individuals to get the tender of a public work or to get the job done.

government individuals to _____ their work

Options:

- 1) loosen
- 2) creation
- 3) fasten
- 4) resultant

Correct Answer: fasten

Candidate Answer: fasten

QID : 276 - Standard of living depends upon:

- I. Per capita income
- II. Gross Domestic product
- III. Literacy rate
- IV. Availability of health facilities

जीवन का स्तर निर्भर करता है:

- I. प्रति व्यक्ति आय
- II. सकल घरेलू उत्पाद
- III. साक्षरता दर
- IV. स्वास्थ्य सुविधाओं की उपलब्धता

Options:

- 1) Only I
केवल I
- 2) Only II & IV
केवल II तथा IV
- 3) Only II and III
केवल II तथा III
- 4) All I, II, III & IV
सभी I, II, III तथा IV

Correct Answer: Only I

केवल I

Candidate Answer: All I, II, III & IV

सभी I, II, III तथा IV

QID : 277 - Double coincidence of wants is an essential feature of _____.

इच्छाओं का दोहरा संयोग _____ की एक अनिवार्य विशेषता है।

Options:

- 1) Credit system
क्रेडिट प्रणाली
- 2) Money system
मुद्रा प्रणाली
- 3) Barter system
वस्तु विनिमय प्रणाली
- 4) Banking system
बैंकिंग प्रणाली

Download More Papers From GovtJobsAlert.In

Correct Answer: Barter system

वस्तु विनिमय प्रणाली

Candidate Answer: Credit system

क्रेडिट प्रणाली

QID : 278 - According to which fundamental right 'All the people are equal before law'?

किस मौलिक अधिकार के तहत 'कानून के नज़र में सभी लोग समान हैं'?

Options:

1) Rights to freedom

स्वतंत्रता का अधिकार

2) Cultural and Educational Rights

सांस्कृतिक और शैक्षणिक अधिकार

3) Right to Equality

समानता का अधिकार

4) Right against Exploitation

शोषण के विरुद्ध अधिकार

Correct Answer: Right to Equality

समानता का अधिकार

Candidate Answer: Right to Equality

समानता का अधिकार

QID : 279 - _____ improves the quality of decision making.

_____ बेहतर निर्णय लेने की संभावना को बढ़ाता है।

Options:

1) Monarchy

राजतंत्र

2) Autocracy

एकतंत्र

3) Aristocracy

कुलीनतंत्र

4) Democracy

लोकतंत्र

Correct Answer: Democracy

लोकतंत्र

Candidate Answer: Democracy

लोकतंत्र

QID : 280 - Who was the editor of Marathi newspaper, 'Kesari'?

मराठी अखबार, 'केसरी' के संपादक कौन थे?

Options:

1) Bipin Chandra Pal

बिपिन चन्द्र पाल

2) Dadabhai Naoroji

दादाभाई नौरोजी

3) Lala Lajpat Rai

लाला लाजपत राय

4) Bal Gangadhar Tilak

बाल गंगाधर तिलक

Correct Answer: Bal Gangadhar Tilak

बाल गंगाधर तिलक

Candidate Answer: Lala Lajpat Rai

लाला लाजपत राय

QID : 281 - Which part of India was mainly ruled by Pallavas and Chalukyas?

भारत का कौन सा हिस्सा मुख्य रूप से पल्लव तथा चालुक्य द्वारा शासित था?

Options:

1) Northern

उत्तरी

2) Southern

दक्षिणी

3) Eastern

पूर्वी

4) Western

पश्चिमी

Correct Answer: Southern

दक्षिणी

Candidate Answer: Southern

दक्षिणी

QID : 282 - What fraction of Earth's diameter is the diameter of the moon?

पृथ्वी के व्यास का कितना भाग चंद्रमा के व्यास के बराबर है?

Options:

- 1) $1/2$
- 2) $1/3$
- 3) $1/4$
- 4) $1/6$

Correct Answer: $1/4$

Candidate Answer: $1/6$

QID : 283 - The surface lowered by the process of erosion can be rebuilt by the process of _____.

अपरदन की क्रिया के द्वारा नीचली सतह का निर्माण _____ की प्रक्रिया द्वारा पुनः हो सकता है।

Options:

- 1) Evaporation
वाष्पीकरण
- 2) Sedimentation
अवसादन
- 3) Deforestation
वनों की कटाई
- 4) None of these
इनमें से कोई नहीं

Correct Answer: None of these

इनमें से कोई नहीं

Candidate Answer: None of these

इनमें से कोई नहीं

QID : 284 - Cholesterol is related to _____.

कोलेस्ट्रॉल का सम्बन्ध _____ है।

Options:

- 1) Fats
वसा से
- 2) Starch
स्टार्च से
- 3) Proteins
प्रोटीन से
- 4) Minerals
खनिज पदार्थ से

Correct Answer: Fats

वसा से

Candidate Answer: Fats

वसा से

QID : 285 - Rate of transpiration in a dorsiventral leaf is _____.

एक पृष्ठाधर पत्ता में वाष्पोत्सर्जन की दर _____ होती है।

Options:

- 1) Lesser at the surface
सतह पर कम
- 2) Greater at the lower surface
निचली सतह पर सबसे अधिक
- 3) Equal at both the surfaces
दोनों सतहों पर समान
- 4) None of these
इनमें से कोई नहीं

Correct Answer: Greater at the lower surface

निचली सतह पर सबसे अधिक

Candidate Answer: Lesser at the surface

सतह पर कम

QID : 286 - Cod liver oil is source of _____.

कॉड लिवर ऑयल _____ का स्रोत है।

Options:

- 1) Vitamin K
विटामिन K
- 2) Vitamin C
विटामिन C
- 3) Iodine
आयोडीन
- 4) Vitamin A
विटामिन A

Correct Answer: Vitamin A

विटामिन A

Candidate Answer: Vitamin K

विटामिन K

QID : 287 - What is the basic unit of speed?

चाल का मूल मात्रक क्या है?

Options:

1) Kilometre/Minute

किलोमीटर/मिनट

2) Metre/Minute

मीटर/मिनट

3) Kilometre/Hour

किलोमीटर/घंटा

4) Metre/Second

मीटर/सेकण्ड

Correct Answer: Metre/Second

मीटर/सेकण्ड

Candidate Answer: Metre/Second

मीटर/सेकण्ड

QID : 288 - What happens when the filament inside the bulb is broken?

जब बल्ब के अंदर का तंतु टूट जाता है, तब क्या होता है?

Options:

1) Bulb glows more intensely

बल्ब और तीव्रता से जलता है

2) Bulb glows with very low intensity

बल्ब बहुत कम तीव्रता से जलता है

3) Bulb gets fused

बल्ब फ्यूज हो जाता है

4) No change happens

कोई परिवर्तन नहीं होता

Correct Answer: Bulb gets fused

बल्ब फ्यूज हो जाता है

Candidate Answer: Bulb gets fused

बल्ब फ्यूज हो जाता है

QID : 289 - Which of the following is related to a spam?

स्पैम निम्नलिखित में से किस से संबंधित है?

Options:

1) e-Mails

ई-मेल

2) Operation softwares

ऑपरेशन सॉफ्टवेयर

3) Games

गेम

4) Modems

मॉडेम

Correct Answer: e-Mails

ई-मेल

Candidate Answer: e-Mails

ई-मेल

QID : 290 - The symbol of Tin is _____.

टिन का प्रतीक _____ है।

Options:

1) Sn

2) Cl

3) TI

4) Tn

Correct Answer: Sn

Candidate Answer: Tn

QID : 291 - Elements in a period have same _____.

एक अवधि में तत्व _____ के समान होती है।

Options:

1) Number of valence electrons

संयोजक इलेक्ट्रॉनों की संख्या

2) Valency

संयोजकता

3) Number of shells

कक्षों की संख्या

4) Volume

आयतन

Correct Answer: Number of shells

कक्षों की संख्या

Candidate Answer: Number of valence electrons

संयोजक इलेक्ट्रॉनों की संख्या

QID : 292 - At which level of the food chain do the herbivores or the primary consumers exist?

शाकाहारी अथवा प्रथम उपभोक्ता खाद्य श्रृंखला के कौन से पोषी स्तर पर स्थित होते हैं?

Options:

1) First

प्रथम

2) Second

द्वितीय

3) Third

तृतीय

4) Fourth

चतुर्थ

Correct Answer: Second

द्वितीय

Candidate Answer: Second

द्वितीय

QID : 293 - Which of the following is **NOT** included in the mission of Digital India?

निम्नलिखित में से कौन 'डिजिटल इंडिया' में सम्मिलित **नहीं** है?

Options:

1) To create digital infrastructure

डिजिटल इंफ्रास्ट्रक्चर बनाने के लिए

2) Delivering services digitally

सेवाओं को डिजिटल रूप में वितरित करना

3) Digital literacy

डिजिटल साक्षरता

4) None of these

इनमें से कोई नहीं

Correct Answer: None of these

इनमें से कोई नहीं

Candidate Answer: None of these

इनमें से कोई नहीं

QID : 294 - Who invented Braille?

ब्रेल का आविष्कार किसने किया था?

Options:

1) William Harvey

विलियम हार्वे

2) Charles Babbage

चार्ल्स बैबेज

3) James Young Simpson

जेम्स यंग सिम्पसन

4) Louis Braille

लुईस ब्रेल

Correct Answer: Louis Braille

लुईस ब्रेल

Candidate Answer: Louis Braille

लुईस ब्रेल

QID : 295 - A Kabaddi team consists of how many players?

कबड्डी की एक टीम में कितने खिलाड़ी होते हैं?

Options:

1) 5

2) 6

3) 7

4) 8

Correct Answer: 7

Candidate Answer: 7

QID : 296 - At which place can the best specimens of Gupta paintings be seen?

गुप्त चित्रों का सर्वश्रेष्ठ नमूना किस जगह पर है?

Options:

1) Narsingharh

नरसिंहगढ़

2) Ellora

एलोरा

3) Ajanta

अजंता

4) Bhimbetka

भीमबेटका

Correct Answer: Ajanta

अजंता

Candidate Answer: Bhimbetka

भीमबेटका

QID : 297 - Which city has become the first Indian city to win 'Pierre L'enfant International Planning Excellence Award 2017' instituted by the American Planning Association?

अमेरिकन प्लानिंग एसोसिएशन द्वारा स्थापित 'पियरे एल एंफैंट इंटरनेशनल प्लानिंग एक्सलेंस अवार्ड 2017' को जीतने वाला कौन सा शहर भारत का पहला शहर बना है?

Options:

1) Bhubaneshwar

भुवनेश्वर

2) Kolkata

कोलकाता

3) Hyderabad

हैदराबाद

4) Meerut

मेरठ

Correct Answer: Bhubaneshwar

भुवनेश्वर

Candidate Answer: Meerut

मेरठ

QID : 298 - Who is the author of the book named "Pinjar"?

"पिंजर" नामक पुस्तक के लेखक कौन हैं?

Options:

1) Laxmi Sehgal

लक्ष्मी सेहगल

2) Vijay Darda

विजय दरदा

3) Amrita Pritam

अमृता प्रीतम

4) Tarun Khanna

तरुण खन्ना

Correct Answer: Amrita Pritam

अमृता प्रीतम

Candidate Answer: Vijay Darda

विजय दरदा

QID : 299 - How many members are there in the G20 group?

जी 20 समूह में कितने सदस्य हैं?

Options:

1) 20

2) 8

3) 12

4) 16

Correct Answer: 20

Candidate Answer: 20

QID : 300 - Which of the following is **NOT** included in the terms of reference of Joint Working Group on fisheries set up by India and Sri Lanka?

भारत तथा श्रीलंका द्वारा स्थापित मछुआरों पर संयुक्त कार्य समूह के संदर्भ की शर्तों में निम्नलिखित में से कौन शामिल **नहीं** है?

Options:

1) Ending the practice of bottom trawling at the earliest

जल्द से जल्द नीचले तलहों पर मछली पकड़ने के चलन

2) Returning fishermen arrested

गिरफ्तार मछुआरों को लौटाना

3) Joint patrolling

संयुक्त गश्त

4) Profit sharing

लाभ साझेदारी

Correct Answer: Profit sharing

लाभ साझेदारी

Candidate Answer: Profit sharing

लाभ साझेदारी

GovtJobsAlert.In