

QID : 101 -

In the following question, select the number which can be placed at the sign of question mark (?) from the given alternatives.

निम्नलिखित प्रश्न में दिए गए विकल्पों में से प्रश्न चिह्न (?) के स्थान पर आने वाली संख्या को चुनिए।

3	2
4	2

8	2
3	1

6	2
1	?

Options:

1) 1

2) 2

3) 4

4) 6

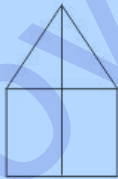
Correct Answer: 4

Candidate Answer: 4

QID : 102 -

How many quadrilaterals are there in the given figure?

दी गई आकृति में कितने चतुर्भुज हैं?



Options:

1) 3

2) 5

3) 4

4) 6

Correct Answer: 5

Candidate Answer: 6

QID : 103 -

A word is represented by only one set of numbers as given in any one of the alternatives. The sets of numbers given in the alternatives are represented by two classes of alphabets as shown in the given two matrices. The columns and rows of **Matrix-I** are numbered from 0 to 4 and that of **Matrix-II** are numbered from 5 to 9. A letter from these matrices can be represented first by its row and next by its column, for example, 'Y' can be represented by 20, 78, etc., and 'F' can be represented by 11, 85, etc. Similarly, you have to identify the set for the word "HATE".

एक शब्द केवल एक संख्या-समूह द्वारा दर्शाया गया है, जैसा कि विकल्पों में से किसी एक में दिया गया है। विकल्पों में दिए गए संख्या-समूह अक्षरों के दो वर्गों द्वारा दर्शाए गए हैं, जैसा कि दिए गए दो आव्यूहों में है। **आव्यूह-I** के स्तम्भ और पंक्ति की संख्या 0 से 4 है और **आव्यूह-II** की 5 से 9। इन आव्यूहों से एक अक्षर को पहले उसकी पंक्ति और बाद में स्तम्भ संख्या द्वारा दर्शाया जा सकता है। उदाहरण के लिए 'Y' को 20, 78, आदि द्वारा दर्शाया जा सकता है तथा 'F' को 11, 85, आदि द्वारा दर्शाया जा सकता है। इसी तरह से आपको प्रश्न में दिए शब्द "HATE" के लिए समूह को पहचानना है।

Matrix-I	
आव्यूह-I	
	0 1 2 3 4
0	T V G I D
1	S F J N U
2	Y P V M F
3	I E A C H
4	A K D U N

Matrix-II	
आव्यूह-II	
	5 6 7 8 9
5	R N K A H
6	L R T O N
7	I Q W Y P
8	F H R M S
9	V G A U B

Options:

- 1) 86, 40, 33, 13
- 2) 34, 58, 67, 31
- 3) 59, 41, 65, 31
- 4) 86, 59, 00, 68

Correct Answer: 34, 58, 67, 31

Candidate Answer: 34, 58, 67, 31

QID : 104 -

From the given answer figures, select the one in which the question figure is hidden/embedded.

दी गई उत्तर आकृतियों में से उस उत्तर आकृति को चुनिए जिस में प्रश्न आकृति निहित है।



Options:

1)



2)



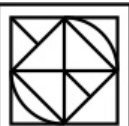
3)



4)



Correct Answer:



Candidate Answer:



QID : 105 -

Which answer figure will complete the pattern in the question figure?

कौन सी उत्तर आकृति प्रश्न आकृति के प्रतिरूप को पूरा करेगी?



Options:

1)



2)



3)



4)



Correct Answer:



Candidate Answer:



QID : 106 -

If a mirror is placed on the line AB, then which of the answer figures is the right image of the given figure?

यदि एक दर्पण को AB रेखा पर रखा जाए, तो दी गई उत्तर आकृतियों में से कौन सी आकृति प्रश्न आकृति की सही प्रतिबिम्ब होगी?



Options:

1)



2)



3)



4)



Correct Answer:



Candidate Answer:



QID : 107 -


A piece of paper is folded and punched as shown below in the question figures. From the given answer figures, indicate how it will appear when opened?

नीचे के प्रश्न आकृतियों में दिखाए अनुसार कागज को मोड़कर छेदने तथा खोलने के बाद वह किस उत्तर आकृति जैसा दिखाई देगा?

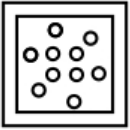


Options:


1)



2)




3)



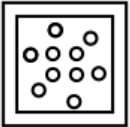
4)



Correct Answer:



Candidate Answer:



QID : 108 - If 'Z' means '-', 'T' means '÷', 'F' means 'x' and 'V' means '+', then

$$12 T 5 F 15 V 3 = ?$$

यदि 'Z' का अर्थ '-', 'T' का अर्थ '÷', 'F' का अर्थ 'x' तथा 'V' का अर्थ '+' हो, तो

$$12 T 5 F 15 V 3 = ?$$

Options:

- 1) 33
- 2) 36
- 3) 39
- 4) 49

Correct Answer: 39

Candidate Answer: 39

QID : 109 - If $4 + 9 + 3 + 6 = 9463$ and $1 + 5 + 7 + 6 = 5167$, then

$$9 + 5 + 4 + 2 = ?$$

यदि $4 + 9 + 3 + 6 = 9463$ तथा $1 + 5 + 7 + 6 = 5167$ हो, तो

$$9 + 5 + 4 + 2 = ?$$

Options:

- 1) 5942
- 2) 9524
- 3) 5924
- 4) 2459

Correct Answer: 5924

Candidate Answer: 5924

Download More Papers From GovtJobsAlert.In

QID : 110 - Arrange the given words in the sequence in which they occur in the dictionary.

1. Burke
2. Blues
3. Blown
4. Blast
5. Bride

निम्नलिखित शब्दों को शब्दकोश में आने वाले क्रम के अनुसार लिखें।

1. Burke
2. Blues
3. Blown
4. Blast
5. Bride

Options:

1) 43251

2) 42315

3) 32145

4) 41235

Correct Answer: 43251

Candidate Answer: 43251

QID : 111 - In the following question, select the missing number from the given series.

70, 80, 100, 110, 130, 140, 160, ?

निम्नलिखित प्रश्न में दिए गए विकल्पों में से लुप्त अंक ज्ञात कीजिए।

70, 80, 100, 110, 130, 140, 160, ?

Options:

1) 170

2) 190

3) 200

4) 210

Correct Answer: 170

Candidate Answer: 170

QID : 112 - A series is given with one term missing. Select the correct alternative from the given ones that will complete the series.

D, F, I, M, R, ?

एक अनुक्रम दिया गया है, जिसमें से एक पद लुप्त है। दिए गए विकल्पों में से वह सही विकल्प चुनिए, जो अनुक्रम को पूरा करे।

D, F, I, M, R, ?

Options:

1) U

2) V

3) W

4) X

Correct Answer: X

Candidate Answer: X

QID : 113 - In the following question, select the odd word from the given alternatives.

निम्नलिखित प्रश्न में दिए गए विकल्पों में से विषम शब्द को चुनिए।

Options:

1) Actor

अभिनेता

2) Film

फिल्म

3) Musician

संगीतकार

4) Director

निर्देशक

Correct Answer: Film

फिल्म

Candidate Answer: Film

फिल्म

QID : 114 - In the following question, select the odd number pair from the given alternatives.

निम्नलिखित प्रश्न में दिए गए विकल्पों में से विषम संख्या युग्म को चुनिए।

Download More Papers From GovtJobsAlert.In

Options:

- 1) 20, 63
- 2) 40, 123
- 3) 15, 45
- 4) 30, 93

Correct Answer: 15, 45

Candidate Answer: 15, 45

QID : 115 - In the following question, select the odd letters from the given alternatives.

निम्नलिखित प्रश्न में दिए गए विकल्पों में से विषम अक्षरों को चुनिए।

Options:

- 1) FGED
- 2) LMKJ
- 3) TUSQ
- 4) UVTS

Correct Answer: TUSQ

Candidate Answer: TUSQ

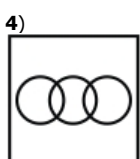
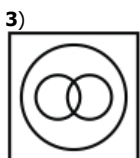
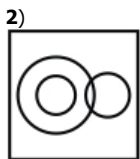
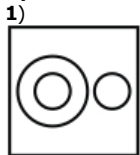
QID : 116 - Identify the diagram that best represents the relationship among the given classes.

Cat, Kitten, Dog

वह आरेख चुनिए जो नीचे दिए गए वर्गों के बीच के संबंध का सही निरूपण करता है।

बिल्ली, बिल्ली का बच्चा, कुत्ता

Options:



Correct Answer:



Candidate Answer:



QID : 117 - In the following question, select the related word from the given alternatives.

Time : Second :: Energy : ?

निम्नलिखित प्रश्न में दिए गए विकल्पों में से संबंधित शब्द को चुनिए।

समय : सेकण्ड :: ऊर्जा : ?

Options:

- 1) Farad
फैरड
- 2) Mole
मोल
- 3) Kelvin
केल्विन
- 4) Joule
जूल

Correct Answer: Joule

जूल

Candidate Answer: Joule

जूल

QID : 118 - In the following question, select the related number from the given alternatives.

22 : 55 :: 48 : ?

निम्नलिखित प्रश्न में दिए गए विकल्पों में से संबंधित संख्या को चुनिए।

22 : 55 :: 48 : ?

Options:

- 1) 105
- 2) 115
- 3) 110
- 4) 120

Correct Answer: 120

Candidate Answer: 120

QID : 119 - In the following question, select the related letters from the given alternatives.

COPY : AMNW :: XOHO : ?

निम्नलिखित प्रश्न में दिए गए विकल्पों में से संबंधित अक्षरों को चुनिए।

COPY : AMNW :: XOHO : ?

Options:

- 1) VMFM
- 2) WNFN
- 3) VNGN
- 4) WHGN

Correct Answer: VMFM

Candidate Answer: VMFM

QID : 120 - In the following question, select the word which cannot be formed using the letters of the given word.

MOMENTUM

निम्नलिखित विकल्पों में से वह शब्द चुनिए जो दिए गए शब्द के अक्षरों का प्रयोग करके नहीं बनाया जा सकता।

MOMENTUM

Options:

- 1) MENTS
- 2) NOTE
- 3) TONE
- 4) MUTE

Correct Answer: MENTS

Candidate Answer: MENTS

QID : 121 - Present age of L and M is in ratio 8 : 11. After 6 years age of L will 38 years. What is the present age (in years) of M?

L तथा M की वर्तमान आयु 8 : 11 के अनुपात में है। 6 वर्ष पश्चात L की आयु 38 वर्ष होगी। M की वर्तमान आयु (वर्षों में) क्या है?

Options:

- 1) 44
- 2) 50
- 3) 32
- 4) 36

Correct Answer: 44

Candidate Answer: 44

QID : 122 - If North is called West, West is called South and South is called East, then what will South-West be called as?

यदि उत्तर को पश्चिम कहा जाता है, पश्चिम को दक्षिण कहा जाता है तथा दक्षिण को पूर्व कहा जाता है, तो दक्षिण-पश्चिम को क्या कहा जाएगा?

Options:

- 1) South-East
दक्षिण-पूर्व
- 2) North-East
उत्तर-पूर्व
- 3) North
उत्तर
- 4) West
पश्चिम

Correct Answer: South-East

दक्षिण-पूर्व

Candidate Answer: South-East

दक्षिण-पूर्व

QID : 123 - In the following question below are given some statements followed by some conclusions. Taking the given statements to be true even if they seem to be at variance from commonly known facts, read all the conclusions and then decide which of the given conclusion logically follows the given statements.

Statements:

- I. Some green are big.
- II. All big are blue.

Conclusions:

- I. Some blue are green.
- II. Some big are green.

नीचे दिए गए प्रश्न में कुछ कथन और उनके बाद उन कथनों पर आधारित कुछ निष्कर्ष दिए गए हैं, हालांकि उनमें सामान्य ज्ञात तथ्यों से भिन्नता हो सकती है। सभी निष्कर्ष पढ़ें और फिर निर्धारित करें कि दिए गए कौन से निष्कर्ष, दिए गए कथनों के आधार पर युक्तिसंगत हैं।

कथन:

- I. कुछ हरे बड़े हैं।
- II. सभी बड़े नीले हैं।

निष्कर्ष:

- I. कुछ नीले हरे हैं।
- II. कुछ बड़े हरे हैं।

Options:

- 1) Only conclusion (I) follows.
केवल निष्कर्ष (I) सही है।
- 2) Only conclusion (II) follows.
केवल निष्कर्ष (II) सही है।
- 3) Both conclusion follow.
दोनों ही निष्कर्ष सही हैं।
- 4) Neither conclusion (I) nor conclusion (II) follows.
न तो निष्कर्ष (I) न ही निष्कर्ष (II) सही है।

Correct Answer: Both conclusion follow.

दोनों ही निष्कर्ष सही हैं।

Candidate Answer: Both conclusion follow.

दोनों ही निष्कर्ष सही हैं।

QID : 124 - In a certain code language, "FIX" is written as "GKA". How is "GEL" written in that code language?

एक विशिष्ट कोड भाषा में, "FIX" को "GKA" लिखा जाता है। इस कोड भाषा में "GEL" को किस प्रकार लिखा जाएगा?

Options:

- 1) HFO
- 2) FFO
- 3) HGO
- 4) HFM

Correct Answer: HGO

Candidate Answer: HGO

QID : 125 - In a certain code language, "TAB" is written as "20" and "RAT" is written as "36". How is "DOG" written in that code language?

एक विशिष्ट कोड भाषा में, "TAB" को "20" तथा "RAT" को "36" लिखा जाता है। इस कोड भाषा में "DOG" को किस प्रकार लिखा जाएगा?

Options:

- 1) 22
- 2) 23
- 3) 24
- 4) 26

Correct Answer: 23

Candidate Answer: 23

QID : 126 - How many factors of 60 are prime numbers?

60 के कितने गुणनखण्ड, अभाज्य संख्याएँ हैं?

Options:

- 1) 4
- 2) 5
- 3) 3
- 4) 2

Correct Answer: 3

Candidate Answer: 3

QID : 127 -

What is the value of $\sqrt{34 - 2\sqrt{253}}$?

$\sqrt{34 - 2\sqrt{253}}$ का मान क्या है?

Options:

- 1) $\sqrt{23} - \sqrt{11}$
- 2) $\sqrt{15} - \sqrt{9}$
- 3) $\sqrt{14} + \sqrt{10}$
- 4) $\sqrt{17} - \sqrt{7}$

Correct Answer: $\sqrt{23} - \sqrt{11}$

Candidate Answer: $\sqrt{23} - \sqrt{11}$

QID : 128 - What is the HCF of $3^4 \times 5^5$ and $3^2 \times 5^6$?

$3^4 \times 5^5$ and $3^2 \times 5^6$ का महत्तम समापवर्तक क्या है?

Options:

- 1) 34×56
- 2) 32×55
- 3) 32×56
- 4) 34×55

Correct Answer: 32×55

Candidate Answer: 32×55

QID : 129 - What is the value of 102×98 ?

102×98 का मान क्या है?

Options:

- 1) 9998
- 2) 10002
- 3) 9994
- 4) 9996

Correct Answer: 9996

Candidate Answer: 9996

QID : 130 - How many zeroes are there at the end of product $35 \times 27 \times 52$?

$35 \times 27 \times 52$ के गुणनफल के अंत में कितने शून्य हैं?

Options:

- 1) 7
- 2) 6
- 3) 2
- 4) 4

Correct Answer: 2

Candidate Answer: [NOT ANSWERED]

QID : 131 -

What is the value of $\sqrt{40 + 2\sqrt{319}}$?

$\sqrt{40 + 2\sqrt{319}}$ का मान क्या है?

Options:

- 1) $\sqrt{15} + \sqrt{8}$
- 2) $\sqrt{21} + \sqrt{2}$
- 3) $\sqrt{22} + \sqrt{11}$
- 4) $\sqrt{29} + \sqrt{11}$

Correct Answer: $\sqrt{29} + \sqrt{11}$

Candidate Answer: $\sqrt{29} + \sqrt{11}$

Download More Papers From GovtJobsAlert.In

QID : 132 - A and B together can do a piece of work in 40 days and A alone can do it in 60 days. B alone can do the work in how many days?

A तथा B मिलकर एक कार्य को 40 दिनों में पूरा कर सकते हैं तथा A अकेले उसे 60 दिनों में पूरा कर सकता है। B अकेले उसी कार्य को कितने दिनों में पूरा कर सकता है?

Options:

- 1) 80
- 2) 90
- 3) 120
- 4) 75

Correct Answer: 120

Candidate Answer: 120

QID : 133 - If $\frac{4}{5}$ th of a cistern is filled in 20 minute, then what is the time (in minutes) needed to fill the remaining part?

यदि टंकी का $\frac{4}{5}$ -वां भाग 20 मिनट में भर जाता है, तो बचे हुए भाग को भरने में कितना समय (मिनटों में) लगेगा?

Options:

- 1) 5
- 2) 10
- 3) 12
- 4) 15

Correct Answer: 5

Candidate Answer: 5

QID : 134 - The lengths of two diagonals of a rhombus are 12 cm and 16 cm. What is the side (in cm) of the rhombus?

एक समचतुर्भुज के दो विकर्णों की लम्बाई 12 से.मी. तथा 16 से.मी. है। समचतुर्भुज की भुजा (से.मी. में) क्या है?

Options:

- 1) 10
- 2) 20
- 3) $10\sqrt{2}$
- 4) $20\sqrt{2}$

Correct Answer: 10

Candidate Answer: 10

QID : 135 - The marked price of an article is Rs 600 and a customer pays Rs 540 for it. What is the discount percentage?

एक वस्तु का अंकित मूल्य 600 रु है तथा एक ग्राहक इसके लिए 540 रु देता है। छूट प्रतिशत क्या है?

Options:

- 1) 10
- 2) 18
- 3) 20
- 4) 21

Correct Answer: 10

Candidate Answer: 10

QID : 136 - What is the net discount (in %) for successive discounts of 10% and 20%?

10% तथा 20% की दो क्रमागत छूटों की निवल (नेट) छूट (% में) क्या है?

Options:

- 1) 23
- 2) 70
- 3) 75
- 4) 28

Correct Answer: 28

Candidate Answer: 28

QID : 137 - Two numbers are in the ratio of 3 : 4. If 12 is subtracted from each, then the new ratio becomes 9 : 14. What are the two numbers?

दो संख्याएँ 3 : 4 अनुपात में हैं। यदि प्रत्येक में से 12 घटाया जाए, तो नया अनुपात 9 : 14 हो जाता है। दोनों संख्याएँ क्या हैं?

Options:

- 1) 30 and 40
30 तथा 40
- 2) 24 and 36
24 तथा 36
- 3) 45 and 60
45 तथा 60
- 4) 60 and 80
60 तथा 80

Correct Answer: 30 and 40

30 तथा 40

Candidate Answer: 30 and 40

30 तथा 40

QID : 138 - If $A/2 = B/5 = C/7$, then what is $A : B : C$?

यदि $A/2 = B/5 = C/7$ हो, तो $A : B : C$ क्या है?

Options:

1) 2 : 5 : 7

2) 2 : 5 : 12

3) 5 : 2 : 7

4) 7 : 5 : 2

Correct Answer: 2 : 5 : 7

Candidate Answer: 2 : 5 : 7

QID : 139 - The average of 10 numbers is 20 and that of other 30 numbers is 40. What is the average of all the numbers?

10 संख्याओं का औसत 20 तथा अन्य 30 संख्याओं का औसत 40 है। सभी संख्याओं का औसत क्या है?

Options:

1) 35

2) 40

3) 45

4) 50

Correct Answer: 35

Candidate Answer: 35

QID : 140 - If the cost price of 15 articles is equal to the selling price of 12 articles, then what is the profit percentage?

यदि 15 वस्तुओं का क्रय मूल्य 12 वस्तुओं के विक्रय मूल्य के बराबर है, तो लाभ प्रतिशत क्या है?

Options:

1) 10

2) 20

3) 25

4) 15

Correct Answer: 25

Candidate Answer: 25

QID : 141 - By selling an article for Rs 850, a shopkeeper gains 70%. To gain 30% what should be the selling price?

एक वस्तु को 850 रु में बेचने पर एक दुकानदार को 70% लाभ होता है। 30% लाभ कमाने के लिए विक्रय मूल्य क्या होना चाहिए?

Options:

1) 650

2) 720

3) 470

4) 570

Correct Answer: 650

Candidate Answer: 650

QID : 142 - If the price of an article is increased by 25%, then to restore its former value the new price must be decreased by how much percent?

यदि किसी वस्तु के मूल्य में 25% की वृद्धि हो जाती है, तो पहले के मूल्य को बनाए रखने के लिए नये मूल्य में कितने प्रतिशत की कमी करनी होगी?

Options:

1) 10

2) 20

3) 25

4) 12.5

Correct Answer: 20

Candidate Answer: 20

QID : 143 - What is the value of 30% of 40% of 2400?

2400 के 40% के 30% का मान क्या है?

Options:

- 1) 288
- 2) 72
- 3) 144
- 4) 108

Correct Answer: 288

Candidate Answer: 288

QID : 144 - Speed of a boat along the current and against the current are 11 km/hr and 6 km/hr respectively. What is the speed (in km/hr) of the current?

एक नाव की गति धारा के अनुकूल तथा धारा के प्रतिकूल क्रमशः 11 कि.मी./घंटा तथा 6 कि.मी./घंटा है। धारा की गति (कि.मी./घंटा में) क्या है?

Options:

- 1) 1.5
- 2) 2.5
- 3) 3
- 4) 4.5

Correct Answer: 2.5

Candidate Answer: 2.5

QID : 145 - A car travels some distance at a speed of 8 km/hr and returns at a speed of 12 km/hr. If the total time taken by the car is 15 hours, then what is the distance (in km)?

एक गाड़ी 8 कि.मी./घंटा की गति से कुछ दूरी तय करती है तथा 12 कि.मी./घंटा की गति से वापस आती है। यदि गाड़ी द्वारा लिया गया कुल समय 15 घंटे है, तो दूरी (कि.मी. में) क्या है?

Options:

- 1) 48
- 2) 60
- 3) 56
- 4) 72

Correct Answer: 72

Candidate Answer: 72

QID : 146 - An amount invested at simple interest gives Rs 4320 interest at rate of 18% in 4 years. What is the principal (in Rs)?

एक धनराशि साधारण ब्याज पर निवेश की जाती है जोकि 4 वर्ष में 18% की दर से 4320 रु का ब्याज देती है। मूलधन (रु में) क्या है?

Options:

- 1) 5000
- 2) 5500
- 3) 6000
- 4) 6500

Correct Answer: 6000

Candidate Answer: 6000

QID : 147 -

The table given below shows the revenue (in crores) of a company from years 2010 to 2016.

नीचे दी गई तालिका में वर्ष 2010 से 2016 तक एक कंपनी के राजस्व (करोड़ में) को दर्शाया गया है।

Year / वर्ष	Revenue (in crores) / राजस्व (करोड़ में)
2010	50
2011	75
2012	100
2013	82.5
2014	112.5
2015	87.5
2016	130

What is the percentage change in the revenue from year 2010 to 2014?

वर्ष 2010 से वर्ष 2014 तक राजस्व में कितना प्रतिशत परिवर्तन हुआ है?

Options:

- 1) 225
- 2) 150
- 3) 100
- 4) 125

Correct Answer: 125

Candidate Answer: 125

QID : 148 -

The table given below shows the revenue (in crores) of a company from years 2010 to 2016.

नीचे दी गई तालिका में वर्ष 2010 से 2016 तक एक कंपनी के राजस्व (करोड़ में) को दर्शाया गया है।

Year / वर्ष	Revenue (in crores) / राजस्व (करोड़ में)
2010	50
2011	75
2012	100
2013	82.5
2014	112.5
2015	87.5
2016	130

What is the percentage change in revenue from year 2011 to 2015?

वर्ष 2011 से वर्ष 2015 तक राजस्व में कितना प्रतिशत परिवर्तन हुआ है?

Options:

- 1) 75
- 2) 175
- 3) 16.67
- 4) 25

Correct Answer: 16.67

Candidate Answer: 16.67

QID : 149 -

The table given below shows the revenue (in crores) of a company from years 2010 to 2016.

नीचे दी गई तालिका में वर्ष 2010 से 2016 तक एक कंपनी के राजस्व (करोड़ में) को दर्शाया गया है।

Year / वर्ष	Revenue (in crores) / राजस्व (करोड़ में)
2010	50
2011	75
2012	100
2013	82.5
2014	112.5
2015	87.5
2016	130

What is the average revenue (in crores) from year 2010 to 2014?

वर्ष 2010 से वर्ष 2014 तक औसत राजस्व (करोड़ में) क्या है?

Options:

- 1) 85
- 2) 84
- 3) 90
- 4) 82.5

Correct Answer: 84

Candidate Answer: 84

QID : 150 -

The table given below shows the revenue (in crores) of a company from years 2010 to 2016.

नीचे दी गई तालिका में वर्ष 2010 से 2016 तक एक कंपनी के राजस्व (करोड़ में) को दर्शाया गया है।

Year / वर्ष	Revenue (in crores) / राजस्व (करोड़ में)
2010	50
2011	75
2012	100
2013	82.5
2014	112.5
2015	87.5
2016	130

In how many years, the revenue was more than that in year 2013?

कितने वर्षों में, राजस्व वर्ष 2013 से अधिक है?

Options:

- 1) 2
- 2) 3
- 3) 4
- 4) 5

Correct Answer: 4

Candidate Answer: 4

Download More Papers From GovtJobsAlert.In

QID : 151 - In the following question, some part of the sentence may have errors. Find out which part of the sentence has an error and select the appropriate option. If a sentence is free from error, select 'No Error'.

Several people were booked for arson, **(1)**/ rioting, illegal assembly, attempting to **(2)**/ murder, and obstructing officers discharging their duty. **(3)**/ No Error **(4)**

Options:

1) 1

2) 2

3) 3

4) 4

Correct Answer: 2

Candidate Answer: 2

QID : 152 - In the following question, some part of the sentence may have errors. Find out which part of the sentence has an error and select the appropriate option. If a sentence is free from error, select 'No Error'.

The police said that the accused **(1)**/ were arrested from various places **(2)**/ in Sirsa after they are identified. **(3)**/ No Error **(4)**

Options:

1) 1

2) 2

3) 3

4) 4

Correct Answer: 3

Candidate Answer: 3

QID : 153 - In the following question, the sentence given with blank to be filled in with an appropriate word. Select the correct alternative out of the four and indicate it by selecting the appropriate option.

Akansha is annoyed _____ me.

Options:

1) with

2) to

3) against

4) over

Correct Answer: with

Candidate Answer: with

QID : 154 - In the following question, the sentence given with blank to be filled in with an appropriate word. Select the correct alternative out of the four and indicate it by selecting the appropriate option.

I asked them her for some money, but she _____.

Options:

1) has not

2) had not

3) had none

4) has none

Correct Answer: had none

Candidate Answer: had not

QID : 155 - In the following question, out of the given four alternatives, select the one which best expresses the meaning of the given word.

Abolition

Options:

1) Legalization

2) Confirmation

3) Promotion

4) Cancellation

Correct Answer: Cancellation

Candidate Answer: Cancellation

QID : 156 - In the following question, out of the given four alternatives, select the one which best expresses the meaning of the given word.

Slack

Options:

1) Stiff

2) Feeble

3) Rigid

4) Tight

Correct Answer: Feeble

Candidate Answer: Feeble

QID : 157 - In the following question, out of the given four alternatives, select the one which best expresses the meaning of the given word.

Wobble

Options:

- 1) Stabilize
- 2) Balance
- 3) Vibrate
- 4) Be still

Correct Answer: Vibrate

Candidate Answer: Vibrate

QID : 158 - In the following question, out of the given four alternatives, select the one which is opposite in meaning of the given word.

Disdain

Options:

- 1) Scorn
- 2) Dislike
- 3) Favour
- 4) Pride

Correct Answer: Favour

Candidate Answer: Favour

QID : 159 - In the following question, out of the given four alternatives, select the one which is opposite in meaning of the given word.

Endeavour

Options:

- 1) Aim
- 2) Effort
- 3) Laziness
- 4) Venture

Correct Answer: Laziness

Candidate Answer: Laziness

QID : 160 - In the following question, out of the given four alternatives, select the one which is opposite in meaning of the given word.

Fabricate

Options:

- 1) Build
- 2) Break
- 3) Contrive
- 4) Erect

Correct Answer: Break

Candidate Answer: Break

QID : 161 - In the following question, out of the four given alternatives, select the alternative which best expresses the meaning of the Idiom/Phrase.

A turning point

Options:

- 1) Anything that brings about changes
- 2) Become out of control
- 3) To be excited about working
- 4) Something terrifying

Correct Answer: Anything that brings about changes

Candidate Answer: Anything that brings about changes

QID : 162 - In the following question, out of the four given alternatives, select the alternative which best expresses the meaning of the Idiom/Phrase.

All moonshine

Options:

- 1) Far from reality
- 2) Close together
- 3) Sentimental
- 4) On the height

Correct Answer: Far from reality

Candidate Answer: Far from reality

QID : 163 - Improve the bracketed part of the sentence.

Interestingly, the two women (**was**) very different personalities.

Options:

- 1) is
- 2) are
- 3) will
- 4) No improvement

Correct Answer: are

Candidate Answer: are

QID : 164 - Improve the bracketed part of the sentence.

Yet, their combined achievements also (**bought into**) focus the fact that the next best woman shuttler in India is now here close to them in potential.

Options:

- 1) bring in into
- 2) brought in into
- 3) bring into
- 4) No improvement

Correct Answer: bring into

Candidate Answer: bring into

QID : 165 - In the following question, out of the four given alternatives, select the alternative which is the best substitute of the phrase.

A person employed in armed forces

Options:

- 1) Principal
- 2) Personnel
- 3) Kennel
- 4) Cannel

Correct Answer: Personnel

Candidate Answer: Cannel

QID : 166 - In the following question, out of the four given alternatives, select the alternative which is the best substitute of the phrase.

A place where clothes are kept.

Options:

- 1) Bathrobe
- 2) Geoprobe
- 3) Anaerobe
- 4) Wardobe

Correct Answer: Wardobe

Candidate Answer: Wardobe

QID : 167 - In the following question, a word has been written in four different ways out of which only one is correctly spelt. Select the correctly spelt word.

Options:

- 1) Tewelth
- 2) Twelfth
- 3) Tvefth
- 4) Twelth

Correct Answer: Twelfth

Candidate Answer: Twelth

QID : 168 - In the following question, a word has been written in four different ways out of which only one is correctly spelt. Select the correctly spelt word.

Options:

- 1) Skillfull
- 2) Skilsful
- 3) Skillful
- 4) Scilful

Correct Answer: Skillful

Candidate Answer: Skillful

QID : 169 - Rearrange the parts of the sentence in correct order.

The realization of the

P: waste disposal has can be

Q: negative environmental effect that

R: a very sobering experience

Options:

1) QPR

2) PRQ

3) QRP

4) RPQ

Correct Answer: QPR

Candidate Answer: QPR

QID : 170 - Rearrange the parts of the sentence in correct order.

Our bad times

P: and bad friends

Q: about our good

R: makes us realize

Options:

1) PRQ

2) RQP

3) QPR

4) PQR

Correct Answer: PQR

Candidate Answer: RQP

QID : 171 - In the following passage some of the words have been left out. Read the passage carefully and select the correct answer for the given blank out of the four alternatives.

Unity in diversity means _____ in the varieties. India is the best country proving this concept for _____ years. India is a country where it is very clear to see unity in diversity because people of many religion, race, culture, and tradition live together without affecting each other's feelings and beliefs to their religion. Unity in diversity _____ on the existence of unity even after lots of differences of cultural, social, physical, linguistic, religious, political, ideological, psychological, etc. A number of diversities make unity more _____. People in India are united in spite of the much diversity of races, religions, castes, sub-castes, communities, languages and dialects. People in India are highly spiritual and God-_____ in nature so they give respect to everyone's religion.

Unity in diversity means _____ in the varieties.

Options:

1) oneness

2) openness

3) uniqueness

4) emptiness

Correct Answer: oneness

Candidate Answer: uniqueness

QID : 172 - In the following passage some of the words have been left out. Read the passage carefully and select the correct answer for the given blank out of the four alternatives.

Unity in diversity means _____ in the varieties. India is the best country proving this concept for _____ years. India is a country where it is very clear to see unity in diversity because people of many religion, race, culture, and tradition live together without affecting each other's feelings and beliefs to their religion. Unity in diversity _____ on the existence of unity even after lots of differences of cultural, social, physical, linguistic, religious, political, ideological, psychological, etc. A number of diversities make unity more _____. People in India are united in spite of the much diversity of races, religions, castes, sub-castes, communities, languages and dialects. People in India are highly spiritual and God-_____ in nature so they give respect to everyone's religion.

proving this concept for _____ years.

Options:

1) much

2) many

3) most

4) ample

Correct Answer: many

Candidate Answer: many

QID : 173 - In the following passage some of the words have been left out. Read the passage carefully and select the correct answer for the given blank out of the four alternatives.

Unity in diversity means _____ in the varieties. India is the best country proving this concept for _____ years. India is a country where it is very clear to see unity in diversity because people of many religion, race, culture, and tradition live together without affecting each other's feelings and beliefs to their religion. Unity in diversity _____ on the existence of unity even after lots of differences of cultural, social, physical, linguistic, religious, political, ideological, psychological, etc. A number of diversities make unity more _____. People in India are united in spite of the much diversity of races, religions, castes, sub-castes, communities, languages and dialects. People in India are highly spiritual and God-_____ in nature so they give respect to everyone's religion.

Unity in diversity _____ on the existence

Options:

1) ensures

2) directs

3) focuses

4) sustain

Correct Answer: focuses

Candidate Answer: focuses

Download More Papers From GovtJobsAlert.In

QID : 174 - In the following passage some of the words have been left out. Read the passage carefully and select the correct answer for the given blank out of the four alternatives.

Unity in diversity means _____ in the varieties. India is the best country proving this concept for _____ years. India is a country where it is very clear to see unity in diversity because people of many religion, race, culture, and tradition live together without affecting each other's feelings and beliefs to their religion. Unity in diversity _____ on the existence of unity even after lots of differences of cultural, social, physical, linguistic, religious, political, ideological, psychological, etc. A number of diversities make unity more _____. People in India are united in spite of the much diversity of races, religions, castes, sub-castes, communities, languages and dialects. People in India are highly spiritual and God-_____ in nature so they give respect to everyone's religion.

A number of diversities make unity more _____.

Options:

- 1) simple
- 2) neutral
- 3) indifferent
- 4) complex

Correct Answer: complex

Candidate Answer: [NOT ANSWERED]

QID : 175 - In the following passage some of the words have been left out. Read the passage carefully and select the correct answer for the given blank out of the four alternatives.

Unity in diversity means _____ in the varieties. India is the best country proving this concept for _____ years. India is a country where it is very clear to see unity in diversity because people of many religion, race, culture, and tradition live together without affecting each other's feelings and beliefs to their religion. Unity in diversity _____ on the existence of unity even after lots of differences of cultural, social, physical, linguistic, religious, political, ideological, psychological, etc. A number of diversities make unity more _____. People in India are united in spite of the much diversity of races, religions, castes, sub-castes, communities, languages and dialects. People in India are highly spiritual and God-_____ in nature so they give respect to everyone's religion.

God-_____ in nature so they give respect

Options:

- 1) fearing
- 2) bearing
- 3) rearing
- 4) gearing

Correct Answer: fearing

Candidate Answer: fearing

QID : 176 - What is the full form of PDS?

पी.डी.एस. का असंक्षिप्त रूप क्या है?

Options:

- 1) Public Distribution System
पब्लिक डिस्ट्रीब्यूशन सिस्टम
- 2) Private Distribution System
प्राइवेट डिस्ट्रीब्यूशन सिस्टम
- 3) Public Development System
पब्लिक डेवलपमेंट सिस्टम
- 4) Private Development System
प्राइवेट डेवलपमेंट सिस्टम

Correct Answer: Public Distribution System

पब्लिक डिस्ट्रीब्यूशन सिस्टम

Candidate Answer: Public Distribution System

पब्लिक डिस्ट्रीब्यूशन सिस्टम

QID : 177 - Which of the following are the modern forms of money?

पैसों का आधुनिक रूप निम्नलिखित में से किसे सम्मिलित करता है?

Options:

- 1) Currency – paper notes and coins
मुद्रा - कागज के नोट तथा सिक्कों
- 2) Precious metals such as gold, silver and copper
सोने, चांदी और तांबे जैसी कीमती धातुएं
- 3) Grains and cattle
अनाज तथा मवेशी
- 4) None of these
इनमें से कोई नहीं

Correct Answer: Currency – paper notes and coins

मुद्रा - कागज के नोट तथा सिक्कों

Candidate Answer: None of these

इनमें से कोई नहीं

QID : 178 - Which fundamental right allows citizens to move to the court if they believe that any of their fundamental rights have been violated by the state?

नागरिक कौन से मौलिक अधिकार का सहारा लेकर न्यायालय जा सकते हैं, जब उन्हें लगता है, कि राज्य द्वारा उनके किसी मौलिक अधिकार का उल्लंघन किया जा रहा है?

Options:

- 1) Rights to Equality
समानता का अधिकार
- 2) Rights to freedom
स्वतंत्रता का अधिकार
- 3) Rights against Exploitation
शोषण के विरुद्ध अधिकार
- 4) Right to Constitutional Remedies
संवैधानिक उपचार का अधिकार

Correct Answer: Right to Constitutional Remedies
संवैधानिक उपचार का अधिकार

Candidate Answer: Right to Constitutional Remedies
संवैधानिक उपचार का अधिकार

QID : 179 - Which kind of government provides a method to deal with differences and conflicts?

किस प्रकार की सरकार मतभेदों तथा टकरावों को संभालने का तरीका उपलब्ध कराती है?

Options:

- 1) Autocratic
एकतांत्रिक
- 2) Aristocratic
कुलीनतांत्रिक
- 3) Monarchic
राजतांत्रिक
- 4) Democratic
लोकतांत्रिक

Correct Answer: Democratic
लोकतांत्रिक

Candidate Answer: Democratic
लोकतांत्रिक

QID : 180 - To which dynasty did Mahadji Scindia and Nana Phadnis belong?

महादजी सिंधिया तथा नाना फडनीस किस राजवंश के प्रसिद्ध योद्धा थे?

Options:

- 1) Maratha
मराठा
- 2) Wodeyar
वोदेयार
- 3) Mughal
मुगल
- 4) Cholas
चोल

Correct Answer: Maratha
मराठा

Candidate Answer: Wodeyar
वोदेयार

QID : 181 - What was the title of three-volume history of Akbar's reign written by Abul Fazl?

अबुल फजल द्वारा अकबर के शासन के इतिहास की लिखी गई तीन जिल्दों का शीर्षक क्या था?

Options:

- 1) Akbarnama
अकबरनामा
- 2) Babarnama
बाबरनामा
- 3) Safar-i-Akbar
सफर-ए-अकबर
- 4) Akbar-Darbar
अकबर-दरबार

Correct Answer: Akbarnama
अकबरनामा

Candidate Answer: Safar-i-Akbar
सफर-ए-अकबर

QID : 182 - What is the zone between the Arctic Circle and the North Pole in the Northern Hemisphere and the Antarctic Circle and the South Pole in Southern Hemisphere called?

उत्तरी गोलार्ध में आर्कटिक वृत्त एवं उत्तरी ध्रुव तथा दक्षिणी गोलार्ध में अंटार्कटिक वृत्त एवं दक्षिणी ध्रुव के बीच आना वाले कटिबंध क्या कहलाता है?

Options:

- 1) Temperate Zone
शीतोष्ण कटिबंध
- 2) Frigid Zone
शीत कटिबंध
- 3) Torrid Zone
उष्ण कटिबंध
- 4) None of these
इनमें से कोई नहीं

Correct Answer: Frigid Zone
शीत कटिबंध

Candidate Answer: Frigid Zone
शीत कटिबंध

QID : 183 - Which is the second largest ocean in the world?

विश्व का दूसरा सबसे बड़ा महासागर कौन सा है?

Options:

- 1) Indian Ocean
हिन्द महासागर
- 2) Atlantic Ocean
अटलांटिक महासागर
- 3) Pacific Ocean
प्रशांत महासागर
- 4) Southern Ocean
दक्षिणी महासागर

Correct Answer: Atlantic Ocean
अटलांटिक महासागर

Candidate Answer: Pacific Ocean
प्रशांत महासागर

QID : 184 - Major requirement of protein in the body is for _____.

शरीर को प्रोटीन की प्रमुख आवश्यकता _____ के लिए होती है।

Options:

- 1) Energy
ऊर्जा
- 2) Growth
वृद्धि
- 3) Repair
मरम्मत
- 4) Immunity
रोग प्रतिरोधक शक्ति

Correct Answer: Growth
वृद्धि

Candidate Answer: Growth
वृद्धि

QID : 185 - The highest unit of classification is _____.

वर्गीकरण की उच्चतम इकाई _____ है।

Options:

- 1) Species
जाति
- 2) Family
परिवार
- 3) Class
कक्षा
- 4) Kingdom
किंगडम

Correct Answer: Kingdom
किंगडम

Candidate Answer: Kingdom
किंगडम

QID : 186 - The blood groups in man were discovered by _____.

मनुष्य में रक्त समूह _____ द्वारा खोजा गया था।

Options:

- 1) Mendel
मेंडेल
- 2) Francis Nelson
फ्रांसिस नेल्सन
- 3) Aristotle
अरस्तु
- 4) Landsteiner
लैंडस्टीनर

Correct Answer: Landsteiner
लैंडस्टीनर

Candidate Answer: Landsteiner
लैंडस्टीनर

QID : 187 - Which of the following relation is correct?

निम्नलिखित में से कौन सा संबंध सही है?

Options:

1) Speed = Distance x Time

चाल = दूरी x समय

2) Speed = Distance/Time

चाल = दूरी/समय

3) Speed = Time/Distance

चाल = समय/दूरी

4) Speed = 1/Distance x Time

चाल = 1/दूरी x समय

Correct Answer: Speed = Distance/Time

चाल = दूरी/समय

Candidate Answer: Speed = Distance/Time

चाल = दूरी/समय

QID : 188 - What happens when a bulb gets fused?

बल्ब के फ्यूज़ होने पर क्या होता है?

Options:

1) Filament becomes cold

तंतु ठंडा हो जाता है

2) Filament gets broken

तंतु टूट जाता है

3) Filament becomes thick

तंतु मोटा हो जाता है

4) Filament becomes thin

तंतु पतला हो जाता है

Correct Answer: Filament gets broken

तंतु टूट जाता है

Candidate Answer: Filament gets broken

तंतु टूट जाता है

QID : 189 - Coding is the process of _____.

कोडिंग _____ की प्रक्रिया है।

Options:

1) Executing a program

एक प्रोग्राम को निष्पादित करने

2) Multitasking

बहु कार्यण

3) Writing out computer instructions

कंप्यूटर निर्देशों को लिखना

4) Restarting the computer

कंप्यूटर को पुनः आरंभ करना

Correct Answer: Writing out computer instructions

कंप्यूटर निर्देशों को लिखना

Candidate Answer: Executing a program

एक प्रोग्राम को निष्पादित करने

QID : 190 - If we open a bottle of perfume, its smell spreads in the entire room within a short time due to the process of _____.

यदि हम इत्र की एक बोतल खोलते हैं, तो इसकी गंध पूरे कमरे में _____ की प्रक्रिया के कारण कम समय में फैलता है।

Options:

1) Evaporation

वाष्पीकरण

2) Sublimation

उर्ध्वपातन

3) Diffusion

विसरण

4) Decantation

निस्तारण

Correct Answer: Diffusion

विसरण

Candidate Answer: Diffusion

विसरण

QID : 191 - The elements of group 18 are _____.

समूह 18 के तत्व _____ हैं।

Options:

1) Halogens

हैलोजन

2) Noble gases

उत्कृष्ट गैस

3) Metals

धातु

4) Alkaline earth metals

क्षारीय पृथ्वी धातु

Correct Answer: Noble gases

उत्कृष्ट गैस

Candidate Answer: Noble gases

उत्कृष्ट गैस

QID : 192 -

Match the following.

निम्नलिखित का मिलान कीजिए।

Pollutant / प्रदूषक	Effect / प्रभाव
A. Smog धूम कोहरा	1. Reduces oxygen carrying capacity of blood रुधिर में ऑक्सीजन वाहक क्षमता घटना
B. Carbon monoxide कार्बन मोनोऑक्साइड	2. Permanent lung damage फेफड़े स्थायी रूप से खराब हो जाते हैं
C. Sulphurdioxide सल्फर डाइऑक्साइड	3. Asthma, Cough दमा, खाँसी

Options:

1) C-1, A-3, B-2

2) A-3, B-1, C-2

3) B-2, A-3, C-1

4) C-2, A-1, B-3

Correct Answer: A-3, B-1, C-2

Candidate Answer: A-3, B-1, C-2

QID : 193 - On whose 125th birth anniversary did the "Gram Uday se Bharat Uday Abhiyan" initiate?

"ग्राम उदय से भारत उदय अभियान" की शुरुआत किस व्यक्ति की 125-वीं जन्म की सालगिरह पर हुई?

Options:

1) Dr. A.P.J. Abdul Kalam

डॉ. ए.पी.जे. अब्दुल कलाम

2) Dr. Bhimrao Ambedkar

डॉ. भीमराव अम्बेडकर

3) Mahatma Gandhi

महात्मा गाँधी

4) Pt. Jawaharlal Nehru

पं. जवाहरलाल नेहरू

Correct Answer: Dr. Bhimrao Ambedkar

डॉ. भीमराव अम्बेडकर

Candidate Answer: Dr. Bhimrao Ambedkar

डॉ. भीमराव अम्बेडकर

QID : 194 - What was discovered by Ernest Orlando Lawrence?

अर्नेस्ट ओरलांडो लॉरेंस ने किसका खोज किया था?

Options:

1) Electric Motor

विद्युत मोटर

2) Electricity

विद्युत

3) Electric Fan

विद्युत पंखा

4) Cyclotron

साइक्लोट्रॉन

Correct Answer: Cyclotron

साइक्लोट्रॉन

Candidate Answer: Cyclotron

साइक्लोट्रॉन

QID : 195 - Who is known as "The wizard of Hockey"?

कौन "हॉकी के जादूगर" के नाम से जाना जाता है?

Options:

- 1) Maurice Richard
मौरिस रिचर्ड
- 2) Bobby Hull
बॉबी हल
- 3) Manzoor Hussain
मंजूर हुसैन
- 4) Major Dhyanchand
मेजर ध्यानचंद

Correct Answer: Major Dhyanchand
मेजर ध्यानचंद

Candidate Answer: Major Dhyanchand
मेजर ध्यानचंद

QID : 196 - What are the paintings done on walls and rock surfaces like roofs and sides called?

दीवारों तथा चट्टानों की सतहों पर छतों तथा सतहों की तरह की गई चित्रकारी क्या कहलाती है?

Options:

- 1) Chikan
चिकन
- 2) Mural
भित्ति चित्र
- 3) Patola
पटोला
- 4) Jataka
जताका

Correct Answer: Mural
भित्ति चित्र

Candidate Answer: [NOT ANSWERED]

QID : 197 - Which company has won the prestigious "Golden Globe Tiger Award" for excellence and leadership for the year 2017?

किस कंपनी ने वर्ष 2017 के लिए उत्कृष्टता और नेतृत्व के लिए प्रतिष्ठित "गोल्डन ग्लोब टाइगर अवार्ड" जीता है?

Options:

- 1) Coal India Limited
कोयला इंडिया लिमिटेड
- 2) Gujarat Narmada Valley Fertilisers and chemicals limited
गुजरात नर्मदा घाटी उर्वरक और रसायन लिमिटेड
- 3) Delhi Metro Rail Corporation
दिल्ली मेट्रो रेल निगम
- 4) National Fertilisers limited
राष्ट्रीय उर्वरक लिमिटेड

Correct Answer: Gujarat Narmada Valley Fertilisers and chemicals limited
गुजरात नर्मदा घाटी उर्वरक और रसायन लिमिटेड

Candidate Answer: Delhi Metro Rail Corporation
दिल्ली मेट्रो रेल निगम

QID : 198 - Who is the author of the book named "The Race of My Life"?

"द रेस ऑफ माई लाईफ" नामक पुस्तक के लेखक कौन हैं?

Options:

- 1) Chris Gayle
क्रिस गेल
- 2) Milkha Singh
मिल्खा सिंह
- 3) Anil Kumble
अनिल कुंबले
- 4) Kapil Dev
कपिल देव

Correct Answer: Milkha Singh
मिल्खा सिंह

Candidate Answer: Milkha Singh
मिल्खा सिंह

QID : 199 - Which one of the following lays out the rules and regulations for diplomatic relations between countries?

निम्नलिखित में से कौन देशों के बीच राजनयिक संबंधों के नियमों तथा कायदों को बताता है?

Options:

- 1) Bangkok Convention
बैंकॉक कन्वेंशन
- 2) Veinna Convention
वियना कन्वेंशन
- 3) Kyoto Convention
क्योटो कन्वेंशन
- 4) Singapore Convention
सिंगापुर कन्वेंशन

Correct Answer: Veinna Convention
वियना कन्वेंशन

Candidate Answer: [NOT ANSWERED]

QID : 200 - About what percentage of water of Indus river system is received by Pakistan under Indus Water Treaty?

सिंधु जल संधि के अंतर्गत पाकिस्तान सिंधु नदी व्यवस्था का कितना प्रतिशत पानी प्राप्त करता है?

Options:

1) 60

2) 70

3) 80

4) 90

Correct Answer: 80

Candidate Answer: [NOT ANSWERED]

GovtJobsAlert.In