

Section : General English

Q.1 Choose the correctly spelt word.

- Ans
- ☒ 1. Enthudiesm
 - ☒ 2. Entheusiasm
 - ☒ 3. Anthusiasn
 - ☒ 4. Enthusiasm

Question ID : 23908749
Status : Answered
Chosen Option : 4

Q.2 Select the most appropriate antonym of the given word.
Inexpensive

- Ans
- ☒ 1. Popular
 - ☒ 2. Dear
 - ☒ 3. Reasonable
 - ☒ 4. Liberal

Question ID : 23908743
Status : Answered
Chosen Option : 2

Q.3 Choose the word that can substitute the given sentence.
A book of names and addresses

- Ans
- ☒ 1. Directory
 - ☒ 2. Dictionary
 - ☒ 3. Diary
 - ☒ 4. Journal

Question ID : 23908748
Status : Answered
Chosen Option : 3

Q.4 Select the most appropriate antonym of the given word.
Comic

- Ans
- ☒ 1. Tragic
 - ☒ 2. Jubilant
 - ☒ 3. Tickle
 - ☒ 4. Happy

Question ID : 23908744
Status : Not Answered
Chosen Option : --

Q.5 Select the most appropriate option to substitute the underlined segment in the given

sentence. If there is no need to substitute it, select No Improvement.
Mohan is pleased at the news yesterday.

- Ans
- ☒ 1. was pleased
 - ☐ 2. has been pleased
 - ☐ 3. No Improvement
 - ☐ 4. had being pleased

Question ID : 23908732
Status : Answered
Chosen Option : 1

Q.6 Select the most appropriate option to fill in the blank.
He _____ his portrait in the main hall.

- Ans
- ☐ 1. hanged
 - ☐ 2. hang
 - ☒ 3. hung
 - ☐ 4. had hanged

Question ID : 23908734
Status : Answered
Chosen Option : 1

Q.7 Select the most appropriate synonym of the given word.
Misfortune

- Ans
- ☐ 1. Benefit
 - ☐ 2. Support
 - ☐ 3. Miracle
 - ☒ 4. Calamity

Question ID : 23908741
Status : Answered
Chosen Option : 4

Q.8 In the following question, out of the given four alternatives, select the alternative which best expresses the meaning of the Idiom/Phrase.
Over my dead body

- Ans
- ☐ 1. Threatening to kill oneself
 - ☐ 2. Inheriting to fortune
 - ☒ 3. Opposing something fiercely
 - ☐ 4. Erecting a grave stone

Question ID : 23908745
Status : Answered
Chosen Option : 3

Q.9 Find the part of the given sentence that has an error in it. If there is no error, choose 'No error'.
Rakesh is foolish/to said/such things.

- Ans
- ☐ 1. No error
 - ☒ 2. to said
 - ☐ 3. such things
 - ☐ 4. Rakesh is foolish

Question ID : 23908729
Status : Answered
Chosen Option : 4

Q.10 Choose the word that can substitute the given sentence.
A building where an audience sits

- Ans
- ☒ 1. Aisle
 - ☒ 2. Auditorium
 - ☒ 3. Gymnasium
 - ☒ 4. Hanger

Question ID : 23908747
Status : Answered
Chosen Option : 2

Q.11 Select the most appropriate option to substitute the underlined segment in the given sentence. If there is no need to substitute it, select No Improvement.
The doctor has reassure me that the operation was a routine one.

- Ans
- ☒ 1. No Improvement
 - ☒ 2. had reassured me
 - ☒ 3. is reassured me
 - ☒ 4. reassure me

Question ID : 23908731
Status : Answered
Chosen Option : 4

Q.12 Select the most appropriate option to substitute the underlined segment in the given sentence. If there is no need to substitute it, select No Improvement.
Who can prevent you from getting married now that you are within age?

- Ans
- ☒ 1. on
 - ☒ 2. of
 - ☒ 3. No Improvement
 - ☒ 4. in

Question ID : 23908730
Status : Answered
Chosen Option : 4

Q.13 Choose the correctly spelt word.

- Ans
- ☒ 1. Financialy
 - ☒ 2. Financially
 - ☒ 3. Finantially
 - ☒ 4. Finencially

Question ID : 23908750
Status : Answered
Chosen Option : 2

Q.14 Select the most appropriate synonym of the given word.
Capable

- Ans
- ☒ 1. Complacent
 - ☒ 2. Consistent
 - ☒ 3. Conceited
 - ☒ 4. Competent

Question ID : 23908742
Status : Not Answered
Chosen Option : --

Q.15 Select the most appropriate option to fill in the blank.
My teacher is the _____ of all.

- Ans
- ☒ 1. kinder
 - ☒ 2. kindly
 - ☒ 3. kindest
 - ☒ 4. kind

Question ID : 23908733
Status : Answered
Chosen Option : 3

Q.16 A sentence has been given with a blank to be filled with an appropriate word. Choose the correct alternative.
I am _____ of winning the competition.

- Ans
- ☒ 1. confident
 - ☒ 2. resistant
 - ☒ 3. pertinent
 - ☒ 4. reliant

Question ID : 23908752
Status : Answered
Chosen Option : 1

Q.17 Find the part of the given sentence that has an error in it. If there is no error, choose 'No error'.
My aunt/sold her boutique/to a billionaire.

- Ans
- ☒ 1. My aunt
 - ☒ 2. to a billionaire
 - ☒ 3. No error
 - ☒ 4. sold her boutique

Question ID : 23908728
Status : Answered
Chosen Option : 4

Q.18 A sentence has been given with a blank to be filled with an appropriate word. Choose the correct alternative.
The bullet struck a wall and was _____ from its course.

- Ans
- ☒ 1. twisted
 - ☒ 2. crashed
 - ☒ 3. deflected
 - ☒ 4. reflected

Question ID : 23908751
Status : Answered
Chosen Option : 3

Q.19 Find the part of the given sentence that has an error in it. If there is no error, choose 'No error'.
All the students/is done/better this year.

- Ans
- ☒ 1. better this year
 - ☒ 2. is done
 - ☒ 3. No error
 - ☒ 4. All the students

Question ID : 23908727

Q.20 In the following question, out of the given four alternatives, select the alternative which best expresses the meaning of the Idiom/Phrase.

To end in smoke

- Ans
- ☒ 1. To not agree to something
 - ☒ 2. To come to nothing
 - ☒ 3. To do one's duty well
 - ☒ 4. To be the cause of a quarrel

Question ID : 23908746

Status : Answered

Chosen Option : 2

Comprehension:

In the following passage some words have been deleted. Fill in the blanks with the help of the alternatives given. Select the most appropriate option for each blank.

Sanitation refers to public health conditions (1)_____ to clean drinking water and adequate treatment and disposal (2)_____ human waste and sewage. (3)_____ human contact with faeces is part of sanitation. Sanitation system (4)_____ to protect human health by providing a clean environment (5) _____ will stop the transmission of disease.

SubQuestion No : 21

Q.21 Select the most appropriate option for blank No. 1.

- Ans
- ☒ 1. related
 - ☒ 2. relation
 - ☒ 3. relate
 - ☒ 4. relates

Question ID : 23908736

Status : Answered

Chosen Option : 4

Comprehension:

In the following passage some words have been deleted. Fill in the blanks with the help of the alternatives given. Select the most appropriate option for each blank.

Sanitation refers to public health conditions (1)_____ to clean drinking water and adequate treatment and disposal (2)_____ human waste and sewage. (3)_____ human contact with faeces is part of sanitation. Sanitation system (4)_____ to protect human health by providing a clean environment (5) _____ will stop the transmission of disease.

SubQuestion No : 22

Q.22 Select the most appropriate option for blank No. 2.

- Ans
- ☒ 1. with
 - ☒ 2. in
 - ☒ 3. of
 - ☒ 4. for

Question ID : 23908737

Status : Answered

Chosen Option : 3

Comprehension:

In the following passage some words have been deleted. Fill in the blanks with the help of the alternatives given. Select the most appropriate option for each blank.

Sanitation refers to public health conditions (1)_____ to clean drinking water and adequate treatment and disposal (2)_____ human waste and sewage. (3)_____ human contact with faeces is part of sanitation. Sanitation system (4)_____ to protect human health by providing a clean environment (5) _____ will stop the transmission of disease.

SubQuestion No : 23

Q.23 Select the most appropriate option for blank No. 3.

- Ans
- ☐ 1. Hampering
 - ☐ 2. Prohibiting
 - ☐ 3. Facilitating
 - ☒ 4. Preventing

Question ID : 23908738
Status : Answered
Chosen Option : 2

Comprehension:

In the following passage some words have been deleted. Fill in the blanks with the help of the alternatives given. Select the most appropriate option for each blank.

Sanitation refers to public health conditions (1)_____ to clean drinking water and adequate treatment and disposal (2)_____ human waste and sewage. (3)_____ human contact with faeces is part of sanitation. Sanitation system (4)_____ to protect human health by providing a clean environment (5) _____ will stop the transmission of disease.

SubQuestion No : 24

Q.24 Select the most appropriate option for blank No. 4.

- Ans
- ☐ 1. ignores
 - ☐ 2. paves
 - ☐ 3. directs
 - ☒ 4. aims

Question ID : 23908739
Status : Answered
Chosen Option : 3

Comprehension:

In the following passage some words have been deleted. Fill in the blanks with the help of the alternatives given. Select the most appropriate option for each blank.

Sanitation refers to public health conditions (1)_____ to clean drinking water and adequate treatment and disposal (2)_____ human waste and sewage. (3)_____ human contact with faeces is part of sanitation. Sanitation system (4)_____ to protect human health by providing a clean environment (5) _____ will stop the transmission of disease.

SubQuestion No : 25

Q.25 Select the most appropriate option for blank No. 5.

- Ans
- ☐ 1. who
 - ☐ 2. these
 - ☒ 3. that
 - ☐ 4. whom

Question ID : 23908740
Status : Answered
Chosen Option : 3

Section : General Intelligence & Reasoning

Q.1 Six friends, C, E, G, I, K and M, are sitting around a circular table facing towards the centre and at equal distance from each other (not necessarily in the same order). E is second to the right of C. K is to the immediate right of G. G and I are facing towards each other. Moving towards the left of I, how many friends are sitting between I and M?

- Ans
- ☐ 1. 0
 - ☒ 2. 3
 - ☐ 3. 1
 - ☐ 4. 2

Question ID : 239087289
Status : Answered
Chosen Option : 2

Q.2 In a certain code language, 'PRINT' is written as '96512' and 'FROM' is written as '8603'. What will be the code for 'PROMPT' in that code language?

- Ans
- ☒ 1. 960398
 - ☒ 2. 980392
 - ☒ 3. 960392
 - ☒ 4. 960395

Question ID : 239087287

Status : Answered

Chosen Option : 3

Q.3 Identify the diagram that best represents the relationship between the given classes.

Car, Wood, Rat

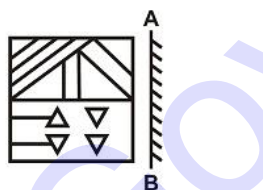
- Ans
- ☒ 1.
 - ☒ 2.
 - ☒ 3.
 - ☒ 4.

Question ID : 239087305

Status : Answered

Chosen Option : 1

Q.4 Select the correct mirror image of the given figure when the mirror is placed at line AB.



- Ans
- ☒ 1.
 - ☒ 2.

✗ 3.



✗ 4.




Question ID : 239087303

Status : Answered

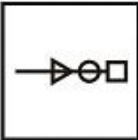
Chosen Option : 2

Q.5 Select the figure that will come next in the following series.



Ans

✗ 1.



✗ 2.



✓ 3.



✗ 4.

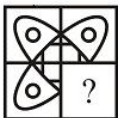


Question ID : 239087300

Status : Answered

Chosen Option : 3

Q.6 Study the given pattern carefully and select the figure that can replace the question mark (?) in it.




Ans

✗ 1.



✓ 2.





Question ID : 239087301
Status : Answered
Chosen Option : 2

Q.7 Select the number that can replace the question mark (?) in the following series.

69, 109, 159, 219, 289, ?

- Ans
- ☒ 1. 349
 - ☒ 2. 369
 - ☒ 3. 379
 - ☒ 4. 359

Question ID : 239087295
Status : Answered
Chosen Option : 2

Q.8 Select the number that can replace the question mark (?) in the following series.
43, 31, 74, 105, 179, ?

- Ans
- ☒ 1. 263
 - ☒ 2. 279
 - ☒ 3. 294
 - ☒ 4. 284

Question ID : 239087294
Status : Answered
Chosen Option : 4

Q.9 In a certain code language, 'TAN' is written as '33' and 'PAM' is written as '28'. What will be the code for 'BUG' in that code language?

- Ans
- ☒ 1. 30
 - ☒ 2. 32
 - ☒ 3. 29
 - ☒ 4. 28

Question ID : 239087288
Status : Answered
Chosen Option : 4

Q.10 Select the word pair in which the two words are related in the same way as the two words in the following word-pair.

Circle : Figure

- Ans
- ☒ 1. Rodent : Reptile
 - ☒ 2. Car : Driver
 - ☒ 3. Sharpener : Stationery
 - ☒ 4. Toy : Play

Question ID : 239087283
Status : Answered
Chosen Option : 3

Q.11 Read the given statements and conclusions carefully. Assuming that the information given in the statements is true, even if it appears to be at variance with commonly known facts, decide which of the given conclusions logically follow(s) from the statements.

Statements:

- I. Some K are M.
- II. No T is M.

Conclusions:

- I. Some T are K.
- II. Some M are K.

Ans ☒ 1. Only conclusion II follows.

☒ 2. Only conclusion I follows.

☒ 3. None of the conclusions follows.

☒ 4. Both conclusions I and II follow.

Question ID : 239087293

Status : Answered

Chosen Option : 1

Q.12 If the two signs, 'x and ÷' are interchanged, which of the following equations will be correct?

Ans ☒ 1. $14 + 9 \div 23 \times 3 = 83$

☒ 2. $14 + 62 \times 13 \div 31 = 38$

☒ 3. $11 \times 12 \div 48 + 6 = 40$

☒ 4. $63 + 59 \div 4 \times 8 = 171$

Question ID : 239087299

Status : Answered

Chosen Option : 1

Q.13 Select the option that is related to the third letter-pair in the same way as the second letter-pair is related to the first letter-pair.

PB : UW :: JT : ?

Ans ☒ 1. PP

☒ 2. NO

☒ 3. OO

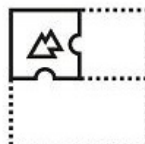
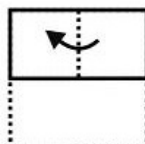

☒ 4. MO

Question ID : 239087284

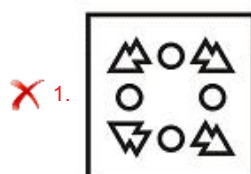
Status : Answered

Chosen Option : 3

Q.14 A paper is folded and cut as shown below. How will it appear when unfolded?



Ans



✗ 2.



✗ 3.



✓ 4.



Question ID : 239087304

Status : Answered

Chosen Option : 4

Q.15 Five persons, F, J, N, R and V, are sitting around a circular table facing towards the centre (not necessarily in the same order). J is to the immediate left of F. N is second to the left of F. V is second to the left of J. Who is sitting second to the right of J?

Ans ✗ 1. N

✗ 2. F

✗ 3. V

✓ 4. R

Question ID : 239087290

Status : Answered

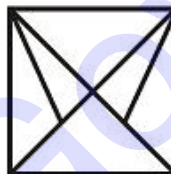
Chosen Option : 4

Q.16 Select the option in which the given figure is embedded. (Rotation not allowed)



Ans

✗ 1.



✗ 2.



✓ 3.



✗ 4.



Question ID : 239087302

Status : Answered

Chosen Option : 3

Q.17 In a certain code language, 'GREAT' is written as 'ALYUN'. What will be the code for 'RAPID' in that code language?

Ans ✗ 1. RVKDY

✓ 2. LUJCX

✗ 3. LVJCX

✗ 4. SWLEZ

Question ID : 239087285

Status : Answered

Chosen Option : 2

Q.18 If digit 2 is interchanged with digit 1, then what will be the value of the following equation?

$$9 + 6 \div 4 \times 21 - 5 = ?$$

Ans ✓ 1. 22

✗ 2. 29

✗ 3. 23

✗ 4. 24

Question ID : 239087298

Status : Answered

Chosen Option : 1

Q.19 Select the option that is related to the third term in the same way as the second term is related to the first term.

Den : Lion :: Stable : ?

Ans ✗ 1. Tiger

✗ 2. Car

✗ 3. Bird

✓ 4. Horse

Question ID : 239087282

Status : Not Answered

Chosen Option : --

Q.20 In a certain code language, 'STEALH' is written as 'UXGENL'. What will be the code for 'ROBNRT' in that code language?

Ans ✗ 1. TSERTX

✓ 2. TSDRTX

✗ 3. UTESUY

✗ 4. UTFSUY

Question ID : 239087286

Status : Answered

Chosen Option : 2

Q.21 Five books labelled B, G, N, P and T are kept one above the other (not necessarily in the same order). Only one book is kept between N and G. B is just above P. B is above N. G is not above N. Which book is at the top?

- Ans
- ☒ 1. G
 - ☒ 2. P
 - ☒ 3. B
 - ☒ 4. T

Question ID : 239087291
Status : Answered
Chosen Option : 3

Q.22 Select the letter-pair that can replace the question mark (?) in the following series.

KP, HM, EJ, BG, ?

- Ans
- ☒ 1. YD
 - ☒ 2. ZE
 - ☒ 3. YC
 - ☒ 4. XC

Question ID : 239087281
Status : Answered
Chosen Option : 1

Q.23 Read the given statements and conclusions carefully. Assuming that the information given in the statements is true, even if it appears to be at variance with commonly known facts, decide which of the given conclusions logically follow(s) from the statements.

Statements:
Some pots are lamps.
All lamps are trees.
No tree is branches.

Conclusions:
I. Some pots are branches.
II. Some trees are lamps.
III. Some branches are lamps.

- Ans
- ☒ 1. Conclusions I and III follow
 - ☒ 2. Only conclusion II follows
 - ☒ 3. Only conclusion III follows
 - ☒ 4. Conclusions I and II follow

Question ID : 239087292
Status : Answered
Chosen Option : 2

Q.24 Study the given pattern carefully and select the number that can replace the question mark (?) in it.

4 11 19
5 6 0
9 13 3
18 30 ?

- Ans
- ☒ 1. 20
 - ☒ 2. 24
 - ☒ 3. 22
 - ☒ 4. 18

Question ID : 239087297
Status : Answered

Q.25 Select the option that is related to the third number in the same way as the second number is related to the first number.

36 : 109 :: 25 : ?

- Ans
- ☒ 1. 74
 - ☒ 2. 78
 - ☒ 3. 76
 - ☒ 4. 72

Question ID : 239087296

Status : Answered

Chosen Option : 3

Section : Numerical Aptitude

Q.1 Speed of a boat in still water is 8 km/h. If the speed of stream is 2 km/h, then how much distance can the boat travel in two hours going upstream?

- Ans
- ☒ 1. 16 km
 - ☒ 2. 14 km
 - ☒ 3. 20 km
 - ☒ 4. 12 km

Question ID : 239087424

Status : Answered

Chosen Option : 4

Q.2 The length, breadth and height of a cuboid are 15 cm, 12 cm and 11 cm respectively. The length is decreased by $6\frac{2}{3}\%$, the breadth increased by $8\frac{1}{3}\%$, whereas the height is kept unchanged. What is the change in the total area of the four side faces (considering the rectangle contained by the length and breadth as the base) of the cuboid?

- Ans
- ☒ 1. Decrease by 22 cm^2
 - ☒ 2. Increase by 22 cm^2
 - ☒ 3. Increase by 33 cm^2
 - ☒ 4. No change

Question ID : 239087427

Status : Answered

Chosen Option : 2

Q.3 A alone can do a work in 30 days. B alone can do the same work in 40 days. If they work on alternate days starting with A, then in how many days (correct up to two places of decimal) the work will be completed?

- Ans
- ☒ 1. 16.33
 - ☒ 2. 17.25
 - ☒ 3. 32.33
 - ☒ 4. 34.25

Question ID : 239087422

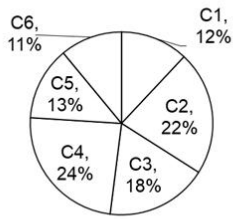
Status : Answered

Chosen Option : 4

Q.4

The Pie Chart given below presents the number of laptops as a percentage of the total number of laptops in an office delivered by six different companies.

The central angles shown in the Pie Chart are not as per any chosen scale.



What is the central angle in degrees (correct up to one decimal place) corresponding to the laptops delivered by Company C6?

- Ans
- ☒ 1. 51.7°
 - ☒ 2. 39.6°
 - ☒ 3. 45.1°
 - ☒ 4. 52.8°

Question ID : 239087430
Status : Answered
Chosen Option : 2

Q.5 What is the value of

$$\frac{3}{4} \text{ of } \left(\frac{1}{3} \div \frac{1}{2} \right) + \left(2 - \frac{2}{5} \right) \times \frac{3}{2} + \frac{2}{3} ?$$

- Ans
- ☒ 1. $\frac{101}{6}$
 - ☒ 2. $\frac{107}{30}$
 - ☒ 3. $\frac{109}{17}$
 - ☒ 4. $\frac{103}{25}$

Question ID : 239087407
Status : Answered
Chosen Option : 2

Q.6 The perimeter of a rhombus is 20 cm. The length of one of its diagonals is 6 cm. What is the length of the other diagonal?

- Ans
- ☒ 1. 6 cm
 - ☒ 2. 9 cm
 - ☒ 3. 8 cm
 - ☒ 4. 10 cm

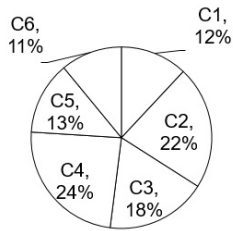
Question ID : 239087426
Status : Answered
Chosen Option : 3

Q.7 A car can travel a distance of 300 meters in 6 minutes. What is its average speed in km/h?

- Ans
- ☒ 1. 50
 - ☒ 2. 6
 - ☒ 3. 12
 - ☒ 4. 3

Q.8 The Pie Chart given below presents the number of laptops as a percentage of the total number of laptops in an office delivered by six different companies.

The central angles shown in the Pie Chart are not as per any chosen scale.



What is the ratio of the number of laptops of Company C1 to that of Company C3?

- Ans**
- ☒ 1. 2 : 3
 - ☐ 2. 12 : 11
 - ☐ 3. 2 : 1
 - ☐ 4. 6 : 11

Question ID : 239087428

Status : Answered

Chosen Option : 1

Q.9 Average weight of 8 gold coins is 20 g per coin. Average weight of 12 silver coins is 35 g per coin. What is the average weight per coin for 20 coins?

- Ans**
- ☐ 1. 25 g
 - ☐ 2. 21 g
 - ☐ 3. 31 g
 - ☒ 4. 29 g

Question ID : 239087410

Status : Answered

Chosen Option : 4

Q.10 If $U + V = 80$ and $U : V = 5 : 3$, then what is the value of $U - V$?

- Ans**
- ☐ 1. 15
 - ☐ 2. 25
 - ☐ 3. 30
 - ☒ 4. 20

Question ID : 239087417

Status : Answered

Chosen Option : 4

Q.11 A man spends 10% of his salary on food. He spends 20% of the remaining part on fuel. If he is left with ₹4680, then what is his salary?

- Ans**
- ☐ 1. ₹5000
 - ☐ 2. ₹5500
 - ☒ 3. ₹6500
 - ☐ 4. ₹6000

Question ID : 239087413

Status : Answered

Chosen Option : 3

Q.12 Side of a square is 6 cm. What is the area of the largest circle that can be drawn inside the square?

(Take $\pi = \frac{22}{7}$)

Ans

☐ 1. $\frac{156}{7} \text{ cm}^2$

☒ 2. $\frac{198}{7} \text{ cm}^2$

☐ 3. $\frac{252}{7} \text{ cm}^2$

☐ 4. $\frac{318}{7} \text{ cm}^2$

Question ID : 239087425

Status : Answered

Chosen Option : 2

Q.13 A person deposited ₹500 for 2 years, ₹600 for 5 years and ₹1000 for 6 years all at the same rate of simple interest. If he received the total simple interest of ₹1000, then what is the rate of interest per annum?

Ans

☐ 1. 15%

☐ 2. 20%

☐ 3. 5%

☒ 4. 10%

Question ID : 239087419

Status : Answered

Chosen Option : 4

Q.14 What is the value of

$$7 \div 2 - [3 \text{ of } 7 \div 4 \div \{(2 \div 5) \times (25 \div 8) \div (5 \div 2)\}] ?$$

Ans

☐ 1. -1

☐ 2. -8

☒ 3. -7

☐ 4. -9

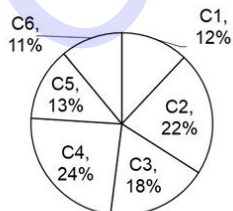
Question ID : 239087408

Status : Answered

Chosen Option : 3

Q.15 The Pie Chart given below presents the number of laptops as a percentage of the total number of laptops in an office delivered by six different companies.

The central angles shown in the Pie Chart are not as per any chosen scale.



If the total number of laptops in the office is 3800, then what is the difference in number of laptops of Companies C2 and C5?

Ans

☐ 1. 322

☐ 2. 382

☒ 3. 342

☐ 4. 362

Question ID : 239087429

Status : Answered

Chosen Option : 3

Q.16 A and B together can do a piece of work in 20 days. B and C together can do the same of work in 25 days. C and A together can do the same work in 15 days. In how many days A alone can do the same work?

Ans

☐ 1. $\frac{1200}{23}$

☐ 2. $\frac{1200}{17}$

☒ 3. $\frac{600}{23}$

☐ 4. $\frac{600}{17}$

Question ID : 239087421

Status : Answered

Chosen Option : 3

Q.17 If $x + y + z = 400$ and $x : y : z = 1 : 1 : 2$, then what is the value of z ?

Ans

☐ 1. 150

☒ 2. 200

☐ 3. 120

☐ 4. 100

Question ID : 239087416

Status : Answered

Chosen Option : 2

Q.18 Average of 49, 62, 37, 55 and x is 53. What is the value of x ?

Ans

☐ 1. 68

☐ 2. 56

☒ 3. 62

☐ 4. 76

Question ID : 239087409

Status : Answered

Chosen Option : 3

Q.19 The median date of the year 2019 written as DD.MM is:

Ans

☐ 1. 30.06

☐ 2. 01.07

☐ 3. 03.07

☒ 4. 02.07

Question ID : 239087412

Status : Answered

Chosen Option : 4

Q.20 An article is sold for ₹1725 at 15% profit. If it is sold at 15% loss, then what will be the selling price?

Ans

☐ 1. ₹1025

☒ 2. ₹1275

☐ 3. ₹1325

✗ 4. ₹1475

Question ID : 239087415

Status : Answered

Chosen Option : 2

Q.21 If after two years a sum becomes ₹4000 and after four years it becomes ₹6000 at the same rate of compound interest (compounded annually), then what is the sum?

Ans ✗ 1. ₹2866.66

✓ 2. ₹2666.66

✗ 3. ₹2777.77

✗ 4. ₹2888.88

Question ID : 239087420

Status : Not Answered

Chosen Option : --

Q.22 Mahesh's salary is ₹12000 more than the Sumit's salary. If the ratio of Mahesh and Sumit salary is 7 : 4, then what is the salary of Sumit?

Ans ✗ 1. ₹20000

✓ 2. ₹16000

✗ 3. ₹12000

✗ 4. ₹18000

Question ID : 239087418

Status : Answered

Chosen Option : 2

Q.23 A = Highest Common Factor of $\frac{3}{4}$ and $\frac{9}{16}$
B = Least Common Multiple of $\frac{16}{5}$ and $\frac{4}{25}$
What is the value of A + B?

Ans ✗ 1. $\frac{70}{23}$

✓ 2. $\frac{271}{80}$

✗ 3. $\frac{250}{81}$

✗ 4. $\frac{260}{71}$

Question ID : 239087406

Status : Answered

Chosen Option : 2

Q.24 Marked price of an article is ₹2500. It is sold at two successive discounts of 12% and 10% respectively. What is the selling price?

Ans ✓ 1. ₹1980

✗ 2. ₹1870

✗ 3. ₹1760

✗ 4. ₹2090

Question ID : 239087411

Status : Answered

Chosen Option : 1

Q.25 The difference in selling price of article for selling at 25% profit and 37.5% loss is ₹1250. What will be selling price when it is sold at 12.5% profit?

- Ans
- ☒ 1. ₹1800
 - ☒ 2. ₹2250
 - ☒ 3. ₹2500
 - ☒ 4. ₹2400

Question ID : 239087414
Status : Answered
Chosen Option : 3

Section : General awareness

Q.1 As of June 2019, which nuclear power station of India produces maximum power?

- Ans
- ☒ 1. Kakrapar
 - ☒ 2. Kudankulam
 - ☒ 3. Kaiga
 - ☒ 4. Rawatbhata

Question ID : 239087176
Status : Not Answered
Chosen Option : --

Q.2 Surajkund Lake is situated in which of the following state?

- Ans
- ☒ 1. Haryana
 - ☒ 2. Gujarat
 - ☒ 3. Rajasthan
 - ☒ 4. Punjab

Question ID : 239087177
Status : Not Answered
Chosen Option : --

Q.3 The Consumer Protection Bill 2018 replaces the Consumer Protection Act which was enacted in _____.

- Ans
- ☒ 1. 1984
 - ☒ 2. 1988
 - ☒ 3. 1986
 - ☒ 4. 1989

Question ID : 239087165
Status : Not Answered
Chosen Option : --

Q.4 Fiscal Deficit means _____.

- Ans
- ☒ 1. Total revenue collected by the government
 - ☒ 2. Difference between total revenue and total expenditure of the government
 - ☒ 3. Total borrowing of the Government
 - ☒ 4. Total expenditure of government

Question ID : 239087164
Status : Not Answered
Chosen Option : --

Q.5 Which of the following festival is celebrated in Odisha?

- Ans
- ☐ 1. Hornbill
 - ☐ 2. Chappar mela
 - ☐ 3. Bonalu
 - ☒ 4. Bali Trutiya

Question ID : 239087158
Status : Not Answered
Chosen Option : --

Q.6 Who is the writer of 'The silent cry'?

- Ans
- ☐ 1. Michel Madhusudan Dutta
 - ☐ 2. Haruki Murakami
 - ☒ 3. Kenzaburō Ōe
 - ☐ 4. John Milton

Question ID : 239087161
Status : Not Answered
Chosen Option : --

Q.7 How many members are there in the GST council?

- Ans
- ☒ 1. 33
 - ☐ 2. 35
 - ☐ 3. 23
 - ☐ 4. 25

Question ID : 239087166
Status : Not Answered
Chosen Option : --

Q.8 'Amukta Malyada' was written by _____.

- Ans
- ☐ 1. Harihara Raya
 - ☐ 2. Brahmadeva Raya
 - ☐ 3. Bukka Raya
 - ☒ 4. Krishnadeva Raya

Question ID : 239087162
Status : Not Answered
Chosen Option : --

Q.9 Who appoints the Chief Justice of India?

- Ans
- ☐ 1. Lok Sabha Speaker
 - ☒ 2. President
 - ☐ 3. Prime Minister
 - ☐ 4. Vice President

Question ID : 239087169
Status : Answered
Chosen Option : 2

Q.10 Which of the following is the folk dance of Goa?

- Ans
- ☒ 1. Fugdi
 - ☐ 2. Maanch

- ☒ 3. Bihu
- ☒ 4. Fagua

Question ID : 239087156
Status : Answered
Chosen Option : 1

Q.11 A book titled 'A Prime Minister to Remember- Memories of a Military Chief' was authored by former Navy Chief Admiral _____.

- Ans ☒ 1. Sushil Kumar
- ☒ 2. Arun Prakash
 - ☒ 3. Devendra Kumar
 - ☒ 4. Nirmal Kumar

Question ID : 239087163
Status : Not Answered
Chosen Option : --

Q.12 Which battle was fought between Mohammad Gori and Prithviraj Chauhan?

- Ans ☒ 1. Battle of Buxar
- ☒ 2. Battle of Khanua
 - ☒ 3. Battle of Plassey
 - ☒ 4. Battle of Tarain

Question ID : 239087180
Status : Answered
Chosen Option : 4

Q.13 In which year the Communist Party was formed in India?

- Ans ☒ 1. 1927
- ☒ 2. 1925
 - ☒ 3. 1930
 - ☒ 4. 1922

Question ID : 239087179
Status : Answered
Chosen Option : 1

Q.14 Which of the following feature was borrowed from the Union of Soviet Socialist Republics (USSR) in Indian Constitution?

- Ans ☒ 1. Five year Plan
- ☒ 2. Concurrent list
 - ☒ 3. Fundamental Rights
 - ☒ 4. Preamble

Question ID : 239087167
Status : Answered
Chosen Option : 3

Q.15 Which of the following cell organelles is known as suicide bag?

- Ans ☒ 1. Golgi Apparatus
- ☒ 2. Lysosome
 - ☒ 3. Endoplasmic Reticulum
 - ☒ 4. Mitochondria

Question ID : 239087172
Status : Answered
Chosen Option : 2

Q.16 Gunmetal is an alloy of:

- Ans
- ☐ 1. Copper, Zinc, Lead
 - ☐ 2. Copper, Lead, Silver
 - ☒ 3. Copper, Tin, Zinc
 - ☐ 4. Copper, Iron, Nickel

Question ID : 239087173
Status : Answered
Chosen Option : 3

Q.17 In which state of India is the Gol Gumbaz situated?

- Ans
- ☐ 1. Maharashtra
 - ☒ 2. Karnataka
 - ☐ 3. Kerala
 - ☐ 4. Andrapradesh

Question ID : 239087157
Status : Answered
Chosen Option : 1

Q.18 Beriberi is caused by deficiency of:

- Ans
- ☐ 1. Vitamin B6
 - ☒ 2. Vitamin B1
 - ☐ 3. Vitamin B3
 - ☐ 4. Vitamin B12

Question ID : 239087171
Status : Answered
Chosen Option : 2

Q.19 Which of the following is the Largest Cricket Stadium in the world?

- Ans
- ☒ 1. Melbourne Cricket Ground
 - ☐ 2. Eden Gardens
 - ☐ 3. Perth Stadium
 - ☐ 4. Lord's Cricket Stadium

Question ID : 239087159
Status : Answered
Chosen Option : 1

Q.20 Gurjit Kaur is associated with which of the following sport?

- Ans
- ☐ 1. Wrestling
 - ☐ 2. Weight Lifting
 - ☐ 3. Swimming
 - ☒ 4. Hockey

Question ID : 239087160
Status : Not Answered
Chosen Option : --

Q.21 Which of the following Noble gas is used as anesthetic agent?

- Ans ☒ 1. Xenon
☐ 2. Neon
☐ 3. Helium
☐ 4. Argon

Question ID : 239087174
Status : Answered
Chosen Option : 3

Q.22 The President of 19th session of the Indian National Congress was _____.

- Ans ☐ 1. Sir Henry Cotton
☐ 2. Gopal Krishan Gokhale
☐ 3. Surendrnath Banerjee
☒ 4. Lal Mohan Ghosh

Question ID : 239087168
Status : Not Answered
Chosen Option : --

Q.23 Dugong is the key fauna of which Biosphere Reserve?

- Ans ☐ 1. Great Runn of Kutch
☐ 2. Simlipal
☐ 3. Manas
☒ 4. Gulf of Mannar

Question ID : 239087175
Status : Not Answered
Chosen Option : --

Q.24 Which symbiotic bacterium is responsible for nitrogen fixation?

- Ans ☐ 1. Pseudomonas
☐ 2. Azotobacter
☐ 3. Lactobacillus
☒ 4. Rhizobium

Question ID : 239087170
Status : Answered
Chosen Option : 3

Q.25 Who was the writer of 'Ain-i-Akbari'?

- Ans ☒ 1. Abul Fazl
☐ 2. Bhimsen
☐ 3. Khafi Khan
☐ 4. Akbar

Question ID : 239087178
Status : Not Answered
Chosen Option : --