

Section : General English

Q.1 Select the most appropriate antonym of the given word.  
Hidden

- Ans
- 1. Apparent
  - 2. Covered
  - 3. Veiled
  - 4. Concealed

Question ID : 239087121  
Status : Answered  
Chosen Option : 1

Q.2 Select the most appropriate option to substitute the underlined segment in the given sentence. If there is no need to substitute it, select No Improvement.  
The terrorist was arrested for the first time in December, 2001.

- Ans
- 1. for one times
  - 2. in the first time
  - 3. for first timing
  - 4. No Improvement

Question ID : 239087110  
Status : Answered  
Chosen Option : 4

**Comprehension:**

In the following passage some words have been deleted. Fill in the blanks with the help of the alternatives given. Select the most appropriate option for each blank.

Obesity is a condition where the body stores excess fat leading to a considerable 1.\_\_\_\_ in the body weight. It is increasing 2.\_\_\_\_ a fast pace in our country. It has 3.\_\_\_\_ adverse health effects and can even 4.\_\_\_\_ to pre-mature death. The basic cause of obesity is 5.\_\_\_\_ imbalance between energy intake and energy expenditure.

**SubQuestion No : 3**

Q.3 Select the most appropriate option for blank No. 1.

- Ans
- 1. raise
  - 2. decrease
  - 3. increase
  - 4. decline

Question ID : 239087114  
Status : Answered

**Comprehension:**

In the following passage some words have been deleted. Fill in the blanks with the help of the alternatives given. Select the most appropriate option for each blank.

Obesity is a condition where the body stores excess fat leading to a considerable 1.\_\_\_\_ in the body weight. It is increasing 2.\_\_\_\_ a fast pace in our country. It has 3.\_\_\_\_ adverse health effects and can even 4.\_\_\_\_ to pre-mature death. The basic cause of obesity is 5.\_\_\_\_ imbalance between energy intake and energy expenditure.

**SubQuestion No : 4**

**Q.4 Select the most appropriate option for blank No. 2.**

- Ans
- 1. by
  - 2. at
  - 3. on
  - 4. with

Question ID : 239087115

Status : Answered

Chosen Option : 2

**Comprehension:**

In the following passage some words have been deleted. Fill in the blanks with the help of the alternatives given. Select the most appropriate option for each blank.

Obesity is a condition where the body stores excess fat leading to a considerable 1.\_\_\_\_ in the body weight. It is increasing 2.\_\_\_\_ a fast pace in our country. It has 3.\_\_\_\_ adverse health effects and can even 4.\_\_\_\_ to pre-mature death. The basic cause of obesity is 5.\_\_\_\_ imbalance between energy intake and energy expenditure.

**SubQuestion No : 5**

**Q.5 Select the most appropriate option for blank No. 3.**

- Ans
- 1. little
  - 2. few
  - 3. many
  - 4. much

Question ID : 239087116

Status : Answered

Chosen Option : 3

**Comprehension:**

In the following passage some words have been deleted. Fill in the blanks with the help of the alternatives given. Select the most appropriate option for each blank.

Obesity is a condition where the body stores excess fat leading to a considerable 1.\_\_\_\_ in the body weight. It is increasing 2.\_\_\_\_ a fast pace in our country. It has 3.\_\_\_\_ adverse health effects and can even 4.\_\_\_\_ to pre-mature death. The basic cause of obesity is 5.\_\_\_\_ imbalance between energy intake and energy expenditure.

**SubQuestion No : 6**

**Q.6 Select the most appropriate option for blank No. 4.**

- Ans
- 1. take
  - 2. start
  - 3. lead
  - 4. point

**Comprehension:**

In the following passage some words have been deleted. Fill in the blanks with the help of the alternatives given. Select the most appropriate option for each blank.

Obesity is a condition where the body stores excess fat leading to a considerable 1.\_\_\_\_ in the body weight. It is increasing 2.\_\_\_\_ a fast pace in our country. It has 3.\_\_\_\_ adverse health effects and can even 4.\_\_\_\_ to pre-mature death. The basic cause of obesity is 5.\_\_\_\_ imbalance between energy intake and energy expenditure.

**SubQuestion No : 7**

**Q.7 Select the most appropriate option for blank No. 5.**

- Ans
- 1. one
  - 2. no
  - 3. the
  - 4. a

**Q.8 Select the most appropriate option to substitute the underlined segment in the given sentence. If there is no need to substitute it, select No Improvement.**  
If he would tried he would have succeeded.

- Ans
- 1. was tried
  - 2. No Improvement
  - 3. had tried
  - 4. is tried

**Q.9 Select the most appropriate meaning of the given idiom.**  
**Come to light**

- Ans
- 1. To pry a secret
  - 2. To be well lit-up
  - 3. To be obscure
  - 4. To be known publicly

**Q.10 Select the most appropriate option to fill in the blank.**  
The little puppy was \_\_\_\_\_ by a speeding car.

- Ans
- 1. run over
  - 2. run at
  - 3. run away
  - 4. run into

Question ID : 239087129  
Status : Answered  
Chosen Option : 1

Q.11 Choose the most appropriate word that can substitute the given group of words.  
Group of singers

- Ans
- 1. Jury
  - 2. Council
  - 3. Orchestra
  - 4. Choir

Question ID : 239087125  
Status : Answered  
Chosen Option : 3

Q.12 Select the most appropriate synonym of the given word.  
Lavish

- Ans
- 1. Austere
  - 2. Simple
  - 3. Scarce
  - 4. Bountiful

Question ID : 239087119  
Status : Answered  
Chosen Option : 4

Q.13 Select the most appropriate meaning of the given idiom.  
Above one's head

- Ans
- 1. Overhead expenses
  - 2. To be very tall
  - 3. Beyond one's understanding
  - 4. Intimate and personal

Question ID : 239087124  
Status : Answered  
Chosen Option : 3

Q.14 Select the most appropriate option to fill in the blank.  
Teachers would like \_\_\_\_\_ a long holiday.

- Ans
- 1. having for
  - 2. have
  - 3. having been
  - 4. to have

Question ID : 239087112  
Status : Answered  
Chosen Option : 4

Q.15 Choose the most appropriate word that can substitute the given group of words.  
Full of criticism and mockery

Ans

- 1. Eulogy
- 2. Praise
- 3. Satire
- 4. Cliché

Question ID : 239087126  
Status : Answered  
Chosen Option : 3

Q.16 Select the most appropriate antonym of the given word.  
Goodwill

- Ans
- 1. Facility
  - 2. Insanity
  - 3. Felicity
  - 4. Hostility

Question ID : 239087122  
Status : Answered  
Chosen Option : 4

Q.17 Select the most appropriate option to substitute the underlined segment in the given sentence. If there is no need to substitute it, select No Improvement.  
Applications are invite to eligible candidates for the post of Vice Principal in a reputed school.

- Ans
- 1. inviting from
  - 2. invited by
  - 3. invited from
  - 4. No Improvement

Question ID : 239087109  
Status : Answered  
Chosen Option : 3

Q.18 Find the part of the given sentence that has an error in it. If there is no error, choose 'No error'.

Mukherjee is a famous politician who is love by most people. /No error

- Ans
- 1. Mukherjee is a
  - 2. No error
  - 3. is love by most people
  - 4. famous politician who

Question ID : 239087106  
Status : Answered  
Chosen Option : 3

Q.19 Choose the correctly spelt word.

- Ans
- 1. Allert
  - 2. Exceed
  - 3. Equipped
  - 4. Emfasize

Question ID : 239087128  
Status : Answered  
Chosen Option : 3

Q.20 Select the most appropriate option to fill in the blank.  
I congratulated him \_\_\_\_\_ his promotion.

- Ans
- 1. due to
  - 2. to
  - 3. on
  - 4. because of

Question ID : 239087111  
Status : Answered  
Chosen Option : 3

Q.21 Choose the correctly spelt word.

- Ans
- 1. Dilemma
  - 2. Dielema
  - 3. Dilema
  - 4. Dillema

Question ID : 239087127  
Status : Answered  
Chosen Option : 3

Q.22 Find the part of the given sentence that has an error in it. If there is no error, choose 'No error'.

The doctor with his interns are due to arrive here by noon. /No error

- Ans
- 1. The doctor with his
  - 2. interns are due
  - 3. No error
  - 4. to arrive here by noon

Question ID : 239087107  
Status : Answered  
Chosen Option : 2

Q.23 Find the part of the given sentence that has an error in it. If there is no error, choose 'No error'.

The people in my office are smarter than other offices. /No error

- Ans
- 1. smarter than other offices
  - 2. my office are
  - 3. No error
  - 4. The people in

Question ID : 239087105  
Status : Answered  
Chosen Option : 3

Q.24 Select the most appropriate option to fill in the blank.  
The wonderful performance of the maestro left the audience \_\_\_\_\_.

- Ans
- 1. puzzled
  - 2. entranced
  - 3. sleepy
  - 4. hungry

Question ID : 239087130  
Status : Answered  
Chosen Option : 2

Q.25 Select the most appropriate synonym of the given word.  
Accountable

- Ans
- 1. Unreliable
  - 2. Answerable
  - 3. Blameless
  - 4. Slack

Question ID : 239087120  
Status : Answered  
Chosen Option : 2

Section : General Intelligence & Reasoning

Q.1 In a certain code language, 'PAPER' is written as 'UFUJW'. What will be the code for 'MOURN' in that code language?

- Ans
- 1. SUAXT
  - 2. RTAWS
  - 3. RTZWS
  - 4. SUBXT

Question ID : 239087360  
Status : Answered  
Chosen Option : 3

Q.2 Which two signs need to be interchanged to make the following equation correct?

$$14 \times 16 \div 8 + 2 - 1 = 17$$

- Ans
- 1. + and ×
  - 2. × and -
  - 3. - and ÷
  - 4. + and ÷

Question ID : 239087373  
Status : Answered  
Chosen Option : 1

Q.3 Select the word pair in which the two words are related in the same way as the two words in the following word-pair.

Stale : Fresh

- Ans
- 1. Hot : Sun
  - 2. Create : Bat

✓ 3. Final : Initial

✗ 4. Deep : Hard

Question ID : 239087357  
Status : Answered  
Chosen Option : 3

Q.4 In a certain code language, 'ROGER' is written as '5' and 'MOULDS' is written as '6'. What will be the code for 'PIN' in that code language?

Ans ✗ 1. 8

✓ 2. 3

✗ 3. 2

✗ 4. 4

Question ID : 239087362  
Status : Answered  
Chosen Option : 2

Q.5 Study the given pattern carefully and select the number that can replace the question mark (?) in it.

3 4 9 17

7 2 5 15

6 8 3 ?

Ans ✓ 1. 18

✗ 2. 20

✗ 3. 16

✗ 4. 28

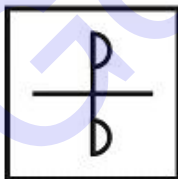
Question ID : 239087372  
Status : Answered  
Chosen Option : 1

Q.6 Select the option in which the given figure is embedded.

P

Ans

✓ 1.



✗ 2.






✗ 3.



✗ 4.



Question ID : 239087377

Status : Answered

Chosen Option : 1

Q.7 Six chairs labelled J, K, P, R, S and T are kept one above the other (not necessarily in the same order). R is above only P and S. There are four chairs between J and S. K is three places above P. If we arrange these chairs in alphabetical order from top to bottom, then the position of how many chairs (excluding J) will be changed?

Ans ✗ 1. 2

✓ 2. 3

✗ 3. 0

✗ 4. 1

Question ID : 239087366

Status : Answered


Chosen Option : 2

Q.8 Identify the diagram that best represents the relationship between the given classes.

Cars, Bikes, Trucks

Ans

✓ 1.



✗ 2.



✗ 3.



✗ 4.



Question ID : 239087380

Status : Answered

Chosen Option : 1

Q.9

Study the given pattern carefully and select the figure that will complete the pattern given in the question figure.



Ans

- 1.
- 2.
- 3.
- 4.

Question ID : 239087376  
 Status : Answered  
 Chosen Option : 1

Q.10 In a certain code language, 'ALERT' is written as '11251820' and 'HERD' is written as '85184'. What will be the code for 'CLOTH' in that code language?

- 1. 38152014
- 2. 31215218
- 3. 31215208
- 4. 31512207

Question ID : 239087363  
 Status : Answered  
 Chosen Option : 3

Q.11 Select the correct mirror image of the given figure when the mirror is placed at line AB.



Ans

- 1.
- 2.

✓ 3.



✗ 4.



Question ID : 239087378  
Status : Answered  
Chosen Option : 3

Q.12 If + is interchanged with - , then what will be the value of the following equation?

$$72 - 91 \div 13 \times 12 + 6 = ?$$

- Ans
- ✗ 1. 140
  - ✗ 2. 156
  - ✗ 3. 144
  - ✓ 4. 150

Question ID : 239087374  
Status : Answered  
Chosen Option : 4

Q.13 Read the given statements and conclusions carefully. Assuming that the information given in the statements is true, even if it appears to be at variance with commonly known facts, decide which of the given conclusions logically follow(s) from the statements.

Statements:

- I. Some bikes are cars.
- II. Some cars are trucks.

Conclusions:

- I. Some trucks are bikes.
- II. No bike is a truck.

- Ans
- ✓ 1. Either conclusion I or II follows.
  - ✗ 2. Only conclusion II follows.
  - ✗ 3. Only conclusion I follows.
  - ✗ 4. Both conclusions I and II follow.

Question ID : 239087367  
Status : Answered  
Chosen Option : 1

Q.14 Select the number that can replace the question mark (?) in the following series.

72, 69, 64, ?, 48

- Ans
- ✓ 1. 57
  - ✗ 2. 54
  - ✗ 3. 59

 4.55

Question ID : 239087370  
Status : Answered  
Chosen Option : 1

Q.15 Six persons, L, M, N, P, Q and R, are sitting in a row facing towards the north (not necessarily in the same order). There are three persons between P and M. P is not at any of the ends. There are three persons between L and Q. N is to the left of R. L is at one of the ends. M is to the right of P. How many person are sitting to the left of N?

- Ans
-  1. 4
  -  2. 1
  -  3. 3
  -  4. 2

Question ID : 239087365  
Status : Answered  
Chosen Option : 4


Q.16 Select the option that is related to the third number in the same way as the second number is related to the first number.

101 : 10202 :: 107 : ?

- Ans
-  1. 11447
  -  2. 11450
  -  3. 12449
  -  4. 12550

Question ID : 239087371  
Status : Answered  
Chosen Option : 2

Q.17 In a certain code language, 'EMPTYD' is written as 'CJNQWA'. What will be the code for 'VACANT' in that code language?

- Ans
-  1. TXAXLQ
  -  2. UYBYMR
  -  3. UYAMYR
  -  4. TXBXLQ

Question ID : 239087361  
Status : Answered  
Chosen Option : 1

Q.18 Select the number that can replace the question mark (?) in the following series.

37, 33, 29, 25, ?

- Ans
-  1. 19
  -  2. 21
  -  3. 20
  -  4. 22

Question ID : 239087369

Q.19 Select the option that is related to the third term in the same way as the second term is related to the first term.

Touch : Push :: Speak : ?

- Ans
- 1. Shout
  - 2. Crime
  - 3. Error
  - 4. Sad

Question ID : 239087358

Status : Answered

Chosen Option : 1

Q.20 Select the option that is related to the third letter-cluster in the same way as the second letter-cluster is related to the first letter-cluster.

RAT : UXW :: TOG : ?

- Ans
- 1. XLC
  - 2. WLC
  - 3. XMD
  - 4. WLJ

Question ID : 239087359

Status : Answered

Chosen Option : 4

Q.21 Select the figure that will come next in the following series.

L R V J N T	V L T R J N	T V N L R J	N T J V L R	?
-------------------	-------------------	-------------------	-------------------	---

Ans

- 1. 

J
N R
T V L
- 2. 

N
J R
T V L
- 3. 

R
J N
T V L

4.



Question ID : 239087375

Status : Answered

Chosen Option : 1

Q.22 Select the letter-cluster that can replace the question mark (?) in the following series.

RAB, TDG, VGL, ?, ZMV

Ans  1. XJQ

2. YLR

3. XKQ

4. YKR

Question ID : 239087356

Status : Answered

Chosen Option : 1

Q.23 Five girls, D, L, N, O and Q, are sitting in a row facing towards the south (not necessarily in the same order). L is second to the right of O. Q is to the immediate right of D. Two girls are between Q and N. How many girls are sitting to the right of D?

Ans  1. 1

2. 3

3. 2

4. 4

Question ID : 239087364

Status : Answered

Chosen Option : 1

Q.24 The sequence of folding a piece of paper and the manner in which the folded paper has been cut is shown in the following figures. How would this paper look when unfolded?




Ans

1.




2.



3.



4.



Question ID : 239087379

Status : Answered

Chosen Option : 2

Q.25 Read the given statements and conclusions carefully. Assuming that the information given in the statements is true, even if it appears to be at variance with commonly known facts, decide which of the given conclusions logically follow(s) from the statements.

Statements:

I. All T are M.

II. No T is P.

Conclusions:

I. No P is M.

II. Some M are T.

Ans  1. Only conclusion II follows.

2. None of the conclusions follows.

3. Only conclusion I follows.

4. Both conclusions I and II follow.

Question ID : 239087368

Status : Answered

Chosen Option : 1

Section : Numerical Aptitude

Q.1 The sum of ₹500 becomes ₹600 in 2 years at certain rate of simple interest. If the rate of interest is halved, then what amount will ₹500 give in 2 years?

Ans  1. ₹520

2. ₹560

3. ₹550

4. ₹500

Question ID : 239087494

Status : Answered

Chosen Option : 3

Q.2 If  $x : y : z = 3 : 4 : 5$  and  $x + y + z = 96$ , then what is the value of  $z$ ?

Ans  1. 42

2. 32

3. 36

4. 40

Question ID : 239087491

Status : Answered

Chosen Option : 4

Q.3

What is the value of

$$36 \div 8 \times 4 + 2 \div 4 - 1 + 5 \text{ of } 3 \div (4 \times 2 - 3) - 3 ?$$

- Ans
- 1. 16
  - 2. 18
  - 3.  $\frac{35}{2}$
  - 4.  $\frac{31}{2}$

Question ID : 239087482  
 Status : Answered  
 Chosen Option : 3

Q.4 The radius of a sphere is equal to the radius of the base as well as the height of a right circular cylinder. What is the ratio of surface area of sphere and curved surface area of cylinder?

- Ans
- 1. 2 : 3
  - 2. 1 : 2
  - 3. 2 : 1
  - 4. 1 : 1

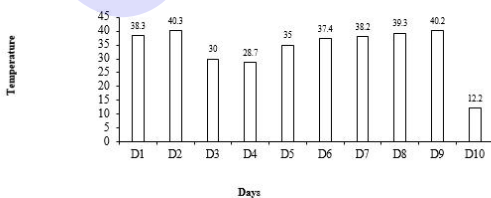
Question ID : 239087502  
 Status : Answered  
 Chosen Option : 4

Q.5 Pipe A can completely fill an empty tank in 11 hours. Pipe B can empty the same completely filled tank in 15 hours. If they are opened together, in how much time the empty tank will get filled?

- Ans
- 1. 39 hours 15 minutes
  - 2. 49 hours 45 minutes
  - 3. 41 hours 15 minutes
  - 4. 47 hours 30 minutes

Question ID : 239087497  
 Status : Answered  
 Chosen Option : 3

Q.6 The Bar graph given below presents the maximum temperature (in °C) of a city for 10 different days spread over several months.



What is the difference (in degree Celsius) between the highest and the lowest recorded maximum temperatures from the data given for the ten days?

- Ans
- 1. 28.1



2. 28.0

3. 26.1

4. 27.1

Question ID : 239087505

Status : Answered

Chosen Option : 1

**Q.7** A sold an article for ₹1495 at a profit of 15%. He purchased another article having cost price equal to the previous article. He sold this new article at a profit of 10%. How much total profit has A earned?

**Ans**  1. ₹325

2. ₹375

3. ₹425

4. ₹450

Question ID : 239087490

Status : Answered

Chosen Option : 1

**Q.8** A is the smallest three digit number which when divided by 3, 4 and 5 leaves remainders 1, 2 and 3 respectively. What is the sum of the digits of A?

**Ans**  1. 10

2. 6

3. 11

4. 8

Question ID : 239087481

Status : Not Answered

Chosen Option : --

**Q.9** If  $A = 7 \times 3 \div (2 + 4) + 4 - 2$ ,

$B = 3 \div 6 \times 4 + 2 - 2$  of 3 and  $C = 6 \div 2 + 4 \times 3 - 2$ . What is the value of  $(A + B - C)$ ?

**Ans**  1.  $\frac{19}{2}$

2.  $\frac{-16}{3}$

3.  $\frac{16}{3}$

4.  $\frac{-19}{2}$

Question ID : 239087483

Status : Answered

Chosen Option : 4

**Q.10** The average age of a group of 36 students is 23 years. Four students with average age 22 years leave the group. What is the average age in years (correct up to one decimal place) of the new group?

**Ans**  1. 24.4

- 2. 23.8
- 3. 23.1
- 4. 24.5

Question ID : 239087485  
 Status : Answered  
 Chosen Option : 3

**Q.11** The ratio of marked price to selling price of an article is 12 : 7. What is the discount percentage?

- Ans**
- 1. 42.33
  - 2. 41.67
  - 3. 39.33
  - 4. 37.5

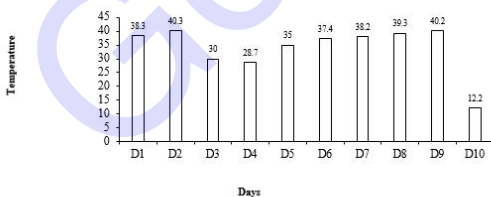
Question ID : 239087486  
 Status : Answered  
 Chosen Option : 2

**Q.12** A alone can do a piece of work in 10 days. A and B together can do the same piece of work in  $20/3$  days. A, B and C together can do the same piece of work in  $40/7$  days. In how many days can B and C together do the same piece of work?

- Ans**
- 1.  $\frac{44}{7}$
  - 2.  $\frac{40}{3}$
  - 3.  $\frac{44}{3}$
  - 4.  $\frac{20}{3}$

Question ID : 239087496  
 Status : Answered  
 Chosen Option : 2

**Q.13** The Bar graph given below presents the maximum temperature (in °C) of a city for 10 different days spread over several months.



What is the average maximum temperature of the city per day for the given ten days?

- Ans**
- 1. 33.96 °C
  - 2. 32.96 °C
  - 3. 35.96 °C
  - 4. 44.96 °C

Question ID : 239087503

**Q.14** A sum of money is invested at compound interest, which is compounded annually. The sum grows to ₹1000 after three years, and ₹1100 after four years. What is the rate of interest per annum?

- Ans**
- 1. 10%
  - 2. 15%
  - 3. 12.5%
  - 4. 20%

Question ID : 239087495

Status : Answered

Chosen Option : 1

**Q.15** A travels a certain distance with three different speeds; first 3 km with a speed of 9 km/h, second 6 km with a speed of 15 km/h, and third 9 km with a speed of 18 km/h. What is the average speed of A for the whole journey?

- Ans**
- 1.  $\frac{460}{37}$  km/h
  - 2.  $\frac{540}{37}$  km/h
  - 3.  $\frac{660}{37}$  km/h
  - 4.  $\frac{480}{37}$  km/h

Question ID : 239087498

Status : Answered

Chosen Option : 2

**Q.16** There are 150 students in a school. If the ratio of number of boys to girls is 4 : 1, then what is the mean proportional between the number of boys and girls in the school?

- Ans**
- 1. 40
  - 2. 30
  - 3. 60
  - 4. 50

Question ID : 239087492

Status : Marked For Review

Chosen Option : 1

**Q.17** A train crosses a 900 metres long platform in 300 seconds. If the length of train is 600 metres, then in how much time does it cross a stationary pole?

- Ans**
- 1. 2 minutes
  - 2. 3 minutes
  - 3. 5 minutes
  - 4. 4 minutes

Question ID : 239087499

Status : Answered

**Q.18** In 60 litres mixture of milk and water the ratio of volumes of milk and water is 3 : 2. If we want the ratio of the volumes of milk and water to be 1 : 1, then how much water should be added to the mixture?

- Ans
- 1. 10 litres
  - 2. 12 litres
  - 3. 16 litres
  - 4. 14 litres

Question ID : 239087493

Status : Answered

Chosen Option : 2

**Q.19** What is the mode of the given data?

4, 3, 4, 3, 2, 2, 2, 5, 5, 3, 4, 6, 4, 3, 3

- Ans
- 1. 2
  - 2. 4
  - 3. 3
  - 4. 5

Question ID : 239087487

Status : Answered

Chosen Option : 3

**Q.20** Side of a square is first increased by 10% and then decreased by 20%. What is the overall percentage change in area?

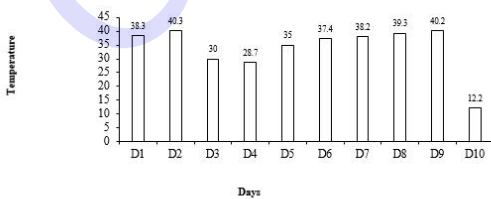
- Ans
- 1. Decrease by 22.56%
  - 2. Increase by 18.24%
  - 3. Increase by 22.56%
  - 4. Decrease by 18.24%

Question ID : 239087488

Status : Answered

Chosen Option : 4

**Q.21** The Bar graph given below presents the maximum temperature (in °C) of a city for 10 different days spread over several months.



The temperature on D5 is how much percentage more than the temperature on D3?

- Ans
- 1. 16.67%
  - 2. 24.57%
  - 3. 23.01%
  - 4. 21.07%

Question ID : 239087504  
Status : Answered  
Chosen Option : 1

Q.22 Average of a, b and c is 9. Average of b and c is 10. What is the value of a?

- Ans  1. 7  
 2. 8  
 3. 6  
 4. 9

Question ID : 239087484  
Status : Answered  
Chosen Option : 1

Q.23 The diameter of a solid hemisphere is 35 cm. What is its total surface area?

(Take  $\pi = \frac{22}{7}$ )

- Ans  1. 3163 cm<sup>2</sup>  
 2. 2981 cm<sup>2</sup>  
 3. 2887.5 cm<sup>2</sup>  
 4. 2198.5 cm<sup>2</sup>

Question ID : 239087500  
Status : Answered  
Chosen Option : 3

Q.24 The length of a cuboid is twice its breadth and its height is half of its breadth. If the height of the cuboid is 2 cm, then what is the edge of a cube having the same volume as that of the cuboid?

- Ans  1. 6.4 cm  
 2. 8 cm  
 3. 4 cm  
 4. 7.2 cm

Question ID : 239087501  
Status : Not Answered  
Chosen Option : --

Q.25 The cost prices of articles A and B are ₹1200 and ₹1600 respectively. The selling price of article A is ₹1380 and the total profit on selling both the articles is 25%. What is the profit percentage on selling of article B?

- Ans  1. 27.5  
 2. 32.5  
 3. 29.5  
 4. 35.5

Question ID : 239087489  
Status : Not Answered  
Chosen Option : --

Section : General awareness

Q.1 Which of the following is NOT matched correctly?

- Ans
- 1. Kuchipudi - Andhra Pradesh
  - 2. Mohiniattam - Odisha
  - 3. Yakshagana - Karnataka
  - 4. Garba - Gujarat

Question ID : 239087233  
Status : Answered  
Chosen Option : 2

Q.2 Which of the following newspapers was edited by Dadabhai Naoroji?

- Ans
- 1. Mahratta
  - 2. Samvad Kaumudi
  - 3. Rast Goftar
  - 4. Shom Prakash

Question ID : 239087253  
Status : Answered  
Chosen Option : 2

Q.3 The book 'Every child matters' is written by:

- Ans
- 1. Chetan Bhagat
  - 2. Jawaharlal Nehru
  - 3. Arun Shauri
  - 4. Kailash Satyarthi

Question ID : 239087236  
Status : Answered  
Chosen Option : 4

Q.4 R. Pragganandhaa relates to which game?

- Ans
- 1. Golf
  - 2. Tennis
  - 3. Badminton
  - 4. Chess

Question ID : 239087235  
Status : Answered  
Chosen Option : 4

Q.5 Which of the following rivers is NOT an east flowing river?

- Ans
- 1. Vamsadhara
  - 2. Mahi
  - 3. Subarnarekha
  - 4. Vaigai

Question ID : 239087245

Status : **Not Attempted and Marked For Review**

Chosen Option : --

Q.6 Who is the Slovakia's first female President?

- Ans  1. Zuzana Caputova  
 2. Jerrie Mock  
 3. Betty Miller  
 4. Valentina Tereshkova

Question ID : 239087237

Status : **Answered**

Chosen Option : 1

Q.7 According to 2011 census which of the following state has the largest rural population?

- Ans  1. Madhya Pradesh  
 2. Uttar Pradesh  
 3. Punjab  
 4. Maharashtra

Question ID : 239087239

Status : **Answered**

Chosen Option : 2

Q.8 The \_\_\_\_\_ is vested with the responsibility of conducting monetary policy.

- Ans  1. Different Banks  
 2. Reserve Bank of India  
 3. SEBI  
 4. Central Government

Question ID : 239087241

Status : **Answered**

Chosen Option : 2

Q.9 The SI unit of power of lens is:

- Ans  1. kWh  
 2. Joule  
 3. Dioptre  
 4. Watt


Question ID : 239087247

Status : **Answered**

Chosen Option : 3

Q.10 Which of the following was the first fort by English East India Company in India?

- Ans  1. Fort William  
 2. Fort St. George  
 3. Masulipatnam

 4. Sewri Fort

Question ID : 239087255  
Status : Not Answered  
Chosen Option : --

Q.11 The launch vehicle of Mars Orbiter Mission was:

- Ans  1. PSLV C-45  
 2. PSLV C-42  
 3. PSLV C-25  
 4. PSLV C-46

Question ID : 239087249  
Status : Answered  
Chosen Option : 2

Q.12 Which of the following state of India has the longest coastline?

- Ans  1. Maharashtra  
 2. Odisha  
 3. Kerala  
 4. Gujarat




Question ID : 239087252  
Status : Answered  
Chosen Option : 4

Q.13 The National Diamond Institute is located at:

- Ans  1. Vadodara  
 2. Surat  
 3. Vapi  
 4. Gandhinagar

Question ID : 239087251  
Status : Answered  
Chosen Option : 2

Q.14 Which of the following is a secondary pollutant?

- Ans  1. Carbon monoxide  
 2. Smog  
 3. Carbon dioxide  
 4. Fly Ash

Question ID : 239087248  
Status : Answered  
Chosen Option : 4

Q.15 The invention of crescograph is associated to which of the following scientists of India?

- Ans  1. Homi J Bhabha  
 2. Meghnad Saha



3. Satyendranath Bose

4. Jagdishchandra Bose

Question ID : 239087246

Status : Not Answered

Chosen Option : --

Q.16 Which of the following statements about the Lok Sabha is NOT correct?

- Ans
- 1. A money bill can be introduced only in the Lok Sabha
  - 2. No-confidence motion against the Council of Ministers can only be moved in Lok Sabha
  - 3. The Union Council of Ministers is collectively responsible to the Lok Sabha
  - 4. If the question arises whether a bill is a money bill or not, the decision of the leader of the opposition shall be final

Question ID : 239087244

Status : Answered

Chosen Option : 4

Q.17 How many times President has declared National emergency in India?

- Ans
- 1. Four times
  - 2. Three times
  - 3. Two times
  - 4. Only once

Question ID : 239087243

Status : Not Answered

Chosen Option : --

Q.18 Who won men's singles title at the 2019 Australian Open?

- Ans
- 1. Roger Federar
  - 2. Andy Murray
  - 3. Novak Djokovic
  - 4. Rafael Nadal

Question ID : 239087234

Status : Answered

Chosen Option : 3

Q.19 As of June 2019, who is the Minister of Jal Shakti?

- Ans
- 1. Mahendra Nath Pandey
  - 2. Prakash Javadekar
  - 3. Gajendra Singh Shekhawat
  - 4. Mukhtar Abbas Naqvi

Question ID : 239087242

Status : Answered

Chosen Option : 3

Q.20 Which of the following is NOT a factor of production?

- Ans
- 1. Tax
  - 2. Capital
  - 3. Labour
  - 4. Land

Question ID : 239087240  
Status : Answered  
Chosen Option : 1

Q.21 Autotrophic mode of nutrition requires:

- Ans
- 1. Methane
  - 2. Carbon dioxide, Water, Chlorophyll and Sunlight
  - 3. Carbon monoxide and Water
  - 4. Chlorophyll and Oxygen

Question ID : 239087250  
Status : Answered  
Chosen Option : 2

Q.22 Maand folk music related to which state?

- Ans
- 1. Manipur
  - 2. Madhya Pradesh
  - 3. Uttar Pradesh
  - 4. Rajasthan

Question ID : 239087231  
Status : Answered  
Chosen Option : 3

Q.23 Congregational Singing of 'Shabad' is related to:

- Ans
- 1. Mahavir Jayanti
  - 2. Buddha Purnima
  - 3. Muharram
  - 4. Guru Purab

Question ID : 239087232  
Status : Answered  
Chosen Option : 3

Q.24 With reference to the National movement in India, when was the Poona Pact signed?

- Ans
- 1. 1923
  - 2. 1933
  - 3. 1922
  - 4. 1932

Question ID : 239087254  
Status : Answered  
Chosen Option : 1

Q.25 Who is the Femina Miss India 2019?

- Ans
- 1. Manushi Chillar
  - 2. Anukrati Vas
  - 3. Shreya Shankar
  - 4. Suman Rao

Question ID : 239087238  
Status : Answered  
Chosen Option : 4

GovtJobsAlert.In