

Section : General English

Q.1 Select the most appropriate synonym of the given word.

Rectify

- Ans  1. Bend  
 2. Amend  
 3. Raid  
 4. Folly

Question ID : 239087992  
Status : Answered  
Chosen Option : 2

Q.2 Select the most appropriate option to fill in the blank.

The teacher was very \_\_\_\_\_ in his subject.

- Ans  1. proficient  
 2. master  
 3. top  
 4. best

Question ID : 2390871001  
Status : Answered  
Chosen Option : 1

Q.3 Select the most appropriate option to fill in the blank.

Your answer book will be \_\_\_\_\_ by a computer.

- Ans  1. evaluated  
 2. replied  
 3. tested  
 4. submitted

Question ID : 2390871002  
Status : Answered  
Chosen Option : 1

Q.4 Choose the most appropriate word that can substitute the given group of words.

Killing of pests

- Ans  1. Pesticide

- 2. Suicide
- 3. Herbicide
- 4. Patricide

Question ID : 239087998  
Status : Answered  
Chosen Option : 1

Q.5 Select the most appropriate option to fill in the blank.

He is addicted to alcohol and exerts a bad influence \_\_\_\_ his family.

- Ans
- 1. on
  - 2. for
  - 3. about
  - 4. in

Question ID : 239087983  
Status : Answered  
Chosen Option : 1

Q.6 Find the part of the given sentence that has an error in it. If there is no error, choose 'No error'.

Her relatives were presented at the station to see her off. /No error

- Ans
- 1. presented at the station
  - 2. No error
  - 3. Her relatives were
  - 4. to see her off

Question ID : 239087977  
Status : Answered  
Chosen Option : 3

Q.7 Select the most appropriate option to substitute the underlined segment in the given sentence. If there is no need to substitute it, select No Improvement.

In his coming film the Spider-Man will be seen in European cities.

- Ans
- 1. was seen
  - 2. has seen
  - 3. had been seen
  - 4. No Improvement

Question ID : 239087982  
Status : Answered  
Chosen Option : 4

Q.8 Choose the correctly spelt word.

- Ans
- 1. Passengger
  - 2. Passenger
  - 3. Passinger
  - 4. Pasenger

Question ID : 2390871000  
Status : Answered  
Chosen Option : 2

Q.9 Select the most appropriate meaning of the given idiom.

To pick up the threads

- Ans  1. To restart from the previous closing point  
 2. To examine an issue seriously  
 3. Being received very warmly  
 4. At a short distance

Question ID : 239087996  
Status : Answered  
Chosen Option : 2

Q.10 Select the most appropriate option to fill in the blank.

Raja \_\_\_\_\_ the house before Hari got there.

- Ans  1. will leave  
 2. had left  
 3. leaves  
 4. left

Question ID : 239087984  
Status : Answered  
Chosen Option : 2

Q.11 Select the most appropriate synonym of the given word.

Profuse

- Ans  1. Thrifty  
 2. Scarce  
 3. Sparse  
 4. Aplenty

Question ID : 239087991  
Status : Answered  
Chosen Option : 4

Q.12 Select the most appropriate antonym of the given word.

Relaxed

- Ans  1. Calm  
 2. Tense  
 3. Arrogant  
 4. Peaceful

Question ID : 239087993  
Status : Answered  
Chosen Option : 2

Q.13 Find the part of the given sentence that has an error in it. If there is no error, choose 'No error'.

He has deposits all his money in banks. /No error

- Ans
- 1. No error
  - 2. money in banks
  - 3. He has deposits
  - 4. up all his

Question ID : 239087978  
Status : Answered  
Chosen Option : 3

Q.14 Select the most appropriate antonym of the given word.

Steep

- Ans
- 1. Narrow
  - 2. Shallow
  - 3. Rough
  - 4. Flat

Question ID : 239087994  
Status : Answered  
Chosen Option : 3

Q.15 Choose the most appropriate word that can substitute the given group of words.

A group of ships

- Ans
- 1. Bevy
  - 2. Fleet
  - 3. Suite
  - 4. Army

Question ID : 239087997  
Status : Answered  
Chosen Option : 2

Q.16 Select the most appropriate option to substitute the underlined segment in the given sentence. If there is no need to substitute it, select No Improvement.

Luckily we have got the few minutes to spare.

- Ans
- 1. a little
  - 2. a few
  - 3. No Improvement
  - 4. quite few

Question ID : 239087980  
Status : Answered  
Chosen Option : 2

Q.17 Select the most appropriate option to substitute the underlined segment in the given sentence. If there is no need to substitute it, select No Improvement.

Friends stand by each other on time of need.

- Ans  1. in times  
 2. No Improvement  
 3. of times  
 4. for time

Question ID : 239087981  
Status : Answered  
Chosen Option : 1

Q.18 Select the most appropriate meaning of the given idiom.

sail in the same boat

- Ans  1. be in the same situation as others  
 2. pay a very low price for something  
 3. be in heavy debt  
 4. go for a boat ride

Question ID : 239087995  
Status : Answered  
Chosen Option : 1

**Comprehension:**

In the following passage some words have been deleted. Fill in the blanks with the help of the alternatives given. Select the most appropriate option for each blank.

The Thane Municipal Transport (TMT) has seen a 6% drop (1)\_\_\_ passenger density after the Brihanmumbai Electric Supply and Transport (BEST) reduced (2)\_\_\_ bus fares recently. The drop, though small is enough to set the (3)\_\_\_ bells ringing. TMT plies nearly 300 buses and is already facing (4)\_\_\_ in managing regular schedules. The ticket cost cut by BEST (5)\_\_\_ TMT routes that overlap that of the BEST.

SubQuestion No : 19

Q.19 Select the most appropriate option for blank No. 1.

- Ans  1. of  
 2. in  
 3. from  
 4. on

Question ID : 239087986  
Status : Answered  
Chosen Option : 2

**Comprehension:**

In the following passage some words have been deleted. Fill in the blanks with the help of the alternatives given. Select the most appropriate option for each blank.

The Thane Municipal Transport (TMT) has seen a 6% drop (1)\_\_\_ passenger density after the Brihanmumbai Electric Supply and Transport (BEST) reduced (2)\_\_\_ bus fares recently. The drop, though small is enough to set the (3)\_\_\_ bells ringing. TMT plies nearly 300 buses and is already facing (4)\_\_\_ in managing regular schedules. The ticket cost cut by BEST (5)\_\_\_ TMT routes that overlap that of the BEST.

SubQuestion No : 20

Q.20 Select the most appropriate option for blank No. 2.

- Ans  1. his

2. it's

3. its

4. her

Question ID : 239087987

Status : Answered

Chosen Option : 3

**Comprehension:**

In the following passage some words have been deleted. Fill in the blanks with the help of the alternatives given. Select the most appropriate option for each blank.

The Thane Municipal Transport (TMT) has seen a 6% drop (1)\_\_\_ passenger density after the Brihanmumbai Electric Supply and Transport (BEST) reduced (2)\_\_\_ bus fares recently. The drop, though small is enough to set the (3)\_\_\_ bells ringing. TMT plies nearly 300 buses and is already facing (4)\_\_\_ in managing regular schedules. The ticket cost cut by BEST (5)\_\_\_ TMT routes that overlap that of the BEST.

**SubQuestion No : 21**

**Q.21 Select the most appropriate option for blank No. 3.**

Ans  1. church

2. clock-tower

3. temple

4. alarm

Question ID : 239087988

Status : Answered

Chosen Option : 4

**Comprehension:**

In the following passage some words have been deleted. Fill in the blanks with the help of the alternatives given. Select the most appropriate option for each blank.

The Thane Municipal Transport (TMT) has seen a 6% drop (1)\_\_\_ passenger density after the Brihanmumbai Electric Supply and Transport (BEST) reduced (2)\_\_\_ bus fares recently. The drop, though small is enough to set the (3)\_\_\_ bells ringing. TMT plies nearly 300 buses and is already facing (4)\_\_\_ in managing regular schedules. The ticket cost cut by BEST (5)\_\_\_ TMT routes that overlap that of the BEST.

**SubQuestion No : 22**

**Q.22 Select the most appropriate option for blank No. 4.**

Ans  1. facilities

2. consequences

3. differences

4. difficulties

Question ID : 239087989

Status : Answered

Chosen Option : 4

**Comprehension:**

In the following passage some words have been deleted. Fill in the blanks with the help of the alternatives given. Select the most appropriate option for each blank.

The Thane Municipal Transport (TMT) has seen a 6% drop (1)\_\_\_ passenger density after the Brihanmumbai Electric Supply and Transport (BEST) reduced (2)\_\_\_ bus fares recently. The drop, though small is enough to set the (3)\_\_\_ bells ringing. TMT plies nearly 300 buses and is already facing (4)\_\_\_ in managing regular schedules. The ticket cost cut by BEST (5)\_\_\_ TMT routes that overlap that of the BEST.

SubQuestion No : 23

Q.23 Select the most appropriate option for blank No. 5.

- Ans
- 1. impact
  - 2. has impacted
  - 3. has impacting
  - 4. impacting

Question ID : 239087990  
Status : Answered  
Chosen Option : 4

Q.24 Find the part of the given sentence that has an error in it. If there is no error, choose 'No error'.

He went up to her and asks her why she had insulted him. /No error

- Ans
- 1. He went up to her
  - 2. and asks her why
  - 3. No error
  - 4. she had insulted him

Question ID : 239087979  
Status : Answered  
Chosen Option : 2

Q.25 Choose the correctly spelt word.

- Ans
- 1. Noticeable
  - 2. Noticable
  - 3. Noteceable
  - 4. Nauticable

Question ID : 239087999  
Status : Answered  
Chosen Option : 1

Section : General Intelligence & Reasoning

Q.1 Study the given pattern carefully and select the figure that will complete the pattern given in the question figure.



- Ans
- 1.
  - 2.
  - 3.



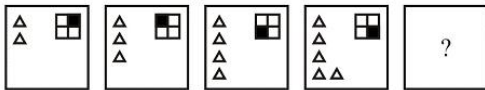
Question ID : 239087744  
 Status : Answered  
 Chosen Option : 1

Q.2 In a certain code language, 'MOTHER' is written as 'TOMREH'. What is the code for 'STORME' in that code language?

- Ans
- 1. OUSEMR
  - 2. OTSEMR
  - 3. MROTES
  - 4. EMROTS

Question ID : 239087729  
 Status : Answered  
 Chosen Option : 2

Q.3 In the following question, select the figure which can be placed at the sign of question mark (?) from the given alternatives.



Ans

- 1.
- 2.
- 3.
- 4.

Question ID : 239087743  
 Status : Answered  
 Chosen Option : 4

Q.4 Select the number that can replace the question mark (?) in the following series.

16, 49, 149, 450, 1354, ?

- Ans
- 1. 4068
  - 2. 4062



3. 4066

4. 4067

Question ID : 239087737  
Status : Answered  
Chosen Option : 4

Q.5 In a certain code language, 'ROCKS' is written as '82649', 'MENTR' is written as '01578'.  
What is the code for 'TROMN' in that code language?

Ans  1. 78205

2. 78203

3. 76205

4. 70581

Question ID : 239087731  
Status : Answered  
Chosen Option : 1

Q.6 In a certain code language, 'JAN' is written as '25', 'WED' is written as '32'. What is the code for 'SEP' in that code language?

Ans  1. 39

2. 38

3. 40

4. 41

Question ID : 239087730  
Status : Answered  
Chosen Option : 3

Q.7 Six cameras G, H, P, S, K and I are placed in a row facing towards north (Not necessarily in the same order). S is placed second to the left of I. H is placed second to the right of G. K is placed third to the left of G.  
Which of the following statement is correct about camera I?

Ans  1. I is between G and S

2. P is third to left of I

3. I is to the immediate left of G

4. I is not the immediate neighbour of H

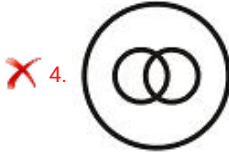
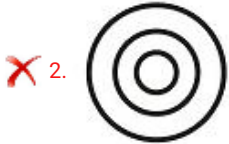
Question ID : 239087732  
Status : Answered  
Chosen Option : 2

Q.8 Identify the diagram that best represents the relationship among the given classes.

Pentagon, Hexagon, Figure

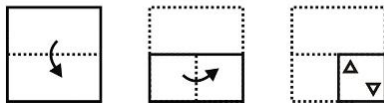
Ans



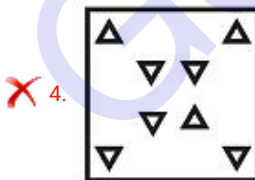
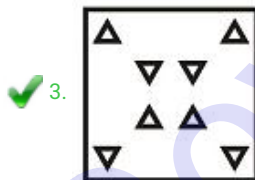
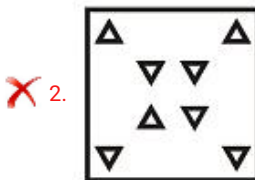
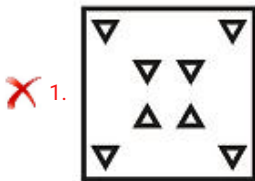


Question ID : 239087748  
 Status : Answered  
 Chosen Option : 1

Q.9 A piece of paper is folded and punched as shown below in the question figures. From the given answer figures, indicate how it will appear when opened?



Ans



Question ID : 239087747  
 Status : Answered  
 Chosen Option : 3

Q.10 Five boys J, K, L, M and T are standing in a queue one after the other (not necessarily in the same order). There is only one boy between K and J. There is only one boy between K and L. There are four boys behind J. T is three places ahead of L. How many boys are ahead of M?

Ans

1. 1

2. 3

3. 0

4. 2

Question ID : 239087734

Status : Answered

Chosen Option : 2

Q.11 A series is given with one term missing. Select the correct alternative from the given ones that will complete the series.

LP, MR, ?, OV, PX

Ans  1. MT

2. MU

3. NT

4. NU

Question ID : 239087724

Status : Answered

Chosen Option : 3

Q.12 Select the option that is related to the third number in the same way as the second number is related to the first number.

16 : 9 :: 36 : ?

Ans  1. 17

2. 23

3. 19

4. 11

Question ID : 239087739

Status : Not Answered

Chosen Option : --

Q.13 In a certain code language, 'DRAUGH' is written as 'LKYEVB'. What is the code for 'MAHTOS' in that code language?

Ans  1. XTYMFR

2. XTYMER

3. WSXLFQ

4. WSXLEQ

Question ID : 239087728

Status : Answered

Chosen Option : 4

Q.14 In the following question, select the related letters from the given alternatives.

JRM : DLG :: TNL : ?

Ans  1. NHF

2. MHF

3. NHE

4. MHE

Question ID : 239087727

Status : Answered

Chosen Option : 1

Q.15 Select the option that is related to the third term in the same way as the second term is related to the first term.

Hold : Tongs :: Dig : ?

Ans  1. Spade

2. Spoon

3. Gutter

4. Pen

Question ID : 239087725

Status : Answered

Chosen Option : 1

Q.16 By interchanging which two numbers, the value obtained after solving the given equation will be '13'?

$7 + 8 \div 4 \times 3$

Ans  1. 3 and 4

2. 8 and 3

3. 7 and 3

4. 8 and 4

Question ID : 239087741

Status : Answered

Chosen Option : 2

Q.17 In the following question, select the number which can be placed at the sign of question mark (?) from the given alternatives.

5 1 3

9 9 4

6 ? 7

29 22 18

Ans  1. 4

2. 6

3. 3

4. 5

Question ID : 239087740

Status : Not Answered

Chosen Option : --

Q.18 By interchanging which two signs the equation will be correct?

$6 + 9 \times 2 - 3 \div 4 = 8$

Ans  1.  $\div$  and  $\times$

2.  $-$  and  $+$

✓ 3. - and ÷

✗ 4. + and ÷

Question ID : 239087742  
 Status : Answered  
 Chosen Option : 3

**Q.19** In the following question below are given some statements followed by some conclusions based on those statements. Taking the given statements to be true even if they seem to be at variance from commonly known facts. Read all the conclusions and then decide which of the given conclusion logically follows the given statements.

Statements:

- I. No T is L.
- II. All L are K.

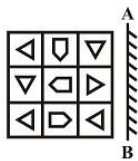
Conclusions:

- I. Some K are L.
- II. Some K are T.
- III. No K is L.

- Ans
- ✗ 1. Both conclusion II and III follows
  - ✓ 2. Only conclusion I follows
  - ✗ 3. Only conclusion II follows
  - ✗ 4. Neither conclusion follow

Question ID : 239087736  
 Status : Answered  
 Chosen Option : 2


**Q.20** If a mirror is placed on the line AB, then which of the answer figures is the right image of the given figure?



Ans

- ✗ 1.
- ✗ 2.
- ✗ 3.

✓ 4.



Question ID : 239087746

Status : Answered

Chosen Option : 4

Q.21 Select the option that is related to the third term in the same way as the second term is related to the first term.

Rainbow : Sky :: Tsunami : ?

Ans

✓ 1. Sea

✗ 2. Land

✗ 3. Pond

✗ 4. Atmosphere

Question ID : 239087726

Status : Answered

Chosen Option : 1

Q.22 In the following question below are given some statements followed by some conclusions based on those statements. Taking the given statements to be true even if they seem to be at variance from commonly known facts. Read all the conclusions and then decide which of the given conclusion logically follows the given statements.

Statements:

I. Some numbers are letters.

II. No letter is water.

Conclusions:

I. Some water are numbers.

II. Some letters are number.

III. All letters are water.

Ans

✓ 1. Only conclusion II follows

✗ 2. Both conclusion I and III follows

✗ 3. Only conclusion I follows

✗ 4. Neither conclusion follow

Question ID : 239087735

Status : Answered

Chosen Option : 1

Q.23 Six players C, E, G, I, K and M are standing in a row facing towards north (Not necessarily in the same order). Two players are standing between C and M. I is standing to the immediate left of C. E is standing second to the left of G. K is third to the right of G. Who is standing second to the right of I?

Ans

✗ 1. E

✗ 2. C

✗ 3. M

✓ 4. K

Question ID : 239087733

Status : Not Answered

Q.24 Select the number that can replace the question mark (?) in the following series.

12, 12, 24, 72, 288, ?

- Ans
- ✓ 1. 1440
  - ✗ 2. 1228
  - ✗ 3. 1448
  - ✗ 4. 1680

Question ID : 239087738  
Status : Answered  
Chosen Option : 1

Q.25 From the given answer figures, select the one in which the question figure is hidden/embedded. (Rotation not allowed)



Ans

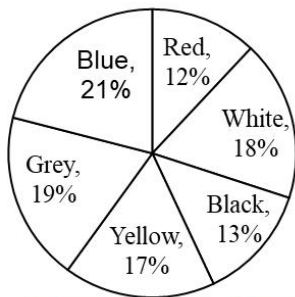
- ✓ 1.
- ✗ 2.
- ✗ 3.
- ✗ 4.

Question ID : 239087745  
Status : Answered  
Chosen Option : 1

Section : Numerical Aptitude

Q.1

The Pie chart given below presents the percentages of the number of motor cycles of different colours out of the total number of motor cycles, parked in an area. The central angles shown in the Pie chart are not as per any chosen scale.



What is the central angle (nearest to one degree) corresponding to the motor cycles of black colour?

- Ans
- 1. 44
  - 2. 47
  - 3. 46
  - 4. 45

Question ID : 239087873

Status : Answered

Chosen Option : 2

Q.2 The speed of a car is 36 km/h. How much time (in minutes) will a bus traveling at one-fifth of the speed of the car take to cover a distance of 900 m?

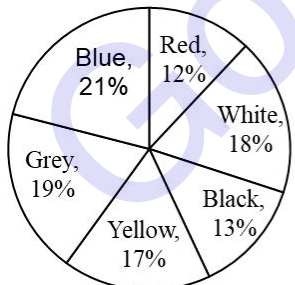
- Ans
- 1.  $8\frac{1}{2}$
  - 2.  $10\frac{1}{2}$
  - 3.  $7\frac{1}{2}$
  - 4.  $5\frac{1}{2}$

Question ID : 239087866

Status : Answered

Chosen Option : 3

Q.3 The Pie chart given below presents the percentages of the number of motor cycles of different colours out of the total number of motor cycles, parked in an area. The central angles shown in the Pie chart are not as per any chosen scale.



If the total number of motor cycles parked is 2300, the number having white colour is how much less than those having the blue colour?

- Ans
- 1. 63
  - 2. 72
  - 3. 69
  - 4. 66

Question ID : 239087872



Status : Answered  
Chosen Option : 3Q.4 If  $X : Y = 13 : 12$  and  $X - Y = 2$ , then what is value of  $2X + 3Y$ ?

- Ans
- 1. 144
  - 2. 124
  - 3. 120
  - 4. 136

Question ID : 239087860  
Status : Answered  
Chosen Option : 2

Q.5 What is the least number of four digits which is exactly divisible by 2, 4, 6 and 8?

- Ans
- 1. 1024
  - 2. 1008
  - 3. 1096
  - 4. 1016

Question ID : 239087849  
Status : Answered  
Chosen Option : 2

Q.6 The radii of a right circular cone and a right circular cylinder are in the ratio 2 : 3. If the ratio of the heights of the cone and the cylinder is 3 : 4, then what is the ratio of the volumes of the cone and the cylinder?

- Ans
- 1. 1 : 6
  - 2. 1 : 9
  - 3. 1 : 3
  - 4. 2 : 3

Question ID : 239087868  
Status : Answered  
Chosen Option : 2Q.7 If the height of an equilateral triangle is  $20\sqrt{3}$ cm, then what is its area (in  $\text{cm}^2$ )?

- Ans
- 1.  $\frac{1}{3} 400\sqrt{3}$
  - 2.  $\frac{1}{3} 800\sqrt{3}$
  - 3.  $\frac{400}{3}$
  - 4.  $\frac{800}{3}$

Question ID : 239087869  
Status : Answered  
Chosen Option : 2

Q.8 A train, 700 m long crosses a pole in 35 seconds. How much time does it take to cross a platform of length 740 m?

- Ans
- 1. 1 min 12 sec
  - 2. 1 min 20 sec
  - 3. 1 min 24 sec
  - 4. 1 min 30 sec

Question ID : 239087867  
Status : Answered  
Chosen Option : 1

Q.9 Average age of 9 men is 45 years. If age of one woman is included, then the average age becomes 44 years. What is the age of the woman?

- Ans
- 1. 30 years
  - 2. 35 years
  - 3. 44 years
  - 4. 40 years

Question ID : 239087853  
Status : Answered  
Chosen Option : 2

Q.10 Mohit is five times efficient as Rohit. If Mohit can complete a piece of work in 28 days less than Rohit, then in how many days can Rohit alone complete the same work?

- Ans
- 1. 35 days
  - 2. 45 days
  - 3. 40 days
  - 4. 32 days

Question ID : 239087864  
Status : Answered  
Chosen Option : 1

Q.11 A number is first increased by 40% and then it is increased by 30%. What is the net percentage increase?

- Ans
- 1. 70%
  - 2. 96%
  - 3. 82%
  - 4. 72%

Question ID : 239087856  
Status : Answered  
Chosen Option : 3

Q.12 What is the value of  $(6 \text{ of } 4 \div 16 \times 48) + 8 \times 4 + 2 \times 3 + 6 + 5(6 - 2)$  ?

- Ans
- 1. 57
  - 2. 63
  - 3. 67

X 4. 79

Question ID : 239087851  
Status : Answered  
Chosen Option : 1

Q.13 P sold an article to Q at a profit of 20%. Q sold the same article to R at a loss of 25%. R sold the same article to T at a profit of 50%. If P bought the article at ₹100, then at what price did T buy that article?

- Ans
- 1. ₹125
  - 2. ₹135
  - 3. ₹145
  - 4. ₹115

Question ID : 239087858  
Status : Answered  
Chosen Option : 3

Q.14 A trader marked up his articles 25% more than the cost price. If he offered a discount of 10%, then what will be his profit percentage?

- Ans
- 1. 25%
  - 2. 10%
  - 3. 37.5%
  - 4. 12.5%

Question ID : 239087854  
Status : Answered  
Chosen Option : 4

Q.15 Average of 50 numbers was calculated as 20 when three numbers, 26, 36 and 64 were wrongly read as 31, 46 and 59 respectively. What is the correct average?

- Ans
- 1. 24.4
  - 2. 19.8
  - 3. 26.2
  - 4. 20.2

Question ID : 239087852  
Status : Answered  
Chosen Option : 2

Q.16 If the selling price of an article is 25% of its cost price, then what will be the loss percentage?

- Ans
- 1. 75%
  - 2. 50%
  - 3. 60%
  - 4. 25%

Question ID : 239087857  
Status : Answered  
Chosen Option : 1

Q.17 ₹480 is invested at simple interest. It becomes ₹520 after 20 months. What is the interest rate per annum?

- Ans
- 1. 4%
  - 2. 8%
  - 3. 6%
  - 4. 5%

Question ID : 239087862  
 Status : Answered  
 Chosen Option : 4

**Q.18** The monthly incomes of A and B are ₹12000 and ₹15000 respectively. The monthly expenditure of A is ₹8000. If the ratio of the monthly expenditures of A and B is 2 : 3, then what is the sum of their monthly savings?

- Ans
- 1. ₹7000
  - 2. ₹5000
  - 3. ₹6000
  - 4. ₹8000

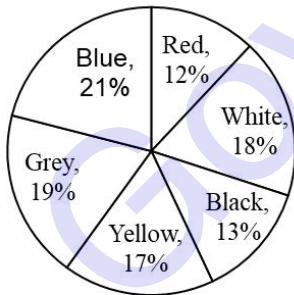
Question ID : 239087861  
 Status : Answered  
 Chosen Option : 1

**Q.19** A sum of ₹2400 becomes ₹3600 in 6 years at a certain rate of compound interest (compounded annually). What will be the amount after 12 years at the same rate of interest?

- Ans
- 1. ₹4800
  - 2. ₹4500
  - 3. ₹5400
  - 4. ₹6000

Question ID : 239087863  
 Status : Answered  
 Chosen Option : 3

**Q.20** The Pie chart given below presents the percentages of the number of motor cycles of different colours out of the total number of motor cycles, parked in an area. The central angles shown in the Pie chart are not as per any chosen scale.



If the total number of motor cycles parked is 2300, then what is the number of red colour motor cycles out of them?

- Ans
- 1. 284
  - 2. 280
  - 3. 288
  - 4. 276

Question ID : 239087871  
 Status : Answered  
 Chosen Option : 4

**Q.21** The ratio of the ages of two persons is 3 : 4. If the age of one of them is greater than the other by 8 years, then what is the sum of their ages?

- Ans**
- 1. 56 years
  - 2. 60 years
  - 3. 58 years
  - 4. 54 years

Question ID : 239087859  
 Status : Answered  
 Chosen Option : 1

**Q.22** Ravika alone can complete three-fifth of a work in 105 days. Mallika can complete one-third of work in 50 days. In how many days Ravika and Mallika working together, can complete  $\frac{26}{35}$  of the work?

- Ans**
- 1. 60 days
  - 2. 70 days
  - 3. 80 days
  - 4. 63 days

Question ID : 239087865  
 Status : Answered  
 Chosen Option : 1

**Q.23** The area of a rhombus is 300 cm<sup>2</sup>. If the length of one of the diagonals of the rhombus is 30 cm, then what is the length (in cm) of the second diagonal?

- Ans**
- 1. 20
  - 2. 30
  - 3. 25
  - 4. 10

Question ID : 239087870  
 Status : Answered  
 Chosen Option : 1

**Q.24** What is the value of  $\frac{3}{4} \div \left(\frac{1}{2} + \frac{1}{16}\right) + \frac{2}{3}$  of  $\frac{4}{9} \div \left(\frac{1}{3} - \frac{11}{81}\right) + \frac{1}{4} \times \frac{2}{3}$  ?

- Ans**
- 1. 2
  - 2. 1
  - 3. 4
  - 4. 3

Question ID : 239087850  
 Status : Answered  
 Chosen Option : 4

**Q.25**

The data below shows the number of batsmen having different batting averages.

Average	Number of batsmen
40 – 44	12
44 – 48	10
48 – 52	8
52 – 56	6
56 – 60	4

What is the mean batting average per batsman?

- Ans
- 1. 46
  - 2. 45
  - 3. 48
  - 4. 47

Question ID : 239087855  
Status : Answered  
Chosen Option : 3

Section : General awareness

Q.1 When did the Non-Cooperation Movement end?

- Ans
- 1. 1920
  - 2. 1930
  - 3. 1922
  - 4. 1925

Question ID : 239087622  
Status : Answered  
Chosen Option : 1

Q.2 'Rani ki vav' motif is present on which of the following currency notes?

- Ans
- 1. 50 Rupee Note
  - 2. 10 Rupee Note
  - 3. 200 Rupee Note
  - 4. 100 Rupee Note

Question ID : 239087609  
Status : Answered  
Chosen Option : 4

Q.3 'Dhansiri' is the tributary of which of the following river?

- Ans
- 1. Indus
  - 2. Narmada
  - 3. Ganga
  - 4. Brahmaputra

Question ID : 239087618  
Status : Answered

Q.4 'Equus caballus' is the scientific name of which of the following animals?

- Ans
- 1. Cheeta
  - 2. Horse
  - 3. Zebra
  - 4. Wild Ass

Question ID : 239087614  
Status : Answered  
Chosen Option : 2

Q.5 Which of the following state of India is main producer of Chromite?

- Ans
- 1. Goa
  - 2. Rajasthan
  - 3. Odisha
  - 4. Haryana

Question ID : 239087619  
Status : Answered  
Chosen Option : 3

Q.6 As of June 2019, who is the CEO of Central Bank of India?

- Ans
- 1. Shyam Srinivasan
  - 2. T. N. Manoharan
  - 3. P. V. Bharti
  - 4. Pallav Mohapatra

Question ID : 239087608  
Status : Not Answered  
Chosen Option : --

Q.7 Which of the following ions are responsible for hardness of water?

- Ans
- 1. Sodium and Magnesium ions
  - 2. Sodium and Calcium ions
  - 3. Potassium and Calcium ions
  - 4. Calcium and Magnesium ions

Question ID : 239087615  
Status : Answered  
Chosen Option : 4

Q.8 In which union territory of India, Bastille Day is celebrated?

- Ans
- 1. Puducherry
  - 2. Daman & Diu
  - 3. Dadra and Nagar Haveli
  - 4. Lakshadweep



Question ID : 239087601

Status : Not Answered

Chosen Option : --

Q.9 Who was the Mughal emperor during the 1857 revolt in India?

- Ans
- 1. Alamgir II
  - 2. Akbar Shah II
  - 3. Bahadur Shah II
  - 4. Shah Alam II

Question ID : 239087621

Status : Answered

Chosen Option : 3

Q.10 Which of the following is the traditional theatre of Jammu and Kashmir?

- Ans
- 1. Maach
  - 2. Jatra
  - 3. Bhand Pather
  - 4. Swaang

Question ID : 239087599

Status : Answered

Chosen Option : 3

Q.11 Which of the following is a Communicable disease?

- Ans
- 1. Diabetes
  - 2. Measles
  - 3. Asthma
  - 4. Alzheimer

Question ID : 239087617

Status : Answered

Chosen Option : 2

Q.12 'Kajri' folk song is related to which of the following state?

- Ans
- 1. Rajasthan
  - 2. Himachal Pradesh
  - 3. Maharashtra
  - 4. Uttar Pradesh

Question ID : 239087600

Status : Answered

Chosen Option : 4

Q.13 According to the Census 2011, what is the literacy rate of India?

- Ans
- 1. 0.644
  - 2. 0.7404
  - 3. 0.9401



✗ 4. 0.8402

Question ID : 239087607  
Status : Not Answered  
Chosen Option : --

Q.14 Dipa Karmakar is associated with which of the following sports?

- Ans
- ✗ 1. Golf
  - ✗ 2. Tennis
  - ✓ 3. Gymnastics
  - ✗ 4. Badminton

Question ID : 239087602  
Status : Answered  
Chosen Option : 3

Q.15 Which of the following award is given to a University for its all-round good performance in sports?

- Ans
- ✗ 1. Dronacharya Award
  - ✓ 2. Maulana Abul Kalam Azad Trophy
  - ✗ 3. Arjuna Award
  - ✗ 4. Dhyanchand Award

Question ID : 239087606  
Status : Answered  
Chosen Option : 1

Q.16 Who has been appointed as the Managing Director and Chief Financial Officer of World Bank in July 2019?

- Ans
- ✗ 1. Ravneet Gill
  - ✗ 2. P.S.Jaykumar
  - ✓ 3. Anshula Kant
  - ✗ 4. Amitabh Chaudhry

Question ID : 239087604  
Status : Not Answered  
Chosen Option : --

Q.17 Who among the following received Rajiv Gandhi Khel Ratna Award 2018 in weightlifting?

- Ans
- ✗ 1. Karnam Malleswari
  - ✗ 2. Swati Singh
  - ✓ 3. Mirabai Chanu
  - ✗ 4. Sanjita Chanu

Question ID : 239087603  
Status : Answered  
Chosen Option : 3

Q.18 Who is the writer of the book 'Thoughts on Pakistan'?

Ans

- 1. Dr. B.R. Ambedkar
- 2. Mahatma Gandhi
- 3. Rajendra Prasad
- 4. Muhammad Ali Jinnah

Question ID : 239087605  
Status : Answered  
Chosen Option : 4

Q.19 The concept of 'The Four Noble Truths' belongs to which of the following religions?

- Ans
- 1. Buddhism
  - 2. Sikhism
  - 3. Hinduism
  - 4. Jainism

Question ID : 239087623  
Status : Answered  
Chosen Option : 1

Q.20 Which of the following Vitamin is related to Osteoporosis?

- Ans
- 1. Vitamin C
  - 2. Vitamin A
  - 3. Vitamin B
  - 4. Vitamin D

Question ID : 239087616  
Status : Answered  
Chosen Option : 4

Q.21 When was the first amendment made to the Indian Constitution?

- Ans
- 1. 1953
  - 2. 1952
  - 3. 1954
  - 4. 1951

Question ID : 239087611  
Status : Answered  
Chosen Option : 4

Q.22 Who is the inventor of Dynamite?

- Ans
- 1. Otto Hahn
  - 2. Marie Currie
  - 3. Robert Oppenheimer
  - 4. Alfred Nobel

Question ID : 239087613  
Status : Answered  
Chosen Option : 4

Q.23 Which of the following Articles is related to Jammu & Kashmir state of India?

- Ans
- 1. Article 366
  - 2. Article 378
  - 3. Article 374
  - 4. Article 370

Question ID : 239087612  
Status : Answered  
Chosen Option : 4

Q.24 In which of the following state of India the only floating park in the world is situated?

- Ans
- 1. Meghalaya
  - 2. Assam
  - 3. Manipur
  - 4. Tripura

Question ID : 239087620  
Status : Answered  
Chosen Option : 3

Q.25 Who among the following has the power to promulgate ordinance?

- Ans
- 1. Chief Justice of Supreme Court
  - 2. Prime Minister
  - 3. President
  - 4. Defence Minister

Question ID : 239087610  
Status : Answered  
Chosen Option : 3