

Section : General English

Q.1 Select the most appropriate option to fill in the blank.

The air-conditioner has made ceiling fans a little _____ in today's world.

- Ans
- 1. extinct
 - 2. redundant
 - 3. additional
 - 4. absurd

Question ID : 2390871665
Status : Answered
Chosen Option : 4

Q.2 Select the most appropriate synonym of the given word.

Tangled

- Ans
- 1. Regulated
 - 2. Knotted
 - 3. Orderly
 - 4. Organized

Question ID : 2390871655
Status : Answered
Chosen Option : 4

Q.3 Select the most appropriate option to fill in the blank.

My little cousin is _____ a movie.

- Ans
- 1. looking
 - 2. seeing
 - 3. watching
 - 4. observing

Question ID : 2390871666
Status : Answered
Chosen Option : 3

Q.4 Choose the correctly spelt word.

- Ans
- 1. Permmitt
 - 2. Noticeing
 - 3. Necessary
 - 4. Peirce

Question ID : 2390871664
Status : Answered

Q.5 Select the most appropriate antonym of the given word.

Loiter

- Ans
- 1. Repel
 - 2. Dawdle
 - 3. Loaf
 - 4. Hasten

Question ID : 2390871658

Status : Not Answered

Chosen Option : --

Q.6 Select the most appropriate meaning of the given idiom.

As clear as a bell

- Ans
- 1. To get fooled
 - 2. To have a tinkling sound
 - 3. Readily understood
 - 4. At a very low price

Question ID : 2390871660

Status : Answered

Chosen Option : 3

Q.7 Find the part of the given sentence that has an error in it. If there is no error, choose 'No error'.

He lost all his hardly earned money. /No error

- Ans
- 1. hardly earned money
 - 2. No error
 - 3. all his
 - 4. He lost

Question ID : 2390871642

Status : Answered

Chosen Option : 1

Q.8 Choose the most appropriate word that can substitute the given group of words.

A person travelling on foot

- Ans
- 1. Vagabond
 - 2. Equestrian
 - 3. Bibliophile
 - 4. Pedestrian

Question ID : 2390871661

Status : Answered

Chosen Option : 4

Comprehension:

In the following passage some words have been deleted. Fill in the blanks with the help of the alternatives given. Select the most appropriate option for each blank.

Television in India made a humble beginning in September, 1959. The first television programmes were meant (1)___ schools and rural areas. The first general services on a (2)___ basis started in August, 1965. Colour television came into (3)___ in November, 1982 on the eve of the Ninth Asian Games. Around (4)___ time it became possible to take television programmes to rural areas (5)___ the help of satellites.

SubQuestion No : 9

Q.9 Select the most appropriate option for blank No. 1.

- Ans
- 1. to
 - 2. on
 - 3. for
 - 4. at

Question ID : 2390871650

Status : Answered

Chosen Option : 1

Comprehension:

In the following passage some words have been deleted. Fill in the blanks with the help of the alternatives given. Select the most appropriate option for each blank.

Television in India made a humble beginning in September, 1959. The first television programmes were meant (1)___ schools and rural areas. The first general services on a (2)___ basis started in August, 1965. Colour television came into (3)___ in November, 1982 on the eve of the Ninth Asian Games. Around (4)___ time it became possible to take television programmes to rural areas (5)___ the help of satellites.

SubQuestion No : 10

Q.10 Select the most appropriate option for blank No. 2.

- Ans
- 1. final
 - 2. regular
 - 3. usual
 - 4. proper

Question ID : 2390871651

Status : Answered

Chosen Option : 2

Comprehension:

In the following passage some words have been deleted. Fill in the blanks with the help of the alternatives given. Select the most appropriate option for each blank.

Television in India made a humble beginning in September, 1959. The first television programmes were meant (1)___ schools and rural areas. The first general services on a (2)___ basis started in August, 1965. Colour television came into (3)___ in November, 1982 on the eve of the Ninth Asian Games. Around (4)___ time it became possible to take television programmes to rural areas (5)___ the help of satellites.

SubQuestion No : 11

Q.11 Select the most appropriate option for blank No. 3.

- Ans
- 1. location
 - 2. existence
 - 3. establishment
 - 4. creation

Question ID : 2390871652

Status : Answered

Chosen Option : 2

Comprehension:

In the following passage some words have been deleted. Fill in the blanks with the help of the alternatives given. Select the most appropriate option for each blank.

Television in India made a humble beginning in September, 1959. The first television programmes were meant (1)___ schools and rural areas. The first general services on a (2)___ basis started in August, 1965. Colour television came into (3)___ in November, 1982 on the eve of the Ninth Asian Games. Around (4)___ time it became possible to take television programmes to rural areas (5)___ the help of satellites.

SubQuestion No : 12

Q.12 Select the most appropriate option for blank No. 4.

- Ans 1. this
 2. these
 3. those
 4. it

Question ID : 2390871653
Status : Answered
Chosen Option : 3

Comprehension:

In the following passage some words have been deleted. Fill in the blanks with the help of the alternatives given. Select the most appropriate option for each blank.

Television in India made a humble beginning in September, 1959. The first television programmes were meant (1)___ schools and rural areas. The first general services on a (2)___ basis started in August, 1965. Colour television came into (3)___ in November, 1982 on the eve of the Ninth Asian Games. Around (4)___ time it became possible to take television programmes to rural areas (5)___ the help of satellites.

SubQuestion No : 13

Q.13 Select the most appropriate option for blank No. 5.

- Ans 1. from
 2. for
 3. among
 4. with

Question ID : 2390871654
Status : Answered
Chosen Option : 4

Q.14 Find the part of the given sentence that has an error in it. If there is no error, choose 'No error'.

It take her a long time to get over her failure in the examination. /No error

- Ans 1. No error
 2. her failure in the examination
 3. long time to get over
 4. It take her a

Question ID : 2390871643
Status : Answered
Chosen Option : 4

Q.15 Select the most appropriate synonym of the given word.

Proclaim

- Ans 1. Oppose
 2. Produce
 3. Conceal
 4. Declare

Question ID : 2390871656
Status : Answered
Chosen Option : 4

Q.16 Select the most appropriate meaning of the given idiom.

To pull someone's legs

- Ans 1. Not a serious information

- 2. To play a joke on someone
- 3. Of a kind and sympathetic nature
- 4. To use all possible methods

Question ID : 2390871659
Status : Answered
Chosen Option : 2

Q.17 Select the most appropriate option to substitute the underlined segment in the given sentence. If there is no need to substitute it, select No Improvement.

A study suggests that woman is good at handling emotions than men.

- Ans
- 1. woman are best
 - 2. women are better
 - 3. women is better
 - 4. No Improvement

Question ID : 2390871644
Status : Answered
Chosen Option : 2

Q.18 Select the most appropriate option to substitute the underlined segment in the given sentence. If there is no need to substitute it, select No Improvement.

MS Dhoni has no immediate plans to retire.

- Ans
- 1. No Improvement
 - 2. plans retiring
 - 3. plan to retirement
 - 4. planning for retire

Question ID : 2390871646
Status : Answered
Chosen Option : 3

Q.19 Find the part of the given sentence that has an error in it. If there is no error, choose 'No error'.

Don't worry, there is less time for the train to arrive. /No error

- Ans
- 1. Don't worry,
 - 2. for the train to arrive
 - 3. No error
 - 4. there is less time

Question ID : 2390871641
Status : Not Answered
Chosen Option : --

Q.20 Select the most appropriate option to substitute the underlined segment in the given sentence. If there is no need to substitute it, select No Improvement.

The inflation rate raised up 8% last month.

- Ans
- 1. rise to
 - 2. rose to
 - 3. No Improvement
 - 4. raise up

Question ID : 2390871645
Status : Answered

Q.21 Choose the most appropriate word that can substitute the given group of words.

The state of growing to maturity.

- Ans
- 1. Apartheid
 - 2. Innocence
 - 3. Immigrant
 - 4. Adolescence

Question ID : 2390871662
Status : Answered
Chosen Option : 4

Q.22 Choose the correctly spelt word.

- Ans
- 1. Knoledge
 - 2. Jealusy
 - 3. Langaue
 - 4. Odour

Question ID : 2390871663
Status : Answered
Chosen Option : 4

Q.23 Select the most appropriate option to fill in the blank.

They were astonished _____ his failure in the competition.

- Ans
- 1. in
 - 2. at
 - 3. from
 - 4. on

Question ID : 2390871647
Status : Answered
Chosen Option : 2

Q.24 Select the most appropriate antonym of the given word.

Morose

- Ans
- 1. Cranky
 - 2. Cheerful
 - 3. Solemn
 - 4. Prudent

Question ID : 2390871657
Status : Answered
Chosen Option : 2

Q.25 Select the most appropriate option to fill in the blank.

He _____ for a week when his father came.

- Ans
- 1. had been ill
 - 2. has been ill
 - 3. is being ill
 - 4. is ill

Section : General Intelligence & Reasoning

Q.1 If a mirror is placed on the line AB, then which of the answer figures is the right image of the given figure?



Ans

✓ 1.



✗ 2.



✗ 3.



✗ 4.



Question ID : 2390871487

Status : Answered

Chosen Option : 1

Q.2 In a certain code language, 'TYRE' is written as '70', 'MON' is written as '44'. What is the code for 'FROM' in that code language?

Ans

✓ 1. 54

✗ 2. 50

✗ 3. 55

✗ 4. 52

Question ID : 2390871472

Status : Answered

Chosen Option : 1

Q.3 Select the word pair in which the two words are related in the same way as the two words in the following word-pair.

Star : Sun :: ?

Ans

✓ 1. Planet : Mars

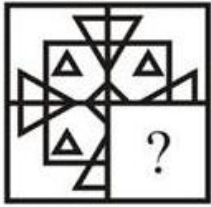
✗ 2. Sparrow : Bird

✗ 3. Animal : Wild

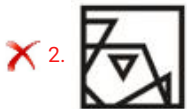
✗ 4. Venus : Hot

Question ID : 2390871467

Q.4 Which answer figure will complete the pattern in the question figure?



Ans



Question ID : 2390871485

Status : Answered

Chosen Option : 4

Q.5 In the following question below are given some statements followed by some conclusions based on those statements. Taking the given statements to be true even if they seem to be at variance from commonly known facts. Read all the conclusions and then decide which of the given conclusion logically follows the given statements.

Statements:

- I. Some yellow are pen.
- II. Some pen are sharpener.

Conclusions:

- I. Some sharpener are yellow.
- II. No yellow is pen.

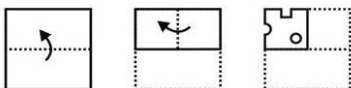
- Ans
- ✗ 1. Both conclusion I and II follows
 - ✗ 2. Only conclusion II follows
 - ✓ 3. Neither conclusion follow
 - ✗ 4. Only conclusion I follows

Question ID : 2390871477

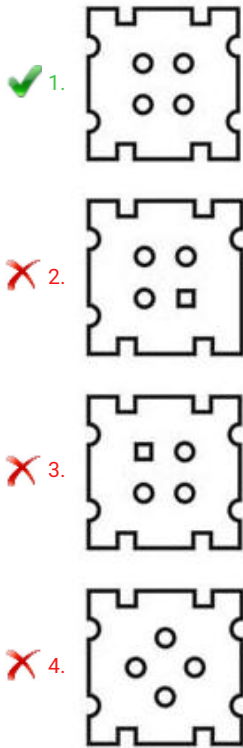
Status : Answered

Chosen Option : 3

Q.6 A piece of paper is folded and punched as shown below in the question figures. From the given answer figures, indicate how it will appear when opened?



Ans



Question ID : 2390871488
Status : Answered
Chosen Option : 1

Q.7 In a certain code language, 'DIRTYS' is written as 'FMTXAW'. What is the code for 'MONDAX' in that code language?

- Ans
- 1. PTRIDD
 - 2. PTQIDD
 - 3. ORPHCB
 - 4. OSPHCB

Question ID : 2390871469
Status : Answered
Chosen Option : 4

Q.8 In the following question below are given some statements followed by some conclusions based on those statements. Taking the given statements to be true even if they seem to be at variance from commonly known facts. Read all the conclusions and then decide which of the given conclusion logically follows the given statements.

Statements:
I. All prime are even.
II. Some even are odd.

Conclusions:
I. Some odd are prime.
II. All odd are even.
III. No odd is prime.

- Ans
- 1. Both conclusion II and III follows
 - 2. Only conclusion III follows
 - 3. Only conclusion II follows
 - 4. Either conclusion I or III follows

Question ID : 2390871476
Status : Answered
Chosen Option : 4

Q.9 Select the option in which the letters share the same relationship as that shared by the given pair of letters.

TG : SE :: ?

- Ans 1. KB : JZ
 2. MA : LZ
 3. LR : KT
 4. TP : UN

Question ID : 2390871468
Status : Answered
Chosen Option : 1

Q.10 By interchanging which two numbers the equation will be correct?

$$3 + 6 \div 2 \times 4 - 7 = 5$$





- Ans 1. 7 and 6
 2. 4 and 3
 3. 6 and 3
 4. 3 and 2

Question ID : 2390871483
Status : Answered
Chosen Option : 3

Q.11 Identify the Venn diagram that best represents the relationship between the given classes.

Car, Vehicle, Road

Ans

1. 
2. 
3. 
4. 

Question ID : 2390871489
Status : Answered
Chosen Option : 2

Q.12 Five pens D, E, F, G and H are kept one above the other (not necessarily in the same order). Only H is between E and F. F is below E. G is just below F. D is three places below H. How many pens are between E and D?

- Ans 1. 1
 2. 2
 3. 0
 4. 3

Question ID : 2390871475
Status : Answered
Chosen Option : 4

Q.13 Six tablets T1, T2, T3, T4, T5 and T6 are placed in a row facing towards North (Not necessarily in the same order). Two tablets are placed between T1 and T5. T3 is placed second to the right of T6. T2 is placed second to the right of T1. T5 is towards the left of T1. Which of the following pair of tablets represents the tablets to the immediate right of T6 and T5 respectively?

- Ans
- 1. T1, T4
 - 2. T1, T2
 - 3. T4, T1
 - 4. T3, T4

Question ID : 2390871474
 Status : Answered
 Chosen Option : 1

Q.14 Select the letter-pair that can replace the question mark (?) in the following series.

RJ, XP, DV, JB, ?

- Ans
- 1. QJ
 - 2. QH
 - 3. PI
 - 4. PH

Question ID : 2390871465
 Status : Answered
 Chosen Option : 4

Q.15 In a certain code language, 'DRAPE' is written as '4181165', 'CEMANT' is written as '351311420'. What is the code for 'PRINTR' in that code language?

- Ans
- 1. 16184192018
 - 2. 16418920188
 - 3. 16819412018
 - 4. 16189142018

Question ID : 2390871471
 Status : Answered
 Chosen Option : 4

Q.16 From the given answer figures, select the one in which the question figure is hidden/embedded.

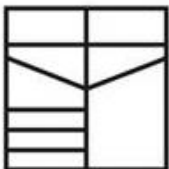


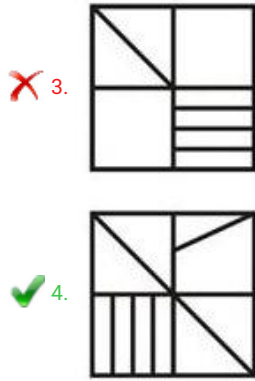
Ans

1.



2.





Question ID : 2390871486
Status : Answered
Chosen Option : 4

Q.17 In a certain code language, 'FLOWER' is written as 'GKPVFQ'. What is the code for 'PRODUCE' in that code language?

- Ans 1. QQPCVB
 2. QQRCVB
 3. RRQDWC
 4. RRWDQC

Question ID : 2390871470
Status : Answered
Chosen Option : 1

Q.18 Select the option that is related to the third term in the same way as the second term is related to the first term.

Car : Wheel :: Clock : ?

- Ans 1. Circular
 2. Hour
 3. Second
 4. Needle

Question ID : 2390871466
Status : Answered
Chosen Option : 4

Q.19 Select the number that can replace the question mark (?) in the following series.

13, 40, 121, 364, ?

- Ans 1. 1091
 2. 1092
 3. 1094
 4. 1093

Question ID : 2390871479
Status : Answered
Chosen Option : 4

Q.20 Select the number that can replace the question mark (?) in the following series.

961, 984, 1008, 1033, 1059, ?

- Ans 1. 1096
 2. 1086

- 3. 1078
- 4. 1084

Question ID : 2390871478
 Status : Answered
 Chosen Option : 2

Q.21 After interchanging the given two signs, what will be the value of $11 \div 9 - 63 + 7 \times 2$?

\div and $+$

- Ans 1. 2
 2. 5
 3. -4
 4. -2

Question ID : 2390871482
 Status : Answered
 Chosen Option : 1

Q.22 In the following question, select the figure which can be placed at the sign of question mark (?) from the given alternatives.

A M	A M K	A T M K	?	A T M G K R
--------	-------------	---------------	---	-------------------

Ans

- 1.

A	T
M	G
K	
- 2.

A	T
M	R
K	
- 3.

A	K
M	G
T	
- 4.

A	G
M	K
T	

Question ID : 2390871484
 Status : Answered
 Chosen Option : 1

Q.23 In the following question, select the number which can be placed at the sign of question mark (?) from the given alternatives.

9 11 5 94
 7 9 13 ?
 6 5 14 16

- Ans 1. 44
 2. 60

✓ 3. 50

✗ 4. 48

Question ID : 2390871481
Status : Answered
Chosen Option : 3

Q.24 In the following question, select the related number from the given alternatives.

446 : 491 :: 963 : ?

Ans ✗ 1. 1014

✓ 2. 1008

✗ 3. 1018

✗ 4. 1024

Question ID : 2390871480
Status : Answered
Chosen Option : 2

Q.25 Six boys R1, R2, R3, R4, R5 and R6 are sitting in a row facing towards the north (Not necessarily in the same order). There are three boys between R4 and R2. R4 is not at any of the end. Only three boys are between R1 and R5. R3 is towards the left of R6. R1 is at one of the end. R2 is towards the right of R4.

Which of the following statement is correct?

Ans ✗ 1. R1 is towards the right of R4

✗ 2. R5 is at one of the end

✗ 3. R3 is to the immediate right of R6

✓ 4. R4 is second to the left of R6

Question ID : 2390871473
Status : Answered
Chosen Option : 4

Section : Numerical Aptitude

Q.1 After offering a discount of 20% on an article, a trader earned a profit of 20%. If the cost price is ₹300, then what will be the selling price of the article after offering a discount of 25%?

Ans ✓ 1. ₹337.5

✗ 2. ₹432.5

✗ 3. ₹352.5

✗ 4. ₹375.5

Question ID : 2390871320
Status : Answered
Chosen Option : 1

Q.2 The compound interest (compounded annually) on a sum of money invested for two years is ₹10125. If the rate of interest is 25% per annum, then what is the amount after these two years?

Ans ✗ 1. ₹32275

✗ 2. ₹30625

✓ 3. ₹28125

✗ 4. ₹26275

Question ID : 2390871329
Status : Answered
Chosen Option : 3

Q.3 A sum of money becomes double of itself in 50 months when invested on simple interest. What is the rate of interest per annum?

- Ans
- 1. 26%
 - 2. 25%
 - 3. 24%
 - 4. 20%

Question ID : 2390871328

Status : Answered

Chosen Option : 3

Q.4 The Table given below presents the Rainfall (in mm) in two cities on different days of a week.

Days	Rainfall (in mm)	
	City 1	City 2
D1	82	81.6
D2	78	79.4
D3	76.2	78.3
D4	81.6	77.7
D5	79.4	84
D6	84	83
D7	83.8	82

The rainfall on day D2 in City 1 is how much percent more than the rainfall on day D4 in City 2?

- Ans
- 1. $\frac{100}{777}$
 - 2. $\frac{1}{260}$
 - 3. $\frac{5}{13}$
 - 4. $\frac{100}{259}$

Question ID : 2390871338

Status : Answered

Chosen Option : 4

Q.5 The cost price of a cycle is ₹24000. If the profit is 30%, then what will be the selling price?

- Ans
- 1. ₹34100
 - 2. ₹30800
 - 3. ₹33400
 - 4. ₹31200

Question ID : 2390871323

Status : Answered

Chosen Option : 4

Q.6 What is the value of $\frac{(49-13) \times 18 \div 9 + 4 \times 12 \div 6 + 5}{98 \div 14 + 7 \times 4 \text{ of } 6 \div 8 + 4}$?

- Ans
- 1. $\frac{45}{23}$
 - 2. $\frac{85}{32}$
 - 3. $\frac{53}{17}$
 - 4. $\frac{37}{18}$

Question ID : 2390871317

Status : Answered

Chosen Option : 2

Q.7 If A is 200% more than B, then B is how much percentage less than A?

- Ans
- 1. 100%
 - 2. 33.33%
 - 3. 50%
 - 4. 66.67%

Question ID : 2390871322

Status : Answered

Chosen Option : 4

Q.8 A bus covers a distance of 1.8 km in 3 minutes. How much faster (in m/s) is it than a young athlete who runs 200 m in 25 s?

- Ans
- 1. 2
 - 2. 1
 - 3. 2.5
 - 4. 1.5

Question ID : 2390871332

Status : Answered

Chosen Option : 1

Q.9 What is the average of first 8 multiples of 6 among the natural numbers?

- Ans
- 1. 26
 - 2. 28
 - 3. 24
 - 4. 27

Question ID : 2390871318

Status : Answered

Chosen Option : 4

Q.10 The area of a rectangle is 180 cm^2 . If the ratio of length and breadth of the rectangle is 5 : 4, then what is the length (in cm) of diagonal of the rectangle?

- Ans
- 1. $\sqrt{317}$
 - 2. $\sqrt{371}$
 - 3. $\sqrt{423}$
 - 4. $\sqrt{369}$

Question ID : 2390871336

Status : Answered

Chosen Option : 4

Q.11 In a mixture of 60 litres, the ratio (by volume) of milk and water is 2 : 1. If X litres of water is added in the mixture, the ratio of milk and water becomes 1 : 2, then what is the value of X?

- Ans
- 1. 40
 - 2. 20
 - 3. 56
 - 4. 60

Question ID : 2390871327

Status : Answered

Chosen Option : 4

Q.12 The speed of a boat in still water is 30 km/h. If the boat covers 60 km downstream in 1 hour 30 minutes, then what is the time taken by the boat to cover 60 km upstream?

- Ans
- 1. 5 hours
 - 2. 3 hours
 - 3. 1 hour
 - 4. 4 hours

Question ID : 2390871333

Status : Answered

Chosen Option : 2

Q.13 The radius of a solid right circular cylinder is 21 cm and its height is 40 cm. What is the cost of painting the curved surface area of the cylinder at the rate of ₹20 per cm² ?

(Take $\pi = \frac{22}{7}$)

- Ans
- 1. ₹5280
 - 2. ₹26400
 - 3. ₹105600
 - 4. ₹108600

Question ID : 2390871334

Status : Answered

Chosen Option : 3

Q.14 Piyush alone can complete a work in 8 days and Arun alone can complete the same work in 14 days. If they both get ₹44000 to complete the work, then what is the share of Piyush?

- Ans
- 1. ₹21000
 - 2. ₹24000
 - 3. ₹28000
 - 4. ₹16000

Question ID : 2390871330

Status : Answered

Chosen Option : 3

Q.15 The ratio of number of boys and girls in a school is 3 : 2. If there are 360 students in the school, then what is the number of girls in the school?

- Ans
- 1. 144
 - 2. 124
 - 3. 142
 - 4. 160

Question ID : 2390871326

Status : Answered

Chosen Option : 1

Q.16 What is the value of $\frac{2 \div 3 \times (1+3) + 5 - 6}{2}$ of $3 \div 5 \times 4 + 3 - 2$?

- Ans
- 1. $\frac{27}{92}$
 - 2. $\frac{36}{89}$

3. $\frac{31}{73}$

4. $\frac{25}{87}$

Question ID : 2390871316

Status : Answered

Chosen Option : 4

Q.17 The Table given below presents the Rainfall (in mm) in two cities on different days of a week.

Days	Rainfall (in mm)	
	City 1	City 2
D1	82	81.6
D2	78	79.4
D3	76.2	78.3
D4	81.6	77.7
D5	79.4	84
D6	84	83
D7	83.8	82

What is the difference (correct up to two decimal places) in average rainfall in two cities per day?

- Ans 1. 0.66 mm
 2. 0.42 mm
 3. 0.15 mm
 4. 0.08 mm

Question ID : 2390871337

Status : Answered

Chosen Option : 3

Q.18 What is the mode of the given data?

4, 3, 7, 13, 16, 23, 3, 4, 7, 4, 3, 3, 9, 6, 9, 6

- Ans 1. 9
 2. 3
 3. 6
 4. 4

Question ID : 2390871321

Status : Answered

Chosen Option : 3

Q.19 Pipe D1 can fill an empty tank in 80 minutes and Pipe D2 can empty the same tank in 100 minutes. If pipes are opened simultaneously, then in how much time the tank gets completely filled?

- Ans 1. 400 minutes
 2. 200 minutes
 3. 320 minutes
 4. 240 minutes

Question ID : 2390871331

Status : Answered

Chosen Option : 1

Q.20 A room is in the shape of a cuboid, with dimensions 12m × 10m × 3m. What is the cost of painting the four walls of the room at the rate of ₹50 per m² ?

- Ans 1. ₹15600
 2. ₹15000

✓ 3. ₹6600

✗ 4. ₹7500

Question ID : 2390871335
Status : Answered
Chosen Option : 3

Q.21 The average of six observations is 15. The average of first three among them is twice the average of the last three. What is the sum of the last three observations?

- Ans**
- ✗ 1. 35
 - ✗ 2. 25
 - ✗ 3. 20
 - ✓ 4. 30

Question ID : 2390871319
Status : Answered
Chosen Option : 4

Q.22 Profit earned on a ball is $\frac{3}{5}$ of its selling price. If the selling price of the ball is ₹120, then how much profit is earned on this ball?

- Ans**
- ✗ 1. ₹48
 - ✗ 2. ₹96
 - ✓ 3. ₹72
 - ✗ 4. ₹24

Question ID : 2390871324
Status : Answered
Chosen Option : 3

Q.23 A bag contains 5 rupee, 2 rupee, 1 rupee and 50 paise coins in the proportion 1 : 2 : 3 : 4. If the total amount in the bag is ₹168, then how many 50 paise coins are there?

- Ans**
- ✗ 1. 52
 - ✗ 2. 56
 - ✓ 3. 48
 - ✗ 4. 46

Question ID : 2390871325
Status : Answered
Chosen Option : 3

Q.24 The Table given below presents the Rainfall (in mm) in two cities on different days of a week.

Days	Rainfall (in mm)	
	City 1	City 2
D1	82	81.6
D2	78	79.4
D3	76.2	78.3
D4	81.6	77.7
D5	79.4	84
D6	84	83
D7	83.8	82

If the data of Rainfall of City 1 is represented through a Pie chart, then what will be the central angle (nearest to 0.1 degree) corresponding to D1?

- Ans**
- ✗ 1. 53.3
 - ✗ 2. 51.9
 - ✓ 3. 52.2
 - ✗ 4. 50.8

Question ID : 2390871339

Status : **Answered**
Chosen Option : **3**

Q.25 If Least Common Multiple of 23 and 24 is A and Highest Common Factor of 23 and 24 is B, then what is the value of A + B?

- Ans
- 1. 452
 - 2. 551
 - 3. 553
 - 4. 451

Question ID : **2390871315**
Status : **Answered**
Chosen Option : **1**

Section : **General awareness**

Q.1 Which of the following quality marks are NOT correctly matched?

- Ans
- 1. AGMARK - agricultural products
 - 2. FPO - processed food products
 - 3. HALLMARK - silver jewellery
 - 4. ISI - semi-processed food products

Question ID : **2390871100**
Status : **Answered**
Chosen Option : **3**

Q.2 Andaman and Nicobar jurisdiction comes under which High court?

- Ans
- 1. Madras
 - 2. Odisha
 - 3. Calcutta
 - 4. Andhra Pradesh

Question ID : **2390871103**
Status : **Answered**
Chosen Option : **3**

Q.3 Which of the following is NOT a primary activity?

- Ans
- 1. Agriculture
 - 2. Mining
 - 3. Fishing
 - 4. Construction

Question ID : **2390871111**
Status : **Answered**
Chosen Option : **4**

Q.4 GST council is headed by:

- Ans
- 1. Union Finance Minister
 - 2. CAG
 - 3. RBI governor
 - 4. Prime minister

Question ID : **2390871099**
Status : **Not Answered**
Chosen Option : **--**

Q.5 Which of the following diseases is caused by virus?

- Ans
- 1. Typhoid
 - 2. Cholera
 - 3. Measles
 - 4. Ringworm

Question ID : 2390871104
Status : Answered
Chosen Option : 3

Q.6 First cotton mill in India was set up in which city?

- Ans
- 1. Ahmedabad
 - 2. Nashik
 - 3. Madras
 - 4. Bombay

Question ID : 2390871112
Status : Answered
Chosen Option : 3

Q.7 Who is the author of the book "Neel Darpan"?

- Ans
- 1. Mumtaz Ali
 - 2. Abanindranath Tagore
 - 3. Ishwar Chandra Vidyasagar
 - 4. Dina Bandhu Mitra

Question ID : 2390871096
Status : Answered
Chosen Option : 4

Q.8 King Jay Adams is associated with which of the following Sports?

- Ans
- 1. Horce Racing
 - 2. Billards
 - 3. Golf
 - 4. Skateboarding

Question ID : 2390871094
Status : Not Answered
Chosen Option : --

Q.9 Which of the following Indian cities has got UNESCO World Heritage site tag?

- Ans
- 1. Ahmedabad
 - 2. Agra
 - 3. Bhopal
 - 4. Mumbai

Question ID : 2390871090
Status : Answered
Chosen Option : 4

Q.10 Arrange the following metals in the decreasing order of reactivity:

- Ans
- 1. Sodium > silver > iron > gold

- 2. Gold > silver > iron > sodium
- 3. Iron > sodium > silver > gold
- 4. Sodium > iron > silver > gold

Question ID : 2390871107
Status : Not Answered
Chosen Option : --

Q.11 Bab-el-Mandeb strait connects which water bodies?

- Ans
- 1. Persian Gulf and Gulf of Oman
 - 2. Black sea and sea of Azov
 - 3. Baffin Bay and Labrador Sea
 - 4. Red sea and Gulf of Aden

Question ID : 2390871110
Status : Not Answered
Chosen Option : --

Q.12 Which of the following is also called the First Law of Thermodynamics?

- Ans
- 1. Charles' Law
 - 2. Boyle's Law
 - 3. Law of Conservation of Energy
 - 4. Law of Conservation of Mass

Question ID : 2390871105
Status : Not Answered
Chosen Option : --

Q.13 Which of the following institutions is India's National Academy of Letters?

- Ans
- 1. Sahitya Akademi
 - 2. Centre for Cultural Resources and Training
 - 3. Indira Gandhi National Centre for Arts
 - 4. Lalit Kala Akademi

Question ID : 2390871091
Status : Not Answered
Chosen Option : --

Q.14 How many non-permanent members does UN Security Council have?

- Ans
- 1. 7
 - 2. 10
 - 3. 5
 - 4. 12

Question ID : 2390871102
Status : Not Answered
Chosen Option : --

Q.15 Mobile App "cVIGIL" has been launched to?

- Ans
- 1. enable citizens to file online RTI
 - 2. enable citizens to report on violation of election code of conduct
 - 3. bring transparency in direct benefit transfer
 - 4. enable citizens to file income tax online

Question ID : 2390871097
Status : Answered
Chosen Option : 2

Q.16 Ozone gas is present in which layer of atmosphere?

- Ans
- 1. Mesosphere
 - 2. Stratosphere
 - 3. Ionosphere
 - 4. Troposphere

Question ID : 2390871106
Status : Answered
Chosen Option : 2

Q.17 Twinkling of stars is mainly due to which phenomena?

- Ans
- 1. Refraction
 - 2. Advection
 - 3. Reflection
 - 4. Diffraction

Question ID : 2390871108
Status : Answered
Chosen Option : 4

Q.18 PRASAD Scheme (Pilgrimage rejuvenation and Spiritual, Heritage Augmentation Drive) has been launched under which Ministry?

- Ans
- 1. Ministry of External Affairs
 - 2. Ministry of Tourism
 - 3. Ministry of Housing and Urban affairs
 - 4. Ministry of Culture

Question ID : 2390871092
Status : Answered
Chosen Option : 2

Q.19 _____ of reservation in government jobs and education granted to the economically backward among the general category as announced in the Interim Budget 2019.

- Ans
- 1. 0.1
 - 2. 0.12
 - 3. 0.15
 - 4. 0.05

Question ID : 2390871098
Status : Answered
Chosen Option : 1

Q.20 _____, the code-breaker during World War II has been chosen by Bank of England to feature on Britain's new £50 note.

- Ans
- 1. Sir Christopher Wren
 - 2. Sir John Houblon
 - 3. Michael Faraday
 - 4. Alan Turing

Question ID : 2390871095

Status : Answered

Chosen Option : 4

Q.21 What is the national game of USA?

- Ans
- 1. Football
 - 2. Basketball
 - 3. Cricket
 - 4. Baseball

Question ID : 2390871093

Status : Answered

Chosen Option : 4

Q.22 Which of the following adjectives is NOT a part of the Preamble?

- Ans
- 1. Liberty
 - 2. Tolerant
 - 3. Secular
 - 4. Sovereign

Question ID : 2390871101

Status : Answered

Chosen Option : 2

Q.23 What was known as 'Calico' during pre-imperialism period?

- Ans
- 1. Iron
 - 2. Rice
 - 3. Cotton
 - 4. Coal

Question ID : 2390871114

Status : Not Answered

Chosen Option : --

Q.24 In which country is Hambantota port situated?

- Ans
- 1. Sri Lanka
 - 2. Bangladesh
 - 3. Maldives
 - 4. Pakistan

Question ID : 2390871109

Status : Answered

Chosen Option : 1

Q.25 Who renounced his Knighthood against the Jallianwala Bagh atrocity?

- Ans
- 1. Rabindranath Tagore
 - 2. S Subramania Iyer
 - 3. Mahatma Gandhi
 - 4. Syed Ahmad Khan

Question ID : 2390871113

Status : Answered

Chosen Option : 1

GovtJobsAlert.In