

Section : General English

Q.1 Select the most appropriate word to fill in the blank and make a meaningful sentence.

Be careful not to drop this glass case; it's very _____.

- Ans
- 1. smooth
 - 2. hard
 - 3. rigid
 - 4. fragile

Question ID : 2390873052

Status : Answered

Chosen Option : 4

Q.2 Identify the segment in the sentence which contains the grammatical error.

Grandmother was knitting a sweater for his grand-daughter.

- Ans
- 1. Grandmother was
 - 2. sweater for his
 - 3. knitting a
 - 4. grand-daughter

Question ID : 2390873029

Status : Answered

Chosen Option : 2

Q.3 Select the most appropriate word to fill in the blank and make a meaningful sentence.

The development of real estate has _____ impacted the environment.

- Ans
- 1. adversely
 - 2. conveniently
 - 3. narrowly
 - 4. positively

Question ID : 2390873053

Status : Answered

Chosen Option : 1

Q.4 Select the correctly spelt word.

- Ans
- 1. Essential
 - 2. Essensial

3. Essentail

4. Essencial

Question ID : 2390873050
Status : Answered
Chosen Option : 1

Q.5 Select the most appropriate meaning of the given idiom.

Far cry from

Ans 1. To be sad about past things

2. To cry over small things

3. To be very different from

4. To be away from dear ones

Question ID : 2390873047
Status : Not Answered
Chosen Option : --

Q.6 Select the most appropriate antonym of the word.

Quell

Ans 1. Deny

2. Agitate

3. Entire

4. Reduce

Question ID : 2390873044
Status : Not Answered
Chosen Option : --

Q.7 Select the most appropriate antonym of the word.

Confront

Ans 1. Oppose

2. Avoid

3. Encounter

4. Meet

Question ID : 2390873045
Status : Answered
Chosen Option : 1

Q.8 Select the most appropriate synonym of the given word.

Fundamental

Ans 1. Secondary

2. Trivial

3. Basic

4. Extra

Question ID : 2390873043

Status : Answered
Chosen Option : 3

Q.9 Select the correctly spelt word.

- Ans
- 1. Scientefic
 - 2. Scientific
 - 3. Sceintific
 - 4. Scienctific

Question ID : 2390873051
Status : Answered
Chosen Option : 2

Q.10 Select the most appropriate word for the given group of words.

One who studies the evolution of mankind

- Ans
- 1. Anthropologist
 - 2. Dermatologist
 - 3. Sociologist
 - 4. Archaeologist

Question ID : 2390873048
Status : Answered
Chosen Option : 1

Q.11 Select the most appropriate synonym of the given word.

Detain

- Ans
- 1. Delay
 - 2. Advance
 - 3. Permit
 - 4. Allow

Question ID : 2390873042
Status : Answered
Chosen Option : 3

Q.12 Identify the segment in the sentence which contains the grammatical error.

Sakshi is as smarter as any other child in the class.

- Ans
- 1. Sakshi is
 - 2. in the class
 - 3. any other child
 - 4. as smarter as

Question ID : 2390873028
Status : Answered
Chosen Option : 4

Q.13 Identify the segment in the sentence which contains the grammatical error.

They have been living in Boston from ten years.

- Ans
- 1. They have
 - 2. in Boston
 - 3. from ten years
 - 4. been living

Question ID : 2390873030
Status : Answered
Chosen Option : 3

Q.14 Select the most appropriate option to substitute the underlined segment in the given sentence. If there is no need to substitute it, select No improvement.

Rashi hasn't eaten everything from yesterday.

- Ans
- 1. anything since
 - 2. something for
 - 3. nothing along
 - 4. No improvement

Question ID : 2390873031
Status : Answered
Chosen Option : 1

Q.15 Select the most appropriate option to substitute the underlined segment in the given sentence. If there is no need to substitute it, select No improvement.

The new traffic signals is not clear visible from a distance

- Ans
- 1. is not clearly
 - 2. are not clearly
 - 3. No improvement
 - 4. are not clear

Question ID : 2390873033
Status : Answered
Chosen Option : 2

Q.16 Select the most appropriate option to substitute the underlined segment in the given sentence. If there is no need to substitute it, select No improvement.

Shakiba is a smallest of the two girls.

- Ans
- 1. the small
 - 2. more small
 - 3. the smaller
 - 4. No improvement

Question ID : 2390873032
Status : Answered
Chosen Option : 3

Q.17 Select the most appropriate meaning of the given idiom.

Cry over spilt milk

- Ans
- 1. cry too much over a petty issue

- 2. unnecessarily worry about the future
- 3. complain about being forced to drink milk
- 4. regret about something that happened and cannot be changed

Question ID : 2390873046
Status : Not Answered
Chosen Option : --

Q.18 Select the most appropriate word for the given group of words.

A large bundle bound for storage or transport

- Ans
- 1. Bunch
 - 2. Barrel
 - 3. Bale
 - 4. Bevy

Question ID : 2390873049
Status : Answered
Chosen Option : 3

Q.19 Select the most appropriate option to fill in the blank and make a grammatically correct sentence.

The vase broke _____ pieces when Simran dropped it.

- Ans
- 1. in
 - 2. into
 - 3. among
 - 4. from

Question ID : 2390873034
Status : Answered
Chosen Option : 2

Q.20 Select the most appropriate option to fill in the blank and make a grammatically correct sentence.

London is _____ European city.

- Ans
- 1. a
 - 2. No article
 - 3. an
 - 4. the

Question ID : 2390873035
Status : Answered
Chosen Option : 3

Comprehension:

In the following passage some words have been deleted. Fill in the blanks with the help of the alternatives given. Select the most appropriate option for each blank.

Rama was a naughty boy (1)_____ lived in the village of Tenali. His mother did not (2)_____ what to do with him since he (3)_____ to study or do any work. One day (4)_____ took him to see a Guru. She told the (5)_____ man that she wanted him to take Rama under his guardianship.

SubQuestion No : 21

Q.21 Select the most appropriate option to fill in blank No.1.

- Ans
- 1. that
 - 2. which
 - 3. he
 - 4. who

Question ID : 2390873037

Status : Answered

Chosen Option : 4

Comprehension:

In the following passage some words have been deleted. Fill in the blanks with the help of the alternatives given. Select the most appropriate option for each blank.

Rama was a naughty boy (1)_____ lived in the village of Tenali. His mother did not (2)_____ what to do with him since he (3)_____ to study or do any work. One day (4)_____ took him to see a Guru. She told the (5)_____ man that she wanted him to take Rama under his guardianship.

SubQuestion No : 22

Q.22 Select the most appropriate option to fill in blank No.2.

- Ans
- 1. know
 - 2. knew
 - 3. knows
 - 4. knowing

Question ID : 2390873038

Status : Answered

Chosen Option : 2

Comprehension:

In the following passage some words have been deleted. Fill in the blanks with the help of the alternatives given. Select the most appropriate option for each blank.

Rama was a naughty boy (1)_____ lived in the village of Tenali. His mother did not (2)_____ what to do with him since he (3)_____ to study or do any work. One day (4)_____ took him to see a Guru. She told the (5)_____ man that she wanted him to take Rama under his guardianship.

SubQuestion No : 23

Q.23 Select the most appropriate option to fill in blank No.3.

- Ans
- 1. reminded
 - 2. refused
 - 3. wished
 - 4. denied

Question ID : 2390873039

Status : Answered

Chosen Option : 2

Comprehension:

In the following passage some words have been deleted. Fill in the blanks with the help of the alternatives given. Select the most appropriate option for each blank.

Rama was a naughty boy (1)_____ lived in the village of Tenali. His mother did not (2)_____ what to do with him since he (3)_____ to study or do any work. One day (4)_____ took him to

see a Guru. She told the (5)_____ man that she wanted him to take Rama under his guardianship.

SubQuestion No : 24

Q.24 Select the most appropriate option to fill in blank No.4.

- Ans 1. she
 2. her
 3. they
 4. he

Question ID : 2390873040
Status : Answered
Chosen Option : 1

Comprehension:

In the following passage some words have been deleted. Fill in the blanks with the help of the alternatives given. Select the most appropriate option for each blank.

Rama was a naughty boy (1)_____ lived in the village of Tenali. His mother did not (2)_____ what to do with him since he (3)_____ to study or do any work. One day (4)_____ took him to see a Guru. She told the (5)_____ man that she wanted him to take Rama under his guardianship.

SubQuestion No : 25

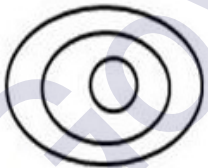
Q.25 Select the most appropriate option to fill in blank No.5.

- Ans 1. lonely
 2. learned
 3. lazy
 4. lively

Question ID : 2390873041
Status : Answered
Chosen Option : 3

Section : General Intelligence & Reasoning

Q.1 Select the set of classes that best represents the given Venn diagram.

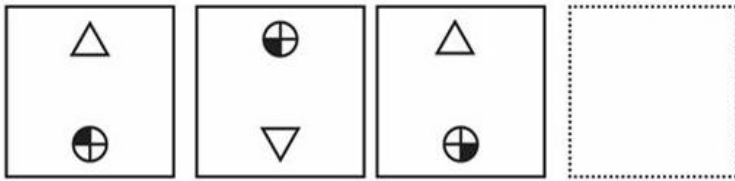


- Ans 1. State, Sea, District
 2. India, Mumbai, Delhi
 3. Water, River, Dam
 4. Asia, India, Pune

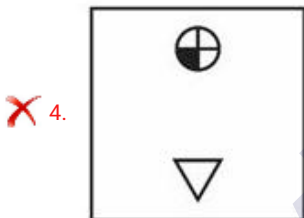
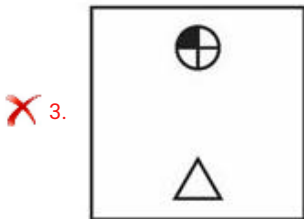
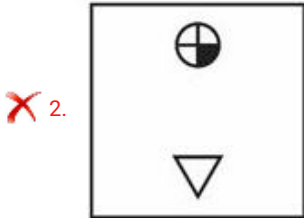
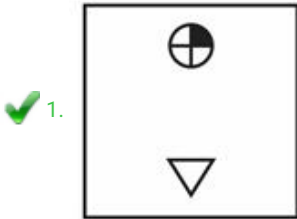
Question ID : 2390873153
Status : Answered
Chosen Option : 4

Q.2

Which of the following answer figure completes the series of the question figure?



Ans



Question ID : 2390873148

Status : Answered

Chosen Option : 1

Q.3 Select the option that is related to the fourth term in the same way as the first term is related to the second term.

16 : 272 :: ? : 380

Ans ✗ 1. 17

✓ 2. 19

✗ 3. 21

✗ 4. 23

Question ID : 2390873144

Status : Answered

Chosen Option : 2

Q.4 In a certain code language, if the word 'CLASSIFY' is coded as 'XOZHHRUB', then how is the word 'MODIFY' coded in that language?

- Ans
- 1. RUBNLW
 - 2. NLRUBW
 - 3. NLWRUB
 - 4. RUBNWL

Question ID : 2390873133

Status : Answered

Chosen Option : 3

Q.5 Eight boys P, Q, R, S, T, U, V and W are sitting in a Circular table.
P and Q are sitting in front of each other.
S is sitting second from the right of P and V is sitting second to the right of Q.
T and W are sitting in front of each other.
R is sitting between P and V.

How many boys are sitting between U and V, When counted from the right of U?

- Ans
- 1. Three
 - 2. Five
 - 3. Four
 - 4. Two

Question ID : 2390873138

Status : Answered

Chosen Option : 2

Q.6 Select the option that is related to the fourth term in the same way as the first term is related to the second term.

DFIM : CEHL :: ? : KMPT

- Ans
- 1. LNUQ
 - 2. LNQU
 - 3. JLOS
 - 4. UVWL

Question ID : 2390873132

Status : Answered

Chosen Option : 3

Q.7 Select the number that can replace the question mark (?) in the following series.

423, 407, 439, 391, 455, ?

- Ans
- 1. 375
 - 2. 420
 - 3. 365
 - 4. 360

Question ID : 2390873143

Status : Answered

Chosen Option : 1

Q.8 'Furniture' is related to 'Carpenter' in the same way as 'Garment' is related to '_____'.

- Ans
- 1. Black smith
 - 2. Tailor
 - 3. Butcher
 - 4. Cobbler

Question ID : 2390873130
Status : Answered
Chosen Option : 3

Q.9 Which letter will replace the question mark (?) in the following series?

FLO , H?Q , JPS, LRU

- Ans
- 1. M
 - 2. P
 - 3. N
 - 4. I

Question ID : 2390873129
Status : Answered
Chosen Option : 3

Q.10 If in a certain code language 'RUN' is written as '202316' and 'PEN' is written as '18716', then how will 'RANSOM' be coded in that language?

- Ans
- 1. 20316211715
 - 2. 20114131915
 - 3. 18114191315
 - 4. 1841491315

Question ID : 2390873136
Status : Answered
Chosen Option : 1

Q.11 'Candle' is related to 'Wick' in the same way as 'Pen' is related to '_____'.

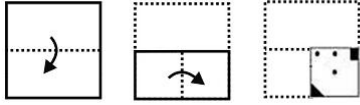
- Ans
- 1. Light
 - 2. Pencil
 - 3. Inkpot
 - 4. Nib

Question ID : 2390873131
Status : Answered
Chosen Option : 4

Q.12 Six friends A, B, C, D, E and F are standing in a row facing North. B is exactly in between F and D. E is standing exactly in between A and C. A is not a neighbor of D and F. C is not a neighbor of D but immediate right of F. C is standing in between which of the following?

- Ans
- 1. E and F
 - 2. E and B
 - 3. D and F
 - 4. A and E

Q.13 A piece of paper is folded and cut as shown below in the question figures, how it will appear when unfolded.



Ans

1.



2.



3.



4.



Q.14 Select the correct option that will fill in the blank and complete the series.

10, 17, 26, 37, ____

1. 49

2. 50

3. 54

4. 52

Q.15

In the following question, select the number which can be placed at the sign of question mark (?) from the given alternatives.

6 13 51

4 7 29

19 11 ?

Ans 1. 61

2. 16

3. 17

4. 71

Question ID : 2390873145

Status : Not Answered

Chosen Option : --

Q.16 Compare the salary of employees B, R, G, A, and M in relation to each other:

M get more salary than A and G.

R's salary is less than three persons.

B's salary is the lowest.

Whose salary is the second lowest?

Ans 1. R

2. A

3. G

4. M

Question ID : 2390873139

Status : Answered

Chosen Option : 2

Q.17 Choose the option that most closely resembles the mirror image of the given figure when mirror is placed at right side.



Ans

1.

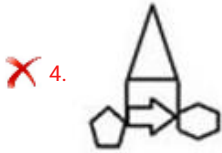


2.



3.





Question ID : 2390873151
Status : Answered
Chosen Option : 2

Q.18 Find out the two signs to be interchanged for making following equation correct:

$$6 \div 5 + 12 \times 4 - 7 = 26$$

- Ans
- 1. \div and \times
 - 2. $+$ and \times
 - 3. $+$ and $-$
 - 4. \div and $-$

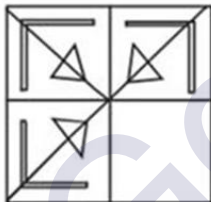
Question ID : 2390873146
Status : Answered
Chosen Option : 1

Q.19 If 'LEMON' is coded as 'NCOMP', then 'MANGO' is coded as _____.

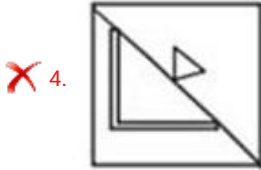
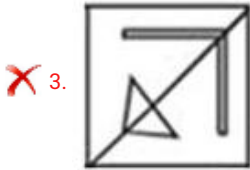
- Ans
- 1. OYPEQ
 - 2. OZRDS
 - 3. NDRHP
 - 4. RZPES

Question ID : 2390873134
Status : Answered
Chosen Option : 1

Q.20 Study the given pattern carefully and select the figure that will complete the pattern given in the question figure.



- Ans
- 1.
 - 2.



Question ID : 2390873149
Status : Answered
Chosen Option : 1

Q.21 The statements below are followed by two conclusions labelled I and II. Assuming that the information in the statements is true, even if it appears to be at variance with generally established facts, decide which conclusion(s) logically and definitely follow(s) from the information given in the statements.

Statements:

I. Some cups are glasses.

II. No plate is cup as well as glass.

Conclusions:

I. Some cups are plates.

II. All glasses are not plates.

- Ans
- 1. Only conclusion I follow
 - 2. Only conclusion II follows
 - 3. Neither conclusion I nor conclusion II follow.
 - 4. Either conclusion I or conclusion II follows.

Question ID : 2390873140
Status : Answered
Chosen Option : 2

Q.22 If in a certain code language 'HACB' is written as '8132', then how will 'DEFA' be written in that language?

- Ans
- 1. 5641
 - 2. 4156
 - 3. 4561
 - 4. 4651

Question ID : 2390873135
Status : Answered
Chosen Option : 3

Q.23 If the two signs, '÷' and 'x' and two numbers '2 and 8' are interchanged, what will be the value of the following equation?

$$4 \times 8 \div 2 = ?$$

- Ans
- 1. 16
 - 2. 15
 - 3. 8

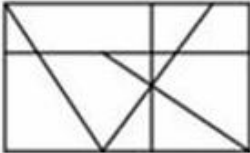
Question ID : 2390873147
 Status : Answered
 Chosen Option : 1

Q.24 Select the option in which the given figure is embedded. (Rotation is not allowed)

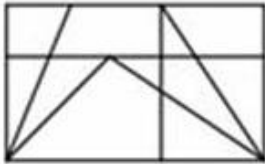


Ans

✗ 1.



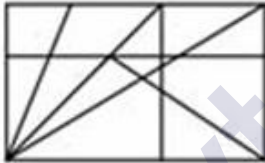
✗ 2.



✓ 3.



✗ 4.



Question ID : 2390873150
 Status : Answered
 Chosen Option : 3

Q.25 Read the given statement and conclusions carefully and decide which of the conclusions logically follow(s) from the statement.

Statement:
 Sama Veda is believed to be written around 200 BC.

Conclusions:
 I. Sama Veda is one of the oldest books in history.
 II. Sama Veda is the oldest book in history

Ans

- ✓ 1. Only Conclusion I follows.
- ✗ 2. Either conclusion I or conclusion II follows.
- ✗ 3. Neither conclusion I nor conclusion II follow.
- ✗ 4. Only Conclusions II follows.

Question ID : 2390873141

Section : Numerical Aptitude

Q.1 The cost price of an article is ₹480. It is to be sold at a profit of 12.5%. What is the selling price of the article?

- Ans
- 1. ₹560
 - 2. ₹492.5
 - 3. ₹500
 - 4. ₹540

Question ID : 2390872732
Status : Answered
Chosen Option : 4Q.2 If $4A = 6B = 5C$; then A : B : C is:

- Ans
- 1. 15:20:24
 - 2. 15:10:12
 - 3. 24:20:15
 - 4. 20:15:24

Question ID : 2390872733
Status : Answered
Chosen Option : 2

Q.3 What percent of 5.6 kg is 140 gram?

- Ans
- 1. 2
 - 2. 1.8
 - 3. 2.5
 - 4. 1.5

Question ID : 2390872730
Status : Answered
Chosen Option : 3Q.4 The value of x in the given equation

$$23^2 + \sqrt{x} = 625$$

- Ans
- 1. 9576
 - 2. 9124
 - 3. 9028
 - 4. 9216

Question ID : 2390872724
Status : Answered
Chosen Option : 4

Q.5 The Table shows the number of candidates appearing for an interview for a post in six Banks (H, I, J, K, L, M) and percentage of qualifying candidates.

Banks	Candidates Appearing	% of Candidates Qualifying
H	1500	14
I	2200	26
J	3000	17
K	980	20
L	1200	28
M	2500	21

What was the respective ratio of the number of candidates who qualified in bank H to the number of candidates who qualified in bank L?

- Ans**
- 1. 5 : 8
 - 2. 2 : 5
 - 3. 3 : 7
 - 4. 5 : 6

Question ID : 2390872746
 Status : Answered
 Chosen Option : 1

Q.6 Five years ago, the average age of four girls, was 7 years. A new girl is included then the average present age becomes 13 years. The present age of the new girl is:

- Ans**
- 1. 14 years
 - 2. 16 years
 - 3. 17 years
 - 4. 19 years

Question ID : 2390872726
 Status : Answered
 Chosen Option : 3

Q.7 The length, breadth and height of a cuboid are 18 cm, 24cm and 4 cm respectively. The volume of cube is equal to the volume of given cuboid. The side of the cube is:

- Ans**
- 1. 9 cm
 - 2. 12 cm
 - 3. 16 cm
 - 4. 8 cm

Question ID : 2390872744
 Status : Answered
 Chosen Option : 2

Q.8 A train travelling at the speed of 108 km/h crosses a pole in 32 seconds. The length (in m) of the train is:

- Ans**
- 1. 1240
 - 2. 960
 - 3. 1024
 - 4. 1200

Question ID : 2390872741

Status : Answered

Chosen Option : 2

Q.9 The Table shows the number of candidates appearing for an interview for a post in six Banks (H, I, J, K, L, M) and percentage of qualifying candidates.

Banks	Candidates Appearing	% of Candidates Qualifying
H	1500	14
I	2200	26
J	3000	17
K	980	20
L	1200	28
M	2500	21

What was the average number of candidates who appeared for the interview in bank H, J and L together?

- Ans
- 1. 2000
 - 2. 1900
 - 3. 1500
 - 4. 1800

Question ID : 2390872747

Status : Answered

Chosen Option : 2

Q.10 A cone has a radius of 20 cm and height 21 cm, the total surface area (in cm^2) of the cone is:

(Take $\pi = \frac{22}{7}$)

- Ans
- 1. 3160
 - 2. 2920
 - 3. 3080
 - 4. 3240

Question ID : 2390872742

Status : Not Answered

Chosen Option : --

Q.11 An item is marked 37.5% above the cost price. If a discount of 9.09% is allowed, then the profit percentage (correct to nearest integer) is:

- Ans
- 1. 20
 - 2. 15
 - 3. 10
 - 4. 25

Question ID : 2390872728

Status : Answered

Chosen Option : 2

Q.12 The simple interest on an amount of ₹2800 at the end of 3 years is ₹420. What would be the simple interest on an amount of ₹3200 for the same rate and the same period?

- Ans
- 1. ₹560

2. ₹640

3. ₹480

4. ₹440

Question ID : 2390872736
Status : Answered
Chosen Option : 3

Q.13 A buys a water cooler at some price and sells it to B at 20% profit. B sells it to C at 10% profit. If C bought it for ₹6666, then the cost price for B is:

Ans 1. ₹5600

2. ₹6400

3. ₹5400

4. ₹6060

Question ID : 2390872731
Status : Answered
Chosen Option : 4

Q.14 The Table shows the number of candidates appearing for an interview for a post in six Banks (H, I, J, K, L, M) and percentage of qualifying candidates.

Banks	Candidates Appearing	% of Candidates Qualifying
H	1500	14
I	2200	26
J	3000	17
K	980	20
L	1200	28
M	2500	21

The number of candidates who did not qualify in bank K was approximately what percent (correct to nearest integer) of the candidates who did not qualify in bank I?

Ans 1. 44

2. 42

3. 51

4. 48

Question ID : 2390872745
Status : Answered
Chosen Option : 1

Q.15 The median of the given data

$\frac{1}{2}, \frac{2}{7}, \frac{3}{4}, \frac{1}{3}, \frac{5}{8}$ is:

Ans 1. $\frac{1}{2}$

2. $\frac{2}{7}$

3. $\frac{3}{4}$

X 4. $\frac{1}{3}$

Question ID : 2390872729
Status : Answered
Chosen Option : 1

Q.16 Pipe A can fill a tank in 36 minutes and Pipe B can empty the tank in 45 minutes. If both the pipes are opened simultaneously, then the time (in hours) to fill the tank to half its capacity is:

- Ans
- X 1. 1.25
 - ✓ 2. 1.5
 - X 3. 1.75
 - X 4. 2

Question ID : 2390872738
Status : Not Answered
Chosen Option : --

Q.17 A is twice as good at writing a novel as B. Together they can finish writing the novel in 24 days. In how many days can A alone write the novel?

- Ans
- X 1. 18
 - X 2. 24
 - ✓ 3. 36
 - X 4. 32

Question ID : 2390872739
Status : Answered
Chosen Option : 1

Q.18 Seventy eight is divided into two parts such that four times the first part and five times the second part are in the ratio 14:15. The first part is:

- Ans
- X 1. 36
 - ✓ 2. 42
 - X 3. 30
 - X 4. 48

Question ID : 2390872734
Status : Answered
Chosen Option : 2

Q.19 The volume of prism is 288 cm^3 and height is 24 cm. The base area (in cm^2) of the prism is:

- Ans
- X 1. 10
 - ✓ 2. 12
 - X 3. 14
 - X 4. 15

Question ID : 2390872743
Status : Not Answered
Chosen Option : --

Q.20 The compound interest on an amount of ₹5120 at the rate of 12.5% (compounded annually) for 3 years is:

- Ans
- 1. ₹2280
 - 2. ₹1960
 - 3. ₹2170
 - 4. ₹2120

Question ID : 2390872737
Status : Answered
Chosen Option : 3

Q.21 If LCM of two numbers is 231, HCF of two numbers is 11 and one number is 77, the other number is:

- Ans
- 1. 57
 - 2. 37
 - 3. 33
 - 4. 47

Question ID : 2390872723
Status : Answered
Chosen Option : 3

Q.22 If A:B = 3:4, B:C = 2:3, the value of A + B : B + C : C + A is:

- Ans
- 1. 7:10:9
 - 2. 5:6:7
 - 3. 3:4:6
 - 4. 7:5:6

Question ID : 2390872735
Status : Answered
Chosen Option : 1

Q.23 The value of

$$\left(2\frac{1}{6} + 1\frac{13}{18} - \frac{1}{6}\right) \times 16 \div 4 \text{ is:}$$

- Ans
- 1. $\frac{134}{9}$
 - 2. 63
 - 3. 42
 - 4. $41\frac{1}{72}$

Question ID : 2390872725
Status : Answered
Chosen Option : 1

Q.24 A total of 57 sweets were distributed among 10 children such that each girl gets 6 sweets and each boy gets 5 sweets.
The number of boys is:

- Ans
- 1. 6
 - 2. 4
 - 3. 3
 - 4. 5

Question ID : 2390872727
Status : Answered
Chosen Option : 3

Q.25 A man is walking at a speed of 12 km per hour. After every kilometre, he takes rest for 4 minutes. How much time (in minutes) will he take to cover a distance of 8 kilometres?

- Ans
- 1. 68
 - 2. 72
 - 3. 64
 - 4. 60

Question ID : 2390872740
Status : Answered
Chosen Option : 1

Section : General awareness

Q.1 What is the state of matter formed by cooling a gas of extremely low density to Super low temperatures?

- Ans
- 1. Plasma
 - 2. Solid
 - 3. Liquid
 - 4. Bose-Einstein Condensate

Question ID : 2390872890
Status : Answered
Chosen Option : 3

Q.2 The famous cartoon character called 'Gattu' was created by the legendary cartoonist RK Laxman for which company?

- Ans
- 1. Onida
 - 2. Amul
 - 3. Nirma
 - 4. Asian Paints

Question ID : 2390872881
Status : Answered
Chosen Option : 4

Q.3 Which Indian actor has been appointed as Brand Ambassador by 'Phone Pe' in March 2019?

- Ans
- 1. Aamir Khan
 - 2. Amitabh Bachchan
 - 3. Salman Khan
 - 4. Shahrukh Khan

Question ID : 2390872878
Status : Answered
Chosen Option : 4

Q.4 In the context of the Physical features of India, what is kayal?

- Ans
- 1. Thick deposits of glacial clay
 - 2. Alluvial floodplains in North East
 - 3. Lake formed by tectonic activity
 - 4. Backwaters

Question ID : 2390872892
Status : Answered
Chosen Option : 3

Q.5 What is the SI unit of momentum?

- Ans
- 1. Kg m/sec
 - 2. Kg m
 - 3. Joule
 - 4. Ampere

Question ID : 2390872888
Status : Answered
Chosen Option : 1

Q.6 Which of the following is NOT a communicable disease?

- Ans
- 1. Chickenpox
 - 2. Tuberculosis
 - 3. Diabetes
 - 4. Cholera

Question ID : 2390872887
Status : Answered
Chosen Option : 3

Q.7 After the revolt of 1857, which of the following changes were NOT introduced by the British Government in India?

- Ans
- 1. Governor General of India became Viceroy of India
 - 2. Secretary of State for India was appointed
 - 3. Powers of East India Company was transferred to British Crown
 - 4. Proportion of India Soldiers in the British army were increased

Question ID : 2390872895
Status : Answered
Chosen Option : 4

Q.8 Tropical Evergreen Forests are NOT found in which part of India?

- Ans
- 1. North Eastern Region
 - 2. Andaman & Nicobar
 - 3. Eastern Ghats

4. Western Ghats

Question ID : 2390872894
Status : Answered
Chosen Option : 3

Q.9 Tripitaka is the holy book of which of the following religions?

- Ans 1. Buddhism
 2. Jainism
 3. Judaism
 4. Islam

Question ID : 2390872875
Status : Answered
Chosen Option : 2

Q.10 Which film won Golden Peacock Award at IFFI 2018?

- Ans 1. Walking with the wind
 2. Sealed lips
 3. Donbass
 4. Tumhari Sulu

Question ID : 2390872880
Status : Answered
Chosen Option : 4

Q.11 Which human organ is responsible for removing nitrogenous waste from the human body?

- Ans 1. Lungs
 2. Kidney
 3. Liver
 4. Pancreas

Question ID : 2390872891
Status : Answered
Chosen Option : 3

Q.12 During the reign of Iltutmish, special slaves were purchased for military service known as

- Ans 1. Iqtadar
 2. Muqtis
 3. Bandagan
 4. Samanta

Question ID : 2390872896
Status : Not Answered
Chosen Option : --

Q.13 Which of the following is NOT a weight division in boxing?

- Ans 1. Heavy weight

2. Middle weight

3. Under weight

4. Light weight

Question ID : 2390872877
Status : Answered
Chosen Option : 3

Q.14 The decisions of the Supreme Court of India are binding on _____.

Ans 1. Only District Courts

2. All Courts in India

3. Territory of individual state

4. All States & UT except J & K

Question ID : 2390872885
Status : Answered
Chosen Option : 4

Q.15 What is the amount allocated to Mahatma Gandhi National Rural Employment Guarantee Act (MGNREGA) Scheme in the Union Budget for 2019-20?

Ans 1. ₹60000 crore

2. ₹80000 crore

3. ₹50000 crore

4. ₹70000 crore

Question ID : 2390872882
Status : Answered
Chosen Option : 1

Q.16 Right to Health is guaranteed to every citizen of India under which article?

Ans 1. Article 19

2. Article 21-A

3. Article 20

4. Article 21

Question ID : 2390872884
Status : Answered
Chosen Option : 1

Q.17 Which is the highest Court of Appeal in India?

Ans 1. High Court

2. Supreme Court

3. District Court

4. Consumer Court

Question ID : 2390872886
Status : Answered
Chosen Option : 2

Q.18 Pricing Policy of Minimum Support Price follows which approach?

- Ans 1. Cost plus approach
 2. Loan plus approach
 3. Investment plus approach
 4. Land plus approach

Question ID : 2390872883
Status : Not Answered
Chosen Option : --

Q.19 First Indian woman to successfully scale Mount Makalu is _____.

- Ans 1. Priyanka Mohite
 2. Gauri Sawant
 3. Bhawana Kanth
 4. Kami Rita Sherpa

Question ID : 2390872879
Status : Not Answered
Chosen Option : --

Q.20 Which of the following rivers is NOT a part of Himalayan drainage system?

- Ans 1. Ganga
 2. Godavari
 3. Indus
 4. Brahmaputra

Question ID : 2390872893
Status : Answered
Chosen Option : 2

Q.21 Which Education Commission argued that European learning would improve the moral character of Indians?

- Ans 1. Irwin Report
 2. Wood's Despatch
 3. Linlithgow Commission
 4. Ramsay Macdonald Award

Question ID : 2390872897
Status : Answered
Chosen Option : 2

Q.22 Which of the following is NOT a colour in the Olympic Ring?

- Ans 1. Pink
 2. Green
 3. Red
 4. Blue

Question ID : 2390872876
Status : Answered

Q.23 Which part of human respiratory system provides surface for exchange of gases?

- Ans
- 1. Alveoli
 - 2. Bronchioles
 - 3. Bronchi
 - 4. Trachea

Question ID : 2390872889
Status : Not Answered
Chosen Option : --

Q.24 The famous Lingraja Temple is located in which city?

- Ans
- 1. Bhubaneshwar
 - 2. Bhopal
 - 3. Ujjain
 - 4. Kolkata

Question ID : 2390872874
Status : Answered
Chosen Option : 1

Q.25 Which of the following pillars depict rock-cut pillars?

- Ans
- 1. Gothic Pillars
 - 2. Persian Pillars
 - 3. Mauryan Pillars
 - 4. Achamenian Pillars

Question ID : 2390872873
Status : Not Answered
Chosen Option : --