

Section : General English

Q.1 Select the synonym of the given word.

Massive

- Ans  1. Tiny  
 2. Weak  
 3. Huge  
 4. Strong

Question ID : 2390872108

Status : Answered

Chosen Option : 3

Q.2 Select the meaning of the given idiom.

Hang one's head

- Ans  1. To punish  
 2. To be proud  
 3. To be greedy  
 4. To be ashamed

Question ID : 2390872111

Status : Answered

Chosen Option : 1

Q.3 Select the antonym of the given word.

Coarse

- Ans  1. Attractive  
 2. Smooth  
 3. Ragged  
 4. Shiny

Question ID : 2390872109

Status : Answered

Chosen Option : 3

Q.4 Select the most appropriate option to fill in the blank and make a grammatically correct sentence.

I'm short \_\_\_\_\_ funds at the moment so can I pay you back next week?

Ans

- 1. of
- 2. off
- 3. at
- 4. in

Question ID : 2390872105  
Status : Answered  
Chosen Option : 3

Q.5 Select the correctly spelt word.

- Ans  1. Beautifully
- 2. Beautifuly
  - 3. Beautifuli
  - 4. Beautefully

Question ID : 2390872115  
Status : Answered  
Chosen Option : 1

**Comprehension:**

In the following passage some words have been deleted. Fill in the blanks with the help of the alternatives given. Select the most appropriate option for each blank.

A helicopter can do many things that an aeroplane cannot. It can (1)\_\_\_\_\_ straight up or straight down, or sideways. It can hover over one spot, like a hawk (2)\_\_\_\_\_ the air, and it can (3)\_\_\_\_\_ or land in a very small space. A helicopter has no wings but it (4)\_\_\_\_\_ a set of blades that whirl .Because of this, it is called a "whirly-bird", and the air over the (5)\_\_\_\_\_ blades gives the lift needed to make the machine fly.

SubQuestion No : 6

Q.6 Select the most appropriate option to fill in blank No.1.

- Ans  1. flow
- 2. flew
  - 3. flying
  - 4. fly

Question ID : 2390872100  
Status : Answered  
Chosen Option : 4

**Comprehension:**

In the following passage some words have been deleted. Fill in the blanks with the help of the alternatives given. Select the most appropriate option for each blank.

A helicopter can do many things that an aeroplane cannot. It can (1)\_\_\_\_\_ straight up or straight down, or sideways. It can hover over one spot, like a hawk (2)\_\_\_\_\_ the air, and it can (3)\_\_\_\_\_ or land in a very small space. A helicopter has no wings but it (4)\_\_\_\_\_ a set of blades that whirl .Because of this, it is called a "whirly-bird", and the air over the (5)\_\_\_\_\_ blades gives the lift needed to make the machine fly.

SubQuestion No : 7

Q.7 Select the most appropriate option to fill in blank No.2.

- Ans  1. onto
- 2. on
  - 3. into

✓ 4. in

Question ID : 2390872101

Status : Answered

Chosen Option : 4

**Comprehension:**

In the following passage some words have been deleted. Fill in the blanks with the help of the alternatives given. Select the most appropriate option for each blank.

A helicopter can do many things that an aeroplane cannot. It can (1)\_\_\_\_\_ straight up or straight down, or sideways. It can hover over one spot, like a hawk (2)\_\_\_\_\_ the air, and it can (3)\_\_\_\_\_ or land in a very small space. A helicopter has no wings but it (4)\_\_\_\_\_ a set of blades that whirl .Because of this, it is called a "whirly-bird", and the air over the (5)\_\_\_\_\_ blades gives the lift needed to make the machine fly.

**SubQuestion No : 8**

**Q.8 Select the most appropriate option to fill in blank No.3.**

- Ans
- 1. take up
  - 2. take off
  - 3. take over
  - 4. take out

Question ID : 2390872102

Status : Answered

Chosen Option : 2

**Comprehension:**

In the following passage some words have been deleted. Fill in the blanks with the help of the alternatives given. Select the most appropriate option for each blank.

A helicopter can do many things that an aeroplane cannot. It can (1)\_\_\_\_\_ straight up or straight down, or sideways. It can hover over one spot, like a hawk (2)\_\_\_\_\_ the air, and it can (3)\_\_\_\_\_ or land in a very small space. A helicopter has no wings but it (4)\_\_\_\_\_ a set of blades that whirl .Because of this, it is called a "whirly-bird", and the air over the (5)\_\_\_\_\_ blades gives the lift needed to make the machine fly.

**SubQuestion No : 9**

**Q.9 Select the most appropriate option to fill in blank No.4.**

- Ans
- 1. has
  - 2. had
  - 3. have
  - 4. having

Question ID : 2390872103

Status : Answered

Chosen Option : 1

**Comprehension:**

In the following passage some words have been deleted. Fill in the blanks with the help of the alternatives given. Select the most appropriate option for each blank.

A helicopter can do many things that an aeroplane cannot. It can (1)\_\_\_\_\_ straight up or straight down, or sideways. It can hover over one spot, like a hawk (2)\_\_\_\_\_ the air, and it can (3)\_\_\_\_\_ or land in a very small space. A helicopter has no wings but it (4)\_\_\_\_\_ a set of blades that whirl .Because of this, it is called a "whirly-bird", and the air over the (5)\_\_\_\_\_ blades gives the lift needed to make the machine fly.

**SubQuestion No : 10**

**Q.10 Select the most appropriate option to fill in blank No.5.**

- Ans
- 1. pulling
  - 2. whirling
  - 3. circling
  - 4. pushing

Question ID : 2390872104  
Status : Answered  
Chosen Option : 2

Q.11 Select the meaning of the given idiom.

To be tight-lipped

- Ans
- 1. To keep quiet
  - 2. To keep a fast
  - 3. To keep records
  - 4. To keep up the spirit

Question ID : 2390872112  
Status : Answered  
Chosen Option : 1

Q.12 Select the most appropriate word to fill in the blank and make a meaningful sentence.

Searching frantically to find all the hidden jewels and cash, the burglars proceeded to \_\_\_\_\_ the entire house.

- Ans
- 1. pry
  - 2. ransack
  - 3. poach
  - 4. seek

Question ID : 2390872117  
Status : Answered  
Chosen Option : 2

Q.13 Select the word which means the same as the group of words given.

A person who loves money and hates spending it

- Ans
- 1. Lender
  - 2. Banker
  - 3. Miser
  - 4. Investor

Question ID : 2390872114  
Status : Answered  
Chosen Option : 3

Q.14 Select the most appropriate option to fill in the blank and make a grammatically correct sentence.

The quality of public health care \_\_\_\_\_ on the amount of money allocated to it.

- Ans
- 1. depend
  - 2. depends

3. depending

4. dependent

Question ID : 2390872106

Status : Answered

Chosen Option : 2

Q.15 Select the most appropriate option to substitute the underlined segment in the given sentence. If there is no need to substitute it, select 'No substitution required'.

You can buy a plastic cover to put into your computer if you're worried about dust.

Ans  1. put over

2. No substitution required

3. put onto

4. put above

Question ID : 2390872097

Status : Answered

Chosen Option : 1

Q.16 Select the word which means the same as the group of words given.

One who loses temper very soon

Ans  1. Hot-headed

2. Tampered

3. Argumentative

4. Temporal

Question ID : 2390872113

Status : Answered

Chosen Option : 2

Q.17 Identify the segment in the sentence which contains the grammatical error from the given options.

I couldn't hear what was she saying due to the noise of the planes taking off.

Ans  1. I couldn't hear

2. what was she saying

3. planes taking off.

4. due to the noise of the

Question ID : 2390872094

Status : Answered

Chosen Option : 2

Q.18 Select the antonym of the given word.

Notorious

Ans  1. Efficient

2. Infamous

3. Optimistic

4. Popular

Question ID : 2390872110  
Status : Answered  
Chosen Option : 1

Q.19 Select the most appropriate option to substitute the underlined segment in the given sentence. If there is no need to substitute it, select 'No substitution required'.

It's fascinating to watch how a baby changes and develops over time.

- Ans
- 1. changed and developed
  - 2. changing and developing
  - 3. change and develop
  - 4. No substitution required

Question ID : 2390872096  
Status : Answered  
Chosen Option : 4

Q.20 Select the most appropriate word to fill in the blank and make a meaningful sentence.

The teacher was highly \_\_\_\_\_ with my essay.

- Ans
- 1. interested
  - 2. impressed
  - 3. afflicted
  - 4. damaged

Question ID : 2390872118  
Status : Answered  
Chosen Option : 2

Q.21 Select the correctly spelt word.

- Ans
- 1. Administratur
  - 2. Administrater
  - 3. Administrator
  - 4. Aministretor

Question ID : 2390872116  
Status : Answered  
Chosen Option : 3

Q.22 Identify the segment in the sentence which contains the grammatical error from the given options.

If you play your cards right, the job could be your when she leaves.

- Ans
- 1. If you play
  - 2. the job could be your
  - 3. when she leaves
  - 4. your cards right

Question ID : 2390872093  
Status : Answered  
Chosen Option : 2

Q.23 Select the most appropriate option to substitute the underlined segment in the given sentence. If there is no need to substitute it, select 'No substitution required'.

She has decided on to do a Chinese language course.

- Ans
- 1. on doing
  - 2. to doing
  - 3. No substitution required
  - 4. on to doing

Question ID : 2390872098  
Status : Answered  
Chosen Option : 1

Q.24 Identify the segment in the sentence which contains the grammatical error from the given options.

There is no point of arguing over something so unimportant.

- Ans
- 1. so unimportant
  - 2. point of arguing
  - 3. over something
  - 4. There is no

Question ID : 2390872095  
Status : Answered  
Chosen Option : 2

Q.25 Select the synonym of the given word.

Swift

- Ans
- 1. Harsh
  - 2. Slow
  - 3. Turn
  - 4. Quick

Question ID : 2390872107  
Status : Answered  
Chosen Option : 4

Section : General Intelligence & Reasoning

Q.1 Select the set in which the numbers are related in the same way as are the numbers of the following set.

7, 18, 126

- Ans
- 1. 10, 20, 200
  - 2. 12, 80, 320
  - 3. 8, 21, 148
  - 4. 11, 30, 340

Question ID : 2390872262  
Status : Answered  
Chosen Option : 3

Q.2 Select the option that is related to the third number in the same way as the second number is related to the first number.

17 : 306 :: 21 : ?

- Ans
- 1. 459
  - 2. 462
  - 3. 460
  - 4. 464

Question ID : 2390872261  
Status : Answered  
Chosen Option : 2

Q.3 The houses of eight persons A, B, C, D, E, F, G and H are located in two rows of four houses each. Both rows are facing each other. E's house is between F and G's house. B and H's houses are at corners. B's house is diagonally located to C's house. A's house is facing B's house. Whose house is located between C's and H's house?

- Ans
- 1. G
  - 2. A
  - 3. D
  - 4. B

Question ID : 2390872254  
Status : Answered  
Chosen Option : 2

Q.4 Select the option that is related to the third letter-cluster in the same way as the second letter-cluster is related to the first letter-cluster.

HKRC : ENOF :: SRYK : ?

- Ans
- 1. PUVN
  - 2. PVUN
  - 3. OUVN
  - 4. OTVM

Question ID : 2390872249  
Status : Answered  
Chosen Option : 1

Q.5 Among five rods P, Q, R, S and T, S is lengthier than T. R is shorter than P. Q is lengthier than S. P is lengthier than only one rod. Which rod is second lengthiest among all the rods?

- Ans
- 1. Q
  - 2. P
  - 3. S
  - 4. T

Question ID : 2390872256  
Status : Answered  
Chosen Option : 3

Q.6 Which two signs and two numbers should be interchanged to make the given equation correct?



$$45 - 87 \times 20 \div 5 + 29 = 50$$

- Ans
- 1. 29 and 45, + and  $\div$
  - 2. 20 and 29,  $\div$  and  $\times$
  - 3. 20 and 29,  $\div$  and +
  - 4. 45 and 5,  $\times$  and -

Question ID : 2390872264

Status : Answered

Chosen Option : 2

Q.7 In a code language, if 'VISUAL' is written as '22181942212', then how will 'DETOX' be written in that language?

- Ans
- 1. 420204024
  - 2. 310301524
  - 3. 405302022
  - 4. 410203024

Question ID : 2390872253

Status : Answered

Chosen Option : 1

Q.8 Total 42 students are standing in a line facing east. Neha's position is 16th from the right end. Vinita is standing at 26th position from the left. If Mangala is standing at the 7th place to the right of Neha, what is Mangala's position from the left end of the row?

- Ans
- 1. 32nd
  - 2. 35th
  - 3. 33rd
  - 4. 34th

Question ID : 2390872255

Status : Answered

Chosen Option : 1

Q.9 Three statements are given, followed by three conclusions numbered I, II and III. Assuming the statements to be true, even if they seem to be at variance with commonly known facts, decide which of the conclusions logically follow(s) from the statements.

Statements:

- I. All markers are pens.
- II. No pen is pencil.
- III. Some pens are sharpeners.

Conclusions:

- I. Some pens are markers.
- II. No marker is pencil.
- III. No marker is sharpener.

- Ans
- 1. Conclusions I and III follow.
  - 2. Conclusions I and II follow.
  - 3. Conclusions II and III follow.
  - 4. Either conclusion I or II follow.

Question ID : 2390872257

Status : Answered

Q.10 In a code language, 'TEMPER' is written as 'OGVTGR', how would 'FRIEND' be written in that language?

- Ans
- 1. ITGFPG
  - 2. JSHFPG
  - 3. KTHGOG
  - 4. KTHFPG

Question ID : 2390872250

Status : Answered

Chosen Option : 4

Q.11 A figure of transparent sheet with a pattern is given below. Figure out from amongst the four options as to how the pattern would appear when the transparent sheet is folded at the dotted line.



Ans

- 1.
- 2.
- 3.
- 4.

Question ID : 2390872269

Status : Answered

Chosen Option : 1

Q.12 In a code language, if 'CAMPER' is written as '314567', and 'SORE' is written as '8976', then how will 'CEASE' be written in that language?

- Ans
- 1. 36286
  - 2. 36186
  - 3. 86315

✗ 4. 34186

Question ID : 2390872252  
 Status : Answered  
 Chosen Option : 2

**Q.13** Two statements are given, followed by four conclusions in the options. Assuming the statements to be true, even if they seem to be at variance with commonly known facts, decide which conclusion logically follows from the statements.

**Statements:**  
 All gifts are prizes.  
 Some gifts are objects.

- Ans**
- ✗ 1. All prizes are gifts.
  - ✗ 2. Some gifts are not prizes.
  - ✗ 3. No object is prize.
  - ✓ 4. Some objects are prizes.

Question ID : 2390872258  
 Status : Answered  
 Chosen Option : 4

**Q.14** Select the correct mirror image of the given letter-number cluster when the mirror is placed below the cluster.

**R Y 9 4 k m S**

- Ans**
- ✗ 1. B Y @ 7 K m 2
  - ✗ 2. B Y @ 4 k m 2
  - ✗ 3. 2 m k 7 @ Y R
  - ✓ 4. B Y @ 4 K m 2


Question ID : 2390872268  
 Status : Answered  
 Chosen Option : 4

**Q.15** Select the option figure which contains the given question figure embedded in it as its part. (Rotation is not allowed)



- Ans**
- ✗ 1.
  - ✗ 2.

✗ 3.



✓ 4.



Question ID : 2390872267  
Status : Answered  
Chosen Option : 4

Q.16 Which number will replace the question mark (?) in the following series?

15, 32, 55, ?, 127, 180

Ans ✓ 1. 86

✗ 2. 85

✗ 3. 87

✗ 4. 84

Question ID : 2390872259  
Status : Answered  
Chosen Option : 1

Q.17 Which of the following option figure will complete the pattern in the figure given below?



Ans

✗ 1.



✗ 2.



✓ 3.



✗ 4.



Question ID : 2390872266  
Status : Answered

Q.18 Select the letter Cluster that can replace the question mark (?) in the following series.

QKR, UOV, YSZ, CWD, ?

- Ans
- 1. FBH
  - 2. FZG
  - 3. GAI
  - 4. GAH

Question ID : 2390872246

Status : Answered

Chosen Option : 4

Q.19 If 'A' stands 'addition', B stands for 'division', C stands for 'subtraction' and D stands for 'multiplication', then what is the value of the following equation?

4 D (3 A 1) C 5 A (6 B 2) C 7

- Ans
- 1. 17
  - 2. 5
  - 3. 7
  - 4. 12

Question ID : 2390872263

Status : Answered

Chosen Option : 3

Q.20 Select the word-pair in which the two words are related in the same way as are the two words in the following word-pair.

Phone : Telecommunication

- Ans
- 1. Geyser : Water
  - 2. Bus : Transportation
  - 3. Newspaper : Magazine
  - 4. Refrigerator : Snow

Question ID : 2390872248

Status : Answered

Chosen Option : 2

Q.21 Which number will replace the question mark (?) in the following series?

28, 32, 48, 84, ?

- Ans
- 1. 148
  - 2. 150
  - 3. 152
  - 4. 154

Question ID : 2390872260

Status : Answered


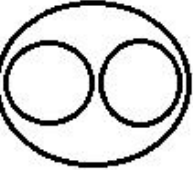
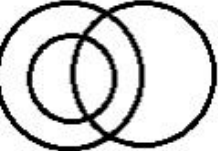
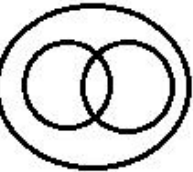
Chosen Option : 1

Q.22

Select the Venn diagram that best illustrates the relationship between the following classes.

Scooters, Vehicles, Auto-rickshaws

Ans




- ✗ 1. 
- ✓ 2. 
- ✗ 3. 
- ✗ 4. 

Question ID : 2390872270  
 Status : Answered  
 Chosen Option : 2

Q.23 Select the figure that will come next in the following figure series.



Ans

- ✗ 1. 
- ✗ 2. 
- ✗ 3. 

✓ 4.



Question ID : 2390872265  
Status : Answered  
Chosen Option : 4

Q.24 'Magician' is related to 'Magic' in the same way as 'Joker' is related to '\_\_\_\_\_':

- Ans
- 1. Movie
  - 2. Comedy
  - 3. Stage
  - 4. Ball

Question ID : 2390872247  
Status : Answered  
Chosen Option : 2

Q.25 In a code language, 'FRESH' is written as 'UIVHS'. How will 'DOUGH' be written as in that language?

- Ans
- 1. WKGSS
  - 2. VKFHS
  - 3. UKERT
  - 4. WLFTS

Question ID : 2390872251  
Status : Answered  
Chosen Option : 4

Section : Numerical Aptitude

Q.1 The Table shows the number of articles sold by six different sellers (A, B, C, D, E and F) to two different shopkeepers P and Q. Some articles are purchased by other sellers also. Total articles purchased by shopkeepers P and Q is 300 and 500 respectively.

Seller	P	Q
A	45	56
B	53	49
C	28	44
D	38	38
E	35	65
F	55	60

Total number of articles sold by seller C to shopkeeper Q is what percent of total number of articles sold by seller F to shopkeeper P?

- Ans
- 1. 75%
  - 2. 84%
  - 3. 78%
  - 4. 80%

Question ID : 2390872345

Status : Not Answered

Chosen Option : --

Q.2 A man goes to a place on car at speed of 160 km/h and comes back at lower speed. If the average speed is 64 km/h in total, then the return speed (in km/h) is:

- Ans
- 1. 25
  - 2. 40
  - 3. 80
  - 4. 60

Question ID : 2390872339

Status : Answered

Chosen Option : 2

Q.3 Let  $\Delta ABC$  and  $\Delta ABD$  be on the same base AB and between the same parallels AB and CD. Then the relation between areas of  $\Delta ABC$  and  $\Delta ABD$  will be:

- Ans
- 1. Area ( $\Delta ABC$ ) = Area ( $\Delta ABD$ )
  - 2. Area ( $\Delta ABD$ ) =  $\frac{1}{2}$  Area ( $\Delta ABC$ )
  - 3. Area ( $\Delta ABD$ ) =  $\frac{1}{3}$  Area ( $\Delta ABC$ )
  - 4. Area ( $\Delta ABC$ ) =  $\frac{1}{2}$  Area ( $\Delta ABD$ )

Question ID : 2390872342

Status : Not Answered

Chosen Option : --

Q.4 What is the difference between 0.9 and 0.9%?

- Ans
- 1. 0.198
  - 2. 0.981
  - 3. 8.91
  - 4. 0.891

Question ID : 2390872328

Status : Answered

Chosen Option : 4

Q.5 Compute  $(15 + 3 \times 1.1) \div 0.0003$

- Ans
- 1. 61000
  - 2. 16100
  - 3. 30500
  - 4. 122000

Question ID : 2390872323

Status : Answered

Chosen Option : 1

Q.6



The ratio of cost price and selling price of an article is  $c : d$ . If  $d$  is 150% of  $c$  then the percentage of profit on cost price is:

- Ans
- 1. 150%
  - 2. 100%
  - 3. 75%
  - 4. 50%

Question ID : 2390872330  
Status : Answered  
Chosen Option : 4

Q.7 How many cubes with a side 10 cm can be cut out of a cube having a side of 10 metre?

- Ans
- 1. 10,000
  - 2. 1,00,000
  - 3. 1,00,00,000
  - 4. 10,00,000

Question ID : 2390872341  
Status : Answered  
Chosen Option : 4

Q.8 The heights of students are given in cm as 161, 190, 185, 163, 172, 180, 162. The median height of the student is:

- Ans
- 1. 131
  - 2. 180
  - 3. 170
  - 4. 172

Question ID : 2390872327  
Status : Not Answered  
Chosen Option : --

Q.9 A contractor takes a contract to complete a road in 60 days and employed 105 labours. After 25 days, he found that one-third work is completed. How many more labours he requires to complete the remaining work in time?

- Ans
- 1. 75
  - 2. 105
  - 3. 150
  - 4. 45

Question ID : 2390872336  
Status : Not Answered  
Chosen Option : --

Q.10 The price that Kamal should mark on a chair which costs him ₹1500 to gain 15% after allowing a discount of 25% (in ₹) is:

- Ans
- 1. 2144
  - 2. 2300
  - 3. 2233
  - 4. 1800

Question ID : 2390872326

Status : Not Answered

Chosen Option : --

**Q.11** In an office, there are 216 tables and 264 chairs. If  $\frac{1}{6}$  of the tables and  $\frac{1}{4}$  of the chairs are broken then how many people can work in the office if each person requires one table and one chair?

- Ans**
- 1. 186
  - 2. 100
  - 3. 180
  - 4. 198

Question ID : 2390872332

Status : Not Answered

Chosen Option : --

**Q.12** The Table shows the number of articles sold by six different sellers (A, B, C, D, E and F) to two different shopkeepers P and Q. Some articles are purchased by other sellers also. Total articles purchased by shopkeepers P and Q is 300 and 500 respectively.

Seller	P	Q
A	45	56
B	53	49
C	28	44
D	38	38
E	35	65
F	55	60

What is the average number of articles sold to shopkeeper P by the sellers A, B, C and D together?

- Ans**
- 1. 42
  - 2. 43
  - 3. 41
  - 4. 44

Question ID : 2390872343

Status : Not Answered

Chosen Option : --

**Q.13** What is the least number of square tiles required to pave the floor of a room 15m 17cm long and 9m 43cm broad?

- Ans**
- 1. 830
  - 2. 840
  - 3. 851
  - 4. 841

Question ID : 2390872321

Status : Not Answered

Chosen Option : --

**Q.14** A and B together can complete some work in 36 days, B and C together can complete the same work in 60 days, A and C together can complete the same work in 45 days. In how many days, B alone can complete the same work?

- Ans**
- 1. 60 days
  - 2. 90 days
  - 3. 180 days

4. 100 days

Question ID : 2390872337  
Status : Not Answered  
Chosen Option : --

Q.15

$$\sqrt{\frac{25.60}{72.90}} + \sqrt{\frac{0.10}{8.10}} = ?$$

Ans

1.  $\frac{27}{30}$

2.  $\frac{27}{20}$

3.  $\frac{19}{27}$

4.  $\frac{27}{28}$

Question ID : 2390872322  
Status : Answered  
Chosen Option : 3

Q.16 A sold his pen at a profit of ₹13. He calculated the profit percentage on selling price and found it to be 20%. The cost price (in ₹) of the pen is:

Ans

1. 39

2. 65

3. 52

4. 13

Question ID : 2390872329  
Status : Answered  
Chosen Option : 3

Q.17 A sum of ₹50,000 is lent partly at 4% and remaining at 5% per annum. If the yearly simple interest on the average is 4.6%, the two parts are:

Ans

1. ₹22500, ₹27500

2. ₹20000, ₹30000

3. ₹15000, ₹35000

4. ₹25000, ₹25000

Question ID : 2390872334  
Status : Not Answered  
Chosen Option : --

Q.18 Each wheel of a bus is making 7 revolutions per second. If the diameter of a wheel is 56 cm, then the speed of the bus (in cm/sec) would be:

Ans

1. 616

2. 176

3. 1232

4. 1000

Question ID : 2390872340  
Status : Answered  
Chosen Option : 2

**Q.19** A man invested a sum of money at compound interest. It amounted to ₹12100 in two years and to ₹13310 in three years. The rate of interest per annum is:

- Ans
- 1. 10%
  - 2. 12.5%
  - 3. 11%
  - 4. 9.5%

Question ID : 2390872335  
Status : Answered  
Chosen Option : 3

**Q.20** If three numbers are in the ratio 2 : 3 : 5 and the twice of their sum is 200. The square of the largest of three numbers is:

- Ans
- 1. 625
  - 2. 1000
  - 3. 2250
  - 4. 2500

Question ID : 2390872331  
Status : Answered  
Chosen Option : 4

**Q.21** If  $l : m : n = 1 : 2 : 4$ , then  $\sqrt{5l^2 + m^2 + n^2}$  is equal to:

- Ans
- 1.  $4n$
  - 2.  $5l$
  - 3.  $2m$
  - 4. 5

Question ID : 2390872333  
Status : Answered  
Chosen Option : 2

**Q.22** Out of four numbers the average of the first three is 16 and that of the last three is 15. If the last number is 21 then the first number is:

- Ans
- 1. 22
  - 2. 21
  - 3. 24
  - 4. 28

Question ID : 2390872325  
Status : Answered  
Chosen Option : 3

Q.23

The Table shows the number of articles sold by six different sellers (A, B, C, D, E and F) to two different shopkeepers P and Q. Some articles are purchased by other sellers also. Total articles purchased by shopkeepers P and Q is 300 and 500 respectively.

Seller	P	Q
A	45	56
B	53	49
C	28	44
D	38	38
E	35	65
F	55	60

What is the difference between total articles sold to P and Q by all the sellers other than A, B, C, D, E and F?

- Ans
- 1. 142
  - 2. 162
  - 3. 152
  - 4. 172

Question ID : 2390872344  
 Status : Not Answered  
 Chosen Option : --

**Q.24** The average marks obtained by a student in 9 subjects is 98. On subsequent verification it was found that the marks obtained by him in a subject was wrongly copied as 86 instead of 68. The correct average of the marks obtained by him is:

- Ans
- 1. 95
  - 2. 94
  - 3. 96
  - 4. 97

Question ID : 2390872324  
 Status : Answered  
 Chosen Option : 3

**Q.25** Two trains each having a length of 160 meters moving in opposite direction crossed each other in 9 seconds. If one train crossed a 200-metre-long platform in 18 seconds, then the ratio of their speeds is:

- Ans
- 1. 9 : 7
  - 2. 2 : 3
  - 3. 5 : 8
  - 4. 3 : 4

Question ID : 2390872338  
 Status : Answered  
 Chosen Option : 2

Section : General awareness

**Q.1** Which of the following awards is given to recognise players 'Lifetime Achievement in Sports'?

- Ans
- 1. Rajiv Ghandi Khel Ratna
  - 2. Arjuna Award
  - 3. Dronacharya Award

✓ 4. Dhyan Chand Award

Question ID : 2390872174  
Status : Answered  
Chosen Option : 1

Q.2 What is the colour of copper sulphate?

- Ans
- 1. Red
  - 2. Colourless
  - 3. Black
  - 4. Blue

Question ID : 2390872189  
Status : Answered  
Chosen Option : 4

Q.3 Which of the following is associated to the Sanskrit Mahabharata?

- Ans
- 1. Yuddha Kanda
  - 2. Kathasaritsagar
  - 3. Shanti Parva
  - 4. Gitagovinda

Question ID : 2390872173  
Status : Answered  
Chosen Option : 4

Q.4 Trimbakeshwar is the source of which of the following rivers?

- Ans
- 1. Krishna
  - 2. Kaveri
  - 3. Mahanadi
  - 4. Godavari

Question ID : 2390872192  
Status : Answered  
Chosen Option : 4

Q.5 Which of the following is NOT a Federal country?

- Ans
- 1. Canada
  - 2. Brazil
  - 3. Australia
  - 4. China

Question ID : 2390872183  
Status : Answered  
Chosen Option : 4

Q.6 The Chaiturghar Fort in Korba, Chhattisgarh is home to a famous and unique temple. Which is that temple?

- Ans
- 1. Mahishasur Mardini temple

2. Adi Shankaracharya temple

3. Varaha Murthy temple

4. Yudhistira temple

Question ID : 2390872172  
Status : Answered  
Chosen Option : 2

Q.7 Forming of Association in India is \_\_\_\_\_.

Ans  1. Constitutional Right

2. Fundamental Right

3. Natural Right

4. Legal Right

Question ID : 2390872182  
Status : Answered  
Chosen Option : 1

Q.8 Anthrax is caused by :

Ans  1. Bacteria

2. Fungus

3. Protozoa

4. Virus

Question ID : 2390872187  
Status : Answered  
Chosen Option : 2

Q.9 Hypothalamus is part of which organ of the Human body?

Ans  1. Brain

2. Heart

3. Spinal Cord

4. Liver

Question ID : 2390872186  
Status : Answered  
Chosen Option : 3

Q.10 Who among the following Indian has NOT received the 'Nobel Prize'?

Ans  1. Mother Teresa

2. Amartya Sen

3. Kailash Satyarthi

4. Dr. A.P.J Abdul Kalam

Question ID : 2390872176  
Status : Answered  
Chosen Option : 4

Q.11 Which team won Asia Cup 2018 held in UAE?

- Ans
- 1. Pakistan
  - 2. India
  - 3. Bangladesh
  - 4. Sri Lanka

Question ID : 2390872175  
Status : Answered  
Chosen Option : 2

Q.12 India is separated from Sri Lanka by \_\_\_\_\_.

- Ans
- 1. 9° Channel
  - 2. Dover Strait
  - 3. 10° Channel
  - 4. Palk Strait

Question ID : 2390872191  
Status : Answered  
Chosen Option : 3

Q.13 In which Congress Session, was the demand for 'Purna Swaraj' adopted?

- Ans
- 1. Surat Session
  - 2. Lahore Session
  - 3. Kanpur Session
  - 4. Karachi Session

Question ID : 2390872195  
Status : Answered  
Chosen Option : 2

Q.14 Who maintains Buffer Stock of Food Grains in India?

- Ans
- 1. Ministry of Agriculture
  - 2. NAFED
  - 3. FCI
  - 4. FICCI

Question ID : 2390872179  
Status : Answered  
Chosen Option : 3

Q.15 Which act of British Parliament transferred the powers of the East India Company to British Crown?

- Ans
- 1. Charter Act, 1835
  - 2. Govt of India Act, 1858
  - 3. Charter Act, 1818
  - 4. Charter Act, 1853

Question ID : 2390872193  
Status : Answered  
Chosen Option : 2



Q.16 The archaeological site of Koldihwa is located at:

- Ans  1. Uttar Pradesh  
 2. Bihar  
 3. Madhya Pradesh  
 4. Maharashtra

Question ID : 2390872194  
Status : Answered  
Chosen Option : 1

Q.17 Which of the following rivers drains into the Bay of Bengal?

- Ans  1. Narmada  
 2. Sutlej  
 3. Krishna  
 4. Tapi

Question ID : 2390872190  
Status : Answered  
Chosen Option : 3

Q.18 Which of the following pairs of Base-Source are correctly matched?

- Ans  1. Ammonium Hydroxide - Window cleaner  
 2. Sodium Hydroxide - Milk of magnesia  
 3. Magnesium Hydroxide - Lime water  
 4. Calcium Hydroxide - Soap

Question ID : 2390872185  
Status : Answered  
Chosen Option : 1

Q.19 With reference to the development of a country, which of the following countries is associated to the Gross National Happiness?

- Ans  1. Belgium  
 2. Bhutan  
 3. Bangladesh  
 4. Indonesia

Question ID : 2390872181  
Status : Answered  
Chosen Option : 1

Q.20 Which of the following is a harvest festival of India?

- Ans  1. Darpka Teshi  
 2. Teej  
 3. Bonalu  
 4. Lohri

Question ID : 2390872171

Status : Answered

Chosen Option : 4

Q.21 'My Life, My Mission' is an autobiography of \_\_\_\_\_.

- Ans
- 1. Mahatma Gandhi
  - 2. Ratan Tata
  - 3. Guru Ram Rahim
  - 4. Baba Ramdev

Question ID : 2390872177

Status : Answered

Chosen Option : 2

Q.22 Which Central agency issues currency notes on behalf of Central Government?

- Ans
- 1. State Bank of India
  - 2. IRDA
  - 3. Reserve Bank of India
  - 4. SEBI

Question ID : 2390872180

Status : Answered

Chosen Option : 3

Q.23 Process of Coating of iron with zinc to protect it from rusting is known as \_\_\_\_\_.

- Ans
- 1. Sedimentation
  - 2. Neutralisation
  - 3. Galvanisation
  - 4. Salinization

Question ID : 2390872188

Status : Answered

Chosen Option : 3

Q.24 Who has been appointed as Chief of RAW on June 26, 2019?

- Ans
- 1. Mohan Ranade
  - 2. Samant Goel
  - 3. Alok Vardhan
  - 4. Arvind Kumar

Question ID : 2390872178

Status : Answered

Chosen Option : 3

Q.25 Who conducts the elections of Lok Sabha in India?

- Ans
- 1. Election Commission
  - 2. Union Public Service Commission
  - 3. Parliament
  - 4. Delimitation Commission

GovtJobsAlert.In