

Section : General English

Q.1 Select the most appropriate word for the given group of words.

The branch of science concerned with the bodily structure of humans, animals, and other living organisms

- Ans
- 1. Gastronomy
 - 2. Botany
 - 3. Astronomy
 - 4. Anatomy

Question ID : 2390872165
Status : Answered
Chosen Option : 4

Q.2 Select the most appropriate word to fill in the blank and make a meaningful sentence.

There are some dates or periods of time in the history of the world that are so _____ that everyone knows and remembers them.

- Ans
- 1. representative
 - 2. significant
 - 3. momentary
 - 4. trivial

Question ID : 2390872170
Status : Answered
Chosen Option : 2

Q.3 Select the most appropriate option to fill in the blank and make a grammatically correct sentence.

If children spend too much time watching television, they can create health problems for _____.

- Ans
- 1. itself
 - 2. himself
 - 3. oneself
 - 4. themselves

Question ID : 2390872157
Status : Answered
Chosen Option : 4

Q.4 Select the most appropriate synonym of the given word.

Engage

- Ans 1. Occupy
 2. Release
 3. Dismiss
 4. Settle

Question ID : 2390872159
Status : Answered
Chosen Option : 1

Q.5 Select the most appropriate option to substitute the underlined segment. If there is no need to substitute it, select No improvement.

Hardly he had entered the station, when the train whistled.

- Ans 1. hardly he entered
 2. hardly had he entered
 3. No improvement
 4. he hardly had entered

Question ID : 2390872148
Status : Answered
Chosen Option : 2

Q.6 Select the most appropriate synonym of the given word.

Revive

- Ans 1. Review
 2. Ruin
 3. Repeat
 4. Recover

Question ID : 2390872160
Status : Answered
Chosen Option : 4

Q.7 Select the correctly spelt word.

- Ans 1. Referance
 2. Recommend
 3. Repitition
 4. Reciept

Question ID : 2390872168
Status : Marked For Review
Chosen Option : 2

Comprehension:

In the following passage some words have been deleted. Fill in the blanks with the help of the alternatives given. Select the most appropriate option for each blank.

Every Monday, on his way back from work, Bepin Choudhury would drop in at Kalicharan's bookshop in New Market to buy books. He (1)_____ to buy at least five at a time to last him through the week. He lived alone, was not a good mixer, had few friends, and (2)_____ like

spending time in (3)_____ chat. Today, (4)_____ Kalicharan's, Bepin Babu had the feeling that someone was (5)_____ him from close quarters.

SubQuestion No : 8

Q.8 Select the most appropriate option to fill in blank No.1.

- Ans
- 1. having
 - 2. had
 - 3. has
 - 4. have

Question ID : 2390872152

Status : Answered

Chosen Option : 2

Comprehension:

In the following passage some words have been deleted. Fill in the blanks with the help of the alternatives given. Select the most appropriate option for each blank.

Every Monday, on his way back from work, Bepin Choudhury would drop in at Kalicharan's bookshop in New Market to buy books. He (1)_____ to buy at least five at a time to last him through the week. He lived alone, was not a good mixer, had few friends, and (2)_____ like spending time in (3)_____ chat. Today, (4)_____ Kalicharan's, Bepin Babu had the feeling that someone was (5)_____ him from close quarters.

SubQuestion No : 9

Q.9 Select the most appropriate option to fill in blank No.2.

- Ans
- 1. don't
 - 2. didn't
 - 3. do
 - 4. did

Question ID : 2390872153

Status : Answered

Chosen Option : 2

Comprehension:

In the following passage some words have been deleted. Fill in the blanks with the help of the alternatives given. Select the most appropriate option for each blank.

Every Monday, on his way back from work, Bepin Choudhury would drop in at Kalicharan's bookshop in New Market to buy books. He (1)_____ to buy at least five at a time to last him through the week. He lived alone, was not a good mixer, had few friends, and (2)_____ like spending time in (3)_____ chat. Today, (4)_____ Kalicharan's, Bepin Babu had the feeling that someone was (5)_____ him from close quarters.

SubQuestion No : 10

Q.10 Select the most appropriate option to fill in blank No.3.

- Ans
- 1. active
 - 2. idle
 - 3. empty
 - 4. free

Question ID : 2390872154

Status : Answered

Chosen Option : 2

Comprehension:

Download More Papers From GovtJobsAlert.In

In the following passage some words have been deleted. Fill in the blanks with the help of the alternatives given. Select the most appropriate option for each blank.

Every Monday, on his way back from work, Bepin Choudhury would drop in at Kalicharan's bookshop in New Market to buy books. He (1)_____ to buy at least five at a time to last him through the week. He lived alone, was not a good mixer, had few friends, and (2)_____ like spending time in (3)_____ chat. Today, (4)_____ Kalicharan's, Bepin Babu had the feeling that someone was (5)_____ him from close quarters.

SubQuestion No : 11

Q.11 Select the most appropriate option to fill in blank No.4.

- Ans
- 1. in
 - 2. by
 - 3. at
 - 4. on

Question ID : 2390872155
Status : Answered
Chosen Option : 3

Comprehension:

In the following passage some words have been deleted. Fill in the blanks with the help of the alternatives given. Select the most appropriate option for each blank.

Every Monday, on his way back from work, Bepin Choudhury would drop in at Kalicharan's bookshop in New Market to buy books. He (1)_____ to buy at least five at a time to last him through the week. He lived alone, was not a good mixer, had few friends, and (2)_____ like spending time in (3)_____ chat. Today, (4)_____ Kalicharan's, Bepin Babu had the feeling that someone was (5)_____ him from close quarters.

SubQuestion No : 12

Q.12 Select the most appropriate option to fill in blank No.5.

- Ans
- 1. observing
 - 2. recognizing
 - 3. looking
 - 4. chasing

Question ID : 2390872156
Status : Answered
Chosen Option : 1

Q.13 Identify the segment in the sentence which contains the grammatical error. If there is no error, select 'no error'

I don't think I meet him before

- Ans
- 1. him before
 - 2. I meet
 - 3. No error
 - 4. I don't think

Question ID : 2390872147
Status : Answered
Chosen Option : 2

Q.14 Select the most appropriate option to substitute the underlined segment. If there is no need to substitute it, select No improvement.

One of the factor for her failure is the lack of concentration in studies.

- Ans
- 1. each of the factors
 - 2. No improvement
 - 3. one of a factor
 - 4. one of the factors

Question ID : 2390872149
Status : Answered
Chosen Option : 4

Q.15 Select the most appropriate meaning of the given idiom.

Butterflies in one's stomach

- Ans
- 1. To be feeling unwell
 - 2. To be angry at something
 - 3. A feeling of nervousness
 - 4. To be hungry

Question ID : 2390872164
Status : Answered
Chosen Option : 3

Q.16 Identify the segment in the sentence which contains the grammatical error.

She misplaced her spectacles and now finding it difficult to read.

- Ans
- 1. and now finding it
 - 2. her spectacles
 - 3. She misplaced
 - 4. difficult to read

Question ID : 2390872146
Status : Answered
Chosen Option : 3

Q.17 Select the correctly spelt word.

- Ans
- 1. Jelous
 - 2. Nourish
 - 3. Disgise
 - 4. Priorety

Question ID : 2390872167
Status : Answered
Chosen Option : 2

Q.18 Select the most appropriate antonym of the word.

BOISTEROUS

- Ans
- 1. Peaceful
 - 2. Noisy
 - 3. Stormy
 - 4. Loud

Question ID : 2390872162
Status : Answered
Chosen Option : 1

Q.19 Select the most appropriate antonym of the word.

FEASIBLE

- Ans 1. Implausible
 2. Profitable
 3. Attainable
 4. Achievable

Question ID : 2390872161
Status : Marked For Review
Chosen Option : 1

Q.20 Identify the segment in the sentence which contains the grammatical error. If there is no error, select 'no error'

The climate of Dehradun is better than Meerut.

- Ans 1. no error
 2. than Meerut
 3. The climate of Dehradun
 4. is better

Question ID : 2390872145
Status : Answered
Chosen Option : 1

Q.21 Select the most appropriate option to substitute the underlined segment. If there is no need to substitute it, select No improvement.

If I was you I would not sign the document.

- Ans 1. No improvement
 2. If I were you
 3. if I have been you
 4. if I had been you

Question ID : 2390872150
Status : Marked For Review
Chosen Option : 2

Q.22 Select the most appropriate word for the given group of words.

A list of names or things in a special order

- Ans 1. Directory
 2. Catalogue
 3. Atlas
 4. Dictionary

Question ID : 2390872166
Status : Marked For Review

Q.23 Select the most appropriate meaning of the given idiom.

A needle in a haystack

- Ans
- 1. To create a state of confusion
 - 2. To be of minor importance
 - 3. To be involved in unnecessary activity
 - 4. Something that is very difficult to locate

Question ID : 2390872163

Status : Answered

Chosen Option : 4

Q.24 Select the most appropriate word to fill in the blank and make a meaningful sentence.

Mother _____ some food for the old beggar woman.

- Ans
- 1. set aside
 - 2. set up
 - 3. set in
 - 4. set out

Question ID : 2390872169

Status : Answered

Chosen Option : 1

Q.25 Select the most appropriate option to fill in the blank and make a grammatically correct sentence.

Susan finally arrived at the party at midnight, but by then, most of the guests _____.

- Ans
- 1. had left
 - 2. left
 - 3. having left
 - 4. have left

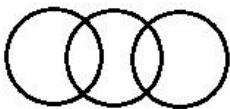
Question ID : 2390872158

Status : Marked For Review

Chosen Option : 1

Section : General Intelligence & Reasoning

Q.1 Select the set of classes which is best represented by the following venn diagram.



- Ans
- 1. Doctors, Mothers, Women
 - 2. Fathers, Sons, Engineers
 - 3. Carpenter, Doctors, Men
 - 4. Girls, Children, Human beings

Q.2 Select the option that is related to the third letter-cluster in the same way as the second letter-cluster is related to the first letter-cluster.

KSJ : MUL :: RCU : ?

- Ans
- 1. TDV
 - 2. TEV
 - 3. UEW
 - 4. TEW

Q.3 Select the correct mirror image of the given figure when the mirror is placed to the right side of the figure.



Ans

- 1.
- 2.
- 3.
- 4.

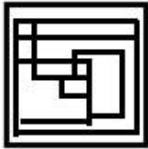
Q.4 Select the option figure which contains figure X embedded in it as its part. (Rotation is not allowed)



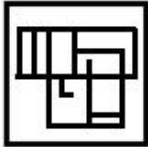
Ans

- 1.

✗ 2.



✗ 3.



✗ 4.



Question ID : 2390872317
 Status : Answered
 Chosen Option : 1

Q.5 Select the set in which the numbers are related in the same way as are the numbers of the following set.

46, 92, 69

- Ans
- ✗ 1. 56, 78, 60
 - ✗ 2. 48, 82, 63
 - ✗ 3. 50, 88, 59
 - ✓ 4. 34, 72, 53


Question ID : 2390872312
 Status : Not Attempted and Marked For Review
 Chosen Option : --

Q.6 Select the figure that will come next in the following figure series.



Ans

✗ 1.




✗ 2.



✓ 3.



✗ 4.



Question ID : 2390872315
Status : Answered
Chosen Option : 3

Q.7 Select the word-pair in which the two words are related in the same way as are the two words in the following word-pair.

Toad : Amphibian

- Ans
- ✗ 1. Crab : Amphibian
 - ✗ 2. Snail : Amphibian
 - ✗ 3. Squirrel : Reptile
 - ✓ 4. Tortoise : Reptile

Question ID : 2390872298
Status : Answered
Chosen Option : 1

Q.8 In a code language, if 'PARTY' is written as '161182025', then how will 'CAMERA' be written in that language?

- Ans
- ✗ 1. 32116181
 - ✗ 2. 24116126
 - ✓ 3. 31135181
 - ✗ 4. 31451926

Question ID : 2390872302
Status : Answered
Chosen Option : 3

Q.9 'Creative' is related to 'Innovative' in the same way as 'Clear' is related to '_____':

- Ans
- ✗ 1. Opaque
 - ✓ 2. Transparent
 - ✗ 3. Covered
 - ✗ 4. Smooth

Question ID : 2390872297
Status : Answered
Chosen Option : 2

Q.10 Which two numbers should be interchanged to make the given equation correct?

$$55 + 32 - 4 \times (1 \times 12) + (16 \div 4) = 31$$

- Ans
- 1. 12 and 32
 - 2. 55 and 32
 - 3. 12 and 16
 - 4. 16 and 32

Question ID : 2390872314

Status : **Not Attempted and Marked For Review**

Chosen Option : --

Q.11 In a code language, 'EARNING' is written as 'SBFOHOJ', how would 'AUDIBLE' be written in that language?

- Ans
- 1. FVBJFNC
 - 2. DVBJFMC
 - 3. EUBKFMC
 - 4. EVBJFMC

Question ID : 2390872300

Status : **Answered**

Chosen Option : 4

Q.12 Eight friends A, B, C, D, E, F, G and H are standing in two lines of four students each during school prayer. H is after D. C is just before A. E is after B. C and G are in the front positions. F is between G and B. Which two persons are standing at third position in both the rows?

- Ans
- 1. B and H
 - 2. B and F
 - 3. D and B
 - 4. D and F

Question ID : 2390872304

Status : **Answered**

Chosen Option : 3

Q.13 Which of the following letter cluster will replace the question mark (?) to complete the given series?

KUCJ, NRFG, QOID, ?

- Ans
- 1. ULLA
 - 2. TKLB
 - 3. TLLA
 - 4. ULKA

Question ID : 2390872296

Status : **Answered**

Chosen Option : 3

Q.14 Two statements are given, followed by three conclusions numbered I, II and III. Assuming the statements to be true, even if they seem to be at variance with commonly known facts, decide which of the conclusions logically follow(s) from the statements.

Statements:

- I. All posters are pamphlets.
- II. All envelopes are pamphlets.

Conclusions:

- I. All pamphlets are envelopes.
- II. Some pamphlets are posters.
- III. Some posters are envelopes.

- Ans
- 1. Only Conclusion II follows.
 - 2. Conclusions I and II follow.
 - 3. Conclusions II and III follow.
 - 4. Only Conclusion III follows.

Question ID : 2390872307

Status : Answered

Chosen Option : 1

Q.15 Three statements are given, followed by three conclusions numbered I, II and III. Assuming the statements to be true, even if they seem to be at variance with commonly known facts, decide which of the conclusions logically follow(s) from the statements.

Statements:

- I. Some ornaments are diamonds.
- II. Some diamonds are necklaces.
- III. All necklaces are rings.

Conclusions:

- I. Some rings are diamonds.
- II. Some rings are necklaces.
- III. No ring is diamond.

- Ans
- 1. Either conclusion I or III follows.
 - 2. Conclusions I and II follow
 - 3. Conclusions I and III follow
 - 4. Only Conclusion II follows.

Question ID : 2390872308

Status : Answered

Chosen Option : 2

Q.16 Five persons participated in a race. Kartik finished race immediately after Prabhjot. Faraz finished just before Lakshya. Anil finished race just before Faraz. Anil came at third place. Who came second in the race?

- Ans
- 1. Faraz
 - 2. Lakshya
 - 3. Kartik
 - 4. Prabhjot

Question ID : 2390872306

Status : Answered

Chosen Option : 3

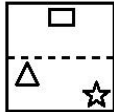
Q.17 In a code language, 'DEVELOP' is written as 'POLEVED', then how would 'SCRIBBLE' be written in that language?

- Ans
- 1. ELBBISCR
 - 2. ELBBIRCS
 - 3. CSIRBBEL
 - 4. RCSIBELB

Q.18 Some players are standing in a queue. Veer is 15th from the front and Sanket is 20th from the rear end of the queue. Aryan is after Veer but has two players between him and Veer. Sanket is immediately after Aryan. How many players are there in the queue?

- Ans
- 1. 37
 - 2. 39
 - 3. 38
 - 4. 36

Q.19 A figure of transparent sheet with a pattern is given below. Figure out from amongst the four options as to how the pattern would appear when the transparent sheet is folded at the dotted line.



Ans

- 1.
- 2.
- 3.
- 4.

Q.20 Which number will replace the question mark (?) in the following series?

65, 67, 69, 81, 93, ?

Ans

- 1. 137
- 2. 117
- 3. 113
- 4. 123

Question ID : 2390872309
Status : Not Answered
Chosen Option : --

Q.21 In a code language, if CITRUS' is written as '982154', 'YOU' is written as '365' then how will 'SURITY' be written in that language?

- Ans
- 1. 651832
 - 2. 451923
 - 3. 451823
 - 4. 481623

Question ID : 2390872303
Status : Answered
Chosen Option : 3

Q.22 Select the option that is related to the third number in the same way as the second number is related to the first number.

10 : 1010 :: 11 : ?

- Ans
- 1. 1342
 - 2. 1331
 - 3. 1352
 - 4. 1351

Question ID : 2390872311
Status : Answered
Chosen Option : 1

Q.23 One term in the given number series is wrong. Find out the wrong term.

120, 143, 168, 196, 224

- Ans
- 1. 224
 - 2. 196
 - 3. 168
 - 4. 120

Question ID : 2390872310
Status : Marked For Review
Chosen Option : 1

Q.24 Which two signs should be interchanged to make the given equation correct?

$52 + 64 - 16 \div 36 \times 6 = 20$

- Ans
- 1. - and \div
 - 2. \div and +
 - 3. \times and \div

✗ 4. + and ×

Question ID : 2390872313
 Status : Not Attempted and Marked For Review
 Chosen Option : --

Q.25 Which of the following option figure will complete the pattern in the figure given below?



Ans

- ✗ 1.
- ✗ 2.
- ✗ 3.
- ✓ 4.

Question ID : 2390872316
 Status : Answered
 Chosen Option : 4

Section : Numerical Aptitude

Q.1 The ratio of speeds of two aeroplanes is 11:18. If the first aeroplane covers a distance of 1650 km in 3 hours, then what is the speed (in m/s) of the second aeroplane?

- ✗ 1. 225
- ✗ 2. 200
- ✗ 3. 270
- ✓ 4. 250

Question ID : 2390872389
 Status : Answered
 Chosen Option : 4

Q.2 What is the sum of the digits of that two-digit prime number for which the numbers in the units and the tens place are the same?

- Ans
- 1. 18
 - 2. 2
 - 3. 10
 - 4. 6

Question ID : 2390872373

Status : Not Attempted and Marked For Review

Chosen Option : --

Q.3 A set of data is given. The mean of the set is 35 while the median is set as 60. Find the mode of the data.

- Ans
- 1. 25
 - 2. 30
 - 3. 20
 - 4. 110

Question ID : 2390872377

Status : Not Attempted and Marked For Review

Chosen Option : --

Q.4 On a particular transaction, a shopkeeper earns 400% on cost. If the cost rises by 100% and the selling price remains unchanged, the ratio between the new profit and the selling price is:

- Ans
- 1. 1 : 3
 - 2. 3 : 5
 - 3. 2 : 5
 - 4. 1 : 2

Question ID : 2390872380

Status : Not Attempted and Marked For Review

Chosen Option : --

Q.5 An eraser costs ₹3. The cost of 20 erasers is equal to the cost of three pens. The cost of one pen is equal to the cost of two pencils and the cost of six pencils is equal to the cost of five markers. What is the cost of one marker?

- Ans
- 1. ₹15
 - 2. ₹9
 - 3. ₹13.50
 - 4. ₹12

Question ID : 2390872383

Status : Answered

Chosen Option : 4

Q.6 The selling price of a product was equal to 50% of the cost price. Two successive discounts were offered on the product. If the first discount was 20%, then how much was the other discount?

- Ans
- 1. 25%
 - 2. 33.33%
 - 3. 30%

✓ 4. 37.5%

Question ID : 2390872378

Status : **Not Attempted and Marked For Review**

Chosen Option : --

Q.7 A scooter was bought for ₹30000 and a repair charge of ₹3000 was incurred. It was sold for ₹39600. What was the profit percentage?

- Ans
- 1. 10
 - 2. 20
 - 3. 25
 - 4. 15

Question ID : 2390872379

Status : **Answered**

Chosen Option : 2

Q.8 If $a : b = 2 : 5$, $b : c = 4 : 7$ and $c : d = 9 : 14$, then what is $a : b : c : d$?

- Ans
- 1. 36 : 180 : 315 : 490
 - 2. 72 : 180 : 315 : 490
 - 3. 72 : 180 : 245 : 490
 - 4. 72 : 144 : 315 : 490

Question ID : 2390872381

Status : **Answered**

Chosen Option : 2

Q.9 A person was asked to make a guess about his own weight. He guessed that it is greater than 70 kg but less than 80 kg. His friend guessed that it more than 74 kg but less than 84 kg. His mother said that it is less than 78 kg. Given that the weight is a whole number and that all three guessed correctly, what is the average (in kg) of the possible weights?

- Ans
- 1. 76.5 kg
 - 2. 76 kg
 - 3. 77 kg
 - 4. 75 kg

Question ID : 2390872374

Status : **Answered**

Chosen Option : 2

Q.10 If two cubes made of iron, each of side 10 mm are dropped in a tumbler containing 200 c.c. of water, what will be the net volume (in ml) of the contents of the tumbler?

- Ans
- 1. 200002
 - 2. 200001
 - 3. 202
 - 4. 201

Question ID : 2390872391

Status : **Not Attempted and Marked For Review**

Q.11 A principal gets increased by 21% in 2 years at compound interest. What will be the simple interest on ₹1000 for 4 years at the same rate of interest?

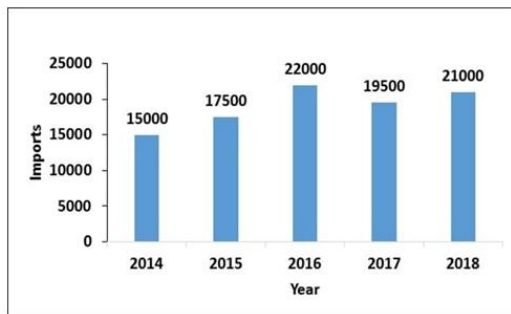
- Ans**
- 1. ₹320
 - 2. ₹400
 - 3. ₹360
 - 4. ₹420

Question ID : 2390872384

Status : Answered

Chosen Option : 4

Q.12 The following Bar chart presents the quantity (in million kg) of imports of a particular item made by India during 2014-2018. For how many years, is the quantity imported less than the overall average of imports of the said item during the given period?



- Ans**
- 1. 4
 - 2. 2
 - 3. 3
 - 4. 1

Question ID : 2390872395

Status : Answered

Chosen Option : 2

Q.13 What is the curved surface area (in cm^2) of a right circular cylinder whose height and diameter are 10 cm and 8 cm respectively?

- Ans**
- 1. 80π
 - 2. 20π
 - 3. 40π
 - 4. 160π

Question ID : 2390872392

Status : Marked For Review

Chosen Option : 1

Q.14 A party for a group of 50 people was organized on their own expenses. 48 of them paid ₹950 each, while the other two paid ₹1200 more than the average expenditure of the group. The total expenses incurred was:

- Ans**
- 1. ₹75,000
 - 2. ₹25,000
 - 3. ₹50,000

4. ₹40,000

Question ID : 2390872375

Status : **Not Attempted and Marked For Review**

Chosen Option : --

Q.15 If the rate of compound interest is 20% per annum, compounded half-yearly, then what will be the interest on a principal of ₹100000 for two years?

- Ans
- 1. ₹33,100
 - 2. ₹21,000
 - 3. ₹46,410
 - 4. ₹44,000

Question ID : 2390872385

Status : **Not Attempted and Marked For Review**

Chosen Option : --

Q.16 A car can cover a distance of 420 km in 7 h. By how much has the speed to increase to cover the distance in 6 h?

- Ans
- 1. 7.5 km/h
 - 2. 5 km/h
 - 3. 10 km/h
 - 4. 8 km/h

Question ID : 2390872388

Status : **Answered**

Chosen Option : 3

Q.17 The HCF and LCM of two numbers are 20 and 120 respectively. If one of the numbers is 50% greater than the other, then find the smaller number.

- Ans
- 1. 40
 - 2. 80
 - 3. 20
 - 4. 60

Question ID : 2390872371

Status : **Answered**

Chosen Option : 1

Q.18 A number is 50% less than X and another number is 20% less than X. What is the ratio of the two numbers?

- Ans
- 1. 3 : 8
 - 2. 5 : 8
 - 3. 3 : 5
 - 4. 2 : 3

Question ID : 2390872382

Status : **Answered**

Chosen Option : 2

Q.19 What is the value of x , if $7 \times 7 \text{ of } 3 \div 3 - 14 \times x = 7$

- Ans
- 1. 3
 - 2. 1
 - 3. 2
 - 4. 4

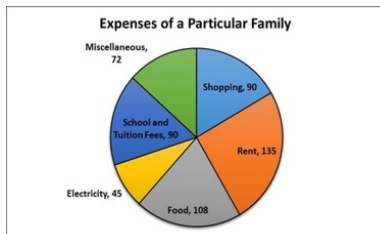
Question ID : 2390872372
 Status : Answered
 Chosen Option : 1

Q.20 A solid cube each of whose face diagonals is $128\sqrt{2}$ cm, is moulded to make a cuboid. The length and the breadth of the cuboid are 512 cm and 160 cm respectively. What is the height of the cuboid?

- Ans
- 1. 16 cm
 - 2. 20.8 cm
 - 3. 25.6 cm
 - 4. 16.4 cm

Question ID : 2390872390
 Status : Not Attempted and Marked For Review
 Chosen Option : --

Q.21 The Pie chart presents the various kinds of expenses incurred by a particular family in a month. The amount spent on educational fees in a month is ₹18000. What is the total monthly expenditure of the family? The figures shown in the Pie chart against the various heads of expenditure do not indicate the central angles.



- Ans
- 1. ₹1,08,000
 - 2. ₹90,000
 - 3. ₹36,000
 - 4. ₹72,000

Question ID : 2390872393
 Status : Marked For Review
 Chosen Option : 1

Q.22 C can do a work alone in 120 days. B is twice as efficient as C and A is thrice as efficient as B. In how many days can they together complete the work?

- Ans
- 1. 16.67
 - 2. 13.33
 - 3. 15
 - 4. 12.5

Question ID : 2390872386
 Status : Answered

Q.23 The Table presents the annual expenses on various heads made by a firm during 2014-2018. What is the average expenditure per head of 2016?

Year	Particulars				
	Raw Materials	Wages	Administration	Delivery	Finance
2014	50000	15000	40000	20000	20000
2015	90000	20000	40000	25000	25000
2016	45000	22500	47500	25000	25000
2017	60000	20000	40000	25000	40000
2018	75000	25000	50000	30000	45000

- Ans
- 1. ₹33,000
 - 2. ₹29,000
 - 3. ₹27,000
 - 4. ₹31,000

Question ID : 2390872394

Status : Answered

Chosen Option : 4

Q.24 What is effective discount of 4 successive discounts of 20% each?

- Ans
- 1. 40.96%
 - 2. 64%
 - 3. 48%
 - 4. 59.04%

Question ID : 2390872376

Status : Answered

Chosen Option : 4

Q.25 A alone can do a work in 30 days. He did half of the work and then left. If B alone can do the entire work in 16 days, then how many days will B take to complete the remaining work?

- Ans
- 1. 9
 - 2. 6
 - 3. 12
 - 4. 8

Question ID : 2390872387

Status : Answered

Chosen Option : 4

Section : General awareness

Q.1 Which of the following types of membranes is the skin?

- Ans
- 1. Serous Membrane
 - 2. Mucous Membrane
 - 3. Cutaneous Membrane
 - 4. Synovial Membrane

Question ID : 2390872236

Status : Not Attempted and
Marked For Review

Q.2 River Delta Formation is a result of which process?

- Ans
- 1. Erosion
 - 2. Evaporation
 - 3. Sedimentation
 - 4. Deposition

Question ID : 2390872241

Status : Answered

Chosen Option : 3

Q.3 Which of the following is correctly matched?

- Ans
- 1. Bharatnatyam - Tamil Nadu
 - 2. Kathakali - Uttar Pradesh
 - 3. Kuchipudi - Odisha
 - 4. Kathak - Kerala

Question ID : 2390872223

Status : Marked For Review

Chosen Option : 4

Q.4 Which organism causes Kala-azar?

- Ans
- 1. Azotobacter
 - 2. Clostridium
 - 3. Escherichia coli
 - 4. Leishmania

Question ID : 2390872237

Status : Marked For Review

Chosen Option : 1

Q.5 Which of the following is NOT an allotrope of carbon?

- Ans
- 1. Methane
 - 2. C-60 Buckminster fullerene
 - 3. Graphite
 - 4. Diamond

Question ID : 2390872239

Status : Answered

Chosen Option : 1

Q.6 The Vijay Kelkar committee was set up to study and evaluate the:

- Ans
- 1. Status of Suger Mills
 - 2. Privatization of Air India
 - 3. Public-Private Partnership Model
 - 4. Poverty in India

Question ID : 2390872231

Status : **Not Attempted and Marked For Review**

Chosen Option : --

Q.7 Which of the following is NOT a Grand Slam in Tennis?

- Ans
- 1. Wimbledon
 - 2. Indian Open
 - 3. Roland Garros
 - 4. Australian Open

Question ID : 2390872224

Status : **Marked For Review**

Chosen Option : 2

Q.8 Who among the following was awarded United Nations 'Champion of Earth' Award in 2018?

- Ans
- 1. Donald Trump
 - 2. Vladimir Putin
 - 3. Narendra Modi
 - 4. Xi Jinping

Question ID : 2390872226

Status : **Marked For Review**

Chosen Option : 3

Q.9 The expenses which raise productive capacity are examples of what type of expenditure?

- Ans
- 1. Revenue Expenditure
 - 2. Production Expenditure
 - 3. Investment Expenditure
 - 4. Capital Expenditure

Question ID : 2390872229

Status : **Marked For Review**

Chosen Option : 2

Q.10 From which constitution, did framers of Indian Constitution borrowed the Principles of Liberty, Equality and Fraternity?

- Ans
- 1. Irish Constitution
 - 2. British Constitution
 - 3. Canadian Constitution
 - 4. French Constitution

Question ID : 2390872232

Status : **Not Attempted and Marked For Review**

Chosen Option : --

Q.11 The enzyme present in pancreatic juice responsible for digestion of proteins is _____.

- Ans
- 1. Upase
 - 2. Pepsin

✓ 3. Trypsin

✗ 4. Amylase

Question ID : 2390872238

Status : Marked For Review

Chosen Option : 2

Q.12 The Moti Masjid of Delhi, was built by which Mughal Ruler?

Ans ✗ 1. Shah Jahan

✗ 2. Akbar

✓ 3. Aurangzeb

✗ 4. Humayun

Question ID : 2390872221

Status : Not Attempted and
Marked For Review

Chosen Option : --

Q.13 Who was defeated by Britishers in Battle of Seringapatam 1799?

Ans ✗ 1. Najib Jung

✓ 2. Tipu Sultan

✗ 3. Siraj-ud- daula

✗ 4. Peshwa

Question ID : 2390872244

Status : Marked For Review

Chosen Option : 2

Q.14 Booker prize 2018 was awarded to Anna Burns for which novel?

Ans ✗ 1. Normal People

✓ 2. Milkman

✗ 3. The Mass Room

✗ 4. Washington Black

Question ID : 2390872227

Status : Answered

Chosen Option : 2

Q.15 Which of the following is a cold Ocean Current?

Ans ✗ 1. Agulhas Current

✓ 2. Labrador Current

✗ 3. Gulf Stream

✗ 4. Alaska Current

Question ID : 2390872242

Status : Not Answered

Chosen Option : --

Q.16 Ryotwari System of Revenue Collection was introduced in which part of British India?

Ans

- 1. Southern India
- 2. Eastern India
- 3. Western India
- 4. Northern India

Question ID : 2390872245
Status : Not Answered
Chosen Option : --

Q.17 Which of the following is NOT a capital good?

- Ans
- 1. Food and Clothing
 - 2. Truck
 - 3. Tools
 - 4. Machines

Question ID : 2390872230
Status : Marked For Review
Chosen Option : 2

Q.18 What is the term of Panchayat according to the 73rd Constitutional Amendment Act?

- Ans
- 1. 5 Years
 - 2. 6 Years
 - 3. 4 Years
 - 4. 3 Years

Question ID : 2390872234
Status : Marked For Review
Chosen Option : 3

Q.19 Glomerulus and Bowman's Capsule are part of which body organ?

- Ans
- 1. Kidney
 - 2. Lungs
 - 3. Heart
 - 4. Liver

Question ID : 2390872235
Status : Marked For Review
Chosen Option : 1

Q.20 Who devised the policy of 'Doctrine of Lapse'?

- Ans
- 1. Lord Cornwallis
 - 2. Lord Bentinck
 - 3. Lord Dalhousie
 - 4. Lord Canning

Question ID : 2390872243
Status : Answered
Chosen Option : 3

Q.21 Hauz-i-Sultani is a _____.

- Ans
- 1. Minaret
 - 2. Mosque
 - 3. Large water reservoir
 - 4. Mahal

Question ID : 2390872222
Status : Not Answered
Chosen Option : --

Q.22 Which Indian actress is a part of the UN's global "Girl up" Campaign?

- Ans
- 1. Aishwarya Rai Bachchan
 - 2. Kareena Kapoor
 - 3. Priyanka Chopra
 - 4. Katrina Kaif

Question ID : 2390872228
Status : Marked For Review
Chosen Option : 3

Q.23 Which of the following states has a bicameral legislature?

- Ans
- 1. Goa
 - 2. Sikkim
 - 3. Bihar
 - 4. Punjab

Question ID : 2390872233
Status : Not Attempted and Marked For Review
Chosen Option : --

Q.24 What is the uppermost layer over the earth's surface called?

- Ans
- 1. Magma
 - 2. Core
 - 3. Mantle
 - 4. Crust

Question ID : 2390872240
Status : Marked For Review
Chosen Option : 4

Q.25 Which country among the following won the Sultan Azlan Shah Cup 2019?

- Ans
- 1. South Korea
 - 2. Malaysia
 - 3. Canada
 - 4. India

Question ID : 2390872225
Status : Not Attempted and

GovtJobsAlert.In