

Section : General English

Q.1 Select the most appropriate option to fill in the blank and make a grammatically correct sentence.

It was \_\_\_\_\_ honour for Seema to be selected as a teacher trainer.

- Ans
- 1. the
  - 2. a
  - 3. an
  - 4. No article

Question ID : 2390873211  
Status : Answered  
Chosen Option : 3

Q.2 Select the most appropriate word for the given group of words.

A large number of fish swimming together

- Ans
- 1. Horde
  - 2. Herd
  - 3. Shoal
  - 4. Pack

Question ID : 2390873225  
Status : Marked For Review  
Chosen Option : 1

Q.3 Select the most appropriate word for the given group of words.

One who collects stamps

- Ans
- 1. Conjuror
  - 2. Geologist
  - 3. Philatelist
  - 4. Curator

Question ID : 2390873224  
Status : Answered  
Chosen Option : 3

Q.4 Select the correctly spelt word.

- Ans
- 1. Ninetteen

2. Nineteen

3. Ninteen

4. Ninneeten

Question ID : 2390873227

Status : Answered

Chosen Option : 2

Q.5 Select the most appropriate option to substitute the underlined segment in the given sentence. If there is no need to substitute it, select No improvement.

Tommy's eyes grew wide on a sight of the new bicycle.

Ans  1. at the sight of

2. at a sight of

3. No improvement

4. on the sight of

Question ID : 2390873209

Status : Answered

Chosen Option : 1

Q.6 Select the most appropriate option to substitute the underlined segment in the given sentence. If there is no need to substitute it, select No improvement.

It has been announcing that the bus will be late by an hour.

Ans  1. It is announcing

2. No improvement

3. It has been announced

4. It has announced

Question ID : 2390873207

Status : Answered

Chosen Option : 3

**Comprehension:**

In the following passage some words have been deleted. Fill in the blanks with the help of the alternatives given. Select the most appropriate option for each blank.

Bacteria are extremely (1)\_\_\_\_\_ living things. While we measure our own sizes in inches or centimetres, bacterial size is measured in (2)\_\_\_\_\_. One micron is a thousandth of a millimetre, a pinhead is about a millimetre (3)\_\_\_\_\_. Rod shaped bacteria are usually from two to four microns (4)\_\_\_\_, while rounded ones are generally one micron in (5)\_\_\_\_\_.

SubQuestion No : 7

Q.7 Select the most appropriate option to fill in blank No.1.

Ans  1. small

2. dirty

3. clean

4. ugly

Question ID : 2390873213

Status : Answered

Chosen Option : 1

**Comprehension:**

In the following passage some words have been deleted. Fill in the blanks with the help of the alternatives given. Select the most appropriate option for each blank.

Bacteria are extremely (1)\_\_\_\_\_ living things. While we measure our own sizes in inches or centimetres, bacterial size is measured in (2)\_\_\_\_\_. One micron is a thousandth of a millimetre, a pinhead is about a millimetre (3)\_\_\_\_\_. Rod shaped bacteria are usually from two to four microns (4)\_\_\_\_, while rounded ones are generally one micron in (5)\_\_\_\_\_.

**SubQuestion No : 8**

**Q.8 Select the most appropriate option to fill in blank No.2.**

- Ans
- 1. metres
  - 2. kilometres
  - 3. feet
  - 4. microns

Question ID : 2390873214

Status : Answered

Chosen Option : 4

**Comprehension:**

In the following passage some words have been deleted. Fill in the blanks with the help of the alternatives given. Select the most appropriate option for each blank.

Bacteria are extremely (1)\_\_\_\_\_ living things. While we measure our own sizes in inches or centimetres, bacterial size is measured in (2)\_\_\_\_\_. One micron is a thousandth of a millimetre, a pinhead is about a millimetre (3)\_\_\_\_\_. Rod shaped bacteria are usually from two to four microns (4)\_\_\_\_, while rounded ones are generally one micron in (5)\_\_\_\_\_.

**SubQuestion No : 9**

**Q.9 Select the most appropriate option to fill in blank No.3.**

- Ans
- 1. Aside
  - 2. Across
  - 3. Beside
  - 4. Beneath

Question ID : 2390873215

Status : Answered

Chosen Option : 2

**Comprehension:**

In the following passage some words have been deleted. Fill in the blanks with the help of the alternatives given. Select the most appropriate option for each blank.

Bacteria are extremely (1)\_\_\_\_\_ living things. While we measure our own sizes in inches or centimetres, bacterial size is measured in (2)\_\_\_\_\_. One micron is a thousandth of a millimetre, a pinhead is about a millimetre (3)\_\_\_\_\_. Rod shaped bacteria are usually from two to four microns (4)\_\_\_\_, while rounded ones are generally one micron in (5)\_\_\_\_\_.

**SubQuestion No : 10**

**Q.10 Select the most appropriate option to fill in blank No.4.**

- Ans
- 1. deep
  - 2. tall
  - 3. short
  - 4. long

Question ID : 2390873216

Status : Answered

**Comprehension:**

In the following passage some words have been deleted. Fill in the blanks with the help of the alternatives given. Select the most appropriate option for each blank.

Bacteria are extremely (1)\_\_\_\_\_ living things. While we measure our own sizes in inches or centimetres, bacterial size is measured in (2)\_\_\_\_\_. One micron is a thousandth of a millimetre, a pinhead is about a millimetre (3)\_\_\_\_\_. Rod shaped bacteria are usually from two to four microns (4)\_\_\_\_, while rounded ones are generally one micron in (5)\_\_\_\_\_.

**SubQuestion No : 11**

Q.11 Select the most appropriate option to fill in blank No.5.

- Ans
- 1. diameter
  - 2. depth
  - 3. weight
  - 4. height

Question ID : 2390873217

Status : Answered

Chosen Option : 1

Q.12 Identify the segment in the sentence which contains the grammatical error.

Seema was sprinkled the cashews over the pie to garnish it.

- Ans
- 1. the cashews
  - 2. over the pie
  - 3. Seema was sprinkled
  - 4. to garnish it

Question ID : 2390873206

Status : Answered

Chosen Option : 1

Q.13 Select the most appropriate synonym of the given word.

Impious

- Ans
- 1. Loyal
  - 2. Irreligious
  - 3. Skilled
  - 4. Devout

Question ID : 2390873219

Status : Not Answered

Chosen Option : --

Q.14 Select the most appropriate option to substitute the underlined segment in the given sentence. If there is no need to substitute it, select No improvement.

Greyhounds do not make good watchdogs but they are very gentle with children.

- Ans
- 1. No improvement
  - 2. much gentle with
  - 3. more gentle to
  - 4. very gentler with

Question ID : 2390873208

Status : Answered

Chosen Option : 1

Q.15 Select the most appropriate antonym of the word.

Attract

- Ans
- 1. Lure
  - 2. Praise
  - 3. Charm
  - 4. Repel

Question ID : 2390873221

Status : Answered

Chosen Option : 4

Q.16 Select the most appropriate option to fill in the blank and make a grammatically correct sentence.

There was a heated discussion \_\_\_\_\_ two members of the club.

- Ans
- 1. in
  - 2. between
  - 3. of
  - 4. among

Question ID : 2390873210

Status : Answered

Chosen Option : 2

Q.17 Select the most appropriate meaning of the given idiom.

Too close to call

- Ans
- 1. Huddled together
  - 2. very close to heart
  - 3. A very narrow margin
  - 4. Winning a competition

Question ID : 2390873222

Status : Answered

Chosen Option : 3

Q.18 Identify the segment in the sentence which contains the grammatical error.

Pallavi was relaxing in the beach at this time yesterday.

- Ans
- 1. time yesterday
  - 2. relaxing in the
  - 3. beach at this
  - 4. Pallavi was

Question ID : 2390873205

Status : Answered

Chosen Option : 1

Q.19 Identify the segment in the sentence which contains the grammatical error.

The travel agent is making the arrangements from my trips.

- Ans  1. from my trips  
 2. the arrangements  
 3. The travel agent  
 4. is making

Question ID : 2390873204  
Status : Marked For Review  
Chosen Option : 1

Q.20 Select the correctly spelt word.

- Ans  1. Revernce  
 2. Reverense  
 3. Reverence  
 4. Revernece

Question ID : 2390873226  
Status : Answered  
Chosen Option : 3

Q.21 Select the most appropriate synonym of the given word.

Prodigy

- Ans  1. Anger  
 2. Tranquil  
 3. Genius  
 4. Plight

Question ID : 2390873218  
Status : Answered  
Chosen Option : 1

Q.22 Select the most appropriate word to fill in the blank and make a meaningful sentence.

The ISRO team is working round the clock to \_\_\_\_\_ Chandrayaan-2.

- Ans  1. introduce  
 2. steer  
 3. navigate  
 4. launch

Question ID : 2390873229  
Status : Answered  
Chosen Option : 4

Q.23 Select the most appropriate antonym of the word.

Glee

- Ans  1. Joy

2. Woe

3. Mirth

4. Fun

Question ID : 2390873220

Status : Answered

Chosen Option : 2

Q.24 Select the most appropriate word to fill in the blank and make a meaningful sentence.

The diamond necklace is too \_\_\_\_\_ for me.

Ans  1. insufficient

2. extravagant

3. austere

4. luscious

Question ID : 2390873228

Status : Marked For Review

Chosen Option : 2

Q.25 Select the most appropriate meaning of the given idiom.

Get someone's goat

Ans  1. To abuse someone

2. To irritate someone

3. To hurt someone

4. To cheat someone

Question ID : 2390873223

Status : Answered

Chosen Option : 2

Section : General Intelligence & Reasoning

Q.1 Five persons are standing in one line facing North. One of the two persons at extreme end is a painter and the other is a basketball player. A lawyer is to right of a student. A dancer is to the left of the basketball player. What is the position of the lawyer from the left?

Ans  1. 5th

2. 3rd

3. 2nd

4. 4th

Question ID : 2390873443

Status : Answered

Chosen Option : 2

Q.2 Select the option that is related to the third term in the same way as the second term is related to the first term.

CIN : GMR :: LUV : ?

Ans  1. PYZ

2. RZA

3. SZA

4. QXY

Question ID : 2390873437

Status : Answered

Chosen Option : 1

Q.3 Select the option that is related to the third term in the same way as the second term is related to the first term.

Cockroach : Nymph :: Sheep : ?

Ans  1. Calf

2. Lamb

3. Foal

4. Larva

Question ID : 2390873436

Status : Answered

Chosen Option : 2

Q.4 Select the option that is related to the third term in the same way as the second term is related to the first term.

Day : Night :: Dawn : ?

Ans  1. Morning

2. Dusk

3. Sunset

4. Sunrise

Question ID : 2390873435

Status : Answered

Chosen Option : 1

Q.5 Six performers Akash, Bishal, Nisha, Diksha, Esha and Firoz will perform on one day each of six days of the week starting from Monday and ending on Saturday. Nisha will perform on a Tuesday. Akash, Firoz and Bishal will perform one after the other in the same order. Diksha will not perform on a Monday or a Wednesday. How many performers perform after Akash?

Ans  1. 4

2. 2

3. 1

4. 3

Question ID : 2390873444

Status : Answered

Chosen Option : 4

Q.6 In a certain code language, '98563' is written as '32896'. What will be the code for '72104' in that code language?

Ans  1. 24650

2. 21362

3. 15495

4. 15437

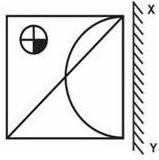


Question ID : 2390873441

Status : **Not Attempted and Marked For Review**

Chosen Option : --

Q.7 If a mirror is placed on the line XY, then which of the answer figures will be the right mirror image of the given figure?



Ans

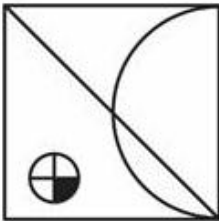
1.



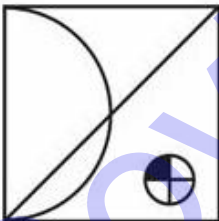
2.



3.



4.



Question ID : 2390873456

Status : **Answered**

Chosen Option : 2

Q.8 Select the option that is related to the third term in the same way as the second term is related to the first term.

52 : 65 :: 76 : ?

Ans  1. 115

2. 105

3. 95

4. 85

Q.9 Select the correct option that will complete the series.

7, 25, 79, 241, \_\_\_\_

- Ans
- 1. 439
  - 2. 652
  - 3. 380
  - 4. 727

Q.10 In a certain code language, 'FLAG' is written as 'KQFL'. What will be the code for 'TRUCK' in that code language?

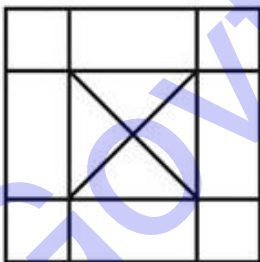
- Ans
- 1. YWAHR
  - 2. VWXLR
  - 3. XWAJR
  - 4. YWZHP

Q.11 Select the option in which the given figure is embedded. (Rotation is not allowed)

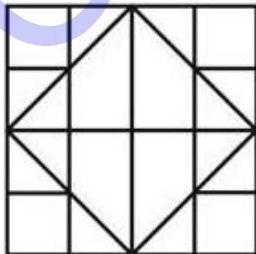


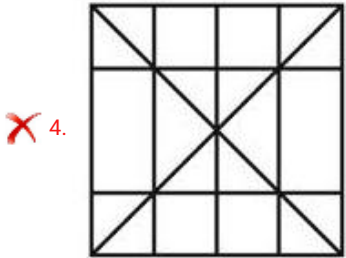
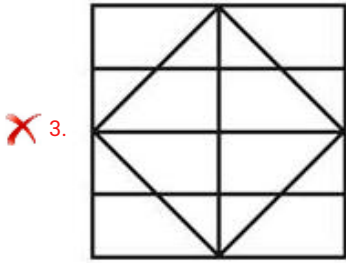
Ans

1.



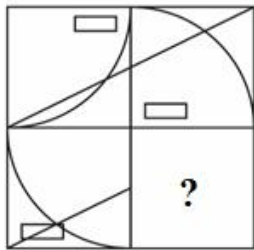
2.



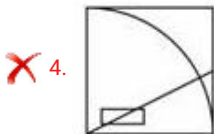
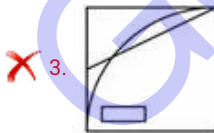


Question ID : 2390873455  
Status : Answered  
Chosen Option : 2

Q.12 Which answer figure will complete the pattern in the question figure?



Ans



Question ID : 2390873454  
Status : Answered  
Chosen Option : 1

Q.13 In a certain code language, 'PARROT' is written as 'RYTPQR'. What will be the code for

'BEHOLD' in that code language?

- Ans
- 1. DESNOC
  - 2. EDTMNB
  - 3. EDTNOC
  - 4. DCJMNB

Question ID : 2390873438  
Status : Answered  
Chosen Option : 4

Q.14 Which two signs need to be interchanged to make the given equation correct?

$$27 - 3 \times 2 \div 13 + 9 = 14$$

- Ans
- 1.  $\times, \div$
  - 2.  $-, \div$
  - 3.  $-, \times$
  - 4.  $\div, +$

Question ID : 2390873452  
Status : Answered  
Chosen Option : 2

Q.15 Read the given statements and conclusions carefully. Assuming that the information given in the statements is true, even if it appears to be at variance with commonly known facts, decide which of the given conclusions logically follow(s) from the statements.

Statements:

All ships are butterflies.  
Some aeroplanes are butterflies.

Concluions:

I. All ships are aeroplanes.  
II. Some butterflies are ships.

- Ans
- 1. Only conclusion II follows
  - 2. Neither conclusion I nor II follows
  - 3. Only conclusion I follows
  - 4. Both conclusions I and II follow

Question ID : 2390873445  
Status : Answered  
Chosen Option : 1

Q.16 If DBFEI is coded as 33568, then the code for EFIBB is \_\_\_\_\_.

- Ans
- 1. 47831
  - 2. 41325
  - 3. 12358
  - 4. 65112

Question ID : 2390873440  
Status : Answered  
Chosen Option : 1

Q.17 Sahiba, Trishla, Lakshya, Vanshika and Manish are sitting on a bench. Manish is

immediately between Trishla and Lakshya. Lakshya is to the left of Vanshika who is not at the end. Who is to the left of Sahiba?

- Ans
- 1. Manish
  - 2. Trishla
  - 3. Vanshika
  - 4. Lakshya

Question ID : 2390873442  
Status : Answered  
Chosen Option : 3

Q.18 Which two numbers need to be interchanged to make the given equation correct?

$$16 \times 1792 \div 7 + 9 - 15 = 778$$

- Ans
- 1. 16,7
  - 2. 16,9
  - 3. 15,9
  - 4. 16,15

Question ID : 2390873451  
Status : Answered  
Chosen Option : 1

Q.19 Read the given statements and conclusions carefully. Assuming that the information given in the statements is true, even if it appears to be at variance with commonly known facts, decide which of the given conclusions logically follow(s) from the statements.

Statements:

All peacocks are swans.  
All parrots are swans.

Conclusion I : Some parrots are peacocks.  
Conclusion II : Some swans are peacocks.  
Conclusion III : Some swans are parrots.

- Ans
- 1. Only conclusion I and III follows
  - 2. Only conclusion I and II follows
  - 3. All conclusions I, II and III follow
  - 4. Only conclusion II and III follows

Question ID : 2390873446  
Status : Answered  
Chosen Option : 4

Q.20 Select the number that will replace the question mark.

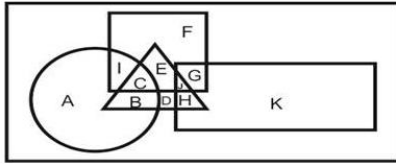
11 11 11

27 9 ?

4 6 9

- Ans
- 1. 6
  - 2. 3
  - 3. 9
  - 4. 5

Q.21 In the following figure, triangle represents teachers, square represents fathers, circle represents poets and rectangle represents Americans. Which set of letters represents 'fathers who are NOT poets'?



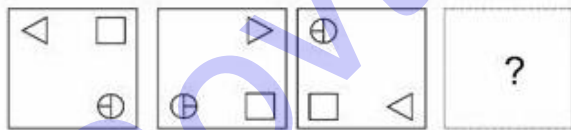
- Ans
- 1. GEJ
  - 2. ICEFGJ
  - 3. BDGF
  - 4. EFGJ

Q.22 Select the term that will come next in the following series.

GN, MT, SZ, \_\_\_\_

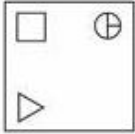
- Ans
- 1. WD
  - 2. ZG
  - 3. YF
  - 4. XE

Q.23 Which of the following answer figures completes the series?



- Ans
- 1.
  - 2.
  - 3.

✓ 4.

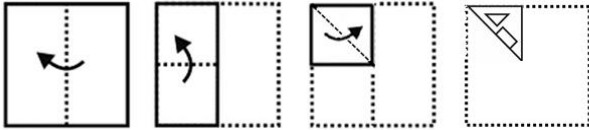


Question ID : 2390873453

Status : Answered

Chosen Option : 4

**Q.24** A piece of paper is folded and cut as shown below in the question figures, how it will appear when unfolded.

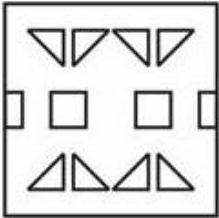


Ans


✗ 1.



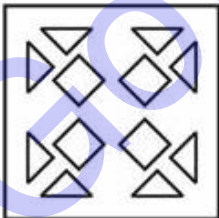
✗ 2.



✗ 3.



✓ 4.



Question ID : 2390873457

Status : Answered

Chosen Option : 4

**Q.25** Select the correct option that will complete the series.

8, 27, 64, 125, \_\_\_\_

Ans ✗ 1. 280

✗ 2. 343

 3. 250

 4. 216

Question ID : 2390873447

Status : Answered

Chosen Option : 4


Section : Numerical Aptitude

**Q.1** By paying ₹20 less of the marked price of an article, a man gets 25% discount. The total amount that he has paid (in ₹) is:

**Ans**  1. 80

 2. 20

 3. 60

 4. 50

Question ID : 2390873539

Status : Answered

Chosen Option : 3

**Q.2** The ratio of the present ages of a mother and a son is 4 : 1. Fourteen years from now, the ratio of their ages will be 2 : 1. The present age (in years) of mother is:

**Ans**  1. 32

 2. 36

 3. 28

 4. 24


Question ID : 2390873546

Status : Answered


Chosen Option : 3

**Q.3** A, B and C can do a work in 12, 15 and 20 days respectively. In how many days, working together they can complete the same work?

**Ans**  1. 6 days

 2. 7.5 days

 3. 4 days

 4. 5 days


Question ID : 2390873549

Status : Answered


Chosen Option : 4

**Q.4** A retailer bought 22 kg of rice at ₹35 per kg and 13 kg of rice at ₹30 per kg. What profit did he get when he mixed the two varieties together and sold it at ₹40 per kg? (correct to nearest integer)

**Ans**  1. 21

 2. 18

 3. 25

 4. 20



Question ID : 2390873542

Status : **Not Attempted and Marked For Review**

Chosen Option : --

**Q.5** The average marks of 30 students is 65; 36 students is 35 and 34 students is 45. The average marks for all the students is:

- Ans**
- 1. 46.4
  - 2. 45.3
  - 3. 45.7
  - 4. 47.4

Question ID : 2390873537

Status : **Answered**

Chosen Option : 3

**Q.6** A bus covers a distance of 10 km in 12 minutes. If its speed is decreased by 25 km/h, then the time (in minutes) taken by the bus to cover the same distance is:

- Ans**
- 1. 15
  - 2. 13
  - 3. 36
  - 4. 24

Question ID : 2390873551

Status : **Answered**

Chosen Option : 4

**Q.7** The mode of the given data 2, 5, 5, 7, 2, 6, 8, 6, 9, 6 is:

- Ans**
- 1. 7
  - 2. 5
  - 3. 6
  - 4. 2

Question ID : 2390873540

Status : **Answered**

Chosen Option : 3

**Q.8** The average number of pages of nine book is 400. If the average number of pages of the first five books is 430 and that of last five books is 380, then what is the number of pages of the fifth book?

- Ans**
- 1. 420
  - 2. 430
  - 3. 440
  - 4. 450

Question ID : 2390873538

Status : **Answered**

Chosen Option : 4

**Q.9** The approximate value of  $(4488 \div 11.01 - 7.98) \div 15.99$  is:

**Ans**

- 1. 2.5
- 2. 25
- 3. 26
- 4. 2.6

Question ID : 2390873536

Status : Answered

Chosen Option : 2

**Q.10** The radius of a circle is equal to length of the rectangle. The circumference of the circle and breadth of the rectangle is 132 cm and 20 cm respectively. The diagonal of the rectangle is:

(Take  $\pi = \frac{22}{7}$ )

- Ans**
- 1. 28 cm
  - 2. 29 cm
  - 3. 27 cm
  - 4. 25 cm

Question ID : 2390873553

Status : Answered

Chosen Option : 2

**Q.11** A and B together are supposed to do  $\frac{13}{15}$  of the work and B and C together  $\frac{11}{20}$  of the work. If difference of wages of A and C is ₹7600, then the total wages of A and C is:

- Ans**
- 1. ₹24000
  - 2. ₹36000
  - 3. ₹18000
  - 4. ₹56000

Question ID : 2390873550

Status : Not Attempted and Marked For Review

Chosen Option : --

**Q.12** A man bought a bike and a car for ₹500000. He sold the bike at a gain of 20% and the car at a loss of 10%, thereby gaining 5% on whole. The cost (in ₹) of the bike is:

- Ans**
- 1. 150000
  - 2. 200000
  - 3. 180000
  - 4. 250000

Question ID : 2390873543

Status : Not Attempted and Marked For Review

Chosen Option : --

**Q.13**

The Table given below shows the number of three different denomination of notes in four different bank ATMs (SBI, ICICI, HDFC and AXIS).

Bank ATM	Number of 2000notes	Number of 500 notes	Number of 200notes
SBI	250	300	150
ICICI	225	200	175
HDFC	200	150	100
AXIS	100	150	250

In AXIS bank ATM, the amount of 500 denomination is what percent of total amount of 2000 denomination?

- Ans
- 1. 35%
  - 2. 37.5%
  - 3. 42%
  - 4. 32.5%

Question ID : 2390873558  
Status : Answered  
Chosen Option : 2

Q.14 The difference between simple and compound rate of interest on a certain sum of money for 2 years at 20% rate of interest is ₹200. The amount is:

- Ans
- 1. ₹3000
  - 2. ₹4000
  - 3. ₹5000
  - 4. ₹4500

Question ID : 2390873548  
Status : Answered  
Chosen Option : 3

Q.15 Thrice of a number is 24 more than one-third of it. The number is:

- Ans
- 1. 15
  - 2. 9
  - 3. 8
  - 4. 12

Question ID : 2390873545  
Status : Answered  
Chosen Option : 2

Q.16 If  $a : b = 2 : 3$  and  $b : c = 2 : 3$ , then what is the value of  $(3a^2 + b^2 + c^2) : (a^2 + 2b^2 + c^2)$ ?

- Ans
- 1. 169 : 165
  - 2. 5 : 7
  - 3. 7 : 5
  - 4. 165 : 169

Question ID : 2390873544  
Status : Answered  
Chosen Option : 4

Q.17 What amount will be ₹1440 in 4 years at 5% simple interest?

- Ans
- 1. ₹1180
  - 2. ₹1200
  - 3. ₹1080
  - 4. ₹1240

Question ID : 2390873547  
Status : Answered  
Chosen Option : 2

Q.18 If 40% of  $\frac{2}{5}$  of a number is 24, then the number is:

- Ans
- 1. 150
  - 2. 136
  - 3. 154
  - 4. 148

Question ID : 2390873541  
Status : Answered  
Chosen Option : 1

Q.19 A man travels 75 km at speed 25 km/h and next 60 km at 20 km/h and there after travel 90 km at 15 km/h. His average speed is:

- Ans
- 1. 15 km/h
  - 2. 18.75 km/h
  - 3. 20.25 km/h
  - 4. 25.5 km/h

Question ID : 2390873552  
Status : Not Attempted and Marked For Review  
Chosen Option : --

Q.20 नीचे दी गई तालिका चार अलग-अलग बैंकों (एसबीआई, आईसीआईसीआई, एचडीएफसी और ऐक्सिस) के एटीएम में तीन भिन्न मूल्यवर्गों के नोटों की संख्या को दर्शाती है।

बैंक एटीएम	2000 के नोट्स की संख्या	500 के नोट्स की संख्या	200 के नोट्स की संख्या
एसबीआई	250	300	150
आईसीआईसीआई	225	200	175
एचडीएफसी	200	150	100
ऐक्सिस	100	150	250

आईसीआईसीआई बैंक के एटीएम में 500 मूल्यवर्ग की कुल राशि और आईसीआईसीआई बैंक के एटीएम में 200 मूल्यवर्ग की कुल राशि का अनुपात क्या है?

- Ans
- 1. 20 : 7
  - 2. 10 : 3

✗ 3. 10 : 7

✗ 4. 20 : 17

Question ID : 2390873556  
Status : Answered  
Chosen Option : 1

**Q.21** H.C.F and L.C.M of two numbers is 37 and 444 respectively. If one number is 111, the other number is:

Ans ✗ 1. 74

✗ 2. 111

✗ 3. 333

✓ 4. 148

Question ID : 2390873534  
Status : Answered  
Chosen Option : 4

**Q.22** The length, breadth and height of a cuboid are 6 cm, 8 cm & 10 cm respectively. Its volume (in  $\text{cm}^3$ ) is:

Ans ✗ 1. 256

✗ 2. 128

✓ 3. 480

✗ 4. 960

Question ID : 2390873554  
Status : Answered  
Chosen Option : 3

**Q.23** A solid metal cuboid of  $343 \text{ cm} \times 49 \text{ cm} \times 7 \text{ cm}$  is melted and cubes of edge 7 cm are formed. The sum of surface area (in  $\text{cm}^2$ ) of total number of cubes formed is:

Ans ✗ 1. 16807

✗ 2. 10842

✓ 3. 100842

✗ 4. 120506

Question ID : 2390873555  
Status : Answered  
Chosen Option : 3

**Q.24** The Table given below shows the number of three different denomination of notes in four different bank ATMs (SBI, ICICI, HDFC and AXIS).

Bank ATM	Number of 2000notes	Number of 500 notes	Number of 200notes
SBI	250	300	150
ICICI	225	200	175
HDFC	200	150	100
AXIS	100	150	250

Taking all the four banks together, the total number of 200 denomination notes is how much less than the total number of 2000 denomination notes?

Ans ✓ 1. 100

✗ 2. 125

3. 150

4. 175

Question ID : 2390873557

Status : Answered

Chosen Option : 1

Q.25

The value of  $\sqrt{3\frac{1}{16} + \frac{1}{2} - \frac{3}{4}} =$

Ans

1.  $1\frac{1}{4}$

2.  $1\frac{3}{4}$

3. 1

4.  $1\frac{1}{2}$

Question ID : 2390873535

Status : Answered

Chosen Option : 4

Section : General awareness

Q.1 'Wings of Fire' is an autobiography of \_\_\_\_\_.

Ans

1. Dr. A. P. J. Abdul Kalam

2. Mahatma Gandhi

3. Jawaharlal Nehru

4. Bhagat Singh

Question ID : 2390873341

Status : Answered

Chosen Option : 1

Q.2 मूत्र त्याग करने से पहले वह मानव शरीर के उत्सर्जन तंत्र के किस भाग में संग्रहीत होता है?

Ans

1. मूत्राशय

2. मूत्रवाहिनी

3. बोमैन्स कैप्सूल

4. मूत्रमार्ग

Question ID : 2390873352

Status : Answered

Chosen Option : 1

Q.3 Kanthuri Festival is celebrated in which state of India?

Ans

1. Karnataka

2. Kerala

3. Telangana

4. Tamil Nadu

Question ID : 2390873336

Status : Answered

Chosen Option : 1

Q.4 Which mosquito carries the parasite of Malaria?

- Ans
- 1. Female Aedes Aegypti
  - 2. Female Anopheles
  - 3. Male Aedes Aegypti
  - 4. Male Anopheles

Question ID : 2390873348

Status : Answered

Chosen Option : 2

Q.5 Usain Bolt is associated with which sport?

- Ans
- 1. Gymnastics
  - 2. Boxing
  - 3. Canoe Sprint
  - 4. Athletics

Question ID : 2390873337

Status : Answered

Chosen Option : 4

Q.6 "A Comparison between Women and Men" is a book written by \_\_\_\_\_.

- Ans
- 1. Tarabai Shinde
  - 2. Pandita Ramabai
  - 3. Begum Rokeya Sakhawat Hossain
  - 4. Jyotiba Phule

Question ID : 2390873339

Status : Not Answered

Chosen Option : --

Q.7 Who was the first Mughal Emperor in India?

- Ans
- 1. Akbar
  - 2. Babar
  - 3. Shah Jahan
  - 4. Humayun

Question ID : 2390873357

Status : Answered

Chosen Option : 2

Q.8 In which case, Right to livelihood was established as part of Right to life under Article 21 of the Constitution?

- Ans
- 1. Olga Tellis v/s Bombay Municipal Corporation
  - 2. N. Nagaraj v/s VOI Case

3. Maneka Gandhi v/s VOI Case

4. Shankari Prasad Case

Question ID : 2390873345

Status : Not Answered

Chosen Option : --

Q.9 English Education Act 1835 was based on report of which commission?

Ans  1. Henry Colebrooke

2. Woods Despatch

3. Macaulay's Minute

4. Thomas Babington

Question ID : 2390873356

Status : Answered

Chosen Option : 4

Q.10 Which Central Agency is responsible for promotion of co-operative marketing of agricultural produce to benefit the farmers?

Ans  1. RBI

2. FCI

3. NAFED

4. SEBI

Question ID : 2390873342

Status : Answered

Chosen Option : 2

Q.11 Which Central agency manages the public debt of Central and State government?

Ans  1. FICCI

2. RBI

3. SEBI

4. IRDA

Question ID : 2390873344

Status : Answered

Chosen Option : 2

Q.12 मानव हृदय के किस कोष्ठ को फेफड़ों से प्रचुर-ऑक्सीजन युक्त रक्त प्राप्त होता है?

Ans  1. बायाँ अलिंद

2. दायँ निलय

3. बायाँ निलय

4. दायँ अलिंद

Question ID : 2390873350

Status : Not Attempted and Marked For Review

Chosen Option : --

Q.13 Right against exploitation is a \_\_\_\_\_.



- Ans
- 1. Constitutional Right
  - 2. Law
  - 3. Fundamental Right
  - 4. Legal Right

Question ID : 2390873346  
Status : Answered  
Chosen Option : 3

Q.14 Name the manufacturer of the fruit-filled, friendly punch RoothAfza in India.

- Ans
- 1. Dabur India
  - 2. Glaxo Smithkline Pharmaceuticals Ltd
  - 3. Hamdard Laboratories (India)
  - 4. Nestle India

Question ID : 2390873343  
Status : Answered  
Chosen Option : 1

Q.15 Which international organisation governs basketball in the world?

- Ans
- 1. IBA
  - 2. RBA
  - 3. FIBA
  - 4. NBA

Question ID : 2390873338  
Status : Answered  
Chosen Option : 1

Q.16 Who was honoured with the first ever Philip Kotler Presidential Award?

- Ans
- 1. Narender Modi
  - 2. Amit Shah
  - 3. Arun Jaitley
  - 4. Rajnath Singh

Question ID : 2390873340  
Status : Not Answered  
Chosen Option : --

Q.17 11-degree channel divides which of the following group of islands?

- Ans
- 1. Andaman and Nicobar
  - 2. Minicoy and Lakshadweep
  - 3. Maldives and Lakshadweep
  - 4. Aminidive and Canannore

Question ID : 2390873354  
Status : Answered  
Chosen Option : 3

Q.18 Image formed by Plane Mirror is always \_\_\_\_\_.

- Ans
- 1. Virtual and Erect
  - 2. Real and Inverted
  - 3. Real and Erect
  - 4. Virtual and Inverted

Question ID : 2390873349  
Status : Answered  
Chosen Option : 3

Q.19 Who has to resign if 'NO-Confidence' Motion is passed in the Lok Sabha?

- Ans
- 1. Leader of Opposition
  - 2. Speaker of Lok Sabha
  - 3. Council of Minister
  - 4. President

Question ID : 2390873347  
Status : Answered  
Chosen Option : 3

Q.20 "Any body that is completely or partially submerged in a fluid (gas or liquid) at rest is acted upon by an upward or buoyant force, the magnitude of which is equal to the weight of the fluid displaced by the body." Which is this law?

- Ans
- 1. Charles' Law
  - 2. Boyle's Law
  - 3. Archimedes' Principle
  - 4. Newton's Second Law of Motion

Question ID : 2390873351  
Status : Answered  
Chosen Option : 2

Q.21 After which battle did East India Company start appointing Residents in Indian States?

- Ans
- 1. Battle of Panipat III
  - 2. Battle of Plassey
  - 3. Battle of Buxar
  - 4. Battle of Haldighati

Question ID : 2390873358  
Status : Answered  
Chosen Option : 2

Q.22 Which of the following is a Perennial River System in India?

- Ans
- 1. Krishna
  - 2. Indus
  - 3. Tapho
  - 4. Tapi

Question ID : 2390873353

Status : Answered

Chosen Option : 2

Q.23 पंजाब के मार्शल डांस का रूप \_\_\_\_\_ है।

- Ans
- 1. दागा
  - 2. बागा
  - 3. लागा
  - 4. पांगा

Question ID : 2390873335

Status : Marked For Review

Chosen Option : 4

Q.24 Mauryan Pillar Capital found at Sarnath is popularly known as \_\_\_\_\_.

- Ans
- 1. Lion Capital
  - 2. Horse Capital
  - 3. Bull Capital
  - 4. Elephant Capital

Question ID : 2390873334

Status : Answered

Chosen Option : 1

Q.25 The Narrow Zone of contact between land, air and water is called \_\_\_\_\_.

- Ans
- 1. Lithosphere
  - 2. Biosphere
  - 3. Hydrosphere
  - 4. Atmosphere

Question ID : 2390873355

Status : Answered

Chosen Option : 4