

Section : General English

Q.1 Identify the segment in the sentence which contains the grammatical error.

Rita was a model so she would starve herself to maintain their body weight.

- Ans
- 1. Rita was a model
 - 2. so she would starve herself
 - 3. their body weight
 - 4. to maintain

Question ID : 2390872899

Status : Answered

Chosen Option : 3

Q.2 Select the most appropriate synonym of the given word.

FEROCIOUS

- Ans
- 1. Gentle
 - 2. Fierce
 - 3. Domesticated
 - 4. Tame

Question ID : 2390872913

Status : Answered

Chosen Option : 2

Q.3 Select the most appropriate word to fill in the blank and make a meaningful sentence.

As a goodwill _____, I took some colleagues out for a meal.

- Ans
- 1. gesture
 - 2. indication
 - 3. token
 - 4. reminder

Question ID : 2390872923

Status : Answered

Chosen Option : 1

Q.4 Select the most appropriate word for the given group of words.

A hollow space in a wall for a statue or ornament

- Ans
- 1. Nook

- 2. Slot
- 3. Niche
- 4. Cornice

Question ID : 2390872918
Status : Answered
Chosen Option : 2

Q.5 Select the most appropriate option to substitute the underlined segment in the given sentence. If there is no need to substitute it, select No improvement

Rajesh didn't know my address.

- Ans
- 1. don't knew
 - 2. No improvement
 - 3. didn't known
 - 4. didn't knew

Question ID : 2390872902
Status : Answered
Chosen Option : 2

Q.6 Select the most appropriate word for the given group of words.

A specialist who treats diseases of the nervous system

- Ans
- 1. Orthopaedic
 - 2. Paediatrician
 - 3. Neurologist
 - 4. Gynaecologist

Question ID : 2390872919
Status : Answered
Chosen Option : 3

Q.7 Identify the segment in the sentence which contains the grammatical error.

The priest request all the wealthy men to donate money for building a new temple.

- Ans
- 1. The priest request
 - 2. to donate money
 - 3. for building a new temple
 - 4. all the wealthy men

Question ID : 2390872898
Status : Answered
Chosen Option : 1

Q.8 Select the most appropriate antonym of the word.

HARMONY





- Ans
- 1. Accord
 - 2. Strife
 - 3. Agreement

 4. Consensus

Question ID : 2390872914
Status : Answered
Chosen Option : 2

Q.9 Select the most appropriate meaning of the given idiom.

Know something inside out

- Ans  1. To know something superficially
 2. To know everything about something
 3. To know something from a distance
 4. To have only a slight idea about something

Question ID : 2390872916
Status : Answered
Chosen Option : 2





Q.10 Select the correctly spelt word.

- Ans  1. Appearance
 2. Assasination
 3. Agression
 4. Assimilate

Question ID : 2390872920
Status : Marked For Review
Chosen Option : 4

Q.11 Identify the segment in the sentence which contains the grammatical error.





Due to a last minute snag, the mission on a moon had to be cancelled.

- Ans  1. had to be cancelled
 2. Due to a last minute snag
 3. on a moon
 4. the mission

Question ID : 2390872900
Status : Answered
Chosen Option : 3

Q.12 Select the most appropriate meaning of the given idiom.

Throw in the towel

- Ans  1. To decide firmly
 2. To admit defeat or failure
 3. To take a shower
 4. To provoke someone

Question ID : 2390872917
Status : Answered
Chosen Option : 4

Q.13 Select the most appropriate option to fill in the blank and make a grammatically correct sentence.

Kevin lives by the sea and he's got a boat, so he often _____ sailing.

- Ans
- 1. is going
 - 2. has gone
 - 3. goes
 - 4. go

Question ID : 2390872910
Status : Answered
Chosen Option : 3

Q.14 Select the correctly spelt word.

- Ans
- 1. Godess
 - 2. Villian
 - 3. Truely
 - 4. Obedient

Question ID : 2390872921
Status : Answered
Chosen Option : 4

Q.15 Select the most appropriate option to substitute the underlined segment in the given sentence. If there is no need to substitute it, select No improvement

The two thieves divided the loot among themselves.

- Ans
- 1. among them
 - 2. between themselves
 - 3. with them
 - 4. No improvement

Question ID : 2390872901
Status : Answered
Chosen Option : 2

Q.16 Select the most appropriate antonym of the word.

FACILITATE

- Ans
- 1. Ease
 - 2. Hinder
 - 3. Encourage
 - 4. Aid

Question ID : 2390872915
Status : Answered
Chosen Option : 2

Q.17 Select the most appropriate word to fill in the blank and make a meaningful sentence.

The two friends were too _____ to admit that they were wrong.

- Ans
- 1. stubborn

2. reasonable

3. voluntary

4. satisfied

Question ID : 2390872922

Status : Answered

Chosen Option : 1

Q.18 Select the most appropriate option to substitute the underlined segment in the given sentence. If there is no need to substitute it, select No improvement

I don't remember exactly when did I go to Shimla last year.

Ans 1. when I go

2. No improvement

3. when I went

4. when I was going

Question ID : 2390872903

Status : Answered

Chosen Option : 3

Q.19 Select the most appropriate option to fill in the blank and make a grammatically correct sentence.

Although I had never seen her before, I _____ her from a photograph.

Ans 1. am recognizing

2. have recognized

3. recognize

4. recognized

Question ID : 2390872911

Status : Answered

Chosen Option : 2

Q.20 Select the most appropriate synonym of the given word.

INTRICATE

Ans 1. Simple

2. Straightforward

3. Complicated

4. Plain

Question ID : 2390872912

Status : Answered

Chosen Option : 3

Comprehension:

In the following passage some words have been deleted. Fill in the blanks with the help of the alternatives given. Select the most appropriate option for each blank.

The interior of the Earth has three chief layers. (1)_____are known as the crust, the mantle and the core. There is a thick layer of soil (2)_____ the outer crust. It is found only in (3)_____ parts of the Earth. It consists of disintegrated rock and (4)_____ organic matter called humus. It is this soil which is indispensable for the plant (5)_____.

SubQuestion No : 21

Q.21 Select the most appropriate option to fill in blank No.1

- Ans
- 1. Those
 - 2. It
 - 3. This
 - 4. These

Question ID : 2390872905
Status : Answered
Chosen Option : 4

Comprehension:

In the following passage some words have been deleted. Fill in the blanks with the help of the alternatives given. Select the most appropriate option for each blank.

The interior of the Earth has three chief layers. (1)_____are known as the crust, the mantle and the core. There is a thick layer of soil (2)_____the outer crust. It is found only in (3)_____parts of the Earth. It consists of disintegrated rock and (4)_____organic matter called humus. It is this soil which is indispensable for the plant (5)_____.

SubQuestion No : 22

Q.22 Select the most appropriate option to fill in blank No.2

- Ans
- 1. to
 - 2. for
 - 3. in
 - 4. on

Question ID : 2390872906
Status : Answered
Chosen Option : 4

Comprehension:

In the following passage some words have been deleted. Fill in the blanks with the help of the alternatives given. Select the most appropriate option for each blank.

The interior of the Earth has three chief layers. (1)_____are known as the crust, the mantle and the core. There is a thick layer of soil (2)_____the outer crust. It is found only in (3)_____parts of the Earth. It consists of disintegrated rock and (4)_____organic matter called humus. It is this soil which is indispensable for the plant (5)_____.

SubQuestion No : 23

Q.23 Select the most appropriate option to fill in blank No.3

- Ans
- 1. certain
 - 2. more
 - 3. many
 - 4. any

Question ID : 2390872907
Status : Answered
Chosen Option : 1

Comprehension:

In the following passage some words have been deleted. Fill in the blanks with the help of the alternatives given. Select the most appropriate option for each blank.

The interior of the Earth has three chief layers. (1)_____are known as the crust, the mantle and the core. There is a thick layer of soil (2)_____the outer crust. It is found only in (3)_____

parts of the Earth. It consists of disintegrated rock and (4)_____ organic matter called humus. It is this soil which is indispensable for the plant (5)_____.

SubQuestion No : 24

Q.24 Select the most appropriate option to fill in blank No.4

- Ans
- 1. corroded
 - 2. collapsed
 - 3. composed
 - 4. decomposed

Question ID : 2390872908

Status : Answered

Chosen Option : 4

Comprehension:

In the following passage some words have been deleted. Fill in the blanks with the help of the alternatives given. Select the most appropriate option for each blank.

The interior of the Earth has three chief layers. (1)_____are known as the crust, the mantle and the core. There is a thick layer of soil (2)_____ the outer crust. It is found only in (3)_____ parts of the Earth. It consists of disintegrated rock and (4)_____ organic matter called humus. It is this soil which is indispensable for the plant (5)_____.

SubQuestion No : 25

Q.25 Select the most appropriate option to fill in blank No.5

- Ans
- 1. increase
 - 2. rise
 - 3. growth
 - 4. hike

Question ID : 2390872909

Status : Answered

Chosen Option : 3

Section : General Intelligence & Reasoning

Q.1 Six friends A, B, C, D, E and F are standing in a row. B is exactly in between F and D. E is standing in between A and C. A is not a neighbor of D and F. C is not a neighbor of D but immediate right of F. F is standing in between which of the following pair?

- Ans
- 1. C and A
 - 2. B and C
 - 3. B and A
 - 4. B and D

Question ID : 2390873062

Status : Answered

Chosen Option : 2

Q.2 Among 6 persons A, B, C, D, E and F, it is known that; A is taller than at-least 3 persons. C is taller than B, who is taller than exactly 1 person. D is not shorter than C. E is taller than A and D is shorter than A. Who is 4th shortest person among all?

- Ans
- 1. F
 - 2. C
 - 3. D

✗ 4. A

Question ID : 2390873064

Status : Not Attempted and Marked For Review

Chosen Option : --

Q.3 If in a certain way, $3 + 4 = 25$ and $7 + 24 = 625$, then find $9 + 40 = ?$

Ans ✓ 1. 1681

✗ 2. 1649

✗ 3. 2048

✗ 4. 1709

Question ID : 2390873072

Status : Answered

Chosen Option : 1

Q.4 उन वर्गों के सेट का चयन करें जो दिए गए वेन आरेख का सबसे अच्छा प्रतिनिधित्व करते हैं।



Ans ✗ 1. मानव, समुद्र, पर्वत

✓ 2. घरेलू पशु, कुत्ता, भैंस

✗ 3. सूर्य, चंद्रमा, जल

✗ 4. डॉक्टर, नर्स, रोगी

Question ID : 2390873078

Status : Answered

Chosen Option : 2

Q.5 Select the number that can replace the question mark (?) in the following series.

1500, 745, 370, 180, 87.5, ?

Ans ✗ 1. 36.25

✗ 2. 36.5

✗ 3. 38.5

✓ 4. 38.75

Question ID : 2390873067

Status : Answered

Chosen Option : 4

Q.6 Select the number that can replace the question mark (?) in the following series.

3, 7, 15, 31, 63, ?

Ans ✓ 1. 127

✗ 2. 115

3. 131

4. 92

Question ID : 2390873068

Status : Answered

Chosen Option : 1

Q.7 Study the following information carefully and answer the questions given below.

- (i) Eight boys P, Q, R, S, T, U, V and W are sitting in a circular table.
(ii) P and Q are sitting opposite to each other.
(iii) S is sitting second to the right of P and V is sitting second to the right of Q.
(iv) T and W are sitting opposite to each other.
(v) R is sitting between P and V.

What is the position of T with respect to Q?

- Ans 1. Second to the left
 2. Second to the right
 3. Third to the left
 4. Third to the right

Question ID : 2390873063

Status : Not Answered

Chosen Option : --

Q.8 उस विकल्प का चयन करें जो नीचे दिए गए शब्दों के सेट के समकक्ष है।

? : संगीत :: कैलकुलेटर : गणना

- Ans 1. तुरही (ट्रम्पेट)
 2. पक्षी
 3. नोटबुक
 4. फोन

Question ID : 2390873055

Status : Answered

Chosen Option : 1

Q.9 In a certain code, 'TABLE' is written as 'IPFEX'. How will 'SCRAP' be written as in the same code?

- Ans 1. TDSBQ
 2. TEVGW
 3. VAUDM
 4. RBQZO

Question ID : 2390873059

Status : Not Attempted and Marked For Review

Chosen Option : --

Q.10 Select the term that will come next in the following series.

ELFA, GLHA, ILJA, _____, MLNA

- Ans 1. OLPA
 2. KLMA

3. LLMA

4. KLLA

Question ID : 2390873054
Status : Answered
Chosen Option : 4

Q.11 The statements below are followed by two conclusions labelled I and II. Assuming that the information in the statements is true, even if it appears to be at variance with generally established facts, decide which conclusion(s) logically and definitely follow(s) from the information given in the statements.

Statement:

- I. Some accountants are managers.
- II. Some accountants are cashiers.

Conclusions:

- I. All cashiers are accountants.
- II. Some managers are accountants.

- Ans
- 1. Either conclusion I or conclusion II follows.
 - 2. Only conclusion II follows.
 - 3. Only conclusion I follows.
 - 4. Both conclusion I and II follow.

Question ID : 2390873065
Status : Answered
Chosen Option : 2

Q.12 In a certain language if 'APPLES' is coded as '123456' and 'CANCEL' is coded as '918954', then state which the correct code for below word is. 'CLEANESS'

- Ans
- 1. 45399824
 - 2. 94518566
 - 3. 98263332
 - 4. 89214634

Question ID : 2390873060
Status : Answered
Chosen Option : 2

Q.13 Select the option that is related to the third letter-Cluster in the same way as the second letter-Cluster is related to the first letter-Cluster.

AhbH : HbhA :: YfgT : ?

- Ans
- 1. YfgT
 - 2. TfgY
 - 3. YgfT
 - 4. TgfY

Question ID : 2390873057
Status : Answered
Chosen Option : 4

Q.14 Select the option that is related to the third term in the same way as the second term is related to the first term.

Austria : Vienna :: Jordan : ?

- Ans
- 1. Syria
 - 2. Amman
 - 3. Arab
 - 4. Lebanon

Question ID : 2390873056
Status : Answered
Chosen Option : 4

Q.15 From the given answer figures, select the one in which the question figure is hidden/embedded.



Ans

1.



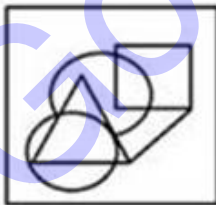
2.



3.



4.



Question ID : 2390873075
Status : Answered
Chosen Option : 1

Q.16 Read the given statement and conclusions carefully and decide which of the conclusions logically follow(s) from the statement.

Statement:
Sound cannot travel in vacuum.

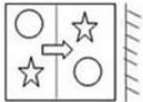
Conclusions:

- I. We cannot hear sound of explosion in vacuum.
- II. We cannot hear sound of explosion in atmosphere.

- Ans
- 1. Only Conclusion I follows.
 - 2. Either conclusion I or conclusion II follows.
 - 3. Only Conclusions II follows.
 - 4. Neither conclusion I nor conclusion II follow.

Question ID : 2390873066
 Status : Answered
 Chosen Option : 1

Q.17 If a mirror is placed on the line AB, then which of the answer figures is the right image of the given figure?



Ans

- 1.
- 2.
- 3.
- 4.

Question ID : 2390873076
 Status : Answered
 Chosen Option : 4

Q.18 In a certain code, 'PHYSICS' is written as 'CHIPSSY'. How is 'HISTORY' written in that code?

- Ans
- 1. HIORTSY
 - 2. HIOSRTY
 - 3. HIORSYT
 - 4. HIORSTY

Question ID : 2390873058
 Status : Answered
 Chosen Option : 4

Q.19 Observe the following figure (A) and Identify the correct figure If the figure (A) is folded at the dotted line.

Figure (A)



Ans

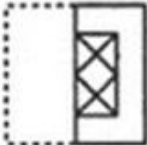
1.



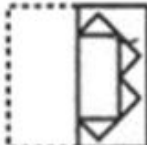
2.



3.



4.



Question ID : 2390873077

Status : Answered

Chosen Option : 2

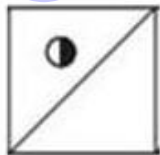
Q.20 Which answer figure will complete the pattern in the question figure?

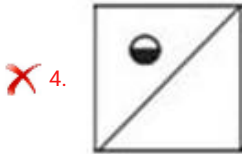
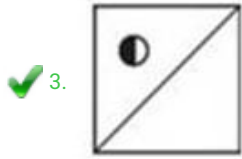
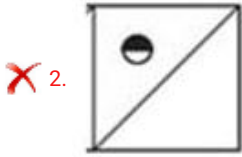
Question Figure



Ans

1.





Question ID : 2390873074
 Status : Answered
 Chosen Option : 3

Q.21 If 'x' means '÷', '-' means 'x', '÷' means '+' and '+' means '-' then

$(3 - 15 \div 11) \times 8 + 7 = ?$

- Ans
- ✗ 1. 4
 - ✗ 2. 1
 - ✗ 3. 8
 - ✓ 4. 0

Question ID : 2390873071
 Status : Answered
 Chosen Option : 4

Q.22 In a certain language if 'FLY' is coded as '285' and 'ACCESS' is coded as '399711', then state the correct code for below word: 'CYCLE'

- Ans
- ✓ 1. 95987
 - ✗ 2. 95978
 - ✗ 3. 95897
 - ✗ 4. 98597

Question ID : 2390873061
 Status : Answered
 Chosen Option : 1

Q.23 In the following question, select the number which can be placed at the sign of question mark (?) from the given alternatives.

24	61	49
56	94	66
32	?	61

- Ans
- ✗ 1. 82

✓ 2. 77

✗ 3. 58

✗ 4. 94

Question ID : 2390873070

Status : Not Answered

Chosen Option : --

Q.24 Select the option that is related to the third number in the same way as the second number is related to the first number.

9 : 28 :: 56 : ?

Ans ✗ 1. 3

✗ 2. 112

✓ 3. 169

✗ 4. 18

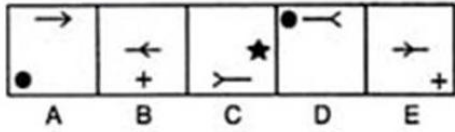
Question ID : 2390873069

Status : Answered

Chosen Option : 3

Q.25 In the following question, select the figure which can be placed at the sign of question mark (?) from the given alternatives.

Question Figure



Ans

✗ 1.



✗ 2.



✗ 3.



✓ 4.



Question ID : 2390873073

Status : Not Attempted and Marked For Review

Section : Numerical Aptitude

Q.1 The value of $2 \times 2 + 4 \times 4 + 2 \times \text{of } 3 \times 6 - 7 \times (5 + 4 \div 2)$ is:

- Ans 1. 7
 2. 5
 3. 4
 4. 6

Question ID : 2390872599

Status : Not Attempted and Marked For Review

Chosen Option : --

Q.2 A man starts off on a journey. He travelled for 16 hours in total. First half of the distance was covered at 40 km/h and the second half at 60 km/h. What was the distance covered?

- Ans 1. 768 km
 2. 576 km
 3. 384 km
 4. 960 km

Question ID : 2390872616

Status : Answered

Chosen Option : 1

Q.3 If $0.8 : X :: 5 : 8$, then what is X equal to?

- Ans 1. 1.32
 2. 1.16
 3. 1.24
 4. 1.28

Question ID : 2390872608

Status : Answered

Chosen Option : 4

Q.4 The difference of cubes of two numbers is 999. The numbers are in the ratio of 4 : 3. What is the square of the smaller number?

- Ans 1. 49
 2. 81
 3. 64
 4. 100

Question ID : 2390872610

Status : Answered

Chosen Option : 2

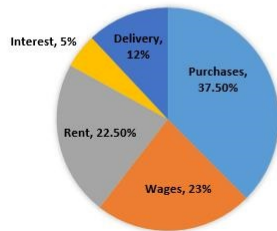
Q.5 If $(28 \div 4 \times 7) + (44 \div 4 \times 7) - (12 \times x) = 18$, then the value of x is:

- Ans
- 1. 12
 - 2. 6
 - 3. 9
 - 4. 3

Question ID : 2390872600
 Status : Answered
 Chosen Option : 3

Q.6 The Pie chart depicts the allocation of the revenue towards the expenses of a particular company. If the company's sales are ₹4000000 and 75% of the revenue is allocated towards expenses, then what is the total amount spent on Wages and Delivery?

Distribution of the expenses of Company



- Ans
- 1. ₹14,00,000
 - 2. ₹10,50,000
 - 3. ₹8,75,000
 - 4. ₹7,00,000

Question ID : 2390872620
 Status : Answered
 Chosen Option : 2

Q.7 The following Pie chart shows the market share of exporting countries. If a country X constitutes 40% of the share of 'other countries' and the quantity of exports by Country B is ₹15 million, then the quantity exported by Country X, is:



- Ans
- 1. ₹4 million
 - 2. ₹8 million
 - 3. ₹1.6 million
 - 4. ₹2 million

Question ID : 2390872621
 Status : Not Answered
 Chosen Option : --

Q.8 A student scored 32% marks and failed by 6 marks. Had he scored 36%, he would have passed by 2 marks. What is the passing score?

- Ans
- 1. 80

✓ 2. 70

✗ 3. 66

✗ 4. 75

Question ID : 2390872605

Status : Answered

Chosen Option : 2

Q.9 What is the sum of the digits of the largest six-digit number divisible by 3, 4, 5 and 6?

Ans ✗ 1. 45

✓ 2. 42

✗ 3. 39

✗ 4. 48

Question ID : 2390872598

Status : Not Attempted and Marked For Review

Chosen Option : --

Q.10 An article was sold for ₹500. Had the selling price been 10% less, the profit would have been 12.5%. What is the cost price of the article?

Ans ✗ 1. ₹360

✗ 2. ₹480

✗ 3. ₹420

✓ 4. ₹400

Question ID : 2390872607

Status : Answered

Chosen Option : 4

Q.11 How much time will it take a principal of ₹640 to yield ₹768 as an amount at 2.5% simple interest per annum?

Ans ✓ 1. 8 years

✗ 2. 10 years

✗ 3. 9 years

✗ 4. 11 years

Question ID : 2390872611

Status : Answered

Chosen Option : 1

Q.12 The ratio between the volume (in cm^3) and the curved surface area (in cm^2) of a cylinder is numerically 14 : 1. If the height of the cylinder is 50 cm, then what is the volume of the cylinder?

(Take $\pi = \frac{22}{7}$)

Ans ✗ 1. 184800 cm^3

✗ 2. 92400 cm^3

✓ 3. 123200 cm^3

✗ 4. 61600 cm^3

Question ID : 2390872617
Status : Answered
Chosen Option : 3

Q.13 6 pencils cost ₹30 and 12 pens cost ₹120. What is the average cost of 50 pencils and 50 pens?

- Ans
- 1. ₹6.75
 - 2. ₹5.75
 - 3. ₹5
 - 4. ₹7.5

Question ID : 2390872602
Status : Answered
Chosen Option : 4

Q.14 What is the difference between the compound interests on ₹10000 for two years at 20% per annum when the interests are compounded half-yearly and yearly respectively?

- Ans
- 1. ₹240
 - 2. ₹440
 - 3. ₹441
 - 4. ₹241

Question ID : 2390872612
Status : Answered
Chosen Option : 4

Q.15 A, B, C and D are to share profits in the ratio of 4 : 8 : 11 : 15. If the difference between the minimum and maximum proportions is ₹22000, then what is the sum of the other 2 proportions?

- Ans
- 1. ₹39900
 - 2. ₹38000
 - 3. ₹37050
 - 4. ₹36100

Question ID : 2390872609
Status : Answered
Chosen Option : 2

Q.16 If selling price of a product is multiplied by 2, then the resultant profit is 6 times the original profit. What is the original profit percentage?

- Ans
- 1. 15
 - 2. 10
 - 3. 25
 - 4. 20

Question ID : 2390872606
Status : Answered
Chosen Option : 4

Q.17 A family consists of two grandparents, two parents and four children. Two years ago, the average age of the grandparents was 72 years. One year ago, the average age of parents was 36 years. At present, the average age of the children is 12 years. What is the present average age of the family?

Ans

- 1. 32 years
- 2. 32.75 years
- 3. 33.75 years
- 4. 33 years

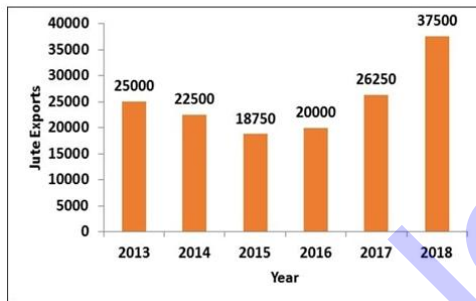
Question ID : 2390872601
Status : Answered
Chosen Option : 3

Q.18 A, B and C can alone do a task in 40, 120 and 36 days, respectively. A and B together work for 20 days and leave the task incomplete. C resumes it and complete it alone. How many days did C take to complete it?

- Ans**
- 1. 12
 - 2. 20
 - 3. 16
 - 4. 18

Question ID : 2390872614
Status : Answered
Chosen Option : 1

Q.19 The following bar chart shows the quantity (in million kg) of grains exported by a country during from 2013-2018. By how much percent is the maximum export greater than the minimum export during the given period?



- Ans**
- 1. 100%
 - 2. 66.67%
 - 3. 50%
 - 4. 75%

Question ID : 2390872622
Status : Answered
Chosen Option : 1

Q.20 A company bought a machine for ₹40000 and spent ₹10000 on its repairs. After some time, the machine was sold for ₹45000. How much discount was offered?

- Ans**
- 1. $\frac{100}{9}$ %
 - 2. $7\frac{1}{2}$ %
 - 3. 5%
 - 4. 10%

Question ID : 2390872603
Status : Answered

Q.21 A and B can together complete a task in 21 days. If A alone takes 42 days to complete the task, the number of days that B would take to do the task alone is:

- Ans**
- 1. 42
 - 2. 36
 - 3. 27
 - 4. 32

Question ID : 2390872613

Status : Answered

Chosen Option : 1

Q.22 If the radius of a cylinder is doubled and the height is reduced by 50%, then by how much percent does the volume increase/decrease?

- Ans**
- 1. 66.67% decrease
 - 2. 100% increase
 - 3. 50% decrease
 - 4. 75% increase

Question ID : 2390872619

Status : Answered

Chosen Option : 2

Q.23 The ratio of speeds of two aeroplanes is 7 : 15. If the first flight covers a distance of 1050 km in 3 hours, then what is the speed of the 2nd flight?

- Ans**
- 1. 720 km/h
 - 2. 900 km/h
 - 3. 675 km/h
 - 4. 750 km/h

Question ID : 2390872615

Status : Answered

Chosen Option : 4

Q.24 What is the volume of a cube whose side measures 7.5 cm?

- Ans**
- 1. 631.81 cm^3
 - 2. 759.375 cm^3
 - 3. 210.94 cm^3
 - 4. 421.875 cm^3

Question ID : 2390872618

Status : Answered

Chosen Option : 4

Q.25 The median of the first seven prime numbers, is:

- Ans**
- 1. 7

2. 11

3. 13

4. 5

Question ID : 2390872604
Status : Answered
Chosen Option : 1

Section : General awareness

Q.1 Who wrote the Book "Five Point Someone"?

Ans 1. Vidhu Vinod Chopra

2. Amish Tripathi

3. Gurucharan Das

4. Chetan Bhagat

Question ID : 2390872754
Status : Answered
Chosen Option : 4

Q.2 Indian boxing star Mary Kom hails from which north eastern state?

Ans 1. Tripura

2. Manipur

3. Mizoram

4. Meghalaya

Question ID : 2390872752
Status : Answered
Chosen Option : 2

Q.3 The Nile river does NOT flow through which of the following countries?

Ans 1. Tanzania

2. Egypt

3. Algeria

4. Kenya

Question ID : 2390872767
Status : Answered
Chosen Option : 1

Q.4 How many members are there in the Monetary Policy Committee of India?

Ans 1. 5

2. 6

3. 21

4. 3

Question ID : 2390872758
Status : Answered
Chosen Option : 3

Q.5 Which of the following is NOT used in the manufacturing of stainless steel?

- Ans
- 1. Chromium
 - 2. Carbon
 - 3. Sulfur
 - 4. Nickel

Question ID : 2390872763

Status : Answered

Chosen Option : 3

Q.6 नेटल इंडियन कांग्रेस (एनआईसी) की स्थापना किस भारतीय ने की थी?

- Ans
- 1. गोविंद रानाडे
 - 2. महात्मा गांधी
 - 3. बाल गंगाधर तिलक
 - 4. जवाहर लाल नेहरू

Question ID : 2390872772

Status : Answered

Chosen Option : 1

Q.7 If RBI raise repo rate, what is its likely impact on Indian economy?

- Ans
- 1. Inflation will decrease
 - 2. Inflation will increase
 - 3. Reverse repo rate will decrease
 - 4. Loans will become cheaper

Question ID : 2390872756

Status : Answered

Chosen Option : 1

Q.8 The Election held in a political Constituency to fill a vacancy arising during a Government's term of office is known as _____.

- Ans
- 1. Bye- Election
 - 2. Tri-Election
 - 3. Council Election
 - 4. Micro Election

Question ID : 2390872760

Status : Answered

Chosen Option : 1

Q.9 What fraction of a rupee is one anna, which was a part of the old currency system of India?

- Ans
- 1. 1/10th of a rupee
 - 2. 1/16th of a rupee
 - 3. 1/6th of a rupee
 - 4. 1/20th of a rupee

Question ID : 2390872771

Status : Answered

Chosen Option : 2

Q.10 निम्नलिखित में से भारत के किस राज्य में उदवाडा शहर में इरानशाह अताश बेहराम स्थित है?

- Ans
- 1. छत्तीसगढ़
 - 2. महाराष्ट्र
 - 3. राजस्थान
 - 4. गुजरात

Question ID : 2390872749

Status : Answered

Chosen Option : 2

Q.11 The hill station of Kalimpong is situated in ____.

- Ans
- 1. West Bengal
 - 2. Sikkim
 - 3. Jammu and Kashmir
 - 4. Arunachal Pradesh

Question ID : 2390872769

Status : Answered

Chosen Option : 2

Q.12 Which of the following state - festival pair is NOT correct?

- Ans
- 1. Baisakhi - Uttar Pradesh
 - 2. Gudi Padwa - Maharashtra
 - 3. Durga Pooja - West Bengal
 - 4. Chhath Pooja - Bihar

Question ID : 2390872748

Status : Answered

Chosen Option : 1

Q.13 Typhoid and Tuberculosis are what type of diseases?

- Ans
- 1. Viral
 - 2. Fungal
 - 3. Bacterial
 - 4. Protozoan

Question ID : 2390872762

Status : Answered

Chosen Option : 3

Q.14 Who was awarded UAE highest civilian honour 'Zayed Medal' in 2019?

- Ans
- 1. Imran Khan
 - 2. Benjamin Netanyahu
 - 3. Narendra Modi
 - 4. Vladimir Putin

Question ID : 2390872755

Status : Answered

Chosen Option : 3

Q.15 The famous UNESCO heritage site, Robben Island served as the political prison of which of the following leaders?

- Ans
- 1. Nelson Mandela
 - 2. Aung San Suu Kyi
 - 3. Martin Luther King Jr.
 - 4. Ho Chi Minh

Question ID : 2390872761

Status : Answered

Chosen Option : 1

Q.16 भौतिकी में, हबल नियतांक (Hubble constant) क्या है?

- Ans
- 1. रिक्त स्थान में विद्युतशीलता (permittivity)
 - 2. विद्युत चुम्बकीय विकिरणों की कुल ऊर्जा
 - 3. निर्वात में प्रकाश की गति
 - 4. माप की इकाई जो ब्रह्माण्ड के विस्तार की व्याख्या करती है।

Question ID : 2390872764

Status : Answered

Chosen Option : 4

Q.17 Which organelle of cell helps to keep the cell clean by digesting any foreign material and worn out cell organelle?

- Ans
- 1. Lysosomes
 - 2. Mitochondria
 - 3. Golgi Apparatus
 - 4. Plastids

Question ID : 2390872766

Status : Answered

Chosen Option : 1

Q.18 Lalit Kala Akademi, is a Government apex cultural body in which field?

- Ans
- 1. Music
 - 2. Visual Arts
 - 3. Theatre
 - 4. Performing Arts

Question ID : 2390872750

Status : Answered

Chosen Option : 4

Q.19 The 74th Amendment Act 1992 added which of the following parts to the Indian Constitution?

- Ans
- 1. IX C

2. IX A

3. IX B

4. IX

Question ID : 2390872759

Status : Answered

Chosen Option : 3

Q.20 Name the Indian-origin scientist who got Canada's highest civilian award - The Order of Canada - for his three decades of pioneering research on workplace injury and the spine.

Ans 1. Jeet Aulakh

2. Bharat Agnihotri

3. Shrawan Kumar

4. Ravi Baichwal

Question ID : 2390872753

Status : Answered

Chosen Option : 2

Q.21 Which organ is responsible for the movement and hand-eye coordination in the human body?

Ans 1. Brain

2. Heart

3. Liver

4. Kidney

Question ID : 2390872765

Status : Answered

Chosen Option : 1

Q.22 Which present day state did the 18th century freedom fighter Veerapandiya Kattabomman hail from?

Ans 1. Karnataka

2. Kerala

3. Tamil Nadu

4. Telangana

Question ID : 2390872770

Status : Answered

Chosen Option : 1

Q.23 Who is the head coach of the Chennai Super Kings IPL team as of April 2019?

Ans 1. Gary Kirsten

2. Jacques Kallis

3. Stephen Fleming

4. Mahela Jayawardene

Question ID : 2390872751

Status : Answered

Chosen Option : 3

Q.24 Which of the following is a monetary policy tool used by RBI to control inflation?

- Ans
- 1. Repo rate
 - 2. Fiscal Drag
 - 3. Fiscal Push
 - 4. Austerity measures

Question ID : 2390872757
Status : Answered
Chosen Option : 1

Q.25 The Guindy National Park is located in _____.

- Ans
- 1. Telangana
 - 2. Tamil Nadu
 - 3. Andhra Pradesh
 - 4. Himachal Pradesh

Question ID : 2390872768
Status : Answered
Chosen Option : 3