

[Click to Print](#) [logout](#)[Challenges](#)

**Staff Selection Commission**  
(Government Of India)

Question 1. Select the related word/letters/numbers from the given alternatives:

दिये गये विकल्पों में से संबंधित शब्द/अक्षरों/संख्या को चुनिए।

Jailor : Prison :: Curator : ?

जेलर : जेल :: क्यूरेटर : ?

**Options:**

- 1) Cell  
कोठरी
- 2) Museum  
संग्रहालय
- 3) Warden  
संरक्षक
- 4) Cure  
इलाज

**Correct Answer:** Museum

संग्रहालय

**Candidate Answer:** Museum

संग्रहालय

Question 2. Select the related word/letters/numbers from the given alternatives:

दिये गये विकल्पों में से संबंधित शब्द/अक्षरों/संख्या को चुनिए।

FED : IHG :: ? : ?

**Options:**

- 1) ACB : GUV
- 2) TSR : WVU
- 3) VUK : LMO
- 4) DEF : IGH

**Correct Answer:** TSR : WVU

**Candidate Answer:** TSR : WVU

Question 3. Select the related word/letters/numbers from the given alternatives:

दिये गये विकल्पों में से संबंधित शब्द/अक्षरों/संख्या को चुनिए।

9 : 25 :: 49 : ?

**Options:**

- 1) 36
- 2) 54
- 3) 64
- 4) 81

**Correct Answer:** 81

**Candidate Answer:** 81

Question 4.

**For the following questions**

Find the odd word/letters/number from the given alternatives.

दिए गए विकल्पों में से विषम शब्द/अक्षर/संख्या युग्म चुनिये।

**Options:**

1) Teacher

अध्यापक

2) Lawyer

वकील

3) Doctor

डॉक्टर

4) Manager

प्रबंधक

**Correct Answer:** Manager

प्रबंधक

**Candidate Answer:** Manager

प्रबंधक

Question 5.

**For the following questions**

Find the odd word/letters/number from the given alternatives.

इस प्रश्न में दिए गए विकल्पों में से विषम संख्या/अक्षर/संख्या युग्म चुनिए।

**Options:**

1) DEB

2) RTP

3) HIF

4) NOL

**Correct Answer:** RTP**Candidate Answer:** RTP

Question 6.

**For the following questions**

Find the odd word/letters/number pair from the given alternatives.

दिए गए विकल्पों में से विषम शब्द/अक्षर/संख्या युग्म चुनिये।

**Options:**

1) 6 , 612

2) 5 , 521

3) 4 , 46

4) 7 , 543

**Correct Answer:** 7 , 543**Candidate Answer:** 7 , 543

Question 7. Arrange the following words as per order in the dictionary.

निम्नलिखित शब्दों को शब्दकोश में दिए गये क्रम के अनुसार लिखिए।

1. Defect 2. Defence 3. Deerstalker 4. Defensive

**Options:**

1) 2, 3, 1, 4

2) 1, 3, 2, 4

3) 4, 3, 1, 2

4) 3, 1, 2, 4

**Correct Answer:** 3, 1, 2, 4**Candidate Answer:** 3, 1, 2, 4

Question 8. A series is given, with one term missing. Choose the correct alternative from the given ones that will complete the series.

दी गई श्रृंखला में एक पद लुप्त है। दिए गए विकल्पों में से सही विकल्प चुनिए जो श्रृंखला को पूरा करेगा।

AZ, CX, FU, ?

**Options:**

1) IR

2) IV

3) JQ

4) KP

**Correct Answer:** JQ**Candidate Answer:** JQ

Question 9. A series is given, with one term missing. Choose the correct alternative from the given ones that will complete the series.

दी गई श्रृंखला में एक पद लुप्त है। दिए गए विकल्पों में से सही विकल्प चुनिए जो श्रृंखला को पूरा करेगा।

5, 10, 30, ?, 600, 3600

**Options:**

1) 120

2) 100

3) 90

4) 60

**Correct Answer:** 120**Candidate Answer:** 120

Question 10. A person while buying a dress on sale spends Rs. 45 and saves Rs. 5, what is the percentage of his savings?

एक व्यक्ति 'सेल' में वस्त्र खरीदते समय Rs. 45 खर्च करता है और Rs. 5 की बचत करता है। उसकी बचत का प्रतिशत क्या है ?

**Options:**

1) 5%

2) 10%

3) 15%

4) 20%

**Correct Answer:** 10%**Candidate Answer:** 10%

Question 11. 2 litre of pure alcohol is added to 6 litre, 40% alcohol solution. The percentage of water in the solution is \_\_\_\_.

2 ली. शुद्ध ऐल्कोहॉल को 6 ली., 40% ऐल्कोहॉल घोल में मिलाया जाता है। घोल में जल का प्रतिशत बताइये ?

**Options:**

1) 65%

2) 45%

3) 55%

4) 60%

**Correct Answer:** 45%**Candidate Answer:** 45%

Question 12. From the given alternative words, select the word which can be formed using the letters of the given word:

निम्नलिखित विकल्पों में से वह शब्द चुनिए जो दिए गए शब्द के अक्षरों का प्रयोग करके बनाया जा सकता है

COMMUNICATION

**Options:**

- 1) AMMUNITION
- 2) MONITOR
- 3) COUNTRY
- 4) UNIFICATION

**Correct Answer:** AMMUNITION**Candidate Answer:** AMMUNITION

Question 13.If 'HARBOUR' is written as 'IBSCPVS' , how is 'HABITAT' written in that code?

यदि 'HARBOUR' को 'IBSCPVS' के रूप में लिखा जाता है, तो 'HABITAT' को उसी कोड में कैसे लिखा जाएगा ?

**Options:**

- 1) GZAHSZS
- 2) IBCJUBU
- 3) IBAHSZS
- 4) IBCJBUU

**Correct Answer:** IBCJUBU**Candidate Answer:** IBCJUBU

Question 14.If '-' means 'x' , 'x' means '+' , '+' means '÷' and '÷' means '-' , then what will be the value of  $40 \times 12 + 3 - 6 \div 60 = ?$

यदि '-' का आशय 'x' से हो , 'x' का आशय '+' से हो , '+' का आशय '÷' से हो और '÷' का आशय '-' से हो, तो  $40 \times 12 + 3 - 6 \div 60 =$  का मान क्या होगा ?

**Options:**

- 1) 4
- 2) 7
- 3) 16
- 4) 44

**Correct Answer:** 4**Candidate Answer:** 4

Question 15.If  $25 + 5 \div 2 = 40$  , and  $35 + 5 \div 2 = 60$  , then  $45 + 5 \div 2 = ?$

यदि  $25 + 5 \div 2 = 40$  , और  $35 + 5 \div 2 = 60$  , तो  $45 + 5 \div 2 = ?$

**Options:**

- 1) 90
- 2) 70
- 3) 60
- 4) 80

**Correct Answer:** 80**Candidate Answer:** 80

Question 16.Select the missing numbers from the given alternatives

दिए गये विकल्पों में से लुप्त संख्या चुनिए।

8    21    34  
27    ?    53

**Options:**

- 1) 35
- 2) 40
- 3) 17
- 4) 23

**Correct Answer:** 40**Candidate Answer:** 40

Question 17. A driver left his village and drove North for 20 km after which he stopped for breakfast. Then he turned left and drove another 30 km, when he stopped for lunch. After some rest, he again turned left and drove 20 km before stopping for evening tea. Once more he turned left and drove 30 km to reach the town where he had supper. After evening tea, in which direction did he drive?

एक ड्राइवर अपने गाँव से चला और 20 कि.मी. उत्तर की ओर जाने के बाद जलपान के लिए रुका। फिर वह बाएं मुड़ गया और 30 कि.मी. और चलने के बाद भोजन के लिए रुका। कुछ और विश्राम के बाद वह फिर बाएं मुड़ा और शाम की चाय के लिए रुकने से पहले 20 कि.मी. और चला। वह एक बार फिर बाएं मुड़ा और 30 कि.मी. चलकर उस कस्बे में पहुँच गया जहाँ उसने रात्रि-भोज किया। शाम की चाय के बाद वह किस दिशा में चला था?

**Options:**

1) West

पश्चिम

2) East

पूर्व

3) North

उत्तर

4) South

दक्षिण

**Correct Answer:** East

पूर्व

**Candidate Answer:** East

पूर्व

Question 18. Consider the given statement/s to be true and decide which of the given conclusions/assumptions can definitely be drawn from the given statement.

Statements: 1. Some managers are young.

2. All boys are young.

Conclusions: I. Some boys are managers.

II. Some managers are boys.

निम्नलिखित प्रश्न में एक या दो वक्तव्य दिये गये हैं, जिसके आगे दो निष्कर्ष/मान्यताएं, I और II निकाले गये हैं। आपको विचार करना है कि वक्तव्य सत्य है चाहे वह सामान्यतः शर्त तथ्यों से भिन्न प्रतीत होता हो। आपको निर्णय करना है कि दिए गए वक्तव्य में से कौन-सा निश्चित रूप से सही निष्कर्ष/मान्यता निकाला जा सकता है ?

कथन : 1. - कुछ प्रबंधक युवा हैं।

2. - सभी लड़के युवा हैं।

निष्कर्ष: I- कुछ लड़के प्रबंधक हैं।

II- कुछ प्रबंधक लड़के हैं।

**Options:**

1) Only conclusion I follows

केवल निष्कर्ष I सही है।

2) Only conclusion II follows

केवल निष्कर्ष II सही है।

3) Neither conclusion I nor conclusion II follows

न निष्कर्ष I सही है और न निष्कर्ष II

4) Both conclusion I and conclusion II follow

निष्कर्ष I और निष्कर्ष II दोनों सही हैं।

**Correct Answer:** Neither conclusion I nor conclusion II follows

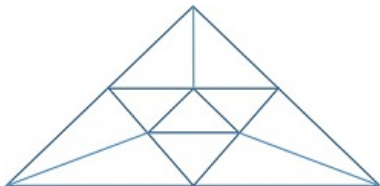
न निष्कर्ष I सही है और न निष्कर्ष II

**Candidate Answer:** Neither conclusion I nor conclusion II follows

न निष्कर्ष I सही है और न निष्कर्ष II

Question 19. How many triangles are there in the given figure?

दिए गये चित्र में कितने त्रिभुज हैं ?



**Options:**

1) 10

2) 13

3) 15

4) 16

**Correct Answer:** 15

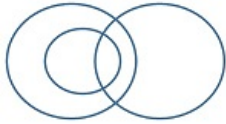
**Candidate Answer: 13**

Question 20. Which of the following diagrams represent the relationship among males, fathers, advocates ?

निम्नलिखित में से कौन से आरेख पुरुषों, पिताओं और ऐडवोकेटों में संबंध दर्शाते हैं?

**Options:**

1)



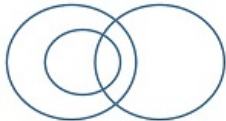
2)



3)

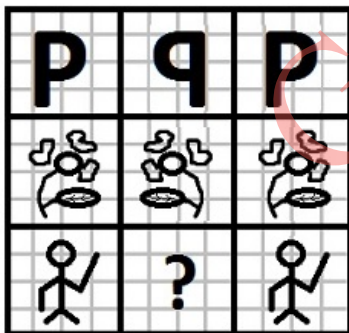


4)

**Correct Answer:****Candidate Answer:**

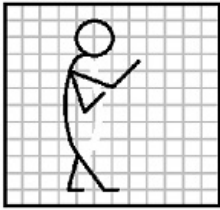
Question 21. Which answer figure will complete the pattern in the question figure?

कौन-सी उत्तर आकृति प्रश्न आकृति के पैटर्न को पूरा करेगी ?

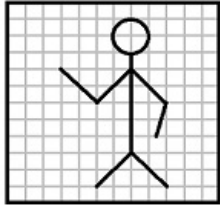


**Options:**

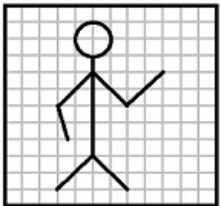
1)



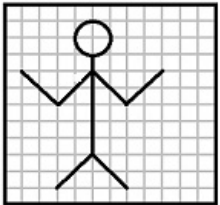
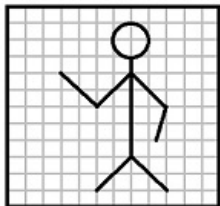
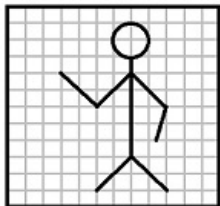
2)



3)

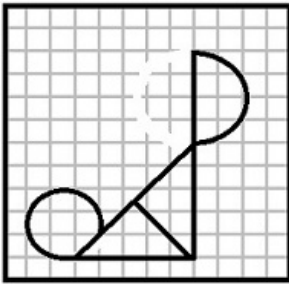


4)

**Correct Answer:****Candidate Answer:**

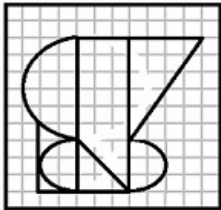
Question 22. From the given answer figures, select the one in which the question figure is hidden/embedded

दी गई उत्तर आकृतियों में से उस उत्तर आकृति को चुनिए जिसमें प्रश्न आकृति निहित है।

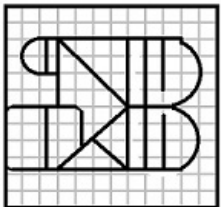


Options:

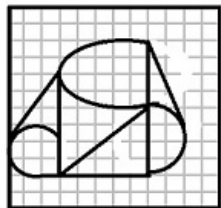
1)



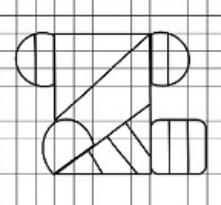
2)



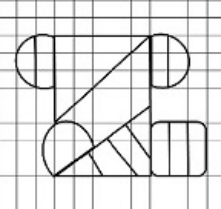
3)



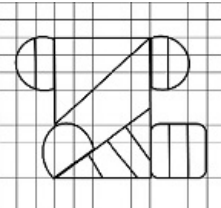
4)



Correct Answer:



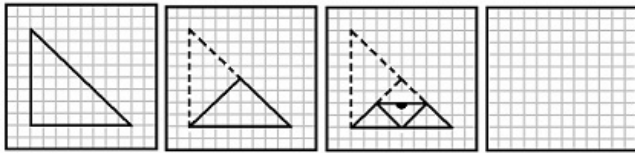
Candidate Answer:





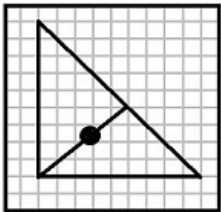
Question 23. A piece of paper is folded and cut as shown below in the question figures. From the given answer figures, indicate how it will appear when opened.

नीचे प्रश्न आकृतियों में दिखाए अनुसार कागज को मोड़कर काटने तथा खोलने के बाद वह किस उत्तर आकृति जैसा दिखाई देगा ?

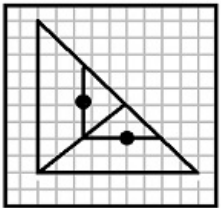


Options:

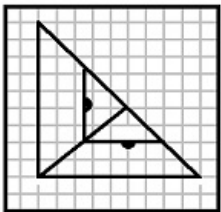
1)



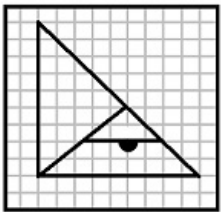
2)



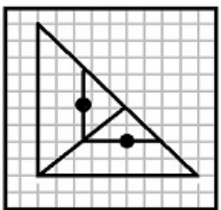
3)

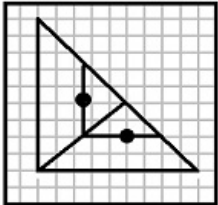


4)



Correct Answer:



**Candidate Answer:**

Question 24.If a mirror is placed on the line MN, then which of the answer figures is the right image of the given figure?

यदि एक दर्पण को MN रेखा पर रखा जाये तो दी गई उत्तर आकृतियों में से कौन-सी आकृति प्रश्न आकृति का सही प्रतिबिम्ब होगी ?

**Options:**

- 1) ABMUMI
- 2) BMUMIA
- 3) MUMIAB
- 4) MUMBAI

**Correct Answer:** MUMBAI**Candidate Answer:** MUMBAI

Question 25.In the question, a word is represented by only one set of numbers as given in any one of the alternatives. The sets of numbers given in the alternatives are represented by two classes of alphabets as in two matrices given below. The columns and rows of Matrix I are numbered from 0 to 4 and that of Matrix II are numbered from 5 to 9. A letter from these matrices can be represented first by its row and next by its column, e.g., L can be represented by 12,24, etc., and 'R' can be represented by 55, 67, etc.

Similarly you have to identify the set for the word 'TONE'

निम्नलिखित प्रश्न में विकल्पों में दिए गए संख्या-समूह, अक्षरों के दो वर्गों द्वारा दर्शाए गए हैं, जैसे कि नीचे दिए गए दो आव्यूहों में हैं। आव्यूह I के सतम्भ और पंक्ति की संख्या 0 से 4 तक दी गई है, और आव्यूह II के 5 से 9 तक, इन आव्यूहों से एक अक्षर को पहले उसकी पंक्ति और बाद में स्तम्भ संख्या द्वारा दर्शाया जा सकता है। उदाहरण के लिए 'L' को 12, 24 आदि द्वारा दर्शाया जा सकता है तथा 'R' को 55, 67 आदि द्वारा दर्शाया जा सकता है। इसी तरह से आपको दिए हुए शब्द 'TONE' के लिए समूह को पहचानना है।

**MATRIX I**

	0	1	2	3	4
0	L	E	O	S	C
1	S	C	L	E	O
2	E	O	S	C	L
3	C	L	E	O	S
4	O	S	C	L	E

**MATRIX II**

	5	6	7	8	9
5	R	K	U	N	T
6	N	T	R	K	U
7	K	U	N	T	R
8	T	R	K	U	N
9	U	N	T	R	K

**Options:**

- 1) 85 , 40 , 58 , 75
- 2) 66 , 21 , 77 , 56
- 3) 97 , 33 , 65 , 44
- 4) 78 , 57 , 89 , 32

**Correct Answer:** 97 , 33 , 65 , 44**Candidate Answer:** 97 , 33 , 65 , 44

Question 26.Which of the following taxes is levied by the State Government only?

निम्नलिखित में कौनसा कर केवल राज्य सरकार द्वारा लगाया जाता है ?

**Options:**

1) Wealth tax

संपत्ति कर

2) Entertainment tax

मनोरंजन कर

3) Income tax

आय कर

4) Gift tax

उपहार कर

**Correct Answer:** Entertainment tax

मनोरंजन कर

**Candidate Answer:** Gift tax

उपहार कर

Question 27.HDI is an aggregate measure of progress in which of the three dimensions?

एच. डी. आई. किन तीन क्षेत्रों में विकास का मापक है ?

**Options:**

1) Health, Education, Income

स्वास्थ्य, शिक्षा, आमदनी

2) Food Security, Employment, Income

खाद्य सुरक्षा, रोजगार, आमदनी

3) Agriculture, Industry, Services

कृषि, उद्योग, सेवाएं

4) Height, Weight, Colour

ऊंचाई, भार, रंग

**Correct Answer:** Health, Education, Income

स्वास्थ्य, शिक्षा, आमदनी

**Candidate Answer:** Health, Education, Income

स्वास्थ्य, शिक्षा, आमदनी

Question 28.The Working Committee of National Congress sanctioned the resolution named 'Quit India' at

राष्ट्रीय कांग्रेस कार्यकारी समिती ने "भारत छोड़ो " नामक आन्दोलन का अनुमोदन कहाँ किया था?

**Options:**

1) Wardha

वर्धा

2) Nagpur

नागपुर

3) Mumbai

मुंबई

4) Delhi

दिल्ली

**Correct Answer:** Wardha

वर्धा

**Candidate Answer:** Wardha

वर्धा

Question 29.Preservation of historical articles is done in science of \_\_\_\_\_

ऐतिहासिक लेखों का संरक्षण विज्ञान की किस शाखा के अन्तर्गत आता है?

**Options:**

1) Iconography

प्रतिमा विज्ञान

2) Numismatic

मुद्रा शास्त्र

3) Museology

म्यूजियोलॉजी

4) Epigraphy

ऐपिग्राफी

**Correct Answer:** Museology

म्यूजियोलॉजी

**Candidate Answer:** Epigraphy

ऐपिग्राफी

Question 30. "Alfalfa" is the name of a \_\_\_\_\_

अल्फाल्फा एक प्रकार का \_\_\_\_\_ का नाम है।

**Options:**

1) Mineral

खनिज

2) Tribe

जाती

3) Grass

घास

4) Town

शहर

**Correct Answer:** Grass

घास

**Candidate Answer:** Grass

घास

Question 31. The chemical that is used to ripen mangoes is

उस रसायन का नाम बताइए जो आम को पकाने के काम आता है।

**Options:**

1) Calcium sulphide

कैल्शियम सल्फाइड

2) Calcium carbide

कैल्शियम कार्बाइड

3) Calcium carbonate

कैल्शियम कार्बोनेट

4) Calcium chloride

कैल्शियम क्लोराइड

**Correct Answer:** Calcium carbide

कैल्शियम कार्बाइड

**Candidate Answer:** Calcium carbide

कैल्शियम कार्बाइड

Question 32. The term 'Smasher' is associated with which sport?

"स्मैशर" शब्द निम्नलिखित में से किस खेल के साथ जुड़ा हुआ है ?

**Options:**

1) Hockey

हॉकी

2) Boxing

बॉक्सिंग

3) Volley Ball

वालीबॉल

4) Cricket

क्रिकेट

**Correct Answer:** Volley Ball

वालीबॉल

**Candidate Answer:** Volley Ball

वालीबॉल

Question 33. \_\_\_\_\_ involves traversing the entire file system, marking everything that can be accessed.

निम्नलिखित में से किसमें, जो भी फाइल / फोल्डर एक्सेस किया जा सकता है उसे मार्क करते हुए, पूरे फाइल सिस्टम से गुजरना पड़ता है?

**Options:**

1) Index pointer

इंडेक्स पॉइंटर

2) Garbage collection

कचरा एकत्रिकरण

3) File system

फाइल सिस्टम

4) Stack pointer

स्टैक पॉइंटर

**Correct Answer:** Garbage collection

कचरा एकत्रिकरण

**Candidate Answer:** [ NOT ANSWERED ]

Question 34. Nylon threads are made of

नायलॉन धागा किससे बना होता है?

**Options:**

- 1) Polyester polymer  
पॉलीएस्टर पॉलीमर
- 2) Polyamide polymer  
पॉलीएमाइड पॉलीमर
- 3) Polyvinyl polymer  
पॉलीविनाइल पॉलीमर
- 4) Polysaccharide  
पॉलीसैकेराइड

**Correct Answer:** Polyamide polymer

पॉलीएमाइड पॉलीमर

**Candidate Answer:** Polyamide polymer

पॉलीएमाइड पॉलीमर

Question 35. The longest railway line in the world connects \_\_\_\_\_

विश्व की सबसे लंबी रेल लाइन किन शहरों को जोड़ती है ?

**Options:**

- 1) New York and Seattle  
न्यूयॉर्क तथा सिएटल
- 2) Leningrad and Vladivostok  
लेनिनग्राद तथा व्लादिवोस्तोक
- 3) Trivandrum and Guwahati  
तिरुवनंतपुरम तथा गुवाहाटी
- 4) Perth and Sydney  
पर्थ तथा सिडनी

**Correct Answer:** Leningrad and Vladivostok

लेनिनग्राद तथा व्लादिवोस्तोक

**Candidate Answer:** Leningrad and Vladivostok

लेनिनग्राद तथा व्लादिवोस्तोक

Question 36. How many Constitutional Amendments to the Constitution of India have been made so far?

भारत के संविधान में अब तक कितने संशोधन बनाए जा चुके हैं ?

**Options:**

- 1) 122
- 2) 121
- 3) 120
- 4) 119

**Correct Answer:** 122

**Candidate Answer:** [ NOT ANSWERED ]

Question 37. The Chairman of the National Disaster Management Authority (NDMA) is

राष्ट्रीय आपदा प्रबन्धन प्राधिकरण का अध्यक्ष कौन है ?

**Options:**

- 1) National Security Advisor  
राष्ट्रीय सुरक्षा सलाहकार
- 2) Prime Minister of India  
भारत के प्रधान मंत्री
- 3) Chief of DRDO  
डी.आर.डी.ओ. का अध्यक्ष
- 4) Home Minister of India  
भारत के गृह मंत्री

**Correct Answer:** Prime Minister of India

भारत के प्रधान मंत्री

**Candidate Answer:** Prime Minister of India

भारत के प्रधान मंत्री

Question 38. When the offices of the President and Vice-President fall vacant simultaneously, who acts as President?

जब राष्ट्रपति तथा उप-राष्ट्रपति के पद पर कोई भी कार्यरत न हो तब उनके रिक्त स्थान पर "राष्ट्रपति" के रूप में कौन कार्यरत होगा ?

**Options:**

1) Prime Minister of India

भारत के प्रधान मंत्री

2) The Chief Justice of India

भारत का मुख्य न्यायाधीश

3) The Speaker of Lok Sabha

लोकसभा अध्यक्ष

4) The Comptroller and Auditor General of India

भारत का नियंत्रक एवं महालेखा परीक्षक

**Correct Answer:** The Chief Justice of India

भारत का मुख्य न्यायाधीश

**Candidate Answer:** The Chief Justice of India

भारत का मुख्य न्यायाधीश

Question 39. Goitre is caused by the deficiency of \_\_\_\_\_

घेंघा नामक रोग किसकी कमी के कारण उत्पन्न होता है ?

**Options:**

1) Zinc

जिंक

2) Calcium

कैल्शियम

3) Iodine

आयोडीन

4) Chlorine

क्लोरीन

**Correct Answer:** Iodine

आयोडीन

**Candidate Answer:** Iodine

आयोडीन

Question 40. For photoelectric effect to take place, the metal used as the cathode should have \_\_\_\_\_

प्रकाश-वैद्युत प्रभाव उत्पन्न करने के लिए जिस धातु का प्रयोग कैथोड की तरह से किया जाना है उसका

**Options:**

1) high melting point

उच्च गलनांक होना चाहिए

2) low melting point

निम्न गलनांक होना चाहिए

3) Low work function

निम्न क्रियाशीलता होनी चाहिए

4) low resistance

निम्न प्रतिरोधकता

**Correct Answer:** Low work function

निम्न क्रियाशीलता होनी चाहिए

**Candidate Answer:** high melting point

उच्च गलनांक होना चाहिए

Question 41. The Speaker of the Lok Sabha can be removed from his office by \_\_\_\_\_

लोकसभा के अध्यक्ष को उसके पद से किसके द्वारा हटाया जा सकता है ?

**Options:**

1) The President

राष्ट्रपति

2) The Prime Minister

प्रधानमंत्री

3) a resolution passed by both Houses of Parliament

संसद के दोनों सदनों द्वारा पारित प्रस्ताव के द्वारा

4) a resolution passed by the Lok Sabha

लोकसभा द्वारा पारित प्रस्ताव द्वारा

**Correct Answer:** a resolution passed by the Lok Sabha  
लोकसभा द्वारा पारित प्रस्ताव द्वारा

**Candidate Answer:** a resolution passed by the Lok Sabha  
लोकसभा द्वारा पारित प्रस्ताव द्वारा

Question 42.What does Section 124A of Indian Penal Code deal with?

भारतीय दंड संहिता के अनुच्छेद 124 A के अन्तर्गत क्या आता है ?

**Options:**

1) Atrocity against women

महिलाओं के खिलाफ अत्याचार

2) Sedition

राजद्रोह

3) Crime for demanding dowry

दहेज की मांग से संबंधित अपराध

4) Atrocity against SC / ST

अनुसूचित जाति/ अनुसूचित जनजाति के प्रति अत्याचार

**Correct Answer:** Sedition

राजद्रोह

**Candidate Answer:** [ NOT ANSWERED ]

Question 43.Which instrument is used for photographing the Sun?

सूर्य की फोटोग्राफी के लिए किस उपकरण का प्रयोग किया जाता है ?

**Options:**

1) Galvanometer

गैल्वेनोमीटर

2) Potentiometer

पोटेंशियोमीटर

3) Spectrophotometer

स्पेक्ट्रोफोटोमीटर

4) Spectroheliograph

स्पेक्ट्रो हीलियोग्राफ

**Correct Answer:** Spectroheliograph

स्पेक्ट्रो हीलियोग्राफ

**Candidate Answer:** Spectroheliograph

स्पेक्ट्रो हीलियोग्राफ

Question 44.Which country won 2016 Men's Hockey Champions Trophy ?

वर्ष 2016 की पुरुष हॉकी चैंपियनशिप ट्रॉफी किस देश ने जीती ?

**Options:**

1) India

भारत

2) Germany

जर्मनी

3) Belgium

बेल्जियम

4) Australia

ऑस्ट्रेलिया

**Correct Answer:** Australia

ऑस्ट्रेलिया

**Candidate Answer:** Belgium

बेल्जियम

Question 45.Which of the following countries is not a member of G-8?

निम्नलिखित में से कौनसा देश जी-8 का सदस्य नहीं है?

**Options:**

- 1) USA  
यू.एस.ए.
- 2) UK  
यू.के.
- 3) Germany  
जर्मनी
- 4) Russia  
रूस

**Correct Answer:** Russia

रूस

**Candidate Answer:** Germany

जर्मनी

Question 46. The main protein found in milk is \_\_\_\_\_

दूध में पाया जानेवाला मुख्य प्रोटीन कौनसा है ?

**Options:**

- 1) Albumin  
एल्बुमिन
- 2) Globulin  
ग्लोब्युलिन
- 3) Globin  
ग्लोबिन
- 4) Casein  
कैसीन

**Correct Answer:** Casein

कैसीन

**Candidate Answer:** Casein

कैसीन

Question 47. Which organ gets affected in Weil's disease?

वील्स रोग में कौन सा अंग प्रभावित होता है ?

**Options:**

- 1) Liver  
लीवर
- 2) Lung  
फेफड़ा
- 3) Heart  
हृदय
- 4) Kidney  
किडनी

**Correct Answer:** Kidney

किडनी

**Candidate Answer:** [ NOT ANSWERED ]

Question 48. Which of the following was the Official slogan for the 2016 Rio Olympic and Para Olympic Games?

निम्नलिखित में कौनसा अधिकारिक नारा वर्ष 2016 के रियो ओलंपिक तथा पैरा ओलंपिक खेलों के लिए रखा गया है ?

**Options:**

- 1) Welcome Home  
वेलकम होम
- 2) A New World  
ए न्यू वर्ल्ड
- 3) Love & Save Nature  
लव एन्ड सेव नेचर
- 4) Inspire a Generation  
इन्स्पायर ए जनरेशन

**Correct Answer:** A New World

ए न्यू वर्ल्ड

**Candidate Answer:** Inspire a Generation

इन्स्पायर ए जनरेशन



Question 49. The Daily Weather Map of India is prepared and printed at \_\_\_\_\_

भारत का "दैनिक मौसम मानचित्र" कहाँ तैयार तथा छापा (प्रिंट) जाता है ?

**Options:**

1) Kolkata

कोलकाता

2) Mumbai

मुंबई

3) New Delhi

नई दिल्ली

4) Pune

पुणे

**Correct Answer:** Pune

पुणे

**Candidate Answer:** [ NOT ANSWERED ]

Question 50. The capital of the Mauryan Kingdom was located at \_\_\_\_\_

मौर्य साम्राज्य की राजधानी कहाँ स्थित थी ?

**Options:**

1) Pataliputra

पाटलिपुत्र

2) Vaishali

वैशाली

3) Lumbini

लुम्बिनी

4) Gaya

गया

**Correct Answer:** Pataliputra

पाटलिपुत्र

**Candidate Answer:** Vaishali

वैशाली

Question 51. A canteen requires 56 kgs of rice for seven days . The quantity of rice required for the months of April and May together is

किसी कैन्टीन को 7 दिन के लिए 56 किग्रा. चावल की आवश्यकता है। उसे अप्रैल और मई माह के लिए मिलाकर कुल कितने कि.ग्रा. चावल की आवश्यकता होगी ?

**Options:**

1) 468 kg

468 कि.ग्रा.

2) 488 kg

488 कि.ग्रा.

3) 498 kg

498 कि.ग्रा.

4) 508 kg

508 कि.ग्रा.

**Correct Answer:** 488 kg

488 कि.ग्रा.

**Candidate Answer:** 488 kg

488 कि.ग्रा.

Question 52. A shopkeeper earns a profit of 15% after selling a book at 20% discount on the printed price . The ratio of the cost price and printed price of the book is

एक पुस्तक के अंकित मूल्य पर 20% छूट देने पर एक दुकानदार को 15% का लाभ होता है। पुस्तक के क्रय मूल्य और अंकित मूल्य का अनुपात बताइये ?

**Options:**

1) 20:23

2) 23:20

3) 16:23

4) 23:16

**Correct Answer:** 16:23

**Candidate Answer:** 16:23

Question 53. A car travels 80 km in 2 hours and a train travels 180 km in 3 hours . The ratio of speed of the car to the train is

एक कार 2 घण्टे में 80 कि.मी. की यात्रा करती है और एक रेलगाड़ी 3 घण्टे में 180 कि.मी. की यात्रा करती है। कार की रेलगाड़ी से चाल का अनुपात क्या है ?



Question 58.If  $a^2 + b^2 + c^2 = 83$  and  $a + b + c = 15$  then the value of  $ab + bc + ca$  is

यदि  $a^2 + b^2 + c^2 = 83$  और  $a + b + c = 15$  हो, तो  $ab + bc + ca$  का मान ज्ञात कीजिए ?

**Options:**

1) 69

2) 70

3) 71

4) 72

**Correct Answer:** 71

**Candidate Answer:** 71

Question 59.If  $(\sqrt{3} + 1)^2 = x + \sqrt{3}y$ , then the value of  $x + y$  is

यदि  $(\sqrt{3} + 1)^2 = x + \sqrt{3}y$  हो तो

$x + y$  का मान ज्ञात कीजिए ?

**Options:**

1) 2

2) 4

3) 6

4) 8

**Correct Answer:** 6

**Candidate Answer:** 6

Question 60.T is a point on the common tangents at P of two circles and if TA and TB are respectively the other tangents at A and B to the two circles drawn from the point T then

दो वृत्तों के P पर समान स्पर्श रेखाओं पर T एक बिन्दु है और T बिन्दु से खींचे गए दो वृत्तों के A और B पर TA और TB क्रमशः अन्य स्पर्श रेखाएँ हैं, तब

**Options:**

1)  $TA = 2 TB$

2)  $TA = TB$

3)  $TA = 1/2 TB$

4)  $3TA = TB$

**Correct Answer:**  $TA = TB$

**Candidate Answer:**  $TA = TB$

Question 61.In a triangle XYZ, which of the following conditions is true

XYZ त्रिकोण में निम्नलिखित में से कौन सी स्थिति सही है ?

**Options:**

1)  $XY - YZ > ZX$

2)  $XY + YZ < ZX$

3)  $XY - YZ < XZ$

4)  $XY + ZX < YZ$

**Correct Answer:**  $XY - YZ < XZ$

**Candidate Answer:**  $XY - YZ < XZ$

Question 62.If  $\sin(3x - 20^\circ) = \cos(3y + 20^\circ)$ , then find the value of  $(x + y)$ .

यदि  $\sin(3x - 20^\circ) = \cos(3y + 20^\circ)$  तो  $(x + y)$  का मान ज्ञात कीजिए ?

**Options:**

1)  $90^\circ$

2)  $60^\circ$

3)  $120^\circ$

4)  $30^\circ$

**Correct Answer:**  $30^\circ$

**Candidate Answer:** 30°

Question 63.If  $1/2$  is added to a number and the sum is multiplied by 3, the result is 21. Then the number is

यदि किसी संख्या में  $1/2$  जोड़ दिया जाए और फिर उस योगफल को 3 से गुना किया जाए तो उत्तर 21 प्राप्त होता है। संख्या बताइये ?

**Options:**

1) 6.5

2) 5.5

3) 4.5

4) -6.5

**Correct Answer:** 6.5

**Candidate Answer:** 6.5

Question 64.The average temperature for Monday, Tuesday, Wednesday and Thursday was  $48^\circ$ . The average temperature for Tuesday, Wednesday, Thursday and Friday was  $52^\circ$ , If the temperature on Monday was  $42^\circ$ , then the temperature on Friday was (in degrees)

सोमवार, मंगलवार, बुधवार और बृहस्पतिवार का औसत तापमान  $48^\circ$  था। मंगलवार, बुधवार, बृहस्पतिवार और शुक्रवार का औसत तापमान  $52^\circ$  था। यदि सोमवार को तापमान  $42^\circ$  हो तो शुक्रवार का तापमान (डिग्री में) बताइए ?

**Options:**

1) 58

2) 56

3) 52

4) 50

**Correct Answer:** 58

**Candidate Answer:** 58

Question 65.If  $m - n = 2$ ,  $mn = 15$ , ( $m, n > 0$ ) then the value of  $(m^2 - n^2)(m^3 - n^3)$  is

यदि  $m - n = 2$ ,  $mn = 15$ , ( $m, n > 0$ ) हो तो  $(m^2 - n^2)(m^3 - n^3)$  का मान बताइए।

**Options:**

1) 1856

2) 1658

3) 1586

4) 1568

**Correct Answer:** 1568

**Candidate Answer:** 1568

Question 66.If  $P = 9$ ,  $Q = \sqrt{17}$  then the value of  $(p^2 - q^2)^{-1/3}$  is equal to

यदि  $P = 9$ ,  $Q = \sqrt{17}$  हो तो  $(p^2 - q^2)^{-1/3}$  का मान किसके बराबर होगा ?

**Options:**

1) 4

2)  $1/4$

3) 3

4)  $1/3$

**Correct Answer:**  $1/4$

**Candidate Answer:**  $1/4$

Question 67.If angles of measure  $(5y + 62^\circ)$  and  $(22^\circ + y)$  are supplementary, then value of  $y$  is

यदि कोण  $(5y + 62^\circ)$  और  $(22^\circ + y)$  संपूरक हो तो  $y$  का मान ज्ञात कीजिए ?

**Options:**

1)  $16^\circ$

2)  $32^\circ$

3)  $8^\circ$

4)  $1^\circ$

**Correct Answer:** 16°**Candidate Answer:** 16°

Question 68. From the circumcentre I of the triangle ABC, perpendicular ID is drawn on BC. If  $\angle BAC = 60^\circ$ , then the value of  $\angle BID$  is

त्रिभुज ABC के परिकेन्द्र I से BC पर लम्ब ID खींचा जाता है। यदि  $\angle BAC = 60^\circ$  हो, तो  $\angle BID$  का मान ज्ञात कीजिए ?

**Options:**1)  $60^\circ$ 2)  $80^\circ$ 3)  $75^\circ$ 4)  $45^\circ$ **Correct Answer:**  $60^\circ$ **Candidate Answer:**  $60^\circ$ 

Question 69.

If  $\frac{\cos \alpha}{\cos \beta} = m$  and  $\frac{\cos \alpha}{\sin \beta} = n$ ,  
then the value of  $(m^2 + n^2) \cos^2 \beta$  is

यदि  $\frac{\cos \alpha}{\cos \beta} = m$  और  $\frac{\cos \alpha}{\sin \beta} = n$  हो तो  $(m^2 + n^2) \cos^2 \beta$  का मान ज्ञात कीजिए ?

**Options:**1)  $n^2$ 2)  $m^2$ 3)  $mn$ 

4) 1

**Correct Answer:**  $n^2$ **Candidate Answer:**  $n^2$ 

Question 70. The ratio of the weights of two spheres is 8 : 27 and the ratio of weights per 1 cc of materials of two is 8 : 1. The ratio of the radii of the spheres is

दो गोलकों के वजन का अनुपात 8 : 27 है और दोनों की सामग्री के प्रति 1 घन से.मी. वजन का अनुपात 8 : 1 है। गोलकों की त्रिज्या का अनुपात ज्ञात कीजिए ?

**Options:**

1) 2:3

2) 1:3

3) 3:1

4) 3:2

**Correct Answer:** 1:3**Candidate Answer:** 2:3

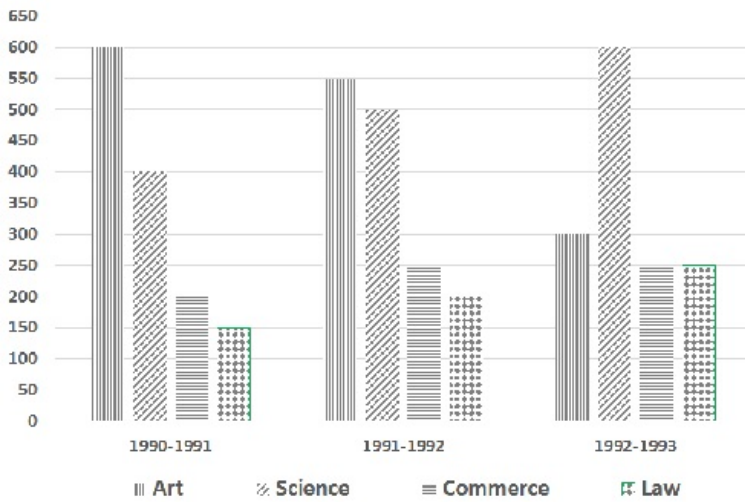
Question 71. On a ground, there is a vertical tower with a flagpole on its top. At a point 9 m away from the foot of the tower, the angles of elevation of the top and bottom of the flagpole are  $60^\circ$  and  $30^\circ$  respectively. The height of the flagpole is

भूमि पर किसी स्थान पर एक मीनार है जिसके शीर्ष पर एक ध्वज का खंभा लगा है। मीनार के तल से 9 मी. की दूरी पर किसी बिन्दु पर ध्वज के खम्भे के शीर्ष और तल के उन्नयन कोण क्रमशः  $60^\circ$  और  $30^\circ$  है। ध्वज के खम्भे की ऊँचाई बताइए ?

**Options:**1)  $5\sqrt{3}$  m $5\sqrt{3}$  मी.2)  $6\sqrt{3}$  m $6\sqrt{3}$  मी.3)  $6\sqrt{2}$  m $6\sqrt{2}$  मी.4)  $6\sqrt{5}$  m $6\sqrt{5}$  मी.**Correct Answer:**  $6\sqrt{3}$  m $6\sqrt{3}$  मी.**Candidate Answer:**  $6\sqrt{3}$  m $6\sqrt{3}$  मी.

Question 72. Shown below is the multiple bar diagram depicting the changes in the students strength of a college in four faculties from 1990 -91 to 1992 - 93. (scale 1 cm = 100)

नीचे एक बहुल बार चार्ट दिया गया है। जिसमें किसी कालिज में चार संकायों में वर्ष 1990-1991 से 1992-1993 तक विद्यार्थियों की संख्या में होने वाले परिवर्तन दर्शाए गए हैं। (माप 1 से.मी. = 100) बहुविध बार चार्ट का अध्ययन करें एवं प्रश्नों के उत्तर दें।



A regular decrease in student's strength was in the faculty of

किस संकाय में विद्यार्थियों की संख्या में नियमित रूप से कमी हो रही है ?

**Options:**

- 1) Arts  
कला
- 2) Science  
विज्ञान
- 3) Commerce  
वाणिज्य
- 4) Law  
विधि

**Correct Answer:** Arts

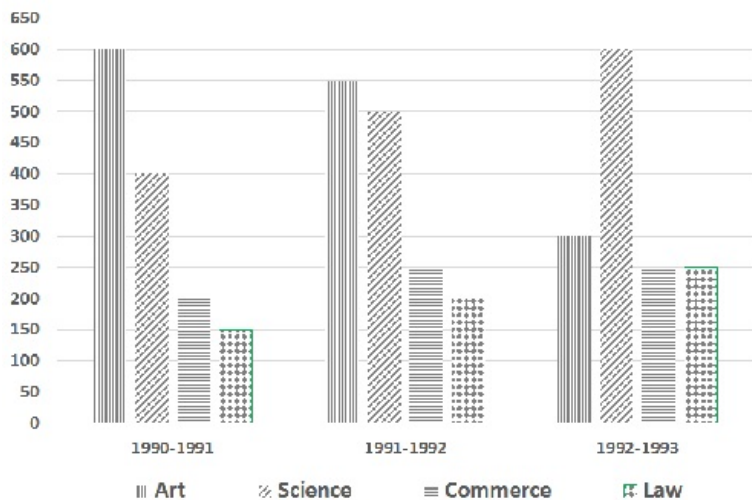
कला

**Candidate Answer:** Arts

कला

Question 73. Shown below is the multiple bar diagram depicting the changes in the students strength of a college in four faculties from 1990 -91 to 1992 - 93. (scale 1 cm = 100)

नीचे एक बहुल बार चार्ट दिया गया है। जिसमें किसी कालिज में चार संकायों में वर्ष 1990-1991 से 1992-1993 तक विद्यार्थियों की संख्या में होने वाले परिवर्तन दर्शाए गए हैं। (माप 1 से.मी. =100) बहुविध बार चार्ट का अध्ययन करें एवं प्रश्नों के उत्तर दें।



How much percent was the increase in science students in 1992 - 93 over 1990 - 91 ?

वर्ष 1990-1991 की तुलना में वर्ष 1992-1993 में विज्ञान के विद्यार्थियों की संख्या में कितने प्रतिशत वृद्धि हुई है ?

**Options:**

- 1) 50%
- 2) 150%
- 3) 66⅔%

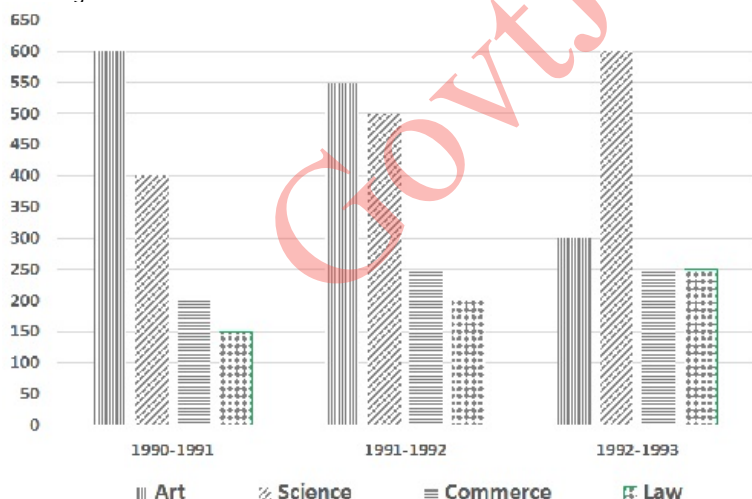
4) 75%

**Correct Answer:** 50%

**Candidate Answer:** 50%

Question 74. Shown below is the multiple bar diagram depicting the changes in the students strength of a college in four faculties from 1990 -91 to 1992 - 93. (scale 1 cm = 100)

नीचे एक बहुल बार चार्ट दिया गया है। जिसमें किसी कालिज में चार संकायों में वर्ष 1990-1991 से 1992-1993 तक विद्यार्थियों की संख्या में होने वाले परिवर्तन दर्शाए गए हैं। (माप 1 से.मी. =100) बहुविध बार चार्ट का अध्ययन करें एवं प्रश्नों के उत्तर दें।



Ratio of the number of commerce students to the number of law students from 1990 - 91 to 1992 - 93 is

वर्ष 1990-1991 से 1992-1993 तक वाणिज्य के विद्यार्थियों का विधि के विद्यार्थियों से क्या अनुपात है ?

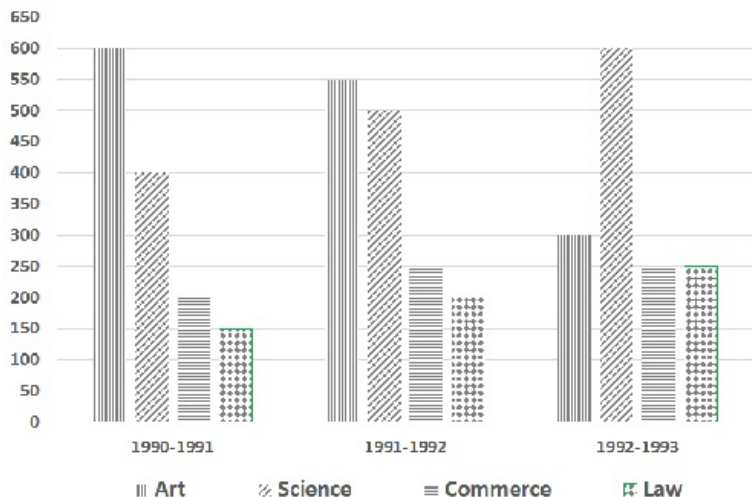
**Options:**

- 1) 6:7
- 2) 7:6
- 3) 14:1
- 4) 2:8

**Correct Answer:** 7:6**Candidate Answer:** 7:6

Question 75. Shown below is the multiple bar diagram depicting the changes in the students strength of a college in four faculties from 1990 -91 to 1992 - 93. (scale 1 cm = 100)

नीचे एक बहुल बार चार्ट दिया गया है। जिसमें किसी कालिज में चार संकायों में वर्ष 1990-1991 से 1992-1993 तक विद्यार्थियों की संख्या में होने वाले परिवर्तन दर्शाए गए हैं। (माप 1 से.मी. = 100) बहुल बार चार्ट का अध्ययन करें एवं प्रश्नों के उत्तर दीजिए।



During which year the strength of arts faculty was minimum ?

किस वर्ष कला संकाय के विद्यार्थियों की संख्या न्यूनतम रही ?

**Options:**

- 1) 1990 - 91
- 2) 1991 - 92
- 3) 1992 - 93
- 4) 1993 - 94

**Correct Answer:** 1992 - 93**Candidate Answer:** 1992 - 93

Question 76. In the following question, out of the four alternatives, choose the word which best expresses the meaning of the given word and click the button corresponding to it.

JUBILANT

**Options:**

- 1) SOMBRE
- 2) DEJECTED
- 3) JOCLAR
- 4) REJOICING

**Correct Answer:** REJOICING**Candidate Answer:** REJOICING

Question 77. In the following question, out of the four alternatives, choose the word which is opposite in meaning to the given word and click the button corresponding to it.

COURAGE

**Options:**

- 1) BRAVERY
- 2) WEAKNESS
- 3) COWARDICE
- 4) FEAR

**Correct Answer:** COWARDICE



**Candidate Answer:** COWARDICE

Question 78. Four words are given, out of which only one word is spelt correctly. Choose the correctly spelt word and click the button corresponding to it.

**Options:**

- 1) Commensurate
- 2) Commensarate
- 3) Commansurate
- 4) Comansurate

**Correct Answer:** Commensurate

**Candidate Answer:** Commensurate

Question 79. In the following questions, one part of the sentence may have an error. Find out which part of the sentence has an error and click the button corresponding to it. If the sentence is free from error, click the "No error" option.

He was not able to concentrate (A) / because of the continual music (B) / being played next door. (C) / No Error (D)

**Options:**

- 1) A
- 2) B
- 3) C
- 4) D

**Correct Answer:** B

**Candidate Answer:** B

Question 80. In the following questions, one part of the sentence may have an error. Find out which part of the sentence has an error and click the button corresponding to it. If the sentence is free from error, click the "No error" option.

Still (A) / waters (B) / run deep. (C) / No Error (D)

**Options:**

- 1) A
- 2) B
- 3) C
- 4) D

**Correct Answer:** D

**Candidate Answer:** D

Question 81. In the following questions, one part of the sentence may have an error. Find out which part of the sentence has an error and click the button corresponding to it. If the sentence is free from error, click the "No error" option.

The job is (A) / under the direct (B) / of Mrs Jones. (C) / No Error (D)

**Options:**

- 1) A
- 2) B
- 3) C
- 4) D

**Correct Answer:** B

**Candidate Answer:** B

Question 82. The sentences given with blanks are to be filled with an appropriate word(s). Four alternatives are suggested for each question. For each question, choose the correct alternative and click the button corresponding to it.

Pour the juice \_\_\_\_\_ the glass.

**Options:**

- 1) in
- 2) into
- 3) onto
- 4) on

**Correct Answer:** into

**Candidate Answer:** into

Question 83. The sentences given with blanks are to be filled with an appropriate word(s). Four alternatives are suggested for each question. For each question, choose the correct alternative and click the button corresponding to it.

I have been \_\_\_\_\_ this problem since noon.

**Options:**

- 1) working into
- 2) working on
- 3) working for
- 4) with after

**Correct Answer:** working on

**Candidate Answer:** working on

Question 84. The sentences given with blanks are to be filled with an appropriate word(s). Four alternatives are suggested for each question. For each question, choose the correct alternative and click the button corresponding to it.

Sushma has a deep \_\_\_\_\_ for drunkards.

**Options:**

- 1) hatred
- 2) hate
- 3) hated
- 4) hating

**Correct Answer:** hatred

**Candidate Answer:** hatred

Question 85. In each of the questions, four alternatives are given for the Idiom/Phrase. Choose the alternative which best expresses the meaning of the Idiom/Phrase and click the button corresponding to it.

Couch potato

**Options:**

- 1) An old person who has old-fashioned ideas.
- 2) A person who prefers to watch television.
- 3) A person who does not seem very friendly.
- 4) Someone who stays calm and does not show their emotions.

**Correct Answer:** A person who prefers to watch television.

**Candidate Answer:** A person who prefers to watch television.

Question 86. In each of the questions, four alternatives are given for the Idiom/Phrase. Choose the alternative which best expresses the meaning of the Idiom/Phrase and click the button corresponding to it.

Carry the ball

**Options:**

- 1) Decorate the ball
- 2) Be in charge
- 3) Take the decision
- 4) Be the hostess

**Correct Answer:** Be in charge

**Candidate Answer:** Be in charge

Question 87. In each of the questions, four alternatives are given for the Idiom/Phrase. Choose the alternative which best expresses the meaning of the Idiom/Phrase and click the button corresponding to it.

Turned down

**Options:**

- 1) Subject
- 2) Object
- 3) Reject
- 4) Deject

**Correct Answer:** Reject

**Candidate Answer:** Reject

Question 88. Out of the four alternatives, choose the one which can be substituted for the given words/sentences and click the button corresponding to it.

One who copies from other writers

**Options:**

- 1) Pluralist
- 2) Imitator
- 3) Plagiarist
- 4) Copycat

**Correct Answer:** Plagiarist

**Candidate Answer:** Plagiarist

Question 89. Out of the four alternatives, choose the one which can be substituted for the given words/sentences and click the button corresponding to it.

Thing that can be felt or touched

**Options:**

- 1) Pandemic
- 2) Palpable
- 3) Paltry
- 4) Panchromatic

**Correct Answer:** Palpable

**Candidate Answer:** Palpable

Question 90. Out of the four alternatives, choose the one which can be substituted for the given words/sentences and click the button corresponding to it.

The scientific study of elections

**Options:**

- 1) Pathology
- 2) Palaeontology
- 3) Psephology
- 4) Philology

**Correct Answer:** Psephology

**Candidate Answer:** Psephology

Question 91. A sentence/a part of the sentence is underlined. Four alternatives are given to the underlined part which will improve the sentence. Choose the correct alternative and click the button corresponding to it. In case no improvement is needed, click the button corresponding to "No improvement".

He enjoys to go on tours with his children.

**Options:**

- 1) to go for tours
- 2) going for tours
- 3) going on tours
- 4) No improvement

**Correct Answer:** going on tours

**Candidate Answer:** going on tours

Question 92. A sentence/a part of the sentence is underlined. Four alternatives are given to the underlined part which will improve the sentence. Choose the correct alternative and click the button corresponding to it. In case no improvement is needed, click the button corresponding to "No improvement".

Sita was cooking in the kitchen when her husband was ringing the bell.

**Options:**

- 1) would have been ringing
- 2) had rung
- 3) rang
- 4) No improvement

**Correct Answer:** rang

**Candidate Answer:** rang

Question 93. A sentence/a part of the sentence is underlined. Four alternatives are given to the underlined part which will improve the sentence. Choose the correct alternative and click the button corresponding to it. In case no improvement is needed, click the button corresponding to "No improvement".

If the room had been brighter, I would have been able to read for a while before bed time.

**Options:**

- 1) If the room was brighter
- 2) If the room are brighter
- 3) Had the room been brighter
- 4) No improvement

**Correct Answer:** Had the room been brighter

**Candidate Answer:** Had the room been brighter

Question 94. A sentence/a part of the sentence is underlined. Four alternatives are given to the underlined part which will improve the sentence. Choose the correct alternative and click the button corresponding to it. In case no improvement is needed, click the button corresponding to "No improvement".

Never such incidents have taken place on our campus.

**Options:**

- 1) have such incidents
- 2) such incidents will have
- 3) were such incidents
- 4) No improvement

**Correct Answer:** have such incidents

**Candidate Answer:** have such incidents

Question 95. A sentence/a part of the sentence is underlined. Four alternatives are given to the underlined part which will improve the sentence. Choose the correct alternative and click the button corresponding to it. In case no improvement is needed, click the button corresponding to "No improvement".

My mother teach me to be a good human being.

**Options:**

- 1) taught
- 2) thought
- 3) talked
- 4) No improvement

**Correct Answer:** taught

**Candidate Answer:** taught

Question 96. A passage is given with 5 questions following it. Read the passage carefully and choose the best answer to each question out of the four alternatives and click the button corresponding to it.

A guest speaker was addressing the faculty and the students in the college auditorium. I had joined the faculty the year before, and was already drawing attention. I was 27, full of assumptions about myself, quick with a comment on everything, and expected people to pay attention to all that I had said.

I listened to the talk for the first five minutes. By the seventh, I was looking around to check if others were listening. By the tenth, I had glanced at my watch three times, and yawned once. After twenty minutes I was thoroughly bored, and telling myself that it was difficult to sit through such an insipid talk. I wanted to share some of my expert comments with my neighbour. But he was completely sold out to the speaker, and looked like it was the greatest day of his life. I was disgusted. I tried to catch a word or phrase from the talk, only to convince myself that this should be his last talk ever.

The one-hour talk took ages to end, and before the thanks were said, I jumped to my feet with a sigh of relief. My neighbour smiled at me and said, "The talk was wonderful, wasn't it?" I retorted, "It almost killed me with kindness".

What do you understand about the narrator from the description in the first paragraph?

**Options:**

- 1) He was a genius
- 2) He was knowledgeable
- 3) He was self conceited
- 4) He was charismatic

**Correct Answer:** He was self conceited

**Candidate Answer:** He was self conceited

Question 97. A passage is given with 5 questions following it. Read the passage carefully and choose the best answer to each question out of the four alternatives and click the button corresponding to it.

A guest speaker was addressing the faculty and the students in the college auditorium. I had joined the faculty the year before, and was already drawing attention. I was 27, full of assumptions about myself, quick with a comment on everything, and expected people to pay attention to all that I had said.

I listened to the talk for the first five minutes. By the seventh, I was looking around to check if others were listening. By the tenth, I had glanced at my watch three times, and yawned once. After twenty minutes I was thoroughly bored, and telling myself that it was difficult to sit through such an insipid talk. I wanted to share some of my expert comments with my neighbour. But he was completely sold out to the speaker, and looked like it was the greatest day of his life. I was disgusted. I tried to catch a word or phrase from the talk, only to convince myself that this should be his last talk ever.

The one-hour talk took ages to end, and before the thanks were said, I jumped to my feet with a sigh of relief. My neighbour smiled at me and said, "The talk was wonderful, wasn't it?" I retorted, "It almost killed me with kindness".

How did the narrator respond to the speech?

**Options:**

- 1) He was glued
- 2) He was bored
- 3) He did not mind it
- 4) He was engrossed in it

**Correct Answer:** He was bored

**Candidate Answer:** He was bored

Question 98. A passage is given with 5 questions following it. Read the passage carefully and choose the best answer to each question out of the four alternatives and click the button corresponding to it.

A guest speaker was addressing the faculty and the students in the college auditorium. I had joined the faculty the year before, and was already drawing attention. I was 27, full of assumptions about myself, quick with a comment on everything, and expected people to pay attention to all that I had said.

I listened to the talk for the first five minutes. By the seventh, I was looking around to check if others were listening. By the tenth, I had glanced at my watch three times, and yawned once. After twenty minutes I was thoroughly bored, and telling myself that it was difficult to sit through such an insipid talk. I wanted to share some of my expert comments with my neighbour. But he was completely sold out to the speaker, and looked like it was the greatest day of his life. I was disgusted. I tried to catch a word or phrase from the talk, only to convince myself that this should be his last talk ever.

The one-hour talk took ages to end, and before the thanks were said, I jumped to my feet with a sigh of relief. My neighbour smiled at me and said, "The talk was wonderful, wasn't it?" I retorted, "It almost killed me with kindness".

The narrator was disgusted because

**Options:**

- 1) His neighbour was engrossed in an insipid talk
- 2) The talk was boring
- 3) He could not understand it
- 4) He was impatient

**Correct Answer:** His neighbour was engrossed in an insipid talk

**Candidate Answer:** His neighbour was engrossed in an insipid talk

Question 99. A passage is given with 5 questions following it. Read the passage carefully and choose the best answer to each question out of the four alternatives and click the button corresponding to it.

A guest speaker was addressing the faculty and the students in the college auditorium. I had joined the faculty the year before, and was already drawing attention. I was 27, full of assumptions about myself, quick with a comment on everything, and expected people to pay attention to all that I had said.

I listened to the talk for the first five minutes. By the seventh, I was looking around to check if others were listening. By the tenth, I had glanced at my watch three times, and yawned once. After twenty minutes I was thoroughly bored, and telling myself that it was difficult to sit through such an insipid talk. I wanted to share some of my expert comments with my neighbour. But he was completely sold out to the speaker, and looked like it was the greatest day of his life. I was disgusted. I tried to catch a word or phrase from the talk, only to convince myself that this should be his last talk ever.

The one-hour talk took ages to end, and before the thanks were said, I jumped to my feet with a sigh of relief. My neighbour smiled at me and said, "The talk was wonderful, wasn't it?" I retorted, "It almost killed me with kindness".

When the speech ended the narrator was

**Options:**

- 1) Happy
- 2) Relieved
- 3) Exhausted
- 4) Disgusted

**Correct Answer:** Relieved

**Candidate Answer:** Relieved

Question 100. A passage is given with 5 questions following it. Read the passage carefully and choose the best answer to each question out of the four alternatives and click the button corresponding to it.

A guest speaker was addressing the faculty and the students in the college auditorium. I had joined the faculty the year before, and was already drawing attention. I was 27, full of assumptions about myself, quick with a comment on everything, and expected people to pay attention to all that I had said.

I listened to the talk for the first five minutes. By the seventh, I was looking around to check if others were listening. By the tenth, I had glanced at my watch three times, and yawned once. After twenty minutes I was thoroughly bored, and telling myself that it was difficult to sit through such an insipid talk. I wanted to share some of my expert comments with my neighbour. But he was completely sold out to the speaker, and looked like it was the greatest day of his life. I was disgusted. I tried to catch a word or phrase from the talk, only to convince myself that this should be his last talk ever.

The one-hour talk took ages to end, and before the thanks were said, I jumped to my feet with a sigh of relief. My neighbour smiled at me and said, "The talk was wonderful, wasn't it?" I retorted, "It almost killed me with kindness".

How long did the narrator listen to the speech without judgement?

**Options:**

- 1) Seven minutes
- 2) Ten minutes
- 3) Five minutes
- 4) Twenty minutes

**Correct Answer:** Five minutes

**Candidate Answer:** Twenty minutes