

Click to Print logout

Challenges



Staff Selection Commission
(Government Of India)

Question 1. Select the related word/letters/numbers from the given alternatives:

दिये गये विकल्पों में से संबंधित शब्द/अक्षरों/संख्या को चुनिए।

Calender : Dates : : Dictionary : ?

कलेंडर : तारीखें :: शब्द कोश : ?

Options:

1) Words

शब्द

2) Books

पुस्तकें

3) Language

भाषा

4) Vocabulary

शब्दावली

Correct Answer: Words

शब्द

Candidate Answer: Words

शब्द

Question 2. Select the related word/letters/numbers from the given alternatives:

दिये गये विकल्पों में से संबंधित शब्द/अक्षरों/संख्या को चुनिए।

ACEG : BDFH : : PRTV : ?

Options:

1) QSUW

2) WUSQ

3) OQSU

4) CEGI

Correct Answer: QSUW

Candidate Answer: QSUW

Question 3. Select the related word/letters/numbers from the given alternatives:

दिये गये विकल्पों में से संबंधित शब्द/अक्षरों/संख्या को चुनिए।

15 : 225 : : 12 : ?

Options:

1) 144

2) 122

3) 112

4) 222

Correct Answer: 144

Candidate Answer: 144

Question 4.

For the following questions

Find the odd word/letters/number pair from the given alternatives.

दिए गए विकल्पों में से विषम शब्द/अक्षर/संख्या युग्म को चुनिए

Options:

1) Teacher and Student

शिक्षक और छात्र

2) Chemistry and Science

रासायन-शास्त्र और विज्ञान

3) History and Mathematics

इतिहास और गणित

4) Air and Oxygen

वायु और ऑक्सीजन

Correct Answer: History and Mathematics

इतिहास और गणित

Candidate Answer: History and Mathematics

इतिहास और गणित

Question 5.

For the following questions

Find the odd word/letters/number from the given alternatives.

दिए गए विकल्पों में से विषम शब्द/अक्षर/संख्या को चुनिए

Options:

1) DGI

2) JMO

3) PRT

4) TWY

Correct Answer: PRT

Candidate Answer: PRT

Question 6.

For the following questions

Find the odd word/letters/number from the given alternatives.

दिए गए विकल्पों में से विषम शब्द/अक्षर/संख्या को चुनिए

Options:

1) 343

2) 64

3) 75

4) 27

Correct Answer: 75

Candidate Answer: 75

Question 7. Arrange the following words as per the order in a dictionary.

निम्नलिखित शब्दों को शब्दकोश में दिए गए क्रम के अनुसार लिखिए

1. Drum
2. Drubbing
3. Drunken
4. Drudgery
5. Duster

Options:

1) 3, 1, 5, 4, 2

2) 2, 4, 1, 3, 5

3) 1, 3, 4, 5, 2

4) 2, 1, 4, 3, 5

Correct Answer: 2, 4, 1, 3, 5

Candidate Answer: 2, 4, 1, 3, 5

Question 8. A series is given, with one term missing. Choose the correct alternative from the given ones that will complete the series.

निम्नलिखित प्रश्न में एक अनुक्रम दिया गया है, जिसमें एक पद लुप्त है। दिए गए विकल्पों में से वह सही विकल्प चुनिए जो अनुक्रम को पूरा करे
BMV, DNW, FOU, ?

Options:

1) GHO

2) HGO

3) HPS

4) HPT

Correct Answer: HPS

Candidate Answer: HPS

Question 9. A series is given, with one term missing. Choose the correct alternative from the given ones that will complete the series.

निम्नलिखित प्रश्न में एक अनुक्रम दिया गया है, जिसमें एक पद लुप्त है। दिए गए विकल्पों में से वह सही विकल्प चुनिए जो अनुक्रम को पूरा करे
(3, 5), (5, 7) (?), (11, 13)

Options:

1) (7, 9)

2) (7, 11)

3) (9, 11)

4) (9, 13)

Correct Answer: (7, 11)

Candidate Answer: (7, 11)

Question 10. I go 5 km East, then turn right and go 8 km. Then I turn left and go 5 km and then I turn left and go 8 km. At what distance am I from the starting point?

मैं पूर्व की ओर 5 कि.मी. जाता हूँ, फिर दायाँ ओर मुड़कर 8 कि.मी. जाता हूँ। मैं फिर बायाँ ओर मुड़ता हूँ और 5 कि.मी. जाता हूँ और फिर मैं बायाँ ओर मुड़ता हूँ और 8 कि.मी. चलता हूँ। प्रारम्भिक स्थान से मैं कितनी दूर हूँ ?

Options:

1) 8

2) 0

3) 10

4) 5

Correct Answer: 10

Candidate Answer: 10

Question 11. Pankaj is taller than Vinod, who is shorter than Pramod. Usha is taller than priyanka but shorter than Vinod. Pramod is shorter than Pankaj. Who is the tallest?

पंकज विनोद से लंबा है। विनोद प्रमोद से छोटा है। उषा प्रियंका से लंबी है किन्तु विनोद से छोटी है। प्रमोद पंकज से छोटा है। सबसे लंबा कौन है ?

Options:

- 1) Priyanka
प्रियंका
- 2) Pramod
प्रमोद
- 3) Vinod
विनोद
- 4) Pankaj
पंकज

Correct Answer: Pankaj

पंकज

Candidate Answer: Pramod

प्रमोद

Question 12. From the given alternative words, select the word which cannot be formed using the letters of the given word:

निम्नलिखित विकल्पों में से वह शब्द चुनिए जो दिए गए शब्द के अक्षरों का प्रयोग करके नहीं बनाया जा सकता

MEASUREMENT

Options:

- 1) Master
- 2) Eastern
- 3) Summit
- 4) Mean

Correct Answer: Summit**Candidate Answer:** Summit

Question 13. In a certain code, "go home" is written as "ta na" and "nice little home" is written as "na ja pa". How is "go" written in that code?

किसी कोड में 'GO HOME' को 'TA NA' और 'NICE LITTLE HOME' को 'NA JA PA' लिखा जाता है तो उसी कोड में 'GO' को कैसे लिखा जाएगा ?

Options:

- 1) ta
- 2) na
- 3) ja
- 4) na or ta

Correct Answer: ta**Candidate Answer:** ta

Question 14. If P denotes '÷', Q denotes 'x', R denotes '+' and S denotes '-', then

यदि P का अर्थ '÷' है, Q का अर्थ 'x' है, R का अर्थ '+' है, और S का अर्थ '-' है, तो निम्नलिखित प्रश्न का मान ज्ञात

18Q12P4R5S6 = ?

Options:

- 1) 53
- 2) 54
- 3) 57
- 4) 95

Correct Answer: 53**Candidate Answer:** 53

Question 15. If $23 \times 16 = 184$, $37 \times 10 = 185$, then $85 \times 12 = ?$

यदि $23 \times 16 = 184$, $37 \times 10 = 185$ हो, तो 85×12 का मान ज्ञात कीजिए

Options:

- 1) 511
- 2) 610
- 3) 510
- 4) 410

Correct Answer: 510**Candidate Answer:** [NOT ANSWERED]

Question 16. Select the missing number from the given responses

दिए गए विकल्पों में से लुप्त संख्या ज्ञात करें

2	4	2	4
5	5	3	7
8	6	4	?

Options:

1) 2

2) 3

3) 10

4) 11

Correct Answer: 10**Candidate Answer:** 2

Question 17. Rana walks 20 m straight in north direction and 20 m to the right. Then every turning to his left he walks 5, 25 and 25 metres respectively. How far is he from his starting point now?

राणा उत्तर दिशा में 20 मीटर सीधे और फिर 20 मीटर दाएं मुड़कर चलता है। फिर हर बार बाएं मुड़कर क्रमशः 5, 25 और 25 मीटर चलता है। आरम्भिक स्थान से वह कितनी दूर है ?

Options:

1) 5 m

5 मीटर

2) 20 m

20 मीटर

3) 25 m

25 मीटर

4) 30 m

30 मीटर

Correct Answer: 5 m

5 मीटर

Candidate Answer: 5 m

5 मीटर

Question 18. Consider the given statement/s to be true and decide which of the given conclusions/assumptions can definitely be drawn from the given statement.

Statement: 1. Some girls are stars.

2. Meena is a girl.

Conclusion I: Meena is a star

Conclusion II: Some stars are not girls

निम्नलिखित प्रश्न में एक या दो वक्तव्य दिये गये हैं, जिसके आगे दो निष्कर्ष/मान्यताएं, I और II निकाले गये हैं। आपको विचार करना है कि वक्तव्य सत्य है चाहे वह सामान्यतः शर्त तथ्यों से भिन्न प्रतीत होता हो। आपको निर्णय करना है कि दिए गए वक्तव्य में से कोन-सा निश्चित रूप से सही निष्कर्ष/मान्यता निकाला जा सकता है ?

वक्तव्य : 1. कुछ लड़कियां स्टार हैं।

2. मीना लड़की है।

निष्कर्ष : I मीना स्टार है।

II कुछ स्टार लड़कियां नहीं हैं।

Options:

1) Only Conclusion I follows

केवल निष्कर्ष I सही है।

2) Only Conclusion II follows

केवल निष्कर्ष II सही है।

3) Both Conclusions I and II follows

निष्कर्ष I और II दोनों सही हैं।

4) Neither conclusion I nor II follows

ना तो निष्कर्ष I सही है और ना ही निष्कर्ष II सही है।

Correct Answer: Only Conclusion II follows

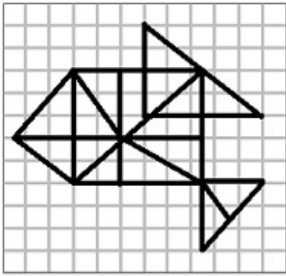
केवल निष्कर्ष II सही है।

Candidate Answer: Neither conclusion I nor II follows

ना तो निष्कर्ष I सही है और ना ही निष्कर्ष II सही है।

Question 19. How many triangles are there in the question figure?

दी गई आकृति में कितने त्रिभुज हैं ?



Options:

1) 16

2) 23

3) 26

4) 31

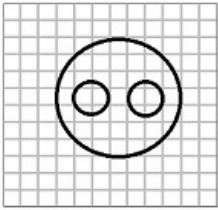
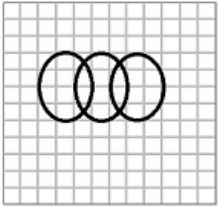
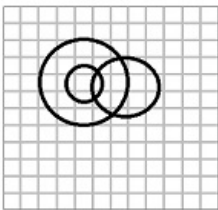
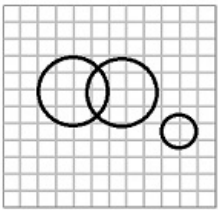
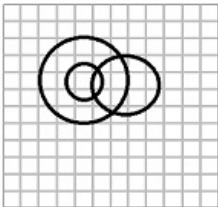
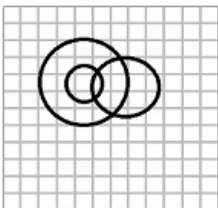
Correct Answer: 31

Candidate Answer: 31

Question 20. Identify the diagram that best represents the relationship among classes given below:

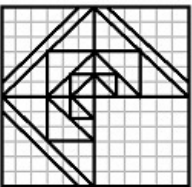
वह आरेख चुनिए जो नीचे दिए गए वर्गों के बीच सही सम्बन्ध को दर्शाता है ?

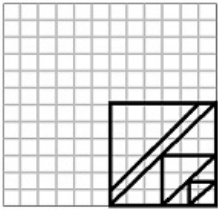
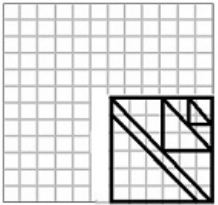
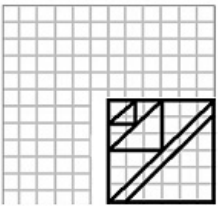
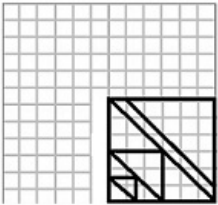
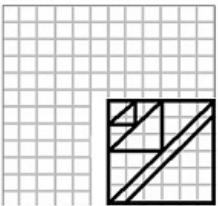
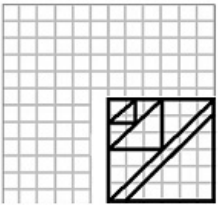
Professors, post graduates & employed.

Options:**1)****2)****3)****4)****Correct Answer:****Candidate Answer:**

Question 21. Which answer figure will complete the pattern in the question figure?

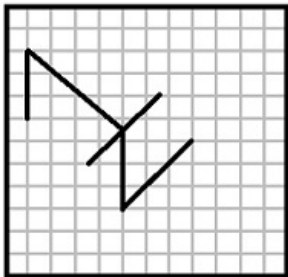
कौन-सी उत्तर आकृति प्रश्न आकृति के प्रतिरूप को पूरा करेगी ?



Options:**1)****2)****3)****4)****Correct Answer:****Candidate Answer:**

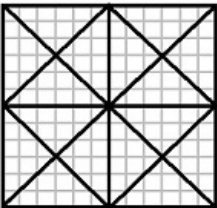
Question 22. From the given answer figures, select the one in which the question figure is hidden/embedded.

दी गई उत्तर आकृतियों में से उस उत्तर आकृति को चुनिए जिसमें प्रश्न आकृति निहित है ?

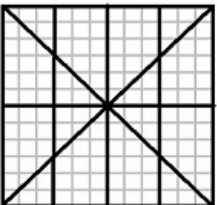


Options:

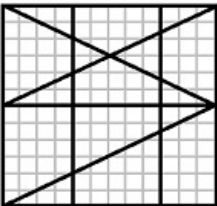
1)



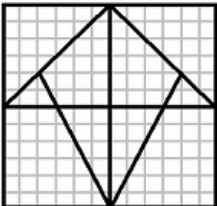
2)



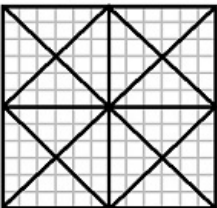
3)

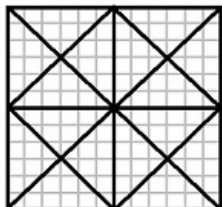


4)



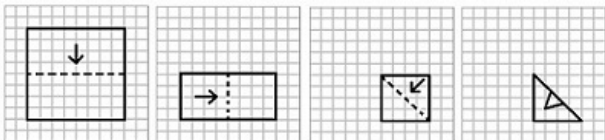
Correct Answer:



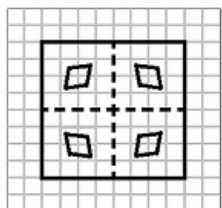
Candidate Answer:

Question 23. A piece of paper is folded and cut as shown below in the question figures. From the given answer figures, indicate how it will appear when opened.

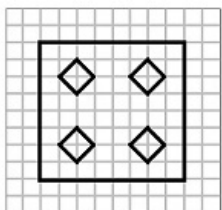
यदि किसी कागज को, नीचे प्रश्न आकृतियों में दिखाए अनुसार मोड़कर काटा जाए तो खोलने के बाद वह किस उत्तर आकृति जैसा दिखाई देगा ?

**Options:**

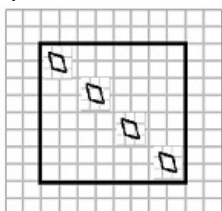
1)



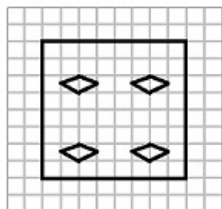
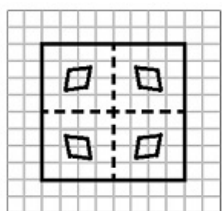
2)

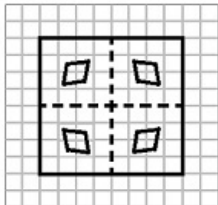


3)



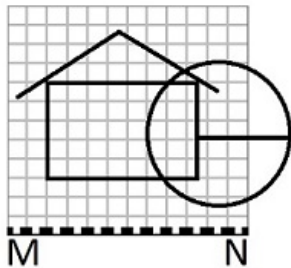
4)

**Correct Answer:**

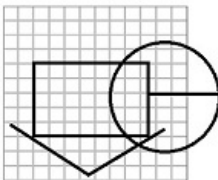
Candidate Answer:

Question 24. If a mirror is placed on the line MN, then which of the answer figures is the right image of the given figure?

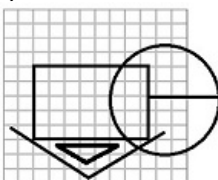
यदि एक दर्पण को MN रेखा पर रखा जाए तो दी गई उत्तर आकृतियों में से कौन-सी आकृति प्रश्न आकृति का सही प्रतिबिम्ब होगी ?

**Options:**

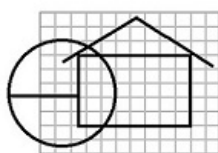
1)



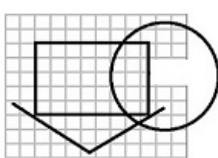
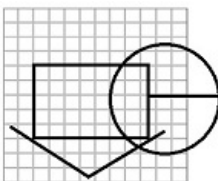
2)

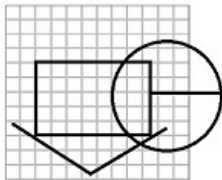


3)



4)

**Correct Answer:**

Candidate Answer:

Question 25. In the question, a word is represented by only one set of numbers as given in any one of the alternatives. The sets of numbers given in the alternatives are represented by two classes of alphabets as in two matrices given below. The columns and rows of Matrix I are numbered from 0 to 4 and that of Matrix II are numbered from 5 to 9. A letter from these matrices can be represented first by its row and next by its column, e.g., 'A' can be represented by 04, 12, etc., and 'R' can be represented by 55, 67, etc. Similarly, you have to identify the set for the word 'BENT'.

निम्नलिखित प्रश्न में विकल्पों में दिए गए संख्या-समूह, अक्षरों के दो वर्गों द्वारा दर्शाए गए हैं, जैसे कि नीचे दिए गए दो आव्यूहों में हैं। आव्यूह I के सतम्भ और पंक्ति की संख्या 0 से 4 तक दी गई है, और आव्यूह II के 5 से 9 तक, इन आव्यूहों से एक अक्षर को पहले उसकी पंक्ति और बाद में स्तम्भ संख्या द्वारा दर्शाया जा सकता है। उदाहरण के लिए, A को 04, 12, आदि द्वारा दर्शाया जा सकता है तथा R को 55, 67, आदि द्वारा दर्शाया जा सकता है। इसी तरह से आपको दिए शब्द 'BENT' के लिए समूह को पहचानना है।

MATRIX I

	0	1	2	3	4
0	B	C	D	E	A
1	D	E	A	B	C
2	C	D	E	A	B
3	A	B	C	D	E
4	E	A	B	C	D

MATRIX II

	5	6	7	8	9
5	R	O	N	T	U
6	T	U	R	O	N
7	O	N	T	U	R
8	U	R	O	N	T
9	N	T	U	R	O

Options:

1) 42, 34, 79, 77

2) 00, 11, 76, 78

3) 31, 22, 88, 58

4) 42, 34, 76, 88

Correct Answer: 31, 22, 88, 58**Candidate Answer:** 31, 22, 88, 58

Question 26. Which of the following states has the lowest literacy rate?

निम्नलिखित राज्यों में से किसमें सबसे कम साक्षरता दर है ?

Options:

1) Kerala

केरल

2) Rajasthan

राजस्थान

3) Bihar

बिहार

4) Maharashtra

महाराष्ट्र

Correct Answer: Bihar

बिहार

Candidate Answer: Bihar

बिहार

Question 27. On which date is India likely to experience the shortest day?

भारत में सबसे छोटा दिन कब होता है ?

Options:

- 1) December 22
22 दिसम्बर
- 2) March 21
21 मार्च
- 3) June 22
22 जून
- 4) September 23
23 सितम्बर

Correct Answer: December 22

22 दिसम्बर

Candidate Answer: December 22

22 दिसम्बर

Question 28. Precipitation in the form of a mixture of rain and snow is called

बारिश और हिमपात के एक साथ होने की अवस्था को क्या कहते हैं ?

Options:

- 1) Drizzle
रिमझिम बारिश
- 2) Hail
ओले पड़ना
- 3) Sleet
बर्फिली बारिश
- 4) Snow
हिमपात

Correct Answer: Sleet

बर्फिली बारिश

Candidate Answer: Hail

ओले पड़ना

Question 29. Fuse wire is made of an alloy of

फ्यूज तार किस मिश्रधातु के बने होते हैं ?

Options:

- 1) Tin and Lead
टिन और लेड
- 2) Tin and Copper
टिन और तांबा
- 3) Lead and Copper
लेड और तांबा
- 4) Copper and Silver
तांबा और सिल्वर

Correct Answer: Tin and Lead

टिन और लेड

Candidate Answer: Tin and Copper

टिन और तांबा

Question 30. Bacterial decomposition of biological material under anaerobic condition is

अवायवीय स्थिति में जैविक पदार्थ के जीवाणु अपघटन को क्या कहते हैं ?

Options:

- 1) fermentation
किण्वनीकरण
- 2) fertilization
उर्वरीकरण
- 3) contamination
संदूषण
- 4) composting
कम्पोस्टिंग

Correct Answer: fermentation

किण्वनीकरण

Candidate Answer: composting

कम्पोस्टिंग

Question 31. Which of the following has the lowest frequency?

निम्नलिखित में से किसमें न्यूनतम आवृत्ति होती है ?

Options:

1) Visible light

दृश्य प्रकाश

2) Gamma rays

गामा किरणें

3) X-rays

X किरणें

4) Ultra violet rays

परा बैंगनी किरणें

Correct Answer: Visible light

दृश्य प्रकाश

Candidate Answer: Visible light

दृश्य प्रकाश

Question 32. UDP is a

UDP क्या है ?

Options:

1) connection - oriented protocol

कनेक्शन अभिमुखी प्रोटोकॉल

2) connectionless protocol

कनेक्शन रहित प्रोटोकॉल

3) user-defined protocol

यूजर-डिफाइंड प्रोटोकॉल

4) security protocol

सिक्योरिटी प्रोटोकॉल

Correct Answer: connectionless protocol

कनेक्शन रहित प्रोटोकॉल

Candidate Answer: user-defined protocol

यूजर-डिफाइंड प्रोटोकॉल

Question 33. The important book written by Kautilya is

कौटिल्य द्वारा रचित प्रसिद्ध पुस्तक कौन सी है ?

Options:

1) Arthashastra

अर्थशास्त्र

2) Indica

इण्डिका

3) Arya Manju Sri Mula Kapa

आर्य मन्जु श्री मुला कापा

4) Rajatarangini

राजतरंगिणी

Correct Answer: Arthashastra

अर्थशास्त्र

Candidate Answer: Arthashastra

अर्थशास्त्र

Question 34. The northern part of the west coast in India is known as

भारत में पश्चिमी तट के उत्तरी भाग को क्या कहते हैं ?

Options:

1) Konkan coast

कोंकण तट

2) Coromandel coast

कोरोमंडल तट

3) Malabar coast

मालाबार तट

4) Godavari Coast

गोदावरी तट

Correct Answer: Konkan coast

कोंकण तट

Candidate Answer: Malabar coast
मालाबार तट

Question 35. The elements known as primary nutrients for plants

पौधों के लिए प्राथमिक पोषक तत्वों के रूप में ज्ञात तत्व कौन से हैं?

Options:

1) Nitrogen, Phosphorus and Potassium

नाइट्रोजन, फॉस्फोरस और पोटेशियम

2) Nitrogen, Oxygen and Silicon

नाइट्रोजन, ऑक्सीजन और सिलिकॉन

3) Potassium, Boron and Nitrogen

पोटेशियम, बोरॉन और नाइट्रोजन

4) Nitrogen, Phosphorus and Iron

नाइट्रोजन, फॉस्फोरस और लोहा

Correct Answer: Nitrogen, Phosphorus and Potassium

नाइट्रोजन, फॉस्फोरस और पोटेशियम

Candidate Answer: Nitrogen, Phosphorus and Potassium

नाइट्रोजन, फॉस्फोरस और पोटेशियम

Question 36. Which sanctuary in India is famous for Rhinoceros and in which state is it located?

गैंडे के लिए प्रसिद्ध अभयारण्य कौन-सी है और यह किस राज्य में स्थित है ?

Options:

1) Gir, Gujarat

गिर, गुजरात

2) Kaziranga, Assam

काजीरंगा, असम

3) Ranthambore, Rajasthan

रणथम्भौर, राजस्थान

4) Corbett, Uttarakhand

कार्बेट, उत्तराखण्ड

Correct Answer: Kaziranga, Assam

काजीरंगा, असम

Candidate Answer: Ranthambore, Rajasthan

रणथम्भौर, राजस्थान

Question 37. 'Davis Cup' is associated with the game of

'डेविस कप' का सम्बन्ध किस खेल से है ?

Options:

1) Cricket

क्रिकेट

2) Lawn Tennis

लॉन टेनिस

3) Badminton

बैडमिन्टन

4) Table Tennis

टेबल टेनिस

Correct Answer: Lawn Tennis

लॉन टेनिस

Candidate Answer: [NOT ANSWERED]

Question 38. Charles Darwin, the famous evolutionist, proposed his theory in which one of his books ?

प्रसिद्ध विकासवादी चार्ल्स डार्विन ने अपनी किस पुस्तक में अपने सिद्धान्त का प्रतिपादन किया ?

Options:

1) The families of flowering plant

द फैमिलीज ऑफ फ्लॉवरिंग प्लान्ट

2) The origin of species

द ऑरिजिन ऑफ स्पीसीज

3) The life on earth

द लाइफ ऑन अर्थ

4) The story of the living world

द स्टोरी आफ द लिविंग वर्ल्ड

Correct Answer: The origin of species

द ऑरिजिन ऑफ स्पीसीज

Candidate Answer: The origin of species

द ऑरिजिन ऑफ स्पीसीज

Question 39. 'Green Banking' means :

'ग्रीन बैंकिंग' का क्या अर्थ है ?

Options:

1) Banks financing agriculture

कृषि का वित्त पोषण करने वाले बैंक

2) Banks financing irrigation projects

सिंचाई परियोजनाओं का वित्त पोषण करने वाले बैंक

3) Banks financing farmers

किसानों का वित्त पोषण करने वाले बैंक

4) Banks financing pro-environmental projects

पर्यावरण संरक्षी परियोजनाओं का वित्त पोषण करने वाले बैंक

Correct Answer: Banks financing pro-environmental projects

पर्यावरण संरक्षी परियोजनाओं का वित्त पोषण करने वाले बैंक

Candidate Answer: Banks financing pro-environmental projects

पर्यावरण संरक्षी परियोजनाओं का वित्त पोषण करने वाले बैंक

Question 40. Who was the first Indian Governor General of Independent India?

स्वतन्त्र भारत के प्रथम भारतीय गवर्नर जनरल कौन थे ?

Options:

1) Rajendra Prasad

राजेन्द्र प्रसाद

2) C. Rajagopalachari

सि. राजगोपालाचारी

3) A. Kriplani

ए. कृपलानी

4) Lord Mountbatten

लॉर्ड माउण्टबैटन

Correct Answer: C. Rajagopalachari

सि. राजगोपालाचारी

Candidate Answer: C. Rajagopalachari

सि. राजगोपालाचारी

Question 41. A fresh egg when placed in salt water will

एक ताजे अण्डे को नमक के पानी में डालने पर क्या होता है ?

Options:

1) sink and go to the bottom

डूबकर तली में चला जाता है

2) sink but will not go to the bottom

डूब जाता है लेकिन तली में नहीं जाता है

3) float

तैरता है

4) burst

फट जाता है

Correct Answer: float

तैरता है

Candidate Answer: float

तैरता है

Question 42. A genetically engineered form of brinjal known as the BT-brinjal has been developed. The objective of this is

बैंगन की एक अनुवांशिक प्रजाति जो BT-ब्रिंजल के नाम से जानी जाती है, विकसित की गई है। इसका उद्देश्य क्या है

Options:

1) to make it pest resistant

इसे कीट रोधी बनाने के लिए

2) to improve its taste and nutritive value

इसके स्वाद और पोषक तत्वों को बढ़ाने के लिए

3) to make it drought resistant

इसे सूखा रोधी बनाने के लिए

4) to make its shelf-life longer

इसका निधानी जीवन बढ़ाने के लिए

Correct Answer: to make it pest resistant

इसे कीट रोधी बनाने के लिए

Candidate Answer: to make it pest resistant

इसे कीट रोधी बनाने के लिए

Question 43. Three crops that contribute maximum to global food grain production are _____

वैश्विक खाद्यान्न उत्पादन में अधिकतम योगदान करने वाली तीन फसलें कौन-सी हैं ?

Options:

1) wheat, rice, barley

गेहूँ, चावल, जौ

2) rice, maize, sorghum

चावल, मक्का, सोर्घम

3) wheat, maize, sorghum

गेहूँ, मक्का, सोर्घम

4) wheat, rice, maize

गेहूँ, चावल, मक्का

Correct Answer: wheat, rice, maize

गेहूँ, चावल, मक्का

Candidate Answer: wheat, rice, maize

गेहूँ, चावल, मक्का

Question 44. Which of the following is a tertiary activity?

निम्नलिखित में से कौन-सा तृतीय क्रियाकलाप है?

Options:

1) Farming

खेती

2) Manufacturing

विनिर्माण

3) Dairying

डेयरिंग

4) Trading

ट्रेडिंग

Correct Answer: Trading

ट्रेडिंग

Candidate Answer: Trading

ट्रेडिंग

Question 45. The compound used in prickly-heat powder to prevent excessive sweating is

अत्यधिक पसीने को रोकने के लिए प्रिकली हीट पाउडर में कौन-से यौगिक का प्रयोग किया जाता है ?

Options:

1) Boric acid

बोरिक अम्ल

2) Phosphoric acid

फोस्फोरिक अम्ल

3) Carbonic acid

कार्बोनिक अम्ल

4) Sulphonic acid

सल्फोनिक अम्ल

Correct Answer: Boric acid

बोरिक अम्ल

Candidate Answer: Boric acid

बोरिक अम्ल

Question 46. Which of the following is least likely to be an effect of global warming?

भूमंडलीय ताप वृद्धि में निम्नलिखित में से किसका कम प्रभाव होने की संभावना होती है ?

Options:

1) Increased frequency of hurricanes

तूफानों (हरिकेन) का बार-बार होना

2) Loss of fertile delta region as for agriculture

कृषि के लिए उर्वर डेल्टा क्षेत्रों का क्षय होना

3) Decreased rate of photosynthesis in vegetation

वनस्पति में प्रकाश-संश्लेषण की दर में कमी होना

4) Shrinking of the polar ice regions

ध्रुवीय हिम क्षेत्रों का सिकुड़ना

Correct Answer: Decreased rate of photosynthesis in vegetation

वनस्पति में प्रकाश-संश्लेषण की दर में कमी होना

Candidate Answer: Shrinking of the polar ice regions

ध्रुवीय हिम क्षेत्रों का सिकुड़ना

Question 47. Which State in India has introduced FAT Tax on junk food

भारत के किस राज्य ने जंक फूड पर फैट टैक्स लगाया है ?

Options:

1) Rajasthan

राजस्थान

2) Kerala

केरल

3) Andhra Pradesh

आन्ध्र प्रदेश

4) Bihar

बिहार

Correct Answer: Kerala

केरल

Candidate Answer: Kerala

केरल

Question 48. Gandhiji's first Satyagraha in India was held at _____

भारत में गांधी जी का प्रथम सत्याग्रह कहाँ हुआ था ?

Options:

1) Champaran

चम्पारण

2) Ahmedabad

अहमदाबाद

3) Kheda

खेड़ा

4) Allahabad

इलाहाबाद

Correct Answer: Champaran

चम्पारण

Candidate Answer: Ahmedabad

अहमदाबाद

Question 49. Golden Quadrilateral Project for the development of National Highways was initiated by

राष्ट्रीय राजमार्गों के विकास के लिए स्वर्णिम चतुर्भुज परियोजना किसके द्वारा शुरू की गई थी ?

Options:

1) P V Narasimha Rao

पी.वी. नरसिम्हा राव

2) I K Gujral

आई.के. गुजराल

3) Manmohan Singh

मनमोहन सिंह

4) Atal Bihari Vajpayee

अटल बिहारी वाजपेयी

Correct Answer: Atal Bihari Vajpayee

अटल बिहारी वाजपेयी

Candidate Answer: P V Narasimha Rao

पी.वी. नरसिम्हा राव

Question 50. Which of the following sources has the largest share in power generation in India?

भारत में विद्युत उत्पादन में सबसे बड़ी हिस्सेदारी निम्नलिखित विकल्पों में से किसकी है ?

Options:

- 1) Atomic power
एटोमिक ऊर्जा
- 2) Thermal power
थर्मल ऊर्जा
- 3) Hydro power
हाइड्रो ऊर्जा
- 4) Wind power
वायु ऊर्जा

Correct Answer: Thermal power

थर्मल ऊर्जा

Candidate Answer: Thermal power

थर्मल ऊर्जा

Question 51. 24 men can do a piece of work in 17 days. How many men will be able to do it in 51 days ?

24 व्यक्ति किसी काम को 17 दिन में कर सकते हैं। 51 दिन में कितने आदमी इस काम को पूरा कर सकेंगे?

Options:

- 1) 8
- 2) 10
- 3) 12
- 4) 6

Correct Answer: 8

Candidate Answer: 8

Question 52. In a cyclic quadrilateral ABCD, the side AB is extended to a point X. If $\angle XBC = 82^\circ$ and $\angle ADB = 47^\circ$, then the value of $\angle BDC$ is

एक चक्रीय चतुर्भुज ABCD में, AB भुजा को बिन्दु X तक बढ़ाया जाता है। यदि $\angle XBC = 82^\circ$ और $\angle ADB = 47^\circ$ हो तो $\angle BDC$ का मान बताइए ?

Options:

- 1) 40°
- 2) 35°
- 3) 30°
- 4) 25°

Correct Answer: 35°

Candidate Answer: [NOT ANSWERED]

Question 53. The marked price is 10% higher than the cost price. A discount of 10% is given to the marked price. In this kind of sale the seller

अंकित मूल्य क्रय मूल्य से 10% अधिक है। अंकित मूल्य पर 10% की छूट दी गई है। इस प्रकार की बिक्री में विक्रेता को -

Options:

- 1) bears no gain, no loss
ना तो लाभ है और ना हानि है
- 2) gains
लाभ है
- 3) loses 1%
1% की हानि है
- 4) None of these
इनमें से कोई नहीं

Correct Answer: loses 1%

1% की हानि है

Candidate Answer: loses 1%

1% की हानि है

Question 54. Two numbers whose sum is 84 can not be in the ratio

दो संख्याएँ जिनका योगफल 84 है, वे निम्नलिखित में से किस अनुपात में नहीं हो सकती ?

Options:

1) 5:7

2) 13:8

3) 1:3

4) 3:2

Correct Answer: 3:2

Candidate Answer: 3:2

Question 55. By selling cloth at Rs. 9 per metre, a shopkeeper loses 10%. Find the rate at which it should be sold so as to earn profit of 15%

किसी दुकानदार को कोई कपड़ा Rs. 9 प्रति मीटर की दर पर बेचने पर 10% की हानि होती है। बताइए कि कपड़ा किस दर पर बेचा जाए जिससे दुकानदार को 15% का लाभ हो ?

Options:

1) Rs.11.20

2) Rs.11.30

3) Rs.11.40

4) Rs.11.50

Correct Answer: Rs.11.50

Candidate Answer: Rs.11.50

Question 56. After selling 5% of a quantity of sugar, 5 Kgs of sugar remains. Find the total quantity of sugar?

चीनी की कुल मात्रा का 5% भाग बिक जाने के बाद 5 किग्रा चीनी बचती है। चीनी की कुल मात्रा बताइए ?

Options:

1) 19 Kg

19 कि.ग्रा.

2)

$5\frac{5}{19}$ kg

$5\frac{5}{19}$

कि.ग्रा.

3) 100 kg

100 कि.ग्रा.

4) 95 kg

95 कि.ग्रा.

Correct Answer:

$5\frac{5}{19}$ kg

$5\frac{5}{19}$

कि.ग्रा.

Candidate Answer:

$5\frac{5}{19}$ kg

$5\frac{5}{19}$

कि.ग्रा.

Question 57. A train 110 metres long is running with a speed of 60 kmph. In what time will it pass a man who is running at 6 kmph in the direction opposite to that in which the train is going ?

110 मी. लम्बी ट्रेन 60 कि.मी. प्रति घंटे की रफ्तार से जा रही है। यदि कोई व्यक्ति ट्रेन की विपरीत दिशा में 6 कि.मी. प्रति घंटे की रफ्तार से दौड़ रहा हो तो बताइए कि ट्रेन उस व्यक्ति को कितनी देर में पार करके गुजर जाएगी ?

Options:

1) 5 sec

5 सेकेंड्स

2) 6 sec

6 सेकेंड्स

3) 7 sec

7 सेकेंड्स

4) 10 sec

10 सेकेंड्स

Correct Answer: 6 sec

6 सेकेंड्स

Candidate Answer: 6 sec

6 सेकेंड्स

Question 58.If $x = at^2$ and $y = 2at$ thenयदि $x = at^2$ और $y = 2at$ हो तो**Options:**1) $x^2 = 4ay$ 2) $y^2 = 4ax$ 3) $x^2 + y^2 = a^2$ 4) $x^2 - y^2 = a^2$ **Correct Answer:** $y^2 = 4ax$ **Candidate Answer:** $y^2 = 4ax$

Question 59.

If $xy + yz + zx = 1$, then the value of $\frac{1 + y^2}{(x + y)(y + z)}$ isयदि $xy + yz + zx = 1$, हो तो $\frac{1 + y^2}{(x + y)(y + z)}$ का मान बताओ ?**Options:**

1) 2

2) 3

3) 4

4) 1

Correct Answer: 1**Candidate Answer:** 1Question 60.If PQ and PR be the two tangents to a circle with centre O such that $\angle QPR = 120^\circ$ then $\angle POQ$ isयदि किसी वृत्त जिसका केन्द्र O है, से दो स्पर्श रेखाएं PQ और PR ऐसी हो कि $\angle QPR = 120^\circ$, तो कोण $\angle POQ$ क्या होगा ?**Options:**1) 90° 2) 45° 3) 30° 4) 60° **Correct Answer:** 30° **Candidate Answer:** 30° Question 61.In ΔABC , if $\angle BAC = 90^\circ$ and $AB = AC$, then $\angle ABC$ is ΔABC में यदि $\angle BAC = 90^\circ$ और $AB = AC$ हो तो $\angle ABC$ क्या होगा ?

Options:

1) 30°

2) 60°

3) 45°

4) 25°

Correct Answer: 45°

Candidate Answer: 45°

Question 62. The value of $\tan 315^\circ \cot (-405^\circ)$ is equal to

$\tan 315^\circ \cot (-405^\circ)$ का मान क्या होगा ?

Options:

1) -1

2) 1

3) 0

4) 2

Correct Answer: 1

Candidate Answer: 1

Question 63. Among three numbers, second is twice the first and also thrice the third. If the average of the three numbers is 33, then the largest number is

तीन संख्याओं में दूसरी संख्या पहली संख्या से दुगुनी और तीसरी संख्या से तिगुनी है। यदि तीनों संख्याओं का औसत 33 हो तो सबसे बड़ी संख्या कौन सी होगी ?

Options:

1) 36

2) 54

3) 62

4) 72

Correct Answer: 54

Candidate Answer: 54

Question 64. The average of 100 items was found to be 30. If at the time of calculation, two items were wrongly taken as 32 and 12 instead of 23 and 11, then the correct average is

100 मदों का औसत 30 पाया गया। यदि गिनती के समय दो मदों को 23 और 11 के स्थान पर गलती से 32 और 12 गिना गया हो तो सही औसत क्या होगा ?

Options:

1) 29.8

2) 29

3) 29.9

4) 29.5

Correct Answer: 29.9

Candidate Answer: 29.9

Question 65. A box weighs 8.5 kg when full of sand and weighs 5.5 kg when it is half filled with sand. Weight of the empty box is

कोई बक्सा जब रेत से भरा होता है। तो उसका वजन 8.5 कि.ग्रा. होता है और जब वह आधा भरा होता है तो उसका वजन 5.5 कि.ग्रा. होता है। खाली बक्से का वजन बताइए ?

Options:

1) 5 kg

5 कि.ग्रा.

2) 6 kg

6 कि.ग्रा.

3) 2.5 kg

2.5 कि.ग्रा.

4) 4.5 kg

4.5 कि.ग्रा.

Correct Answer: 2.5 kg

2.5 कि.ग्रा.

Candidate Answer: 2.5 kg

2.5 कि.ग्रा.

Question 66.

If $a + \frac{1}{b} = 1$ and $b + \frac{1}{c} = 1$, then the value of $c + \frac{1}{a}$ is

यदि $a + \frac{1}{b} = 1$ और $b + \frac{1}{c} = 1$, हो तो $c + \frac{1}{a}$ का मान क्या होगा ?

Options:

1) 0

2) 1

3) -1

4) 2

Correct Answer: 1

Candidate Answer: 1

Question 67.

Two circles touch externally. The sum of their areas is 130π sq. cm (taking $\pi = \frac{22}{7}$) and the distance between their centres is 14 cm. The radius of the bigger circle is

दो वृत्त बाहर से स्पर्श करते हैं। उनके क्षेत्रफल का योगफल 130π वर्ग से.मी. है। (यह मानते हुए कि $\pi = \frac{22}{7}$)

और उनके केन्द्रों के बीच की दूरी 14 से.मी. है।

बड़े वाले वृत्त की त्रिज्या बताएं ?

Options:

1) 22 cm

22 से.मी.

2) 11 cm

11 से.मी.

3) 33 cm

33 से.मी.

4) 44 cm

44 से.मी.

Correct Answer: 11 cm

11 से.मी.

Candidate Answer: 11 cm

11 से.मी.

Question 68.

In an equilateral triangle of side 24 cm, a circle is inscribed touching its sides. The area of the remaining portion of the triangle is approximately equal to (assuming $\pi = \frac{22}{7}$ & $\sqrt{3} = 1.732$)

किसी समबाहु त्रिभुज में जिसकी क भुजा 24 सेमी है

एक अन्तर्वृत्त हो जो इसकी भुजाओं को स्पर्श कर रहा है।

त्रिभुज का शेष भाग का क्षेत्रफल लगभग किसके बराबर होगा

यह मानते हुए कि (assuming $\pi = \frac{22}{7}$ & $\sqrt{3} = 1.732$)

Options:

- 1) 36.6 cm^2
 36.6 से.मी.^2
 2) 54.2 cm^2
 54.2 से.मी.^2
 3) 72.8 cm^2
 72.8 से.मी.^2
 4) 98.5 cm^2
 98.5 से.मी.^2

Correct Answer: 98.5 cm^2 98.5 से.मी.^2 **Candidate Answer:** 72.8 cm^2 72.8 से.मी.^2

Question 69.If the elevation of the Sun changes from 30° to 60° , then the difference between the lengths of shadows of a pole 15 m high, is

जब सूर्य का उन्नयन 30° से बढ़ कर 60° हो जाता है तब किसी 15 मीटर ऊँचे खम्बे की परछाईयों की लम्बाइयों में क्या अन्तर होगा ?

Options:

- 1) 7.5 m
 7.5 मीटर
 2) 15 m
 15 मीटर
 3) $10\sqrt{3} \text{ m}$
 $10\sqrt{3}$ मीटर
 4) $5\sqrt{3} \text{ m}$
 $5\sqrt{3}$ मीटर

Correct Answer: $10\sqrt{3} \text{ m}$ $10\sqrt{3}$ मीटर**Candidate Answer:** $10\sqrt{3} \text{ m}$ $10\sqrt{3}$ मीटर

Question 70.If a sum of Rs.12500 is invested for 1 year at 12% per annum interest being compounded semi-annually, then interest earned is

यदि Rs. 12500 की राशि को 12% वार्षिक की दर से 1 वर्ष के लिए निवेश किया जाए और ब्याज को अर्ध-वार्षिक रूप से संयोजित किया जाए तो कितना ब्याज मिलेगा ?

Options:

- 1) Rs.1505
 2) Rs.1535
 3) Rs.1545
 4) Rs.1550

Correct Answer: Rs.1545**Candidate Answer:** Rs.1545

Question 71.

If $\tan(\alpha - \beta) = 1$, $\sec(\alpha + \beta) = \frac{2}{\sqrt{3}}$ and α

β are positive then the smallest value of α is

यदि $\tan(\alpha - \beta) = 1$, $\sec(\alpha + \beta) = \frac{2}{\sqrt{3}}$ हो और α ,

β धनात्मक हो तो α का न्यूनतम मान क्या होगा?

Options:

1)

$142\frac{1}{2}$

2)

$187\frac{1}{2}$

3)

$7\frac{1}{2}$

4)

$37\frac{1}{2}$

Correct Answer:

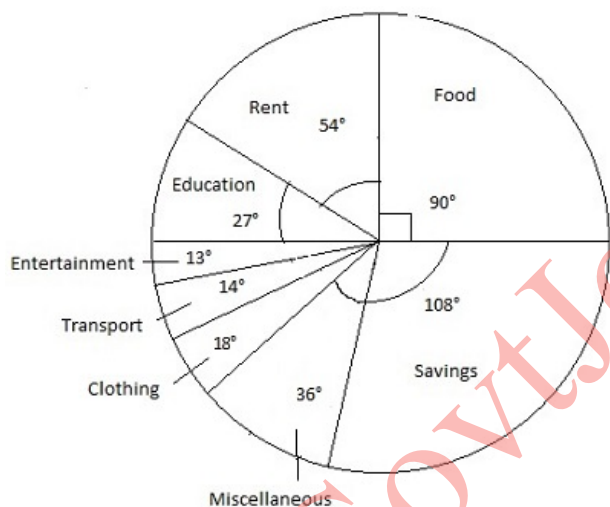
$187\frac{1}{2}$

Candidate Answer:

$37\frac{1}{2}$

Question 72. The pie - chart , given here shows monthly expenses on various heads and savings of the family of Mr Rao. Study the chart and answer the questions based on it.

यहाँ दिए गए पाई चार्ट मिस्टर राव के परिवार के विभिन्न मदों पर व्यय तथा बचत को दर्शाता है। चार्ट का अध्ययन कीजिए तथा इस पर आधारित प्रश्नों के उत्तर दीजिए ।



The amount spent on food exceeds the total amount spent on education and clothing by

भोजन पर व्यय की गयी राशि शिक्षा तथा वस्त्रों पर मिलाकर व्यय की गयी कुल राशि से कितनी अधिक है ?

Options:

1)

$12\frac{1}{2}\%$

2) 25%

3)

$33\frac{1}{3}\%$

4) 50%

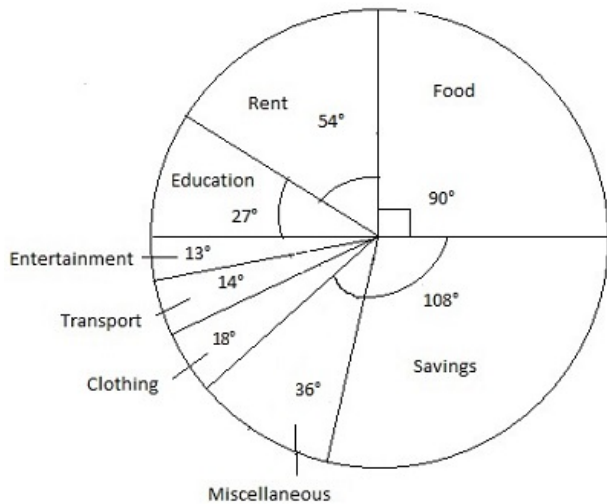
Correct Answer:

$12\frac{1}{2}\%$

Candidate Answer: 50%

Question 73. The pie - chart , given here shows monthly expenses on various heads and savings of the family of Mr Rao. Study the chart and answer the questions based on it.

यहाँ दिए गए पाई चार्ट मिस्टर राव के परिवार के विभिन्न मदों पर व्यय तथा बचत को दर्शाता है। चार्ट का अध्ययन कीजिए तथा इस पर आधारित प्रश्नों के उत्तर दीजिए ।



What percent of his income does Mr. Rao save ?

मिस्टर राव अपनी आय के कितनी प्रतिशत की बचत करते हैं ?

Options:

1) 25%

2) 30%

3) 33⅓%

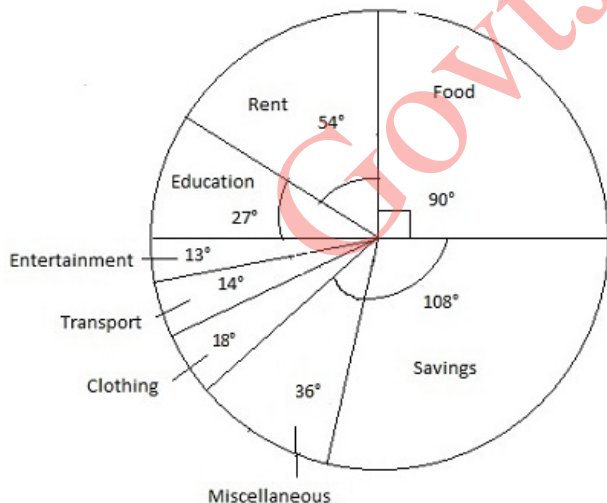
4) 36%

Correct Answer: 30%

Candidate Answer: 30%

Question 74. The pie - chart , given here shows monthly expenses on various heads and savings of the family of Mr Rao. Study the chart and answer the questions based on it.

यहाँ दिए गए पाई चार्ट मिस्टर राव के परिवार के विभिन्न मदों पर व्यय तथा बचत को दर्शाता है। चार्ट का अध्ययन कीजिए तथा इस पर आधारित प्रश्नों के उत्तर दीजिए ।



If the total income of Mr. Rao is Rs. 72000 , how much house rent does he pay ?

यदि मिस्टर राव की कुल मासिक आय Rs. 72000 है तो वह कितनी राशि मकान के किराये में देते हैं ?

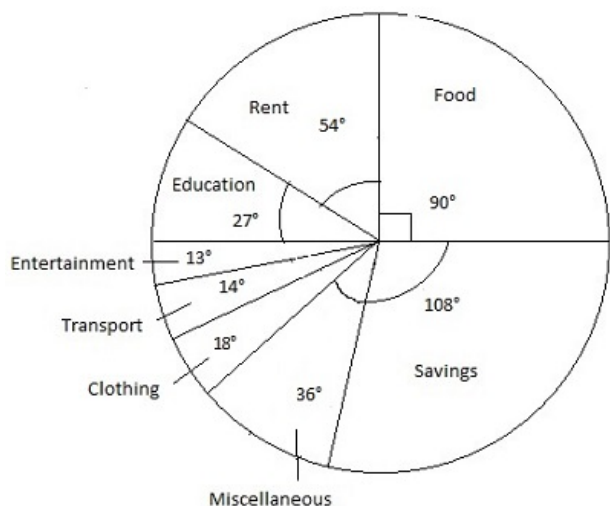
Options:

- 1) Rs.5400
- 2) Rs.9000
- 3) Rs.10800
- 4) Rs.12000

Correct Answer: Rs.10800**Candidate Answer:** Rs.10800

Question 75. The pie - chart , given here shows monthly expenses on various heads and savings of the family of Mr Rao. Study the chart and answer the questions based on it.

यहाँ दिए गए पाई चार्ट मिस्टर राव के परिवार के विभिन्न मदों पर व्यय तथा बचत को दर्शाता है। चार्ट का अध्ययन कीजिए तथा इस पर आधारित प्रश्नों के उत्तर दीजिए ।



What percent of his income , does Mr. Rao spend on clothing , transport and entertainment combined together ?

मिस्टर राव वस्त्र, परिवहन और मनोरंजन पर कुल मिला कर अपनी आय का कितना प्रतिशत भाग खर्च करते हैं ?

Options:

- 1) $33\frac{1}{2}\%$
- 2) 27%
- 3) 25%
- 4) $12\frac{1}{2}\%$

Correct Answer: $12\frac{1}{2}\%$ **Candidate Answer:** $12\frac{1}{2}\%$

Question 76. In the following question, out of the four alternatives, choose the word which best expresses the meaning of the given word and click the button corresponding to it.

OBSEQUIOUS

Options:

- 1) DEFIANT
- 2) DISHONEST
- 3) SERVILE
- 4) HONEST

Correct Answer: SERVILE**Candidate Answer:** [NOT ANSWERED]

Question 77. In the following question, out of the four alternatives, choose the word which is opposite in meaning to the given word and click the button corresponding to it.

RUGGED

Options:

- 1) HARD
- 2) STURDY
- 3) SMOOTH
- 4) ROUGH

Correct Answer: SMOOTH

Candidate Answer: SMOOTH

Question 78. Four words are given, out of which only one word is spelt correctly. Choose the correctly spelt word and click the button corresponding to it.

Options:

- 1) Counterfeit
- 2) Counterfeet
- 3) Counter feet
- 4) Counterfiet

Correct Answer: Counterfeit

Candidate Answer: Counterfiet

Question 79. In the following questions, one part of the sentence may have an error. Find out which part of the sentence has an error and click the button corresponding to it. If the sentence is free from error, click the "No error" option.

When the stranger saw me, (A) / he seemed to recognise me (B) / and asked me what was my name. (C) / No Error (D)

Options:

- 1) A
- 2) B
- 3) C
- 4) D

Correct Answer: C

Candidate Answer: D

Question 80. In the following questions, one part of the sentence may have an error. Find out which part of the sentence has an error and click the button corresponding to it. If the sentence is free from error, click the "No error" option.

My lawn (A) / which is overgrown (B) / needs weeding (C) / No Error (D)

Options:

- 1) A
- 2) B
- 3) C
- 4) D

Correct Answer: D

Candidate Answer: B

Question 81. In the following questions, one part of the sentence may have an error. Find out which part of the sentence has an error and click the button corresponding to it. If the sentence is free from error, click the "No error" option.

Every man in this world (A) / wishes to live long (B) / but nobody wanted to grow old. (C) / No Error (D)

Options:

- 1) A
- 2) B
- 3) C
- 4) D

Correct Answer: C

Candidate Answer: C

Question 82. The sentences given with blanks are to be filled with an appropriate word(s). Four alternatives are suggested for each question. For each question, choose the correct alternative and click the button corresponding to it.

One should always set _____ some money for emergency.

Options:

- 1) aside
- 2) on
- 3) by
- 4) out

Correct Answer: aside

Candidate Answer: aside

Question 83. The sentences given with blanks are to be filled with an appropriate word(s). Four alternatives are suggested for each question. For each question, choose the correct alternative and click the button corresponding to it.

The train is expected to arrive in a few minutes _____ platform six.

Options:

- 1) in
- 2) above
- 3) near
- 4) on

Correct Answer: on

Candidate Answer: on

Question 84. The sentences given with blanks are to be filled with an appropriate word(s). Four alternatives are suggested for each question. For each question, choose the correct alternative and click the button corresponding to it.

I haven't had _____ opportunity to study during the day.

Options:

- 1) very
- 2) many
- 3) much
- 4) more

Correct Answer: much

Candidate Answer: much

Question 85. In each of the questions, four alternatives are given for the Idiom/Phrase. Choose the alternative which best expresses the meaning of the Idiom/Phrase and click the button corresponding to it.

Cheek by jowl

Options:

- 1) Very close together
- 2) Arguing
- 3) Teasing one another
- 4) Avoiding one another

Correct Answer: Very close together

Candidate Answer: Very close together

Question 86. In each of the questions, four alternatives are given for the Idiom/Phrase. Choose the alternative which best expresses the meaning of the Idiom/Phrase and click the button corresponding to it.

Beyond the pale

Options:

- 1) Unreasonable or unacceptable
- 2) Beyond redemption
- 3) Full of rhetoric
- 4) Distasteful

Correct Answer: Unreasonable or unacceptable

Candidate Answer: Beyond redemption

Question 87. In each of the questions, four alternatives are given for the Idiom/Phrase. Choose the alternative which best expresses the meaning of the Idiom/Phrase and click the button corresponding to it.

Blow one's own trumpet

Options:

- 1) Play some music
- 2) Surprise oneself
- 3) Praise oneself
- 4) Condone oneself

Correct Answer: Praise oneself

Candidate Answer: Praise oneself

Question 88. Out of the four alternatives, choose the one which can be substituted for the given words/sentences and click the button corresponding to it.

Shine with a bright but brief or irregular light

Options:

- 1) Whimper
- 2) Flicker
- 3) Cower
- 4) Mutter

Correct Answer: Flicker

Candidate Answer: Flicker

Question 89. Out of the four alternatives, choose the one which can be substituted for the given words/sentences and click the button corresponding to it.

The act of setting free from bondage of any kind

Options:

- 1) Emancipation
- 2) Eradication
- 3) Indemnity
- 4) Emigration

Correct Answer: Emancipation

Candidate Answer: Emancipation

Question 90. Out of the four alternatives, choose the one which can be substituted for the given words/sentences and click the button corresponding to it.

A disease that affects a large number of people in an area at the same time

Options:

- 1) Endemic
- 2) Epidemic
- 3) Epidermic
- 4) Endothermic

Correct Answer: Epidemic

Candidate Answer: Epidemic

Question 91. A sentence/a part of the sentence is underlined. Four alternatives are given to the underlined part which will improve the sentence. Choose the correct alternative and click the button corresponding to it. In case no improvement is needed, click the button corresponding to "No improvement".

Will you tell me who did accompany you to the airport?

Options:

- 1) when did accompany you
- 2) who must be accompanied you
- 3) who accompanied you
- 4) No improvement

Correct Answer: who accompanied you

Candidate Answer: who accompanied you

Question 92. A sentence/a part of the sentence is underlined. Four alternatives are given to the underlined part which will improve the sentence. Choose the correct alternative and click the button corresponding to it. In case no improvement is needed, click the button corresponding to "No improvement".

Navinder and his wife departed for London by Air India yesterday.

Options:

- 1) to
- 2) towards
- 3) toward
- 4) No improvement

Correct Answer: No improvement

Candidate Answer: No improvement

Question 93. A sentence/a part of the sentence is underlined. Four alternatives are given to the underlined part which will improve the sentence. Choose the correct alternative and click the button corresponding to it. In case no improvement is needed, click the button corresponding to "No improvement".

The rain brought more respite from the heat.

Options:

- 1) much respite
- 2) most relief
- 3) severe drought
- 4) No improvement

Correct Answer: much respite

Candidate Answer: much respite

Question 94. A sentence/a part of the sentence is underlined. Four alternatives are given to the underlined part which will improve the sentence. Choose the correct alternative and click the button corresponding to it. In case no improvement is needed, click the button corresponding to "No improvement".

He speaks so fast to be understood.

Options:

- 1) very fast to be understood
- 2) too fast to be understood
- 3) too fast that he cannot be understood
- 4) No improvement

Correct Answer: too fast to be understood

Candidate Answer: too fast to be understood

Question 95. A sentence/a part of the sentence is underlined. Four alternatives are given to the underlined part which will improve the sentence. Choose the correct alternative and click the button corresponding to it. In case no improvement is needed, click the button corresponding to "No improvement".

I and my parents live together.

Options:

- 1) Me and my parents
- 2) My parents and I
- 3) My parents and me
- 4) No improvement

Correct Answer: My parents and I

Candidate Answer: My parents and I

Question 96. A passage is given with 5 questions following it. Read the passage carefully and choose the best answer to each question out of the four alternatives and click the button corresponding to it.

Most successful companies, institutions and organizations have mission statements. Most individuals don't. As the Chief Executive Officer of your own life in the knowledge era, you need a laser like focus in your vision. You need a mission and a mission statement describing how you want to live, not just what you want to own; defining the person you want to become, not just the title you want to see on your door; outlining the knowledge you will receive, not just the degree you'll earn or your next promotion.

I began the process this way : "To be aware of the uniqueness of my associates, clients, friends and family, and to treat that uniqueness with loving concern. I was created to lead myself and others to understand win-win relationships and how to use them to improve the lives of all persons with whom I come into contact."

You, too, can frame your mission statement starting with your core values, working outward to your material desires and financial needs.

What should a person's mission statement begin with?

Options:

- 1) Your core values
- 2) What you want to acquire
- 3) Your monetary ambitions
- 4) Your next promotion

Correct Answer: Your core values

Candidate Answer: Your core values

Question 97. A passage is given with 5 questions following it. Read the passage carefully and choose the best answer to each question out of the four alternatives and click the button corresponding to it.

Most successful companies, institutions and organizations have mission statements. Most individuals don't. As the Chief Executive Officer of your own life in the knowledge era, you need a laser like focus in your vision. You need a mission and a mission statement describing how you want to live, not just what you want to own; defining the person you want to become, not just the title you want to see on your door; outlining the knowledge you will receive, not just the degree you'll earn or your next promotion.

I began the process this way : "To be aware of the uniqueness of my associates, clients, friends and family, and to treat that uniqueness with loving concern. I was created to lead myself and others to understand win-win relationships and how to use them to improve the lives of all persons with whom I come into contact."

You, too, can frame your mission statement starting with your core values, working outward to your material desires and financial needs.

What is the narrator's mission?

Options:

- 1) To discourage his friends and associates in every endeavour.
- 2) To improve the lives of all his associates.
- 3) To be aware of the strengths and weaknesses of his friends.
- 4) To ill-treat all.

Correct Answer: To improve the lives of all his associates.

Candidate Answer: To improve the lives of all his associates.

Question 98. A passage is given with 5 questions following it. Read the passage carefully and choose the best answer to each question out of the four alternatives and click the button corresponding to it.

Most successful companies, institutions and organizations have mission statements. Most individuals don't. As the Chief Executive Officer of your own life in the knowledge era, you need a laser like focus in your vision. You need a mission and a mission statement describing how you want to live, not just what you want to own; defining the person you want to become, not just the title you want to see on your door; outlining the knowledge you will receive, not just the degree you'll earn or your next promotion.

I began the process this way : "To be aware of the uniqueness of my associates, clients, friends and family, and to treat that uniqueness with loving concern. I was created to lead myself and others to understand win-win relationships and how to use them to improve the lives of all persons with whom I come into contact."

You, too, can frame your mission statement starting with your core values, working outward to your material desires and financial needs.

What does a 'win-win' relationship mean?

Options:

- 1) Every one must win always
- 2) There are no challenges
- 3) The relationship is beneficial to both parties
- 4) The competition is friendly

Correct Answer: The relationship is beneficial to both parties

Candidate Answer: The relationship is beneficial to both parties

Question 99. A passage is given with 5 questions following it. Read the passage carefully and choose the best answer to each question out of the four alternatives and click the button corresponding to it.

Most successful companies, institutions and organizations have mission statements. Most individuals don't. As the Chief Executive Officer of your own life in the knowledge era, you need a laser like focus in your vision. You need a mission and a mission statement describing how you want to live, not just what you want to own; defining the person you want to become, not just the title you want to see on your door; outlining the knowledge you will receive, not just the degree you'll earn or your next promotion.

I began the process this way : "To be aware of the uniqueness of my associates, clients, friends and family, and to treat that uniqueness with loving concern. I was created to lead myself and others to understand win-win relationships and how to use them to improve the lives of all persons with whom I come into contact."

You, too, can frame your mission statement starting with your core values, working outward to your material desires and financial needs.

What are the suggested components of a 'mission statement'?

Options:

- 1) Win-win attitude, financial needs, knowledge
- 2) Core-values, material desires, financial needs
- 3) Academic qualifications, love, material desires
- 4) Core-values, joy, self- confidence

Correct Answer: Core-values, material desires, financial needs

Candidate Answer: Core-values, material desires, financial needs

Question 100. A passage is given with 5 questions following it. Read the passage carefully and choose the best answer to each question out of the four alternatives and click the button corresponding to it.

Most successful companies, institutions and organizations have mission statements. Most individuals don't. As the Chief Executive Officer of your own life in the knowledge era, you need a laser like focus in your vision. You need a mission and a mission statement describing how you want to live, not just what you want to own; defining the person you want to become, not just the title you want to see on your door; outlining the knowledge you will receive, not just the degree you'll earn or your next promotion.

I began the process this way : "To be aware of the uniqueness of my associates, clients, friends and family, and to treat that uniqueness with loving concern. I was created to lead myself and others to understand win-win relationships and how to use them to improve the lives of all persons with whom I come into contact."

You, too, can frame your mission statement starting with your core values, working outward to your material desires and financial needs.

Who is responsible for designing a personal mission?

Options:

- 1) A Chief Executive Officer
- 2) The family and friends
- 3) The Individual
- 4) The company

Correct Answer: The Individual

Candidate Answer: The Individual