

[Click to Print](#) [logout](#)[Challenges](#)

Staff Selection Commission
(Government Of India)

EXAM START TIME : 16:15:00
EXAM DURATION : 01:15 Hrs
TOTAL NO OF QUESTIONS : 100

Question 1. Select the related word/letters/numbers from the given alternatives:

दिये गये विकल्पों में से संबंधित शब्द/अक्षरों/संख्या को चुनिए।

Air:Bird::Water: ?

वायु : पक्षी :: पानी : ?

Options:

1) Fish

मछली

2) Swim

तैरना

3) Wash

धोना

4) Drink

पीना

Correct Answer: Fish

मछली

Candidate Answer: Fish

मछली

Question 2. Select the related word/letters/numbers from the given alternatives:

दिये गये विकल्पों में से संबंधित शब्द/अक्षरों/संख्या को चुनिए।

ACEG:BDFH::IKMO: ?

Options:

1) IJKL

2) JLNP

3) KLMN

4) HIJK

Correct Answer: JLNP

Candidate Answer: JLNP

Question 3. Select the related word/letters/numbers from the given alternatives:

दिये गये विकल्पों में से संबंधित शब्द/अक्षरों/संख्या को चुनिए।

12:20::30: ?

Options:

1) 15

2) 35

3) 42

4) 48

Correct Answer: 42

Candidate Answer: 42

Question 4.

For the following questions

Find the odd word/letters/number pair from the given alternatives.

(A) Neurologist (B) Dentist (C) Architect (D) Paediatrician

निम्नलिखित प्रश्न में दिए गए विकल्पों में से विषम शब्द/अक्षर/संख्या युग्म को चुनिए ?

(A) तंत्रिका विज्ञानी (B) दंत चिकित्सक (C) वास्तुकार (D) बाल चिकित्सक

Options:

1) A

2) B

3) C

4) D

Correct Answer: C

Candidate Answer: C

Question 5.

For the following questions

Find the odd word/letters/number pair from the given alternatives.

निम्नलिखित प्रश्न में दिए गए विकल्पों में से विषम शब्द/अक्षर/संख्या युग्म को चुनिए ?

(A) KP (B) MN (C) HR (D) GT

Options:

1) A

2) B

3) C

4) D

Correct Answer: C

Candidate Answer: C

Question 6.

For the following questions

Find the odd word/letters/number pair from the given alternatives.

निम्नलिखित प्रश्न में दिए गए विकल्पों में से विषम शब्द/अक्षर/संख्या युग्म को चुनिए ?

(A) 16-28 (B) 20-30 (C) 30-40 (D) 40-50

Options:

1) A

2) B

3) C

4) D

Correct Answer: A

Candidate Answer: A

Question 7. Arrange the following words as per order in the dictionary.

निम्नलिखित शब्दों को शब्दकोश में दिए गए क्रम के अनुसार लिखिए ?

1. Syringe 2. Syphilis 3. Syncretism 4. Synarchy 5. Submerge

Options:

1) 4,5,2,3,1

2) 5,4,3,2,1

3) 5,3,4,1,2

4) 4,1,2,3,5

Correct Answer: 5,4,3,2,1

Candidate Answer: 5,4,3,2,1

Question 8. A series is given, with one term missing. Choose the correct alternative from the given ones that will complete the series.

निम्नलिखित प्रश्न में एक अनुक्रम दिया गया है, जिसमें एक पद लुप्त है। दिए गए विकल्पों में से वह सही विकल्प चुनिए जो अनुक्रम को पूरा करे ?

WYV, ?, IKH, BDA

Options:

1) OPR

2) ROP

3) PRO

4) OQH

Correct Answer: PRO

Candidate Answer: PRO

Question 9. Which number will complete the series?

निम्नलिखित प्रश्न में एक अनुक्रम दिया गया है, जिसमें एक पद लुप्त है। दिए गए विकल्पों में से वह सही विकल्प चुनिए जो अनुक्रम को पूरा करे ?

6, 8, 17, 19, 28, 30, ?

Options:

1) 32

2) 37

3) 38

4) 39

Correct Answer: 39

Candidate Answer: 39

Question 10. A is B's brother, C is A's mother, D is C's father, F is A's son. How is A related to F's child?

A, B का भाई है, C, A की माता है, D, C का पिता है, और F, A का पुत्र है। A, F के बच्चे से किस प्रकार सम्बंधित है ?

Options:

1) Aunt

चाची

2) Cousin

चचेरा भाई

3) Nephew

भतीजा

4) Grandfather

दादा

Correct Answer: Grandfather

दादा

Candidate Answer: Grandfather

दादा

Question 11. Seven boys A, B, C, D, E, F and G are standing in a line.

- (i) G is between A and E
 - (ii) F and A have one boy between them
 - (iii) E and C have two boys between them
 - (iv) D is immediate right of F
 - (v) C and B have three boys between them
- Who is second from left?

सात लड़के A, B, C, D, E, F और G एक लाइन में खड़े हैं। (i) G, A और E के बीच में है।

- (ii) F और A के बीच में एक लड़का है।
- (iii) E और C के बीच में दो लड़के हैं।
- (iv) D, F के ठीक दायीं ओर है।
- (v) C और B के बीच में तीन लड़के हैं। बाईं से दूसरा लड़का कौन है ?

Options:

1) C

2) G

3) E

4) A

Correct Answer: E

Candidate Answer: E

Question 12. From the given alternative words, select the word which cannot be formed using the letters of the given word:

निम्नलिखित विकल्पों में से वह शब्द चुनिए जो दिए गए शब्द के अक्षरों का प्रयोग करके नहीं बनाया जा सकता ?

MEASUREMENT

Options:

1) TEAMS

2) MASTER

3) SUMMIT

4) SUMMER

Correct Answer: SUMMIT

Candidate Answer: SUMMIT

Question 13. In a certain code language the word EXAMPLES is written as EMAXSEPL. How will the word BUOYANCY be written in that language?

किसी कोड भाषा में EXAMPLE शब्द को EMAXSEPL लिखा जाता है। उस भाषा में BUOYANCY शब्द को कैसे लिखा जाएगा ?

Options:

1) YBANCYOU

2) CUOYYBAN

3) CUYOYBAN

4) CYOYBAN

Correct Answer: CYOYBAN

Candidate Answer: CYOYBAN

Question 14. If P denotes multiply, T denotes subtraction, M denotes addition, B denotes division then $28B7P8T6M4 = ?$

यदि P का अर्थ गुणा है, T का अर्थ घटा है, M का अर्थ योग है, और B का अर्थ भाग है। तो $28B7P8T6M4 = ?$

Options:

1) 28

2) 30

3) 32

4) 34

Correct Answer: 30

Candidate Answer: 30

Question 15. In this question, some equations are solved on the basis of a certain system. On the same basis find out the correct answer from amongst the four alternatives for the unsolved equation.

कुछ समीकरण एक निश्चित प्रणाली से हल किए गए हैं। उसी आधार पर दिए गए विकल्पों में से सही उत्तर चुनकर लिखिए ?

$$7 \times 5 \times 6 = 576,$$

$$4 \times 2 \times 5 = 245,$$

$$8 \times 2 \times 5 = ?$$

Options:

1) 258

2) 285

3) 582

4) 852

Correct Answer: 285

Candidate Answer: 285

Question 16. Find the missing term in the following question:-

दिए गए विकल्पों में से लुप्त संख्या ज्ञात कीजिए ?

3	4	9
2	5	2
6	7	?
36	140	18

Options:

1) 1

2) 7

3) 12

4) 19

Correct Answer: 1

Candidate Answer: 1

Question 17. Pranav went 10 Km to the North. Then he turned West and covered 10 Km. Then he turned south and covered 5 Km. Finally, he turned to the East and covered 10 Km. In which direction he is from the starting point?

प्रणव 10 कि.मी. उत्तर में गया। फिर वह पश्चिम में मुड़ कर 10 कि.मी. चला। फिर वह दक्षिण में मुड़ कर 5 कि.मी. चला। अंत में वह पूर्व में मुड़ा और 10 कि.मी. चला। वह अपने आरम्भिक स्थल से किस दिशा में है ?

Options:

1) South

दक्षिण

2) North

उत्तर

3) East

पूर्व

4) West

पश्चिम

Correct Answer: North

उत्तर

Candidate Answer: North

उत्तर

Question 18. Consider the given statement/s to be true and decide which of the given conclusions/assumptions can definitely be drawn from the given statement.

Statement: Many books are rocks. All rocks are clips.

Conclusion I: Some books are clips. II: No rock is a book.

निम्नलिखित प्रश्न में एक या दो वक्तव्य दिये गये हैं, जिसके आगे दो निष्कर्ष/मान्यताएं, I और II निकाले गये हैं। आपको विचार करना है कि वक्तव्य सत्य है चाहे वह सामान्यतः ज्ञात तथ्यों से भिन्न प्रतीत होता हो। आपको निर्णय करना है कि दिए गए वक्तव्य में से कौनसा निश्चित रूप से सही निष्कर्ष/मान्यता निकाला जा सकता है ?

वक्तव्य : 1. कई पुस्तकें चट्टानें हैं। 2. सभी चट्टानें क्लिप हैं।

निष्कर्ष : I कुछ पुस्तकें क्लिप हैं। II कोई भी चट्टान पुस्तक नहीं है।

Options:

1) Only conclusion I follows

केवल निष्कर्ष I सही है।

2) Only conclusion II follows

केवल निष्कर्ष II सही है।

3) Both conclusion I and conclusion II follow

निष्कर्ष I और II दोनों सही हैं।

4) Neither conclusion I nor conclusion II follows

ना तो निष्कर्ष I सही है, और ना ही निष्कर्ष II सही है।

Correct Answer: Only conclusion I follows

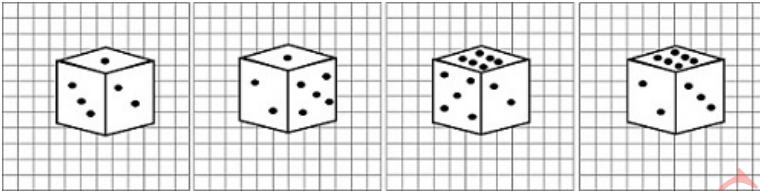
केवल निष्कर्ष I सही है।

Candidate Answer: Only conclusion I follows

केवल निष्कर्ष I सही है।

Question 19. Four different views of a cube/dice are given as viewed from different angles. Find out the number of dots on the face opposite to the face with one dot.

एक घन / पासे के चार अलग-अलग दृश्य अलग-अलग कोणों से दिखाए गए हैं। उस बिन्दु वाले फलक के सामने के फलक पर बिन्दुओं की संख्या ज्ञात कीजिए ?



Options:

1) 6

2) 5

3) 4

4) 3

Correct Answer: 6

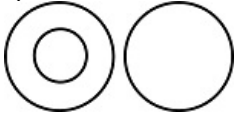
Candidate Answer: 6

Question 20. Choose from the four diagrams given below, the one that illustrates the relationship among 'Languages', 'French' and 'German'.

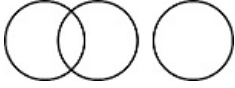
निम्नलिखित चार आरेखों में से वह आरेख चुनिए जो 'भाषाओं', 'फ्रेंच', 'जर्मन' के बीच सही संबंध को दर्शाता है।

Options:

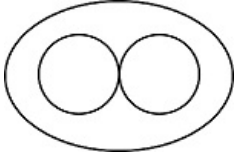
1)



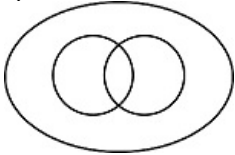
2)



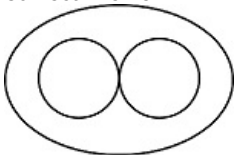
3)



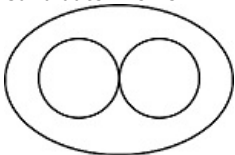
4)



Correct Answer:

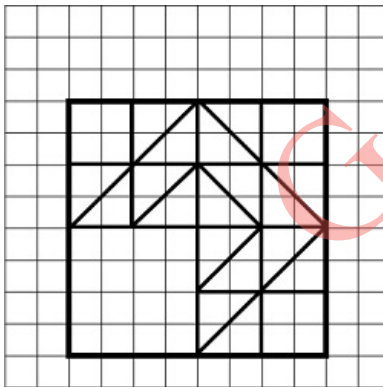


Candidate Answer:



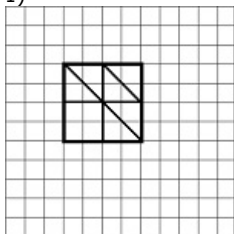
Question 21. Which answer will complete the pattern in the question figure?

कौनसी उत्तर आकृति प्रश्न आकृति के प्रतिरूप को पूरा करेगी ?

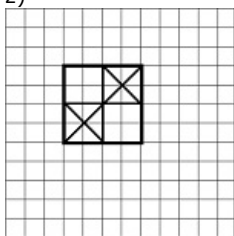


Options:

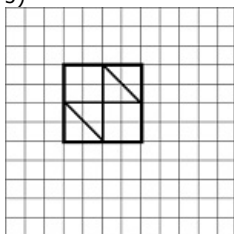
1)



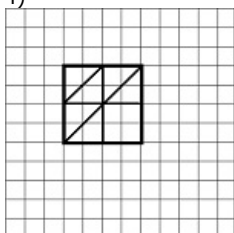
2)



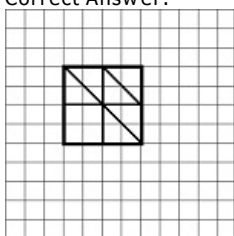
3)



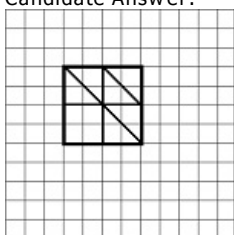
4)



Correct Answer:

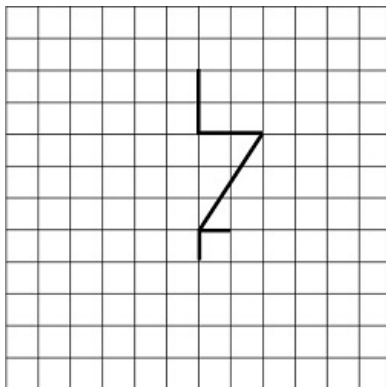


Candidate Answer:



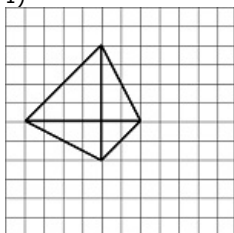
Question 22. From the given answer figures, select the one in which the question figure is hidden/embedded.

दी गई उत्तर आकृतियों में से उस उत्तर आकृति को चुनिए जिसमें प्रश्न आकृति निहित है ?

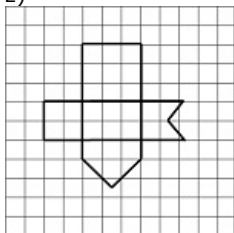


Options:

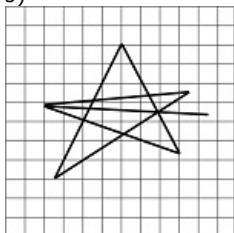
1)



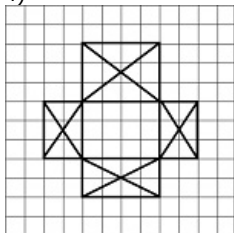
2)



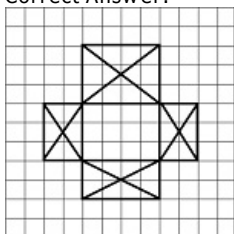
3)



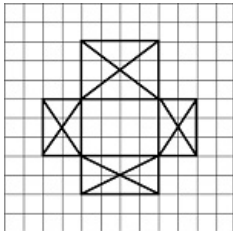
4)



Correct Answer:

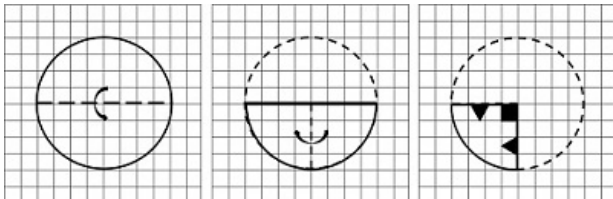


Candidate Answer:



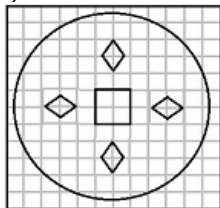
Question 23. A piece of paper is folded and cut as shown below in the question figures. From the given answer figures, indicate how it will appear when opened.

यदि किसी कागज को नीचे दिखाए अनुसार मोड़कर काटा जाए तो खोलने के बाद वह किस आकृति जैसा दिखाई देगा ?

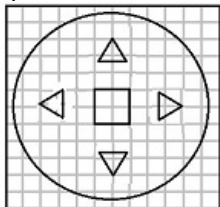


Options:

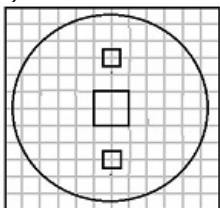
1)



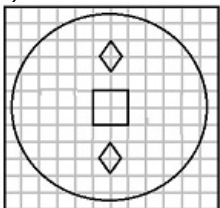
2)



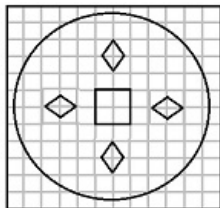
3)



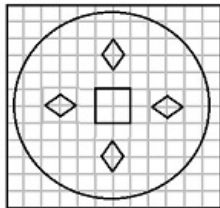
4)



Correct Answer:



Candidate Answer:



Question 24.If a mirror is placed on the line MN, then which of the answer figures is the right image of the given figure?

निम्नलिखित प्रश्न में यदि एक दर्पण को MN रेखा पर रखा जाए तो दी गई उत्तर आकृतियों में से कौन-सी आकृति प्रश्न आकृति का सही प्रतिबिम्ब होगी ?



Options:

1)



2)



3)



4)



Correct Answer:



Candidate Answer:



Question 25.In the question, a word is represented by only one set of numbers as given in any one of the alternatives. The sets of numbers given in the alternatives are represented by two classes of alphabets as in two matrices given below. The columns and rows of Matrix I are numbered from 0 to 4 and that of Matrix II are numbered from 5 to 9. A letter from these matrices can be represented first by its row and next by its column, e.g., O can be represented by 02,14, etc., and P can be represented by 55,67,, etc. You have to identify the set for the word 'NECK'.

निम्नलिखित प्रश्न में विकल्पों में दिए गए संख्या-समूह, अक्षरों के दो वर्गों द्वारा दर्शाए गए हैं, जैसे कि नीचे दिए गए दो आव्यूहों में हैं। आव्यूह I के स्तम्भ और पंक्ति की संख्या 0 से 4 तक दी गई है, और आव्यूह II के 5 से 9 तक, इन आव्यूहों से एक अक्षर को पहले उसकी पंक्ति और बाद में स्तम्भ संख्या द्वारा दर्शाया जा सकता है। उदाहरण के लिए, O को 02, 14 आदि द्वारा दर्शाया जा सकता है तथा R को 55, 67 आदि द्वारा दर्शाया जा सकता है। इसी तरह से आपको दिए शब्द 'NECK' के लिए समूह को पहचानना है।



Options:

1) 96,32,34,68

2) 77,13,69,75

3) 65,21,58,99

4) 89,44,30,87

Correct Answer: 89,44,30,87

Candidate Answer: 89,44,30,87

Question 26.Which of the following green house gases has the greatest heat-trapping ability?

निम्नलिखित में से किस ग्रीन हाउस गैस में सर्वाधिक ऊष्मा-रोधी क्षमता होती है ?

Options:

1) Chlorofluoro carbon

क्लोरोफ्लोरो कार्बन

2) Methane

मिथेन

3) Carbon dioxide

कार्बन डाई-ऑक्साइड

4) Nitrous oxide

नाइट्रस ऑक्साइड

Correct Answer: Chlorofluoro carbon

क्लोरोफ्लोरो कार्बन

Candidate Answer: Carbon dioxide

कार्बन डाई-ऑक्साइड

Question 27. Which State of India is leading in solar energy generation ?

भारत का कौन-सा राज्य सौर ऊर्जा उत्पादन में अग्रणी है ?

Options:

1) Gujarat

गुजरात

2) Rajasthan

राजस्थान

3) Haryana

हरियाणा

4) Uttar Pradesh

उत्तर प्रदेश

Correct Answer: Rajasthan

राजस्थान

Candidate Answer: Rajasthan

राजस्थान

Question 28. Diamond does not conduct electricity, because

हीरा विद्युत प्रवाहित नहीं करता है, क्योंकि

Options:

1) It's structure is very compact

इसकी संरचना बहुत सघन होती है

2) It is of crystalline nature

यह क्रिस्टलीय होता है

3) There are only carbon atoms present in it

उसके अन्दर केवल कार्बन परमाणु मौजूद होते हैं।

4) No free electrons are present in it

इसमें कोई स्वतन्त्र इलेक्ट्रॉन नहीं होता है।

Correct Answer: No free electrons are present in it

इसमें कोई स्वतन्त्र इलेक्ट्रॉन नहीं होता है।

Candidate Answer: No free electrons are present in it

इसमें कोई स्वतन्त्र इलेक्ट्रॉन नहीं होता है।

Question 29. Ganga is a result of confluence of rivers Bhagirathi and Alakananda at which place ?

कहाँ पर भागीरथी और अलकनंदा नदी के मिलने से गंगा बनती है ?

Options:

1) Dev Prayag

देव प्रयाग

2) Karan Prayag

कर्ण प्रयाग

3) Gangotri

गंगोत्री

4) Rudra Prayag

रुद्रप्रयाग

Correct Answer: Dev Prayag

देव प्रयाग

Candidate Answer: Dev Prayag

देव प्रयाग

Question 30. What are Aldehydes ?

ऐल्डिहाइड क्या है ?

Options:

1) Mild oxidising agents

मृदु ऑक्सीकारक एजेंट

2) Strong oxidising agents

प्रबल ऑक्सीकारक एजेंट

3) Strong reducing agents

प्रबल लघुकारी एजेंट

4) Mild reducing agents

मृदु लघुकारी एजेंट

Correct Answer: Strong reducing agents

प्रबल लघुकारी एजेंट

Candidate Answer: Strong reducing agents

प्रबल लघुकारी एजेंट

Question 31. Which circuit is used to store one bit of data ?

एक बिट डाटा के संग्रह के लिए किस सर्किट का प्रयोग होता है ?

Options:

1) Register

रजिस्टर

2) Flip Flop

फ्लिप फ्लॉप

3) Vector

वेक्टर

4) Encoder

एनकोडर

Correct Answer: Flip Flop

फ्लिप फ्लॉप

Candidate Answer: Flip Flop

फ्लिप फ्लॉप

Question 32. Why is weightlessness experienced while orbiting the earth in space ships ?

जब अन्तरिक्ष यान से पृथ्वी का परिक्रमण किया जाता है तो भारहीनता क्यों महसूस की जाती है ?

Options:

1) Inertia

गतिहीनता

2) Acceleration

त्वरण

3) Zero gravity

शून्य गुरुत्वाकर्षण

4) Orbital motion

कक्षीय गति

Correct Answer: Zero gravity

शून्य गुरुत्वाकर्षण

Candidate Answer: Zero gravity

शून्य गुरुत्वाकर्षण

Question 33. Which is the largest gland in human body?

मानव शरीर में सबसे बड़ी ग्रन्थि कौन-सी है?

Options:

1) Liver

लीवर

2) Thyroid

थायरॉइड

3) Pituitary

पीयूष

4) Salivary gland

लार ग्रन्थि

Correct Answer: Liver

लीवर

Candidate Answer: Liver

लीवर

Question 34. Who was the President of Indian National Congress at the time of Indian independence ?

भारतीय स्वतन्त्रता के समय भारतीय राष्ट्रीय कांग्रेस के अध्यक्ष कौन थे ?

Options:

1) Maulana Abdul Kalam Azad

मौलाना अब्दुल कलाम आजाद

2) J. B. Kriplani

जे.बी. कृपलानी

3) Jawahar Lal Nehru

जवाहर लाल नेहरू

4) Rajendra Prasad

राजेन्द्र प्रसाद

Correct Answer: J. B. Kriplani

जे.बी. कृपलानी

Candidate Answer: [NOT ANSWERED]

Question 35.What is the minimum age for membership to Rajya Sabha ?

राज्य सभा का सदस्य बनने के लिए न्यूनतम आयु कितनी होनी चाहिए ?

Options:

1) 20 years

20 वर्ष

2) 25 years

25 वर्ष

3) 30 years

30 वर्ष

4) 35 years

35 वर्ष

Correct Answer: 30 years

30 वर्ष

Candidate Answer: 30 years

30 वर्ष

Question 36.What is an octroi ?

Octroi क्या है ?

Options:

1) Tax

टैक्स

2) Tax collection centre

टैक्स कलेक्शन सेन्टर

3) Tax processing centre

टैक्स प्रोसेसिंग सेन्टर

4) Tax information centre

टैक्स इन्फोरमेशन सेन्टर

Correct Answer: Tax

टैक्स

Candidate Answer: [NOT ANSWERED]

Question 37.Sextant is an instrument used in which of the following ?

सेक्सटैन्ट उपकरण का प्रयोग किसमें होता है?

Options:

1) Gynaecology

स्त्रीरोग विज्ञान

2) Navigation

नौ चालन

3) Birth control

जन्म नियन्त्रण

4) Medical treatment

चिकित्सा उपचार

Correct Answer: Navigation

नौ चालन

Candidate Answer: [NOT ANSWERED]

Question 38.Which of the following is not correctly matched?

निम्नलिखित में से किसका सही मेल नहीं है ?

Options:

1) The Mahakaal temple - Ujjain

महाकाल मन्दिर - उज्जैन

2) Sringeri Matha - Chikkmangalur district

श्रृंगरीमठ - चिकमंगलूर जिला

3) The Sun Temple - Konark

सूर्य मन्दिर - कोणार्क

4) Jain temples - Khajuraho

जैन मन्दिर - खजुराहो

Correct Answer: Jain temples - Khajuraho

जैन मन्दिर - खजुराहो

Candidate Answer: [NOT ANSWERED]

Question 39.What is Gol Gumbadh ?

गोलगुम्बद क्या है ?

Options:

1) Mausoleum of Hyder Ali

हैदर अली का मकबरा

2) Mausoleum of Aurangazeb

औरंगजेब का मकबरा

3) Mausoleum of Chand Bibi

चाँद बीबी का मकबरा

4) Mausoleum of Mohammed Adil Shah

मुहम्मद आदिल शाह का मकबरा

Correct Answer: Mausoleum of Mohammed Adil Shah

मुहम्मद आदिल शाह का मकबरा

Candidate Answer: [NOT ANSWERED]

Question 40.Where is a transistor most likely to be found ?

ट्रांजिस्टर के किसमें होने की अधिकांशतः संभावना होती है ?

Options:

1) Wrist watch

कलाई की घड़ी

2) Fuse

फ्यूज

3) Hearing aid

श्रव्य उपकरण

4) Fluorescent lamp

फ्लूओरोसेंट लैम्प

Correct Answer: Hearing aid

श्रव्य उपकरण

Candidate Answer: Hearing aid

श्रव्य उपकरण

Question 41.Which organ of human body secretes Insulin?

मानव शरीर के किस अंग से इन्सुलिन का स्राव होता है?

Options:

1) Pancreas

अग्नाशय

2) Kidney

गुर्दा

3) Gall bladder

गॉल ब्लेडर

4) Liver

यकृत

Correct Answer: Pancreas

अग्नाशय

Candidate Answer: Pancreas

अग्नाशय

Question 42.If a healthy freshwater fish is placed in salt water, what will be the expected consequence ?

मीठे पानी की एक स्वस्थ मछली को खारे पानी में रखा जाए तो उसके संभावित परिणाम क्या होंगे ?

Options:

1) The fish becomes dehydrated and dies

मछली निर्जलीकृत होकर मर जाएगी

2) The fish becomes bloated and dies

मछली फूलकर मर जाएगी

3) The fish suffers from fungal or bacterial disease and dies

मछली कवकीय या जीवाणु रोग होने से मर जाएगी

4) There is no observable effect on the fish provided there is sufficient food

ऐसा कोई विशिष्ट प्रभाव नहीं दिखाई देता, बशर्ते मछली को पर्याप्त भोजन मिले

Correct Answer: The fish becomes dehydrated and dies

मछली निर्जलीकृत होकर मर जाएगी

Candidate Answer: The fish becomes dehydrated and dies

मछली निर्जलीकृत होकर मर जाएगी

Question 43.Which country is known as 'Land of Midnight Sun'?

मध्य रात्रि के सूर्य की भूमि' के नाम से जाना जाने वाला देश कौन-सा है?

Options:

1) Sweden

स्वीडन

2) Norway

नॉर्वे

3) Germany

जर्मनी

4) Finland

फिनलैंड

Correct Answer: Norway

नॉर्वे

Candidate Answer: Norway

नॉर्वे

Question 44.Which river basin is shared by more than 10 States of India ?

किस नदी के बेसिन को भारत के उत्तरी 10 राज्यों द्वारा बांटा गया है ?

Options:

1) Indus

सिंधु

2) Brahmaputra

ब्रह्मपुत्र

3) Ganges

गंगा

4) Damodar

दामोदर

Correct Answer: Ganges

गंगा

Candidate Answer: [NOT ANSWERED]

Question 45.Who among the following was the first grammarian of the Sanskrit language?

निम्नलिखित में से कौन संस्कृत का प्रथम व्याकरण विद था ?

Options:

1) Kalhana

कल्हण

2) Maitreyi

मैत्रेयी

3) Kalidasa

कालिदास

4) Panini

पाणिनी

Correct Answer: Panini

पाणिनी

Candidate Answer: Panini
पाणिनी

Question 46. What is the total strength of the Rajya Sabha?

राज्य सभा की कुल संख्या कितनी है ?

Options:

1) 250

2) 260

3) 270

4) 280

Correct Answer: 250

Candidate Answer: 250

Question 47. Which of the following is done at a Stock Exchange ?

स्टॉक एक्सचेंज पर इनमें से क्या होता है?

Options:

1) Commodities are bought and sold at wholesale price

थोक दर पर वस्तुएँ खरीदी और बेची जाती हैं

2) Commodities are bought and sold at retail price

खुदरा दर पर वस्तुएँ खरीदी और बेची जाती हैं

3) Securities are bought and sold

प्रतिभूतियाँ खरीदी और बेची जाती हैं।

4) None of these

इनमें से कोई नहीं

Correct Answer: Securities are bought and sold

प्रतिभूतियाँ खरीदी और बेची जाती हैं।

Candidate Answer: Securities are bought and sold

प्रतिभूतियाँ खरीदी और बेची जाती हैं।

Question 48. Which of the following is India's military offensive against Pakistan in the Kargil war ?

कारगिल की लड़ाई में पाकिस्तान के विरुद्ध भारतीय सेना की आक्रमक को किस नाम से जाना जाता है ?

Options:

1) Operation Kargil

ऑपरेशन कारगिल

2) Operation LOC

ऑपरेशन एल.ओ.सी.

3) Operation Vijay

ऑपरेशन विजय

4) Operation Success

ऑपरेशन सक्सेस

Correct Answer: Operation Vijay

ऑपरेशन विजय

Candidate Answer: [NOT ANSWERED]

Question 49. Who gave the title 'Nightingale of India' to Sarojini Naidu ?

सरोजिनी नायडू को "नाइटिंगल ऑफ इण्डिया" का खिताब किसने दिया था ?

Options:

1) Jawaharlal Nehru

जवाहर लाल नेहरू

2) Rabindranath Tagore

रविन्द्र नाथ टैगोर

3) Rajendra Prasad

राजेन्द्र प्रसाद

4) Mahatma Gandhi

महात्मा गाँधी

Correct Answer: Mahatma Gandhi

महात्मा गाँधी

Candidate Answer: Rabindranath Tagore

रविन्द्र नाथ टैगोर

Question 50. The headquarters of RBI is in

आर.बी.आई. का मुख्यालय कहाँ है ?

Options:

1) Delhi

दिल्ली

2) Kanpur

कानपुर

3) Mumbai

मुम्बई

4) Nasik

नासिक

Correct Answer: Mumbai

मुम्बई

Candidate Answer: Mumbai

मुम्बई

Question 51.

Options:

1) 6

2) 5

3) $2\sqrt{8}$

4) $3\sqrt{6}$

Correct Answer: 5

Candidate Answer: 5

Question 52. The lengths of diagonals of a rhombus are 24cm and 10cm the perimeter of the rhombus (in cm) is :

किसी समचतुर्भुज के विकर्णों की लम्बाइयाँ 24 से.मी. और 10 से.मी. हैं। इस समचतुर्भुज का परिमाप (से.मी. में) क्या होगा ?

Options:

1) 52

2) 56

3) 68

4) 72

Correct Answer: 52

Candidate Answer: 52

Question 53. A dishonest shopkeeper professes to sell goods at his cost price but uses a false weight of 950 gms, for each kilogram. His gain percentage is

एक बेईमान दुकानदार अपने माल को क्रय - मूल्य पर बेचने का दावा करता है किन्तु वह एक किलोग्राम के स्थान पर 950 ग्राम का बांट इस्तेमाल करता है। उसका लाभ प्रतिशत कितना है ?

Options:

1)

2)

3)

4)

Correct Answer:

Candidate Answer:

Question 54. Ratio of A's age to B's age is 4:3. 'A' will be 26 years old after 6 years. The age of B now is

A की आयु और B की आयु का अनुपात 4:3 है। 6 वर्ष पश्चात A 26 वर्ष का हो जाएगा। B की वर्तमान आयु क्या है ?

Options:

1)

2) 12 years

12 वर्ष

3) 21 years

21 वर्ष

4) 15 years

15 वर्ष

Correct Answer: 15 years

15 वर्ष

Candidate Answer: 15 years

15 वर्ष

Question 55.If the Arithmetic mean of 7, 5, 13, x and 9 is 10, then the value of x is

यदि 7, 5, 13, x, तथा 9 का औसत 10 हो ,तो x का मान क्या होगा ?

Options:

1) 10

2) 12

3) 14

4) 16

Correct Answer: 16

Candidate Answer: 16

Question 56.A man sells an article at 15% profit. If he had sold it for . 6 more, he would have gained 18%. The man bought the article for

एक व्यक्ति किसी वस्तु को 15% लाभ पर बेचता है। यदि उसने इसे ₹ 6 अधिक पर बेचा होता , तो उसे 18% का लाभ होता। व्यक्ति ने वह वस्तु कितने रुपये में खरीदी थी ?

Options:

1) 100

2) 150

3) 200

4) 250

Correct Answer: 200

Candidate Answer: 200

Question 57.A's salary was decreased by 50% and subsequently increased by 50%. How much percent does he lose?

A का वेतन 50% घटा दिया गया और बाद में 50% बढ़ा दिया गया। उसे कितने प्रतिशत की हानि हुई ?

Options:

1) 25%

2) 50%

3)

4) No loss

कोई हानि नहीं हुई

Correct Answer: 25%

Candidate Answer: 25%

Question 58.A car moving in the morning fog passes a man walking at 4km/h. in the same direction. The man can see the car for 3 minutes and visibility is upto a distance of 130m. The speed of the car is :

सुबह के कोहरे में चलती हुई एक कार उसी दिशा में 4 कि.मी./घंटा की चाल से पैदल चलते हुए एक आदमी को पार करती है। आदमी 3 मिनट तक कार को देख सकता है तथा कोहरे के कारण केवल 130 मीटर की दूरी तक देखा जा सकता है। कार की चाल क्या है ?

Options:

1)

2)

3) 7km/h.

7 कि.मी./घंटा

4) 5km/h.

5 कि.मी./घंटा

Correct Answer:

Candidate Answer:

Question 59. A money lender lends Rs. 400 for 3 years to a person and lends Rs. 500 for 4 years to the other person at the same rate of simple interest. If altogether he receives Rs. 160 as interest, what is the rate of interest per annum ?

एक साहूकार एक व्यक्ति को Rs. 400 3 वर्ष के लिए तथा एक अन्य व्यक्ति को Rs. 500, 4 वर्ष के लिए साधारण ब्याज की एक ही दर पर उधार देता है। यदि कुल मिलाकर उसे Rs. 160 का ब्याज प्राप्त हो, तो वार्षिक ब्याज की दर क्या होगी ?

Options:

1) 5%

2) 7%

3) 9%

4) 10%

Correct Answer: 5%

Candidate Answer: 5%

Question 60. If $x = 1/(\sqrt{2}+1)$ then the value of $x^2 + 2x - 1$ is

यदि $x = 1/(\sqrt{2}+1)$ हो, तो $x^2 + 2x - 1$ का मान क्या होगा ?

Options:

1) $2\sqrt{2}$

2) 4

3) 0

4) 2

Correct Answer: 0

Candidate Answer: 0

Question 61. If $x + 1/x = \sqrt{13}$, then $3x/(x^2-1)$ equal to

यदि $x + 1/x = \sqrt{13}$ हो, तो $3x/(x^2-1)$ का मान क्या होगा ?

Options:

1) $3\sqrt{13}$ 2) $\sqrt{13}/3$

3) 1

4) 3

Correct Answer: 1

Candidate Answer: 1

Question 62. O is an centre of a circle. P is an external point of it at distance of 13cm from O. The radius of the circle is 5cm. Then the length of a tangent to the circle from P upto the point of contact is

O, एक वृत्त का केंद्र है। P एक बाह्य बिन्दु है जो O से 13 से.मी. दूरी पर है। उस वृत्त की त्रिज्या 5 से.मी. है। तदानुसार P बिन्दु से वृत्त की स्पर्श रेखा के स्पर्श - बिन्दु तक की दूरी कितनी होगी ?

Options:

1) $\sqrt{194}$ cm

2) 10cm

3) 12cm

4) 8cm

Correct Answer: 12cm

Candidate Answer: 12cm

Question 63.If θ is acute angle and $\sin(\theta+18^\circ)=1/2$, then the value of θ in circular measure isयदि θ न्यून कोण हो और $\sin(\theta+18^\circ)=1/2$ हो, तो चक्रीय माप में θ का मान कितना होगा ?

Options:

1) $\pi/12$ radians $\pi/12$ रेडियन्स2) $\pi/15$ radians $\pi/15$ रेडियन्स3) $2\pi/5$ radians $2\pi/5$ रेडियन्स4) $3\pi/13$ radians $3\pi/13$ रेडियन्सCorrect Answer: $\pi/15$ radians $\pi/15$ रेडियन्सCandidate Answer: $\pi/15$ radians $\pi/15$ रेडियन्स

Question 64.18 men or 36 boys working 6 hours a day can plough a field in 24 days. In how many days will 24 men and 24 boys working 9 hours a day plough the same field ?

18 आदमी अथवा 36 लड़के 6 घंटे प्रतिदिन काम करके एक खेत को 24 दिन में जोत सकते हैं। 24 आदमी तथा 24 लड़के मिलकर 9 घंटे प्रतिदिन काम करके उसी खेत को कितने दिन में जोतेंगे ?

Options:

1) 9

2) 10

3) 6

4) 8

Correct Answer: 8

Candidate Answer: 8

Question 65.If $a(x+y)=b(x-y)=2ab$, then the value of $2(x^2+y^2)$ isयदि $a(x+y)=b(x-y)=2ab$ हो, तो $2(x^2+y^2)$ का मान क्या होगा ?

Options:

1) $2(a^2-b^2)$ 2) $2(a^2+b^2)$ 3) $4(a^2-b^2)$ 4) $4(a^2+b^2)$ Correct Answer: $4(a^2+b^2)$ Candidate Answer: $4(a^2+b^2)$ Question 66.If $x+1/x=6$, then value of x^2+1/x^2 isयदि $x+1/x=6$ हो, तो x^2+1/x^2 का मान ज्ञात कीजिए ?

Options:

1) 23

2) 16

3) 34

4) 32

Correct Answer: 34

Candidate Answer: 34

Question 67.G is the centroid of the equilateral triangle ABC, if $AB=9$ cm then AG is equal toG, एक समबाहु त्रिभुज ABC का केंद्रक है। तदनुसार यदि $AB=9$ से.मी. हो, तो AG किसके बराबर होगा ?

Options:

- 1) $3\sqrt{3}\text{cm}$
3√3 से.मी.
- 2) 3cm
3 से.मी.
- 3) $3\sqrt{3}/2\text{cm}$
 $3\sqrt{3}/2$ से.मी.
- 4) 6cm
6 से.मी.

Correct Answer: $3\sqrt{3}\text{cm}$

3√3 से.मी.

Candidate Answer: $3\sqrt{3}\text{cm}$

3√3 से.मी.

Question 68. In the figure (not drawn to scale) given below, if $AD = DC = BC$ and $\angle BCE = 96^\circ$, then $\angle DBC$ is

दिए गए चित्र में (जो माप के अनुसार नहीं हैं) यदि $AD = DC = BC$ और $\angle BCE = 96^\circ$ हो, तो $\angle DBC$ का मान क्या होगा ?

Options:

- 1) 32°
- 2) 84°
- 3) 64°
- 4) 96°

Correct Answer: 64° Candidate Answer: 64°

Question 69. If θ is positive acute angle and $4\sin^2\theta = 3$, then the value of $\tan\theta - \cot\theta/2$ is

यदि θ धन न्यून कोण हो और $4\sin^2\theta = 3$ हो, तो $\tan\theta - \cot\theta/2$ का मान बताइए ?

Options:

- 1) 1
- 2) 0
- 3) $\sqrt{3}$
- 4) $1/\sqrt{3}$

Correct Answer: 0

Candidate Answer: 0

Question 70. The chord AB of a circle of centre O subtends an angle θ with the tangent at A to the circle. Then measure of $\angle ABO$ is

O केंद्र वाले वृत्त की जीवा AB वृत्त को A पर स्पर्श रेखा के साथ कोण θ को अंतरित करती है। तो $\angle ABO$ की माप क्या होगी ?

Options:

- 1) θ
- 2) $90^\circ - \theta$
- 3) $90^\circ + \theta$
- 4) $2(180^\circ - \theta)$

Correct Answer: $90^\circ - \theta$ Candidate Answer: $90^\circ - \theta$

Question 71. From a point on a bridge across the river, the angles of depression of the banks on opposite sides of the river are 30° and 45° respectively. If the bridge is at a height of 2.5m from the banks, then the width of the river is (take $\sqrt{3} = 1.732$)

नदी के पुल पर किसी बिन्दु से नदी के आमने-सामने वाले किनारों के अवनमन कोण क्रमशः 30° और 45° हैं। यदि पुल नदी के किनारों से 2.5 मीटर की ऊंचाई पर हो, तो नदी की चौड़ाई बताइए ?
(यह मानते हुए कि $\sqrt{3} = 1.732$)

Options:

- 1) 5.83m
- 5.83 मी.
- 2) 6.83m
- 6.83 मी.
- 3) 5.76m
- 5.76 मी.
- 4) 6.87m
- 6.87 मी.

Correct Answer: 6.83m

6.83 मी.

Candidate Answer: 6.83m

6.83 मी.

Question 72.The pie-chart given below show usage of materials in a construction of a house. Study the chart and answers the questions :

पाई चार्ट में किसी घर के निर्माण में प्रयुक्त सामग्री को दर्शाया गया है। चार्ट का अध्ययन करके प्रश्नों के उत्तर दीजिए। ?

The percentage of steel used in the construction of a house

घर के निर्माण में प्रयुक्त इस्पात का प्रतिशत ज्ञात कीजिए ?

Options:

- 1) 10%
- 2) 12%
- 3) 20%
- 4) 36%

Correct Answer: 10%

Candidate Answer: 10%

Question 73.The pie-chart given below show usage of materials in a construction of a house. Study the chart and answers the questions :

पाई चार्ट में किसी घर के निर्माण में प्रयुक्त सामग्री को दर्शाया गया है। चार्ट का अध्ययन करके प्रश्नों के उत्तर दीजिए। ?

The ratio of cement and bricks used in the construction is

ज्ञात कीजिए कि निर्माण में प्रयुक्त की गई सीमेंट और ईंटों का क्या अनुपात है ?

Options:

- 1)
- 2)
- 3)
- 4)

Correct Answer:

Candidate Answer:

Question 74.The pie-chart given below show usage of materials in a construction of a house. Study the chart and answers the questions :

पाई चार्ट में किसी घर के निर्माण में प्रयुक्त सामग्री को दर्शाया गया है। चार्ट का अध्ययन करके प्रश्नों के उत्तर दीजिए। ?

If the cost of cement is ₹ 5000/- then the labour cost is

यदि सीमेंट की लागत ₹ 5000 है तो श्रमिकों पर क्या खर्चा हुआ ?

Options:

- 1) 5500
- 2) 6250
- 3) 9000
- 4) 4000

Correct Answer: 6250

Candidate Answer: 6250

Question 75. The pie-chart given below shows usage of materials in a construction of a house. Study the chart and answer the questions :

पाई चार्ट में किसी घर के निर्माण में प्रयुक्त सामग्री को दर्शाया गया है। चार्ट का अध्ययन करके प्रश्नों के उत्तर दीजिए ?

The average of percentages of steel, cement and miscellaneous items used in the construction is

निर्माण में प्रयुक्त इस्पात, सीमेंट और विविध मदों के प्रतिशतों का औसत ज्ञात कीजिए ?

Options:

- 1) 10%
- 2) 25%
- 3) 20%
- 4) 35%

Correct Answer: 20%

Candidate Answer: 20%

Question 76. In the following question, out of the four alternatives, choose the word which best expresses the meaning of the given word and click the button corresponding to it.

REPROOF

Options:

- 1) WARNING
- 2) RIDICULE
- 3) REBUKE
- 4) THREAT

Correct Answer: REBUKE

Candidate Answer: REBUKE

Question 77. In the following question, out of the four alternatives, choose the word which is opposite in meaning to the given word and click the button corresponding to it.

INVALUABLE

Options:

- 1) PRICELESS
- 2) RARE
- 3) INESTIMABLE
- 4) WORTHLESS

Correct Answer: WORTHLESS

Candidate Answer: RARE

Question 78. Four words are given, out of which only one word is spelt correctly. Choose the correctly spelt word and click the button corresponding to it.

Options:

- 1) Stagnation
- 2) Stagnasion
- 3) Stagnation
- 4) Stegnation

Correct Answer: Stagnation

Candidate Answer: Stagnation

Question 79. In the following questions, one part of the sentence may have an error. Find out which part of the sentence has an error and click the button corresponding to it. If the sentence is free from error, click the "No error" option.

I have come (A)/ as soon as (B)/ the customers leave your shop (C)/ No Error (D)

Options:

- 1) A
- 2) B
- 3) C
- 4) D

Correct Answer: A

Candidate Answer: A

Question 80. In the following questions, one part of the sentence may have an error. Find out which part of the sentence has an error and click the button corresponding to it. If the sentence is free from error, click the "No error" option.

I called (A)/ at his house yesterday (B)/ and have given him money (C)/ No Error (D)

Options:

- 1) A
- 2) B
- 3) C
- 4) D

Correct Answer: C

Candidate Answer: C

Question 81. In the following questions, one part of the sentence may have an error. Find out which part of the sentence has an error and click the button corresponding to it. If the sentence is free from error, click the "No error" option.

The reason for (A)/ my absence is (B)/ due to ill health (C)/ No Error (D)

Options:

- 1) A
- 2) B
- 3) C
- 4) D

Correct Answer: C

Candidate Answer: [NOT ANSWERED]

Question 82. The sentences given with blanks are to be filled with an appropriate word(s). Four alternatives are suggested for each question. For each question, choose the correct alternative and click the button corresponding to it.

I like _____ in the sun.

Options:

- 1) laying
- 2) lay
- 3) lie
- 4) lying

Correct Answer: lying

Candidate Answer: lying

Question 83. The sentences given with blanks are to be filled with an appropriate word(s). Four alternatives are suggested for each question. For each question, choose the correct alternative and click the button corresponding to it.

Please do not _____ an offer made by the Chairman.

Options:

- 1) deny
- 2) refuse
- 3) refrain
- 4) refuge

Correct Answer: refuse

Candidate Answer: refuse

Question 84. The sentences given with blanks are to be filled with an appropriate word(s). Four alternatives are suggested for each question. For each question, choose the correct alternative and click the button corresponding to it.

The clerk asked for my _____.

Options:

- 1) determination
- 2) destiny
- 3) destination
- 4) designation

Correct Answer: designation

Candidate Answer: designation

Question 85. In each of the questions, four alternatives are given for the Idiom/Phrase. Choose the alternative which best expresses the meaning of the Idiom/Phrase and click the button corresponding to it.

Evening of life

Options:

- 1) Old age
- 2) A party
- 3) Holiday
- 4) None of these

Correct Answer: Old age

Candidate Answer: [NOT ANSWERED]

Question 86. In each of the questions, four alternatives are given for the Idiom/Phrase. Choose the alternative which best expresses the meaning of the Idiom/Phrase and click the button corresponding to it.

Button her lip

Options:

- 1) Tell us more
- 2) Stop talking
- 3) Invite us too
- 4) Enjoy herself

Correct Answer: Stop talking

Candidate Answer: Stop talking

Question 87. In each of the questions, four alternatives are given for the Idiom/Phrase. Choose the alternative which best expresses the meaning of the Idiom/Phrase and click the button corresponding to it.

Invent cock and bull stories

Options:

- 1) Delightful fables
- 2) Eco-friendly accounts
- 3) Absurd and unlikely stories
- 4) Credible tales

Correct Answer: Absurd and unlikely stories

Candidate Answer: Absurd and unlikely stories

Question 88. Out of the four alternatives, choose the one which can be substituted for the given words/sentences and click the button corresponding to it.

Act of making things like new again.

Options:

- 1) Innovate
- 2) Renovate
- 3) Motivate
- 4) Activate

Correct Answer: Renovate

Candidate Answer: Renovate

Question 89. Out of the four alternatives, choose the one which can be substituted for the given words/sentences and click the button corresponding to it.

One who knows everything.

Options:

- 1) Omniscient
- 2) Conscious
- 3) Intellectual
- 4) Learned

Correct Answer: Omniscient

Candidate Answer: Omniscient

Question 90. Out of the four alternatives, choose the one which can be substituted for the given words/sentences and click the button corresponding to it.

Any morbid dread of water.

Options:

- 1) Hydrofoil
- 2) Hydrophobia
- 3) Hydraulic
- 4) Hyacinth

Correct Answer: Hydrophobia

Candidate Answer: Hydrophobia

Question 91. A sentence/a part of the sentence is underlined. Four alternatives are given to the underlined part which will improve the sentence. Choose the correct alternative and click the button corresponding to it. In case no improvement is needed, click the button corresponding to "No improvement".

You have come here with the intention in insulting me.

Options:

- 1) for insulting me
- 2) of insulting me
- 3) on insulting me
- 4) No improvement

Correct Answer: of insulting me

Candidate Answer: of insulting me

Question 92. A sentence/a part of the sentence is underlined. Four alternatives are given to the underlined part which will improve the sentence. Choose the correct alternative and click the button corresponding to it. In case no improvement is needed, click the button corresponding to "No improvement".

I did not give at the examination as my circumstances are bad.

Options:

- 1) write
- 2) sit
- 3) appear
- 4) No improvement

Correct Answer: appear

Candidate Answer: appear

Question 93. A sentence/a part of the sentence is underlined. Four alternatives are given to the underlined part which will improve the sentence. Choose the correct alternative and click the button corresponding to it. In case no improvement is needed, click the button corresponding to "No improvement".

Though he worked hard, but he failed.

Options:

- 1) and
- 2) yet
- 3) then
- 4) No improvement

Correct Answer: yet

Candidate Answer: yet

Question 94. A sentence/a part of the sentence is underlined. Four alternatives are given to the underlined part which will improve the sentence. Choose the correct alternative and click the button corresponding to it. In case no improvement is needed, click the button corresponding to "No improvement".

No sooner did the teacher come into the class when we stood up.

Options:

- 1) since
- 2) then
- 3) than
- 4) No improvement

Correct Answer: than

Candidate Answer: than

Question 95. A sentence/a part of the sentence is underlined. Four alternatives are given to the underlined part which will improve the sentence. Choose the correct alternative and click the button corresponding to it. In case no improvement is needed, click the button corresponding to "No improvement".

He was so much a coward to help his friend.

Options:

- 1) so much cowardly
- 2) too much of a coward
- 3) as coward
- 4) No improvement

Correct Answer: too much of a coward

Candidate Answer: No improvement

Question 96. A passage is given with 5 questions following it. Read the passage carefully and choose the best answer to each question out of the four alternatives and click the button corresponding to it.

In the world today we make health an end in itself. We have forgotten that health really means to enable a person to do his work and do it well. A lot of modern medicine, and this includes many patients as well as many physicians, pay very little attention to health but very much attention to those who imagine they are ill. Our great concern with health is shown by the medical columns in newspapers, the health articles in popular magazines and the popularity of television programmes and all those books on medicine. We talk about health all the time. Yet for the most part the only result is more people with imaginary illness. A healthy man should not be wasting time talking about health : he should be using health for work.

Modern medicine is primarily concerned with

Options:

- 1) promotion of good health
- 2) people suffering from imaginary illness
- 3) people suffering from real illness
- 4) increased efficiency in work

Correct Answer: people suffering from imaginary illness

Candidate Answer: people suffering from imaginary illness

Question 97. A passage is given with 5 questions following it. Read the passage carefully and choose the best answer to each question out of the four alternatives and click the button corresponding to it.

In the world today we make health an end in itself. We have forgotten that health really means to enable a person to do his work and do it well. A lot of modern medicine, and this includes many patients as well as many physicians, pay very little attention to health but very much attention to those who imagine they are ill. Our great concern with health is shown by the medical columns in newspapers, the health articles in popular magazines and the popularity of television programmes and all those books on medicine. We talk about health all the time. Yet for the most part the only result is more people with imaginary illness. A healthy man should not be wasting time talking about health : he should be using health for work.

The passage suggests that

Options:

- 1) health is an end in itself
- 2) health is a blessing
- 3) health is only a means to an end
- 4) we should not talk about health

Correct Answer: health is only a means to an end

Candidate Answer: we should not talk about health

Question 98.A passage is given with 5 questions following it. Read the passage carefully and choose the best answer to each question out of the four alternatives and click the button corresponding to it.

In the world today we make health an end in itself. We have forgotten that health really means to enable a person to do his work and do it well. A lot of modern medicine, and this includes many patients as well as many physicians, pay very little attention to health but very much attention to those who imagine they are ill. Our great concern with health is shown by the medical columns in newspapers, the health articles in popular magazines and the popularity of television programmes and all those books on medicine. We talk about health all the time. Yet for the most part the only result is more people with imaginary illness. A healthy man should not be wasting time talking about health : he should be using health for work.

Talking about health all the time makes people

Options:

- 1) always suffer from imaginary illness
- 2) sometimes suffer from imaginary illness
- 3) rarely suffer from imaginary illness
- 4) often suffer from imaginary illness

Correct Answer: often suffer from imaginary illness

Candidate Answer: always suffer from imaginary illness

Question 99.A passage is given with 5 questions following it. Read the passage carefully and choose the best answer to each question out of the four alternatives and click the button corresponding to it.

In the world today we make health an end in itself. We have forgotten that health really means to enable a person to do his work and do it well. A lot of modern medicine, and this includes many patients as well as many physicians, pay very little attention to health but very much attention to those who imagine they are ill. Our great concern with health is shown by the medical columns in newspapers, the health articles in popular magazines and the popularity of television programmes and all those books on medicine. We talk about health all the time. Yet for the most part the only result is more people with imaginary illness. A healthy man should not be wasting time talking about health : he should be using health for work.

The passage tells us

Options:

- 1) how medicine should be manufactured
- 2) what a healthy man should or should not do
- 3) what television programmes should be about
- 4) how best to imagine illness

Correct Answer: what a healthy man should or should not do

Candidate Answer: what a healthy man should or should not do

Question 100.A passage is given with 5 questions following it. Read the passage carefully and choose the best answer to each question out of the four alternatives and click the button corresponding to it.

In the world today we make health an end in itself. We have forgotten that health really means to enable a person to do his work and do it well. A lot of modern medicine, and this includes many patients as well as many physicians, pay very little attention to health but very much attention to those who imagine they are ill. Our great concern with health is shown by the medical columns in newspapers, the health articles in popular magazines and the popularity of television programmes and all those books on medicine. We talk about health all the time. Yet for the most part the only result is more people with imaginary illness. A healthy man should not be wasting time talking about health : he should be using health for work.

A healthy man should be concerned with

Options:

- 1) his work which good health makes possible
- 2) looking after his health
- 3) his health which makes work possible
- 4) talking about health

Correct Answer: his work which good health makes possible

Candidate Answer: his work which good health makes possible