

Combined Graduate Level Examination (Tier-II), 2018

Roll No.	
Registration No.	
Name	
Test Venue	On Target Solutions
Test Time	10:00 AM - 12:00 PM
Test Date	13/09/2019
Subject	CGLE Tier II Paper I Quantitative abilities

Section : Quantitative abilities

Q.1 N solid metallic spherical balls are melted and recast into a cylindrical rod whose radius is 3 times that of a spherical ball and height is 4 times the radius of a spherical ball. The value of N is:

- Ans
- ☒ 1. 30
 - ☒ 2. 27
 - ☒ 3. 24
 - ☒ 4. 36

Question ID : 558101518
Status : Answered
Chosen Option : 2

Q.2 If x is the remainder when 3^{61284} is divided by 5 and y is the remainder when 4^{96} is divided by 6, then what is the value of $(2x - y)$?

- Ans
- ☒ 1. -4
 - ☒ 2. 4
 - ☒ 3. -2
 - ☒ 4. 2

Question ID : 558101459
Status : Marked For Review
Chosen Option : 2

Q.3 What is the area (in square units) of the triangular region enclosed by the graphs of the equations $x + y = 3$, $2x + 5y = 12$ and the x -axis?

- Ans
- ☒ 1. 2
 - ☒ 2. 3
 - ☒ 3. 4
 - ☒ 4. 6

Question ID : 558101521
Status : Answered
Chosen Option : 1

Q.4 The value of $\sqrt{28 + 10\sqrt{3}} - \sqrt{7 - 4\sqrt{3}}$ is closest to:

- Ans
- ☒ 1. 7.2
 - ☒ 2. 6.1
 - ☒ 3. 6.5
 - ☒ 4. 5.8

Question ID : 558101467
Status : Answered

Q.5 If $\sec\theta + \tan\theta = p, (p > 1)$ then $\frac{\operatorname{cosec}\theta + 1}{\operatorname{cosec}\theta - 1} = ?$

- Ans
- ☒ 1. $\frac{p+1}{p-1}$
 - ☒ 2. p^2
 - ☒ 3. $\frac{p-1}{p+1}$
 - ☒ 4. $2p^2$

Question ID : 558101547
Status : Answered
Chosen Option : 2

Q.6 The value $\operatorname{cosec}(67^\circ + \theta) - \sec(23^\circ - \theta) + \cos 15^\circ \cos 35^\circ \operatorname{cosec} 55^\circ \cos 60^\circ \operatorname{cosec} 75^\circ$ is:

- Ans
- ☒ 1. 2
 - ☒ 2. 0
 - ☒ 3. 1
 - ☒ 4. $\frac{1}{2}$

Question ID : 558101550
Status : Answered
Chosen Option : 4

Q.7 35% of goods were sold at a profit of 65%, while the remaining were sold at $x\%$ loss. If the overall loss is 12%, then what is the value of x ? (correct to one decimal place)

- Ans
- ☒ 1. 51.8
 - ☒ 2. 50.6
 - ☒ 3. 53.5
 - ☒ 4. 52.4

Question ID : 558101482
Status : Marked For Review
Chosen Option : 3

Q.8 In a circle with centre O, ABCD is a cyclic quadrilateral and AC is the diameter. Chords AB and CD are produced to meet at E. If $\angle CAE = 34^\circ$ and $\angle E = 30^\circ$, then $\angle CBD$ is equal to:

- Ans
- ☒ 1. 36°
 - ☒ 2. 26°
 - ☒ 3. 24°
 - ☒ 4. 34°

Question ID : 558101537
Status : Marked For Review
Chosen Option : 2

Q.9 $ab(a-b) + bc(b-c) + ca(c-a)$ is equal to:

- Ans
- ☒ 1. $(a+b)(b-c)(c-a)$
 - ☒ 2. $(a-b)(b+c)(c-a)$
 - ☒ 3. $(a-b)(b-c)(c-a)$

✓ 4. $(b-a)(b-c)(c-a)$

Question ID : 558101522
Status : Answered
Chosen Option : 3

Q.10 The radius of the base of a right circular cylinder is increased by 20%. By what per cent should its height be reduced so that its volume remains the same as before?

- Ans
- ✗ 1. 25
 - ✗ 2. $30\frac{2}{9}$
 - ✓ 3. $30\frac{5}{9}$
 - ✗ 4. 28

Question ID : 558101513
Status : Answered
Chosen Option : 3

Q.11 A is as efficient as B and C together. Working together A and B can complete a work in 36 days and C alone can complete it in 60 days. A and C work together for 10 days. B alone will complete the remaining work in:

- Ans
- ✓ 1. 110 days
 - ✗ 2. 88 days
 - ✗ 3. 84 days
 - ✗ 4. 90 days

Question ID : 558101506
Status : Answered
Chosen Option : 1

Q.12 If $2\cos^2\theta + 3\sin\theta = 3$, where $0^\circ < \theta < 90^\circ$, then what is the value of $\sin^2\theta + \cos^2\theta + \tan^2\theta + \operatorname{cosec}^2\theta$?

- Ans
- ✗ 1. $\frac{35}{12}$
 - ✗ 2. $\frac{29}{3}$
 - ✓ 3. $\frac{35}{6}$
 - ✗ 4. $\frac{29}{6}$

Question ID : 558101546
Status : Answered
Chosen Option : 3

Q.13 The radius and the height of a right circular cone are in the ratio 5 : 12. Its curved surface area is 816.4 cm^2 . What is the volume (in cm^3) of the cone? (Take $\pi = 3.14$)

- Ans
- ✓ 1. 2512
 - ✗ 2. 1256
 - ✗ 3. 3140
 - ✗ 4. 628

Question ID : 558101514
Status : Answered
Chosen Option : 1

Q.14 Given that $(5x - 3)^3 + (2x + 5)^3 + 27(4 - 3x)^3 = 9(3 - 5x)(2x + 5)(3x - 4)$, then the value of $(2x + 1)$ is:

- Ans
- ☒ 1. -13
 - ☒ 2. 15
 - ☒ 3. -15
 - ☒ 4. 13

Question ID : 558101524

Status : Answered

Chosen Option : 2

Q.15 The sides of a triangle are 12 cm, 35 cm and 37 cm. What is the circumradius of the triangle?

- Ans
- ☒ 1. 19 cm
 - ☒ 2. 17.5 cm
 - ☒ 3. 17 cm
 - ☒ 4. 18.5 cm

Question ID : 558101528

Status : Answered

Chosen Option : 4

Q.16 The base of a right pyramid is an equilateral triangle with area $16\sqrt{3}\text{cm}^2$. If the area of one of its lateral faces is 30cm^2 , then its height (in cm) is:

- Ans
- ☒ 1. $\sqrt{\frac{739}{12}}$
 - ☒ 2. $\sqrt{\frac{209}{12}}$
 - ☒ 3. $\sqrt{\frac{611}{12}}$
 - ☒ 4. $\sqrt{\frac{643}{12}}$

Question ID : 558101508

Status : Answered

Chosen Option : 3

Q.17 A vessel contains a 32 litre solution of acid and water in which the ratio of acid and water is 5 : 3. If 12 litres of the solution are taken out and $7\frac{1}{2}$ litres of water are added to it, then what is the ratio of acid and water in the resulting solution?

- Ans
- ☒ 1. 4 : 7
 - ☒ 2. 5 : 6
 - ☒ 3. 4 : 9
 - ☒ 4. 8 : 11

Question ID : 558101499

Status : Answered

Chosen Option : 2

Q.18

A sphere of maximum volume is cut out from a solid hemisphere. What is the ratio of the volume of the sphere to that of the remaining solid?

- Ans
- ☒ 1. 1 : 4
 - ☒ 2. 1 : 2
 - ☒ 3. 1 : 3
 - ☒ 4. 1 : 1

Question ID : 558101510
Status : Answered
Chosen Option : 3

Q.19 If $5\sqrt{5}x^3 + 2\sqrt{2}y^3 = (Ax + \sqrt{2}y)(Bx^2 + 2y^2 + Cxy)$, then the value of $(A^2 + B^2 - C^2)$ is:

- Ans
- ☒ 1. 15
 - ☒ 2. 20
 - ☒ 3. 30
 - ☒ 4. 40

Question ID : 558101523
Status : Answered
Chosen Option : 2

Q.20 The value of $(1 + \cot\theta - \operatorname{cosec}\theta)(1 + \cos\theta + \sin\theta)\sec\theta = ?$

- Ans
- ☒ 1. -2
 - ☒ 2. 2
 - ☒ 3. $\sec\theta\operatorname{cosec}\theta$
 - ☒ 4. $\sin\theta\cos\theta$

Question ID : 558101545
Status : Answered
Chosen Option : 2

Q.21 S is the incentre of $\triangle PQR$. If $\angle PSR = 125^\circ$, then the measure of $\angle PQR$ is:

- Ans
- ☒ 1. 75°
 - ☒ 2. 55°
 - ☒ 3. 80°
 - ☒ 4. 70°

Question ID : 558101532
Status : Answered
Chosen Option : 1

Q.22 The value of $0.4\overline{7} + 0.5\overline{03} - 0.3\overline{9} \times 0.8\overline{}$ is:

- Ans
- ☒ 1. $0.6\overline{15}$
 - ☒ 2. $0.6\overline{15}$
 - ☒ 3. $0.62\overline{5}$
 - ☒ 4. $0.6\overline{25}$

Question ID : 558101462
Status : Answered
Chosen Option : 3

Q.23 If in $\triangle ABC$, D and E are the points on AB and BC respectively such that $DE \parallel AC$ and $AD : DB = 3 : 8$, then (area of $\triangle BDE$) : (area of quadrilateral DECA) = ?

- Ans
- ☐ 1. 9 : 55
 - ☐ 2. 9 : 64
 - ☐ 3. 8 : 13
 - ☒ 4. 25 : 39

Question ID : 558101534

Status : Answered

Chosen Option : 1

Q.24 Monika spends 72% of her income. If her income increases by 20% and savings increase by 15%, then her expenditure increases by: (correct to 1 decimal place)

- Ans
- ☐ 1. 20.8%
 - ☐ 2. 20.2%
 - ☒ 3. 21.9%
 - ☐ 4. 19.8%

Question ID : 558101474

Status : Answered

Chosen Option : 3

Q.25 A, B and C started a business with their capitals in the ratio 2 : 3 : 5. A increased his capital by 50% after 4 months, B increased his capital by $33\frac{1}{3}\%$ after 6 months and C withdrew 50% of his capital after 8 months, from the start of the business. If the total profit at the end of a year was ₹86,800, then the difference between the shares of A and C in the profit was:

- Ans
- ☒ 1. ₹12,600
 - ☐ 2. ₹7,000
 - ☐ 3. ₹9,800
 - ☐ 4. ₹8,400

Question ID : 558101497

Status : Not Answered

Chosen Option : --

Q.26 The graph of the equations $5x - 2y + 1 = 0$ and $4y - 3x + 5 = 0$, intersect at the point $P(\alpha, \beta)$. What is the value of $(2\alpha - 3\beta)$?

- Ans
- ☒ 1. 4
 - ☐ 2. 6
 - ☐ 3. -4
 - ☐ 4. -3

Question ID : 558101520

Status : Answered

Chosen Option : 1

Q.27 An article was sold at a profit of 14%. Had it been sold for ₹121 less, a loss of 8% would have been incurred. If the same article would have been sold for ₹536.25, then the profit/loss per cent would have been:

- Ans
- ☐ 1. Profit, 5%
 - ☐ 2. Loss, 5%
 - ☒ 3. Loss, 2.5%
 - ☐ 4. Profit, 2.5%

Question ID : 558101481

Q.28 A shopkeeper allows 18% discount on the marked price of an article and still makes a profit of 23%. If he gains ₹18.40 on the sale of the article, then what is the marked price of the article?

- Ans
- ☒ 1. ₹140
 - ☒ 2. ₹125
 - ☒ 3. ₹120
 - ☒ 4. ₹146

Question ID : 558101484

Status : Not Answered

Chosen Option : --

Q.29 The value of $\frac{\sec^2 \theta}{\csc^2 \theta} + \frac{\csc^2 \theta}{\sec^2 \theta} - (\sec^2 \theta + \csc^2 \theta)$ is:

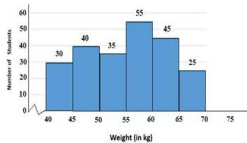
- Ans
- ☒ 1. 0
 - ☒ 2. -2
 - ☒ 3. 2
 - ☒ 4. 1

Question ID : 558101583

Status : Answered

Chosen Option : 2

Q.30 The given graph shows the weights of students in a school on a particular day.



The number of students weighing less than 50 kg is what per cent less than the number of students weighing 55 kg or more?

- Ans
- ☒ 1. 44
 - ☒ 2. 40
 - ☒ 3. 55
 - ☒ 4. 30

Question ID : 558101552

Status : Answered

Chosen Option : 1

Q.31 A right prism has height 18cm and its base is a triangle with sides 5 cm, 8 cm and 12 cm. What is its lateral surface area (in cm²) ?

- Ans
- ☒ 1. 450
 - ☒ 2. 468
 - ☒ 3. 432
 - ☒ 4. 486

Question ID : 558101517

Status : Answered

Chosen Option : 1

Q.32 A can do one-third of a work in 15 days. B can do 75% of the same work in 18 days and C can do the same work in 6 days. B and C work together for 8 days. In how many days will A alone complete the remaining work?

- Ans**
- ☒ 1. 24 days
 - ☒ 2. 18 days
 - ☒ 3. 20 days
 - ☒ 4. 16 days

Question ID : 558101505
Status : Answered
Chosen Option : 3

Q.33 A person buys 80 kg of rice and sells it at a profit of as much money as he paid for 30 kg. His profit per cent is:

- Ans**
- ☒ 1. $27\frac{3}{11}$
 - ☒ 2. 35
 - ☒ 3. 40
 - ☒ 4. $37\frac{1}{2}$

Question ID : 558101480
Status : Answered
Chosen Option : 4

Q.34 To cover a distance of 416 km, a train A takes $2\frac{2}{3}$ hours more than train B. If the speed of A is doubled, it would take $1\frac{1}{3}$ hours less than B. What is the speed (in km/h) of train A?

- Ans**
- ☒ 1. 56
 - ☒ 2. 54
 - ☒ 3. 52
 - ☒ 4. 65

Question ID : 558101500
Status : Marked For Review
Chosen Option : 3

Q.35 The value of $\frac{2\sqrt{10}}{\sqrt{5}+\sqrt{2}-\sqrt{7}} \cdot \frac{\sqrt{5}-2}{\sqrt{5}+2} - \frac{3}{\sqrt{7}-2}$ is:

- Ans**
- ☒ 1. $2 + \sqrt{2}$
 - ☒ 2. $2\sqrt{5}$
 - ☒ 3. $\sqrt{2}$
 - ☒ 4. $\sqrt{7}$

Question ID : 558101468
Status : Not Answered
Chosen Option : --

Q.36 The price of oil is increased by 20%. However, its consumption decreased by $8\frac{1}{3}\%$. What is the percentage increase or decrease in the expenditure on it?

- Ans**
- ☒ 1. Increase by 10%
 - ☒ 2. Increase by 5%
 - ☒ 3. Decrease by 10%
 - ☒ 4. Decrease by 5%

Question ID : 558101476

Status : Answered

Chosen Option : 1

Q.37 The average age of 120 students in a group is 13.56 years. 35% of the number of students are girls and the rest are boys. If the ratio of the average age of boys and girls is 6 : 5, then what is the average age (in years) of the girls?

- Ans ☒ 1. 12
☒ 2. 11.6
☒ 3. 10
☒ 4. 14.4

Question ID : 558101494

Status : Answered

Chosen Option : 3

Q.38 The marked price of an article is ₹1500. If two successive discounts, each of $x\%$, on the marked price is equal to a single discount of ₹587.40, then what will be the selling price of the article if a single discount of $x\%$ is given on the marked price?

- Ans ☒ 1. ₹1,025
☒ 2. ₹1,155
☒ 3. ₹1,170
☒ 4. ₹1,200

Question ID : 558101483

Status : Marked For Review

Chosen Option : 4

Q.39 Two parallel chords on the same side of the centre of a circle are 12 cm and 20 cm long and the radius of the circle is $5\sqrt{13}$ cm. What is the distance (in cm) between the chords?

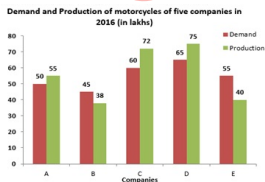
- Ans ☒ 1. 2
☒ 2. 3
☒ 3. 2.5
☒ 4. 1.5

Question ID : 558101539

Status : Answered

Chosen Option : 1

Q.40 Study the following bar graph and answer the question given.



The ratio of the total demand of motorcycles of companies A, C and E to the total production of motorcycles of B and C is:

- Ans ☒ 1. 1 : 1
☒ 2. 2 : 1
☒ 3. 11 : 10
☒ 4. 3 : 2

Question ID : 558101557

Q.41 A circle touches the side BC of $\triangle ABC$ at D and AB and AC are produced to E and F, respectively. If AB = 10 cm, AC = 8.6 cm and BC = 6.4 cm, then BE = ?

- Ans
- ☐ 1. 3.2 cm
 - ☐ 2. 3.5 cm
 - ☐ 3. 2.2 cm
 - ☒ 4. 2.5 cm

Question ID : 558101538
Status : Answered
Chosen Option : 1

Q.42 If the measure of each exterior angle of a regular polygon is $\left(51\frac{3}{7}\right)^\circ$, then the ratio of the number of its diagonals to the number of its sides is:

- Ans
- ☐ 1. 5 : 2
 - ☐ 2. 13 : 6
 - ☐ 3. 3 : 1
 - ☒ 4. 2 : 1

Question ID : 558101533
Status : Answered
Chosen Option : 4

Q.43 Two numbers are in the ratio 3 : 5. If 13 is subtracted from each, the new numbers are in the ratio 10 : 21. If 15 is added to each of the original numbers, then the ratio becomes:

- Ans
- ☐ 1. 5 : 7
 - ☐ 2. 23 : 33
 - ☐ 3. 4 : 5
 - ☒ 4. 24 : 35

Question ID : 558101490
Status : Answered
Chosen Option : 4

Q.44 Pipes A and B are filling pipes while pipe C is an emptying pipe. A and B can fill a tank in 72 and 90 minutes respectively. When all the three pipes are opened together, the tank gets filled in 2 hours. A and B are opened together for 12 minutes, then closed and C is opened. The tank will be empty after:

- Ans
- ☐ 1. 15 minutes
 - ☒ 2. 18 minutes
 - ☐ 3. 12 minutes
 - ☐ 4. 16 minutes

Question ID : 558101504
Status : Answered
Chosen Option : 2

Q.45 The LCM of two numbers x and y is 204 times their HCF. If their HCF is 12 and the difference between the numbers is 60, then $x + y =$?

- Ans
- ☐ 1. 660
 - ☐ 2. 426
 - ☐ 3. 852
 - ☒ 4. 348

Question ID : 558101470

Q.46 In $\triangle ABC$, $BE \perp AC$, $CD \perp AB$ and BE and CD intersect each other at O . The bisectors of $\angle OBC$ and $\angle OCB$ meet at P . If $\angle BPC = 148^\circ$, then what is the measure of $\angle A$?

- Ans
- ☒ 1. 56°
 - ☒ 2. 28°
 - ☒ 3. 32°
 - ☒ 4. 64°

Question ID : 558101531

Status : Marked For Review

Chosen Option : 1

Q.47 The value of $\frac{2(\sin^6 \theta + \cos^6 \theta) - 3(\sin^4 \theta + \cos^4 \theta)}{\cos^4 \theta - \sin^4 \theta - 2\cos^2 \theta}$ is:

- Ans
- ☒ 1. -1
 - ☒ 2. -2
 - ☒ 3. 2
 - ☒ 4. 1

Question ID : 558101544

Status : Answered

Chosen Option : 4

Q.48 The value of $24 \times 2 \div 12 + 12 \div 6$ of $2 \div (15 \div 8 \times 4)$ of $(28 \div 7$ of $5)$ is:

- Ans
- ☒ 1. $4\frac{1}{6}$
 - ☒ 2. $4\frac{8}{75}$
 - ☒ 3. $4\frac{2}{3}$
 - ☒ 4. $4\frac{32}{75}$

Question ID : 558101461

Status : Answered

Chosen Option : 1

Q.49 A person covers 40% of the distance from A to B at 8 km/h, 40% of the remaining distance at 9 km/h and the rest at 12 km/h. His average speed (in km/h) for the journey is:

- Ans
- ☒ 1. $9\frac{5}{8}$
 - ☒ 2. $9\frac{2}{3}$
 - ☒ 3. $9\frac{3}{8}$
 - ☒ 4. $9\frac{1}{3}$

Question ID : 558101502

Status : Not Answered

Chosen Option : --

Q.50 A 15 m deep well with radius 2.8 m is dug and the earth taken out from it is spread evenly to form a platform of breadth 8 m and height 1.5 m. What will be the length of the platform? (Take $\pi = \frac{22}{7}$)

Ans

- ☒ 1. 28.4 m
☒ 2. 28.8 m
☒ 3. 30.2 m
☒ 4. 30.8 m

Question ID : 558101515
Status : Not Answered
Chosen Option : --

Q.51 In ΔPQR , $\angle Q > \angle R$, PS is the bisector of $\angle P$ and $PT \perp PQ$. If $\angle SPT = 28^\circ$ and $\angle R = 23^\circ$, then the measure of $\angle Q$ is:

- Ans** ☒ 1. 74°
☒ 2. 79°
☒ 3. 82°
☒ 4. 89°

Question ID : 558101527
Status : Answered
Chosen Option : 2

Q.52 25 persons can complete a work in 60 days. They started the work. 10 persons left the work after x days. If the whole work was completed in 80 days, then what is the value of x ?

- Ans** ☒ 1. 9
☒ 2. 8
☒ 3. 12
☒ 4. 15

Question ID : 558101507
Status : Not Answered
Chosen Option : --

Q.53 The value of $\sin^2 64^\circ + \cos 64^\circ \sin 26^\circ + 2 \cos 43^\circ \operatorname{cosec} 47^\circ$ is:

- Ans** ☒ 1. 4
☒ 2. 1
☒ 3. 2
☒ 4. 3

Question ID : 558101549
Status : Answered
Chosen Option : 4

Q.54 A tank is in the form of a cuboid with length 12 m. If 18 kilolitre of water is removed from it, the water level goes down by 30 cm. What is the width (in m) of the tank?

- Ans** ☒ 1. 4
☒ 2. 5
☒ 3. 5.5
☒ 4. 4.5

Question ID : 558101519
Status : Not Answered
Chosen Option : --

Q.55 In finding the HCF of two numbers by division method, the last divisor is 17 and the quotients are 1, 11 and 2, respectively. What is sum of the two numbers?

- Ans** ☒ 1. 833

✓ 3. 816

✗ 4. 901

Question ID : 558101469

Status : Answered

Chosen Option : 3

Q.56 A person invested one-fourth of the sum of ₹25,000 at a certain rate of simple interest and the rest at 4% p.a. higher rate. If the total interest received for 2 years is ₹4,125, what is the rate at which the second sum was invested?

Ans ✗ 1. 9.5%

✓ 2. 9.25%

✗ 3. 5.25%

✗ 4. 7.5%

Question ID : 558101486

Status : Not Answered

Chosen Option : --

Q.57 The radius of the base of a right circular cylinder is 3 cm and its curved surface area is $60\pi\text{cm}^2$. The volume of the cylinder (in cm^3) is:

Ans ✓ 1. 90π

✗ 2. 72π

✗ 3. 60π

✗ 4. 81π

Question ID : 558101511

Status : Answered

Chosen Option : 1

Q.58 If $\frac{3(x^2+1)-7x}{3x} = 6$, $x \neq 0$, then the value of $\sqrt{x} + \frac{1}{\sqrt{x}}$ is:

Ans ✗ 1. $\sqrt{\frac{25}{3}}$

✗ 2. $\sqrt{\frac{11}{3}}$

✗ 3. $\sqrt{\frac{35}{3}}$

✓ 4. $\sqrt{\frac{31}{3}}$

Question ID : 558101526

Status : Answered

Chosen Option : 4

Q.59 Basir's working hours per day were increased by 15% and his wages per hour were increased by 20%. By how much per cent did his daily earnings increase?

Ans ✗ 1. 40

✓ 2. 38

✗ 4. 36

Question ID : 558101477

Status : Answered

Chosen Option : 2

Q.60 A student was asked to find the value of $9\frac{4}{9} \div 11\frac{1}{5}$ of $\frac{1}{6} + \left(1\frac{1}{5} \times 1\frac{4}{5} \div \frac{3}{5}\right) \times 2\frac{1}{6}$ of $\frac{2}{3} \div \frac{4}{3}$ of $\frac{2}{3}$. His answer was $19\frac{1}{4}$. What is the difference between his answer and the correct answer?

Ans

✓ 1. $7\frac{3}{4}$

✗ 2. $6\frac{2}{3}$

✗ 3. $7\frac{1}{2}$

✗ 4. $6\frac{1}{3}$

Question ID : 558101463

Status : Marked For Review

Chosen Option : 1

Q.61 If a 10-digit number 5 4 3 2 y 1 7 4 9 x is divisible by 72, then what is the value of $(5x - 4y)$?

Ans

✓ 1. 14

✗ 2. 15

✗ 3. 10

✗ 4. 9

Question ID : 558101460

Status : Answered

Chosen Option : 1

Q.62 What is the remainder when $(127^{97} + 97^{97})$ is divided by 32?

Ans

✗ 1. 4

✗ 2. 2

✗ 3. 7

✓ 4. 0

Question ID : 558101465

Status : Answered

Chosen Option : 2

Q.63 The value of $\frac{(\sin\theta - \cos\theta)(1 + \tan\theta + \cot\theta)}{1 + \sin\theta\cos\theta} = ?$

Ans

✓ 1. $\sec\theta - \operatorname{cosec}\theta$

✗ 2. $\operatorname{cosec}\theta - \sec\theta$

✗ 3. $\sin\theta + \cos\theta$

✗ 4. $\tan\theta - \cot\theta$

Question ID : 558101542

Status : Answered

Chosen Option : 1

Q.64 A, B and C spend 80%, 85% and 75% of their incomes, respectively. If their savings are in the ratio 8 : 9 : 20 and the difference between the incomes of A and C is ₹18,000, then the income of B is:

Ans

Download More Papers From www.GovtJobsAlert.In

1. ₹24,000

✓ 2. ₹27,000

✗ 3. ₹30,000

✗ 4. ₹36,000

Question ID : 558101492

Status : Not Answered

Chosen Option : --

Q.65 If 25% of half of x is equal to 2.5 times the value of 30% of one-fourth of y , then x is what per cent more or less than y ?

Ans

✗ 1. $33\frac{1}{3}\%$ more

✓ 2. 50% more

✗ 3. $33\frac{1}{3}\%$ less

✗ 4. 50% less

Question ID : 558101478

Status : Answered

Chosen Option : 2

Q.66 The value of $\frac{\sin\theta + \cos\theta - 1}{\sin\theta - \cos\theta + 1} \times \frac{\tan^2\theta(\operatorname{cosec}^2\theta - 1)}{\sec\theta - \tan\theta}$ is:

Ans

✗ 1. 0

✗ 2. -1

✓ 3. 1

✗ 4. $\frac{1}{2}$

Question ID : 558101541

Status : Marked For Review

Chosen Option : 1

Q.67 In an examination, A obtained 10% more marks than B, B obtained 20% more marks than C and C obtained 32% less marks than D. If A obtained 272 more marks than C, then the marks obtained by B is:

Ans

✗ 1. 850

✗ 2. 816

✓ 3. 1020

✗ 4. 952

Question ID : 558101475

Status : Answered

Chosen Option : 2

Q.68 In quadrilateral ABCD, $\angle C = 72^\circ$ and $\angle D = 28^\circ$. The bisectors of $\angle A$ and $\angle B$ meet in O. What is the measure of $\angle AOB$?

Ans

✗ 1. 48°

✗ 2. 54°

✓ 3. 50°

✗ 4. 36°

Question ID : 558101540

Status : Answered

Download More Papers From www.GovtJobsAlert.In

Q.69 a , b and c are three fractions such that $a < b < c$. If c is divided by a , the result is $\frac{9}{2}$, which exceeds b by $\frac{23}{6}$. The sum of a , b and c is $\frac{19}{12}$. What is the value of $(2a + b - c)$?

Ans

- ☒ 1. $\frac{1}{2}$
- ☒ 2. $\frac{1}{3}$
- ☒ 3. $\frac{1}{12}$
- ☒ 4. $\frac{1}{4}$

Question ID : 558101466

Status : Marked For Review

Chosen Option : 4

Q.70 How many kg of salt costing ₹28 per kg must be mixed with 39.6 kg of salt costing ₹16 per kg, so that selling the mixture at ₹29.90, there is a gain of 15%?

Ans

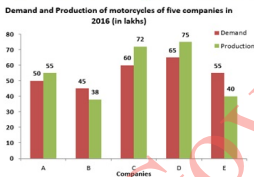
- ☒ 1. 33
- ☒ 2. 31
- ☒ 3. 35
- ☒ 4. 32

Question ID : 558101498

Status : Not Answered

Chosen Option : --

Q.71 Study the following bar graph and answer the question given.



The total production of motorcycles of companies C, D and E is what per cent less than the total demand of motor cycles of all the companies during five years?

Ans

- ☒ 1. 43
- ☒ 2. 32
- ☒ 3. 38
- ☒ 4. 47

Question ID : 558101558

Status : Answered

Chosen Option : 3

Q.72 A, B and C started a business. Thrice the investment of A is equal to twice the investment of B and also equal to four times the investment of C. If C's share out of the total profit is ₹4,863, then the share of A in the profit is:

Ans

- ☒ 1. ₹7,272
- ☒ 2. ₹6,484
- ☒ 3. ₹9,726
- ☒ 4. ₹8,105

Question ID : 558101496

Status : Answered

Chosen Option : 2

Q.73 Two positive numbers differ by 2001. When the larger number is divided by the smaller number, the quotient is 9 and the remainder is 41. The sum of the digits of the larger number is:

- Ans
- ☒ 1. 15
 - ☒ 2. 11
 - ☒ 3. 10
 - ☒ 4. 14

Question ID : 558101472

Status : Answered

Chosen Option : 4

Q.74 Let $x = \sqrt[3]{27} - \sqrt{6\frac{3}{4}}$ and $y = \frac{\sqrt{45} + \sqrt{605} + \sqrt{245}}{\sqrt{80} + \sqrt{125}}$, then the value of $x^2 + y^2$ is:

- Ans
- ☒ 1. $\frac{223}{36}$
 - ☒ 2. $\frac{221}{36}$
 - ☒ 3. $\frac{221}{9}$
 - ☒ 4. $\frac{227}{9}$

Question ID : 558101471

Status : Not Answered

Chosen Option : --

Q.75 If $(5x + 2y) : (10x + 3y) = 5 : 9$, then $(2x^2 + 3y^2) : (4x^2 + 9y^2) = ?$

- Ans
- ☒ 1. 31 : 87
 - ☒ 2. 10 : 27
 - ☒ 3. 16 : 47
 - ☒ 4. 1 : 3

Question ID : 558101491

Status : Answered

Chosen Option : 1

Q.76 The average of 18 numbers is 37.5. If six numbers of average x are added to them, then the average of all the numbers increases by one. The value of x is:

- Ans
- ☒ 1. 40
 - ☒ 2. 41.5
 - ☒ 3. 42
 - ☒ 4. 38.5

Question ID : 558101495

Status : Answered

Chosen Option : 2

Q.77

In an office $\frac{3}{8}$ of the total number of employees are males and $\frac{1}{5}$ of the females are non-technical workers while $\frac{2}{5}$ of the number of females are technical workers. What fraction of the total number of employees are technical workers?

Ans

- ✓ 1. $\frac{5}{8}$
 ✗ 2. $\frac{2}{5}$
 ✗ 3. $\frac{1}{2}$
 ✗ 4. $\frac{3}{8}$

Question ID : 558101473

Status : Answered

Chosen Option : 1

Q.78 A solid cylinder of base radius 12 cm and height 15 cm is melted and recast into n toys each in the shape of a right circular cone of height 9 cm mounted on a hemisphere of radius 3 cm. The value of n is:

Ans

- ✗ 1. 27
 ✗ 2. 64
 ✓ 3. 48
 ✗ 4. 54

Question ID : 558101512

Status : Answered

Chosen Option : 3

Q.79 In $\triangle ABC$, D and E are the points on AB and AC respectively such that $AD \times AC = AB \times AE$. If $\angle ADE = \angle ACB + 30^\circ$ and $\angle ABC = 78^\circ$, then $\angle A = ?$

Ans

- ✗ 1. 56°
 ✓ 2. 54°
 ✗ 3. 68°
 ✗ 4. 48°

Question ID : 558101536

Status : Answered

Chosen Option : 2

Q.80 P and Q are two points on the ground on either side of a pole. The angles of elevation of the top of the pole as observed from P and Q are 60° and 30° , respectively and the distance between them is $84\sqrt{3}$ m. What is the height (in m) of the pole?

Ans

- ✓ 1. 63
 ✗ 2. 73.5
 ✗ 3. 52.5
 ✗ 4. 60

Question ID : 558101551

Status : Answered

Chosen Option : 1

Q.81 If in $\triangle PQR$, $\angle P = 120^\circ$, $PS \perp QR$ at S and $PQ + QS = SR$, then the measure of $\angle Q$ is:

Ans

- ✗ 1. 20°
 ✗ 2. 50°

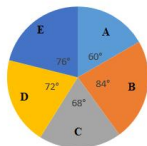
2. 40°
X 4. 30°

Question ID : 558101535

Status : Not Answered

Chosen Option : --

Q.82 The given pie-chart shows the break-up of total marks obtained by a student in five subjects A, B, C, D and E. The maximum marks in each subject is 150 and he obtained a total of 600 marks.



In how many subjects did the student obtain more than his average score?

- Ans
- X 1. 3
 - ✓ 2. 2
 - X 3. 4
 - X 4. 1

Question ID : 558101554

Status : Answered

Chosen Option : 2

Q.83 Walking at 60% of his usual speed, a man reaches his destination 1 hour 40 minutes late. His usual time (in hours) to reach the destination is:

- Ans
- ✓ 1. $2\frac{1}{2}$
 - X 2. $2\frac{1}{4}$
 - X 3. $3\frac{1}{8}$
 - X 4. $3\frac{1}{4}$

Question ID : 558101503

Status : Answered

Chosen Option : 1

Q.84 A man can row a distance of 900 metres against the stream in 12 minutes and returns to the starting point in 9 minutes. What is the speed (in km/h) of the man in still water?

- Ans
- X 1. $4\frac{1}{2}$
 - X 2. 6
 - ✓ 3. $5\frac{1}{4}$
 - X 4. 5

Question ID : 558101501

Status : Answered

Chosen Option : 3

Q.85 If $x + y + z = 6$, $xyz = -10$ and $x^2 + y^2 + z^2 = 30$, then what is the value of $(x^3 + y^3 + z^3)$?

Ans

- ✓ 1. 132
 ✗ 2. 135
 ✗ 3. 130
 ✗ 4. 127

Question ID : 558101525

Status : Not Answered

Chosen Option : --

Q.86

The value of $\frac{(4.6)^4 + (5.4)^4 + (24.84)^2}{(4.6)^2 + (5.4)^2 + 24.84}$ is:

- Ans ✗ 1. 24.42
 ✗ 2. 24.24
 ✗ 3. 25.42
 ✓ 4. 25.48

Question ID : 558101464

Status : Not Answered

Chosen Option : --

Q.87

If $\frac{\sin \theta}{1 + \cos \theta} + \frac{1 + \cos \theta}{\sin \theta} = \frac{4}{\sqrt{3}}$, $0^\circ < \theta < 90^\circ$, then the value of $(\tan \theta + \sec \theta)^{-1}$ is:

- Ans ✓ 1. $2 - \sqrt{3}$
 ✗ 2. $3 - \sqrt{2}$
 ✗ 3. $2 + \sqrt{3}$
 ✗ 4. $3 + \sqrt{2}$

Question ID : 558101548

Status : Answered

Chosen Option : 1

Q.88

Sudha bought 80 articles at the same price. She sold some of them at 8% profit and the remaining at 12% loss resulting in an overall profit of 6%. The number of items sold at 8% profit is:

- Ans ✗ 1. 64
 ✗ 2. 60
 ✓ 3. 72
 ✗ 4. 70

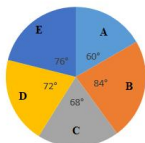
Question ID : 558101479

Status : Answered

Chosen Option : 3

Q.89

The given pie-chart shows the break-up of total marks obtained by a student in five subjects A, B, C, D and E. The maximum marks in each subject is 150 and he obtained a total of 600 marks.



The total marks obtained by the student in subjects C and E is approximately how much per cent more than what he obtained in A and D together?

- Ans ✓ 1. 9.09 %

1. 10.13 %

3. 8.33 %

4. 7.26 %

Question ID : 558101555

Status : Not Answered

Chosen Option : --

Q.90 If the selling price of an article is 32% more than its cost price and the discount offered on its marked price is 12%, then what is the ratio of its cost price to the marked price?

Ans 1. 4 : 5

2. 3 : 8

3. 2 : 3

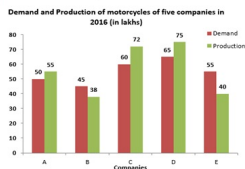
4. 1 : 2

Question ID : 558101485

Status : Answered

Chosen Option : 3

Q.91 Study the following bar graph and answer the question given.



The number of companies whose production of motorcycles is equal to or more than the average demand of motorcycles (per year) over five years is:

Ans 1. 4

2. 2

3. 1

4. 3

Question ID : 558101566

Status : Answered

Chosen Option : 4

Q.92 The internal diameter of a hollow hemispherical vessel is 24 cm. It is made of a steel sheet which is 0.5 cm thick. What is the total surface area (in cm^2) of the vessel?

Ans 1. 612.75π

2. 468.75π

3. 600.2π

4. 600.5π

Question ID : 558101509

Status : Not Answered

Chosen Option : --

Q.93 The bisector of $\angle A$ in $\triangle ABC$ meets BC in D . If $AB = 15$ cm, $AC = 13$ cm and $BC = 14$ cm, then $DC = ?$

Ans 1. 8.5 cm

2. 7.5 cm

3. 6.5 cm

4. 8 cm

Question ID : 558101530
 Status : **Answered**
 Chosen Option : 2

Q.94 A certain loan was returned in two equal half yearly instalments each of ₹6,760. If the rate of interest was 8% p.a., compounded yearly, how much was the interest paid on the loan?

- Ans
- ☒ 1. ₹750
 - ☒ 2. ₹810
 - ☒ 3. ₹790
 - ☒ 4. ₹770

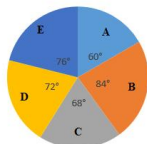
Question ID : 558101489
 Status : **Answered**
 Chosen Option : 4

Q.95 A sum is divided among A, B, C and D such that the ratio of the shares of A and B is 2 : 3, that of B and C is 1 : 2 and that of C and D is 3 : 4. If the difference between the shares of A and D is ₹648, then the sum of their shares is:

- Ans
- ☒ 1. ₹2,052
 - ☒ 2. ₹2,160
 - ☒ 3. ₹2,484
 - ☒ 4. ₹1,944

Question ID : 558101493
 Status : **Answered**
 Chosen Option : 1

Q.96 The given pie-chart shows the break-up of total marks obtained by a student in five subjects A, B, C, D and E. The maximum marks in each subject is 150 and he obtained a total of 600 marks.



What is the difference between the marks obtained by the student in subjects B and D?

- Ans
- ☒ 1. 20
 - ☒ 2. 27
 - ☒ 3. 30
 - ☒ 4. 12

Question ID : 558101553
 Status : **Answered**
 Chosen Option : 1

Q.97 A sector of radius 10.5 cm with the central angle 120° is folded to form a cone by joining the two bounding radii of the sector. What is the volume (in cm^3) of the cone so formed?

- Ans
- ☒ 1. $\frac{343\sqrt{2}}{6}\pi$
 - ☒ 2. $\frac{343\sqrt{3}}{6}\pi$
 - ☒ 3. $\frac{343\sqrt{3}}{12}\pi$

✓ 4. $\frac{343\sqrt{2}}{12}\pi$

Question ID : 558101516

Status : Not Answered

Chosen Option : --

Q.98 A certain sum amounts to ₹4,205.55 at 15% p.a. in $2\frac{2}{5}$ years, interest compounded yearly. The sum is:

- Ans
- ✗ 1. ₹3,200
 - ✗ 2. ₹3,500
 - ✗ 3. ₹2,700
 - ✓ 4. ₹3,000

Question ID : 558101488

Status : Answered

Chosen Option : 4

Q.99 In $\triangle ABD$, C is the midpoint of BD. If AB = 10 cm, AD = 12 cm and AC = 9 cm, then BD = ?

- Ans
- ✓ 1. $2\sqrt{41}$ cm
 - ✗ 2. $2\sqrt{10}$ cm
 - ✗ 3. $\sqrt{41}$ cm
 - ✗ 4. $\sqrt{10}$ cm

Question ID : 558101529

Status : Answered

Chosen Option : 1

Q.100 A sum of ₹10,500 amounts to ₹13,825 in $3\frac{4}{5}$ years at a certain rate per cent per annum simple interest. What will be the simple interest on the same sum for 5 years at double the earlier rate?

- Ans
- ✗ 1. ₹8,470
 - ✓ 2. ₹8,750
 - ✗ 3. ₹8,670
 - ✗ 4. ₹8,560

Question ID : 558101487

Status : Answered

Chosen Option : 2