


Combined Graduate Level Examination-2019 (Tier-I)

Roll Number	
Candidate Name	
Venue Name	S2A CONSULTANCY SERVICES PVT. LTD.
Exam Date	07/03/2020
Exam Time	10:00 AM - 11:00 AM
Subject	CGLE Tier I


Section : General Intelligence and Reasoning

Q.1 उस विकल्प का चयन करें, जिसमें दी गई आकृति अंतर्निहित है। (घुमाने की अनुमति नहीं है)

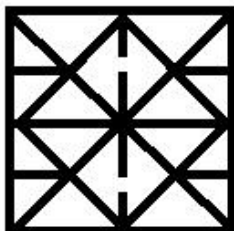


Ans

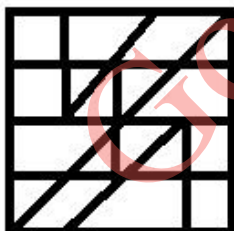
✗ 1.



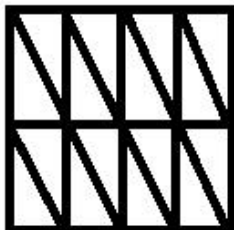
✗ 2.



✓ 3.



✗ 4.



Question ID : 816161549

Status : Answered

Chosen Option : 3

Q.2 Read the given statements and conclusions carefully. Assuming that the information given in the statements is true, even if it appears to be at variance with commonly known facts, decide which of the given conclusions logically follow(s) from the statements.

Statements:

1. Some cars are buses.
2. Some buses are trucks.
3. Some trucks are scooters

Conclusions:

- I. Some cars are scooters.
- II. Some trucks are buses.
- III. Some scooters are buses
- IV. All scooters are trucks.

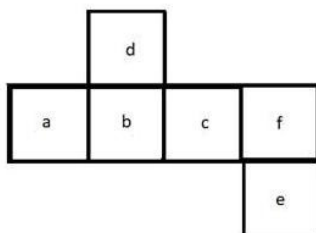
- Ans**
- ☒ 1. Only conclusions I and II follow.
 - ☒ 2. Only conclusions II and IV follow.
 - ☒ 3. Only conclusion II follows.
 - ☒ 4. All the conclusions follow.

Question ID : 816161538

Status : Answered

Chosen Option : 3

Q.3 उस बॉक्स का चयन करें, जो दिए गए खुले हुए बॉक्स को मोड़कर नहीं बनाया जा सकता है।



Ans

- ☒ 1.
- ☒ 2.
- ☒ 3.
- ☒ 4.

Question ID : 816161548

Status : Answered

Chosen Option : 3

Q.4 उस विकल्प का चयन करें, जिसका तीसरे शब्द से वही संबंध है, जो दूसरे शब्द का पहले शब्द से है।

मनोरंजक : आनंदातिरेक :: नम : ?

- Ans
- ✓ 1. तरबतर
 - ✗ 2. सूखाना
 - ✗ 3. उमस
 - ✗ 4. पानी

Question ID : 816161532

Status : Answered

Chosen Option : 3

Q.5 अक्षरों के उस सेट का चयन करें, जिसे अक्षर श्रृंखला में रिक्त स्थानों पर क्रमिक रूप से भरे जाने पर श्रृंखला पूरी हो जाएगी।

p_rsqrps_pqs_qr_qrps_p_s

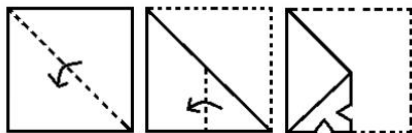
- Ans
- ✗ 1. q, r, p, p, r, q
 - ✓ 2. q, r, p, s, r, q
 - ✗ 3. r, p, q, s, r, q
 - ✗ 4. p, r, p, s, r, p

Question ID : 816161536

Status : Not Attempted and
Marked For Review

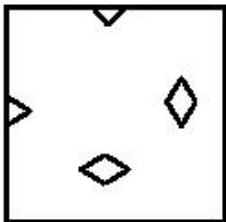
Chosen Option : --

Q.6 नीचे दी गई आकृतियों में कागज के एक टुकड़े को मोड़कर काटने का क्रम दिखाया गया है। यह कागज खोलने पर कैसा दिखाई देगा?

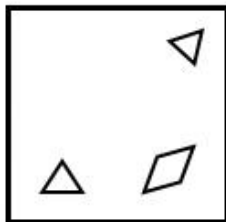


Ans

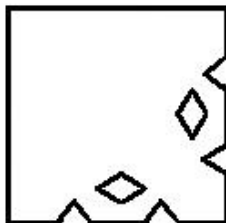
✗ 1.




✗ 2.



✓ 3.



✗ 4.



Question ID : 816161551

Status : Answered

Chosen Option : 3

Q.7 उस विकल्प का चयन करें, जिसका तीसरी संख्या से वही संबंध है, जो दूसरी संख्या का पहली से और छठी संख्या का पाँचवीं संख्या से है।

6 : 16 :: 20 : ? :: 11 : 81

Ans

✓ 1. 324

✗ 2. 91

✗ 3. 120

✗ 4. 361

Question ID : 816161540

Status : Answered

Chosen Option : 1

Q.8 किसी निश्चित कूट भाषा में CIRCULAR को 24-3-9-24-1-15-5-9 के रूप में लिखा जाता है। उस भाषा में VERTICAL को कैसे लिखा जाएगा?

- Ans
- ☒ 1. 5-2-9-7-3-24-5-15
 - ☒ 2. 22-4-9-7-9-24-5-15
 - ☒ 3. 5-4-9-7-3-24-5-15
 - ☒ 4. 22-4-9-7-3-23-1-15

Question ID : 816161535

Status : Answered

Chosen Option : 3

Q.9 चार अक्षर-समूह दिए गए हैं, जिनमें से तीन किसी न किसी तरह समान हैं और एक असमान है। उस असमान अक्षर-समूह का चयन करें।

- Ans
- ☒ 1. SVY
 - ☒ 2. FIK
 - ☒ 3. NQT
 - ☒ 4. XAD

Question ID : 816161530

Status : Answered

Chosen Option : 2

Q.10 गणितीय संकेतों के सही संयोजन का चयन करें, जो क्रमानुसार * संकेत की जगह आकर निम्नलिखित समीकरण को संतुलित कर दे।

$$(14 * 9 * 6) * 15 * 8$$

- Ans
- ☒ 1. $\times, =, \div, -$
 - ☒ 2. $-, \div, \times, =$
 - ☒ 3. $\div, -, =, \times$
 - ☒ 4. $\times, -, \div, =$

Question ID : 816161544

Status : Answered

Chosen Option : 4

Q.11 Select the option in which the words share the same relationship as that shared by the given pair of words.

Bacteria : Illness

- Ans
- ☒ 1. Appraisal : Performance
 - ☒ 2. Painting : Painter
 - ☒ 3. Disease : Doctor
 - ☒ 4. Carelessness : Errors

Question ID : 816161533

Status : Answered

Chosen Option : 4

Q.12 उस विकल्प का चयन करें, जिसमें संख्याओं का आपस में वही संबंध है, जो नीचे दिए गए समुच्चय की संख्याओं के बीच है।

17 : 102 : 153

- Ans ☒ 1. 16 : 96 : 144
☒ 2. 23 : 162 : 207
☒ 3. 18 : 104 : 171
☒ 4. 13 : 78 : 108

Question ID : 816161542

Status : Answered

Chosen Option : 1

Q.13 निम्नलिखित श्रृंखला में प्रश्न-चिह्न (?) की जगह आने वाले अक्षर-समूह का चयन करें।

eBd, hXi, kTn, nPs, ?

- Ans ☒ 1. qLx
☒ 2. Qlv
☒ 3. qKx
☒ 4. pLw

Question ID : 816161528

Status : Answered

Chosen Option : 1

Q.14 निम्नलिखित शब्दों को उस क्रम में व्यवस्थित करें, जैसे वे अंग्रेजी शब्दकोश में आते हैं।

1. Decipher
2. Decide
3. Decline
4. Deceive
5. Decimal
6. Decision

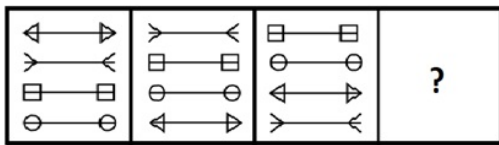
- Ans ☒ 1. 4, 5, 2, 1, 6, 3
☒ 2. 4, 3, 2, 1, 5, 6
☒ 3. 4, 2, 5, 1, 6, 3
☒ 4. 3, 5, 4, 1, 6, 2

Question ID : 816161529

Status : Answered

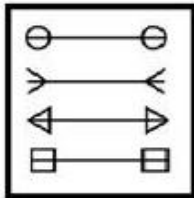
Chosen Option : 3

Q.15 उस आकृति का चयन करें, जो निम्नलिखित श्रृंखला में प्रश्न चिह्न (?) की जगह आ सकती है।

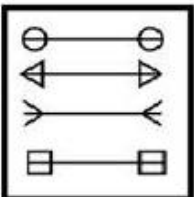


Ans

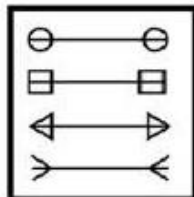
✗ 1.



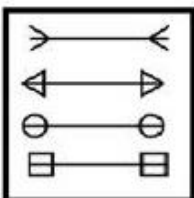
✓ 2.



✗ 3.



✗ 4.



Question ID : 816161546

Status : Answered

Chosen Option : 2

Q.16 संख्याओं के चार युग्म दिए गए हैं, जिनमें से तीन किसी न किसी तरह से समान हैं और एक असमान है। उस असमान संख्या-युग्म का चयन करें।

Ans

✗ 1. 4/5 : 3

✗ 2. 16/20 : 6

✓ 3. 25/41 : 8

✗ 4. 30/51 : 9

Question ID : 816161541

Status : Answered

Chosen Option : 3

- Q.17 A + B means 'A is the mother of B';
 A – B means 'A is the husband of B';
 A × B means 'A is son of B';
 A ÷ B means 'A is the daughter of B'.
 If, $W \times Z + Y \div X$, then how is X related to Z?

Ans ☒ 1. Son
☒ 2. Husband
☒ 3. Daughter
☒ 4. Wife

Question ID : 816161537
 Status : Answered
 Chosen Option : 2

- Q.18 एक लिजी टैक्सी कंपनी, तय की गई दूरी के आधार पर प्रति किलोमीटर के हिसाब से शुल्क लेने के साथ ही एक तय शुल्क भी वसूल करती है। 24 किलोमीटर के सफर के लिए ₹368 और 32 किलोमीटर के सफर के लिए ₹464 का भुगतान कंपनी को किया गया। तो एक व्यक्ति को 15 किलोमीटर के सफर के लिए कितना भुगतान करना होगा?

Ans ☒ 1. ₹290
☒ 2. ₹260
☒ 3. ₹280
☒ 4. ₹180

Question ID : 816161545
 Status : Not Attempted and Marked For Review
 Chosen Option : --

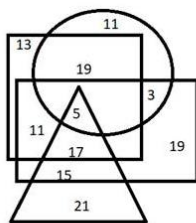
- Q.19 Four words have been given, out of which three are alike in some manner, while one is different. Select the odd word.

Ans ☒ 1. Scream
☒ 2. Roar
☒ 3. Mumble
☒ 4. Shout

Question ID : 816161531
 Status : Answered
 Chosen Option : 3

Q.20 The given Venn diagram represents results of a class of students:

The triangle represents students who scored 85% and above in Maths, the circle represents students who scored 85% and above in English, the rectangle represents students who scored 85% and above in Science, and the square represents students who scored 85% and above in Social Sciences. The numbers given in the diagram represent the number of students in that particular category.



How many students scored 85% and above in all the subjects?

- Ans**
- ☒ 1. 15
 - ☒ 2. 5
 - ☒ 3. 11
 - ☒ 4. 17

Question ID : 816161552

Status : Answered

Chosen Option : 2

Q.21 दिए गए पैटर्न का ध्यानपूर्वक अध्ययन करें और उस संख्या का चयन करें, जो प्रश्न चिह्न (?) की जगह पर आ सकती है।

29	71	67
8	11	14
4	7	?
3	6	3

- Ans**
- ☒ 1. 6
 - ☒ 2. 5
 - ☒ 3. 3
 - ☒ 4. 4

Question ID : 816161543

Status : Not Attempted and Marked For Review

Chosen Option : --

Q.22

- Ans**
- ☒ 1.
 - ☒ 2.
 - ☒ 3.
 - ☒ 4.

Question ID : 816161534

Status : Answered

Chosen Option : 4

Q.23

- Ans
- ☒ 1.
 - ☒ 2.
 - ☒ 3.
 - ☒ 4.

Question ID : **816161547**
Status : **Answered**
Chosen Option : **3**

Q.24

- Ans
- ☒ 1.
 - ☒ 2.
 - ☒ 3.
 - ☒ 4.

Question ID : **816161539**
Status : **Answered**
Chosen Option : **2**

Q.25

- Ans
- ☒ 1.
 - ☒ 2.
 - ☒ 3.
 - ☒ 4.

Question ID : **816161550**
Status : **Answered**
Chosen Option : **1**

Section : **General Awareness**

Q.1 Who was appointed as brand ambassador of Visa - the payment technology company in 2019?

- Ans
- ☒ 1. Dutee Chand
 - ☒ 2. P.V. Sindhu
 - ☒ 3. Sania Mirza
 - ☒ 4. PT Usha

Question ID : **816161575**
Status : **Answered**
Chosen Option : **2**

Q.2 नृत्य शैली और उससे संबंधित राज्य के सही युग्म का चयन करें।

- Ans
- ☒ 1. कालबेलिया - हिमाचल प्रदेश
 - ☒ 2. पढ़यनि - केरल
 - ☒ 3. दलखाई - कर्नाटक
 - ☒ 4. थांग टा - बिहार

Question ID : 816161554

Status : Not Answered

Chosen Option : --

Q.3 प्रवासी भारतीय दिवस कब मनाया जाता है?

- Ans
- ☒ 1. 1 जनवरी
 - ☒ 2. 8 जनवरी
 - ☒ 3. 9 जनवरी
 - ☒ 4. 2 जनवरी

Question ID : 816161576

Status : Answered

Chosen Option : 3

Q.4 The power of a lens is -2.0 D. Here 'D' stands for:

- Ans
- ☒ 1. dioptre
 - ☒ 2. degree
 - ☒ 3. distance
 - ☒ 4. dilation

Question ID : 816161561

Status : Answered

Chosen Option : 1

Q.5 धर्मराज रथ स्मारक कहाँ स्थित है?

- Ans
- ☒ 1. खजुराहो में
 - ☒ 2. कांचीपुरम में
 - ☒ 3. सुचिंद्रम में
 - ☒ 4. महाबलीपुरम में

Question ID : 816161566

Status : Not Answered

Chosen Option : --

Q.6 निम्नलिखित मठों में से कौन सा मठ सिक्किम में स्थित है?

- Ans ☒ 1. रुमटेक
☐ 2. क्ये
☐ 3. हेमिस
☐ 4. ताबो

Question ID : 816161553
Status : Answered
Chosen Option : 2

Q.7 Which among the following is NOT an insulator?

- Ans ☐ 1. Ebonite
☒ 2. Mercury
☐ 3. Glass
☐ 4. Dry Paper

Question ID : 816161560
Status : Answered
Chosen Option : 2

Q.8 Which Indian male cricketer won the BCCI CK Nayudu Lifetime Achievement Award for the year 2019?

- Ans ☐ 1. Rahul Dravid
☐ 2. Sunil Gavaskar
☒ 3. K Srikanth
☐ 4. Sachin Tendulkar

Question ID : 816161573
Status : Answered
Chosen Option : 1

Q.9 सितंबर 1920 के भारतीय राष्ट्रीय कांग्रेस अधिवेशन का आयोजन _____ में किया गया था ।

- Ans ☐ 1. मद्रास (अब चेन्नई)
☐ 2. लखनऊ
☐ 3. नागपुर
☒ 4. कलकत्ता (अब कोलकाता)

Question ID : 816161568
Status : Answered
Chosen Option : 2

Q.10 ATM में 'T' का क्या अर्थ है?

- Ans
- ☒ 1. टेलर/गणक (Teller)
 - ☐ 2. ट्रांसफर/अंतर (Transfer)
 - ☐ 3. ट्रांज़ैक्शन/लेन-देन (Transaction)
 - ☐ 4. ट्रंक/लौह पेटिका (Trunk)

Question ID : 816161555

Status : Answered

Chosen Option : 1

Q.11 दिसंबर 2019 में, हिमाचल प्रदेश में रोहतांग गलियारे (दर्रे) का नाम बदलकर क्या रखा गया?

- Ans
- ☐ 1. बोस सुरंग
 - ☐ 2. मुखर्जी सुरंग
 - ☒ 3. अटल सुरंग
 - ☐ 4. स्वराज सुरंग

Question ID : 816161577

Status : Answered

Chosen Option : 3

Q.12 भारत के संविधान में पहला संशोधन किस वर्ष में किया गया था?

- Ans
- ☐ 1. 1950
 - ☐ 2. 1953
 - ☐ 3. 1952
 - ☒ 4. 1951

Question ID : 816161572

Status : Answered

Chosen Option : 4

Q.13 निम्नलिखित नदियों में से कौन सी नदी जबलपुर के निकट धुआँधार जल-प्रपात का निर्माण करती है?

- Ans
- ☐ 1. तापी
 - ☐ 2. तुंगभद्रा
 - ☐ 3. लूणी
 - ☒ 4. नर्मदा

Question ID : 816161563

Status : Answered

Chosen Option : 4

Q.14 प्रधानमंत्री जीवन ज्योति बीमा योजना बीमाकर्ता को _____ का सुरक्षा बीमा रक्षण (कवर) प्रदान करती है।

- Ans
- ☒ 1. ₹2 लाख
 - ☐ 2. ₹4 लाख
 - ☐ 3. ₹5 लाख
 - ☐ 4. ₹8 लाख

Question ID : 816161556

Status : Not Answered

Chosen Option : --

Q.15 The scientific study of a cell is called:

- Ans
- ☐ 1. taxonomy
 - ☐ 2. physiology
 - ☐ 3. histology
 - ☒ 4. cytology

Question ID : 816161558

Status : Answered

Chosen Option : 4

Q.16 वेदांगों के संदर्भ में, निम्नलिखित शब्दों में से कौन सा शब्द 'अनुष्ठान' को दर्शाता है?

- Ans
- ☐ 1. व्याकरण
 - ☐ 2. शिक्षा
 - ☒ 3. कल्प
 - ☐ 4. छंद

Question ID : 816161565

Status : Not Answered

Chosen Option : --

Q.17 The Pritzker prize is an international award given to recognise contribution in the field of _____.

- Ans
- ☐ 1. medicine
 - ☐ 2. mathematics
 - ☐ 3. literature
 - ☒ 4. architecture

Question ID : 816161569

Status : Answered

Chosen Option : 2

Q.18 निम्नलिखित युग्मों में से कौन सा युग्म पहाड़ी दरों के संदर्भ में सही है?

- Ans
- ☒ 1. रोहतांग - सिक्किम
 - ☒ 2. लिपुलेख - उत्तराखंड
 - ☒ 3. बोमडिला - हिमाचल प्रदेश
 - ☒ 4. नाथूला - अरुणाचल प्रदेश

Question ID : 816161564

Status : Answered

Chosen Option : 3

Q.19 Who is the author of the book 'Wise and Otherwise: A Salute to Life'?

- Ans
- ☒ 1. Amrita Pritam
 - ☒ 2. Sudha Murthy
 - ☒ 3. Kiran Desai
 - ☒ 4. Zoya Hasan

Question ID : 816161570

Status : Answered

Chosen Option : 2

Q.20 Which among the following is a cation?

- Ans
- ☒ 1. Ammonium
 - ☒ 2. Iodide
 - ☒ 3. Chloride
 - ☒ 4. Fluoride

Question ID : 816161557

Status : Not Answered

Chosen Option : --

Q.21 लिण्डर पेस के पिता किस खेल के लिए भारतीय राष्ट्रीय टीम के सदस्य रहे हैं?

- Ans
- ☒ 1. हॉकी
 - ☒ 2. टेनिस
 - ☒ 3. बैडमिंटन
 - ☒ 4. बास्केटबॉल

Question ID : 816161574

Status : Answered

Chosen Option : 1

Q.22 भारत के संविधान के निम्नलिखित अनुच्छेदों में से कौन सा अनुच्छेद धार्मिक स्वतंत्रता के अधिकार की गारंटी देता है?

- Ans
- ☒ 1. अनुच्छेद 23-24
 - ☒ 2. अनुच्छेद 14-18
 - ☒ 3. अनुच्छेद 25-28
 - ☒ 4. अनुच्छेद 19-22

Question ID : 816161571

Status : Answered

Chosen Option : 3

Q.23 निम्नलिखित में से कौन सा राज्य बांग्लादेश के साथ अपनी सीमा साझा नहीं करता है?

- Ans
- ☒ 1. त्रिपुरा
 - ☒ 2. मेघालय
 - ☒ 3. मणिपुर
 - ☒ 4. असम

Question ID : 816161562

Status : Answered

Chosen Option : 3

Q.24 शिवाजी महाराज के शासन-काल में मंत्रिपरिषद् को किस नाम से जाना जाता था?

- Ans
- ☒ 1. अष्ट दिग्गज
 - ☒ 2. अष्ट प्रधान
 - ☒ 3. अग्रहारम
 - ☒ 4. नवरत्न

Question ID : 816161567

Status : Not Answered

Chosen Option : --

Q.25 Which among the following has its refractive index closest to that of crown glass?

- Ans
- ☒ 1. Sapphire
 - ☒ 2. Diamond
 - ☒ 3. Canada balsam
 - ☒ 4. Ruby

Question ID : 816161559

Status : Not Answered

Chosen Option : --

Section : Quantitative Aptitude

Q.1

- Ans
- ☒ 1.
 - ☒ 2.
 - ☒ 3.
 - ☒ 4.

Question ID : **816161593**
Status : **Answered**
Chosen Option : **3**

Q.2

- Ans
- ☒ 1.
 - ☒ 2.
 - ☒ 3.
 - ☒ 4.

Question ID : **816161587**
Status : **Answered**
Chosen Option : **4**

Q.3

- Ans
- ☒ 1.
 - ☒ 2.
 - ☒ 3.
 - ☒ 4.

Question ID : **816161581**
Status : **Answered**
Chosen Option : **3**

Q.4

- Ans
- ☒ 1.
 - ☒ 2.
 - ☒ 3.
 - ☒ 4.

Question ID : **816161579**
Status : **Answered**
Chosen Option : **2**

Q.5

- Ans
- ☒ 1.
 - ☒ 2.
 - ☒ 3.
 - ☒ 4.

Question ID : **816161601**
Status : **Answered**
Chosen Option : **3**

Q.6

- Ans
- ☒ 1.
 - ☒ 2.
 - ☒ 3.
 - ☒ 4.

Question ID : **816161598**
Status : **Answered**
Chosen Option : **3**

Q.7

- Ans
- ☒ 1.
 - ☒ 2.
 - ☒ 3.
 - ☒ 4.

Question ID : **816161594**
Status : **Answered**
Chosen Option : **2**

Q.8

- Ans
- ☒ 1.
 - ☒ 2.
 - ☒ 3.
 - ☒ 4.

Question ID : **816161600**
Status : **Answered**
Chosen Option : **2**

Q.9

- Ans
- ☒ 1.
 - ☒ 2.
 - ☒ 3.
 - ☒ 4.

Question ID : **816161602**
Status : **Answered**
Chosen Option : **2**

Q.10

- Ans
- ☒ 1.
 - ☒ 2.
 - ☒ 3.
 - ☒ 4.

Question ID : **816161590**
Status : **Answered**
Chosen Option : **4**

Q.11

- Ans
- ☒ 1.
 - ☒ 2.
 - ☒ 3.
 - ☒ 4.

Question ID : **816161591**
Status : **Answered**
Chosen Option : **1**

Q.12

- Ans
- ☒ 1.
 - ☒ 2.
 - ☒ 3.
 - ☒ 4.

Question ID : **816161597**
Status : **Answered**
Chosen Option : **4**

Q.13

- Ans
- ☒ 1.
 - ☒ 2.
 - ☒ 3.
 - ☒ 4.

Question ID : **816161583**
Status : **Not Answered**
Chosen Option : --

Q.14

- Ans
- ☒ 1.
 - ☒ 2.
 - ☒ 3.
 - ☒ 4.

Question ID : **816161592**
Status : **Answered**
Chosen Option : **2**

Q.15

- Ans
- ☒ 1.
 - ☒ 2.
 - ☒ 3.
 - ☒ 4.

Question ID : **816161580**
Status : **Answered**
Chosen Option : **2**

Q.16

- Ans
- ☒ 1.
 - ☒ 2.
 - ☒ 3.
 - ☒ 4.

Question ID : **816161596**
Status : **Answered**
Chosen Option : **1**

Q.17

- Ans
- ☒ 1.
 - ☒ 2.
 - ☒ 3.
 - ☒ 4.

Question ID : **816161589**
Status : **Answered**
Chosen Option : **4**

Q.18

- Ans
- ☒ 1.
 - ☒ 2.
 - ☒ 3.
 - ☒ 4.

Question ID : **816161585**
Status : **Answered**
Chosen Option : **4**

Q.19

- Ans
- ☒ 1.
 - ☒ 2.
 - ☒ 3.
 - ☒ 4.

Question ID : **816161586**
Status : **Answered**
Chosen Option : **3**

Q.20

- Ans
- ☒ 1.
 - ☒ 2.
 - ☒ 3.
 - ☒ 4.

Question ID : **816161578**
Status : **Answered**
Chosen Option : **1**

Q.21

- Ans
- ☒ 1.
 - ☒ 2.
 - ☒ 3.
 - ☒ 4.

Question ID : **816161599**
Status : **Answered**
Chosen Option : **3**

Q.22

- Ans
- ☒ 1.
 - ☒ 2.
 - ☒ 3.
 - ☒ 4.

Question ID : **816161595**
Status : **Answered**
Chosen Option : **3**

Q.23

- Ans
- ☒ 1.
 - ☒ 2.
 - ☒ 3.
 - ☒ 4.

Question ID : **816161584**
Status : **Answered**
Chosen Option : **3**

Q.24

- Ans
- ☒ 1.
 - ☒ 2.
 - ☒ 3.
 - ☒ 4.

Question ID : **816161582**
Status : **Answered**
Chosen Option : **1**

Q.25

- Ans
- ☒ 1.
 - ☐ 2.
 - ☐ 3.
 - ☐ 4.

Question ID : **816161588**
Status : **Answered**
Chosen Option : **2**

Section : **English Comprehension**

Q.1 Select the most appropriate synonym of the given word.

Sacred

- Ans
- ☒ 1. Holy
 - ☐ 2. Valued
 - ☐ 3. Scarce
 - ☐ 4. Precious

Question ID : **816161617**
Status : **Answered**
Chosen Option : **1**

Q.2 Select the INCORRECTLY spelt word.

- Ans
- ☐ 1. Alien
 - ☒ 2. Accross
 - ☐ 3. Awful
 - ☐ 4. Already

Question ID : **816161625**
Status : **Answered**
Chosen Option : **2**

Q.3 Select the most appropriate meaning of the given idiom.

Look down upon

- Ans
- ☒ 1. To consider someone inferior
 - ☐ 2. To be full of guilt
 - ☐ 3. To look for something underground
 - ☐ 4. To look down from a height

Question ID : **816161621**
Status : **Answered**
Chosen Option : **4**

Q.4 Select the correct passive form of the given sentence.

The children sang the National Anthem with great enthusiasm.

- Ans
- ☒ 1. The National Anthem is sung with great enthusiasm by the children.
 - ☒ 2. The National Anthem has been sung with great enthusiasm by the children.
 - ☒ 3. The National Anthem was being sung with great enthusiasm by the children.
 - ☒ 4. The National Anthem was sung with great enthusiasm by the children.

Question ID : 816161605

Status : Answered

Chosen Option : 1

Q.5 Select the option that can be used as a one word substitute for the given group of words.

A game in which neither party wins

- Ans
- ☒ 1. Quit
 - ☒ 2. Draw
 - ☒ 3. Flop
 - ☒ 4. Equal

Question ID : 816161623

Status : Answered

Chosen Option : 2

Q.6 Select the most appropriate ANTONYM of the given word.

Native

- Ans
- ☒ 1. Rural
 - ☒ 2. Rustic
 - ☒ 3. Foreign
 - ☒ 4. Urban

Question ID : 816161619

Status : Answered

Chosen Option : 3

Comprehension:

In the following passage some words have been deleted. Fill in the blanks with the help of the alternatives given. Select the most appropriate option for each blank.

Advertising is the promotion of goods and services. It provides an (1)_____ to the manufacturing companies to sell their (2)_____ better than their competitors. Every time we switch (3)_____ the television we find some product or the other (4)_____ pushed towards us. It cannot be denied that the (5)_____ behind commercial advertising is to increase sales and earn more profit.

SubQuestion No : 7

Q.7 Select the most appropriate option to fill in blank number (1).

- Ans  1. opportunity
 2. excuse
 3. occasion
 4. event

Question ID : 816161610

Status : Answered

Chosen Option : 1





Comprehension:

In the following passage some words have been deleted. Fill in the blanks with the help of the alternatives given. Select the most appropriate option for each blank.

Advertising is the promotion of goods and services. It provides an (1)_____ to the manufacturing companies to sell their (2)_____ better than their competitors. Every time we switch (3)_____ the television we find some product or the other (4)_____ pushed towards us. It cannot be denied that the (5)_____ behind commercial advertising is to increase sales and earn more profit.

SubQuestion No : 8

Q.8 Select the most appropriate option to fill in blank number (2).

- Ans  1. creation
 2. products
 3. compounds
 4. outcome

Question ID : 816161611

Status : Answered

Chosen Option : 2

Comprehension:

In the following passage some words have been deleted. Fill in the blanks with the help of the alternatives given. Select the most appropriate option for each blank.

Advertising is the promotion of goods and services. It provides an (1)_____ to the manufacturing companies to sell their (2)_____ better than their competitors. Every time we switch (3)_____ the television we find some product or the other (4)_____ pushed towards us. It cannot be denied that the (5)_____ behind commercial advertising is to increase sales and earn more profit.

SubQuestion No : 9

Q.9 Select the most appropriate option to fill in blank number (3).

- Ans
- ☒ 1. in
 - ☒ 2. on
 - ☒ 3. off
 - ☒ 4. at

Question ID : 816161612

Status : Answered

Chosen Option : 2

Comprehension:

In the following passage some words have been deleted. Fill in the blanks with the help of the alternatives given. Select the most appropriate option for each blank.

Advertising is the promotion of goods and services. It provides an (1)_____ to the manufacturing companies to sell their (2)_____ better than their competitors. Every time we switch (3)_____ the television we find some product or the other (4)_____ pushed towards us. It cannot be denied that the (5)_____ behind commercial advertising is to increase sales and earn more profit.

SubQuestion No : 10

Q.10 Select the most appropriate option to fill in blank number (4).

- Ans
- ☒ 1. be
 - ☒ 2. being
 - ☒ 3. been
 - ☒ 4. to be

Question ID : 816161613

Status : Answered

Chosen Option : 1

Comprehension:

In the following passage some words have been deleted. Fill in the blanks with the help of the alternatives given. Select the most appropriate option for each blank.

Advertising is the promotion of goods and services. It provides an (1)_____ to the manufacturing companies to sell their (2)_____ better than their competitors. Every time we switch (3)_____ the television we find some product or the other (4)_____ pushed towards us. It cannot be denied that the (5)_____ behind commercial advertising is to increase sales and earn more profit.

SubQuestion No : 11

Q.11 Select the most appropriate option to fill in blank number (5).

- Ans
- ☒ 1. influence
 - ☒ 2. feeling
 - ☒ 3. motive
 - ☒ 4. emotion

Question ID : 816161614

Status : Answered

Chosen Option : 3

Q.12 Given below are four jumbled sentences. Out of the given options pick the one that gives their correct order.

- A. When a calf is born under water, the mother must get it to the surface before it drowns.
- B. The young ones remain with their parents for up to fifteen years or more.
- C. Often another whale assists the mother nudging the baby gently and encouraging it to swim.
- D. Whales have highly developed maternal instincts.

- Ans
- ☒ 1. DBCA
 - ☒ 2. BCAD
 - ☒ 3. CBDA
 - ☒ 4. DACB

Question ID : 816161616

Status : Answered

Chosen Option : 4

Q.13 Fill in the blank with the most appropriate word.

She was loved by her employees for her _____.

- Ans
- ☒ 1. malevolence
 - ☒ 2. condolence
 - ☒ 3. benevolence
 - ☒ 4. insolence

Question ID : 816161628

Status : Answered

Chosen Option : 3

Q.14 Identify the segment in the sentence which contains the grammatical error. If there is no error, select 'No error'

He married with a rich heiress last year.

- Ans
- ☒ 1. last year
 - ☒ 2. with a rich heiress
 - ☒ 3. He married
 - ☒ 4. No error

Question ID : 816161603

Status : Answered

Chosen Option : 2

Q.15 Select the most appropriate meaning of the given idiom.

Keep abreast of

- Ans
- ☒ 1. Keep up the good work
 - ☒ 2. Keep a watch on
 - ☒ 3. Keep ahead of
 - ☒ 4. Keep oneself updated

Question ID : 816161622

Status : Answered

Chosen Option : 1

Q.16 Select the most appropriate option to substitute the underlined segment in the given sentence. If there is no need to substitute it, select No improvement.

Mother was watching a movie when the lights were going off.

- Ans
- ☒ 1. have gone off
 - ☒ 2. No improvement
 - ☒ 3. going off
 - ☒ 4. went off

Question ID : 816161607

Status : Answered

Chosen Option : 4

Q.17 Given below are four jumbled sentences. Out of the given options pick the one that gives their correct order.

- A. While he was doing this, he missed seeing a velvet purse full of gold coins lying on the road.
- B. Ramesh always worried about how he would become sick and weak in old age.
- C. To try how he would cope with blindness, Ramesh started walking with his eyes closed.
- D. He feared that he might even lose his sight and go blind.

- Ans
- ☒ 1. CABD
 - ☒ 2. BCAD
 - ☒ 3. DBAC
 - ☒ 4. BDCA

Question ID : 816161615
Status : Answered
Chosen Option : 4

Q.18 Select the most appropriate synonym of the given word.
Weary

- Ans
- ☒ 1. Touchy
 - ☒ 2. Lively
 - ☒ 3. Restless
 - ☒ 4. Exhausted

Question ID : 816161618
Status : Answered
Chosen Option : 3

Q.19 Select the most appropriate ANTONYM of the given word.

Repulsive

- Ans
- ☒ 1. Revolting
 - ☒ 2. Hideous
 - ☒ 3. Brilliant
 - ☒ 4. Attractive

Question ID : 816161620
Status : Answered
Chosen Option : 4

Q.20 Fill in the blank with the most appropriate word.

The minister gave an _____ that strict action would be taken against the culprits.

- Ans
- ☒ 1. ambition
 - ☒ 2. assurance
 - ☒ 3. insurance
 - ☒ 4. admission

Question ID : 816161627
Status : Answered
Chosen Option : 2

Q.21 Select the most appropriate option to substitute the underlined segment in the given sentence. If there is no need to substitute it, select No improvement.

Scarcely had the passengers boarded the plane when the captain welcomed them.

- Ans
- ☒ 1. that the captain welcomed them
 - ☒ 2. when the captain had welcomed them
 - ☒ 3. than the captain welcomes them
 - ☒ 4. No improvement

Question ID : 816161608
Status : Answered
Chosen Option : 1

Q.22 Identify the segment in the sentence which contains the grammatical error. If there is no error, select 'No error'

The famous author and actor are being honoured at a function today

- Ans
- ☒ 1. are being honoured
 - ☒ 2. The famous author and actor
 - ☒ 3. No error
 - ☒ 4. at a function today

Question ID : 816161604
Status : Answered
Chosen Option : 1

Q.23 Select the option that can be used as a one word substitute for the given group of words

That which cannot be satisfied

- Ans
- ☒ 1. Insane
 - ☒ 2. Ingenuous
 - ☒ 3. Inapt
 - ☒ 4. Insatiable

Question ID : 816161624
Status : Answered
Chosen Option : 4

Q.24 Select the correct indirect form of the given sentence.

The traveller said to a passerby, "Can you help me find my way, please?"

- Ans
- ☒ 1. The traveller requested to the passerby if he can help him find his way.
 - ☒ 2. The traveller asked the passerby that he can kindly help him find his way.
 - ☒ 3. The traveller asked the passerby if he could kindly help him find his way.
 - ☒ 4. The traveller asked the passerby could you kindly help me find my way?

Question ID : 816161606
Status : Answered
Chosen Option : 1

Q.25 Select the INCORRECTLY spelt word.

Ans  1. Guarranty

 2. Guardian

 3. Guidance

 4. Guilty

Question ID : **816161626**

Status : **Answered**

Chosen Option : **1**

GovtJobsAlert.In