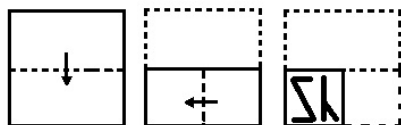


## Combined Graduate Level Examination 2020 Tier-I

Roll Number	
Candidate Name	
Venue Name	Arwachin Bharti Bhawan Sr.Sec School
Exam Date	18/08/2021
Exam Time	3:00 PM - 4:00 PM
Subject	Combined Graduate Level Examination 2020 Tier 1

### Section : General Intelligence and Reasoning

**Q.1** The sequence of folding a piece of paper and the manner in which the folded paper has been cut is shown in the following figures. How would this paper look when unfolded?



Ans

✓ 1.



✗ 2.



✗ 3.



✗ 4.



Question ID : 81616112629

Status : Answered

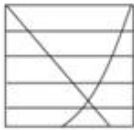
Chosen Option : 1

Q.2 Select the option in which the given figure is embedded (rotation is NOT allowed).

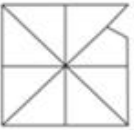


Ans

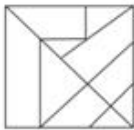
☒ 1.



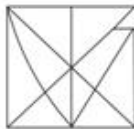
☒ 2.



☒ 3.



☒ 4.



Question ID : 81616112627

Status : Answered

Chosen Option : 2

Q.3 Four letter-clusters have been given, out of which three are alike in some manner and one is different. Select the letter-cluster that is different.

Ans ☒ 1. BDYF

☒ 2. XZTB

☒ 3. TVQX

☒ 4. NPKR

Question ID : 81616113315

Status : Not Answered

Chosen Option : --

Q.4 Four number-pairs have been given, out of which three are alike in some manner and one is different. Select the number-pair that is different. (Any operation on digits is not allowed)

Ans ☒ 1. 326 : 107

☒ 2. 239 : 78

☒ 3. 308 : 101

☒ 4. 197 : 66

Question ID : 81616112922

Status : Answered

Chosen Option : 4

**Q.5** Select the correct option that indicates the arrangement of the given words in the order in which they appear in an English dictionary.

1. Gravity
2. Glycogen
3. Gestation
4. Glycerine
5. Gesture

**Ans** ✓ 1. 3, 5, 4, 2, 1

✗ 2. 3, 2, 5, 1, 4

✗ 3. 3, 1, 2, 4, 5

✗ 4. 3, 5, 2, 4, 1

Question ID : **81616113314**

Status : **Answered**

Chosen Option : **1**

**Q.6** Select the letter from among the given options that can replace the question mark (?) in the following series.

H, Q, I, T, K, ?, N

**Ans** ✓ 1. Y

✗ 2. A

✗ 3. U

✗ 4. J

Question ID : **81616112614**

Status : **Answered**

Chosen Option : **1**

**Q.7** In a certain code language, 'VIRTUE' is written as 'DBZBNX'. How will 'OMINOUS' be written in that language?

**Ans** ✗ 1. HBUVHNA

✓ 2. HUBVHNA

✗ 3. IBUHABM

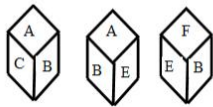
✗ 4. IUBHMBA

Question ID : **81616113117**

Status : **Not Answered**

Chosen Option : **--**

- Q.8** Three different positions of the same dice are shown, the faces of which are marked with the letters A, B, C, D, E and F. Select the letter that will be on the face opposite to the face having the letter 'D'.



- Ans** ☒ 1. B  
☒ 2. A  
☒ 3. F  
☒ 4. C

Question ID : **81616112929**  
 Status : **Answered**  
 Chosen Option : **1**

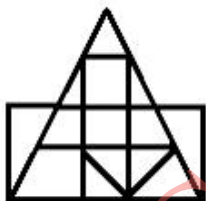
- Q.9** Select the option in which the words share the same relationship as that shared by the given pair of words.

Jharkhand : Ranchi

- Ans** ☒ 1. Sikkim : Itanagar  
☒ 2. Mizoram : Kohima  
☒ 3. Assam : Jorhat  
☒ 4. Meghalaya : Shillong

Question ID : **81616112611**  
 Status : **Answered**  
 Chosen Option : **4**

- Q.10** Find the number of triangles in the given figure.



- Ans** ☒ 1. 14  
☒ 2. 16  
☒ 3. 20  
☒ 4. 18

Question ID : **81616112928**  
 Status : **Not Answered**  
 Chosen Option : **--**

Q.11 Select the option in which the numbers are related in the same way as are the numbers of the following set.

(4, 10, 53)

- Ans ☒ 1. (8, 20, 103)  
☒ 2. (11, 31, 152)  
☒ 3. (5, 13, 62)  
☒ 4. (7, 19, 98)

Question ID : 81616112924

Status : Answered

Chosen Option : 1

Q.12 Select the number from among the given options that can replace the question mark (?) in the following series.

6, 6, 8, 24, 28, 140, ?

- Ans ☒ 1. 144  
☒ 2. 146  
☒ 3. 145  
☒ 4. 148

Question ID : 81616113324

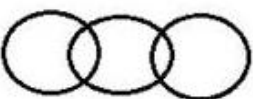


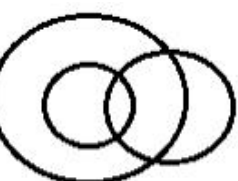
Status : Not Answered

Chosen Option : --

Q.13 Select the Venn diagram that best illustrates the relationship among the following classes.

Neptune, Planet, Moon

Ans

- ☒ 1. 
- ☒ 2. 
- ☒ 3. 
- ☒ 4. 

Question ID : 81616113135

Status : Answered

Chosen Option : 3

**Q.14** Select the option that is related to the third number in the same way as the second number is related to the first number and the sixth number is related to the fifth number.

16 : 8 :: 21 : ? :: 11 : 6

- Ans ☒ 1. 11  
☒ 2. 10  
☒ 3. 9  
☒ 4. 14

Question ID : 81616113123

Status : Not Answered

Chosen Option : --

**Q.15** Study the given pattern carefully and select the number that can replace the question mark (?) in it.

3 13 4  
 6 67 31  
 5 ? 20

- Ans ☒ 1. 40  
☒ 2. 45  
☒ 3. 50  
☒ 4. 55

Question ID : 81616113125

Status : Not Answered

Chosen Option : --

**Q.16** Read the given statements and conclusions carefully. Assuming that the information given in the statements is true, even if it appears to be at variance with commonly known facts, decide which of the given conclusions logically follow(s) from the statements.

**Statements:**

Some mats are carpets.  
 Some carpets are blankets.  
 No blanket is a quilt.

**Conclusions:**

I. No quilt is a carpet.  
 II. No blanket is a mat.  
 III. Some carpets are mats.

- Ans ☒ 1. Both conclusions I and III follow  
☒ 2. Only conclusion III follows  
☒ 3. Only conclusion II follows  
☒ 4. Only conclusion I follows

Question ID : 81616113121

Status : Answered

Chosen Option : 2

Q.17 Select the option that is related to the third word in the same way as the second word is related to the first word.

Circle : Arc :: Plant : ?

- Ans ☒ 1. Plasma  
☒ 2. Tree  
☒ 3. Chlorophyll  
☒ 4. Stem

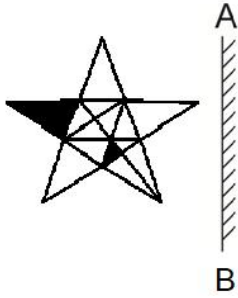
Question ID : 81616113317

Status : Answered

Chosen Option : 2

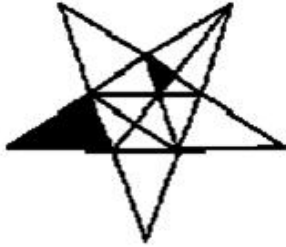
GovtJobsAlert.In

**Q.18** Select the correct mirror image of the given figure when the mirror is placed at 'AB' as shown.



Ans

✗ 1.



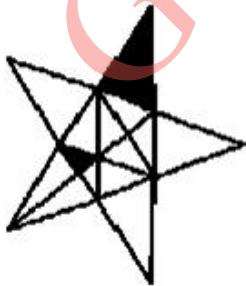
✗ 2.



✓ 3.



✗ 4.



Question ID : 81616112628

Status : Answered

Chosen Option : 3



Q.19 Select the correct combination of mathematical signs that can sequentially replace the \* signs and balance the equation.

$$483 * 23 * 93 * 16 * 4 * 50$$

- Ans
- ☒ 1.  $\div, +, -, =, \times$
  - ☒ 2.  $\div, +, -, \times, =$
  - ☒ 3.  $+, \div, -, \times, =$
  - ☒ 4.  $\div, -, +, \times, =$

Question ID : 81616112925

Status : Not Answered

Chosen Option : --

Q.20 The present age of Ramesh is 7 years more than the present age of his wife Sangeeta. 6 years hence, the age of Ramesh will be three times that of his son Mayank. If the present age of Mayank is 10 years, then what is the present age of Sangeeta?

- Ans
- ☒ 1. 48 years
  - ☒ 2. 35 years
  - ☒ 3. 42 years
  - ☒ 4. 30 years

Question ID : 81616112623

Status : Answered

Chosen Option : 2

Q.21 Select the letter-cluster from among the given options that can replace the question mark (?) in the following series.

CUH, HQK, MMN, RIQ, ?

- Ans
- ☒ 1. UDS
  - ☒ 2. XFS
  - ☒ 3. WET
  - ☒ 4. VGT

Question ID : 81616112606

Status : Answered

Chosen Option : 3

Q.22 In a certain code language, 'REFUSAL' is coded as '2101239103' and 'POETRY' is coded as '1067927'. How will 'PROFIT' be coded in that language?

- Ans
- ☒ 1. 12186792
  - ☒ 2. 81217629
  - ☒ 3. 18216972
  - ☒ 4. 21671829

Question ID : 81616112916

Status : Not Answered

Chosen Option : --

**Q.23** Four words have been given, out of which three are alike in some manner and one is different. Select the word that is different.

- Ans ☒ 1. Zeal  
☒ 2. Vision  
☒ 3. Fury  
☒ 4. Devotion

Question ID : 81616112912

Status : Not Answered

Chosen Option : --

**Q.24** Select the figure from among the given options that can replace the question mark (?) in the following series.



Ans

- ☒ 1.
- ☒ 2.
- ☒ 3.
- ☒ 4.

Question ID : 81616113331

Status : Not Answered

Chosen Option : --

**Q.25** Rani is the sister of Piyush and the daughter of Kamal. Kamal is the son of Gaurav and the brother of Aryan. Aryan is the father of Rajneesh. How is Aryan related to Piyush?

- Ans ☒ 1. Brother  
☒ 2. Father  
☒ 3. Paternal Grandfather  
☒ 4. Paternal Uncle

Question ID : 81616112615

Status : Not Answered

Chosen Option : --

Q.1 In which of the following years was the Indian Independence Act passed by the British Parliament?

- Ans
- ☒ 1. 1945
  - ☒ 2. 1947
  - ☒ 3. 1942
  - ☒ 4. 1946

Question ID : 81616113148

Status : Answered

Chosen Option : 4

Q.2 The total membership of the Constituent Assembly was 389, of which \_\_\_\_\_ were representatives of princely states.

- Ans
- ☒ 1. 84
  - ☒ 2. 109
  - ☒ 3. 93
  - ☒ 4. 102

Question ID : 81616112650

Status : Not Answered

Chosen Option : --

Q.3 Who among the following became the co-chair of 17th ASEAN-India Summit in November 2020?

- Ans
- ☒ 1. The Prime Minister of India
  - ☒ 2. The Chief Justice of India
  - ☒ 3. The Speaker of the Lok Sabha
  - ☒ 4. The President of India

Question ID : 81616112654

Status : Answered

Chosen Option : 1

Q.4 Which of the following states' tourism ministry announced the launch of India's first Labour Movement Museum in January 2021?

- Ans
- ☒ 1. West Bengal
  - ☒ 2. Odisha
  - ☒ 3. Kerala
  - ☒ 4. Karnataka

Question ID : 81616113362

Status : Answered

Chosen Option : 2

Q.5 Which of the following is a coarse grained igneous rock that contains quarts and feldspar?

- Ans ☒ 1. Granite  
☐ 2. Basalt  
☐ 3. Andesite  
☐ 4. Marble

Question ID : 81616113349  
Status : Answered  
Chosen Option : 2

Q.6 \_\_\_\_\_ is the pattern of veins in the blade of a leaf.

- Ans ☐ 1. Cytology  
☐ 2. Anthology  
☐ 3. Morphology  
☒ 4. Venation

Question ID : 81616113143  
Status : Answered  
Chosen Option : 4

Q.7 Which of the following acids is used in the purification of gold and silver?

- Ans ☐ 1. Formic acid  
☒ 2. Nitric acid  
☐ 3. Maleic acid  
☐ 4. Acetic acid

Question ID : 81616113140  
Status : Answered  
Chosen Option : 2

Q.8 Which of the following states inaugurated its first bird festival 'Kalrav' in January 2021?

- Ans ☐ 1. Tripura  
☐ 2. Odisha  
☐ 3. Assam  
☒ 4. Bihar

Question ID : 81616113136  
Status : Answered  
Chosen Option : 1

Q.9 What was the name of the women's regiment in the Indian National Army founded by Subhash Chandra Bose?

- Ans ☐ 1. Rani Ahalyabai Regiment  
☐ 2. Rani of Didda Regiment  
☒ 3. Rani of Jhansi Regiment  
☐ 4. Rani Padmawati Regiment

Question ID : 81616112645  
Status : Not Answered  
Chosen Option : --

Q.10 What was the name of the first artificial satellite launched by India in 1975?

- Ans
- ☒ 1. Sushruta
  - ☒ 2. Panini
  - ☒ 3. Charaka
  - ☒ 4. Aryabhata

Question ID : 81616112639  
Status : Answered  
Chosen Option : 4

Q.11 In which of the following states is the Kolleru Lake located?

- Ans
- ☒ 1. Tamil Nadu
  - ☒ 2. Kerala
  - ☒ 3. Madhya Pradesh
  - ☒ 4. Andhra Pradesh

Question ID : 81616112943  
Status : Answered  
Chosen Option : 2

Q.12 Who was appointed as the middle and long distance coach of the Indian athletics team in January 2021?

- Ans
- ☒ 1. Radhakrishnan Nair
  - ☒ 2. Adille Sumariwalla
  - ☒ 3. Nikolai Snesarev
  - ☒ 4. Amrish Kumar

Question ID : 81616113157  
Status : Not Answered  
Chosen Option : --

Q.13 In which of the following Indian states will you find the 'Kunchikal Falls'?

- Ans
- ☒ 1. Telangana
  - ☒ 2. Kerala
  - ☒ 3. Tamil Nadu
  - ☒ 4. Karnataka

Question ID : 81616112641  
Status : Not Answered  
Chosen Option : --

Q.14 SP Balasubramaniam was a \_\_\_\_\_ who was conferred with the Padma Vibhushan posthumously in January 2021.

- Ans ☒ 1. singer  
☐ 2. scientist  
☐ 3. archaeologist  
☐ 4. painter

Question ID : 81616113354  
Status : Answered  
Chosen Option : 4

Q.15 Who among the following Indian actors was honoured with the 'Best Actor' award at the Indo-German Film week held in Europe in 2020?

- Ans ☐ 1. Shah Rukh Khan  
☒ 2. Adil Hussain  
☐ 3. Salman Khan  
☐ 4. Sanjay Dutt

Question ID : 81616112648  
Status : Answered  
Chosen Option : 3

Q.16 When we cut an onion, the vegetable emits an odour and our eyes tear up. Which of the following compounds is responsible for the tears and odour resulting from freshly cut onions?

- Ans ☐ 1. Ascorbic acid  
☒ 2. Sulphuric acid  
☐ 3. Citric acid  
☐ 4. Acetic acid

Question ID : 81616113343  
Status : Answered  
Chosen Option : 2

Q.17 Makaravilakku is an annual festival held on Makar Sakranti in which of the following states?

- Ans ☐ 1. Tamil Nadu  
☐ 2. Odisha  
☐ 3. Karnataka  
☒ 4. Kerala

Question ID : 81616112935  
Status : Answered  
Chosen Option : 3

Q.18 According to Malthusian theory which of the following grows in geometric progression?

- Ans
- ☒ 1. Food supply
  - ☒ 2. Population
  - ☒ 3. Employment
  - ☒ 4. Poverty

Question ID : 81616112633  
Status : Answered  
Chosen Option : 2

Q.19 Who among the following was the first Finance Minister of the Independent India?

- Ans
- ☒ 1. RK Shanmukham Chetty
  - ☒ 2. CD Deshmukh
  - ☒ 3. Liaquat Ali Khan
  - ☒ 4. KC Neogy

Question ID : 81616112947  
Status : Answered  
Chosen Option : 1

Q.20 On which of the following days is National Disaster Response Force Raising Day celebrated annually?

- Ans
- ☒ 1. 23 October
  - ☒ 2. 19 January
  - ☒ 3. 21 September
  - ☒ 4. 6 March

Question ID : 81616113360  
Status : Not Answered  
Chosen Option : --

Q.21 Which of the following Articles of the Constitution of India defines for a separate secretarial staff for each House of the Parliament?

- Ans
- ☒ 1. Article 34
  - ☒ 2. Article 98
  - ☒ 3. Article 155
  - ☒ 4. Article 123

Question ID : 81616112952  
Status : Answered  
Chosen Option : 3

Q.22 Which of the following states launched the scheme 'Sujal - Drink from Tap Mission' that aims to provide quality drinking water directly from tap to all households in urban areas?

- Ans
- ☒ 1. Odisha
  - ☐ 2. West Bengal
  - ☐ 3. Uttar Pradesh
  - ☐ 4. Bihar

Question ID : 81616112940  
Status : Answered  
Chosen Option : 1

Q.23 Who has been re-appointed as the MD and CEO of the RBL Bank in January 2021 for three years?

- Ans
- ☐ 1. Deepak Ruiya
  - ☐ 2. Rajeev Arora
  - ☐ 3. Rajeev Ahuja
  - ☒ 4. Vishwavir Ahuja

Question ID : 81616112937  
Status : Not Answered  
Chosen Option : --

Q.24 Who among the following established the Rashtrakuta Kingdom?

- Ans
- ☒ 1. Dantidurga
  - ☐ 2. Krishna I
  - ☐ 3. Ashoka
  - ☐ 4. Amoghavarsha

Question ID : 81616113151  
Status : Answered  
Chosen Option : 4

Q.25 In which of the following countries was the headquarters of International Olympic Committee located as of February 2021?

- Ans
- ☐ 1. China
  - ☐ 2. The US
  - ☐ 3. Japan
  - ☒ 4. Switzerland

Question ID : 81616113358  
Status : Answered  
Chosen Option : 3

Section : Quantitative Aptitude



**Q.1** Study the table and answer the question.

The data given in the table shows the number of students studying in four different disciplines in 5 institutes.

Institutes	Arts	Science	Commerce	Computer Science
A	36	48	59	57
B	45	54	55	48
C	55	36	56	51
D	45	48	55	53
E	48	44	52	55

Number of students studying commerce in institute D is what percent of the total number of students of the 5 institutes?

- Ans
- ✓ 1. 5.5
  - ✗ 2. 5.3
  - ✗ 3. 27.7
  - ✗ 4. 20.1

Question ID : 81616112680

Status : Answered

Chosen Option : 1

**Q.2** In  $\triangle ABC$ , AB and AC are produced to points D and E respectively. If the bisectors of angle CBD and angle BCE meet at point O, such that  $\angle BOC = 63^\circ$ , then  $\angle A = ?$

- Ans
- ✗ 1.  $36^\circ$
  - ✗ 2.  $27^\circ$
  - ✓ 3.  $54^\circ$
  - ✗ 4.  $63^\circ$

Question ID : 81616113379

Status : Answered

Chosen Option : 3

**Q.3** Simplify the expression  $441 \div \left[ 270 \div \frac{3}{7} + \left( 17 \div \frac{1}{3} \right) - \left( 8\frac{1}{2} - \frac{5}{2} \right) \right]$

- Ans
- ✗ 1.  $\frac{39}{75}$
  - ✗ 2.  $\frac{29}{75}$
  - ✗ 3.  $\frac{19}{75}$
  - ✓ 4.  $\frac{49}{75}$

Question ID : 81616113364

Status : Not Attempted and Marked For Review

Chosen Option : --

**Q.4** Points A and B are on a circle with centre O. Point C is on the major arc AB. If  $\angle OAC = 35^\circ$  and  $\angle OBC = 45^\circ$ , then what is the measure (in degrees) of the angle subtended by the minor arc AB at the centre?

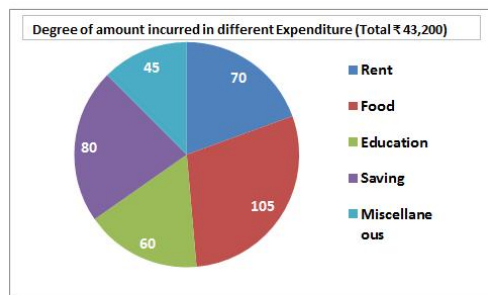
- Ans
- ☒ 1. 70
  - ☒ 2. 160
  - ☒ 3. 80
  - ☒ 4. 100

Question ID : 81616112670

Status : Not Answered

Chosen Option : --

**Q.5** The given Pie-Chart shows the degree wise breakup of expenditure of a family in a month. Total income of a family is ₹43,200.



Expenditure on food is what percent more than expenditure on rent?

- Ans
- ☒ 1.  $\frac{200}{3}\%$
  - ☒ 2.  $\frac{100}{3}\%$
  - ☒ 3. 50%
  - ☒ 4.  $\frac{50}{3}\%$

Question ID : 81616113687

Status : Not Answered

Chosen Option : --

**Q.6** Five men can complete a work in 20 days. Ten women can complete the same work in 15 days. Two men and six women started working together. After 5 days, three women left the work and a new man joined the work. The group continued working together till the end of the work. In how many days will they be able to do the remaining work?

- Ans
- ☒ 1.  $16\frac{2}{3}$
  - ☒ 2. 14
  - ☒ 3.  $18\frac{1}{3}$
  - ☒ 4. 19

Question ID : 81616112967

Status : Not Answered

Chosen Option : --

**Q.7** A T.V. is sold at 8% gain. Had it been sold for ₹2553 less; there would have been loss of 15%. To gain 18%, the selling price (in ₹) of T.V. would be:

- Ans** ☒ 1. 13098  
☒ 2. 15000  
☒ 3. 9102  
☒ 4. 11100

Question ID : **81616113368**  
 Status : **Not Answered**  
 Chosen Option : --

**Q.8** If a train runs with the speed of 72 km/h, it reaches its destination late by 15 minutes. However, if its speed is 90 km/h, it is late by only 5 minutes. The correct time to cover its journey in minutes is:

- Ans** ☒ 1. 45  
☒ 2. 40  
☒ 3. 35  
☒ 4. 32

Question ID : **81616113170**  
 Status : **Not Answered**  
 Chosen Option : --

**Q.9** What is the length (in cm) of the smallest altitude of the triangle whose sides are 5 cm, 12 cm and 13 cm? (correct to one decimal place)

- Ans** ☒ 1. 12.0  
☒ 2. 5.1  
☒ 3. 2.6  
☒ 4. 4.6

Question ID : **81616112666**  
 Status : **Answered**  
 Chosen Option : 2

**Q.10** In a right angled triangle ABC, the lengths of the sides containing the right angle are 5 cm and 12 cm respectively. A circle is inscribed in the triangle ABC. What is the radius of the circle (in cm)?

- Ans** ☒ 1. 2  
☒ 2. 2.8  
☒ 3. 2.5  
☒ 4. 3

Question ID : **81616112673**  
 Status : **Answered**  
 Chosen Option : 3

**Q.11** Alloy A contains metals x and y in the ratio 5 : 2 and alloy B contains these metals in the ratio 3 : 4. Alloy C is prepared by mixing A and B in the ratio 4 : 5. The percentage of y in alloy C is:

Ans

✗ 1.  $55\frac{5}{9}\%$

✗ 2.  $33\frac{4}{9}\%$

✓ 3.  $44\frac{4}{9}\%$

✗ 4.  $66\frac{4}{9}\%$

Question ID : 81616113167

Status : Answered

Chosen Option : 3

**Q.12** Keshav, Surjeet and Thomas started a business with investments in the ratio 2 : 3 : 4. The ratio of their period of investments is 5 : 6 : 9. Twenty percent of the profit was spent on rent and maintenance of the office. Remaining profit was distributed among themselves. If the difference in the shares of profit of Keshav and Surjeet is ₹7264, then how much is the total profit (in ₹)?

Ans

✓ 1. 72640

✗ 2. 46490

✗ 3. 51060

✗ 4. 58112

Question ID : 81616112963

Status : Not Answered

Chosen Option : --

**Q.13** If  $a + b + c = 0$ , then what is the value of  $\frac{(b+c)^2}{bc} + \frac{(c+a)^2}{ca} + \frac{(a+b)^2}{ab}$  ?

Ans

✗ 1. 1

✗ 2. -3

✗ 3. -1

✓ 4. 3

Question ID : 81616113173

Status : Not Answered

Chosen Option : --

Q.14 If  $x - \frac{1}{x} = \sqrt{77}$ , then one of the values of  $x^3 + \frac{1}{x^3}$  is :

- Ans
- ☒ 1.  $80\sqrt{77}$
  - ☒ 2.  $-702$
  - ☒ 3.  $77\sqrt{77}$
  - ☒ 4.  $3\sqrt{77}$

Question ID : 81616112972

Status : Not Answered

Chosen Option : --

Q.15 The average daily production of toys in a factory in the month of December is 512. If the average production during first 20 days is 515 and that of the last 13 days is 510, then what is the average of production on 19 and 20 December?

- Ans
- ☒ 1. 1058
  - ☒ 2. 513
  - ☒ 3. 529
  - ☒ 4. 512

Question ID : 81616112658

Status : Not Answered

Chosen Option : --

Q.16 A sum of money was lent in two parts in the ratio 4 : 5 for 4 years and 5 years respectively, both at the rate of 8% per annum simple interest. If the difference between the interests earned from the two parts is ₹ 4680, then what was the total sum lent (in ₹)?

- Ans
- ☒ 1. 58500
  - ☒ 2. 42120
  - ☒ 3. 46800
  - ☒ 4. 65000

Question ID : 81616112966

Status : Not Answered

Chosen Option : --

Q.17 A shopkeeper bought a machine for ₹4600 and spent ₹500 on its repairs and transport. He marked the machine at 8% above the overall cost price. If he sold the machine for ₹4681.80 after giving  $x\%$  discount, then the value of  $x$  is:

- Ans
- ☒ 1. 15
  - ☒ 2. 20
  - ☒ 3. 12
  - ☒ 4. 18

Question ID : 81616113164

Status : Not Answered

Chosen Option : --

**Q.18** In a circle with centre O, AB and CD are parallel chords on the opposite sides of a diameter. If AB = 12 cm, CD = 18 cm and the distance between the chords AB and CD is 15 cm, then find the radius of the circle (in cm).

- Ans
- ☒ 1.  $9\sqrt{13}$
  - ☒ 2. 9
  - ☒ 3.  $3\sqrt{13}$
  - ☒ 4. 12

Question ID : 81616112974

Status : Not Answered

Chosen Option : --

**Q.19** If  $\sin(A + B) = 1$  and  $\cos(A - B) = \frac{\sqrt{3}}{2}$ ,  $A + B \leq 90^\circ$  and  $A > B$ , then the value of

$\frac{5 \sin^2 B + 4 \tan^2 A}{2 \sin B \cos A}$  is :

- Ans
- ☒ 1.  $16\frac{1}{2}$
  - ☒ 2. 18
  - ☒ 3. 20
  - ☒ 4.  $26\frac{1}{2}$

Question ID : 81616113887

Status : Not Answered

Chosen Option : --

**Q.20** If  $\sin^6 \theta + \cos^6 \theta = \frac{1}{3}$ ,  $0^\circ < \theta < 90^\circ$ , then what is the value of  $\sin \theta \cos \theta$  ?

- Ans
- ☒ 1.  $\frac{\sqrt{2}}{3}$
  - ☒ 2.  $\frac{\sqrt{6}}{6}$
  - ☒ 3.  $\frac{\sqrt{2}}{\sqrt{3}}$
  - ☒ 4.  $\frac{2}{9}$

Question ID : 81616112977

Status : Not Answered

Chosen Option : --

Q.21 If  $a^3 - b^3 = 2349$  and  $(a - b) = 9$ , then  $(a + b)^2 - ab$  is equal to:

- Ans
- ☒ 1. 280
  - ☒ 2. 244
  - ☒ 3. 261
  - ☒ 4. 229

Question ID : 81616113374

Status : Answered

Chosen Option : 3

Q.22 If a number P is divisible by 2 and another number Q is divisible by 3, then which of the following is true?

- Ans
- ☒ 1. P+Q is divisible by 6
  - ☒ 2. P+Q is divisible by 5
  - ☒ 3. P×Q is divisible by 6
  - ☒ 4. P×Q is divisible by 5

Question ID : 81616112959

Status : Answered

Chosen Option : 3

Q.23 Study the table and answer the question.

The table shows the daily income of 50 persons.

Income (Rs)	No. of persons
less than 200	12
less than 250	26
less than 300	34
less than 350	40
less than 400	50

How many persons earn ₹250 or more but less than ₹350 daily?

- Ans
- ☒ 1. 18
  - ☒ 2. 24
  - ☒ 3. 28
  - ☒ 4. 14

Question ID : 81616112678

Status : Answered

Chosen Option : 2



Q.24

$$(\sec\theta + \tan\theta)^2 + \frac{1 + \operatorname{cosec}\theta}{1 - \operatorname{cosec}\theta},$$

 $0^\circ < \theta < 90^\circ$  is:

Ans

- ✓ 1. 0  
 ✗ 2. -2  
 ✗ 3. 1  
 ✗ 4. 2

Question ID : 81616112473

Status : Answered

Chosen Option : 3

Q.25

The following table shows the daily seats occupancy in different classes of a train. Numbers in bracket represent the total seats available for a particular class.

Day	2nd Class Non-AC (900)	1st Class Non-AC (500)	AC III Tier (500)	AC II Tier (250)	AC 1st Class (150)
Monday	850	460	480	240	145
Tuesday	840	400	450	230	120
Wednesday	830	390	480	220	130
Thursday	790	480	490	250	125
Friday	840	470	500	210	130

What is the ratio of number of seats that remained vacant in all the Non-AC classes on Wednesday and Thursday taken together to number of seats remained vacant in AC classes on Monday, Tuesday and Friday?

Ans

- ✗ 1. 62 : 35  
 ✗ 2. 39 : 62  
 ✓ 3. 62 : 39  
 ✗ 4. 35 : 62

Question ID : 81616113689

Status : Not Answered

Chosen Option : --

## Section : English Comprehension

Q.1 Select the option that expresses the given sentence in indirect speech.

Raj said to his friend, "Please help me in this task."

Ans

- ✓ 1. Raj requested his friend to help him in that task.  
 ✗ 2. Raj ordered his friend to help him in this task.  
 ✗ 3. Raj threatened his friend to help him in this task.  
 ✗ 4. Raj said to his friend please help me in this task.

Question ID : 81616112684

Status : Answered

Chosen Option : 1



Q.2 Select the most appropriate option to fill in the blank.

She knew that to apologise would \_\_\_\_\_ to admitting she had failed.

- Ans
- ☒ 1. tantamount
  - ☐ 2. tandem
  - ☐ 3. tantalising
  - ☐ 4. tangible

Question ID : 81616112706  
Status : Answered  
Chosen Option : 2

Q.3 Select the most appropriate option to fill in the blank.

It was difficult to \_\_\_\_\_ Gopal to watch a horror movie.

- Ans
- ☐ 1. consult
  - ☐ 2. dissuade
  - ☒ 3. persuade
  - ☐ 4. confer

Question ID : 81616113008  
Status : Answered  
Chosen Option : 3

Q.4 Select the most appropriate option to substitute the underlined segment in the given sentence. If no substitution is required, select 'No substitution'.

Fifty litres of milk are donated by the committee to the orphanage every week.

- Ans
- ☐ 1. are donated by a committee
  - ☐ 2. are being donated by the committee
  - ☐ 3. No substitution
  - ☒ 4. is donated by the committee

Question ID : 81616112686  
Status : Answered  
Chosen Option : 4

Q.5 Select the option that can be used as a one-word substitute for the given group of words.

An imaginary ideal society free of poverty and suffering

- Ans
- ☐ 1. Dreamland
  - ☐ 2. Heaven
  - ☐ 3. Paradise
  - ☒ 4. Utopia

Question ID : 81616113005  
Status : Answered  
Chosen Option : 4

Q.6 The following sentence has been split into four segments. Identify the segment that contains a grammatical error.

The weather / is much / more warmer / than it was a few days before.

Ans ☒ 1. than it was a few days before

☒ 2. is much

☒ 3. The weather

☒ 4. more warmer

Question ID : 81616112985

Status : Answered

Chosen Option : 4

Q.7 Select the most appropriate meaning of the given idiom.

Fair and square

Ans ☒ 1. Calm and quiet

☒ 2. Beautiful in appearance

☒ 3. By any means available

☒ 4. According to the rules

Question ID : 81616113205

Status : Answered

Chosen Option : 4

Q.8 Select the option that will improve the underlined part of the given sentence. In case no improvement is needed select 'No improvement required'.

He fell over in studies owing to his illness.

Ans ☒ 1. fell behind

☒ 2. fell for

☒ 3. No improvement required

☒ 4. fell out

Question ID : 81616112988

Status : Answered

Chosen Option : 1

Q.9 Select the most appropriate ANTONYM of the given word.

Hassled

Ans ☒ 1. Annoyed

☒ 2. Worried

☒ 3. Relaxed

☒ 4. Stressed

Question ID : 81616113203

Status : Answered

Chosen Option : 3

Q.10 Select the most appropriate synonym of the given word.

Calm

- Ans ☒ 1. Cranky  
☒ 2. Relaxed  
☒ 3. Joyful  
☒ 4. Clean

Question ID : 81616112695  
Status : Answered  
Chosen Option : 2

Q.11 Select the INCORRECTLY spelt word.

- Ans ☒ 1. Sentimentally  
☒ 2. Substantially  
☒ 3. Subsequently  
☒ 4. Solicitation

Question ID : 81616113411  
Status : Answered  
Chosen Option : 3

Q.12 Select the option that expresses the given sentence in active voice.

I am paid weekly by my organisation.

- Ans ☒ 1. My organisation paid me weekly.  
☒ 2. My organisation would pay me weekly.  
☒ 3. My organisation will pay me weekly.  
☒ 4. My organisation pays me weekly.

Question ID : 81616112986  
Status : Answered  
Chosen Option : 4

Q.13 Select the most appropriate synonym of the given word.

Poignant

- Ans ☒ 1. Quiet  
☒ 2. Beautiful  
☒ 3. Touching  
☒ 4. Happy

Question ID : 81616112696  
Status : Answered  
Chosen Option : 2

Q.14 Select the INCORRECTLY spelt word.

- Ans ☒ 1. Approval  
☒ 2. Censure  
☒ 3. Criticism  
☒ 4. Helicopter

Question ID : 81616113410

Status : Answered

Chosen Option : 4

Q.15 Sentences of a paragraph are given below in jumbled order. Arrange the sentences in the right order to form a meaningful and coherent paragraph.

- A. When it was time to divide the spoils, the lion took one portion for his title as king of the forest.  
B. He took another portion because he was a partner, and yet another because he was the strongest.  
C. He took the last portion because an accident would befall anyone who laid a paw upon it.  
D. Once a lion went hunting with three other beasts.

- Ans ☒ 1. CABD  
☒ 2. DABC  
☒ 3. BDCA  
☒ 4. DCBA

Question ID : 81616113400

Status : Answered

Chosen Option : 2

Q.16 Select the most appropriate ANTONYM of the given word.

Fallacy

- Ans ☒ 1. Cheat  
☒ 2. Flaw  
☒ 3. Trick  
☒ 4. Truth

Question ID : 81616113404

Status : Answered

Chosen Option : 4

Q.17 Sentences of a paragraph are given below in jumbled order. Arrange the sentences in the right order to form a meaningful and coherent paragraph.

- A. The festival is named after the Indian Hornbill.
- B. The Hornbill festival is the most anticipated cultural carnival of this state.
- C. Located in Northeast India, Nagaland is very a beautiful and an ethnically diverse state.
- D. The Hornbill is often displayed on the traditional tribal headgears worn during Naga festivities.

Ans ☒ 1. ACBD

☒ 2. BCAD

☒ 3. ABCD

☒ 4. CBAD

Question ID : 81616113199

Status : Answered

Chosen Option : 4

Q.18 Select the option that can be used as a one-word substitute for the given group of words.

A dynamic campaign for political, social or religious change

Ans ☒ 1. Conflict

☒ 2. War

☒ 3. Mutiny

☒ 4. Crusade

Question ID : 81616113004

Status : Answered

Chosen Option : 3

Q.19 The following sentence has been split into four segments. Identify the segment that contains a grammatical error.

The visitors complained / at the poor accommodation / they were provided / during the tour.

Ans ☒ 1. at the poor accommodation

☒ 2. The visitors complained

☒ 3. during the tour

☒ 4. they were provided

Question ID : 81616113186

Status : Answered

Chosen Option : 1

Q.20 Select the most appropriate meaning of the given idiom.

Sit on the fence

Ans ☒ 1. Poke fun at people

☒ 2. Protect something

☒ 3. Create conflicts

☒ 4. Avoid making a decision

Question ID : 81616113204

Status : Answered

Chosen Option : 3

**Comprehension:**

In the following passage, some words have been deleted. Fill in the blanks with the help of the alternatives given. Select the most appropriate option for each blank.

The first human beings to control fire gradually learned (1)\_\_\_\_\_ many uses. Not only did they (2)\_\_\_\_\_ fire to keep warm and cook their food; they (3)\_\_\_\_\_ learned to use it in hunting or warfare, to kill insects, to (4)\_\_\_\_\_ berries, and to clear forests of underbrush so that game (5)\_\_\_\_\_ be better seen and hunted. Eventually they learned that the burning of brush produced better grasslands and therefore more game.

**SubQuestion No : 21**

**Q.21 Select the most appropriate option to fill in blank number 1.**

- Ans    ☒ 1. its  
         ☒ 2. his  
         ☒ 3. your  
         ☒ 4. their

Question ID : 81616113395

Status : Answered

Chosen Option : 1

**Comprehension:**

In the following passage, some words have been deleted. Fill in the blanks with the help of the alternatives given. Select the most appropriate option for each blank.

The first human beings to control fire gradually learned (1)\_\_\_\_\_ many uses. Not only did they (2)\_\_\_\_\_ fire to keep warm and cook their food; they (3)\_\_\_\_\_ learned to use it in hunting or warfare, to kill insects, to (4)\_\_\_\_\_ berries, and to clear forests of underbrush so that game (5)\_\_\_\_\_ be better seen and hunted. Eventually they learned that the burning of brush produced better grasslands and therefore more game.

**SubQuestion No : 22**

**Q.22 Select the most appropriate option to fill in blank number 2.**

- Ans    ☒ 1. use  
         ☒ 2. ready  
         ☒ 3. used  
         ☒ 4. prepare

Question ID : 81616113396

Status : Answered

Chosen Option : 1

**Comprehension:**

In the following passage, some words have been deleted. Fill in the blanks with the help of the alternatives given. Select the most appropriate option for each blank.

The first human beings to control fire gradually learned (1)\_\_\_\_\_ many uses. Not only did they (2)\_\_\_\_\_ fire to keep warm and cook their food; they (3)\_\_\_\_\_ learned to use it in hunting or warfare, to kill insects, to (4)\_\_\_\_\_ berries, and to clear forests of underbrush so that game (5)\_\_\_\_\_ be better seen and hunted. Eventually they learned that the burning of brush produced better grasslands and therefore more game.

**SubQuestion No : 23**

**Q.23 Select the most appropriate option to fill in blank number 3.**

- Ans ☒ 1. instead  
☒ 2. also  
☒ 3. well  
☒ 4. alternative

Question ID : 81616113397

Status : Answered

Chosen Option : 2

**Comprehension:**

In the following passage, some words have been deleted. Fill in the blanks with the help of the alternatives given. Select the most appropriate option for each blank.

The first human beings to control fire gradually learned (1)\_\_\_\_\_ many uses. Not only did they (2)\_\_\_\_\_ fire to keep warm and cook their food; they (3)\_\_\_\_\_ learned to use it in hunting or warfare, to kill insects, to (4)\_\_\_\_\_ berries, and to clear forests of underbrush so that game (5)\_\_\_\_\_ be better seen and hunted. Eventually they learned that the burning of brush produced better grasslands and therefore more game.

**SubQuestion No : 24**

**Q.24 Select the most appropriate option to fill in blank number 4.**

- Ans ☒ 1. attain  
☒ 2. acquire  
☒ 3. safeguard  
☒ 4. obtain

Question ID : 81616113398

Status : Answered

Chosen Option : 3

**Comprehension:**

In the following passage, some words have been deleted. Fill in the blanks with the help of the alternatives given. Select the most appropriate option for each blank.

The first human beings to control fire gradually learned (1)\_\_\_\_\_ many uses. Not only did they (2)\_\_\_\_\_ fire to keep warm and cook their food; they (3)\_\_\_\_\_ learned to use it in hunting or warfare, to kill insects, to (4)\_\_\_\_\_ berries, and to clear forests of underbrush so that game (5)\_\_\_\_\_ be better seen and hunted. Eventually they learned that the burning of brush produced better grasslands and therefore more game.

**SubQuestion No : 25**

**Q.25** Select the most appropriate option to fill in blank number 5.

Ans ☒ 1. must

☒ 2. shall

☒ 3. could

☒ 4. will

Question ID : 81616113399

Status : Answered

Chosen Option : 3