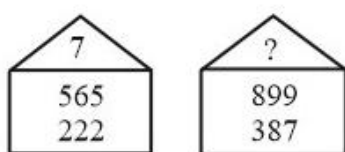


Constable (GD) in CAPFs, NIA, SSF and Rifleman (GD) in Assam Rifles Examination, 2018

Roll No. :	www.GovtJobsAlert.In
Registration No.	
Name :	
Exam Venue :	iON Digital Zone iDZ Anantapur
Exam Time :	9:00 AM - 10:30 AM
Exam Date :	07/03/2019

Section : General Section

Q.1 Find the missing number from the below options.



- Ans
- 1. 8
 - 2. 9
 - 3. 11
 - 4. 6

Question ID : 9895809215
Chosen Option : 3

Q.2 Select the option that is related to the third term in the same way as the second term is related to the first term.

0.24 : 0.0024 :: 3.03 : ?

- Ans
- 1. 3.030
 - 2. 0.303
 - 3. 30.30
 - 4. 0.0303

Question ID : 9895809213
Chosen Option : 4

Q.3 Five people Palak, Karol, Risha, Saloni and Tisha are travelling in a car. The car has two seats in the front and three at the back. Risha is driving the car. Palak wants to sit at one of the window seats at the back of the car. Tisha wants to sit next to Palak. Karol hates Tisha and will not sit with Tisha. Who is sitting next to the driver?

- Ans
- 1. Karol
 - 2. Tisha
 - 3. Can't be determined
 - 4. Saloni

Question ID : 9895809206
Chosen Option : 2

Q.4

Select the correct option that will fill in the blank and complete the series.

45, 49, 58, 74, ____

- Ans
- 1. 92
 - 2. 88
 - 3. 99
 - 4. 98

Question ID : 9895809211
Chosen Option : 2

Q.5 Four words have been given out of which three are alike in some manner, while one is different. Choose the odd one.

- Ans
- 1. Bottle
 - 2. Bucket
 - 3. River
 - 4. Jar

Question ID : 9895809200
Chosen Option : 3

Q.6 Select the correct option that will fill in the blank and complete the series.

35, 40, 55, 80, 115, ?

- Ans
- 1. 155
 - 2. 170
 - 3. 165
 - 4. 160

Question ID : 9895809212
Chosen Option : 4

Q.7 The statements below are followed by two conclusions labeled I and II. Assuming that the information in the statements is true, even if it appears to be at variance with generally established facts, decide which conclusion(s) logically and definitely follow(s) from the information given in the statements.

Statements:

Some cows are deer.

Some deer are fishes.

Conclusion:

I. Some cows are fishes.

II. Some fishes are cows.

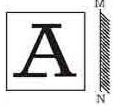
- Ans
- 1. Either conclusion I or II follows
 - 2. Neither conclusion I nor II follows
 - 3. Only conclusion I follows
 - 4. Only conclusion II follows

Question ID : 9895809209
Chosen Option : 1


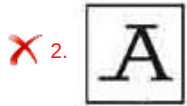

Q.8

Choose the option that most closely resembles the mirror image of the given figure when mirror is placed at right side.

Questions Figure:



Ans



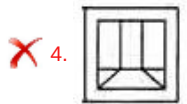
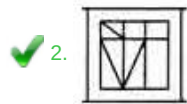
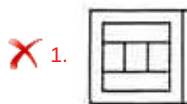
Question ID : 9895809220
Chosen Option : 3

Q.9 Choose the option figure in which the problem figure is hidden/embedded.

Question Figures:



Ans



Question ID : 9895809219
Chosen Option : 1

Q.1
0

The statements below are followed by three conclusions labeled I, II and III. Assuming that the information in the statements is true, even if it appears to be at variance with generally established facts, decide which conclusion(s) logically and definitely follow(s) from the information given in the statements.

Statements:

All pencils are houses.
All houses are eraser.

Conclusions:

- I. Some pencils are eraser.
- II. Some erasers are pencils.
- III. All erasers are pencils.

- Ans
- 1. Only I and II follow
 - 2. None follows
 - 3. Only II follows
 - 4. All follow

Question ID : 9895809210
Chosen Option : 4

Q.1
1 Select the related word pair from the given alternatives.

Poet : Poem :: _____ : _____

- Ans
- 1. Paragraph : Lyrics
 - 2. Maths : literature
 - 3. Author : Book
 - 4. Instrument : Video

Question ID : 9895809201
Chosen Option : 3

Q.1
2 Select the option that is related to the fourth term in the same way as the first term is related to the second term.

BDGK : CEHL :: ???? : DFIM

- Ans
- 1. CEHL
 - 2. CEHM
 - 3. EGJN
 - 4. EGHI

Question ID : 9895809202
Chosen Option : 1

Q.1
3 Select the option that is related to the third term in the same way as the second term is related to the first term.

ACEG : BDFH :: CEGI : ?

- Ans
- 1. EGIK
 - 2. DFHJ
 - 3. DHIK
 - 4. EGIH

Question ID : 9895809203

Chosen Option : 4

Q.1 A is 15th from the front in a column of boys. There were thrice as many behind him as there were in front. How many boys are there between A and the 7th boy from the end of the column?

- Ans
- 1. 35
 - 2. 40
 - 3. 33
 - 4. 34

Question ID : 9895809208

Chosen Option : 3

Q.1 If B is coded as 9, F is coded as 3, Q is coded as 2, D is coded as 8, T is coded as 1, M is coded as 6, and K is coded as 7, then what is the coded form of FBMKQT?

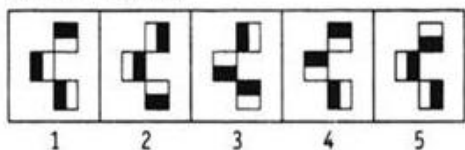
- Ans
- 1. 396127
 - 2. 396721
 - 3. 369127
 - 4. 369172

Question ID : 9895809205

Chosen Option : 2

Q.1 Choose the option which come next in the given figure series.

Problem Figures



- Ans
- 1.
 - 2.
 - 3.
 - 4.

Question ID : 9895809217

Chosen Option : 2


Q.1 Four options have been given out of which three are alike in some manner, while one is different. Choose the odd one.

- Ans
- 1. 426
 - 2. 336
 - 3. 257
 - 4. 359

Question ID : 9895809214
Chosen Option : 1

Q.1
8 Which of the following answer figure will complete the given figure?

Question Figures:



Ans

- 1.
- 2.
- 3.
- 4.

Question ID : 9895809218
Chosen Option : 4

Q.1
9 The question below has three items having certain relationship among them. The same relationship is expressed by sets of circles, each circle representing one item irrespective of its size. Match the items with right set of circles.

Apples, Mangoes, Oranges

Ans

- 1.
- 2.
- 3.
- 4.

Question ID : 9895809222
Chosen Option : 4

Q.2
0 Select the correct option that will fill in the blank and complete the series.

MaN, SaH, YaB, _____

- 1. EaV
- 2. RaC
- 3. TaD

4. FaV

Question ID : 9895809198
Chosen Option : 2

Q.2 In a certain code, DHONI is written as AELKF. How is EXPOSE written in that code?
1

- Ans 1. BUMLPB
 2. BUNLPB
 3. BUMLQB
 4. BVMLPB

Question ID : 9895809204
Chosen Option : 2

Q.2 Five chairs C1, C2, C3, C4 and C5 are placed one above the other. If C1 is above C2, C3 is above C4 but below C5 and C4 is above C1, which chair is in the middle?
2

- Ans 1. C1
 2. C2
 3. C3
 4. C4

Question ID : 9895809207
Chosen Option : 4

Q.2 A piece of paper is folded and cut as shown below in the question figures. From the given answer figures, how will it appear when opened?
3



- Ans 1.
 2.
 3.
 4.

Question ID : 9895809221
Chosen Option : 3

Q.2 Four letter clusters have been given out of which three are alike in some manner, while one is different. Choose the odd one.
4

- Ans 1. QSW
 2. LNR
 3. FHL
 4. NPR

Question ID : 9895809199
Chosen Option : 2

Q.2
5 If 'P' means 'subtracted from', 'X' means 'multiplied by', 'Y' means 'added to', and 'Z' means 'Divided by', then:

$$54 Z 3 Y 22 X 5 = ?$$

- Ans
- 1. 135
 - 2. 128
 - 3. 110
 - 4. 144

Question ID : 9895809216

Chosen Option : 2

Q.2
6 Each water molecule, contains _____ hydrogen atoms and one Oxygen atom.

- Ans
- 1. Two
 - 2. Three
 - 3. One
 - 4. Four

Question ID : 9895808532

Chosen Option : 1

Q.2
7 Which type of soil develops deep cracks during hot weather?

- Ans
- 1. Yellow soil
 - 2. Laterite soil
 - 3. Alluvial soil
 - 4. Black soil

Question ID : 9895808534

Chosen Option : 4

Q.2
8 Pashmina is a fine type of wool which were first woven in which state of India?

- Ans
- 1. Uttar Pradesh
 - 2. Punjab
 - 3. Jammu & Kashmir
 - 4. Himachal Pradesh

Question ID : 9895808517

Chosen Option : 2

Q.2
9 Who was the president of Muslim League in 1930?

- Ans
- 1. Muhammad Iqbal
 - 2. Syed Ahmed Khan
 - 3. Muhammad Ali Jinnah
 - 4. Shaukat Ali

Question ID : 9895808539

Chosen Option : 3

Q.3
0 Which of the following cartoonist is best known for his creation of common man?

- Ans
- 1. Shekhar Gurera

- 2. Sudhir Tailang
- 3. Kutty
- 4. R.K. Laxman

Question ID : 9895808521
Chosen Option : 3

Q.3
1 Which village has shown that it is possible to reverse land degradation?

- Ans
- 1. Bhandardara
 - 2. Majuli
 - 3. Katarmal
 - 4. Sukhomajri

Question ID : 9895808535
Chosen Option : 3

Q.3
2 Which was the first Indian Satellite named after Indian mathematician launched in 1975 by the Soviet Union?

- Ans
- 1. INSAt 1A
 - 2. Bhaskara Segal-I
 - 3. Rohini RS-D1
 - 4. Aryabhata

Question ID : 9895808531
Chosen Option : 3

Q.3
3 In which year did the Khilafat Movement start?

- Ans
- 1. 1922
 - 2. 1923
 - 3. 1920
 - 4. 1921

Question ID : 9895808538
Chosen Option : 2

Q.3
4 The Gateway of India is located in:

- Ans
- 1. Kolkata
 - 2. Delhi
 - 3. Mumbai
 - 4. Bengaluru

Question ID : 9895808516
Chosen Option : 3

Q.3
5 The Bhoodan – Gramdan movement was initiated by:

- Ans
- 1. Maneka Gandhi
 - 2. Medha Patkar
 - 3. Vinoba Bhave

4. Baba Amte

Question ID : 9895808536
Chosen Option : 3

Q.3
6 Which of the following is a popular name of bio gas?

- Ans 1. Uranium
 2. Petroleum
 3. Gobar gas
 4. Coal

Question ID : 9895808533
Chosen Option : 2

Q.3
7 Which of the following is a non-constitutional body of India?

- Ans 1. Finance Commission
 2. State Human Right Commission
 3. National Commission
 4. Election Commission

Question ID : 9895808526
Chosen Option : 4

Q.3
8 Which dam is built on the Narmada River?

- Ans 1. Adhia Dam
 2. Hirakud Dam
 3. Sardar Sarovar Dam
 4. Tehri Dam

Question ID : 9895808529
Chosen Option : 3

Q.3
9 In which colour is a solar cooker painted from the outside?

- Ans 1. Green
 2. Blue
 3. Black
 4. Red

Question ID : 9895808530
Chosen Option : 2

Q.4
0 Which state has the highest per capita income as per year 2017-18?

- Ans 1. Mizoram
 2. Bihar
 3. Maharashtra
 4. Kerala

Question ID : 9895808524
Chosen Option : 3

Q.4 In which Indian state is Dabu printing practiced, which involves applying earth in delicate patterns to cloth and then dipping in dye?

- 1
- Ans 1. Rajasthan
 2. Orissa
 3. Andhra Pradesh
 4. Assam

Question ID : 9895808515
Chosen Option : 3

Q.4 Viswanathan Anand was awarded the Padma Vibushan award in which year?

- 2
- Ans 1. 2011
 2. 2008
 3. 2010
 4. 2009

Question ID : 9895808522
Chosen Option : 3

Q.4 Which of the following terms in our preamble means behaving as if we are members of the same family?

- 3
- Ans 1. Justice
 2. Democracy
 3. Fraternity
 4. Equality

Question ID : 9895808527
Chosen Option : 3

Q.4 'Gella-Chutt' is an indigenous game associated with the state of:

- 4
- Ans 1. Mizoram
 2. Assam
 3. Tripura
 4. Arunachal Pradesh

Question ID : 9895808518
Chosen Option : 3

Q.4 Changing party allegiance from the party with which a person got elected to a different party is called:

- 5
- Ans 1. defection
 2. separation
 3. party whip
 4. alliance building

Question ID : 9895808528
Chosen Option : 3

Q.4 Identify the neighbouring country which has been performing better in terms of human development than India.

6

- Ans
- 1. Bangladesh
 - 2. Nepal
 - 3. Sri Lanka
 - 4. Pakistan

Question ID : 9895808525
Chosen Option : 2

Q.4
7 The book 'Wings of Fire' is authored by:

- Ans
- 1. Salman Rushdie
 - 2. A.P.J Abdul Kalam
 - 3. R.K Narayan
 - 4. Vikram Seth

Question ID : 9895808520
Chosen Option : 2

Q.4
8 In which year was the Rural Employment Generation Programme launched?

- Ans
- 1. 1993
 - 2. 1995
 - 3. 1992
 - 4. 1994

Question ID : 9895808523
Chosen Option : 3

Q.4
9 Who won the gold medal at Women's National Boxing Championships in 2019?

- Ans
- 1. Ragini Upadhyay
 - 2. Nikhat Zareen
 - 3. Manju Rani
 - 4. Pinki Rani Jangra

Question ID : 9895808519
Chosen Option : 3

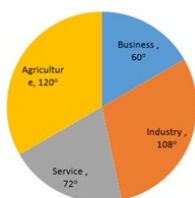
Q.5
0 The rajahs of the Mahajanpadas built forts as they provided _____.

- Ans
- 1. Mutability
 - 2. Security
 - 3. Marketability
 - 4. Transportability

Question ID : 9895808537
Chosen Option : 3

Q.5
1

DIRECTION: The population of a city is 8000. They have various types of occupation which is given below by the pie-chart. Study the pie-chart and answer the given questions.



How much percent are in service sector from the total population?

- Ans
- 1. 36%
 - 2. 20%
 - 3. 72%
 - 4. 25%

Question ID : 9895808966
Chosen Option : 1

Q.5
2 The ratio between two numbers is 7 : 16. If the second number is 256 then the first number is:

- Ans
- 1. 120
 - 2. 156
 - 3. 112
 - 4. 144

Question ID : 9895808953
Chosen Option : 1

Q.5
3 30 persons can do a piece of work in 24 days. How many more people are required to complete the work in 20 days?

- Ans
- 1. 8
 - 2. 5
 - 3. 4
 - 4. 6

Question ID : 9895808958
Chosen Option : 3

Q.5
4 What is the arithmetic mean of first 8 multiples of 13?

- Ans
- 1. 55.4
 - 2. 58.5
 - 3. 72.5
 - 4. 61.8

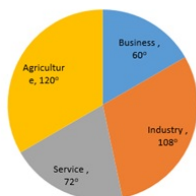
Question ID : 9895808949
Chosen Option : 1

Q.5
5 If $\frac{8x+3y}{4x+5y} = \frac{25}{23}$ then find x : y.

- Ans
- 1. 2 : 3
 - 2. 2 : 5
 - 3. 3 : 5
 - 4. 1 : 5

Question ID : 9895808954
Chosen Option : 1

Q.5 DIRECTION: The population of a city is 8000. They have various types of occupation which is given below by the pie-chart. Study the pie-chart and answer the given questions.



How much population percent is less in industry sector than in agriculture sector?

- Ans
- 1. 10%
 - 2. 25%
 - 3. 15%
 - 4. 20%

Question ID : 9895808967
Chosen Option : 3

Q.5 The marked price of an item is ₹ 900 but a retailer purchases it on 40% discount and sells it on ₹ 900. The percentage profit of the retailer is:

- Ans
- 1. 60%
 - 2. $68\frac{1}{3}\%$
 - 3. 40%
 - 4. $66\frac{2}{3}\%$

Question ID : 9895808948
Chosen Option : 1

Q.5 The average of 6 values is 11.2. If 3 is multiplied to each number then what will be the new average?

- Ans
- 1. 22.6
 - 2. 14.6
 - 3. 18.6
 - 4. 33.6

Question ID : 9895808947
Chosen Option : 3

Q.5 The speed of a boat in still water is 9 km/hr and the speed of stream is 3 km/hr. The difference between the upstream speed and downstream speed will be:

- Ans 1. 6 km/hr
 2. 5 km/hr
 3. 3.5 km/hr
 4. 7.5 km/hr

Question ID : 9895808961
 Chosen Option : 1

Q.6 Two concentric circles with radii p cm and $(p + 2)$ cm are drawn on a paper. The difference between their areas is 44 sq. cm
 0 What is the value of p ? (Take $\pi = \frac{22}{7}$)

- Ans 1. 1.5
 2. 5
 3. 6
 4. 2.5

Question ID : 9895808962
 Chosen Option : 3

Q.6 $\frac{4}{7}$ of $\frac{8}{9} \div \frac{8}{7} \times 180$ of $\frac{1}{9} = ?$
 1

- Ans 1. $\frac{20}{9}$
 2. $\frac{9}{20}$
 3. $\frac{80}{9}$
 4. $\frac{9}{80}$

Question ID : 9895808944
 Chosen Option : 3

Q.6 If cost prices of 100 note books is same as selling price of 80 note books. What is the percent gain?
 2

- Ans 1. 15%
 2. 30%
 3. 25%
 4. 20%

Question ID : 9895808952
 Chosen Option : 4

Q.6 The amounts of ₹ 7500 at compound interest at 4% per annum for 2 years, is:
 3

- Ans 1. ₹ 8100
 2. ₹ 8082
 3. ₹ 7800
 4. ₹ 8112

Question ID : 9895808957
Chosen Option : 3

Q.6
4 21% of a number is 546. What will be 89% of that number?

- Ans
- 1. 900
 - 2. 2116
 - 3. 1200
 - 4. 2314

Question ID : 9895808950
Chosen Option : 4

Q.6
5 A person bought an item and sold it at a loss of 5%. If he had bought it for 10% less and sold it for ₹ 170 more, he would have had a profit of 20%. Find the cost price of this item. (nearest to ₹ 1)

- Ans
- 1. ₹ 1440
 - 2. ₹ 1308
 - 3. ₹ 1300
 - 4. ₹ 1500

Question ID : 9895808951
Chosen Option : 3

Q.6
6 A pipe can fill a cistern in 20 minutes whereas the cistern when full can be emptied by a leak in 28 minutes. When both are opened, The time taken to fill the cistern is:

- Ans
- 1. 80 min
 - 2. 70 min
 - 3. 60 min
 - 4. 48 min

Question ID : 9895808959
Chosen Option : 3

Q.6
7 A certain sum amounts to ₹ 756 in 2 years and to ₹ 873 in $3\frac{1}{2}$ years at a certain rate of simple interest. The rate of interest per annum is:

- Ans
- 1. 11%
 - 2. 13%
 - 3. 10%
 - 4. 12%

Question ID : 9895808956
Chosen Option : 3

Q.6
8 A square with maximum possible side is drawn in a circle of radius 12 cm. What is the area of square?

- Ans
- 1. 288 sq. cm
 - 2. 72 sq. cm
 - 3. 184 sq. cm

4. 276 sq. cm

Question ID : 9895808963
Chosen Option : 3

Q.6
9 Divide 500 into two parts such that the ratio of one to the other are in 5 : 3?

- Ans 1. 312.5, 187.5
 2. 308.5, 191.5
 3. 280, 220
 4. 300, 200

Question ID : 9895808955
Chosen Option : 3

Q.7
0 What value should come in place of the question mark (?) in the following questions?

$$31 \div 3 \times 15 = ?$$

- Ans 1. 180
 2. 140
 3. 165
 4. 155

Question ID : 9895808945
Chosen Option : 2

Q.7
1 The speed of a ship in still water is 5 km/hr and the speed of the stream is 2 km/hr. Rohan rows to a place at a distance of 21 km and comes back to the starting point. The total time taken by him is:

- Ans 1. 7.2 hours
 2. 10 hours
 3. 3.6 hours
 4. 6 hours

Question ID : 9895808960
Chosen Option : 1

Q.7
2 What is the greatest number that will divide 209 and 347 leaving remainder 5 and 7 respectively?

- Ans 1. 23
 2. 16
 3. 19
 4. 17

Question ID : 9895808943
Chosen Option : 3

Q.7
3 The average of first 10 prime number is:

- Ans 1. 13.1
 2. 12.7

✓ 3. 12.9

✗ 4. 15.1

Question ID : 9895808946

Chosen Option : 1

Q.7 The area of the cardboard needed to make a closed box of size 10 cm × 15 cm × 8 cm will be:

Ans ✓ 1. 700 cm²

✗ 2. 350 cm²

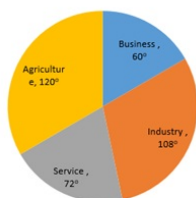
✗ 3. 1000 cm²

✗ 4. 1390 cm²

Question ID : 9895808964

Chosen Option : 3

Q.7 DIRECTION: The population of a city is 8000. They have various types of occupation which is given below by the pie-chart. Study the pie-chart and answer the given questions.



The ratio of people working in service to industry sectors respectively:

Ans ✓ 1. 2 : 3

✗ 2. 3 : 5

✗ 3. 3 : 4

✗ 4. 5 : 3

Question ID : 9895808965

Chosen Option : 3

Section : English Language

Q.1 Select the wrongly spelt word.

Ans ✓ 1. Existance

✗ 2. Experience

✗ 3. Eminent

✗ 4. Explanation

Question ID : 9895809091

Chosen Option : --

Q.2 Select the most appropriate word to fill in the blank.

A number of people _____ to watch the live performance last night.

Ans ✗ 1. gather

- 2. has gathered
- 3. has been gathered
- 4. gathered

Question ID : 9895809074
Chosen Option : --

Q.3 Select the antonym of the given word.

Diminish

- Ans
- 1. Decrease
 - 2. Divide
 - 3. Increase
 - 4. Reduce

Question ID : 9895809084
Chosen Option : --

Q.4 Select the synonym of the given word.

ACCOMPLISH

- Ans
- 1. Fail
 - 2. Hinder
 - 3. Lose
 - 4. Achieve

Question ID : 9895809083
Chosen Option : --

Q.5 Select the word which means the same as the group of words given.

A mass of snow, ice, and rocks falling rapidly down a mountainside

- Ans
- 1. Glacier
 - 2. Avalanche
 - 3. Iceberg
 - 4. Landslide

Question ID : 9895809089
Chosen Option : --

Q.6 Select the meaning of the given idiom.

Under a cloud

- Ans
- 1. under observation
 - 2. enjoying favorable luck
 - 3. experiencing cloudy weather
 - 4. under suspicion

Question ID : 9895809087
Chosen Option : --

Q.7 Select the meaning of the given idiom.

Get a kick out of

- Ans
- 1. Give up something
 - 2. Enjoy something
 - 3. Kick something
 - 4. Predict something

Question ID : 9895809086
Chosen Option : --

Comprehension:

In the following passage some words have been deleted. Fill in the blanks with the help of the alternatives given. Select the most appropriate option for each number.

An Italian town is offering to pay people up to €2000 to move there. The Mayor of the town has made the (1) _____ in the hope of reversing (2) _____ town's declining population. The population (3) _____ small towns of Italy (4) _____ to the big cities leaving (5) _____ only the aged people. Some towns have been left with as little as twelve residents.

SubQuestion No : 8

Q.8 Select the most appropriate option that will fill in the blank number 1.

- Ans
- 1. present
 - 2. offer
 - 3. reward
 - 4. gift

Question ID : 9895809077
Chosen Option : --

Comprehension:

In the following passage some words have been deleted. Fill in the blanks with the help of the alternatives given. Select the most appropriate option for each number.

An Italian town is offering to pay people up to €2000 to move there. The Mayor of the town has made the (1) _____ in the hope of reversing (2) _____ town's declining population. The population (3) _____ small towns of Italy (4) _____ to the big cities leaving (5) _____ only the aged people. Some towns have been left with as little as twelve residents.

SubQuestion No : 9

Q.9 Select the most appropriate option that will fill in the blank

number 2.

- Ans
- 1. some
 - 2. one
 - 3. a
 - 4. the

Question ID : 9895809078

Chosen Option : --

Comprehension:

In the following passage some words have been deleted. Fill in the blanks with the help of the alternatives given. Select the most appropriate option for each number.

An Italian town is offering to pay people up to €2000 to move there. The Mayor of the town has made the (1) _____ in the hope of reversing (2) _____ town's declining population. The population (3) _____ small towns of Italy (4) _____ to the big cities leaving (5) _____ only the aged people. Some towns have been left with as little as twelve residents.

SubQuestion No : 10

Q.10 Select the most appropriate option that will fill in the blank

number 3.

- Ans
- 1. at
 - 2. between
 - 3. from
 - 4. among

Question ID : 9895809079

Chosen Option : --

Comprehension:

In the following passage some words have been deleted. Fill in the blanks with the help of the alternatives given. Select the most appropriate option for each number.

An Italian town is offering to pay people up to €2000 to move there. The Mayor of the town has made the (1) _____ in the hope of reversing (2) _____ town's declining population. The population (3) _____ small towns of Italy (4) _____ to the big cities leaving (5) _____ only the aged people. Some towns have been left with as little as twelve residents.

SubQuestion No : 11

Q.11 Select the most appropriate option that will fill in the blank

number 4.

- Ans
- 1. transported
 - 2. migrated
 - 3. transferred

4. immigrated

Question ID : 9895809080
Chosen Option : --

Comprehension:

In the following passage some words have been deleted. Fill in the blanks with the help of the alternatives given. Select the most appropriate option for each number.

An Italian town is offering to pay people up to €2000 to move there. The Mayor of the town has made the (1) _____ in the hope of reversing (2) _____ town's declining population. The population (3) _____ small towns of Italy (4) _____ to the big cities leaving (5) _____ only the aged people. Some towns have been left with as little as twelve residents.

SubQuestion No : 12

Q.1
2 Select the most appropriate option that will fill in the blank number 5.

- Ans
- 1. beyond
 - 2. below
 - 3. behind
 - 4. before

Question ID : 9895809081
Chosen Option : --

Q.1
3 Select the antonym of the given word.

CONVICTED

- Ans
- 1. Alleged
 - 2. Blamed
 - 3. Acquitted
 - 4. Charged

Question ID : 9895809085
Chosen Option : --

Q.1
4 Select the wrongly spelt word.

- Ans
- 1. Encouragment
 - 2. Questionnaire
 - 3. Environment
 - 4. Performance

Question ID : 9895809090
Chosen Option : --

Q.1
5

Select the most appropriate option to substitute the underlined segment in the given sentence. If there is no need to substitute it, select No substitution required.

The escalator at the railway station is working again, thanks to the effort for our technicians.

- Ans
- 1. efforts of our technicians
 - 2. No substitution required
 - 3. efforts make by our technicians
 - 4. efforts from our technicians

Question ID : 9895809071
Chosen Option : --

Q.1
6 Select the most appropriate word to fill in the blank.

The bear didn't attack the lady because he was afraid _____ her.

- Ans
- 1. at
 - 2. of
 - 3. from
 - 4. for

Question ID : 9895809075
Chosen Option : --

Q.1
7 Select the synonym of the given word.

APPARENT

- Ans
- 1. Hidden
 - 2. Obvious
 - 3. Latent
 - 4. Concealed

Question ID : 9895809082
Chosen Option : --

Q.1
8 Select the most appropriate option to substitute the underlined segment in the given sentence. If there is no need to substitute it, select No substitution required.

Last month, scientists are posting the latest pictures of Mars taken by the Mangalyaan.

- Ans
- 1. No substitution required
 - 2. posted
 - 3. have been posting
 - 4. will be posting

Question ID : 9895809072
Chosen Option : --

Q.1
9 Select the most appropriate word to fill in the blank.

He was _____ from jail only last month.

Ans

- 1. imprisoned
- 2. released
- 3. arrested
- 4. sent

Question ID : 9895809092
Chosen Option : --

Q.2 Identify the segment in the sentence which contains the grammatical error from the given options.

0

Before the President can start his speech, he was interrupted by his secretary.

- Ans
- 1. by his secretary
 - 2. can start
 - 3. Before the
 - 4. was interrupted

Question ID : 9895809069
Chosen Option : --

Q.2 Select the most appropriate option to substitute the underlined segment in the given sentence. If there is no need to substitute it, select No substitution required.

1

His grandfather finds a tiny tiger-cub in the forest and brought him home.

- Ans
- 1. bringing home
 - 2. No substitution required
 - 3. brings him home
 - 4. has bring home

Question ID : 9895809073
Chosen Option : --

Q.2 Select the most appropriate word to fill in the blank.

2

His proposal was not _____ to me.

- Ans
- 1. accessible
 - 2. acceptable
 - 3. adapted
 - 4. apparent

Question ID : 9895809093
Chosen Option : --

Q.2 Select the word which means the same as the group of words given.

3

One who loves mankind

- Ans
- 1. Philanthropist
 - 2. Misogamist

3. Misanthropist

4. Misogynist

Question ID : 9895809088

Chosen Option : --

Q.2 Identify the segment in the sentence which contains the grammatical error from the given options.
4

The question that there is life on other planets baffles scientists.

Ans 1. The question that

2. there is life

3. baffles scientists

4. on other planets

Question ID : 9895809068

Chosen Option : --

Q.2 Identify the segment in the sentence which contains the grammatical error from the given options.
5

The day he won the Grammy Award was red letter day in the singer's life.

Ans 1. in the singer's life.

2. he won

3. The day

4. was red letter day

Question ID : 9895809070

Chosen Option : --

Section : Hindi Language

Q.1 'हाथ से लिखा हुआ' शब्द समूह के लिए एक शब्द है-

Ans 1. हस्तलाघव

2. निम्नलिखित

3. हस्तक्षेप

4. हस्तलिखित

Question ID : 9895807043

Chosen Option : --

Q.2 रिक्त स्थान को भरने के लिए उपयुक्त शब्द का चयन करें।

राम के _____ आग्रह करने पर मैं उसके घर गया।

Ans 1. अधिक

2. तीव्र

3. नरम

4. बहु

Question ID : 9895807027
Chosen Option : --

Q.3 'भौतिक' का विलोम है-

- Ans
- 1. अलौकिक
 - 2. अभद्र
 - 3. भविष्य
 - 4. आध्यात्मिक

Question ID : 9895807038
Chosen Option : --

Q.4 सही वर्तनी वाले शब्द का चयन करें।

- Ans
- 1. उपरूक्त
 - 2. उपर्योक्त
 - 3. उपर्युक्त
 - 4. उर्पयुक्त

Question ID : 9895807046
Chosen Option : --

Q.5 दिए गए वाक्य में रेखांकित खंड को प्रतिस्थापित करने के लिए उपयुक्त विकल्प का चयन करें।

सविता पढ़ना-लिखना जानती है।

- Ans
- 1. अपढ़
 - 2. निरक्षर
 - 3. साक्षर
 - 4. स्वार्थी

Question ID : 9895807025
Chosen Option : --

Comprehension:

निम्नलिखित गद्यांश के रिक्त स्थानों की पूर्ति गद्यांश के नीचे दिए गए प्रश्नों के अनुसार कीजिए-

डिजिटल इंडिया में डेटा का डिजिटलाइजेशन आसानी से होगा जो आगे चलकर चीजों को तेज और ज्यादा मजबूत बनाने में _____ (1) होगा। यह कागजी कार्य, समय और मानव श्रम की भी _____ (2) करेगा। सरकार और निजी क्षेत्र के बीच गठबंधन के द्वारा यह प्रोजेक्ट गति _____ (3)। तेज गति नेटवर्क के साथ आपस में जुड़े हुए गाँव बड़े _____ (4) से गुजरेंगे। भारत में सभी शहर, नगर और गाँव _____ (5) तकनीकी होंगे।

SubQuestion No : 6

Q.6

गद्यांश में संकेतित रिक्त स्थान (1) के लिए उपयुक्त शब्द होगा।

- Ans
- 1. विभाजक
 - 2. सहायक
 - 3. रोधक
 - 4. बाधक

Question ID : 9895807032
Chosen Option : --

Comprehension:

निम्नलिखित गद्यांश के रिक्त स्थानों की पूर्ति गद्यांश के नीचे दिए गए प्रश्नों के अनुसार कीजिए-

डिजिटल इंडिया में डेटा का डिजिटलाईजेशन आसानी से होगा जो आगे चलकर चीजों को तेज और ज्यादा मजबूत बनाने में _____ (1) होगा। यह कागजी कार्य, समय और मानव श्रम की भी _____ (2) करेगा। सरकार और निजी क्षेत्र के बीच गठबंधन के द्वारा यह प्रोजेक्ट गति _____ (3)। तेज गति नेटवर्क के साथ आपस में जुड़े हुए गाँव बड़े _____ (4) से गुजरेंगे। भारत में सभी शहर, नगर और गाँव _____ (5) तकनीकी होंगे।

SubQuestion No : 7

Q.7 गद्यांश में संकेतित रिक्त स्थान (2) के लिए उपयुक्त शब्द होगा।

- Ans
- 1. आय
 - 2. हानि
 - 3. बचत
 - 4. व्यय

Question ID : 9895807033
Chosen Option : --

Comprehension:

निम्नलिखित गद्यांश के रिक्त स्थानों की पूर्ति गद्यांश के नीचे दिए गए प्रश्नों के अनुसार कीजिए-

डिजिटल इंडिया में डेटा का डिजिटलाईजेशन आसानी से होगा जो आगे चलकर चीजों को तेज और ज्यादा मजबूत बनाने में _____ (1) होगा। यह कागजी कार्य, समय और मानव श्रम की भी _____ (2) करेगा। सरकार और निजी क्षेत्र के बीच गठबंधन के द्वारा यह प्रोजेक्ट गति _____ (3)। तेज गति नेटवर्क के साथ आपस में जुड़े हुए गाँव बड़े _____ (4) से गुजरेंगे। भारत में सभी शहर, नगर और गाँव _____ (5) तकनीकी होंगे।

SubQuestion No : 8

Q.8 गद्यांश में संकेतित रिक्त स्थान (3) के लिए उपयुक्त शब्द होगा।

- Ans
- 1. दौड़ेगा
 - 2. पकड़ेगा
 - 3. चलेगा
 - 4. रोकेगा

Question ID : 9895807034
Chosen Option : --

Comprehension:

निम्नलिखित गद्यांश के रिक्त स्थानों की पूर्ति गद्यांश के नीचे दिए गए प्रश्नों के अनुसार कीजिए-

डिजिटल इंडिया में डेटा का डिजिटलाइजेशन आसानी से होगा जो आगे चलकर चीजों को तेज और ज्यादा मजबूत बनाने में _____ (1) होगा। यह कागजी कार्य, समय और मानव श्रम की भी _____ (2) करेगा। सरकार और निजी क्षेत्र के बीच गठबंधन के द्वारा यह प्रोजेक्ट गति _____ (3)। तेज गति नेटवर्क के साथ आपस में जुड़े हुए गाँव बड़े _____ (4) से गुजरेंगे। भारत में सभी शहर, नगर और गाँव _____ (5) तकनीकी होंगे।

SubQuestion No : 9

Q.9 गद्यांश में संकेतित रिक्त स्थान (4) के लिए उपयुक्त शब्द होगा।

- Ans
- 1. लगाव
 - 2. बदलाव
 - 3. सुझाव
 - 4. चुनाव

Question ID : 9895807035
Chosen Option : --

Comprehension:

निम्नलिखित गद्यांश के रिक्त स्थानों की पूर्ति गद्यांश के नीचे दिए गए प्रश्नों के अनुसार कीजिए-

डिजिटल इंडिया में डेटा का डिजिटलाइजेशन आसानी से होगा जो आगे चलकर चीजों को तेज और ज्यादा मजबूत बनाने में _____ (1) होगा। यह कागजी कार्य, समय और मानव श्रम की भी _____ (2) करेगा। सरकार और निजी क्षेत्र के बीच गठबंधन के द्वारा यह प्रोजेक्ट गति _____ (3)। तेज गति नेटवर्क के साथ आपस में जुड़े हुए गाँव बड़े _____ (4) से गुजरेंगे। भारत में सभी शहर, नगर और गाँव _____ (5) तकनीकी होंगे।

SubQuestion No : 10

Q.1
0 गद्यांश में संकेतित रिक्त स्थान (5) के लिए उपयुक्त शब्द होगा।

- Ans
- 1. ज्यादा
 - 2. बड़ी
 - 3. भारी
 - 4. कम

Question ID : 9895807036
Chosen Option : --

Q.1
1 दिए गए वाक्य का वह भाग ज्ञात करें जिसमें कोई त्रुटि है।
किसी का आचरण वायु के झोंके से हिल नहीं सकती हैं।

- Ans
- 1. सकती हैं।
 - 2. हिल नहीं
 - 3. वायु के झोंके से
 - 4. किसी का आचरण

Question ID : 9895807021
Chosen Option : --

Q.1
2 दिए गए वाक्य का वह भाग ज्ञात करें जिसमें कोई त्रुटि है।
दुनिया में अनेक प्रकार के छल प्रपंचों का सूत्रपात हुई।

- Ans
- 1. सूत्रपात हुई।
 - 2. अनेक प्रकार के
 - 3. दुनिया में
 - 4. छल प्रपंचों का

Question ID : 9895807023
Chosen Option : --

Q.1
3 'जिसे कठिनाई से जीता जा सके' के लिए एक शब्द प्रयुक्त होता है-

- Ans
- 1. अज्ञेय
 - 2. अजेय
 - 3. दुर्जेय
 - 4. विजित

Question ID : 9895807044
Chosen Option : --

Q.1
4

'गूलर का फूल होना' मुहावरे का अर्थ है-

Ans

- 1. दुर्लभ होना
- 2. अमीर होना
- 3. सुलभ होना
- 4. हीन होना

Question ID : 9895807041
Chosen Option : --

Q.1 दिए गए वाक्य में रेखांकित खंड को प्रतिस्थापित करने के लिए उपयुक्त विकल्प का चयन करें।

विद्यापति के पद गाए जा सकते हैं।

Ans

- 1. पेय
- 2. प्रदेय
- 3. गोपनीय
- 4. गेय

Question ID : 9895807024
Chosen Option : --

Q.1 'पत्नी' का पर्याय शब्द है-

Ans

- 1. ललना
- 2. भार्या
- 3. कामिनी
- 4. महिला

Question ID : 9895807040
Chosen Option : --

Q.1 सही वर्तनी वाले शब्द का चयन करें।

Ans

- 1. विषाद
- 2. विशाद
- 3. वीषाद
- 4. विसाद

Question ID : 9895807045
Chosen Option : --

Q.1 दिए गए वाक्य में रेखांकित खंड को प्रतिस्थापित करने के लिए उपयुक्त विकल्प का चयन करें।

धर्म के कामों में सहयोग करना चाहिए।

Ans

- 1. धर्मवान
- 2. धार्मिक
- 3. धर्मीय

✗ 4. धर्मी

Question ID : 9895807026
Chosen Option : --

Q.1 'त्याग' का विलोम शब्द है-

- Ans
- ✗ 1. ग्रहण
 - ✓ 2. परित्याग
 - ✗ 3. अनिश्चित
 - ✗ 4. विग्रह

Question ID : 9895807037
Chosen Option : --

Q.2 दिए गए वाक्य का वह भाग ज्ञात करें जिसमें कोई त्रुटि है।

इस नश्वर संसार के भोग विलास का सामग्रियाँ भी क्षणभंगुर हैं।

- Ans
- ✓ 1. इस नश्वर
 - ✗ 2. भोग विलास का सामग्रियाँ भी
 - ✗ 3. क्षणभंगुर हैं।
 - ✗ 4. संसार के

Question ID : 9895807022
Chosen Option : --

Q.2 रिक्त स्थान को भरने के लिए उपयुक्त शब्द का चयन करें।

दिल्ली से अनेक पत्रों और पत्रिकाओं का _____ होता है।

- Ans
- ✓ 1. प्रकाशन
 - ✗ 2. निर्माण
 - ✗ 3. निकलता
 - ✗ 4. बनना

Question ID : 9895807030
Chosen Option : --

Q.2 'होम कर देना' मुहावरे का अर्थ है-

- Ans
- ✗ 1. शंकित करना
 - ✓ 2. नष्ट कर देना
 - ✗ 3. आश्चर्य चकित कर देना
 - ✗ 4. हवन करना

Question ID : 9895807042
Chosen Option : --

Q.2

3 'नदी' का पर्यायवाची शब्द है-

- Ans
- 1. निर्झरिणी
 - 2. तालाब
 - 3. सर
 - 4. तड़ाग

Question ID : 9895807039

Chosen Option : --

Q.2
4 रिक्त स्थान को भरने के लिए उपयुक्त शब्द का चयन करें।

उसकी बुद्धि बड़ी _____ है।

- Ans
- 1. विकृति
 - 2. विशाल
 - 3. बुद्धिमान
 - 4. सूक्ष्म

Question ID : 9895807028

Chosen Option : --

Q.2
5 रिक्त स्थान को भरने के लिए उपयुक्त शब्द का चयन करें।

साहित्य और जीवन का _____ संबंध है।

- Ans
- 1. घोर
 - 2. पक्का
 - 3. प्रगाढ़
 - 4. मजबूत

Question ID : 9895807029

Chosen Option : --