

## Constable (GD) in CAPFs, NIA, SSF and Rifleman (GD) in Assam Rifles Examination, 2018

Roll No. :	<a href="http://www.GovtJobsAlert.In">www.GovtJobsAlert.In</a>
Registration No.	
Name :	
Exam Venue :	ION Digital Zone iDZ 2 Chinamushidiwada
Exam Time :	12:30 PM - 2:00 PM
Exam Date :	13/02/2019

Section : General Section

**Q.1** In a certain code, ENGINEER is written as REEINENG. How will PRODUCER be written in that code?

- Ans  1. RECDUPRO  
 2. RECUDORP  
 3. RECDVPRO  
 4. RECUDORP

Question ID : 9895804723

Chosen Option : 1

**Q.2** A square transparent sheet with a pattern is given. How will the pattern appear when the transparent sheet is folded along the dotted line?



Ans

- 1.
- 2.
- 3.
- 4.

Question ID : 9895804740

Chosen Option : --

**Q.3** Select the option that will correctly replace the question mark (?) in the series.

PKZ, NMX, LOV, JQT, ?

- Ans  1. HSR  
 2. ISO  
 3. HTP  
 4. HST

Question ID : 9895804717  
Chosen Option : 1

Q.4 The statements below are followed by two conclusions labeled I and II. Assuming that the information in the statements is true, even if it appears at variance with generally established facts, decide which conclusion(s) logically and definitely follow(s) from the information given in the statements.

Statements:

- 1) All gypsies are webs.
- 2) All webs are nest.

Conclusion:

- I. All nests are gypsies.
- II. Some nests are gypsies.

- Ans
- 1. Both conclusions follow.
  - 2. Only conclusion II follows.
  - 3. Only conclusion I follows.
  - 4. Either conclusion I or conclusion II follows.

Question ID : 9895804728  
Chosen Option : 3

Q.5 Select the option that is related to the third number in the same way as the second number is related to the first number.

17: 289:: 23: ?

- Ans
- 1. 529
  - 2. 625
  - 3. 144
  - 4. 169

Question ID : 9895804732  
Chosen Option : 1

Q.6 Select the option that will correctly replace the question mark (?) in the series.

10, 11, 19, 46, ?

- Ans
- 1. 110
  - 2. 105
  - 3. 82
  - 4. 77

Question ID : 9895804731  
Chosen Option : --

Q.7 Find out the two signs to be interchanged to make the following equation correct.

$$17 + 28 \times 4 - 5 \div 3 = 9$$

- Ans
- 1. - and  $\div$
  - 2. + and -
  - 3.  $\times$  and  $\div$
  - 4. - and  $\times$

Question ID : 9895804735  
Chosen Option : --

Q.8

Choose the odd one out of the given options.

- Ans
- 1. Garlic
  - 2. Onion
  - 3. Mustard
  - 4. Ginger

Question ID : 9895804719  
Chosen Option : 3

Q.9 Choose the option that most closely resembles the mirror image of the given word when mirror is placed at right side.

CLAMBER

- Ans
- 1. REBMAJQ
  - 2. CLAMBER
  - 3. REBWA7Q
  - 4. REBWAJQ

Question ID : 9895804739  
Chosen Option : 1

Q.1 Select the option that is related to the third term in the same way as the second term is related to the first term.

0

DFH: HLP:: EGI : ?

- Ans
- 1. JMP
  - 2. JNR
  - 3. JMR
  - 4. JNP

Question ID : 9895804722  
Chosen Option : 2

Q.1 Choose the odd number out of the given options.

1

- Ans
- 1. 373
  - 2. 317
  - 3. 247
  - 4. 319

Question ID : 9895804733  
Chosen Option : 3

Q.1 Choose the option in which the figure marked 'X' is embedded. (Rotation is not allowed)

2



X

Ans

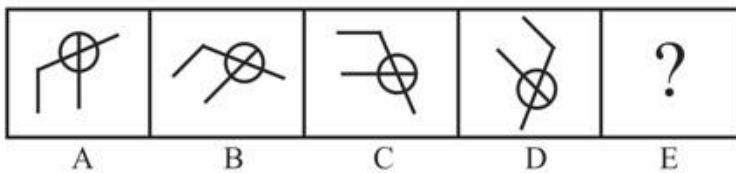
- 1.





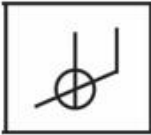

- 2. 
- 3. 
- 4. 

Question ID : 9895804738  
Chosen Option : 3

Q.1 <sub>3</sub> Choose the option that would follow next in the given figure series.



Ans

- 1. 
- 2. 
- 3. 
- 4. 

Question ID : 9895804736  
Chosen Option : 3

Q.1 <sub>4</sub> In a certain code, PENCIL is written as 59. How will ERASER be written in that code?

- 1. 66
- 2. 55
- 3. 65
- 4. 54

Question ID : 9895804724  
Chosen Option : 3

Q.1 <sub>5</sub>

Select the option that will correctly replace the question mark (?) in the series.

4, 20, 36, 52, ?

- Ans
- 1. 70
  - 2. 69
  - 3. 67
  - 4. 68

Question ID : 9895804730  
Chosen Option : 4

Q.1  
6 Seven friends O, P, Q, R, S, T and U are watching a movie sitting in a row. S is sitting at one extreme end. Q is sitting second to the right of S. P is sitting between O and Q. U is not sitting at any extreme end. R is sitting to the left of T. Who is sitting to the immediate left of P?


- Ans
- 1. O
  - 2. U
  - 3. R
  - 4. Q

Question ID : 9895804725  
Chosen Option : 4


Q.1  
7 Select the Venn diagram that best represents the given set of classes.

Trivandrum, India, Kerala

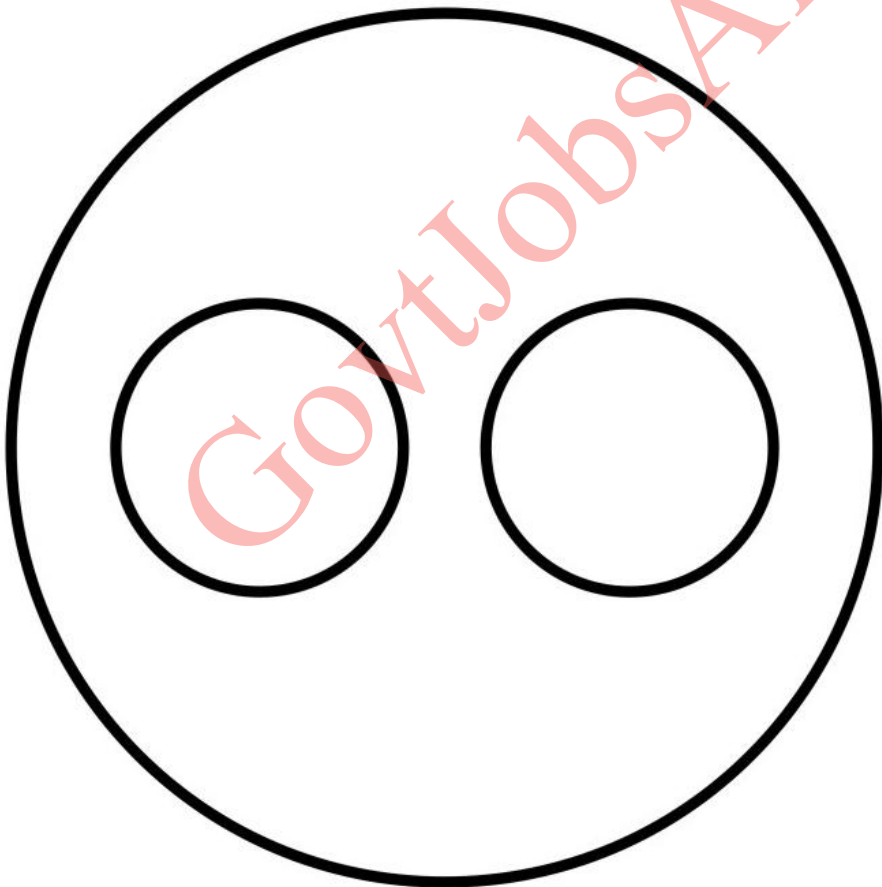
- Ans  1.



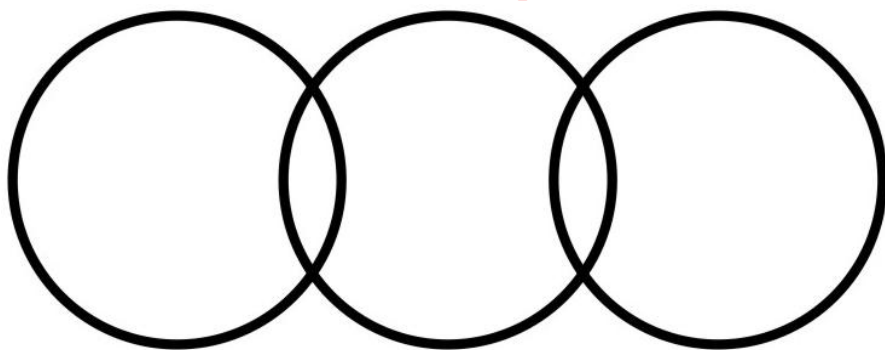
- 2.



X 3.



X 4.



Question ID : 9895804741  
Chosen Option : 2

Q.1 Select the option that is related to the third term in the same way as the second term is related to the first term.  
8

Dissipate: Squander:: Alight : ?

- Ans
- 1. Prohibition
  - 2. Descend
  - 3. Scarcity
  - 4. Illusion

Question ID : 9895804720  
Chosen Option : 2

Q.1 Select the option that will correctly replace the question mark (?) in the given pattern.  
9

13	23	?
3	4	6
39	92	66

- Ans
- 1. 13
  - 2. 7
  - 3. 11
  - 4. 9

Question ID : 9895804734  
Chosen Option : 1

Q.2 Choose the odd one out of the given options.  
0

- Ans
- 1. GFR
  - 2. NJG
  - 3. RST
  - 4. DHS

Question ID : 9895804718  
Chosen Option : 3

Q.2 Select the option that is related to the third term in the same way as the second term is related to the first term.  
1

Lock: Key::Horse: ?

Ans

- 1. Carriage
- 2. Bull
- 3. Ride
- 4. Saucer

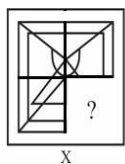
Question ID : 9895804721  
Chosen Option : 3

**Q.2** J, K, L, M, N and O are six teachers. Each one teaches a different subject out of Hindi, English, Math, Science, Social Science and Arts, not necessarily in the same order. Each of them teaches on only one day, from Monday to Saturday, not necessarily in the same order. J teaches Arts on Saturday. L teaches neither English nor Social Science, but he teaches on Thursday. Wednesday is reserved for Maths taught by K. O teaches Science a day before N. Social Science is taught a day before Arts. Which subject is taught on the first day of the week?

- Ans**
- 1. Science
  - 2. Hindi
  - 3. Arts
  - 4. English

Question ID : 9895804727  
Chosen Option : --

**Q.2** Select a figure from amongst the four alternatives that when placed in the blank space (?) of figure X will complete the pattern. (Rotation is not allowed).



- Ans**
- 1.
  - 2.
  - 3.
  - 4.

Question ID : 9895804737  
Chosen Option : 2

**Q.2** Eight friends A, B, C, D, E, F, G and H are sitting around a circular table facing each other for a lunch. A is opposite F and third to the right B. G is between F and D. H is to the left of D. E is between C and A. Who is sitting opposite E?

- Ans**
- 1. G
  - 2. B
  - 3. C
  - 4. H

Question ID : 9895804726  
Chosen Option : --

Q.2  
5



The statements below are followed by two conclusions labeled I and II. Assuming that the information in the statements is true, even if it appears at variance with generally established facts, decide which conclusion(s) logically and definitely follow(s) from the information given in the statements.

Statements:

- 1) Some zoos are hangers.
- 2) Some hangers are fishes.

Conclusion

- I. Some zoos are fishes.
- II. Some hangers are zoos.

- Ans  1. Only conclusion II follows.
2. Both conclusions follow.
3. Neither conclusion I nor conclusion II follows.
4. Only conclusion I follows.

Question ID : 9895804729  
Chosen Option : 4

Q.2  
6 Who was the Chairman of the Drafting Committee of the Constituent Assembly?

- Ans  1. Rajendra Prasad
2. B.R. Ambedkar
3. Jawaharlal Nehru
4. K.M. Muni

Question ID : 9895802637  
Chosen Option : 1

Q.2  
7 Who is the author of the book titled 'Becoming'?

- Ans  1. Milenia Trump
2. Shashi Tharoor
3. Michelle Obama
4. Therasa May

Question ID : 9895802630  
Chosen Option : --

Q.2  
8 Which of following sections of the Indian Constitution is also known as the 'conscience of the Indian Constitution'?

- Ans  1. Citizenship
2. Fundamental rights
3. Scheduled languages
4. Federalism

Question ID : 9895802636  
Chosen Option : 2

Q.2  
9 Which of the following is a non-essential life process?

- Ans  1. Reproduction
2. Excretion

3. Nutrition

4. Communication

Question ID : 9895802640

Chosen Option : 4

Q.3  
0 Which of the following statements is incorrect about hypermetropia?

Ans  1. Elongation of the eye ball is one of the causes of the defect.

2. It is also known as far-sightedness.

3. The affected person cannot see nearby objects properly.

4.

It may also arise because the focal length of the eye lens is too long.

Question ID : 9895802638

Chosen Option : --

Q.3  
1 Rohan Bopanna, the Arjuna Puraskar awardee of 2018, is known for accomplishments in which sport?

Ans  1. Tennis

2. Wrestling

3. Shooting

4. Para-badminton

Question ID : 9895802628

Chosen Option : --

Q.3  
2 Who designed the Swaraj Flag during the Swadesi Movement in India?

Ans  1. Abanindranath Tagore

2. Mahatma Gandhi

3. Bal Gangadhar Tilak

4. Rabindranath Tagore

Question ID : 9895802648

Chosen Option : 2

Q.3  
3 Which of the following organizations publishes the World Development Report?

Ans  1. UNESCO

2. World Bank

3. UNDP

4. IMF

Question ID : 9895802632

Chosen Option : 1

Q.3  
4 Which of the following departments of the Government of India runs payments banks?

Ans  1. Department of Economic Affairs

2. Department of Posts

3. Department of Accounting Affairs

4. Department of Financial Inclusion

Question ID : 9895802633

Chosen Option : 4

Q.3  
5 Which is the highest peak of Western Ghats?

Ans  1. Dodda Betta

2. Mahendragiri

3. Anamudi

4. Baba Budan Giri

Question ID : 9895802643

Chosen Option : --

Q.3  
6 In the Indian constitution, the power to legislate on the 'residual matters' has been assigned to:

Ans  1. the Union Government

2. the High Courts

3. the Supreme Court

4. the State Governments

Question ID : 9895802635

Chosen Option : 3

Q.3  
7 Which of the following states has the highest population density?

Ans  1. Bihar

2. Tamil Nadu

3. West Bengal

4. Uttar Pradesh

Question ID : 9895802645

Chosen Option : 4

Q.3  
8 Which of the following statements about gravitational force is NOT correct?

Ans  1.

It is inversely proportional to the square of the distance between the objects.

2.

Newton relied on the theories of Kepler in his research on the gravitational force.

3.

It is inversely proportional to the product of the masses of the objects.

4.

It is the force responsible for the attraction of every object of the universe towards each other.

Question ID : 9895802642

Chosen Option : 4

Q.3  
9 Ramnath Goenka Awards are conferred for contributions in the field of:

Ans  1. rural sanitation

2. journalism

3. women empowerment

4. sports

Question ID : 9895802629

Chosen Option : --

Q.4  
0 Which of the following is NOT a folk dance form associated with Assam?

Ans  1. Bihu

2. Bagurumba

3. Mandjas

4. Satriya Nritya

Question ID : 9895802625

Chosen Option : 4

Q.4  
1 Maulana Abul Kalam Azad (MAKA) Trophy is given by the Union Government to:

Ans  1. overall top performing state in national-level tournaments

2.

corporate entities who have played a visible role in the area of sports promotion and development

3.

overall top performing university in inter-university tournaments

4.

overall top performing athlete in international events organized in the year

Question ID : 9895802627

Chosen Option : --

Q.4  
2 Indian businessman and philanthropist Azim Premji was recently conferred Chevalier de la Legion d'Honneur. It is the highest civilian distinction of:

Ans  1. Britain

2. France

3. Spain

4. Germany

Question ID : 9895802631

Chosen Option : 1

Q.4  
3 Which of the following is NOT a world heritage site?

Ans  1. Agra Fort

2. Adamgarh Rock Shelters

3. Ajanta Caves

4. Bhimbetka Rock Shelters

Question ID : 9895802626

Chosen Option : 1

Q.4  
4 The part of a leaf which connects it to the stem is called:

- Ans
- 1. lamina
  - 2. vein
  - 3. petiole
  - 4. stipules

Question ID : 9895802641  
Chosen Option : 2

Q.4  
5 Which of the following options is a harvest festival?

- Ans
- 1. Onam
  - 2. Janmashtami
  - 3. Dussehra
  - 4. Akshaya Tritiya

Question ID : 9895802624  
Chosen Option : 1

Q.4  
6 Who was the father of Sultana Raziya?

- Ans
- 1. Muhammad Tughluq
  - 2. Balban
  - 3. Iltutmish
  - 4. Kaikubad

Question ID : 9895802647  
Chosen Option : 1

Q.4  
7 Which of the following schemes is NOT among the Union Government's steps for financial inclusion?

- Ans
- 1. Pradhan Mantri Jeevan Jyoti Bima Yojana
  - 2. Pradhan Mantri Jan Dhan Yojana
  - 3. Pradhan Mantri Ujjawala Yojana
  - 4. Pradhan Mantri Suraksha Bima Yojana

Question ID : 9895802634  
Chosen Option : 3

Q.4  
8 In any food chain, the top level is occupied by:

- Ans
- 1. lions
  - 2. human beings
  - 3. serpents
  - 4. eagle

Question ID : 9895802639  
Chosen Option : 1

Q.4  
9 Which of the following is NOT a Neolithic cultural site?

- Ans
- 1. Kuntasi

- 2. Koldihwa
- 3. Mehrgarh
- 4. Burzahom

Question ID : 9895802646  
Chosen Option : 3

Q.5  
0 Which of the following rivers forms the famous Sivasamudram Falls?

- Ans
- 1. Kali Sind
  - 2. Kaveri
  - 3. Tungabhadra
  - 4. Krishna

Question ID : 9895802644  
Chosen Option : 2

Q.5  
1 What is the value of  $680 - 520 \div 5 - \frac{12}{13}$  of  $\left(\frac{3}{4} + \frac{1}{3}\right)$  ?

- Ans
- 1. 574
  - 2. 577
  - 3. 571
  - 4. 575

Question ID : 9895804361  
Chosen Option : 2

Q.5  
2 The length breadth and height of a cuboid are in the ratio 5 : 4 : 2. If the volume of cuboid is  $5000 \text{ cm}^3$ , then what will be the total surface area of the cuboid?

- Ans
- 1.  $1900 \text{ cm}^2$
  - 2.  $1750 \text{ cm}^2$
  - 3.  $2100 \text{ cm}^2$
  - 4.  $1800 \text{ cm}^2$

Question ID : 9895804379  
Chosen Option : --

Q.5  
3 What is the value of  $528 - 24 \times \frac{4}{3}$  of  $\frac{25}{7} \div \frac{1}{2}$  ?

- Ans
- 1. 1920/7
  - 2. 2125/9
  - 3. 1926/7
  - 4. 2096/7

Question ID : 9895804360  
Chosen Option : 2

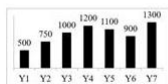
Q.5  
4 If the average of six consecutive even numbers is 11, then what will be the smallest number among them?

- Ans
- 1. 6
  - 2. 4

- 3. 8
- 4. 10

Question ID : 9895804363  
Chosen Option : --

Q.5 The bar chart given below shows the total exports (in ₹ 1000 crores) of a country for 7 consecutive years Y1, Y2, Y3, Y4, Y5, Y6 and Y7.



Which year shows the highest percentage change in the exports as compare to previous year?

- Ans
- 1. Y3
  - 2. Y4
  - 3. Y2
  - 4. Y5

Question ID : 9895804382  
Chosen Option : 3

Q.5 If cost price of an article is ₹1126 and loss is 22%, then what will be the net loss?

- Ans
- 1. ₹252.60
  - 2. ₹247.72
  - 3. ₹260.52
  - 4. ₹232.20

Question ID : 9895804367  
Chosen Option : 2

Q.5 Working 4 hours in a day, R can complete a work in 12 days and working 8 hours in a day, A can complete the same work in 9 days. Working 2 hours in a day, in how many days both R and A together can complete the same work?

- Ans
- 1. 72/5 days
  - 2. 72 days
  - 3. 36/5 days
  - 4. 48/5 days

Question ID : 9895804375  
Chosen Option : 2

Q.5 Cost price of first article is ₹480 and selling price of second article is ₹480. If there is a profit of 20% on first article and loss of 20% on second article, then what will be the total loss?

- Ans
- 1. ₹24
  - 2. ₹18
  - 3. ₹20
  - 4. No profit no loss

Question ID : 9895804368  
Chosen Option : 2

Q.5 Curved surface area of a cylinder is 1056 cm<sup>2</sup>. If the height of cylinder is 8 cm, then what will be the diameter of its base?

- Ans
- 1. 21 cm

- 2. 24.5 cm
- 3. 14.5 cm
- 4. 42 cm

Question ID : 9895804378  
Chosen Option : 2

Q.6 If Highest common Factor of two numbers is 12, then which of the following cannot be their Least Common Multiple?  
0

- Ans
- 1. 60
  - 2. 48
  - 3. 24
  - 4. 80

Question ID : 9895804359  
Chosen Option : 2

Q.6 1400 boys and 900 girls gave an exam. If 52% boys and 68% girls pass in the exam, then what is the percentage of students who failed in the exam?  
1

- Ans
- 1. 63.72%
  - 2. 41.74%
  - 3. 58.26%
  - 4. 36.28%

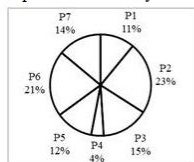
Question ID : 9895804365  
Chosen Option : 2

Q.6 Manoj covers two distances of 20 km and 36 km in 5 hours and 3 hours respectively. What will be the average speed of Manoj for the whole journey?  
2

- Ans
- 1. 8 km/hr
  - 2. 7 km/hr
  - 3. 5 km/hr
  - 4. 6 km/hr

Question ID : 9895804377  
Chosen Option : 2

Q.6 The pie chart given below shows the imports of 7 different items P1, P2, P3, P4, P5, P6 and P7 as a percentage of total imports of a country.  
3



If the total import of the country is ₹ 3000000, then how much is the import of item P6?

- Ans
- 1. 450000
  - 2. 720000
  - 3. 630000
  - 4. 690000

Question ID : 9895804383  
Chosen Option : 3

Q.6 In a shop there are 60 articles. The average cost of 30 articles is ₹30 and the average cost of the remaining articles is ₹35. What is the average cost of all the articles together?  
4



- Ans  1. ₹33  
 2. ₹32.5  
 3. ₹33.5  
 4. ₹34

Question ID : 9895804362  
Chosen Option : 2

Q.6 Mohit and Sumit start a business with investment of ₹66000 and ₹84000 respectively. If at the end of the year they earn profit in the ratio of 11 : 9, then what will be ratio of the time period for which they invest their money?

- Ans  1. 14 : 9  
 2. 33 : 42  
 3. 9 : 11  
 4. 7 : 11

Question ID : 9895804369  
Chosen Option : 2

Q.6 Marked price of a machine is 70% more than its cost price. If machine is sold at a profit of 44.5%, then what will be the discount percentage?

- Ans  1. 15%  
 2. 20%  
 3. 25%  
 4. 17%

Question ID : 9895804364  
Chosen Option : 2

Q.6 A 420 metre long train is moving at the speed of 120 km/hr. How much time it will take to cross a 580 metres long platform?

- Ans  1. 30 seconds  
 2. 48 seconds  
 3. 40 seconds  
 4. 45 seconds

Question ID : 9895804376  
Chosen Option : 2

Q.6 A number is increased by 40% and the resultant is decreased by 25%. What will be the total percentage increase?

- Ans  1. 10%  
 2. 6%  
 3. 5%  
 4. 4%

Question ID : 9895804366  
Chosen Option : 2

Q.6 If  $p : q = 7 : 8$ , then what will be  $(p^2/q) : (q^2/p)$ ?

- Ans  1. 512 : 343  
 2. 49 : 64  
 3. 343 : 512

4. 7 : 8

Question ID : 9895804371  
Chosen Option : 2

Q.7 Simple interest on a sum for 4 years is ₹ 24000 and the compound interest on the same sum at same rate of interest (interest is compounded annually) for 2 years is ₹ 12750. What is the rate of interest per annum?

- Ans  1. 12.5%  
 2. 20%  
 3. 15%  
 4. 18%

Question ID : 9895804373  
Chosen Option : 2

Q.7 A bag has white and yellow balls in the ratio 12 : 17 respectively. If the total number of balls is 116, then how many balls are yellow?

- Ans  1. 62  
 2. 74  
 3. 68  
 4. 76

Question ID : 9895804370  
Chosen Option : 2

Q.7 18 workers can complete one-third of a work in 27 days. How many workers can complete the same whole work in 9 days?

- Ans  1. 128 days  
 2. 162 days  
 3. 112 days  
 4. 148 days

Question ID : 9895804374  
Chosen Option : --

Q.7 The ratio of the areas of two triangles is 6 : 1 and the ratio of their bases is 3 : 2. What will be the ratio of their height?

- Ans  1. 5 : 1  
 2. 4 : 1  
 3. 2 : 1  
 4. 2 : 3

Question ID : 9895804380  
Chosen Option : --

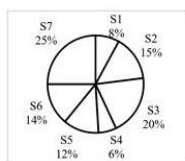
Q.7 A sum of ₹10000 becomes ₹16000 at the rate of 15% per annum on simple interest in P years. What will be the value of P?

- Ans  1. 3 years  
 2. 4 years  
 3. 6 years  
 4. 5 years

Question ID : 9895804372

Chosen Option : --

Q.7 The pie chart given below shows the annual snowfall received by 7 states of a country. The snowfall is shown as a percentage of total annual snowfall of the country.



If the annual snowfall received by the country is 700 cm. What is the average annual snowfall of S2, S6 and S7?

- Ans
- 1. Cannot be determined
  - 2. 154 cm
  - 3. 126 cm
  - 4. 84 cm

Question ID : 9895804381

Chosen Option : --

Section : English Language

Q.1 Identify the segment in the sentence which contains the grammatical error from the given options.

Today we are closer to reaching an agreement that we were a few months ago.

- Ans
- 1. a few months ago
  - 2. to reaching
  - 3. we are closer
  - 4. that we were

Question ID : 9895804831

Chosen Option : 3

Q.2 Identify the segment in the sentence which contains the grammatical error from the given options.

We must realize that learning from mistakes are an important part of life.

- Ans
- 1. mistakes are
  - 2. part of life
  - 3. that learning from
  - 4. We must realize

Question ID : 9895804832

Chosen Option : 3

Q.3 Select the word which means the same as the group of words given.

That which cannot be conquered

- Ans
- 1. Incapable
  - 2. Invincible
  - 3. Inevitable
  - 4. Invisible

Question ID : 9895804827

Chosen Option : 3

Q.4 Select the most appropriate synonym of the given word.

GLOOMY

- Ans
- 1. Light
  - 2. Dull
  - 3. Bright
  - 4. Painful

Question ID : 9895804818  
Chosen Option : 3

Q.5 Select the word which means the same as the group of words given.

A person who eats too much

- Ans
- 1. Greedy
  - 2. Glutton
  - 3. Obese
  - 4. Liberal

Question ID : 9895804826  
Chosen Option : 2

Q.6 Select the correctly spe

- Ans
- 1. immigiate
  - 2. immidiate
  - 3. imediate
  - 4. immediate

Question ID : 9895804825  
Chosen Option : 4

Q.7 Select the most appropriate meaning of the given idiom.

Once in a blue moon

- Ans
- 1. Rarely
  - 2. Usually
  - 3. Never
  - 4. Frequently

Question ID : 9895804823  
Chosen Option : 1

Q.8 Select the most appropriate option to substitute the underlined segment in the given sentence. If there is no need to substitute it, select No improvement.

By seeing the cameras the villagers were convinced that the tourists intended to take photographs.

- Ans
- 1. Seeing the cameras
  - 2. Seen the cameras
  - 3. No improvement

4. Saw a camera

Question ID : 9895804837  
Chosen Option : 3

Q.9 Select the most appropriate word to fill in the blank.

He was vexed \_\_\_\_\_ the behaviour of his daughter.

- Ans
- 1. from
  - 2. for
  - 3. on
  - 4. with

Question ID : 9895804834  
Chosen Option : 4

**Comprehension:**

In the following passage some words have been deleted. Fill in the blanks with the help of the alternatives given. Select the most appropriate option for each number.

There is an important aspect which (1) \_\_\_\_\_ a mention in any discussion of the future of Indian theatre. It is the (2) \_\_\_\_\_ development of the cinema as a competitor for (3) \_\_\_\_\_ among people. In (4) \_\_\_\_\_ early flush of cinematic triumph, the experts in the field (5) \_\_\_\_\_ the extinction of the theatre.

SubQuestion No : 10

Q.1<sub>0</sub> Fill in blank (1) with the most appropriate option.

- Ans
- 1. involves
  - 2. deserves
  - 3. invites
  - 4. dictates

Question ID : 9895804839  
Chosen Option : 1

**Comprehension:**

In the following passage some words have been deleted. Fill in the blanks with the help of the alternatives given. Select the most appropriate option for each number.

There is an important aspect which (1) \_\_\_\_\_ a mention in any discussion of the future of Indian theatre. It is the (2) \_\_\_\_\_ development of the cinema as a competitor for (3) \_\_\_\_\_ among people. In (4) \_\_\_\_\_ early flush of cinematic triumph, the experts in the field (5) \_\_\_\_\_ the extinction of the theatre.

SubQuestion No : 11

Q.1<sub>1</sub> Fill in blank (2) with the most appropriate option.

- Ans
- 1. rapid
  - 2. prompt
  - 3. express
  - 4. hurried

Question ID : 9895804840  
Chosen Option : 1

**Comprehension:**

In the following passage some words have been deleted. Fill in the blanks with the help of the alternatives given. Select the most appropriate option for each number.

There is an important aspect which (1) \_\_\_\_\_ a mention in any discussion of the future of Indian theatre. It is the (2) \_\_\_\_\_ development of the cinema as a competitor for (3) \_\_\_\_\_ among people. In (4) \_\_\_\_\_ early flush of cinematic triumph, the experts in the field (5) \_\_\_\_\_ the extinction of the theatre.

SubQuestion No : 12

Q.1  
2 Fill in blank (3) with the most appropriate option.

- Ans
- 1. popularity
  - 2. demand
  - 3. fame
  - 4. choice

Question ID : 9895804841  
Chosen Option : 1

**Comprehension:**

In the following passage some words have been deleted. Fill in the blanks with the help of the alternatives given. Select the most appropriate option for each number.

There is an important aspect which (1) \_\_\_\_\_ a mention in any discussion of the future of Indian theatre. It is the (2) \_\_\_\_\_ development of the cinema as a competitor for (3) \_\_\_\_\_ among people. In (4) \_\_\_\_\_ early flush of cinematic triumph, the experts in the field (5) \_\_\_\_\_ the extinction of the theatre.

SubQuestion No : 13

Q.1  
3 Fill in blank (4) with the most appropriate option.

- Ans
- 1. a
  - 2. the
  - 3. some
  - 4. one

Question ID : 9895804842  
Chosen Option : 1

**Comprehension:**

In the following passage some words have been deleted. Fill in the blanks with the help of the alternatives given. Select the most appropriate option for each number.

There is an important aspect which (1) \_\_\_\_\_ a mention in any discussion of the future of Indian theatre. It is the (2) \_\_\_\_\_ development of the cinema as a competitor for (3) \_\_\_\_\_ among people. In (4) \_\_\_\_\_ early flush of cinematic triumph, the experts in the field (5) \_\_\_\_\_ the extinction of the theatre.

SubQuestion No : 14

Q.1  
4 Fill in blank (5) with the most appropriate option.

- Ans
- 1. predicted
  - 2. regarded
  - 3. calculated
  - 4. studied

Question ID : 9895804843  
Chosen Option : 4

Q.1  
5 Select the most appropriate meaning of the given idiom.

At daggers drawn

- Ans
- 1. Being irritated
  - 2. Being friendly
  - 3. Being familiar
  - 4. Being hostile

Question ID : 9895804822

Chosen Option : 1

Q.1  
6 Select the most appropriate synonym of the given word.

MENACE

- Ans
- 1. Help
  - 2. Delight
  - 3. Harassment
  - 4. Nuisance

Question ID : 9895804819  
Chosen Option : 1

Q.1  
7 Select the most appropriate ANTONYM of the given word.

SOGGY

- Ans
- 1. Cool
  - 2. Moist
  - 3. Damp
  - 4. Dry

Question ID : 9895804820  
Chosen Option : 1

Q.1  
8 Select the most appropriate option to substitute the underlined segment in the given sentence. If there is no need to substitute it, select No improvement.

One can succeed in business unless one is prepared to take risks.

- Ans
- 1. One cannot succeed
  - 2. No one cannot succeed
  - 3. No improvement
  - 4. One cannot hardly succeed

Question ID : 9895804835  
Chosen Option : 2

Q.1  
9 Select the most appropriate word to fill in the blank.

Owing to the heavy rains the office building was badly \_\_\_\_\_.

- Ans
- 1. damage
  - 2. damages
  - 3. damaged
  - 4. damaging

Question ID : 9895804833  
Chosen Option : 4

Q.2  
0 Identify the segment in the sentence which contains the grammatical error from the given options.

We have to check the records to find out how much cheques have been collected so far.

- Ans
- 1. have been collected

- 2. much cheques
- 3. have to check
- 4. to find out

Question ID : 9895804830  
Chosen Option : 1

Q.2  
1 Select the most appropriate word to fill in the blank.

While walking on the beach we \_\_\_\_\_ seashells.

- Ans
- 1. assembled
  - 2. increased
  - 3. needed
  - 4. collected

Question ID : 9895804829  
Chosen Option : 4

Q.2  
2 Select the correctly spelt word.

- Ans
- 1. Bagger
  - 2. Beggar
  - 3. Begger
  - 4. Baggar

Question ID : 9895804824  
Chosen Option : 3

Q.2  
3 Select the most appropriate option to substitute the underlined segment in the given sentence. If there is no need to substitute it, select No improvement.

I am not frightened of Shere Khan so I know that he is very cunning.

- Ans
- 1. in case I know
  - 2. No improvement
  - 3. so I know
  - 4. but I know

Question ID : 9895804836  
Chosen Option : 4

Q.2  
4 Select the most appropriate word to fill in the blank.

He \_\_\_\_\_ himself from taking sugary foods.

- Ans
- 1. recovered
  - 2. restricted
  - 3. resorted
  - 4. removed

Question ID : 9895804828  
Chosen Option : 2

Q.2



5 Select the most appropriate ANTONYM of the given word.

MISERABLE

- Ans
- 1. Lonely
  - 2. Cheerful
  - 3. Hopeless
  - 4. Miserly

Question ID : 9895804821  
Chosen Option : 3

Section : Hindi Language

Q.1 रिक्त स्थान को भरने के लिए उपयुक्त शब्द का चयन करें।

साहिल को पाँच \_\_\_\_\_ दूध चाहिए।

- Ans
- 1. मीटर
  - 2. किलो
  - 3. लीटर
  - 4. दर्जन

Question ID : 9895803780  
Chosen Option : --

Q.2 दिये गये वाक्यांश के लिए एक शब्द दीजिये।

साथ चलने वाला

- Ans
- 1. सहयोग
  - 2. प्रतिगामी
  - 3. सहगामी
  - 4. सहयोगी

Question ID : 9895803796  
Chosen Option : --

Q.3 दिए गए शब्द का विलोम चुनें।

कनिष्ठ

- Ans
- 1. वरिष्ठ
  - 2. सहकर्मी
  - 3. सहायक
  - 4. अनुदार

Question ID : 9895803790  
Chosen Option : --

Q.4

दिए गए शब्द के पर्यायवाची शब्द का चयन करें।

अभ्युदय

- Ans
- 1. उन्नति
  - 2. इच्छा
  - 3. अवनति
  - 4. आकांक्षा

Question ID : 9895803792  
Chosen Option : --

Q.5 निम्नलिखित में से उस विकल्प का चयन करें जो 'चेहरे पर हवाइयाँ उड़ना' मुहावरे का अर्थ व्यक्त करता है।

- Ans
- 1. प्रसन्न होना
  - 2. निश्चिंत होना
  - 3. चेहरे पर हवा लगाना
  - 4. घबरा जाना

Question ID : 9895803795  
Chosen Option : --

Q.6 दिये गये वाक्यांश के लिए एक शब्द दीजिये।

परोपकार करने वाला

- Ans
- 1. कृतज्ञ
  - 2. सहकारी
  - 3. कृतघ्न
  - 4. परोपकारी

Question ID : 9895803797  
Chosen Option : --

Q.7 दिए गए वाक्य में रेखांकित खंड को प्रतिस्थापित करने के लिए उपयुक्त विकल्प का चयन करें।

मजदूर ने चटनी की रोटी खाई और काम पर चला गया।

- Ans
- 1. मजदूर ने रोटी के चटनी खाई
  - 2. मजदूर ने रोटी का चटनी खाई
  - 3. मजदूर ने रोटी को चटनी खाई
  - 4. मजदूर ने चटनी से रोटी खाई

Question ID : 9895803779  
Chosen Option : --

Q.8 दिए गए वाक्य का वह भाग ज्ञात करें जिसमें कोई त्रुटि है।

संतों को जीवन परोपकार के लिए होता है।

Ans

- 1. संतों को
- 2. होता है।
- 3. परोपकार के लिए
- 4. जीवन

Question ID : 9895803775  
Chosen Option : --

Q.9 दिए गए वाक्य में रेखांकित खंड को प्रतिस्थापित करने के लिए उपयुक्त विकल्प का चयन करें।

अपने कार्य को अपने आप करना ही स्वावलंबन कहलाती है।

Ans

- 1. स्वावलंबन कहलाता है।
- 2. स्वावलंबन कहलाते हैं।
- 3. स्वावलंबी कहलाता हैं।
- 4. स्वावलंबन कहलाते है।

Question ID : 9895803777  
Chosen Option : --

Q.1  
0 सही वर्तनी वाले शब्द का चयन करें।

Ans

- 1. निराकार
- 2. निर्कार
- 3. निरकार
- 4. नीराकार

Question ID : 9895803799  
Chosen Option : --

Q.1  
1 दिए गए शब्द के पर्यायवाची शब्द का चयन करें।

प्रकृति

Ans

- 1. कुदरत
- 2. हरियाली
- 3. सृष्टि
- 4. संसार

Question ID : 9895803793  
Chosen Option : --

Q.1  
2 निम्नलिखित में से उस विकल्प का चयन करें जो 'एक ही थैली के चढ़े-बढ़े' मुहावरे का अर्थ व्यक्त करता है।

Ans

- 1. एक जैसे लोग
- 2. एक शक्ति के लोग
- 3. एक थैले में चढ़े और बढ़े रखना

✗ 4. एक ही नाम वाले लोग

Question ID : 9895803794  
Chosen Option : --

Q.1  
3 दिए गए वाक्य का वह भाग ज्ञात करें जिसमें कोई त्रुटि है।

आज दुर्भाग्य से शिक्षण संस्थाओं पर अनुशासनहीनता का आधिक्य है।

Ans

- ✓ 1. आज दुर्भाग्य से  
✗ 2. शिक्षण संस्थाओं पर  
✗ 3. अनुशासनहीनता का  
✗ 4. आधिक्य है।

Question ID : 9895803776  
Chosen Option : --

Q.1  
4 रिक्त स्थान को भरने के लिए उपयुक्त शब्द का चयन करें।

राम ने रावण से \_\_\_\_\_ किया।

Ans

- ✗ 1. समझौता  
✗ 2. युद्ध  
✗ 3. ईर्ष्या  
✓ 4. भेदभाव

Question ID : 9895803783  
Chosen Option : --

Comprehension:

निम्नलिखित गद्यांश के रिक्त स्थानों की पूर्ति गद्यांश के नीचे दिए गए प्रश्नों के अनुसार कीजिए -

\_\_\_\_\_ (1) अनमोल धन है। इसकी \_\_\_\_\_ (2) किसी से भी नहीं की जा सकती। हीरे \_\_\_\_\_ (3) या सोने-चाँदी से भी नहीं। सच्ची मित्रता में किसी कारण से \_\_\_\_\_ (4) नहीं आ सकता। बाइबिल में कहा गया है कि एक सच्चा मित्र विश्व की \_\_\_\_\_ (5) दवा है।

SubQuestion No : 15

Q.1  
5 गद्यांश में संकेतित रिक्त स्थान (1) के लिए उपयुक्त शब्द होगा-

Ans

- ✗ 1. मित्रता  
✗ 2. भाईचारा  
✓ 3. बहनापा  
✗ 4. शिशुता

Question ID : 9895803785  
Chosen Option : --

Comprehension:

निम्नलिखित गद्यांश के रिक्त स्थानों की पूर्ति गद्यांश के नीचे दिए गए प्रश्नों के अनुसार कीजिए -

\_\_\_\_\_ (1) अनमोल धन है। इसकी \_\_\_\_\_ (2) किसी से भी नहीं की जा सकती। हीरे \_\_\_\_\_ (3) या सोने-चाँदी से भी नहीं। सच्ची मित्रता में किसी कारण से \_\_\_\_\_ (4) नहीं आ सकता। बाइबिल में कहा गया है कि एक सच्चा मित्र विश्व की \_\_\_\_\_ (5) दवा है।

SubQuestion No : 16

Q.1  
6 गद्यांश में संकेतित रिक्त स्थान (2) के लिए उपयुक्त शब्द होगा-

- Ans
- 1. उपेक्षा
  - 2. तुलना
  - 3. अपेक्षा
  - 4. बड़ाई

Question ID : 9895803786

Chosen Option : --

Comprehension:

निम्नलिखित गद्यांश के रिक्त स्थानों की पूर्ति गद्यांश के नीचे दिए गए प्रश्नों के अनुसार कीजिए -

\_\_\_\_\_ (1) अनमोल धन है। इसकी \_\_\_\_\_ (2) किसी से भी नहीं की जा सकती। हीरे \_\_\_\_\_ (3) या सोने-चाँदी से भी नहीं। सच्ची मित्रता में किसी कारण से \_\_\_\_\_ (4) नहीं आ सकता। बाइबिल में कहा गया है कि एक सच्चा मित्र विश्व की \_\_\_\_\_ (5) दवा है।

SubQuestion No : 17

Q.1  
7 गद्यांश में संकेतित रिक्त स्थान (3) के लिए उपयुक्त शब्द होगा

- Ans
- 1. मोती
  - 2. रूपा
  - 3. लाल
  - 4. रत्न

Question ID : 9895803787

Chosen Option : --

Comprehension:

निम्नलिखित गद्यांश के रिक्त स्थानों की पूर्ति गद्यांश के नीचे दिए गए प्रश्नों के अनुसार कीजिए -

\_\_\_\_\_ (1) अनमोल धन है। इसकी \_\_\_\_\_ (2) किसी से भी नहीं की जा सकती। हीरे \_\_\_\_\_ (3) या सोने-चाँदी से भी नहीं। सच्ची मित्रता में किसी कारण से \_\_\_\_\_ (4) नहीं आ सकता। बाइबिल में कहा गया है कि एक सच्चा मित्र विश्व की \_\_\_\_\_ (5) दवा है।

SubQuestion No : 18

Q.1 गद्यांश में संकेतित रिक्त स्थान (4) के लिए उपयुक्त शब्द होगा

- Ans
- 1. अपरिहार्य
  - 2. दखल
  - 3. हस्तक्षेप
  - 4. व्यवधान

Question ID : 9895803788  
Chosen Option : --

Comprehension:

निम्नलिखित गद्यांश के रिक्त स्थानों की पूर्ति गद्यांश के नीचे दिए गए प्रश्नों के अनुसार कीजिए -

\_\_\_\_\_ (1) अनमोल धन है। इसकी \_\_\_\_\_ (2) किसी से भी नहीं की जा सकती। हीरे \_\_\_\_\_ (3) या सोने-चाँदी से भी नहीं। सच्ची मित्रता में किसी कारण से \_\_\_\_\_ (4) नहीं आ सकता। बाइबिल में कहा गया है कि एक सच्चा मित्र विश्व की \_\_\_\_\_ (5) दवा है।

SubQuestion No : 19

Q.1 गद्यांश में संकेतित रिक्त स्थान (5) के लिए उपयुक्त शब्द होगा

- Ans
- 1. सर्वश्रेष्ठ
  - 2. हीन
  - 3. साधारण
  - 4. अधम

Question ID : 9895803789  
Chosen Option : --

Q.2 दिए गए वाक्य का वह भाग ज्ञात करें जिसमें कोई त्रुटि है।

मानव जाति अपने को पशुओं का श्रेष्ठ और सभ्य होने का दावा करती है।

- Ans
- 1. मानव जाति
  - 2. अपने को पशुओं का
  - 3. श्रेष्ठ और सभ्य होने का
  - 4. दावा करती है।

Question ID : 9895803774  
Chosen Option : --

Q.2 सही वर्तनी वाले शब्द का चयन करें।

- Ans
- 1. निरामिष
  - 2. निरामिश

3. निरामईष

4. नीरामिष

Question ID : 9895803798

Chosen Option : --

Q.2  
2 रिक्त स्थान को भरने के लिए उपयुक्त शब्द का चयन करें।

योद्धा ने बहादुरी के साथ \_\_\_\_\_ की।

Ans

1. लिखाई

2. रुलाई

3. लड़ाई

4. पढ़ाई

Question ID : 9895803781

Chosen Option : --

Q.2  
3 दिए गए वाक्य में रेखांकित खंड को प्रतिस्थापित करने के लिए उपयुक्त विकल्प का चयन करें।

जीवन अवसरों में एक धारा है।

Ans

1. अवसरों की एक धारा

2. अवसरों के एक धारा

3. अवसरों का एक धारा

4. अवसरों पर धारा

Question ID : 9895803778

Chosen Option : --

Q.2  
4 दिए गए शब्द का विलोम चुनें।

विस्तृत

Ans

1. संक्षिप्त

2. अधम

3. अवर

4. दीर्घ

Question ID : 9895803791

Chosen Option : --

Q.2  
5 रिक्त स्थान को भरने के लिए उपयुक्त शब्द का चयन करें।

नेता ने बहुत ही बढ़िया \_\_\_\_\_ दिया।

Ans

1. आख्यान

2. भाषण

3. वाद-विवाद

✘ 4. प्रवचन

Question ID : 9895803782

Chosen Option : --

GovtJobsAlert.In