

Constable (GD) in CAPFs, NIA, SSF and Rifleman (GD) in Assam Rifles Examination, 2018

Roll No. :	www.GovtJobsAlert.In
Registration No.	
Name :	
Exam Venue :	iON Digital Zone iDZ Kaluchak
Exam Time :	4:00 PM - 5:30 PM
Exam Date :	13/02/2019

Section : General Section

Q.1 Select the option that will correctly replace the question mark (?) in the given pattern.

4	7	6
5	?	8
41	85	100

- Ans
- 1. 9
 - 2. 13
 - 3. 11
 - 4. 6

Question ID : 9895802818
Chosen Option : 4

Q.2 Select the option that will correctly replace the question mark (?) in the series.

7, 18, 40, 73, ?

- Ans
- 1. 117
 - 2. 115
 - 3. 127
 - 4. 107

Question ID : 9895802814
Chosen Option : 2

Q.3 Seven friends O, P, Q, R, S, T and U are watching a movie sitting in a row. S is sitting at one extreme end. Q is sitting second to the right of S. P is sitting between O and Q. U is not sitting at any extreme end. R is sitting to the left of T. Who is sitting to the immediate right of P?

- Ans
- 1. U
 - 2. R
 - 3. O
 - 4. Q

Question ID : 9895802809
Chosen Option : 2

Q.4 Select the option that is related to the third term in the same way as the second term is related to the first term.

Quarrel : War :: Wish: ?

- Ans
- 1. Drown
 - 2. Sad
 - 3. Ask
 - 4. Desire

Question ID : 9895802805
Chosen Option : 4

Q.5 The statements below are followed by two conclusions labeled I and II. Assuming that the information in the statements is true, even if it appears at variance with generally established facts, decide which conclusion(s) logically and definitely follow(s) from the information given in the statements.

Statements:

- 1) All goats are dogs.
- 2) Some goats are cows.

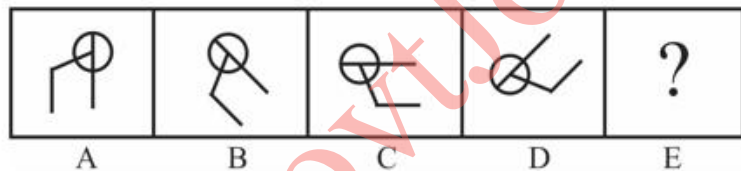
Conclusion:

- I. Some dogs are cows.
- III. Some cows are dogs.

- Ans
- 1. Neither conclusion I nor conclusion II follows.
 - 2. Both conclusions follow.
 - 3. Only conclusion I follows.
 - 4. Only conclusion II follows.

Question ID : 9895802813
Chosen Option : 2

Q.6 Choose the option that would follow next in the given figure series.



- Ans
- 1.
 - 2.
 - 3.
 - 4.

Question ID : 9895802820

Chosen Option : 2

Q.7 Choose the odd one out of the given options.

- Ans 1. Vienna
 2. Bahrain
 3. Canberra
 4. Kabul

Question ID : 9895802803

Chosen Option : 3

Q.8 Find out the two signs to be interchanged to make the following equation correct.

$$24 + 2 \times 2 - 6 + 3 = 22$$

- Ans 1. + and ×
 2. + and -
 3. × and ÷
 4. - and ÷

Question ID : 9895802819

Chosen Option : 2

Q.9 In a certain code, OOOLOGY is written as 89. How will VIROLOGY be written in that code?

- Ans 1. 123
 2. 89
 3. 97
 4. 113

Question ID : 9895802808

Chosen Option : 1

Q.1 In a certain code, CONCOLOGY is written as YGOLOCNOC. How will PALAEOGRAPHY be written in that code?

0

- Ans 1. YHPARGEOALAP
 2. YHPARGOAEALAP
 3. YHPARGOEALAP
 4. YHPRAGOEALAP

Question ID : 9895802807

Chosen Option : 3

Q.1 Choose the odd number out of the given options.

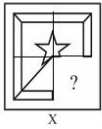
- Ans 1. 519
 2. 276
 3. 357
 4. 566

Question ID : 9895802817

Chosen Option : 4

Q.1

2 Select a figure from amongst the four alternatives that when placed in the blank space (?) of figure X will complete the pattern. (Rotation is not allowed).



Ans

✓ 1.



✗ 2.



✗ 3.



✗ 4.



Question ID : 9895802821

Chosen Option : 1

Q.1 Select the option that is related to the third number in the same way as the second number is related to the first number.

3

19: 441 :: 17: ?

Ans

✗ 1. 169

✗ 2. 225

✗ 3. 144

✓ 4. 361

Question ID : 9895802816

Chosen Option : 4

Q.1 Select the option that will correctly replace the question mark (?) in the series.

4

QLA, ONY, MPW, KRU, ?

Ans

✗ 1. ITU

✓ 2. ITS

✗ 3. IST

✗ 4. JTS

Question ID : 9895802801

Chosen Option : 4

Q.1 There is only one dictionary in a Library which will be used by 6 students P, Q, R, S, T and U, one by one. S will use it immediately after Q and before P. T will use it immediately after R and before U. R will use the dictionary after P. Who will use the dictionary the last?

5

Ans

✓ 1. U

✗ 2. P

✗ 3. Q

✗ 4. T

Question ID : 9895802811

Chosen Option : 1

Q.1 ₆ Select the option that will correctly replace the question mark (?) in the series.

15, 19, 35, 71, ?

- Ans
- 1. 141
 - 2. 135
 - 3. 125
 - 4. 145

Question ID : 9895802815
Chosen Option : 1

Q.1 ₇ Select the option that is related to the third term in the same way as the second term is related to the first term.

Assume : Presume :: Calm : ?

- Ans
- 1. Peace
 - 2. Proclaim
 - 3. Ego
 - 4. Sedate

Question ID : 9895802804
Chosen Option : 1

Q.1 ₈ Choose the option in which the figure marked 'X' is embedded. (Rotation is not allowed)



X

- Ans
- 1.
 - 2.
 - 3.
 - 4.

Question ID : 9895802822
Chosen Option : 3

Q.1 ₉ Eight friends A, B, C, D, E, F, G and H are sitting around a circular table facing each other for a lunch. A is opposite F and third to the right of B. G is between F and D. H is to the left of D. E is between C and A. Who is sitting third to the right of A?

- Ans
- 1. B
 - 2. D
 - 3. G
 - 4. C

Question ID : 9895802810
Chosen Option : 1

Q.2 Select the option that is related to the third term in the same way as the second term is related to the first term.

0

DFH: IKM : EGI : ?

- Ans
- 1. JLI
 - 2. JLM
 - 3. JIM
 - 4. JLN



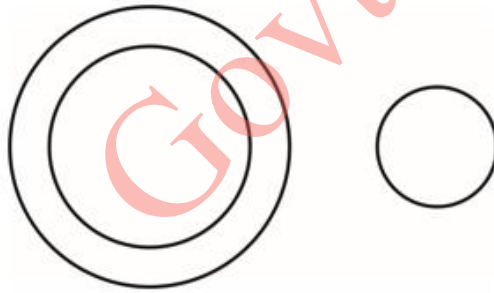
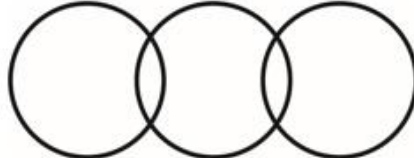
Question ID : 9895802806
Chosen Option : 4

Q.2 Select the Venn diagram that best represents the given set of classes.

1

India, Visakhapatnam, Andhra Pradesh

Ans

- 1. 
- 2. 
- 3. 
- 4. 

Question ID : 9895802825
Chosen Option : 2

Q.2 Choose the odd one out of the given options.

2

- Ans
- 1. HKO
 - 2. IET
 - 3. SGH

✓ 4. SHT

Question ID : 9895802802
Chosen Option : 4

Q.2 The statements below are followed by two conclusions labeled I and II. Assuming that the information in the statements is true, even if it appears at variance with generally established facts, decide which conclusion(s) logically and definitely follow(s) from the information given in the statements.

Statements:

- 1) All birds are cups.
- 2) Some cups are cats.

Conclusion:

- I. All birds are cats.
- II. Some cups are birds.

- Ans**
- ✗ 1. Both conclusions follow.
 - ✗ 2. Either conclusion I or conclusion II follows.
 - ✗ 3. Only conclusion I follows.
 - ✓ 4. Only conclusion II follows.

Question ID : 9895802812
Chosen Option : 3

Q.2 A square transparent sheet with a pattern is given. How will the pattern appear when the transparent sheet is folded along the dotted line?



- Ans**
- ✗ 1.
 - ✗ 2.
 - ✗ 3.
 - ✓ 4.

Question ID : 9895802824
Chosen Option : 4

Q.2 Choose the option that most closely resembles the mirror image of the given word when mirror is placed at right side.

QUENCH

- Ans**
- ✓ 1.
 - ✗ 2.

3. HONEUD

4. HONEUD

Question ID : 9895802823
Chosen Option : 1

Q.2
6 Magnus Carlsen is famous for which of the following sports?

- Ans 1. Football
 2. Tennis
 3. Carrom
 4. Chess

Question ID : 9895802862
Chosen Option : 1

Q.2
7 "The Long walk to Freedom" is the autobiography of:

- Ans 1. Martin Luther King
 2. Nelson Mandela
 3. Abraham Lincoln
 4. John F Kennedy

Question ID : 9895802864
Chosen Option : 3

Q.2
8 Which one of the following waves are used by the common TV remote control?

- Ans 1. Lasers
 2. Ultrasonic waves
 3. Radio waves
 4. Infrared waves

Question ID : 9895802860
Chosen Option : 4

Q.2
9 The novel "The God of Small Things" is inspired by which country?

- Ans 1. Nepal
 2. China
 3. Bangladesh
 4. India

Question ID : 9895802865
Chosen Option : 2

Q.3
0 Which of the following days is observed as the "Human Rights Day"?

- Ans 1. January 10
 2. December 10

- 3. February 10
- 4. November 10

Question ID : 9895802866
Chosen Option : 2

Q.3
1 According to Union Budget 2018, how much amount was allocated for Operation Green?

- Ans
- 1. 600 crore
 - 2. 400 crore
 - 3. 500 crore
 - 4. 700 crore

Question ID : 9895802855
Chosen Option : 2

Q.3
2 The ancient name of Coastal Orissa was:

- Ans
- 1. Kalinga
 - 2. Kamarupa
 - 3. Khandesh
 - 4. Kaushambi

Question ID : 9895802874
Chosen Option : 2

Q.3
3 A solution of which of the following is needed to test the presence of proteins?

- Ans
- 1. Copper sulphate and caustic soda solution
 - 2. Copper sulphate and iodine solution
 - 3. Iodine solution
 - 4. Iodine and caustic soda solution

Question ID : 9895802857
Chosen Option : 2

Q.3
4 Which of the below rivers is also referred to as “Dakshin Ganga”?

- Ans
- 1. Krishna
 - 2. Kaveri
 - 3. Periyar
 - 4. Godavari

Question ID : 9895802870
Chosen Option : 4

Q.3
5 The peninsular plateau of India is part of which of the following landmass?

- Ans
- 1. Gondwana land
 - 2. Tethys
 - 3. Andean
 - 4. Laurasia

Question ID : 9895802871
Chosen Option : 3

Q.3
6 As per the text 'Charaka Samhita' how many bones are there in a human body?

- Ans
- 1. 208
 - 2. 360
 - 3. 206
 - 4. 370

Question ID : 9895802873
Chosen Option : 3

Q.3
7 Which of the following statements describes "endemic species"?

- Ans
- 1. Species with less population may move to the category of endangered species.
 - 2. Species that are found only in some particular areas.
 - 3. Species that have come from abroad.
 - 4. Species that are not found existing after intense searches.

Question ID : 9895802872
Chosen Option : 3

Q.3
8 Which of the following aquatic animals does NOT have gills?

- Ans
- 1. Squid
 - 2. Whale
 - 3. Clownfish
 - 4. Octopus

Question ID : 9895802859
Chosen Option : 3

Q.3
9 The Sangai festival is celebrated in which of the following states of India?

- Ans
- 1. Arunachal Pradesh
 - 2. Meghalaya
 - 3. Nagaland
 - 4. Manipur

Question ID : 9895802869
Chosen Option : 3

Q.4
0 'Freedom is my birth right and I shall have it' was a slogan given by:

- Ans
- 1. Chittaranjan Das
 - 2. Gopal Krishna Gokhale
 - 3. Dada Bhai Naoroji
 - 4. Bal Gangadhar Tilak

Question ID : 9895802875

Chosen Option : 3

Q.4
1 Which of the following is NOT a major source of proteins?

- Ans
- 1. Fish
 - 2. Wheat
 - 3. Gram
 - 4. Soyabean

Question ID : 9895802858

Chosen Option : 3

Q.4
2 Which of the following terms is NOT used in the banking field?

- Ans
- 1. Zero hour
 - 2. Interest rate swap
 - 3. Repo rate
 - 4. Collateral

Question ID : 9895802856

Chosen Option : 4

Q.4
3 Which of the following articles of the Indian Constitution provides powers to the president of India to declare National emergency?

- Ans
- 1. Article 356
 - 2. Article 371
 - 3. Article 372
 - 4. Article 352

Question ID : 9895802852

Chosen Option : 1

Q.4
4 Which one of the following ministries presents the Economic Survey in the parliament every year?

- Ans
- 1. Finance
 - 2. Home Affairs
 - 3. Commerce
 - 4. Corporate Affairs

Question ID : 9895802854

Chosen Option : 2

Q.4
5 The Brihadeswara temple at Tanjore belongs to which of the religious sects?

- Ans
- 1. Vedic
 - 2. Nayanars
 - 3. Alvars
 - 4. Shakta

Question ID : 9895802867

Chosen Option : 2

Q.4
6 Which juice secreted by the organs in the alimentary canal plays an important role in the digestion of fats?

- Ans
- 1. Hydrochloric acid, mucus
 - 2. Saliva, hydrochloric acid
 - 3. Pancreatic juice, saliva
 - 4. Bile juice, Pancreatic juice

Question ID : 9895802861

Chosen Option : 2

Q.4
7 From which country did the Indian Constitution borrow the idea of directive principles of state policy?

- Ans
- 1. South Africa
 - 2. Ireland
 - 3. Germany
 - 4. Britain

Question ID : 9895802851

Chosen Option : 2

Q.4
8 The popular depiction named 'Ravana Shaking Mount Kailash' is depicted in which of the following caves?

- Ans
- 1. Ellora
 - 2. Kanheri
 - 3. Ajanta
 - 4. Hatigumpha

Question ID : 9895802868

Chosen Option : 2

Q.4
9 Who is the Ex-Officio Chairman of Rajya Sabha?

- Ans
- 1. Speaker
 - 2. Vice President of India
 - 3. Opposition Leader in Rajya Sabha
 - 4. Prime Minister

Question ID : 9895802853

Chosen Option : 4

Q.5
0 The National Sports Day is celebrated on which day in India?

- Ans
- 1. August 28
 - 2. August 29
 - 3. August 27
 - 4. August 26

Question ID : 9895802863

Chosen Option : 3

Q.5
1 In an election between-Ravi and Manoj, Ravi gets 61% of the total valid votes. If total votes were 25000 and 20% of the total votes were declared invalid, then other candidate Manoj get how much number of votes?

- Ans 1. 9750
 2. 8200
 3. 8025
 4. 7800

Question ID : 9895804599
 Chosen Option : 2

Q.5 P sells an article to Q at a loss of 5% and Q sells that article to R at a loss of 20%. If R pays ₹ 2812 for the article, then what was the cost price for P ?

- Ans 1. ₹ 3750
 2. ₹ 3515
 3. ₹ 3250
 4. ₹ 3700

Question ID : 9895804600
 Chosen Option : 2

Q.5 $\frac{5}{3}$ What is the value of $512 \div 16 + 4 \times \frac{5}{2}$ of $\left(\frac{1}{8} + \frac{1}{3}\right)$?

- Ans 1. $\frac{455}{12}$
 2. $\frac{439}{12}$
 3. $\frac{443}{12}$
 4. $\frac{449}{12}$

Question ID : 9895804593
 Chosen Option : 2

Q.5 In a class there are total 70 students. The average weight of 26 girls is 28 kg and average weight of the remaining students is 35 kg. What will be the average weight (in kg) of all 70 students?

- Ans 1. 35.2 kg
 2. 36.8 kg
 3. 32.4 kg
 4. 34.6 kg

Question ID : 9895804595
 Chosen Option : 2

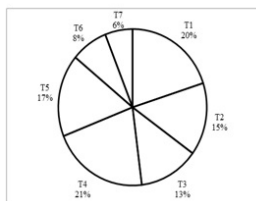
Q.5 Mohan covers a distance of 187 km at the speed of S km/hr. If Mohan increases his speed by 6 km/hr, then he takes 6 hours less. What is the value of S ?

- Ans 1. 14 km/hr
 2. 13 km/hr
 3. 11 km/hr
 4. 12 km/hr

Question ID : 9895804609
 Chosen Option : 2

Q.5

6 The pie chart given below shows sale of different types of cars in a city for a given year. The total sale of cars in the city is 600000.



How many T4 cars are sold in the city for the given year?

- Ans
- 1. 128000
 - 2. 126000
 - 3. 138000
 - 4. 144000

Question ID : 9895804616
Chosen Option : 2

Q.5 The perimeter of a rectangular table is 60 cm. If the area of the rectangular table is 209 cm^2 , then what will be the length of the table?

- 7
- Ans
- 1. 17 cm
 - 2. 21 cm
 - 3. 13 cm
 - 4. 19 cm

Question ID : 9895804612
Chosen Option : 2

Q.5 The compound interest on a sum for 5th year is ₹ 7800 and compound interest for sixth year is ₹ 9048 (interest is compounded annually). What is the rate of interest?

- 8
- Ans
- 1. 16%
 - 2. 15%
 - 3. 12%
 - 4. 14%

Question ID : 9895804606
Chosen Option : 4

Q.5 The radii of two circles are 15 cm and 8 cm. If the area of a third circle is equal to the sum of the areas of the two circles, then what will be the radius of the third circle?

- 9
- Ans
- 1. 19 cm
 - 2. 23 cm
 - 3. 17 cm
 - 4. 21 cm

Question ID : 9895804613
Chosen Option : 4

Q.6 If cost price of an article is ₹ 928 and profit is 15%, then what will be the net profit?

- 0
- Ans
- 1. ₹ 212
 - 2. ₹ 139.20
 - 3. ₹ 168.40
 - 4. ₹ 154.50

Question ID : 9895804601
Chosen Option : 4

Q.6 The average monthly expenditure of a family is ₹ 8160 for first 2 months, ₹ 12780 for next 5 months and ₹ 14280 for 5 months. If the family saves ₹ 66300 in the whole year, then what will be the average monthly income of the family?

- Ans
- 1. ₹ 18100
 - 2. ₹ 18000
 - 3. ₹ 18260
 - 4. ₹ 18160

Question ID : 9895804596
Chosen Option : 4

Q.6 Marked price of an article is 70% more than its cost price. After giving a discount of 10%, article is sold for ₹ 1071.

- 2 What will be the cost price of the article?
- Ans
- 1. ₹ 700
 - 2. ₹ 530
 - 3. ₹ 590
 - 4. ₹ 620

Question ID : 9895804597
Chosen Option : 4

Q.6 If $1/A : 1/B : 1/C = 2 : 3 : 4$, then what is the ratio of $A : B : C$?

- 3 Ans
- 1. 4 : 3 : 6
 - 2. 3 : 6 : 4
 - 3. 12 : 6 : 8
 - 4. 6 : 4 : 3

Question ID : 9895804603
Chosen Option : 4

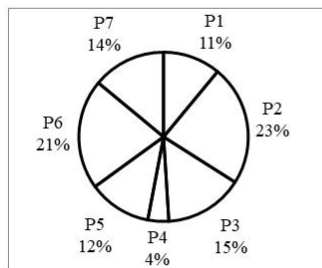
Q.6 What will be the Least Common Multiple of $2^2 \times 3^5 \times 7^3$ and $2^4 \times 3^4 \times 7^1$?

- 4 Ans
- 1. $2^2 \times 3^4 \times 7^1$
 - 2. $2^4 \times 3^5 \times 7^3$
 - 3. $2^6 \times 3^9 \times 7^4$
 - 4. $2^4 \times 3^6 \times 7^4$

Question ID : 9895804592
Chosen Option : 4

Q.6
5

The pie chart given below shows the imports of 7 different items P1, P2, P3, P4, P5, P6 and P7 as a percentage of total imports of a country.



If the total import of item P1 is ₹ 33000, then what is the value of imports of item P2?

- Ans
- 1. 46000
 - 2. 57500
 - 3. 80500
 - 4. 69000

Question ID : 9895804615
Chosen Option : 2

Q.6 The price of two articles are in the ratio of 5 : 6 respectively. The price of first article is increased by 30% and the price of second article is decreased by X%. If the new ratio is 13 : 11 respectively, then what is the value of X?

- Ans
- 1. 12.5
 - 2. 8.33
 - 3. 11.11
 - 4. 9.09

Question ID : 9895804604
Chosen Option : 2

Q.6 What is the value of $1040 \div 65 - 8 \times \frac{1}{2}$ of $\left(\frac{1}{2} - \frac{1}{3}\right)$?

- Ans
- 1. $\frac{44}{3}$
 - 2. $\frac{49}{3}$
 - 3. $\frac{46}{3}$
 - 4. $\frac{50}{3}$

Question ID : 9895804594
Chosen Option : 2

Q.6 Simple interest for three years for a certain sum at the rate of 15% is ₹ 9000. If the rate of interest becomes 30%, then what will be the simple interest for two years?

- Ans
- 1. ₹ 9000
 - 2. ₹ 27000
 - 3. ₹ 4500
 - 4. ₹ 12000

Question ID : 9895804605
Chosen Option : 2

Q.6 U, V and W invest sum in the ratio of 15 : 20 : 27 respectively. If they earned total profit of ₹ 10230 at the end of year, then what is the share of V ?

- Ans
- 1. ₹ 3500
 - 2. ₹ 3150
 - 3. ₹ 3300
 - 4. ₹ 2870

Question ID : 9895804602
Chosen Option : 3

Q.7 The data below shows the number of students in class A and B having secured different marks.

Marks	Students in class A	Students in class B
0-2	3	2
2-4	4	1
4-6	1	3
6-8	1	1
8-10	1	1
10-12	0	2

What is the combined mean of A and B?

- Ans
- 1. 3.75
 - 2. 3.5
 - 3. 4.7
 - 4. 4

Question ID : 9895804598
Chosen Option : 3

Q.7 The length and breadth of a rectangle is 16 cm and 12 cm. What will be the area of the rectangle?

- Ans
- 1. 212 cm²
 - 2. 176 cm²
 - 3. 144 cm²
 - 4. 192 cm²

Question ID : 9895804611
Chosen Option : 3

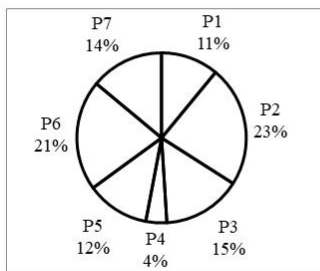
Q.7 If C alone can complete two-third part of a work in 12 days, then in how many days C can complete the whole work?

- Ans
- 1. 18 days
 - 2. 24 days
 - 3. 8 days
 - 4. 15 days

Question ID : 9895804608
Chosen Option : 3

Q.7
3

The pie chart given below shows the imports of 7 different items P1, P2, P3, P4, P5, P6 and P7 as a percentage of total imports of a country.



Imports of item P6 is how much percent more than the imports of item P5?

- Ans
- 1. 9%
 - 2. 80%
 - 3. 33%
 - 4. 75%

Question ID : 9895804614
Chosen Option : 3

Q.7 M can complete a work in 14 days less than the time taken by L. If both M and L together can complete the same work in 24 days, then in how many days M alone can complete the same work?

- Ans
- 1. 35 days
 - 2. 21 days
 - 3. 42 days
 - 4. 56 days

Question ID : 9895804607
Chosen Option : 3

Q.7 A 250 metre long train takes 30 seconds to cross a 350 metres long bridge. How much time train will take to cross a 550 metre long bridge?

- Ans
- 1. 40 seconds
 - 2. 38 seconds
 - 3. 42 seconds
 - 4. 35 seconds

Question ID : 9895804610
Chosen Option : 3

Section : English Language

Q.1 Select the most appropriate meaning of the given idiom.

At one's wits end

- Ans
- 1. Without aim or purpose
 - 2. To take note of something
 - 3. Not knowing what to do
 - 4. To disagree with something

Question ID : 9895804414
Chosen Option : --

Q.2 Identify the segment in the sentence which contains the grammatical error from the given options.

Even though I took a taxi, the train left before I reached the station.

- Ans
- 1. took a taxi
 - 2. Even though
 - 3. I reached
 - 4. the train left

Question ID : 9895804422
Chosen Option : --

Q.3 Select the most appropriate synonym of the given word.

ELABORATE

- Ans
- 1. Detailed
 - 2. Appropriate
 - 3. Elongated
 - 4. Sketchy

Question ID : 9895804410
Chosen Option : --

Q.4 Select the most appropriate antonym of the given word.

ABUNDANT

- Ans
- 1. scarce
 - 2. adequate
 - 3. sufficient
 - 4. plentiful

Question ID : 9895804412
Chosen Option : --

Q.5 Select the most appropriate meaning of the given idiom.

Hale and hearty.

- Ans
- 1. Healthy
 - 2. Happy
 - 3. Friendly
 - 4. Superior

Question ID : 9895804415
Chosen Option : --

Q.6 Select the correctly spelt word.

- Ans
- 1. Attendance
 - 2. Attandance
 - 3. Attendence

4. Attendance

Question ID : 9895804416
Chosen Option : --

Q.7 Identify the segment in the sentence which contains the grammatical error from the given options.

We would be very pleased if you could come to my house.

- Ans 1. come to
 2. my house
 3. if you
 4. would be

Question ID : 9895804423
Chosen Option : --

Q.8 Select the word which means the same as the group of words given.

One who collects stamps

- Ans 1. Philanthropist
 2. Plagiarist
 3. Philatelist
 4. Numismatist

Question ID : 9895804419
Chosen Option : --

Q.9 Select the word which means the same as the group of words given.

Originating or occurring naturally in the place or country where found.

- Ans 1. Indigenous
 2. Ordinary
 3. Ingenious
 4. National

Question ID : 9895804418
Chosen Option : --

Q.1 Select the most appropriate option to substitute the underlined segment in the given sentence. If there is no need to substitute it, select No improvement.

The state government has announced that it was giving financial helps to the economically weaker sections of society.

- Ans 1. will give financial helps
 2. No improvement.
 3. Gives financial helps
 4. will give financial help

Question ID : 9895804429
Chosen Option : --

Q.1
1

Select the most appropriate option to substitute the underlined segment in the given sentence. If there is no need to substitute it, select No improvement.

There is no reason why you should remain tense when I was promising to help you.

- Ans
- 1. No improvement.
 - 2. I have promised to help you
 - 3. I promising to help you
 - 4. I promised helping you

Question ID : 9895804427
Chosen Option : --

Q.1
2 Select the correctly spelt word.

- Ans
- 1. Beginning
 - 2. Bigining
 - 3. Begining
 - 4. Begginning

Question ID : 9895804417
Chosen Option : --

Q.1
3 Fill in the blanks with the most appropriate words.

Switch off the air conditioner _____ you will catch a cold.

- Ans
- 1. so
 - 2. but
 - 3. and
 - 4. or

Question ID : 9895804426
Chosen Option : --

Comprehension:

In the following passage some words have been deleted. Fill in the blanks with the help of the alternatives given. Select the most appropriate option for each number.

The most common act of forgetfulness, I suppose (1) _____ in the matter of posting letters. So common is it that I am always (2) _____ to trust a departing visitor to post an important (3) _____. So before handing over the letter I make him (4) _____ to post it immediately. As for myself, anyone (5) _____ asks me to post a letter is a poor judge of my character.

SubQuestion No : 14

Q.1
4 Fill in blank (1) with the most appropriate option.

- Ans
- 1. develops
 - 2. occurs
 - 3. takes
 - 4. creates

Question ID : 9895804431
Chosen Option : --

Comprehension:

In the following passage some words have been deleted. Fill in the blanks with the help of the alternatives given. Select the most appropriate option for each number.

The most common act of forgetfulness, I suppose (1) _____ in the matter of posting letters. So common is it that I am always (2) _____ to trust a departing visitor to post an important (3) _____. So before handing over the letter I make him (4) _____ to post it immediately. As for myself, anyone (5) _____ asks me to post a letter is a poor judge of my character.

SubQuestion No : 15

Q.1
5 Fill in blank (2) with the most appropriate option.

- Ans
- 1. willing
 - 2. indifferent
 - 3. reluctant
 - 4. frightened

Question ID : 9895804432
Chosen Option : --

Comprehension:

In the following passage some words have been deleted. Fill in the blanks with the help of the alternatives given. Select the most appropriate option for each number.

The most common act of forgetfulness, I suppose (1) _____ in the matter of posting letters. So common is it that I am always (2) _____ to trust a departing visitor to post an important (3) _____. So before handing over the letter I make him (4) _____ to post it immediately. As for myself, anyone (5) _____ asks me to post a letter is a poor judge of my character.

SubQuestion No : 16

Q.1
6 Fill in blank (3) with the most appropriate option.

- Ans
- 1. message
 - 2. mail
 - 3. parcel
 - 4. letter

Question ID : 9895804433
Chosen Option : --

Comprehension:

In the following passage some words have been deleted. Fill in the blanks with the help of the alternatives given. Select the most appropriate option for each number.

The most common act of forgetfulness, I suppose (1) _____ in the matter of posting letters. So common is it that I am always (2) _____ to trust a departing visitor to post an important (3) _____. So before handing over the letter I make him (4) _____ to post it immediately. As for myself, anyone (5) _____ asks me to post a letter is a poor judge of my character.

SubQuestion No : 17

Q.1
7 Fill in blank (4) with the most appropriate option.

- Ans
- 1. promise
 - 2. assure
 - 3. ready
 - 4. pledge

Question ID : 9895804434

Chosen Option : --

Comprehension:

In the following passage some words have been deleted. Fill in the blanks with the help of the alternatives given. Select the most appropriate option for each number.

The most common act of forgetfulness, I suppose (1) _____ in the matter of posting letters. So common is it that I am always (2) _____ to trust a departing visitor to post an important (3) _____. So before handing over the letter I make him (4) _____ to post it immediately. As for myself, anyone (5) _____ asks me to post a letter is a poor judge of my character.

SubQuestion No : 18

Q.1
8 Fill in blank (5) with the most appropriate option.

- Ans
- 1. which
 - 2. whom
 - 3. that
 - 4. who

Question ID : 9895804435

Chosen Option : --

Q.1
9 Fill in the blanks with the most appropriate words.

She has been reduced _____ a skeleton due to her illness.

- Ans
- 1. to
 - 2. with
 - 3. in
 - 4. for

Question ID : 9895804425

Chosen Option : --

Q.2
0 Select the most appropriate synonym of the given word.

GULLIBLE

- Ans
- 1. Credulous
 - 2. Knowledgeable
 - 3. Innocent
 - 4. Perceptive

Question ID : 9895804411
Chosen Option : --

Q.2
1 Select the most appropriate antonym of the given word.

ABSURD

- Ans
- 1. guilty
 - 2. sensible
 - 3. sincere
 - 4. ridiculous

Question ID : 9895804413
Chosen Option : --

Q.2
2 Select the most appropriate word to fill in the blank.

We need a _____ leader for the nation in these troubled times.

- Ans
- 1. gifted
 - 2. dynamic
 - 3. sturdy
 - 4. hard-core

Question ID : 9895804420
Chosen Option : --

Q.2
3 Select the most appropriate word to fill in the blank.

If you kill us, the Emperor can attack your kingdom on the _____ of avenging our death.

- Ans
- 1. pretext
 - 2. excuse
 - 3. pretense
 - 4. guise

Question ID : 9895804421
Chosen Option : --

Q.2
4 Identify the segment in the sentence which contains the grammatical error from the given options.

May I have your permission leaving the office a little early today?

- Ans
- 1. leaving

2. early today

3. May I have

4. a little

Question ID : 9895804424

Chosen Option : --

Q.2 Select the most appropriate option to substitute the underlined segment in the given sentence. If there is no need to substitute it, select No improvement.

Most of us fail to understand the objective of his frequent visits to this part of the country.

Ans 1. to understand the object of

2. to understand the objectives to

3. to understanding the objective of

4. No improvement.

Question ID : 9895804428

Chosen Option : --

Section : Hindi Language

Q.1 सही वर्तनी वाले शब्द का चयन करें।

Ans 1. प्रियदर्शी

2. प्रियदर्षी

3. प्रियदरसी

4. प्रियदर्शि

Question ID : 9895803924

Chosen Option : 1

Q.2 दिए गए शब्द का विलोम चुनें।

स्थूल

Ans 1. सूक्ष्म

2. अग्रज

3. स्थिर

4. अस्थिर

Question ID : 9895803916

Chosen Option : 1

Q.3 दिये गये वाक्यांश के लिए एक शब्द दीजिये।

जो कुछ न जानता हो

Ans 1. अल्पज्ञ

2. मर्मज्ञ

3. अज्ञ

✗ 4. सर्वज्ञ

Question ID : 9895803922
Chosen Option : 2

Q.4 दिए गए वाक्य में रेखांकित खंड को प्रतिस्थापित करने के लिए उपयुक्त विकल्प का चयन करें।

दादाजी मोटियाँ रोटियाँ नहीं खाते।

- Ans
- ✓ 1. मोटी रोटियाँ
 - ✗ 2. मोटे रोटियाँ
 - ✗ 3. मोटा रोटी
 - ✗ 4. रोटियाँ मोटियाँ

Question ID : 9895803905
Chosen Option : 1

Q.5 दिए गए शब्द का विलोम चुनें।

अज्ञ

- Ans
- ✗ 1. आज्ञा
 - ✗ 2. आस्था
 - ✗ 3. अनुज
 - ✓ 4. विज्ञ

Question ID : 9895803917
Chosen Option : 4

Q.6 सही वर्तनी वाले शब्द का चयन करें।

- Ans
- ✓ 1. तटस्थ
 - ✗ 2. तटष्ठ
 - ✗ 3. टतस्थ
 - ✗ 4. ततष्ठ

Question ID : 9895803925
Chosen Option : 1

Q.7 निम्नलिखित में से उस विकल्प का चयन करें जो 'जमीन आसमान एक करना' मुहावरे का अर्थ व्यक्त करता है।

- Ans
- ✓ 1. बहुत अधिक परिश्रम करना
 - ✗ 2. कम परिश्रम करना
 - ✗ 3. जमीन को आसमान तक ले जाना
 - ✗ 4. जमीन और आसमान को मिलाना

Question ID : 9895803921
Chosen Option : 1

Q.8 निम्नलिखित में से उस विकल्प का चयन करें जो 'छाती पर मूँग दलना' मुहावरे का अर्थ व्यक्त करता है।

- Ans
- ✗ 1. सुख देना

- ✓ 2. दुख देना
✗ 3. छाती से मूँग पीसना
✗ 4. दली हुई मूँग को छाती पर रखना

Question ID : 9895803920
Chosen Option : 2

Q.9 दिए गए वाक्य में रेखांकित खंड को प्रतिस्थापित करने के लिए उपयुक्त विकल्प का चयन करें।
व्यक्ति को अपना जीवन सफल बनाने के लिए आशा पर सहारा लेना चाहिए।

- Ans ✓ 1. आशा का सहारा
✗ 2. आशा के सहारा
✗ 3. आशा की सहारा
✗ 4. आशाओं ने सहारा

Question ID : 9895803904
Chosen Option : 1

Q.1 रिक्त स्थान को भरने के लिए उपयुक्त शब्द का चयन करें।
मैं _____ को परेशान नहीं करूँगा।

- Ans ✗ 1. कोई
✓ 2. किसी
✗ 3. कुछ
✗ 4. कभी

Question ID : 9895803907
Chosen Option : 2

Q.1 दिए गए वाक्य का वह भाग ज्ञात करें जिसमें कोई त्रुटि है।
अपनी आय में से भावी जीवन के लिए कुछ अंश बचाकर रखनी बचत कहलाता है।

- Ans ✗ 1. भावी जीवन के लिए
✓ 2. कुछ अंश बचाकर रखनी
✗ 3. बचत कहलाता है।
✗ 4. अपनी आय में से

Question ID : 9895803902
Chosen Option : 2

Q.1 दिए गए शब्द के पर्यायवाची शब्द का चयन करें।

गंगा

- Ans ✗ 1. नदी
✗ 2. तटिनी

3. यमुना

4. भागीरथी

Question ID : 9895803919
Chosen Option : 2

Q.1 दिए गए वाक्य में रेखांकित खंड को प्रतिस्थापित करने के लिए उपयुक्त विकल्प का चयन करें।

आदर्श बालक सुबह उठकर अपनी माता-पिता को प्रणाम करते हैं।

Ans 1. उसके माता-पिता को

2. अपना माता-पिता को

3. हमारे माता-पिता को

4. अपने माता-पिता को

Question ID : 9895803903
Chosen Option : 4

Q.1 रिक्त स्थान को भरने के लिए उपयुक्त शब्द का चयन करें।

किसान हल _____ खेत की ओर जा रहा है।

Ans 1. धक्का देकर

2. मारकर

3. तोड़कर

4. लेकर

Question ID : 9895803906
Chosen Option : 4

Comprehension:

निम्नलिखित गद्यांश के रिक्त स्थानों की पूर्ति गद्यांश के नीचे दिए गए प्रश्नों के अनुसार कीजिए -

संसार के सभी _____ (1) करुणा के सागर थे। गौतम बुद्ध

ने राजपाट और सांसारिकता को _____ (2) ही महानता को

प्राप्त किया। गांधीजी ने वकालत छोड़कर देश को _____

(3) कराने के लिए लड़ाई छेड़ दी। ईसा मसीह ने _____

(4) में अपने _____ (5) की आहुति दी।

SubQuestion No : 15

Q.1 गद्यांश में संकेतित रिक्त स्थान (1) के लिए उपयुक्त शब्द होगा

Ans

- 1. विद्वान
- 2. नेता
- 3. राजा
- 4. महापुरुष

Question ID : 9895803911
Chosen Option : 1

Comprehension:

निम्नलिखित गद्यांश के रिक्त स्थानों की पूर्ति गद्यांश के नीचे दिए गए प्रश्नों के अनुसार कीजिए -

संसार के सभी _____ (1) करुणा के सागर थे। गौतम बुद्ध ने राजपाट और सांसारिकता को _____ (2) ही महानता को प्राप्त किया। गांधीजी ने वकालत छोड़कर देश को _____ (3) कराने के लिए लड़ाई छेड़ दी। ईसा मसीह ने _____ (4) में अपने _____ (5) की आहुति दी।

SubQuestion No : 16

Q.1 गद्यांश में संकेतित रिक्त स्थान (2) के लिए उपयुक्त शब्द होगा

- Ans
- 1. भूलकर
 - 2. त्याग कर
 - 3. लेकर
 - 4. देकर

Question ID : 9895803912
Chosen Option : 2

Comprehension:

निम्नलिखित गद्यांश के रिक्त स्थानों की पूर्ति गद्यांश के नीचे दिए गए प्रश्नों के अनुसार कीजिए -

संसार के सभी _____ (1) करुणा के सागर थे। गौतम बुद्ध ने राजपाट और सांसारिकता को _____ (2) ही महानता को प्राप्त किया। गांधीजी ने वकालत छोड़कर देश को _____ (3) कराने के लिए लड़ाई छेड़ दी। ईसा मसीह ने _____ (4) में अपने _____ (5) की आहुति दी।

SubQuestion No : 17

Q.1
7 गद्यांश में संकेतित रिक्त स्थान (3) के लिए उपयुक्त शब्द होगा

- Ans
- 1. स्वच्छन्द
 - 2. अराजक
 - 3. स्वतंत्र
 - 4. परतंत्र

Question ID : 9895803913
Chosen Option : 3

Comprehension:

निम्नलिखित गद्यांश के रिक्त स्थानों की पूर्ति गद्यांश के नीचे दिए गए प्रश्नों के अनुसार कीजिए -

संसार के सभी _____ (1) करुणा के सागर थे। गौतम बुद्ध ने राजपाट और सांसारिकता को _____ (2) ही महानता को प्राप्त किया। गांधीजी ने वकालत छोड़कर देश को _____ (3) कराने के लिए लड़ाई छेड़ दी। ईसा मसीह ने _____ (4) में अपने _____ (5) की आहुति दी।

SubQuestion No : 18

Q.1
8 गद्यांश में संकेतित रिक्त स्थान (4) के लिए उपयुक्त शब्द होगा

- Ans
- 1. आत्महित
 - 2. मनहित

✓ 3. जनहित

✗ 4. स्वहित

Question ID : 9895803914

Chosen Option : 1

Comprehension:

निम्नलिखित गद्यांश के रिक्त स्थानों की पूर्ति गद्यांश के नीचे दिए गए प्रश्नों के अनुसार कीजिए -

संसार के सभी _____ (1) करुणा के सागर थे। गौतम बुद्ध

ने राजपाट और सांसारिकता को _____ (2) ही महानता को

प्राप्त किया। गांधीजी ने वकालत छोड़कर देश को _____

(3) कराने के लिए लड़ाई छेड़ दी। ईसा मसीह ने _____

(4) में अपने _____ (5) की आहुति दी।

SubQuestion No : 19

Q.1 गद्यांश में संकेतित रिक्त स्थान (5) के लिए उपयुक्त शब्द होगा

Ans ✗ 1. धन-धान्य

✗ 2. सपनों

✗ 3. विचारों

✓ 4. प्राणों

Question ID : 9895803915

Chosen Option : 4

Q.2 दिए गए शब्द के पर्यायवाची शब्द का चयन करें।

बादल

Ans ✗ 1. पर्वत

✓ 2. पयोधर

✗ 3. पानी

✗ 4. पवन

Question ID : 9895803918

Chosen Option : 2

Q.2 रिक्त स्थान को भरने के लिए उपयुक्त शब्द का चयन करें।

चारों ओर रंग ही रंग _____ गए।

Ans

- 1. भाग
- 2. मुरझा
- 3. बिखर
- 4. बौखला

Question ID : 9895803908
Chosen Option : 3

Q.2 दिए गए वाक्य का वह भाग ज्ञात करें जिसमें कोई त्रुटि है।

लक्ष्यहीन मनुष्य जिंदगियों में कभी सार्थक कार्य नहीं कर सकता।

- Ans
- 1. नहीं कर सकता।
 - 2. जिंदगियों में कभी
 - 3. लक्ष्यहीन मनुष्य
 - 4. सार्थक कार्य

Question ID : 9895803900
Chosen Option : 2

Q.3 दिये गये वाक्यांश के लिए एक शब्द दीजिये।

जो मास में एक बार होता हो

- Ans
- 1. मासिक
 - 2. साप्ताहिक
 - 3. वार्षिक
 - 4. पाक्षिक

Question ID : 9895803923
Chosen Option : 1

Q.4 दिए गए वाक्य का वह भाग ज्ञात करें जिसमें कोई त्रुटि है।

जिसके जैसी संस्कार होंगे वैसी ही उसकी भाषा होगी।

- Ans
- 1. भाषा होगी।
 - 2. वैसी ही उसकी
 - 3. जिसके जैसी
 - 4. संस्कार होंगे

Question ID : 9895803901
Chosen Option : 3

Q.5 रिक्त स्थान को भरने के लिए उपयुक्त शब्द का चयन करें।

_____ ही बादल छाए, मोर नाचने लगा।

Ans

- 1. किस
- 2. कब
- 3. वैसे
- 4. जैसे

Question ID : 9895803909
Chosen Option : 4

GovtJobsAlert.In