

Constable (GD) in CAPFs, NIA, SSF and Rifleman (GD) in Assam Rifles Examination, 2018

Roll No. :	www.GovtJobsAlert.In
Registration No.	
Name :	
Exam Venue :	ION Digital Zone Bondel
Exam Time :	12:30 PM - 2:00 PM
Exam Date :	14/02/2019

Section : General Section

Q.1 Select the option that will correctly replace the question mark (?) in the series.

20, 24, 40, 76, ?

- Ans
- 1. 120
 - 2. 140
 - 3. 130
 - 4. 145

Question ID : 9895802915
Chosen Option : 2

Q.2 In a certain code, CIRCLE is written as 50. How will ALGAE be written in that code?

- Ans
- 1. 57
 - 2. 59
 - 3. 26
 - 4. 23

Question ID : 9895802908
Chosen Option : 3

Q.3 Find out the two signs to be interchanged to make the following equation correct.

$$30 + 28 \times 3 - 16 \div 4 = -50$$

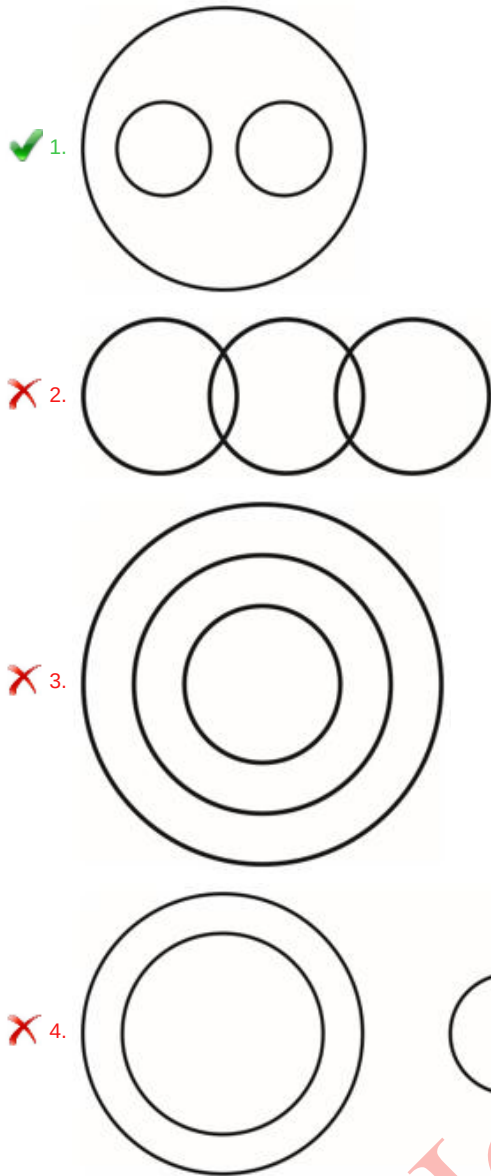
- Ans
- 1. \times and \div
 - 2. $+$ and $-$
 - 3. $-$ and \times
 - 4. $-$ and \div

Question ID : 9895802919
Chosen Option : 4

Q.4 Select the Venn diagram that best represents the given set of classes.

Units, Watt, Volt

Ans



Question ID : 9895802925
Chosen Option : 4

Q.5 Select the option that will correctly replace the question mark (?) in the given pattern.

9	81	?
25	121	289
49	169	361

- Ans
- ✓ 1. 225
 - ✗ 2. 125
 - ✗ 3. 256
 - ✗ 4. 729

Question ID : 9895802918
Chosen Option : 3

Q.6 Choose the option in which the figure marked 'X' is embedded. (Rotation is not allowed)



Ans

1.



2.



3.



4.



Question ID : 9895802922
Chosen Option : 4

Q.7 Choose the odd one out of the given options.

- Ans 1. China
 2. Colombia
 3. Canada
 4. Asia

Question ID : 9895802903
Chosen Option : 4

Q.8 J, K, L, M, N and O are six teachers. Each one teaches a different subject out of Hindi, English, Math, Science, Social Science and Arts, not necessarily in the same order. Each of them teaches on only one day, from Monday to Saturday, not necessarily in the same order. J teaches Arts on Saturday. L teaches neither English nor Social Science, but he teaches on Thursday. Wednesday is reserved for Maths taught by K. O teaches Science a day before N. Social Science is taught a day before Arts. Which subject is taught on the day between Social Science and Math?

- Ans 1. Hindi
 2. English
 3. Science
 4. Arts

Question ID : 9895802911
Chosen Option : 2

Q.9 Choose the odd number out of the given options.

- Ans 1. 343
 2. 625
 3. 125
 4. 27

Question ID : 9895802917
Chosen Option : 1

Q.1 Select the option that will correctly replace the question mark (?) in the series.

SNC, QPA, ORY, MTW, ?

- Ans 1. KUV

- 2. KUU
- 3. KVV
- 4. KVV

Question ID : 9895802901
Chosen Option : 1

Q.1 Select the option that is related to the third term in the same way as the second term is related to the first term.

1

Aeroplane : Hanger :: Gun : ?

- Ans
- 1. Fire
 - 2. Armoury
 - 3. Human
 - 4. Shoot

Question ID : 9895802904
Chosen Option : 4

Q.1 Choose the odd one out of the given options.

2

- Ans
- 1. EKO
 - 2. KVG
 - 3. JIU
 - 4. QMJ

Question ID : 9895802902
Chosen Option : 1

Q.1 A square transparent sheet with a pattern is given. How will the pattern appear when the transparent sheet is folded along the dotted line?

3



Ans

- 1.
- 2.
- 3.
- 4.

Question ID : 9895802924
Chosen Option : 1

Q.1 In a certain code, WORKER is written as OKROKR. How will ASSUME be written in that code?

4

- Ans
- 1. SUESUE
 - 2. SUMSUM
 - 3. SSESSE

4. SUESVE

Question ID : 9895802907
Chosen Option : 1

Q.1 Choose the option that most closely resembles the mirror image of the given word when mirror is placed at right side.

5

VOCATION

Ans

1. NOITACJOV

2. NOITACJOV

3. NOITACJOV

4. NOITACJOV

Question ID : 9895802923
Chosen Option : 3

Q.1 Select the option that is related to the third number in the same way as the second number is related to the first number.

6

22 : 242 :: 18 : ?

Ans

1. 162

2. 169

3. 221

4. 275

Question ID : 9895802916
Chosen Option : 2

Q.1 Select the option that is related to the third term in the same way as the second term is related to the first term.

7

Chef : Knife :: Surgeon : ?

Ans

1. Chisel

2. Spade

3. Scalpel

4. Grip

Question ID : 9895802905
Chosen Option : 1

Q.1 Select the option that will correctly replace the question mark (?) in the series.

8

9, 20, 42, 75, ?

Ans

1. 99

2. 129

3. 119

4. 109

Question ID : 9895802914
Chosen Option : 2

Q.1 Select the option that is related to the third term in the same way as the second term is related to the first term.

9

DEH : HIL :: GHL : ?

- Ans
- 1. KJP
 - 2. KPL
 - 3. KLP
 - 4. KLO

Question ID : 9895802906

Chosen Option : 3

Q.2 The statements below are followed by two conclusions labeled I and II. Assuming that the information in the statements is true, even if it appears at variance with generally established facts, decide which conclusion(s) logically and definitely follow(s) from the information given in the statements.

0

Statements:

- 1) Some mice are whales.
- 2) All whales are dogs.

Conclusion:

- I. Some mice are dogs.
- II. No mouse is dog.

- Ans
- 1. Neither conclusion I nor conclusion II follows.
 - 2. Both conclusions follow.
 - 3. Only conclusion I follows.
 - 4. Only conclusion II follows.

Question ID : 9895802913

Chosen Option : 1

Q.2 Seven friends O, P, Q, R, S, T and U are watching a movie sitting in a row. S is sitting at one extreme end. Q is sitting second to the right of S. P is sitting between O and Q. U is not sitting at any extreme end. R is sitting to the left of T. Who is sitting between P and R?

1

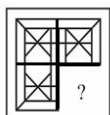
- Ans
- 1. R
 - 2. Q
 - 3. U
 - 4. O

Question ID : 9895802909

Chosen Option : 4

Q.2 Select a figure from amongst the four alternatives that when placed in the blank space (?) of figure X will complete the pattern. (Rotation is not allowed).

2



X

- Ans
- 1.
 - 2.



Question ID : 9895802921
Chosen Option : 4

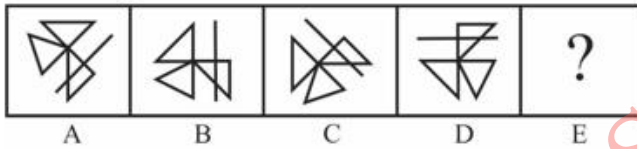
Q.2 Eight friends A, B, C, D, E, F, G and H are sitting around a circular table facing each other for a lunch. A is opposite F and third to the right of B. G is between F and D. H is to the left of D. E is between C and A. Who is sitting opposite H?

- Ans 1. D
 2. C
 3. B
 4. G

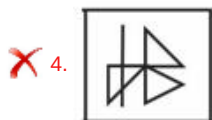
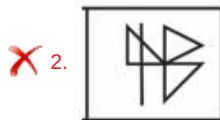
Question ID : 9895802910
Chosen Option : 4

Q.2 Choose the option that would follow next in the given figure series.

Problem Fig.



Ans



Question ID : 9895802920
Chosen Option : 2

Q.2
5

The statements below are followed by two conclusions labeled I and II. Assuming that the information in the statements is true, even if it appears at variance with generally established facts, decide which conclusion(s) logically and definitely follow(s) from the information given in the statements.

Statements:

- 1) All knights are nuns.
- 2) All nuns are men.

Conclusion:

- I. All men are knights.
- II. All knights are men.

- Ans
1. Either conclusion I or conclusion II follows.
 2. Only conclusion I follows.
 3. Only conclusion II follows.
 4. Both conclusions follow.

Question ID : 9895802912
Chosen Option : 3

Q.2
6 The term “double fault” is used in:

- Ans
1. volleyball
 2. kabaddi
 3. snooker
 4. tennis

Question ID : 9895804848
Chosen Option : 4

Q.2
7 Which Indian city is the first to make it to the UNESCO World Heritage List?

- Ans
1. Bengaluru
 2. Indore
 3. Bhubaneswar
 4. Ahmedabad

Question ID : 9895804845
Chosen Option : 4

Q.2
8 Which household waste has an excellent recycling potential?

- Ans
1. Rubber
 2. Vegetable scraps
 3. Plastic
 4. Metal

Question ID : 9895804859
Chosen Option : 2

Q.2
9 Who among the following introduced the practice of Sijda (prostration) and Paibos (kissing the feet of monarch) in the court?

- Ans
1. Allauddin Khalji
 2. Ghiyasuddin Balban

- 3. Firoz Shah Tughluq
- 4. Muhammad bin Tughluq

Question ID : 9895804851
Chosen Option : 2

Q.3
0 Which IUCN document lists endangered species of flora and fauna?

- Ans
- 1. Green List
 - 2. Black List
 - 3. Blue List
 - 4. Red List

Question ID : 9895804860
Chosen Option : 1

Q.3
1 'Do or Die' was the slogan of which famous movement in India?

- Ans
- 1. Quit India Movement
 - 2. Civil Disobedience Movement
 - 3. Non-cooperation Movement
 - 4. Rowlatt Movement

Question ID : 9895804849
Chosen Option : 1

Q.3
2 A _____ measures the humidity of the air.

- Ans
- 1. hydrometer
 - 2. thermometer
 - 3. hygrometer
 - 4. micrometer

Question ID : 9895804858
Chosen Option : 3

Q.3
3 _____ is a microfinance organisation and community development bank founded in Bangladesh which makes small loans to the impoverished without requiring collateral.

- Ans
- 1. Federal bank
 - 2. Reserve bank
 - 3. Cooperative bank
 - 4. Grameen bank

Question ID : 9895804856
Chosen Option : 2

Q.3
4 Which one of the following products received the first geographical indication (GI) in India?

- Ans
- 1. Darjeeling Tea
 - 2. Mizo Chilli
 - 3. Ratlami Sev
 - 4. Joha Rice

Question ID : 9895804846
Chosen Option : 4

Q.3
5 Where did Babur defeat Ibrahim Lodhi in 1526?

- Ans
- 1. Panipat
 - 2. Chausa
 - 3. Kalinjar
 - 4. Haldighati

Question ID : 9895804850
Chosen Option : 1

Q.3
6 The term 'mutation' primarily refers to:

- Ans
- 1. genetic mistake
 - 2. genetic migration
 - 3. genetic line
 - 4. genetic correction

Question ID : 9895804861
Chosen Option : 2

Q.3
7 Which of the following countries won the Men's Hockey World Cup 2018?

- Ans
- 1. New Zealand
 - 2. Belgium
 - 3. Pakistan
 - 4. Argentina

Question ID : 9895804847
Chosen Option : 1

Q.3
8 Which of the following is NOT a sustainable development goal targeted to be achieved by 2030?

- Ans
- 1. Zero Hunger
 - 2. Good Health and Wellbeing
 - 3. Space Research
 - 4. Gender Equality

Question ID : 9895804864
Chosen Option : 2

Q.3
9 Panchayati Raj institutions came into existence under the:

- Ans
- 1. 73rd and 74th Amendment Acts
 - 2. 63rd and 64th Amendment Acts
 - 3. 86th and 87th Amendment Acts
 - 4. 42nd and 43rd Amendment Acts

Question ID : 9895804868
Chosen Option : 2

Q.4
0 World Energy Outlook is released by the:

- Ans
- 1. International Energy Agency
 - 2. International Energy Tribunal
 - 3. World Economic Forum
 - 4. International Energy Organisation

Question ID : 9895804865
Chosen Option : 4

Q.4
1 Rapid integration between countries is known as :

- Ans
- 1. privatisation
 - 2. liberalisation
 - 3. modernisation
 - 4. globalisation

Question ID : 9895804855
Chosen Option : 1

Q.4
2 According to the 2011 census, the total percentage of Muslims in India is :

- Ans
- 1. 12.4
 - 2. 10.2
 - 3. 16.6
 - 4. 14.2

Question ID : 9895804866
Chosen Option : 3

Q.4
3 _____ is widely used as a fuel and is a major component of compressed natural gas.

- Ans
- 1. Octane
 - 2. Butane
 - 3. Methane
 - 4. Propane

Question ID : 9895804862
Chosen Option : 2

Q.4
4 Which of the following is one of the criteria to represent the standard of living in a country?

- Ans
- 1. National income
 - 2. Per capita income
 - 3. Poverty ratio
 - 4. Industrial growth

Question ID : 9895804857
Chosen Option : 1

Q.4
5 Doddabetta is the highest peak of which of the following mountain ranges?

- Ans
- 1. Vindhya
 - 2. Nilgiri
 - 3. Aravalli
 - 4. Satpura

Question ID : 9895804854
Chosen Option : 2

Q.4
6 The prestigious Laureus World Sports Awards was given to the Indian athlete:

- Ans
- 1. Vinesh Phogat
 - 2. Dutee Chand
 - 3. Pankaj Advani
 - 4. Anirban Chatterji

Question ID : 9895804863
Chosen Option : 2

Q.4
7 Which of the following statements about the National Human Rights Commission is correct?

- Ans
- 1. Its powers are only recommendatory in nature.
 - 2. Its chairman must be a sitting judge in the Supreme Court.
 - 3. Mumbai serves as its Headquarters.
 - 4. It consists of 10 members.

Question ID : 9895804867
Chosen Option : 2

Q.4
8 The King Khalid International Airport serves which country?

- Ans
- 1. Saudi Arabia
 - 2. Iraq
 - 3. Syria
 - 4. Bahrain

Question ID : 9895804852
Chosen Option : 2

Q.4
9 The temperate grasslands of South Africa are called:

- Ans
- 1. Velds
 - 2. Downs
 - 3. Praries
 - 4. Pampas

Question ID : 9895804853
Chosen Option : 1

Q.5
0 Which temples are well-known for their Nagara-style of architecture having erotic sculptures?

- Ans 1. Somnath
 2. Hampi
 3. Khajuraho
 4. Meenakshi

Question ID : 9895804844
Chosen Option : 4

Q.5 A sum of ₹ 11700 becomes ₹ 16848 in 2 years at the rate of compound interest. If the interest is compounded annually,
1 then what will be the rate of interest?

- Ans 1. 17.5%
 2. 25%
 3. 15%
 4. 20%

Question ID : 9895804781
Chosen Option : 4

Q.5 Selling price of first article is ₹ 470 and cost price of second article is ₹ 470. If there is a loss of 20% on first article and
2 profit of 20% on second article, then what will be the overall profit or loss percentage?

- Ans 1. No profit no loss
 2. 4 % profit
 3. 1.80% loss
 4. 2.22% loss

Question ID : 9895804775
Chosen Option : 1

Q.5 What is the median of the given data?
3

1, 3, 6, 2, 5, 8, 3, 8, 2

- Ans 1. 2.5
 2. 2
 3. 3
 4. 5

Question ID : 9895804773
Chosen Option : 1

Q.5 P and Q together can complete a work in 20 days. If P alone can complete the same work in 36 days, then in how many
4 days Q alone can complete the same work?

- Ans 1. 48 days
 2. 51 days
 3. 45 days
 4. 42 days

Question ID : 9895804783
Chosen Option : 2

Q.5 If the length of a rectangle increases by 50% and the breadth decreases by 25%, then what will be the percent increase
5 in its area?

Ans

- 1. 17.5%
- 2. 15%
- 3. 25%
- 4. 12.5%

Question ID : 9895804774
Chosen Option : 3

Q.5 Selling price and cost price of an article are in the ratio of 7 : 5. What will be the profit/loss percentage?
6

- Ans
- 1. 14.28% loss
 - 2. 20% loss
 - 3. 40% profit
 - 4. 28.5% profit

Question ID : 9895804776
Chosen Option : 1

Q.5 The total weight of 12 boys and 8 girls is 1080 kg. If the average weight of boys is 50 kg, then what will be average weight of girls?
7

- Ans
- 1. 55 kg
 - 2. 45 kg
 - 3. 60 kg
 - 4. 50 kg

Question ID : 9895804770
Chosen Option : 2

Q.5 The length of a rectangle is 16 cm. If the length of diagonal is 20 cm, then what will be the breadth of the rectangle?
8

- Ans
- 1. 12 cm
 - 2. 10 cm
 - 3. 14 cm
 - 4. 8 cm

Question ID : 9895804786
Chosen Option : 2

Q.5 Teena, Reena and Sheena start a business with investment of respectively ₹ 24000, ₹ 28000 and ₹ 20000. Teena invests for 8 months, Reena invest for 10 months and Sheena invests for one year. If the total profit at the end of year is ₹ 25810, then what is the share of Teena?
9

- Ans
- 1. ₹ 10150
 - 2. ₹ 7940
 - 3. ₹ 6960
 - 4. ₹ 8700

Question ID : 9895804779
Chosen Option : 1

Q.6 The length of platform is double of the length of train. Speed of the train is 144 km/hr. If train crosses the platform in 30 seconds, then what is the length of the platform?
0

- Ans
- 1. 500 metres
 - 2. 600 metres

- 3. 800 metres
- 4. 400 metres

Question ID : 9895804785
Chosen Option : 2

Q.6 The average weight of all the vehicles in a parking is 4000 kg. The average weight of 12 vehicles is 6000 kg. Average weight of the remaining vehicles is 3000 kg. What is the total number of vehicles in the parking?

- 1
- Ans 1. 30
2. 36
3. 20
4. 40

Question ID : 9895804771
Chosen Option : 1

Q.6 Four numbers are in the ratio of 2 : 5 : 3 : 8 respectively. If the sum of these four numbers is 432, then what is the sum of first and fourth number?

- 2
- Ans 1. 192
2. 240
3. 232
4. 216

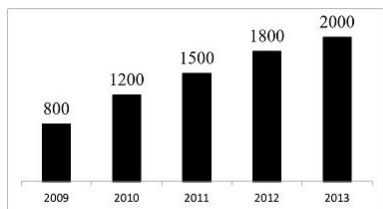
Question ID : 9895804777
Chosen Option : 4

Q.6 What is the value of $\left[88 - 44 \div (22 \times 4) \text{ of } \left(\frac{1}{2} - \frac{1}{4} \div \frac{1}{8}\right)\right]$?

- 3
- Ans 1. $\frac{514}{9}$
2. $\frac{711}{3}$
3. $\frac{265}{3}$
4. $\frac{703}{9}$

Question ID : 9895804769
Chosen Option : 2

Q.6 The bar chart given below shows the annual production (in 1000 tonnes) of coffee of a country for years 2009 to 2013.



The production for the year 2011 is what percent of the production for the year 2009?

- Ans 1. 187.5%
2. 175.25%
3. 205.25%
4. 157.5%

Question ID : 9895804789

Chosen Option : 4

Q.6 The Least Common Multiple and Highest Common Factor of two numbers are 60 and 3 respectively. If their difference is 3, then what will be the sum of these two numbers?

- Ans
- 1. 35
 - 2. 21
 - 3. 27
 - 4. 24

Question ID : 9895804767
Chosen Option : 1

Q.6 A sum of ₹ 4650 is lent at simple interest. If the rate of interest is 7.5% per annum, then what will be the simple interest for 4 years?

- Ans
- 1. ₹ 1295
 - 2. ₹ 1395
 - 3. ₹ 1300
 - 4. ₹ 1495

Question ID : 9895804780
Chosen Option : 3

Q.6 The length, breadth and height of a solid cuboid is 14 cm, 12 cm and 8 cm respectively. If cuboid is melted to form identical cubes of side 2 cm, then what will be the number of identical cubes?

- Ans
- 1. 128
 - 2. 144
 - 3. 156
 - 4. 168

Question ID : 9895804788
Chosen Option : 2

Q.6 The marked price of an article is ₹ 1200 and discount offered is 31%. If profit is 15%, then what will be the cost price?

- Ans
- 1. ₹ 748
 - 2. ₹ 720
 - 3. ₹ 640
 - 4. ₹ 704

Question ID : 9895804772
Chosen Option : 3

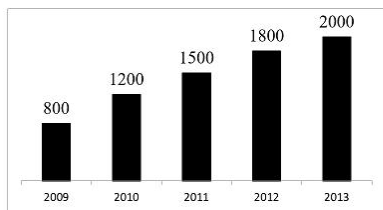
Q.6 Manish goes to his hometown at the speed of 40 km/hr and returns to his home at the speed of Y km/hr. Distance between his home and hometown is 360 km. If he takes total 21 hours, then what is the value of Y?

- Ans
- 1. 25 km/hr
 - 2. 28 km/hr
 - 3. 33 km/hr
 - 4. 30 km/hr

Question ID : 9895804784
Chosen Option : 3

Q.7
0

The bar chart given below shows the annual production (in 1000 tonnes) of coffee of a country for years 2009 to 2013.



What is the average production (in 1000 tonnes) of coffee from year 2009 to 2011?

- Ans
- 1. 1366.67
 - 2. 1233.33
 - 3. 1166.67
 - 4. 1466.67

Question ID : 9895804790

Chosen Option : 1

Q.7
1 What is the value of $80 \div 40 - 10 - 5 \times 4$ of $\left(\frac{1}{3} \div \frac{10}{3}\right)$?

- Ans
- 1. -10
 - 2. -12
 - 3. $\frac{40}{3}$
 - 4. $\frac{22}{5}$

Question ID : 9895804768

Chosen Option : 2

Q.7
2 The ratio of number of children, women and men in a colony is 6 : 4 : 3 respectively and the colony has at least 200 members. What will be minimum number of children in the colony?

- Ans
- 1. 72
 - 2. 64
 - 3. 96
 - 4. 48

Question ID : 9895804778

Chosen Option : 4

Q.7
3 The diagonal of a square is 14 cm. What will be the length of the diagonal of the square whose area is double of the area of first square?

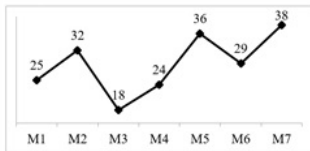
- Ans
- 1. $14\sqrt{2}$ cm
 - 2. $28\sqrt{2}$ cm
 - 3. $21\sqrt{2}$ cm
 - 4. 28 cm

Question ID : 9895804787

Chosen Option : 1

Q.7
4

The line chart given below shows the production (in 10000s) of cars in 7 different months.



Production of cars in month M4 is what percent of the production of cars in month M2?

- Ans
- 1. 125%
 - 2. 66.66%
 - 3. 75%
 - 4. 83.33%

Question ID : 9895804791
Chosen Option : 3

Q.7 Pipe C can fill a tank in 12 hours and pipe D can fill the same tank in 40 hours. In how many hours both pipe C and D together can fill the same tank?

- Ans
- 1. $\frac{60}{11}$ hours
 - 2. $\frac{120}{13}$ hours
 - 3. $\frac{120}{11}$ hours
 - 4. $\frac{60}{7}$ hours

Question ID : 9895804782
Chosen Option : 4

Section : English Language

Q.1 Select the option that means the same as the given idiom.

A red letter day

- Ans
- 1. A boring day
 - 2. A memorable day
 - 3. A sad day
 - 4. A painful day

Question ID : 9895804480
Chosen Option : 2

Q.2 Select the word which means the same as the group of words given.

Someone who leaves one's country to settle in another country.

- Ans
- 1. Explorer
 - 2. Foreigner
 - 3. Tourist
 - 4. Emigrant

Question ID : 9895804871
Chosen Option : 1

Q.3 Select the synonym of the given word.

MELODIOUS

- Ans
- 1. Rhythmic
 - 2. Rattling
 - 3. Tuneful
 - 4. Doleful

Question ID : 9895804477
Chosen Option : 1

Q.4 Select the option that means the same as the given idiom.

To eat humble pie

- Ans
- 1. To accept error
 - 2. To deny desperately
 - 3. To defend oneself
 - 4. To be aggressive

Question ID : 9895804481
Chosen Option : 4

Q.5 Select the most appropriate option to fill in the blank.

You can visit me on _____ at 7 o'clock.

- Ans
- 1. tomorrow
 - 2. next month
 - 3. today
 - 4. Sunday

Question ID : 9895804468
Chosen Option : 2

Q.6 Select the word which means the same as the group of words given.

One who is present everywhere

- Ans
- 1. Omniscient
 - 2. Omnivorous
 - 3. Omnipresent
 - 4. Omnipotent

Question ID : 9895804483
Chosen Option : 2

Q.7 Select the most appropriate option to substitute the underlined segment in the given sentence. If there is no need to substitute it, select No Improvement.

On inspection a hundred year old bridge was find being too weak to take the load of lakhs of vehicles everyday.

- Ans
- 1. was being found

- 2. No improvement
- 3. was found to be
- 4. has to be found

Question ID : 9895804466
Chosen Option : 1

Q.8 Select the most appropriate option to fill in the blank.

Gita won't pass the examination and _____ will Rita.

- Ans
- 1. nor
 - 2. or
 - 3. either
 - 4. neither

Question ID : 9895804469
Chosen Option : 4

Q.9 Select the correctly spelt word.

- Ans
- 1. Grateful
 - 2. Greatfull
 - 3. Gratefull
 - 4. Greatful

Question ID : 9895804485
Chosen Option : 2

Q.10 From the given options, identify the segment in the sentence which contains the grammatical error.

If they had a playground here, they can play after their school is over.

- Ans
- 1. school is over
 - 2. after their
 - 3. they can play
 - 4. If they had

Question ID : 9895804464
Chosen Option : 3

Q.11 Select the antonym of the given word.

BLESS

- Ans
- 1. Purify
 - 2. Curse
 - 3. Sanctify
 - 4. Wish

Question ID : 9895804479
Chosen Option : 4

Q.12

Select the most appropriate option to substitute the underlined segment in the given sentence. If there is no need to substitute it, select No Improvement.

Tourists visiting Leh take home photos and memories but leave back a mountain of waste.

- Ans
- 1. leave away
 - 2. left back
 - 3. leave behind
 - 4. No improvement

Question ID : 9895804465
Chosen Option : 4

Q.1 From the given options, identify the segment in the sentence which contains the grammatical error.
3

Ram always tries to do things very carefully and made sure he does them correctly.

- Ans
- 1. to do things
 - 2. does them
 - 3. Ram always tries
 - 4. and made sure

Question ID : 9895804463
Chosen Option : 2

Q.1 Select the most appropriate word to fill in the blank.
4

_____ are to be avoided; they lead to conflict.

- Ans
- 1. Statements
 - 2. Decisions
 - 3. Arguments
 - 4. Questions

Question ID : 9895804487
Chosen Option : 4

Q.1 Select the most appropriate word to fill in the blank.
5

Just are the _____ of God.

- Ans
- 1. deeds
 - 2. ways
 - 3. plans
 - 4. tricks

Question ID : 9895804486
Chosen Option : 1

Q.1 From the given options, identify the segment in the sentence which contains the grammatical error.
6

I said you to prepare the article yesterday but you didn't.

- Ans
- 1. I said you
 - 2. you didn't
 - 3. the article

4. to prepare

Question ID : 9895804462
Chosen Option : 2

Q.1
7 Select the antonym of the given word.

HIDEOUS

- Ans
- 1. Secretive
 - 2. Beautiful
 - 3. Detestable
 - 4. Ugly

Question ID : 9895804478
Chosen Option : 4

Q.1
8 Select the correctly spelt word.

- Ans
- 1. Occasion
 - 2. Occassion
 - 3. Occation
 - 4. Ocassion

Question ID : 9895804484
Chosen Option : 4

Q.1
9 Select the synonym of the given word.

AGILE

- Ans
- 1. Lazy
 - 2. Dull
 - 3. Active
 - 4. Aggressive

Question ID : 9895804476
Chosen Option : 2

Comprehension:

In the following passage some words have been deleted. Fill in the blanks with the help of the alternatives given.

The Second Anglo-Maratha War had shattered the (1) _____ of the Maratha chiefs, but not their spirit. The loss of their freedom caused them deep _____ (2). They made a last (3) _____ attempt to regain their independence in 1817. The lead in organising a united front of the Maratha chiefs _____ (4) by the Peshwa who was smarting under the (5) _____ control exercised by the British Resident.

SubQuestion No : 20

Q.2
0 Select the most appropriate option that will fill in the blank number 1.

- Ans
- 1. time
 - 2. dignity
 - 3. patience
 - 4. power

Question ID : 9895804471
Chosen Option : 3

Comprehension:

In the following passage some words have been deleted. Fill in the blanks with the help of the alternatives given.

The Second Anglo-Maratha War had shattered the (1) _____ of the Maratha chiefs, but not their spirit. The loss of their freedom caused them deep _____ (2). They made a last (3) _____ attempt to regain their independence in 1817. The lead in organising a united front of the Maratha chiefs _____ (4) by the Peshwa who was smarting under the (5) _____ control exercised by the British Resident.

SubQuestion No : 21

Q.2
1 Select the most appropriate option that will fill in the blank number 2.

- Ans
- 1. distress
 - 2. depression
 - 3. agony
 - 4. fear

Question ID : 9895804472
Chosen Option : 1

Comprehension:

In the following passage some words have been deleted. Fill in the blanks with the help of the alternatives given.

The Second Anglo-Maratha War had shattered the (1) _____ of the Maratha chiefs, but not their spirit. The loss of their freedom caused them deep _____ (2). They made a last (3) _____ attempt to regain their independence in 1817. The lead in organising a united front of the Maratha chiefs _____ (4) by the Peshwa who was smarting under the (5) _____ control exercised by the British Resident.

SubQuestion No : 22

Q.2
2 Select the most appropriate option that will fill in the blank number 3.

- Ans
- 1. massive
 - 2. violent
 - 3. feeble
 - 4. desperate

Question ID : 9895804473

Comprehension:

In the following passage some words have been deleted. Fill in the blanks with the help of the alternatives given.

The Second Anglo-Maratha War had shattered the (1) _____ of the Maratha chiefs, but not their spirit. The loss of their freedom caused them deep _____ (2). They made a last (3) _____ attempt to regain their independence in 1817. The lead in organising a united front of the Maratha chiefs _____ (4) by the Peshwa who was smarting under the (5) _____ control exercised by the British Resident.

SubQuestion No : 23

Q.2
3 Select the most appropriate option that will fill in the blank number 4.

- Ans
- 1. was taken
 - 2. was taking
 - 3. had taken
 - 4. were taken

Question ID : 9895804474

Chosen Option : 4

Comprehension:

In the following passage some words have been deleted. Fill in the blanks with the help of the alternatives given.

The Second Anglo-Maratha War had shattered the (1) _____ of the Maratha chiefs, but not their spirit. The loss of their freedom caused them deep _____ (2). They made a last (3) _____ attempt to regain their independence in 1817. The lead in organising a united front of the Maratha chiefs _____ (4) by the Peshwa who was smarting under the (5) _____ control exercised by the British Resident.

SubQuestion No : 24

Q.2
4 Select the most appropriate option that will fill in the blank number 5.

- Ans
- 1. pleasant
 - 2. cruel
 - 3. rigid
 - 4. orthodox

Question ID : 9895804475

Chosen Option : 2

Q.2
5 Select the most appropriate option to substitute the underlined segment in the given sentence. If there is no need to substitute it, select No Improvement.

Yesterday eleven coaches of a train headed for Delhi was derailed at Vaishali district of Bihar.

- Ans
- 1. No improvement

2. were derail at
 3. was derailed in
 4. were derailed in

Question ID : 9895804467
Chosen Option : 1

Section : Hindi Language

Q.1 रिक्त स्थान को भरने के लिए उपयुक्त शब्द का चयन करें।

अध्यापक के कक्षा _____ ही सभी बच्चे शरारतें करने लगे।

- Ans 1. से जाते
 2. को जाते
 3. से आते
 4. को आते

Question ID : 9895804009
Chosen Option : --

Q.2 सही वर्तनी वाले शब्द का चयन करें।

- Ans 1. ललिमा
 2. लालिमा
 3. ललईमा
 4. लालीमा

Question ID : 9895804026
Chosen Option : --

Q.3 रिक्त स्थान को भरने के लिए उपयुक्त शब्द का चयन करें।

आग _____ रूप धारण कर चुकी थी।

- Ans 1. भीषण
 2. नफरत
 3. हँसमुख
 4. प्रेम

Question ID : 9895804010
Chosen Option : --

Q.4

दिए गए वाक्य में रेखांकित खंड को प्रतिस्थापित करने के लिए उपयुक्त विकल्प का चयन करें।

खेल कूद हमें विपरीत परिस्थितियों में आगे बढ़ने से प्रेरणा देते हैं।

- Ans
- 1. आगे बढ़ने के
 - 2. आगे बढ़ते का
 - 3. आगे बढ़ने की
 - 4. आगे बढ़ना की

Question ID : 9895804005
Chosen Option : --

Comprehension:

निम्नलिखित गद्यांश के रिक्त स्थानों की पूर्ति गद्यांश के नीचे दिए गए प्रश्नों के अनुसार कीजिए -

संसार के महान व्यक्ति अथक _____(1) करके ही उन्नति के _____(2) पर पहुंचे हैं। उन्होंने छोटे से छोटा समझे जानेवाले कार्य को पूरी _____(3) से किया। बोझा ढोनेवाले कुली तेनजिंग ने एवरेस्ट पर _____(4) की पताका फहरा दिया। संस्कृत में एक _____(5) है - उद्यम से ही कार्य सिद्ध होते हैं, सिर्फ इच्छा करने से नहीं।

SubQuestion No : 5

Q.5 गद्यांश में संकेतित रिक्त स्थान (1) के लिए उपयुक्त शब्द होगा

- Ans
- 1. पढ़ाई
 - 2. सेवा
 - 3. घुमक्कड़ी
 - 4. परिश्रम

Question ID : 9895804013
Chosen Option : --

Comprehension:

निम्नलिखित गद्यांश के रिक्त स्थानों की पूर्ति गद्यांश के नीचे दिए गए प्रश्नों के अनुसार कीजिए -

संसार के महान व्यक्ति अथक _____(1) करके ही उन्नति के _____(2) पर पहुंचे हैं। उन्होंने छोटे से छोटा समझे जानेवाले कार्य को पूरी _____(3) से किया। बोझा ढोनेवाले कुली तेनजिंग ने एवरेस्ट पर _____(4) की पताका फहरा दिया। संस्कृत में एक _____(5) है - उद्यम से ही कार्य सिद्ध होते हैं, सिर्फ इच्छा करने से नहीं।

SubQuestion No : 6

Q.6

गद्यांश में संकेतित रिक्त स्थान (2) के लिए उपयुक्त शब्द होगा

- Ans
- 1. शिखर
 - 2. सिंधु
 - 3. गर्त
 - 4. तल

Question ID : 9895804014
Chosen Option : --

Comprehension:

निम्नलिखित गद्यांश के रिक्त स्थानों की पूर्ति गद्यांश के नीचे दिए गए प्रश्नों के अनुसार कीजिए -

संसार के महान व्यक्ति अथक _____(1) करके ही उन्नति के _____(2) पर पहुंचे हैं। उन्होंने छोटे से छोटा समझे जानेवाले कार्य को पूरी _____(3) से किया। बोझा ढोनेवाले कुली तेनजिंग ने एवरेस्ट पर _____(4) की पताका फहरा दिया। संस्कृत में एक _____(5) है - उद्यम से ही कार्य सिद्ध होते हैं, सिर्फ इच्छा करने से नहीं।

SubQuestion No : 7

Q.7 गद्यांश में संकेतित रिक्त स्थान (3) के लिए उपयुक्त शब्द होगा

- Ans
- 1. उपेक्षा
 - 2. लगन
 - 3. बेमन
 - 4. निष्क्रियता

Question ID : 9895804015
Chosen Option : --

Comprehension:

निम्नलिखित गद्यांश के रिक्त स्थानों की पूर्ति गद्यांश के नीचे दिए गए प्रश्नों के अनुसार कीजिए -

संसार के महान व्यक्ति अथक _____(1) करके ही उन्नति के _____(2) पर पहुंचे हैं। उन्होंने छोटे से छोटा समझे जानेवाले कार्य को पूरी _____(3) से किया। बोझा ढोनेवाले कुली तेनजिंग ने एवरेस्ट पर _____(4) की पताका फहरा दिया। संस्कृत में एक _____(5) है - उद्यम से ही कार्य सिद्ध होते हैं, सिर्फ इच्छा करने से नहीं।

SubQuestion No : 8

Q.8 गद्यांश में संकेतित रिक्त स्थान (4) के लिए उपयुक्त शब्द होगा

- Ans 1. मानव
 2. धर्म
 3. विजय
 4. दर्प

Question ID : 9895804016
Chosen Option : --

Comprehension:

निम्नलिखित गद्यांश के रिक्त स्थानों की पूर्ति गद्यांश के नीचे दिए गए प्रश्नों के अनुसार कीजिए -

संसार के महान व्यक्ति अथक _____(1) करके ही उन्नति के _____(2) पर पहुंचे हैं। उन्होंने छोटे से छोटा समझे जानेवाले कार्य को पूरी _____(3) से किया। बोझा ढोनेवाले कुली तेनजिंग ने एवरेस्ट पर _____(4) की पताका फहरा दिया। संस्कृत में एक _____(5) है - उद्यम से ही कार्य सिद्ध होते हैं, सिर्फ इच्छा करने से नहीं।

SubQuestion No : 9

Q.9 गद्यांश में संकेतित रिक्त स्थान (5) के लिए उपयुक्त शब्द होगा

- Ans 1. भुक्ति
 2. उक्ति
 3. युक्ति
 4. बात

Question ID : 9895804017
Chosen Option : --

Q.1 रिक्त स्थान को भरने के लिए उपयुक्त शब्द का चयन करें।

आपकी यात्रा _____ हो।

- Ans 1. हँसमुख
 2. मंगलमय
 3. जंगलमय
 4. अशुभ

Question ID : 9895804011
Chosen Option : --

Q.1
1

दिए गए वाक्य का वह भाग ज्ञात करें जिसमें कोई त्रुटि है।

आप 'आधे-अधूरे' नामक नाटक को देखने के लिए तुम्हारे मित्र को बुलाइये।

- Ans
- 1. नाटक को देखने के लिए
 - 2. तुम्हारे मित्र
 - 3. को बुलाइये।
 - 4. आप 'आधे-अधूरे' नामक

Question ID : 9895804003
Chosen Option : --

Q.1/2 दिए गए शब्द के पर्यायवाची शब्द का चयन करें।

पथ

- Ans
- 1. पंछी
 - 2. भानु
 - 3. राह
 - 4. पथिक

Question ID : 9895804020
Chosen Option : --

Q.1/3 सही वर्तनी वाले शब्द का चयन करें।

- Ans
- 1. खूबसूरति
 - 2. खूबसुरती
 - 3. खूबसूरती
 - 4. खुबसुरती

Question ID : 9895804027
Chosen Option : --

Q.1/4 दिये गये वाक्यांश के लिए एक शब्द चुनिए।

जिसमें शक्ति न हो

- Ans
- 1. शक्तिशाली
 - 2. अशक्त
 - 3. सशक्ति
 - 4. सशक्त

Question ID : 9895804025
Chosen Option : --

Q.1 निम्नलिखित में से उस विकल्प का चयन करें जो 'ढोल पीटना' मुहावरे का अर्थ व्यक्त करता है।

- Ans
- 1. बात को प्रचारित करना
 - 2. ढोल पीटकर बताना
 - 3. ढोल को पीटना
 - 4. गाने के साथ ढोल बजाना

Question ID : 9895804023
Chosen Option : --

Q.1 दिए गए शब्द का विलोम चुनें।

ह्रस्व

- Ans
- 1. रोना
 - 2. अहिंसा
 - 3. दीर्घ
 - 4. लघु

Question ID : 9895804018
Chosen Option : --

Q.1 दिए गए वाक्य का वह भाग ज्ञात करें जिसमें कोई त्रुटि है।

इस साल गर्मी के मौसम में आर्कटिक क्षेत्र में बर्फ सबसे कम पाई गया।

- Ans
- 1. बर्फ सबसे कम पाई गया।
 - 2. आर्कटिक क्षेत्र में
 - 3. इस साल
 - 4. गर्मी के मौसम में

Question ID : 9895804002
Chosen Option : --

Q.1 निम्नलिखित में से उस विकल्प का चयन करें जो 'डींग मारना'

मुहावरे का अर्थ व्यक्त करता है।

- Ans
- 1. कम बातें करना
 - 2. मिल-जुल कर बात करना
 - 3. बहुत बातें करना
 - 4. बढ़ चढ़कर बातें करना

Question ID : 9895804022
Chosen Option : --

Q.1 दिए गए शब्द के पर्यायवाची शब्द का चयन करें।

जंगल

- Ans
- 1. पय
 - 2. कानन
 - 3. उपवन
 - 4. पत्थर

Question ID : 9895804021
Chosen Option : --

Q.2 दिए गए वाक्य में रेखांकित खंड को प्रतिस्थापित करने के लिए उपयुक्त विकल्प का चयन करें।

जातिवाद की समस्या स्वस्थ राष्ट्रीय के पनपने में बहुत बड़ा बाधक तत्व है।

- Ans
- 1. स्वास्थ्य राष्ट्रीयता के पनपने में
 - 2. स्वस्थ राष्ट्रीयता के पनपने में
 - 3. स्वस्थता राष्ट्र के पनपने में
 - 4. स्वास्थ्य राष्ट्रीय के पनपने में

Question ID : 9895804006
Chosen Option : --

Q.2 दिए गए वाक्य में रेखांकित खंड को प्रतिस्थापित करने के लिए उपयुक्त विकल्प का चयन करें।

कक्षा में चालीस छात्र हैं, लेकिन कार्तिक सबसे बुद्धिमान है।

- Ans
- 1. कार्तिक सब पर बुद्धिमान है।
 - 2. कार्तिक सबसे बुद्धिमान है।
 - 3. कार्तिक सबका बुद्धिमान है।
 - 4. कार्तिक सबका बुद्धिमान है।

Question ID : 9895804007
Chosen Option : --

Q.2 दिए गए शब्द का विलोम चुनें।

स्थावर

- Ans
- 1. जगम
 - 2. नग्न
 - 3. जंगल
 - 4. संगम

Question ID : 9895804019
Chosen Option : --

Q.2
3 दिये गये वाक्यांश के लिए एक शब्द चुनिए।

जो बात पहले कभी न हुई हो

Ans

- 1. दुर्लभ
- 2. सुलभ
- 3. अविश्वसनीय
- 4. अभूतपूर्व

Question ID : 9895804024
Chosen Option : --

Q.2
4 रिक्त स्थान को भरने के लिए उपयुक्त शब्द का चयन करें।

गंगा के जल को _____ माना जाता है।

Ans

- 1. जहर
- 2. शुद्ध
- 3. पवित्र
- 4. विष

Question ID : 9895804008
Chosen Option : --

Q.2
5 दिए गए वाक्य का वह भाग ज्ञात करें जिसमें कोई त्रुटि है।

समाचार पत्रों का उद्देश्य होनी चाहिए समाचारों को सकारात्मक दिशा देना।

Ans

- 1. होनी चाहिए
- 2. समाचारों को
- 3. सकारात्मक दिशा देना।
- 4. समाचार पत्रों का उद्देश्य

Question ID : 9895804004
Chosen Option : --