

## Constable (GD) in CAPFs, NIA, SSF and Rifleman (GD) in Assam Rifles Examination, 2018

Roll No. :	<a href="http://www.GovtJobsAlert.In">www.GovtJobsAlert.In</a>
Registration No.	
Name :	
Exam Venue :	ION Digital Zone iDZ Bannerghatta Main Road
Exam Time :	4:00 PM - 5:30 PM
Exam Date :	14/02/2019

Section : General Section

**Q.1** In a certain code, DIG is written as 60. How will FEED be written in that code?

- Ans
- 1. 90
  - 2. 80
  - 3. 20
  - 4. 50

Question ID : 9895803371

Chosen Option : 2

**Q.2** Eight friends A, B, C, D, E, F, G and H are sitting around a circular table facing each other for a lunch. A is opposite F and third to the right of B. G is between F and D. H is to the left of D. E is between C and A. Who is sitting third to the right of H?

- Ans
- 1. D
  - 2. A
  - 3. B
  - 4. F

Question ID : 9895803373

Chosen Option : 2

**Q.3** A square transparent sheet with a pattern is given. How will the pattern appear when the transparent sheet is folded along the dotted line?



- Ans
- 1.
  - 2.
  - 3.
  - 4.

Question ID : 9895803387

**Q.4** The statements below are followed by two conclusions labeled I and II. Assuming that the information in the statements is true, even if it appears at variance with generally established facts, decide which conclusion(s) logically and definitely follow(s) from the information given in the statements.

**Statements:**

- 1.) All pens are frogs.
- 2.) All crows are frogs.

**Conclusions:**

- I. No pen is a crow.
- II. Some pens are crows.

- Ans**
- 1. Only conclusion II follows.
  - 2. Both conclusions follow.
  - 3. Only conclusion I follows.
  - 4. Either conclusion I or conclusion II follows.

Question ID : 9895803375  
Chosen Option : 3

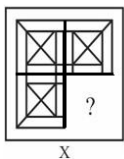
**Q.5** Select the option that is related to the third term in the same way as the second term is related to the first term.

BFH : HBF :: GKM : ?

- Ans**
- 1. KMG
  - 2. MKI
  - 3. MGK
  - 4. IKM

Question ID : 9895803369  
Chosen Option : 3

**Q.6** Select a figure from amongst the four alternatives that when placed in the blank space (?) of figure X will complete the pattern. (Rotation is not allowed).



- Ans**
- 1.
  - 2.
  - 3.
  - 4.

Question ID : 9895803384  
Chosen Option : 2

Q.7 Choose the odd number out of the given options.

- Ans
- 1. 216
  - 2. 65
  - 3. 8
  - 4. 125

Question ID : 9895803380  
Chosen Option : 2

Q.8 Choose the option in which the figure marked 'X' is embedded. (Rotation is not allowed)



- Ans
- 1.
  - 2.
  - 3.
  - 4.

Question ID : 9895803385  
Chosen Option : 1

Q.9 Seven friends O, P, Q, R, S, T and U are watching a movie sitting in a row. S is sitting at one extreme end. Q is sitting second to the right of S. P is sitting between O and Q. U is NOT sitting at any extreme end. R is sitting to the left of T. Who is sitting fourth to the right of U?

- Ans
- 1. R
  - 2. Q
  - 3. T
  - 4. P

Question ID : 9895803372  
Chosen Option : 3

Q.1 Choose the option that most closely resembles the mirror image of the given word when mirror is placed at right side.

0

MORTIFY

- Ans
- 1.
  - 2.

3. **YIILROM**

4. **YITROM**

Question ID : 9895803386

Chosen Option : 4

Q.1 Select the option that is related to the third term in the same way as the second term is related to the first term.

1

Dispur : Assam :: Kohima : ?

Ans  1. Capital

2. Sikkim

3. Meghalaya

4. Nagaland

Question ID : 9895803367

Chosen Option : 4

Q.1 Select the option that will correctly replace the question mark (?) in the series.

2

6, 21, 51, 96, ?

Ans  1. 156

2. 176

3. 136

4. 116

Question ID : 9895803377

Chosen Option : 1

Q.1 Choose the odd one out of the given options.

3

Ans  1. LNM

2. RNK

3. JKV

4. HLW

Question ID : 9895803365

Chosen Option : 3

Q.1 Find out the two signs to be interchanged to make the following equation correct.

4

$27 + 48 \times 2 - 7 \div 3 = 30$

Ans  1. - and  $\div$

2. + and -

3.  $\times$  and  $\div$

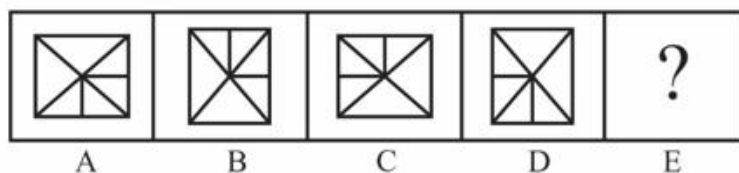
4. - and  $\times$

Question ID : 9895803382

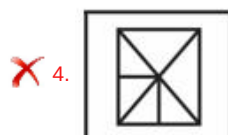
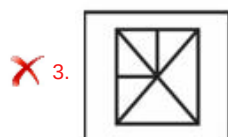
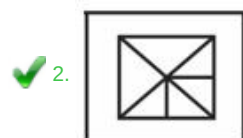
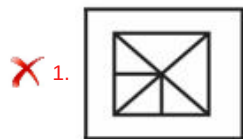
Chosen Option : 3

Q.1

5 Choose the option that would follow next in the given figure series.



Ans



Question ID : 9895803383  
Chosen Option : 2

Q.1 Select the option that will correctly replace the question mark (?) in the series.

6

TOD, RQB, PSZ, NUX, ?

Ans

1. LWU

2. LVW

3. LWW

4. LWV

Question ID : 9895803364  
Chosen Option : 2

Q.1 Select the option that is related to the third number in the same way as the second number is related to the first number.

7

45 : 315 :: 37 : ?

Ans

1. 144

2. 259

3. 169

4. 221

Question ID : 9895803379  
Chosen Option : 4

Q.1 In a certain code, STEERING is written as TEIGTEIG. How will QUESTION be written in that code?

8

Ans  1. USINVSIN

- 2. USJNUSIN
- 3. USINUSIN
- 4. USINUSJN

Question ID : 9895803370  
Chosen Option : 1

**Q.1** The statements below are followed by two conclusions labeled I and II. Assuming that the information in the statements is true, even if it appears at variance with generally established facts, decide which conclusion(s) logically and definitely follow(s) from the information given in the statements.

**Statements:**

- 1.) Some owls are horses.
- 2.) Some horses are hares.

**Conclusions:**

- I. Some owls are hares.
- II. Some hares are owls.

- Ans**
- 1. Only conclusion II follows.
  - 2. Only conclusion I follows.
  - 3. Both conclusions follow.
  - 4. Neither conclusion I nor conclusion II follows.

Question ID : 9895803376  
Chosen Option : 2

**Q.2** Choose the odd one out of the given options.

- Ans**
- 1. Ghana
  - 2. Cuba
  - 3. Egypt
  - 4. Berlin

Question ID : 9895803366  
Chosen Option : 4

**Q.2** Select the option that will correctly replace the question mark (?) in the series.

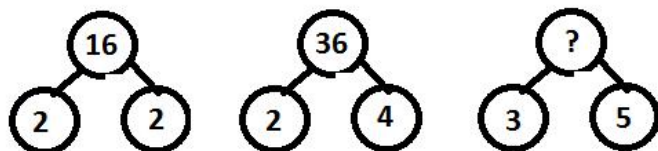
5, 6, 14, 41, ?

- Ans**
- 1. 135
  - 2. 105
  - 3. 115
  - 4. 95

Question ID : 9895803378  
Chosen Option : 4

**Q.2**  
2

Select the option that will correctly replace the question mark (?) in the given pattern.



- Ans
- 1. 34
  - 2. 15
  - 3. 64
  - 4. 8

Question ID : 9895803381

Chosen Option : 1

Q.2 J, K, L, M, N and O are six teachers. Each one teaches a different subject out of Hindi, English, Math, Science, Social Science and Arts, NOT necessarily in the same order. Each of them teaches on only one day, from Monday to Saturday, NOT necessarily in the same order. J teaches Arts on Saturday. L teaches neither English nor Social Science, but he teaches on Thursday. Wednesday is reserved for Maths taught by K. O teaches Science a day before N. Social Science is taught a day before Arts. Which subject is taught on the day between Thursday and Saturday?

- Ans
- 1. Social Science
  - 2. Maths
  - 3. Science
  - 4. English

Question ID : 9895803374

Chosen Option : 4

Q.2 Select the option that is related to the third term in the same way as the second term is related to the first term.

4 Famous : Renowned :: Moisten : ?

- Ans
- 1. Drench
  - 2. Desire
  - 3. Debate
  - 4. Drink

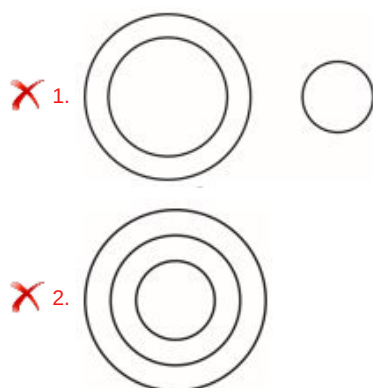
Question ID : 9895803368

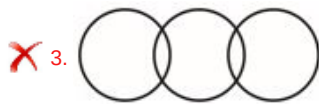
Chosen Option : 2

Q.2 Select the Venn diagram that best represents the given set of classes.

Whales, Bats, Mammals

Ans





Question ID : 9895803388  
Chosen Option : 4

Q.2  
6 Which of the following Union Territories is given partial statehood in India?

- Ans  1. Chandigarh  
 2. Dadra and Nagar Haveli  
 3. Daman Diu  
 4. Puducherry

Question ID : 9895804948  
Chosen Option : 1

Q.2  
7 Malaria and Kala Azar are caused by:

- Ans  1. bacteria  
 2. fungi  
 3. protozoa  
 4. virus

Question ID : 9895804940  
Chosen Option : 1

Q.2  
8 Choose the correct group of important Gods of the Vedic period.

- Ans  1. Brahma, Prajapati, Garuda  
 2. Seshanaga, Chandra, Yama  
 3. Varuna, Vishnu, Shiva  
 4. Agni, Indra, Soma

Question ID : 9895804933  
Chosen Option : 1

Q.2  
9 Which of the following statements is NOT correct about the Tundra type of vegetation?

- Ans  1. Small shrubs are a part of this vegetation.  
 2. Moss and lichens are found here.  
 3. The growth of natural vegetation is limited here.  
 4. It is found in a temperate region.

Question ID : 9895804936  
Chosen Option : 4



Q.3  
0 The Justice Rajendar Sachar Committee was set up by the Government of India to :

Ans  1.

study the condition of unorganized sector of Indian Economy.

2. study the conditions of National parks in India.

3. examine the status of India's foreign policy.

4.

examine the social and economic status of the Muslim community.

Question ID : 9895804947  
Chosen Option : 1

Q.3  
1 In the context of Elections in India, the term VVPAT stands for :

Ans  1. Voter Visit Poll Account Trail

2. Voter Vivid Press Audit Trail

3. Voter Verifiable Paper Audit Trail

4. Voter Verifiable Paper Account Trail

Question ID : 9895804944  
Chosen Option : 3

Q.3  
2 Which of the following places served as the venue for the closing ceremony of Pravasi Bharatiya Divas 2019?

Ans  1. Chandigarh

2. Pune

3. Varanasi

4. Kochi

Question ID : 9895804945  
Chosen Option : 3

Q.3  
3 The other name of the tertiary sector is :

Ans  1. service sector

2. primary sector

3. manufacturing sector

4. public sector

Question ID : 9895804951  
Chosen Option : 1

Q.3  
4 'Bibi Ka Maqbara, the replica of the Taj Mahal is situated in :

Ans  1. Chandarnagar

2. Aurangabad

3. Ahmedabad

4. Cuttack

Question ID : 9895804928  
Chosen Option : 3

Q.3 In the context of the Indian Constitution, which of the following Articles guarantees the Right to Freedom of Religion to its citizens?

- 5
- Ans
- 1. Article 14
  - 2. Article 25
  - 3. Article 32
  - 4. Article 22

Question ID : 9895804949  
Chosen Option : 1

Q.3 The type of unemployment in the agricultural sector of India where more people are employed than required is known as:

- 6
- Ans
- 1. disguised unemployment
  - 2. seasonal unemployment
  - 3. structural unemployment
  - 4. marginal unemployment

Question ID : 9895804950  
Chosen Option : 3

Q.3 Sandstone is an example of :

- 7
- Ans
- 1. non-foliated rock
  - 2. sedimentary rock
  - 3. igneous rock
  - 4. metamorphic rock

Question ID : 9895804935  
Chosen Option : 4

Q.3 Which bridge connects Dibrugarh in Assam to Pasighat in Arunachal Pradesh?

- 8
- Ans
- 1. Naini
  - 2. Bogibeel
  - 3. Coronation
  - 4. Pamban

Question ID : 9895804946  
Chosen Option : 2

Q.3 Food containing oil and fat, when kept for a longer time, causes a change in its taste and smell due to the process of \_\_\_\_\_.

- 9
- Ans
- 1. decomposition
  - 2. fermentation
  - 3. rancidity
  - 4. substitution

Question ID : 9895804943  
Chosen Option : 1

Q.4 The Ryotwari System was introduced by:

- Ans
- 1. Warren Hastings
  - 2. Lord Cornwallis
  - 3. Thomas Munro
  - 4. Lord Ripon

Question ID : 9895804932  
Chosen Option : 3

Q.4 With reference to the Mahatma Gandhi National Rural Employment Guarantee Act, which of the following statements is NOT correct?

- 1
- Ans
- 1. It is also known as the Right to Work.
  - 2. It is implemented by the Ministry of Rural Development.
  - 3. It was initiated by the Government of India in 2009.
  - 4. It guarantees 100 days of work to the beneficiary.

Question ID : 9895804952  
Chosen Option : 2

Q.4 The Bandipur National Park is located in which of the following states of India?

- 2
- Ans
- 1. Karnataka
  - 2. Tamil Nadu
  - 3. Odisha
  - 4. Chhattisgarh

Question ID : 9895804934  
Chosen Option : 1

Q.4 Light Year is related to :

- 3
- Ans
- 1. weather
  - 2. distance
  - 3. sound
  - 4. speed

Question ID : 9895804941  
Chosen Option : 1

Q.4 The \_\_\_\_\_ collects sound from the surroundings.

- 4
- Ans
- 1. auditory nerve
  - 2. tympanic membrane
  - 3. cochlea
  - 4. pinna

Question ID : 9895804939  
Chosen Option : 1

Q.4 The 2018 Dronacharya Award for Table Tennis was given to :

- 5
- Ans
- 1. Srinivasa Rao

- 2. Jiwan Kumar Sharma
- 3. Vijaya Sharma
- 4. Tarak Sinha

Question ID : 9895804938  
Chosen Option : 4

Q.4  
6 The Lahore session of the Indian National Congress is significant because :

- Ans
- 1. it passed the resolution to demand Poorna Swaraj.
  - 2. it passed the resolution to start the Rowlatt Satyagraha.
  - 3. it passed the resolution to hold civil services examination in India.
  - 4. it passed the resolution to boycott provincial elections.

Question ID : 9895804931  
Chosen Option : 2

Q.4  
7 After some days, statues of brass and bronze become green due to:

- Ans
- 1. oxidation
  - 2. corrosion
  - 3. erosion
  - 4. decomposition

Question ID : 9895804942  
Chosen Option : 1

Q.4  
8 The bronze sculpture of Nataraja was cast during the period of the:

- Ans
- 1. Cheras
  - 2. Pallavas
  - 3. Cholas
  - 4. Pandyas

Question ID : 9895804930  
Chosen Option : 3

Q.4  
9 'Bali Yatra', the voyage to Bali, is celebrated in which of the following states of India?

- Ans
- 1. Tamil Nadu
  - 2. Rajasthan
  - 3. Kerala
  - 4. Odisha

Question ID : 9895804929  
Chosen Option : 4

Q.5  
0 Which Indian cricketer has become the fastest bowler to claim 100 wickets in One-day Internationals as on January 2019?

- Ans
- 1. Ishant Sharma
  - 2. Umesh Yadav

3. Hardik Pandya

4. Mohammed Shami

Question ID : 9895804937

Chosen Option : 4

Q.5  
1 What is the value of  $\left[\left(\frac{1}{2} \div \frac{1}{4} - 4 \times \frac{1}{2} \times \frac{1}{3}\right) \text{ of } \left(\frac{2}{3} \div \frac{4}{3} + \frac{1}{2}\right)\right]$ ?

Ans

1.  $\frac{1}{2}$

2.  $\frac{5}{2}$

3.  $\frac{3}{4}$

4.  $\frac{4}{3}$

Question ID : 9895805029

Chosen Option : 1

Q.5  
2 K alone can complete a work in 20 days and M alone can complete the same work in 30 days. K and M start the work together but K leaves the work after 5 days of the starting of work. In how many days M will complete the remaining work?

Ans

1. 35/2 days

2. 25/2 days

3. 55/2 days

4. 45/2 days

Question ID : 9895805044

Chosen Option : 2

Q.5  
3 A sum becomes three times of itself in 10 years at the rate of simple interest. What is the rate of interest per annum?

Ans

1. 25%

2. 20%

3. 15%

4. 30%

Question ID : 9895805041

Chosen Option : 2

Q.5  
4 The sum of the volume of two solid spheres is  $1144/3 \text{ cm}^3$ . If the sum of their radii is 7 cm, then what will be the difference of the radii?

Ans

1. 4 cm

2. 3 cm

3. 2 cm

4. 1 cm

Question ID : 9895805049

Chosen Option : 2

Q.5

5 Rohit, Mohit and Sumit individually can complete a work in 8 days, 14 days and 21 days respectively. In how many days these three together can complete the same work?

- Ans
- 1. 156/43 days
  - 2. 168/41 days
  - 3. 168/43 days
  - 4. 156/41 days

Question ID : 9895805043

Chosen Option : 4

Q.5  
6 What is the mode of the given data?

3, 0, 1, 0, 2, 1, 2, 0, 1, 2, 1, 1, 1, 3, 2

- Ans
- 1. 1
  - 2. 0
  - 3. 2
  - 4. 3

Question ID : 9895805034

Chosen Option : 1

Q.5  
7 If a number is divided by 14, then it becomes equal to 10% of the second number. First number is how much percent more than the second number?

- Ans
- 1. 40%
  - 2. 45%
  - 3. 60%
  - 4. 30%

Question ID : 9895805035

Chosen Option : 1

Q.5  
8 If selling price of an article is ₹638 and profit is 45%, then what will be the net profit?

- Ans
- 1. ₹256
  - 2. ₹287.1
  - 3. ₹440
  - 4. ₹198

Question ID : 9895805036

Chosen Option : 3

Q.5  
9 If Sohan is driving a bike at a speed of 25 m/s, then in how much time Sohan will cover a distance of 540 km?

- Ans
- 1. 7 hr
  - 2. 5 hr
  - 3. 21.6 hr
  - 4. 6 hr

Question ID : 9895805045

Chosen Option : 4

Q.6  
0 The area of a square and a rectangle are equal. The length of the rectangle is greater than the side of a square by 5 cm and its breadth is less than the side of square by 4 cm. What will be the perimeter of the rectangle?

- Ans
- 1. 84 cm
  - 2. 82 cm
  - 3. 76 cm
  - 4. 72 cm

Question ID : 9895805048  
Chosen Option : 1

Q.6 The ratio of two numbers is 13 : 20. If the difference between them is 189, then what is the smaller of the two numbers?

1

- Ans
- 1. 279
  - 2. 221
  - 3. 297
  - 4. 351

Question ID : 9895805038  
Chosen Option : 2

Q.6 Marked price of an article is 40% more than its cost price. If 50% discount is given on the article, then selling price is what percent of the cost price?

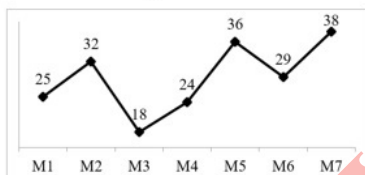
2

- Ans
- 1. 78%
  - 2. 70%
  - 3. 93%
  - 4. 84%

Question ID : 9895805033  
Chosen Option : 1

Q.6 The line chart given below shows the production (in 10000s) of cars in 7 different months.

3



What is the average monthly production for the given 7 months?

- Ans
- 1. 32.2 (in 10000s)
  - 2. 21.6 (in 10000s)
  - 3. 23.5 (in 10000s)
  - 4. 28.8 (in 10000s)

Question ID : 9895805051  
Chosen Option : 1

Q.6

4

The table given below shows the marks obtained by 4 students in 5 subjects. The maximum marks of each subject is 100.

Subjects	Students			
	P1	P2	P3	P4
S1	89	100	92	91
S2	62	52	72	37
S3	57	55	70	65
S4	76	85	76	58
S5	85	70	66	62

What are the average marks per subject obtained by P2?

- Ans
- 1. 72.4
  - 2. 75.8
  - 3. 70.6
  - 4. 74.6

Question ID : 9895805052  
Chosen Option : 1

Q.6  
5 What is the value of  $\left[45 \text{ of } \left(\frac{3}{7} \div \frac{15}{14}\right) - \left(6\frac{1}{2} \div 3 - 4\right) + 2\right]$  ?

- Ans
- 1.  $\frac{131}{6}$
  - 2.  $\frac{147}{11}$
  - 3.  $\frac{109}{6}$
  - 4.  $\frac{33}{7}$

Question ID : 9895805030  
Chosen Option : 3

Q.6  
6 If Mohit can cover a distance of 1872 km in 26 hours, then what is the speed of Mohit?

- Ans
- 1. 36 m/s
  - 2. 20 m/s
  - 3. 24 m/s
  - 4. 72 m/s

Question ID : 9895805046  
Chosen Option : 2

Q.6  
7 A person purchases calculators at the rate of ₹345 per calculator. If he sells calculators on 40% loss then what will be the selling price of 28 calculators?

- Ans
- 1. ₹6872
  - 2. ₹8657
  - 3. ₹13524



✓ 4. ₹5796

Question ID : 9895805037  
Chosen Option : 1

Q.6 Height of a right circular cylinder is 20 cm. If the radius is its base 14 cm, then what will be the curved surface area of the cylinder?

- Ans
- ✗ 1. 1940 cm<sup>2</sup>
  - ✗ 2. 2120 cm<sup>2</sup>
  - ✓ 3. 1760 cm<sup>2</sup>
  - ✗ 4. 1880 cm<sup>2</sup>

Question ID : 9895805047  
Chosen Option : 4

Q.6 The average salary of managers is  $x$  and the average salary of workers is  $y$ . The number of the managers is 15 times of the number of workers. What is average salary of managers and workers together?

- Ans
- ✓ 1.  $(15x + y)/16$
  - ✗ 2.  $(15x + y)/(x + y)$
  - ✗ 3.  $(x + 15y)/(x + y)$
  - ✗ 4.  $(x + 15y)/16$

Question ID : 9895805032  
Chosen Option : 3

Q.7 The average weight of 10 articles is 65 kg. If three articles having an average weight of 72 kg are removed, then what will be new average weight of the remaining articles?

- Ans
- ✗ 1. 58 kg
  - ✗ 2. 65 kg
  - ✗ 3. 71 kg
  - ✓ 4. 62 kg

Question ID : 9895805031  
Chosen Option : 3

Q.7 P, Q and R invest ₹14000, ₹18000 and ₹24000 respectively to start a business. If the profit at the end of the year is ₹25480, then what is difference between the share of P and Q?

- Ans
- ✗ 1. ₹2670
  - ✗ 2. ₹3480
  - ✓ 3. ₹1820
  - ✗ 4. ₹2140

Question ID : 9895805040  
Chosen Option : 3

Q.7 What will be the highest number which when divides 52 and 104 leaves remainder 4 and 8 respectively?

- Ans
- ✗ 1. 12
  - ✓ 2. 48
  - ✗ 3. 16

4. 26

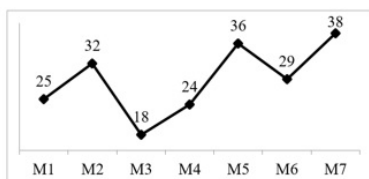
Question ID : 9895805028  
Chosen Option : 3

Q.7 <sub>3</sub> If  $x : y = 5 : 4$ , then what will be the ratio of  $(x/y) : (y/x)$ ?

- Ans  1. 25 : 16  
 2. 16 : 25  
 3. 4 : 5  
 4. 5 : 4

Question ID : 9895805039  
Chosen Option : 3

Q.7 <sub>4</sub> The line chart given below shows the production (in 10000s) of cars in 7 different months.



Production of cars in month M2 is how much percent more than the production of cars in month M1?

- Ans  1. 25%  
 2. 37.5%  
 3. 33.33%  
 4. 28%

Question ID : 9895805050  
Chosen Option : 3

Q.7 <sub>5</sub> A sum of ₹4500 is lent at compound interest. If the rate of interest is 10% per annum (interest is compounded annually), then what will be the amount after 3 years?

- Ans  1. ₹5989.5  
 2. ₹5689.5  
 3. ₹5686.5  
 4. ₹5889.5

Question ID : 9895805042  
Chosen Option : 1

Section : English Language

Q.1 Select the most appropriate option to substitute the underlined segment in the given sentence. If there is no need to substitute it, select No Improvement.

The prince was told kill the dragon, but in order to do so, he had to cross the Forbidden Mountain.

- Ans  1. was told killing the dragon  
 2. No improvement  
 3. was told too kill the dragon  
 4. was told to kill the dragon

Question ID : 9895804491  
Chosen Option : 1

Q.2 From the given options, identify the segment in the sentence which contains the grammatical error.

Ten years since Mohit left India and started working for the betterment of the downtrodden people.

- Ans
- 1. Ten years since
  - 2. the betterment of
  - 3. started working for
  - 4. Mohit left India

Question ID : 9895804488  
Chosen Option : 4

Q.3 Select the option that means the same as the given idiom.

At the drop of a hat

- Ans
- 1. Instantly
  - 2. Lately
  - 3. Slowly
  - 4. Seldom

Question ID : 9895804506  
Chosen Option : 3

Q.4 Select the correctly spelt word.

- Ans
- 1. Calander
  - 2. Calendar
  - 3. Calandar
  - 4. Calender

Question ID : 9895804511  
Chosen Option : 4

Q.5 Select the most appropriate option to fill in the blank.

The film we saw last night was boring. I wish I \_\_\_\_\_ seen it.

- Ans
- 1. didn't
  - 2. hadn't
  - 3. shouldn't
  - 4. wouldn't have

Question ID : 9895804495  
Chosen Option : 1

Q.6 Select the correctly spelt word.

- Ans
- 1. Mentainance
  - 2. Maintainance
  - 3. Maintainence
  - 4. Maintenance

Question ID : 9895804510

Chosen Option : 2

Q.7 Select the antonym of the given word.

BOISTEROUS

- Ans
- 1. Aggravated
  - 2. Incompetent
  - 3. Restrained
  - 4. Exuberant

Question ID : 9895804504

Chosen Option : 1

Q.8 Select the word which means the same as the group of words given.

A person who thinks he/she is the best.

- Ans
- 1. Eccentric
  - 2. Egoist
  - 3. Selfish
  - 4. Garrulous

Question ID : 9895804872

Chosen Option : 1

Q.9 Select the most appropriate option to substitute the underlined segment in the given sentence. If there is no need to substitute it, select No Improvement.

The mobile company changed their handsets last year, and by doing so they have managed to improve their sale.

- Ans
- 1. No improvement
  - 2. improve the sale
  - 3. improve their sales
  - 4. improved their sales

Question ID : 9895804492

Chosen Option : 4

Q.10 Select the synonym of the given word.

AMIABLE

- Ans
- 1. Cheerful
  - 2. Bashful
  - 3. Hostile
  - 4. Friendly

Question ID : 9895804503

Chosen Option : 4

Q.1 Select the most appropriate option to substitute the underlined segment in the given sentence. If there is no need to substitute it, select No Improvement.

Don't use those pencils; use the one we bought in Portugal.

- Ans
- 1. No improvement
  - 2. use this ones
  - 3. use one
  - 4. use the ones

Question ID : 9895804493  
Chosen Option : 2

Q.1  
2 Select the synonym of the given word.

TURBULENT

- Ans
- 1. Violent
  - 2. Miserable
  - 3. Accurate
  - 4. Troublesome

Question ID : 9895804502  
Chosen Option : 1

Q.1  
3 From the given options, identify the segment in the sentence which contains the grammatical error.

If I am a bird, I would fly and explore the world.

- Ans
- 1. I would fly
  - 2. and explore
  - 3. If I am
  - 4. the world

Question ID : 9895804490  
Chosen Option : 3

Q.1  
4 Select the most appropriate word to fill in the blank.

Beware of him. He is as sly as a \_\_\_\_\_.

- Ans
- 1. goat
  - 2. rabbit
  - 3. snail
  - 4. fox

Question ID : 9895804513  
Chosen Option : 3

Comprehension:

In the following passage some words have been deleted. Fill in the blanks with the help of the alternatives given.

Most animals have their own habitats \_\_\_\_\_ (1) some make long journeys from one region to another. This \_\_\_\_\_ (2) called migration. It takes place at a particular \_\_\_\_\_ (3) of the year. Birds are the best-known \_\_\_\_\_ (4) but many other animals also migrate to places with \_\_\_\_\_ (5) climate.

SubQuestion No : 15

Q.1  
5 Select the most appropriate option to fill in blank number (1).

- Ans  1. but  
 2. because  
 3. so  
 4. as

Question ID : 9895804497  
Chosen Option : 1

**Comprehension:**

In the following passage some words have been deleted. Fill in the blanks with the help of the alternatives given.

Most animals have their own habitats \_\_\_\_\_ (1) some make long journeys from one region to another. This \_\_\_\_\_ (2) called migration. It takes place at a particular \_\_\_\_\_ (3) of the year. Birds are the best-known \_\_\_\_\_ (4) but many other animals also migrate to places with \_\_\_\_\_ (5) climate.

SubQuestion No : 16

Q.1  
6 Select the most appropriate option to fill in blank number (2).

- Ans  1. are  
 2. were  
 3. is  
 4. was

Question ID : 9895804498  
Chosen Option : 3

**Comprehension:**

In the following passage some words have been deleted. Fill in the blanks with the help of the alternatives given.

Most animals have their own habitats \_\_\_\_\_ (1) some make long journeys from one region to another. This \_\_\_\_\_ (2) called migration. It takes place at a particular \_\_\_\_\_ (3) of the year. Birds are the best-known \_\_\_\_\_ (4) but many other animals also migrate to places with \_\_\_\_\_ (5) climate.

SubQuestion No : 17

Q.1  
7 Select the most appropriate option to fill in blank number (3).

- Ans  1. season  
 2. time  
 3. month  
 4. part

Question ID : 9895804499  
Chosen Option : 1

Comprehension:

In the following passage some words have been deleted. Fill in the blanks with the help of the alternatives given.

Most animals have their own habitats \_\_\_\_\_ (1) some make long journeys from one region to another. This \_\_\_\_\_ (2) called migration. It takes place at a particular \_\_\_\_\_ (3) of the year. Birds are the best-known \_\_\_\_\_ (4) but many other animals also migrate to places with \_\_\_\_\_ (5) climate.

SubQuestion No : 18

Q.1  
8 Select the most appropriate option to fill in blank number (4).

- Ans
- 1. visitors
  - 2. migrants
  - 3. travellers
  - 4. tourists

Question ID : 9895804500  
Chosen Option : 4

Comprehension:

In the following passage some words have been deleted. Fill in the blanks with the help of the alternatives given.

Most animals have their own habitats \_\_\_\_\_ (1) some make long journeys from one region to another. This \_\_\_\_\_ (2) called migration. It takes place at a particular \_\_\_\_\_ (3) of the year. Birds are the best-known \_\_\_\_\_ (4) but many other animals also migrate to places with \_\_\_\_\_ (5) climate.

SubQuestion No : 19

Q.1  
9 Select the most appropriate option to fill in blank number (5).

- Ans
- 1. extreme
  - 2. favourable
  - 3. harsh
  - 4. cold

Question ID : 9895804501  
Chosen Option : 1

Q.2  
0 Select the antonym of the given word.

URGE

- Ans
- 1. Deter
  - 2. Persuade
  - 3. Triumph
  - 4. Request

Question ID : 9895804505

Chosen Option : 1

Q.2  
1 Select the most appropriate option to fill in the blank.

When she bid farewell to her parents, her eyes were full \_\_\_\_\_ tears.

- Ans
- 1. with
  - 2. of
  - 3. from
  - 4. by

Question ID : 9895804494  
Chosen Option : 4

Q.2  
2 From the given options, identify the segment in the sentence which contains the grammatical error.

He cannot speak Spanish because he was born and brought up in Spain.

- Ans
- 1. born and brought up
  - 2. He cannot speak
  - 3. because he was
  - 4. in Spain.

Question ID : 9895804489  
Chosen Option : 1

Q.2  
3 Select the word which means the same as the group of words given.

A life history written by somebody else

- Ans
- 1. Autobiography
  - 2. Museology
  - 3. Biography
  - 4. Bibliography

Question ID : 9895804509  
Chosen Option : 1

Q.2  
4 Select the option that means the same as the given idiom.

Spill the beans

- Ans
- 1. To keep the secret
  - 2. To be productive
  - 3. To leak the secret
  - 4. To be clumsy

Question ID : 9895804507  
Chosen Option : 1

Q.2  
5 Select the most appropriate word to fill in the blank.

Let us go for a picnic today. The \_\_\_\_\_ is very pleasant.



- Ans
- 1. atmosphere
  - 2. climate
  - 3. weather
  - 4. season

Question ID : 9895804512  
Chosen Option : 2

Section : Hindi Language

Q.1 दिए गए शब्द के पर्यायवाची शब्द का चयन करें।

सर्प

- Ans
- 1. देवता
  - 2. भूधर
  - 3. भुजंग
  - 4. भूमि

Question ID : 9895804047  
Chosen Option : --

Q.2 दिये गये वाक्यांश के लिए एक शब्द दीजिये।

साथ काम करने वाला

- Ans
- 1. सहकर्मी
  - 2. सहकर्म
  - 3. सहधर्मी
  - 4. सहयोग

Question ID : 9895804050  
Chosen Option : --

Q.3 सही वर्तनी वाले शब्द का चयन करें।

- Ans
- 1. विद्यार्थि
  - 2. विद्यार्थी
  - 3. विद्यर्थी
  - 4. वीद्यार्थी

Question ID : 9895804053  
Chosen Option : --

Q.4

दिए गए वाक्य में रेखांकित खंड को प्रतिस्थापित करने के लिए सबसे उपयुक्त विकल्प का चयन करें।

अध्यापिका को परीक्षा के लिए महत्वपूर्ण प्रश्न कराये।

- Ans
- 1. अध्यापिका ने
  - 2. अध्यापिका के
  - 3. अध्यापिका का
  - 4. अध्यापिका के लिए

Question ID : 9895804032

Chosen Option : --

Q.5 रिक्त स्थान को भरने के लिए सबसे उपयुक्त शब्द का चयन करें।

आज मौसम बहुत \_\_\_\_\_ है।

- Ans
- 1. बीमार
  - 2. सुहाना
  - 3. दुर्गंध
  - 4. सुगंध

Question ID : 9895804037

Chosen Option : --

Q.6 रिक्त स्थान को भरने के लिए सबसे उपयुक्त शब्द का चयन करें।

समय पर बिल का भुगतान करें \_\_\_\_\_ बिजली काट दी जाएगी।

- Ans
- 1. लेकिन
  - 2. या
  - 3. अन्यथा
  - 4. परंतु

Question ID : 9895804035

Chosen Option : --

Q.7 दिए गए वाक्य का वह भाग ज्ञात करें जिसमें कोई त्रुटि है।

हम जिस वस्तु की कामना करते हैं उसी से हमारे कर्म की उत्पत्ति होता है।

- Ans
- 1. उसी से हमारे कर्म की
  - 2. हम जिस वस्तु की

3. उत्पत्ति होता है।

4. कामना करते हैं

Question ID : 9895804029

Chosen Option : --

Q.8 दिए गए वाक्य का वह भाग ज्ञात करें जिसमें कोई त्रुटि है।

अपने से अधिक दूसरों का व्यथा से वे अधिक पीड़ित थे।

Ans

1. अपने से अधिक

2. वे अधिक

3. दूसरों का व्यथा से

4. पीड़ित थे।

Question ID : 9895804028

Chosen Option : --

Q.9 दिए गए शब्द का विलोम चुनें।

जीवन

Ans

1. जरा

2. सचेत

3. सम्मोहन

4. मरण

Question ID : 9895804045

Chosen Option : --

Q.10 सही वर्तनी वाले शब्द का चयन करें।

Ans

1. निर्यात

2. निर्यात

3. निरयात

4. नीर्यात

Question ID : 9895804052

Chosen Option : --

Q.1 रिक्त स्थान को भरने के लिए सबसे उपयुक्त शब्द का चयन करें।

अधिक जनसंख्या भारत के लिए \_\_\_\_\_ है।

Ans

1. त्रासदी

- 2. मोक्ष
- 3. नियम
- 4. अभिशाप

Question ID : 9895804034  
Chosen Option : --

Q.1  
2 दिए गए वाक्य में रेखांकित खंड को प्रतिस्थापित करने के लिए सबसे उपयुक्त विकल्प का चयन करें।

मैं जिस भारतीय प्रजातंत्र की कल्पना करता हूँ, उसका अध्यक्ष कोई किसान ही होगा।

- Ans
- 1. उसकी अध्यक्ष कोई किसान होगा।
  - 2. उनका अध्यक्ष भी किसान होगा।
  - 3. उसका अध्यक्ष कोई किसान ही होगा।
  - 4. उसकी अध्यक्ष कोई किसान होगी।

Question ID : 9895804031  
Chosen Option : --

Q.1  
3 दिये गये वाक्यांश के लिए एक शब्द दीजिये।

आकाश को छूने वाला

- Ans
- 1. गगन
  - 2. आकाशीय
  - 3. खगोलीय
  - 4. गगनचुंबी

Question ID : 9895804051  
Chosen Option : --

Q.1  
4 रिक्त स्थान को भरने के लिए सबसे उपयुक्त शब्द का चयन करें।

आपके दर्शन \_\_\_\_\_ हैं।

- Ans
- 1. पानी
  - 2. कल
  - 3. सामने
  - 4. दुर्लभ

Question ID : 9895804036  
Chosen Option : --

Q.1  
5

दिए गए शब्द के पर्यायवाची शब्द का चयन करें।

पाणि

- Ans
- 1. पत्ता
  - 2. पत्र
  - 3. पानी
  - 4. हाथ

Question ID : 9895804046

Chosen Option : --

Comprehension:

निम्नलिखित गद्यांश के रिक्त स्थानों की पूर्ति गद्यांश के नीचे दिए गए प्रश्नों के अनुसार कीजिए -

कभी हमारा देश सांस्कृतिक \_\_\_\_\_(1) के पद पर आसीन था। 'विश्व गुरु' होने के नाते इस देश ने समूचे \_\_\_\_\_(2) को मानवता, नैतिकता और सदाचार की शिक्षा दी। अनेक ग्रन्थ इसके \_\_\_\_\_(3) हैं। लेकिन समय के साथ हम \_\_\_\_\_(4) मूल्यों को भूलने लगे। आज भी समाज में नैतिक मूल्यों की \_\_\_\_\_(5) देखने को मिलती है।

SubQuestion No : 16

Q.1  
6 गद्यांश में संकेतित रिक्त स्थान (1) के लिए उपयुक्त शब्द होगा

- Ans
- 1. गुरु
  - 2. अध्येता
  - 3. वक्ता
  - 4. उपदेशक

Question ID : 9895804039

Chosen Option : --

Comprehension:

निम्नलिखित गद्यांश के रिक्त स्थानों की पूर्ति गद्यांश के नीचे दिए गए प्रश्नों के अनुसार कीजिए -

कभी हमारा देश सांस्कृतिक \_\_\_\_\_(1) के पद पर आसीन था। 'विश्व गुरु' होने के नाते इस देश ने समूचे \_\_\_\_\_(2) को मानवता, नैतिकता और सदाचार की शिक्षा दी। अनेक ग्रन्थ इसके \_\_\_\_\_(3) हैं। लेकिन समय के साथ हम \_\_\_\_\_(4) मूल्यों को भूलने लगे। आज भी समाज में नैतिक मूल्यों की \_\_\_\_\_(5) देखने को मिलती है।

SubQuestion No : 17

Q.1  
7 गद्यांश में संकेतित रिक्त स्थान (2) के लिए उपयुक्त शब्द होगा

- Ans
- 1. यूनान
  - 2. यूरोप
  - 3. विश्व
  - 4. अमेरिका

Question ID : 9895804040  
Chosen Option : --

Comprehension:

निम्नलिखित गद्यांश के रिक्त स्थानों की पूर्ति गद्यांश के नीचे दिए गए प्रश्नों के अनुसार कीजिए -

कभी हमारा देश सांस्कृतिक \_\_\_\_\_(1) के पद पर आसीन था। 'विश्व गुरु' होने के नाते इस देश ने समूचे \_\_\_\_\_(2) को मानवता, नैतिकता और सदाचार की शिक्षा दी। अनेक ग्रन्थ इसके \_\_\_\_\_(3) हैं। लेकिन समय के साथ हम \_\_\_\_\_(4) मूल्यों को भूलने लगे। आज भी समाज में नैतिक मूल्यों की \_\_\_\_\_(5) देखने को मिलती है।

SubQuestion No : 18

Q.1 गद्यांश में संकेतित रिक्त स्थान (3) के लिए उपयुक्त शब्द होगा

- Ans
- 1. साक्षी
  - 2. प्रभाव
  - 3. प्रकाश
  - 4. परिमाण

Question ID : 9895804041  
Chosen Option : --

Comprehension:

निम्नलिखित गद्यांश के रिक्त स्थानों की पूर्ति गद्यांश के नीचे दिए गए प्रश्नों के अनुसार कीजिए -

कभी हमारा देश सांस्कृतिक \_\_\_\_\_(1) के पद पर आसीन था। 'विश्व गुरु' होने के नाते इस देश ने समूचे \_\_\_\_\_(2) को मानवता, नैतिकता और सदाचार की शिक्षा दी। अनेक ग्रन्थ इसके \_\_\_\_\_(3) हैं। लेकिन समय के साथ हम \_\_\_\_\_(4) मूल्यों को भूलने लगे। आज भी समाज में नैतिक मूल्यों की \_\_\_\_\_(5) देखने को मिलती है।

SubQuestion No : 19

Q.1 गद्यांश में संकेतित रिक्त स्थान (4) के लिए उपयुक्त शब्द होगा

- Ans
- 1. मानसिक
  - 2. राजनीतिक

✓ 3. नैतिक

✗ 4. भौतिक

Question ID : 9895804042  
Chosen Option : --

Comprehension:

निम्नलिखित गद्यांश के रिक्त स्थानों की पूर्ति गद्यांश के नीचे दिए गए प्रश्नों के अनुसार कीजिए -

कभी हमारा देश सांस्कृतिक \_\_\_\_\_(1) के पद पर आसीन था। 'विश्व गुरु' होने के नाते इस देश ने समूचे \_\_\_\_\_(2) को मानवता, नैतिकता और सदाचार की शिक्षा दी। अनेक ग्रन्थ इसके \_\_\_\_\_(3) हैं। लेकिन समय के साथ हम \_\_\_\_\_(4) मूल्यों को भूलने लगे। आज भी समाज में नैतिक मूल्यों की \_\_\_\_\_(5) देखने को मिलती है।

SubQuestion No : 20

Q.2 गद्यांश में संकेतित रिक्त स्थान (5) के लिए उपयुक्त शब्द होगा

Ans

✓ 1. पूर्णता

✗ 2. अधिकता

✗ 3. कमी

✗ 4. उत्थान

Question ID : 9895804043  
Chosen Option : --

Q.2 दिए गए वाक्य का वह भाग ज्ञात करें जिसमें कोई त्रुटि है।

समय वह धन है जिसका दुरुपयोग करने से वह व्यर्थ चली जाती है।

Ans

✗ 1. व्यर्थ चली जाती है।

✗ 2. जिसका दुरुपयोग

✗ 3. करने से वह

✓ 4. समय वह धन है

Question ID : 9895804030  
Chosen Option : --

Q.2 दिए गए वाक्य में रेखांकित खंड को प्रतिस्थापित करने के लिए सबसे उपयुक्त विकल्प का चयन करें।

कल मैं दिल्ली से वापस जयपुर गई थी, यहाँ से आगरा गई थी।

Ans

✗ 1. वहाँ पर आगरा गई थी।

2. यहाँ आगरा पर गई।  
 3. वहाँ से आगरा गई थी।  
 4. यहाँ पर आगरा गई थी।

Question ID : 9895804033  
Chosen Option : --

Q.2 निम्नलिखित में से उस विकल्प का चयन करें जो 'गागर में सागर भरना' मुहावरे का अर्थ व्यक्त करता है।

- Ans  1. कम विचार आना  
 2. थोड़े शब्दों में अधिक कहना  
 3. अधिक शब्दों में अधिक विचार  
 4. गागर से सागर को भरना

Question ID : 9895804048  
Chosen Option : --

Q.2 निम्नलिखित में से उस विकल्प का चयन करें जो 'घाव पर नमक छिड़कना' मुहावरे का अर्थ व्यक्त करता है।

- Ans  1. दुखी व्यक्ति को दिलासा देना  
 2. बीती बातें याद करना  
 3. घाव के ऊपर नमक छिड़क देना  
 4. कष्ट को और बढ़ाना

Question ID : 9895804049  
Chosen Option : --

Q.2 दिए गए शब्द का विलोम चुनें।

जागरण

- Ans  1. निद्रा  
 2. सचेत  
 3. जागना  
 4. अनिद्रा

Question ID : 9895804044  
Chosen Option : --