

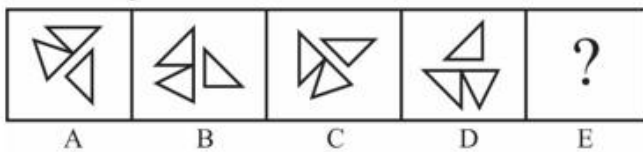
## Constable (GD) in CAPFs, NIA, SSF and Rifleman (GD) in Assam Rifles Examination, 2018

Roll No. :	<a href="http://www.GovtJobsAlert.In">www.GovtJobsAlert.In</a>
Registration No.	
Name :	
Exam Venue :	ION Digital Zone iDZ Hebbal
Exam Time :	9:00 AM - 10:30 AM
Exam Date :	15/02/2019

Section : General Section

**Q.1** Choose the option that would follow next in the given figure series.

Problem Fig.



Ans

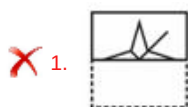


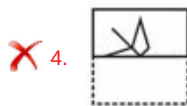
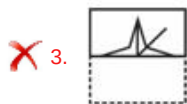
Question ID : 9895803408  
Chosen Option : 1

**Q.2** A square transparent sheet with a pattern is given. How will the pattern appear when the transparent sheet is folded along the dotted line?



Ans





Question ID : 9895803412  
Chosen Option : 4

**Q.3** J, K, L, M, N and O are six teachers. Each one teaches a different subject out of Hindi, English, Math, Science, Social Science and Arts, not necessarily in the same order. Each of them teaches on only one day, from Monday to Saturday, not necessarily in the same order.

J teaches Science on Wednesday. O teaches Math second day after J. K teaches on the first day of the week, but teaches neither Hindi nor English. M teaches English before N and L teaches Arts before J. Which subject is taught between Thursday and Saturday?

- Ans  1. Math  
 2. English  
 3. Social Science  
 4. Science

Question ID : 9895803399  
Chosen Option : 2

**Q.4** Choose the odd one out of the given options.

- Ans  1. Liver  
 2. Kidney  
 3. Nose  
 4. Lungs

Question ID : 9895803391  
Chosen Option : 4

**Q.5** Choose the odd one out of the given options.

- Ans  1. GJM  
 2. ELM  
 3. PQH  
 4. HJL

Question ID : 9895803390  
Chosen Option : 1

**Q.6** Select the option that is related to the third term in the same way as the second term is related to the first term.

Famous : Renowned :: Fierce : ?

- Ans  1. Desire  
 2. Fear  
 3. Violent  
 4. Will

Question ID : 9895803393  
Chosen Option : 3

Q.7 Select the option that is related to the third term in the same way as the second term is related to the first term.

Artificial: Natural :: Answer: ?

- Ans
- 1. Reply
  - 2. Question
  - 3. Solution
  - 4. Problem

Question ID : 9895803392  
Chosen Option : 3

Q.8 The statements below are followed by two conclusions labeled I and II. Assuming that the information in the statements is true, even if it appears at variance with generally established facts, decide which conclusion(s) logically and definitely follow(s) from the information given in the statements.

Statements:

- 1) Some rubies are garments.
- 2) Some garments are garnets.

Conclusion:

- I. Some rubies are garnets.
- II. No ruby is a garnet.

- Ans
- 1. Only conclusion II follows.
  - 2. Both conclusions follow.
  - 3. Either conclusion I or conclusion II follows.
  - 4. Only conclusion I follows.

Question ID : 9895803401  
Chosen Option : 2

Q.9 Select the option that will correctly replace the question mark (?) in the series.

3, 15, 32, 59, ?

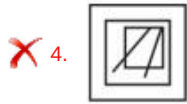
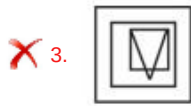
- Ans
- 1. 101
  - 2. 105
  - 3. 115
  - 4. 125

Question ID : 9895803403  
Chosen Option : 1

Q.10 Choose the option in which the figure marked 'X' is embedded. (Rotation is not allowed)



- Ans
- 1.
  - 2.



Question ID : 9895803410  
Chosen Option : 3

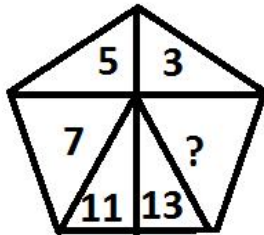
Q.1 Select the option that will correctly replace the question mark (?) in the series.

PEL, NGK, LIJ, JKI, ?

- Ans  1. MHH  
 2. MMH  
 3. HMM  
 4. HHM

Question ID : 9895803389  
Chosen Option : 4

Q.1 Select the option that will correctly replace the question mark (?) in the given pattern.



- Ans  1. 9  
 2. 19  
 3. 16  
 4. 11

Question ID : 9895803406  
Chosen Option : 1

Q.1 Choose the odd number out of the given options.

- Ans  1. 21  
 2. 49  
 3. 37  
 4. 63

Question ID : 9895803405  
Chosen Option : 1

Q.1 Select the option that is related to the third number in the same way as the second number is related to the first number.

45 : 405 :: 49 : ?

- Ans  1. 525  
 2. 144  
 3. 169

✓ 4. 637

Question ID : 9895803404  
Chosen Option : 3

Q.1 5 Eight friends A, B, C, D, E, F, G and H are sitting around a circular table facing each other for a lunch. A is opposite D and third to the right of B. G is between A and F. H is to the right of A. E is between C and D. Who is sitting third to the right of H?

- Ans
- 1. F
  - 2. B
  - 3. D
  - 4. G

Question ID : 9895803398  
Chosen Option : 2

Q.1 6 Select the option that will correctly replace the question mark (?) in the series.

100, 96, 80, 44, ?

- Ans
- 1. -20
  - 2. 20
  - 3. 64
  - 4. 16

Question ID : 9895803402  
Chosen Option : 1

Q.1 7 Choose the option that most closely resembles the mirror image of the given figure when mirror is placed at right side.



Ans

- 1.
- 2.
- 3.
- 4.

Question ID : 9895803411  
Chosen Option : 1

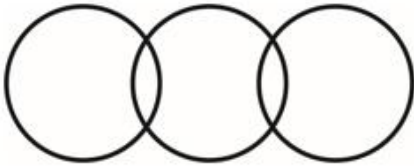
Q.1 8

Select the Venn diagram that best represents the given set of classes.


**Words, Synonyms, Antonymous**

Ans

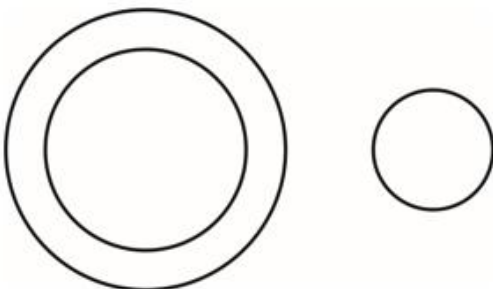
1.




2.



3.



4.



Question ID : 9895803413  
Chosen Option : 4

**Q.1** The statements below are followed by two conclusions labeled I and II. Assuming that the information in the statements is true, even if it appears at variance with generally established facts, decide which conclusion(s) logically and definitely follow(s) from the information given in the statements.

**Statements:**

- 1) All mustards are corns.
- 2) All corns are olives.

**Conclusion:**

- I. All mustards are olives.
- II. Some olives are mustards.

Ans

1.

2.

3.

4.

- 1. Both conclusions follow.
- 2. Either conclusion I or conclusion II follows.
- 3. Only conclusion II follows.
- 4. Only conclusion I follows.

Question ID : 9895803400

Chosen Option : 2

Q.2 In a certain code, UP is written as 336. How will ATE be written in that code?

- 0
- Ans  1. 100  
 2. 60  
 3. 20  
 4. 80

Question ID : 9895803396  
 Chosen Option : 3

Q.2 In a certain code, STEERING is written as HGVVIRMT. How will QUESTION be written in that code?

- 1
- Ans  1. JEVHGRLM  
 2. JFVHGILM  
 3. JFVHGRLM  
 4. JFVHGRIM

Question ID : 9895803395  
 Chosen Option : 1

Q.2 Find out the two signs to be interchanged to make the following equation correct.

$$25 + 5 \times 7 - 12 \div 3 = 26$$

- 2
- Ans  1. + and -  
 2. - and +  
 3. + and ÷  
 4. + and ×

Question ID : 9895803407  
 Chosen Option : 1

Q.2 Seven friends O, P, Q, R, S, T and U are watching a movie sitting in a row. P is sitting at one extreme end. Q is sitting to the immediate left of S. P is sitting second to the right of T. U is not sitting at any extreme end. O is sitting between R and T. Who is sitting at the extreme right end?

- 3
- Ans  1. T  
 2. R  
 3. P  
 4. Q

Question ID : 9895803397  
 Chosen Option : 1

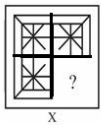
Q.2 Select the option that is related to the third term in the same way as the second term is related to the first term.

AC: BF :: JK: ?

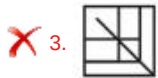

- 4
- Ans  1. TV  
 2. TU  
 3. LM  
 4. UT

Question ID : 9895803394  
 Chosen Option : 3

Q.2 Select a figure from amongst the four alternatives that when placed in the blank space (?) of figure X will complete the pattern. (Rotation is not allowed).



Ans



Question ID : 9895803409  
Chosen Option : 1

Q.2 Under which of the following acts the system of Dyarchy was introduced in India?

- Ans
- ✗ 1. Government of Indian Act 1935
  - ✗ 2. Government of Indian Act 1947
  - ✓ 3. Government of Indian Act 1919
  - ✗ 4. Government of Indian Act 1909

Question ID : 9895804960  
Chosen Option : 2

Q.2 Which of the following statements is NOT correct about the culture of Maharashtra?

- Ans
- ✓ 1. Its popular dance is called 'Gotipua'.
  - ✗ 2. Ganesh Chaturthi is its main festival.
  - ✗ 3. Its traditional saree is called Paithani.
  - ✗ 4. Its folk theatre is called Tamasha.

Question ID : 9895804955  
Chosen Option : 3

Q.2 Who among the following rulers is related to "market regulatory measures" in medieval India?

- Ans
- ✗ 1. Muhammed Bin Tughlaq
  - ✗ 2. Sher Shah Suri
  - ✓ 3. Alauddin Khilji
  - ✗ 4. Jahangir

Question ID : 9895804956  
Chosen Option : 4

Q.2 Which of the following features of the Organised sector is NOT correct?

- Ans
- ✗ 1. Workers get paid leaves during the holidays.



2. Workers under this sector enjoy security and employment.

3.

The employers are bound to provide leave travel concession to its workers.

4.

The enterprises under this sector are registered with the Government.

Question ID : 9895804968  
Chosen Option : 2

Q.3  
0 In which of the following protected areas in India the human interference is prohibited?

Ans  1. Wetlands

2. Biosphere Reserves

3. Wildlife sanctuaries

4. National Parks

Question ID : 9895804964  
Chosen Option : 4

Q.3  
1 The Zaskar, the Hunza and the Nubra are the tributaries of:

Ans  1. Tapi

2. Godavari

3. Indus

4. Brahmaputra

Question ID : 9895804962  
Chosen Option : 3

Q.3  
2 Under which land revenue system, the zamindars were given the rights to transfer their properties subject to the payment of a fixed amount to the Government?

Ans  1. Ryotwari Settlement

2. Mahalwari Settlement

3. Jagirdari Settlement

4. Permanent Settlement

Question ID : 9895804958  
Chosen Option : 4

Q.3  
3 Choose the correct group of diseases that are spread by air:

Ans  1. Cholera, Typhoid, Tuberculosis

2. Warts, common cold, cough

3. Tuberculosis, Pneumonia, Influenza

4. AIDS, Typhoid, Pneumonia

Question ID : 9895804970  
Chosen Option : 1

Q.3  
4 The recent largest ever coastal defence exercise is conducted by the Indian Navy is named as:

Ans  1. SEA HAWK

- 2. SEA SERPENT
- 3. SEA SEIZURE
- 4. SEA VIGIL

Question ID : 9895804977  
Chosen Option : 1

Q.3 In the context of temple architecture, the most important part of the temple is:

5

- Ans
- 1. Pradakshina Patha
  - 2. Mandapam
  - 3. Gopuram
  - 4. Garbhagriha

Question ID : 9895804957  
Chosen Option : 3

Q.3 Which of the following cities is associated with the Kumbh Mela?

6

- Ans
- 1. Ujjain
  - 2. Meerut
  - 3. Varanasi
  - 4. Mathura

Question ID : 9895804954  
Chosen Option : 4

Q.3 Napthaline ball disappears after some days due to the process of:

7

- Ans
- 1. melting and evaporation
  - 2. sublimation
  - 3. melting
  - 4. evaporation

Question ID : 9895804972  
Chosen Option : 1

Q.3 The plastics which get deformed easily on heating are known as:

8

- Ans
- 1. Thermodynamic Plastics
  - 2. Thermo Plastics
  - 3. Thermosetting Plastics
  - 4. Thermo resistant Plastics

Question ID : 9895804971  
Chosen Option : 2

Q.3 Which of the following Hindu shrines is recently declared as a National Heritage by the Government of Pakistan?

9

- Ans
- 1. Katas Raj
  - 2. Varun dev temple

3. Hinglaj Mata temple

4. Panj Tirath

Question ID : 9895804976

Chosen Option : 1

Q.4  
0 Who among the following is invited as the chief guest at the 2019 Republic Day of India?

Ans  1. President of Nepal

2. Prime Minister of Japan

3. President of Sri Lanka

4. President of South Africa

Question ID : 9895804975

Chosen Option : 4

Q.4  
1 The dispute between two states can be resolved by the Supreme Court of India under its:

Ans  1. Supervisory Jurisdiction

2. Appellate Jurisdiction

3. Advisory Jurisdiction

4. Original Jurisdiction

Question ID : 9895804959

Chosen Option : 4

Q.4  
2 In 2016 Rio Olympics, Indian gymnast Dipa Karmakar attempted the most dangerous vault known as:

Ans  1. Yurchenko

2. Produnova

3. Rudi

4. Tsukahara

Question ID : 9895804966

Chosen Option : 1

Q.4  
3 The other name of Per Capita Income is:

Ans  1. National Income

2. Average Income

3. Total Income

4. Intermediate Income

Question ID : 9895804967

Chosen Option : 4

Q.4  
4 Who is the winner of the Women's Singles Indonesian Masters Badminton tournament 2019?

Ans  1. Saina Nehwal

2. Shivani Gadde

3. Arundhati Pantawane

4. P. V. Sindhu

Question ID : 9895804965  
Chosen Option : 4

Q.4  
5 What will happen to the boiling point and freezing point of water when some common salt is added in it?

- Ans
- 1. Boiling point depression, freezing point elevation
  - 2. No change
  - 3. Only boiling point increases or decreases
  - 4. Boiling point elevation, freezing point depression

Question ID : 9895804974  
Chosen Option : 3

Q.4  
6 Special Economic Zones are being set up by the Government in order to attract:

- Ans
- 1. Foreign companies
  - 2. Cooperative companies
  - 3. Local companies
  - 4. Traditional artisans

Question ID : 9895804969  
Chosen Option : 1

Q.4  
7 Which of the lenses used to cure Myopia?

- Ans
- 1. concave
  - 2. parabolic
  - 3. cylindrical
  - 4. convex

Question ID : 9895804973  
Chosen Option : 4

Q.4  
8 With reference to the climatic conditions of the Prairies, which of the following statements is correct?

- Ans
- 1. The local wind "Loo" blows here.
  - 2. The annual rainfall is very heavy.
  - 3. It has the continental type of climate with extreme temperatures.
  - 4. There is a North South wind barrier.

Question ID : 9895804963  
Chosen Option : 3

Q.4  
9 The B.P. Mandal commission was set up to study the reasons of backwardness of the:

- Ans
- 1. rural women and children
  - 2. socially and economically backward classes
  - 3. scheduled castes
  - 4. scheduled tribes

Question ID : 9895804961  
Chosen Option : 1

Q.5  
0 The tomb of Sher Shah Suri is situated in:

- Ans
- 1. Sikandara
  - 2. Sasaram
  - 3. Burhanpur
  - 4. Jabalpur

Question ID : 9895804953  
Chosen Option : 1

Q.5  
1 A sum of ₹14000 is lent at compound interest (interest is compounded annually) for 3 years. If the rate of interest is 10%, then what will be the compound interest?

- Ans
- 1. ₹4,645
  - 2. ₹4,643
  - 3. ₹4,364
  - 4. ₹4,634

Question ID : 9895805067  
Chosen Option : 1

Q.5  
2 The ratio of two numbers is 14 : 25. If the difference between them is 264, then which is the smaller of the two numbers?

- Ans
- 1. 336
  - 2. 316
  - 3. 282
  - 4. 294

Question ID : 9895805063  
Chosen Option : 3

Q.5  
3 Average marks of 15 students of class first is 160. Average marks of 10 students of class second is 120. Average marks of 15 students of class third is 180. What will be the average marks of students of all the classes together?

- Ans
- 1. 162.5
  - 2. 157.5
  - 3. 155.5
  - 4. 167.5

Question ID : 9895805057  
Chosen Option : 1

Q.5  
4 If  $X/3 = Y/5 = Z/9$ , then what is the ratio of  $X : Y : Z$ ?

- Ans
- 1. 9 : 5 : 6
  - 2. 3 : 5 : 9
  - 3. 15 : 9 : 5
  - 4. 3 : 5 : 6

Question ID : 9895805065  
Chosen Option : 1

Q.5 A person buys 25 kg of rice for ₹600 and sells them at a loss equal to the selling price of 5 kg rice. What will be the loss percentage?

- Ans
- 1. 14.28%
  - 2. 16.66%
  - 3. 25%
  - 4. 20%

Question ID : 9895805062  
Chosen Option : 3

Q.5 A, B and C invest ₹14000, ₹18000 and ₹24000 respectively to start a business. If the profit at the end of the year is ₹25480, then what is total share of A and B?

- Ans
- 1. ₹14560
  - 2. ₹19110
  - 3. ₹6370
  - 4. ₹17290

Question ID : 9895805064  
Chosen Option : 1

Q.5 The table given below shows the marks obtained by 4 students in 5 subjects. The maximum marks of each subject is 100.

Subjects	Students			
	P1	P2	P3	P4
S1	89	100	92	91
S2	62	52	72	37
S3	57	55	70	65
S4	76	85	76	58
S5	85	70	66	62

What is the total percent marks of P4?

- Ans
- 1. 67.2%
  - 2. 62.6%
  - 3. 65.8%
  - 4. 59.5%

Question ID : 9895805075  
Chosen Option : 1

Q.5 A person purchases 36 articles for ₹360. How many articles must he sold for ₹360, so that the profit is 50%?

- Ans
- 1. 18
  - 2. 32
  - 3. 36
  - 4. 24

Question ID : 9895805061  
Chosen Option : 1

Q.5 If S is 160% of T, then T will be what percent of S?

- Ans
- 1. 65.20%
  - 2. 62.50%
  - 3. 70%
  - 4. 85%

Question ID : 9895805060  
Chosen Option : 1

**Q.6** The product of two numbers is 720. If their Least Common Multiple is 360, then what will be the Highest common factor of these two numbers?

- Ans**
- 1. 120
  - 2. 20
  - 3. 60
  - 4. 2

Question ID : 9895805053

Chosen Option : 4

**Q.6** What is the mean of the given data?

2, 3, 4, 5, 6, 7, 8, 9

- Ans**
- 1. 5.5
  - 2. 4.5
  - 3. 5
  - 4. 4

Question ID : 9895805059

Chosen Option : 1

**Q.6** The table given below shows the production of rice and the area under rice cultivation of a country for 5 consecutive years Y1, Y2, Y3, Y4 and Y5.

Year	Rice Production (in 1000 kg)
Y1	520
Y2	570
Y3	680
Y4	720
Y5	850

What is the per year average production of rice?

- Ans**
- 1. 702000 kg
  - 2. 644000 kg
  - 3. 686000 kg
  - 4. 668000 kg

Question ID : 9895805076

Chosen Option : 2

**Q.6** The curved surface area of a cone is  $550 \text{ cm}^2$ . If the area of its base is  $154 \text{ cm}^2$ , then what will be the volume of the cone?

- Ans**
- 1.  $2464 \text{ cm}^3$
  - 2.  $1232 \text{ cm}^3$
  - 3.  $1472 \text{ cm}^3$
  - 4.  $1836 \text{ cm}^3$

Question ID : 9895805074

Chosen Option : 2

**Q.6** A car covers a certain distance at a speed of 54 km/hr in 7 hours. What should be the speed of car to cover the same distance in 6 hours?

- Ans**
- 1. 56 km/hr
  - 2. 72 km/hr
  - 3. 54 km/hr

✓ 4. 63 km/hr

Question ID : 9895805071  
Chosen Option : 2

Q.6 The table given below shows the production of rice and the area under rice cultivation of a country for 5 consecutive years Y1, Y2, Y3, Y4 and Y5.

Year	Rice Production (in 1000 kg)	Area Under Rice Cultivation (in 100 square meter)
Y1	520	130
Y2	570	190
Y3	680	150
Y4	720	180
Y5	850	170

What is the percentage change in the yield per square meter of Y5 as compared to Y1?

- Ans
- ✗ 1. 37.5%
  - ✗ 2. 20%
  - ✗ 3. 33.33%
  - ✓ 4. 25%

Question ID : 9895805077  
Chosen Option : 4

Q.6 Pipe X can fill a tank in 12 hours and pipe Y can fill the same tank in 36 hours. In how many hours both pipe X and pipe Y together can fill one-third part of the tank?

- Ans
- ✗ 1. 15 hours
  - ✗ 2. 27 hours
  - ✗ 3. 9 hours
  - ✓ 4. 3 hours

Question ID : 9895805068  
Chosen Option : 2

Q.6 Height of a right circular cylinder is 12 cm. If the radius is its base 21 cm, then what will be the curved surface area of the cylinder?

- Ans
- ✗ 1. 1544 cm<sup>2</sup>
  - ✗ 2. 1632 cm<sup>2</sup>
  - ✓ 3. 1584 cm<sup>2</sup>
  - ✗ 4. 1456 cm<sup>2</sup>

Question ID : 9895805072  
Chosen Option : 1

Q.6 A sum of ₹10000 is lent on simple interest at the rate of 15% per annum. What is the difference between Simple interest for 6 years and the simple interest for 2 years?

- Ans
- ✓ 1. ₹6000
  - ✗ 2. ₹4000
  - ✗ 3. ₹4500
  - ✗ 4. ₹8000

Question ID : 9895805066  
Chosen Option : 4

Q.6 The ratio of the marked price and the cost price of a pen is 3 : 2 while the ratio of marked price and selling price is 5 : 4. What is the profit percentage?

- Ans
- ✗ 1. 24%



- 2. 16%
- 3. 25%
- 4. 20%

Question ID : 9895805058  
Chosen Option : 2

Q.7 The area of a square and a rectangle are equal. The length of the rectangle is greater than the side of square by 9 cm and its breadth is less than the side of square by 6 cm. What will be the perimeter of the rectangle?

- Ans
- 1. 76 cm
  - 2. 74 cm
  - 3. 84 cm
  - 4. 78 cm

Question ID : 9895805073  
Chosen Option : 4

Q.7 A train is moving with a uniform speed. Train crosses a bridge of length 243 meters in 30 seconds and a bridge of length 343 meters in 36 seconds. What is the speed of the train?

- Ans
- 1. 65 km/hr
  - 2. 64 km/hr
  - 3. 72 km/hr
  - 4. 60 km/hr

Question ID : 9895805070  
Chosen Option : 1

Q.7 What will be the average of 16, 17, 18,..... upto fifteen terms?

- Ans
- 1. 24
  - 2. 26
  - 3. 23
  - 4. 23.5

Question ID : 9895805056  
Chosen Option : 1

Q.7 What is the value of  $(14 \div 49 - 3 \div \frac{7}{2} \text{ of } 5)$ ?

- Ans
- 1. 17/35
  - 2. 7/35
  - 3. 4/35
  - 4. 6/35

Question ID : 9895805055  
Chosen Option : 1

Q.7 What is the value of  $24 - [48 \div \{48 \times (48 \div (24 \times 24))\}]$ ?

- Ans
- 1. 20
  - 2. 18
  - 3. 12
  - 4. 16

Question ID : 9895805054  
Chosen Option : 2

Q.7 40 persons can repair a bridge in 12 days. If 8 more persons join them, then in how many days bridge can be repaired?  
5

- Ans
- 1. 11 days
  - 2. 8 days
  - 3. 10 days
  - 4. 9 days

Question ID : 9895805069  
Chosen Option : 3

Section : English Language

Q.1 Select the word which means the same as the group of words given.

One who feeds on human flesh

- Ans
- 1. Cannibal
  - 2. Omnivorous
  - 3. Carnivorous
  - 4. Vegan

Question ID : 9895804535  
Chosen Option : 4

Q.2 Select the most appropriate option to substitute the underlined segment in the given sentence. If there is no need to substitute it, select No improvement.

Even children shrink away from food thinking that they should become overweight.

- Ans
- 1. might become
  - 2. are become
  - 3. No improvement.
  - 4. were become

Question ID : 9895804519  
Chosen Option : 1

Q.3 Select the word which means the same as the group of words given.

One who makes an official examination of accounts

- Ans
- 1. Controller
  - 2. Auditor
  - 3. Officer
  - 4. Supervisor

Question ID : 9895804873  
Chosen Option : 2

Q.4 Select the synonym of the given word.

Forsake

- Ans
- 1. Accept
  - 2. Adopt
  - 3. Abandon
  - 4. Adapt

Question ID : 9895804528  
Chosen Option : 1

Q.5 Select the antonym of the given word.

Ruthless

- Ans
- 1. Careful
  - 2. Humble
  - 3. Merciless
  - 4. Kind

Question ID : 9895804530  
Chosen Option : 1

Q.6 From the given options, identify the segment in the sentence which contains the grammatical error.

Ritesh is best than many other boys in his class.

- Ans
- 1. than many
  - 2. in the class.
  - 3. Ritesh is best
  - 4. other boys

Question ID : 9895804514  
Chosen Option : 1

Q.7 Select the option that means the same as the given idiom.

To keep someone at arm's length.

- Ans
- 1. To be near someone
  - 2. To disturb someone
  - 3. To avoid someone
  - 4. To love someone

Question ID : 9895804533  
Chosen Option : 3

Q.8 Select the most appropriate option to substitute the underlined segment in the given sentence. If there is no need to substitute it, select No Improvement.

The work on two projects are already going on which will connect Leh-Ladakh by railway line and air.

- Ans
- 1. is already going on
  - 2. No improvement.
  - 3. is already go on
  - 4. is already going up

Question ID : 9895804518  
Chosen Option : 1

Q.9 From the given options, identify the segment in the sentence which contains the grammatical error.

I would rather to go home than go to a restaurant for dinner.

- Ans
- 1. for dinner.
  - 2. than go to
  - 3. rather to go
  - 4. I would

Question ID : 9895804516  
Chosen Option : 2

Comprehension:

In the following passage some words have been deleted. Fill in the blanks with the help of the alternatives given.

The last one in this long procession of silent men and women was a thin old man. Even (1) \_\_\_\_\_ carried a load of two baskets, slung on a pole on his (2) \_\_\_\_\_. In one basket there were (3) \_\_\_\_\_ pots. The other basket it seemed there was a quilt, extremely (4) \_\_\_\_\_ and patched, but clean still. (5) \_\_\_\_\_ the load was light, it was too much for the old man.

SubQuestion No : 10

Q.1  
0 Select the most appropriate option that will fill in the blank number 1.

- Ans
- 1. he
  - 2. they
  - 3. it
  - 4. she

Question ID : 9895804523  
Chosen Option : 1

Comprehension:

In the following passage some words have been deleted. Fill in the blanks with the help of the alternatives given.

The last one in this long procession of silent men and women was a thin old man. Even (1) \_\_\_\_\_ carried a load of two baskets, slung on a pole on his (2) \_\_\_\_\_. In one basket there were (3) \_\_\_\_\_ pots. The other basket it seemed there was a quilt, extremely (4) \_\_\_\_\_ and patched, but clean still. (5) \_\_\_\_\_ the load was light, it was too much for the old man.

SubQuestion No : 11

Q.1  
1 Select the most appropriate option that will fill in the blank number 2.

- Ans
- 1. hand
  - 2. neck
  - 3. shoulder
  - 4. head

Question ID : 9895804524  
Chosen Option : 1

Comprehension:

In the following passage some words have been deleted. Fill in the blanks with the help of the alternatives given.

The last one in this long procession of silent men and women was a thin old man. Even (1) \_\_\_\_\_ carried a load of two baskets, slung on a pole on his (2) \_\_\_\_\_. In one basket there were (3) \_\_\_\_\_ pots. The other basket it seemed there was a quilt, extremely (4) \_\_\_\_\_ and patched, but clean still. (5) \_\_\_\_\_ the load was light, it was too much for the old man.

SubQuestion No : 12

Q.1  
2 Select the most appropriate option that will fill in the blank number 3.

- Ans
- 1. some
  - 2. one
  - 3. any
  - 4. none

Question ID : 9895804525  
Chosen Option : 3

Comprehension:

In the following passage some words have been deleted. Fill in the blanks with the help of the alternatives given.

The last one in this long procession of silent men and women was a thin old man. Even (1) \_\_\_\_\_ carried a load of two baskets, slung on a pole on his (2) \_\_\_\_\_. In one basket there were (3) \_\_\_\_\_ pots. The other basket it seemed there was a quilt, extremely (4) \_\_\_\_\_ and patched, but clean still. (5) \_\_\_\_\_ the load was light, it was too much for the old man.

SubQuestion No : 13

Q.1  
3 Select the most appropriate option that will fill in the blank number 4.

- Ans
- 1. beautiful
  - 2. ragged
  - 3. shining
  - 4. new

Question ID : 9895804526  
Chosen Option : 1

Comprehension:

In the following passage some words have been deleted. Fill in the blanks with the help of the alternatives given.

The last one in this long procession of silent men and women was a thin old man. Even (1) \_\_\_\_\_ carried a load of two baskets, slung on a pole on his (2) \_\_\_\_\_. In one basket there were (3) \_\_\_\_\_ pots. The other basket it seemed there was a quilt, extremely (4) \_\_\_\_\_ and patched, but clean still. (5) \_\_\_\_\_ the load was light, it was too much for the old man.

SubQuestion No : 14

Q.1  
4 Select the most appropriate option that will fill in the blank number 5.

- Ans
- 1. Because
  - 2. Although
  - 3. But
  - 4. Since

Question ID : 9895804527  
Chosen Option : 1

Q.1  
5 Select the antonym of the given word.

Peculiar

- Ans
- 1. Usual
  - 2. Sacred
  - 3. Quiet
  - 4. Strange

Question ID : 9895804531  
Chosen Option : 1

Q.1  
6 Select the most appropriate word to fill in the blank.

You must \_\_\_\_\_ hard to get the best deal.

- Ans
- 1. neglect

- 2. negate
- 3. negotiate
- 4. navigate

Question ID : 9895804539  
Chosen Option : 1

Q.1  
7 Select the most appropriate option to fill in the blank.

\_\_\_\_\_ many cooks spoil the broth.

- Ans
- 1. A few
  - 2. Too
  - 3. So
  - 4. Few

Question ID : 9895804520  
Chosen Option : 1

Q.1  
8 From the given options, identify the segment in the sentence which contains the grammatical error.

It is a fact that you are known by me.

- Ans
- 1. you are known
  - 2. by me.
  - 3. a fact
  - 4. It is

Question ID : 9895804515  
Chosen Option : 1

Q.1  
9 Select the correctly spelt word.

- Ans
- 1. Mischeivous
  - 2. Mischievous
  - 3. Mischievius
  - 4. Mischieveous

Question ID : 9895804537  
Chosen Option : 1

Q.2  
0 Select the most appropriate option to fill in the blank.

All good things \_\_\_\_\_ come to an end

- Ans
- 1. ought
  - 2. have not
  - 3. shall not
  - 4. must

Question ID : 9895804521

Chosen Option : 2

Q.2  
1 Select the correctly spelt word.

- Ans
- 1. Apelling
  - 2. Appeling
  - 3. Appealing
  - 4. Appeeling

Question ID : 9895804536

Chosen Option : 2

Q.2  
2 Select the most appropriate option to substitute the underlined segment in the given sentence. If there is no need to substitute it, select No improvement.

You will be needing to complete all the pending work before it becomes unmanageable.

- Ans
- 1. would be needing
  - 2. will need
  - 3. No improvement.
  - 4. will be needed

Question ID : 9895804517

Chosen Option : 4

Q.2  
3 Select the synonym of the given word.

Favoured

- Ans
- 1. Neglected
  - 2. Preferred
  - 3. Trusted
  - 4. Rejected

Question ID : 9895804529

Chosen Option : 4

Q.2  
4 Select the most appropriate word to fill in the blank.

The adventurer in him cannot \_\_\_\_\_ the call of the mountains.

- Ans
- 1. resist
  - 2. respond
  - 3. restore
  - 4. restrain

Question ID : 9895804538

Chosen Option : 2

Q.2  
5



Select the option that means the same as the given idiom.

To be at home.

- Ans
- 1. To be formal
  - 2. To be at ease
  - 3. To be casual
  - 4. To be perplexed

Question ID : 9895804532  
Chosen Option : 1

Section : Hindi Language

Q.1 दिए गए शब्द का विलोम चुनें।

गद्य

- Ans
- 1. पद्य
  - 2. अंक
  - 3. एंकाकी
  - 4. नाटक

Question ID : 9895804096  
Chosen Option : --

Q.2 रिक्त स्थान को भरने के लिए उपयुक्त शब्द का चयन करें।

दाना चुगकर पक्षी ने \_\_\_\_\_ उड़ान भरी।

- Ans
- 1. लंबा
  - 2. छोटा
  - 3. लंबी
  - 4. गहरी

Question ID : 9895804086  
Chosen Option : --

Q.3 दिए गए वाक्य में रेखांकित खंड को प्रतिस्थापित करने के लिए सबसे उपयुक्त विकल्प का चयन करें।

भोजन की थाली पकवानों से सजा होती है तभी खाने में आनंद आता है।

- Ans
- 1. पकवानों से सजी होते हैं
  - 2. पकवानों से सजा होता है
  - 3. पकवानों से सजी होता है
  - 4. पकवानों से सजी होती है

Question ID : 9895804083  
Chosen Option : --

Q.4 निम्नलिखित में से उस विकल्प का चयन करें जो 'चादर देखकर पाँव फैलाना' मुहावरे का अर्थ व्यक्त करता है।

- Ans
- 1. आय के अनुसार व्यय करना
  - 2. चादर देखकर सो जाना
  - 3. चादर पर पैर फैलाकर सोना
  - 4. व्यय अधिक आय कम होना

Question ID : 9895804099  
Chosen Option : --

Q.5 दिए गए वाक्य का वह भाग ज्ञात करें जिसमें कोई त्रुटि है।

पारिवारिक अदालतों के निर्णय टूटते हुए परिवार का शांति को नया जीवन प्रदान कर सकते हैं।

- Ans
- 1. शांति को नया जीवन
  - 2. प्रदान कर सकते हैं।
  - 3. पारिवारिक अदालतों के निर्णय
  - 4. टूटते हुए परिवार का

Question ID : 9895804081  
Chosen Option : --

Q.6 दिए गए वाक्य का वह भाग ज्ञात करें जिसमें कोई त्रुटि है।

संगीत मंडली मिलकर मंच में गीत गा रही है।

- Ans
- 1. मिलकर
  - 2. गीत गा रही है।
  - 3. मंच में
  - 4. संगीत मंडली

Question ID : 9895804079  
Chosen Option : --

Q.7 दिए गए वाक्य में रेखांकित खंड को प्रतिस्थापित करने के लिए

उपयुक्त विकल्प का चयन करें।

लड़का अपने गाँव गया और वहाँ आकर अपने मित्रों से मिला।

- Ans
- 1. वहाँ जाकर अपने मित्रों से
  - 2. यहाँ आकर अपने मित्रों से

3. वहाँ जाकर अपना मित्रों से

4. यहाँ जाकर अपने मित्रों से

Question ID : 9895804082  
Chosen Option : --

Q.8 निम्नलिखित में से उस विकल्प का चयन करें जो 'चुल्लू भर पानी में डूब मरना' मुहावरे का अर्थ व्यक्त करता है।

Ans

1. शर्मिदा होना

2. कायर बनना

3. बेशर्म होना

4. चुल्लू में पानी भरकर डूब जाना

Question ID : 9895804100  
Chosen Option : --

Comprehension:

दिए गए अनुच्छेद में कुछ शब्द हटा दिए गए हैं। दिए गए विकल्पों की सहायता से रिक्त स्थान भरें। प्रत्येक संख्या के लिए उपयुक्त विकल्प का चयन करें।

भाग्य और पुरुषार्थ एक ही \_\_\_\_\_ (1) के दो पहलू हैं। मनुष्य पुरुषार्थी है तो वह \_\_\_\_\_ (2) होगा। जब हम इस संसार में आए हैं तो \_\_\_\_\_ (3) करना ही पड़ेगा। संसार की बाधाओं एवं समस्याओं से \_\_\_\_\_ (4) करके अपना \_\_\_\_\_ (5) खोजना होगा तभी विजयश्री हमारे हिस्से में आएगी।

SubQuestion No : 9

Q.9 गद्यांश में संकेतित रिक्त स्थान (1) के लिए उपयुक्त शब्द होगा

Ans

1. कपड़े

2. बरतन

3. सिक्के

4. शीशे

Question ID : 9895804090  
Chosen Option : --

Comprehension:

दिए गए अनुच्छेद में कुछ शब्द हटा दिए गए हैं। दिए गए विकल्पों की सहायता से रिक्त स्थान भरें। प्रत्येक संख्या के लिए उपयुक्त विकल्प का चयन करें।

भाग्य और पुरुषार्थ एक ही \_\_\_\_\_ (1) के दो पहलू हैं। मनुष्य पुरुषार्थी है तो वह \_\_\_\_\_ (2) होगा। जब हम इस संसार में आए हैं तो \_\_\_\_\_ (3) करना ही पड़ेगा। संसार की बाधाओं एवं समस्याओं से \_\_\_\_\_ (4) करके अपना \_\_\_\_\_ (5) खोजना होगा तभी विजयश्री हमारे हिस्से में आएगी।

SubQuestion No : 10

Q.1  
0 गद्यांश में संकेतित रिक्त स्थान (2) के लिए उपयुक्त शब्द होगा

- Ans
- 1. आलसी
  - 2. दुखी
  - 3. भाग्यहीन
  - 4. भाग्यशाली

Question ID : 9895804091  
Chosen Option : --

Comprehension:

दिए गए अनुच्छेद में कुछ शब्द हटा दिए गए हैं। दिए गए विकल्पों की सहायता से रिक्त स्थान भरें। प्रत्येक संख्या के लिए उपयुक्त विकल्प का चयन करें।

भाग्य और पुरुषार्थ एक ही \_\_\_\_\_ (1) के दो पहलू हैं। मनुष्य पुरुषार्थी है तो वह \_\_\_\_\_ (2) होगा। जब हम इस संसार में आए हैं तो \_\_\_\_\_ (3) करना ही पड़ेगा। संसार की बाधाओं एवं समस्याओं से \_\_\_\_\_ (4) करके अपना \_\_\_\_\_ (5) खोजना होगा तभी विजयश्री हमारे हिस्से में आएगी।

SubQuestion No : 11

Q.1  
1 गद्यांश में संकेतित रिक्त स्थान (3) के लिए उपयुक्त शब्द होगा

- Ans
- 1. भागना
  - 2. कर्म
  - 3. सोना
  - 4. घूमना

Question ID : 9895804092  
Chosen Option : --

Comprehension:

दिए गए अनुच्छेद में कुछ शब्द हटा दिए गए हैं। दिए गए विकल्पों की सहायता से रिक्त स्थान भरें। प्रत्येक संख्या के लिए उपयुक्त विकल्प का चयन करें।

भाग्य और पुरुषार्थ एक ही \_\_\_\_\_ (1) के दो पहलू हैं। मनुष्य पुरुषार्थी है तो वह \_\_\_\_\_ (2) होगा। जब हम इस संसार में आए हैं तो \_\_\_\_\_ (3) करना ही पड़ेगा। संसार की बाधाओं एवं समस्याओं से \_\_\_\_\_ (4) करके अपना \_\_\_\_\_ (5) खोजना होगा तभी विजयश्री हमारे हिस्से में आएगी।

SubQuestion No : 12

Q.1  
2 गद्यांश में संकेतित रिक्त स्थान (4) के लिए उपयुक्त शब्द होगा

Ans

- 1. भाग्य
- 2. नौकरी
- 3. संघर्ष
- 4. दुनिया

Question ID : 9895804093  
Chosen Option : --

Comprehension:

दिए गए अनुच्छेद में कुछ शब्द हटा दिए गए हैं। दिए गए विकल्पों की सहायता से रिक्त स्थान भरें। प्रत्येक संख्या के लिए उपयुक्त विकल्प का चयन करें।

भाग्य और पुरुषार्थ एक ही \_\_\_\_\_ (1) के दो पहलू हैं। मनुष्य पुरुषार्थी है तो वह \_\_\_\_\_ (2) होगा। जब हम इस संसार में आए हैं तो \_\_\_\_\_ (3) करना ही पड़ेगा। संसार की बाधाओं एवं समस्याओं से \_\_\_\_\_ (4) करके अपना \_\_\_\_\_ (5) खोजना होगा तभी विजयश्री हमारे हिस्से में आएगी।

SubQuestion No : 13

Q.1  
3 गद्यांश में संकेतित रिक्त स्थान (5) के लिए उपयुक्त शब्द होगा

- Ans
- 1. विद्या
  - 2. रास्ता
  - 3. जानकारी
  - 4. खेलने

Question ID : 9895804094  
Chosen Option : --

Q.1  
4 सही वर्तनी वाले शब्द का चयन करें।

- Ans
- 1. मितभाषी
  - 2. मीतभाषी
  - 3. मीतभाशी
  - 4. मितभाशी

Question ID : 9895804103  
Chosen Option : --

Q.1  
5 रिक्त स्थान को भरने के लिए उपयुक्त शब्द का चयन करें।

मैं अवधी भाषा \_\_\_\_\_ सकता हूँ।

- Ans
- 1. देख
  - 2. छू

3. समझ

4. खरीद

Question ID : 9895804088  
Chosen Option : --

Q.1  
6 दिये गये वाक्यांश के लिए एक शब्द दीजिये।

जो भविष्य में आने वाला हो

- Ans
- 1. आगामी
  - 2. परागामी
  - 3. अकाल
  - 4. भूतकाल

Question ID : 9895804102  
Chosen Option : --

Q.1  
7 सही वर्तनी वाले शब्द का चयन करें।

- Ans
- 1. आधीर
  - 2. अधीर
  - 3. आधिर
  - 4. अधिर

Question ID : 9895804104  
Chosen Option : --

Q.1  
8 दिए गए शब्द के पर्यायवाची शब्द का चयन करें।

स्नेह

- Ans
- 1. घृणा
  - 2. प्रेम
  - 3. लता
  - 4. व्यथा

Question ID : 9895804097  
Chosen Option : --

Q.1  
9 दिये गये वाक्यांश के लिए एक शब्द दीजिये।

साथ पढ़ने वाला

- Ans
- 1. साथी
  - 2. सहयोगी
  - 3. सहपाठी
  - 4. सहपढ़

Question ID : 9895804101

Chosen Option : --

Q.2<sub>0</sub> दिए गए वाक्य में रेखांकित खंड को प्रतिस्थापित करने के लिए सबसे उपयुक्त विकल्प का चयन करें।

हिरण्यकश्यप अत्यंत अभिमानी था और वह स्वयं से भगवान मानता था।

- Ans
- 1. वह स्वयं को भगवान मानता था।
  - 2. वह स्वयं पर भगवान मानता था।
  - 3. वह स्वयं ने भगवान मानता था।
  - 4. वह स्वयं में भगवान मानता था।

Question ID : 9895804084

Chosen Option : --

Q.2<sub>1</sub> रिक्त स्थान को भरने के लिए उपयुक्त शब्द का चयन करें।

प्रतिदिन आपराधिक \_\_\_\_\_ बढ़ते जा रहे हैं।

- Ans
- 1. गान
  - 2. खाद्य
  - 3. पक्षी
  - 4. कर्म

Question ID : 9895804087

Chosen Option : --

Q.2<sub>2</sub> दिए गए शब्द का विलोम चुनें।

मोक्ष

- Ans
- 1. बंधन
  - 2. स्वर्ग
  - 3. छुटकारा
  - 4. दुतकार

Question ID : 9895804095

Chosen Option : --

Q.2<sub>3</sub> दिए गए शब्द के पर्यायवाची शब्द का चयन करें।

अनुचर

- Ans
- 1. भास्कर
  - 2. सेवक
  - 3. रुचिर
  - 4. मालिक

Question ID : 9895804098  
Chosen Option : --

Q.2  
4 रिक्त स्थान को भरने के लिए उपयुक्त शब्द का चयन करें।

आजकल परिवार में \_\_\_\_\_ बढ़ रही है।

- Ans
- 1. धन
  - 2. दूरियाँ
  - 3. प्रेम
  - 4. चरित्र

Question ID : 9895804085  
Chosen Option : --

Q.2  
5 दिए गए वाक्य का वह भाग ज्ञात करें जिसमें कोई त्रुटि है।

विद्यालयों में भी सूचना हेतु एक विशेष स्थानों होता है।

- Ans
- 1. एक विशेष
  - 2. विद्यालयों में भी
  - 3. सूचना हेतु
  - 4. स्थानों होता है।

Question ID : 9895804080  
Chosen Option : --