

## Constable (GD) in CAPFs, NIA, SSF and Rifleman (GD) in Assam Rifles Examination, 2018

Roll No. :	<a href="http://www.GovtJobsAlert.In">www.GovtJobsAlert.In</a>
Registration No.	
Name :	
Exam Venue :	ION Digital Zone iDZ Rajarajeswari Medical College and Hospital
Exam Time :	12:30 PM - 2:00 PM
Exam Date :	15/02/2019

Section : General Section

Q.1 In a certain code, LOVE is written as OLEV. How will IRIS be written in that code?

- Ans
- 1. IIRS
  - 2. IRSI
  - 3. RSII
  - 4. RISI

Question ID : 9895803602

Chosen Option : 1

Q.2 In a certain code, AXE is written as 120. How will FEE be written in that code?

- Ans
- 1. 150
  - 2. 80
  - 3. 60
  - 4. 20

Question ID : 9895803603

Chosen Option : 3

Q.3 Choose the odd one out of the given options.

- Ans
- 1. BIJ
  - 2. DGJ
  - 3. EGI
  - 4. CHI

Question ID : 9895803597

Chosen Option : 3

Q.4 A square transparent sheet with a pattern is given. How will the pattern appear when the transparent sheet is folded along the dotted line?



x

- Ans
- 1.
  - 2.



Question ID : 9895803619  
Chosen Option : 4

Q.5 Select the option that is related to the third term in the same way as the second term is related to the first term.

EFG : JLN :: GKM : ?

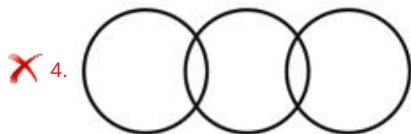
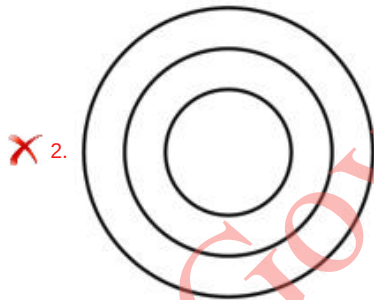
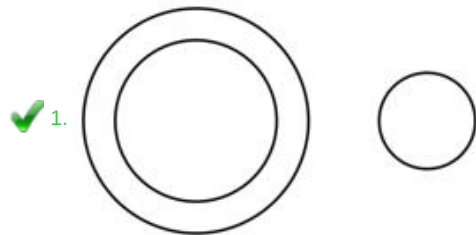
- Ans  1. NZY  
 2. NVZ  
 3. NUZ  
 4. KMG

Question ID : 9895803601  
Chosen Option : 4

Q.6 Select the Venn diagram that best represents the given set of classes.

Furniture, Chairs, Trees

Ans



Question ID : 9895803620  
Chosen Option : 4

Q.7 Eight friends A, B, C, D, E, F, G and H are sitting around a circular table facing each other for a lunch. A is opposite D and third to the right of B. G is between A and F. H is to the immediate right of A. E is between C and D. Who is sitting opposite C?

- Ans  1. B  
 2. F  
 3. G  
 4. E

Question ID : 9895803605  
 Chosen Option : 3

Q.8 Select the option that will correctly replace the question mark (?) in the given pattern.



- Ans  1. 206  
 2. 216  
 3. 6  
 4. 36

Question ID : 9895803613  
 Chosen Option : 3

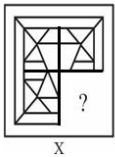
Q.9 J, K, L, M, N and O are six teachers. Each one teaches a different subject out of Hindi, English, Math, Science, Social Science and Arts, not necessarily in the same order. Each of them teaches on only one day, from Monday to Saturday, not necessarily in the same order.

J teaches Science on Wednesday. O teaches Math second after J. K teaches on the first day of the week, but teaches neither Hindi nor English. M teaches English before N and L teaches Arts before J. Who teaches on Saturday?

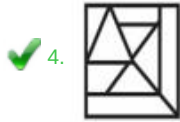
- Ans  1. M  
 2. N  
 3. K  
 4. L

Question ID : 9895803606  
 Chosen Option : 2

Q.1 Select a figure from amongst the four alternatives that when placed in the blank space (?) of figure X will complete the pattern. (Rotation is not allowed).



- Ans  1.
- 2.
- 3.



Question ID : 9895803616  
Chosen Option : 4

Q.1 Choose the option that most closely resembles the mirror image of the given figure when the mirror is placed at right side.



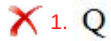
Ans



Question ID : 9895803618  
Chosen Option : 4

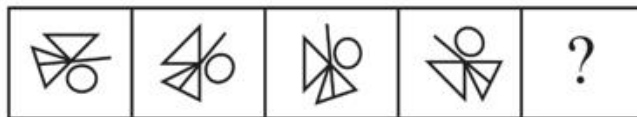
Q.1 Seven friends O, P, Q, R, S, T and U are watching a movie sitting in a row. P is sitting at one extreme end. Q is sitting to the immediate left of S. P is sitting second to the right of T. U is not sitting at any extreme end. O is sitting between R and T. Who is sitting between P and T?

Ans



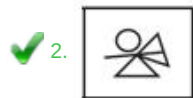
Question ID : 9895803604  
Chosen Option : 2

Q.1 Choose the option that would follow next in the given figure series.



A B C D E

Ans



X 4.



Question ID : 9895803615  
Chosen Option : 2

Q.1 Select the option that is related to the third term in the same way as the second term is related to the first term.

4

Pathology : Diseases :: Astronomy : ?

- Ans
- X 1. Future
  - X 2. Soil
  - ✓ 3. Planets
  - X 4. Shells

Question ID : 9895803599  
Chosen Option : 1

Q.1 Select the option that will correctly replace the question mark (?) in the series.

5

109, 105, 89, 53, ?

- Ans
- X 1. 10
  - X 2. 11
  - X 3. -10
  - ✓ 4. -11

Question ID : 9895803609  
Chosen Option : 1

Q.1 Choose the option in which the figure marked 'X' is embedded. (Rotation is not allowed)

6



X

- Ans
- X 1.
  - X 2.
  - X 3.
  - ✓ 4.

Question ID : 9895803617  
Chosen Option : 1

Q.1 Select the option that will correctly replace the question mark (?) in the series.

7

TOD, RQB, PSZ, NUX, ?

- Ans
- X 1. LWW
  - ✓ 2. LWV
  - X 3. LVW

4. LWU

Question ID : 9895803596  
Chosen Option : 4

Q.1  
8 Choose the odd number out of the given options.

- Ans  1. 45  
 2. 75  
 3. 85  
 4. 105

Question ID : 9895803612  
Chosen Option : 1

Q.1  
9 The statements below are followed by two conclusions labeled I and II. Assuming that the information in the statements is true, even if it appears at variance with generally established facts, decide which conclusion(s) logically and definitely follow(s) from the information given in the statements.

Statements:

- 1) All nails are pins.
- 2) All hammers are pins.

Conclusion:

- I. No nail is a pin.
- II. Some pins are nails.

- Ans  1. Neither conclusion I nor conclusion II follows.  
 2. Only conclusion II follows.  
 3. Only conclusion I follows.  
 4. Both conclusions follow.

Question ID : 9895803607  
Chosen Option : 3

Q.2  
0 Select the option that will correctly replace the question mark (?) in the series.

9, 21, 38, 65, ?

- Ans  1. 125  
 2. 115  
 3. 105  
 4. 107

Question ID : 9895803610  
Chosen Option : 4

Q.2  
1 Choose the odd one out of the given options.

- Ans  1. Purple  
 2. Yellow  
 3. Red  
 4. Blue

Question ID : 9895803598  
Chosen Option : 3

Q.2 Select the option that is related to the third number in the same way as the second number is related to the first number.

2

24 : 4 :: 45 : ?

- Ans  1. 5  
 2. 7  
 3. 8  
 4. 6

Question ID : 9895803611  
Chosen Option : 1

Q.2 Select the option that is related to the third term in the same way as the second term is related to the first term.

3

Famous : Obscure :: Crazy : ?

- Ans  1. Sane  
 2. Clever  
 3. Sink  
 4. Foolish

Question ID : 9895803600  
Chosen Option : 2

Q.2 Find out the two signs to be interchanged to make the following equation correct.

4

$$15 + 15 \times 15 - 15 \div 15 = 15$$

- Ans  1. - and  $\div$   
 2. + and -  
 3.  $\times$  and  $\div$   
 4. + and  $\times$

Question ID : 9895803614  
Chosen Option : 3

Q.2 The statements below are followed by two conclusions labeled I and II. Assuming that the information in the statements is true, even if it appears at variance with generally established facts, decide which conclusion(s) logically and definitely follow(s) from the information given in the statements.

5

Statements:

- 1) Some angers are griefs.
- 2) Some griefs are loves.

Conclusion:

- I. Some griefs are angers.
- II. Some loves are griefs.

- Ans  1. Both conclusions follow.  
 2. Only conclusion II follows.  
 3. Only conclusion I follows.  
 4. Neither conclusion I nor conclusion II follows.

Question ID : 9895803608  
Chosen Option : 1

Q.2 With which Mughal ruler is the Moti Masjid in Agra associated?

6

- Ans  1. Aurangzeb

- 2. Akbar
- 3. Humayun
- 4. Shah Jahan

Question ID : 9895805001  
Chosen Option : 2

Q.2  
7 Which of the following statements is NOT correct about the factors that gave rise to the Consumer Movement in India?

- Ans
- 1. Frequent food shortages
  - 2. Hoarding and Black Marketing
  - 3. Adulteration of food
  - 4. Tax on soft beverages

Question ID : 9895804992  
Chosen Option : 1

Q.2  
8 Which festival is celebrated to mark the birth anniversary of Prophet Muhammad?

- Ans
- 1. Eid-ul-fitr
  - 2. Shab-i-baraat
  - 3. Id-ul-azha
  - 4. Milad-un-nabi

Question ID : 9895804987  
Chosen Option : 1

Q.2  
9 What are dolphins, porpoises and whales called?

- Ans
- 1. Smack
  - 2. Amphibian
  - 3. Odontocetes
  - 4. Cetaceans

Question ID : 9895804984  
Chosen Option : 2

Q.3  
0 Which food delivery service provider was recently acquired by Ola?

- Ans
- 1. Foodpanda
  - 2. Uber eats
  - 3. Zomato
  - 4. Swiggy

Question ID : 9895804996  
Chosen Option : 4

Q.3  
1 What is the child sex ratio?

- Ans
- 1. Number of males per thousand females in the age group 0-15
  - 2. Number of females per thousand males in the age group 0-6



3. Number of females per hundred males in the age group 0-6

4.

Number of females per hundred males in the age group 0-15

Question ID : 9895804991

Chosen Option : 1

Q.3  
2 Who won his first Stuttgart Open men's singles title in June 2018?

Ans  1. Dominic Thiem

2. Nicolas Mahut

3. Roger Federer

4. Milos Raonic

Question ID : 9895804980

Chosen Option : 3

Q.3  
3 When was Rowlatt Satyagraha launched and by whom?

Ans  1. 1929, Mahatma Gandhi

2. 1915, Motilal Nehru

3. 1919, Mahatma Gandhi

4. 1930, C.R. Das

Question ID : 9895804978

Chosen Option : 2

Q.3  
4 \_\_\_\_\_ cropping refers to, growing two or more crops simultaneously on the same piece of land.

Ans  1. Simple

2. Complex

3. Mixed

4. Inter

Question ID : 9895804998

Chosen Option : 1

Q.3  
5 Which of the following is the national aquatic animal of India?

Ans  1. Whale

2. Turtle

3. Sea Horse

4. River Dolphin

Question ID : 9895805000

Chosen Option : 4

Q.3  
6 Which of the following is a subject of the state list?

Ans  1. Banking

2. Defence

3. Police

4. Forests

Question ID : 9895804990  
Chosen Option : 1

Q.3  
7 Which British Viceroy in India carried out the partition of Bengal?

- Ans
- 1. Lord Canning
  - 2. Lord Lytton
  - 3. Lord Dalhousie
  - 4. Lord Curzon

Question ID : 9895805002  
Chosen Option : 4

Q.3  
8 The National Sports Development Fund (NSDF) was established by the Central Government in the year \_\_\_\_\_.

- Ans
- 1. 1997
  - 2. 1998
  - 3. 1996
  - 4. 1999

Question ID : 9895804982  
Chosen Option : 4

Q.3  
9 Which startup was recently honoured by UN for its efforts in cleaning the Ganga river?

- Ans
- 1. Navdanya Trust
  - 2. Satpuda foundation
  - 3. HelpUsGreen
  - 4. World Wide Fund

Question ID : 9895804994  
Chosen Option : 2

Q.4  
0 'Double coincidence of wants' is a feature of which system?

- Ans
- 1. Forex system
  - 2. Barter system
  - 3. Equity system
  - 4. Liquidity system

Question ID : 9895804981  
Chosen Option : 1

Q.4  
1 Curd is formed with the help of \_\_\_\_\_ bacteria.

- Ans
- 1. Bifidobacterium bifidum
  - 2. Lactic acid
  - 3. Lactobacillus acidophilus
  - 4. Bacillus coagulans

Question ID : 9895804999

Chosen Option : 1

Q.4  
2 Which of these countries is an example of 'holding together federation'?

- Ans
- 1. New Zealand
  - 2. Australia
  - 3. USA
  - 4. India

Question ID : 9895804989

Chosen Option : 4

Q.4  
3 Kalaripayattu is the martial art form prevalent in which Indian state?

- Ans
- 1. Tamil Nadu
  - 2. Kerala
  - 3. Karnataka
  - 4. Odisha

Question ID : 9895804983

Chosen Option : 2

Q.4  
4 Which option represents the crops that are grown in June-July and are harvested in September-October?

- Ans
- 1. Rice, cotton
  - 2. Melon, barley
  - 3. Cucumber, watermelon
  - 4. Peas, wheat

Question ID : 9895804986

Chosen Option : 1

Q.4  
5 Which Indian state is the largest bauxite producing state?

- Ans
- 1. Odisha
  - 2. Bihar
  - 3. Madhya Pradesh
  - 4. Jharkhand

Question ID : 9895804985

Chosen Option : 3

Q.4  
6 Which tennis player received the Padma Shri in sports in 2018?

- Ans
- 1. Yuki Bhambri
  - 2. Sania Mirza
  - 3. Leander Paes
  - 4. Somdev Devvarman

Question ID : 9895804995

Chosen Option : 2

Q.4  
7 Who is the author of the book 'Exam Warriors'?

- Ans
- 1. Narendra Modi
  - 2. Manmohan Singh
  - 3. Sushma Swaraj
  - 4. Arun Jaitley

Question ID : 9895804993  
Chosen Option : 1

Q.4  
8 Which declaration was signed at UNCED 1992 at Rio De Janeiro, Brazil?

- Ans
- 1. Agenda 39
  - 2. Agenda 19
  - 3. Agenda 22
  - 4. Agenda 21

Question ID : 9895804979  
Chosen Option : 3

Q.4  
9 What is the range of pH scale?

- Ans
- 1. 0 to 14
  - 2. 1 to 10
  - 3. 1 to 7
  - 4. 0 to 10

Question ID : 9895804997  
Chosen Option : 1

Q.5  
0 What was the capital of the Mauryan empire?

- Ans
- 1. Pataliputra
  - 2. Vaishali
  - 3. Indraprastha
  - 4. Kusinagra

Question ID : 9895804988  
Chosen Option : 1

Q.5  
1 A shopkeeper sells an article at a certain price. What is his gain or loss percent, if by selling it at 75% of that price, he loses 10%?

- Ans
- 1. Gain, 20%
  - 2. Gain, 25%
  - 3. Loss, 20%
  - 4. Loss, 25%

Question ID : 9895805160  
Chosen Option : 2

Q.5  
2 A man can row downstream a distance of 9 km in 2 hours and takes 6 hours while returning to the starting point. What is the speed (in km/h) of the stream?

- Ans  1. 2  
 2. 2.5  
 3. 1.5  
 4. 3

Question ID : 9895805171  
 Chosen Option : 3

Q.5 The average weight of a certain number of students in a group is 54 kg. if 12 students of average weight 52 kg join the group, then the average weight of all the students in the group decreases by 750 g. what was the number of students, initially in the group?

- Ans  1. 18  
 2. 24  
 3. 15  
 4. 20

Question ID : 9895805156  
 Chosen Option : 1

Q.5 Surbhi can do a piece of work in 24 days. She completed  $\frac{3}{8}$  of the work and then left it. Amita complete the remaining work in 10 days. Working together, they will complete 125% of the same work in:

- Ans  1. 10 days  
 2. 9 days  
 3. 12 days  
 4. 15 days

Question ID : 9895805174  
 Chosen Option : 1

Q.5 Study the following table and answer question.  
 5 Number of students appeared in an examination from five cities:

Cities	No. of Students (in thousand)	Ratio of students passed and failed
A	54	5 : 4
B	126	4 : 3
C	84	10 : 11
D	96	9 : 7
E	132	6 : 5

The ratio of the total number of students passed in the examination from cities A and D to that of students failed from cities B and E?

- Ans  1. 9 : 16  
 2. 5 : 9  
 3. 13 : 18  
 4. 14 : 19

Question ID : 9895805175  
 Chosen Option : 1

Q.5 The ratio of ages of A and B, 4 years ago, was 5 : 7. The ratio of their ages after 4 years from now will be 7 : 9. What will be the ratio of ages of A and B after 12 years from now?

- Ans  1. 8 : 13  
 2. 13 : 17  
 3. 9 : 11

✗ 4. 15 : 19

Question ID : 9895805163  
Chosen Option : 4

Q.5 The surface area of a cuboidal box is  $240 \text{ cm}^2$  and the length of its diagonal is 11 cm. What is the sum (in cm) of its length, breadth and depth?

- Ans
- ✗ 1. 21
  - ✓ 2. 19
  - ✗ 3. 20
  - ✗ 4. 17

Question ID : 9895805170  
Chosen Option : 4

Q.5 The area of an equilateral triangle is  $6\sqrt{3}$  times the area of a rhombus whose one side measures 13 cm and one diagonal is 10 cm. The length of side of the triangle, in cm, is:

- Ans
- ✗ 1.  $36\sqrt{6}$
  - ✗ 2.  $24\sqrt{6}$
  - ✓ 3.  $24\sqrt{5}$
  - ✗ 4.  $12\sqrt{6}$

Question ID : 9895805168  
Chosen Option : 4

Q.5 Let  $x$  be the least number which when divided by 12, 15, 18, 20 and 27, the remainder in each case is 2, but  $x$  is divisible by 23. If  $x$  is divided by the sum of its digits then the quotient is:

- Ans
- ✓ 1. 196
  - ✗ 2. 149
  - ✗ 3. 193
  - ✗ 4. 199

Question ID : 9895805153  
Chosen Option : 3

Q.6 Two trains A and B, 186 m and 200 m long, are running at 64 km/h and 80 km/h, respectively on parallel tracks. If they are running in the opposite directions, then how much time (in seconds) will a person sitting in the first train A take to cross the other train?

- Ans
- ✗ 1. 5.5
  - ✓ 2. 5
  - ✗ 3. 6
  - ✗ 4. 4.5

Question ID : 9895805172  
Chosen Option : 4

Q.6 The ratios of spirit and water in vessels A and B are 4 : 5 and 7 : 11, respectively. The contents of A and B are mixed in the ratio 2 : 5. What is the ratio of spirit and water in the resulting solution?

- Ans
- ✗ 1. 22 : 75
  - ✗ 2. 53 : 75
  - ✓ 3. 17 : 25
  - ✗ 4. 13 : 20

Question ID : 9895805164

Chosen Option : 4

Q.6  
2 The average of 17 numbers is 29. The average of first 9 numbers is 31 and the average of the last 9 numbers is 27. If 9<sup>th</sup> number is excluded, then what is the average of the remaining numbers?

- Ans
- 1. 31
  - 2. 31.6
  - 3. 29.5
  - 4. 29

Question ID : 9895805157

Chosen Option : 4

Q.6  
3 The value of  $\frac{0.2 \div 0.2 \text{ of } 0.1 - 0.03 \div 0.6 \text{ of } 0.01}{0.25 \times 0.75 \div 1.25 \text{ of } 0.4 + 0.125}$  lies between:

- Ans
- 1. 10.5 and 11.5
  - 2. 11.5 and 12.5
  - 3. 9.5 and 10.5
  - 4. 8.5 and 9.5

Question ID : 9895805155

Chosen Option : 4

Q.6  
4 The difference between the mean and median of the data 66, 59, 68, 65, 62, 59, 58, 56, 63, 65 is:

- Ans
- 1. 0.4
  - 2. 1
  - 3. 0.8
  - 4. 0.5

Question ID : 9895805167

Chosen Option : 2

Q.6  
5 A certain sum amounts to ₹9243.20 in  $1\frac{1}{2}$  years at 4% p.a. simple interest. What will be the simple interest on the same sum for  $7\frac{1}{2}$  years at 8% per annum?

- Ans
- 1. ₹5580
  - 2. ₹5223
  - 3. ₹5232
  - 4. ₹5508

Question ID : 9895805165

Chosen Option : 2

Q.6  
6 A sum of ₹12000 will amount to ₹x at 12% p.a after 2 years, when the interest is compounded 8-monthly. The value of x is (nearest to an integer)

- Ans
- 1. 15111
  - 2. 15083
  - 3. 15117
  - 4. 15053

Question ID : 9895805166

Chosen Option : 2

Q.6 The radius of a metallic sphere is 3 cm. it is melted and drawn into a wire of uniform circular section of 0.1 cm. the length of the wire will be (in m):

- Ans
- 1. 44
  - 2. 24
  - 3. 36
  - 4. 40

Question ID : 9895805169  
Chosen Option : 2

Q.6 Anu sells an article at a profit of 25%. If she had bought it at 25% less and sold it for ₹30.25 less she would have gained 30%. What is the original price (in ₹) of the article?

- Ans
- 1. 108
  - 2. 105.50
  - 3. 105.80
  - 4. 110

Question ID : 9895805159  
Chosen Option : 2

Q.6 The ratio of the mean proportional between 0.7 and 2.8 and the third proportional to 2.5 and 3.5 is:

- Ans
- 1. 7 : 2
  - 2. 2 : 7
  - 3. 7 : 3
  - 4. 3 : 7

Question ID : 9895805162  
Chosen Option : 2

Q.7 Study the following table and answer question.  
0 Number of students appeared in an examination from five cities:

Cities	No. of Students (in thousand)	Ratio of students passed and failed
A	54	5 : 4
B	126	4 : 3
C	84	10 : 11
D	96	9 : 7
E	132	6 : 5

The total number of students who appeared in the examination from cities C and D is what percent more than the total number of students who failed in cities A, B and E? (nearest to an integer)

- Ans
- 1. 44
  - 2. 30
  - 3. 41
  - 4. 42

Question ID : 9895805177  
Chosen Option : 1

Q.7 The value of  $\left[ \frac{2}{3} \div \frac{8}{15} \text{ of } \frac{2}{5} + \frac{2}{5} \text{ of } 7 \frac{1}{2} \div \frac{3}{4} \right] \text{ of } \frac{4}{19}$  is:

- Ans
- 1. 1
  - 2.  $1 \frac{1}{4}$



✓ 3.  $1\frac{1}{2}$

✗ 4.  $\frac{1}{2}$

Question ID : 9895805154  
Chosen Option : 1

Q.7 Study the following table and answer question.  
2 Number of students appeared in an examination from five cities:

Cities	No. of Students (in thousand)	Ratio of students passed and failed
A	54	5 : 4
B	126	4 : 3
C	84	10 : 11
D	96	9 : 7
E	132	6 : 5

The number of cities in which passing percentage of students is below 56% is:

- Ans
- ✗ 1. 1
  - ✓ 2. 3
  - ✗ 3. 2
  - ✗ 4. 4

Question ID : 9895805176  
Chosen Option : 3

Q.7 Two pipes X and Y can fill an empty tank in 't' minutes. If pipe X alone takes 6 minutes more than 't' to fill the tank and Y alone takes 54 minutes more than 't' to fill the tank, then X and Y together will fill the tank in:

- Ans
- ✓ 1. 18 sec
  - ✗ 2. 12 sec
  - ✗ 3. 27 sec
  - ✗ 4. 24 sec

Question ID : 9895805173  
Chosen Option : 3

Q.7 The price of oil is increased by 20%. However, the expenditure on it increases by 15%. What is the percentage increase or decrease in the consumption of oil?

- Ans
- ✗ 1.  $6\frac{1}{4}\%$ , decrease
  - ✓ 2.  $4\frac{1}{6}\%$ , decrease
  - ✗ 3.  $4\frac{1}{6}\%$ , increase
  - ✗ 4.  $6\frac{1}{4}\%$ , increase

Question ID : 9895805161  
Chosen Option : 3

Q.7 A person makes a profit of 17% after allowing 10% discount on its marked price. If he gives 14% discount on the marked price, then his profit percent is:

5

- Ans  1. 11.8  
 2. 14.6  
 3. 10.6  
 4. 23.8

Question ID : 9895805158  
Chosen Option : 3

Section : English Language

Q.1 Select the most appropriate option to substitute the underlined segment in the given sentence. If there is no need to substitute it, select No Improvement.

They thought she was arrogant, and she was very shy.

- Ans  1. as soon as she was  
 2. so that she was  
 3. No improvement  
 4. whereas she was

Question ID : 9895804544  
Chosen Option : 1

Q.2 From the given options, identify the segment in the sentence which contains the grammatical error.

He not only got a scholarship and also a good job.

- Ans  1. and also  
 2. a good job.  
 3. not only  
 4. got a scholarship

Question ID : 9895804542  
Chosen Option : 1

Q.3 Select the most appropriate option to fill in the blank.

She did not reply \_\_\_\_\_ my letter.

- Ans  1. against  
 2. for  
 3. with  
 4. to

Question ID : 9895804546  
Chosen Option : 2

Q.4 Select the correctly spelt word.

- Ans  1. Fullfil  
 2. Fullfill  
 3. Fulfil  
 4. Foolfil

Question ID : 9895804565  
Chosen Option : 2

Q.5 Select the word which means the same as the group of words given.

The practice of marrying one person at a time.

- Ans
- 1. Monogamy
  - 2. Monotony
  - 3. Polygamy
  - 4. Bigamy

Question ID : 9895804558  
Chosen Option : 1

Q.6 Select the antonym of the given word.

Attack

- Ans
- 1. Defence
  - 2. Secure
  - 3. Assent
  - 4. Refuse

Question ID : 9895804557  
Chosen Option : 4

Q.7 Select the correctly spelt word.

- Ans
- 1. Remembrance
  - 2. Remembranse
  - 3. Remembarence
  - 4. Rememberance

Question ID : 9895804564  
Chosen Option : 1

Comprehension:

In the following passage some words have been deleted. Fill in the blanks with the help of the alternatives given.

Flood is a common natural disaster. Scientists have often tried to (1) \_\_\_\_\_ floods. There are a number of reasons that (2) \_\_\_\_\_ floods, including heavy rain and cloudbursts. Due to these reasons, rivers (3) \_\_\_\_\_ their banks and cover the surrounding land. Sometimes, dams break and cause disastrous floods that (4) \_\_\_\_\_ to large-scale destruction. Timely safety (5) \_\_\_\_\_ should be taken to save human life and property.

SubQuestion No : 8

Q.8 Select the most appropriate option that will fill in the blank number 1.

- Ans
- 1. control
  - 2. predict
  - 3. prevent

4. avoid

Question ID : 9895804549  
Chosen Option : 1

Comprehension:

In the following passage some words have been deleted. Fill in the blanks with the help of the alternatives given.

Flood is a common natural disaster. Scientists have often tried to (1) \_\_\_\_\_ floods. There are a number of reasons that (2) \_\_\_\_\_ floods, including heavy rain and cloudbursts. Due to these reasons, rivers (3) \_\_\_\_\_ their banks and cover the surrounding land. Sometimes, dams break and cause disastrous floods that (4) \_\_\_\_\_ to large-scale destruction. Timely safety (5) \_\_\_\_\_ should be taken to save human life and property.

SubQuestion No : 9

Q.9 Select the most appropriate option that will fill in the blank number 2.

- Ans
- 1. occur
  - 2. arouse
  - 3. happen
  - 4. cause

Question ID : 9895804550  
Chosen Option : 3

Comprehension:

In the following passage some words have been deleted. Fill in the blanks with the help of the alternatives given.

Flood is a common natural disaster. Scientists have often tried to (1) \_\_\_\_\_ floods. There are a number of reasons that (2) \_\_\_\_\_ floods, including heavy rain and cloudbursts. Due to these reasons, rivers (3) \_\_\_\_\_ their banks and cover the surrounding land. Sometimes, dams break and cause disastrous floods that (4) \_\_\_\_\_ to large-scale destruction. Timely safety (5) \_\_\_\_\_ should be taken to save human life and property.

SubQuestion No : 10

Q.10 Select the most appropriate option that will fill in the blank number 3.

- Ans
- 1. wash
  - 2. drown
  - 3. overflow
  - 4. reach

Question ID : 9895804551  
Chosen Option : 3

Comprehension:

In the following passage some words have been deleted. Fill in the blanks with the help of the alternatives given.

Flood is a common natural disaster. Scientists have often tried to (1) \_\_\_\_\_ floods. There are a number of reasons that (2) \_\_\_\_\_ floods, including heavy rain and cloudbursts. Due to these reasons, rivers (3) \_\_\_\_\_ their banks and cover the surrounding land. Sometimes, dams break and cause disastrous floods that (4) \_\_\_\_\_ to large-scale destruction. Timely safety (5) \_\_\_\_\_ should be taken to save human life and property.

SubQuestion No : 11

Q.1  
1 Select the most appropriate option that will fill in the blank number 4.

- Ans
- 1. lead
  - 2. led
  - 3. leading
  - 4. leads

Question ID : 9895804552  
Chosen Option : 3

Comprehension:

In the following passage some words have been deleted. Fill in the blanks with the help of the alternatives given.

Flood is a common natural disaster. Scientists ~~have~~ often tried to (1) \_\_\_\_\_ floods. There are a number of reasons that (2) \_\_\_\_\_ floods, including heavy rain and cloudbursts. Due to these reasons, rivers (3) \_\_\_\_\_ their banks and cover the surrounding land. Sometimes, dams break and cause disastrous floods that (4) \_\_\_\_\_ to large-scale destruction. Timely safety (5) \_\_\_\_\_ should be taken to save human life and property.

SubQuestion No : 12

Q.1  
2 Select the most appropriate option that will fill in the blank number 5.

- Ans
- 1. measures
  - 2. products
  - 3. items
  - 4. causes

Question ID : 9895804553  
Chosen Option : 3

Q.1  
3 Select the synonym of the given word.

IDENTICAL

- Ans
- 1. Perfect
  - 2. Same
  - 3. Corresponding

4. Varied

Question ID : 9895804554  
Chosen Option : 1

Q.1  
4 Select the synonym of the given word.

GLEE

- Ans  1. Happiness  
 2. Hearty  
 3. Laughter  
 4. Jump

Question ID : 9895804555  
Chosen Option : 2

Q.1  
5 Select the word which means the same as the group of words given.

That which can be seen through

- Ans  1. Vague  
 2. Opaque  
 3. Foggy  
 4. Transparent

Question ID : 9895804559  
Chosen Option : 4

Q.1  
6 From the given options, identify the segment in the sentence which contains the grammatical error.

The T.V. and the computer has been blamed for reduced reading habits amongst children.

- Ans  1. The T.V. and the computer  
 2. has been blamed  
 3. for reduced  
 4. amongst children.

Question ID : 9895804540  
Chosen Option : 2

Q.1  
7 From the given options, identify the segment in the sentence which contains the grammatical error.

I am fastly excited and really looking forward to the trip.

- Ans  1. to the trip  
 2. and really  
 3. looking forward  
 4. I am fastly

Question ID : 9895804541  
Chosen Option : 2

Q.1  
8

Select the most appropriate word to fill in the blank.

He likes to do stunts with his bike. He is a \_\_\_\_\_

- Ans
- 1. daredevil
  - 2. busybody
  - 3. wind bag
  - 4. little bug

Question ID : 9895804562  
Chosen Option : 2

Q.1 Select the most appropriate option to substitute the underlined segment in the given sentence. If there is no need to substitute it, select No Improvement.

There were not any excuse for not participating in the competition.

- Ans
- 1. No improvement
  - 2. no excuse
  - 3. no excuses
  - 4. no any excuse

Question ID : 9895804545  
Chosen Option : 1

Q.2 Select the antonym of the given word.

ABOVE

- Ans
- 1. Below
  - 2. Less
  - 3. Down
  - 4. Across

Question ID : 9895804556  
Chosen Option : 1

Q.2 Select the option that means the same as the given idiom.

To measure swords

- Ans
- 1. To push an opponent
  - 2. To argue with someone
  - 3. To confess one's mistake
  - 4. To engage in competition

Question ID : 9895804874  
Chosen Option : 4

Q.2 Select the option that means the same as the given idiom.

Out of order

- Ans
- 1. Out of place
  - 2. In good condition

3. Not in working condition

4. Out of nowhere

Question ID : 9895804561

Chosen Option : 3

Q.2 Select the most appropriate option to substitute the underlined segment in the given sentence. If there is no need to substitute it, select No improvement.

3

You need to curb your temper or you might offended someone.

Ans  1. you might be offend

2. you might offend

3. No improvement

4. you might offending

Question ID : 9895804543

Chosen Option : 4

Q.2 Select the most appropriate option to fill in the blank.

4

I told him to avoid fighting, but he won't \_\_\_\_\_.

Ans  1. doing it

2. did it

3. do it

4. does it

Question ID : 9895804547

Chosen Option : 2

Q.2 Select the most appropriate word to fill in the blank.

5

My mother is \_\_\_\_\_ riser.

Ans  1. a fast

2. an early

3. a quick

4. an easy

Question ID : 9895804563

Chosen Option : 1

Section : Hindi Language

Q.1 रिक्त स्थान को भरने के लिए उपयुक्त शब्द का चयन करें।

वह सदैव \_\_\_\_\_ से बड़ो का आदर करता है।

Ans  1. पराये

2. हमारे

3. तुम्हारे



✗ 4. अपने

Question ID : 9895804882  
Chosen Option : --

Q.2 दिए गए शब्द के पर्यायवाची शब्द का चयन करें।

शिक्षक

- Ans
- ✓ 1. गुरु
  - ✗ 2. विभा
  - ✗ 3. विद्यार्थी
  - ✗ 4. दिवाकर

Question ID : 9895804895  
Chosen Option : --

Q.3 निम्नलिखित में से उस विकल्प का चयन करें जो 'ओखली में सिर देना' मुहावरे का अर्थ व्यक्त करता है।

- Ans
- ✓ 1. जान बूझकर मुसीबत में पड़ना
  - ✗ 2. ओखली में सिर देकर उसे कूटना
  - ✗ 3. ओखली को सिर पर रखना
  - ✗ 4. ओखली के समान सर होना

Question ID : 9895804896  
Chosen Option : --

Q.4 दिए गए शब्द का विलोम चुनें।

उष्ण

- Ans
- ✓ 1. शीत
  - ✗ 2. लहर
  - ✗ 3. उपमा
  - ✗ 4. उष्मा

Question ID : 9895804892  
Chosen Option : --

Q.5 दिये गये वाक्यांश के लिए एक शब्द चुनिए।

जो दूर की सोचता है

- Ans
- ✗ 1. एकादशी
  - ✗ 2. चतुर्दशी
  - ✓ 3. दूरदर्शी
  - ✗ 4. द्वादशी

Question ID : 9895804899

Q.6 दिए गए वाक्य का वह भाग ज्ञात करें जिसमें कोई त्रुटि है।

कोई गुंडा भरे बाज़ार में किसी को हत्या करके चला गया।

Ans

- 1. कोई गुंडा
- 2. चला गया।
- 3. किसी को हत्या करके
- 4. भरे बाज़ार में

Question ID : 9895804876

Chosen Option : --

Comprehension:

दिए गए अनुच्छेद में कुछ शब्द हटा दिए गए हैं। दिए गए विकल्पों की सहायता से रिक्त स्थान भरें। प्रत्येक संख्या के लिए उपयुक्त विकल्प का चयन करें।

एक अत्याचारी शासक एक चीते से अधिक \_\_\_\_\_ (1) होता है। अत्याचारी शासन में रहने की अपेक्षा \_\_\_\_\_ (2) है कि किसी पहाड़ी अथवा वन में रह लिया जाए। जनता को चाहिए कि वह अत्याचारी शासन का समुचित \_\_\_\_\_ (3) करे और सत्ताधारी को अपना \_\_\_\_\_ (4) करने के लिए विवश करने का उपाय करे। अत्याचारी शासन को भय के कारण सहन करने वाला समाज किसी प्रकार की \_\_\_\_\_ (5) नहीं कर पाता।

SubQuestion No : 7

Q.7 गद्यांश में संकेतित रिक्त स्थान (1) के लिए उपयुक्त शब्द होगा -

Ans

- 1. मस्त
- 2. कमाल
- 3. रोचक
- 4. भयंकर

Question ID : 9895804887

Chosen Option : --

Comprehension:

दिए गए अनुच्छेद में कुछ शब्द हटा दिए गए हैं। दिए गए विकल्पों की सहायता से रिक्त स्थान भरें। प्रत्येक संख्या के लिए उपयुक्त विकल्प का चयन करें।

एक अत्याचारी शासक एक चीते से अधिक \_\_\_\_\_ (1) होता है। अत्याचारी शासन में रहने की अपेक्षा \_\_\_\_\_ (2) है कि किसी पहाड़ी अथवा वन में रह लिया जाए। जनता को चाहिए कि वह अत्याचारी शासन का समुचित \_\_\_\_\_ (3) करे और सत्ताधारी को अपना \_\_\_\_\_ (4) करने के लिए विवश करने का उपाय करे। अत्याचारी शासन को भय के कारण सहन करने वाला समाज किसी प्रकार की \_\_\_\_\_ (5) नहीं कर पाता।

SubQuestion No : 8

Q.8 गद्यांश में संकेतित रिक्त स्थान (2) के लिए उपयुक्त शब्द होगा -

- Ans  1. अच्छा  
 2. किस्सा  
 3. खोना  
 4. नाटक

Question ID : 9895804888  
Chosen Option : --

Comprehension:

दिए गए अनुच्छेद में कुछ शब्द हटा दिए गए हैं। दिए गए विकल्पों की सहायता से रिक्त स्थान भरें। प्रत्येक संख्या के लिए उपयुक्त विकल्प का चयन करें।

एक अत्याचारी शासक एक चीते से अधिक \_\_\_\_\_ (1) होता है। अत्याचारी शासन में रहने की अपेक्षा \_\_\_\_\_ (2) है कि किसी पहाड़ी अथवा वन में रह लिया जाए। जनता को चाहिए कि वह अत्याचारी शासन का समुचित \_\_\_\_\_ (3) करे और सत्ताधारी को अपना \_\_\_\_\_ (4) करने के लिए विवश करने का उपाय करे। अत्याचारी शासन को भय के कारण सहन करने वाला समाज किसी प्रकार की \_\_\_\_\_ (5) नहीं कर पाता।

SubQuestion No : 9

Q.9 गद्यांश में संकेतित रिक्त स्थान (3) के लिए उपयुक्त शब्द होगा -

- Ans
- 1. विरोध
  - 2. जोश
  - 3. उमंग
  - 4. उत्साह

Question ID : 9895804889  
Chosen Option : --

Comprehension:

दिए गए अनुच्छेद में कुछ शब्द हटा दिए गए हैं। दिए गए विकल्पों की सहायता से रिक्त स्थान भरें। प्रत्येक संख्या के लिए उपयुक्त विकल्प का चयन करें।

एक अत्याचारी शासक एक चीते से अधिक \_\_\_\_\_ (1) होता है। अत्याचारी शासन में रहने की अपेक्षा \_\_\_\_\_ (2) है कि किसी पहाड़ी अथवा वन में रह लिया जाए। जनता को चाहिए कि वह अत्याचारी शासन का समुचित \_\_\_\_\_ (3) करे और सत्ताधारी को अपना \_\_\_\_\_ (4) करने के लिए विवश करने का उपाय करे। अत्याचारी शासन को भय के कारण सहन करने वाला समाज किसी प्रकार की \_\_\_\_\_ (5) नहीं कर पाता।

SubQuestion No : 10

Q.1 गद्यांश में संकेतित रिक्त स्थान (4) के लिए उपयुक्त शब्द होगा -

- Ans
- 1. सुधार
  - 2. मजदूर
  - 3. दुर्बल
  - 4. मजबूत

Question ID : 9895804890  
Chosen Option : --

Comprehension:

दिए गए अनुच्छेद में कुछ शब्द हटा दिए गए हैं। दिए गए विकल्पों की सहायता से रिक्त स्थान भरें। प्रत्येक संख्या के लिए उपयुक्त विकल्प का चयन करें।

एक अत्याचारी शासक एक चीते से अधिक \_\_\_\_\_ (1) होता है। अत्याचारी शासन में रहने की अपेक्षा \_\_\_\_\_ (2) है कि किसी पहाड़ी अथवा वन में रह लिया जाए। जनता को चाहिए कि वह अत्याचारी शासन का समुचित \_\_\_\_\_ (3) करे और सत्ताधारी को अपना \_\_\_\_\_ (4) करने के लिए विवश करने का उपाय करे। अत्याचारी शासन को भय के कारण सहन करने वाला समाज किसी प्रकार की \_\_\_\_\_ (5) नहीं कर पाता।

SubQuestion No : 11

Q.1 गद्यांश में संकेतित रिक्त स्थान (5) के लिए उपयुक्त शब्द होगा -

- Ans
- 1. विवाह
  - 2. अवनति
  - 3. उन्नति
  - 4. अज्ञान

Question ID : 9895804891  
Chosen Option : --

Q.2 दिए गए वाक्य में रेखांकित खंड को प्रतिस्थापित करने के लिए उपयुक्त विकल्प का चयन करें।

आज की सभा में फूलों के गुलदस्ता अतिथि को भेंट किया गया।

- Ans
- 1. फूलों का गुलदस्ता
  - 2. फूलों में गुलदस्ता
  - 3. फूलों से गुलदस्ता
  - 4. फूलों की गुलदस्ता

Question ID : 9895804880  
Chosen Option : --

Q.1 निम्नलिखित में से उस विकल्प का चयन करें जो 'कलेजे पर पत्थर रखना' मुहावरे का अर्थ व्यक्त करता है।

- Ans
- 1. भारी पत्थर कलेजे पर रखना
  - 2. जी कड़ा करना
  - 3. दिल बड़ा करना
  - 4. कलेजे को पत्थर पर रखना

Question ID : 9895804897  
Chosen Option : --

Q.1  
4 सही वर्तनी वाले शब्द का चयन करें।

- Ans
- 1. जयेष्ठ
  - 2. ज्येष्ट
  - 3. ज्येष्ठ
  - 4. ज्येश्ठ

Question ID : 9895804901  
Chosen Option : --

Q.1  
5 दिए गए शब्द का विलोम चुनें।

अपत्यय

- Ans
- 1. व्यर्थव्यय
  - 2. खर्चीला
  - 3. अतिव्यय
  - 4. मितव्यय

Question ID : 9895804893  
Chosen Option : --

Q.1  
6 दिए गए वाक्य का वह भाग ज्ञात करें जिसमें कोई त्रुटि है।

जो लोग विवेकी हैं वे मानवजाति को विनाश की ओर बढ़ते देखकर विचलित होता हैं।

- Ans
- 1. मानवजाति को
  - 2. विनाश की ओर बढ़ते देखकर
  - 3. विचलित होता हैं।
  - 4. जो लोग विवेकी हैं

Question ID : 9895804878  
Chosen Option : --

Q.1  
7 दिए गए शब्द के पर्यायवाची शब्द का चयन करें।

गोधूलि

- Ans
- 1. रात
  - 2. संध्या
  - 3. सुबह
  - 4. दिन

Question ID : 9895804894  
Chosen Option : --

Q.1  
8

रिक्त स्थान को भरने के लिए उपयुक्त शब्द का चयन करें।

\_\_\_\_\_ में बाजार गया तो सामान अवश्य लाऊँगा।

- Ans
- 1. जिससे
  - 2. यदि
  - 3. यदापि
  - 4. इसलिए

Question ID : 9895804885  
Chosen Option : --

Q.1 दिए गए वाक्य में रेखांकित खंड को प्रतिस्थापित करने के लिए उपयुक्त विकल्प का चयन करें।

मनुष्य को पुण्य कर्म करता चाहिए।

- Ans
- 1. पुण्य कर्मों करने चाहिए।
  - 2. पुण्य कर्म करना चाहिए।
  - 3. पुण्य कर्म करते चाहिए।
  - 4. पुण्य कर्म करनी चाहिए।

Question ID : 9895804879  
Chosen Option : --

Q.2 रिक्त स्थान को भरने के लिए उपयुक्त शब्द का चयन करें।

मेरे माता-पिता की ओर से \_\_\_\_\_ ढेर सारा प्यार।

- Ans
- 1. किसी
  - 2. सभी
  - 3. मुझे
  - 4. तुम्हें

Question ID : 9895804884  
Chosen Option : --

Q.2 रिक्त स्थान को भरने के लिए उपयुक्त शब्द का चयन करें।

राम ने साँप को लाठी \_\_\_\_\_ मारा।

- Ans
- 1. ने
  - 2. पर
  - 3. में
  - 4. से

Question ID : 9895804883  
Chosen Option : --

Q.2  
2 दिये गये वाक्यांश के लिए एक शब्द चुनिए।

जो सबको प्रिय हो

- Ans
- 1. शोभनीय
  - 2. सुन्दर
  - 3. सर्वप्रिय
  - 4. रमणीय

Question ID : 9895804898  
Chosen Option : --

Q.2  
3 सही वर्तनी वाले शब्द का चयन करें।

- Ans
- 1. दुरलभ
  - 2. दुरभल
  - 3. दूर्लभ
  - 4. दुर्लभ

Question ID : 9895804900  
Chosen Option : --

Q.2  
4 दिए गए वाक्य में रेखांकित खंड को प्रतिस्थापित करने के लिए उपयुक्त विकल्प का चयन करें।

साँप को देखकर छोटा बच्चा उसको डर गया।

- Ans
- 1. उस पर डर गया।
  - 2. उसमें डर गया।
  - 3. उससे डर गया।
  - 4. उसकी डर गया।

Question ID : 9895804881  
Chosen Option : --

Q.2  
5 दिए गए वाक्य का वह भाग ज्ञात करें जिसमें कोई त्रुटि है।

महानगरों की जीवन शैली तृष्णा का भरी है और यहाँ रहने वाला लाखों कमाकर भी बेचैन है।

- Ans
- 1. तृष्णा का भरी है।
  - 2. और यहाँ रहने वाला
  - 3. लाखों कमाकर भी बेचैन है।
  - 4. महानगरों की जीवन शैली

Question ID : 9895804877  
Chosen Option : --