

Constable (GD) in CAPFs, NIA, SSF and Rifleman (GD) in Assam Rifles Examination, 2018



Roll No. :	www.GovtJobsAlert.In
Registration No.	
Name :	
Exam Venue :	iON Digital Zone iDZ Attingal
Exam Time :	12:30 PM - 2:00 PM
Exam Date :	18/02/2019

Section : General Section

Q.1 Select a figure from amongst the four alternatives that when placed in the blank space (?) of figure X will complete the pattern. (Rotation is not allowed).

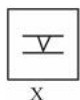


Ans

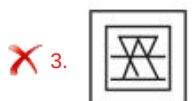


Question ID : 9895803820
Chosen Option : 2

Q.2 Choose the option in which the figure marked 'X' is embedded. (Rotation is not allowed)



Ans



Question ID : 9895803821
Chosen Option : 2

Q.3 Choose the odd one out of the given options.

- Ans 1. KJL
 2. FIL
 3. GIK
 4. DKL

Question ID : 9895803801
 Chosen Option : 4

Q.4 A square transparent sheet with a pattern is given. How will the pattern appear when the transparent sheet is folded along the dotted line?



- Ans 1.
 2.
 3.
 4.

Question ID : 9895803823
 Chosen Option : 3

Q.5 Select the option that is related to the third number in the same way as the second number is related to the first number.

36 : 324 :: 11 : ?

- Ans 1. 259
 2. 121
 3. 22
 4. 221

Question ID : 9895803815
 Chosen Option : 1

Q.6 The statements below are followed by two conclusions labeled I and II. Assuming that the information in the statements is true, even if it appears at variance with generally established facts, decide which conclusion(s) logically and definitely follow(s) from the information given in the statements.

Statements:

- 1) All toads are frogs.
- 2) All frogs are snakes.

Conclusion:

- I. Some snakes are toads.
- II. Some frogs are toads.

- Ans 1. Only conclusion I follows.
 2. Either conclusion I or conclusion II follows.

3. Both conclusions follow.
 4. Only conclusion II follows.

Question ID : 9895803811
Chosen Option : 3

Q.7 Eight friends A, B, C, D, E, F, G and H are sitting around a circular table facing each other for a lunch. A is opposite D and third to the right of B. G is between A and F. H is to the right of A. E is between C and D. Who is sitting opposite B?

- Ans 1. C
 2. E
 3. F
 4. H

Question ID : 9895803809
Chosen Option : 2

Q.8 Seven friends O, P, Q, R, S, T and U are watching a movie sitting in a row. P is sitting at one extreme end. Q is sitting to the immediate left of S. P is sitting second to the right of T. U is not sitting at any extreme end. O is sitting between R and T. Who is sitting at the extreme left end?

- Ans 1. T
 2. Q
 3. R
 4. P

Question ID : 9895803808
Chosen Option : 2

Q.9 Select the option that is related to the third term in the same way as the second term is related to the first term.

Ichthyology : Fishes :: Hematology : ?

- Ans 1. Ligaments
 2. Blood
 3. Tissue
 4. Bone

Question ID : 9895803803
Chosen Option : 2

Q.1 Select the option that will correctly replace the question mark (?) in the series.

5, 17, 34, 61, ?

- Ans 1. 105
 2. 103
 3. 115
 4. 125


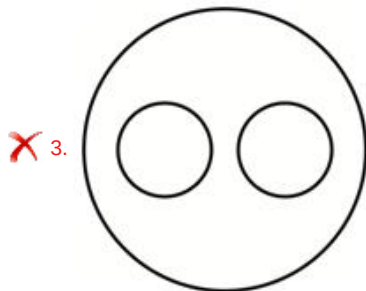
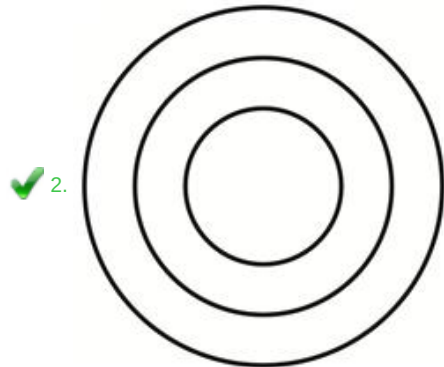
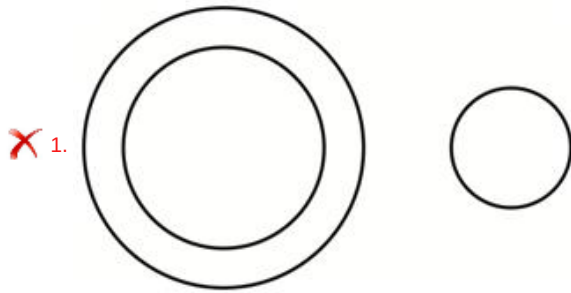
Question ID : 9895803814
Chosen Option : 2

Q.1
1

Select the Venn diagram that best represents the given set of classes.

Paragraph, Word, Sentence

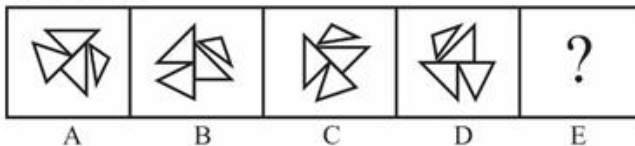
Ans



Question ID : 9895803824
Chosen Option : 2

Q.1 Choose the option that would follow next in the given figure series.

Problem Fig.



Ans



✓ 2.



✗ 3.



✗ 4.



Question ID : 9895803819
Chosen Option : 2

Q.1 Find out the two signs to be interchanged to make the following equation correct.

$25 + 25 \times 25 - 25 \div 25 = -599$

- Ans
- ✗ 1. + and ×
 - ✓ 2. × and ÷
 - ✗ 3. - and ×
 - ✗ 4. - and ÷

Question ID : 9895803818
Chosen Option : 2

Q.1 Choose the option that most closely resembles the mirror image of the given figure.

4



Ans

✓ 1.



✗ 2.



✗ 3.



✗ 4.



Question ID : 9895803822
Chosen Option : 2

Q.1 Choose the odd number out of the given options.

5

Ans

- 1. 65
- 2. 52
- 3. 26
- 4. 97

Question ID : 9895803816
Chosen Option : 4

Q.1 Select the option that will correctly replace the question mark (?) in the series.

102, 98, 82, 46, ?

- Ans
- 1. 20
 - 2. 18
 - 3. -20
 - 4. -18

Question ID : 9895803813
Chosen Option : 2

Q.1 Select the option that is related to the third term in the same way as the second term is related to the first term.

Famous : Renowned :: Ban : ?

- Ans
- 1. Use
 - 2. Packet
 - 3. Allow
 - 4. Prohibition

Question ID : 9895803804
Chosen Option : 2

Q.1 The statements below are followed by two conclusions labeled I and II. Assuming that the information in the statements is true, even if it appears at variance with generally established facts, decide which conclusion(s) logically and definitely follow(s) from the information given in the statements.

Statements:

- 1) Some manure are ammonia.
- 2) Some ammonia are potash.

Conclusion:

- I. Some ammonia are manure.
- II. Some potash are ammonia.

- Ans
- 1. Only conclusion I follows.
 - 2. Both conclusions follow.
 - 3. Neither conclusion I nor conclusion II follows.
 - 4. Only conclusion II follows.

Question ID : 9895803812
Chosen Option : 2

Q.1 Select the option that is related to the third term in the same way as the second term is related to the first term.

LEVEL : MFVDK :: FENCE:?

- Ans
- 1. GFNDB
 - 2. FGNDK
 - 3. GFNBD

4. FGNBD

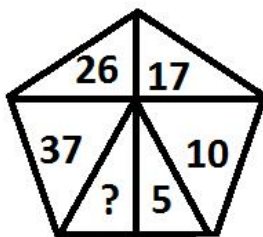
Question ID : 9895803805
Chosen Option : 4

Q.2 In a certain code, ABOVE is written as ABEOV. How will QUESTION be written in that code?
0

- Ans 1. EINOQSTU
 2. EINQOSTU
 3. EINOQTSU
 4. USINVSIN

Question ID : 9895803806
Chosen Option : 2

Q.2 Select the option that will correctly replace the question mark (?) in the given pattern.
1



- Ans 1. 13
 2. 3
 3. 50
 4. 49

Question ID : 9895803817
Chosen Option : 2

Q.2 J, K, L, M, N and O are six teachers. Each one teaches a different subject out of Hindi, English, Math, Science, Social Science and Arts, not necessarily in the same order. Each of them teaches on only one day, from Monday to Saturday, not necessarily in the same order.

J teaches Science on Wednesday. O teaches Math second after J. K teaches on the first day of the week, but teaches neither Hindi nor English. M teaches English before N and L teaches Arts before J. Which subject is taught on Saturday?

- Ans 1. Hindi
 2. English
 3. Social Science
 4. Science

Question ID : 9895803810
Chosen Option : 2

Q.2 Choose the odd one out of the given options.
3

- Ans 1. Ear
 2. Kidney
 3. Eye
 4. Nose

Question ID : 9895803802

Chosen Option : 2

Q.2
4 In a certain code, DIG is written as 20. How will FEED be written in that code?

- Ans
- 1. 80
 - 2. 60
 - 3. 20
 - 4. 90

Question ID : 9895803807
Chosen Option : 3

Q.2
5 Select the option that will correctly replace the question mark (?) in the series.

QFM, OHL, MJK, ?

- Ans
- 1. KJL
 - 2. KLJ
 - 3. JKL
 - 4. LKJ

Question ID : 9895803800
Chosen Option : 2

Q.2
6 The Himalayas are an example of _____ mountains.

- Ans
- 1. block
 - 2. plateau
 - 3. volcanic
 - 4. fold

Question ID : 9895805362
Chosen Option : 1

Q.2
7 The raga 'Miya Malhar' was created by:

- Ans
- 1. Tansen
 - 2. Mira Bai
 - 3. Amir Khusro
 - 4. Pandit Jasraj

Question ID : 9895805382
Chosen Option : 3

Q.2
8 Pokkali, a unique variety of rice which can sustain in salinity is endemic to which state of India?

- Ans
- 1. Goa
 - 2. Andhra Pradesh
 - 3. Kerala
 - 4. Telangana

Question ID : 9895805383
Chosen Option : 3

Q.2
9 With reference to the Kangra School of Painting, which of the following statements is correct?

- Ans
- 1. Its theme is prosaic in nature
 - 2. It uses strong colours with deep Red and Black
 - 3. It was inspired by the Vaishnavite traditions
 - 4. It was developed during the reign of Samudragupta

Question ID : 9895805360
Chosen Option : 1

Q.3
0 When the government's total revenue, excluding borrowings, is less than the planned expenditure, it is called:

- Ans
- 1. revenue deficit
 - 2. budget shortfall
 - 3. fiscal deficit
 - 4. deficit financing

Question ID : 9895805373
Chosen Option : 1

Q.3
1 "Sanitation is more important than independence" – Who said this?

- Ans
- 1. C Rajagopalachari
 - 2. Mahatma Gandhi
 - 3. Jawaharlal Nehru
 - 4. Subhash Chandra Bose

Question ID : 9895805369
Chosen Option : 1

Q.3
2 "Sattriya" is a dance form which has its origins in which state of India?

- Ans
- 1. Karnataka
 - 2. Andhra Pradesh
 - 3. Tamil Nadu
 - 4. Assam

Question ID : 9895805381
Chosen Option : 2

Q.3
3 With which sport is Durand Cup associated?

- Ans
- 1. Football
 - 2. Hockey
 - 3. Tennis
 - 4. Cricket

Question ID : 9895805379
Chosen Option : 2

Q.3
4 Ozone depletion is greatest near:

Ans

- 1. tropics
- 2. equator
- 3. poles
- 4. oceans

Question ID : 9895805366
Chosen Option : 4

Q.3
5 Which institution is responsible for calculating the GDP of India?

- Ans
- 1. Ministry of Finance
 - 2. Reserve Bank of India
 - 3. Central Statistics Office
 - 4. Chief Economic Advisor

Question ID : 9895805375
Chosen Option : 1

Q.3
6 When you heat a China dish containing 1gm of Copper powder, a Black substance is formed on the surface of the powder due to:

- Ans
- 1. Atomization
 - 2. Carbonization
 - 3. Oxidation
 - 4. Desalinization

Question ID : 9895805365
Chosen Option : 2

Q.3
7 Bedaquiline drug was developed to treat which of the following diseases?

- Ans
- 1. Acute Myeloid Leukemia
 - 2. Cholera
 - 3. MDR-TB
 - 4. Osteoarthritis

Question ID : 9895805376
Chosen Option : 2

Q.3
8 Which of the following features are used by Protista organisms for locomotion?

- Ans
- 1. Maxillia
 - 2. Flagella
 - 3. Ephemera
 - 4. Chimera

Question ID : 9895805368
Chosen Option : 1

Q.3
9 Andal, a Bhakti saint was associated to which of the following religious sects?

- Ans
- 1. Vaishnavism
 - 2. Shaivism

- 3. Shaktism
- 4. Buddhism

Question ID : 9895805361
Chosen Option : 1

Q.4
0 When were the first modern Olympic Games held?

- Ans
- 1. 1896
 - 2. 1935
 - 3. 1943
 - 4. 1921

Question ID : 9895805380
Chosen Option : 1

Q.4
1 Which of the following rivers flows into the Arabian Sea?

- Ans
- 1. Narmada
 - 2. Kaveri
 - 3. Krishna
 - 4. Godavari

Question ID : 9895805363
Chosen Option : 2

Q.4
2 Which is the highest peace time gallantry award in India?

- Ans
- 1. Ashok Chakra
 - 2. Kirti Chakra
 - 3. Mahavir Chakra
 - 4. Param Vir Chakra

Question ID : 9895805377
Chosen Option : 4

Q.4
3 Who is the author of the book 'The Discovery of India'?

- Ans
- 1. Atal Bihari Vajpayee
 - 2. Indira Gandhi
 - 3. Mahatma Gandhi
 - 4. Jawaharlal Nehru

Question ID : 9895805378
Chosen Option : 1

Q.4
4 The Planning Commission was set up by the Government of India in the year:

- Ans
- 1. 1948
 - 2. 1950
 - 3. 1949
 - 4. 1951

Question ID : 9895805371

Chosen Option : 4

Q.4
5 Which of the following is NOT a feature of the Constitution of India?

- Ans
- 1. Separation of Powers
 - 2. Unitary System
 - 3. Fundamental Rights
 - 4. Federalism

Question ID : 9895805370

Chosen Option : 1

Q.4
6 As per 2011 census, which of the following states in India has the lowest population density?

- Ans
- 1. Sikkim
 - 2. Chhattisgarh
 - 3. Arunachal Pradesh
 - 4. Himachal Pradesh

Question ID : 9895805364

Chosen Option : 1

Q.4
7 A loan becomes a Non-Performing Asset (NPA) when the interest or principal becomes overdue for a period of:

- Ans
- 1. 5 years
 - 2. 90 days
 - 3. 180 days
 - 4. 365 days

Question ID : 9895805374

Chosen Option : 3

Q.4
8 A Eukaryotic cell has membrane bound organelles, including a nucleus, which allow cellular processes to be carried out in _____.

- Ans
- 1. Bifurcation
 - 2. Isolation
 - 3. Inclusion
 - 4. Cassation

Question ID : 9895805367

Chosen Option : 3

Q.4
9 The 'Gandhara School of Art' was developed under the _____ Dynasty.

- Ans
- 1. Kushana
 - 2. Maurya
 - 3. Nanda
 - 4. Chola

Question ID : 9895805359

Chosen Option : 2

Q.5
0 The Constituent Assembly met for the first time in _____.

- Ans
- 1. 1945
 - 2. 1946
 - 3. 1947
 - 4. 1948

Question ID : 9895805372
Chosen Option : 3

Q.5
1 Three persons A, B and C started a business with their shares in the ratio 3 : 4 : 5. After 4 months B withdrew his 50% share and C withdrew his 20% share 4 months prior to completion of the year. If total profit in the year is ₹ 31,000 then find the share of A in the profit.

- Ans
- 1. ₹ 7750
 - 2. ₹ 9000
 - 3. ₹ 9300
 - 4. ₹ 10330

Question ID : 9895805676
Chosen Option : 1

Q.5
2 Marked price of an article is ₹ 8840. If discount of 35% is given on the article, then what will be the selling price of the article?

- Ans
- 1. ₹ 6324
 - 2. ₹ 6176
 - 3. ₹ 6548
 - 4. ₹ 5746

Question ID : 9895805670
Chosen Option : 2

Q.5
3 Anil, Dinesh and Deepak together can complete a work in 40 days. Anil and Dinesh together can complete the same work in 50 days. In how many days Deepak alone can complete the same work?

- Ans
- 1. 90 days
 - 2. 200 days
 - 3. 150 days
 - 4. 75 days

Question ID : 9895805680
Chosen Option : 2

Q.5
4 Suraj covers a distance of 18 km in 12 minutes. If his speed is decreases by 30 km/hr, then how much time will Suraj take to cover the same distance?

- Ans
- 1. 12 minutes
 - 2. 16 minutes
 - 3. 20 minutes
 - 4. 18 minutes

Question ID : 9895805683
Chosen Option : 4

Q.5
5 The difference between the simple interest and compound interest (interest is compounded half yearly) on a sum at the rate of 25% per annum for one year is ₹ 4375. What will be the principal?

Ans

- 1. ₹ 280000
- 2. ₹ 85000
- 3. ₹ 80000
- 4. ₹ 75000

Question ID : 9895805679
Chosen Option : 4

Q.5 A shopkeeper sells two articles, one of them with a profit of 10% for ₹ 1100 and another with a loss of 10% for ₹ 900.
6 What will be the profit or loss percent?

- Ans**
- 1. ₹ 1000
 - 2. Neither profit nor loss
 - 3. 20% profit
 - 4. 20% loss

Question ID : 9895805674
Chosen Option : 3

Q.5 A bag has ₹ 785 in the denomination of ₹ 2, ₹ 5 and ₹ 10 coins. The coins are in the ratio of 6 : 9 : 10. How many coins of ₹ 5 are in the bag?
7

- Ans**
- 1. 60
 - 2. 12
 - 3. 45
 - 4. 24

Question ID : 9895805675
Chosen Option : 4

Q.5 The table given below shows the number of students enrolled in different courses of different colleges.
8

Colleges	Courses			
	B1	B2	B3	B4
C1	65	56	65	103
C2	68	58	71	112
C3	72	54	88	125
C4	76	52	75	120
C5	69	60	79	126

Which college has the highest average number of students per course?

- Ans**
- 1. C4
 - 2. C2
 - 3. C3
 - 4. C5

Question ID : 9895805688
Chosen Option : 1

Q.5 In the table given below Marks of 4 students in 5 different Subjects are given. Total Marks of each subject is 100.
9

	Math	English	Hindi	Social Science	Science
S1	98	60	85	75	92
S2	97	65	80	80	90
S3	95	70	85	70	95
S4	96	62	70	80	90

What is the difference in average marks of students S1 and S4?

- Ans**
- 1. 1.4
 - 2. 3.4
 - 3. 2
 - 4. 2.4

Question ID : 9895805689
Chosen Option : 3

Q.6
0 If 30% of x is same as 40% of y then what is $y : x$?

- Ans
- 1. 4 : 3
 - 2. 3 : 4
 - 3. 7 : 4
 - 4. 4 : 7

Question ID : 9895805677
Chosen Option : 1

Q.6
1 Three cubes each of sides 7 cm are joined end to end. Find the surface area of the resulting solid.

- Ans
- 1. 686 cm²
 - 2. 686 cm
 - 3. 882 cm²
 - 4. 882 cm

Question ID : 9895805685
Chosen Option : 3

Q.6
2 If a 32 year old man is replaced by a new man, then the average age of 42 men increases by 1 year. What is the age of the new man?

- Ans
- 1. 72 years
 - 2. 75 years
 - 3. 74 years
 - 4. 73 years

Question ID : 9895805669
Chosen Option : 3

Q.6
3 A solid toy is in the form of hemisphere surmounted by right circular cone. Height of the cone is 4 cm and diameter of the base is 6 cm. What will be the surface area of the toy?

- Ans
- 1. $\frac{660}{7}$ cm²
 - 2. $\frac{528}{7}$ cm²
 - 3. $\frac{726}{7}$ cm²
 - 4. $\frac{66}{7}$ cm²

Question ID : 9895805684
Chosen Option : 2

Q.6
4 What is the value of $\left[100 \div 50 - 25 - 55 \text{ of } \left(\frac{1}{3} \times \frac{11}{9}\right)\right]$?

- Ans
- 1. $-\frac{1156}{27}$
 - 2. $-\frac{1382}{27}$

3. $-\frac{1321}{27}$

4. $-\frac{1226}{27}$

Question ID : 9895805666

Chosen Option : 2

Q.6 From a solid cylinder with base diameter 14 cm and height 20 cm hemispherical parts were cut from both the ends of the cylinder. Find the volume of the resultant object?

Ans 1. $\frac{4312}{3} \text{ cm}^3$

2. $\frac{4928}{3} \text{ cm}^3$

3. $\frac{9240}{3} \text{ cm}^3$

4. $\frac{13552}{3} \text{ cm}^3$

Question ID : 9895805686

Chosen Option : 2

Q.6 A sum of ₹ 4000 is lent on simple interest at the rate of 10% per annum. Simple interest for 5 years is how much more than the simple interest for 3 years?

Ans 1. ₹ 400

2. ₹ 600

3. ₹ 800

4. ₹ 1200

Question ID : 9895805678

Chosen Option : 1

Q.6 14 observations are 10, 11, 11, 12, 13, 14, 12, 13, 10, 12, 12, 14, 14 and 15.

What is the median of the given observations?

Ans 1. 12

2. 13

3. 14

4. 10

Question ID : 9895805671

Chosen Option : 4

Q.6 If Vijay is travelling at the speed of 17.5 m/s, then how much distance will Vijay cover in 26 hours?

Ans 1. 1474 km

2. 1562 km

3. 1572 km

4. 1638 km

Question ID : 9895805682

Chosen Option : 3

Q.6
9

The table given below shows the number of students enrolled in different courses of different colleges.

Colleges	Courses			
	B1	B2	B3	B4
C1	65	56	65	103
C2	68	58	71	112
C3	72	54	88	125
C4	76	52	75	120
C5	69	60	79	126

What is the average number of students per college enrolled in course B2?

- Ans
- 1. 60
 - 2. 56
 - 3. 58
 - 4. 53

Question ID : 9895805687
Chosen Option : 1

Q.7 Product of Highest Common Factor and Least Common Multiple of two numbers is 216. If one of the number is 12, then what will be the ratio of these two numbers?

- Ans
- 1. 3 : 5
 - 2. 1 : 6
 - 3. 2 : 3
 - 4. 1 : 2

Question ID : 9895805665
Chosen Option : 2

Q.7 What is the value of $28 \div (11 - 4) + 384 \div (15 + 16 \div 4 + 4)$?

- Ans
- 1. $\frac{472}{23}$
 - 2. $\frac{476}{23}$
 - 3. $\frac{512}{23}$
 - 4. $\frac{524}{23}$

Question ID : 9895805667
Chosen Option : 1

Q.7 If 40% of a number is 105 more than the one-fourth of that number, then what will be the difference between the number and 35% of the number?

- Ans
- 1. 315
 - 2. 495
 - 3. 455
 - 4. 375

Question ID : 9895805672
Chosen Option : 1

Q.7 P alone can complete a work in 16 days and Q alone can complete the same work in 20 days. P and Q start the work together but Q leaves the work 7 days before the completion of work. In how many days the total work will be completed?

- Ans
- 1. 9 days
 - 2. 14 days
 - 3. 12 days

4. 18 days

Question ID : 9895805681
Chosen Option : 3

Q.7 The average monthly income of P and Q is ₹ 20000. The average monthly income of Q and R is ₹ 40000. Monthly income of R is how much more than monthly income of P?

- Ans 1. ₹ 40000
 2. ₹ 80000
 3. ₹ 20000
 4. ₹ 25000

Question ID : 9895805668
Chosen Option : 3

Q.7 Raju purchased glasses at the rate of ₹ 15 per glass and sold them at the rate of ₹ 12 per glass. On selling 42 glasses, what will be the loss percentage?

- Ans 1. 33.33%
 2. 25%
 3. 20%
 4. 14.28%

Question ID : 9895805673
Chosen Option : 2

Section : English Language

Q.1 Select the option that means the same as the given idiom.

To miss the boat

- Ans 1. To miss an opportunity
 2. To miss the journey by boat
 3. To fail to complete the work
 4. To decide to travel by air

Question ID : 9895805223
Chosen Option : 4

Q.2 Select the antonym of the given word

CONTRARY

- Ans 1. Predetermined
 2. Agreeable
 3. Balanced
 4. Neutral

Question ID : 9895805221
Chosen Option : 4

Q.3 Select the most appropriate word to fill in the blank.

India's Republic Day Parade had, among the main _____, an all-women's marching contingent.

- Ans
- 1. displays
 - 2. spectacle
 - 3. demonstrations
 - 4. attractions

Question ID : 9895805229
Chosen Option : 4

Q.4 From the given options, identify the segment in the sentence which contains the grammatical error.

Having worked for the whole day, you shall have taken some rest and begun again.

- Ans
- 1. Having worked for
 - 2. some rest and begun again
 - 3. the whole day
 - 4. you should have taken

Question ID : 9895805204
Chosen Option : 4

Q.5 Select the most appropriate option to substitute the underlined segment in the given sentence. If there is no need to substitute it, select No improvement.

In the interview held recently, I answer the questions as best as I could.

- Ans
- 1. I answer the question as best as I could.
 - 2. I answered the questions as best as I could.
 - 3. I answered the question as best as I can.
 - 4. No improvement.

Question ID : 9895805209
Chosen Option : 3

Q.6 From the given options, identify the segment in the sentence which contains the grammatical error.

The researchers have found that all species makes a constructive contribution to the ecology of the earth.

- Ans
- 1. a constructive contribution to
 - 2. that all species makes
 - 3. the ecology of the earth.
 - 4. The researchers have found

Question ID : 9895805205
Chosen Option : 2

Q.7 Select the word which means the same as the group of words given.

The method and practice of teaching

- Ans
- 1. Psychology
 - 2. Methodology
 - 3. Pedagogy
 - 4. Philosophy

Question ID : 9895805224

Chosen Option : 2

Q.8 Select the most appropriate option to substitute the underlined segment in the given sentence. If there is no need to substitute it, select No improvement.

As you can see from my resume, I am working in Mumbai since 2016.

- Ans
- 1. No improvement.
 - 2. I am work in Mumbai since 2016.
 - 3. I am working in Mumbai from 2016.
 - 4. I have been working in Mumbai since 2016.

Question ID : 9895805207

Chosen Option : 4

Q.9 From the given options, identify the segment in the sentence which contains the grammatical error.

One could argue that these are the compulsions of parliamentary democracy for smooth functioning for the State.

- Ans
- 1. these are the compulsions
 - 2. of parliamentary democracy
 - 3. functioning for the State.
 - 4. One could argue that

Question ID : 9895805206

Chosen Option : 2

Q.10 Select the word which means the same as the group of words given.

A person who presents a radio/television programme

- Ans
- 1. Alchemist
 - 2. Reporter
 - 3. Anarchist
 - 4. Anchor

Question ID : 9895805225

Chosen Option : 2

Comprehension:

In the following passage some words have been deleted. Fill in the blanks with the help of the alternatives given.

Given that the availability of safe drinking water touches the lives of everyone, the _____ (1) of Safe Drinking Water Mission can hardly be underestimated. Undoubtedly, this is one of the most _____ (2) public goods problems to solve. The private solution of reaching out for bottled water due to risks posed by tap water is a _____ (3) one. Even the poor are forced to choose between risking hospital expenses and buying bottled water. Taking into consideration the _____ (4) scenario, it is the duty of every citizen to find out possible and inexpensive means to _____ (5) that safe drinking water is available to all.

SubQuestion No : 11

Q.1
1

Select the most appropriate option that will fill in the blank number 1.

- Ans 1. significance
 2. safety
 3. progress
 4. consequence

Question ID : 9895805213
Chosen Option : 2

Comprehension:

In the following passage some words have been deleted. Fill in the blanks with the help of the alternatives given.

Given that the availability of safe drinking water touches the lives of everyone, the _____ (1) of Safe Drinking Water Mission can hardly be underestimated. Undoubtedly, this is one of the most _____ (2) public goods problems to solve. The private solution of reaching out for bottled water due to risks posed by tap water is a _____ (3) one. Even the poor are forced to choose between risking hospital expenses and buying bottled water. Taking into consideration the _____ (4) scenario, it is the duty of every citizen to find out possible and inexpensive means to _____ (5) that safe drinking water is available to all.

SubQuestion No : 12

Q.1
2 Select the most appropriate option that will fill in the blank number 2.

- Ans 1. difficult
 2. complete
 3. whole
 4. ready

Question ID : 9895805214
Chosen Option : 1

Comprehension:

In the following passage some words have been deleted. Fill in the blanks with the help of the alternatives given.

Given that the availability of safe drinking water touches the lives of everyone, the _____ (1) of Safe Drinking Water Mission can hardly be underestimated. Undoubtedly, this is one of the most _____ (2) public goods problems to solve. The private solution of reaching out for bottled water due to risks posed by tap water is a _____ (3) one. Even the poor are forced to choose between risking hospital expenses and buying bottled water. Taking into consideration the _____ (4) scenario, it is the duty of every citizen to find out possible and inexpensive means to _____ (5) that safe drinking water is available to all.

SubQuestion No : 13

Q.1
3 Select the most appropriate option that will fill in the blank number 3.

- Ans
- 1. simple
 - 2. material
 - 3. factual
 - 4. costly

Question ID : 9895805215
Chosen Option : 2

Comprehension:

In the following passage some words have been deleted. Fill in the blanks with the help of the alternatives given.

Given that the availability of safe drinking water touches the lives of everyone, the _____ (1) of Safe Drinking Water Mission can hardly be underestimated. Undoubtedly, this is one of the most _____ (2) public goods problems to solve. The private solution of reaching out for bottled water due to risks posed by tap water is a _____ (3) one. Even the poor are forced to choose between risking hospital expenses and buying bottled water. Taking into consideration the _____ (4) scenario, it is the duty of every citizen to find out possible and inexpensive means to _____ (5) that safe drinking water is available to all.

SubQuestion No : 14

Q.1
4 Select the most appropriate option that will fill in the blank number 4.

- Ans
- 1. public
 - 2. present
 - 3. general
 - 4. rural

Question ID : 9895805216
Chosen Option : 1

Comprehension:

In the following passage some words have been deleted. Fill in the blanks with the help of the alternatives given.

Given that the availability of safe drinking water touches the lives of everyone, the _____ (1) of Safe Drinking Water Mission can hardly be underestimated. Undoubtedly, this is one of the most _____ (2) public goods problems to solve. The private solution of reaching out for bottled water due to risks posed by tap water is a _____ (3) one. Even the poor are forced to choose between risking hospital expenses and buying bottled water. Taking into consideration the _____ (4) scenario, it is the duty of every citizen to find out possible and inexpensive means to _____ (5) that safe drinking water is available to all.

SubQuestion No : 15

Q.1
5 Select the most appropriate option that will fill in the blank number 5.

- Ans
- 1. ensure
 - 2. endorse

3. confirm

4. assure

Question ID : 9895805217

Chosen Option : 3

Q.1
6 Select the correctly spelt word.

Ans 1. Buraucracy

2. Bureaucrasy

3. Bureucracy

4. Bureaucracy

Question ID : 9895805226

Chosen Option : 1

Q.1
7 Select the synonym of the given word.

MITIGATE

Ans 1. Improve

2. Excuse

3. Lessen

4. Moderate

Question ID : 9895805219

Chosen Option : 2

Q.1
8 Select the synonym of the given word.

INDUSTRIOUS

Ans 1. Prompt

2. Fruitful

3. Diligent

4. Practical

Question ID : 9895805218

Chosen Option : 4

Q.1
9 Select the most appropriate option to substitute the underlined segment in the given sentence. If there is no need to substitute it, select No improvement.

The river is flooded and it has overflown its banks.

Ans 1. it overflowing its banks.

2. it has overflow its banks.

3. No improvement.

4. it overflow its banks.

Question ID : 9895805208

Chosen Option : 1

Q.2
0

Select the most appropriate option to fill in the blank.

We need not worry about anything _____ his commitment to the work he is assigned.

- Ans
- 1. access
 - 2. accept
 - 3. expect
 - 4. except

Question ID : 9895805211
Chosen Option : 4

Q.2
1 Select the antonym of the given word

SERENE

- Ans
- 1. Splendid
 - 2. Superb
 - 3. Showy
 - 4. Stressed

Question ID : 9895805220
Chosen Option : 4

Q.2
2 Select the most appropriate option to fill in the blank.

If an individual keeps his fingers crossed he _____ for the best.

- Ans
- 1. reacts
 - 2. suspects
 - 3. hopes
 - 4. responds

Question ID : 9895805210
Chosen Option : 3

Q.2
3 Select the correctly spelt word.

- Ans
- 1. Mathmetics
 - 2. Mathamatics
 - 3. Mathametics
 - 4. Mathematics

Question ID : 9895805227
Chosen Option : 4

Q.2
4 Select the most appropriate option to fill in the blank.

Sometimes it is necessary for an author to know what is going on in the minds of his _____.

- Ans
- 1. listeners
 - 2. viewers
 - 3. audience
 - 4. characters

Question ID : 9895805228
Chosen Option : 2

Q.2 Select the option that means the same as the given idiom.

To set aside

- Ans
- 1. To move sideways
 - 2. to reject an offer
 - 3. To stop temporarily
 - 4. To finish a work

Question ID : 9895805222
Chosen Option : 4

Section : Hindi Language

Q.1 रिक्त स्थान को भरने के लिए उपयुक्त शब्द का चयन करें।

मुझे विश्वास है कि अच्छे _____ जरूर आएँगे।

- Ans
- 1. दोपहर
 - 2. दिन
 - 3. रात
 - 4. सुबह

Question ID : 9895805519
Chosen Option : --

Q.2 निम्नलिखित में से उस विकल्प का चयन करें जो 'गड़े मुर्दे उखाड़ना' मुहाबरे का अर्थ व्यक्त करता है।

- Ans
- 1. गड़े हुए मुर्दों को कहीं और ले जाना
 - 2. पुरानी बातें उठाना
 - 3. नई कहानियाँ बनाना
 - 4. मुर्दों को कब्र से उठाना

Question ID : 9895805530
Chosen Option : --

Q.3 रिक्त स्थान को भरने के लिए उपयुक्त शब्द का चयन करें।

दर्जी कपड़े _____ है।

- Ans
- 1. धुनता
 - 2. बुनता
 - 3. धोता
 - 4. सिलता

Question ID : 9895805516
Chosen Option : --

Q.4 दिए गए वाक्य में रेखांकित खंड को प्रतिस्थापित करने के लिए उपयुक्त विकल्प का चयन करें।
जब वह मुझसे मिलती थी तब मेरे चरणों छूने का प्रयास करती थी।

- Ans
- 1. चरणों छूने का
 - 2. चरण छूना के
 - 3. चरण छूने का
 - 4. चरणों छूना का

Question ID : 9895805514
Chosen Option : --

Q.5 दिए गए शब्द के पर्यायवाची शब्द का चयन करें।

रात्रि

- Ans
- 1. हिमानी
 - 2. रजनी
 - 3. ज्ञानी
 - 4. गजनी

Question ID : 9895805528
Chosen Option : --

Q.6 दिए गए शब्द का विलोम चुनें।

प्रवेश

- Ans
- 1. पास
 - 2. निकास
 - 3. आना
 - 4. दूर

Question ID : 9895805526
Chosen Option : --

Q.7 दिए गए वाक्य का वह भाग ज्ञात करें जिसमें कोई त्रुटि है।

उद्योग-धंधों के विस्तार से वृक्षों की संख्या से निरंतर गिरावट आ रही है।

- Ans
- 1. विस्तार से
 - 2. वृक्षों की संख्या से
 - 3. उद्योग-धंधों के
 - 4. निरंतर गिरावट आ रही है।

Question ID : 9895805511
Chosen Option : --

Q.8 दिये गये वाक्यांश के लिए एक शब्द दीजिये।

जिसमें जानने की इच्छा हो

- Ans
- 1. पिपासु
 - 2. जानकारी
 - 3. जिज्ञासु
 - 4. लोलुप

Question ID : 9895805533
Chosen Option : --

Q.9 सही वर्तनी वाले शब्द का चयन करें।

- Ans
- 1. उपरियुत
 - 2. उपर्युक्त
 - 3. उपरीयुक्त
 - 4. ऊर्पयुक्त

Question ID : 9895805534
Chosen Option : --

Q.10 दिए गए वाक्य का वह भाग ज्ञात करें जिसमें कोई त्रुटि है।

निश्चल और सरल बचपन की खुशियाँ चेहरे पर तैर रहा हैं।

- Ans
- 1. बचपन की खुशियाँ
 - 2. तैर रहा हैं।
 - 3. चेहरे पर
 - 4. निश्चल और सरल

Question ID : 9895805512
Chosen Option : --

Q.11 रिक्त स्थान को भरने के लिए उपयुक्त शब्द का चयन करें।

आभूषण मनुष्य की _____ बढ़ाते हैं।

- Ans
- 1. प्रेम
 - 2. शोभा
 - 3. शक्ति
 - 4. तेज

Question ID : 9895805517
Chosen Option : --

Q.1
2 दिए गए वाक्य में रेखांकित खंड को प्रतिस्थापित करने के लिए उपयुक्त विकल्प का चयन करें।

हम जो भी कार्य करें वह सावधानी पूर्वकता होना चाहिए।

Ans

- 1. सावधानी पूर्व होना चाहिए।
- 2. सावधानपूर्वक होना चाहिए।
- 3. सावधानतापूर्वक होना चाहिए।
- 4. सावधानीपूर्वक होना चाहिए।

Question ID : 9895805513
Chosen Option : --

Q.1
3 सही वर्तनी वाले शब्द का चयन करें।

Ans

- 1. घुड़दौड़
- 2. धूड़दौड़
- 3. घोड़दौड़
- 4. घुडदौड़

Question ID : 9895805535
Chosen Option : --

Q.1
4 दिये गये वाक्यांश के लिए एक शब्द दीजिये।

जिसका कोई शत्रु न हो

Ans

- 1. मित्र
- 2. सहचर
- 3. अजातशत्रु
- 4. बंधु

Question ID : 9895805532
Chosen Option : --

Q.1
5 दिए गए शब्द के पर्यायवाची शब्द का चयन करें।

सरस्वती

Ans

- 1. माता
- 2. नेत्री
- 3. शारदा
- 4. देवी

Question ID : 9895805529
Chosen Option : --

Q.1
6

दिए गए वाक्य का वह भाग ज्ञात करें जिसमें कोई त्रुटि है।

प्रकृति केवल निर्माण ही नहीं, ध्वंस भी करता है।

Ans

- 1. प्रकृति केवल
- 2. ध्वंस भी
- 3. निर्माण ही नहीं,
- 4. करता है।

Question ID : 9895805510
Chosen Option : --

Q.1
7 रिक्त स्थान को भरने के लिए उपयुक्त शब्द का चयन करें।

उसने _____ से पत्र लिखा।

Ans

- 1. कलम
- 2. कागज
- 3. मोबाइल
- 4. किताब

Question ID : 9895805518
Chosen Option : --

Q.1
8 दिए गए शब्द का विलोम चुनें।

उत्तम

Ans

- 1. अधम
- 2. अति
- 3. बढ़िया
- 4. अधर

Question ID : 9895805527
Chosen Option : --

Comprehension:

निम्नलिखित गद्यांश के रिक्त स्थानों की पूर्ति गद्यांश के नीचे दिए गए प्रश्नों के अनुसार कीजिए -

अपना स्वभाव छोड़ना किसी के _____ (1) में नहीं है। दुष्ट एवं स्वार्थी को पहचान कर वैसे ही चलना चाहिए जैसे कीचड़ भरे मार्ग में हम बचते हुए चलते हैं। दुष्ट व्यक्ति कुछ पल के लिए अपना _____ (2) बदल सकता है परन्तु _____ (3) मिलते ही वह अपनी दुष्टता पर उतारू हो जाएगा। करेला मीठा नहीं हो सकता एवं साँप विष की जगह _____ (4) नहीं उगल सकता। पाँचों _____ (5) बराबर नहीं होती।

SubQuestion No : 19

Q.1 गद्यांश में संकेतित रिक्त स्थान (1) के लिए उपयुक्त शब्द होगा -

- Ans
- 1. दिमाग
 - 2. हाथ
 - 3. पैर
 - 4. आँख

Question ID : 9895805521
Chosen Option : --

Comprehension:

निम्नलिखित गद्यांश के रिक्त स्थानों की पूर्ति गद्यांश के नीचे दिए गए प्रश्नों के अनुसार कीजिए -

अपना स्वभाव छोड़ना किसी के _____ (1) में नहीं है। दुष्ट एवं स्वार्थी को पहचान कर वैसे ही चलना चाहिए जैसे कीचड़ भरे मार्ग में हम बचते हुए चलते हैं। दुष्ट व्यक्ति कुछ पल के लिए अपना _____ (2) बदल सकता है परन्तु _____ (3) मिलते ही वह अपनी दुष्टता पर उतारू हो जाएगा। करेला मीठा नहीं हो सकता एवं साँप विष की जगह _____ (4) नहीं उगल सकता। पाँचों _____ (5) बराबर नहीं होती।

SubQuestion No : 20

Q.2 गद्यांश में संकेतित रिक्त स्थान (1) के लिए उपयुक्त शब्द होगा -

- Ans
- 1. घूमना
 - 2. नाचना
 - 3. व्यवहार
 - 4. सोना

Question ID : 9895805522
Chosen Option : --

Comprehension:

निम्नलिखित गद्यांश के रिक्त स्थानों की पूर्ति गद्यांश के नीचे दिए गए प्रश्नों के अनुसार कीजिए -

अपना स्वभाव छोड़ना किसी के _____ (1) में नहीं है। दुष्ट एवं स्वार्थी को पहचान कर वैसे ही चलना चाहिए जैसे कीचड़ भरे मार्ग में हम बचते हुए चलते हैं। दुष्ट व्यक्ति कुछ पल के लिए अपना _____ (2) बदल सकता है परन्तु _____ (3) मिलते ही वह अपनी दुष्टता पर उतारू हो जाएगा। करेला मीठा नहीं हो सकता एवं साँप विष की जगह _____ (4) नहीं उगल सकता। पाँचों _____ (5) बराबर नहीं होती।

SubQuestion No : 21

Q.2
1 गद्यांश में संकेतित रिक्त स्थान (1) के लिए उपयुक्त शब्द होगा -

- Ans
- 1. अवसर
 - 2. बाजार
 - 3. घर
 - 4. नौकरी

Question ID : 9895805523
Chosen Option : --

Comprehension:

निम्नलिखित गद्यांश के रिक्त स्थानों की पूर्ति गद्यांश के नीचे दिए गए प्रश्नों के अनुसार कीजिए -

अपना स्वभाव छोड़ना किसी के _____ (1) में नहीं है। दुष्ट एवं स्वार्थी को पहचान कर वैसे ही चलना चाहिए जैसे कीचड़ भरे मार्ग में हम बचते हुए चलते हैं। दुष्ट व्यक्ति कुछ पल के लिए अपना _____ (2) बदल सकता है परन्तु _____ (3) मिलते ही वह अपनी दुष्टता पर उतारू हो जाएगा। करेला मीठा नहीं हो सकता एवं साँप विष की जगह _____ (4) नहीं उगल सकता। पाँचों _____ (5) बराबर नहीं होती।

SubQuestion No : 22

Q.2
2 गद्यांश में संकेतित रिक्त स्थान (1) के लिए उपयुक्त शब्द होगा -

- Ans
- 1. दूध

2. अमृत

3. पानी

4. कीचड़

Question ID : 9895805524

Chosen Option : --

Comprehension:

निम्नलिखित गद्यांश के रिक्त स्थानों की पूर्ति गद्यांश के नीचे दिए गए प्रश्नों के अनुसार कीजिए -

अपना स्वभाव छोड़ना किसी के _____ (1) में नहीं है। दुष्ट एवं स्वार्थी को पहचान कर वैसे ही चलना चाहिए जैसे कीचड़ भरे मार्ग में हम बचते हुए चलते हैं। दुष्ट व्यक्ति कुछ पल के लिए अपना _____ (2) बदल सकता है परन्तु _____ (3) मिलते ही वह अपनी दुष्टता पर उतारू हो जाएगा। करेला मीठा नहीं हो सकता एवं साँप विष की जगह _____ (4) नहीं उगल सकता। पाँचों _____ (5) बराबर नहीं होती।

SubQuestion No : 23

Q.2
3 गद्यांश में संकेतित रिक्त स्थान (1) के लिए उपयुक्त शब्द होगा -

Ans 1. उँगलियाँ

2. नाक

3. कान

4. आँख

Question ID : 9895805525

Chosen Option : --

Q.2
4 निम्नलिखित में से उस विकल्प का चयन करें जो 'तेल निकालना' मुहावरे का अर्थ व्यक्त करता है।

Ans 1. तेल के कुँ से तेल बाहर निकालना

2. कम काम लेना

3. बहुत अधिक काम करा लेना

4. कम काम करना

Question ID : 9895805531

Chosen Option : --

Q.2
5 दिए गए वाक्य में रेखांकित खंड को प्रतिस्थापित करने के लिए उपयुक्त विकल्प का चयन करें।

जिस दिन मैं उस संत से मिली, उनके वाणी से मैं प्रभावित हो गई।

Ans 1. उनसे वाणी की

2. उनका वाणी से

✘ 3. उनकी वाणी से

✘ 4. उनमें वाणी से

Question ID : 9895805515

Chosen Option : --

GovtJobsAlert.In