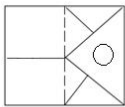


## Constable (GD) in CAPFs, NIA, SSF and Rifleman (GD) in Assam Rifles Examination, 2018

Roll No. :	<a href="http://www.GovtJobsAlert.In">www.GovtJobsAlert.In</a>
Registration No.	
Name :	
Exam Venue :	GATE institute
Exam Time :	9:00 AM - 10:30 AM
Exam Date :	19/02/2019

Section : General Section

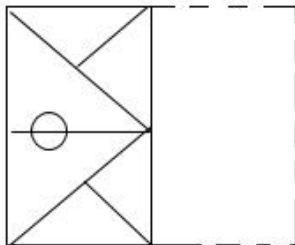
**Q.1** How would the pattern given on the square transparent sheet marked 'X' look when the sheet is folded along the dotted line?



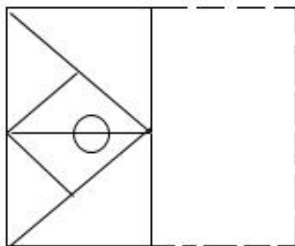
(X)

Ans

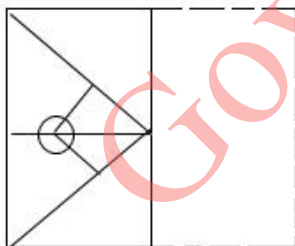
✓ 1.



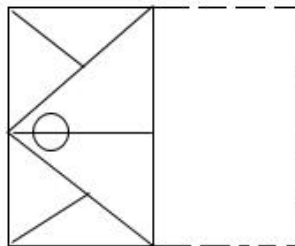
✗ 2.



✗ 3.



✗ 4.



Question ID : 9895803873  
Chosen Option : 3

**Q.2** Four words have been given out of which three are alike in some manner, while one is different. Choose the odd one

- Ans
- ✗ 1. Joy
  - ✗ 2. Fear

3. Anger

4. Calm

Question ID : 9895803852

Chosen Option : 2

**Q.3** The statements below are followed by two conclusions labeled I and II. Assuming that the information in the statements is true, even if it appears to be at variance with generally established facts, decide which conclusion(s) logically and definitely follow(s) from the information given in the statements.

**Statements:**

1. Some flowers are white.
2. Some white objects are round.

**Conclusions:**

- I. Some flowers are round.
- II. Every round object is either white or a flower.

- Ans**
- 1. Only conclusion II follows
  - 2. Both conclusions I and II follow
  - 3. Only conclusion I follows
  - 4. Neither conclusion I nor II follows

Question ID : 9895803861

Chosen Option : 4

**Q.4** If in a code language, HEAD = 4158 and PASTE = 52019116, then TRICK = ?

- Ans**
- 1. 11391820
  - 2. 31191820
  - 3. 11391718
  - 4. 11932018

Question ID : 9895803857

Chosen Option : 2

**Q.5** DAWN is related to DUSK in the same way as INAUGURATION is related to:

- Ans**
- 1. MEETING
  - 2. VALEDICTION
  - 3. CONCLUSION
  - 4. INVITATION

Question ID : 9895803853

Chosen Option : 4

**Q.6** Six houses A, B, C, D, E and F are located in two rows facing each other with three houses in each row. F is opposite C, which is to the left of E. D is to the right of A. Which house is facing B?

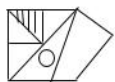
- Ans**
- 1. D
  - 2. A
  - 3. C
  - 4. E

Question ID : 9895803859

Chosen Option : 3

**Q.7**

Select the correct mirror image of the following figure when the mirror is placed to its right.



Ans



Question ID : 9895803871  
Chosen Option : 1

Q.8 Select the correct option that will fill in the blank and complete the series.

2, 3, 4, 8, 16, 25, 52, \_\_\_\_\_

Ans  1. 114

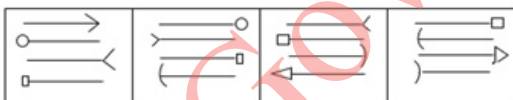
2. 85

3. 68

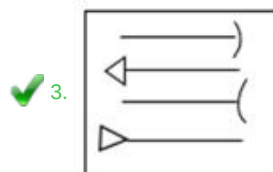
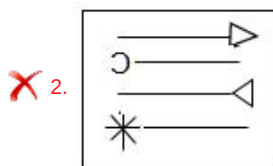
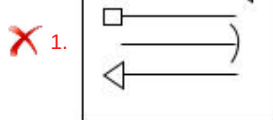
4. 79

Question ID : 9895803863  
Chosen Option : 1

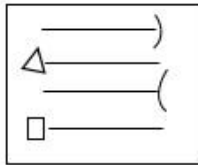
Q.9 Choose the figure from the options that would follow next in the given series.



Ans



✗ 4.



Question ID : 9895803869  
Chosen Option : 1

Q.1 Select the option that is related to the third term in the same way as the second term is related to the first term.

0 BDFH : AFCL :: FHJL : ?

- Ans
- ✗ 1. EIGP
  - ✗ 2. EJFO
  - ✗ 3. HFGN
  - ✓ 4. EJGP

Question ID : 9895803855  
Chosen Option : 2

Q.1 Which of the following Venn diagrams correctly represents the relationships among the classes:

1

Educated, Mothers, Employed

Ans

- ✗ 1.
- ✗ 2.
- ✗ 3.
- ✓ 4.

Question ID : 9895803874  
Chosen Option : 2

Q.1 Four numbers have been given out of which three are alike in some manner, while one is different. Choose the odd one.

2

- Ans
- ✗ 1. 84
  - ✗ 2. 91
  - ✗ 3. 42
  - ✓ 4. 55

Question ID : 9895803866  
Chosen Option : 3

Q.1 <sub>3</sub> If in a code language SYMPHONY is coded as ZOPIQNZT, then THURSDAY would be coded as:

- Ans
- 1. UIVSTEBZ
  - 2. ZBETSIVU
  - 3. XZCRQTGS
  - 4. ZBETSVIU

Question ID : 9895803856  
Chosen Option : 1

Q.1 <sub>4</sub> Select the correct option that will fill in the blank and complete the series.

2, 5, 7, 12, ?, 31, 50

- Ans
- 1. 18
  - 2. 19
  - 3. 25
  - 4. 21

Question ID : 9895803864  
Chosen Option : 3

Q.1 <sub>5</sub> The statements below are followed by two conclusions labeled I and II. Assuming that the information in the statements is true, even if it appears to be at variance with generally established facts, decide which conclusion(s) logically and definitely follow(s) from the information given in the statements.

Statements:

- 1. Some mangoes are fruits.
- 2. All fruits are sweet.

Conclusions:

- I. Some sweet objects are mangoes.
- II. All sweet objects are fruits.
- III. Some mangoes are neither fruits nor sweet.

- Ans
- 1. Only conclusions I and III follow
  - 2. Only conclusions II and III follow
  - 3. Only conclusions I and II follow
  - 4. Only conclusion I follows

Question ID : 9895803862  
Chosen Option : 4

Q.1 <sub>6</sub> Select the option that is related to the third term in the same way as the second term is related to the first term.

Torture : Cruelty :: Forgiveness : ?

- Ans
- 1. Politeness
  - 2. Generosity
  - 3. Gratitude
  - 4. Excuse

Question ID : 9895803854  
Chosen Option : 1

Q.1 <sub>7</sub>

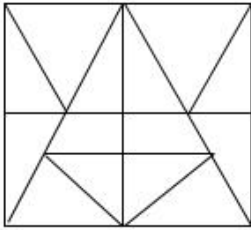
Choose the figure from the options in which the figure marked 'X' is embedded.



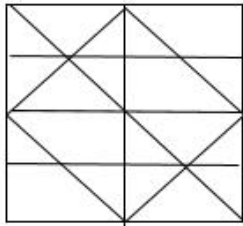
(X)

Ans

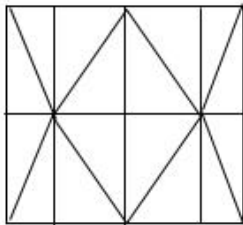
1.



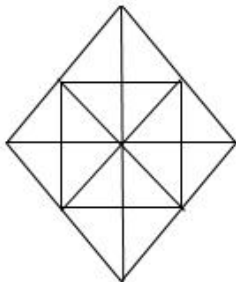
2.



3.



4.



Question ID : 9895803872  
Chosen Option : 3

Q.1 Pick the odd pair out.

1. 14-41

2. 17-52

3. 23-32

4. 12-21

Question ID : 9895803865  
Chosen Option : 1

Q.1 V, X, Y and Z are playing cards. X is to the left of Y and V is to the right of Z. If X is facing West, which direction is V facing?

1. North

2. South

3. West

4. East

Question ID : 9895803858

Chosen Option : 4

Q.2 Which two signs should be interchanged to make the following equation correct?

$$12 + 16 \div 8 \times 4 - 8 = 24$$

- Ans
- 1. + and ×
  - 2. × and -
  - 3. ÷ and ×
  - 4. - and ÷

Question ID : 9895803868

Chosen Option : 2

Q.2 Which one of the following four-letter clusters does NOT belong to the group?

- Ans
- 1. CXWD
  - 2. FUSG
  - 3. DWTG
  - 4. BYWD

Question ID : 9895803851

Chosen Option : 2

Q.2 Select the correct option that will fill in the blank and complete the series.

cab, gef, ljk, rpq, \_\_\_\_\_

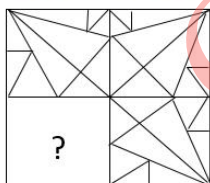
- Ans
- 1. ywx
  - 2. yxw
  - 3. zxy
  - 4. wvu

Question ID : 9895803850

Chosen Option : 4

Q.2 Select the figure which when placed in the blank space of the figure marked 'X' would complete the pattern.

3



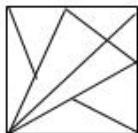
(X)

Ans

- 1.
- 2.
- 3.



4.



Question ID : 9895803870  
Chosen Option : 1

Q.2 Among six objects P, Q, R, S, T and U, Q is heavier than R but lighter than T. S is lighter than T but heavier than U. P is lighter than Q but heavier than S. Which is the second heaviest object?

- Ans
- 1. Q
  - 2. T
  - 3. P
  - 4. S

Question ID : 9895803860  
Chosen Option : 2

Q.2 The numbers in the following set are related in a certain way. Choose the set that is similar to the following set:  
5 {6, 10, 8}

- Ans
- 1. {8, 12, 9}
  - 2. {5, 13, 12}
  - 3. {13, 17, 16}
  - 4. {3, 6, 4}

Question ID : 9895803867  
Chosen Option : 4

Q.2 The famous playback singer \_\_\_\_\_ is a recipient of the Bharat Ratna Award.  
6

- Ans
- 1. Shubha Mudgal
  - 2. Asha Bhonsale
  - 3. Shreya Ghoshal
  - 4. Lata Mangeshkar

Question ID : 9895805415  
Chosen Option : 4

Q.2 Which day is celebrated as the World Environment Day?  
7

- Ans
- 1. 5th June
  - 2. 1st December
  - 3. 5th August
  - 4. 1st May

Question ID : 9895805426  
Chosen Option : 1

Q.2 Who is an 'indentured labourer'?  
8

- Ans
- 1. A slave from Africa
  - 2. A labour bought in a market



3. An unpaid labourer

4.

A bonded labourer, working to pay off his passage to a new country

Question ID : 9895805432

Chosen Option : 2

Q.2  
9 \_\_\_\_\_ is known as the Eastern Mountain Range.

Ans  1. Patkai Range

2. Aravalli

3. Karakoram

4. Shivalik

Question ID : 9895805429

Chosen Option : 2

Q.3  
0 What do banks utilize a major portion of the deposits for?

Ans  1. Loans

2. Guarantee

3. Interest

4. Collaterals

Question ID : 9895805417

Chosen Option : 1

Q.3  
1 In the context of Indian National Movement, who was known as 'Frontier Gandhi'?

Ans  1. Maghfoor Ahmad Ajazi

2. Khan Abdul Gaffar Khan

3. Udham Singh

4. Ashfaqulla Khan

Question ID : 9895805431

Chosen Option : 1

Q.3  
2 What is diluted acetic acid commonly known as?

Ans  1. Oleum

2. Blue vitriol

3. Vinegar

4. Alum

Question ID : 9895805424

Chosen Option : 1

Q.3  
3 The slogan "Workers of the world unite" was associated to:

Ans  1. French revolution

2. American revolution

3. Russian revolution

4. Japanese revolution

Question ID : 9895805433  
Chosen Option : 1

Q.3  
4 The ICC Emerging Player of the Year 2018 was awarded to \_\_\_\_\_.

- Ans
- 1. Hardik Pandya
  - 2. K.L. Rahul
  - 3. Rishabh Pant
  - 4. Shikhar Dhawan

Question ID : 9895805412  
Chosen Option : 4

Q.3  
5 The first amendment to the Indian Constitution was made in \_\_\_\_\_.

- Ans
- 1. 1947
  - 2. 1948
  - 3. 1951
  - 4. 1950

Question ID : 9895805421  
Chosen Option : 3

Q.3  
6 Which type of micro-organism causes typhoid?

- Ans
- 1. Virus
  - 2. Bacteria
  - 3. Fungi
  - 4. Protozoa

Question ID : 9895805427  
Chosen Option : 2

Q.3  
7 The Constitution of India contains \_\_\_\_\_ schedules.

- Ans
- 1. 11
  - 2. 12
  - 3. 14
  - 4. 13

Question ID : 9895805420  
Chosen Option : 2

Q.3  
8 When a force resists the relative motion between two surfaces, it is called \_\_\_\_\_.

- Ans
- 1. Resistance
  - 2. Convection
  - 3. Friction
  - 4. Induction

Question ID : 9895805423  
Chosen Option : 1

Q.3  
9 What is the movement of a plant due to the stimulus of light known as?

- Ans
- 1. Respiration
  - 2. Geotaxis
  - 3. Geotropism
  - 4. Phototropism

Question ID : 9895805425  
Chosen Option : 1

Q.4  
0 Malgudi Days was written by \_\_\_\_\_.

- Ans
- 1. Shashi Tharoor
  - 2. Vikram Seth
  - 3. Amish Tripathi
  - 4. R. K. Narayan

Question ID : 9895805416  
Chosen Option : 4

Q.4  
1 Who won the National Squash 2018 Womens Singles title?

- Ans
- 1. Dipika Pallikal
  - 2. Bhuvaneshkumari
  - 3. Urwashi Joshi
  - 4. Joshna Chinappa

Question ID : 9895805413  
Chosen Option : 3

Q.4  
2 River Yamuna does NOT pass through which of the following states?

- Ans
- 1. Uttarakhand
  - 2. Haryana
  - 3. Gujarat
  - 4. Uttar Pradesh

Question ID : 9895805430  
Chosen Option : 1

Q.4  
3 What is an annual statement of receipts and expenditure of the government over a fiscal year is known as?

- Ans
- 1. Capital
  - 2. Revenue
  - 3. Tax
  - 4. Budget

Question ID : 9895805418  
Chosen Option : 4

Q.4 Which of the following pair correctly represents a state and the corresponding art form associated with it?

4

- Ans
- 1. Assam – Kathakali
  - 2. Tamil Nadu – Odissi
  - 3. Uttar Pradesh – Kathak
  - 4. Punjab – Mohiniyattam

Question ID : 9895805409  
Chosen Option : 1

Q.4 Which one of the following is a labour intensive industry?

5

- Ans
- 1. Pulses
  - 2. Tea
  - 3. Maize
  - 4. Wheat

Question ID : 9895805428  
Chosen Option : 1

Q.4 Under which of the following situations, the Fundamental Right to Freedom is curtailed in India?

6

- Ans
- 1. Financial Emergency
  - 2. Epidemic Emergency
  - 3. State Emergency
  - 4. National Emergency

Question ID : 9895805422  
Chosen Option : 4

Q.4 Nalanda was an ancient centre of learning for which religion?

7

- Ans
- 1. Islam
  - 2. Christianity
  - 3. Jainism
  - 4. Buddhism

Question ID : 9895805411  
Chosen Option : 4

Q.4 Which of the following statement is NOT correct in the context of rising importance of tertiary sector in India?

8

- Ans
- 1. Growth of information and technology
  - 2. Growth in per capita income
  - 3. Growth of service providing industries
  - 4. Growth of political awareness in rural areas

Question ID : 9895805419  
Chosen Option : 4

Q.4 Ustad Amjad Ali Khan is famous for playing the \_\_\_\_\_.

9

- Ans
- 1. tabla

- 2. violin
- 3. veena
- 4. sarod

Question ID : 9895805410  
Chosen Option : 2

Q.5  
0 RK Laxman is famous for \_\_\_\_\_.

- Ans
- 1. wall painting
  - 2. classical music
  - 3. films
  - 4. cartoons

Question ID : 9895805414  
Chosen Option : 3

Q.5  
1 When a person goes to his office from his house with a speed of 10 km/hr, he is late by 20 minutes. When he goes with speed of 15 km/hr, he is late by 5 minutes. What is the distance (in km) between his office and house?

- Ans
- 1. 8
  - 2. 7.5
  - 3. 7
  - 4. 8.5

Question ID : 9895805734  
Chosen Option : 2

Q.5  
2 The value of:

$$\left[ \frac{5}{7} \text{ of } 1\frac{3}{8} - \frac{5}{8} \text{ of } \frac{6}{7} \right] \div \left[ 1 - \frac{1}{7} \times \left( \frac{5}{12} + \frac{1}{3} \right) \right] \times \frac{\frac{1}{7} - \frac{1}{9}}{\frac{1}{7} + \frac{1}{9}}$$

- Ans
- 1.  $\frac{1}{4}$
  - 2. 8
  - 3. 4
  - 4.  $\frac{1}{16}$

Question ID : 9895805716  
Chosen Option : 2

Q.5  
3 What is the sum of digits of the least number which when divided by 21, 28, 30 and 35 leaves the same remainder 10 in each case but is divisible by 17?

- Ans
- 1. 11
  - 2. 13
  - 3. 14
  - 4. 10

Question ID : 9895805715  
Chosen Option : 3



**Q.5** A park is in the shape of a rectangle. Its length and breadth 240 m and 100 m, respectively. At the centre of the park, there is a circular lawn. The area of the park, excluding the lawn is  $3904 \text{ m}^2$ . What is the perimeter (in m) of the lawn?  
(use  $\pi = 3.14$ )

- Ans
- 1. 502.4
  - 2. 516.2
  - 3. 508.6
  - 4. 512.8

Question ID : 9895805730  
Chosen Option : 2

**Q.5** The value of :

$$1.25 - [1 \div \{3 + (2 - 0.4 \times 2.5)\}]$$

- Ans
- 1. 2
  - 2. 1
  - 3. 0
  - 4.  $\frac{1}{2}$

Question ID : 9895805717  
Chosen Option : 4

**Q.5** The profit on selling 35 mangoes is equal to the cost price of 7 mangoes. What is the profit percentage?

- Ans
- 1.  $33\frac{1}{3}$
  - 2. 20
  - 3. 25
  - 4.  $16\frac{2}{3}$

Question ID : 9895805721  
Chosen Option : 2

**Q.5** A train takes 3 hours less time for a journey of 360 km, if its speed is increased by 10 km/hr from its usual speed. What is its increased speed (in km/hr)?

- Ans
- 1. 40
  - 2. 42
  - 3. 36
  - 4. 30

Question ID : 9895805733  
Chosen Option : 3

**Q.5** After allowing a discount of  $12\frac{1}{2}$  % on the marked price of an article, it was sold for ₹700. Had the discount NOT been given, the profit would have been 60%. The cost price of the article is:

- Ans
- 1. ₹500
  - 2. ₹540
  - 3. ₹600
  - 4. ₹480



Question ID : 9895805720

Chosen Option : 4

Q.5 If  $(x + 4)$ ,  $(x + 12)$ ,  $(x - 1)$ , and  $(x + 5)$  are in proportion then the mean proportional between  $x$  and  $(x - 7)$  is:

- Ans
- 1. 9
  - 2. 16
  - 3. 15
  - 4. 12

Question ID : 9895805725

Chosen Option : 3

Q.6 Three positive number are given. If the average of any two of them is added to the third number, the sums obtained are 172, 216 and 180. What is the average of the given three numbers?

- Ans
- 1. 93
  - 2.  $95\frac{1}{3}$
  - 3.  $94\frac{2}{3}$
  - 4. 96

Question ID : 9895805719

Chosen Option : 1

Q.6 The selling price of an article is 84% of its cost price. If the cost price is increased by 20% and the selling price is increased by 25%, what is the percentage increase/decrease in the loss with respect to the earlier loss?

- Ans
- 1.  $6\frac{1}{4}$  %, decrease
  - 2.  $6\frac{2}{3}$  %, decrease
  - 3.  $6\frac{1}{4}$  %, increase
  - 4.  $6\frac{2}{3}$  %, increase

Question ID : 9895805722

Chosen Option : 3

Q.6 2 men and 7 women can do a piece of work in 14 days whereas 3 men and 8 women can do it in 11 days. In how many days 5 men and 4 women can do the same work?

- Ans
- 1. 11
  - 2. 12
  - 3. 14
  - 4. 10

Question ID : 9895805735

Chosen Option : 1

Q.6 A metallic sphere of radius 4 cm is melted and the cast into small spherical balls, each of diameter 0.4 cm. The number of small balls will be:

- Ans
- 1. 1000
  - 2. 8000
  - 3. 4000
  - 4. 2000

Question ID : 9895805732  
Chosen Option : 4

Q.6 A sum of ₹14460 is divided among A, B, C and D such that the ratio of share of A and B is 3 : 5, that of B and C is 6 : 7 and that of C and D is 14 : 15. What is the difference between the shares of A and C?

- Ans
- 1. ₹1440
  - 2. ₹1500
  - 3. ₹2100
  - 4. ₹2040

Question ID : 9895805726  
Chosen Option : 2

Q.6 A pipe can fill a tank in 10 minutes while another pipe can empty it in 12 minutes. If the pipes are opened alternately each for 1 minute, beginning with the first pipe, the tank will be full after (in minutes):

- Ans
- 1. 90
  - 2. 109
  - 3. 108
  - 4. 120

Question ID : 9895805736  
Chosen Option : 4

Q.6 Renu saves 30% of her income. If her savings increases by 30% and the expenditure increases by 25%, then the percentage increase in her income is:

- Ans
- 1. 30
  - 2. 25.8
  - 3. 26.5
  - 4. 15

Question ID : 9895805723  
Chosen Option : 3

Q.6 Study the following table and answer questions:

7 Number of employees working in five different companies.

Company	No of Employees	Ratio of Males & Females
A	380	13 : 6
B	420	4 : 3
C	360	8 : 7
D	320	11 : 9
E	280	3 : 5

The ratio of the number of male employees in company C to the number of female employees in the company D is:

- Ans
- 1. 3 : 2
  - 2. 5 : 2
  - 3. 4 : 3
  - 4. 8 : 9

Question ID : 9895805737  
Chosen Option : 4

Q.6 The compound interest on a sum of ₹15625 for  $2\frac{3}{4}$  years at 16% per annum, The interest compound annually is :

- Ans
- 1. ₹6661

2. ₹5400

3. ₹7932

4. ₹7923

Question ID : 9895805728

Chosen Option : 3

**Q.6** A and B are two cones. The curved surface area of A is twice that of B. The slant height of B is twice that of A. What is the ratio of radii of A to B?

**Ans**  1. 3 : 2

2. 1 : 4

3. 4 : 1

4. 2 : 1

Question ID : 9895805731

Chosen Option : 2

**Q.7** Study the following table and answer questions:

0

Number of employees working in five different companies.

Company	No of Employees	Ratio of Males & Females
A	380	13 : 6
B	420	4 : 3
C	360	8 : 7
D	320	11 : 9
E	280	3 : 5

The number of female employees in company C is what percent more than the number of male employees in company E?

**Ans**  1. 55

2. 60

3. 48

4. 54

Question ID : 9895805739

Chosen Option : 3

**Q.7** Two numbers are in the ratio 3 : 5. If 9 is subtracted from each, the numbers so obtained are in the ratio 12 : 23. If 3 is added to the smaller number and 7 is subtracted from the other number, they will be in the ratio:

1

**Ans**  1. 5 : 6

2. 4 : 5

3. 3 : 4

4. 5 : 8

Question ID : 9895805724

Chosen Option : 1

**Q.7**

2

Study the following table and answer questions:

Number of employees working in five different companies.

Company	No of Employees	Ratio of Males & Females
A	380	13 : 6
B	420	4 : 3
C	360	8 : 7
D	320	11 : 9
E	280	3 : 5

What percent of total male employees in companies A and B is the number of female employees in E?

- Ans
- 1. 35
  - 2. 36
  - 3. 30
  - 4. 32

Question ID : 9895805738  
Chosen Option : 4

Q.7  
3 What is the mean of the range, median and mode of the data given below?

1, 2, 5, 9, 6, 3, 9, 7, 4, 3, 9, 1, 9, 6, 8, 1

- Ans
- 1.  $7\frac{1}{2}$
  - 2. 8
  - 3.  $8\frac{1}{2}$
  - 4. 7

Question ID : 9895805729  
Chosen Option : 4

Q.7  
4 The simple interest on a certain sum at 14% per annum for  $3\frac{1}{4}$  years is ₹3731. What will the amount of the same sum for  $5\frac{1}{2}$  years at half the earlier rate?

- Ans
- 1. ₹11931
  - 2. ₹11913
  - 3. ₹11537
  - 4. ₹11357

Question ID : 9895805727  
Chosen Option : 2

Q.7  
5 The average height of a certain number of persons in a group is 155.5 cm. Later on 4 persons of height 154.6 cm, 158.4 cm, 152.2 cm and 153.8 cm leave the group. As a result the average height of the remaining persons increases by 0.15 cm. What was the number of persons initially in the group?

- Ans
- 1. 18
  - 2. 20
  - 3. 22
  - 4. 24

Question ID : 9895805718  
Chosen Option : 1

Section : English Language

Q.1 From the given options, identify the segment in the sentence which contains the grammatical error.

Had you told me that you were in Mumbai I could have certainly contacted you instead of waiting here.

- Ans
- 1. you were
  - 2. Had you
  - 3. could have
  - 4. instead of

Question ID : 9895805256  
Chosen Option : 4

Q.2 Select the correctly spelt word.

- Ans
- 1. Contemporary
  - 2. Contemporary
  - 3. Comtemporary
  - 4. Contempory

Question ID : 9895805278  
Chosen Option : 3

Q.3 Select the word which means the same as the group of words given.

One who loves mankind

- Ans
- 1. Humanist
  - 2. Philologist
  - 3. Philanthropist
  - 4. Philosopher

Question ID : 9895805277  
Chosen Option : 4

Q.4 Select the synonym of the given word.

ABILITY

- Ans
- 1. Disposition
  - 2. Outlook
  - 3. Instinct
  - 4. Capacity

Question ID : 9895805270  
Chosen Option : 2

Q.5 Select the antonym of the given word.

VIRTUOUS

- Ans
- 1. Worthy
  - 2. Honest
  - 3. Kind



✓ 4. Vicious

Question ID : 9895805273  
Chosen Option : 1

**Comprehension:**

In the following passage some words have been deleted. Fill in the blanks with the help of the alternatives given.

Fundamentally, all human beings possess a combination of fixed inherited traits. All individuals possess the (1) \_\_\_\_\_ highly developed nervous system, backbones, erect posture, hair, etc. Therefore, (2) \_\_\_\_\_ among human beings arise only in (3) \_\_\_\_\_ changes of this basic pattern. Racial differences (4) \_\_\_\_\_ one of the finest distinctions and are based only on (5) \_\_\_\_\_ slight differences.

SubQuestion No : 6

Q.6 Select the most appropriate option that will fill in the blank number 1.

- Ans
- ✗ 1. natural
  - ✗ 2. large
  - ✓ 3. same
  - ✗ 4. different

Question ID : 9895805265  
Chosen Option : 1

**Comprehension:**

In the following passage some words have been deleted. Fill in the blanks with the help of the alternatives given.

Fundamentally, all human beings possess a combination of fixed inherited traits. All individuals possess the (1) \_\_\_\_\_ highly developed nervous system, backbones, erect posture, hair, etc. Therefore, (2) \_\_\_\_\_ among human beings arise only in (3) \_\_\_\_\_ changes of this basic pattern. Racial differences (4) \_\_\_\_\_ one of the finest distinctions and are based only on (5) \_\_\_\_\_ slight differences.

SubQuestion No : 7

Q.7 Select the most appropriate option that will fill in the blank number 2.

- Ans
- ✗ 1. similarities
  - ✗ 2. naturalness
  - ✗ 3. sameness
  - ✓ 4. variations

Question ID : 9895805266  
Chosen Option : 1

**Comprehension:**



In the following passage some words have been deleted. Fill in the blanks with the help of the alternatives given.

Fundamentally, all human beings possess a combination of fixed inherited traits. All individuals possess the (1) \_\_\_\_\_ highly developed nervous system, backbones, erect posture, hair, etc. Therefore, (2) \_\_\_\_\_ among human beings arise only in (3) \_\_\_\_\_ changes of this basic pattern. Racial differences (4) \_\_\_\_\_ one of the finest distinctions and are based only on (5) \_\_\_\_\_ slight differences.

SubQuestion No : 8

Q.8 Select the most appropriate option that will fill in the blank number 3.

- Ans
- 1. minor
  - 2. complete
  - 3. large
  - 4. fundamental

Question ID : 9895805267  
Chosen Option : 1

Comprehension:

In the following passage some words have been deleted. Fill in the blanks with the help of the alternatives given.

Fundamentally, all human beings possess a combination of fixed inherited traits. All individuals possess the (1) \_\_\_\_\_ highly developed nervous system, backbones, erect posture, hair, etc. Therefore, (2) \_\_\_\_\_ among human beings arise only in (3) \_\_\_\_\_ changes of this basic pattern. Racial differences (4) \_\_\_\_\_ one of the finest distinctions and are based only on (5) \_\_\_\_\_ slight differences.

SubQuestion No : 9

Q.9 Select the most appropriate option that will fill in the blank number 4.

- Ans
- 1. show
  - 2. represent
  - 3. give
  - 4. present

Question ID : 9895805268  
Chosen Option : 1

Comprehension:

In the following passage some words have been deleted. Fill in the blanks with the help of the alternatives given.

Fundamentally, all human beings possess a combination of fixed inherited traits. All individuals possess the (1) \_\_\_\_\_ highly developed nervous system, backbones, erect posture, hair, etc. Therefore, (2) \_\_\_\_\_ among human beings arise only in (3) \_\_\_\_\_ changes of this basic pattern. Racial differences (4) \_\_\_\_\_ one of the finest distinctions and are based only on (5) \_\_\_\_\_ slight differences.

SubQuestion No : 10

Q.1

0 Select the most appropriate option that will fill in the blank number 5.

- Ans
- 1. hidden
  - 2. possible
  - 3. clear
  - 4. certain

Question ID : 9895805269  
Chosen Option : 4

Q.1  
1 Fill in the blank with the most appropriate option.

Devika is the most \_\_\_\_\_ of them all and has managed to do well in her profession.

- Ans
- 1. intelligent
  - 2. simple
  - 3. insolent
  - 4. audacious

Question ID : 9895805281  
Chosen Option : 3

Q.1  
2 Select the option that means the same as the given idiom.

Have several irons in the fire

- Ans
- 1. Doing iron related work
  - 2. Having too many engagements at a time
  - 3. Burning unwanted pieces of iron
  - 4. Talking to many persons simultaneously

Question ID : 9895805275  
Chosen Option : 4

Q.1  
3 Select the synonym of the given word.

CHARACTER

- Ans
- 1. Performance
  - 2. Spirit
  - 3. Mannerism
  - 4. Trait

Question ID : 9895805271  
Chosen Option : 2

Q.1  
4 Select the antonym of the given word.

TRANSPARENT

- Ans
- 1. White-coloured
  - 2. Translucent
  - 3. Milky

✓ 4. Opaque

Question ID : 9895805272  
Chosen Option : 2

Q.1 5 Select the most appropriate option to substitute the underlined segment in the given sentence. If there is no need to substitute it, select No improvement.

The rules of chess require that one has to makes only one move at a time.

- Ans
- ✗ 1. made
  - ✓ 2. has to make
  - ✗ 3. will make
  - ✗ 4. No improvement

Question ID : 9895805261  
Chosen Option : 4

Q.1 6 Select the word which means the same as the group of words given.

A person who is more than hundred years old

- Ans
- ✗ 1. Centurial
  - ✗ 2. Centuriator
  - ✗ 3. Centurion
  - ✓ 4. Centenarian

Question ID : 9895805276  
Chosen Option : 2

Q.1 7 Select the correctly spelt word.

- Ans
- ✗ 1. Incorrigible
  - ✓ 2. Incurrigible
  - ✗ 3. Incourrigible
  - ✗ 4. Incurrigibel

Question ID : 9895805279  
Chosen Option : 1

Q.1 8 Select the most appropriate option to fill in the blank.

He has been \_\_\_\_\_ my birthday all week!

- Ans
- ✗ 1. celebrate
  - ✓ 2. celebrating
  - ✗ 3. celebrated
  - ✗ 4. celebrates

Question ID : 9895805263  
Chosen Option : 3

Q.1 9

Fill in the blank with the most appropriate option.

Suresh is \_\_\_\_\_ in collecting stamps.

- Ans
- 1. habitual
  - 2. interested
  - 3. customary
  - 4. habituated

Question ID : 9895805280  
Chosen Option : 3

Q.2 Select the most appropriate option to substitute the underlined segment in the given sentence. If there is no need to substitute it, select No improvement.

He decided to leave very quickly the hotel.

- Ans
- 1. leave the hotel quickly.
  - 2. leave quickly the hotel.
  - 3. quickly leave hotel.
  - 4. No improvement

Question ID : 9895805260  
Chosen Option : 4

Q.2 From the given options, identify the segment in the sentence which contains the grammatical error.

If the report did not have the information needed it could not be used by them.

- Ans
- 1. be used by them
  - 2. it could not
  - 3. If the
  - 4. information needed

Question ID : 9895805258  
Chosen Option : 2

Q.2 From the given options, identify the segment in the sentence which contains the grammatical error.

The errors for the typed reports were so numerous that they could hardly be overlooked.

- Ans
- 1. typed reports
  - 2. could hardly be
  - 3. so numerous
  - 4. errors for

Question ID : 9895805257  
Chosen Option : 4

Q.2 Select the most appropriate option to fill in the blank.

\_\_\_\_\_ in Nagpur, we are unwilling to move to another city.

- Ans
- 1. Since we have lived
  - 2. Since we were living
  - 3. Being that we are living



✓ 4. Since we have been living

Question ID : 9895805262  
Chosen Option : 3

Q.2  
4 Select the option that means the same as the given idiom.

In high spirits

- Ans
- ✗ 1. Become successful
  - ✓ 2. Feel joyful
  - ✗ 3. Create confusion
  - ✗ 4. Remain calm

Question ID : 9895805274  
Chosen Option : 1

Q.2  
5 Select the most appropriate option to substitute the underlined segment in the given sentence. If there is no need to substitute it, select No improvement.

Though a hero, he acted a coward.

- Ans
- ✓ 1. like a coward
  - ✗ 2. cowardly
  - ✗ 3. No improvement
  - ✗ 4. as coward

Question ID : 9895805259  
Chosen Option : 3

Section : Hindi Language

Q.1 दिए गए वाक्य का वह भाग ज्ञात करें जिसमें कोई त्रुटि है।

कविता सुनने पर श्रोताओं को तालियों द्वारा कवि का अभिनंदन करने का मौका मिल जाती है।

- Ans
- ✗ 1. कवि का अभिनंदन करने का
  - ✗ 2. मौका मिल जाती है।
  - ✓ 3. कविता सुनने पर
  - ✗ 4. श्रोताओं को तालियों द्वारा

Question ID : 9895805564  
Chosen Option : --

Q.2 दिए गए शब्द का विलोम चुनें।

शाश्वत

- Ans
- ✗ 1. अनादि
  - ✗ 2. चिरंतन
  - ✗ 3. नश्वर
  - ✓ 4. अनंत

Question ID : 9895805578  
Chosen Option : --

Q.3 सही वर्तनी वाले शब्द का चयन करें।

- Ans
- 1. बाढ़पीड़ित
  - 2. बाढ़पिडित
  - 3. बाढ़पिदित
  - 4. बाढ़पीडीत

Question ID : 9895805586  
Chosen Option : --

Q.4 दिए गए शब्द के पर्यायवाची शब्द का चयन करें।

गृह

- Ans
- 1. गगन
  - 2. वसन
  - 3. कुटीर
  - 4. निकेतन

Question ID : 9895805580  
Chosen Option : --

Comprehension:

निम्नलिखित गद्यांश के रिक्त स्थानों की पूर्ति गद्यांश के नीचे दिए गए प्रश्नों के अनुसार कीजिए -

विश्व के लगभग सभी धर्म ग्रन्थों ने अहिंसा पालन पर बल दिया है। अहिंसा का सामान्य अर्थ है किसी भी \_\_\_\_\_ (1) को न मारना। परन्तु अहिंसा का अभिप्राय केवल शारीरिक हिंसा न करने तक ही सीमित नहीं है। मन से, वचन से तथा कर्म से किसी प्राणी को \_\_\_\_\_ (2) न पहुँचाना ही अहिंसा है। यदि हम किसी को \_\_\_\_\_ (3) नहीं दे सकते तो हमें किसी का जीवन लेने का अधिकार भी नहीं है। अहिंसा पालक व्यक्ति के संपर्क में आने वाले व्यक्ति भी सब प्रकार के ईर्ष्या-द्वेष आदि से \_\_\_\_\_ (4) हो जाते हैं। अहिंसा हमें \_\_\_\_\_ (5) नहीं बनाती अपितु शक्तिशाली बनाती है।

SubQuestion No : 5

Q.5 गद्यांश में संकेतित रिक्त स्थान (1) के लिए उपयुक्त शब्द होगा -

- Ans
- 1. पेड़
  - 2. प्राणी



3. पुरुष

4. स्त्री

Question ID : 9895805573  
Chosen Option : --

Comprehension:

निम्नलिखित गद्यांश के रिक्त स्थानों की पूर्ति गद्यांश के नीचे दिए गए प्रश्नों के अनुसार कीजिए -

विश्व के लगभग सभी धर्म ग्रन्थों ने अहिंसा पालन पर बल दिया है। अहिंसा का सामान्य अर्थ है किसी भी \_\_\_\_\_ (1) को न मारना। परन्तु अहिंसा का अभिप्राय केवल शारीरिक हिंसा न करने तक ही सीमित नहीं है। मन से, वचन से तथा कर्म से किसी प्राणी को \_\_\_\_\_ (2) न पहुँचाना ही अहिंसा है। यदि हम किसी को \_\_\_\_\_ (3) नहीं दे सकते तो हमें किसी का जीवन लेने का अधिकार भी नहीं है। अहिंसा पालक व्यक्ति के संपर्क में आने वाले व्यक्ति भी सब प्रकार के ईर्ष्या-द्वेष आदि से \_\_\_\_\_ (4) हो जाते हैं। अहिंसा हमें \_\_\_\_\_ (5) नहीं बनाती अपितु शक्तिशाली बनाती है।

SubQuestion No : 6

Q.6 गद्यांश में संकेतित रिक्त स्थान (2) के लिए उपयुक्त शब्द होगा -

Ans  1. प्रसन्नता

2. हँसाना

3. रुलाना

4. कष्ट

Question ID : 9895805574  
Chosen Option : --

Comprehension:

निम्नलिखित गद्यांश के रिक्त स्थानों की पूर्ति गद्यांश के नीचे दिए गए प्रश्नों के अनुसार कीजिए -

विश्व के लगभग सभी धर्म ग्रन्थों ने अहिंसा पालन पर बल दिया है। अहिंसा का सामान्य अर्थ है किसी भी \_\_\_\_\_ (1) को न मारना। परन्तु अहिंसा का अभिप्राय केवल शारीरिक हिंसा न करने तक ही सीमित नहीं है। मन से, वचन से तथा कर्म से किसी प्राणी को \_\_\_\_\_ (2) न पहुँचाना ही अहिंसा है। यदि हम किसी को \_\_\_\_\_ (3) नहीं दे सकते तो हमें किसी का जीवन लेने का अधिकार भी नहीं है। अहिंसा पालक व्यक्ति के संपर्क में आने वाले व्यक्ति भी सब प्रकार के ईर्ष्या-द्वेष आदि से \_\_\_\_\_ (4) हो जाते हैं। अहिंसा हमें \_\_\_\_\_ (5) नहीं बनाती अपितु शक्तिशाली बनाती है।

SubQuestion No : 7

Q.7 गद्यांश में संकेतित रिक्त स्थान (3) के लिए उपयुक्त शब्द होगा -

- Ans
- 1. हिंसा
  - 2. मकान
  - 3. दुःख
  - 4. जीवन

Question ID : 9895805575  
Chosen Option : --

Comprehension:

निम्नलिखित गद्यांश के रिक्त स्थानों की पूर्ति गद्यांश के नीचे दिए गए प्रश्नों के अनुसार कीजिए -

विश्व के लगभग सभी धर्म ग्रन्थों ने अहिंसा पालन पर बल दिया है। अहिंसा का सामान्य अर्थ है किसी भी \_\_\_\_\_ (1) को न मारना। परन्तु अहिंसा का अभिप्राय केवल शारीरिक हिंसा न करने तक ही सीमित नहीं है। मन से, वचन से तथा कर्म से किसी प्राणी को \_\_\_\_\_ (2) न पहुँचाना ही अहिंसा है। यदि हम किसी को \_\_\_\_\_ (3) नहीं दे सकते तो हमें किसी का जीवन लेने का अधिकार भी नहीं है। अहिंसा पालक व्यक्ति के संपर्क में आने वाले व्यक्ति भी सब प्रकार के ईर्ष्या-द्वेष आदि से \_\_\_\_\_ (4) हो जाते हैं। अहिंसा हमें \_\_\_\_\_ (5) नहीं बनाती अपितु शक्तिशाली बनाती है।

SubQuestion No : 8

Q.8 गद्यांश में संकेतित रिक्त स्थान (4) के लिए उपयुक्त शब्द होगा -

- Ans
- 1. मुक्त
  - 2. युक्त
  - 3. ग्रस्त
  - 4. अधीन

Question ID : 9895805576  
Chosen Option : --

Comprehension:

निम्नलिखित गद्यांश के रिक्त स्थानों की पूर्ति गद्यांश के नीचे दिए गए प्रश्नों के अनुसार कीजिए -

विश्व के लगभग सभी धर्म ग्रन्थों ने अहिंसा पालन पर बल दिया है। अहिंसा का सामान्य अर्थ है किसी भी \_\_\_\_\_ (1) को न मारना। परन्तु अहिंसा का अभिप्राय केवल शारीरिक हिंसा न करने तक ही सीमित नहीं है। मन से, वचन से तथा कर्म से किसी प्राणी को \_\_\_\_\_ (2) न पहुँचाना ही अहिंसा है। यदि हम किसी को \_\_\_\_\_ (3) नहीं दे सकते तो हमें किसी का जीवन लेने का अधिकार भी नहीं है। अहिंसा पालक व्यक्ति के संपर्क में आने वाले व्यक्ति भी सब प्रकार के ईर्ष्या-द्वेष आदि से \_\_\_\_\_ (4) हो जाते हैं। अहिंसा हमें \_\_\_\_\_ (5) नहीं बनाती अपितु शक्तिशाली बनाती है।

SubQuestion No : 9

Q.9 गद्यांश में संकेतित रिक्त स्थान (5) के लिए उपयुक्त शब्द होगा -

- Ans
- 1. दोषी
  - 2. सपूत
  - 3. कायर
  - 4. शक्तिशाली

Question ID : 9895805577  
Chosen Option : --

Q.1 दिए गए वाक्य का वह भाग ज्ञात करें जिसमें कोई त्रुटि है।

जिसके पास चरित्र होता है उसके सामने संसार भर का संपत्तियाँ घटने टेक देती हैं।

- Ans
- 1. जिसके पास चरित्र होता है
  - 2. घटने टेक देती हैं।
  - 3. उसके सामने

✗ 4. संसार भर का संपत्तियाँ

Question ID : 9895805563  
Chosen Option : --

Q.1  
1 दिये गये वाक्यांश के लिए एक शब्द दीजिये।

जो बिना वेतन के कार्य करे

Ans

- ✓ 1. सामूहिक  
✗ 2. अवैतनिक  
✗ 3. संवैतनिक  
✗ 4. आधुनिक

Question ID : 9895805584  
Chosen Option : --

Q.1  
2 रिक्त स्थान को भरने के लिए उपयुक्त शब्द का चयन करें।

देश को \_\_\_\_\_ से बचना चाहिए।

Ans

- ✗ 1. हरिश्चन्द्रों  
✗ 2. जयचन्द्रों  
✓ 3. अतिथियों  
✗ 4. सज्जनों

Question ID : 9895805569  
Chosen Option : --

Q.1  
3 दिए गए शब्द का विलोम चुनें।

आयात

Ans

- ✓ 1. बयान  
✗ 2. निर्यात  
✗ 3. अर्थ  
✗ 4. आयत

Question ID : 9895805579  
Chosen Option : --

Q.1  
4 दिए गए शब्द के पर्यायवाची शब्द का चयन करें।

वैर

Ans

- ✗ 1. विद्रोह  
✗ 2. झगड़ा  
✓ 3. विद्वेष  
✗ 4. लड़ाई

Question ID : 9895805581  
Chosen Option : --

Q.1  $\frac{1}{5}$  दिये गये वाक्यांश के लिए एक शब्द दीजिये।

जो सप्ताह में एक बार होता हो

- Ans
- 1. साप्ताहिक
  - 2. पाक्षिक
  - 3. मासिक
  - 4. वार्षिक

Question ID : 9895805585  
Chosen Option : --

Q.1  $\frac{1}{6}$  दिए गए वाक्य में रेखांकित खंड को प्रतिस्थापित करने के लिए उपयुक्त विकल्प का चयन करें।

किसी की टोपी घर में छूट गई और किसी की चश्मा गिर गई।

- Ans
- 1. किसी के चश्मे गिर गया।
  - 2. किसी का चश्मा गिर गए।
  - 3. किसी का चश्मा गिर गई।
  - 4. किसी का चश्मा गिर गया।

Question ID : 9895805566  
Chosen Option : --

Q.1  $\frac{1}{7}$  रिक्त स्थान को भरने के लिए उपयुक्त शब्द का चयन करें।

भारतीय सैनिकों ने युद्ध में \_\_\_\_\_ का परिचय दिया।

- Ans
- 1. खटास
  - 2. वीरता
  - 3. मिठास
  - 4. कायरता

Question ID : 9895805568  
Chosen Option : --

Q.1  $\frac{1}{8}$  दिए गए वाक्य में रेखांकित खंड को प्रतिस्थापित करने के लिए उपयुक्त विकल्प का चयन करें।

जो परिश्रम से मुँह मोड़ता है, तब जीवन में पिछड़ जाता है।

- Ans
- 1. वह जीवन में
  - 2. वे जीवन में
  - 3. अब जीवन में
  - 4. सब जीवन में

Question ID : 9895805565  
Chosen Option : --



Q.1 निम्नलिखित में से उस विकल्प का चयन करें जो 'दाल गलना' मुहावरे का अर्थ व्यक्त करता है।

- Ans
- 1. युक्ति असफल होना
  - 2. युक्ति बनाना
  - 3. युक्ति सफल होना
  - 4. नुकसान होना

Question ID : 9895805583  
Chosen Option : --

Q.2 रिक्त स्थान को भरने के लिए उपयुक्त शब्द का चयन करें।

स्वयंसेवकों का \_\_\_\_\_ प्रधानमंत्री से मिलने गया।

- Ans
- 1. भीड़
  - 2. टुकड़ी
  - 3. बल
  - 4. दल

Question ID : 9895805570  
Chosen Option : --

Q.2<sub>1</sub> सही वर्तनी वाले शब्द का चयन करें।

- Ans
- 1. प्रेमातुर
  - 2. परेमातुर
  - 3. प्रेमतुर
  - 4. प्रेमातूर

Question ID : 9895805587  
Chosen Option : --

Q.2<sub>2</sub> दिए गए वाक्य में रेखांकित खंड को प्रतिस्थापित करने के लिए उपयुक्त विकल्प का चयन करें।

न्याय व्यवस्था कहती है कि जिसने अपराध किया है उसने दंड तो मिलेगा ही।

- Ans
- 1. उससे दंड तो मिलेगा ही।
  - 2. उसमें दंड तो मिलेगा ही।
  - 3. उसे दंड तो मिलेगा ही।
  - 4. उसी से दंड तो मिलेगा ही।

Question ID : 9895805567  
Chosen Option : --

Q.3 निम्नलिखित में से उस विकल्प का चयन करें जो 'गाँठ बाँधना' मुहावरे का अर्थ व्यक्त करता है।

- Ans
- 1. अच्छी तरह याद रखना



2. भूल जाना  
 3. गाँठ दिखने पर स्मरण होना  
 4. गाँठ में पैसे बाँधना

Question ID : 9895805582  
Chosen Option : --

Q.2  
4 रिक्त स्थान को भरने के लिए उपयुक्त शब्द का चयन करें।

हमें अपने \_\_\_\_\_ होने पर गर्व है।

- Ans  1. चोर  
 2. भिखारी  
 3. भारतीय  
 4. भारती

Question ID : 9895805571  
Chosen Option : --

Q.2  
5 दिए गए वाक्य का वह भाग ज्ञात करें जिसमें कोई त्रुटि है।

आदर्श विद्यार्थी के गुण सादा जीवन उच्च विचार होता है।

- Ans  1. के गुण  
 2. सादा जीवन उच्च विचार  
 3. आदर्श विद्यार्थी  
 4. होता है।

Question ID : 9895805562  
Chosen Option : --