

## Constable (GD) in CAPFs, NIA, SSF and Rifleman (GD) in Assam Rifles Examination, 2018

Roll No. :	<a href="http://www.GovtJobsAlert.In">www.GovtJobsAlert.In</a>
Registration No.	
Name :	
Exam Venue :	Tara Online Web Controller
Exam Time :	4:00 PM - 5:30 PM
Exam Date :	22/02/2019

Section : General Section

Q.1 Identify the odd pair from the following.

- Ans  1. Tuberculosis : Heart  
 2. Jaundice : Liver  
 3. Rickets : Bones  
 4. Night Blindness : Eyes

Question ID : 9895806509  
Chosen Option : 2

Q.2 Read the given statements and conclusions carefully and decide which of the conclusions logically follow(s) from the statements.

**Statements:**

Some animals are birds.  
Cow is an animal.

**Conclusions:**

I. Some birds are animals.  
II. Cow is not a bird.

- Ans  1. Neither conclusion I nor conclusion II follows.  
 2. Both conclusions I and II follow.  
 3. Only conclusion I follows.  
 4. Only conclusion II follows.

Question ID : 9895806517  
Chosen Option : 4

Q.3 Identify the option that belongs to the following group.

Lamb, Calf, Tadpole

- Ans  1. Amphibians  
 2. Puppy  
 3. Wild animals  
 4. Reptiles

Question ID : 9895806511  
Chosen Option : 1

Q.4 Four persons (two men and two women) were sitting in a restaurant. They were each seated at the north, east, south and west of a table. No woman was facing the east. Persons sitting opposite to each other were not of the same gender. One man was facing the south. Which directions were the women facing?

- Ans  1. North and west  
 2. South and west  
 3. East and west  
 4. North and south

Question ID : 9895806516  
 Chosen Option : 4

Q.5 If MARKET is coded as NCUOJZ, then RESPECT will be coded as \_\_\_\_\_.

- Ans  1. SGVTIJA  
 2. SGVTIJZ  
 3. SGVTJIZ  
 4. SGVTJIA

Question ID : 9895806513  
 Chosen Option : 3

Q.6 A square transparent paper after folding looks like as shown in the figure by solid lines. How will it look when unfolded? (Rotation is not allowed)



- Ans  1.   
 2.   
 3.   
 4.

Question ID : 9895806529  
 Chosen Option : 3

Q.7 Identify the odd one from the following.

- Ans  1. Brother  
 2. Sister  
 3. Uncle  
 4. Friend

Question ID : 9895806507  
 Chosen Option : 4

Q.8 Select the option that is related to the third number in the same way as the second number is related to the first number.

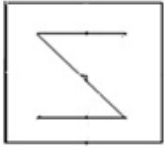
1 : 121 :: 5 : \_\_\_\_\_

- Ans  1. 225

- 2. 25
- 3. 255
- 4. 125

Question ID : 9895806521  
Chosen Option : 2

Q.9 Select the option in which the given figure is embedded.



Ans

- 1.
- 2.
- 3.
- 4.

Question ID : 9895806526  
Chosen Option : 3

Q.10 Select the number that DOES NOT belong to the following group.

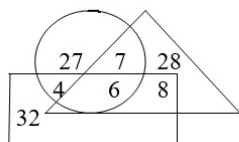
1, 1, 1.5, 3, 7.5, 22.5, 78.75, 310

- 1. 22.5
- 2. 310
- 3. 78.75
- 4. 1.5

Question ID : 9895806520  
Chosen Option : 3

Q.1  
1

In the given Venn diagram, the rectangle represents students, the triangle represents teachers and the circle represents players. Study the diagram carefully and answer the question that follows.  
How many students are players but not teachers?



- Ans
- 1. 4
  - 2. 6
  - 3. 8
  - 4. 7

Question ID : 9895806530  
Chosen Option : 1

Q.1 There is only one dictionary in a library which will be used by 6 students P, Q, R, S, T and U, one by one. S will use it immediately after Q and before P. T will use it immediately after R and before U. Q will use the dictionary after U. Who will use the dictionary in the end?

- Ans
- 1. S
  - 2. U
  - 3. Q
  - 4. P

Question ID : 9895806515  
Chosen Option : 4

Q.1 Identify the number pair that is different from the rest.

- Ans
- 1. 45 - 5
  - 2. 18 - 2
  - 3. 72 - 9
  - 4. 90 - 10

Question ID : 9895806522  
Chosen Option : 4

Q.1 Select the option that most closely resembles the mirror image of the given word.

TWIN

- Ans
- 1. IIIWT
  - 2. NIMT
  - 3. NIWT
  - 4. TWIN

Question ID : 9895806528  
Chosen Option : 3

Q.1 If D = 3, G = 6, and OWL = 47, then FLOWER = \_\_\_\_\_.

- Ans
- 1. 89
  - 2. 71
  - 3. 73
  - 4. 82

Question ID : \_\_\_\_\_  
Chosen Option : \_\_\_\_\_

Question ID : 9895806512

Chosen Option : 4

Q.1 Identify the number that will come in the following series.

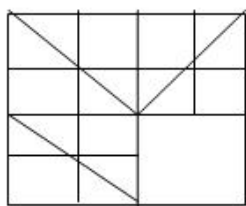
2500, 2400, 2200, 1900, 1500, \_\_\_\_\_

- Ans
- 1. 1000
  - 2. 900
  - 3. 1110
  - 4. 1100

Question ID : 9895806519

Chosen Option : 1

Q.1 Select the correct option to complete the following pattern.



- Ans
- 1.
  - 2.
  - 3.
  - 4.

Question ID : 9895806527

Chosen Option : 2

Q.1 Select the term that will come next in the following series.

Z2A, X4D, V6G, T8J, R10M, \_\_\_\_\_.

- Ans
- 1. Q12Q
  - 2. Q12P
  - 3. P12Q
  - 4. P12P

Question ID : 9895806506

Chosen Option : 3

Q.1 Select the option that is analogous to the given pair.

Nation : President

- Ans
- 1. State : Minister

- 2. State : Chief Minister
- 3. State : Governor
- 4. State : Chief Secretary

Question ID : 9895806510  
Chosen Option : 3

Q.2  
0 Which two signs need to be interchanged to make the given equation correct?

$$5 \times 5 + 5 - 5 \div 5 = 5$$

- Ans
- 1.  $\times$  and  $-$
  - 2.  $+$  and  $\times$
  - 3.  $+$  and  $-$
  - 4.  $\div$  and  $-$

Question ID : 9895806523  
Chosen Option : 3

Q.2  
1 Six friends P, Q, R, S, T and U are watching a cricket match sitting in a stadium. P is sitting at one extreme end. T is sitting between P and U. R is sitting to the immediate left of U and immediate right of Q. Who is sitting at the extreme right end?

- Ans
- 1. S
  - 2. Q
  - 3. P
  - 4. R

Question ID : 9895806514  
Chosen Option : 3

Q.2  
2 Read the given statements and conclusions carefully and decide which of the conclusions logically follow(s) from the statements.

**Statements:**

The national norm is 150 beds per thousand population, but in this state, 200 beds per thousand are available in the hospitals.

**Conclusions:**

- I. The state's norm is appropriate.
- II. The state's health system is taking adequate care in this regard.

- Ans
- 1. Neither conclusion I nor conclusion II follows.
  - 2. Only conclusion I follows.
  - 3. Only conclusion II follows.
  - 4. Both conclusions I and II follow.

Question ID : 9895806518  
Chosen Option : 4

Q.2  
3 In the following number series, two numbers have been put within brackets. Study the series carefully and select the correct alternative with respect to the series.

0, 1, 4, 9, (15), 25, 36, 49, (64), 81

- Ans
- 1. Both the bracketed numbers are incorrect.
  - 2. Both the bracketed numbers are correct.
  - 3. The first bracketed number (from the left) is incorrect and the second is correct.
  - 4. The first bracketed number (from the left) is correct and the second is incorrect.

Question ID : 9895806524  
Chosen Option : 3

Q.2  
4 Identify the odd one from the following.

- Ans
- 1. HL
  - 2. KN
  - 3. CG
  - 4. UY

Question ID : 9895806508  
Chosen Option : 2

Q.2  
5 Select the combination that will come next in the following series.

X	X0	XX	XX0	?
---	----	----	-----	---

- Ans
- 1. 0XX
  - 2. XXX
  - 3. XXX0
  - 4. X0X

Question ID : 9895806525  
Chosen Option : 1

Q.2  
6 What was the brand name of the first electric powered washing machine?

- Ans
- 1. Thor
  - 2. Images
  - 3. Icon
  - 4. Goliath

Question ID : 9895806570  
Chosen Option : 1

Q.2  
7 When was the Aadhaar (Targeted Delivery of Financial and Other Subsidies, Benefits and Services) Act passed?

- Ans
- 1. 2015
  - 2. 2017
  - 3. 2016
  - 4. 2014

Question ID : 9895806568

Chosen Option : 1

Q.2  
8 What does Individual Vulnerability refer to in Economics?

- Ans
- 1. The threat to Intellectual property
  - 2. The threat of Exploitation
  - 3. The threat to health
  - 4. The threat of poverty

Question ID : 9895806565

Chosen Option : 2

Q.2  
9 In the WTO's Agreement on Agriculture (AoA), what do the terms Green Box, Blue Box and AMS (Amber Box) stand for?

- Ans
- 1. Interest
  - 2. Subsidies
  - 3. Bonus
  - 4. Taxes

Question ID : 9895806566

Chosen Option : 4

Q.3  
0 Which of the following animals hibernates?

- Ans
- 1. Tiger
  - 2. Bat
  - 3. Jackal
  - 4. Deer

Question ID : 9895806572

Chosen Option : 3

Q.3  
1 Rungrado May Stadium, the largest football stadium in the world, is located in which country?

- Ans
- 1. China
  - 2. Singapore
  - 3. North Korea
  - 4. Spain

Question ID : 9895806560

Chosen Option : 3

Q.3  
2 What is the highest peak of Pir Panjal Range?

- Ans
- 1. Indrasan
  - 2. Kabru
  - 3. Nanda Devi
  - 4. Kamet

Question ID : 9895806575

Chosen Option : 2



Q.3 Who is the Padma Bhushan awardee who guided ISRO to blast its heaviest ever rocket GSLV Mark-III, paving the road to manned space missions?

- Ans
- 1. Fali Nariman
  - 2. Manohar Parrikar
  - 3. K. Radhakrishnan
  - 4. Nandan Nilekani

Question ID : 9895806563  
Chosen Option : 1

Q.3 Which country is the largest producer of mangoes as of 2018?

- Ans
- 1. Brazil
  - 2. Sri Lanka
  - 3. India
  - 4. China

Question ID : 9895806577  
Chosen Option : 3

Q.3 Who invaded India in 326 BC after crossing the river Indus, advancing towards Taxila?

- Ans
- 1. Eduardo Barbosa
  - 2. Nicolini
  - 3. Marco Polo
  - 4. Alexander

Question ID : 9895806579  
Chosen Option : 4

Q.3 'Paika' is a traditional dance form associated with which Indian state?

- Ans
- 1. Uttarakhand
  - 2. Jharkhand
  - 3. Sikkim
  - 4. Madhya Pradesh

Question ID : 9895806556  
Chosen Option : 2

Q.3 Which of the following diseases is caused by bats?

- Ans
- 1. Dengue
  - 2. Zika
  - 3. Ebola
  - 4. Chikungunya

Question ID : 9895806574  
Chosen Option : 3

Q.3 Which of the following options is an ancient literary source that sheds light on the ancient period of Indian history?

- Ans
- 1. Puranas

- 2. Bhagwat Gita
- 3. Upanishads
- 4. Sama Veda

Question ID : 9895806578  
Chosen Option : 2

Q.3  
9 In which country is the highest mountain peak of Africa Kilimanzaro located?

- Ans
- 1. Kenya
  - 2. Zambia
  - 3. Ghana
  - 4. Tanzania

Question ID : 9895806576  
Chosen Option : 3

Q.4  
0 Chaukhandi Stupa is a Buddhist monument located in which Indian state?

- Ans
- 1. Punjab
  - 2. Uttar Pradesh
  - 3. Sikkim
  - 4. West Bengal

Question ID : 9895806558  
Chosen Option : 4

Q.4  
1 'Jyotipunj' is a book written by:

- Ans
- 1. Narendra Modi
  - 2. Dhirubhai Ambani
  - 3. V.S. Naipaul
  - 4. Munshi Premchand

Question ID : 9895806562  
Chosen Option : 3

Q.4  
2 A deficiency of Vitamin A causes:

- Ans
- 1. Anaemia
  - 2. Goitre
  - 3. Night blindness
  - 4. Rickets

Question ID : 9895806573  
Chosen Option : 3

Q.4  
3 Which acids are present in most grapes?

- Ans
- 1. Hydrochloric and sulphuric acid
  - 2. Nitric and sulphuric

- 3. Tartaric and malic acid
- 4. Acetic acid and nitric acid

Question ID : 9895806571  
Chosen Option : 3

Q.4  
4 In which of the following Indian state was the game of polo born?

- Ans
- 1. Assam
  - 2. West Bengal
  - 3. Arunachal Pradesh
  - 4. Manipur

Question ID : 9895806559  
Chosen Option : 3

Q.4  
5 The Shanti Swaroop Bhatnagar Award is given in India for contribution to the field of:

- Ans
- 1. sports
  - 2. social work
  - 3. science and technology
  - 4. literature

Question ID : 9895806561  
Chosen Option : 1

Q.4  
6 In which city was the East India Association formed in the year 1866?

- Ans
- 1. Kolkata
  - 2. Singapore
  - 3. London
  - 4. Paris

Question ID : 9895806580  
Chosen Option : 1

Q.4  
7 In which amendment of the Constitution was the voting age reduced from 21 to 18 years?

- Ans
- 1. 56<sup>th</sup>
  - 2. 70<sup>th</sup>
  - 3. 65<sup>th</sup>
  - 4. 61<sup>st</sup>

Question ID : 9895806569  
Chosen Option : 1

Q.4  
8 Federalism is a system of government in which the powers is \_\_\_\_\_ between a central authority and various constituent units of the country.

- Ans
- 1. Divided
  - 2. Incited
  - 3. Derided

4. Indicted

Question ID : 9895806567  
Chosen Option : 3

Q.4  
9 'Teeyan' is a festival celebrated in which state of India?

- Ans
- 1. Gujarat
  - 2. Jammu and Kashmir
  - 3. Rajasthan
  - 4. Punjab

Question ID : 9895806557  
Chosen Option : 1

Q.5  
0 What does Buffer stock mean?

- Ans
- 1. A barrier on stock creation when surplus is available
  - 2. A reserve of commodities used to offset deficit
  - 3. A focus on production of one specific variety when there is a deficit
  - 4. A preventive measure to stop excessive distribution

Question ID : 9895806564  
Chosen Option : 3

Q.5  
1 Two trains are coming from opposite side at 40 km/hrs and 50 km/hrs from the different places 360 km apart. After how many hours two trains will meet to each other?

- Ans
- 1. 4 hrs
  - 2. 6 hrs
  - 3. 5 hrs
  - 4. 3 hrs

Question ID : 9895806619  
Chosen Option : 2

Q.5  
2 The greatest number that will divide 146, 248 and 611 leaving remainders 2,8 and 11 respectively is:

- Ans
- 1. 47
  - 2. 144
  - 3. 24
  - 4. 612

Question ID : 9895806606  
Chosen Option : 3

Q.5  
3

Study the Table Properly and answer by interpreting the data.

The table given the percentage of result by four different classes in the five different year of examination:

Year	Class – IX (Marks are in %)	Class – X (Marks are in %)	Class – XI (Marks are in %)	Class – XII (Marks are in %)
2012	90	80	85	75
2013	70	65	62	58
2014	65	35	32	33
2015	50	48	38	35
2016	55	45	32	38

In which class the average performance is least in all the five years?

- Ans  1. Class – XII  
 2. Class – XI  
 3. Class – IX  
 4. Class – X

Question ID : 9895806629  
Chosen Option : 3

Q.5  
4 The value of  $(6 \times 15) \div (2 \times 3) - 2^2 + 3$  is:

- Ans  1. 12  
 2. 14  
 3. 4  
 4. 6

Question ID : 9895806607  
Chosen Option : 3

Q.5  
5 In a board examination, 75% of the total examinees passed. If the number of failures is 625, the total number of examinees is:

- Ans  1. 3800  
 2. 2400  
 3. 3600  
 4. 2500

Question ID : 9895806614  
Chosen Option : 2

Q.5  
6 Study the Table Properly and answer by interpreting the data.

The table given the percentage of result by four different classes in the five different year of examination:

Year	Class – IX (Marks are in %)	Class – X (Marks are in %)	Class – XI (Marks are in %)	Class – XII (Marks are in %)
2012	90	80	85	75
2013	70	65	62	58
2014	65	35	32	33
2015	50	48	38	35
2016	55	45	32	38

What is the average percentage of marks in Class-IX in the year 2012 to 2016?

- Ans  1. 65%  
 2. 72%  
 3. 66%  
 4. 62%

Question ID : 9895806628

Chosen Option : 2

Q.5 A mixture contains milk and water in the ratio of 4 : 3. When 5 liters of water is added to this mixture, the ratio of milk and water becomes 6 : 7. The quantity of milk in the mixture is:

- Ans
- 1. 12 liters
  - 2. 5 liters
  - 3. 15 liters
  - 4. 10 liters

Question ID : 9895806626  
Chosen Option : 3

Q.5 A dining set having a sale price of ₹4000 is sold at a discount of 8%, thereby earning a profit of 10%. The cost price of the dining set is:

- Ans
- 1. ₹3345.45
  - 2. ₹3786.78
  - 3. ₹3568.80
  - 4. ₹3496.50

Question ID : 9895806613  
Chosen Option : 2

Q.5 An amount of ₹4600 has been distributed between x, y & z in the ratio of  $\frac{1}{2} : \frac{2}{3} : \frac{3}{4}$ . The share of y is:

- Ans
- 1. 1600
  - 2. 2000
  - 3. 1200
  - 4. 1800

Question ID : 9895806625  
Chosen Option : 1

Q.6 The ratio between the speeds of two trains is 3 : 4. The second train runs 800 km in 5 hrs, and speed of first train is:

- Ans
- 1. 120 km/hrs
  - 2. 140 km/hrs
  - 3. 180 km/hrs
  - 4. 160 km/hrs

Question ID : 9895806620  
Chosen Option : 3

Q.6 In a cricket team, the average age of 11 players is 22 years. When the age of team coach is included to it, the average age increases by 1. The age of coach of the team is:

- Ans
- 1. 33 years
  - 2. 34 years
  - 3. 43 years
  - 4. 53 years

Question ID : 9895806610  
Chosen Option : 3

Q.6 Sheela buys 3 pens for ₹24 and sold at 2 for ₹18 and 1 for ₹45. The profit or loss percent is:

- Ans  1. Loss 12.5%  
 2. Profit 12%  
 3. Loss 12%  
 4. Profit 12.5%

Question ID : 9895806612

Chosen Option : 4

Q.6 Sweta can paint a wall in 30 hours, while Ansul can paint it in 40 hours. If they paint it together and get payment of ₹14,000. What is Ansul's share?

- Ans  1. ₹6000/-  
 2. ₹12000/-  
 3. ₹10000/-  
 4. ₹8000/-

Question ID : 9895806617

Chosen Option : 3

Q.6 What will be the compound interest on ₹6000 at 3% per annum for 2 years compounded annually?

- Ans  1. ₹365.40  
 2. ₹653.20  
 3. ₹372.50  
 4. ₹725.10

Question ID : 9895806616

Chosen Option : 2

Q.6 The scores done by a bats man in a cricket series are 12, 25, 38, 56, 64, 86. What will be the median?

- Ans  1. 45  
 2. 56  
 3. 47  
 4. 38

Question ID : 9895806627

Chosen Option : 3

Q.6 A trader sold a machine for ₹18,800 and lost 6%. The cost price of the machine is:

- Ans  1. ₹22000  
 2. ₹24000  
 3. ₹20000  
 4. ₹18000

Question ID : 9895806611

Chosen Option : 2

Q.6 The ratio of the area of two triangles is 2 : 3 and ratio of their height is 3 : 2. The ratio of their bases is:

- Ans  1. 3 : 2  
 2. 4 : 9  
 3. 9 : 4

4. 2 : 3

Question ID : 9895806621  
Chosen Option : 4

Q.6 Study the Table Properly and answer by interpreting the data.  
8

The table given the percentage of result by four different classes in the five different year of examination:

Year	Class – IX (Marks are in %)	Class – X (Marks are in %)	Class – XI (Marks are in %)	Class – XII (Marks are in %)
2012	90	80	85	75
2013	70	65	62	58
2014	65	35	32	33
2015	50	48	38	35
2016	55	45	32	38

In Which year the average performance is maximum in all the four classes?

- Ans
- 1. 2016
  - 2. 2015
  - 3. 2013
  - 4. 2012

Question ID : 9895806630  
Chosen Option : 3

Q.6 The value of  $62 - 5$  of  $(18 - 14) + 5 \times 7$  is equal to:

- Ans
- 1. 18
  - 2. 28
  - 3. 15
  - 4. 77

Question ID : 9895806608  
Chosen Option : 2

Q.7 If the radius of the circle is decreased by 10%. The percentage decreased in its areas is :

- Ans
- 1. 90%
  - 2. 110%
  - 3. 19%
  - 4. 91%

Question ID : 9895806623  
Chosen Option : 3

Q.7 Simple interest on a certain sum is  $\frac{16}{25}$  of the total sum. If rate percent and time are same, what will be the rate of interest?

- Ans
- 1. 6.8%
  - 2. 5%
  - 3. 12%
  - 4. 8%

Question ID : 9895806615  
Chosen Option : 3

Q.7 The average of five consecutive numbers is 15. The highest of these number is:



- Ans
- 1. 12
  - 2. 19
  - 3. 17
  - 4. 15

Question ID : 9895806609  
Chosen Option : 2

Q.7 Sanjya and Saumya together can finish a work in 9 days. Sanjya can do the same job on his own in 15 days. The same work Saumya can do by himself in:

- Ans
- 1. 14 days
  - 2.  $15\frac{1}{2}$  days
  - 3.  $22\frac{1}{2}$  days
  - 4. 22 days

Question ID : 9895806618  
Chosen Option : 1

Q.7 The base of the parallelogram is twice of its height and its area is  $288\text{cm}^2$ . The base of the parallelogram is:

- Ans
- 1. 12cm
  - 2. 24cm
  - 3. 36cm
  - 4. 28cm

Question ID : 9895806622  
Chosen Option : 3

Q.7 The mean proportional between 36 and 121 is equal to:

- Ans
- 1. 72
  - 2. 85
  - 3. 66
  - 4. 157

Question ID : 9895806624  
Chosen Option : 3

Section : English Language

Q.1 From the given options, identify the segment in the sentence which contains the grammatical error.

Pragati Maidan is the famous international exhibition centre at Delhi for trade fairs.

- Ans
- 1. for trade fairs
  - 2. Pragati Maidan is
  - 3. at Delhi
  - 4. the famous

Question ID : 9895806181  
Chosen Option : 4

Q.2

Select the synonym of the given word.

PROBABLE

- Ans
- 1. Tangible
  - 2. Substitute
  - 3. Likely
  - 4. Similar

Question ID : 9895806195  
Chosen Option : 4

Q.3 From the given options, identify the segment in the sentence which contains the grammatical error.

Japan will be a country well known for its culture, technology and cuisines like sushi.

- Ans
- 1. will be a country
  - 2. well known for
  - 3. cuisines like
  - 4. its culture

Question ID : 9895806180  
Chosen Option : 3

Q.4 Select the most appropriate option to substitute the underlined segment in the given sentence. If there is no need to substitute it, select No improvement.

He work in a shop which makes handicraft goods.

- Ans
- 1. works in a shop which make
  - 2. works in a shop which makes
  - 3. No improvement
  - 4. working in a shop which makes

Question ID : 9895806184  
Chosen Option : 4

Q.5 From the given options, identify the segment in the sentence which contains the grammatical error.

The country also needs large doses of infrastructure additions – roads or highways, power plants, distribution networks, airports and ports.

- Ans
- 1. airports and ports
  - 2. also needs
  - 3. roads or highways
  - 4. The country

Question ID : 9895806182  
Chosen Option : 2

Q.6 Select the word which means the same as the group of words given.

One that has life

- Ans
- 1. Mortal
  - 2. Animate
  - 3. Inanimate

4. Conscious

Question ID : 9895806200  
Chosen Option : 1

Comprehension:

In the following passage some words have been deleted. Fill in the blanks with the help of the alternatives given.

Bird-watching, as it is popularly called, is a peaceful (1) \_\_\_\_\_. It is not entirely without occasional physical thrills and even (2) \_\_\_\_\_. The elephant ridden jungles in South India, for instance. I found myself in uncomfortably disturbing (3) \_\_\_\_\_. Actually, there is little danger from a wild elephant unless it happens to be a female with a small (4) \_\_\_\_\_ along with her. What such situations demand is (5) \_\_\_\_\_ and not valour.

SubQuestion No : 7

Q.7 Select the most appropriate option that will fill in the blank number 1.

- Ans
- 1. job
  - 2. service
  - 3. activity
  - 4. work

Question ID : 9895806189  
Chosen Option : 3

Comprehension:

In the following passage some words have been deleted. Fill in the blanks with the help of the alternatives given.

Bird-watching, as it is popularly called, is a peaceful (1) \_\_\_\_\_. It is not entirely without occasional physical thrills and even (2) \_\_\_\_\_. The elephant ridden jungles in South India, for instance. I found myself in uncomfortably disturbing (3) \_\_\_\_\_. Actually, there is little danger from a wild elephant unless it happens to be a female with a small (4) \_\_\_\_\_ along with her. What such situations demand is (5) \_\_\_\_\_ and not valour.

SubQuestion No : 8

Q.8 Select the most appropriate option that will fill in the blank number 2.

- Ans
- 1. conditions
  - 2. hazards
  - 3. pleasures
  - 4. circumstances

Question ID : 9895806190  
Chosen Option : 1

Comprehension:

In the following passage some words have been deleted. Fill in the blanks with the help of the alternatives given.

Bird-watching, as it is popularly called, is a peaceful (1) \_\_\_\_\_. It is not entirely without occasional physical thrills and even (2) \_\_\_\_\_. The elephant ridden jungles in South India, for instance. I found myself in uncomfortably disturbing (3) \_\_\_\_\_. Actually, there is little danger from a wild elephant unless it happens to be a female with a small (4) \_\_\_\_\_ along with her. What such situations demand is (5) \_\_\_\_\_ and not valour.

SubQuestion No : 9

Q.9 Select the most appropriate option that will fill in the blank number 3.

- Ans
- 1. zones
  - 2. atmospheres
  - 3. situations
  - 4. locations

Question ID : 9895806191  
Chosen Option : 3

Comprehension:

In the following passage some words have been deleted. Fill in the blanks with the help of the alternatives given.

Bird-watching, as it is popularly called, is a peaceful (1) \_\_\_\_\_. It is not entirely without occasional physical thrills and even (2) \_\_\_\_\_. The elephant ridden jungles in South India, for instance. I found myself in uncomfortably disturbing (3) \_\_\_\_\_. Actually, there is little danger from a wild elephant unless it happens to be a female with a small (4) \_\_\_\_\_ along with her. What such situations demand is (5) \_\_\_\_\_ and not valour.

SubQuestion No : 10

Q.10 Select the most appropriate option that will fill in the blank number 4.

- Ans
- 1. cub
  - 2. calf
  - 3. pup
  - 4. kitten

Question ID : 9895806192  
Chosen Option : 3

Comprehension:

In the following passage some words have been deleted. Fill in the blanks with the help of the alternatives given.

Bird-watching, as it is popularly called, is a peaceful (1) \_\_\_\_\_. It is not entirely without occasional physical thrills and even (2) \_\_\_\_\_. The elephant ridden jungles in South India, for instance. I found myself in uncomfortably disturbing (3) \_\_\_\_\_. Actually, there is little danger from a wild elephant unless it happens to be a female with a small (4) \_\_\_\_\_ along with her. What such situations demand is (5) \_\_\_\_\_ and not valour.

SubQuestion No : 11

Q.1  
1 Select the most appropriate option that will fill in the blank number 5.

- Ans
- 1. loyalty
  - 2. honesty
  - 3. forgetfulness
  - 4. discretion

Question ID : 9895806193  
Chosen Option : 2

Q.1  
2 Select the correctly spelt word.

- Ans
- 1. Accessories
  - 2. Accessories
  - 3. Accessories
  - 4. Accesories

Question ID : 9895806202  
Chosen Option : 4

Q.1  
3 Select the most appropriate word to fill in the blank.

Pollution of rivers and seas destroys \_\_\_\_\_ life.

- Ans
- 1. Aerial
  - 2. Marine
  - 3. Desert
  - 4. Terrestrial

Question ID : 9895806204  
Chosen Option : 3

Q.1  
4 Select the most appropriate option to fill in the blank.

Their wages were very low, so the workers went on a \_\_\_\_\_.

- Ans
- 1. strike
  - 2. leave
  - 3. strife
  - 4. conflict

Question ID : 9895806187

Chosen Option : 3

Q.1  
5 Select the most appropriate ANTONYM of the given word.

COARSE

- Ans
- 1. Fine
  - 2. Texture
  - 3. Rough
  - 4. Glossy

Question ID : 9895806197

Chosen Option : 3

Q.1  
6 Select the option that means the same as the given idiom.

Run of the mill

- Ans
- 1. Ordinary
  - 2. Rare
  - 3. Exceptional
  - 4. Uncommon

Question ID : 9895806198

Chosen Option : 4

Q.1  
7 Select the most appropriate option to fill in the blank.

Ten million people watch this television \_\_\_\_\_ every week.

- Ans
- 1. incident
  - 2. event
  - 3. programme
  - 4. media

Question ID : 9895806186

Chosen Option : 3

Q.1  
8 Select the synonym of the given word.

LETHARGY

- Ans
- 1. Delight
  - 2. Thrill
  - 3. Wisdom
  - 4. Fatigue

Question ID : 9895806194

Chosen Option : 2

Q.1  
9 Select the most appropriate word to fill in the blank.

People have used indigenous plants for \_\_\_\_\_ of ailments since ancient times.

- Ans  1. treatment  
 2. exclusion  
 3. adulteration  
 4. pollution

Question ID : 9895806205  
Chosen Option : 1

Q.2  
0 Select the option that means the same as the given idiom.

Man of letters

- Ans  1. A student  
 2. A scholar  
 3. One who writes letters  
 4. One who can read letters

Question ID : 9895806199  
Chosen Option : 4

Q.2  
1 Select the word which means the same as the group of words given.

Those that feed only on plants

- Ans  1. Omnivorous  
 2. Predatory  
 3. Amphibian  
 4. Herbivorous

Question ID : 9895806201  
Chosen Option : 3

Q.2  
2 Select the correctly spelt word.

- Ans  1. Greivance  
 2. Grievanse  
 3. Grievence  
 4. Grievance

Question ID : 9895806203  
Chosen Option : 3

Q.2  
3 Select the most appropriate option to substitute the underlined segment in the given sentence. If there is no need to substitute it, select No improvement.

It's getting dark, can you switch the lights please?

- Ans  1. No improvement  
 2. can you switch on the lights please?  
 3. can you switch of the lights please?  
 4. can you on the lights please?

Question ID : 9895806183  
Chosen Option : 4

Q.2  
4 Select the antonym of the given word.

WHOLESALE

- Ans
- 1. Discount
  - 2. Retail
  - 3. Concession
  - 4. Rebate

Question ID : 9895806196  
Chosen Option : 3

Q.2  
5 Select the most appropriate option to substitute the underlined segment in the given sentence. If there is no need to substitute it, select No improvement.

If he remains absent from the college, he will have to pay a fine.

- Ans
- 1. If he is remain absent from
  - 2. No improvement
  - 3. If he is remaining absent from
  - 4. If he will remains absent from

Question ID : 9895806185  
Chosen Option : 3

Section : Hindi Language

Q.1 दिए गए शब्द के पर्यायवाची शब्द का चयन करें।

शेर

- Ans
- 1. अनल
  - 2. राकेश
  - 3. धेनु
  - 4. मृगेन्द्र

Question ID : 9895805990  
Chosen Option : --

Q.2 रिक्त स्थान को भरने के लिए उपयुक्त शब्द का चयन करें।

वे पार्क में \_\_\_\_\_ कर रहे हैं।

- Ans
- 1. चल
  - 2. घूम
  - 3. भाग
  - 4. भ्रमण

Question ID : 9895805980  
Chosen Option : --

Q.3 दिए गए शब्द के पर्यायवाची शब्द का चयन करें।

तलवार



- Ans
- 1. तड़ाग
  - 2. क्षीर
  - 3. वसन
  - 4. खड्ग

Question ID : 9895805991  
Chosen Option : --

Q.4 सही वर्तनी वाले शब्द का चयन करें।

- Ans
- 1. पंखुड़ी
  - 2. पंखूड़ी
  - 3. पनखुड़ी
  - 4. पन्खुड़ी

Question ID : 9895805997  
Chosen Option : --

Q.5 निम्नलिखित में से उस विकल्प का चयन करें जो 'पेट पर लात मारना' मुहावरे का अर्थ व्यक्त करता है।

- Ans
- 1. बहुत भूख लगना
  - 2. पेट पर लात मार कर लड़ना
  - 3. लात से पेट पर चोट पहुँचाना
  - 4. आजीविका से वंचित करना

Question ID : 9895805993  
Chosen Option : --

Q.6 सही वर्तनी वाले शब्द का चयन करें।

- Ans
- 1. मुरलीधर
  - 2. मूर्लीधर
  - 3. मुरलीदर
  - 4. मुरलिदर

Question ID : 9895805996  
Chosen Option : --

Comprehension:

निम्नलिखित गद्यांश के रिक्त स्थानों की पूर्ति गद्यांश के नीचे दिए गए प्रश्नों के अनुसार कीजिए -

भारतवर्ष अपनी चित्रकला, शिल्पकला और वास्तुकला के लिए पूरे विश्व में \_\_\_\_\_ (1) है। आगरा में यमुना तट पर स्थित ताजमहल वास्तुकला का एक अद्भुत \_\_\_\_\_ (2) है। अपनी निर्माणकला के कारण ही यह विश्व के सात \_\_\_\_\_ (3) में से एक है। सफेद संगमरमर से बने ताज की \_\_\_\_\_ (4) सुंदरता को देखकर विदेशी पर्यटक दाँतों तले उँगली दबा लेते हैं। ताजमहल का निर्माण बादशाह शाहजहाँ ने अपनी बेगम मुमताज की \_\_\_\_\_ (5) में करवाया था।

SubQuestion No : 7

Q.7 गद्यांश में संकेतित रिक्त स्थान (1) के लिए उपयुक्त शब्द होगा -

- Ans
- 1. प्रसिद्ध
  - 2. अज्ञात
  - 3. महान
  - 4. सम्मान

Question ID : 9895805983  
Chosen Option : --

Comprehension:

निम्नलिखित गद्यांश के रिक्त स्थानों की पूर्ति गद्यांश के नीचे दिए गए प्रश्नों के अनुसार कीजिए -

भारतवर्ष अपनी चित्रकला, शिल्पकला और वास्तुकला के लिए पूरे विश्व में \_\_\_\_\_ (1) है। आगरा में यमुना तट पर स्थित ताजमहल वास्तुकला का एक अद्भुत \_\_\_\_\_ (2) है। अपनी निर्माणकला के कारण ही यह विश्व के सात \_\_\_\_\_ (3) में से एक है। सफेद संगमरमर से बने ताज की \_\_\_\_\_ (4) सुंदरता को देखकर विदेशी पर्यटक दाँतों तले उँगली दबा लेते हैं। ताजमहल का निर्माण बादशाह शाहजहाँ ने अपनी बेगम मुमताज की \_\_\_\_\_ (5) में करवाया था।

SubQuestion No : 8

Q.8 गद्यांश में संकेतित रिक्त स्थान (2) के लिए उपयुक्त शब्द होगा -

- Ans
- 1. कला
  - 2. नमूना

3. तस्वीर

4. चित्र

Question ID : 9895805984

Chosen Option : --

Comprehension:

निम्नलिखित गद्यांश के रिक्त स्थानों की पूर्ति गद्यांश के नीचे दिए गए प्रश्नों के अनुसार कीजिए -

भारतवर्ष अपनी चित्रकला, शिल्पकला और वास्तुकला के लिए पूरे विश्व में \_\_\_\_\_ (1) है। आगरा में यमुना तट पर स्थित ताजमहल वास्तुकला का एक अद्भुत \_\_\_\_\_ (2) है। अपनी निर्माणकला के कारण ही यह विश्व के सात \_\_\_\_\_ (3) में से एक है। सफेद संगमरमर से बने ताज की \_\_\_\_\_ (4) सुंदरता को देखकर विदेशी पर्यटक दाँतों तले उँगली दबा लेते हैं। ताजमहल का निर्माण बादशाह शाहजहाँ ने अपनी बेगम मुमताज की \_\_\_\_\_ (5) में करवाया था।

SubQuestion No : 9

Q.9 गद्यांश में संकेतित रिक्त स्थान (3) के लिए उपयुक्त शब्द होगा -

Ans

1. अजूबों

2. प्रमाणों

3. अजीबों

4. कल्पनाओं

Question ID : 9895805985

Chosen Option : --

Comprehension:

निम्नलिखित गद्यांश के रिक्त स्थानों की पूर्ति गद्यांश के नीचे दिए गए प्रश्नों के अनुसार कीजिए -

भारतवर्ष अपनी चित्रकला, शिल्पकला और वास्तुकला के लिए पूरे विश्व में \_\_\_\_\_ (1) है। आगरा में यमुना तट पर स्थित ताजमहल वास्तुकला का एक अद्भुत \_\_\_\_\_ (2) है। अपनी निर्माणकला के कारण ही यह विश्व के सात \_\_\_\_\_ (3) में से एक है। सफेद संगमरमर से बने ताज की \_\_\_\_\_ (4) सुंदरता को देखकर विदेशी पर्यटक दाँतों तले उँगली दबा लेते हैं। ताजमहल का निर्माण बादशाह शाहजहाँ ने अपनी बेगम मुमताज की \_\_\_\_\_ (5) में करवाया था।

SubQuestion No : 10

Q.1  
0 गद्यांश में संकेतित रिक्त स्थान (4) के लिए उपयुक्त शब्द होगा -

- Ans
- 1. आकर्षण
  - 2. अनुपम
  - 3. भयंकर
  - 4. स्वच्छ

Question ID : 9895805986  
Chosen Option : --

Comprehension:

निम्नलिखित गद्यांश के रिक्त स्थानों की पूर्ति गद्यांश के नीचे दिए गए प्रश्नों के अनुसार कीजिए -

भारतवर्ष अपनी चित्रकला, शिल्पकला और वास्तुकला के लिए पूरे विश्व में \_\_\_\_\_ (1) है। आगरा में यमुना तट पर स्थित ताजमहल वास्तुकला का एक अद्भुत \_\_\_\_\_ (2) है। अपनी निर्माणकला के कारण ही यह विश्व के सात \_\_\_\_\_ (3) में से एक है। सफेद संगमरमर से बने ताज की \_\_\_\_\_ (4) सुंदरता को देखकर विदेशी पर्यटक दाँतों तले उँगली दबा लेते हैं। ताजमहल का निर्माण बादशाह शाहजहाँ ने अपनी बेगम मुमताज की \_\_\_\_\_ (5) में करवाया था।

SubQuestion No : 11

Q.1  
1 गद्यांश में संकेतित रिक्त स्थान (5) के लिए उपयुक्त शब्द होगा -

- Ans
- 1. प्रभाव

- 2. याद
- 3. खुशी
- 4. उत्सव

Question ID : 9895805987  
Chosen Option : --

Q.1<sub>2</sub> दिए गए वाक्य का वह भाग ज्ञात करें जिसमें कोई त्रुटि है।

राजनीतिक दल आपसी तनाव की लाभ उठाकर राजनीतिक स्वार्थ पूरा करते हैं।

- Ans
- 1. राजनीतिक स्वार्थ
  - 2. राजनीतिक दल
  - 3. पूरा करते हैं।
  - 4. आपसी तनाव की लाभ उठाकर

Question ID : 9895805974  
Chosen Option : --

Q.1<sub>3</sub> रिक्त स्थान को भरने के लिए उपयुक्त शब्द का चयन करें।

उसने चोरी ही \_\_\_\_\_ बल्कि हत्या भी की।

- Ans
- 1. की
  - 2. और
  - 3. नहीं
  - 4. परंतु

Question ID : 9895805978  
Chosen Option : --

Q.1<sub>4</sub> दिये गये वाक्यांश के लिए एक शब्द दीजिये।

जिसका इलाज न हो सके

- Ans
- 1. साध्य
  - 2. असाध्य
  - 3. दुस्साध्य
  - 4. कुंठा

Question ID : 9895805995  
Chosen Option : --

Q.1<sub>5</sub> दिए गए वाक्य का वह भाग ज्ञात करें जिसमें कोई त्रुटि है।

संत-महात्मा अपना सादगी और पवित्रता के कारण लोकप्रिय होते हैं।

- Ans
- 1. संत-महात्मा
  - 2. लोकप्रिय होते हैं।

3. अपना सादगी

4. और पवित्रता के कारण

Question ID : 9895805973  
Chosen Option : --

Q.1 <sub>6</sub> दिए गए वाक्य का वह भाग ज्ञात करें जिसमें कोई त्रुटि है।

यदि नदियाँ नहीं बचाई गईं तो इनका अस्तित्व ही समाप्त हो जाएगी।

Ans  1. इनका अस्तित्व ही

2. नहीं बचाई गईं तो

3. यदि नदियाँ

4. समाप्त हो जाएगी।

Question ID : 9895805972  
Chosen Option : --

Q.1 <sub>7</sub> निम्नलिखित में से उस विकल्प का चयन करें जो 'पिंड छुड़ाना' मुहावरे का अर्थ व्यक्त करता है।

Ans  1. पीछा छुड़ाना

2. पीछे पड़ना

3. पीछे लगाना

4. पीछा करना

Question ID : 9895805992  
Chosen Option : --

Q.1 <sub>8</sub> दिए गए वाक्य में रेखांकित खंड को प्रतिस्थापित करने के लिए उपयुक्त विकल्प का चयन करें।

मैंने अपनी किताब अपने मित्र को दे दी।

Ans  1. महाकाव्य

2. स्वयं

3. पुस्तक

4. खण्डकाव्य

Question ID : 9895805977  
Chosen Option : --

Q.1 <sub>9</sub> दिये गये वाक्यांश के लिए एक शब्द दीजिये।

जो उपकार को माने

Ans  1. कर्मज

2. कृतज्ञ

3. कृतघ्न

4. कर्मठ

Question ID : 9895805994

Chosen Option : --

Q.2  
0 दिए गए शब्द का विलोम चुनें।

वाचाल

Ans

1. मृदुभाषी  
 2. मितभाषी  
 3. निर्दोषी  
 4. सुभाषी

Question ID : 9895805988

Chosen Option : --

Q.2  
1 दिए गए वाक्य में रेखांकित खंड को प्रतिस्थापित करने के लिए उपयुक्त विकल्प का चयन करें।

शिकारी ने सिंह पर गोली चलाई, पर वह बच निकला।

Ans

1. बेरी  
 2. हिरण  
 3. मृगेंद्र  
 4. जंगल

Question ID : 9895805976

Chosen Option : --

Q.2  
2 रिक्त स्थान को भरने के लिए उपयुक्त शब्द का चयन करें।

लड़का लड़की एक \_\_\_\_\_ हैं।

Ans

1. रिश्ता  
 2. भाग  
 3. समान  
 4. जैसा

Question ID : 9895805981

Chosen Option : --

Q.2  
3 रिक्त स्थान को भरने के लिए उपयुक्त शब्द का चयन करें।

भारत को स्वच्छ बनाने के लिए हर नागरिक की \_\_\_\_\_ की आवश्यकता है।

Ans

1. जर्मीदारी  
 2. भागीदारी  
 3. जहाँगीरदारी  
 4. चौकीदारी

Question ID : 9895805979

Chosen Option : --

Q.2

4 दिए गए शब्द का विलोम चुनें।

प्रसन्न

- Ans
- 1. प्रफुल्ल
  - 2. हर्षित
  - 3. खिन्न
  - 4. उल्लसित

Question ID : 9895805989  
Chosen Option : --

Q.2 दिए गए वाक्य में रेखांकित खंड को प्रतिस्थापित करने के लिए उपयुक्त विकल्प का चयन करें।

जीवन में सफलता पाने का मुख्य साधन समय से नयोजन है।

- Ans
- 1. समय में नयोजन है।
  - 2. समय की नयोजन है।
  - 3. समय को नयोजन है।
  - 4. समय का नयोजन है।

Question ID : 9895805975  
Chosen Option : --