

Constable (GD) in CAPFs, NIA, SSF and Rifleman (GD) in Assam Rifles Examination, 2018

Roll No. :	www.GovtJobsAlert.In
Registration No.	
Name :	
Exam Venue :	iON Digital Zone iDZ Attingal
Exam Time :	9:00 AM - 10:30 AM
Exam Date :	02/03/2019

Section : General Section

Q.1 Identify the figure from the options that has the given figure embedded in it. (Rotation is not allowed)



Ans

1.



2.



3.



4.



Question ID : 9895808235
Chosen Option : 1

Q.2 Select the option that is related to the third term in the same way as the second term is related to the first term.

Thermometer : Temperature :: Lactometer : ?

Ans 1. Honey

2. Rain

3. Milk

4. Wind

Question ID : 9895808217
Chosen Option : 2

Q.3

A square transparent sheet with a pattern is given. How will the pattern appear when the transparent sheet is folded along the dotted line?



Ans

- 1.
- 2.
- 3.
- 4.

Question ID : 9895808237
Chosen Option : 2

Q.4 Pick the odd one out.

- Ans 1. EFRS
 2. ANBO
 3. CODQ
 4. GTHU

Question ID : 9895808215
Chosen Option : 1

Q.5 Find the next number in the given series.

37, 45, 53, 61, ?

- Ans 1. 69
 2. 72
 3. 62
 4. 65

Question ID : 9895808227
Chosen Option : 1

Q.6 What will be the value of the following equation if '+' means 'addition', '-' means 'subtraction', '×' means 'multiplication' and '÷' means 'division'?

$$48 \times 6 - 5 \div 8 + 1 = ?$$

- Ans 1. 47

- 2. 49
- 3. 56
- 4. 53

Question ID : 9895808232
Chosen Option : 1

Q.7 Select the option that is related to the third term in the same way as the second term is related to the first term.

2 : 12 :: 5 : ?

- Ans
- 1. 20
 - 2. 15
 - 3. 10
 - 4. 30

Question ID : 9895808229
Chosen Option : 4

Q.8 Find the next number in the given series.

6, 12, 21, 32, ?

- Ans
- 1. 53
 - 2. 49
 - 3. 41
 - 4. 47

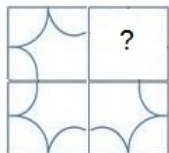
Question ID : 9895808228
Chosen Option : 4

Q.9 There are a few students sitting on a classroom bench. Anand is sitting in the 7th position from the left-hand side. Binoy is sitting in the 5th position from the right-hand side. Five students are sitting between Anand and Binoy. In total, the class has six rows of benches with equal number of students sitting on all of them. What is the total number of students in the class?

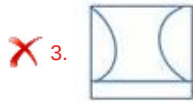
- Ans
- 1. 99
 - 2. 114
 - 3. 102
 - 4. 122

Question ID : 9895808222
Chosen Option : 3

Q.1 Select the option that will replace the question mark and complete the given pattern.



- Ans
- 1.
 - 2.



Question ID : 9895808234
Chosen Option : 1

Q.1 The statements below are followed by two conclusions labeled I and II. Assuming that the information in the statements is true, even if it appears to be at variance with generally established facts, decide which conclusion(s) logically and definitely follow(s) from the information given in the statements.

Statements:

- I. All pencils are lanes.
- II. All lanes are cottages.

Conclusion:

- I. All cottages are pencils.
- II. Some cottages are pencils.

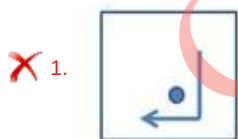
- Ans**
- 1. Both conclusions I and II follow
 - 2. Either conclusion I or II follows
 - 3. Only conclusion II follows
 - 4. Only conclusion I follows

Question ID : 9895808226
Chosen Option : 1

Q.1 Which option will replace the question mark and complete the figure series?



Ans



✓ 4.



Question ID : 9895808233
Chosen Option : 4

Q.1 There is only one runway which will be used by seven flights one by one. P and Q will use the runway neither first nor last. S will use it second after R. M will use it second before O. N will use it after O and before R. Q will use it just before S. Who will use the runway just after M?

- Ans
- 1. N
 - 2. O
 - 3. Q
 - 4. P

Question ID : 9895808224
Chosen Option : 4

Q.1 Four words have been given out of which three are alike in some manner, while one is different. Choose the odd one.

- Ans
- 1. Tardy
 - 2. Bustle
 - 3. Scuttle
 - 4. Dart

Question ID : 9895808216
Chosen Option : 1

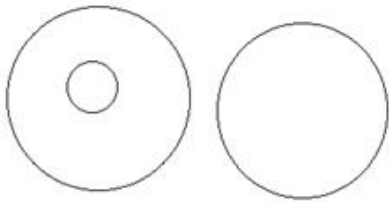
Q.1 Select the Venn diagram that best represents the relationship among the given set of classes:

Pen, Table, Stationery

Ans

- 1.
- 2.
- 3.

✓ 4.



Question ID : 9895808238
Chosen Option : 1

Q.1 Choose the option that most closely resembles the mirror image of the given word when mirror is placed at right side.

6
INTROVERT

- Ans ✓ 1. ТЯRVOЯTИИ
 ✗ 2. ТЯRVOЯTИИ
 ✗ 3. ИИKQOΛEKL
 ✗ 4. ИИKQOΛEKL

Question ID : 9895808236
Chosen Option : 3

Q.1 Select the option that is related to the third term in the same way as the second term is related to the first term.

7
CC : GD :: LE : ?

- Ans ✗ 1. RF
 ✗ 2. PD
 ✓ 3. PF
 ✗ 4. EE

Question ID : 9895808219
Chosen Option : 3

Q.1 Find the missing number from the below options.

8

4	15	35
13	21	42
9	6	?

- Ans ✓ 1. 7
 ✗ 2. 12
 ✗ 3. 11
 ✗ 4. 15

Question ID : 9895808231
Chosen Option : 4

Q.1 Eight friends A, B, C, D, E, F, H and G are sitting around a circular table facing each other for a group discussion. A is opposite F and second to the right of E. B and D are sitting opposite to each other. G is between C and A. H is to the left of E. Who is sitting opposite E?

9

- Ans ✗ 1. F
 ✗ 2. D
 ✗ 3. B

✓ 4. C

Question ID : 9895808223
Chosen Option : 1

Q.2 Which pair of letters should follow next in the given series?

AB, DE, GH, JK, ?

- Ans
- 1. RT
 - 2. MN
 - 3. UW
 - 4. PQ

Question ID : 9895808214
Chosen Option : 2

Q.2 If in a certain code HOUSE is written as 68, then in the same code how will you write the word CASTLE?

- Ans
- 1. 84
 - 2. 60
 - 3. 72
 - 4. 59

Question ID : 9895808221
Chosen Option : 2

Q.2 If in a certain code APRON is written as BRUSR then in the same code how will you write the word STOVE?

- Ans
- 1. TRVJZ
 - 2. TVRZI
 - 3. TVRZJ
 - 4. VRTJZ

Question ID : 9895808220
Chosen Option : 2

Q.2 The statements below are followed by two conclusions labeled I and II. Assuming that the information in the statements is true, even if it appears to be at variance with generally established facts, decide which conclusion(s) logically and definitely follow(s) from the information given in the statements.

Statements:

- I. Most poets are boys.
- II. Some boys are painters.

Conclusion:

- I. Some painters are boys.
- II. Some poets are painters.

- Ans
- 1. Only conclusion I follows
 - 2. Either conclusion I or II follows
 - 3. Only conclusion II follows
 - 4. Both conclusions I and II follow

Question ID : 9895808225
Chosen Option : 4

Q.2 Select the option that is related to the third term in the same way as the second term is related to the first term.

4

Fish : Plankton :: Frog : ?

- Ans
- 1. Hay
 - 2. Weed
 - 3. Insects
 - 4. Herbs

Question ID : 9895808218

Chosen Option : 1

Q.2 Four numbers have been given out of which three are alike in some manner, while one is different. Choose the odd one.

5

- Ans
- 1. 571
 - 2. 676
 - 3. 361
 - 4. 484

Question ID : 9895808230

Chosen Option : 4

Q.2 Which sportsman has won the highest number of Player of the Match awards in test cricket?

6

- Ans
- 1. Jacques Kallis
 - 2. Muttiah Muralitharan
 - 3. Shane Warne
 - 4. Sachin Tendulkar

Question ID : 9895807283

Chosen Option : 4

Q.2 In which year did the Rail Budget get merged with the Union Budget after being separate for 92 years?

7

- Ans
- 1. 2017-18
 - 2. 2018-19
 - 3. 2015-16
 - 4. 2014-15

Question ID : 9895807287

Chosen Option : 2

Q.2 'Dambe' is a form of martial arts associated with which continent?

8

- Ans
- 1. America
 - 2. Africa
 - 3. Australia
 - 4. Europe

Question ID : 9895807282

Chosen Option : 2

Q.2 When the Indian Constitution was adopted, how many schedules did it have?

9

- Ans 1. 10
 2. 12
 3. 8
 4. 6

Question ID : 9895807291
Chosen Option : 3

Q.3
0 The Battle of Saraighat, fought between the Ahoms of Assam and the Mughals, was fought in which year?

- Ans 1. 1652
 2. 1635
 3. 1671
 4. 1642

Question ID : 9895807301
Chosen Option : 2

Q.3
1 The monolithic ruins of Rajbari are located in which Indian state?

- Ans 1. Assam
 2. Nagaland
 3. Meghalaya
 4. Mizoram

Question ID : 9895807280
Chosen Option : 2

Q.3
2 'Thang Ta' is a martial arts associated with which Indian state?

- Ans 1. Manipur
 2. Sikkim
 3. Assam
 4. Odisha

Question ID : 9895807281
Chosen Option : 1

Q.3
3 'Bidesia' is a popular dance form associated with which Indian state?

- Ans 1. Odisha
 2. Jharkhand
 3. Bihar
 4. West Bengal

Question ID : 9895807278
Chosen Option : 1

Q.3
4 Who is the only Indian leader to be bestowed the highest civilian awards by both India and Pakistan (Bharat Ratna and Nishan-i-Pakistan)?

- Ans 1. Jawaharlal Nehru
 2. Mahatma Gandhi

3. Sardar Vallabhbhai Patel

4. Morarji Desai

Question ID : 9895807285

Chosen Option : 3

Q.3
5 The filament in the traditional incandescent bulb is made of which metal?

Ans 1. Tungsten

2. Iron

3. Copper

4. Platinum

Question ID : 9895807292

Chosen Option : 4

Q.3
6 Bhagoria Haat Festival is celebrated in which Indian state?

Ans 1. Madhya Pradesh

2. Uttar Pradesh

3. Rajasthan

4. Bihar

Question ID : 9895807279

Chosen Option : 3

Q.3
7 What is the process by which Ethanol is produced?

Ans 1. Salinization

2. Ligation

3. Fermentation

4. Titration

Question ID : 9895807293

Chosen Option : 4

Q.3
8 The Indus Valley was home to the largest of the four ancient urban civilizations. Which of the following is not one of them?

Ans 1. Egypt

2. Russia

3. South Asia

4. Mesopotamia

Question ID : 9895807302

Chosen Option : 1

Q.3
9 For tea plantation, what kind of climate is best suited?

Ans 1. Dry and windy

2. Dry and dusty

3. Warm and humid

4. Very cold weather

Question ID : 9895807295
Chosen Option : 4

Q.4
0 Measles is a disease caused by:

- Ans 1. amoeba
 2. fungi
 3. virus
 4. bacteria

Question ID : 9895807296
Chosen Option : 1

Q.4
1 Which country among the following has the largest land area under agriculture in the world?

- Ans 1. China
 2. United States of America
 3. India
 4. Russia

Question ID : 9895807299
Chosen Option : 1

Q.4
2 What is the name of the structural protein present in the horn of a rhino and also the human hair?

- Ans 1. Glycolytic
 2. Keratin
 3. Amino acid
 4. Melanin

Question ID : 9895807294
Chosen Option : 1

Q.4
3 _____ refers to the rate at which commercial banks borrow money from the Reserve Bank of India (RBI) in case of shortage of funds.

- Ans 1. Exchange rate
 2. Repo rate
 3. Reverse Repo rate
 4. Market rate

Question ID : 9895807286
Chosen Option : 4

Q.4
4 When did the government of India pass the PNDT Act to curb the practice of female foeticide?

- Ans 1. 1996
 2. 1992
 3. 1994
 4. 1991

Question ID : 9895807290

Chosen Option : 3

Q.4
5 What is the compilation of the teachings of Lord Mahavir called?

- Ans
- 1. Sruti sutras
 - 2. Piby sutras
 - 3. Agam sutras
 - 4. Avesta sutras

Question ID : 9895807300
Chosen Option : 4

Q.4
6 Why are traditional houses in Assam built on stilts?

- Ans
- 1. Danger of floods and wildlife
 - 2. Danger of unsanitary conditions
 - 3. Danger of heavy drought
 - 4. Danger of contamination

Question ID : 9895807298
Chosen Option : 4

Q.4
7 'Train to Pakistan' is a book written by which of the following author?

- Ans
- 1. Saadat Hasan Manto
 - 2. Ruskin Bond
 - 3. Khuswant Singh
 - 4. Mohsin Hamid

Question ID : 9895807284
Chosen Option : 4

Q.4
8 The community market is regulated by which of the following organizations?

- Ans
- 1. SEBI (Securities and Exchange Board of India)
 - 2. BSE (Bombay Stock Exchange)
 - 3. RBI (Reserve Bank of India)
 - 4. NSE (National Stock Exchange)

Question ID : 9895807288
Chosen Option : 4

Q.4
9 The concept of 'single citizenship' in India was adopted based on the constitution of which of the given nations?

- Ans
- 1. United States
 - 2. Ireland
 - 3. Russia
 - 4. United Kingdom

Question ID : 9895807289
Chosen Option : 3

Q.5 Why are the western slopes of the western ghats covered with thick forests unlike the eastern slopes?
0

- Ans
- 1. Receive more rain
 - 2. Receive less light
 - 3. Receive less rain
 - 4. Receive more light

Question ID : 9895807297
Chosen Option : 1

Q.5 20% discount on ₹2000 and 2 successive discounts of 10% and 10% will have a difference of:
1

- Ans
- 1. ₹0
 - 2. ₹30
 - 3. ₹40
 - 4. ₹20

Question ID : 9895807608
Chosen Option : 3

Q.5 Simplify:
2

$$8.4 - [5 + 0.3 \text{ of } (3.3 - 2.6 \times 1.07)]$$

- Ans
- 1. 3.2464
 - 2. 3.6244
 - 3. 3.6442
 - 4. 3.2446

Question ID : 9895807605
Chosen Option : 3

Q.5 The least number which should be added to 3857 so that the sum is exactly divisible by 5, 6, 4 and 3 is:
3

- Ans
- 1. 33
 - 2. 17
 - 3. 3
 - 4. 43

Question ID : 9895807603
Chosen Option : 4

Q.5 The population of a town increased from 1,85,000 to 2,77,500 in a decade. The average percent increase of population
4 per year is:

- Ans
- 1. 6%
 - 2. 5%
 - 3. 4.37%
 - 4. 8.75%

Question ID : 9895807610
Chosen Option : 3

Q.5 A man goes to Mumbai from Kaylan at a speed of 10 km/h and returns to Kaylan at the speed of 15 km/h. What is his
5 average speed of the entire journey?

- Ans 1. 12 km/h
 2. 15 km/h
 3. 42 km/h
 4. 56 km/h

Question ID : 9895807621

Chosen Option : 1

Q.5 The ratio of present age of father to that of son is 4 : 1. 5 years ago, their age were in the ratio of 7 : 1. The present age of the son is:

- Ans 1. 5 years
 2. 8 years
 3. 10 years
 4. 3 years

Question ID : 9895807613

Chosen Option : 1

Q.5 On selling 17 balls for ₹840, there is a loss equal to the cost price of 5 balls. The cost price (in ₹) of a ball is:

- Ans 1. ₹55
 2. ₹60
 3. ₹70
 4. ₹50

Question ID : 9895807612

Chosen Option : 4

Q.5 Paper charge is ₹55 per kg. How much expenditure (in ₹) would be there to cover a cube of edge 8 m with a paper, if one kg of paper covers 192 m² area?

- Ans 1. ₹165
 2. ₹55
 3. ₹192
 4. ₹110

Question ID : 9895807622

Chosen Option : 2

Q.5 At what rate of compound interest per annum will a sum of ₹1800 becomes ₹2178 in two years?

- Ans 1. 10%
 2. 12%
 3. 11%
 4. 13%

Question ID : 9895807617

Chosen Option : 4

Q.6 A lent ₹6500 to B for 2 years and ₹8000 to C for 4 years on simple interest at the same rate of interest and received ₹4500 in all from both of them as interest. The rate of interest per annum is:

- Ans 1. 5%
 2. 7%
 3. 8%
 4. 10%

Question ID : 9895807616
Chosen Option : 2

Q.6 Sam purchased 20 dozens of toys at the rate of ₹480 per dozen. He sold each one of them at the rate of ₹42. What was his percentage profit?

- Ans 1. 5%
 2. 6%
 3. 5.5%
 4. 4%

Question ID : 9895807611
Chosen Option : 4

Q.6 Raju and Vinod are working on an assignment. Raju takes 8 h to type 32 pages on a computer, while Vinod takes 6 h to type 44 pages. How much time will they take, working together on two different computers to type an assignment of 102 pages?

- Ans 1. 12 h
 2. 14 h
 3. 9 h
 4. 10 h

Question ID : 9895807619
Chosen Option : 1

Q.6 The mean of 25 observations is 36. Out of these observations, if the mean of first 13 observations is 32 and that of the last 13 observations is 40, the 13th observation is:

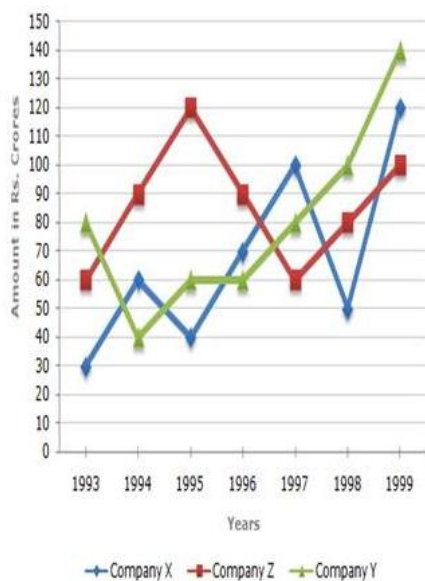
- Ans 1. 23
 2. 40
 3. 38
 4. 36

Question ID : 9895807609
Chosen Option : 1

Q.6
4

Study the following line graph and answer the questions.

Exports from Three Companies Over the Years (in ₹ crore)



In which of the following year, the total exports from the three Companies was highest?

- Ans
- 1. 1998
 - 2. 1995
 - 3. 1996
 - 4. 1999

Question ID : 9895807625
Chosen Option : 2

Q.6 The average weight of A, B and C is 55 kg. If the average weight of A and B is 52 kg and that of B and C is 48 kg, then the weight of B is:

- Ans
- 1. 50 kg
 - 2. 30 kg
 - 3. 35 kg
 - 4. 32 kg

Question ID : 9895807607
Chosen Option : 3

Q.6 Original breadth of a rectangular box is 20 cm. The box was then remade in such a way that its length got increased by 15% but the breadth decreased by 5%. This led to an increase in area by 74 cm². What is the length of the box?

- Ans
- 1. 40 cm
 - 2. 30 cm
 - 3. 20 cm
 - 4. 60 cm

Question ID : 9895807624
Chosen Option : 1

Q.6 A can do a certain work in the same time in which B and C together can do it. If A and B together could do it in 8 days and C alone in 40 days, then B alone could do it in:

- Ans
- 1. 25 days

2. 15 days

3. 30 days

4. 20 days

Question ID : 9895807618

Chosen Option : 3

Q.6 If the average marks of three batches of 50, 56 and 44 students respectively are 55, 52, 40, then the average marks of all the students would be:

Ans 1. 49.48

2. 50.48

3. 49.84

4. 49

Question ID : 9895807606

Chosen Option : 2

Q.6 A car travelling with $\frac{3}{8}$ th of its actual speed covers 65 km in 2 h. 10 min. Find the actual speed of the car.

Ans 1. 120 km/h

2. 80 km/h

3. 160 km/h

4. 40 km/h

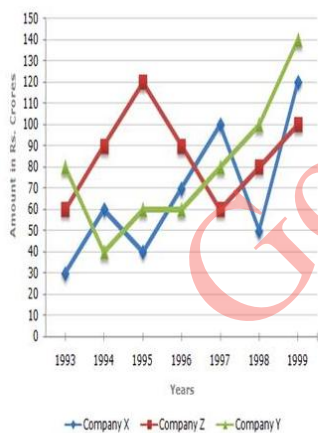
Question ID : 9895807620

Chosen Option : 4

Q.7 Study the following line graph and answer the questions.

0

Exports from Three Companies Over the Years (in ₹ crore)



What was the difference between the average exports of the three Companies in 1994 and the average exports in 1995?

Ans 1. ₹5 crore

2. ₹20 crore

3. ₹10 crore

4. ₹30 crore

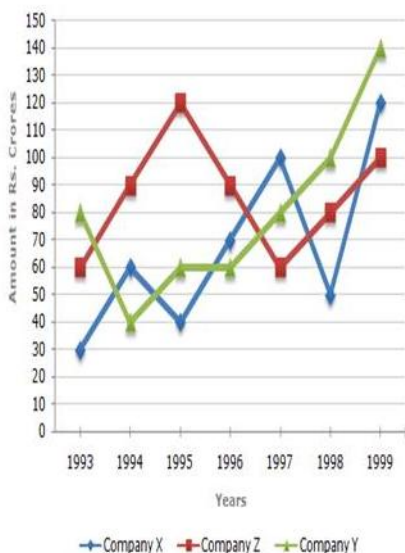
Question ID : 9895807627

Chosen Option : 4

Q.7
1

Study the following line graph and answer the questions.

Exports from Three Companies Over the Years (in ₹ crore)



In which year was the difference between the exports to Companies Y and Z the maximum?

- Ans
- 1. 1996
 - 2. 1994
 - 3. 1997
 - 4. 1995

Question ID : 9895807626
Chosen Option : 4

Q.7 When Jaya divided surface area of a sphere by the sphere's volume, she got the answer as $\frac{2}{3}$ cm. What is the radius of the sphere?

- Ans
- 1. 5.4 cm
 - 2. 4.5 cm
 - 3. 3.5 cm
 - 4. 4.6 cm

Question ID : 9895807623
Chosen Option : 2

Q.7 Price of each article of type P, Q, and R is ₹200, ₹300 and ₹400 respectively. Suresh buys articles of each type in the ratio 1: 2: 3 for ₹2,000. How many articles of type Q did he purchase?

- Ans
- 1. 4
 - 2. 3
 - 3. 5
 - 4. 2

Question ID : 9895807614
Chosen Option : 3

Q.7 Two numbers are in ratio 2 : 3. If 50 is subtracted from the first and 50 is added to the second, the ratio becomes 1 : 4. Find the sum of the original numbers.

- Ans
- 1. 400
 - 2. 300
 - 3. 100
 - 4. 250

Question ID : 9895807615
Chosen Option : 4

Q.7 Simplify:

$$25 - 48 \div 6 + 12 \times 2$$

- Ans
- 1. 45
 - 2. 51
 - 3. 41
 - 4. 43

Question ID : 9895807604
Chosen Option : 3

Section : English Language

Q.1 Select the word which means the same as the group of words given.

A place in a large institution for the care of those who are ill.

- Ans
- 1. Clinic
 - 2. Infirmary
 - 3. Shelter
 - 4. Camp

Question ID : 9895807951
Chosen Option : 1

Q.2 Select the most appropriate option to substitute the underlined segment in the given sentence. If there is no need to substitute it, select No improvement.

He is felt extremely unhappy yesterday because of the inordinate delay of the messenger.

- Ans
- 1. No improvement
 - 2. He has feeling extremely unhappy yesterday
 - 3. He was feeling extremely unhappy yesterday
 - 4. He have been feeling extremely unhappy yesterday

Question ID : 9895807935
Chosen Option : 3

Q.3 Select the most appropriate word to fill in the blank.

The complexity of the current environment includes many challenges in general, but air pollution in _____.

- Ans
- 1. particular
 - 2. common
 - 3. public
 - 4. overall

Question ID : 9895807955
Chosen Option : 3

Q.4

Select the option that means the same as the given idiom.

To turn over a new leaf

- Ans
- 1. To turn over the page of a book
 - 2. To be always careful about one's behaviour
 - 3. To make new things happen
 - 4. To change one's behavior for better

Question ID : 9895807950

Chosen Option : 4

Q.5 Select the most appropriate option to fill in the blank.

Researchers say that about 33 % of people with diabetes may _____ a skin disorder in their lifetime.

- Ans
- 1. has been
 - 2. has
 - 3. have
 - 4. have been

Question ID : 9895807938

Chosen Option : 1

Q.6 Select the synonym of the given word.

ELAPSED

- Ans
- 1. Ceased
 - 2. Prolonged
 - 3. Persuaded
 - 4. Connected

Question ID : 9895807946

Chosen Option : 1

Q.7 Select the word which means the same as the group of words given.

A close fitting cover for the blade of a knife or sword.

- Ans
- 1. Packet
 - 2. Mask
 - 3. Sheath
 - 4. Pouch

Question ID : 9895807952

Chosen Option : 4

Q.8 Select the correctly spelt word.

- Ans
- 1. Infrastructure
 - 2. Infrastracure

3. Imfrastructure

4. Infrastructur

Question ID : 9895807953

Chosen Option : 1

Comprehension:

In the following passage some words have been deleted.

Fill in the blanks with the help of the alternatives given.

Man is a 'social animal'. Hence, showing a (1) _____
behaviour is equivalent to showing an animal behaviour.
Psychologists (2) _____ that though violent behaviour
is inherent but it can be managed. Providing a healthy and
cordial home environment to kids help them to build
strong family values and reduce the (3) _____ to react
violently. Rehabilitation homes and support programs are
available for those (4) _____ need professional help.
Meditation and practicing yoga also helps to (5) _____
negative attitude towards self and others.

SubQuestion No : 9

Q.9 Select the most appropriate option that will fill in the
blank number 1.

Ans 1. helpful

2. submissive

3. ambitious

4. vicious

Question ID : 9895807940

Chosen Option : 3

Comprehension:

In the following passage some words have been deleted.

Fill in the blanks with the help of the alternatives given.

Man is a 'social animal'. Hence, showing a (1) _____ behaviour is equivalent to showing an animal behaviour. Psychologists (2) _____ that though violent behaviour is inherent but it can be managed. Providing a healthy and cordial home environment to kids help them to build strong family values and reduce the (3) _____ to react violently. Rehabilitation homes and support programs are available for those (4) _____ need professional help. Meditation and practicing yoga also helps to (5) _____ negative attitude towards self and others.

SubQuestion No : 10

Q.1
0 Select the most appropriate option that will fill in the blank number 2.

- Ans
- 1. say
 - 2. speak
 - 3. says
 - 4. saying

Question ID : 9895807941
Chosen Option : 2

Comprehension:

In the following passage some words have been deleted.

Fill in the blanks with the help of the alternatives given.

Man is a 'social animal'. Hence, showing a (1) _____ behaviour is equivalent to showing an animal behaviour. Psychologists (2) _____ that though violent behaviour is inherent but it can be managed. Providing a healthy and cordial home environment to kids help them to build strong family values and reduce the (3) _____ to react violently. Rehabilitation homes and support programs are available for those (4) _____ need professional help. Meditation and practicing yoga also helps to (5) _____ negative attitude towards self and others.

SubQuestion No : 11

Q.1

1 Select the most appropriate option that will fill in the blank number 3.

- Ans
- 1. preference
 - 2. aim
 - 3. tendency
 - 4. choice

Question ID : 9895807942
Chosen Option : 1

Comprehension:

In the following passage some words have been deleted. Fill in the blanks with the help of the alternatives given.

Man is a 'social animal'. Hence, showing a (1) _____ behaviour is equivalent to showing an animal behaviour. Psychologists (2) _____ that though violent behaviour is inherent but it can be managed. Providing a healthy and cordial home environment to kids help them to build strong family values and reduce the (3) _____ to react violently. Rehabilitation homes and support programs are available for those (4) _____ need professional help. Meditation and practicing yoga also helps to (5) _____ negative attitude towards self and others.

SubQuestion No : 12

Q.1
2 Select the most appropriate option that will fill in the blank number 4.

- Ans
- 1. whose
 - 2. when
 - 3. whom
 - 4. who

Question ID : 9895807943
Chosen Option : 4

Comprehension:

In the following passage some words have been deleted.

Fill in the blanks with the help of the alternatives given.

Man is a 'social animal'. Hence, showing a (1) _____ behaviour is equivalent to showing an animal behaviour. Psychologists (2) _____ that though violent behaviour is inherent but it can be managed. Providing a healthy and cordial home environment to kids help them to build strong family values and reduce the (3) _____ to react violently. Rehabilitation homes and support programs are available for those (4) _____ need professional help. Meditation and practicing yoga also helps to (5) _____ negative attitude towards self and others.

SubQuestion No : 13

Q.1
3 Select the most appropriate option that will fill in the blank number 5.

- Ans
- 1. rectify
 - 2. unsettle
 - 3. deal
 - 4. increase

Question ID : 9895807944
Chosen Option : 4

Q.1
4 Select the antonym of the given word.

ASSAULT

- Ans
- 1. Defend
 - 2. Agree
 - 3. Offend
 - 4. Strike

Question ID : 9895807948
Chosen Option : 3

Q.1
5 From the given options, identify the segment in the sentence which contains the grammatical error.

Computers everywhere use random numbers as keys to locked or unlock encrypted information.

- Ans
- 1. keys to locked or unlock
 - 2. Computers everywhere
 - 3. use random numbers as
 - 4. encrypted information

Question ID : 9895807932
Chosen Option : 2

Q.1
6 Select the option that means the same as the given idiom.

To bury the hatchet

- Ans
- 1. To bury an axe
 - 2. To bury old utensils
 - 3. To make peace
 - 4. To make someone happy

Question ID : 9895807949
Chosen Option : 4

Q.1
7 Select the antonym of the given word.

INDOLENT

- Ans
- 1. Lifeless
 - 2. Inert
 - 3. Sluggish
 - 4. Lively

Question ID : 9895807947
Chosen Option : 2

Q.1
8 Select the most appropriate word to fill in the blank.

If you have a _____ for photography, you do not have to wait for your big break.

- Ans
- 1. passion
 - 2. demand
 - 3. claim
 - 4. response

Question ID : 9895807956
Chosen Option : 1

Q.1
9 Select the most appropriate option to fill in the blank.

A toddler's brain _____ pretty much fully developed by the age of three.

- Ans
- 1. are
 - 2. were
 - 3. was
 - 4. is

Question ID : 9895807937
Chosen Option : 3

Q.2
0

From the given options, identify the segment in the sentence which contains the grammatical error.

It makes us realise how unsuitable our education system are because it cannot help us deal with life's most basic issues.

- Ans
- 1. life's most basic issues
 - 2. it cannot help us
 - 3. education system are
 - 4. It makes us realise

Question ID : 9895807931
Chosen Option : 1

Q.2 From the given options, identify the segment in the sentence which contains the grammatical error.
1

With the help of skill- based education offer in colleges, many students will become eligible for various jobs.

- Ans
- 1. many students will become
 - 2. With the help of
 - 3. eligible for various jobs
 - 4. skill- based education offer in

Question ID : 9895807933
Chosen Option : 3

Q.2 Select the most appropriate option to substitute the underlined segment in the given sentence. If there is no need to substitute it, select No improvement.
2

The convict was informed that the judge will heard the case tomorrow.

- Ans
- 1. No improvement
 - 2. judge will hear the case
 - 3. judge will hearing a case
 - 4. judge hears a case

Question ID : 9895807934
Chosen Option : 2

Q.2 Select the most appropriate option to substitute the underlined segment in the given sentence. If there is no need to substitute it, select No improvement.
3

The newly- launched mobile phone application has been a great support for people in remote areas of the country.

- Ans
- 1. No improvement
 - 2. application have been a great support
 - 3. applications has been a great support
 - 4. applications will been a great support

Question ID : 9895807936
Chosen Option : 3

Q.2 Select the synonym of the given word.
4

BOUNTIFUL

- Ans
- 1. Religious
 - 2. Pretty

3. Spiritual
 4. Generous

Question ID : 9895807945
Chosen Option : 3

Q.2 Select the correctly spelt word.

- Ans 1. Knowlege
 2. Knowledg
 3. Knowledge
 4. Knoledge

Question ID : 9895807954
Chosen Option : 3

Section : Hindi Language

Q.1 सही वर्तनी वाले शब्द का चयन करें।

- Ans 1. विछौना
 2. बीछौना
 3. बिछोना
 4. बिछौना

Question ID : 9895806734
Chosen Option : --

Q.2 दिए गए वाक्य में रेखांकित खंड को प्रतिस्थापित करने के लिए उपयुक्त विकल्प का चयन करें।

सब आदमी समान नहीं होते।

- Ans 1. लोक
 2. मनुष्य बराबर
 3. प्रत्येक व्यक्ति
 4. हर मानव

Question ID : 9895806713
Chosen Option : --

Q.3 सही वर्तनी वाले शब्द का चयन करें।

- Ans 1. क्षूदा
 2. क्षुदा
 3. क्षुधा
 4. क्षूधा

Question ID : 9895806733
Chosen Option : --

Q.4

दिए गए शब्द के पर्यायवाची शब्द का चयन करें।

आवाज़

- Ans
- 1. नंदिनी
 - 2. नगाड़ा
 - 3. ध्वनि
 - 4. अनादर

Question ID : 9895806727
Chosen Option : --

Q.5 दिए गए वाक्य का वह भाग ज्ञात करें जिसमें कोई त्रुटि है।

आकर्षण का केंद्र यह माण्डवगढ़ शाही महलों की खण्डहर है।

- Ans
- 1. आकर्षण का केंद्र
 - 2. खण्डहर है।
 - 3. यह माण्डवगढ़
 - 4. शाही महलों की

Question ID : 9895806710
Chosen Option : --

Q.6 दिये गये वाक्यांश के लिए एक शब्द दीजिये।

राजनीति से संबंधित

- Ans
- 1. राजनैतिक
 - 2. अनैतिक
 - 3. सैद्धांतिक
 - 4. नैतिक

Question ID : 9895806732
Chosen Option : --

Q.7 निम्नलिखित में से उस विकल्प का चयन करें जो 'लोहे के चने चबाना' मुहावरे का अर्थ व्यक्त करता है।

- Ans
- 1. सरल कार्य करना
 - 2. लोहे से निर्मित चने खाना
 - 3. अच्छा कार्य करना
 - 4. बहुत कठिन कार्य करना

Question ID : 9895806730
Chosen Option : --

Q.8

दिए गए वाक्य में रेखांकित खंड को प्रतिस्थापित करने के लिए उपयुक्त विकल्प का चयन करें।

मोहन अपने काम में प्रवीण है।

- Ans
- 1. दक्ष
 - 2. शातिर
 - 3. पूर्ण
 - 4. चालाक

Question ID : 9895806712
Chosen Option : --

Q.9 दिए गए शब्द का विलोम चुनें।

कृत्रिम

- Ans
- 1. बनावटी
 - 2. कृति
 - 3. प्राकृतिक
 - 4. कृमि

Question ID : 9895806725
Chosen Option : --

Q.10 दिए गए वाक्य का वह भाग ज्ञात करें जिसमें कोई त्रुटि है।

शिरीष के विशाल वृक्ष बड़ी छायादार होते हैं।

- Ans
- 1. बड़ी छायादार
 - 2. शिरीष के
 - 3. होते हैं।
 - 4. विशाल वृक्ष

Question ID : 9895806711
Chosen Option : --

Q.11 रिक्त स्थान को भरने के लिए उपयुक्त शब्द का चयन करें।

वह चला गया था _____ रास्ते से लौट आया।

- Ans
- 1. यदि
 - 2. तो
 - 3. वह
 - 4. परंतु

Question ID : 9895806717
Chosen Option : --Q.1
2 दिए गए शब्द के पर्यायवाची शब्द का चयन करें।

ग्रह

- Ans
- 1. घर
 - 2. कर्म
 - 3. आग्रह
 - 4. नक्षत्र

Question ID : 9895806728
Chosen Option : --Q.1
3 दिए गए वाक्य का वह भाग ज्ञात करें जिसमें कोई त्रुटि है।

पक्षियों की दुनिया कितना स्वच्छंद होती है।

- Ans
- 1. कितना स्वच्छंद
 - 2. दुनिया
 - 3. पक्षियों की
 - 4. होती है।

Question ID : 9895806709
Chosen Option : --

Comprehension:

निम्नलिखित गद्यांश के रिक्त स्थानों की पूर्ति गद्यांश के नीचे दिए गए प्रश्नों के अनुसार कीजिए-

हमारा सौभाग्य है कि समय-समय पर हमारे देश में ऐसे अनेक ऋषि, महर्षि, विद्वान, संत और महात्मा पैदा हुए जिन्होंने विघटन, विरोध और _____ (1) की वृत्ति के खतरे को पहचाना और उन्हें समाप्त करने में अपनी पूर्ण _____ (2) लगा दी। कबीर और गांधी इसी प्रकार के व्यक्ति थे। उन्होंने एकता और सहिष्णुता की जो धारा बहायी, वह अभी तक _____ (3) नहीं हुई। आज भी हमारे देश में सौभाग्य से ऐसे नेता, विचारक और समाजसेवी _____ (4) हैं जो इस खतरे के विरुद्ध अपनी आवाज बुलंद करते रहते हैं और समय आने पर अपने _____ (5) की बाजी लगाने के लिए तैयार हो जाते हैं।

SubQuestion No : 14

Q.1
4

गद्यांश में संकेतित रिक्त स्थान (1) के लिए
उपयुक्त शब्द होगा।

- Ans
- 1. अलगाव
 - 2. चुनाव
 - 3. लगाव
 - 4. असंतुष्ट

Question ID : 9895806720
Chosen Option : --

Comprehension:

निम्नलिखित गद्यांश के रिक्त स्थानों की पूर्ति गद्यांश के नीचे दिए गए प्रश्नों के अनुसार कीजिए-

हमारा सौभाग्य है कि समय-समय पर हमारे देश में ऐसे अनेक ऋषि, महर्षि, विद्वान, संत और महात्मा पैदा हुए जिन्होंने विघटन, विरोध और _____ (1) की वृत्ति के खतरे को पहचाना और उन्हें समाप्त करने में अपनी पूर्ण _____ (2) लगा दी। कबीर और गांधी इसी प्रकार के व्यक्ति थे। उन्होंने एकता और सहिष्णुता की जो धारा बहायी, वह अभी तक _____ (3) नहीं हुई। आज भी हमारे देश में सौभाग्य से ऐसे नेता, विचारक और समाजसेवी _____ (4) हैं जो इस खतरे के विरुद्ध अपनी आवाज बुलंद करते रहते हैं और समय आने पर अपने _____ (5) की बाजी लगाने के लिए तैयार हो जाते हैं।

SubQuestion No : 15

Q.1
5 गद्यांश में संकेतित रिक्त स्थान (2) के लिए
उपयुक्त शब्द होगा।

- Ans
- 1. इच्छा
 - 2. स्वतंत्रता
 - 3. शक्ति
 - 4. महत्वकांक्षा

Question ID : 9895806721
Chosen Option : --

Comprehension:

निम्नलिखित गद्यांश के रिक्त स्थानों की पूर्ति गद्यांश के नीचे दिए गए प्रश्नों के अनुसार कीजिए-

हमारा सौभाग्य है कि समय-समय पर हमारे देश में ऐसे अनेक ऋषि, महर्षि, विद्वान, संत और महात्मा पैदा हुए जिन्होंने विघटन, विरोध और _____ (1) की वृत्ति के खतरे को पहचाना और उन्हें समाप्त करने में अपनी पूर्ण _____ (2) लगा दी। कबीर और गांधी इसी प्रकार के व्यक्ति थे। उन्होंने एकता और सहिष्णुता की जो धारा बहायी, वह अभी तक _____ (3) नहीं हुई। आज भी हमारे देश में सौभाग्य से ऐसे नेता, विचारक और समाजसेवी _____ (4) हैं जो इस खतरे के विरुद्ध अपनी आवाज बुलंद करते रहते हैं और समय आने पर अपने _____ (5) की बाजी लगाने के लिए तैयार हो जाते हैं।

SubQuestion No : 16

Q.1
6 गद्यांश में संकेतित रिक्त स्थान (3) के लिए उपयुक्त शब्द होगा।

- Ans
- 1. क्षीण
 - 2. बड़ी
 - 3. अधिक
 - 4. दीर्घ

Question ID : 9895806722
Chosen Option : --

Comprehension:

निम्नलिखित गद्यांश के रिक्त स्थानों की पूर्ति गद्यांश के नीचे दिए गए प्रश्नों के अनुसार कीजिए-

हमारा सौभाग्य है कि समय-समय पर हमारे देश में ऐसे अनेक ऋषि, महर्षि, विद्वान, संत और महात्मा पैदा हुए जिन्होंने विघटन, विरोध और _____ (1) की वृत्ति के खतरे को पहचाना और उन्हें समाप्त करने में अपनी पूर्ण _____ (2) लगा दी। कबीर और गांधी इसी प्रकार के व्यक्ति थे। उन्होंने एकता और सहिष्णुता की जो धारा बहायी, वह अभी तक _____ (3) नहीं हुई। आज भी हमारे देश में सौभाग्य से ऐसे नेता, विचारक और समाजसेवी _____ (4) हैं जो इस खतरे के विरुद्ध अपनी आवाज बुलंद करते रहते हैं और समय आने पर अपने _____ (5) की बाजी लगाने के लिए तैयार हो जाते हैं।

SubQuestion No : 17

Q.1
7

गद्यांश में संकेतित रिक्त स्थान (4) के लिए
उपयुक्त शब्द होगा।

- Ans
- 1. लुप्त
 - 2. वर्तमान
 - 3. विलीन
 - 4. मौजूद

Question ID : 9895806723

Chosen Option : --

Comprehension:

निम्नलिखित गद्यांश के रिक्त स्थानों की पूर्ति गद्यांश के नीचे दिए गए प्रश्नों के अनुसार कीजिए-

हमारा सौभाग्य है कि समय-समय पर हमारे देश में ऐसे अनेक ऋषि, महर्षि, विद्वान, संत और महात्मा पैदा हुए जिन्होंने विघटन, विरोध और _____ (1) की वृत्ति के खतरे को पहचाना और उन्हें समाप्त करने में अपनी पूर्ण _____ (2) लगा दी। कबीर और गांधी इसी प्रकार के व्यक्ति थे। उन्होंने एकता और सहिष्णुता की जो धारा बहायी, वह अभी तक _____ (3) नहीं हुई। आज भी हमारे देश में सौभाग्य से ऐसे नेता, विचारक और समाजसेवी _____ (4) हैं जो इस खतरे के विरुद्ध अपनी आवाज बुलंद करते रहते हैं और समय आने पर अपने _____ (5) की बाजी लगाने के लिए तैयार हो जाते हैं।

SubQuestion No : 18

Q.1
8 गद्यांश में संकेतित रिक्त स्थान (5) के लिए
उपयुक्त शब्द होगा।

- Ans
- 1. मन
 - 2. इच्छा
 - 3. प्राण
 - 4. दिल

Question ID : 9895806724

Chosen Option : --

Q.1
9 रिक्त स्थान को भरने के लिए उपयुक्त शब्द का चयन करें।

अनाज _____ में उगता है।

- Ans
- 1. खेतों
 - 2. जहाजों
 - 3. मैदानों

✗ 4. सड़कों

Question ID : 9895806715
Chosen Option : --

Q.2 रिक्त स्थान को भरने के लिए सबसे उपयुक्त शब्द का चयन करें।

बोतल में पानी _____ भरा है।

- Ans
- ✗ 1. आधा
 - ✗ 2. को साथ
 - ✓ 3. के बदले
 - ✗ 4. के बारे में

Question ID : 9895806716
Chosen Option : --

Q.2 निम्नलिखित में से उस विकल्प का चयन करें जो 'रूह काँपना' मुहावरे का अर्थ व्यक्त करता है।

- Ans
- ✗ 1. बहुत निडर
 - ✗ 2. बहुत डरना
 - ✗ 3. बहुत काँपना
 - ✓ 4. बहुत सदी लगना

Question ID : 9895806729
Chosen Option : --

Q.2 दिए गए शब्द का विलोम चुनें।

सत्कार

- Ans
- ✓ 1. तिरस्कार
 - ✗ 2. पुरस्कार
 - ✗ 3. बेकार
 - ✗ 4. सम्मान

Question ID : 9895806726
Chosen Option : --

Q.2 दिये गये वाक्यांश के लिए एक शब्द दीजिये।

जिसकी आयु कम हो

- Ans
- ✗ 1. शतायु
 - ✗ 2. अल्पायु
 - ✗ 3. दीर्घायु

✓ 4. चिरंजीवी

Question ID : 9895806731
Chosen Option : --

Q.2
4 दिए गए वाक्य में रेखांकित खंड को प्रतिस्थापित करने के लिए उपयुक्त विकल्प का चयन करें।

हमारा ईश्वर में विश्वास है।

- Ans ✓ 1. भगवान
✗ 2. विष्णु
✗ 3. शंकर
✗ 4. कृष्ण

Question ID : 9895806714
Chosen Option : --

Q.2
5 रिक्त स्थान को भरने के लिए उपयुक्त शब्द का चयन करें।

रीमा ने _____ से फल काटे।

- Ans ✗ 1. चाकू
✗ 2. तलवार
✓ 3. कैंची
✗ 4. कुल्हाड़ी

Question ID : 9895806718
Chosen Option : --