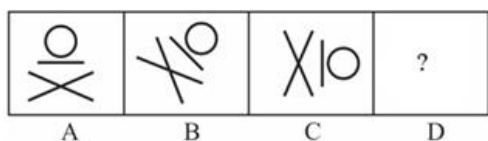


Constable (GD) in CAPFs, NIA, SSF and Rifleman (GD) in Assam Rifles Examination, 2018

Roll No. :	www.GovtJobsAlert.In
Registration No.	
Name :	
Exam Venue :	iON Digital Zone iDZ Airport Road
Exam Time :	12:30 PM - 2:00 PM
Exam Date :	02/03/2019

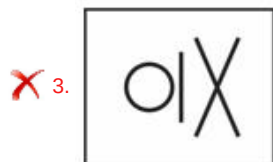

Section : General Section

Q.1 Which option will replace the question mark and complete the given series?



A B C D

Ans



Question ID : 9895808258
Chosen Option : 2

Q.2 Which pair of letters will follow next in the given letter cluster series?

ZX, WU, TR, QO, ?

- Ans
- ✓ 1. NL
 - ✗ 2. PR
 - ✗ 3. NK
 - ✗ 4. ML

Question ID : 9895808239
Chosen Option : 1

Q.3 Find the missing number from the below options.

36	13	31
28	10	24
18	23	?

- Ans
- 1. 36
 - 2. 27
 - 3. 32
 - 4. 20

Question ID : 9895808256
Chosen Option : 3

Q.4 If in a code language PINK is written as OHMJ, then in the same language how will you write the word BLUE?

- Ans
- 1. AKTD
 - 2. TKDA
 - 3. KTDA
 - 4. DATK

Question ID : 9895808245
Chosen Option : 1

Q.5 The statements below are followed by two conclusions labeled I and II. Assuming that the information in the statements is true, even if it appears to be at variance with generally established facts, decide which conclusion(s) logically and definitely follow(s) from the information given in the statements.

Statements:

All stories are novels.

All stories are poems.

Conclusion:

- I. No stories are poems.
- II. Some poems are stories.

- Ans
- 1. Only conclusion I follows.
 - 2. Only conclusion II follows.
 - 3. Either conclusion I or conclusion II follows.
 - 4. Both conclusions follow.

Question ID : 9895808250
Chosen Option : 2

Q.6 Choose the odd one out of the given options.

- Ans
- 1. Germanium
 - 2. Carbon
 - 3. Silicon
 - 4. Aurum

Question ID : 9895808241

Chosen Option : 1

Q.7 Choose the option that most closely resembles the mirror image of the given word when mirror is placed at right side.

TOLERANT

- Ans 1. LAGOEKVAL
 2. TOLERANT
 3. LAGELVAL
 4. TLOERANT

Question ID : 9895808261

Chosen Option : 2

Q.8 What will be the value of the following equation if '+' means 'addition', '-' means 'subtraction', '×' means 'multiplication' and '÷' means 'division'?

$$75 \times 5 - 4 \div 7 + 2 = ?$$

- Ans 1. 69
 2. 65
 3. 72
 4. 67

Question ID : 9895808257

Chosen Option : 2

Q.9 Eight friends P, Q, R, S, T, U, V and W are seated around a round table facing the center of the table. P is not sitting beside T, while R is sitting third to the right side of Q. W is second to the left of T who is sitting next to the right of R. U is not sitting side of either T or Q, but he is sitting immediately to the left of V. Identify who is sitting immediately to the right of Q.

- Ans 1. P
 2. T
 3. S
 4. R

Question ID : 9895808247

Chosen Option : 4

Q.1 The statements below are followed by two conclusions labeled I and II. Assuming that the information in the statements is true, even if it appears to be at variance with generally established facts, decide which conclusion(s) logically and definitely follow(s) from the information given in the statements.

Statements:

Some victims are judges.

Some judges are dacoits.

Conclusion:

I. Some victims are dacoits.

II. No victims are dacoits.

- Ans 1. Both conclusions follow.
 2. Only conclusion II follows.
 3. Only conclusion I follows.
 4. Either conclusion I or conclusion II follows.

Question ID : 9895808251

Chosen Option : 2

Q.1 Identify the odd one from the following.

- Ans
- 1. GITV
 - 2. DFQS
 - 3. JKXY
 - 4. ACNP

Question ID : 9895808240
Chosen Option : 3

Q.1 Select the option that is related to the third term in the same way as the second term is related to the first term.

2

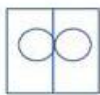
4 : 19 :: 6 : ?

- Ans
- 1. 39
 - 2. 30
 - 3. 24
 - 4. 36

Question ID : 9895808254
Chosen Option : 1

Q.1 Find the figure from the options that has the given figure embedded in it.

3



Ans

- 1.
- 2.
- 3.
- 4.

Question ID : 9895808260
Chosen Option : 4

Q.1 Select the option that is related to the third term in the same way as the second term is related to the first term.

4

BCD : DFH :: JKL : ?

- Ans
- 1. NLP
 - 2. MNO
 - 3. LMP
 - 4. LNP

Question ID : 9895808244
Chosen Option : 4

Q.1

5 Select the option that will replace the question mark and complete the given pattern.



Ans

✓ 1.



✗ 2.



✗ 3.



✗ 4.



Question ID : 9895808259
Chosen Option : 1

Q.1 There is only one runway that will be used by seven flights one by one. P and Q will use the runway neither first nor last. S will use it second after R. M will use it second before O. N will use it after O and before R. Q will use the runway just before S. Who will use the runway just before Q?

Ans

✗ 1. O

✗ 2. S

✓ 3. R

✗ 4. P

Question ID : 9895808249
Chosen Option : 3

Q.1 Select the option that is related to the third term in the same way as the second term is related to the first term.

7

Go : Depart :: Spend : ?

Ans

✓ 1. Use

✗ 2. Went

✗ 3. Make

✗ 4. Save

Question ID : 9895808242
Chosen Option : 4

Q.1 Identify the odd one from the following.

8

Ans

✗ 1. 261

✗ 2. 333

✗ 3. 432

✓ 4. 516

Question ID : 9895808255
Chosen Option : 2

Q.1

9 Some students are sitting in a row. Ravish is the 6th student in the row from the left end. Vaibhav is seated at the 10th position from the right end of the row. In that row, 8 boys are sitting between Ravish and Vaibhav. How many boys in total are sitting in the row?

- Ans
- 1. 32
 - 2. 20
 - 3. 27
 - 4. 24

Question ID : 9895808248

Chosen Option : 4

Q.2 Select the option that is related to the third term in the same way as the second term is related to the first term.

0 Tailor : Cloth :: Mechanic : ?

- Ans
- 1. Repair
 - 2. Tools
 - 3. Electricity
 - 4. Machine

Question ID : 9895808243

Chosen Option : 1

Q.2 Find the next number in the given series.

1 3, 14, 33, 60, ?

- Ans
- 1. 97
 - 2. 95
 - 3. 99
 - 4. 92


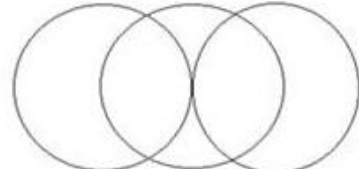

Question ID : 9895808253

Chosen Option : 4

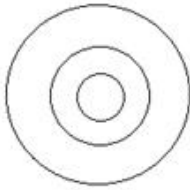
Q.2 Select the Venn diagram that best represents the relationship among the given set of classes:

2 Kathmandu, Nepal, India

Ans

- 1. 
- 2. 
- 3. 

✗ 4.



Question ID : 9895808263
Chosen Option : 1

Q.2 If in a certain code language CUBA is written as 27, then in the same language how will you write the word FIJI?
3

- Ans
- ✗ 1. 38
 - ✗ 2. 30
 - ✗ 3. 27
 - ✓ 4. 34

Question ID : 9895808246
Chosen Option : 4

Q.2 Find the next number in the given series.
4

12, 21, 30, 39, ?

- Ans
- ✓ 1. 48
 - ✗ 2. 50
 - ✗ 3. 44
 - ✗ 4. 41

Question ID : 9895808252
Chosen Option : 1

Q.2 A square transparent sheet with a pattern is given. How will the pattern appear when the transparent sheet is folded along the dotted line?
5



Ans

- ✓ 1.
- ✗ 2.
- ✗ 3.

✗ 4.



Question ID : 9895808262
Chosen Option : 1

Q.2
6 'Ghumra Dance' is a folk dance associated with which Indian state?

- Ans
- ✗ 1. Jharkhand
 - ✗ 2. Assam
 - ✗ 3. West Bengal
 - ✓ 4. Odisha

Question ID : 9895807303
Chosen Option : 3

Q.2
7 'Drizzle' is an example of:

- Ans
- ✓ 1. precipitation
 - ✗ 2. condensation
 - ✗ 3. evaporation
 - ✗ 4. decantation

Question ID : 9895807320
Chosen Option : 1

Q.2
8 Which of the following is a mountain range which extends across India, Pakistan and China?

- Ans
- ✗ 1. Nilgiri
 - ✓ 2. Karakoram
 - ✗ 3. Satpura
 - ✗ 4. Aravalli

Question ID : 9895807323
Chosen Option : 2

Q.2
9 Which American journalist covered the Salt Satyagraha Protest in Dharsana?

- Ans
- ✗ 1. Walter Leland Cronkite
 - ✗ 2. Edward Murrow
 - ✗ 3. Carl Bernstein
 - ✓ 4. Webb Miller

Question ID : 9895807327
Chosen Option : 4

Q.3
0 Name the device which helps to maintain a potential difference across a conductor?

- Ans
- ✗ 1. Calliper
 - ✗ 2. eudiometer

3. Battery

4. dynamometer

Question ID : 9895807318

Chosen Option : 3

Q.3 The process of allowing small quantities of water to reach the roots of plants either from the surface or from under the surface is:

Ans 1. localized irrigation

2. manual irrigation

3. drip irrigation

4. lateral move irrigation

Question ID : 9895807324

Chosen Option : 1

Q.3 Which law of motion states that when one object exerts a force on another object, the second object instantaneously exerts a force back on the first?

Ans 1. Newton's third law of motion

2. Coulomb's Law

3. Stefan's law

4. Newton's second law of motion

Question ID : 9895807317

Chosen Option : 4

Q.3 Which organization has been given the Nobel Peace Prize three times?

Ans 1. World Bank

2. International Labour Organization (ILO)

3. United Nations (UN)

4. International Committee of the Red Cross (ICRC)

Question ID : 9895807308

Chosen Option : 4

Q.3 Which of the following is an example of marsupial?

Ans 1. Kangaroo

2. Zebra

3. Jackal

4. Tortoise

Question ID : 9895807319

Chosen Option : 2

Q.3 In 2015, who among the following became the first Indian female player to reach the number one rank in badminton?

Ans 1. Sania Nehwal

2. P.V. Sindhu

3. Jwala Gutta

4. Ashwini Ponappa

Question ID : 9895807306
Chosen Option : 2

Q.3 The parliamentary system of government was adopted by India based on the constitution of which nation?

6

- Ans 1. United States of America
 2. Ireland
 3. United Kingdom
 4. Russia

Question ID : 9895807314
Chosen Option : 4

Q.3 Which of the following is the longest river of Nepal?

7

- Ans 1. Karnali
 2. Narayani
 3. Rapti
 4. Mahakali

Question ID : 9895807322
Chosen Option : 3

Q.3 In the context of democracies, which one of the following concepts is correct, which democracies have successfully eliminated.

8

- Ans 1. Economic inequality amongst people
 2. Differences on how marginalised sections are treated
 3. Idea of political inequality
 4. Conflicts amongst its people

Question ID : 9895807316
Chosen Option : 1

Q.3 Who invented the oral polio vaccine?

9

- Ans 1. Louis Pasture
 2. Jonas Salk
 3. Albert Sabin
 4. John Nash

Question ID : 9895807321
Chosen Option : 1

Q.4 'Pawl kut' is a traditional festival associated with which state of India?

0

- Ans 1. Meghalaya
 2. Mizoram
 3. Sikkim
 4. Goa

Question ID : 9895807304

Chosen Option : 2

Q.4 If monetary policy deals with management of interest rates and supply of money, then what does fiscal policy deal with?

1

Ans 1. Taxation and government spending

2. Import and export

3. Banking

4. Foreign trade

Question ID : 9895807311

Chosen Option : 3

Q.4 Who is the author of the book 'Republic'?

2

Ans 1. Immanuel Kant

2. Plato

3. Socrates

4. Aristotle

Question ID : 9895807309

Chosen Option : 4

Q.4 'Pali Canon', written in the 5th century BCE, is a text associated with which religion?

3

Ans 1. Zoroastrianism

2. Taoism

3. Buddhism

4. Jainism

Question ID : 9895807325

Chosen Option : 3

Q.4 Who is the Secretary General of SAARC, as of January 2019?

4

Ans 1. K.K. Singh

2. Amjad Hussain B Sial

3. Arjun Bahadur Thapa

4. Abul Ahsan

Question ID : 9895807310

Chosen Option : 4

Q.4 In which place was King Shivaji, the founder of the Maratha Empire, crowned 'Chhatrapati'?

5

Ans 1. Raigad

2. Pune

3. Gingee

4. Satara

Question ID : 9895807326

Chosen Option : 1

Q.4 In which year did the 'Maintenance and Welfare of Parents and Senior Citizens Act' come into force in India?

6

- Ans
- 1. 2010
 - 2. 2004
 - 3. 2005
 - 4. 2007

Question ID : 9895807315

Chosen Option : 4

Q.4 Which player among the following has won the highest number of medals in the Olympic games?

7

- Ans
- 1. Paavo Nurmi
 - 2. Mark Spitz
 - 3. Nadia Comaneci
 - 4. Michael Phelps

Question ID : 9895807307

Chosen Option : 4

Q.4 'Barabati Fort' is a monument located in which state of India?

8

- Ans
- 1. Madhya Pradesh
 - 2. Maharashtra
 - 3. West Bengal
 - 4. Odisha

Question ID : 9895807305

Chosen Option : 3

Q.4 The WTO Agreement on Agriculture was an agreement negotiated during which round in 1993?

9

- Ans
- 1. Paris Round
 - 2. Washington Round
 - 3. Brazil Round
 - 4. Uruguay Round

Question ID : 9895807313

Chosen Option : 1

Q.5 Buffer stock is created to distribute food grains in poorer strata of society at a price lower than the market price, which is also as _____.

0

- Ans
- 1. Reduced price
 - 2. Cost price
 - 3. Fair price
 - 4. Issue price

Question ID : 9895807312

Chosen Option : 1

Q.5

1

Simplify :

$$14.62 - 0.5 \text{ of } (8.3 - 3.3) + 2.6 \times 4.04$$

- Ans
- 1. 22.642
 - 2. 22.624
 - 3. 24.624
 - 4. 23.624

Question ID : 9895807630
Chosen Option : 3

Q.5
2 The three numbers are in the ratio $\frac{1}{3} : \frac{2}{5} : \frac{1}{4}$. The difference between the greatest number and the smallest number is 9. Find the numbers.

- Ans
- 1. 42, 46, 33
 - 2. 30, 34, 21
 - 3. 24, 28, 15
 - 4. 20, 24, 15

Question ID : 9895807639
Chosen Option : 3

Q.5
3 A copper wire, 36 m long with diameter 2 mm, is melted to form a sphere. Then the radius of the sphere is:

- Ans
- 1. 5 cm
 - 2. 3 cm
 - 3. 4 cm
 - 4. 6 cm

Question ID : 9895807649
Chosen Option : 4

Q.5
4 Train A takes 6 h more than train B to cover a distance of 800 km. If the speed of train A is doubled it takes 2 h less than train B. What is the speed of train B?

- Ans
- 1. 75 km/h
 - 2. 80 km/h
 - 3. 60 km/h
 - 4. 50 km/h

Question ID : 9895807646
Chosen Option : 3

Simplify :

$$12 - 6.4 \div 8 + 0.7 \times 0.4$$

- Ans
- 1. 11.48
 - 2. 11.42
 - 3. 12.48
 - 4. 11.84

Question ID : 9895807629
Chosen Option : 3

Q.5 The cost price of 32 articles is the same as the selling price of x articles. If the profit is 28%, then the value of x is:

6

- Ans
- 1. 15
 - 2. 25
 - 3. 16
 - 4. 20

Question ID : 9895807637
Chosen Option : 3

Q.5 Study the following table and answer the question based on it.

7

Expenditures of a Company (in lakh ₹) per annum over the given Years.

Year	Item of Expenditure				
	Salary	Fuel and Transport	Bonus	Interest on Loans	Taxes
1998	288	98	3.00	23.4	83
1999	342	112	2.52	32.5	108
2000	324	101	3.84	41.6	74
2001	336	133	3.68	36.4	88
2002	420	142	3.96	49.4	98

What is the average amount of bonus per year which the company had to pay during this period?

- Ans
- 1. ₹3.2 lakh
 - 2. ₹3.4 lakh
 - 3. ₹4.2 lakh
 - 4. ₹3.5 lakh

Question ID : 9895807650
Chosen Option : 3

Q.5 If 5 cm is added to the radius of a circle, then the circumference of the circle increases by:

8

- Ans
- 1. 6π cm
 - 2. 5π cm
 - 3. 9π cm
 - 4. 10π cm

Question ID : 9895807648
Chosen Option : 1

Q.5 A and B can do a piece of work in 15 days, B and C can do the same work in 20 days. If A is twice as good a worker as

9

C, find the time that C alone will take to do the work.

- Ans 1. 33 days
 2. 60 days
 3. 45 days
 4. 27 days

Question ID : 9895807644
 Chosen Option : 4

Q.6 A library has an average of 480 visitors on Sundays and 222 on other days. The average number of visitors per day in a month of 30 days beginning with a Sunday is:

- Ans 1. 285
 2. 280
 3. 260
 4. 265

Question ID : 9895807631
 Chosen Option : 1

Q.6 100 oranges are bought at the rate of ₹450 and sold at the rate of ₹60 per dozen. The percentage of profit or loss is:

- Ans 1. $12\frac{1}{9}$
 2. $11\frac{1}{9}$
 3. 11
 4. $11\frac{2}{9}$

Question ID : 9895807636
 Chosen Option : 2

Q.6 Study the following table and answer the question based on it.
 2 Expenditures of a Company (in lakh ₹) per annum over the given Years.

Year	Item of Expenditure				
	Salary	Fuel and Transport	Bonus	Interest on Loans	Taxes
1998	288	98	3.00	23.4	83
1999	342	112	2.52	32.5	108
2000	324	101	3.84	41.6	74
2001	336	133	3.68	36.4	88
2002	420	142	3.96	49.4	98

Total expenditure on all these items in 1998 was approximately what percent of the total expenditure in 2001?

- Ans 1. 80.97%
 2. 82.79%
 3. 72.97%

✓ 4. 82.97%

Question ID : 9895807651
Chosen Option : 4

Q.6 Two tailors X and Y are paid a total of ₹660 per week by their employer. If X is paid 120 percent of the sum paid to Y,
3 how much is Y paid (in ₹) per week?

- Ans
- ✗ 1. 250
 - ✗ 2. 350
 - ✓ 3. 300
 - ✗ 4. 200

Question ID : 9895807635
Chosen Option : 4

Q.6 The marked price of a watch is ₹600. A shopkeeper gives two successive discounts and sells the watch at ₹459. If the
4 first discount is 10%, the second discount is:

- Ans
- ✗ 1. 10%
 - ✗ 2. 20%
 - ✓ 3. 15%
 - ✗ 4. 12%

Question ID : 9895807633
Chosen Option : 3

Q.6 What is 4th proportional in 9, 14 and 99?
5

- Ans
- ✗ 1. 541
 - ✗ 2. 145
 - ✗ 3. 451
 - ✓ 4. 154

Question ID : 9895807638
Chosen Option : 4

Q.6 The average weight of 18 boys in a class is 52.5 kg and that of the remaining 6 boys is 44.5 kg. Find the average
6 weights of all the boys in the class.

- Ans
- ✗ 1. 50 kg
 - ✗ 2. 51.5 kg
 - ✓ 3. 50.5 kg
 - ✗ 4. 52.5 kg

Question ID : 9895807632
Chosen Option : 4

Q.6 A alone can do a piece of work in 12 days and B alone in 10 days. They undertook to do the work for ₹440. How much
7 will A get?

- Ans
- ✗ 1. ₹240
 - ✗ 2. ₹150
 - ✗ 3. ₹300
 - ✓ 4. ₹200

Question ID : 9895807643

Chosen Option : 4

Q.6 A sum of money amounts to ₹8,000 after 5 years and ₹9,800 after 8 years at the same rate of simple interest. The rate of interest per annum is:

- Ans**
- 1. 5%
 - 2. 8%
 - 3. 12%
 - 4. 15%

Question ID : 9895807641
Chosen Option : 4

Q.6 By walking $\frac{3}{4}$ of his usual speed, a man reaches his office 30 min later than the usual time. What is the usual time he takes to reach the office?

- Ans**
- 1. 70 min
 - 2. 60 min
 - 3. 80 min
 - 4. 90 min

Question ID : 9895807645
Chosen Option : 3

Q.7 Study the following table and answer the question based on it.

0 Expenditures of a Company (in lakh ₹) per annum over the given Years.

Year	Item of Expenditure				
	Salary	Fuel and Transport	Bonus	Interest on Loans	Taxes
1998	288	98	3.00	23.4	83
1999	342	112	2.52	32.5	108
2000	324	101	3.84	41.6	74
2001	336	133	3.68	36.4	88
2002	420	142	3.96	49.4	98

The total amount of taxes paid by the company during the given period is approximately what percent of the total amount of salary paid during this period?

- Ans**
- 1. 26.37%
 - 2. 27.47%
 - 3. 25.37%
 - 4. 24.47%

Question ID : 9895807652
Chosen Option : 3

Q.7 A sum of money invested at compound interest will grow to ₹8,500 in 3 years and to ₹9,520 in 4 years. Then the rate of interest per annum is:

- Ans**
- 1. 8%
 - 2. 4%

✓ 3. 12%

✗ 4. 3%

Question ID : 9895807642
Chosen Option : 3

Q.7
2 Which of the following has the largest area?

- (a) A circle of radius $\sqrt{2}$ cm
- (b) An equilateral triangle whose side is 4 cm
- (c) A triangle with sides 3 cm, 4 cm and 5 cm.
- (d) A rectangle in sides 2.5 cm by 2 cm.

Ans ✓ 1. b
✗ 2. d
✗ 3. c
✗ 4. a

Question ID : 9895807647
Chosen Option : 2

Q.7
3 If the ratio of mean and median of a certain data is 2 : 3, then find the ratio of its mode and mean.

Ans ✗ 1. 2 : 5
✗ 2. 4 : 3
✓ 3. 5 : 2
✗ 4. 3 : 2

Question ID : 9895807634
Chosen Option : 3

Q.7
4 The greatest number which on dividing 1861 and 2039 leaves remainders 7 and 5 respectively, is:

Ans ✗ 1. 35
✗ 2. 12
✓ 3. 18
✗ 4. 24

Question ID : 9895807628
Chosen Option : 3

Q.7
5 Amit and Ram together have ₹1,300. On taking ₹500 from Amit, Amit will have same amount as what Ram had earlier. Find the ratio of the amounts Amit and Ram had initially.

Ans ✓ 1. 9 : 4
✗ 2. 7 : 1
✗ 3. 1 : 3
✗ 4. 4 : 3

Question ID : 9895807640
Chosen Option : 2

Section : English Language

Q.1 Select the most appropriate word to fill in the blank.

In order to cut down on errors, a keyboard that can be _____ to suit individual typing style is needed.

- Ans
- 1. projected
 - 2. predicted
 - 3. shared
 - 4. adjusted

Question ID : 9895807982
Chosen Option : 1

Q.2 Select the most appropriate option to fill in the blank.

Disputes destroy your happiness and distract you _____ your everyday tasks at work and home.

- Ans
- 1. from
 - 2. at
 - 3. off
 - 4. away

Question ID : 9895807964
Chosen Option : 2

Q.3 Select the word which means the same as the group of words given.

An introduction made by the dramatist at the beginning of the play

- Ans
- 1. Prologue
 - 2. Epilogue
 - 3. Monologue
 - 4. Dialogue

Question ID : 9895807977
Chosen Option : 3

Q.4 Select the option that means the same as the given idiom.

To kill two birds with one stone

- Ans
- 1. To shoo away birds
 - 2. To achieve two aims simultaneously
 - 3. To do many jobs at different places
 - 4. To shout at two individuals at a time

Question ID : 9895807975
Chosen Option : 3

Q.5 From the given options, identify the segment in the sentence which contains the grammatical error.

The constitutional order on which the Indian State run is that there shall be no discrimination on the basis of religion.

Ans

- 1. on the basis of
- 2. Indian State run
- 3. there shall be
- 4. order on which

Question ID : 9895807958
Chosen Option : 1

Q.6 Select the most appropriate option to substitute the underlined segment in the given sentence. If there is no need to substitute it, select No improvement.

Permit me to speak the truth and I have say it without any fear.

- Ans
- 1. No improvement
 - 2. I shall said it without any fear
 - 3. I had say it without any fear
 - 4. I will say it without any fear

Question ID : 9895807960
Chosen Option : 2

Q.7 Select the synonym of the given word.

BRITTLE

- Ans
- 1. Enduring
 - 2. Delicate
 - 3. Coarse
 - 4. Durable

Question ID : 9895807971
Chosen Option : 1

Q.8 Select the most appropriate option to substitute the underlined segment in the given sentence. If there is no need to substitute it, select No improvement.

In case of actual requirement, there is a dearth of woman army officer in our state.

- Ans
- 1. women army officer
 - 2. No improvement
 - 3. woman army officers
 - 4. women army officers

Question ID : 9895807961
Chosen Option : 3

Q.9 Select the most appropriate option to fill in the blank.

The earth _____ round the sun and not the vice-versa.

- Ans
- 1. revolving
 - 2. revolves
 - 3. has revolve

4. revolve

Question ID : 9895807963
Chosen Option : 4

Q.1
0 Select the antonym of the given word.

COURTEOUS

- Ans
- 1. Detached
 - 2. Impartial
 - 3. Rude
 - 4. Independent

Question ID : 9895807973
Chosen Option : 4

Q.1
1 Select the correctly spelt word.

- Ans
- 1. Emergency
 - 2. Emergancy
 - 3. Emargency
 - 4. Emerergency

Question ID : 9895807979
Chosen Option : 1

Q.1
2 From the given options, identify the segment in the sentence which contains the grammatical error.

Hackers can either tampers with a random number generator or figure out the resultant number easily in case of online gaming.

- Ans
- 1. in case of
 - 2. with a random number
 - 3. figure out
 - 4. Hackers can either tampers

Question ID : 9895807959
Chosen Option : 4

Comprehension:

In the following passage some words have been deleted. Fill in the blanks with the help of the alternatives given.

Violence is an expression of aggression. There can be various reasons that cause this kind of behaviour. Various (1) _____ social situations or circumstances in life affect an individual adversely. The reaction to those situations is (2) _____. Those who are short tempered or are unable to cope with the changing environment find it hard to behave (3) _____. This frustration comes out in the form of anger and violent behaviour. Though, environmental factors are responsible but only to an (4) _____. Psychologists believe that violent traits are (5) _____ in nature and are likely to surface sooner or later.

SubQuestion No : 13

Q.1
3 Select the most appropriate option that will fill in the blank number 1.

- Ans
- 1. favourable
 - 2. destined
 - 3. lucky
 - 4. unfavourable

Question ID : 9895807966
Chosen Option : 3

Comprehension:

In the following passage some words have been deleted. Fill in the blanks with the help of the alternatives given.

Violence is an expression of aggression. There can be various reasons that cause this kind of behaviour. Various (1) _____ social situations or circumstances in life affect an individual adversely. The reaction to those situations is (2) _____. Those who are short tempered or are unable to cope with the changing environment find it hard to behave (3) _____. This frustration comes out in the form of anger and violent behaviour. Though, environmental factors are responsible but only to an (4) _____. Psychologists believe that violent traits are (5) _____ in nature and are likely to surface sooner or later.

SubQuestion No : 14

Q.1
4 Select the most appropriate option that will fill in the blank number 2.

- Ans
- 1. agreeable
 - 2. indecisive
 - 3. suitable
 - 4. pleasant

Question ID : 9895807967
Chosen Option : 3

Comprehension:

In the following passage some words have been deleted. Fill in the blanks with the help of the alternatives given.

Violence is an expression of aggression. There can be various reasons that cause this kind of behaviour. Various (1) _____ social situations or circumstances in life affect an individual adversely. The reaction to those situations is (2) _____. Those who are short tempered or are unable to cope with the changing environment find it hard to behave (3) _____. This frustration comes out in the form of anger and violent behaviour. Though, environmental factors are responsible but only to an (4) _____. Psychologists believe that violent traits are (5) _____ in nature and are likely to surface sooner or later.

SubQuestion No : 15

Q.1
5 Select the most appropriate option that will fill in the blank number 3.

- Ans
- 1. harshly
 - 2. negatively
 - 3. rationally
 - 4. eagerly

Question ID : 9895807968
Chosen Option : 4

Comprehension:

In the following passage some words have been deleted. Fill in the blanks with the help of the alternatives given.

Violence is an expression of aggression. There can be various reasons that cause this kind of behaviour. Various (1) _____ social situations or circumstances in life affect an individual adversely. The reaction to those situations is (2) _____. Those who are short tempered or are unable to cope with the changing environment find it hard to behave (3) _____. This frustration comes out in the form of anger and violent behaviour. Though, environmental factors are responsible but only to an (4) _____. Psychologists believe that violent traits are (5) _____ in nature and are likely to surface sooner or later.

SubQuestion No : 16

Q.1
6 Select the most appropriate option that will fill in the blank number 4.

- Ans
- 1. range
 - 2. extent
 - 3. end
 - 4. intent

Question ID : 9895807969
Chosen Option : 3

Comprehension:

In the following passage some words have been deleted. Fill in the blanks with the help of the alternatives given.

Violence is an expression of aggression. There can be various reasons that cause this kind of behaviour. Various (1) _____ social situations or circumstances in life affect an individual adversely. The reaction to those situations is (2) _____. Those who are short tempered or are unable to cope with the changing environment find it hard to behave (3) _____. This frustration comes out in the form of anger and violent behaviour. Though, environmental factors are responsible but only to an (4) _____. Psychologists believe that violent traits are (5) _____ in nature and are likely to surface sooner or later.

SubQuestion No : 17

Q.1
7 Select the most appropriate option that will fill in the blank number 5.

- Ans
- 1. general
 - 2. extrinsic
 - 3. common
 - 4. inherent

Question ID : 9895807970
Chosen Option : 2

Q.1
8 Select the synonym of the given word.

ADORN

- Ans
- 1. Decorate
 - 2. Create
 - 3. Produce
 - 4. Generate

Question ID : 9895807972
Chosen Option : 2

Q.1
9 Select the antonym of the given word.

FUTILE

- Ans
- 1. Common
 - 2. Mutual
 - 3. Collective
 - 4. Fruitful

Question ID : 9895807974
Chosen Option : 2

Q.2
0 Select the option that means the same as the given idiom.

To bell the cat

- Ans
- 1. To take a lead in difficult situations
 - 2. To be alert to danger anywhere
 - 3. To tie a bell for a cat at home
 - 4. To catch a cat and bell it first

Question ID : 9895807976
Chosen Option : 4

Q.2
1 Select the most appropriate word to fill in the blank.

When the bat pays attention to an object, the _____ of that object sharpens in its brain.

- Ans
- 1. portrait
 - 2. appearance
 - 3. depiction
 - 4. representation

Question ID : 9895807981
Chosen Option : 2

Q.2
2 Select the word which means the same as the group of words given.

A poem of serious reflection, typically a lament for the dead.

- Ans
- 1. Elegy
 - 2. Ballad
 - 3. Sonnet
 - 4. Hymn

Question ID : 9895807978
Chosen Option : 3

Q.2
3 From the given options, identify the segment in the sentence which contains the grammatical error.

Animals experience feelings of love and they also protect their young ones from difficulties as human does.

- Ans
- 1. they also protect
 - 2. Animals experience
 - 3. feelings of love
 - 4. as human does

Question ID : 9895807957
Chosen Option : 4

Q.2
4

Select the most appropriate option to substitute the underlined segment in the given sentence. If there is no need to substitute it, select No improvement.

The family had been without food for four days.

- Ans
- 1. family is been
 - 2. family are been
 - 3. No improvement
 - 4. family is being

Question ID : 9895807962
Chosen Option : 1

Q.2
5 Select the correctly spelt word.

- Ans
- 1. Tution
 - 2. Tuition
 - 3. Tuitoin
 - 4. Tuiton

Question ID : 9895807980
Chosen Option : 2

Section : Hindi Language

Q.1 दिए गए वाक्य का वह भाग ज्ञात करें जिसमें कोई त्रुटि है।

भारत ने अन्य राष्ट्रों को नैतिक मूल्यों का पालन करने का प्रेरणा दी है।

- Ans
- 1. करने का प्रेरणा दी है।
 - 2. अन्य राष्ट्रों को
 - 3. भारत ने
 - 4. नैतिक मूल्यों का पालन

Question ID : 9895806737
Chosen Option : --

Q.2 दिए गए शब्द का विलोम चुनें।

विराम

- Ans
- 1. अशून्य
 - 2. शांत
 - 3. शून्य
 - 4. गति

Question ID : 9895806751
Chosen Option : --

Q.3

रिक्त स्थान को भरने के लिए उपयुक्त शब्द का चयन करें।

मुझे खेद है _____ मैं देर से पहुँचा।

Ans

- 1. परंतु
- 2. यदि
- 3. कि
- 4. किंतु

Question ID : 9895806741
Chosen Option : --

Q.4 सही वर्तनी वाले शब्द का चयन करें।

Ans

- 1. स्वादिष्ठ
- 2. स्वद्धिस्ट
- 3. स्वदिस्ट
- 4. स्वादिश्ट

Question ID : 9895806760
Chosen Option : --

Q.5 दिए गए शब्द के पर्यायवाची शब्द का चयन करें।

अंधकार

Ans

- 1. तिमिर
- 2. नीरस
- 3. गहरा
- 4. निवेदन

Question ID : 9895806754
Chosen Option : --

Q.6 दिए गए शब्द के पर्यायवाची शब्द का चयन करें।

सूर्य

Ans

- 1. दिवाकर
- 2. प्रार्थना
- 3. सेवक
- 4. अभिन्न

Question ID : 9895806753
Chosen Option : --

Q.7 निम्नलिखित में से उस विकल्प का चयन करें जो 'श्री गणेश करना' मुहावरे का अर्थ व्यक्त करता है।

- Ans
- 1. कार्य आरंभ करना
 - 2. कार्य सम्पन्न होना
 - 3. श्री गणेश का पूजन करना
 - 4. पालन करना

Question ID : 9895806755

Chosen Option : --

Q.8 दिए गए वाक्य में रेखांकित खंड को प्रतिस्थापित करने के लिए उपयुक्त विकल्प का चयन करें।

सार में परिष्कृत रचना के गुणों का होना आवश्यक है।

- Ans
- 1. पल्लवन
 - 2. प्रतिवेदन
 - 3. टिप्पण
 - 4. संक्षेपण

Question ID : 9895806739

Chosen Option : --

Q.9 सही वर्तनी वाले शब्द का चयन करें।

- Ans
- 1. इत्यादी
 - 2. ईत्यादी
 - 3. इत्यादि
 - 4. इतयादि

Question ID : 9895806759

Chosen Option : --

Q.1 रिक्त स्थान को भरने के लिए उपयुक्त शब्द का चयन करें।

तालाब में उगा _____ बहुत सुंदर लगता है।

- Ans
- 1. चन्द्रमा
 - 2. सूरज
 - 3. कमल
 - 4. घास

Question ID : 9895806742

Chosen Option : --

Comprehension:

निम्नलिखित गद्यांश के रिक्त स्थानों की पूर्ति गद्यांश के नीचे दिए गए प्रश्नों के अनुसार कीजिए-

बैसाखी उत्तर भारत का प्रमुख _____ (1) है। यह त्योहार पंजाब, हरियाणा, हिमाचल और दिल्ली में विशेष रूप से _____ (2) जाता है। इस दिन को रबी की फसल तैयार होने की _____ (3) में मनाया जाता है। इसलिए इसे कृषि पर्व भी कहा जाता है। इस दिन जगह-जगह _____ (4) लगते हैं। इस दिन खालसा पंथ की स्थापना की खुशी में पंच प्यारों को याद करते हुए _____ (5) निकाले जाते हैं।

SubQuestion No : 11

Q.1
1 गद्यांश में संकेतित रिक्त स्थान (1) के लिए उपयुक्त शब्द होगा।

- Ans
- 1. आनंद
 - 2. त्योहार
 - 3. हथियार
 - 4. बाज़ार

Question ID : 9895806746
Chosen Option : --

Comprehension:

निम्नलिखित गद्यांश के रिक्त स्थानों की पूर्ति गद्यांश के नीचे दिए गए प्रश्नों के अनुसार कीजिए-

बैसाखी उत्तर भारत का प्रमुख _____ (1) है। यह त्योहार पंजाब, हरियाणा, हिमाचल और दिल्ली में विशेष रूप से _____ (2) जाता है। इस दिन को रबी की फसल तैयार होने की _____ (3) में मनाया जाता है। इसलिए इसे कृषि पर्व भी कहा जाता है। इस दिन जगह-जगह _____ (4) लगते हैं। इस दिन खालसा पंथ की स्थापना की खुशी में पंच प्यारों को याद करते हुए _____ (5) निकाले जाते हैं।

SubQuestion No : 12

Q.1
2 गद्यांश में संकेतित रिक्त स्थान (2) के लिए उपयुक्त शब्द होगा।

- Ans
- 1. कराया
 - 2. बनाया
 - 3. लगाया
 - 4. मनाया

Question ID : 9895806747
Chosen Option : --

Comprehension:

निम्नलिखित गद्यांश के रिक्त स्थानों की पूर्ति गद्यांश के नीचे दिए गए प्रश्नों के अनुसार कीजिए-

बैसाखी उत्तर भारत का प्रमुख _____ (1) है। यह त्योहार पंजाब, हरियाणा, हिमाचल और दिल्ली में विशेष रूप से _____ (2) जाता है। इस दिन को रबी की फसल तैयार होने की _____ (3) में मनाया जाता है। इसलिए इसे कृषि पर्व भी कहा जाता है। इस दिन जगह-जगह _____ (4) लगते हैं। इस दिन खालसा पंथ की स्थापना की खुशी में पंच प्यारों को याद करते हुए _____ (5) निकाले जाते हैं।

SubQuestion No : 13

Q.1
3 गद्यांश में संकेतित रिक्त स्थान (3) के लिए उपयुक्त शब्द होगा।

- Ans
- 1. शौक
 - 2. हँसी
 - 3. गम
 - 4. खुशी

Question ID : 9895806748
Chosen Option : --

Comprehension:

निम्नलिखित गद्यांश के रिक्त स्थानों की पूर्ति गद्यांश के नीचे दिए गए प्रश्नों के अनुसार कीजिए-

बैसाखी उत्तर भारत का प्रमुख _____ (1) है। यह त्योहार पंजाब, हरियाणा, हिमाचल और दिल्ली में विशेष रूप से _____ (2) जाता है। इस दिन को रबी की फसल तैयार होने की _____ (3) में मनाया जाता है। इसलिए इसे कृषि पर्व भी कहा जाता है। इस दिन जगह-जगह _____ (4) लगते हैं। इस दिन खालसा पंथ की स्थापना की खुशी में पंच प्यारों को याद करते हुए _____ (5) निकाले जाते हैं।

SubQuestion No : 14

Q.1
4 गद्यांश में संकेतित रिक्त स्थान (4) के लिए उपयुक्त शब्द होगा।

- Ans
- 1. जमघट
 - 2. सम्मेलन
 - 3. रैली
 - 4. मेले

Question ID : 9895806749
Chosen Option : --

Comprehension:

निम्नलिखित गद्यांश के रिक्त स्थानों की पूर्ति गद्यांश के नीचे दिए गए प्रश्नों के अनुसार कीजिए-

बैसाखी उत्तर भारत का प्रमुख _____ (1) है। यह त्योहार पंजाब, हरियाणा, हिमाचल और दिल्ली में विशेष रूप से _____ (2) जाता है। इस दिन को रबी की फसल तैयार होने की _____ (3) में मनाया जाता है। इसलिए इसे कृषि पर्व भी कहा जाता है। इस दिन जगह-जगह _____ (4) लगते हैं। इस दिन खालसा पंथ की स्थापना की खुशी में पंच प्यारों को याद करते हुए _____ (5) निकाले जाते हैं।

SubQuestion No : 15

Q.1
5 गद्यांश में संकेतित रिक्त स्थान (5) के लिए उपयुक्त शब्द होगा।

- Ans
- 1. विज्ञापन
 - 2. जुलूस
 - 3. प्रदर्शन
 - 4. लीला

Question ID : 9895806750
Chosen Option : --

Q.1
6 दिए गए शब्द का विलोम चुनें।

सुकर

- Ans
- 1. दुष्कर
 - 2. दुकर
 - 3. पुष्कर
 - 4. निराकार

Question ID : 9895806752
Chosen Option : --

Q.1
7 दिए गए वाक्य का वह भाग ज्ञात करें जिसमें कोई त्रुटि है।

विज्ञान की प्रगति से मनुष्य की समस्याओं में कमी आया है।

- Ans
- 1. मनुष्य की समस्याओं में
 - 2. कमी आया है।

3. विज्ञान की

4. प्रगति से

Question ID : 9895806735

Chosen Option : --

Q.1 निम्नलिखित में से उस विकल्प का चयन करें जो 'टेढ़ी खीर होना' मुहावरे का अर्थ व्यक्त करता है।

Ans 1. टेढ़े होकर खीर खाना

2. खीर खराब होना

3. कार्य का बहुत कठिन होना

4. असंभव कार्य

Question ID : 9895806756

Chosen Option : --

Q.1 रिक्त स्थान को भरने के लिए उपयुक्त शब्द का चयन करें।

दीपक _____ परिश्रमी है।

Ans 1. सब द्वारा

2. सबका

3. सबसे

4. सब पर

Question ID : 9895806744

Chosen Option : --

Q.2 दिये गये वाक्यांश के लिए एक शब्द दीजिये।

ऊपर लिखी हुई

Ans 1. निम्नलिखित

2. अलिखित

3. उल्लिखित

4. अधोलिखित

Question ID : 9895806758

Chosen Option : --

Q.2 दिए गए वाक्य का वह भाग ज्ञात करें जिसमें कोई त्रुटि है।

भारत जैसा सहिष्णुता और उदारता से ही विश्वशांति संभव है।

Ans 1. से ही विश्वशांति

2. सहिष्णुता और उदारता

3. संभव है।
 4. भारत जैसा

Question ID : 9895806736
Chosen Option : --

Q.2 दिए गए वाक्य में रेखांकित खंड को प्रतिस्थापित करने के लिए उपयुक्त विकल्प का चयन करें।

यह सिद्धांत हमारी विरासत का एक अंश है।

- Ans 1. मौका
 2. भाग
 3. कुल
 4. परिवार

Question ID : 9895806740
Chosen Option : --

Q.2 रिक्त स्थान को भरने के लिए उपयुक्त शब्द का चयन करें।

मिठाइयों पर _____ बैठी हैं।

- Ans 1. चूहे
 2. मक्खियाँ
 3. तितलियाँ
 4. गिरगिट

Question ID : 9895806743
Chosen Option : --

Q.2 दिए गए वाक्य में रेखांकित खंड को प्रतिस्थापित करने के लिए उपयुक्त विकल्प का चयन करें।

दोनों में से किसी की उपेक्षा नहीं की जा सकती।

- Ans 1. तिरस्कार
 2. इच्छा
 3. निरादर
 4. अवहेलना

Question ID : 9895806738
Chosen Option : --

Q.2 दिये गये वाक्यांश के लिए एक शब्द दीजिये।

जो करने योग्य न हो

- Ans 1. दर्शनीय
 2. शोभनीय

✘ 3. अकरणीय

✔ 4. रमणीय

Question ID : 9895806757
Chosen Option : --

GovtJobsAlert.In