

Constable (GD) in CAPFs, NIA, SSF and Rifleman (GD) in Assam Rifles Examination, 2018

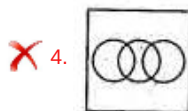
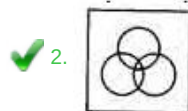
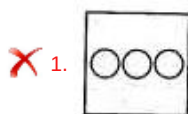
Roll No. :	www.GovtJobsAlert.In
Registration No.	
Name :	
Exam Venue :	ION Digital Zone Chikalhana
Exam Time :	4:00 PM - 5:30 PM
Exam Date :	02/03/2019

Section : General Section

Q.1 Select the Venn diagram that best illustrates the relationship between the three given classes.

Engineers, Men, Married :

Ans



Question ID : 9895808288
Chosen Option : 2

Q.2 Select the correct option that will fill in the blank and complete the series.

8, 9, 13, 22, 38, _____.

Ans

1. 50

2. 71

3. 63

4. 55

Question ID : 9895808277
Chosen Option : 3

Q.3 P, M, D, A, F, H, R and B are sitting around a circle facing at the centre. R is fourth to the right of A, who is third to the right of P. M is second to the left of H, who is second to the left of P. D is third to the right of B.

Who is the third to the left of H?

Ans

1. B

2. M

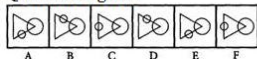
3. A

4. F

Question ID : 9895808272
Chosen Option : 3

Q.4 Identify the two figures from the following set of figures which are out of position and require interchange of positions to put the entire series in order.

Question Figure:



- Ans
- 1. D,E
 - 2. B,F
 - 3. D,F
 - 4. C,D

Question ID : 9895808283
Chosen Option : 2

Q.5 Four options have been given out of which three are alike in some manner, while one is different. Choose the odd one.

- Ans
- 1. (28, 63)
 - 2. (14, 44)
 - 3. (27, 57)
 - 4. (15, 45)

Question ID : 9895808280
Chosen Option : 4

Q.6 The statements below are followed by two conclusions labeled I and II. Assuming that the information in the statements is true, even if it appears to be at variance with generally established facts, decide which conclusion(s) logically and definitely follow(s) from the information given in the statements.

Statements:

Some bottle-gourd are Cabbage
All Capsicum are Cabbage
Some Cabbage are Cucumber

Conclusions:

- I. Some Bottle-gourd are Capsicum
- II. Some Cucumber are Cabbage

- Ans
- 1. If only conclusion I follow
 - 2. If either conclusion I or II follows
 - 3. If only conclusion II follows
 - 4. If neither conclusion I nor II follows

Question ID : 9895808275
Chosen Option : 2

Q.7 If K means \times , H means \div , M means $+$ and N means $-$, then what is the value of

13 K 7 H 22.75 M 27 N 13?

- Ans
- 1. 19
 - 2. 22
 - 3. 18
 - 4. 17

Question ID : 9895808282
Chosen Option : 3

Q.8 The statements below are followed by three conclusions labeled I, II and III. Assuming that the information in the statements is true, even if it appears to be at variance with generally established facts, decide which conclusion(s) logically and definitely follow(s) from the information given in the statements.

Statements:

- I. All sparrows are parrots.
- II. All parrots are birds.

Conclusion:

- I. No sparrows are birds
- II. No birds are sparrows
- III. Some birds are sparrows

- Ans**
- 1. Only conclusion II follows
 - 2. All conclusions follow
 - 3. Only conclusion I follows
 - 4. Only conclusion III follows

Question ID : 9895808276
Chosen Option : 3

Q.9 Select the correct option that will fill in the blank and complete the series.

AP, DQ, HR, MS, ST, ZU, _____

- Ans**
- 1. GV
 - 2. HW
 - 3. FS
 - 4. HV

Question ID : 9895808264
Chosen Option : 1

Q.1 A, B, C, D, E, F, G and H are sitting around a round table facing the centre. D is fourth to the right of H and second to the left of B. F is fourth to the right of B. C is fourth to the right of E, who is not an immediate right of B or D. A is not an immediate neighbour of D.

What is B's position with respect to G when counted from G's right?

- Ans**
- 1. Fourth to the right
 - 2. Third to the right
 - 3. Second to the right
 - 4. Fifth to the right

Question ID : 9895808273
Chosen Option : 2

Q.1 Select the correct option that will fill in the blank and complete the series.

1330, 728, 342, 124, _____.

- Ans**
- 1. 35
 - 2. 48
 - 3. 24
 - 4. 26

Question ID : 9895808278
Chosen Option : 3

Q.1

2 In a certain code 'READY' is written as '\$#2*©' and 'ENJOY' is written as '#64@%'. How is 'NEAR' written in that code?

- Ans
- 1. 6#2\$
 - 2. 6\$2#
 - 3. #62\$
 - 4. #2@#

Question ID : 9895808270
Chosen Option : 1

Q.1 Saurabh is taller than Sandeep, Amit is taller than Saurabh. Subhash is taller than Amit. Sattu is tallest of all. If they stand according to their height who will be exactly in the middle?

- Ans
- 1. Sandeep
 - 2. Subhash
 - 3. Saurabh
 - 4. Amit

Question ID : 9895808274
Chosen Option : 1

Q.1 Select the option that is related to the fourth term in the same way as the first term is related to the second term.

- 4
Friend : Enemy :: ? : Hatred
- Ans
- 1. Empathy
 - 2. Love
 - 3. Anger
 - 4. Mercy

Question ID : 9895808268
Chosen Option : 1

Q.1 Four letters have been given out of which three are alike in some manner, while one is different. Choose the odd one.

- 5
- Ans
- 1. I
 - 2. J
 - 3. Y
 - 4. Q

Question ID : 9895808265
Chosen Option : 2

Q.1 Select the option that is related to the third term in the same way as the second term is related to the first term.

- 6
Water : Ocean :: Air : ?
- Ans
- 1. Earth
 - 2. Sea
 - 3. Vacuum
 - 4. Atmosphere

Question ID : 9895808267
Chosen Option : 4

Q.1
7 If A is coded as 1, CAT is coded as 24, then MAINS will be coded as:

- Ans
- 1. 52
 - 2. 57
 - 3. 50
 - 4. 56

Question ID : 9895808271
Chosen Option : 4

Q.1
8 Select the option that is related to the fourth term in the same way as the first term is related to the second term.


4 : 52 :: ? : 1560

- Ans
- 1. 128
 - 2. 120
 - 3. 118
 - 4. 122

Question ID : 9895808279
Chosen Option : 4

Q.1
9 Which of the following answer figure will complete the given figure?

Questions Figure:

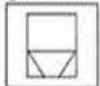


- Ans
- 1.
 - 2.
 - 3.
 - 4.

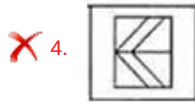
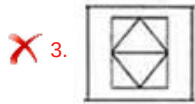
Question ID : 9895808284
Chosen Option : 3

Q.2
0 Choose the option figure in which the given figure is hidden/embedded.

Questions Figure:



- Ans
- 1.
 - 2.



Question ID : 9895808285
Chosen Option : 1

Q.2 Four words have been given out of which three are alike in some manner, while one is different. Choose the odd one.

- 1
Ans 1. Pup
 2. Cub
 3. Goat
 4. Kitten

Question ID : 9895808266
Chosen Option : 2

Q.2 Find the missing number from the below options.



- Ans 1. 3
 2. 9
 3. 8
 4. 7

Question ID : 9895808281
Chosen Option : 3

Q.2 Choose the option that most closely resembles the mirror image of the given figure when mirror is placed at right side.

Questions Figure:



- Ans 1.
- 2.
- 3.
- 4.

Question ID : 9895808286
Chosen Option : 2

Q.2 Select the option that is related to the third term in the same way as the second term is related to the first term.

4

QPRS : TUVW :: JKLM : ?

Ans

- 1. MNPO
- 2. MNOP
- 3. NMOF
- 4. NMPO

Question ID : 9895808269

Chosen Option : 1

Q.2 A piece of paper is shown below. From the given answer figures, indicate how it will appear when it is folded?

5

Questions Figure:



Ans

- 1.
- 2.
- 3.
- 4.

Question ID : 9895808287

Chosen Option : 4

Q.2 Which chemical compound in a chili gives it the characteristic pungent/spicy taste?

6

Ans

- 1. Allicin
- 2. Capsaicin
- 3. Cerium hydroxide
- 4. Cerium sulphate

Question ID : 9895807343

Chosen Option : 3

Q.2 'Navlakha Palace' is a heritage site located in which state of India?

7

Ans

- 1. West Bengal
- 2. Madhya Pradesh
- 3. Uttar Pradesh
- 4. Bihar

Question ID : 9895807330

Chosen Option : 1

Q.2
8 When does a budget deficit occur?

- Ans
- 1. Government is spending less than available revenue
 - 2. Government is spending more than available revenue
 - 3. Government is spending equal to available revenue
 - 4. Government is spending a fixed minimum of available revenue

Question ID : 9895807337
Chosen Option : 2

Q.2
9 Which Indian, who is fondly called the Waterman of India, has won the Stockholm Water Prize?

- Ans
- 1. Dr Verghese Kurien
 - 2. Rajanikant Arole
 - 3. Dr Rajendra Singh
 - 4. Vedaratnam Appakutti

Question ID : 9895807333
Chosen Option : 3

Q.3
0 In which year did Subhash Chandra Bose declare the formation of the Provisional Government of Free India?

- Ans
- 1. 1943
 - 2. 1941
 - 3. 1945
 - 4. 1942

Question ID : 9895807352
Chosen Option : 3

Q.3
1 The first AIBA Legends Award went to which Indian sportsperson in 2016?

- Ans
- 1. P.V. Sindhu
 - 2. MC Mary Kom
 - 3. Sachin Tendulkar
 - 4. Sania Mirza

Question ID : 9895807335
Chosen Option : 2

Q.3
2 Which music maestro was awarded Padma Vibhushan in 2018?

- Ans
- 1. Hariprasad Chaurasia
 - 2. A. R. Rahman
 - 3. Shivkumar Sharma
 - 4. Ilayaraja

Question ID : 9895807329
Chosen Option : 1

Q.3
3 Identify the arboreal animal from the given options.

- Ans
- 1. Hippopotamus
 - 2. Monkey
 - 3. Rhino
 - 4. Giraffe

Question ID : 9895807344
Chosen Option : 2

Q.3
4 Which of the following players has remained world's number one tennis player for the longest number of years?

- Ans
- 1. Jimmy Connors
 - 2. Ivan Lendl
 - 3. Pete Sampras
 - 4. Roger Federer

Question ID : 9895807332
Chosen Option : 2

Q.3
5 The theme state for the 33rd Suraj kund mela 2019 is _____.

- Ans
- 1. Gujrat
 - 2. Kerala
 - 3. Maharashtra
 - 4. Bihar

Question ID : 9895807328
Chosen Option : 3

Q.3
6 The federal form of government was adopted based on the constitution of which country?

- Ans
- 1. United States of America
 - 2. Ireland
 - 3. Russia
 - 4. United Kingdom

Question ID : 9895807339
Chosen Option : 1

Q.3
7 What type of cultivation is practised in areas of thick vegetation, heavy rainfall and quick regeneration?

- Ans
- 1. Shifting
 - 2. Subsistence
 - 3. Plantation
 - 4. Nomadic

Question ID : 9895807348
Chosen Option : 2

Q.3
8 Which of the following nation has the largest aged population as of 2017?

Ans

- 1. Italy
- 2. Germany
- 3. Portugal
- 4. Japan

Question ID : 9895807349
Chosen Option : 3

Q.3
9 The national emblem of India was adopted on _____.

- Ans
- 1. January 26, 1947
 - 2. January 26, 1950
 - 3. August 26, 1950
 - 4. August 15, 1947

Question ID : 9895807341
Chosen Option : 1

Q.4
0 _____ resources are those whose quantity is known.

- Ans
- 1. Potential
 - 2. Original
 - 3. Actual
 - 4. Non renewable

Question ID : 9895807347
Chosen Option : 2

Q.4
1 A man walking on a tightrope uses which law/laws of physics?

- Ans
- 1. Hooke's law
 - 2. Stefan's law
 - 3. Coulomb's law
 - 4. Newton's laws of motion

Question ID : 9895807342
Chosen Option : 2

Q.4
2 When was the Dowry Prohibition Act passed in India?

- Ans
- 1. 1945
 - 2. 1950
 - 3. 1961
 - 4. 1966

Question ID : 9895807340
Chosen Option : 4

Q.4
3 When was the Battle of Giria fought in West Bengal?

- Ans
- 1. 1723
 - 2. 1740

3. 1754

4. 1711

Question ID : 9895807351
Chosen Option : 3

Q.4
4 When was the National Rural Health Mission started?

Ans 1. 2002

2. 2007

3. 2010

4. 2005

Question ID : 9895807346
Chosen Option : 3

Q.4
5 Who was the first Indian and also the first Asian to win the World Junior Chess Championship in 1987?

Ans 1. M.S. Thejkumar

2. Nihal Sarin

3. Aryan Chopra

4. Viswanathan Anand

Question ID : 9895807331
Chosen Option : 3

Q.4
6 The place where Adi Shankara was born lies in which present-day state of India?

Ans 1. Kerala

2. Tamil Nadu

3. Maharashtra

4. Karnataka

Question ID : 9895807350
Chosen Option : 3

Q.4
7 _____ ultimately decides the growth rate of the country.

Ans 1. Quality of the population

2. Quantity of the population

3. Life expectancy of the population

4. Literacy of the population

Question ID : 9895807336
Chosen Option : 4

Q.4
8 What do you call a breeze blowing towards the sea from the land, especially at night?

Ans 1. Land breeze

2. Water breeze

3. Tidal breeze

4. Sea breeze

Question ID : 9895807345
Chosen Option : 1

Q.4 'Life Divine' is a book written by:

- Ans 1. Sri Aurobindo
 2. Ram Mohan Roy
 3. Ishwarchandra Vidya Sagar
 4. Vivekananda

Question ID : 9895807334
Chosen Option : 2

Q.5 US and EU complained of sugarcane and pulses MSP to which organization?

- Ans 1. IMF
 2. WTO
 3. United Nations
 4. World Bank

Question ID : 9895807338
Chosen Option : 2

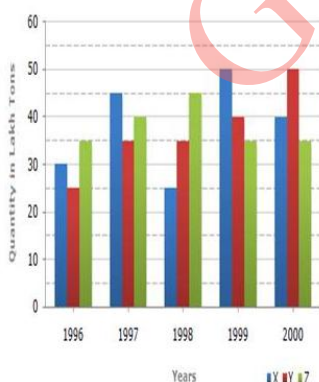
Q.5 By giving ₹20 to M, A would have the amount equal to what M had earlier. If the sum of the amounts with A and M is ₹220, what is the ratio of the amount with A to that with M earlier?

- Ans 1. 6 : 5
 2. 2 : 1
 3. 5 : 6
 4. 7 : 6

Question ID : 9895807663
Chosen Option : 2

Q.5 Study the bar graph given below that shows the data of the production of paper (in lakh tonnes) by three different companies X, Y and Z over the years and answer the question.

Production of Paper (in lakh tonnes) by Three Companies X, Y and Z over the Years.



The average production for five years was minimum for which company?

- Ans 1. Z
 2. Y
 3. X
 4. X and Z both

Question ID : 9895807676
Chosen Option : 2

Q.5 A $11\text{ cm} \times 4\text{ cm}$ rectangular piece of paper is folded and taped without overlapping to make a cylinder of height 4 cm.
3 Then the volume of the cylinder so formed is:

- Ans
- 1. 385 cm^3
 - 2. 3.85 cm^3
 - 3. 38.5 cm^3
 - 4. 0.385 cm^3

Question ID : 9895807672
Chosen Option : 2

Q.5 The ratio of two numbers is 3 : 5. If each number is decreased by 10, the ratio becomes 5 : 9. Find the numbers.
4

- Ans
- 1. 60, 100
 - 2. 90, 150
 - 3. 21, 35
 - 4. 30, 50

Question ID : 9895807664
Chosen Option : 4

Q.5 Three candidates contested an election and received 1148, 7624 and 11628 votes respectively. What percentage of the
5 total votes did the winning candidate get?

- Ans
- 1. 65%
 - 2. 90%
 - 3. 57%
 - 4. 60%

Question ID : 9895807660
Chosen Option : 2

Q.5 The sides of a triangle are 5 cm, 12 cm and 13 cm. A rectangle is constructed which has the area equal to the area of the
6 triangle and has the width 5 cm. Then the perimeter of the rectangle is:

- Ans
- 1. 22 cm
 - 2. 11 cm
 - 3. 30 cm
 - 4. 33 cm

Question ID : 9895807673
Chosen Option : 3

Q.5 The numerical value of perimeter of an equilateral triangle is $\sqrt{3}$ times the area of the triangle. Then the length of each
7 side of the equilateral triangle is:

- Ans
- 1. 6 cm
 - 2. 4 cm
 - 3. 5 cm
 - 4. 3 cm

Question ID : 9895807674
Chosen Option : 4

Q.5 The compound interest on ₹1,800 at 10% p.a. for a certain period of time is ₹378. Then the period of time in years is:

8

- Ans 1. 2 years
 2. 3 years
 3. 2½ years
 4. 3½ years

Question ID : 9895807667

Chosen Option : 4

Q.5 Sam borrowed some money from his friend at simple interest of 6% per annum. He returned his friend ₹18,200. After how much time did Sam return the money if he borrowed ₹14,000?

9

- Ans 1. 8 years
 2. 2.5 years
 3. 3.5 years
 4. 5 years

Question ID : 9895807666

Chosen Option : 2

Q.6 A pupil's marks were wrongly entered as 87 instead of 62. Due to that the average marks for the class got increased by half (1/2). The number of pupils in the class is:

0

- Ans 1. 45
 2. 50
 3. 40
 4. 25

Question ID : 9895807657

Chosen Option : 3

Q.6 The selling price of 50 apples is equal to cost price of 45 apples. Find the profit or loss obtained

1

- Ans 1. Gain of 10%
 2. Gain of 12%
 3. Loss of 12%
 4. Loss of 10%

Question ID : 9895807662

Chosen Option : 1

Q.6 Two trains of length 200 m and 300 m respectively are running in opposite directions on parallel tracks. If their speeds are 40 km/h and 50 km/h, then the time taken by the trains to cross each other is:

2

- Ans 1. 50 s
 2. 30 s
 3. 40 s
 4. 20 s

Question ID : 9895807670

Chosen Option : 4

Q.6 A, B and C together can do a work in 4 days. If A and B can do the work in 5 days, B and C in 10 days, find the days taken by A and C to do the work.

3

- Ans 1. 5 days
 2. 4 days
 3. 8 days
 4. 6 days

Question ID : 9895807668
 Chosen Option : 1

Q.6 The least number which, when divided by 5, 6, 7 and 8 leaves a remainder 4, but when divided by 4 leaves no remainder, is:

- Ans 1. 844
 2. 1684
 3. 840
 4. 846

Question ID : 9895807653
 Chosen Option : 3

Q.6 Simplify:

$$7 + 5 - \left(\frac{3}{2} \times \frac{1}{4}\right) \text{ of } \frac{2}{7} + \frac{7}{2} \times \frac{3}{14}$$

- Ans 1. $\frac{175}{4}$
 2. $\frac{177}{14}$
 3. $\frac{177}{28}$
 4. $\frac{173}{4}$

Question ID : 9895807655
 Chosen Option : 2

Q.6 The average weight of A, B and C is 45 kg. If the average weight of A and C is 42 kg and that of B and C is 38 kg, then the weight of C is:

- Ans 1. 35 kg
 2. 30 kg
 3. 25 kg
 4. 40 kg

Question ID : 9895807656
 Chosen Option : 3

Q.6 If the ratio of present age of Jeet and Jay is 6 : 7 and after 5 years the ratio will be 7 : 8, what is the present age of Jay?

- Ans 1. 56
 2. 48
 3. 35
 4. 64

Question ID : 9895807665

Chosen Option : 1

Q.6 A gun is fired at a distance of 4.2 km away from a tree. If the sound is heard after 13 s, then the speed of the sound is:
8

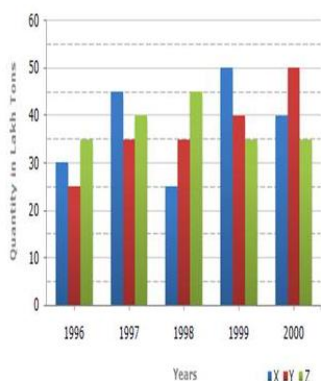
- Ans**
- 1. 321.1 m/s
 - 2. 320 m/s
 - 3. 322.07 m/s
 - 4. 323.07 m/s

Question ID : 9895807671

Chosen Option : 3

Q.6 Study the bar graph given below that shows the data of the production of paper (in lakh tonnes) by three different companies X, Y and Z over the years and answer the question.
9

Production of Paper (in lakh tonnes) by Three Companies X, Y and Z over the Years.



What is the percentage increase in the production of Company X from 1996 to 1997?

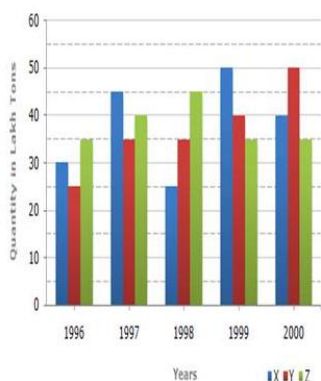
- Ans**
- 1. 60%
 - 2. 70%
 - 3. 50%
 - 4. 80%

Question ID : 9895807677

Chosen Option : 4

Q.7 Study the bar graph given below that shows the data of the production of paper (in lakh tonnes) by three different companies X, Y and Z over the years and answer the questions.
0

Production of Paper (in lakh tonnes) by Three Companies X, Y and Z over the Years.



Question:

What is the ratio of the average production of Company Y in the period 1997-1999 to the average production of Company Z in the same period?

- Ans**
- 1. 11 : 13

- 2. 11 : 12
- 3. 12 : 11
- 4. 12 : 15

Question ID : 9895807675
Chosen Option : 2

Q.7 Ahmed buys an old scooter for ₹5,200 and spends ₹800 on its repairs. If he sells the scooter for ₹6,600, his gain percent is:

- Ans
- 1. 10%
 - 2. 8%
 - 3. 12%
 - 4. 9%

Question ID : 9895807661
Chosen Option : 4

Q.7 A and B can do a work in 10 days and 15 days respectively. If they work at it on alternate days, A starting first. In how many days the work will be completed?

- Ans
- 1. 6 days
 - 2. 12 days
 - 3. 15 days
 - 4. 10 days

Question ID : 9895807669
Chosen Option : 2

Q.7 Simplify: $87 - 6 \text{ of } (28 - 13) + 4 \times 9$

- Ans
- 1. 30
 - 2. 33
 - 3. 43
 - 4. 23

Question ID : 9895807654
Chosen Option : 2

Q.7 The mean of 100 items was found to be 30. If at the time of calculation, two items were wrongly taken as 32 and 12 instead of 23 and 11, then the correct mean is:

- Ans
- 1. 30.5
 - 2. 29.9
 - 3. 32
 - 4. 29

Question ID : 9895807659
Chosen Option : 2

Q.7 There is a 10% discount on a dozen pairs of trousers marked at ₹6000. How many pair of trousers can be bought with ₹27000?

- Ans
- 1. 4
 - 2. 6
 - 3. 7
 - 4. 3

Question ID : 9895807658
Chosen Option : 3

Section : English Language

Q.1 Select the option that means the same as the given idiom.

A leopard can't change its spots.

- Ans
- 1. It is possible to change someone's character
 - 2. A leopard's without spots cannot be found easily in a jungle
 - 3. A leopard can be found easily because of its spots in a jungle
 - 4. It is impossible for one to change one's character

Question ID : 9895808002
Chosen Option : --

Q.2 From the given options, identify the segment in the sentence which contains the grammatical error.

The pancreas plays an important role in digestion and regulating blood sugar in living bodies.

- Ans
- 1. in living bodies
 - 2. in digestion and regulating
 - 3. an important role
 - 4. The pancreas plays

Question ID : 9895807985
Chosen Option : --

Q.3 Select the word which means the same as the group of words given.

The arrangement of events or dates in the order of their occurrence.

- Ans
- 1. Customisation
 - 2. Classification
 - 3. Cataloguing
 - 4. Chronology

Question ID : 9895808004
Chosen Option : --

Q.4 Select the most appropriate option to substitute the underlined segment in the given sentence. If there is no need to substitute it, select No improvement.

It is the adversity that makes you stronger, kinder and most generous than before in life.

- Ans
- 1. the most generous than before in life.
 - 2. more generous than before in life.
 - 3. No improvement
 - 4. most generous than before for life.

Question ID : 9895807988
Chosen Option : --

Q.5 From the given options, identify the segment in the sentence which contains the grammatical error.

Unable to pay the debts, the whole family is forced to spent several days in a jail.

- Ans 1. Unable to pay the debts
 2. days in a jail
 3. is forced to spent
 4. the whole family

Question ID : 9895807983
Chosen Option : --

Comprehension:

In the following passage some words have been deleted. Fill in the blanks with the help of the alternatives given.

Integration in the group means mutual ties (1) _____ its members. The quality of ties may differ from group to group. Integration has two (2) _____ - one is the process of integration and the other is the unified conditions. As a process, integration always goes (3) _____ in the society. Social system keeps changing and the units keep (4) _____ themselves accordingly. Sometimes change in a single unit also changes the whole system. Integration is the balance between the whole and its units. When this balance is (5) _____, disintegration begins in the system.

SubQuestion No : 6

Q.6 Select the most appropriate option that will fill in the blank number 1.

- Ans 1. among
 2. together
 3. both
 4. between

Question ID : 9895807992
Chosen Option : --

Comprehension:

In the following passage some words have been deleted. Fill in the blanks with the help of the alternatives given.

Integration in the group means mutual ties (1) _____ its members. The quality of ties may differ from group to group. Integration has two (2) _____ - one is the process of integration and the other is the unified conditions. As a process, integration always goes (3) _____ in the society. Social system keeps changing and the units keep (4) _____ themselves accordingly. Sometimes change in a single unit also changes the whole system. Integration is the balance between the whole and its units. When this balance is (5) _____, disintegration begins in the system.

SubQuestion No : 7

Q.7 Select the most appropriate option that will fill in the blank number 2.

- Ans 1. agencies

- 2. measures
- 3. aspects
- 4. methods

Question ID : 9895807993
Chosen Option : --

Comprehension:

In the following passage some words have been deleted. Fill in the blanks with the help of the alternatives given.

Integration in the group means mutual ties (1) _____ its members. The quality of ties may differ from group to group. Integration has two (2) _____ - one is the process of integration and the other is the unified conditions. As a process, integration always goes (3) _____ in the society. Social system keeps changing and the units keep (4) _____ themselves accordingly. Sometimes change in a single unit also changes the whole system. Integration is the balance between the whole and its units. When this balance is (5) _____, disintegration begins in the system.

SubQuestion No : 8

Q.8 Select the most appropriate option that will fill in the blank number 3.

- Ans
- 1. on
 - 2. under
 - 3. in
 - 4. off

Question ID : 9895807994
Chosen Option : --

Comprehension:

In the following passage some words have been deleted. Fill in the blanks with the help of the alternatives given.

Integration in the group means mutual ties (1) _____ its members. The quality of ties may differ from group to group. Integration has two (2) _____ - one is the process of integration and the other is the unified conditions. As a process, integration always goes (3) _____ in the society. Social system keeps changing and the units keep (4) _____ themselves accordingly. Sometimes change in a single unit also changes the whole system. Integration is the balance between the whole and its units. When this balance is (5) _____, disintegration begins in the system.

SubQuestion No : 9

Q.9 Select the most appropriate option that will fill in the blank number 4.

- Ans
- 1. admiring
 - 2. admitting
 - 3. adjusting
 - 4. administering

Question ID : 9895807995
Chosen Option : --

Comprehension:

In the following passage some words have been deleted. Fill in the blanks with the help of the alternatives given.

Integration in the group means mutual ties (1) _____ its members. The quality of ties may differ from group to group. Integration has two (2) _____ - one is the process of integration and the other is the unified conditions. As a process, integration always goes (3) _____ in the society. Social system keeps changing and the units keep (4) _____ themselves accordingly. Sometimes change in a single unit also changes the whole system. Integration is the balance between the whole and its units. When this balance is (5) _____, disintegration begins in the system.

SubQuestion No : 10

Q.1
0 Select the most appropriate option that will fill in the blank number 5.

- Ans
- 1. disrupt
 - 2. disrupted
 - 3. disrupts
 - 4. disrupting

Question ID : 9895807996
Chosen Option : --

Q.1
1 Select the most appropriate word to fill in the blank.

Japanese monkeys have been spotted _____ baths in man - made hot springs during winter.

- Ans
- 1. assembling
 - 2. soothing
 - 3. taking
 - 4. making

Question ID : 9895808008
Chosen Option : --

Q.1
2 Select the synonym of the given word.

ABRUPTLY

- Ans
- 1. Suddenly
 - 2. Slowly
 - 3. Easily
 - 4. Leisurely

Question ID : 9895807997
Chosen Option : --

Q.1
3 Select the correctly spelt word.

- Ans
- 1. Magnificent
 - 2. Magnificaent
 - 3. Magnificent
 - 4. Magneficent

Question ID : 9895808005
Chosen Option : --

Q.1 From the given options, identify the segment in the sentence which contains the grammatical error.

4

Technology plays a vital role at the modern life and influences the course of human civilisation unceasingly.

- Ans
- 1. influences the course of
 - 2. Technology plays a vital role
 - 3. human civilisation unceasingly
 - 4. at the modern life and

Question ID : 9895807984
Chosen Option : --

Q.1 Select the most appropriate option to fill in the blank.

5

Most often I wish I _____ his luck.

- Ans
- 1. has
 - 2. have
 - 3. would had
 - 4. had

Question ID : 9895807990
Chosen Option : --

Q.1 Select the most appropriate word to fill in the blank.

6

Ecology is the study of the _____ between plants, animals, people and their environment, and the balances between these relationships.

- Ans
- 1. contacts
 - 2. connections
 - 3. influences
 - 4. effects

Question ID : 9895808007
Chosen Option : --

Q.1 Select the most appropriate option to fill in the blank.

7

It is wonderful that anxiety is a good example of a condition that works _____ or against us.

- Ans
- 1. about
 - 2. for
 - 3. of
 - 4. around

Question ID : 9895807989
Chosen Option : --

Q.1
8 Select the antonym of the given word.

CAJOLE

- Ans
- 1. Repulse
 - 2. Rejoice
 - 3. Request
 - 4. Response

Question ID : 9895808000
Chosen Option : --

Q.1
9 Select the option that means the same as the given idiom.

To cry over spilled milk

- Ans
- 1. To cry for milk products
 - 2. To cry for that which cannot be made possible
 - 3. To regret about that which cannot be rectified
 - 4. To cry for trivial matters

Question ID : 9895808001
Chosen Option : --

Q.2
0 Select the most appropriate option to substitute the underlined segment in the given sentence. If there is no need to substitute it, select No improvement.

The players were informed that, in the game, anyone who cross the line would be disqualified.

- Ans
- 1. anyone who will crosses the line
 - 2. No improvement
 - 3. anyone who crosses the line
 - 4. anyone that cross the line

Question ID : 9895807987
Chosen Option : --

Q.2
1 Select the antonym of the given word.

ADAMANT

- Ans
- 1. Agreeable
 - 2. Innocent
 - 3. Gullible
 - 4. Firm

Question ID : 9895807999
Chosen Option : --

Q.2
2 Select the word which means the same as the group of words given.

A solution or remedy for all difficulties or diseases.

- Ans
- 1. Diagnosis

- 2. Medicine
- 3. Treatment
- 4. Panacea

Question ID : 9895808003
Chosen Option : --

Q.2
3 Select the correctly spelt word.

- Ans
- 1. Synchronize
 - 2. Synchroneze
 - 3. Synchornize
 - 4. Snychronize

Question ID : 9895808006
Chosen Option : --

Q.2
4 Select the most appropriate option to substitute the underlined segment in the given sentence. If there is no need to substitute it, select No improvement.

Access to mobile phones and an Internet enables job - seekers to search for jobs anywhere in India and abroad.

- Ans
- 1. internet enables job - seekers
 - 2. No improvement
 - 3. internet enable job - seekers
 - 4. the Internet enables job - seekers

Question ID : 9895807986
Chosen Option : --

Q.2
5 Select the synonym of the given word.

PLEA

- Ans
- 1. Duty
 - 2. Claim
 - 3. Right
 - 4. Appeal

Question ID : 9895807998
Chosen Option : --

Section : Hindi Language

Q.1 निम्नलिखित में से उस विकल्प का चयन करें जो 'साँप सूँघ जाना' मुहावरे का अर्थ व्यक्त करता है।

- Ans
- 1. प्रसन्न हो जाना
 - 2. साँप को सूँघ कर जाना
 - 3. निश्चेष्ट हो जाना
 - 4. दुखी हो जाना

Question ID : 9895806781

Chosen Option : 2

Q.2 रिक्त स्थान को भरने के लिए उपयुक्त शब्द का चयन करें।

_____ मित्र जीवन के लिए एक वरदान होता है।

Ans

- 1. बुरा
- 2. बदमाश
- 3. सच्चा
- 4. कच्चा

Question ID : 9895806770

Chosen Option : 3

Q.3 दिए गए वाक्य का वह भाग ज्ञात करें जिसमें कोई त्रुटि है।

देश के सामने शिक्षा और स्वास्थ्य संबंधी अनेकों समस्याएँ हैं।

Ans

- 1. शिक्षा और स्वास्थ्य संबंधी
- 2. देश के सामने
- 3. समस्याएँ हैं।
- 4. अनेकों

Question ID : 9895806761

Chosen Option : 2

Q.4 दिये गये वाक्यांश के लिए एक शब्द दीजिये।

जो करने योग्य हो

Ans

- 1. कर्मठ
- 2. अकरणीय
- 3. करणीय
- 4. अकर्मठ

Question ID : 9895806783

Chosen Option : 3

Q.5 दिए गए शब्द का विलोम चुनें।

संक्षेप

Ans

- 1. विक्षेप
- 2. कम
- 3. लघु
- 4. विस्तार

Question ID : 9895806777

Chosen Option : 4

Q.6 सही वर्तनी वाले शब्द का चयन करें।

- Ans
- 1. महातमा
 - 2. महात्मा
 - 3. माहत्मा
 - 4. महत्मा

Question ID : 9895806785

Chosen Option : 2

Q.7 रिक्त स्थान को भरने के लिए उपयुक्त शब्द का चयन करें।

ईमानदारी से मेहनत करो, चाहे लाभ हो _____ हानि।

- Ans
- 1. बल्कि
 - 2. या
 - 3. इसलिए
 - 4. ताकि

Question ID : 9895806768

Chosen Option : 2

Q.8 दिए गए वाक्य में रेखांकित खंड को प्रतिस्थापित करने के लिए उपयुक्त विकल्प का चयन करें।

हमारे देहात बहुत उपेक्षित रहे हैं, उन्हें विकसित करने की आवश्यकता है।

- Ans
- 1. शहर
 - 2. नगर
 - 3. महानगर
 - 4. गाँव

Question ID : 9895806765

Chosen Option : 4

Q.9 दिए गए वाक्य का वह भाग ज्ञात करें जिसमें कोई त्रुटि है।

मनुष्य का जीवन इतनी विशाल है कि उसके आचरण से कोई न कोई प्रभावित हो ही जाता है।

- Ans
- 1. मनुष्य का जीवन
 - 2. उसके आचरण से
 - 3. इतनी विशाल है कि
 - 4. कोई न कोई प्रभावित हो ही जाता है।

Question ID : 9895806762

Chosen Option : 2

Comprehension:

निम्नलिखित गद्यांश के रिक्त स्थानों की पूर्ति गद्यांश के नीचे दिए गए प्रश्नों के अनुसार कीजिए-

डॉ.कलाम _____ (1) इच्छाशक्ति वाले वैज्ञानिक थे। वे भारत को विकसित देश बनाने का _____ (2) सजोये हुए थे। उनका मानना था कि भारतवासियों को _____ (3) दृष्टि से सोचना चाहिए। हमें सपने देखने चाहिए। सपनों को विचारों में _____ (4) चाहिए। विचारों को कार्यवाही के माध्यम से _____ (5) में बदलना चाहिए।

SubQuestion No : 10

Q.1
0 गद्यांश में संकेतित रिक्त स्थान (1) के लिए उपयुक्त शब्द होगा।

- Ans
- 1. दृढ़
 - 2. कम
 - 3. कठोर
 - 4. नम्र

Question ID : 9895806772
Chosen Option : 3

Comprehension:

निम्नलिखित गद्यांश के रिक्त स्थानों की पूर्ति गद्यांश के नीचे दिए गए प्रश्नों के अनुसार कीजिए-

डॉ.कलाम _____ (1) इच्छाशक्ति वाले वैज्ञानिक थे। वे भारत को विकसित देश बनाने का _____ (2) सजोये हुए थे। उनका मानना था कि भारतवासियों को _____ (3) दृष्टि से सोचना चाहिए। हमें सपने देखने चाहिए। सपनों को विचारों में _____ (4) चाहिए। विचारों को कार्यवाही के माध्यम से _____ (5) में बदलना चाहिए।

SubQuestion No : 11

Q.1
1 गद्यांश में संकेतित रिक्त स्थान (2) के लिए उपयुक्त शब्द होगा।

- Ans
- 1. अपना
 - 2. सपना
 - 3. आशंका
 - 4. हकीकत

Question ID : 9895806773
Chosen Option : 2

Comprehension:

निम्नलिखित गद्यांश के रिक्त स्थानों की पूर्ति गद्यांश के नीचे दिए गए प्रश्नों के अनुसार कीजिए-

डॉ.कलाम _____ (1) इच्छाशक्ति वाले वैज्ञानिक थे। वे भारत को विकसित देश बनाने का _____ (2) सजोये हुए थे। उनका मानना था कि भारतवासियों को _____ (3) दृष्टि से सोचना चाहिए। हमें सपने देखने चाहिए। सपनों को विचारों में _____ (4) चाहिए। विचारों को कार्यवाही के माध्यम से _____ (5) में बदलना चाहिए।

SubQuestion No : 12

Q.1
2 गद्यांश में संकेतित रिक्त स्थान (3) के लिए उपयुक्त शब्द होगा।

- Ans
- 1. व्यापक
 - 2. संकुचित
 - 3. संकीर्ण
 - 4. क्षीण

Question ID : 9895806774
Chosen Option : 2

Comprehension:

निम्नलिखित गद्यांश के रिक्त स्थानों की पूर्ति गद्यांश के नीचे दिए गए प्रश्नों के अनुसार कीजिए-

डॉ.कलाम _____ (1) इच्छाशक्ति वाले वैज्ञानिक थे। वे भारत को विकसित देश बनाने का _____ (2) सजोये हुए थे। उनका मानना था कि भारतवासियों को _____ (3) दृष्टि से सोचना चाहिए। हमें सपने देखने चाहिए। सपनों को विचारों में _____ (4) चाहिए। विचारों को कार्यवाही के माध्यम से _____ (5) में बदलना चाहिए।

SubQuestion No : 13

Q.1
3 गद्यांश में संकेतित रिक्त स्थान (4) के लिए उपयुक्त शब्द होगा।

- Ans
- 1. देना
 - 2. बदलना
 - 3. करना
 - 4. उठाना

Question ID : 9895806775
Chosen Option : 2

Comprehension:

निम्नलिखित गद्यांश के रिक्त स्थानों की पूर्ति गद्यांश के नीचे दिए गए प्रश्नों के अनुसार कीजिए-

डॉ.कलाम _____ (1) इच्छाशक्ति वाले वैज्ञानिक थे। वे भारत को विकसित देश बनाने का _____ (2) सजोये हुए थे। उनका मानना था कि भारतवासियों को _____ (3) दृष्टि से सोचना चाहिए। हमें सपने देखने चाहिए। सपनों को विचारों में _____ (4) चाहिए। विचारों को कार्यवाही के माध्यम से _____ (5) में बदलना चाहिए।

SubQuestion No : 14

Q.1
4 गद्यांश में संकेतित रिक्त स्थान (5) के लिए उपयुक्त शब्द होगा।

- Ans
- 1. कल्पना
 - 2. सपना
 - 3. हकीकत
 - 4. आशा

Question ID : 9895806776
Chosen Option : 3

Q.1
5 रिक्त स्थान को भरने के लिए उपयुक्त शब्द का चयन करें।

पुलिस विभाग को चाहिए कि वह _____ जनता को परेशान न करें।

- Ans
- 1. दोषी
 - 2. निर्दय
 - 3. अपराधी
 - 4. निर्दोष

Question ID : 9895806769
Chosen Option : 4

Q.1
6 निम्नलिखित में से उस विकल्प का चयन करें जो 'सिर पर पाँव रखकर भागना' मुहावरे का अर्थ व्यक्त करता है।

- Ans
- 1. धीरे-धीरे चलना
 - 2. बहुत तेज भागना
 - 3. पाँव सिर के ऊपर रखकर भागना
 - 4. बहुत तेज कूदना

Question ID : 9895806782
Chosen Option : 4

Q.1
7 दिए गए शब्द के पर्यायवाची शब्द का चयन करें।

आश्वासन

- Ans
- 1. अविश्वसनीय
 - 2. दिलासा
 - 3. अविश्वास
 - 4. अंदाजा

Question ID : 9895806780
Chosen Option : 2

Q.1 8 दिए गए शब्द के पर्यायवाची शब्द का चयन करें।

धनवान

- Ans
- 1. संपूर्ण
 - 2. सम्पन्न
 - 3. महत्
 - 4. यथेष्ट

Question ID : 9895806779
Chosen Option : 2

Q.1 9 दिए गए शब्द का विलोम चुनें।

हास्य

- Ans
- 1. रुदन
 - 2. विनोद
 - 3. मनोरंजन
 - 4. मनोरम

Question ID : 9895806778
Chosen Option : 2

Q.2 0 दिए गए वाक्य का वह भाग ज्ञात करें जिसमें कोई त्रुटि है।

संस्कृति तब तक अंधी रहती है, जब तक राष्ट्र की अपनी वाणी नहीं होता।

- Ans
- 1. अपनी वाणी नहीं होता।
 - 2. जब तक राष्ट्र की
 - 3. अंधी रहती है,
 - 4. संस्कृति तब तक

Question ID : 9895806763
Chosen Option : 2

Q.2 1 दिए गए वाक्य में रेखांकित खंड को प्रतिस्थापित करने के लिए उपयुक्त विकल्प का चयन करें।

कोयल का कंठ मधुरतम है।

- Ans
- 1. कोकिला
 - 2. खग
 - 3. पक्षी
 - 4. सुग्गा

Question ID : 9895806766
Chosen Option : 3

Q.2
2 रिक्त स्थान को भरने के लिए उपयुक्त शब्द का चयन करें।

पेड़ पर _____ खिल रहे हैं।

- Ans
- 1. पत्ते
 - 2. फूल
 - 3. टहनी
 - 4. फल

Question ID : 9895806767
Chosen Option : 2

Q.2
3 दिये गये वाक्यांश के लिए एक शब्द दीजिये।

दोपहर के बाद का समय

- Ans
- 1. अपराहन
 - 2. पूर्वाहन
 - 3. मध्याहन
 - 4. रात्रि

Question ID : 9895806784
Chosen Option : 3

Q.2
4 सही वर्तनी वाले शब्द का चयन करें।

- Ans
- 1. वीणापाणि
 - 2. विणापाणि
 - 3. वीणापानी
 - 4. विणापनि

Question ID : 9895806786
Chosen Option : 3

Q.2
5 दिए गए वाक्य में रेखांकित खंड को प्रतिस्थापित करने के लिए उपयुक्त विकल्प का चयन करें।

रावण लंका का राजा था।

- Ans
- 1. सम्राट
 - 2. पंचानन

3. चतुरानन

4. दशानन

Question ID : 9895806764
Chosen Option : 3

GovtJobsAlert.In