

Constable (GD) in CAPFs, NIA, SSF and Rifleman (GD) in Assam Rifles Examination, 2018

Roll No. :	www.GovtJobsAlert.In
Registration No.	
Name :	
Exam Venue :	iON Digital Zone iDZ Kuberpur
Exam Time :	4:00 PM - 5:30 PM
Exam Date :	03/03/2019

Section : General Section

Q.1 Select the option that is related to the third term in the same way as the first term is related to the second term.

35 : 15 :: 72 : ?

- Ans 1. 14
 2. 54
 3. 27
 4. 15

Question ID : 9895808354
Chosen Option : 2

Q.2 Select the related word pair from the given alternatives.

India : Rupee :: _____ : _____

- Ans 1. South Africa : Pound
 2. Switzerland : Euro
 3. Russia : Ruble
 4. China : Yen

Question ID : 9895808343
Chosen Option : 2

Q.3 Select the correct option that will fill in the blank and complete the series.

145, 100, 65, 40, ?

- Ans 1. 25
 2. 10
 3. 20
 4. 15

Question ID : 9895808352
Chosen Option : 1

Q.4 Select the correct option that will fill in the blank and complete the series.

2, 8, 32, 128, 512, ?

- Ans 1. 2067
 2. 2048

3. 2507

4. 2536

Question ID : 9895808353
Chosen Option : 2

Q.5 A piece of paper is folded and cut as shown in the question figures, indicate how it will appear when opened?

Question figures:



Ans

1.

2.

3.

4.

Question ID : 9895808362
Chosen Option : 2

Q.6 Five monkeys A, B, C, D and E are sitting on a branch of a tree. C is sitting next to D. D is not sitting with E. E is on the left end of the branch. C is on second position from right. A is immediate right of B and B is on the right side of E. A and C are sitting together. Who is sitting at the centre?

Ans

1. D

2. A

3. C

4. B

Question ID : 9895808347
Chosen Option : 2

Q.7 The statements below are followed by two conclusions labeled I and II. Assuming that the information in the statements is true, even if it appears to be at variance with generally established facts, decide which conclusion(s) logically and definitely follow(s) from the information given in the statements.

Statements:

Some scooters are planes.
Some planes are dogs.
Some dogs are plants.

Conclusions:

I. Some plants are scooters.
II. No plane is scooter.

Ans

1. Only Conclusion I follows.

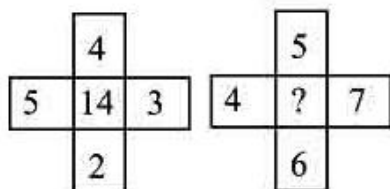
2. Only Conclusion II follows.

3. Neither Conclusion I nor II follows.

4. Either Conclusion I or II follows.

Question ID : 9895808351
Chosen Option : 3

Q.8 Find the missing number from the below options.



- Ans
- 1. 4
 - 2. 6
 - 3. 7
 - 4. 3

Question ID : 9895808356
Chosen Option : 4

Q.9 X, Y, Z, P, Q and R are sitting in a row facing north. X is the neighbour of Y and P. Q is the neighbour of Z and R. P is to the right of X and P and Z are immediate neighbours.

Which pair sits on the extreme ends?

- Ans
- 1. P,Z
 - 2. Y,P
 - 3. X,P
 - 4. Y,R

Question ID : 9895808348
Chosen Option : 4

Q.1 Select the option that is related to the third term in the same way as the first term is related to the second term.

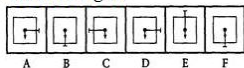
0 Hand : Finger : : Leg : _____

- Ans
- 1. Heel
 - 2. Walk
 - 3. Knee
 - 4. Toes

Question ID : 9895808342
Chosen Option : 4

Q.1 Identify the two figures from the following set of figures which are out of position and require interchange of positions to put the entire series in order.

Problem Figure



- Ans
- 1. (D & F)
 - 2. (D & E)
 - 3. (A & C)
 - 4. (B & D)

Question ID : 9895808358
Chosen Option : 2

Q.1

2 If a mirror is placed on the line MN, then which of the answer figures is the right image of the given figure?

Question Figure:

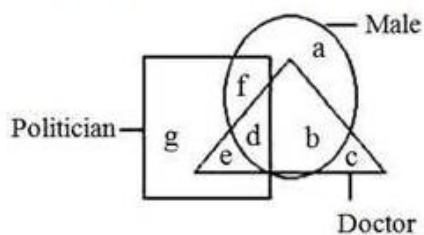


Ans



Question ID : 9895808361
Chosen Option : 1

Q.1 Study the following Venn-diagram and answer the given question.



Which letter represents a male politician only?

- Ans
- ✗ 1. d
 - ✗ 2. b
 - ✗ 3. e
 - ✓ 4. f

Question ID : 9895808363
Chosen Option : 4

Q.1 Select the correct option that will fill in the blank and complete the series.

WVU, RQP, MLK, ?

- Ans
- ✗ 1. HGI
 - ✗ 2. IGF
 - ✓ 3. HGF
 - ✗ 4. JHI

Question ID : 9895808339
Chosen Option : 3

Q.1 In a certain code, ANIMAL is coded as INALAM, then how is SAMPLE coded in the same way?

- Ans
- ✓ 1. MASELP

- 2. MSALEP
- 3. MALESP
- 4. ASMALE

Question ID : 9895808345
Chosen Option : 1

Q.1 The statements below are followed by two conclusions labeled I and II. Assuming that the information in the statements is true, even if it appears to be at variance with generally established facts, decide which conclusion(s) logically and definitely follow(s) from the information given in the statements.

6

Statements:

All kids are Adults.
Some Adults are old.

Conclusion:

- I. All old are kids.
- II. Some kids are old.

Ans

- 1. Neither conclusion I nor II follows
- 2. Either conclusion I or II follows
- 3. Only conclusion II follows
- 4. Only conclusion I follows

Question ID : 9895808350
Chosen Option : 2

Q.1 Choose the option figure in which the problem figure is hidden/embedded.

7

Questions Figure:



Ans

- 1.
- 2.
- 3.
- 4.

Question ID : 9895808360
Chosen Option : 1

Q.1 Four options have been given out of which three are alike in some manner, while one is different. Choose the odd one.

8

- Ans
- 1. 473
 - 2. 287
 - 3. 693
 - 4. 385

Question ID : 9895808355

Chosen Option : 2

Q.1 Four letter clusters have been given out of which three are alike in some manner, while one is different. Choose the odd one.

- Ans
- 1. HMR
 - 2. JOT
 - 3. INS
 - 4. DLT

Question ID : 9895808340
Chosen Option : 4

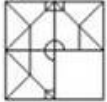
Q.2 In a class of 45 students, a boy is ranked 20th. When two boys joined, his rank was dropped by one. What is his new rank from the end?

- Ans
- 1. 25th
 - 2. 27th
 - 3. 28th
 - 4. 26th

Question ID : 9895808349
Chosen Option : 2

Q.2 Which of the following answer figure will complete the given figure?

Question figure:



- Ans
- 1.
 - 2.
 - 3.
 - 4.

Question ID : 9895808359
Chosen Option : 2

Q.2 Four words have been given out of which three are alike in some manner, while one is different. Choose the odd one.

- Ans
- 1. Kuchipudi
 - 2. Hemis
 - 3. Kathakali
 - 4. Sattriya

Question ID : 9895808341
Chosen Option : 2

Q.2
3 If SENSIBLE is written as 10 and SAMUELS as 9, how will NADAL be written?

- Ans
- 1. 11
 - 2. 4
 - 3. 9
 - 4. 7

Question ID : 9895808346
Chosen Option : 4

Q.2
4 Select the option that is related to the third term in the same way as the first term is related to the second term.

AFK : EJO :: PUZ : ?

- Ans
- 1. UOM
 - 2. USC
 - 3. TXE
 - 4. TYD

Question ID : 9895808344
Chosen Option : 4

Q.2
5 Select the correct combination of mathematical signs to replace '**' signs and to balance the given equation:

$78 * 3 * 4 * 36 * 140$

- Ans
- 1. $++\div=$
 - 2. $-+\times=$
 - 3. $\div\times-=$
 - 4. $\div\times+=$

Question ID : 9895808357
Chosen Option : 4

Q.2
6 Name the devotional folk music of Manipur usually sung by a group of people.

- Ans
- 1. Gha To Kito
 - 2. Khubak eshei
 - 3. Banvarh
 - 4. Domkach

Question ID : 9895807403
Chosen Option : 1

Q.2
7 Who won the 2018 French Open Men's Tennis?

- Ans
- 1. Andy Murray
 - 2. Novak Djokovic
 - 3. Rafael Nadal
 - 4. Roger Federer

Question ID : 9895807407
Chosen Option : 2

Q.2
8 The harvest festival, Puthari is celebrated by which tribes?

Ans

- 1. Garo
- 2. Angami
- 3. Kodava
- 4. Monpa

Question ID : 9895807404
Chosen Option : 2

Q.2 The battle of Karnal (1739) was won by Persian King Nadir Shah by defeating the army of _____.

- Ans
- 1. Ghulam Muhammad Ghouse Khan
 - 2. Mughal Emperor, Muhammad Shah
 - 3. Shuja-ud-Daulah, the Nawab of Awadh
 - 4. Ghiyas-ud-din Balban

Question ID : 9895807427
Chosen Option : 2

Q.3 Titan the second largest moon in our solar system orbits around the planet _____.

- Ans
- 1. Jupiter
 - 2. Neptune
 - 3. Saturn
 - 4. Uranus

Question ID : 9895807424
Chosen Option : 3

Q.3 Fundamental duties in the Indian constitution are borrowed from the constitution of _____.

- Ans
- 1. Britain
 - 2. Canada
 - 3. France
 - 4. USSR

Question ID : 9895807414
Chosen Option : 4

Q.3 Name the unit in which the calorific value of fuel is expressed.

- Ans
- 1. Kilojoule
 - 2. Kilogram
 - 3. Kelvin
 - 4. Candela

Question ID : 9895807420
Chosen Option : 1

Q.3 Which island emerged in the Bay of Bengal in the aftermath of the Bhola cyclone in 1970?

- Ans
- 1. Ghoramara Island
 - 2. Jambudwip

3. Lohachara Island
 4. New Moore Island

Question ID : 9895807423
Chosen Option : 2

Q.3 The fundamental rights of citizens are embodied in which part of the Indian Constitution?

4

- Ans 1. Part III
 2. Part IVA
 3. Part I
 4. Part VII

Question ID : 9895807415
Chosen Option : 1

Q.3 Centripetal force 'F' required for circular motion of an object of mass 'm' moving in a circle of radius 'r' at a tangential velocity 'v' is equal to _____.

5

- Ans 1. mr^2/v
 2. mv/r^2
 3. mv^2/r
 4. mr/v^2

Question ID : 9895807417
Chosen Option : 3

Q.3 The women's team from which country won the 2018 Carrom World Cup, held in South Korea?

6

- Ans 1. India
 2. South Korea
 3. Japan
 4. China

Question ID : 9895807406
Chosen Option : 1

Q.3 Which of the following dances is a dance form from Arunachal Pradesh?

7

- Ans 1. Lezim
 2. Chiraw
 3. Macha
 4. Popir

Question ID : 9895807405
Chosen Option : 3

Q.3 Minimum Support Price for 2018-19 for Jowar of the Hybrid variety is set at _____.

8

- Ans 1. ₹5,150 per quintal
 2. ₹1,750 per quintal
 3. ₹2,430 per quintal

4. ₹1,950 per quintal

Question ID : 9895807413
Chosen Option : 3

Q.3 The Union Budget 2018 announced that Operation Green will be launched for agriculture with a corpus of _____.
9

- Ans
- 1. ₹1,000 crore
 - 2. ₹100 crore
 - 3. ₹500 crore
 - 4. ₹5,000 crore

Question ID : 9895807412
Chosen Option : 4

Q.4 The Economic Survey report 2017-18 stated that the Agriculture growth in FY18 was likely to be at _____.
0

- Ans
- 1. 2.10%
 - 2. 3.90%
 - 3. 4.30%
 - 4. 5.50%

Question ID : 9895807411
Chosen Option : 4

Q.4 Tesla is the unit of _____.
1

- Ans
- 1. electric conductance
 - 2. magnetic flux density
 - 3. capacitance
 - 4. magnetic flux

Question ID : 9895807418
Chosen Option : 4

Q.4 Name the Indian ruler of Harkanya dynasty who was the son of Ajatashatru and who laid the foundation of the city of
2 Pataliputra.

- Ans
- 1. Nandivardhana
 - 2. Mahanandin
 - 3. Pradyota
 - 4. Udayin

Question ID : 9895807425
Chosen Option : 4

Q.4 Name the Bharat Ratna recipient who was a social reformer and educator. He played a vital role in the upliftment of
3 women.

- Ans
- 1. Govind Ballabh Pant
 - 2. M Visvesvaraya
 - 3. Dhondo Keshav Karve
 - 4. Bidhan Chandra Roy

Question ID : 9895807408

Chosen Option : 1

Q.4
4 Which of the following is a book by Vikram Seth?

- Ans
- 1. Riot At Misri Mandi
 - 2. The Ocean of Churn
 - 3. The Mistress of Spices
 - 4. River of Smoke

Question ID : 9895807409

Chosen Option : 1

Q.4
5 The humerus is part of the _____.

- Ans
- 1. leg
 - 2. arm
 - 3. shoulder girdle
 - 4. spine

Question ID : 9895807421

Chosen Option : 1

Q.4
6 Which gland controls the functioning of other endocrine glands?

- Ans
- 1. Pituitary gland
 - 2. Pineal Gland
 - 3. Thyroid Gland
 - 4. Adrenal glands

Question ID : 9895807419

Chosen Option : 1

Q.4
7 The _____ was an Act of the Parliament of Great Britain intended to overhaul the management of the East India Company's rule in India.

- Ans
- 1. Government of India Act of 1858
 - 2. Indian Councils Act of 1861
 - 3. Pitt's India Act
 - 4. Regulating Act 1773

Question ID : 9895807416

Chosen Option : 4

Q.4
8 Who is the first Indian to win the Miss Earth pageant since its inception in 2001?

- Ans
- 1. Nicole Faria
 - 2. Reita Faria
 - 3. Dia Mirza
 - 4. Priyanka Chopra

Question ID : 9895807410

Chosen Option : 3

Q.4
9 Name the first Indian to qualify for the Indian Civil Service.

- Ans
- 1. V. O. Chidambaram Pillai
 - 2. Satyendranath Tagore
 - 3. Dadabhai Naoroji
 - 4. Bankim Chandra Chatterjee

Question ID : 9895807426
Chosen Option : 2

Q.5
0 Which city is NOT situated on the Banks of the Chambal River?

- Ans
- 1. Dholpur
 - 2. Gwalior
 - 3. Kota
 - 4. Jabalpur

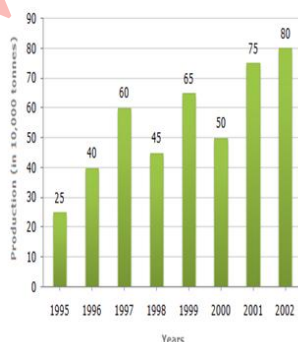
Question ID : 9895807422
Chosen Option : 3

Q.5
1 Gold is 12 times as heavy as aluminum and copper is 5 times as heavy as aluminum. In what ratio gold and copper should be mixed to get an alloy 8 times of aluminum.

- Ans
- 1. 1 : 2
 - 2. 3 : 4
 - 3. 2 : 1
 - 4. 4 : 3

Question ID : 9895807739
Chosen Option : 2

Q.5
2 Production of Fertilizers by a Company
(in 1000 tonnes) Over the Years



Study the bar chart and answer the question based on it.

The average production of 1999 and 2000 was less than the average production of which of the following pairs of years?

- Ans
- 1. 2000 and 2001
 - 2. 1995 and 2001
 - 3. 1998 and 2000
 - 4. 1996 and 1997

Question ID : 9895807752
Chosen Option : 1

Q.5

3 Vishal covers a distance of 20km in 30min. If he covers half of the distance in 18 min, what should be his speed to cover the remaining distance and completes the whole journey in 30min.

- Ans
- 1. 55 km/hr
 - 2. 65 km/hr
 - 3. 60 km/hr
 - 4. 50 km/hr

Question ID : 9895807746
Chosen Option : 4

Q.5
4 A cloth was 50cm broad and 8 cm long. When washed, it was found to have lost 25% of its length and 14% of its breath. Then the percentage decreased in area is _____.

- Ans
- 1. 34.5%
 - 2. 35.5%
 - 3. 36%
 - 4. 35%

Question ID : 9895807749
Chosen Option : 2

Q.5
5 Find the number of years in which an amount invested at 8% p.a. simple interest doubles itself.

- Ans
- 1. 11 years
 - 2. 12 years
 - 3. 12 ½ years
 - 4. 10 ½ years

Question ID : 9895807741
Chosen Option : 3

Q.5
6 Manjeet singh sold an article for ₹ 9000 gaining $\frac{1}{5}$ of its C.P. Find the gain % .

- Ans
- 1. 22%
 - 2. 10%
 - 3. 25%
 - 4. 20%

Question ID : 9895807736
Chosen Option : 4

Q.5
7 In an election contest between A and B, A wins by the margin of 480 votes. If A gets 70% of the total votes, then total votes are

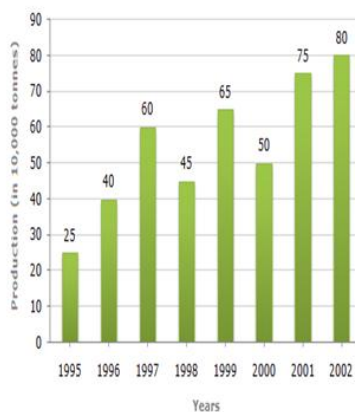
- Ans
- 1. 4800
 - 2. 1200
 - 3. 1400
 - 4. 1600

Question ID : 9895807735
Chosen Option : 2

Q.5
8

Production of Fertilizers by a Company

(in 1000 tonnes) Over the Years



Study the bar chart and answer the question based on it.

What was the percentage increase in the production of fertilizers in 2001 compared to that in 2000?

- Ans
- 1. 30%
 - 2. 25%
 - 3. 50%
 - 4. 40%

Question ID : 9895807750
Chosen Option : 3

Q.5 In a mixture of 60 liters, milk and water are in the ratio 2:1, find the quantity of water to be added to make the ratio 4:3

- Ans
- 1. 20 liters
 - 2. 10 liters
 - 3. 15 liters
 - 4. 12 liters

Question ID : 9895807738
Chosen Option : 2

Q.6 Simplify:

$$5.25 + \frac{3}{4} \text{ of } 16 - 5$$

$$\frac{1}{2} \text{ of } (9.5 - 2.5) - (5 \times 0.35)$$

- Ans
- 1. 4
 - 2. 7
 - 3. 5
 - 4. 6

Question ID : 9895807730
Chosen Option : 2

Q.6 If a shopkeeper gives 20% discount and then 15% discount on a book, which has the marked price of ₹850, how much would be the selling price of the book?

- Ans
- 1. ₹578
 - 2. ₹785
 - 3. ₹758

4. ₹587

Question ID : 9895807733
Chosen Option : 1

Q.6
2 Simplify:

$$7.8 - 0.4 \text{ of } (5.1 - 3.8) + 9.3 \times 1.5$$

- Ans 1. 23.12
 2. 12.23
 3. 21.23
 4. 23.21

Question ID : 9895807729
Chosen Option : 3

Q.6
3 If 15 workers can earn ₹1,800 in 10 days. Find the earning (in ₹) of 5 workers in 8 days.

- Ans 1. ₹480
 2. ₹540
 3. ₹360
 4. ₹400

Question ID : 9895807743
Chosen Option : 1

Q.6
4 The price of a scooter which was bought for ₹84,000 depreciates at the rate of 10% p.a. Find its price after 2 years?

- Ans 1. ₹68040
 2. ₹46080
 3. ₹64800
 4. ₹86040

Question ID : 9895807742
Chosen Option : 1

Q.6
5 What is the least number which when increased by 8 is exactly divisible by 4, 5, 6 and 7?

- Ans 1. 322
 2. 412
 3. 312
 4. 422

Question ID : 9895807728
Chosen Option : 2

Q.6
6 A is twice as good as a workman as B. And together, they finish a piece of work in 20 days. In how many days, will A alone finish the work?

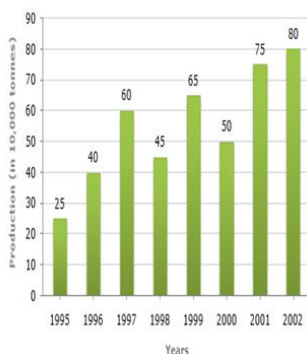
- Ans 1. 26 days
 2. 30 days
 3. 28 days
 4. 25 days

Question ID : 9895807744
Chosen Option : 2

Q.6
7

Production of Fertilizers by a Company

(in 1000 tonnes) Over the Years



Study the bar chart and answer the question based on it.

In how many of the given years was the production of fertilizers less than the average production of the given years?

- Ans
- 1. 2
 - 2. 3
 - 3. 1
 - 4. 4

Question ID : 9895807751
Chosen Option : 4

Q.6 Out of 12 terms, the average of first 6 terms is 36 and that of last 6 terms is 42. If the average of first 11 terms is 38, find the 12th term.

- Ans
- 1. 40
 - 2. 42
 - 3. 44
 - 4. 50

Question ID : 9895807732
Chosen Option : 4

Q.6 The mean of a, b, c, d and e is 36. If the mean of b, d and e is 32, what is the mean of a and c?

- Ans
- 1. 46
 - 2. 42
 - 3. 44
 - 4. 24

Question ID : 9895807734
Chosen Option : 2

Q.7 Om Prakash travels Bombay to Pune at a speed of 80km/hr and returns back to Bombay by increasing his speed by 50%, then his average speed for the whole journey is _____.

- Ans
- 1. 65 km/hr
 - 2. 69 km/hr
 - 3. 96 km/hr
 - 4. 67 km/hr

Question ID : 9895807745

Chosen Option : 3

Q.7 Sum of five consecutive even numbers is 40 more than the average of the numbers. Find the middle number in the series.

- Ans
- 1. 10
 - 2. 40
 - 3. 30
 - 4. 20

Question ID : 9895807731
Chosen Option : 1

Q.7 A cuboidal tank has 48000 liters of water. Find the depth of water in the tank if length of the tank is 6m and breadth is 4m.

- Ans
- 1. 6 m
 - 2. 3 m
 - 3. 4 m
 - 4. 2 m

Question ID : 9895807747
Chosen Option : 4

Q.7 If all the sides of a square are increased by 20%, then the area is increased by _____.

- Ans
- 1. 44%
 - 2. 45%
 - 3. 46%
 - 4. 43%

Question ID : 9895807748
Chosen Option : 1

Q.7 A merchant claims that he sells his goods at CP. But uses a weight of 900g for the 1kg weight, find his gain %

- Ans
- 1. 12%
 - 2. $12\frac{1}{9}\%$
 - 3. $11\frac{1}{9}\%$
 - 4. 11%

Question ID : 9895807737
Chosen Option : 3

Q.7 If ₹3800 is distributed among A, B, C such that A : B = 1 : 2 and B : C = 3 : 5, the find the share of B.

- Ans
- 1. ₹2000
 - 2. ₹1400
 - 3. ₹600
 - 4. ₹1200

Question ID : 9895807740
Chosen Option : 4

Section : English Language

Comprehension:

In the following passage some words have been deleted. Fill in the blanks with the help of the alternatives given.

Students should develop a quality of (1) _____ to elders and respecting their views. Their experience and knowledge can play a major role in shaping a student's personality and career. Students should (2) _____ this much - needed knowledge and experience from parents and teachers. Being (3) _____ helps students to keep themselves morally high. One should not get carried away by success. Students should also learn to respect (4) _____ views and cope with diverse situations. These qualities will play a vital role in the (5) _____ of teamwork and leadership skills.

SubQuestion No : 1

Q.1 Select the most appropriate option that will fill in the blank number 1.

- Ans
- 1. listen
 - 2. listens
 - 3. listening
 - 4. listened

Question ID : 9895808070
Chosen Option : --

Comprehension:

In the following passage some words have been deleted. Fill in the blanks with the help of the alternatives given.

Students should develop a quality of (1) _____ to elders and respecting their views. Their experience and knowledge can play a major role in shaping a student's personality and career. Students should (2) _____ this much - needed knowledge and experience from parents and teachers. Being (3) _____ helps students to keep themselves morally high. One should not get carried away by success. Students should also learn to respect (4) _____ views and cope with diverse situations. These qualities will play a vital role in the (5) _____ of teamwork and leadership skills.

SubQuestion No : 2

Q.2 Select the most appropriate option that will fill in the blank number 2.

- Ans
- 1. access
 - 2. measure
 - 3. acquire
 - 4. assess

Question ID : 9895808071
Chosen Option : --

Comprehension:

In the following passage some words have been deleted. Fill in the blanks with the help of the alternatives given.

Students should develop a quality of (1) _____ to elders and respecting their views. Their experience and knowledge can play a major role in shaping a student's personality and career. Students should (2) _____ this much - needed knowledge and experience from parents and teachers. Being (3) _____ helps students to keep themselves morally high. One should not get carried away by success. Students should also learn to respect (4) _____ views and cope with diverse situations. These qualities will play a vital role in the (5) _____ of teamwork and leadership skills.

SubQuestion No : 3

Q.3 Select the most appropriate option that will fill in the blank number 3.

- Ans
- 1. sharp
 - 2. simple
 - 3. intelligent
 - 4. smart

Question ID : 9895808072
Chosen Option : --

Comprehension:

In the following passage some words have been deleted. Fill in the blanks with the help of the alternatives given.

Students should develop a quality of (1) _____ to elders and respecting their views. Their experience and knowledge can play a major role in shaping a student's personality and career. Students should (2) _____ this much - needed knowledge and experience from parents and teachers. Being (3) _____ helps students to keep themselves morally high. One should not get carried away by success. Students should also learn to respect (4) _____ views and cope with diverse situations. These qualities will play a vital role in the (5) _____ of teamwork and leadership skills.

SubQuestion No : 4

Q.4 Select the most appropriate option that will fill in the blank number 4.

- Ans
- 1. typical
 - 2. different
 - 3. general
 - 4. expressive

Question ID : 9895808073
Chosen Option : --

Comprehension:

In the following passage some words have been deleted. Fill in the blanks with the help of the alternatives given.

Students should develop a quality of (1) _____ to elders and respecting their views. Their experience and knowledge can play a major role in shaping a student's personality and career. Students should (2) _____ this much - needed knowledge and experience from parents and teachers. Being (3) _____ helps students to keep themselves morally high. One should not get carried away by success. Students should also learn to respect (4) _____ views and cope with diverse situations. These qualities will play a vital role in the (5) _____ of teamwork and leadership skills.

SubQuestion No : 5

Q.5 Select the most appropriate option that will fill in the blank number 5.

- Ans
- 1. structure
 - 2. development
 - 3. manufacture
 - 4. arrangement

Question ID : 9895808074

Chosen Option : --

Q.6 From the given options, identify the segment in the sentence which contains the grammatical error.

A mere 43% of Indian woman own cellular phones, as opposed to almost 80% of men.

- Ans
- 1. A mere 43% of Indian woman
 - 2. as opposed to
 - 3. almost 80% of men
 - 4. own cellular phones

Question ID : 9895808063

Chosen Option : --

Q.7 Select the most appropriate option to fill in the blank.

People high in humility avoid expecting _____ special treatment.

- Ans
- 1. one
 - 2. none
 - 3. any
 - 4. only

Question ID : 9895808067

Chosen Option : --

Q.8 Select the option that means the same as the given idiom.

Bark up the wrong tree.

- Ans
- 1. To send dogs to track someone
 - 2. To make no mistakes about doing something

3. To make dogs bark at cats hiding in trees

4.

To be wrong about the reason for or way of doing something

Question ID : 9895808080

Chosen Option : --

Q.9 Select the correctly spelt word.

Ans 1. Vegaitarian

2. Vegetarian

3. Vezetarian

4. Vegetaranian

Question ID : 9895808083

Chosen Option : --

Q.1 Select the most appropriate option to substitute the underlined segment in the given sentence. If there is no need to substitute it, select No improvement.

The National Sample Survey Directorate is first set up under the Ministry of Finance in 1950.

Ans 1. Directorate had first set up

2. No improvement

3. Directorate was first set up

4. Directorate were first set up

Question ID : 9895808065

Chosen Option : --

Q.1 Select the most appropriate word to fill in the blank.

The news of the general elections was covered by _____ media.

Ans 1. sole

2. single

3. multiple

4. singular

Question ID : 9895808085

Chosen Option : --

Q.1 Select the correctly spelt word.

Ans 1. Audibal

2. Audeuble

3. Audible

4. Audiable

Question ID : 9895808084

Chosen Option : --

Q.1
3

From the given options, identify the segment in the sentence which contains the grammatical error.

An excellent response for his readers refreshes the author and stirs his creative sense and functional skills.

- Ans
- 1. his creative sense
 - 2. functional skills
 - 3. An excellent response
 - 4. for his readers refreshes

Question ID : 9895808061
Chosen Option : --

Q.1 Select the most appropriate option to substitute the underlined segment in the given sentence. If there is no need to substitute it, select No improvement.

Your promotion will be depend the quality of your work.

- Ans
- 1. depends upon
 - 2. depend on
 - 3. will be dependent
 - 4. No improvement

Question ID : 9895808066
Chosen Option : --

Q.1 Select the antonym of the given word.

COMMENCE

- Ans
- 1. Start
 - 2. Clamp
 - 3. Pause
 - 4. Close

Question ID : 9895808077
Chosen Option : --

Q.1 Select the most appropriate word to fill in the blank.

A software tool used to read electronic documents is known as _____.

- Ans
- 1. internet
 - 2. motherboard
 - 3. broadband
 - 4. browser

Question ID : 9895808086
Chosen Option : --

Q.1 Select the option that means the same as the given idiom.

To bite off more than you can chew.

- Ans
- 1. To take on a task too big for oneself
 - 2. To finish a work in bits and pieces
 - 3. To challenge someone to do difficult work

4. To eat very heavy and rich food

Question ID : 9895808079
Chosen Option : --

Q.1
8 Select the word which means the same as the group of words given.

Concerning appreciation of art.

- Ans 1. Particularistic
 2. Idealistic
 3. Poetic
 4. Aesthetic

Question ID : 9895808081
Chosen Option : --

Q.1
9 Select the word which means the same as the group of words given.

A story, poem or a picture that can be interpreted to reveal a hidden meaning.

- Ans 1. Simile
 2. Representation
 3. Allegory
 4. Resemblance

Question ID : 9895808082
Chosen Option : --

Q.2
0 Select the synonym of the given word.

RIDDLE

- Ans 1. Response
 2. Game
 3. Puzzle
 4. Reaction

Question ID : 9895808075
Chosen Option : --

Q.2
1 Select the antonym of the given word.

EXPAND

- Ans 1. Contract
 2. Express
 3. Deposit
 4. Collect

Question ID : 9895808078
Chosen Option : --

Q.2
2

Select the most appropriate option to substitute the underlined segment in the given sentence. If there is no need to substitute it, select No improvement.

While participating in the marathon an eighteen year old girl was knocked for by a passing truck.

- Ans
- 1. knocked up by
 - 2. No improvement
 - 3. knocked down by
 - 4. knocked in by

Question ID : 9895808064
Chosen Option : --

Q.2
3 Select the synonym of the given word.

IMPLICIT

- Ans
- 1. Unheard
 - 2. Tacit
 - 3. Honest
 - 4. Unclear

Question ID : 9895808076
Chosen Option : --

Q.2 Select the most appropriate option to fill in the blank.

4

Online shopping platforms provide _____ information on books, groceries, medicines, etc. so that we can get the latest products.

- Ans
- 1. old
 - 2. instant
 - 3. timeworn
 - 4. previous

Question ID : 9895808068
Chosen Option : --

Q.2 From the given options, identify the segment in the sentence which contains the grammatical error.

5

In India, child labour is a socio - economic issue that need urgent attention by everyone.

- Ans
- 1. that need urgent attention
 - 2. socio - economic issue
 - 3. by everyone.
 - 4. child labour is a

Question ID : 9895808062
Chosen Option : --

Section : Hindi Language

Q.1 रिक्त स्थान को भरने के लिए उपयुक्त शब्द का चयन करें।

भगवान सबका _____ करे।

- Ans
- 1. भली
 - 2. भला

3. कृपा
 4. दया

Question ID : 9895806847
Chosen Option : 2

Q.2 निम्नलिखित में से उस विकल्प का चयन करें जो 'एक ही राग अलापना' मुहावरे का अर्थ व्यक्त करता है।

- Ans 1. कोई बात एक ही बार कहना
 2. कई बात एक साथ कहना
 3. सुर में सुर मिलाना
 4. एक ही बात बार-बार कहना

Question ID : 9895806859
Chosen Option : 4

Q.3 दिए गए शब्द का विलोम चुनें।

ऐश्वर्य

- Ans 1. शान
 2. दरिद्रता
 3. शक्ति
 4. भक्ति

Question ID : 9895806855
Chosen Option : 2

Comprehension:

निम्नलिखित गद्यांश के रिक्त स्थानों की पूर्ति गद्यांश के नीचे दिए गए प्रश्नों के अनुसार कीजिए-

होली के पर्व के पीछे एक लोकप्रिय पौराणिक _____ (1) है।

हिरण्यकश्यप एक राक्षस राजा था। उसका एक बेटा था जिसका नाम प्रह्लाद था। _____ (2) भगवन विष्णु का भक्त था। ये बात उसके पिता को पसंद नहीं थी। पिता के कई बार _____ (3) के बाद भी प्रह्लाद ने अपनी विष्णु भक्ति नहीं छोड़ी। हिरण्यकश्यप ने अपने ही बेटे को कई तरह की सजायें दी _____ (4) ईश्वर की कृपा से वह हर बार बच जाता था। एक दिन क्रोधित _____ (5) हिरण्यकश्यप ने अपनी बहन होलिका को अपने बेटे का वध करने के लिए बुलाया।

SubQuestion No : 4

Q.4 गद्यांश में संकेतित रिक्त स्थान (1) के लिए उपयुक्त शब्द होगा।

- Ans 1. कथा
 2. दर्शन
 3. निबंध

✗ 4. कविता

Question ID : 9895806850
Chosen Option : 1

Comprehension:

निम्नलिखित गद्यांश के रिक्त स्थानों की पूर्ति गद्यांश के नीचे दिए गए प्रश्नों के अनुसार कीजिए-

होली के पर्व के पीछे एक लोकप्रिय पौराणिक _____ (1) है।

हिरण्यकश्यप एक राक्षस राजा था। उसका एक बेटा था जिसका नाम प्रह्लाद था। _____ (2) भगवन विष्णु का भक्त था। ये बात उसके पिता को पसंद नहीं थी। पिता के कई बार _____ (3) के बाद भी प्रह्लाद ने अपनी विष्णु भक्ति नहीं छोड़ी। हिरण्यकश्यप ने अपने ही बेटे को कई तरह की सजायें दी _____ (4) ईश्वर की कृपा से वह हर बार बच जाता था। एक दिन क्रोधित _____ (5) हिरण्यकश्यप ने अपनी बहन होलिका को अपने बेटे का वध करने के लिए बुलाया।

SubQuestion No : 5

Q.5 गद्यांश में संकेतित रिक्त स्थान (2) के लिए उपयुक्त शब्द होगा।

- Ans
- ✓ 1. वह
 - ✗ 2. उसने
 - ✗ 3. वे
 - ✗ 4. उन्होंने

Question ID : 9895806851
Chosen Option : 1

Comprehension:

निम्नलिखित गद्यांश के रिक्त स्थानों की पूर्ति गद्यांश के नीचे दिए गए प्रश्नों के अनुसार कीजिए-

होली के पर्व के पीछे एक लोकप्रिय पौराणिक _____ (1) है।

हिरण्यकश्यप एक राक्षस राजा था। उसका एक बेटा था जिसका नाम प्रह्लाद था। _____ (2) भगवन विष्णु का भक्त था। ये बात उसके पिता को पसंद नहीं थी। पिता के कई बार _____ (3) के बाद भी प्रह्लाद ने अपनी विष्णु भक्ति नहीं छोड़ी। हिरण्यकश्यप ने अपने ही बेटे को कई तरह की सजायें दी _____ (4) ईश्वर की कृपा से वह हर बार बच जाता था। एक दिन क्रोधित _____ (5) हिरण्यकश्यप ने अपनी बहन होलिका को अपने बेटे का वध करने के लिए बुलाया।

SubQuestion No : 6

Q.6 गद्यांश में संकेतित रिक्त स्थान (3) के लिए उपयुक्त शब्द होगा।

- Ans
- ✗ 1. दुलार करने

- 2. समझाने
- 3. निवेदन करने
- 4. प्यार करने

Question ID : 9895806852
Chosen Option : 2

Comprehension:

निम्नलिखित गद्यांश के रिक्त स्थानों की पूर्ति गद्यांश के नीचे दिए गए प्रश्नों के अनुसार कीजिए-

होली के पर्व के पीछे एक लोकप्रिय पौराणिक _____ (1) है।

हिरण्यकश्यप एक राक्षस राजा था। उसका एक बेटा था जिसका नाम प्रह्लाद था। _____ (2) भगवन विष्णु का भक्त था। ये बात उसके पिता को पसंद नहीं थी। पिता के कई बार _____ (3) के बाद भी प्रह्लाद ने अपनी विष्णु भक्ति नहीं छोड़ी। हिरण्यकश्यप ने अपने ही बेटे को कई तरह की सजायें दी _____ (4) ईश्वर की कृपा से वह हर बार बच जाता था। एक दिन क्रोधित _____ (5) हिरण्यकश्यप ने अपनी बहन होलिका को अपने बेटे का वध करने के लिए बुलाया।

SubQuestion No : 7

Q.7 गद्यांश में संकेतित रिक्त स्थान (4) के लिए उपयुक्त शब्द होगा।

- Ans
- 1. इसलिए
 - 2. परन्तु
 - 3. क्योंकि
 - 4. अतः

Question ID : 9895806853
Chosen Option : 2

Comprehension:

निम्नलिखित गद्यांश के रिक्त स्थानों की पूर्ति गद्यांश के नीचे दिए गए प्रश्नों के अनुसार कीजिए-

होली के पर्व के पीछे एक लोकप्रिय पौराणिक _____ (1) है।

हिरण्यकश्यप एक राक्षस राजा था। उसका एक बेटा था जिसका नाम प्रह्लाद था। _____ (2) भगवन विष्णु का भक्त था। ये बात उसके पिता को पसंद नहीं थी। पिता के कई बार _____ (3) के बाद भी प्रह्लाद ने अपनी विष्णु भक्ति नहीं छोड़ी। हिरण्यकश्यप ने अपने ही बेटे को कई तरह की सजायें दी _____ (4) ईश्वर की कृपा से वह हर बार बच जाता था। एक दिन क्रोधित _____ (5) हिरण्यकश्यप ने अपनी बहन होलिका को अपने बेटे का वध करने के लिए बुलाया।

SubQuestion No : 8

Q.8

गद्यांश में संकेतित रिक्त स्थान (5) के लिए
उपयुक्त शब्द होगा।

- Ans
- 1. बनकर
 - 2. होकर
 - 3. लगकर
 - 4. चलकर

Question ID : 9895806854
Chosen Option : 2

Q.9 दिए गए शब्द के पर्यायवाची शब्द का चयन करें।

विपदा

- Ans
- 1. आपदा
 - 2. निरपराध
 - 3. सुख
 - 4. मनीषी

Question ID : 9895806858
Chosen Option : 1

Q.10 दिए गए वाक्य का वह भाग ज्ञात करें जिसमें कोई त्रुटि है।

विद्यालय में पढ़ाई करने के लिए अनेकों छात्र आए हुए थे।

- Ans
- 1. पढ़ाई करने के लिए
 - 2. आए हुए थे।
 - 3. विद्यालय में
 - 4. अनेकों छात्र

Question ID : 9895806841
Chosen Option : 4

Q.11 रिक्त स्थान को भरने के लिए उपयुक्त शब्द का चयन करें।

राजा हर्षवर्धन _____ करके लौटे।

- Ans
- 1. नृत्य
 - 2. दिग्विजय
 - 3. नाटक
 - 4. चोरी

Question ID : 9895806846
Chosen Option : 2

Q.1
2

दिए गए शब्द के पर्यायवाची शब्द का चयन करें।

तालाब

Ans

- 1. अरि
- 2. बाग
- 3. समुद्र
- 4. पोखर

Question ID : 9895806857
Chosen Option : 4

Q.1 3 रिक्त स्थान को भरने के लिए उपयुक्त शब्द का चयन करें।

मैं कलम से चिट्ठी _____ रहा हूँ।

Ans

- 1. सोच
- 2. भेज
- 3. पढ़
- 4. लिख

Question ID : 9895806848
Chosen Option : 4

Q.1 4 दिए गए वाक्य का वह भाग ज्ञात करें जिसमें कोई त्रुटि है।

मुख्य अतिथि का एक फूल की माला पहना कर स्वागत किया गया।

Ans

- 1. एक फूल की माला
- 2. मुख्य अतिथि का
- 3. पहना कर
- 4. स्वागत किया गया

Question ID : 9895806839
Chosen Option : 2

Q.1 5 सही वर्तनी वाले शब्द का चयन करें।

Ans

- 1. विस्तार
- 2. वीसतार
- 3. वीस्तार
- 4. विसतार

Question ID : 9895806864
Chosen Option : 1

Q.1 6 दिए गए वाक्य में रेखांकित खंड को प्रतिस्थापित करने के लिए उपयुक्त विकल्प का चयन करें।

धरणी पर बहुत सारी प्राकृतिक घटनाएं होती रहती हैं।

Ans

- 1. पृथ्वी
- 2. वृक्ष
- 3. समूह
- 4. भुजंग

Question ID : 9895806842
Chosen Option : 1

Q.1 रिक्त स्थान को भरने के लिए उपयुक्त शब्द का चयन करें।

मनुष्य को अपनी _____ नहीं छोड़नी चाहिए।

- Ans
- 1. बचपन
 - 2. मनुष्यता
 - 3. अभिमान
 - 4. क्रोध

Question ID : 9895806845
Chosen Option : 2

Q.1 दिए गए शब्द का विलोम चुनें।

खरा

- Ans
- 1. सरल
 - 2. सोना
 - 3. साफ
 - 4. खोटा

Question ID : 9895806856
Chosen Option : 3

Q.1 दिए गए वाक्य का वह भाग ज्ञात करें जिसमें कोई त्रुटि है।

अच्छे आभूषणों के द्वारा शरीर की शोभा बढ़ जाता है ।

- Ans
- 1. के द्वारा
 - 2. बढ़ जाता है।
 - 3. अच्छे आभूषणों
 - 4. शरीर की शोभा

Question ID : 9895806840
Chosen Option : 1

Q.2_0 दिये गये वाक्यांश के लिए एक शब्द दीजिये।

अच्छे चरित्र वाला

- Ans
- 1. चरित्रवान

- 2. व्यभिचारी
- 3. दुष्चरित्र
- 4. चरित्रहीन

Question ID : 9895806861
Chosen Option : 1

Q.2
1 दिए गए वाक्य में रेखांकित खंड को प्रतिस्थापित करने के लिए उपयुक्त विकल्प का चयन करें।

पुराने समय में कपोत एक बहुत ही अच्छा संदेशक माना जाता था।

- Ans
- 1. कोयल
 - 2. कबूतर
 - 3. डाकिया
 - 4. अश्व

Question ID : 9895806843
Chosen Option : 2

Q.2
2 निम्नलिखित में से उस विकल्प का चयन करें जो 'रंगा सियार' मुहावरे का अर्थ व्यक्त करता है।

- Ans
- 1. एक समान
 - 2. धोखे बाज
 - 3. सुंदर सियार
 - 4. रँगा हुआ सियार

Question ID : 9895806860
Chosen Option : 2

Q.2
3 दिये गये वाक्यांश के लिए एक शब्द दीजिये।

लेख की नकल

- Ans
- 1. नकलची
 - 2. लिपि
 - 3. प्रतिलिपि
 - 4. हस्तलिपि

Question ID : 9895806862
Chosen Option : 1

Q.2
4 दिए गए वाक्य में रेखांकित खंड को प्रतिस्थापित करने के लिए उपयुक्त विकल्प का चयन करें।

कबीर बहुत सी भाषाएँ जानता है।

- Ans
- 1. बहुभाषाविद्
 - 2. भाषावैज्ञानिक
 - 3. बहुज्ञ
 - 4. तत्व चिन्तक

Question ID : 9895806844
Chosen Option : 1

Q.2
5 सही वर्तनी वाले शब्द का चयन करें।

- Ans
- 1. अभीषेक
 - 2. अभिषेक
 - 3. अभिशेक
 - 4. अभीशेक

Question ID : 9895806863
Chosen Option : 2

GovtJobsAlert.In