

## Constable (GD) in CAPFs, NIA, SSF and Rifleman (GD) in Assam Rifles Examination, 2018

Roll No. :	<a href="http://www.GovtJobsAlert.In">www.GovtJobsAlert.In</a>
Registration No.	
Name :	
Exam Venue :	Assam Online Guwahati
Exam Time :	4:00 PM - 5:30 PM
Exam Date :	09/03/2019

Section : General Section

Q.1 Select the correct option that will fill in the blank and complete the series.

R, U, X, A, \_\_\_\_\_

- Ans  1. D  
 2. F  
 3. T  
 4. C

Question ID : 9895809298  
Chosen Option : 2

Q.2 The statements below are followed by two conclusions labeled I and II. Assuming that the information in the statements is true, even if it appears to be at variance with generally established facts, decide which conclusion(s) logically and definitely follow(s) from the information given in the statements.

Statements:

All bangles are rings.

Some rings are toys.

Some toys are dolls.

Conclusions:

I. Some rings are bangles.

II. Some dolls are rings.

- Ans  1. Either conclusion I or II follows  
 2. Neither conclusion I nor II follows  
 3. Only conclusion I follows  
 4. Only conclusion II follows

Question ID : 9895809310  
Chosen Option : 2

Q.3 Select the correct option that will fill in the blank and complete the series.

12, 14, 17, 15, 22, 16, \_\_\_\_\_

- Ans  1. 18  
 2. 27  
 3. 17  
 4. 30

Question ID : 9895809311  
Chosen Option : 1

Q.4 Select the option that is related to the third term in the same way as the second term is related to the first term.

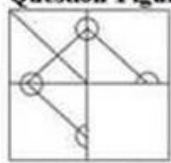
EFR : RFE :: DJT : ?

- Ans
- 1. TJD
  - 2. DTJ
  - 3. TDJ
  - 4. JTD

Question ID : 9895809303  
Chosen Option : 1

Q.5 Which of the following answer figure will complete the given figure?

Question Figure:



- Ans
- 1.
  - 2.
  - 3.
  - 4.

Question ID : 9895809318  
Chosen Option : 4

Q.6 In a certain code, MISSION is coded as MJSSJPN, then how is LIBRARY coded in the same way?

- Ans
- 1. LJBRYRB
  - 2. LBKRBRZ
  - 3. LKBRBRZ
  - 4. LJBRBRY

Question ID : 9895809304  
Chosen Option : 2

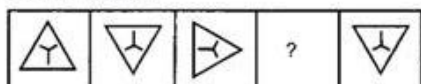
Q.7 If GLOBALLY is written as 61374118 and CITY as 2958, how will BOAT be written?

- Ans
- 1. 7365
  - 2. 7345
  - 3. 7354
  - 4. 7321

Question ID : 9895809305

Q.8 Choose the option which completes the given figure series

PROBLEM FIGURES



Ans



Question ID : 9895809317  
Chosen Option : 1

Q.9 Select the related word pair from the given alternatives.

Roger Federer : Tennis :: \_\_\_\_\_ : \_\_\_\_\_

Ans

✓ 1. Pullela Gopichand : badminton

✗ 2. Prakash Padukone : Tennis

✗ 3. Ricky Ponting : Football

✗ 4. Cristiano Ronaldo : Cricket

Question ID : 9895809302  
Chosen Option : 4

Q.1 Select the option that is related to the Third term in the same way as the second term is related to the first term.

0

20 : 25 :: 8 : ?

Ans

✗ 1. 6

✓ 2. 10

✗ 3. 7

✗ 4. 9

Question ID : 9895809313  
Chosen Option : 1

Q.1  
1 Mona, Kanak, John, Honey, Isha and Lara are watching a movie in a theater which has screen in the north. They are sitting in certain way.

(i) Only Kanak is sitting between Honey and John.

(ii) Lara is to the right of Mona who is sitting at extreme left.

(iii) Isha is to the immediate right of John.

Who is sitting between Kanak and Lara?

Ans

✓ 1. Honey

- 2. John
- 3. Isha
- 4. Mona

Question ID : 9895809306  
Chosen Option : 3

Q.1 <sub>2</sub> Choose the option figure in which the problem figure is hidden/embedded.

Problem Figure:

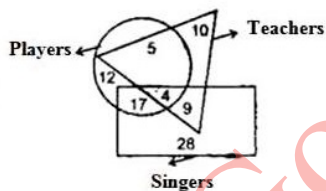


Ans

- 1.
- 2.
- 3.
- 4.

Question ID : 9895809319  
Chosen Option : 4

Q.1 <sub>3</sub> In the given Venn diagram which number shows players who are neither Teachers nor Singers?



- Ans
- 1. 5
  - 2. 17
  - 3. 4
  - 4. 12

Question ID : 9895809322  
Chosen Option : 4

Q.1 <sub>4</sub> Find the missing number from the below options.

64	125
216	405

216	343
512	?

- Ans  1. 1071

- 2. 1324
- 3. 1096
- 4. 1051

Question ID : 9895809315  
Chosen Option : 4

Q.1 5 If 'L' means '×', 'N' means '+', 'O' means '÷', and 'M' means '-', then:

$$1000 \ O \ 5 \ N \ 66 \ M \ 33 \ = \ ?$$

- Ans
- 1. 433
  - 2. 333
  - 3. 483
  - 4. 233

Question ID : 9895809316  
Chosen Option : 1

Q.1 6 Four options have been given out of which three are alike in some manner, while one is different. Choose the odd one.

- Ans
- 1. 16-81
  - 2. 49-64
  - 3. 4-9
  - 4. 25-36

Question ID : 9895809314  
Chosen Option : 2

Q.1 7 A piece of paper is folded in the manner shown in the question figure(s). Select the figure out of the answer choices showing the unfolded pattern after the punches (cut).

Question Figure:



Ans

- 1.
- 2.
- 3.
- 4.

Question ID : 9895809321  
Chosen Option : 1

Q.1 8 Select the related word pair from the given alternatives.

Book : Pages :: \_\_\_\_\_ : \_\_\_\_\_

- Ans
- 1. Hand : Finger

- 2. Neck : Collar
- 3. Tie : Shirt
- 4. Socks : Feet

Question ID : 9895809301  
Chosen Option : 2

Q.1 Four letter clusters have been given, out of which three are alike in some manner, while one is different. Choose the odd one.

- Ans
- 1. EAfg
  - 2. eaWT
  - 3. AUrs
  - 4. vwOA

Question ID : 9895809299  
Chosen Option : 1

Q.2 Some children are sitting in a row facing north. Among those, Sameer is 17th from the left and second to the right of Jay, who is 15th from the right of the row, then how many children are there in the row?

- Ans
- 1. 31
  - 2. 29
  - 3. 24
  - 4. 30

Question ID : 9895809308  
Chosen Option : 3

Q.2 Four words have been given, out of which three are alike in some manner, while one is different. Choose the odd one.

- Ans
- 1. Parents
  - 2. Siblings
  - 3. Guardian
  - 4. Ancestor

Question ID : 9895809300  
Chosen Option : 1

Q.2 The statements below are followed by two conclusions labeled I and II. Assuming that the information in the statements is true, even if it appears to be at variance with generally established facts, decide which conclusion(s) logically and definitely follow(s) from the information given in the statements.

Statements:

1. Some players are singers.
2. All singers are tall.
3. Some players are strong.

Conclusions:

- I. Some players are tall.
- II. All players are strong.

- Ans
- 1. Neither conclusion I nor II follows
  - 2. Only conclusion I follows
  - 3. Only conclusion II follows

4. Either conclusion I or II follows

Question ID : 9895809309  
Chosen Option : 2

Q.2  
3 Select the correct option that will fill in the blank and complete the series.

8, 13, 21, 38, 62, 99, \_\_\_\_\_

- Ans
- 1. 126
  - 2. 136
  - 3. 147
  - 4. 116

Question ID : 9895809312  
Chosen Option : 2

Q.2  
4 A, B, C, D, E, F and G are sitting around a circle facing at the centre. D is third to the left of A who is second to the left of F. E is not a neighbour of either F or D. C is third to left of B.

Who is sitting between G and B?

- Ans
- 1. D only
  - 2. F only
  - 3. Both F and D
  - 4. Data inadequate

Question ID : 9895809307  
Chosen Option : 2

Q.2  
5 If a mirror is placed on the line AB, then which of the answer figures is the right image of the given figure?

Question Figure:



- Ans
- 1.
  - 2.
  - 3.
  - 4.

Question ID : 9895809320  
Chosen Option : 4

Q.2  
6 Sikkim was associated with the Union of India by the \_\_\_\_\_ amendment in 1975.

- Ans
- 1. 36th
  - 2. 1st
  - 3. 24th
  - 4. 12th

Question ID : 9895809485  
Chosen Option : 4

Q.2  
7 Muga silk is the product of the silkworm, endemic to which state?

- Ans
- 1. Tamil Nadu
  - 2. Rajasthan
  - 3. Uttar Pradesh
  - 4. Assam

Question ID : 9895809473  
Chosen Option : 3

Q.2  
8 Who is the first Indian female amputee to climb Mt. Everest?

- Ans
- 1. Malavath Poorna
  - 2. Arati Saha
  - 3. Arunima Sinha
  - 4. Santosh Yadav

Question ID : 9895809479  
Chosen Option : 2

Q.2  
9 The place where Dandi Salt March happened lies in the present-day state of:

- Ans
- 1. Delhi
  - 2. Gujarat
  - 3. Kashmir
  - 4. Kerala

Question ID : 9895809497  
Chosen Option : 2

Q.3  
0 Colonial rulers struggled with educating the people in the colonies because:

- Ans
- 1. too much education could lead to higher obedience
  - 2. too much education could lead to revolt
  - 3. too little education could lead to higher disobedience
  - 4. too little education could lead to revolt

Question ID : 9895809495  
Chosen Option : 3

Q.3  
1 Who founded the Holkar dynasty, one of the regional Maratha dynasties?

- Ans
- 1. Malhar Rao
  - 2. Raghuji
  - 3. Ramoji
  - 4. Damaji I

Question ID : 9895809496  
Chosen Option : 3

Q.3  
2 As part of the fundamental rights, the Constitution of India guarantees the right to:

- Ans
- 1. divorce



- 2. travel
- 3. equality
- 4. marriage

Question ID : 9895809486  
Chosen Option : 4

Q.3  
3 Terylene is a type of:

- Ans
- 1. Polyester
  - 2. Acrylic
  - 3. Rayon
  - 4. Nylon

Question ID : 9895809489  
Chosen Option : 1

Q.3  
4 Gregor Johann Mendel came up with the theory of inheritance by studying:

- Ans
- 1. animals
  - 2. people
  - 3. peas
  - 4. carrots

Question ID : 9895809490  
Chosen Option : 1

Q.3  
5 The Ganges is approximately \_\_\_\_\_ km long.

- Ans
- 1. 5000
  - 2. 2500
  - 3. 1000
  - 4. 2000

Question ID : 9895809494  
Chosen Option : 2

Q.3  
6 In general, resistivity of an alloy \_\_\_\_\_ its constituent metals.

- Ans
- 1. has no correlation to
  - 2. is higher than
  - 3. is lower than
  - 4. is same as

Question ID : 9895809491  
Chosen Option : 2

Q.3  
7 People expect democracies to:

- Ans
- 1. have differential weight in electing representatives
  - 2. increase inequality

- 3. result in a poorer country
- 4. have equal weight in electing representatives

Question ID : 9895809484  
Chosen Option : 3

Q.3  
8 The Chand Minar is located in:

- Ans
- 1. Maharashtra
  - 2. Madhya Pradesh
  - 3. Uttar Pradesh
  - 4. Kerala

Question ID : 9895809475  
Chosen Option : 3

Q.3  
9 Limestone, chalk and marble are different forms of:

- Ans
- 1. calcium carbonate
  - 2. soda ash
  - 3. sodium chloride
  - 4. sugar

Question ID : 9895809488  
Chosen Option : 2

Q.4  
0 The festival 'Me-Dam-Me-Phi' is celebrated by Tai-Ahom communities of which state?

- Ans
- 1. Tripura
  - 2. Mizoram
  - 3. Manipur
  - 4. Assam

Question ID : 9895809474  
Chosen Option : 4

Q.4  
1 Who was the first Indian lady scientist who worked with organic chemistry and medicinal plant?

- Ans
- 1. Asima Chatterjee
  - 2. Arati Saha
  - 3. Aruna Asaf Ali
  - 4. Anusuya Sarabhai

Question ID : 9895809480  
Chosen Option : 1

Q.4  
2 Buxa Tiger Reserve is located in:

- Ans
- 1. Uttar Pradesh
  - 2. Kerala
  - 3. West Bengal
  - 4. Andhra Pradesh

Question ID : 9895809493  
Chosen Option : 4

Q.4  
3 The Sahitya Academy award in Hindi for 2017 was won by:

- Ans
- 1. Rana Ayub
  - 2. Ramesh Shah
  - 3. Nasira Sharma
  - 4. Ramesh Megh

Question ID : 9895809478  
Chosen Option : 4

Q.4  
4 \_\_\_\_\_ won the 2018 Football World Cup.

- Ans
- 1. Germany
  - 2. Brazil
  - 3. France
  - 4. Croatia

Question ID : 9895809476  
Chosen Option : 3

Q.4  
5 In the 2018 Wimbledon, \_\_\_\_\_ was the winner in the women's finals.

- Ans
- 1. Martina Hingis
  - 2. Venus Williams
  - 3. Serena Williams
  - 4. Angelique Kerber

Question ID : 9895809477  
Chosen Option : 2

Q.4  
6 India's GDP growth in 2017 was:

- Ans
- 1. 4.5%
  - 2. 6.6%
  - 3. 11.1%
  - 4. 8.8%

Question ID : 9895809481  
Chosen Option : 2

Q.4  
7 Red algae are generally found in:

- Ans
- 1. mountains
  - 2. cities
  - 3. water bodies
  - 4. deserts

Question ID : 9895809487  
Chosen Option : 1

Q.4 In Economic terms, Globalization is the process of rapid \_\_\_\_\_ between countries.

- Ans
- 1. Integration
  - 2. Competition
  - 3. Investment
  - 4. Change

Question ID : 9895809483

Chosen Option : 3

Q.4 Belief in the primary importance of the self, the virtues of self-reliance and personal independence is referred to as \_\_\_\_\_ in Economics.

- Ans
- 1. Federalism
  - 2. Frugalism
  - 3. Capitalism
  - 4. Individualism

Question ID : 9895809482

Chosen Option : 1

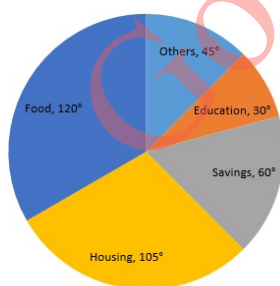
Q.5 In India, district roads are maintained by:

- Ans
- 1. Zilla parishad
  - 2. state government
  - 3. central government
  - 4. panchayat

Question ID : 9895809492

Chosen Option : 2

Q.5 Study the chart and answer the question based on the pie chart.  
1 The pie chart given below shows expenditures incurred by a family on various items and savings in a month. Savings of the family is ₹ 8,000 in a month.



What is the total expenditure of the family for the month?

- Ans
- 1. ₹ 45,000
  - 2. ₹ 48,000
  - 3. ₹ 50,000
  - 4. ₹ 40,000

Question ID : 9895809671

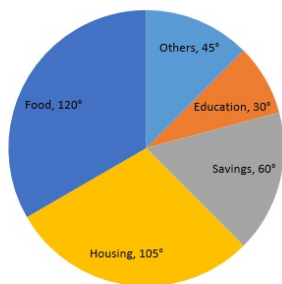
Chosen Option : 4

**Q.5** Nitin's money becomes double in 4 years at compound interest. In how many years will it become sixteen times at compound interest?

- Ans**
- 1. 20
  - 2. 24
  - 3. 16
  - 4. 28

Question ID : 9895809662  
Chosen Option : 3

**Q.5** Study the chart and answer the question based on the pie chart.  
The pie chart given below shows expenditures incurred by a family on various items and savings in a month. Savings of the family is ₹ 8,000 in a month.



How much more amount is spent on food than on housing?

- Ans**
- 1. ₹ 2,000
  - 2. ₹ 3,000
  - 3. ₹ 1,000
  - 4. ₹ 2,500

Question ID : 9895809672  
Chosen Option : 2

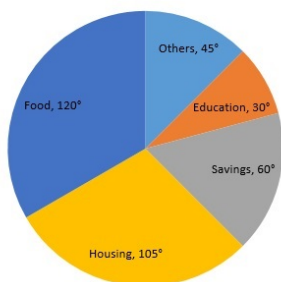
**Q.5** What approximate value should come in place of the question mark (?) in the following questions?

**4**  
 $21 + 68 + 17 = ?$

- Ans**
- 1. 25
  - 2. 35
  - 3. 40
  - 4. 10

Question ID : 9895809650  
Chosen Option : 2

**Q.5** Study the chart and answer the question based on the pie chart.  
The pie chart given below shows expenditures incurred by a family on various items and savings in a month. Savings of the family is ₹ 8,000 in a month.



The ratio of the expenditure on food to the savings is:

- Ans  1. 2 : 1  
 2. 3 : 4  
 3. 3 : 2  
 4. 4 : 3

Question ID : 9895809670  
Chosen Option : 3

Q.5  
6 If 10 persons can do a job in 20 days. Then 20 persons with the twice efficiency can do the same job in:

- Ans  1. 15  
 2. 10  
 3. 5  
 4. 20

Question ID : 9895809664  
Chosen Option : 1

Q.5  
7 25% of a number is 300. The number is:

- Ans  1. 1000  
 2. 800  
 3. 1200  
 4. 900

Question ID : 9895809655  
Chosen Option : 3

Q.5  
8 The average of numbers 2, 4, 6,....., 100 is:

- Ans  1. 51  
 2. 50  
 3. 49.5  
 4. 50.5

Question ID : 9895809651  
Chosen Option : 3

Q.5  
9 If  $A : B = 2 : 3$ ,  $B : C = 3 : 4$  and  $C : D = 3 : 5$  then value of  $A : B : C : D$  is:

- Ans  1. 6 : 9 : 15 : 20  
 2. 2 : 3 : 4 : 5  
 3. 2 : 3 : 5 : 12  
 4. 6 : 9 : 12 : 20

Question ID : 9895809658  
Chosen Option : 2

Q.6  
0 The average of 20, 25, 35, 15, a, 30 is 22.5. The value of a is:

- Ans
- 1. 13
  - 2. 12.5
  - 3. 10
  - 4. 15

Question ID : 9895809652  
Chosen Option : 2

Q.6  
1 The marked price of an item for sale is ₹ 240. If two successive discount of 10% and 5% are given on the marked price, then the selling price of the item (in ₹) will be:

- Ans
- 1. ₹ 34.80
  - 2. ₹ 205.20
  - 3. ₹ 36
  - 4. ₹ 204

Question ID : 9895809653  
Chosen Option : 1

Q.6  
2 Two trains 85 m and 155 m long, run at the speeds of 62 km/h and 82 km/h respectively, in opposite directions on parallel tracks. The time which they take to cross each other is:

- Ans
- 1. 4 seconds
  - 2. 5 seconds
  - 3. 6 seconds
  - 4. 8 seconds

Question ID : 9895809666  
Chosen Option : 4

Q.6  
3 The length, breadth and height of a room are in the ratio of 4 : 3 : 2. The cost of carpeting the floor at ₹ 10 per square meter is ₹ 480. The height of the room is:

- Ans
- 1. 10 m
  - 2. 2 m
  - 3. 6 m
  - 4. 4 m

Question ID : 9895809667  
Chosen Option : 2

Q.6  
4  $11^2 + 11^4 \div 11^3$  of  $11 - 11 = ?$

- Ans
- 1. 111
  - 2. 121
  - 3. 131
  - 4. 101

Question ID : 9895809649  
Chosen Option : 1

Q.6  
5 The speed of the 'Train 18' is 180 km/hr. The distance covered by it in 10 seconds is:

- Ans
- 1. 100 metres
  - 2. 500 metres
  - 3. 700 metres
  - 4. 648 metres

Question ID : 9895809665  
Chosen Option : 1

Q.6  
6 A copper wire is bent in the form of an equilateral triangle of area  $4\sqrt{3}$  cm<sup>2</sup>. If the same wire is bent into the form of a square, the area of the square will be:

- Ans
- 1. 16 sq. cm
  - 2. 9 sq. cm
  - 3. 144 sq. cm
  - 4. 64 sq. cm

Question ID : 9895809668  
Chosen Option : 4

Q.6  
7 The total area of a circle and a square is equal to 2611 sq. cm. The diameter of the circle is 42 cm. What is the sum of the circumference of the circle and the perimeter of the square? (Take  $\pi = \frac{22}{7}$ )

- Ans
- 1. 280 cm
  - 2. 272 cm
  - 3. 380 cm
  - 4. Cannot be determined

Question ID : 9895809663  
Chosen Option : 3

Q.6  
8 The amount of profit earned by selling an object for ₹ 524 is equal to the amount of loss suffered by selling it for ₹ 452. What is the cost price of the object?

- Ans
- 1. ₹ 480
  - 2. ₹ 488
  - 3. ₹ 485
  - 4. ₹ 500

Question ID : 9895809657  
Chosen Option : 3

Q.6  
9 A circle, with radius 8 cm, which has the area equal to the area of a triangle with base 8 cm. Then the length of the corresponding altitude of triangle is:

- Ans
- 1.  $38\pi$  cm
  - 2.  $16\pi$  cm
  - 3.  $18\pi$  cm
  - 4.  $8\pi$  cm

Question ID : 9895809669  
Chosen Option : 2



Q.7 The simple interest for the second year on a certain sum at a certain rate of interest is ₹ 1000. What the sum of the interest accrued on it for the 6<sup>th</sup>, 7<sup>th</sup> and 8<sup>th</sup> years?

- Ans
- 1. ₹ 3200
  - 2. ₹ 3300
  - 3. ₹ 3000
  - 4. ₹ 3630

Question ID : 9895809661  
Chosen Option : 1

Q.7 If the ratio between two numbers are 3 : 4. If the first number and second number are increased by 40 % and 50% respectively. Then the new ratio of the numbers are:

- Ans
- 1. 9 : 10
  - 2. 11 : 10
  - 3. 3 : 4
  - 4. 7 : 10

Question ID : 9895809660  
Chosen Option : 3

Q.7 The difference between the Mode and the Median of a data is 25. What is the difference between the Median and the Mean?

- Ans
- 1. 10.5
  - 2. 16
  - 3. 12.5
  - 4. 14

Question ID : 9895809654  
Chosen Option : 2

Q.7 Which is the least four-digit number which when divided by 5, 6 and 8 leaves remainder 2 in each case?

- Ans
- 1. 1032
  - 2. 1062
  - 3. 1042
  - 4. 1082

Question ID : 9895809648  
Chosen Option : 2

Q.7 The ratio of spirit and water is 2 : 5. If the volume of solution is increased by 50% by adding spirit only. What is the resultant ratio of spirit and water?

- Ans
- 1. 9 : 10
  - 2. 12 : 15
  - 3. 11 : 10
  - 4. 3 : 4

Question ID : 9895809659  
Chosen Option : 1

Q.7 A trader sold an item at a loss of 20%. Had he sold it for ₹ 100 more, he would have gained a profit of 5%. What is the cost price of the item?

- Ans
- 1. ₹ 250
  - 2. ₹ 200
  - 3. ₹ 25
  - 4. ₹ 400

Question ID : 9895809656  
Chosen Option : 1

Section : English Language

Q.1 Select the most appropriate word to fill in the blank.

Stainless steel pans are usually provided \_\_\_\_\_ copper bottoms.

- Ans
- 1. from
  - 2. by
  - 3. with
  - 4. under

Question ID : 9895809832  
Chosen Option : 3

Q.2 Select the synonym of the given word.

JUSTICE

- Ans
- 1. Equality
  - 2. Liberty
  - 3. Fraternity
  - 4. Fairness

Question ID : 9895809840  
Chosen Option : 2

Q.3 Identify the segment in the sentence which contains the grammatical error from the given options.

The rearing of silkworms for obtained silk is called sericulture.

- Ans
- 1. for obtained
  - 2. silk is
  - 3. called sericulture
  - 4. The rearing

Question ID : 9895809827  
Chosen Option : 3

Comprehension:

In the following passage some words have been deleted. Fill in the blanks with the help of the alternatives given. Select the most appropriate option for each number.

Our stomach contains hydrochloric acid. It (1) \_\_\_\_\_ us to digest food, but too much acid (2) \_\_\_\_\_ the stomach causes indigestion. (3) \_\_\_\_\_ indigestion is painful. To (4) \_\_\_\_\_ indigestion, we take (5) \_\_\_\_\_ antacid such as milk of magnesia.

SubQuestion No : 4

Q.4 Select the most appropriate option that will fill in the blank number 1

- Ans
- 1. benefits
  - 2. helps
  - 3. cures
  - 4. utilizes

Question ID : 9895809835  
Chosen Option : 2

Comprehension:

In the following passage some words have been deleted. Fill in the blanks with the help of the alternatives given. Select the most appropriate option for each number.

Our stomach contains hydrochloric acid. It (1) \_\_\_\_\_ us to digest food, but too much acid (2) \_\_\_\_\_ the stomach causes indigestion. (3) \_\_\_\_\_ indigestion is painful. To (4) \_\_\_\_\_ indigestion, we take (5) \_\_\_\_\_ antacid such as milk of magnesia.

SubQuestion No : 5

Q.5 Select the most appropriate option that will fill in the blank number 2

- Ans
- 1. at
  - 2. in
  - 3. from
  - 4. of

Question ID : 9895809836  
Chosen Option : 4

Comprehension:

In the following passage some words have been deleted. Fill in the blanks with the help of the alternatives given. Select the most appropriate option for each number.

Our stomach contains hydrochloric acid. It (1) \_\_\_\_\_ us to digest food, but too much acid (2) \_\_\_\_\_ the stomach causes indigestion. (3) \_\_\_\_\_ indigestion is painful. To (4) \_\_\_\_\_ indigestion, we take (5) \_\_\_\_\_ antacid such as milk of magnesia.

SubQuestion No : 6

Q.6 Select the most appropriate option that will fill in the blank

number 3

- Ans
- 1. Whenever
  - 2. Finally
  - 3. Always
  - 4. Sometimes

Question ID : 9895809837  
Chosen Option : 3

Comprehension:

In the following passage some words have been deleted. Fill in the blanks with the help of the alternatives given. Select the most appropriate option for each number.

Our stomach contains hydrochloric acid. It (1) \_\_\_\_\_ us to digest food, but too much acid (2) \_\_\_\_\_ the stomach causes indigestion. (3) \_\_\_\_\_ indigestion is painful. To (4) \_\_\_\_\_ indigestion, we take (5) \_\_\_\_\_ antacid such as milk of magnesia.

SubQuestion No : 7

Q.7 Select the most appropriate option that will fill in the blank

number 4

- Ans
- 1. soften
  - 2. better
  - 3. correct
  - 4. relieve

Question ID : 9895809838  
Chosen Option : 4

Comprehension:

In the following passage some words have been deleted. Fill in the blanks with the help of the alternatives given. Select the most appropriate option for each number.

Our stomach contains hydrochloric acid. It (1) \_\_\_\_\_ us to digest food, but too much acid (2) \_\_\_\_\_ the stomach causes indigestion. (3) \_\_\_\_\_ indigestion is painful. To (4) \_\_\_\_\_ indigestion, we take (5) \_\_\_\_\_ antacid such as milk of magnesia.

SubQuestion No : 8

Q.8 Select the most appropriate option that will fill in the blank

number 5

- Ans
- 1. one
  - 2. a
  - 3. the
  - 4. an

Question ID : 9895809839

Chosen Option : 3

Q.9 Select the most appropriate word to fill in the blank.

Some regions of our country still remain \_\_\_\_\_ to the average man.

- Ans
- 1. explored
  - 2. accessible
  - 3. inaccessible
  - 4. impossible

Question ID : 9895809850

Chosen Option : 1

Q.1  
0 Select the wrongly spelt word.

- Ans
- 1. Possession
  - 2. Particuler
  - 3. Permanent
  - 4. Personal

Question ID : 9895809849

Chosen Option : 3

Q.1  
1 Select the word which means the same as the group of words given.

The science of the causes and effects of diseases

- Ans
- 1. Pathology
  - 2. Cardiology
  - 3. Physiology
  - 4. Zoology

Question ID : 9895809847

Chosen Option : 3

Q.1  
2 Select the synonym of the given word.

LETHARGIC

- Ans
- 1. Industrious
  - 2. Active
  - 3. DILIGENT
  - 4. Lazy

Question ID : 9895809841

Chosen Option : 2

Q.1  
3 Select the wrongly spelt word.

- Ans
- 1. Hindrance
  - 2. Humorous

- 3. Hypocrisy
- 4. Harrassment

Question ID : 9895809848  
Chosen Option : 4

Q.1  
4 Select the meaning of the given idiom.

Cast the first stone

- Ans
- 1. To be deeply involved
  - 2. To be the first to find fault
  - 3. To start a fight
  - 4. To praise first of all

Question ID : 9895809844  
Chosen Option : 3

Q.1  
5 Select the most appropriate option to substitute the underlined segment in the given sentence. If there is no need to substitute it, select No substitution required

A clinical thermometer consists of a long, narrow, uniform glass tube.

- Ans
- 1. No substitution required
  - 2. is containing the
  - 3. composed of
  - 4. consisted in a

Question ID : 9895809830  
Chosen Option : 4

Q.1  
6 Select the meaning of the given idiom.

Moot point

- Ans
- 1. Controversial issue
  - 2. Common Belief
  - 3. Basic idea
  - 4. Improper thought

Question ID : 9895809845  
Chosen Option : 4

Q.1  
7 Identify the segment in the sentence which contains the grammatical error from the given options.

In winter, sheeps are kept indoors and fed on leaves, grain and dry fodder.

- Ans
- 1. sheeps are
  - 2. In winter
  - 3. kept indoors
  - 4. fed on

Question ID : 9895809826  
Chosen Option : 3

Q.1  
8 Select the most appropriate word to fill in the blank.

Rumours spread that he \_\_\_\_\_ soon order the army to open fire.

- Ans
- 1. would be
  - 2. will be
  - 3. would have
  - 4. would

Question ID : 9895809833  
Chosen Option : 3

Q.1  
9 Select the most appropriate option to substitute the underlined segment in the given sentence. If there is no need to substitute it, select No substitution required

The people living in the coastal areas experience a interested phenomenon.

- Ans
- 1. No substitution required
  - 2. the interested phenomenon
  - 3. interestingly phenomenon
  - 4. an interesting phenomenon

Question ID : 9895809831  
Chosen Option : 4

Q.2  
0 Select the antonym of the given word.

ELEGANT

- Ans
- 1. Unmatched
  - 2. Undignified
  - 3. Graceful
  - 4. Refined

Question ID : 9895809843  
Chosen Option : 2

Q.2  
1 Select the word which means the same as the group of words given.

The study of human societies and cultures and their development

- Ans
- 1. Choreography
  - 2. Calligraphy
  - 3. Physiotherapy
  - 4. Anthropology

Question ID : 9895809846  
Chosen Option : 3

Q.2  
2 Select the antonym of the given word.

CURSORY

Ans

- 1. Thorough
- 2. Temporary
- 3. Superficial
- 4. Casual

Question ID : 9895809842  
Chosen Option : 2

Q.2 Identify the segment in the sentence which contains the grammatical error from the given options.  
3

The larvae, also called caterpillars eat day and night and increase enormous in size.

- Ans
- 1. enormous in size
  - 2. and increase
  - 3. also called
  - 4. eat day and night

Question ID : 9895809828  
Chosen Option : 2

Q.2 Select the most appropriate option to substitute the underlined segment in the given sentence. If there is no need to substitute it, select No substitution required.  
4

The eggs are warmed to a suitable temperature for the larvae to hatching from eggs.

- Ans
- 1. to hatch from eggs.
  - 2. hatched from eggs.
  - 3. No substitution required
  - 4. hatch from eggs.

Question ID : 9895809829  
Chosen Option : 1

Q.2 Select the most appropriate word to fill in the blank.  
5

People like to work for organizations that take interest in their personal and \_\_\_\_\_ growth.

- Ans
- 1. professional
  - 2. physical
  - 3. social
  - 4. financial

Question ID : 9895809851  
Chosen Option : 2

Section : Hindi Language

Q.1 सही वर्तनी वाले शब्द का चयन करें।

- Ans
- 1. उपरियुक्त
  - 2. ऊपर्युक्त
  - 3. उपरियुक्त



✓ 4. उपर्युक्त

Question ID : 9895809981  
Chosen Option : --

Comprehension:

निम्नलिखित गद्यांश के रिक्त स्थानों की पूर्ति गद्यांश के नीचे दिए गए प्रश्नों के अनुसार कीजिए-

स्वस्थ शरीर वाला मनुष्य ही इस संसार के सुखों को भोग सकता है तथा \_\_\_\_\_ (1) बिता सकता है। स्वस्थ शरीर के लिए पौष्टिक भोजन और व्यायाम दोनों ही अति \_\_\_\_\_ (2) हैं। व्यायाम करते समय सदा कुछ \_\_\_\_\_ (3) बरतनी चाहिए। पहली सावधानी यह है कि आयु, समय व शरीर की \_\_\_\_\_ (4) के अनुसार ही व्यायाम करना चाहिए। दूसरी सावधानी यह है कि सही व्यायाम का \_\_\_\_\_ (5) करना चाहिए।

SubQuestion No : 2

Q.2 गद्यांश में संकेतित रिक्त स्थान (1) के लिए उपयुक्त शब्द होगा।

- Ans
- ✗ 1. नारकीय जीवन
  - ✗ 2. दुखी जीवन
  - ✓ 3. सुखमय जीवन
  - ✗ 4. असफल जीवन

Question ID : 9895809967  
Chosen Option : --

Comprehension:

निम्नलिखित गद्यांश के रिक्त स्थानों की पूर्ति गद्यांश के नीचे दिए गए प्रश्नों के अनुसार कीजिए-

स्वस्थ शरीर वाला मनुष्य ही इस संसार के सुखों को भोग सकता है तथा \_\_\_\_\_ (1) बिता सकता है। स्वस्थ शरीर के लिए पौष्टिक भोजन और व्यायाम दोनों ही अति \_\_\_\_\_ (2) हैं। व्यायाम करते समय सदा कुछ \_\_\_\_\_ (3) बरतनी चाहिए। पहली सावधानी यह है कि आयु, समय व शरीर की \_\_\_\_\_ (4) के अनुसार ही व्यायाम करना चाहिए। दूसरी सावधानी यह है कि सही व्यायाम का \_\_\_\_\_ (5) करना चाहिए।

SubQuestion No : 3

Q.3 गद्यांश में संकेतित रिक्त स्थान (2) के लिए उपयुक्त शब्द होगा।

- Ans
- ✗ 1. आवश्यक

- 2. अत्यधिक
- 3. अनावश्यक
- 4. निरर्थक

Question ID : 9895809968  
Chosen Option : --

Comprehension:

निम्नलिखित गद्यांश के रिक्त स्थानों की पूर्ति गद्यांश के नीचे दिए गए प्रश्नों के अनुसार कीजिए-

स्वस्थ शरीर वाला मनुष्य ही इस संसार के सुखों को भोग सकता है तथा \_\_\_\_\_ (1) बिता सकता है। स्वस्थ शरीर के लिए पौष्टिक भोजन और व्यायाम दोनों ही अति \_\_\_\_\_ (2) हैं। व्यायाम करते समय सदा कुछ \_\_\_\_\_ (3) बरतनी चाहिए। पहली सावधानी यह है कि आयु, समय व शरीर की \_\_\_\_\_ (4) के अनुसार ही व्यायाम करना चाहिए। दूसरी सावधानी यह है कि सही व्यायाम का \_\_\_\_\_ (5) करना चाहिए।

SubQuestion No : 4

Q.4 गद्यांश में संकेतित रिक्त स्थान (3) के लिए उपयुक्त शब्द होगा।

- Ans
- 1. परेशानियाँ
  - 2. निशानियाँ
  - 3. सावधानियाँ
  - 4. असावधानियाँ

Question ID : 9895809969  
Chosen Option : --

Comprehension:

निम्नलिखित गद्यांश के रिक्त स्थानों की पूर्ति गद्यांश के नीचे दिए गए प्रश्नों के अनुसार कीजिए-

स्वस्थ शरीर वाला मनुष्य ही इस संसार के सुखों को भोग सकता है तथा \_\_\_\_\_ (1) बिता सकता है। स्वस्थ शरीर के लिए पौष्टिक भोजन और व्यायाम दोनों ही अति \_\_\_\_\_ (2) हैं। व्यायाम करते समय सदा कुछ \_\_\_\_\_ (3) बरतनी चाहिए। पहली सावधानी यह है कि आयु, समय व शरीर की \_\_\_\_\_ (4) के अनुसार ही व्यायाम करना चाहिए। दूसरी सावधानी यह है कि सही व्यायाम का \_\_\_\_\_ (5) करना चाहिए।

SubQuestion No : 5

Q.5 गद्यांश में संकेतित रिक्त स्थान (4) के लिए उपयुक्त शब्द होगा।

- Ans
- 1. क्षमता
  - 2. बुद्धि
  - 3. प्रतिभा
  - 4. ज्ञान

Question ID : 9895809970  
Chosen Option : --

Comprehension:

निम्नलिखित गद्यांश के रिक्त स्थानों की पूर्ति गद्यांश के नीचे दिए गए प्रश्नों के अनुसार कीजिए-

स्वस्थ शरीर वाला मनुष्य ही इस संसार के सुखों को भोग सकता है तथा \_\_\_\_\_ (1) बिता सकता है। स्वस्थ शरीर के लिए पौष्टिक भोजन और व्यायाम दोनों ही अति \_\_\_\_\_ (2) हैं। व्यायाम करते समय सदा कुछ \_\_\_\_\_ (3) बरतनी चाहिए। पहली सावधानी यह है कि आयु, समय व शरीर की \_\_\_\_\_ (4) के अनुसार ही व्यायाम करना चाहिए। दूसरी सावधानी यह है कि सही व्यायाम का \_\_\_\_\_ (5) करना चाहिए।

SubQuestion No : 6

- Q.6 गद्यांश में संकेतित रिक्त स्थान (5) के लिए उपयुक्त शब्द होगा।

- Ans
- 1. विभाजन
  - 2. संचयन
  - 3. चुनाव
  - 4. संकलन

Question ID : 9895809971  
Chosen Option : --

- Q.7 दिए गए वाक्य का वह भाग ज्ञात करें जिसमें कोई त्रुटि है।

जनसंचार माध्यम में चित्रपट अथवा सिनेमा का भी अपनी स्थान है।

- Ans
- 1. जनसंचार माध्यम में
  - 2. का भी
  - 3. चित्रपट अथवा सिनेमा
  - 4. अपनी स्थान है।

Question ID : 9895809957  
Chosen Option : --

- Q.8 रिक्त स्थान को भरने के लिए उपयुक्त शब्द का चयन करें।

मैं आपका \_\_\_\_\_ आभार मानता रहूँगा।

- Ans
- 1. सदैव
  - 2. आजकल
  - 3. अतीत
  - 4. कभी

Question ID : 9895809964  
Chosen Option : --

Q.9 दिए गए वाक्य का वह भाग ज्ञात करें जिसमें कोई त्रुटि है।  
वृद्धा मन मारकर घर में उदास होकर अकेला बैठी थी।

- Ans
- 1. वृद्धा मन मारकर
  - 2. घर में
  - 3. अकेला बैठी थी।
  - 4. उदास होकर

Question ID : 9895809958  
Chosen Option : --

Q.10 'मेघ' का पर्यावाची शब्द है-

- Ans
- 1. भूदेव
  - 2. वारुणी
  - 3. वारिद
  - 4. कानन

Question ID : 9895809975  
Chosen Option : --

Q.11 रिक्त स्थान को भरने के लिए उपयुक्त शब्द का चयन करें।

सिंह एक \_\_\_\_\_ जानवर है।

- Ans
- 1. विशाल
  - 2. वीभत्स
  - 3. भयानक
  - 4. बड़ा

Question ID : 9895809963  
Chosen Option : --

Q.12 'राजा' का पर्यायवाची शब्द है-

- Ans
- 1. भूमिसुर
  - 2. भूदेव
  - 3. देवता
  - 4. महीप

Question ID : 9895809974

Chosen Option : --

Q.1 3 दिए गए वाक्य में रेखांकित खंड को प्रतिस्थापित करने के लिए उपयुक्त विकल्प का चयन करें।

श्याम ईश्वर में विश्वास नहीं करता है।

- Ans
- 1. साकार
  - 2. आस्तिक
  - 3. निराकार
  - 4. नास्तिक

Question ID : 9895809960

Chosen Option : --

Q.1 4 दिए गए वाक्य में रेखांकित खंड को प्रतिस्थापित करने के लिए उपयुक्त विकल्प का चयन करें।

राम सबको प्रिय है।

- Ans
- 1. कर्णप्रिय
  - 2. सर्वप्रिय
  - 3. असर्वप्रिय
  - 4. मधुप्रिय

Question ID : 9895809961

Chosen Option : --

Q.1 5 'टूट पड़ना' मुहावरे का अर्थ है-

- Ans
- 1. आक्रमण कर देना
  - 2. तोड़ना
  - 3. सेना तैयार करना
  - 4. बिखर जाना

Question ID : 9895809976

Chosen Option : --

Q.1 6 दिए गए वाक्य का वह भाग ज्ञात करें जिसमें कोई त्रुटि है।

यह आवश्यक है कि प्रेस, पत्रकारिता की आचार-संहिता और विश्वसनीयता की ध्यान रखिए।

- Ans
- 1. यह आवश्यक है कि
  - 2. प्रेस, पत्रकारिता की
  - 3. आचार-संहिता और
  - 4. विश्वसनीयता की ध्यान रखिए।

Question ID : 9895809956

Chosen Option : --

Q.1  
7

दिए गए वाक्य में रेखांकित खंड को प्रतिस्थापित करने के लिए उपयुक्त विकल्प का चयन करें।

संत वह है जो मोक्ष चाहता है।

- Ans
- 1. मुमुक्षु
  - 2. चक्षु
  - 3. भिक्षुक
  - 4. मिमांशु

Question ID : 9895809959  
Chosen Option : --

Q.1  
8 रिक्त स्थान को भरने के लिए उपयुक्त शब्द का चयन करें।

कवि नागार्जुन \_\_\_\_\_ वास्तविक नाम वैद्यनाथ मिश्र है।

- Ans
- 1. के
  - 2. की
  - 3. को
  - 4. का

Question ID : 9895809962  
Chosen Option : --

Q.1  
9 सही वर्तनी वाले शब्द का चयन करें।

- Ans
- 1. चिकनाहट
  - 2. चीकनाहठ
  - 3. चिकनाहठ
  - 4. चीकनाहट

Question ID : 9895809980  
Chosen Option : --

Q.2  
0 रिक्त स्थान को भरने के लिए उपयुक्त शब्द का चयन करें।

\_\_\_\_\_ को दण्ड देना अनुचित है।

- Ans
- 1. निरपराध
  - 2. निरपराधी
  - 3. दोषी
  - 4. निर्दोषी

Question ID : 9895809965  
Chosen Option : --

Q.2  
1 'अथ' शब्द का विलोम शब्द है-

- Ans
- 1. प्रारंभ

2. इति  
 3. आरंभ  
 4. शुरू

Question ID : 9895809973  
Chosen Option : --

Q.2 'जो सब कुछ करने की क्षमता रखता हो' के लिए एक शब्द है -

- Ans  1. मालिक  
 2. सर्वशक्तिमान  
 3. भरपूर  
 4. नेता

Question ID : 9895809978  
Chosen Option : --

Q.2 'जिसके हृदय में ममता नहीं है' के लिए एक शब्द है-

- Ans  1. उदार  
 2. सदय  
 3. निर्मम  
 4. कठोर

Question ID : 9895809979  
Chosen Option : --

Q.2 'सुमति' शब्द का विलोम है-

- Ans  1. कुमति  
 2. क्रूर  
 3. मूर्ख  
 4. सम्मति

Question ID : 9895809972  
Chosen Option : --

Q.2 'नौ दो ग्यारह होना' मुहावरे का अर्थ है-

- Ans  1. दौड़ना  
 2. भाग जाना  
 3. चुप हो जाना  
 4. छुप जाना

Question ID : 9895809977  
Chosen Option : --

GovtJobsAlert.In