

Constable (GD) in CAPFs, NIA, SSF and Rifleman (GD) in Assam Rifles Examination, 2018

Roll No. :	www.GovtJobsAlert.In
Registration No.	
Name :	
Exam Venue :	iON Digital Zone iDZ Kandrika
Exam Time :	9:00 AM - 10:30 AM
Exam Date :	11/02/2019

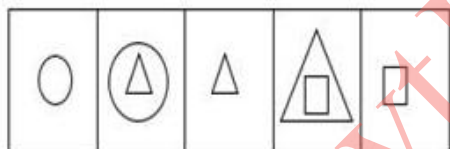
Section : General Section

Q.1 Identify the odd one from the following.

- Ans
- 1. LKJI
 - 2. QRSP
 - 3. ZYXW
 - 4. DCBA

Question ID : 9895802401
Chosen Option : 2

Q.2 Select the figure that will come next in the following series.



- Ans
- 1.
 - 2.
 - 3.
 - 4.

Question ID : 9895802418
Chosen Option : 2

Q.3 Select the option that is related to the third number in the same way as the second number is related to the first number.

11 : 169 :: 18 : _____

- Ans 1. 256
 2. 361
 3. 396
 4. 400

Question ID : 9895802414
 Chosen Option : 2

Q.4 Choose the alternative which most closely resembles the mirror image of the given word when mirror is placed at XY line.



- Ans 1. ECA
 2. EJA
 3. ACE
 4. EJA

Question ID : 9895802421
 Chosen Option : 4

Q.5 Choose the option figure in which the problem figure is hidden/embedded. (Rotation is not allowed)



- Ans 1.
- 2.
- 3.
- 4.

Question ID : 9895802420
 Chosen Option : 1

Q.6 Five students took part in a cycling competition. Robert finished before Monish but behind Gunjan. Anil finished before Sunil but behind Monish. Who won the competition?

- Ans 1. Robert

- 2. Anil
- 3. Gunjan
- 4. Monish

Question ID : 9895802409
Chosen Option : 3

Q.7 In the following number series, two numbers have been put within brackets. Study the series carefully and select the correct alternative with respect to the series.

4, 6, 10, (12), 16, (14), 22

Ans 1. Both the bracketed numbers are incorrect.

2. Both the bracketed numbers are correct.

3.

The first bracketed number (from the left) is incorrect and the second is correct.

4.

The first bracketed number (from the left) is correct and the second is incorrect.

Question ID : 9895802417
Chosen Option : 1

Q.8 Six offices on a floor are allotted to A, B, C, D, E and F, respectively. The offices are arranged in two rows, one facing the north and the other facing the south. B got a north-facing office and is not next to D. D and F got diagonally opposite offices. C, whose office is next to F, got a south-facing office, and E got a north-facing office.

Which of the following combinations got south-facing offices?

Ans 1. BED

2. FCA

3. ABC

4. FAE

Question ID : 9895802408
Chosen Option : 2

Q.9 Five students are standing in a line. Suman is standing next to Pranav but not next to Deena. Kumar is standing next to Raju, who is standing on the extreme left, and Deena is not standing next to Kumar. Who is standing in the middle?

Ans 1. Raju

2. Kumar

3. Suman

4. Deena

Question ID : 9895802407
Chosen Option : 2

Q.10 Identify the number that DOES NOT belong to the following series.

2, 9, 28, 64, 126, 217, 344, 513

Ans 1. 28

2. 513

3. 64

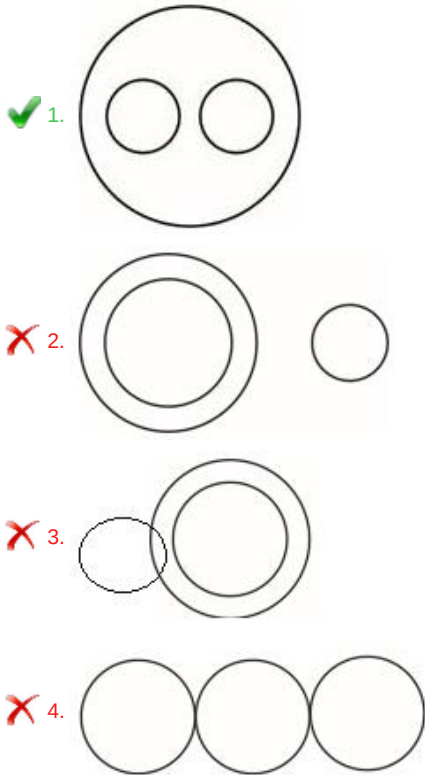
4. 344

Question ID : 9895802413
Chosen Option : 2

Q.1 Select the Venn diagram that best illustrates the relationship between the three given classes.
1

School, Teacher, Student

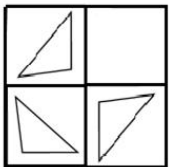
Ans



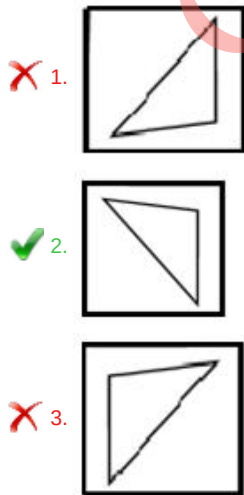
Question ID : 9895802423
Chosen Option : 1

Q.1 Select the option figure which when placed in the blank space of the problem figure would complete the pattern.
2

Problem figure:



Ans



✗ 4.



Question ID : 9895802419
Chosen Option : 2

Q.1 The statements below are followed by two conclusions labeled I and II. Assuming that the information in the statements is true, even if it appears to be at variance with generally established facts, decide which conclusion(s) logically and definitely follow(s) from the information given in the statements.

Statements:

Some dolls are flowers.

No trees are dolls.

Conclusions:

I. No dolls are trees.

II. Some flowers are trees.

- Ans
- ✗ 1. Both conclusions I and II follow.
 - ✗ 2. Only conclusion II follows.
 - ✓ 3. Only conclusion I follows.
 - ✗ 4. Neither conclusion I nor conclusion II follows.

Question ID : 9895802411
Chosen Option : 2

Q.1 Identify the odd pair from the following.

- Ans
- ✗ 1. Italy : Rome
 - ✗ 2. Greece : Athens
 - ✓ 3. Iraq : Dinar
 - ✗ 4. Egypt : Cairo

Question ID : 9895802402
Chosen Option : 2

Q.1 Identify the odd one from the following.

- Ans
- ✗ 1. Above
 - ✗ 2. Down
 - ✗ 3. Up
 - ✓ 4. Large

Question ID : 9895802400
Chosen Option : 1

Q.1 Select the number that will come next in the following series.

1, 3, 5, 11, 21, 43, 85, 171, _____

- Ans
- ✓ 1. 341

2. 342

3. 247

4. 354

Question ID : 9895802412
Chosen Option : 2

Q.1 Select the letter that will come next in the following series.

7

O, R, U, X, A, _____

Ans 1. B

2. E

3. C

4. D

Question ID : 9895802399
Chosen Option : 4

Q.1 Which of the four changes given in the options would make the following equation correct?

8

$$30 \times 3 - 3 = 13$$

Ans 1. \times changed to $+$; $-$ changed to \div

2. \times interchanged with $-$

3. \times interchanged with $-$; 3 interchanged with 30

4. \times changed to \div ; $-$ changed to $+$

Question ID : 9895802416
Chosen Option : 4

Q.1 Identify the number that is different from the rest.

9

Ans 1. 121

2. 252

3. 196

4. 256

Question ID : 9895802415
Chosen Option : 2

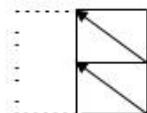
Q.2 A square transparent sheet with a pattern is given. Select from among the four alternatives how the pattern would appear when the transparent sheet is folded at the dotted line.

0

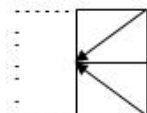


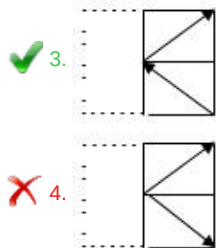
Ans

1.



2.





Question ID : 9895802422
Chosen Option : 2

Q.2
1 Select the option that is analogous to the given pair.

CD : HI

- Ans
- 1. KL : NO
 - 2. PQ : UV
 - 3. IJ : MN
 - 4. AB : XY

Question ID : 9895802403
Chosen Option : 4

Q.2
2 If D = 4 and G = 7, then GARDEN = _____.

- Ans
- 1. 40
 - 2. 50
 - 3. 49
 - 4. 47

Question ID : 9895802405
Chosen Option : 3

Q.2
3 Select the option that is related to the third term in the same way as the second term is related to the first term.

Bull : Cow :: Lion : _____

- Ans
- 1. Doe
 - 2. Lioness
 - 3. Cub
 - 4. Mare

Question ID : 9895802404
Chosen Option : 2

Q.2
4 If CHILDREN is coded as LIHCNERD, then MOVEMENT will be coded as _____.

- Ans
- 1. EVOMTMEN
 - 2. TNEMEVOM
 - 3. EVOMMENT
 - 4. EVOMTNEM

Question ID : 9895802406
Chosen Option : 3

Q.2
5

Read the given statements and conclusions carefully and decide which of the conclusions logically follow(s) from the statements.

Statements:

All scientists working in Japan are talented.

Some Chinese scientists are working in Japan.

Conclusions:

I. No Chinese scientist is talented.

II. Some talented Chinese scientists are working in Japan.

III. All talented scientists are Japanese.

IV. Some Chinese scientists are talented.

- Ans
- 1. Only conclusion III and IV follow.
 - 2. Only conclusion II follows.
 - 3. Only conclusion II and IV follow.
 - 4. Only conclusion I follows.

Question ID : 9895802410
Chosen Option : 2

Q.2
6 _____ is the smallest state of India.

- Ans
- 1. Goa
 - 2. Sikkim
 - 3. Punjab
 - 4. Tripura

Question ID : 9895802970
Chosen Option : 1

Q.2
7 In which of following locations did the 1920 Indian National congress take place?

- Ans
- 1. Thiruvananthapuram
 - 2. Tripura
 - 3. Mumbai
 - 4. Nagpur

Question ID : 9895802974
Chosen Option : 3

Q.2
8 The green pigment present in leaves is called _____.

- Ans
- 1. chlorophyll
 - 2. phloem
 - 3. tissue
 - 4. xylem

Question ID : 9895802966
Chosen Option : 1

Q.2
9 The chemical name of table salt is _____.

- Ans
- 1. hydrogen chloride
 - 2. sodium hydrogen carbonate
 - 3. sodium chloride
 - 4. sodium carbonate

Question ID : 9895802965
Chosen Option : 4

Q.3
0 The Soviet Union broke down in the year _____.

- Ans
- 1. 1900
 - 2. 1991
 - 3. 2000
 - 4. 1880

Question ID : 9895802963
Chosen Option : 2

Q.3
1 _____ is the first Indian female to win a silver in the Olympics.

- Ans
- 1. Tanvi Lad
 - 2. P.V. Sindhu
 - 3. Saina Nehwal
 - 4. Arundhati Pantwane

Question ID : 9895802954
Chosen Option : 2

Q.3
2 Jean Jacques Rousseau was a famous _____.

- Ans
- 1. Doctor
 - 2. Philosopher
 - 3. Painter
 - 4. Monarch

Question ID : 9895802975
Chosen Option : 2

Q.3
3 The book 'India 2020' is written by _____.

- Ans
- 1. Prasoos Joshi
 - 2. Pranab Mukherjee
 - 3. Dr A.P.J Abdul Kalam
 - 4. Ram Nath Kovind

Question ID : 9895802958
Chosen Option : 3

Q.3
4 On the basis of nominal GDP, India is the world's _____ largest economy in 2018.

- Ans
- 1. third

- 2. fifth
- 3. seventh
- 4. tenth

Question ID : 9895802959
Chosen Option : 4

Q.3
5 _____ is also known as 'The Light of Asia'.

- Ans
- 1. Swami Vivekananda
 - 2. Rumi
 - 3. Gandhi
 - 4. Buddha

Question ID : 9895802956
Chosen Option : 2

Q.3
6 Pietra Dura, the inlay technique of architecture can be found in which of the following monuments?

- Ans
- 1. Taj Mahal
 - 2. India Gate
 - 3. Gateway of India
 - 4. Char Minar

Question ID : 9895802976
Chosen Option : 3

Q.3
7 GST stands for _____.

- Ans
- 1. Growth and Service Tax
 - 2. Growth and Sale Tax
 - 3. Goods and Services Tax
 - 4. Goods and Sales Tax

Question ID : 9895802961
Chosen Option : 3

Q.3
8 The famous classical dance style of Tamil Nadu is:

- Ans
- 1. Mohiniyattam
 - 2. Kathak
 - 3. Kuchipudi
 - 4. Bharatanatyam

Question ID : 9895802952
Chosen Option : 3

Q.3
9 The _____ is a bird which symbolises peace.

- Ans
- 1. dove
 - 2. owl
 - 3. peacock

4. crow

Question ID : 9895802957
Chosen Option : 3

Q.4
0 Which of the following is NOT a part of the endocrine system?

- Ans 1. Salivary gland
 2. Thymus
 3. Pineal gland
 4. Adrenal gland

Question ID : 9895802969
Chosen Option : 2

Q.4
1 Lavani is a folk dance form of:

- Ans 1. Bihar
 2. Gujarat
 3. Rajasthan
 4. Maharashtra

Question ID : 9895802953
Chosen Option : 2

Q.4
2 The longest bone in the human body is the _____.

- Ans 1. femur
 2. ulna
 3. radius
 4. tibia

Question ID : 9895802967
Chosen Option : 4

Q.4
3 When did the civil war in Sri Lanka end?

- Ans 1. 1909
 2. 1800
 3. 2009
 4. 2001

Question ID : 9895802964
Chosen Option : 3

Q.4
4 Which if the following statements is correct in the context of Indian Democracy?

- Ans 1. allows people to choose their representatives.
 2. allows people to take over the country in cases of financial emergency.
 3. allows the military to rule the country.
 4. commands people to pay taxes for pilgrimage.

Question ID : 9895802962
Chosen Option : 1

Q.4
5 _____ is the first Indian woman to swim across the English Channel.

- Ans
- 1. Shikha Tandon
 - 2. Sania Mirza
 - 3. Shivani Kataria
 - 4. Aarti Saha

Question ID : 9895802955
Chosen Option : 3

Q.4
6 The river Narmada rises in Madhya Pradesh from the _____.

- Ans
- 1. Satpura range
 - 2. Aravalli hills
 - 3. Amarkantak hills
 - 4. Nilgiri hills

Question ID : 9895802972
Chosen Option : 4

Q.4
7 The _____ is a major iron ore belt in India.

- Ans
- 1. Gujarat-Rajasthan belt
 - 2. Odisha-Jharkhand belt
 - 3. Uttar Pradesh-Bihar belt
 - 4. Tamil Nadu-Chhattisgarh belt

Question ID : 9895802971
Chosen Option : 1

Q.4
8 The attack by the third estate on the Bastille prison sparked the _____.

- Ans
- 1. Break up of Soviet Union
 - 2. French Revolution
 - 3. Russian Revolution
 - 4. The fall of Tsar

Question ID : 9895802973
Chosen Option : 3

Q.4
9 The full form of DNA is:

- Ans
- 1. dyoxyenucleic acid
 - 2. deltanucleic acid
 - 3. deoxyribonucleic acid
 - 4. deoxyribeneutral acid

Question ID : 9895802968
Chosen Option : 4

Q.5
0 _____ is the primary sector of the Indian economy.

- Ans
- 1. Banking
 - 2. Judiciary
 - 3. Information and Technology
 - 4. Agriculture

Question ID : 9895802960
Chosen Option : 4

Q.5
1 A sum becomes ₹10650 in 5 years and ₹11076 in 6 years at simple interest. What is the sum?

- Ans
- 1. ₹8740
 - 2. ₹8946
 - 3. ₹8520
 - 4. ₹8800

Question ID : 9895804067
Chosen Option : 2

Q.5
2 If P is 40% less than Q, then Q is how much percentage more than P?

- Ans
- 1. 66.66%
 - 2. 60%
 - 3. 33.33%
 - 4. 40%

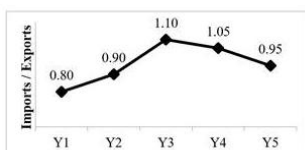
Question ID : 9895804061
Chosen Option : 2

Q.5
3 Anil, Deepak and Dinesh together can complete a work in 35 days. Anil and Dinesh together can complete the same work in 60 days. In how many days Deepak alone can complete the same work?

- Ans
- 1. 84 days
 - 2. 96 days
 - 3. 110 days
 - 4. 105 days

Question ID : 9895804070
Chosen Option : 2

Q.5
4 The line chart given below shows the ratio of imports to exports for a country for 5 consecutive years Y₁, Y₂, Y₃, Y₄ and Y₅.



If the exports for year Y₃ is ₹35000 crore, then what will be imports (in crores) for the year Y₃?

- Ans
- 1. ₹38500
 - 2. ₹35500
 - 3. ₹43500

4. ₹41500

Question ID : 9895804077
Chosen Option : 2

Q.5 Rajesh goes to his office at the speed of 25 km/hr and returns to his home at the speed of 20 km/hr. If he takes total 9 hours, then what is the distance between his office and home?

- Ans 1. 120 km
 2. 100 km
 3. 90 km
 4. 140 km

Question ID : 9895804072
Chosen Option : 4

Q.5 A alone can complete a work in 6 days and B alone can complete the same work in 8 days. In how many days both A and B together can complete the same work?

- Ans 1. 24/7 days
 2. 48/13 days
 3. 26/7 days
 4. 35/13 days

Question ID : 9895804069
Chosen Option : 2

Q.5 If cost price of an article is ₹220 and profit is 20%, then what will be the selling price of the article?

- Ans 1. ₹256
 2. ₹176
 3. ₹264
 4. ₹216

Question ID : 9895804062
Chosen Option : 1

Q.5 What is the value of $\left[10\frac{1}{3} \div \frac{5}{3}(10 + 14 \div 3 - 1)\right]$?

- Ans 1. $\frac{31}{85}$
 2. $\frac{93}{205}$
 3. $\frac{33}{50}$
 4. $\frac{29}{88}$

Question ID : 9895804056
Chosen Option : 2

Q.5 What is the Highest Common Factor of $2^3 \times 3^5$ and $3^3 \times 5^2$?

Ans

- 1. 3^3
- 2. $2^1 \times 3^3 \times 5^1$
- 3. $3^5 \times 5^2$
- 4. $2^3 \times 3^5 \times 5^2$

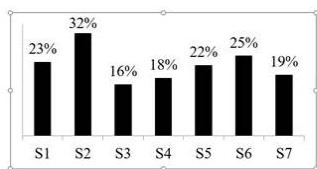
Question ID : 9895804054
Chosen Option : 1

Q.6 The height of a cone is 16 cm and radius of its base is 30 cm. If the rate of painting it is ₹14/cm², then what will be the total cost in painting the curved surface of cone from outside?

- Ans
- 1. ₹44880
 - 2. ₹36820
 - 3. ₹46540
 - 4. ₹42220

Question ID : 9895804075
Chosen Option : 2

Q.6 The bar chart given below shows the amount of sugar used in making 7 different varieties of sweets S1, S2, S3, S4, S5, S6 and S7 has been shown as a percentage of total weight of the sweet.



The total weight of sweet S4 is 150 kg. What is the amount of sugar used in sweet S4?

- Ans
- 1. 25 kg
 - 2. 27 kg
 - 3. 35 kg
 - 4. 31 kg

Question ID : 9895804078
Chosen Option : 3

Q.6 The length, breadth and height of a room is 21 metres, 12 metres and 16 metres. What will be the length of the largest rod that can be placed in that room?

- Ans
- 1. 31 metres
 - 2. 29 metres
 - 3. 32 metres
 - 4. 25 metres

Question ID : 9895804074
Chosen Option : 3

Q.6 A bag has ₹420 in the denomination of ₹1, ₹2 and ₹5 coins. The number ₹1, ₹2 and ₹5 coins are in the ratio of 8 : 1 : 5. How many coins of ₹5 are in the bag?

- Ans
- 1. 24
 - 2. 12
 - 3. 60
 - 4. 48

Question ID : 9895804064

Chosen Option : 3

Q.6
4 $u : v = 4 : 7$ and $v : w = 9 : 7$. If $u = 72$, then what is the value of w ?

- Ans
- 1. 63
 - 2. 49
 - 3. 98
 - 4. 77

Question ID : 9895804065

Chosen Option : 2

Q.6
5 What is the value of $5\frac{1}{2} - [3\frac{1}{4} + 6 - 4 \div 2]$?

- Ans
- 1. $\frac{5}{4}$
 - 2. $-\frac{7}{4}$
 - 3. $\frac{7}{4}$
 - 4. $-\frac{5}{4}$

Question ID : 9895804055

Chosen Option : 3

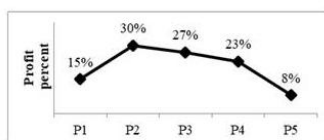
Q.6
6 If the length of the diagonal of a square is $10\sqrt{2}$ cm, then what will be area of the square?

- Ans
- 1. 50 cm^2
 - 2. 100 cm^2
 - 3. $100\sqrt{2} \text{ cm}^2$
 - 4. 200 cm^2

Question ID : 9895804073

Chosen Option : 3

Q.6
7 The line chart given below shows the profit percentage of a company on 5 different products P1, P2, P3, P4 and P5.



The revenue of product P3 is ₹38100. What is expenditure of product P3?

- Ans
- 1. ₹30000
 - 2. ₹32000
 - 3. ₹35000
 - 4. ₹29000

Question ID : 9895804076

Chosen Option : 2

Q.6 An article is sold for ₹4777 after giving discount of 15%. What is the marked price of article?

8

- Ans
- 1. ₹5348
 - 2. ₹5525
 - 3. ₹5494
 - 4. ₹5620

Question ID : 9895804059
Chosen Option : 2

Q.6 If Sonu is driving a car at a speed of 20 m/s, then in how much time Sonu will cover a distance of 936 km?

9

- Ans
- 1. 46.8 hr
 - 2. 13 hr
 - 3. 18 hr
 - 4. 21 hr

Question ID : 9895804071
Chosen Option : 1

Q.7 Manish purchased books at the rate of ₹225 per book and sold them at the rate of ₹162 per book. What will be the loss on selling 7 books?

0

- Ans
- 1. ₹441
 - 2. ₹63
 - 3. ₹315
 - 4. ₹28

Question ID : 9895804063
Chosen Option : 1

Q.7 A sum becomes 5 times of itself in 3 years at compound interest (interest is compounded annually). In how many years will the sum becomes 125 times of itself?

1

- Ans
- 1. 12
 - 2. 8
 - 3. 6
 - 4. 9

Question ID : 9895804068
Chosen Option : 3

Q.7 The average weight of a group of 22 students increases by 1 kg when the weight of the teacher is also included. If the initial average weight of the group of 22 students was 31 kg, then what is the weight of the teacher?

2

- Ans
- 1. 54 kg
 - 2. 48 kg
 - 3. 53 kg
 - 4. 57 kg

Question ID : 9895804057
Chosen Option : 2

Q.7 The price of two articles are in the ratio of 3 : 2 respectively. The price of first article is increased by 40% and the price of second article is decreased by x%. If the new ratio of the price of the two articles is 7 : 3 respectively, then what is the value of x?

3

- Ans
- 1. 10

2. 15

3. 30

4. 20

Question ID : 9895804066

Chosen Option : 3

Q.7 A bowler has taken 0, 3, 2, 1, 5, 3, 4, 5, 5, 2, 2, 0, 0, 1 and 2 wickets in 15 consecutive matches.

4

What is the mode of the given data?

Ans 1. 3

2. 0

3. 5

4. 2

Question ID : 9895804060

Chosen Option : 2

Q.7 If the average of five observations a_1, a_2, a_3, a_4 and a_5 is N , then what is the average of five new observations $a_1 - 100,$

5

$a_2 - 100, a_3 - 100, a_4 - 100$ and $a_5 - 100$?

Ans 1. $N - 40$

2. $N - 150$

3. $N - 100$

4. $N - 20$

Question ID : 9895804058

Chosen Option : 2

Section : English Language

Q.1 Select the most appropriate option to substitute the underlined segment in the given sentence. If there is no need to substitute it, select No Improvement.

Mumbai has a lot of heritage structures which badly need restoration.

Ans 1. few of

2. No improvement

3. lot of

4. many of

Question ID : 9895803567

Chosen Option : 4

Q.2 Select the antonym of the given word.

EMANCIPATION

Ans 1. bondage

2. riddance

3. liberty

4. freedom

Question ID : 9895803559

Chosen Option : 2

Q.3 Select the antonym of the given word.

AFFLICTION

- Ans
- 1. anguish
 - 2. discomfort
 - 3. agony
 - 4. pleasure

Question ID : 9895803560
Chosen Option : 3

Q.4 Select the option that means the same as the following phrase.

One who is outgoing

- Ans
- 1. extrovert
 - 2. vagabond
 - 3. explorer
 - 4. introvert

Question ID : 9895803564
Chosen Option : 1

Q.5 From the given options, identify the segment in the sentence which contains the grammatical error.

Many students thought that this year's question paper was very tough as compared to last year.

- Ans
- 1. Many students thought
 - 2. that this year's
 - 3. was very tough
 - 4. compared to last year

Question ID : 9895803544
Chosen Option : 1

Q.6 Select the synonym of the given word.

SUITABLE

- Ans
- 1. awkward
 - 2. ideal
 - 3. appropriate
 - 4. friendly

Question ID : 9895803557
Chosen Option : 3

Q.7 Select the most appropriate word to fill in the blank.

The judge found him _____ of murder.

- Ans
- 1. innocent

- 2. honest
- 3. guilty
- 4. criminal

Question ID : 9895803550
Chosen Option : 4

Q.8 Select the option that means the same as the given idiom.

To pay through the nose

- Ans
- 1. To pay excessively
 - 2. To pay reluctantly
 - 3. To pay willingly
 - 4. To pay easily

Question ID : 9895803562
Chosen Option : 3

Comprehension:

In the following passage some words have been deleted. Fill in the blanks with the help of the alternatives given.

Generations of women in the southern Indian state of Tamil Nadu have been diving to _____ (1) seaweed to help support their families _____ (2) women head to the sea on _____ (3) unique quest.

Clad in traditional saris and goggles, they _____ (4) into the ocean to collect coral and seaweed _____ (5) grow on underwater rocks. Seaweed is used in food and to make various drugs and chemicals.

SubQuestion No : 9

Q.9 Select the most appropriate option that will fill in the blank number 1.

- Ans
- 1. build
 - 2. collect
 - 3. grow
 - 4. assemble

Question ID : 9895803552
Chosen Option : 2

Comprehension:

In the following passage some words have been deleted. Fill in the blanks with the help of the alternatives given.

Generations of women in the southern Indian state of Tamil Nadu have been diving to _____ (1) seaweed to help support their families _____ (2) women head to the sea on _____ (3) unique quest.

Clad in traditional saris and goggles, they _____ (4) into the ocean to collect coral and seaweed _____ (5) grow on underwater rocks. Seaweed is used in food and to make various drugs and chemicals.

SubQuestion No : 10

Q.1
0 Select the most appropriate option that will fill in the blank number 2.

- Ans
- 1. Those
 - 2. These
 - 3. That
 - 4. This

Question ID : 9895803553
Chosen Option : 1

Comprehension:

In the following passage some words have been deleted. Fill in the blanks with the help of the alternatives given.

Generations of women in the southern Indian state of Tamil Nadu have been diving to _____ (1) seaweed to help support their families _____ (2) women head to the sea on _____ (3) unique quest.

Clad in traditional saris and goggles, they _____ (4) into the ocean to collect coral and seaweed _____ (5) grow on underwater rocks. Seaweed is used in food and to make various drugs and chemicals.

SubQuestion No : 11

Q.1
1 Select the most appropriate option that will fill in the blank number 3.

- Ans
- 1. any
 - 2. a
 - 3. an
 - 4. the

Question ID : 9895803554
Chosen Option : 1

Comprehension:

In the following passage some words have been deleted. Fill in the blanks with the help of the alternatives given.

Generations of women in the southern Indian state of Tamil Nadu have been diving to _____ (1) seaweed to help support their families _____ (2) women head to the sea on _____ (3) unique quest.

Clad in traditional saris and goggles, they _____ (4) into the ocean to collect coral and seaweed _____ (5) grow on underwater rocks. Seaweed is used in food and to make various drugs and chemicals.

SubQuestion No : 12

Q.1
2 Select the most appropriate option that will fill in the blank number 4.

- Ans
- 1. swim
 - 2. float
 - 3. fall

✓ 4. dive

Question ID : 9895803555
Chosen Option : 1

Comprehension:

In the following passage some words have been deleted. Fill in the blanks with the help of the alternatives given.

Generations of women in the southern Indian state of Tamil Nadu have been diving to _____ (1) seaweed to help support their families _____ (2) women head to the sea on _____ (3) unique quest.

Clad in traditional saris and goggles, they _____ (4) into the ocean to collect coral and seaweed _____ (5) grow on underwater rocks. Seaweed is used in food and to make various drugs and chemicals.

SubQuestion No : 13

Q.1
3 Select the most appropriate option that will fill in the blank number 5.

- Ans
- 1. what
 - 2. who
 - 3. which
 - 4. whom

Question ID : 9895803556
Chosen Option : 1

Q.1
4 From the given options, identify the segment in the sentence which contains the grammatical error.

He will not be able to attend the school function tomorrow, will you?

- Ans
- 1. to attend
 - 2. will you?
 - 3. the school function
 - 4. will not be

Question ID : 9895803545
Chosen Option : 2

Q.1
5 Select the correctly spelt word.

- Ans
- 1. Receit
 - 2. Reseipt
 - 3. Recipt
 - 4. Receipt

Question ID : 9895803565
Chosen Option : 4

Q.1
6 Select the most appropriate option to substitute the underlined segment in the given sentence. If there is no need to substitute it, select No Improvement.

The torch fall from his trembling hand and he ran wildly towards the school building.

- Ans
- 1. felled from his trembling hand

- 2. No improvement
- 3. fell from his trembling hand
- 4. falling from his trembling hand

Question ID : 9895803569
Chosen Option : 1

Q.1
7 Select the most appropriate word to fill in the blank.

1950 is _____ year in which India became a republic.

- Ans
- 1. one
 - 2. the
 - 3. a
 - 4. an

Question ID : 9895803548
Chosen Option : 3

Q.1
8 Select the most appropriate option to substitute the underlined segment in the given sentence. If there is no need to substitute it, select No Improvement.

A young taxi driver has claimed that a monster attacked him while he drove along a lonely road.

- Ans
- 1. No improvement
 - 2. as long as he drove
 - 3. while he was driving
 - 4. while he is driving

Question ID : 9895803568
Chosen Option : 3

Q.1
9 Select the correctly spelt word.

- Ans
- 1. Businnes
 - 2. Buisness
 - 3. Business
 - 4. Bussiness

Question ID : 9895803566
Chosen Option : 3

Q.2
0 Select the word which means the same as the group of words given.

One who talks a lot

- Ans
- 1. glutton
 - 2. loquacious
 - 3. gullible
 - 4. taciturn

Question ID : 9895803563
Chosen Option : 3

Q.2
1 Select the option that means the same as the given idiom.

To jump on the bandwagon

- Ans
- 1. To follow popular trends
 - 2. To fall into misfortune
 - 3. To run after the unachievable
 - 4. To take a calculated risk

Question ID : 9895803561
Chosen Option : 4

Q.2
2 Select the most appropriate word to fill in the blank.

Shall we _____ his invitation to dinner.

- Ans
- 1. expect
 - 2. except
 - 3. accept
 - 4. agree

Question ID : 9895803549
Chosen Option : 2

Q.2
3 Select the synonym of the given word.

MAGNIFICENT

- Ans
- 1. grand
 - 2. expensive
 - 3. huge
 - 4. modest

Question ID : 9895803558
Chosen Option : 3

Q.2
4 Select the most appropriate word to fill in the blank.

Let's go out now. It isn't _____ anymore.

- Ans
- 1. raining
 - 2. rained
 - 3. rain
 - 4. rains

Question ID : 9895803547
Chosen Option : 3

Q.2
5 From the given options, identify the segment in the sentence which contains the grammatical error.

The TV anchor insisted on me to participate in the debate.

- Ans
- 1. to participate
 - 2. in the debate

3. insisted on me
 4. The TV anchor

Question ID : 9895803546
Chosen Option : 4

Section : Hindi Language

Q.1 दिये गये वाक्यांश के लिए एक शब्द चुनिए ।

जो जन्म से अंधा हो

- Ans 1. जन्मांध
 2. दुष्टांध
 3. कृपांध
 4. अंधभक्त

Question ID : 9895803436
Chosen Option : --

Q.2 सही वर्तनी वाले शब्द का चयन करें।

- Ans 1. शोकाकुल
 2. शोककुल
 3. शौकाकुल
 4. शौककुल

Question ID : 9895803439
Chosen Option : --

Q.3 दिए गए शब्द के पर्यायवाची शब्द का चयन करें।

अर्जुन

- Ans 1. जगदीश
 2. कोविंद
 3. शमशीर
 4. धनंजय

Question ID : 9895803432
Chosen Option : --

Q.4 रिक्त स्थान को भरने के लिए सबसे उपयुक्त शब्द का चयन करें।

मेरी बस _____ गई थी।

- Ans 1. सो
 2. मर

✗ 3. छूट

✗ 4. उड़

Question ID : 9895803421

Chosen Option : --

Q.5 रिक्त स्थान को भरने के लिए सबसे उपयुक्त शब्द का चयन करें।

आकाश में _____ चमक रहा है।

Ans ✓ 1. सोना

✗ 2. बादल

✗ 3. तारा

✗ 4. चाँदी

Question ID : 9895803420

Chosen Option : --

Q.6 दिए गए वाक्य में रेखांकित खंड को प्रतिस्थापित करने के लिए सबसे उपयुक्त विकल्प का चयन करें।

कन्या की सुपात्रता का मापदंड केवल दहेज के स्वरूप से तय करना जाने लगा है।

Ans ✗ 1. स्वरूप से तय करने जाने लगे हैं।

✗ 2. स्वरूप से तय करने जाने लगे है।

✓ 3. स्वरूप से तय किया जाने लगा है।

✗ 4. स्वरूप से तय हुआ जाने लगा है।

Question ID : 9895803417

Chosen Option : --

Q.7 सही वर्तनी वाले शब्द का चयन करें।

Ans ✓ 1. मोखिक

✗ 2. मौकिख

✗ 3. मौखीक

✗ 4. मौखिक

Question ID : 9895803438

Chosen Option : --

Q.8 रिक्त स्थान को भरने के लिए सबसे उपयुक्त शब्द का चयन करें।

बूढ़ा आदमी अपने _____ से दुःखी है।

Ans ✗ 1. जवानी

✓ 2. बचपन

✗ 3. प्रशंसा

✗ 4. बुढ़ापे

Question ID : 9895803422

Chosen Option : --

Q.9 दिए गए वाक्य में रेखांकित खंड को प्रतिस्थापित करने के लिए सबसे उपयुक्त विकल्प का चयन करें।

गणतन्त्र दिवस की परेड में सैनिक कदम तालें कर रहे हैं।

Ans

- ✓ 1. सैनिक कदमों-ताल कर रहे हैं।
 ✗ 2. सैनिक कदम-ताल कर रहे हैं।
 ✗ 3. सैनिक कदमों तालों कर रहा है।
 ✗ 4. सैनिक कदम तालों कर रहा है।

Question ID : 9895803418

Chosen Option : --

Q.1 रिक्त स्थान को भरने के लिए सबसे उपयुक्त शब्द का चयन करें।

वसंत पंचमी के दिन देवी से _____ की जाती है।

Ans

- ✗ 1. प्रसन्नता
 ✓ 2. आवाहन
 ✗ 3. प्रार्थना
 ✗ 4. पूजा

Question ID : 9895803423

Chosen Option : --

Q.1 दिए गए वाक्य का वह भाग ज्ञात करें जिसमें कोई त्रुटि है।

मोहन ने रुपयों का प्रबन्ध अपनी पत्नी की गहने बेच कर किया।

Ans

- ✗ 1. रुपयों का प्रबन्ध
 ✗ 2. बेच कर किया
 ✓ 3. मोहन ने
 ✗ 4. अपनी पत्नी की गहने

Question ID : 9895803414

Chosen Option : --

Q.1 निम्नलिखित में से उस विकल्प का चयन करें जो 'अंधे के हाथ बटेर लगना' मुहावरे का अर्थ व्यक्त करता है।

Ans

- ✗ 1. सफल होना
 ✗ 2. बिना प्रयास के कीमती वस्तु मिल जाना
 ✗ 3. अयोग्य होना
 ✓ 4. प्रयास से कीमती वस्तु मिलना

Question ID : 9895803435

Chosen Option : --

Q.1
3

दिये गये वाक्यांश के लिए एक शब्द चुनिए ।

जो मोक्ष चाहता हो

- Ans
- 1. मोक्षप्रिय
 - 2. अमोक्षीय
 - 3. मुमुक्षु
 - 4. मोक्षालु

Question ID : 9895803437
Chosen Option : --

Q.1 निम्नलिखित में से उस विकल्प का चयन करें जो 'अंग-अंग ढीला होना' मुहावरे का अर्थ व्यक्त करता है।

- Ans
- 1. हार जाना
 - 2. अत्यधिक थक जाना
 - 3. निराश होना
 - 4. दुखी होना

Question ID : 9895803434
Chosen Option : --

Q.1 दिए गए शब्द का विलोम चुनें।

योग्य

- Ans
- 1. मूर्ख
 - 2. अयोग्य
 - 3. सौभाग्य
 - 4. सुयोग्य

Question ID : 9895803430
Chosen Option : --

Comprehension:

दिए गए अनुच्छेद में कुछ शब्द हटा दिए गए हैं। दिए गए विकल्पों की सहायता से रिक्त स्थान भरें। प्रत्येक संख्या के लिए सबसे उपयुक्त विकल्प का चयन करें।

आज अनेक भाषाओं में अनेक समाचार-पत्र बाजार में उपलब्ध हैं। मनुष्य की _____ (1) विशेषता है उसका _____ (2) होना। रात्रि में वह चैन की नींद सोकर प्रातः काल उठता है तो शीघ्र ही अपने आस-पास के वातावरण के बारे में जानने का _____ (3) करता है। चाय की _____ (4) के साथ देश - विदेश की खबरों को जानने के लिए वह _____ (5) का सहारा लेता है।

SubQuestion No : 16

Q.1 गद्यांश में संकेतित रिक्त स्थान (1) के लिए उपयुक्त शब्द होगा -

- Ans
- 1. आराम
 - 2. व्यक्ति
 - 3. नींद
 - 4. स्वभावगत

Question ID : 9895803425
Chosen Option : --

Comprehension:

दिए गए अनुच्छेद में कुछ शब्द हटा दिए गए हैं। दिए गए विकल्पों की सहायता से रिक्त स्थान भरें। प्रत्येक संख्या के लिए सबसे उपयुक्त विकल्प का चयन करें।

आज अनेक भाषाओं में अनेक समाचार-पत्र बाजार में उपलब्ध हैं। मनुष्य की _____ (1) विशेषता है उसका _____ (2) होना। रात्रि में वह चैन की नींद सोकर प्रातः काल उठता है तो शीघ्र ही अपने आस-पास के वातावरण के बारे में जानने का _____ (3) करता है। चाय की _____ (4) के साथ देश - विदेश की खबरों को जानने के लिए वह _____ (5) का सहारा लेता है।

SubQuestion No : 17

Q.1
7 गद्यांश में संकेतित रिक्त स्थान (2) के लिए उपयुक्त शब्द होगा -

- Ans
- 1. जिज्ञासु
 - 2. संपादक
 - 3. संकेत
 - 4. बिक्री

Question ID : 9895803426
Chosen Option : --

Comprehension:

दिए गए अनुच्छेद में कुछ शब्द हटा दिए गए हैं। दिए गए विकल्पों की सहायता से रिक्त स्थान भरें। प्रत्येक संख्या के लिए सबसे उपयुक्त विकल्प का चयन करें।

आज अनेक भाषाओं में अनेक समाचार-पत्र बाजार में उपलब्ध हैं। मनुष्य की _____ (1) विशेषता है उसका _____ (2) होना। रात्रि में वह चैन की नींद सोकर प्रातः काल उठता है तो शीघ्र ही अपने आस-पास के वातावरण के बारे में जानने का _____ (3) करता है। चाय की _____ (4) के साथ देश - विदेश की खबरों को जानने के लिए वह _____ (5) का सहारा लेता है।

SubQuestion No : 18

Q.1
8 गद्यांश में संकेतित रिक्त स्थान (3) के लिए उपयुक्त शब्द होगा -

- Ans
- 1. प्रयास
 - 2. अनुभव

3. खबर

4. प्रतीक्षा

Question ID : 9895803427

Chosen Option : --

Comprehension:

दिए गए अनुच्छेद में कुछ शब्द हटा दिए गए हैं। दिए गए विकल्पों की सहायता से रिक्त स्थान भरें। प्रत्येक संख्या के लिए सबसे उपयुक्त विकल्प का चयन करें।

आज अनेक भाषाओं में अनेक समाचार-पत्र बाजार में उपलब्ध हैं। मनुष्य की _____ (1) विशेषता है उसका _____ (2) होना। रात्रि में वह चैन की नींद सोकर प्रातः काल उठता है तो शीघ्र ही अपने आस-पास के वातावरण के बारे में जानने का _____ (3) करता है। चाय की _____ (4) के साथ देश - विदेश की खबरों को जानने के लिए वह _____ (5) का सहारा लेता है।

SubQuestion No : 19

Q.1 गद्यांश में संकेतित रिक्त स्थान (4) के लिए उपयुक्त शब्द होगा -

- Ans
- 1. चुस्कियों
 - 2. बरतन
 - 3. टुकड़ों
 - 4. कपड़ों

Question ID : 9895803428

Chosen Option : --

Comprehension:

दिए गए अनुच्छेद में कुछ शब्द हटा दिए गए हैं। दिए गए विकल्पों की सहायता से रिक्त स्थान भरें। प्रत्येक संख्या के लिए सबसे उपयुक्त विकल्प का चयन करें।

आज अनेक भाषाओं में अनेक समाचार-पत्र बाजार में उपलब्ध हैं। मनुष्य की _____ (1) विशेषता है उसका _____ (2) होना। रात्रि में वह चैन की नींद सोकर प्रातः काल उठता है तो शीघ्र ही अपने आस-पास के वातावरण के बारे में जानने का _____ (3) करता है। चाय की _____ (4) के साथ देश - विदेश की खबरों को जानने के लिए वह _____ (5) का सहारा लेता है।

SubQuestion No : 20

Q.2 गद्यांश में संकेतित रिक्त स्थान (5) के लिए उपयुक्त शब्द होगा -

- Ans
- 1. फिल्मों
 - 2. समाचार पत्र
 - 3. गानों
 - 4. खेलों

Question ID : 9895803429
Chosen Option : --

Q.2
1 दिए गए वाक्य का वह भाग ज्ञात करें जिसमें कोई त्रुटि है।

हम जानते हैं कि परिश्रम का फल सदा ही मीठा होती है।

- Ans
- 1. हम जानते हैं कि
 - 2. सदा ही
 - 3. परिश्रम का फल
 - 4. मीठा होती है।

Question ID : 9895803416
Chosen Option : --

Q.2
2 दिए गए शब्द के पर्यायवाची शब्द का चयन करें।

कुबेर

- Ans
- 1. यक्षराज
 - 2. गिरिराज
 - 3. महाराज
 - 4. यमराज

Question ID : 9895803433
Chosen Option : --

Q.2
3 दिए गए वाक्य का वह भाग ज्ञात करें जिसमें कोई त्रुटि है।

आजकल तापमान में तेजी से परिवर्तन हो रही है।

- Ans
- 1. तेजी से
 - 2. आजकल
 - 3. तापमान में
 - 4. परिवर्तन हो रही है।

Question ID : 9895803415
Chosen Option : --

Q.2
4 दिए गए वाक्य में रेखांकित खंड को प्रतिस्थापित करने के लिए सबसे उपयुक्त विकल्प का चयन करें।

शीला मेरी बहन है, वह बच्चों के साथ खेल रहा है।

- Ans
- 1. बच्चों से साथ खेल रही है।
 - 2. बच्चों के साथ खेल रही है।
 - 3. बच्चों को साथ खेल रही है।
 - 4. बच्चों के साथ खेल रहे हैं।

Question ID : 9895803419
Chosen Option : --

Q.2
5 दिए गए शब्द का विलोम चुनें।

यश

Ans

- 1. नीरव
- 2. सुयश
- 3. अपयश
- 4. नीरस

Question ID : 9895803431
Chosen Option : --

GovtJobsAlert.In