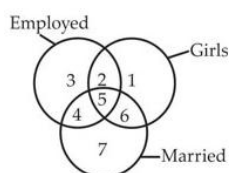


## Constable (GD) in CAPFs, NIA, SSF and Rifleman (GD) in Assam Rifles Examination, 2018

Roll No. :	<a href="http://www.GovtJobsAlert.In">www.GovtJobsAlert.In</a>
Registration No.	
Name :	
Exam Venue :	Arya College of Engineering and Information Technology
Exam Time :	4:00 PM - 5:30 PM
Exam Date :	11/03/2019

Section : General Section

**Q.1** Study the diagram below and identify the region representing girls who are employed but unmarried.



- Ans
- 1. 2
  - 2. 4
  - 3. 1
  - 4. 5

Question ID : 9895809397  
Chosen Option : 1

**Q.2** A, B, C, D and E are sitting in a row. C is between D and A, E is neither at the end, nor next to D and is to the left of B who is last. Who is to the right of D?

- Ans
- 1. B
  - 2. E
  - 3. A
  - 4. C

Question ID : 9895809381  
Chosen Option : 4

**Q.3** The statements below are followed by two conclusions labeled I and II. Assuming that the information in the statements is true, even if it appears to be at variance with generally established facts, decide which conclusion(s) logically and definitely follow(s) from the information given in the statements.

Statement 1 : All shells are skins.

Statement 2 : No skins are cats.

Conclusion I : No shells are cats.

Conclusion II : Some skins are shells.

- Ans
- 1. Neither I nor II follows
  - 2. Only conclusion I follows
  - 3. Both I and II follow
  - 4. Only conclusion II follows

Question ID : 9895809384

Chosen Option : 2

Q.4 Choose the option which completes the given figure series



Ans



Question ID : 9895809392  
Chosen Option : 3

Q.5 Four words have been given, out of which three are alike in some manner, while one is different. Choose the odd one.

Ans

1. Scarf

2. Sweater

3. Sunglass

4. Gloves

Question ID : 9895809375  
Chosen Option : 3

Q.6 Four letter clusters have been given, out of which three are alike in some manner, while one is different. Choose the odd one

Ans

1. RSU

2. YAC

3. LNP

4. CEG

Question ID : 9895809374  
Chosen Option : 1

Q.7 A, O, M, H, K and U are sitting in a circle facing the centre. A is NOT sitting next to M or U, U is to the right of H, K is to the left of M, who is opposite O. Who is to the right of O?

Ans

1. H

2. A

3. K

4. U

Question ID : 9895809382  
Chosen Option : 1

Q.8

Choose the option figure in which the problem figure is hidden/embedded.

Question figure:



Ans

✓ 1.



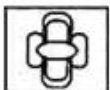
✗ 2.



✗ 3.



✗ 4.



Question ID : 9895809394  
Chosen Option : 1

Q.9 Select the correct option that will fill in the blank and complete the series.

1024, ?, 1600, 2000, 2500, 3125

Ans

✗ 1. 1350

✗ 2. 1440

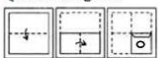
✓ 3. 1280

✗ 4. 1125

Question ID : 9895809387  
Chosen Option : 3

Q.1 In the following questions a piece of paper is folded in the manner shown in the question figure(s). Select the figure out of the answer choices showing the unfolded pattern after the punches (cut).

Question figure:



Ans

✗ 1.



✓ 2.



✗ 3.



✗ 4.



Question ID : 9895809396  
Chosen Option : 2

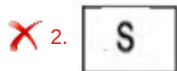
Q.1 Choose the option that most closely resembles the mirror image of the given figure when mirror is placed at right side.

1

Question figure:



Ans



Question ID : 9895809395  
Chosen Option : 3

Q.1 Some boys are sitting in a row facing north. Ganesh is 7th on the left of Akshit. Vinay, who is 20th in the row from left, is 7th on the right of Akshit. If Kamal, who is third on the right of Ganesh, is 20th in the row from right, how many boys are there in the row?

2

- Ans
- 1. 26
  - 2. 28
  - 3. 31
  - 4. 30

Question ID : 9895809383  
Chosen Option : 2

Q.1 Select the option that is related to the third term in the same way as the second term is related to the first term.

3

Pen : Write :: Knife : \_\_\_\_\_

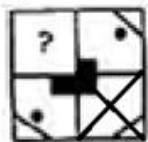
- Ans
- 1. Cut
  - 2. Shoot
  - 3. Blood
  - 4. Vegetable

Question ID : 9895809376  
Chosen Option : 1

Q.1 Which of the following answer figure will complete the given figure?

4

Question figure



Ans





Question ID : 9895809393  
Chosen Option : 1

Q.1 Select the option that is related to the third term in the same way as the second term is related to the first term.  
5

TSQ : JHG :: LTM : ?

- Ans
- 1. FBC
  - 2. ACD
  - 3. UVO
  - 4. NGO

Question ID : 9895809378  
Chosen Option : 4

Q.1 Select the correct option that will fill in the blank and complete the series.  
6

LM, QR, VW, \_\_\_\_\_

- Ans
- 1. UK
  - 2. AB
  - 3. AD
  - 4. SM

Question ID : 9895809373  
Chosen Option : 2

Q.1 Select the correct combination of mathematical signs to replace '\*\*' signs and to balance the given equation:  
7

$96 * 2 * 20 * 2 * 174$

- Ans
- 1.  $\times - + =$
  - 2.  $\div \times + =$
  - 3.  $- + \times =$
  - 4.  $+ + \div =$

Question ID : 9895809391  
Chosen Option : 1

Q.1 Select the option that is related to the third term in the same way as the second term is related to the first term.  
8

4896 : 3785 :: 7852 : ?

- Ans
- 1. 4519
  - 2. 6741
  - 3. 5630
  - 4. 3438

Question ID : 9895809388  
Chosen Option : 2

Q.1 If MUNREB is written as 628146 and IESRES as 345145, how will SERBER be written?  
9

- Ans
- 1. 541641

2. 541164

3. 451146

4. 541146

Question ID : 9895809380

Chosen Option : 1

Q.2 Four options have been given out of which three are alike in some manner, while one is different. Choose the odd one.

0

Ans  1. 97

2. 135

3. 167

4. 199

Question ID : 9895809389

Chosen Option : 2

Q.2 Select the option that is related to the third term in the same way as the second term is related to the first term.

1

Telephone : Communication :: Radio : \_\_\_\_\_

Ans  1. Broadcast

2. Story

3. Art

4. Character

Question ID : 9895809377

Chosen Option : 1

Q.2 In the question two statements are given, followed by three conclusions, I, II and III. Assuming that the information in

2

the statements is true, even if it appears to be at variance with generally established facts, decide which conclusion(s) logically and definitely follow(s) from the information given in the statements.

Statement 1 : All tigers are cats.

Statement 2 : All cats are felines.

Conclusion I : Some felines are tigers.

Conclusion II : All tigers are felines.

Conclusion III : Some felines are cats.

Ans  1. Only conclusion III follows

2. All conclusions I, II and III follows

3. Only conclusion I and III follows

4. Only conclusion I follows

Question ID : 9895809385

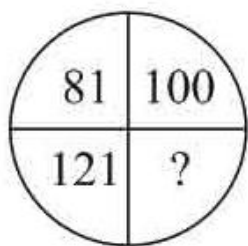
Chosen Option : 2

Q.2

3



Find the missing number from the below options.



- Ans
- 1. 225
  - 2. 144
  - 3. 256
  - 4. 169

Question ID : 9895809390  
Chosen Option : 2

Q.2  
4 In a certain code, COLD is coded as GSPH, then how is NOT coded in the same way?

- Ans
- 1. RSX
  - 2. XRS
  - 3. RSY
  - 4. XSR

Question ID : 9895809379  
Chosen Option : 1

Q.2  
5 Select the correct option that will fill in the blank and complete the series.

-1, 2, 7, ?, 23, 34

- Ans
- 1. 13
  - 2. 19
  - 3. 14
  - 4. 15

Question ID : 9895809386  
Chosen Option : 3

Q.2  
6 Which of the following was the first Law Minister of Independent India?

- Ans
- 1. Jawaharlal Nehru
  - 2. Abul Kalam Azad
  - 3. Bhimrao Ramji Ambedkar
  - 4. Asaf Ali

Question ID : 9895809561  
Chosen Option : 4

Q.2  
7 Photosynthesis in plants converts light energy to \_\_\_\_\_ energy.

- Ans
- 1. thermal
  - 2. chemical

- 3. kinetic
- 4. physical

Question ID : 9895809565  
Chosen Option : 4

Q.2  
8 The major gap in the Western Ghats is at:

- Ans
- 1. Palghat
  - 2. Mangalore
  - 3. Madurai
  - 4. Manipal

Question ID : 9895809569  
Chosen Option : 3

Q.2  
9 The 'Ghumura' dance is from the state of:

- Ans
- 1. Punjab
  - 2. Odisha
  - 3. Tamil Nadu
  - 4. Kerala

Question ID : 9895809548  
Chosen Option : 1

Q.3  
0 'Matki' is a form of dance from the state of:

- Ans
- 1. Kerala
  - 2. Gujarat
  - 3. Madhya Pradesh
  - 4. West Bengal

Question ID : 9895809549  
Chosen Option : 3

Q.3  
1 The Chola Empire of the South emerged in the:

- Ans
- 1. 9<sup>th</sup> century BC
  - 2. 19<sup>th</sup> century AD
  - 3. 9<sup>th</sup> century AD
  - 4. 17<sup>th</sup> century AD

Question ID : 9895809570  
Chosen Option : 2

Q.3  
2 In the 2016 Olympics men's singles badminton title was won by:

- Ans
- 1. Lee Chong Wei
  - 2. Kidambi Srikanth



3. Chen Long

4. Lin Dan

Question ID : 9895809551

Chosen Option : 2

Q.3  
3 The British ruled India for nearly:

Ans  1. 50 years

2. 200 years

3. 100 years

4. 500 years

Question ID : 9895809571

Chosen Option : 2

Q.3  
4 Where did the Chipko movement first start in India?

Ans  1. Tamil Nadu

2. Maharashtra

3. Karnataka

4. Uttar Pradesh

Question ID : 9895809572

Chosen Option : 2

Q.3  
5 A person who advocates separation of the state from religious institutions is called a \_\_\_\_\_.

Ans  1. Communalist

2. Secularist

3. Socialist

4. Feminist

Question ID : 9895809560

Chosen Option : 3

Q.3  
6 The Prime Minister who led India during the 1965 war with Pakistan is:

Ans  1. Morarji Desai

2. Indira Gandhi

3. Lal Bahadur Shastri

4. Jawaharlal Nehru

Question ID : 9895809555

Chosen Option : 2

Q.3  
7 Which is one of the factors of subsistence used to measure the Poverty Line in India?

Ans  1. Equality

2. Education

3. Internet

4. Transportation

Question ID : 9895809557  
Chosen Option : 1

Q.3  
8 The men's title of the 2018 Australian Open Tennis Championship, \_\_\_\_\_ was won by.

- Ans
- 1. Rafael Nadal
  - 2. Roger Federer
  - 3. Stan Warwinka
  - 4. Andy Murray

Question ID : 9895809552  
Chosen Option : 2

Q.3  
9 The 2017 Sahitya Academy award for Bengali was won by:

- Ans
- 1. Himanshu Bose
  - 2. Afsar Ahmed
  - 3. Ramesh Megh
  - 4. David Bhattacharya

Question ID : 9895809553  
Chosen Option : 1

Q.4  
0 The Goods and Services Tax allowed India to become:

- Ans
- 1. An East and a West market
  - 2. A common market
  - 3. A set of separate markets
  - 4. A South and a North market

Question ID : 9895809559  
Chosen Option : 2

Q.4  
1 Which of the following is not a Metamorphic rock?

- Ans
- 1. Gnesis
  - 2. Marble
  - 3. Slate
  - 4. Limestone

Question ID : 9895809563  
Chosen Option : 1

Q.4  
2 The Aga Khan palace is located in the state of:

- Ans
- 1. Maharashtra
  - 2. Uttar Pradesh
  - 3. Kerala
  - 4. Madhya Pradesh

Question ID : 9895809550  
Chosen Option : 2

Q.4  
3 A stain of curry on a white cloth become reddish brown when soap is used because the soap is:

- Ans
- 1. Neutral in nature
  - 2. Acidic in nature
  - 3. Alkaline in nature
  - 4. Basic in nature

Question ID : 9895809564  
Chosen Option : 2

Q.4  
4 Which is the deepest lake in the world?

- Ans
- 1. Lake Tanganyika
  - 2. Lake Vostok
  - 3. Lake Baikal
  - 4. Lake Superior

Question ID : 9895809567  
Chosen Option : 1

Q.4  
5 An ecosystem consists of:

- Ans
- 1. Chemical and physical components
  - 2. Biotic and abiotic components
  - 3. Physical and social components
  - 4. Biotic and antibiotic components

Question ID : 9895809568  
Chosen Option : 1

Q.4  
6 Leguminous plants replenish the soil by the presence of \_\_\_\_\_.

- Ans
- 1. Firmicutes
  - 2. Spirochaete
  - 3. Rhizobium
  - 4. Aquificae

Question ID : 9895809566  
Chosen Option : 3

Q.4  
7 The process of \_\_\_\_\_ is used to increase shelf life of milk by destroying disease causing microorganisms.

- Ans
- 1. pasteurisation
  - 2. evaporation
  - 3. condensation
  - 4. hydrogenation

Question ID : 9895809562  
Chosen Option : 2

Q.4  
8 The railway budget is:

- Ans  1. Part of the Central budget  
 2. Part of the States budget  
 3. Separate from the Central as well as State budget  
 4. Separate from the Central budget

Question ID : 9895809558  
Chosen Option : 3

Q.4 The reign of the \_\_\_\_\_ dynasty has been described as the golden age of Indian civilization.

- Ans  1. Porus  
 2. Harsha  
 3. Buddha  
 4. Gupta

Question ID : 9895809554  
Chosen Option : 3

Q.5 In which year was The Reserve Bank of India was established?

- Ans  1. 1926  
 2. 1947  
 3. 1950  
 4. 1952

Question ID : 9895809556  
Chosen Option : 4

Q.5 The cost price of 27 articles is same as the selling price of 18 articles. What is the profit percent?

- Ans  1. 40%  
 2. 50%  
 3. 30%  
 4. 25%

Question ID : 9895809733  
Chosen Option : 1

Q.5 A train 400 m long passes a pole in 20 seconds. What is the speed of the train?

- Ans  1. 70 km/hr  
 2. 72 km/hr  
 3. 68 km/hr  
 4. 64 km/hr

Question ID : 9895809743  
Chosen Option : 2

Q.5 A discount of 20% in the price of rice enables X to buy 5 kg more rice for ₹100. What is the reduced price of rice per kg?

- Ans  1. ₹3  
 2. ₹2

3. ₹1

4. ₹4

Question ID : 9895809728

Chosen Option : 4

Q.5 A and B can together complete a task 40 days. They worked together for 30 days and then B left. A finished the remaining task in next 22 days. In how many days A alone can finish the task?

Ans  1. 48 days

2. 88 days

3. 30 days

4. 40 days

Question ID : 9895809742

Chosen Option : 2

Q.5 A hollow copper pipe is 22 cm long and its external diameter is 28 cm. If the thickness of the pipe is 3 cm and iron weighs  $8.5 \text{ g/cm}^3$ , then the weight of the pipe is closest to:

Ans  1. 34 kg

2. 44 kg

3. 14 kg

4. 24 kg

Question ID : 9895809738

Chosen Option : 1

Q.5 The least number that should be added to 2,397 so that the sum is exactly divisible by 3, 4, 5 and 6?

Ans  1. 6

2. 4

3. 5

4. 3

Question ID : 9895809730

Chosen Option : 4

Q.5 The median of 31, 25, 17, 23, 45 and 59 is:

Ans  1. 23

2. 25

3. 31

4. 28

Question ID : 9895809729

Chosen Option : 2

Q.5 Excluding stoppages, the speed of a bus is 70 kmph and including stoppages, it is 56 kmph. For how many minutes does the bus stop per hour?

Ans  1. 10 min

2. 8 min

3. 15 min

4. 12 min



Question ID : 9895809744  
Chosen Option : 1

Q.5 A and B can complete a task in 40 days and 16 days respectively. A started the task alone and then after 12 days B joined him till the completion of the task. How long did the task last after B joined the task?

- Ans
- 1. 8 days
  - 2. 6 days
  - 3. 14 days
  - 4. 12 days

Question ID : 9895809741  
Chosen Option : 3

Q.6 A sum of money amounted to ₹720 in 2 years and ₹792 in 3 years when interest is compounded annually. The annual rate of interest, (in %) is:

- Ans
- 1. 5%
  - 2. 7.50%
  - 3. 7%
  - 4. 10%

Question ID : 9895809727  
Chosen Option : 2

Q.6 In X's opinion, his weight is greater than 60 kg but less than 68 kg, Y doesn't agree with him and says that X's weight is more than 62 kg but less than 70 kg. The mother of X believes that the weight of X is greater than 64 kg. If all of them are correct in their estimation, then what is the average of different probable weights of X, if the weight is in integer?

- Ans
- 1. 68 kg
  - 2. 67 kg
  - 3. 66 kg
  - 4. 65 kg

Question ID : 9895809724  
Chosen Option : 3

Q.6 The ratio of the number of boys and girls in a college is 6 : 7. If the percentage increase in the number of boys and girls be 20% and 10% respectively, what will be the new ratio?

- Ans
- 1. 72 : 77
  - 2. 35 : 36
  - 3. 36 : 35
  - 4. 77 : 72

Question ID : 9895809735  
Chosen Option : 3

Q.6 A right triangle with sides 5 cm, 12 cm and 13 cm is rotated about the side 12 cm to form a cone. The volume of the cone so formed is:

- Ans
- 1.  $81 \pi \text{ cm}^3$
  - 2.  $100 \pi \text{ cm}^3$
  - 3.  $91 \pi \text{ cm}^3$
  - 4.  $110 \pi \text{ cm}^3$



Question ID : 9895809740

Chosen Option : 3

Q.6  
4 The value of  $64 \div 2 \times (9 \div 3) \times 3 \div 9 - 32$  is:

- Ans
- 1. 1
  - 2. 0
  - 3. -1
  - 4. 2

Question ID : 9895809726

Chosen Option : 4

Q.6  
5 The average weight of 8 people increases by 2.5 kg when a new person comes in place of one of them weighing 75 kg. What is the weight of the new person?

- Ans
- 1. 95 kg
  - 2. 75 kg
  - 3. 85 kg
  - 4. 65 kg

Question ID : 9895809723

Chosen Option : 3

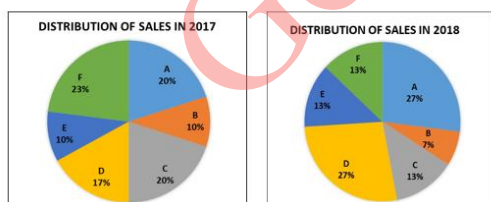
Q.6  
6 How much time will it take for an amount of ₹360 to yield ₹72 as interest at 5% p.a. of simple interest?

- Ans
- 1. 3 years
  - 2. 4 years
  - 3. 2.5 years
  - 4. 3.5 years

Question ID : 9895809737

Chosen Option : 1

Q.6  
7 The pie charts show the market share of companies in the rice market in 2017 and 2018. The value of sales of Company A in 2017 was ₹40 lakhs. If its sales grew by 25% in 2018, what was approximate value of sales of company B in 2018?



- Ans
- 1. ₹12.56 lakhs
  - 2. ₹13.96 lakhs
  - 3. ₹12.96 lakhs
  - 4. ₹13.56 lakhs

Question ID : 9895809747

Chosen Option : 2

Q.6  
8 The value of  $24 \div 4 \times (3 + 3) \div 2$  is:

- Ans
- 1. 22

- 2. 24
- 3. 20
- 4. 18

Question ID : 9895809725  
Chosen Option : 4

Q.6 120 men consume 720 kg of rice in 30 days. In how many days can 90 men consume 270 kg?

- Ans
- 1. 18
  - 2. 12
  - 3. 9
  - 4. 15

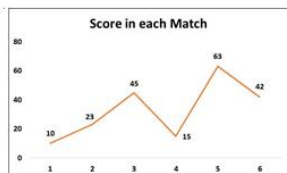
Question ID : 9895809734  
Chosen Option : 1

Q.7 Two students appeared for an examination. One student who scored 20 marks more than the other, his score was 60% of the sum of their marks. What was his score?

- Ans
- 1. 80
  - 2. 20
  - 3. 40
  - 4. 60

Question ID : 9895809731  
Chosen Option : 3

Q.7 The line graph shows the scores of a batsman in 6 consecutive matches. What is the range of his scores?



- Ans
- 1. 53
  - 2. 43
  - 3. 41
  - 4. 51

Question ID : 9895809745  
Chosen Option : 3

Q.7 An article was sold for ₹4,000. Had a discount of 10% was being offered, the profit would have been 20%. The cost price of the article was:

- Ans
- 1. ₹3,200
  - 2. ₹3,310
  - 3. ₹3,000
  - 4. ₹3,600

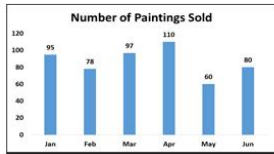
Question ID : 9895809732  
Chosen Option : 4

Q.7 The slant height of a right circular cone is 15 m and its height is 9 m. The area of its curved surface, is:

- Ans
- 1.  $169 \pi m^2$
  - 2.  $172 \pi m^2$
  - 3.  $165 \pi m^2$
  - 4.  $180 \pi m^2$

Question ID : 9895809739  
Chosen Option : 2

Q.7 The bar graph shows the number of paintings sold by an art gallery in each month from January to June. How many paintings does it need to sell in July for the 7 month average to be 90?



- Ans
- 1. 115
  - 2. 85
  - 3. 90
  - 4. 110

Question ID : 9895809746  
Chosen Option : 3

Q.7 In a bag there are coins of 25 paise, 50 paise and 1 rupee in the ratio of 3 : 4 : 5. If there are in all ₹31, then how many 1 rupee coins are there in the bag?

- Ans
- 1. 12
  - 2. 16
  - 3. 24
  - 4. 20

Question ID : 9895809736  
Chosen Option : 4

Section : English Language

Q.1 Select the most appropriate option to substitute the underlined segment in the given sentence. If there is no need to substitute it, select No substitution required.

When the vegetation is altered, the animal life also changed.

- Ans
- 1. No substitution required
  - 2. also changes
  - 3. changed
  - 4. is changing

Question ID : 9895809908  
Chosen Option : 1

Q.2 Select the most appropriate option to substitute the underlined segment in the given sentence. If there is no need to substitute it, select No substitution required.

The greed of human beings leads to over utilization of natural resources.

- Ans
- 1. leads for
  - 2. No substitution required

3. lead to

4. leading to

Question ID : 9895809909

Chosen Option : 1

Q.3 Select the meaning of the given idiom.

Piece of cake

Ans  1. Something very difficult

2. Something very tasty

3. Something very easy

4. Something very soft

Question ID : 9895809923

Chosen Option : 4

Q.4 Select the most appropriate option to substitute the underlined segment in the given sentence. If there is no need to substitute it, select No substitution required.

The term flora is use for denote plants of a particular region or period.

Ans  1. used denoting

2. denoting

3. used to denote

4. No substitution required

Question ID : 9895809907

Chosen Option : 3

Q.5 Select the meaning of the given idiom.

A snake in the grass

Ans  1. Cowardly and brutal

2. Low and mean

3. An unreliable person

4. A hidden enemy

Question ID : 9895809922

Chosen Option : 3

Q.6 Select the most appropriate word to fill in the blank.

We should take \_\_\_\_\_ measures to prevent recurrence of such incidents.

Ans  1. substitute

2. effective

3. casual

4. properly

Question ID : 9895809929

Chosen Option : 4

Q.7 Select the antonym of the given word.

ILLICIT

- Ans
- 1. Illegal
  - 2. Unlawful
  - 3. Lawful
  - 4. Illegitimate

Question ID : 9895809921  
Chosen Option : 4

Q.8 Select the word which means the same as the group of words given.

A sentimental longing or wistful affection for a period in the past

- Ans
- 1. Harmony
  - 2. Affliction
  - 3. Nostalgia
  - 4. Paradise

Question ID : 9895809924  
Chosen Option : 1

Q.9 Select the antonym of the given word.

ABUNDANT

- Ans
- 1. Ample
  - 2. Plentiful
  - 3. Copious
  - 4. Scarce

Question ID : 9895809920  
Chosen Option : 2

Q.10 Select the most appropriate word to fill in the blank.

Dense mangroves are common varieties with roots submerged \_\_\_\_\_ water.

- Ans
- 1. beside
  - 2. over
  - 3. under
  - 4. behind

Question ID : 9895809910  
Chosen Option : 3

Comprehension:



In the following passage some words have been deleted. Fill in the blanks with the help of the alternatives given. Select the most appropriate option for each number.

Can you (1) \_\_\_\_\_ a world without human beings? Who but humans (2) \_\_\_\_\_ have utilized the resources and created a (3) \_\_\_\_\_ and cultural environment? The people living in a country are important to (4) \_\_\_\_\_ the economy and the society. They (5) \_\_\_\_\_ are the greatest resource.

SubQuestion No : 11

Q.1  
1 Select the most appropriate option that will fill in the blank number 1.

- Ans
- 1. realize
  - 2. figure
  - 3. devise
  - 4. imagine

Question ID : 9895809913  
Chosen Option : 4

Comprehension:

In the following passage some words have been deleted. Fill in the blanks with the help of the alternatives given. Select the most appropriate option for each number.

Can you (1) \_\_\_\_\_ a world without human beings? Who but humans (2) \_\_\_\_\_ have utilized the resources and created a (3) \_\_\_\_\_ and cultural environment? The people living in a country are important to (4) \_\_\_\_\_ the economy and the society. They (5) \_\_\_\_\_ are the greatest resource.

SubQuestion No : 12

Q.1  
2 Select the most appropriate option that will fill in the blank number 2.

- Ans
- 1. would
  - 2. could
  - 3. can
  - 4. will

Question ID : 9895809914  
Chosen Option : 2

Comprehension:

In the following passage some words have been deleted. Fill in the blanks with the help of the alternatives given. Select the most appropriate option for each number.

Can you (1) \_\_\_\_\_ a world without human beings? Who but humans (2) \_\_\_\_\_ have utilized the resources and created a (3) \_\_\_\_\_ and cultural environment? The people living in a country are important to (4) \_\_\_\_\_ the economy and the society. They (5) \_\_\_\_\_ are the greatest resource.

SubQuestion No : 13

Q.1  
3 Select the most appropriate option that will fill in the blank number 3.

- Ans
- 1. social



- 2. communal
- 3. general
- 4. familiar

Question ID : 9895809915  
Chosen Option : 1

**Comprehension:**

In the following passage some words have been deleted. Fill in the blanks with the help of the alternatives given. Select the most appropriate option for each number.

Can you (1) \_\_\_\_\_ a world without human beings? Who but humans (2) \_\_\_\_\_ have utilized the resources and created a (3) \_\_\_\_\_ and cultural environment? The people living in a country are imp ortant to (4) \_\_\_\_\_ the economy and the society. They (5) \_\_\_\_\_ are the greatest resource.

SubQuestion No : 14

Q.1  
4 Select the most appropriate option that will fill in the blank number 4.

- Ans
- 1. evolve
  - 2. develop
  - 3. mature
  - 4. establish

Question ID : 9895809916  
Chosen Option : 2

**Comprehension:**

In the following passage some words have been deleted. Fill in the blanks with the help of the alternatives given. Select the most appropriate option for each number.

Can you (1) \_\_\_\_\_ a world without human beings? Who but humans (2) \_\_\_\_\_ have utilized the resources and created a (3) \_\_\_\_\_ and cultural environment? The people living in a country are imp ortant to (4) \_\_\_\_\_ the economy and the society. They (5) \_\_\_\_\_ are the greatest resource.

SubQuestion No : 15

Q.1  
5 Select the most appropriate option that will fill in the blank number 5.

- Ans
- 1. itself
  - 2. themselves
  - 3. yourselves
  - 4. ourselves

Question ID : 9895809917  
Chosen Option : 2

Q.1  
6 Select the word which means the same as the group of words given.

Violation of something holy or sacred

- Ans
- 1. Ritual

2. Ceremony

3. Sacrilege

4. Pious

Question ID : 9895809925  
Chosen Option : 4

Q.1  
7 Select the synonym of the given word.

ISOLATION

Ans  1. Association

2. Communication

3. Separation

4. Integration

Question ID : 9895809918  
Chosen Option : 3

Q.1  
8 Identify the segment in the sentence which contains the grammatical error from the given options.

Concern above rising pollution led to the launch of various action plans.

Ans  1. Concern above

2. launch of

3. led to

4. action plans

Question ID : 9895809906  
Chosen Option : 3

Q.1  
9 Select the wrongly spelt word.

Ans  1. Ninety

2. Neither

3. Noticeable

4. Neccessary

Question ID : 9895809926  
Chosen Option : 1

Q.2  
0 Select the most appropriate word to fill in the blank.

The house remained \_\_\_\_\_ for a long time.

Ans  1. evicted

2. empty

3. vacant

4. blank

Question ID : 9895809928  
Chosen Option : 3

Q.2

1 Select the wrongly spelt word.

- Ans
- 1. Sacrifice
  - 2. Sanctity
  - 3. Schedule
  - 4. Salry

Question ID : 9895809927  
Chosen Option : 4

Q.2 Identify the segment in the sentence which contains the grammatical error from the given options.

2 Most of the freshwater lake in India are in the Himalayan region.

- Ans
- 1. Most of the
  - 2. in India
  - 3. are in
  - 4. freshwater lake

Question ID : 9895809904  
Chosen Option : 4

Q.2 Select the most appropriate word to fill in the blank.

3 The elephants are the most majestic animals \_\_\_\_\_ the mammals.

- Ans
- 1. as
  - 2. between
  - 3. among
  - 4. over

Question ID : 9895809911  
Chosen Option : 3

Q.2 Select the synonym of the given word.

4 INTEGRATION

- Ans
- 1. Division
  - 2. Separation
  - 3. Unification
  - 4. Segregation

Question ID : 9895809919  
Chosen Option : 1

Q.2 Identify the segment in the sentence which contains the grammatical error from the given options.

5 Rivers has been of primary importance for human settlements since ancient times.

- Ans
- 1. of primary importance
  - 2. Rivers has been
  - 3. since ancient times.
  - 4. for human settlements

Question ID : 9895809905  
Chosen Option : 2

Section : Hindi Language

Q.1 दिए गए वाक्य में रेखांकित खंड को प्रतिस्थापित करने के लिए उपयुक्त विकल्प का चयन करें।

अहंकार से भरा व्यक्ति समाज में कभी आदर नहीं पाता ।

- Ans
- 1. मदालस
  - 2. मदांध
  - 3. मदमुक्त
  - 4. मदपायी

Question ID : 98958010037  
Chosen Option : --

Q.2 दिए गए वाक्य में रेखांकित खंड को प्रतिस्थापित करने के लिए उपयुक्त विकल्प का चयन करें।

तुम्हारी बात बहुत ही तकलीफ देने वाली है।

- Ans
- 1. कष्टसाध्य
  - 2. आकृष्ट
  - 3. कष्टभावी
  - 4. कष्टदायी

Question ID : 98958010039  
Chosen Option : --

Q.3 रिक्त स्थान को भरने के लिए उपयुक्त शब्द का चयन करें।

मैंने इस कार्य के लिए अधिकारियों से \_\_\_\_\_ स्वीकृति प्राप्त कर ली है।

- Ans
- 1. निहित
  - 2. अस्पष्ट
  - 3. वास्तव
  - 4. वांछित

Question ID : 98958010043  
Chosen Option : --

Q.4 दिए गए वाक्य का वह भाग ज्ञात करें जिसमें कोई त्रुटि है।

अपनी जीभ को लगाम दो अन्यथा ठीक नहीं होगी।

- Ans
- 1. लगाम दो
  - 2. ठीक नहीं होगी।
  - 3. अन्यथा
  - 4. अपनी जीभ को

Question ID : 98958010035  
Chosen Option : --

Q.5 'प्रशंसक' का विलोम शब्द है -

- Ans
- 1. अन्धकार
  - 2. समीक्षक
  - 3. कटु
  - 4. निन्दक

Question ID : 98958010050

Chosen Option : --

Q.6 'अतिवृष्टि' का विलोम शब्द है -

- Ans
- 1. प्रतिवृष्टि
  - 2. वृष्टि
  - 3. अनावृष्टि
  - 4. अन्यवृष्टि

Question ID : 98958010051

Chosen Option : --

Q.7 'उत्सुक' का पर्यायवाची शब्द है -

- Ans
- 1. मेहनती
  - 2. जलसा
  - 3. आतुर
  - 4. हौसला

Question ID : 98958010053

Chosen Option : --

Q.8 रिक्त स्थान को भरने के लिए उपयुक्त शब्द का चयन करें।

इस मूर्ति में मानो ईश्वर ही \_\_\_\_\_ हो गए हैं।

- Ans
- 1. आकार
  - 2. निराकार
  - 3. विकार
  - 4. साकार

Question ID : 98958010041

Chosen Option : --

Q.9 'आयुष्मान' का पर्यायवाची शब्द है -

- Ans
- 1. चिरायु
  - 2. हर्ष
  - 3. मान्यवर



✗ 4. प्रसन्नता

Question ID : 98958010052

Chosen Option : --

Q.1  
0 'व्यर्थ खर्च करने वाला' के लिए एक शब्द प्रयुक्त होता है-

- Ans
- ✗ 1. व्यापारी
  - ✗ 2. मितव्ययी
  - ✗ 3. खर्चीला
  - ✓ 4. अपव्ययी

Question ID : 98958010056

Chosen Option : --

Q.1  
1 'हाथ मलते रह जाना' मुहावरे का सही अर्थ है -

- Ans
- ✗ 1. बेकार का काम करना
  - ✗ 2. पछताना
  - ✗ 3. मालिश करना
  - ✓ 4. हाथों को गरम करना

Question ID : 98958010055

Chosen Option : --

Q.1  
2 सही वर्तनी वाले शब्द का चयन करें।

- Ans
- ✓ 1. नछत्र
  - ✗ 2. नक्षित्र
  - ✗ 3. नक्षत्र
  - ✗ 4. नच्छत्र

Question ID : 98958010058

Chosen Option : --

Q.1  
3 सही वर्तनी वाले शब्द का चयन करें।

- Ans
- ✗ 1. द्विष्टि
  - ✓ 2. दृष्टि
  - ✗ 3. दृष्टि
  - ✗ 4. दृष्ठी

Question ID : 98958010059

Chosen Option : --

Comprehension:



निम्नलिखित गद्यांश के रिक्त स्थानों की पूर्ति गद्यांश के नीचे दिए गए प्रश्नों के अनुसार कीजिए-

कई दिन वहाँ रहने पर मुझे इस साध्वी की \_\_\_\_\_ (1) के बारे में बहुत कुछ मालूम हो गया। प्रातःकाल उसके आश्रम से निरन्तर आती हुई तुलसीदास के भजनों की स्वर लहरी मेरी सोई हुई आत्मा को \_\_\_\_\_ (2) कर देती थी। कितने दिनों से मैं रेल-पेल व भागमभाग से \_\_\_\_\_ (3) वातावरण में आने की बात सोच रहा था। इस युग में भविष्य के प्रति \_\_\_\_\_ (4) हमें जल्दी निर्णय लेने से रोकती रहती है। फिर भी भीड़ से दूर निकलने की बलवती \_\_\_\_\_ (5) किसके मन में रह-रह कर नहीं जाग उठती है?

SubQuestion No : 14

Q.1  
4 गद्यांश में संकेतित रिक्त स्थान (1) के लिए उपयुक्त शब्द होगा।

- Ans
- 1. परिक्रमा
  - 2. परिचर्चा
  - 3. परिचर्या
  - 4. दिनचर्या

Question ID : 98958010045  
Chosen Option : --

Comprehension:

निम्नलिखित गद्यांश के रिक्त स्थानों की पूर्ति गद्यांश के नीचे दिए गए प्रश्नों के अनुसार कीजिए-

कई दिन वहाँ रहने पर मुझे इस साध्वी की \_\_\_\_\_ (1) के बारे में बहुत कुछ मालूम हो गया। प्रातःकाल उसके आश्रम से निरन्तर आती हुई तुलसीदास के भजनों की स्वर लहरी मेरी सोई हुई आत्मा को \_\_\_\_\_ (2) कर देती थी। कितने दिनों से मैं रेल-पेल व भागमभाग से \_\_\_\_\_ (3) वातावरण में आने की बात सोच रहा था। इस युग में भविष्य के प्रति \_\_\_\_\_ (4) हमें जल्दी निर्णय लेने से रोकती रहती है। फिर भी भीड़ से दूर निकलने की बलवती \_\_\_\_\_ (5) किसके मन में रह-रह कर नहीं जाग उठती है?

SubQuestion No : 15

Q.1  
5 गद्यांश में संकेतित रिक्त स्थान (2) के लिए उपयुक्त शब्द होगा।

- Ans
- 1. विचलित
  - 2. जागृत
  - 3. चंचल
  - 4. उदास

## Comprehension:

निम्नलिखित गद्यांश के रिक्त स्थानों की पूर्ति गद्यांश के नीचे दिए गए प्रश्नों के अनुसार कीजिए-

कई दिन वहाँ रहने पर मुझे इस साध्वी की \_\_\_\_\_ (1) के बारे में बहुत कुछ मालूम हो गया। प्रातःकाल उसके आश्रम से निरन्तर आती हुई तुलसीदास के भजनों की स्वर लहरी मेरी सोई हुई आत्मा को \_\_\_\_\_ (2) कर देती थी। कितने दिनों से मैं रेल-पेल व भागमभाग से \_\_\_\_\_ (3) वातावरण में आने की बात सोच रहा था। इस युग में भविष्य के प्रति \_\_\_\_\_ (4) हमें जल्दी निर्णय लेने से रोकती रहती है। फिर भी भीड़ से दूर निकलने की बलवती \_\_\_\_\_ (5) किसके मन में रह-रह कर नहीं जाग उठती है?

SubQuestion No : 16

Q.1  
6 गद्यांश में संकेतित रिक्त स्थान (3) के लिए उपयुक्त शब्द होगा।

- Ans
- 1. संलग्न
  - 2. शांत
  - 3. दूषित
  - 4. प्रभावित

## Comprehension:

निम्नलिखित गद्यांश के रिक्त स्थानों की पूर्ति गद्यांश के नीचे दिए गए प्रश्नों के अनुसार कीजिए-

कई दिन वहाँ रहने पर मुझे इस साध्वी की \_\_\_\_\_ (1) के बारे में बहुत कुछ मालूम हो गया। प्रातःकाल उसके आश्रम से निरन्तर आती हुई तुलसीदास के भजनों की स्वर लहरी मेरी सोई हुई आत्मा को \_\_\_\_\_ (2) कर देती थी। कितने दिनों से मैं रेल-पेल व भागमभाग से \_\_\_\_\_ (3) वातावरण में आने की बात सोच रहा था। इस युग में भविष्य के प्रति \_\_\_\_\_ (4) हमें जल्दी निर्णय लेने से रोकती रहती है। फिर भी भीड़ से दूर निकलने की बलवती \_\_\_\_\_ (5) किसके मन में रह-रह कर नहीं जाग उठती है?

SubQuestion No : 17

Q.1  
7 गद्यांश में संकेतित रिक्त स्थान (4) के लिए उपयुक्त शब्द होगा।

- Ans
- 1. आशंका
  - 2. निश्चिन्त

3. आशा  
 4. हताशा

Question ID : 98958010048  
Chosen Option : --

Comprehension:

निम्नलिखित गद्यांश के रिक्त स्थानों की पूर्ति गद्यांश के नीचे दिए गए प्रश्नों के अनुसार कीजिए-

कई दिन वहाँ रहने पर मुझे इस साध्वी की \_\_\_\_\_ (1) के बारे में बहुत कुछ मालूम हो गया। प्रातःकाल उसके आश्रम से निरन्तर आती हुई तुलसीदास के भजनों की स्वर लहरी मेरी सोई हुई आत्मा को \_\_\_\_\_ (2) कर देती थी। कितने दिनों से मैं रेल-पेल व भागमभाग से \_\_\_\_\_ (3) वातावरण में आने की बात सोच रहा था। इस युग में भविष्य के प्रति \_\_\_\_\_ (4) हमें जल्दी निर्णय लेने से रोकती रहती है। फिर भी भीड़ से दूर निकलने की बलवती \_\_\_\_\_ (5) किसके मन में रह-रह कर नहीं जाग उठती है?

SubQuestion No : 18

Q.1  
8 गद्यांश में संकेतित रिक्त स्थान (5) के लिए उपयुक्त शब्द होगा।

- Ans  1. लालसा  
 2. इच्छा  
 3. उत्सुकता  
 4. तृष्णा

Question ID : 98958010049  
Chosen Option : --

Q.1  
9 दिए गए वाक्य का वह भाग ज्ञात करें जिसमें कोई त्रुटि है।

बच्चों ने साधनों के अभाव में पढ़ना छोड़ दी।

- Ans  1. साधनों के  
 2. बच्चों ने  
 3. अभाव में  
 4. पढ़ना छोड़ दी।

Question ID : 98958010036  
Chosen Option : --

Q.2  
0 'तलवार की धार पर चलना' मुहावरे का सही अर्थ है -

- Ans  1. सीधी रेखा पर चलना  
 2. मेहनत करना



✓ 3. संकटपूर्ण कठिन काम करना

✗ 4. सरल कार्य करना

Question ID : 98958010054  
Chosen Option : --

Q.2  
1 दिए गए वाक्य में रेखांकित खंड को प्रतिस्थापित करने के लिए उपयुक्त विकल्प का चयन करें।

शरण में आये व्यक्ति की सुरक्षा करनी चाहिये।

Ans ✓ 1. शरणागत

✗ 2. शरणप्रिय

✗ 3. शरणमुक्त

✗ 4. आरक्षित

Question ID : 98958010038  
Chosen Option : --

Q.2  
2 दिए गए वाक्य का वह भाग ज्ञात करें जिसमें कोई त्रुटि है।

प्राचीन काल में होली का त्योहार समूह तौर में मनाया जाता था।

Ans ✓ 1. प्राचीन काल में

✗ 2. होली का त्योहार

✗ 3. समूह तौर में

✗ 4. मनाया जाता था।

Question ID : 98958010034  
Chosen Option : --

Q.2  
3 रिक्त स्थान को भरने के लिए उपयुक्त शब्द का चयन करें।

वर्तमान \_\_\_\_\_ में भी महात्मा गांधी के विचारों का महत्व कम नहीं होता।

Ans ✗ 1. घटनाओं

✗ 2. क्षेत्र

✓ 3. संदर्भ

✗ 4. कार्यकलापों

Question ID : 98958010042  
Chosen Option : --

Q.2  
4 रिक्त स्थान को भरने के लिए उपयुक्त शब्द का चयन करें।

कलाकार में जन्मजात \_\_\_\_\_ होती है।

Ans ✗ 1. प्रतिभा

✓ 2. शक्ति

✗ 3. रुचि

4. विधा

Question ID : 98958010040

Chosen Option : --

Q.2  
5 'जिसका परिमाण न जाना जा सके' के लिए एक शब्द प्रयुक्त होता है-

Ans

1. अपरिहार्य

2. अपरिमेय

3. अपरिणाम

4. अपरिमाण

Question ID : 98958010057

Chosen Option : --

GovtJobsAlert.In