

## Constable (GD) in CAPFs, NIA, SSF and Rifleman (GD) in Assam Rifles Examination, 2018

Roll No. :	<a href="http://www.GovtJobsAlert.In">www.GovtJobsAlert.In</a>
Registration No.	
Name :	
Exam Venue :	ION Digital Zone iDZ Kundrathur
Exam Time :	4:00 PM - 5:30 PM
Exam Date :	12/02/2019

Section : General Section

Q.1 Select the option that is related to the third term in the same way as the second term is related to the first term.

Myanmar : Kyat :: Pakistan : ?

- Ans
- 1. Dinar
  - 2. Dirham
  - 3. Rial
  - 4. Rupee

Question ID : 9895804695  
Chosen Option : 2

Q.2 Select the option that is related to the third term in the same way as the second term is related to the first term.

Larva : Insect :: Lamb : ?

- Ans
- 1. Deer
  - 2. Lion
  - 3. Child
  - 4. Sheep

Question ID : 9895804696  
Chosen Option : 4

Q.3 Which number will follow next in the given number series?

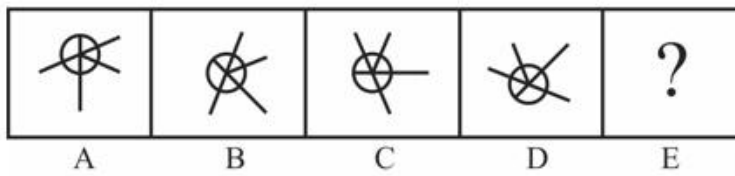
3, 16, 29, 42, ?

- Ans
- 1. 61
  - 2. 54
  - 3. 57
  - 4. 55

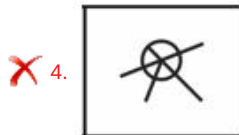
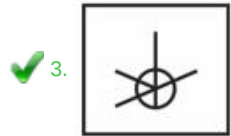
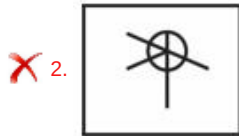
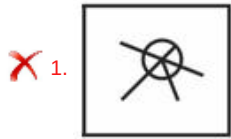
Question ID : 9895804705  
Chosen Option : 4

Q.4

Choose the option that would follow next in the given figure series.



Ans



Question ID : 9895804711  
Chosen Option : 3

Q.5 Which number will follow next in the given number series?

8, 9, 17, 44, ?

- Ans
- 1. 100
  - 2. 108
  - 3. 103
  - 4. 105

Question ID : 9895804706  
Chosen Option : 2

Q.6 Find out the two signs to be interchanged to make the following equation correct.

$$22 + 11 \times 22 - 2 \div 3 = 45$$

- Ans
- 1. - and  $\times$
  - 2. - and  $\div$
  - 3. + and  $\div$
  - 4.  $\times$  and  $\div$

Question ID : 9895804710  
Chosen Option : 4

Q.7

J, K, L, M, N and O are six teachers. Each one teaches a different subject out of Hindi, English, Math, Science, Social Science and Arts, NOT necessarily in the same order. Each of them teaches on only one day, from Monday to Saturday, NOT necessarily in the same order. J teaches Arts on Saturday. L teaches neither English nor Social Science, but he teaches on Thursday. Wednesday is reserved for Maths taught by K. O teaches Science a day before N. Social Science is taught a day before Arts. Who teaches Social Science?

- Ans
- 1. M
  - 2. N
  - 3. O
  - 4. J

Question ID : 9895804702  
Chosen Option : 3

Q.8 Choose the odd one out of the given options.

- Ans
- 1. Eagle
  - 2. Owl
  - 3. Crow
  - 4. Ostrich

Question ID : 9895804694  
Chosen Option : 4

Q.9 Seven friends O, P, Q, R, S, T and U are watching a movie sitting in a row. S is sitting at one extreme end. Q is sitting second to the right of S. P is sitting between O and Q. U is NOT sitting at any extreme end. R is sitting to the left of T. Who is sitting at the extreme left end?

- Ans
- 1. Q
  - 2. S
  - 3. P
  - 4. R

Question ID : 9895804700  
Chosen Option : 2

Q.1 A square transparent sheet with a pattern is given. How will the pattern appear when the transparent sheet is folded along the dotted line?



- Ans
- 1.
  - 2.
  - 3.
  - 4.

Question ID : 9895804715

Chosen Option : 3

Q.1 In a certain code, SPADE is written as 45. How will ABODE be written in that code?

- Ans
- 1. 59
  - 2. 27
  - 3. 29
  - 4. 39

Question ID : 9895804699

Chosen Option : 2

Q.1 Select a figure from amongst the four alternatives that when placed in the blank space (?) of figure X will complete the pattern. (Rotation is NOT allowed).



- Ans
- 1.
  - 2.
  - 3.
  - 4.

Question ID : 9895804712

Chosen Option : 3

Q.1 Choose the odd one out of the given options.

- Ans
- 1. JPC
  - 2. BFQ
  - 3. LHE
  - 4. DEP

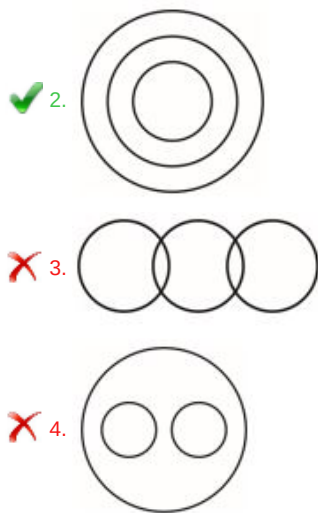
Question ID : 9895804693

Chosen Option : 3

Q.1 Select the Venn diagram that best represents the given set of classes.

Nepal, Asia, Kathmandu

- Ans
- 1.



Question ID : 9895804716  
Chosen Option : 2

Q.1 5 Eight friends A, B, C, D, E, F, G and H are sitting around a circular table facing each other for a lunch. A is opposite F and third to the right of B. G is between F and D. H is to the left of D. E is between C and A. Who is sitting third to the right of C?

- Ans
- 1. D
  - 2. A
  - 3. G
  - 4. H

Question ID : 9895804701  
Chosen Option : 3

Q.1 6 Select the option that will correctly replace the question mark (?) in the given pattern.

5	15	6
7	5	?
32	230	42

- Ans
- 1. 13
  - 2. 9
  - 3. 6
  - 4. 11

Question ID : 9895804709  
Chosen Option : 4

Q.1 7 The statements below are followed by two conclusions labeled I and II. Assuming that the information in the statements is true, even if it appears at variance with generally established facts, decide which conclusion(s) logically and definitely follow(s) from the information given in the statements.

**Statements:**

- 1.) Some guns are spiders.
- 2.) Some spiders are peasants.

**Conclusion**

- I. Some guns are peasants.
- II. Some peasants are guns.

- Ans  1. Neither conclusion I nor conclusion II follows.  
 2. Both conclusions follow.  
 3. Only conclusion I follows.  
 4. Only conclusion II follows.

Question ID : 9895804704  
Chosen Option : 3

Q.1 Choose the option that most closely resembles the mirror image of the given word when mirror is placed at right side.  
8

SEQUEL

- Ans  1. SEUQEL  
 2. SEQUEL  
 3. SEUQEL  
 4. SEUQEL

Question ID : 9895804714  
Chosen Option : 3

Q.1 The statements below are followed by two conclusions labeled I and II. Assuming that the information in the statements is true, even if it appears to be at variance with generally established facts, decide which conclusion(s) logically and definitely follow(s) from the information given in the statements.  
9

Statements:

- 1.) All pupils are crows.  
2.) All cats are crows.

Conclusion

- I. Some cats are pupils.  
II. No cat is pupil.

- Ans  1. Either conclusion I or conclusion II follows.  
 2. Only conclusion II follows.  
 3. Both conclusions follow.  
 4. Only conclusion I follows.

Question ID : 9895804703  
Chosen Option : 1

Q.2 Select the option that is related to the third term in the same way as the second term is related to the first term.  
0

ACG : DFD :: CIU : ?

- Ans  1. RLL  
 2. EGF  
 3. FLR  
 4. LFR

Question ID : 9895804697  
Chosen Option : 4

Q.2  
1 Choose the option in which the figure marked 'X' is embedded.



X

Ans

✓ 1.



✗ 2.



✗ 3.



✗ 4.



Question ID : 9895804713  
Chosen Option : 2

Q.2  
2 Select the option that is related to the third number in the same way as the second number is related to the first number.

22 : 625 :: 13 : ?

Ans ✗ 1. 169

✗ 2. 144

✓ 3. 256

✗ 4. 221

Question ID : 9895804707  
Chosen Option : 3

Q.2  
3 In a certain code, UNHAPPY is written as PPYAHNU. How will FALLACY be written in that code?

Ans ✗ 1. ACYLALF

✓ 2. ACYLLAF

✗ 3. YCALLAF

✗ 4. ACYLAAF

Question ID : 9895804698  
Chosen Option : 2

Q.2  
4 Select the correct option that will fill in the blank and complete the series.

NIX, LKV, JMT, HOR, \_\_\_\_

Ans ✗ 1. FQO

✓ 2. FQP



3. FQQ

4. FOP

Question ID : 9895804692  
Chosen Option : 3

Q.2  
5 Choose the odd number out of the given options.

Ans  1. 545

2. 718

3. 415

4. 314

Question ID : 9895804708  
Chosen Option : 2

Q.2  
6 The green revolution did NOT include:

Ans  1. upgradation of the roads of the village.

2. high yielding varieties of seeds.

3. use of well-developed system of irrigation.

4. use of advanced technology in farming.

Question ID : 9895802507  
Chosen Option : 1

Q.2  
7 Who was the only Pakistani national who was awarded the Bharat Ratna?

Ans  1. Benazir Bhutto

2. Khan Abdul Ghaffar Khan

3. Imran Khan

4. Nawaz Sharif

Question ID : 9895802517  
Chosen Option : 1

Q.2  
8 Saikhom Mirabai Chanu received the Padma Shri award in 2018, for \_\_\_\_\_.

Ans  1. cricket

2. wrestling

3. weight lifting

4. athletics

Question ID : 9895802503  
Chosen Option : 3

Q.2  
9 Garba is a folk dance which originated in \_\_\_\_\_.

Ans  1. Gujarat

2. Maharashtra

3. Bihar

4. Rajasthan



Question ID : 9895802513  
Chosen Option : 1

Q.3  
0 What is the name of the first mammal clone (sheep)?

- Ans
- 1. Shan
  - 2. Sheep
  - 3. Dolly
  - 4. Polly

Question ID : 9895802519  
Chosen Option : 1

Q.3  
1 Which of the following is NOT a classical dance form?

- Ans
- 1. Kathak
  - 2. Kathakali
  - 3. Kalbeliya
  - 4. Odissi

Question ID : 9895802514  
Chosen Option : 3

Q.3  
2 \_\_\_\_\_ is responsible for oxygen transportation in humans.

- Ans
- 1. Melanin
  - 2. Lymph
  - 3. Mucus
  - 4. Haemoglobin

Question ID : 9895802522  
Chosen Option : 4

Q.3  
3 \_\_\_\_\_ is the harvest festival of Kerala.

- Ans
- 1. Onam
  - 2. Lohri
  - 3. Baisakhi
  - 4. Pongal

Question ID : 9895802515  
Chosen Option : 1

Q.3  
4 The river \_\_\_\_\_ is the only natural water source that drains inside a lake in the desert.

- Ans
- 1. Teesta
  - 2. Ganga
  - 3. Luni
  - 4. Kali

Question ID : 9895802504  
Chosen Option : 1

Q.3  
5 In India, states with \_\_\_\_\_ of population get more representatives.

- Ans
- 1. Lower Income
  - 2. Larger size
  - 3. Small Size
  - 4. Higher Income

Question ID : 9895802512  
Chosen Option : 2

Q.3  
6 The brain is a part of the \_\_\_\_\_ system.

- Ans
- 1. endocrine
  - 2. digestive
  - 3. circulatory
  - 4. nervous

Question ID : 9895802521  
Chosen Option : 4

Q.3  
7 What does PMGY stands for?

- Ans
- 1. Pradhan Mantri Gramodaya Yojana
  - 2. Pradhan Mantri Gurukul Yojana
  - 3. Pradhan Mantri Gareeb Yojana
  - 4. Pradhan Mantri Gram Yojana

Question ID : 9895802508  
Chosen Option : 2

Q.3  
8 'Deuce' is a term associated with \_\_\_\_\_.

- Ans
- 1. lawn tennis
  - 2. hockey
  - 3. baseball
  - 4. cricket

Question ID : 9895802502  
Chosen Option : 1

Q.3  
9 \_\_\_\_\_ is called 'the power house of the cell'.

- Ans
- 1. Nucleus
  - 2. Golgi bodies
  - 3. Mitochondria
  - 4. Cell membrane

Question ID : 9895802523  
Chosen Option : 3

Q.4  
0 After Independence, \_\_\_\_\_ became India's first Deputy Prime Minister.

- Ans
- 1. Jagjivan Ram
  - 2. Charan Singh
  - 3. Morarji Desai
  - 4. Sardar Vallabhai Patel

Question ID : 9895802500  
Chosen Option : 4

Q.4  
1 The swampy belt of the northern Indian plains is known as \_\_\_\_\_.

- Ans
- 1. Khadar
  - 2. Doab
  - 3. Bhangra
  - 4. Terai

Question ID : 9895802505  
Chosen Option : 1

Q.4  
2 Zamindari System was introduced by \_\_\_\_\_ in 1793.

- Ans
- 1. Clive
  - 2. Curzon
  - 3. Cornwallis
  - 4. Clint

Question ID : 9895802499  
Chosen Option : 2

Q.4  
3 The pen name of Sampooran Singh Kalra, an Indian poet, lyricist and film director is \_\_\_\_\_.

- Ans
- 1. Taalib
  - 2. Gulzar
  - 3. Daagh
  - 4. Arzu

Question ID : 9895802518  
Chosen Option : 3

Q.4  
4 The Bharatiya Janata Party's (BJP) origins lie in the Bharatiya Jana Sangh, founded by \_\_\_\_\_.

- Ans
- 1. Murlī Manohar Joshi
  - 2. Atal Bihari Vajpayee
  - 3. Syama Prasad Mukherjee
  - 4. Lal Krishna Advani

Question ID : 9895802511  
Chosen Option : 2

Q.4  
5 Which of the following are NOT Trade Barriers?

- Ans
- 1. Embargo

2. Export Security

3. Subsidies

4. Tariff Barriers

Question ID : 9895802509

Chosen Option : 2

Q.4  
6 The vast meadows in the high elevation ranges of the Himalayas are called \_\_\_\_\_.

Ans  1. Bhabar

2. Maru

3. Green meadows

4. Bugyal

Question ID : 9895802501

Chosen Option : 3

Q.4  
7 \_\_\_\_\_ is the best conductor of heat.

Ans  1. Silver

2. Lead

3. Stainless steel

4. Mercury

Question ID : 9895802520

Chosen Option : 3

Q.4  
8 \_\_\_\_\_ is the highest military decoration awarded for displaying distinguished acts of valour during war.

Ans  1. Mahavir Chakra

2. Param Vir Chakra

3. Sena Medal

4. Shaurya Chakra

Question ID : 9895802516

Chosen Option : 1

Q.4  
9 \_\_\_\_\_ is the largest democracy the world.

Ans  1. India

2. Iceland

3. Sweden

4. Norway

Question ID : 9895802510

Chosen Option : 1

Q.5  
0 Among the following options, \_\_\_\_\_ is the highest mountain peak of the Himalayas in India.

Ans  1. Nanda Devi

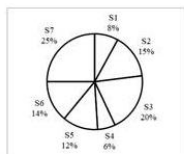
2. Kanchenjunga

3. Namcha Barwa

**4. Mount Everest**

Question ID : 9895802506  
Chosen Option : 4

**Q.5** The pie chart given below shows the annual snowfall received by 7 states of a country. The snowfall is shown as a percentage of total annual snowfall of the country.



If the annual snowfall received by the country is 700 cm, then what is the monthly snowfall received by S5?

- Ans**
- 1. 21 cm
  - 2. 5 cm
  - 3. 12 cm
  - 4. 7 cm

Question ID : 9895804333  
Chosen Option : 4

**Q.5** A sum of ₹ 12500 gives interest of ₹ 5625 in  $T$  years at simple interest. If the rate of interest is 7.5%, then what will be the value of  $T$ ?

- Ans**
- 1. 7 years
  - 2. 6 years
  - 3. 8 years
  - 4. 5 years

Question ID : 9895804322  
Chosen Option : 2

**Q.5** If cost price of an article is ₹ 1240 and loss is 32%, then what will be the selling price of the article?

- Ans**
- 1. ₹ 843.20
  - 2. ₹ 759.60
  - 3. ₹ 780.72
  - 4. ₹ 820.62

Question ID : 9895804318  
Chosen Option : 1

**Q.5** An article is sold for ₹ 5845 after giving discount of 12.5%. What is the marked price of article?

- Ans**
- 1. ₹ 6800
  - 2. ₹ 6700
  - 3. ₹ 6600
  - 4. ₹ 6680

Question ID : 9895804314  
Chosen Option : 2

**Q.5** If Dheeraj can cross a 100 metres wide road in 25 seconds, then what is the speed of Dheeraj?

**Ans**

- 1. 6 m/s
- 2. 4 m/s
- 3. 14 m/s
- 4. 12 m/s

Question ID : 9895804327  
Chosen Option : 2

Q.5 The average daily rainfall of town A is 105 for first 2 days of the week, 84 for next 3 days and 49 for the last 2 days of the week. The total weekly rainfall for town B is 455. What will be the average daily rainfall of both the towns together?

- Ans
- 1. 159
  - 2. 138
  - 3. 145
  - 4. 152

Question ID : 9895804313  
Chosen Option : 3

Q.5 If  $2A = 3B = 7C$ , then what is the ratio of  $A : B : C$ ?

- Ans
- 1. 21 : 10 : 6
  - 2. 2 : 3 : 7
  - 3. 14 : 10 : 21
  - 4. 21 : 14 : 6

Question ID : 9895804319  
Chosen Option : 2

Q.5 The sides of a triangle are in the ratio 5 : 2 : 1. If the perimeter of the triangle is 88 cm, then what will be the length of the largest side?

- Ans
- 1. 38 cm
  - 2. 40 cm
  - 3. 44 cm
  - 4. 55 cm

Question ID : 9895804328  
Chosen Option : 4

Q.5 The Least Common Multiple and Highest Common Factor of two numbers are 75 and 5 respectively. If their difference is 10, then what will be the sum of these two numbers?

- Ans
- 1. 25
  - 2. 30
  - 3. 20
  - 4. 40

Question ID : 9895804309  
Chosen Option : 2

Q.6 A sum becomes 8 times of itself in 7 years at the rate of compound interest (interest is compounded annually). In how many years will the sum become 4096 times of itself?

- Ans
- 1. 56
  - 2. 16
  - 3. 24



✓ 4. 28

Question ID : 9895804323  
Chosen Option : 3

Q.6 The data below shows the number of students in class A having secured different marks.  
1

Marks	Students in class A
0 - 2	3
2 - 4	4
4 - 6	1
6 - 8	1
8 - 10	1
10 - 12	0

What is the mean marks of class A?

- Ans ✓ 1. 3.8  
✗ 2. 1.6  
✗ 3. 2.8  
✗ 4. 2

Question ID : 9895804315  
Chosen Option : 2

Q.6 If  $X$  is 30% less than  $Y$  and  $Z$  is 50% less than  $X$ , then  $Z$  is how much percentage less than  $Y$ ?  
2

- Ans ✗ 1. 75%  
✗ 2. 95%  
✓ 3. 65%  
✗ 4. 80%

Question ID : 9895804316  
Chosen Option : 3

Q.6 A train is moving with a uniform speed. Train crosses a bridge of length 340 meters in 35 seconds and a bridge of length 460 meters in 38 seconds. What is the speed of the train?  
3

- Ans ✓ 1. 144 km/hr  
✗ 2. 80 km/hr  
✗ 3. 72 km/hr  
✗ 4. 40 km/hr

Question ID : 9895804326  
Chosen Option : 1

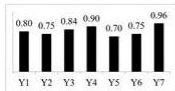
Q.6 Height of a right circular cone is 28 cm. If diameter of its base is 42 cm, then what will be the curved surface area of the cone?  
4

- Ans ✗ 1. 4620 cm<sup>2</sup>  
✗ 2. 170 cm<sup>2</sup>  
✓ 3. 2310 cm<sup>2</sup>  
✗ 4. 1540 cm<sup>2</sup>

Question ID : 9895804329  
Chosen Option : 3

Q.6  
5

The bar chart given below shows the ratio of expenditure to revenue for seven consecutive years Y1, Y2, Y3, Y4, Y5, Y6 and Y7.



Revenue for year Y4 is ₹ 22500. What is the profit for year Y4?

- Ans
- 1. ₹ 2500
  - 2. Cannot be determined
  - 3. ₹ 2250
  - 4. ₹ 2750

Question ID : 9895804331  
Chosen Option : 3

Q.6 What is the value of  $\left[\frac{4}{5} \div \frac{5}{8} - \frac{7}{5} + \frac{2}{15} \text{ of } \left(\frac{3}{2} \div \frac{4}{5}\right)\right]$ ?

- Ans
- 1. 13/100
  - 2. 21/100
  - 3. 15/29
  - 4. 17/80

Question ID : 9895804311  
Chosen Option : 3

Q.6 If cost price of 80 articles is equal to the selling price of 50 articles, then what will be the profit percentage?

- Ans
- 1. 60%
  - 2. 40%
  - 3. 25%
  - 4. 37.5%

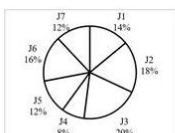
Question ID : 9895804317  
Chosen Option : 3

Q.6 The average of numbers N1 and N2 is 17. The average of numbers N2 and N3 is 44. What is the difference between N3 and N1?

- Ans
- 1. 54
  - 2. 36
  - 3. 35
  - 4. 27

Question ID : 9895804312  
Chosen Option : 3

Q.6 The pie chart given below shows the time taken in 7 different procedures J1, J2, J3, J4, J5, J6 and J7 in making a car as a percentage of total time taken. The total time taken in making one car is 1200 hours.



What is the average time taken in procedures J3, J6 and J7?

- Ans
- 1. 168 hours

- 2. 204 hours
- 3. 192 hours
- 4. 180 hours

Question ID : 9895804332  
Chosen Option : 3

Q.7  
0 What is the value of  $(5 \div \frac{1}{5} \text{ of } \frac{25}{4} + \frac{20}{3} \div \frac{100}{9})$ ?

- Ans
- 1. 18/5
  - 2. 31/5
  - 3. 23/5
  - 4. 27/5

Question ID : 9895804310  
Chosen Option : 3

Q.7  
1 If Rohit alone can complete one-fourth of a work in 32 days, then in how many days Rohit alone can complete the whole work?

- Ans
- 1. 128 days
  - 2. 64 days
  - 3. 96 days
  - 4. 118 days

Question ID : 9895804325  
Chosen Option : 2

Q.7  
2 If  $s : u : v : w = 2 : 9 : 6 : 7$  and  $s + u + v + w = 864$ , then what is the value of  $s + u + w$ ?

- Ans
- 1. 612
  - 2. 722
  - 3. 648
  - 4. 734

Question ID : 9895804321  
Chosen Option : 3

Q.7  
3 16 workers working 8 hours per day can demolish a building in 32 days. In how many days 24 workers working 12 hours per day can demolish the same building?

- Ans
- 1. 128/9 days
  - 2. 56/9 days
  - 3. 128/3 days
  - 4. 56/3 days

Question ID : 9895804324  
Chosen Option : 1

Q.7  
4 The volume of a right circular cone is equal to the volume of that right circular cylinder whose height is 48 cm and diameter of its base is 20 cm. If the height of the cone is 16 cm, then what will be the diameter of its base?

- Ans
- 1. 60 cm
  - 2. 25 cm

- 3. 45 cm
- 4. 130 cm

Question ID : 9895804330  
Chosen Option : 3

Q.7 Speed of Deepak and Vinod are in the ratio of 19 : 12 respectively. If speed of Vinod is 84 km/hr, then what will be the speed of Deepak?

- Ans
- 1. 117 km/hr
  - 2. 114 km/hr
  - 3. 133 km/hr
  - 4. 126 km/hr

Question ID : 9895804320  
Chosen Option : 2

Section : English Language

Q.1 Select the correctly spe

- Ans
- 1. Discrepancy
  - 2. Discrepency
  - 3. Descrepancy
  - 4. Discripancy

Question ID : 9895804189  
Chosen Option : 4

Q.2 Select the most appropriate meaning of the given idiom.

Storm in a teacup

- Ans
- 1. A stormy tea party
  - 2. A grand get-together
  - 3. A big fuss over a small issue
  - 4. A highly risky business

Question ID : 9895804186  
Chosen Option : 1

Q.3 Select the word which means the same as the group of words given.

The life history of a person written by himself

- Ans
- 1. Autobiography
  - 2. Novel
  - 3. Biography
  - 4. Fiction

Question ID : 9895804190  
Chosen Option : 3

Q.4

Identify the segment in the sentence which contains the grammatical error from the given options.

This bottle must not be make to stand close to the fire.

- Ans
- 1. This bottle
  - 2. close to the fire
  - 3. make to stand
  - 4. must not be

Question ID : 9895804196

Chosen Option : 4

Q.5 Select the most appropriate meaning of the idiom.

To burn all bridges

- Ans
- 1. To light a fire
  - 2. To damage a path
  - 3. To chase all enemies
  - 4. To destroy all relations

Question ID : 9895804187

Chosen Option : 1

Q.6 Select the most appropriate ANTONYM of the given word.

SEMBLANCE

- Ans
- 1. Guise
  - 2. Simile
  - 3. Difference
  - 4. A likeness

Question ID : 9895804184

Chosen Option : 1

Q.7 Select the most appropriate option to substitute the underlined segment in the given sentence. If there is no need to substitute it, select No Improvement.

He spent all which he has in order to perfect his invention.

- Ans
- 1. which he has
  - 2. that he had
  - 3. No Improvement
  - 4. what he is having

Question ID : 9895804198

Chosen Option : 2

Q.8 Select the most appropriate option to substitute the underlined segment in the given sentence. If there is no need to substitute it, select No Improvement

The Finance Minister has announce big schemes for farmers, women and unorganized workers in his Budget speech.

- Ans
- 1. has announced
  - 2. have announced
  - 3. No Improvement



4. has been announcing

Question ID : 9895804197  
Chosen Option : 1

Q.9 Select the most appropriate ANTONYM of the given word.

RAMBLING

- Ans  1. Irregular  
 2. Confused  
 3. Deceptive  
 4. Coherent

Question ID : 9895804185  
Chosen Option : 2

Q.1<sub>0</sub> Fill in the blank with the most appropriate word.

Reason is the highest faculty \_\_\_\_\_ on man by his creator.

- Ans  1. donated  
 2. given  
 3. bestowed  
 4. endowed

Question ID : 9895804192  
Chosen Option : 2

**Comprehension:**

In the following passage some words have been deleted. Fill in the blanks with the help of the alternatives given.  
Science has made an (1) \_\_\_\_\_ contribution to the relief of human suffering, and humanity (2) \_\_\_\_\_ a deep (3) \_\_\_\_\_ of gratitude to scientists whose (4) \_\_\_\_\_ and sacrifices have led to many (5) \_\_\_\_\_ discoveries and inventions.

SubQuestion No : 11

Q.1<sub>1</sub> Fill in the blank (1) with the most appropriate option.

- Ans  1. enterprising  
 2. excessive  
 3. intensive  
 4. enormous

Question ID : 9895804203  
Chosen Option : 4

**Comprehension:**

In the following passage some words have been deleted. Fill in the blanks with the help of the alternatives given.  
Science has made an (1) \_\_\_\_\_ contribution to the relief of human suffering, and humanity (2) \_\_\_\_\_ a deep (3) \_\_\_\_\_ of gratitude to scientists whose (4) \_\_\_\_\_ and sacrifices have led to many (5) \_\_\_\_\_ discoveries and inventions.

SubQuestion No : 12

Q.1<sub>2</sub> Fill in the blank (2) with the most appropriate option.

- Ans  1. offers  
 2. owes  
 3. thinks



✓ 4. feels

Question ID : 9895804204  
Chosen Option : 3

**Comprehension:**

In the following passage some words have been deleted. Fill in the blanks with the help of the alternatives given.  
Science has made an (1) \_\_\_\_\_ contribution to the relief of human suffering, and humanity (2) \_\_\_\_\_ a deep (3) \_\_\_\_\_ of gratitude to scientists whose (4) \_\_\_\_\_ and sacrifices have led to many (5) \_\_\_\_\_ discoveries and inventions.

SubQuestion No : 13

Q.1  
3 Fill in the blank (3) with the most appropriate option.

- Ans
- ✗ 1. feeling
  - ✗ 2. fund
  - ✗ 3. amount
  - ✓ 4. sense

Question ID : 9895804205  
Chosen Option : 4

**Comprehension:**

In the following passage some words have been deleted. Fill in the blanks with the help of the alternatives given.  
Science has made an (1) \_\_\_\_\_ contribution to the relief of human suffering, and humanity (2) \_\_\_\_\_ a deep (3) \_\_\_\_\_ of gratitude to scientists whose (4) \_\_\_\_\_ and sacrifices have led to many (5) \_\_\_\_\_ discoveries and inventions.

SubQuestion No : 14

Q.1  
4 Fill in the blank (4) with the most appropriate option.

- Ans
- ✗ 1. success
  - ✗ 2. discoveries
  - ✗ 3. achievements
  - ✓ 4. labour

Question ID : 9895804206  
Chosen Option : 3

**Comprehension:**

In the following passage some words have been deleted. Fill in the blanks with the help of the alternatives given.  
Science has made an (1) \_\_\_\_\_ contribution to the relief of human suffering, and humanity (2) \_\_\_\_\_ a deep (3) \_\_\_\_\_ of gratitude to scientists whose (4) \_\_\_\_\_ and sacrifices have led to many (5) \_\_\_\_\_ discoveries and inventions.

SubQuestion No : 15

Q.1  
5 Fill in the blank (5) with the most appropriate option.

- Ans
- ✗ 1. unusual
  - ✗ 2. curious
  - ✗ 3. dynamic
  - ✓ 4. useful

Question ID : 9895804207  
Chosen Option : 4

Q.1  
6 Select the most appropriate word to fill in the blank.

I would rather serve \_\_\_\_\_.

- Ans
- ✗ 1. but beg

- 2. than to beg
- 3. but to beg
- 4. than beg

Question ID : 9895804201  
Chosen Option : 2

Q.1 Select the most appropriate word to fill in the blank.

7

A house to house survey was \_\_\_\_\_ conducted to register more than seventeen crore voters.

- Ans
- 1. wearily
  - 2. meticulously
  - 3. firmly
  - 4. punctually

Question ID : 9895804193  
Chosen Option : 4

Q.1 Select the synonym of the given word.

8

IMITATION

- Ans
- 1. Genuine
  - 2. Artificial
  - 3. Real
  - 4. Different

Question ID : 9895804182  
Chosen Option : 3

Q.1 Select the word which means the same as the group of words given.

9

Something never done or known before

- Ans
- 1. Uncanny
  - 2. Unconditioned
  - 3. Unanimous
  - 4. Unprecedented

Question ID : 9895804191  
Chosen Option : 3

Q.2 Identify the segment in the sentence which contains the grammatical error from the given options.

0

He was deprived from the benefits of college education owing to the death of his father.

- Ans
- 1. the benefits of
  - 2. He was deprived from
  - 3. college education
  - 4. owing to

Question ID : 9895804194  
Chosen Option : 1

Q.2 Fill in the blank with the most appropriate word.

1

Miserly people find it difficult to part \_\_\_\_\_ any of their money for charitable purposes.

- Ans
- 1. about
  - 2. with
  - 3. from
  - 4. for

Question ID : 9895804200  
Chosen Option : 1

Q.2 Select the synonym of the given word.

2

FAÇADE

- Ans
- 1. Ceiling
  - 2. Elevation
  - 3. Interior
  - 4. Frontage

Question ID : 9895804183  
Chosen Option : 4

Q.2 Identify the segment in the sentence which contains the grammatical error from the given options.

3

When he returned to the dining-room the guests left and the servants were clearing the tables.

- Ans
- 1. to the dining-room
  - 2. were clearing
  - 3. When he
  - 4. the guests left

Question ID : 9895804195  
Chosen Option : 3

Q.2 Select the most appropriate option to substitute the underlined segment in the given sentence. If there is no need to substitute it, select No Improvement.

4

Subhash Palekar a farmer received the Padma Shri award this year in his campaign for zero budget natural farming.

- Ans
- 1. at his campaign with zero budget
  - 2. for his campaign for zero budget
  - 3. No Improvement
  - 4. for his campaign to zero budget

Question ID : 9895804199  
Chosen Option : 1

Q.2 Select the correctly spelt word.

5

- Ans
- 1. Leisure
  - 2. Lisure
  - 3. Leisour

✗ 4. Liesure

Question ID : 9895804188  
Chosen Option : 1

Section : Hindi Language

Q.1 रिक्त स्थान को भरने के लिए सबसे उपयुक्त शब्द का चयन करें।

तुम्हारा पत्र पढ़कर \_\_\_\_\_ प्रसन्नता हुई।

- Ans
- ✓ 1. अभिन्न
  - ✗ 2. अत्यंत
  - ✗ 3. भयानक
  - ✗ 4. उन्नत

Question ID : 9895803578  
Chosen Option : --

Q.2 दिए गए वाक्य में रेखांकित खंड को प्रतिस्थापित करने के लिए उपयुक्त विकल्प का चयन करें।

सेठजी मंदिर में गए, उन्होंने यहाँ आकर गरीबों को कंबल बाँटे।

- Ans
- ✓ 1. उन्होंने वहाँ आकर
  - ✗ 2. उन्होंने यहाँ जाकर
  - ✗ 3. उन्होंने यहाँ हटकर
  - ✗ 4. उन्होंने वहाँ जाकर

Question ID : 9895803574  
Chosen Option : --

Q.3 दिए गए शब्द के पर्यायवाची शब्द का चयन करें।

हिम

- Ans
- ✗ 1. बर्फ
  - ✗ 2. वायु
  - ✓ 3. जल
  - ✗ 4. अग्नि

Question ID : 9895803588  
Chosen Option : --

Q.4 दिए गए वाक्य में रेखांकित खंड को प्रतिस्थापित करने के लिए उपयुक्त विकल्प का चयन करें।

ऋतु परिवर्तन के कारण मनाए जाने वाले त्योहार हमें प्रकृति से निकट ले जाते हैं।

- Ans
- ✗ 1. प्रकृति के लिए निकट ले जाते हैं।
  - ✗ 2. प्रकृति की निकट ले जाते हैं।
  - ✓ 3. प्रकृति को निकट ले जाते हैं।

✗ 4. प्रकृति के निकट ले जाते हैं।

Question ID : 9895803573  
Chosen Option : --

Q.5 दिए गए वाक्य का वह भाग ज्ञात करें जिसमें कोई त्रुटि है।

मन की शक्ति जैसे तो प्रकृति की देन है, फिर भी इसकी आंशिक निर्माण माता-पिता पर निर्भर करता है।

- Ans
- ✓ 1. मन की शक्ति
  - ✗ 2. फिर भी इसकी आंशिक निर्माण
  - ✗ 3. माता-पिता पर निर्भर करता है।
  - ✗ 4. जैसे तो प्रकृति की देन है,

Question ID : 9895803570  
Chosen Option : --

Q.6 सही वर्तनी वाले शब्द का चयन करें।

- Ans
- ✗ 1. आक्रषक
  - ✗ 2. अकार्षक
  - ✗ 3. आकर्शक
  - ✓ 4. आकर्षक

Question ID : 9895803594  
Chosen Option : --

Q.7 निम्नलिखित में से उस विकल्प का चयन करें जो ' आग में घी डालना ' मुहावरे का अर्थ व्यक्त करता है।

- Ans
- ✗ 1. आग में घी डालकर हवन करना
  - ✗ 2. बहुत अधिक क्रोध करना
  - ✓ 3. क्रोध को और भड़काना
  - ✗ 4. आग जलाना

Question ID : 9895803590  
Chosen Option : --

Q.8 दिए गए शब्द के पर्यायवाची शब्द का चयन करें।

कुंतल

- Ans
- ✓ 1. बाण
  - ✗ 2. बालू
  - ✗ 3. बाघ
  - ✗ 4. केश

Question ID : 9895803589  
Chosen Option : --

Q.9



रिक्त स्थान को भरने के लिए सबसे उपयुक्त शब्द का चयन करें।

हमें पेड़-पौधों की \_\_\_\_\_ करनी चाहिए।

- Ans
- 1. देखभाल
  - 2. उपेक्षा
  - 3. पिटाई
  - 4. कटाई

Question ID : 9895803576  
Chosen Option : --

Q.1<sub>0</sub> दिये गये वाक्यांश के लिए एक शब्द दीजिये।

कम खाने वाला

- Ans
- 1. मांसाहारी
  - 2. शाकाहारी
  - 3. सर्वाहारी
  - 4. अल्पाहारी

Question ID : 9895803592  
Chosen Option : --

Q.1<sub>1</sub> दिए गए शब्द का विलोम चुनें।

शुद्ध

- Ans
- 1. पवित्र
  - 2. गलत
  - 3. अशुद्ध
  - 4. विरुद्ध

Question ID : 9895803586  
Chosen Option : --

Q.1<sub>2</sub> दिए गए वाक्य का वह भाग ज्ञात करें जिसमें कोई त्रुटि है।

सामान्य जनता को जागृत करने के लिए पुस्तकें प्रकाशित किये जा रहे हैं।

- Ans
- 1. जागृत करने के लिए
  - 2. किये जा रहे हैं।
  - 3. सामान्य जनता को
  - 4. पुस्तकें प्रकाशित

Question ID : 9895803572  
Chosen Option : --



Q.1 दिए गए वाक्य में रेखांकित खंड को प्रतिस्थापित करने के लिए उपयुक्त विकल्प का चयन करें।

बादल फटने से डेढ़ सौ व्यक्तियों का मृत्यु हो गई।

Ans

1. डेढ़ सौ व्यक्तियों को मृत्यु हो गई।  
 2. डेढ़ सौ व्यक्तियों की मृत्यु हो गई।  
 3. डेढ़ सौ व्यक्तियों के मृत्यु हो गई।  
 4. डेढ़ सौ व्यक्तियों से मृत्यु हो गई।

Question ID : 9895803575  
Chosen Option : --

Q.1 दिए गए शब्द का विलोम चुनें।

क्रय

Ans

1. निर्यात  
 2. अहित  
 3. बंधन  
 4. विक्रय

Question ID : 9895803587  
Chosen Option : --

Q.1 रिक्त स्थान को भरने के लिए सबसे उपयुक्त शब्द का चयन करें।

में उसकी \_\_\_\_\_ को देखकर मुग्ध हो गया।

Ans

1. बेबसी  
 2. क्रोध  
 3. विफलता  
 4. सुन्दरता

Question ID : 9895803577  
Chosen Option : --

Comprehension:

दिए गए अनुच्छेद में कुछ शब्द हटा दिए गए हैं। दिए गए विकल्पों की सहायता से रिक्त स्थान भरें। प्रत्येक संख्या के लिए सबसे उपयुक्त विकल्प का चयन करें।

समझने वाली एक महत्त्वपूर्ण बात यह भी है कि सारी \_\_\_\_\_ (1) हमारे अकेले की नहीं होती। सारे \_\_\_\_\_ (2) हमारे चढ़ने के लिए नहीं होते। कुछ चढ़ाइयाँ ऐसी भी होती हैं जो पूरे \_\_\_\_\_ (3) को एक साथ चढ़नी होती है और यह बात पूरे समाज को समझाना भी अपने आप में पहाड़ होता है। मगर इस पर \_\_\_\_\_ (4) का दायित्व भी उन \_\_\_\_\_ (5) की होती है जिन्हें यह पहाड़ दिखाई देता है।

SubQuestion No : 16

Q.1  
6 गद्यांश में संकेतित रिक्त स्थान (1) के लिए उपयुक्त शब्द होगा -

- Ans
- 1. नदियाँ
  - 2. निर्णय
  - 3. जवाब
  - 4. लड़ाइयाँ

Question ID : 9895803581  
Chosen Option : --

Comprehension:

दिए गए अनुच्छेद में कुछ शब्द हटा दिए गए हैं। दिए गए विकल्पों की सहायता से रिक्त स्थान भरें। प्रत्येक संख्या के लिए सबसे उपयुक्त विकल्प का चयन करें।

समझने वाली एक महत्वपूर्ण बात यह भी है कि सारी \_\_\_\_\_(1) हमारे अकेले की नहीं होती। सारे \_\_\_\_\_(2) हमारे चढ़ने के लिए नहीं होते। कुछ चढ़ाइयाँ ऐसी भी होती हैं जो पूरे \_\_\_\_\_(3) को एक साथ चढ़नी होती है और यह बात पूरे समाज को समझाना भी अपने आप में पहाड़ होता है। मगर इस पर \_\_\_\_\_(4) का दायित्व भी उन \_\_\_\_\_(5) की होती है जिन्हें यह पहाड़ दिखाई देता है।

SubQuestion No : 17

Q.1  
7 गद्यांश में संकेतित रिक्त स्थान (2) के लिए उपयुक्त शब्द होगा -

- Ans
- 1. सोच
  - 2. पहाड़
  - 3. किताब
  - 4. सागर

Question ID : 9895803582  
Chosen Option : --

Comprehension:

दिए गए अनुच्छेद में कुछ शब्द हटा दिए गए हैं। दिए गए विकल्पों की सहायता से रिक्त स्थान भरें। प्रत्येक संख्या के लिए सबसे उपयुक्त विकल्प का चयन करें।

समझने वाली एक महत्वपूर्ण बात यह भी है कि सारी \_\_\_\_\_(1) हमारे अकेले की नहीं होती। सारे \_\_\_\_\_(2) हमारे चढ़ने के लिए नहीं होते। कुछ चढ़ाइयाँ ऐसी भी होती हैं जो पूरे \_\_\_\_\_(3) को एक साथ चढ़नी होती है और यह बात पूरे समाज को समझाना भी अपने आप में पहाड़ होता है। मगर इस पर \_\_\_\_\_(4) का दायित्व भी उन \_\_\_\_\_(5) की होती है जिन्हें यह पहाड़ दिखाई देता है।

SubQuestion No : 18

Q.1  
8

गद्यांश में संकेतित रिक्त स्थान (3) के लिए उपयुक्त शब्द होगा -

- Ans
- 1. धूप
  - 2. समाज
  - 3. स्थान
  - 4. चुनाव

Question ID : 9895803583  
Chosen Option : --

Comprehension:

दिए गए अनुच्छेद में कुछ शब्द हटा दिए गए हैं। दिए गए विकल्पों की सहायता से रिक्त स्थान भरें। प्रत्येक संख्या के लिए सबसे उपयुक्त विकल्प का चयन करें।

समझने वाली एक महत्वपूर्ण बात यह भी है कि सारी \_\_\_\_\_(1) हमारे अकेले की नहीं होती। सारे \_\_\_\_\_(2) हमारे चढ़ने के लिए नहीं होते। कुछ चढ़ाइयाँ ऐसी भी होती हैं जो पूरे \_\_\_\_\_(3) को एक साथ चढ़नी होती है और यह बात पूरे समाज को समझाना भी अपने आप में पहाड़ होता है। मगर इस पर \_\_\_\_\_(4) का दायित्व भी उन \_\_\_\_\_(5) की होती है जिन्हें यह पहाड़ दिखाई देता है।

SubQuestion No : 19

Q.1 गद्यांश में संकेतित रिक्त स्थान (4) के लिए उपयुक्त शब्द होगा -

- Ans
- 1. खाने
  - 2. सोने
  - 3. हँसने
  - 4. चढ़ने

Question ID : 9895803584  
Chosen Option : --

Comprehension:

दिए गए अनुच्छेद में कुछ शब्द हटा दिए गए हैं। दिए गए विकल्पों की सहायता से रिक्त स्थान भरें। प्रत्येक संख्या के लिए सबसे उपयुक्त विकल्प का चयन करें।

समझने वाली एक महत्वपूर्ण बात यह भी है कि सारी \_\_\_\_\_(1) हमारे अकेले की नहीं होती। सारे \_\_\_\_\_(2) हमारे चढ़ने के लिए नहीं होते। कुछ चढ़ाइयाँ ऐसी भी होती हैं जो पूरे \_\_\_\_\_(3) को एक साथ चढ़नी होती है और यह बात पूरे समाज को समझाना भी अपने आप में पहाड़ होता है। मगर इस पर \_\_\_\_\_(4) का दायित्व भी उन \_\_\_\_\_(5) की होती है जिन्हें यह पहाड़ दिखाई देता है।

SubQuestion No : 20

Q.2  
0



गद्यांश में संकेतित रिक्त स्थान (5) के लिए उपयुक्त शब्द होगा -

- Ans
- 1. व्यक्तियों
  - 2. दुखों
  - 3. सुखों
  - 4. रोने

Question ID : 9895803585  
Chosen Option : --

Q.2  
1 निम्नलिखित में से उस विकल्प का चयन करें जो 'आटे दाल का भाव मालूम होना' मुहावरे का अर्थ व्यक्त करता है।

- Ans
- 1. महंगाई का बढ़ना
  - 2. आटे और दाल का भाव बताना
  - 3. कठिनाई का ज्ञान होना
  - 4. परिस्थिति से भागना

Question ID : 9895803591  
Chosen Option : --

Q.2  
2 सही वर्तनी वाले शब्द का चयन करें।

- Ans
- 1. प्राकृत्रिक
  - 2. प्रकृतिक
  - 3. प्राकृतिक
  - 4. पारकृतिक

Question ID : 9895803595  
Chosen Option : --

Q.2  
3 दिए गए वाक्य का वह भाग ज्ञात करें जिसमें कोई त्रुटि है।

अतीत की घटनाओं से ही व्यक्ति सीखना सकता है और प्रगति के पथ पर जा सकता है।

- Ans
- 1. और प्रगति के पथ पर
  - 2. जा सकता है।
  - 3. अतीत की घटनाओं से ही
  - 4. व्यक्ति सीखना सकता है

Question ID : 9895803571  
Chosen Option : --

Q.2  
4 दिये गये वाक्यांश के लिए एक शब्द दीजिये।

जो भूमि उपजाऊ हो

- Ans
- 1. बेजान
  - 2. कँटीली
  - 3. उर्वर
  - 4. बंजर

Question ID : 9895803593  
Chosen Option : --

Q.2  
5 रिक्त स्थान को भरने के लिए सबसे उपयुक्त शब्द का चयन करें।

गौरव सौरभ की \_\_\_\_\_ अधिक मोटा है।

- Ans
- 1. उपेक्षा
  - 2. तुलना
  - 3. ज्यादा
  - 4. अपेक्षा

Question ID : 9895803579  
Chosen Option : --