

Combined Graduate Level Examination 2020 Tier II

Roll Number	www.govtjobsalert.in
Candidate Name	www.govtjobsalert.in
Venue Name	Ion Digital Zone IDZ1 Mundka
Exam Date	03/02/2022
Exam Time	9:00 AM - 11:00 AM
Subject	Paper I Quantitative abilities

Section : Quantitative abilities

Q.1 A person saves $33\frac{1}{3}\%$ of his income. If the saving increases by 22% and the expenditure increases by 10%, then the percentage increase in his income is:

- Ans**
- 1. 18%
 - 2. 14%
 - 3. 16%
 - 4. 22%

Question ID : 65497840201
Status : Answered
Chosen Option : 2

Q.2 P can finish a work in 18 days. When he had worked for 5 days, Q joined him. If both of them together completed the remaining work in $\frac{13}{5}$ days, then in how many days can Q alone finish $66\frac{2}{3}\%$ of the same work?

- Ans**
- 1. 5
 - 2. 4
 - 3. 2
 - 4. 3

Question ID : 65497840229
Status : Answered
Chosen Option : 4

Q.3 In $\triangle ABC$, $AB = 20$ cm, $BC = 7$ cm and $CA = 15$ cm. Side BC is produced to D such that $\triangle DAB \sim \triangle DCA$. DC is equal to:

- Ans**
- 1. 9 cm
 - 2. 8 cm
 - 3. 10 cm
 - 4. 7 cm

Question ID : 65497840247
Status : Marked For Review
Chosen Option : 1

Q.4 The areas of three adjacent faces of a cuboidal solid block of wax are 216 cm^2 , 96 cm^2 and 144 cm^2 . It is melted and 8 cubes of the same size are formed from it. What is the lateral surface area (in cm^2) of 3 such cubes?

- Ans**
- 1. 648
 - 2. 432
 - 3. 576
 - 4. 288

Question ID : **65497840265**
Status : **Marked For Review**
Chosen Option : **3**

Q.5 The ratio of the incomes of A and B in 2020 was 5 : 4. The ratios of their individual incomes in 2020 and 2021 were 4 : 5 and 2 : 3, respectively. If the total income of A and B in 2021 was ₹7,05,600, then what was the income (in ₹) of B in 2021?

- Ans**
- 1. 3,45,600
 - 2. 2,79,700
 - 3. 3,60,000
 - 4. 4,25,900

Question ID : **65497840205**
Status : **Marked For Review**
Chosen Option : **3**

Q.6 In a medical transaction, 17 times the cost price is equal to 8 times the sum of the cost price and the selling price. What is the gain or loss percentage?

- Ans**
- 1. Loss 15%
 - 2. Gain 17.5%
 - 3. Gain 12.5%
 - 4. Loss 30%

Question ID : **65497840212**
Status : **Not Attempted and Marked For Review**
Chosen Option : **--**

Q.7 In an examination, B obtained 20% more marks than those obtained by A, and A obtained 10% less marks than those obtained by C. D obtained 20% more marks than those obtained by C. By what percentage are the marks obtained by D more than those obtained by A?

- Ans**
- 1. $33\frac{1}{3}\%$
 - 2. $13\frac{1}{3}\%$
 - 3. $43\frac{1}{3}\%$
 - 4. $23\frac{1}{3}\%$

Question ID : **65497840202**
Status : **Answered**
Chosen Option : **1**

Q.8 The value of $\frac{(2.53)^3 + (2.47)^3}{25.3 \times 25.3 - 624.91 + 24.7 \times 24.7}$ is 5×10^k , where the value of k is:

- Ans
- 1. -2
 - 2. -1
 - 3. 1
 - 4. 2

Question ID : 65497840190
Status : Marked For Review
Chosen Option : 1

Q.9 The driver of a car, which is travelling at a speed of 75 km/h, locates a bus 80 m ahead of him, travelling in the same direction. After 15 seconds, he finds that the bus is 40 m behind the car. What is the speed of the bus (in km/h)?

- Ans
- 1. 44.2
 - 2. 42.5
 - 3. 47.5
 - 4. 46.2

Question ID : 65497840225
Status : Answered
Chosen Option : 4

Q.10 The value of $17\frac{1}{2}\%$ of $3\frac{1}{4}\%$ of $33\frac{1}{3}\%$ of 7200 is:

- Ans
- 1. 7.65
 - 2. 11.68
 - 3. 13.65
 - 4. 9.65

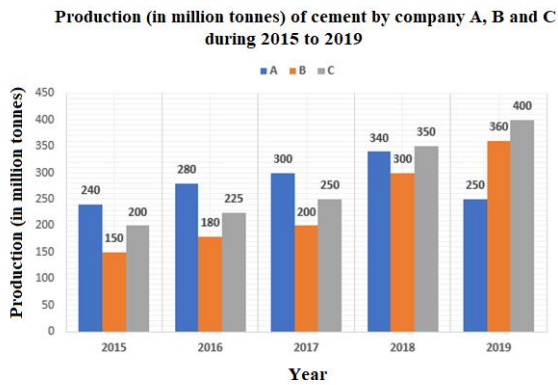
Question ID : 65497840199
Status : Answered
Chosen Option : 3

Q.11 A_1 and A_2 are two regular polygons. The sum of all the interior angles of A_1 is 1080° . Each interior angle of A_2 exceeds its exterior angle by 132° . The sum of the number of sides A_1 and A_2 is:

- Ans
- 1. 21
 - 2. 22
 - 3. 23
 - 4. 24

Question ID : 65497840253
Status : Not Attempted and Marked For Review
Chosen Option : --

Q.12 Study the given graph and answer the question that follows.



In 2020, the production of cement by company C increased by the same percentage as in 2019, over its previous year. The production (in million tonnes) of cement by company C in 2020 (correct to one decimal place) was:

- Ans
- 1. 454.6
 - 2. 455.8
 - 3. 457.1
 - 4. 452.4

Question ID : 65497840280
Status : Answered
Chosen Option : 3

Q.13 The value of $\frac{3(\operatorname{cosec}^2 26^\circ - \tan^2 64^\circ) + (\cot^2 42^\circ - \sec^2 48^\circ)}{\cot(22^\circ - \theta) - \operatorname{cosec}^2(62^\circ + \theta) - \tan(\theta + 68^\circ) + \tan^2(28^\circ - \theta)}$ is:

- Ans
- 1. 3
 - 2. 4
 - 3. -1
 - 4. -2

Question ID : 65497840275
Status : Answered
Chosen Option : 4

Q.14 The value of $11.\overline{4} + 22.5\overline{67} - 33.5\overline{9}$ is:

- Ans
- 1. $40.\overline{12}$
 - 2. $4.\overline{12}$
 - 3. $0.4\overline{12}$
 - 4. $0.04\overline{12}$

Question ID : 65497840189
Status : Marked For Review
Chosen Option : 3

Q.15 P and Q start a shop with a capital of ₹1,50,000 and ₹4,50,000, respectively. After a year, out of the profit of ₹2,00,000, P gets his share of profit plus some money as his salary that is not a part of the profit. If P gets a total of ₹90,000, what is the amount of salary (in ₹) that he received?

- Ans
- 1. 20,000
 - 2. 25,000
 - 3. 50,000
 - 4. 40,000

Question ID : 65497840220
Status : Answered
Chosen Option : 4

Q.16 If 91% of A is 39% of B, and B is x% of A, then the value of x is:

- Ans
- 1. $\frac{200}{3}$
 - 2. $\frac{700}{3}$
 - 3. $\frac{400}{3}$
 - 4. $\frac{500}{3}$

Question ID : 65497840200
Status : Not Attempted and Marked For Review
Chosen Option : --

Q.17 The average of n numbers is 45. If 60% of the numbers are increased by 5 each and the remaining numbers are decreased by 10 each, then what is the average of the numbers so obtained?

- Ans
- 1. 42
 - 2. 43
 - 3. 46
 - 4. 44

Question ID : 65497840231
Status : Answered
Chosen Option : 4

Q.18 ABCD is a cyclic quadrilateral. Sides AB and DC, when produced, meet at E and sides AD and BC when produced, meet at F. If $\angle ADC = 76^\circ$ and $\angle AED = 55^\circ$, then $\angle AFB$ is equal to:

- Ans
- 1. 34°
 - 2. 26°
 - 3. 29°
 - 4. 27°

Question ID : 65497840251
Status : Answered
Chosen Option : 4

Q.19 If $\cos \theta = \frac{12}{13}$, then the value of $\frac{\sin \theta (1 - \tan \theta)}{\tan \theta (1 + \operatorname{cosec} \theta)}$ is:

Ans

1. $\frac{25}{78}$
2. $\frac{35}{234}$
3. $\frac{35}{108}$
4. $\frac{25}{156}$

Question ID : 65497840271

Status : Marked For Review

Chosen Option : 3

Q.20

If $x^2 - 3x + 1 = 0$, then the value of $\frac{(x^4 + \frac{1}{x^2})}{(x^2 + 5x + 1)}$ is:

Ans

1. $\frac{9}{4}$
2. $\frac{27}{8}$
3. $\frac{5}{2}$
4. 2

Question ID : 65497840235

Status : Answered

Chosen Option : 1

Q.21 A shopkeeper marks an article at such a price that after giving a discount of $12\frac{1}{2}\%$ on the marked price, he still earns a profit of 15%. If the cost price of the article is ₹385, then the sum of the marked price and the selling price (in ₹) of the article is:

Ans

1. 948.75
2. 849.50
3. 984.75
4. 954.75

Question ID : 65497840218

Status : Answered

Chosen Option : 1

Q.22 A and B worked together and received a total of ₹18,000 for 15 days. A's efficiency in the work was 5 times that of B's. The daily wage of A (in ₹) was:

- Ans
- 1. 800
 - 2. 600
 - 3. 1,200
 - 4. 1,000

Question ID : 65497840227
Status : Answered
Chosen Option : 4

Q.23 If $x = 32.5$, $y = 34.6$ and $z = 30.9$, then the value of $x^3 + y^3 + z^3 - 3xyz$ is $0.98k$, where k is equal to:

- Ans
- 1. 1033
 - 2. 933
 - 3. 1026
 - 4. 921

Question ID : 65497840234
Status : Not Attempted and Marked For Review
Chosen Option : --

Q.24 If $\frac{\sec \theta - \tan \theta}{\sec \theta + \tan \theta} = \frac{1}{7}$, θ lies in first quadrant, then the value of $\frac{\operatorname{cosec} \theta + \cot^2 \theta}{\operatorname{cosec} \theta - \cot^2 \theta}$ is:

- Ans
- 1. $\frac{19}{5}$
 - 2. $\frac{22}{3}$
 - 3. $\frac{37}{12}$
 - 4. $\frac{37}{19}$

Question ID : 65497840272
Status : Answered
Chosen Option : 1

Q.25 A sum of money at simple interest amounts to ₹6,000 in 4 years and to ₹6,750 in 7 years at the same rate per cent p.a. of interest. The sum (in ₹) is:

- Ans
- 1. 5,100
 - 2. 4,800
 - 3. 4,000
 - 4. 5,000

Question ID : 65497840210
Status : Answered
Chosen Option : 4

Q.26 The sum of the digits of the least number which when divided by 36, 72, 80 and 88 leaves the remainders 16, 52, 60 and 68, respectively, is:

- Ans
- 1. 17
 - 2. 11
 - 3. 14
 - 4. 16

Question ID : 65497840185

Status : Not Attempted and Marked For Review

Chosen Option : --

Q.27 The expression $(\tan \theta + \cot \theta)(\sec \theta + \tan \theta)(1 - \sin \theta)$, $0^\circ < \theta < 90^\circ$, is equal to:

- Ans
- 1. $\sec \theta$
 - 2. $\operatorname{cosec} \theta$
 - 3. $\cot \theta$
 - 4. $\sin \theta$

Question ID : 65497840266

Status : Answered

Chosen Option : 2

Q.28 A sum of ₹8,400 amounts to ₹11,046 at 8.75% p.a. simple interest in a certain time. What will be the simple interest (in ₹) on a sum of ₹10,800 at the same rate for the same time?

- Ans
- 1. 3,402
 - 2. 3,204
 - 3. 3,024
 - 4. 3,420

Question ID : 65497840208

Status : Answered

Chosen Option : 1

Q.29 The circumference of the base of a cylindrical vessel is 264 cm and its height is 50 cm. The capacity (in litres) of the vessel is:

(Take $\pi = \frac{22}{7}$)

- Ans
- 1. 277.2
 - 2. 278.4
 - 3. 280.6
 - 4. 267.4

Question ID : 65497840261

Status : Answered

Chosen Option : 1

Q.30

The value of $9 \div \left\{ \frac{1}{2} + \frac{1}{3} + \frac{1}{4} + \frac{1}{6} \div \left(\frac{3}{4} - \frac{1}{3} \right) \text{ of } \frac{2}{9} \right\}$ is:

Ans

✓ 1. $\frac{540}{173}$

✗ 2. $\frac{340}{173}$

✗ 3. $\frac{480}{173}$

✗ 4. $\frac{2540}{173}$

Question ID : 65497840194

Status : Not Attempted and Marked For Review

Chosen Option : --

Q.31

A well with inner radius 3 m, is dug 6 m deep. The soil taken out of it has been spread evenly all around it to a width of 2 m to form an embankment. The height (in m) of the embankment is:

Ans

✗ 1. $4\frac{1}{2}$

✗ 2. $4\frac{1}{4}$

✗ 3. $3\frac{1}{4}$

✓ 4. $3\frac{3}{8}$

Question ID : 65497840264

Status : Not Attempted and Marked For Review

Chosen Option : --

Q.32

The expression $\frac{\tan^6 \theta - \sec^6 \theta + 3 \sec^2 \theta \tan^2 \theta}{\tan^2 \theta + \cot^2 \theta + 2}$, $0^\circ < \theta < 90^\circ$, is equal to:

Ans

✗ 1. $\sec^2 \theta \operatorname{cosec}^2 \theta$

✗ 2. $-\sec^2 \theta \operatorname{cosec}^2 \theta$

✗ 3. $\cos^2 \theta \sin^2 \theta$

✓ 4. $-\cos^2 \theta \sin^2 \theta$

Question ID : 65497840267

Status : Not Attempted and Marked For Review

Chosen Option : --

Q.33 A trader bought 640 kg of rice. He sold a part of the rice at 20% profit and the rest at 5% loss. He earned a profit of 15% in the entire transaction. What is the ratio of the quantity of rice that he sold at a loss of 5% to that of the quantity that he sold at a profit of 20%?

- Ans
- 1. 1 : 3
 - 2. 4 : 1
 - 3. 1 : 4
 - 4. 3 : 1

Question ID : 65497840215
Status : Answered
Chosen Option : 3

Q.34 $5^{71} + 5^{72} + 5^{73} + 5^{74} + 5^{75}$ is divisible by which of the following number?

- Ans
- 1. 71
 - 2. 69
 - 3. 89
 - 4. 73

Question ID : 65497840184
Status : Answered
Chosen Option : 1

Q.35 Let x, y, z be fractions such that $x < y < z$. If z is divided by x , the result is $\frac{5}{2}$, which exceeds y by $\frac{7}{4}$. If $x + y + z = 1\frac{11}{12}$, then the ratio of $(z - x) : (y - x)$ is:

- Ans
- 1. 6 : 5
 - 2. 9 : 5
 - 3. 5 : 6
 - 4. 5 : 9

Question ID : 65497840193
Status : Not Attempted and Marked For Review
Chosen Option : --

Q.36 In $\triangle ABC$, D and E are points on the sides BC and AB, respectively, such that $\angle ACB = \angle DEB$. If $AB = 12$ cm, $BE = 5$ cm and $BD : CD = 1 : 2$, then BC is equal to:

- Ans
- 1. $8\sqrt{3}$ cm
 - 2. $5\sqrt{5}$ cm
 - 3. $6\sqrt{5}$ cm
 - 4. $6\sqrt{3}$ cm

Question ID : 65497840246
Status : Not Attempted and Marked For Review
Chosen Option : --

Q.37 An athlete runs 8 times around a circular field of radius 7 m in 3 minutes 40 seconds. His speed (in km/h) is:

(Take $\pi = \frac{22}{7}$)

- Ans**
- 1. $\frac{72}{25}$
 - 2. $\frac{118}{25}$
 - 3. $\frac{144}{25}$
 - 4. $\frac{108}{25}$

Question ID : 65497840223
Status : Answered
Chosen Option : 3

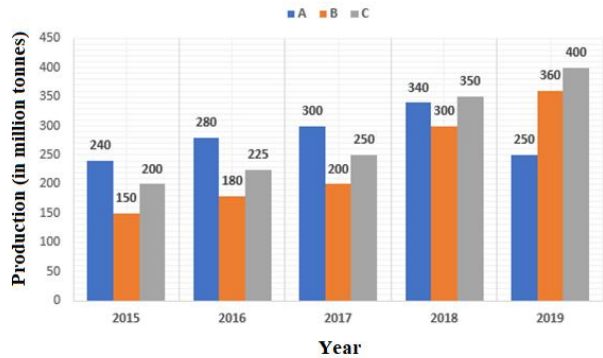
Q.38 Three numbers are in the ratio $\frac{1}{2} : \frac{2}{3} : \frac{3}{4}$. If the difference between the greatest number and the smallest number is 33, then HCF of the three numbers is:

- Ans**
- 1. 9
 - 2. 5
 - 3. 13
 - 4. 11

Question ID : 65497840204
Status : Answered
Chosen Option : 4

Q.39 Study the given graph and answer the question that follows.

Production (in million tonnes) of cement by company A, B and C during 2015 to 2019



The ratio of the total production of cement by company A in 2016 and company C in 2018 to the total production of cement by company B in 2017 and 2019 is:

- Ans**
- 1. 9 : 8
 - 2. 7 : 6
 - 3. 8 : 7
 - 4. 10 : 9

Question ID : 65497840278

Status : Answered

Chosen Option : 1

Q.40 The number of students in a class is 45, out of which $33\frac{1}{3}\%$ are boys and the rest are girls. The average score of girls in Science is $66\frac{2}{3}\%$ more than that of boys. If the average score of all the students is 78, then the average score of girls is:

- Ans**
- 1. 78
 - 2. 54
 - 3. 90
 - 4. 65

Question ID : 65497840203

Status : Answered

Chosen Option : 3

Q.41 In a square ABCD, diagonals AC and BD intersect at O. The angle bisector of $\angle CAB$ meets BD and BC at F and G, respectively. OF : CG is equal to:

- Ans**
- 1. 1 : 2
 - 2. 1 : 3
 - 3. $1 : \sqrt{2}$
 - 4. $1 : \sqrt{3}$

Question ID : 65497840252

Status : Not Attempted and Marked For Review

Chosen Option : --

Q.42 A sum of ₹5,000 is divided into two parts such that the simple interest on the first part for $4\frac{1}{5}$ years at $6\frac{2}{3}\%$ p.a. is double the simple interest on the second part for $2\frac{3}{4}$ years at 4% p.a. The ratio of the second part to the first part is:

- Ans**
- 1. 11 : 14
 - 2. 11 : 13
 - 3. 14 : 11
 - 4. 13 : 11

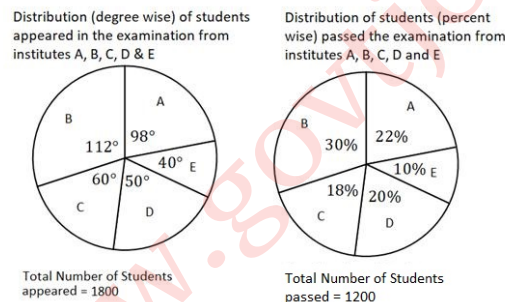
Question ID : 65497840209
 Status : Marked For Review
 Chosen Option : 1

Q.43 The distance between two places A and B is 140 km. Two cars x and y start simultaneously from A and B, respectively. If they move in the same direction, they meet after 7 hours. If they move towards each other, they meet after one hour. What is the speed (in km/h) of car y if its speed is more than that of car x?

- Ans**
- 1. 60
 - 2. 100
 - 3. 80
 - 4. 90

Question ID : 65497840226
 Status : Answered
 Chosen Option : 3

Q.44 Study the given pie charts and answer the question that follows.



If the ratio of the number of boys to that of the girls who passed from institute A is 5 : 6, and 40% of the students who passed from institute D are boys, then the ratio of the number of boys who passed from institute A to that of boys who passed from institute D is:

- Ans**
- 1. 25 : 24
 - 2. 4 : 3
 - 3. 5 : 4
 - 4. 3 : 2

Question ID : 65497840283
 Status : Not Answered
 Chosen Option : --

Q.45 The value of $\frac{3}{70} + \frac{1}{42} + \frac{1}{66} + \frac{3}{286} + \frac{1}{130} + \frac{1}{170}$ is:

Ans

1. $\frac{7}{85}$

2. $\frac{11}{85}$

3. $\frac{9}{85}$

4. $\frac{3}{85}$

Question ID : 65497840192

Status : Not Answered

Chosen Option : --

Q.46 The monthly salary of a person was ₹1,60,000. He used to spend on three heads — Personal and family expenses (P), Taxes (T) and Education loan (E). The rest were his savings. P was 50% of the income, E was 20% of P, and T was 15% of E. When his salary got raised by 30%, he maintained the percentage level of P, but E became 30% of P and T became 20% of E. The sum of the two savings (in ₹) is:

Ans

1. 2,11,680

2. 1,28,160

3. 1,18,620

4. 1,62,810

Question ID : 65497840207

Status : Answered

Chosen Option : 2

Q.47 The radius of a spherical balloon is inflated from 7 cm to 10.5 cm. The percentage increase in its surface area is:

Ans

1. 150%

2. 125%

3. 120%

4. 135%

Question ID : 65497840259

Status : Answered

Chosen Option : 2

Q.48 The volume of a cylinder is 4312 cm^3 . Its curved surface area is one-third of its total surface area. Its curved surface area (in cm^2) is:

(Take $\pi = \frac{22}{7}$)

- Ans**
- 1. 572
 - 2. 528
 - 3. 660
 - 4. 616

Question ID : 65497840263

Status : Not Attempted and Marked For Review

Chosen Option : --

Q.49 The graphs of the equations $7x + 11y = 3$ and $8x + y = 15$ intersect at the point P, which also lies on the graph of the equation:

- Ans**
- 1. $2x + y = 2$
 - 2. $2x - y = 1$
 - 3. $3x + 5y = 1$
 - 4. $3x + 2y = 3$

Question ID : 65497840238

Status : Answered

Chosen Option : 2

Q.50 A dealer gains 20% by selling an article at 25% discount on its marked price. If the cost price of the article is decreased by 15%, how much discount percentage should he now give on the same marked price so as to earn the same percentage of profit as before?

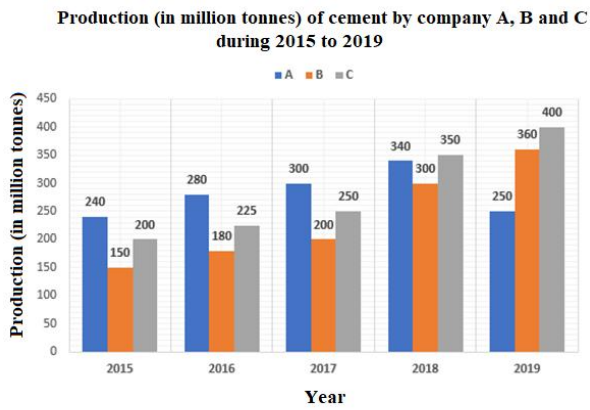
- Ans**
- 1. 32.50%
 - 2. 35%
 - 3. 36.25%
 - 4. 37.75%

Question ID : 65497840217

Status : Not Attempted and Marked For Review

Chosen Option : --

Q.51 Study the given graph and answer the question that follows.



The average production of cement by company B in 2015, 2016 and 2018 is what percentage less than the average production of cement by company C in 2015 and 2017?

Ans

- 1. $7\frac{3}{7}\%$
- 2. $7\frac{1}{7}\%$
- 3. $5\frac{1}{3}\%$
- 4. $6\frac{2}{3}\%$

Question ID : 65497840279

Status : Answered

Chosen Option : 4

Q.52 The total surface area of a solid hemisphere is 942 cm^2 . Its volume (in cm^3) is closest to:

(Take $\pi = 3.14$)

Ans

- 1. 2089
- 2. 2093
- 3. 2037
- 4. 2097

Question ID : 65497840258

Status : Marked For Review

Chosen Option : 2

Q.53 Two pipes A and B can fill a tank in 12 minutes and 24 minutes, respectively, while a third pipe C can empty the full tank in 32 minutes. All the three pipes are opened simultaneously. However, pipe C is closed 2 minutes before the tank is filled. In how much time (in minutes) will the tank be full?

Ans

- 1. 9
- 2. 10
- 3. 12
- 4. 8

Question ID : 65497840230

Status : Answered

Chosen Option : 4

Q.54 AB is a chord in the minor segment of a circle with centre O. C is a point on the minor arc (between A and B). The tangents to the circle at A and B meet at a point P. If $\angle ACB = 108^\circ$, then $\angle APB$ is equal to:

- Ans
- 1. 36°
 - 2. 54°
 - 3. 27°
 - 4. 18°

Question ID : 65497840250
Status : Answered
Chosen Option : 1

Q.55 A solid metallic sphere of radius 4 cm is melted and recast into spheres of 2 cm each. What is the ratio of the surface area of the original sphere to the sum of surface areas of the spheres, so formed?

- Ans
- 1. 2 : 1
 - 2. 2 : 3
 - 3. 1 : 2
 - 4. 1 : 4

Question ID : 65497840260
Status : Answered
Chosen Option : 3

Q.56 Two circles of radius 13 cm and 15 cm intersect each other at points A and B. If the length of the common chord is 24 cm, then what is the distance between their centres?

- Ans
- 1. 12 cm
 - 2. 16 cm
 - 3. 14 cm
 - 4. 18 cm

Question ID : 65497840249
Status : Answered
Chosen Option : 3

Q.57 The value of $15 \div 8 - \frac{5}{4}$ of $\left(\frac{8}{3} \times \frac{9}{16}\right) + \left(\frac{9}{8} \times \frac{3}{4}\right) - \left(\frac{5}{32} \div \frac{5}{7}\right) + \frac{3}{8}$ is:

- Ans
- 1. 0
 - 2. 1
 - 3. 2
 - 4. 3

Question ID : 65497840187
Status : Answered
Chosen Option : 2

Q.58 By selling an article for ₹2,200, a profit of 10% is earned. If the same article is sold for ₹2,600, then what will be the gain percentage?

- Ans
- 1. 20%
 - 2. 15%
 - 3. 37%
 - 4. 30%

Question ID : 65497840214
Status : Answered
Chosen Option : 4

Q.59 If $\sqrt{1 + \frac{\sqrt{3}}{2}} - \sqrt{1 - \frac{\sqrt{3}}{2}} = c$, then the value of c is:

- Ans
- 1. 1
 - 2. 4
 - 3. 3
 - 4. 2

Question ID : 65497840196
Status : Not Answered
Chosen Option : --

Q.60 A dealer offers a cash discount of 20% and still makes a profit of 20%. If he further sells 8 articles at a rate of 6 articles, then how much percentage above the cost price does he mark on each article?

- Ans
- 1. 77.5%
 - 2. 100%
 - 3. 112.5%
 - 4. 87.5%

Question ID : 65497840216
Status : Not Attempted and Marked For Review
Chosen Option : --

Q.61 Let p, q, r and s be positive natural numbers having three exact factors including 1 and the number itself. If $q > p$ and both are two-digit numbers, and $r > s$ and both are one-digit numbers, then the value of the

expression $\frac{p-q-1}{r-s}$ is:

- Ans
- 1. $-s - 1$
 - 2. $s - 1$
 - 3. $1 - s$
 - 4. $s + 1$

Question ID : 65497840186
Status : Not Attempted and Marked For Review
Chosen Option : --

Q.62 A sum of ₹50,250 is divided into two parts such that the simple interest on the first part for $7\frac{1}{2}$ years at $8\frac{1}{3}$ % p.a. is $\frac{5}{2}$ times the simple interest on the second part for $5\frac{1}{4}$ years at 8% p.a. What is the difference (in ₹) between the two parts?

- Ans
- 1. 10,275
 - 2. 12,750
 - 3. 12,570
 - 4. 15,270

Question ID : 65497840211
Status : Answered
Chosen Option : 2

Q.63 If $27x^3 - 64y^3 = (Ax + By)(Cx^2 - Dy^2 + 12xy)$, then the value of $4A + B + 3C + 2D$ is:

- Ans
- 1. 5
 - 2. 3
 - 3. -3
 - 4. -4

Question ID : 65497840233
Status : Answered
Chosen Option : 2

Q.64 The expression $\frac{\cos^4 \theta - \sin^4 \theta + 2 \sin^2 \theta + 3}{(\operatorname{cosec} \theta + \cot \theta + 1)(\operatorname{cosec} \theta - \cot \theta + 1) - 2}$, $0^\circ < \theta < 90^\circ$, is equal to:

- Ans
- 1. $\frac{1}{2} \sin \theta$
 - 2. $2 \sin \theta$
 - 3. $\sec \theta$
 - 4. $2 \operatorname{cosec} \theta$

Question ID : 65497840268
Status : Marked For Review
Chosen Option : 4

Q.65 The value of $(0.3)^{\left[\frac{(200 - 146)}{(3 \times 3 \times 3)} - 3\right]}$ is:

Ans

✓ 1. $\frac{10}{3}$

✗ 2. $\frac{5}{3}$

✗ 3. $\frac{7}{3}$

✗ 4. $\frac{8}{3}$

Question ID : 65497840191

Status : Answered

Chosen Option : 1

Q.66 The expression $\frac{(1 - \sin \theta + \cos \theta)^2 (1 - \cos \theta) \sec^3 \theta \operatorname{cosec}^2 \theta}{(\sec \theta - \tan \theta)(\tan \theta + \cot \theta)}$, $0^\circ < \theta < 90^\circ$, is equal to:

Ans

✗ 1. $\sin \theta$

✗ 2. $2 \cos \theta$

✗ 3. $\cot \theta$

✓ 4. $2 \tan \theta$

Question ID : 65497840270

Status : Not Attempted and Marked For Review

Chosen Option : --

Q.67 The value of $\frac{(\cos 9^\circ + \sin 81^\circ)(\sec 9^\circ + \operatorname{cosec} 81^\circ)}{\operatorname{cosec}^2 71^\circ + \cos^2 15^\circ - \tan^2 19^\circ + \cos^2 75^\circ}$ is:

Ans

✗ 1. 1

✗ 2. 4

✗ 3. -3

✓ 4. 2

Question ID : 65497840274

Status : Answered

Chosen Option : 1

Q.68 In $\triangle ABC$, $\angle A = 50^\circ$, BE and CF are perpendiculars on AC and AB at E and F, respectively. BE and CF intersect at H. The bisectors of $\angle HBC$ and $\angle HCB$ intersect at P. $\angle BPC$ is equal to:

Ans

✓ 1. 155°

✗ 2. 100°

✗ 3. 115°

✗ 4. 120°

Question ID : 65497840245

Status : Not Attempted and Marked For Review

Chosen Option : --

Q.69 If $\frac{\sqrt{26-7\sqrt{3}}}{\sqrt{14+5\sqrt{3}}} = \frac{b+a\sqrt{3}}{11}$, $b > 0$, then what is the value of $\sqrt{(b-a)}$?

- Ans
- ✓ 1. 5
 - ✗ 2. 25
 - ✗ 3. 12
 - ✗ 4. 9

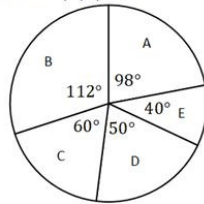
Question ID : 65497840195

Status : Not Attempted and Marked For Review

Chosen Option : --

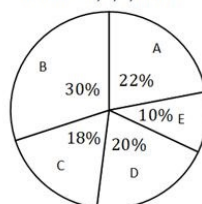
Q.70 Study the given pie charts and answer the question that follows.

Distribution (degree wise) of students appeared in the examination from institutes A, B, C, D & E



Total Number of Students appeared = 1800

Distribution of students (percent wise) passed the examination from institutes A, B, C, D and E



Total Number of Students passed = 1200

The number of students who passed from institute C exceeds the number of students who appeared from institute E is x . The value of x lies between:

- Ans
- ✗ 1. 18 and 22
 - ✓ 2. 14 and 18
 - ✗ 3. 10 and 14
 - ✗ 4. 22 and 26

Question ID : 65497840281

Status : Answered

Chosen Option : 2

Q.71 If $\frac{\sin^2 \theta}{\cos^2 \theta - 3 \cos \theta + 2} = 1$, θ lies in the first quadrant, then the value of $\frac{\tan^2 \frac{\theta}{2} + \sin^2 \frac{\theta}{2}}{\tan \theta + \sin \theta}$ is:

- Ans
- ✗ 1. $\frac{2\sqrt{3}}{27}$
 - ✗ 2. $\frac{5\sqrt{3}}{27}$
 - ✗ 3. $\frac{2\sqrt{3}}{9}$
 - ✓ 4. $\frac{7\sqrt{3}}{54}$

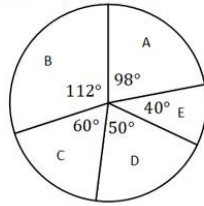
Question ID : 65497840273

Status : Not Attempted and Marked For Review

Chosen Option : --

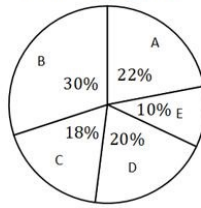
Q.72 Study the given pie charts and answer the question that follows.

Distribution (degree wise) of students appeared in the examination from institutes A, B, C, D & E



Total Number of Students appeared = 1800

Distribution of students (percent wise) passed the examination from institutes A, B, C, D and E



Total Number of Students passed = 1200

The number of students who appeared from institute B is what percentage more than the total number of students who passed from institutes A and C?

- Ans
- ✓ 1. $16\frac{2}{3}\%$
 - ✗ 2. $15\frac{1}{3}\%$
 - ✗ 3. $14\frac{1}{7}\%$
 - ✗ 4. $7\frac{2}{7}\%$

Question ID : 65497840282

Status : Answered

Chosen Option : 1

Q.73 Three sides of a triangle are $\sqrt{a^2 + b^2}$, $\sqrt{(2a)^2 + b^2}$ and $\sqrt{a^2 + (2b)^2}$ units. What is the area (in unit squares) of the triangle?

- Ans
- ✗ 1. $\frac{5}{2}ab$
 - ✗ 2. $3ab$
 - ✗ 3. $4ab$
 - ✓ 4. $\frac{3}{2}ab$

Question ID : 65497840242

Status : Not Attempted and Marked For Review

Chosen Option : --

Q.74 If $\frac{\sqrt{38-5\sqrt{3}}}{\sqrt{26+7\sqrt{3}}} = \frac{a+b\sqrt{3}}{23}$, $b > 0$, then the value of $(b - a)$ is:

- Ans
- ✗ 1. 7
 - ✗ 2. 18
 - ✓ 3. 29
 - ✗ 4. 11

Question ID : 65497840197

Status : Not Attempted and Marked For Review

Chosen Option : --

Q.75 In an examination, the number of students who passed and the number of students who failed were in the ratio 25 : 4. If one more student had appeared and passed and the number of failed students was 3 less than earlier, the ratio of passed students to failed students would have become 22 : 3. What is the difference between the number of students who, initially, passed the examination and the number of students who failed the examination?

- Ans**
- 1. 132
 - 2. 126
 - 3. 174
 - 4. 150

Question ID : 65497840206

Status : Not Attempted and Marked For Review

Chosen Option : --

Q.76 What is the area (in unit squares) of the triangle enclosed by the graphs of $2x + 5y = 12$, $x + y = 3$ and the x-axis?

- Ans**
- 1. 2.5
 - 2. 3.5
 - 3. 3
 - 4. 4

Question ID : 65497840239

Status : Answered

Chosen Option : 3

Q.77 In ΔPQR , the bisector of $\angle R$ meets side PQ at S , $PR = 10$ cm, $RQ = 14$ cm and $PQ = 12$ cm. What is the length of SQ ?

- Ans**
- 1. 5 cm
 - 2. 6 cm
 - 3. 7 cm
 - 4. 8 cm

Question ID : 65497840244

Status : Answered

Chosen Option : 3

Q.78 If $x + \frac{1}{x} = 3$, $x \neq 0$, then the value of $x^7 + \frac{1}{x^7}$ is:

- Ans**
- 1. 749
 - 2. 843
 - 3. 746
 - 4. 849

Question ID : 65497840237

Status : Marked For Review

Chosen Option : 2

Q.79 In equilateral $\triangle ABC$, D and E are points on the sides AB and AC , respectively, such that $AD = CE$. BE and CD intersect at F . The measure (in degrees) of $\angle CFB$ is:

- Ans**
- 1. 120°
 - 2. 135°
 - 3. 125°
 - 4. 105°

Question ID : 65497840248

Status : **Not Attempted and Marked For Review**

Chosen Option : --

Q.80 The volume of a right circular cone is 308 cm^3 and the radius of its base is 7 cm. What is the curved surface area (in cm^2) of the cone? (Take $\pi = \frac{22}{7}$)

- Ans**
- 1. $22\sqrt{21}$
 - 2. $44\sqrt{21}$
 - 3. $22\sqrt{85}$
 - 4. $11\sqrt{85}$

Question ID : 65497840256

Status : **Answered**

Chosen Option : 3

Q.81 In $\triangle ABC$, D is a point on BC such that $\angle ADB = 2\angle DAC$, $\angle BAC = 70^\circ$ and $\angle B = 56^\circ$. What is the measure of $\angle ADC$?

- Ans**
- 1. 72°
 - 2. 54°
 - 3. 74°
 - 4. 81°

Question ID : 65497840240

Status : **Answered**

Chosen Option : 1

Q.82 The ratio of the investments of A and B in a business is 7 : 5, and the ratio of their profits at the end of a year is 2 : 5. If A invested the money for 6 months, then for how much time (in months) has B invested his money?

- Ans**
- 1. 12
 - 2. 21
 - 3. 24
 - 4. 18

Question ID : 65497840219

Status : **Answered**

Chosen Option : 2

Q.83 A cylindrical tube, open at both ends, is made of a metal sheet which is 0.5 cm thick. Its outer radius is 4 cm and length is 2 m. How much metal (in cm^3) has been used in making the tube?

- Ans
- 1. 800π
 - 2. 450π
 - 3. 750π
 - 4. 550π

Question ID : 65497840262
Status : Answered
Chosen Option : 3

Q.84 A vessel contained a solution of acid and water, in which water was 64%. Four litres of the solution was taken out of the vessel and the same quantity of water was added. If the resulting solution contains 30% acid, the quantity (in litres) of the water in the solution, at the beginning in the vessel, was:

- Ans
- 1. 11.36
 - 2. 15.36
 - 3. 8.64
 - 4. 12.64

Question ID : 65497840222
Status : Not Attempted and Marked For Review
Chosen Option : --

Q.85 If $x^4 + y^4 + x^2y^2 = 17\frac{1}{16}$ and $x^2 - xy + y^2 = 5\frac{1}{4}$, then one of the values of $(x - y)$ is:

- Ans
- 1. $\frac{5}{2}$
 - 2. $\frac{3}{4}$
 - 3. $\frac{5}{4}$
 - 4. $\frac{3}{2}$

Question ID : 65497840236
Status : Not Attempted and Marked For Review
Chosen Option : --

Q.86 The base of a right pyramid is a square of side $8\sqrt{2}$ cm and each of its slant edge is of length 10 cm. What is the volume (in cm^3) of the pyramid?

- Ans
- 1. 256
 - 2. 224
 - 3. $426\frac{2}{3}$
 - 4. $96\sqrt{2}$

Question ID : 65497840255
Status : Answered
Chosen Option : 1

Q.87 The base of a right prism is a triangle whose sides are 8 cm, 15 cm and 17 cm, and its lateral surface area is 480 cm^2 . What is the volume (in cm^3) of the prism?

- Ans
- 1. 540
 - 2. 600
 - 3. 720
 - 4. 640

Question ID : 65497840254
Status : Answered
Chosen Option : 3

Q.88 X and Y travel a distance of 90 km each such that the speed of Y is greater than that of X. The sum of their speeds is 100 km/h and the total time taken by both is 3 hours 45 minutes. The ratio of the speed of X to that of Y is:

- Ans
- 1. 2 : 3
 - 2. 1 : 3
 - 3. 2 : 4
 - 4. 1 : 4

Question ID : 65497840224
Status : Not Attempted and Marked For Review
Chosen Option : --

Q.89 Pipes A, B and C can fill a tank in 20, 30 and 60 hours, respectively. Pipes A, B and C are opened at 7 a.m., 8 a.m., and 9 a.m., respectively, on the same day. When will the tank be full?

- Ans
- 1. 4:40 p.m.
 - 2. 5:40 p.m.
 - 3. 6:20 p.m.
 - 4. 7:20 p.m.

Question ID : 65497840228
Status : Answered
Chosen Option : 2

Q.90 If a nine-digit number $789x6378y$ is divisible by 72, then the value of xy is:

- Ans
- 1. 10
 - 2. 12
 - 3. 8
 - 4. 15

Question ID : 65497840188
Status : Answered
Chosen Option : 3

Q.91 The curved surface area of a right circular cone is 2310 cm^2 and its radius is 21 cm. If its radius is increased by 100% and height is reduced by 50%, then its capacity (in litres) will be (correct to one decimal place):

(Take $\pi = \frac{22}{7}$)

- Ans
- 1. 27.8
 - 2. 28.2
 - 3. 26.7
 - 4. 25.9

Question ID : 65497840257
Status : Answered
Chosen Option : 4

Q.92 Two pillars A and B of the same height are on opposite sides of a road which is 40 m wide. The angles of elevation of the tops of the pillars A and B are 30° and 45° , respectively, at a point on the road between the pillars. What is the distance (in m) of the point from the foot of pillar A?

- Ans
- 1. $40(\sqrt{3} - 1)$
 - 2. $20(2 - \sqrt{3})$
 - 3. $20(3 - \sqrt{3})$
 - 4. $39\sqrt{3}$

Question ID : 65497840276
Status : Not Attempted and Marked For Review
Chosen Option : --

Q.93 A lady sold an article for ₹960 at some profit. Had she sold it for ₹800, then there would have been a loss equal to $\frac{1}{3}$ of the initial profit. What was the profit percentage of the article?

- Ans
- 1. $\frac{150}{7}\%$
 - 2. $\frac{50}{7}\%$
 - 3. $\frac{10}{7}\%$
 - 4. $\frac{100}{7}\%$

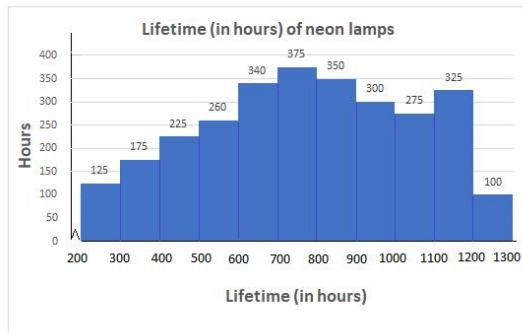
Question ID : 65497840213
Status : Answered
Chosen Option : 4

Q.94 In $\triangle ABC$, $AB = 48$ cm, $BC = 55$ cm and $AC = 73$ cm. If O is the centroid of the triangle, then the length (in cm) of BO (correct to one decimal place) is:

- Ans
- 1. 25.6
 - 2. 24.3
 - 3. 20.4
 - 4. 18.3

Question ID : 65497840243
Status : Answered
Chosen Option : 2

Q.95 Study the given histogram and answer the question that follows.



The total number of neon lamps having lifetime of 800 or more hours is approximately what percentage more than the total number of neon lamps having lifetime of 400 or more hours but less than 800 hours?

- Ans
- 1. 22.7%
 - 2. 12.5%
 - 3. 32.2%
 - 4. 31.8%

Question ID : 65497840277
Status : Answered
Chosen Option : 2

Q.96 In $\triangle PQR$, $PQ = PR$ and S is a point on QR such that $\angle PSQ = 96^\circ + \angle QPS$ and $\angle QPR = 132^\circ$. What is the measure of $\angle PSR$?

- Ans
- 1. 45°
 - 2. 56°
 - 3. 54°
 - 4. 52°

Question ID : 65497840241
Status : Not Attempted and Marked For Review
Chosen Option : --

Q.97 The sum of three fractions A, B and C, $A > B > C$, is $\frac{121}{60}$. When C is divided by B, the resulting fraction is $\frac{9}{10}$, which exceeds A by $\frac{3}{20}$. What is the difference between B and C?

Ans

✓ 1. $\frac{1}{15}$

✗ 2. $\frac{1}{10}$

✗ 3. $\frac{3}{10}$

✗ 4. $\frac{7}{15}$

Question ID : 65497840198

Status : Not Attempted and Marked For Review

Chosen Option : --

Q.98 Mixture A contains chocolate and milk in the ratio 4 : 3 and mixture B contains chocolate and milk in the ratio 5 : 2. A and B are taken in the ratio 5 : 6 and mixed to form a new mixture. The percentage of chocolate in the new mixture is closest to:

Ans

✗ 1. 35%

✗ 2. 69%

✗ 3. 31%

✓ 4. 65%

Question ID : 65497840221

Status : Answered

Chosen Option : 4

Q.99 The expression $\frac{(1-2\sin^2\theta\cos^2\theta)(\cot\theta+1)\cos\theta}{(\sin^4\theta+\cos^4\theta)(1+\tan\theta)\operatorname{cosec}\theta} - 1, 0^\circ < \theta < 90^\circ$, equals:

Ans

✗ 1. $\cos^2\theta$

✓ 2. $-\sin^2\theta$

✗ 3. $\sec^2\theta$

✗ 4. $-\sec^2\theta$

Question ID : 65497840269

Status : Not Answered

Chosen Option : --

Q.100 The average of 25 numbers is 64. The averages of the first 13 numbers and that of the last 13 numbers are 62.8 and 72.2, respectively. If the 12th number is 61, and if the 12th and 13th numbers are excluded, then what is the average of the remaining numbers (correct to one decimal place)?

- Ans**
- 1. 59.2
 - 2. 62.2
 - 3. 60.2
 - 4. 61.5

Question ID : **65497840232**

Status : **Answered**

Chosen Option : **3**

www.govtjobsalert.in