

## Constable GD in CAPFs SSF Rifleman GD in Assam Rifles and Sepoy in NCB Examination 2022

Roll Number	<a href="http://www.govtjobsalert.in">www.govtjobsalert.in</a>
Candidate Name	<a href="http://www.govtjobsalert.in">www.govtjobsalert.in</a>
Venue Name	ION Digital Zone iDZ 1 Sector 62
Exam Date	02/02/2023
Exam Time	9:00 AM - 10:00 AM
Subject	Constable GD Examination 2022

### Section : Part-A-General Intelligence and Reasoning

**Q.1** Seven people, A, B, C, D, E, F and G are sitting in a straight row, facing north. A sits second from the left. Only two people sit between A and C. Only three people sit between D and F and D is an immediate neighbour of A. B is an immediate neighbour of D and E is not an immediate neighbour of C. How many people sit between A and G?

- Ans
- 1. 4
  - 2. 1
  - 3. 2
  - 4. 3

Question ID : 26433056934

Status : Answered

Chosen Option : 4

**Q.2** Which of the following numbers will replace the question mark (?) in the given series?  
1, 3, 6, ?, 20, 37

- Ans
- 1. 8
  - 2. 11
  - 3. 12
  - 4. 9

Question ID : 26433080720

Status : Answered

Chosen Option : 2

**Q.3** Six students are sitting around a circular table facing the centre. F is an immediate neighbour of A. D sits second to the right of E. B is an immediate neighbour of E and sits second to the right of C. F sits second to the right of D. A is not an immediate neighbour of E. Who sit between E and A from the right of A?

- Ans
- 1. C and B
  - 2. D and C
  - 3. F and C
  - 4. F and B

Question ID : 26433092768

Status : Answered

Chosen Option : 3

Q.4 In a certain code language, 'DEVOUR' is written as 'WGEQFT' and 'VARIED' is written as 'ECIKVF'. How will 'BLANKET' be written in that language?

- Ans
- 1. ZNUMCHA
  - 2. YMZPQGH
  - 3. YNZPPGG
  - 4. ZYNPGPG

Question ID : 26433069463  
Status : Answered  
Chosen Option : 3

Q.5 Which of the following numbers will replace the question mark (?) in the given series?  
10, 27, 78, 231, ?, 2067

- Ans
- 1. 640
  - 2. 656
  - 3. 690
  - 4. 665

Question ID : 26433076750  
Status : Answered  
Chosen Option : 3

Q.6 Which two signs should be interchanged to make the below equation mathematically correct?

$$54 + 18 \div 9 - 36 \times 16 = 88$$

- Ans
- 1. ÷ and +
  - 2. + and -
  - 3. × and +
  - 4. ÷ and ×

Question ID : 264330117537  
Status : Answered  
Chosen Option : 3

Q.7 Select the option that is related to the third term in the same way as the second term is related to the first term.

MEMBRANE : LDLAQZMD :: PRIVILEGE : ?

- Ans
- 1. GFDHUHKDFD
  - 2. HGHUHKDFD
  - 3. QSHUHKDFD
  - 4. OQHUHKDFD

Question ID : 26433067262  
Status : Answered  
Chosen Option : 4

Q.8 Which letter-cluster will replace the question mark (?) to complete the given series?  
CPFG, ENHE, ?, IJLA, KHNY

- Ans
- 1. GLKC
  - 2. GLKD
  - 3. GLJC
  - 4. GLLC

Question ID : 26433068571  
Status : Answered  
Chosen Option : 3

Q.9 If '-' means 'division', '+' means 'multiplication', 'x' means 'addition' and '÷' means 'subtraction', which of the following equations is correct?

- Ans  1.  $10 + 3 - 2 \times 9 \div 2 = 21$   
 2.  $20 - 4 + 6 \div 9 \times 4 = 25$   
 3.  $10 \div 2 + 3 \div 9 \times 2 = 8$   
 4.  $20 + 6 - 4 \times 9 \div 6 = 32$

Question ID : 26433085660  
Status : Answered  
Chosen Option : 2

Q.10 Which option represents the correct order of the given words as they would appear in the English dictionary?

- 1 pilot
- 2 pivot
- 3 pipette
- 4 pigeon
- 5 pigment

- Ans  1. 5,4,1,2,3  
 2. 4,3,1,2,5  
 3. 5,2,3,1,4  
 4. 4,5,1,3,2

Question ID : 26433069314  
Status : Answered  
Chosen Option : 4

Q.11 Select the option that is related to the fifth letter-cluster in the same way as the second letter-cluster is related to the first letter-cluster and the fourth letter-cluster is related to the third letter-cluster.

ACBO : PCDB :: JLKM : NLMK :: KJIH : ?

- Ans  1. JIKL  
 2. JILK  
 3. IJKL  
 4. IJLK

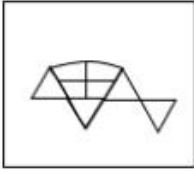
Question ID : 26433080464  
Status : Answered  
Chosen Option : 3

Q.12 Select the option in which question figure is embedded (Rotation is not allowed)



Ans

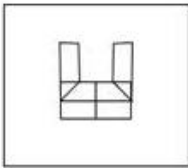
✗ 1.



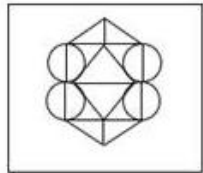
✗ 2.



✗ 3.



✓ 4.



Question ID : 26433070208  
Status : Answered  
Chosen Option : 4

Q.13 एक फोटो को देखते हुए मारिया ने कहा "वह मेरी माँ की माँ की इकलौती बेटी है"। मारिया फोटो में दिख रहे व्यक्ति से किस प्रकार संबंधित है?

Ans

✗ 1. मौसी

✗ 2. बुआ

✓ 3. बेटी

✗ 4. बहन

Question ID : 26433074602  
Status : Answered  
Chosen Option : 3

**Q.14** Three statements are given followed by three conclusions numbered I, II and III. Assuming the statements to be true, even if they seem to be at variance with commonly known facts, decide which of the conclusions logically follow(s) from the statements.

Statements:

All beds are tables.

All cots are tables.

All tables are taps.

Conclusions:

I. All cots are taps.

II. Some taps are tables.

III. Some beds are cots.

- Ans**
- 1. Only conclusions I and III follow
  - 2. All conclusions follow
  - 3. Only conclusions I and II follow
  - 4. Only conclusions II and III follow

Question ID : 26433082314

Status : Answered

Chosen Option : 3

**Q.15** Which of the following letter-clusters will replace the question mark (?) in the given series?

XTEB, UQHE, RNKH, ?, LHQN

- Ans**
- 1. PKOK
  - 2. OKOK
  - 3. PKNJ
  - 4. OKNK

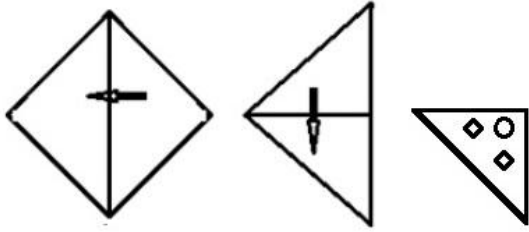
Question ID : 26433076441

Status : Answered

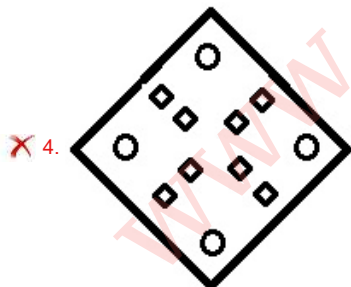
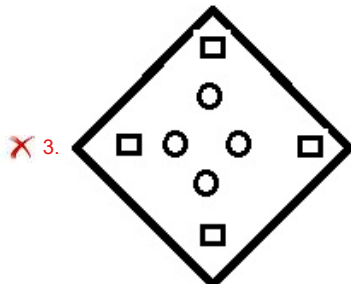
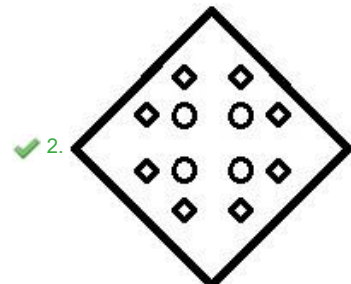
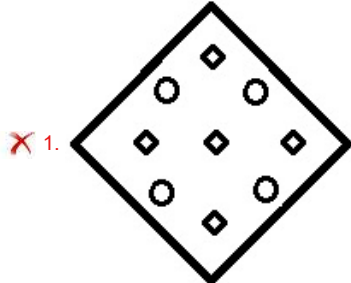
Chosen Option : 4

WWW.GOVtJOBSALERT.IN

Q.16 A paper is folded and cut as shown below. How will it appear when unfolded?



Ans



Question ID : 26433082339  
Status : Answered  
Chosen Option : 2

Q.17 Select the correct mirror image of the given figure when the mirror is placed at MN as shown below.

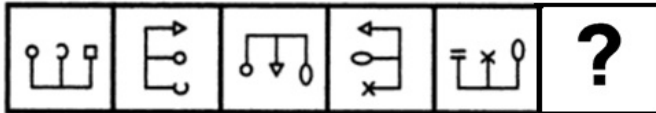


Ans

- 1. QuesTiOonnaiRe
- 2. QuesTiOonnaiRe
- 3. pUesTiOonnaiRe
- 4. pUesTiOonnaiRe

Question ID : 26433085548  
 Status : Answered  
 Chosen Option : 3

Q.18 Select the figure from among the given options that can replace the question mark (?) in the following series.



Ans

- 1. [Option 1]
- 2. [Option 2]
- 3. [Option 3]
- 4. [Option 4]

Question ID : 26433080491  
 Status : Marked For Review  
 Chosen Option : 2

Q.19 Select the option that is related to the fourth term in the same way as the first term is related to the second term and the fifth term is related to the sixth term.  
18 : 45 :: ? : 60 :: 30 : 75

- Ans
- 1. 26
  - 2. 22
  - 3. 20
  - 4. 24

Question ID : 26433069098  
Status : Answered  
Chosen Option : 4

Q.20 In a code language, 'dark colors' is coded as 'yu nu', 'days are bright' is coded as 'wu tu ku', 'nights are dark' is coded as 'ku nu pu', 'paint bright' is coded as 'wu ru'. What is the code for the word 'days'?

- Ans
- 1. wu
  - 2. ku
  - 3. tu
  - 4. ru

Question ID : 26433082273  
Status : Answered  
Chosen Option : 3

Section : Part-B-General Knowledge and General awareness

Q.1 On the basis of status of development, how are resources classified?

- Ans
- 1. Biotic and abiotic
  - 2. Renewable and non-renewable
  - 3. Individual, international and national
  - 4. Potential, developed stock and reserves

Question ID : 26433087887  
Status : Answered  
Chosen Option : 2

Q.2 The 101st constitution amendment act of the Indian Constitution introduced the system of \_\_\_\_\_.

- Ans
- 1. one nation, one tax'
  - 2. one nation, one income'
  - 3. one individual, one tax'
  - 4. one individual, one rate'

Question ID : 264330116210  
Status : Answered  
Chosen Option : 1

Q.3 Sunanda Nair completed her PhD from University of Mumbai for her thesis in "Intrinsic Lyrical Feminism" in which dance form?

- Ans
- 1. Mohiniattam
  - 2. Kuchipudi
  - 3. Bharatnatyam
  - 4. Kathakali

Question ID : 264330115864  
Status : Not Answered  
Chosen Option : --



**Q.4 Who was appointed as the chairperson of Law Commission of India in November 2022?**

- Ans**
- 1. N. K. Singh
  - 2. S.Siva Kumar
  - 3. Justice Ravi R. Tripathi
  - 4. Justice Rituraj Awasthi

Question ID : 264330115027  
Status : Answered  
Chosen Option : 3

**Q.5 Which of the following statements is NOT correct about the Joint Session of the Parliament of India?**

- Ans**
- 1. So far, Joint sittings of the two Houses have taken place on three occasions.
  - 2. The President can summon both the Houses to meet for the Joint Session.
  - 3. The Chairman of Rajya Sabha (Vice President) presides over a Joint Session.
  - 4. Joint session is held to resolve a deadlock between the two Houses of the Parliament.

Question ID : 26433079562  
Status : Answered  
Chosen Option : 3

**Q.6 As of November 2022, who is the President of Nationalist Congress Party, a political party in India?**

- Ans**
- 1. Supriya Sule
  - 2. Nawab Malik
  - 3. Eknath Shinde
  - 4. Sharad Pawar

Question ID : 264330114945  
Status : Answered  
Chosen Option : 4

**Q.7 Which of the following dances is performed by women from the countryside villages of Malwa region in Madhya Pradesh?**

- Ans**
- 1. Padyani
  - 2. Matki dance
  - 3. Thirayattam
  - 4. Dandia Raas

Question ID : 26433071690  
Status : Answered  
Chosen Option : 1

**Q.8 Export of manufactured goods \_\_\_\_\_ trade and commerce.**

- Ans**
- 1. reduces
  - 2. expands
  - 3. contracts
  - 4. weakens

Question ID : 264330115409  
Status : Answered  
Chosen Option : 2

**Q.9 Which of the following is an INCORRECT match, concerning players and the State/UT they were born?**

- Ans**
- 1. Anjum Chopra – New Delhi
  - 2. Saina Nehwal – Haryana
  - 3. Sania Mirza – Maharashtra
  - 4. Mithali Raj – Tamil Nadu

Question ID : 26433089932  
Status : Answered  
Chosen Option : 4

**Q.10 The chemical formula of washing soda is \_\_\_\_\_.**

- Ans**
- 1.  $\text{Na}_2\text{CO}_3 \cdot 10\text{H}_2\text{O}$
  - 2.  $\text{Ca}(\text{OH})_2$
  - 3.  $\text{Na}_2\text{SO}_4$
  - 4.  $\text{NaHCO}_3$

Question ID : 26433089648  
Status : Answered  
Chosen Option : 4

**Q.11 Which of the following is NOT an example of a public sector company?**

- Ans**
- 1. SAIL
  - 2. NSE
  - 3. ONGC
  - 4. BHEL

Question ID : 26433054785  
Status : Answered  
Chosen Option : 2

**Q.12 Currency notes and coins are called fiat money. They are also called \_\_\_\_\_.**

- Ans**
- 1. Legal contract
  - 2. Lease deed
  - 3. Loan deed
  - 4. Legal tender

Question ID : 264330115324  
Status : Answered  
Chosen Option : 1

**Q.13 The fundamental duties are defined under which Article of the Indian Constitution?**

- Ans**
- 1. 53A
  - 2. 50A
  - 3. 51A
  - 4. 52A

Question ID : 26433089950  
Status : Answered  
Chosen Option : 4

**Q.14 Bajrang Punia won the Bronze Medal by defeating Daulet Niyazbekov in which tournament?**

- Ans**
- 1. London Olympics 2012
  - 2. Tokyo Olympics 2020
  - 3. Asian Games 2014
  - 4. Commonwealth Games 2014

Question ID : 264330116278  
Status : Answered  
Chosen Option : 2

**Q.15 The cytoplasm has \_\_\_\_\_ such as ribosomes, mitochondria, and golgi bodies.**

- Ans**
- 1. organelles
  - 2. cells
  - 3. organs
  - 4. tissues

Question ID : 264330115243  
Status : Answered  
Chosen Option : 1

**Q.16 Who among the following was the founder of the Vakataka Dynasty?**

- Ans**
- 1. Pravarasena I
  - 2. Vindhyashakti
  - 3. Pravarasena II
  - 4. Prabhavatigupta

Question ID : 264330115463  
Status : Answered  
Chosen Option : 3

**Q.17 Buddha Purnima, celebrated by the devotees of Gautam Buddha, is celebrated in the Hindu month of \_\_\_\_\_.**

- Ans**
- 1. Chaitra
  - 2. Vaisakha
  - 3. Phalguna
  - 4. Magha

Question ID : 264330115121  
Status : Answered  
Chosen Option : 3

**Q.18 In 1928, the \_\_\_\_\_ was founded at a meeting in Ferozeshah Kotla ground in Delhi. Amongst its leaders were Bhagat Singh, Jatin Das and Ajoy Ghosh.**

- Ans**
- 1. All India Depressed Classes Association
  - 2. Madras Presidency Association
  - 3. Kabui Naga Association
  - 4. Hindustan Socialist Republican Association

Question ID : 264330115705  
Status : Answered  
Chosen Option : 4

Q.19 West Bengal shares its longest border with which country?

- Ans
- 1. Bhutan
  - 2. Nepal
  - 3. Myanmar
  - 4. Bangladesh

Question ID : 264330116102  
Status : Answered  
Chosen Option : 2

Q.20 Three of the following four are auxiliaries to trade, and therefore form a group. Which is the one that does not belong to that group?

- Ans
- 1. Warehousing
  - 2. Transportation
  - 3. Insurance
  - 4. Agriculture

Question ID : 264330115571  
Status : Answered  
Chosen Option : 3

Section : Part-C-Elementary Mathematics

Q.1 The price of a car increases successively by 5%, 10% and 20%, respectively. What is the equivalent change in the price?

- Ans
- 1.  $34\frac{4}{5}\%$
  - 2.  $32\frac{1}{5}\%$
  - 3.  $38\frac{3}{5}\%$
  - 4.  $33\frac{3}{5}\%$

Question ID : 26433076071  
Status : Answered  
Chosen Option : 3

Q.2 A river is running at 2 kmph. A boat goes 40 km upstream from A to B and also returns back from B to A in total 10 hours. The speed of the boat in still water is:

- Ans
- 1. 6.23 kmph
  - 2. 7.97 kmph
  - 3. 7.32 kmph
  - 4. 8.47 kmph

Question ID : 26433080242  
Status : Not Answered  
Chosen Option : --

Q.3 A trader gives two successive discounts of 18% and 20%. If the marked price is ₹11,000, then the selling price is:

- Ans
- 1. ₹6,926
  - 2. ₹6,716
  - 3. ₹7,926
  - 4. ₹7,216

Question ID : 26433080110  
Status : Answered  
Chosen Option : 4

Q.4 In a race of 1000 m, John beats Khan by 120 m. If the speed of John is 40 km/h, then the speed of Khan is:

- Ans
- 1. 28.5 km/h
  - 2. 38.7 km/h
  - 3. 27 km/h
  - 4. 35.2 km/h

Question ID : 26433061169  
Status : Answered  
Chosen Option : 4

Q.5 A can repair 11 benches in an hour and B can repair 5 benches in an hour. Determine how much time they will require to repair 64 benches when they work together?

- Ans
- 1. 3 hours
  - 2. 4 hours
  - 3. 5 hours
  - 4. 6 hours

Question ID : 26433080140  
Status : Answered  
Chosen Option : 2

Q.6 Akash can do a piece of work in 21 days and Diya can do the same work in 63 days. Find the time required to complete the same work if they work on alternate days and Akash starts the work.

- Ans
- 1. 31 days
  - 2. 28 days
  - 3. 29 days
  - 4. 27 days

Question ID : 264330116894  
Status : Answered  
Chosen Option : 1

Q.7 In two ways, a shopkeeper deceives his customer. He dilutes pure honey by 20% with water and raises the price of honey by 15%. He pays Rs.30 per kg for 40 kg of pure honey. What is his total profit from selling it?

- Ans
- 1. Rs.456
  - 2. Rs.468
  - 3. Rs.422
  - 4. Rs.435

Question ID : 26433075848  
Status : Not Answered  
Chosen Option : --

**Q.8** In a trip, Kiran travelled 50 miles per hour for 3 hours on bike. Further he travelled by car for 2 hours at 65 miles per hour. He stopped for 2 hours for rest. After rest he travelled on bike for 4 hours at 80 miles per hour to reach his destination. Find Kiran's average speed for the entire journey. (in miles per hour) (Rounded off to two places of decimals)

- Ans**  1. 54.54  
 2. 65.68  
 3. 60.06  
 4. 50.44

Question ID : 26433079915  
Status : Not Answered  
Chosen Option : --

**Q.9** In 2010, the population of a country was 256080000. By 2020, the population had increased by 10 percent. The population in 2020 is:

- Ans**  1. 291475000  
 2. 281688000  
 3. 275040000  
 4. 266050000

Question ID : 264330116814  
Status : Answered  
Chosen Option : 2

**Q.10** What will be the volume of the largest sphere which can be carved out of a cube of side 6 cm?

- Ans**  1.  $102.26 \text{ cm}^3$   
 2.  $113.14 \text{ cm}^3$   
 3.  $112.15 \text{ cm}^3$   
 4.  $115.13 \text{ cm}^3$

Question ID : 26433066328  
Status : Not Answered  
Chosen Option : --

**Q.11** The present population of a village is 50,000. Due to migration to cities, the population decreases at the rate of 5% every year. Find the population of the village after 2 years.

- Ans**  1. 41525  
 2. 48475  
 3. 45125  
 4. 44875

Question ID : 26433092027  
Status : Answered  
Chosen Option : 3

Q.12 If  $3\frac{1}{3} \div 6\frac{3}{7} \times 1\frac{1}{2} \times 3\frac{1}{7} = (p)^{1/2}$ , then the value of 'p' is:

Ans

1.  $\frac{22}{9}$

2.  $\frac{22}{3}$

3.  $\frac{484}{3}$

4.  $\frac{484}{81}$

Question ID : 26433075135

Status : Answered

Chosen Option : 4

Q.13 If the rate of interest be 16% per annum for the first year, 20% per annum for the second year and 15% per annum for the third year, then find the compound interest on Rs.15,000 for three years.

Ans

1. Rs.8,012

2. Rs.9,012

3. Rs.8,015

4. Rs.9,015

Question ID : 26433064988

Status : Answered

Chosen Option : 2

Q.14 If the third proportional to 8 and 24 is 'A' and the mean proportional of 4 and 16 is 'B', then the value of  $\frac{A}{B}$  is:

Ans

1. 10

2. 12

3. 8

4. 9

Question ID : 26433082393

Status : Answered

Chosen Option : 4

Q.15 The marked price of a mobile phone is ₹16,500. A festival discount of 8% is allowed on it. Further, for cash payment a second discount of 5% is given. The cash payment, in rupees, that is to be made for buying the mobile phone is:

Ans

1. ₹14,671

2. ₹14,872

3. ₹14,512

4. ₹14,421

Question ID : 26433092168

Status : Answered

Chosen Option : 4

**Q.16** A hemispherical bowl is made of thick steel having thickness 0.5 cm. If the external diameter of the bowl is 43 cm, then the capacity of the bowl is:

(Use  $\pi = \frac{22}{7}$ )

- Ans**
- 1. 19404 cm<sup>3</sup>
  - 2. 38808 cm<sup>3</sup>
  - 3. 77616 cm<sup>3</sup>
  - 4. 3696 cm<sup>3</sup>

Question ID : 26433087409  
Status : Not Answered  
Chosen Option : --

**Q.17** Find the LCM of the greatest 2-digit number divisible by 12 and the smallest 2-digit number divisible by 8.

- Ans**
- 1. 96
  - 2. 192
  - 3. 48
  - 4. 384

Question ID : 264330116662  
Status : Answered  
Chosen Option : 1

**Q.18** A grocer sells rice at a profit of 15% and uses weights that are 20% less than the market weights. The total profit earned by him will be:

- Ans**
- 1. 45.37%
  - 2. 53.74%
  - 3. 47.35%
  - 4. 43.75%

Question ID : 26433073009  
Status : Answered  
Chosen Option : 4

**Q.19** The third proportional to 0.1 and 0.12 is :

- Ans**
- 1. 0.24
  - 2. 0.124
  - 3. 0.122
  - 4. 0.144

Question ID : 26433081715  
Status : Answered  
Chosen Option : 4



Q.20 A woman covers a certain distance by car at 75 km/h and immediately returns by the same car to the starting point at 100 km/h. What is the average speed of the car?

Ans

1.  $95\frac{2}{7}$  km/h

2.  $85\frac{5}{7}$  km/h

3.  $93\frac{3}{7}$  km/h

4.  $86\frac{3}{7}$  km/h

Question ID : 26433076070

Status : Answered

Chosen Option : 2

Section : Part-D-English

Q.1 Parts of the following sentence have been given as options. One of them may contain an error. Select the part that contains the error from the given options. If you don't find any error, mark 'No error' as your answer.

The old man think his younger daughter was mocking him.

Ans  1. his younger daughter

2. was mocking him

3. No error

4. The old man think

Question ID : 26433090484

Status : Answered

Chosen Option : 4

Q.2 Select the most appropriate option to fill in the blank.

The article \_\_\_\_\_ several experts on the subject.

Ans  1. sights

2. cites

3. sites

4. sits

Question ID : 26433060331

Status : Answered

Chosen Option : 1

Q.3 Select the most appropriate option that can substitute the underlined segment in the given sentence.

During an office tour to Mumbai, I chanced to meet an old friend.

Ans  1. ran down

2. ran into

3. ran over

4. ran about

Question ID : 26433089092

Status : Answered

Chosen Option : 4

Q.4 Select the most appropriate ANTONYM of the given word.

Steady

- Ans  1. Contrived  
 2. Voluntary  
 3. Undeviating  
 4. Wavering

Question ID : 26433084687  
Status : Answered  
Chosen Option : 4

Q.5 Substitute the underline word with its appropriate synonym.

The crew of the ship was attacked.

- Ans  1. worshipped  
 2. synced  
 3. saved  
 4. assaulted

Question ID : 26433073935  
Status : Answered  
Chosen Option : 4

Q.6 Parts of the given sentence have been given as options. One of them contains a spelling error. Select the option that rectifies the error.

According to a study by BBC across 66 different sports, five out of every six sports now give equal prize money to men and women at the world champonship level.

- Ans  1. wumen  
 2. diferent  
 3. akcross  
 4. championship

Question ID : 26433072040  
Status : Answered  
Chosen Option : 4

Q.7 Select the most appropriate option that can substitute the underlined segment in the given sentence.

Everyone was shocked to see the old man upset and unkempt.

- Ans  1. messy and untidy  
 2. up and doing  
 3. proud and useless  
 4. violent and rigorous

Question ID : 26433099873  
Status : Answered  
Chosen Option : 1

**Q.8 Select the most appropriate ANTONYM of the given word.**  
**Realm**

- Ans**  1. Sky  
 2. Activity  
 3. Kingdom  
 4. Domain

Question ID : 26433084749  
Status : Answered  
Chosen Option : 4

**Q.9 Select the most appropriate meaning of the given idiom.**

**In the fast lane**

- Ans**  1. In great excitement  
 2. In complete fear  
 3. In terrific speed  
 4. In perfect discipline

Question ID : 26433073482  
Status : Answered  
Chosen Option : 1

**Q.10 Select the most appropriate synonym for the given word.**

**False**

- Ans**  1. Unfair  
 2. Genuine  
 3. Correct  
 4. Untrue

Question ID : 26433086372  
Status : Answered  
Chosen Option : 1

**Q.11 Select the most appropriate synonym of the given word.**

**Enmity**

- Ans**  1. Probability  
 2. Pretext  
 3. Variability  
 4. Hostility

Question ID : 26433084666  
Status : Answered  
Chosen Option : 4

**Q.12 Select the most appropriate option to fill in the blank.**

**Neha has \_\_\_\_\_ and won't come to work for a few days.**

- Ans**  1. floo  
 2. flu  
 3. flue  
 4. flew

Question ID : 26433088940  
Status : Answered  
Chosen Option : 2

Q.13 Select the most appropriate meaning of the given idiom.

**Penny wise and pound foolish**

- Ans  1. Serious about wealth but never working hard  
 2. Writing powerfully but speaking poorly  
 3. Careful in trivial matters but wasteful in large  
 4. Good at spending but bad at earning

Question ID : 26433073491  
Status : Answered  
Chosen Option : 4

Q.14 Select the word segment that substitutes (replaces) the bracketed word segment correctly and completes the sentence meaningfully.

After the teacher chose groups, John and Sara (was selected as partners for project), yet Sarah did most of the work.

- Ans  1. have selected as a partners for a project  
 2. were selected as partners for a project  
 3. has selected as a partner for a project  
 4. had selected as partners for project

Question ID : 26433088963  
Status : Answered  
Chosen Option : 4

Q.15 Select the INCORRECTLY spelt word.

- Ans  1. Coutious  
 2. Irrational  
 3. Intelligent  
 4. Excessive

Question ID : 26433087934  
Status : Answered  
Chosen Option : 1

**Comprehension:**

In the following passage some words have been deleted. Fill in the blanks with the help of the alternatives given. Select the most appropriate option for each number.

Summer camp is a terrific idea used primarily by schools to (1)\_\_\_\_\_ pupils to acquire and master new skills. It is an (2)\_\_\_\_\_ outdoor activity. Many parents offer to enrol their kids in summer camps so they can participate in (3)\_\_\_\_\_ activities, discover their talents and passions, and broaden their horizons. Summer camps are (4)\_\_\_\_\_ for all children for ten to fifteen days by various schools or other organisations. These summer camps (5)\_\_\_\_\_ entertaining educational activities like fitness classes, hobby improvement classes, learning lectures, sports activities, musical performances, etc. The pupils' general development and growth are benefitted from these summer camps.

**SubQuestion No : 16**

Q.16 Select the most appropriate answer for blank 1.

- Ans  1. assist  
 2. accelerate  
 3. examine  
 4. hinder

Question ID : 26433089700  
Status : Answered  
Chosen Option : 1

**Comprehension:**

In the following passage some words have been deleted. Fill in the blanks with the help of the alternatives given. Select the most appropriate option for each number.

Summer camp is a terrific idea used primarily by schools to (1)\_\_\_\_\_ pupils to acquire and master new skills. It is an (2)\_\_\_\_\_ outdoor activity. Many parents offer to enrol their kids in summer camps so they can participate in (3)\_\_\_\_\_ activities, discover their talents and passions, and broaden their horizons. Summer camps are (4)\_\_\_\_\_ for all children for ten to fifteen days by various schools or other organisations. These summer camps (5)\_\_\_\_\_ entertaining educational activities like fitness classes, hobby improvement classes, learning lectures, sports activities, musical performances, etc. The pupils' general development and growth are benefitted from these summer camps.

**SubQuestion No : 17**

**Q.17 Select the most appropriate answer for blank 2.**

- Ans  1. omitted  
 2. organised  
 3. assembled  
 4. aggravated

Question ID : 26433089701  
Status : Answered  
Chosen Option : 2

**Comprehension:**

In the following passage some words have been deleted. Fill in the blanks with the help of the alternatives given. Select the most appropriate option for each number.

Summer camp is a terrific idea used primarily by schools to (1)\_\_\_\_\_ pupils to acquire and master new skills. It is an (2)\_\_\_\_\_ outdoor activity. Many parents offer to enrol their kids in summer camps so they can participate in (3)\_\_\_\_\_ activities, discover their talents and passions, and broaden their horizons. Summer camps are (4)\_\_\_\_\_ for all children for ten to fifteen days by various schools or other organisations. These summer camps (5)\_\_\_\_\_ entertaining educational activities like fitness classes, hobby improvement classes, learning lectures, sports activities, musical performances, etc. The pupils' general development and growth are benefitted from these summer camps.

**SubQuestion No : 18**

**Q.18 Select the most appropriate answer for blank 3.**

- Ans  1. much  
 2. more  
 3. few  
 4. numerous

Question ID : 26433089702  
Status : Answered  
Chosen Option : 4

**Comprehension:**

In the following passage some words have been deleted. Fill in the blanks with the help of the alternatives given. Select the most appropriate option for each number.

Summer camp is a terrific idea used primarily by schools to (1)\_\_\_\_\_ pupils to acquire and master new skills. It is an (2)\_\_\_\_\_ outdoor activity. Many parents offer to enrol their kids in summer camps so they can participate in (3)\_\_\_\_\_ activities, discover their talents and passions, and broaden their horizons. Summer camps are (4)\_\_\_\_\_ for all children for ten to fifteen days by various schools or other organisations. These summer camps (5)\_\_\_\_\_ entertaining educational activities like fitness classes, hobby improvement classes, learning lectures, sports activities, musical performances, etc. The pupils' general development and growth are benefitted from these summer camps.

**SubQuestion No : 19****Q.19 Select the most appropriate answer for blank 4.****Ans**  1. performed 2. quoted 3. executed 4. held

Question ID : 26433089703

Status : Answered

Chosen Option : 4

**Comprehension:**

In the following passage some words have been deleted. Fill in the blanks with the help of the alternatives given. Select the most appropriate option for each number.

Summer camp is a terrific idea used primarily by schools to (1)\_\_\_\_\_ pupils to acquire and master new skills. It is an (2)\_\_\_\_\_ outdoor activity. Many parents offer to enrol their kids in summer camps so they can participate in (3)\_\_\_\_\_ activities, discover their talents and passions, and broaden their horizons. Summer camps are (4)\_\_\_\_\_ for all children for ten to fifteen days by various schools or other organisations. These summer camps (5)\_\_\_\_\_ entertaining educational activities like fitness classes, hobby improvement classes, learning lectures, sports activities, musical performances, etc. The pupils' general development and growth are benefitted from these summer camps.

**SubQuestion No : 20****Q.20 Select the most appropriate answer for blank 5.****Ans**  1. exhibit 2. adapt 3. align 4. arrange

Question ID : 26433089704

Status : Answered

Chosen Option : 2

**Section : Part-D-Hindi****Q.1 'आकाश पाताल एक करना' मुहावरे का सही अर्थ है -****Ans**  1. बहुत मेहनत करना 2. आकाश में उड़ना 3. घमंड करना 4. किसी का नुकसान करना

Question ID : 26433065920

Status : Not Answered

Chosen Option : --

Q.2 वर्तनी की दृष्टि से अशुद्ध वाक्य का चयन कीजिए-

- Ans  1. यदि इसकी तलाशी लोगे तो घड़ी मिल जाएगी।  
 2. यौवन वह काल है जब चरित्र का निर्माण होता है।  
 3. वह इंकार कर देने का परिणाम जानता है।  
 4. स्वस्थ रहने वाले लोगों को वैद्य के पास नहीं जाना पड़ता।

Question ID : 26433062898  
Status : Not Answered  
Chosen Option : --

Q.3 'नाकों चने चबवाना' मुहावरे का सही अर्थ है -

- Ans  1. बातूनी होना  
 2. बहुत तंग करना  
 3. अपनी बातों से परेशान करना  
 4. बहस करना

Question ID : 26433065930  
Status : Not Answered  
Chosen Option : --

Q.4 निम्नलिखित में से कौन सा संज्ञा से बना विशेषण नहीं है?

- Ans  1. अच्छाई  
 2. स्वर्णिम  
 3. श्रद्धालु  
 4. सामाजिक

Question ID : 26433085053  
Status : Not Answered  
Chosen Option : --

Q.5 'द्विज' शब्द के लिए उपयुक्त वाक्य खंड चुनिए।

- Ans  1. दो बार जन्म लेने वाला  
 2. पहले जन्म लेने वाला  
 3. बहुत बोलने वाला  
 4. बहुत जानने वाला

Question ID : 26433063056  
Status : Not Answered  
Chosen Option : --

Q.6 विकल्पों में से 'शशि' के पर्यायवाची शब्द चयन कर दिए गए वाक्य में रिक्त स्थान की पूर्ति कीजिए।  
पूर्णिमा की रात में \_\_\_\_\_ को देखकर हमें बड़ी खुशी हुई।

- Ans  1. शतदल  
 2. पावक  
 3. कृष्णा  
 4. हिमांशु

Question ID : 26433063085  
Status : Not Answered  
Chosen Option : --

Q.7 निम्न वाक्य में रेखांकित शब्द के विलोम से दिए गए वाक्य का रिक्त स्थान पूर्ण करें।  
पुरानी इमारत में भयानक आग लगी है, बुझाने के लिए \_\_\_\_\_ की आवश्यकता है।

- Ans
- 1. बारिश
  - 2. रेत
  - 3. वायु
  - 4. पानी

Question ID : 26433085002  
Status : Not Answered  
Chosen Option : --

Q.8 निम्नलिखित में से किस वाक्य में गुणवाचक विशेषण अशुद्ध है?

- Ans
- 1. इस भवन में तीन द्वार हैं।
  - 2. यह मेरा कुत्ता है।
  - 3. यह एक नया इमारत है।
  - 4. तुम दोनों यहाँ कैसे आये!

Question ID : 26433062995  
Status : Not Answered  
Chosen Option : --

Q.9 निम्नलिखित वाक्य में रेखांकित खंड के स्थान पर प्रयुक्त होने वाले सबसे उपयुक्त विकल्प का चयन कीजिए-

सोहन क्योंकि मोहन जाते हैं।

- Ans
- 1. तथापि
  - 2. साथ
  - 3. परंतु
  - 4. और

Question ID : 26433079661  
Status : Not Answered  
Chosen Option : --

Q.10 हमारे देश से आयात – निर्यात काफी होती है।

इस वाक्य को शुद्ध करके लिखिए।

- Ans
- 1. हमारे देश में आयात – निर्यात काफी होता है।
  - 2. हमारे देश में आयात – निर्यात पर्याप्त होती हैं।
  - 3. हमारा देश को आयात – निर्यात काफी होता है।
  - 4. हमारा देश में आयात – निर्यात होता है।

Question ID : 26433063073  
Status : Not Answered  
Chosen Option : --

Q.11 निम्न विकल्पों में से कौन सा शब्द दिए गए वाक्य में रेखांकित शब्द का पर्यायवाची नहीं है?  
मेरे घर के सामने जो बाग है, वह फूलों और 'लता' से भरा है।

- Ans
- 1. वल्ली
  - 2. बेल
  - 3. वेल्लि
  - 4. तरंग

Question ID : 26433085071  
Status : Not Answered  
Chosen Option : --



Q.12 वह एक उत्तम व्यक्ति है।  
उक्त वाक्य में रेखांकित पद 'उत्तम' का विलोम क्या है?

- Ans  1. शाश्वत  
 2. अधम  
 3. स्वतंत्र  
 4. कृतघ्न

Question ID : 26433079185  
Status : Not Answered  
Chosen Option : --

Q.13 'वह स्थान जहाँ से यमुना निकलती है' वाक्यांश के लिए उचित शब्द होगा?

- Ans  1. उदयांचल  
 2. यमुनोत्री  
 3. अस्तांचल  
 4. गंगोत्री

Question ID : 26433067067  
Status : Not Answered  
Chosen Option : --

Q.14 'जो मुकदमा दायर करता है' वाक्यांश के लिए इनमें से सही शब्द क्या है?

- Ans  1. मुकदमेबाज  
 2. वादी  
 3. प्रतिवादी  
 4. गवाह

Question ID : 26433070150  
Status : Not Answered  
Chosen Option : --

Q.15 निम्नलिखित विकल्पों में से 'आशा से परे' वाक्यांश के लिए एक सार्थक शब्द क्या होगा ?

- Ans  1. आशातीत  
 2. प्रत्याशा  
 3. हताशा  
 4. निराशा

Question ID : 26433062535  
Status : Not Answered  
Chosen Option : --

**Comprehension:**

प्रश्न 1 से 5 तक के उत्तर निम्नांकित गद्यावतरण के आधार पर दीजिए।

किसी देश की संस्कृति को जानने के लिए वहाँ के (1) \_\_\_\_\_ का पूरा अध्ययन नितांत आवश्यक है। साहित्य किसी देश तथा जाति के विकास का प्रतीक है। साहित्य से उस जाति के धार्मिक विचारों, सामाजिक संगठन, ऐतिहासिक घटनाचक्र तथा राजनीतिक परिस्थितियों का प्रतिबिंब मिल जाता है। भारतीय संस्कृति के मूल आधार हमारे साहित्य के (2) \_\_\_\_\_ ग्रंथ - रत्न हैं, जिनके विचारों से भारत की आंतरिक (3) \_\_\_\_\_ का ज्ञान हो जाता है। हमारे देश की बाहरी विविधता भारतीय (4) \_\_\_\_\_ के रूप में बहनेवाली विचार और संस्कृति की एकता को ढक लेती है। वांग्मय की (5) \_\_\_\_\_ एक है, पर वह अनेक भाषाओं, रूपों तथा परिस्थितियों में हमारे सामने आती है।

**SubQuestion No : 16**

Q.16 निम्नलिखित विकल्पों में से सही शब्द चुनकर रिक्त स्थान (1) की पूर्ति कीजिए।

- Ans  1. साहित्य  
 2. राजनीति विज्ञान  
 3. संस्कृत  
 4. भूगोल

Question ID : 26433069950  
Status : Not Answered  
Chosen Option : --

**Comprehension:**

प्रश्न 1 से 5 तक के उत्तर निम्नांकित गद्यावतरण के आधार पर दीजिए।

किसी देश की संस्कृति को जानने के लिए वहाँ के (1) \_\_\_\_\_ का पूरा अध्ययन नितांत आवश्यक है। साहित्य किसी देश तथा जाति के विकास का प्रतीक है। साहित्य से उस जाति के धार्मिक विचारों, सामाजिक संगठन, ऐतिहासिक घटनाचक्र तथा राजनीतिक परिस्थितियों का प्रतिबिंब मिल जाता है। भारतीय संस्कृति के मूल आधार हमारे साहित्य के (2) \_\_\_\_\_ ग्रंथ - रत्न हैं, जिनके विचारों से भारत की आंतरिक (3) \_\_\_\_\_ का ज्ञान हो जाता है। हमारे देश की बाहरी विविधता भारतीय (4) \_\_\_\_\_ के रूप में बहनेवाली विचार और संस्कृति की एकता को ढक लेती है। वांग्मय की (5) \_\_\_\_\_ एक है, पर वह अनेक भाषाओं, रूपों तथा परिस्थितियों में हमारे सामने आती है।

**SubQuestion No : 17**

Q.17 रिक्त स्थान (2) की पूर्ति 'कीमती' के पर्यायवाची शब्द से कीजिए।

- Ans  1. अतुल्य  
 2. अमूल्य  
 3. दुर्मूल्य  
 4. बाहुल्य

Question ID : 26433069951  
Status : Not Answered  
Chosen Option : --

**Comprehension:**

प्रश्न 1 से 5 तक के उत्तर निम्नांकित गद्यावतरण के आधार पर दीजिए।

किसी देश की संस्कृति को जानने के लिए वहाँ के (1) \_\_\_\_\_ का पूरा अध्ययन नितांत आवश्यक है। साहित्य किसी देश तथा जाति के विकास का प्रतीक है। साहित्य से उस जाति के धार्मिक विचारों, सामाजिक संगठन, ऐतिहासिक घटनाचक्र तथा राजनीतिक परिस्थितियों का प्रतिबिंब मिल जाता है। भारतीय संस्कृति के मूल आधार हमारे साहित्य के (2) \_\_\_\_\_ ग्रंथ - रत्न हैं, जिनके विचारों से भारत की आंतरिक (3) \_\_\_\_\_ का ज्ञान हो जाता है। हमारे देश की बाहरी विविधता भारतीय (4) \_\_\_\_\_ के रूप में बहनेवाली विचार और संस्कृति की एकता को ढक लेती है। वांग्मय की (5) \_\_\_\_\_ एक है, पर वह अनेक भाषाओं, रूपों तथा परिस्थितियों में हमारे सामने आती है।

**SubQuestion No : 18**

Q.18 रिक्त स्थान (3) की पूर्ति 'अनेकता' के विलोम शब्द से कीजिए।

- Ans  1. ममता  
 2. एकाग्रता  
 3. एकता  
 4. समता

Question ID : 26433069952  
Status : Not Answered  
Chosen Option : --

**Comprehension:**

प्रश्न 1 से 5 तक के उत्तर निम्नांकित गद्यावतरण के आधार पर दीजिए।

किसी देश की संस्कृति को जानने के लिए वहाँ के (1) \_\_\_\_\_ का पूरा अध्ययन नितांत आवश्यक है। साहित्य किसी देश तथा जाति के विकास का प्रतीक है। साहित्य से उस जाति के धार्मिक विचारों, सामाजिक संगठन, ऐतिहासिक घटनाचक्र तथा राजनीतिक परिस्थितियों का प्रतिबिंब मिल जाता है। भारतीय संस्कृति के मूल आधार हमारे साहित्य के (2) \_\_\_\_\_ ग्रंथ - रत्न हैं, जिनके विचारों से भारत की आंतरिक (3) \_\_\_\_\_ का ज्ञान हो जाता है। हमारे देश की बाहरी विविधता भारतीय (4) \_\_\_\_\_ के रूप में बहनेवाली विचार और संस्कृति की एकता को ढक लेती है। वांग्मय की (5) \_\_\_\_\_ एक है, पर वह अनेक भाषाओं, रूपों तथा परिस्थितियों में हमारे सामने आती है।

**SubQuestion No : 19**

**Q.19 रिक्त स्थान (4) की पूर्ति के लिए उपयुक्त शब्द का चयन विकल्पों में से कीजिए।**

- Ans**  1. वांग्मुख  
 2. वांग्मय  
 3. वाग्वैभव  
 4. वाहक

Question ID : 26433069953  
Status : Not Answered  
Chosen Option : --

**Comprehension:**

प्रश्न 1 से 5 तक के उत्तर निम्नांकित गद्यावतरण के आधार पर दीजिए।

किसी देश की संस्कृति को जानने के लिए वहाँ के (1) \_\_\_\_\_ का पूरा अध्ययन नितांत आवश्यक है। साहित्य किसी देश तथा जाति के विकास का प्रतीक है। साहित्य से उस जाति के धार्मिक विचारों, सामाजिक संगठन, ऐतिहासिक घटनाचक्र तथा राजनीतिक परिस्थितियों का प्रतिबिंब मिल जाता है। भारतीय संस्कृति के मूल आधार हमारे साहित्य के (2) \_\_\_\_\_ ग्रंथ - रत्न हैं, जिनके विचारों से भारत की आंतरिक (3) \_\_\_\_\_ का ज्ञान हो जाता है। हमारे देश की बाहरी विविधता भारतीय (4) \_\_\_\_\_ के रूप में बहनेवाली विचार और संस्कृति की एकता को ढक लेती है। वांग्मय की (5) \_\_\_\_\_ एक है, पर वह अनेक भाषाओं, रूपों तथा परिस्थितियों में हमारे सामने आती है।

**SubQuestion No : 20**

**Q.20 स्त्रीलिंग संज्ञा शब्द से रिक्त स्थान (5) की पूर्ति कीजिए।**

- Ans**  1. भगवान  
 2. प्राण  
 3. जीवन  
 4. आत्मा

Question ID : 26433069954  
Status : Not Answered  
Chosen Option : --