

## Constable GD in CAPFs SSF Rifleman GD in Assam Rifles and Sepoy in NCB Examination 2022

Roll Number	www.govtjobsalert.in
Candidate Name	www.govtjobsalert.in
Venue Name	TCS Gito Bitan
Exam Date	10/01/2023
Exam Time	2:30 PM - 3:30 PM
Subject	Constable GD Examination 2022

### Section : Part-A-General Intelligence and Reasoning

**Q.1** In this question, three statements are given, followed by two conclusions numbered I and II. Assuming the statements to be true, even if they seem to be at variance with commonly known facts, decide which of the conclusions logically follows/follow from the statements.

**Statements:**

All fans are bulbs.

All bulbs are tube lights.

Some tube lights are new.

**Conclusions:**

I. All fans are new.

II. All tube lights are fans.

**Ans**  1. Only conclusion II follows.

2. Only conclusion I follows.

3. Neither conclusion I nor II follows.

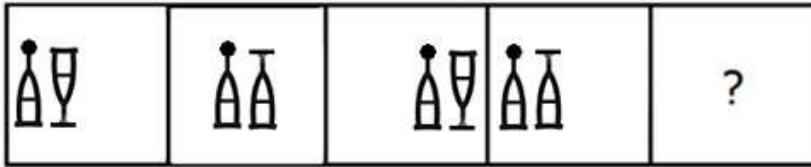
4. Both conclusions I and II follow.

Question ID : 26433070381

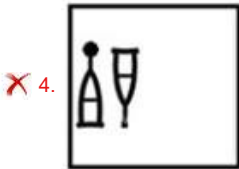
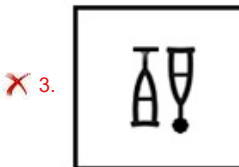

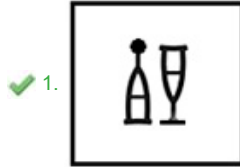
Status : Answered

Chosen Option : 3

Q.2 Select the figure that will come next in the following series.



Ans



Question ID : 26433079024  
Status : Answered  
Chosen Option : 1

Q.3 Select the option that is related to the fifth letter-cluster in the same way as the second letter-cluster is related to the first letter-cluster and the fourth letter-cluster is related to the third letter-cluster.  
ROOT : QQTV :: STEM : VGUO :: LEAF : ?

- Ans
- ✓ 1. GCNH
  - ✗ 2. GCHN
  - ✗ 3. GDNH
  - ✗ 4. NGCH

Question ID : 26433057247  
Status : Answered  
Chosen Option : 1

Q.4 Which letter-cluster will replace the question mark (?) to complete the given series?  
AJRZ, DMTC, ?, JSXI, MVZL

- Ans
- ✗ 1. GRVF
  - ✗ 2. HRVF
  - ✗ 3. HPVF
  - ✓ 4. GPVF

Question ID : 26433067947  
Status : Answered  
Chosen Option : 1

Q.5 'A + B' means 'A is the son of B'  
'A - B' means 'A is the sister of B'  
'A × B' means 'A is the brother of B'  
'A ÷ B' means 'A is the wife of B'  
If  $A + B \div C \times D - E + F$ , then which of the following statements is NOT correct?

- Ans
- 1. A is the grandson of F.
  - 2. A is the son of C.
  - 3. E is the brother of B.
  - 4. D is the daughter of F.

Question ID : 26433090050  
Status : Answered  
Chosen Option : 3

Q.6 In a certain code language, 'FINGER' is written as 'HHPIDT' and 'DESTINY' is written as 'FDUVHPA'. How will 'GRANTED' be written in that language?

- Ans
- 1. ITZPVDF
  - 2. HTZPVCE
  - 3. IQCMVDF
  - 4. HTC OVCE

Question ID : 26433081767  
Status : Answered  
Chosen Option : 3

Q.7 Which two signs should be interchanged to make the below equation mathematically correct?

$$136 \div 17 + 102 - 3 \times 2 = 187$$

- Ans
- 1. + and ×
  - 2. ÷ and ×
  - 3. × and -
  - 4. ÷ and -

Question ID : 264330117569  
Status : Answered  
Chosen Option : 4

Q.8 Seven people A, H, D, F, T, E, and G are sitting in a straight row, facing north. Only three people sit to the left of E. G and H are immediate neighbours of E. A sits at the extreme right of the row. D is the immediate neighbour of A. F sits second to the left of E. Who sits at the extreme left of the row?

- Ans
- 1. T
  - 2. D
  - 3. A
  - 4. F

Question ID : 26433095009  
Status : Answered  
Chosen Option : 1

Q.9 6 Friends F, U, K, S, M, and A, are sitting around a circular table facing the centre. A and S are immediate neighbours of K. F is sitting opposite to K. S is not a neighbour of F. M is an immediate neighbour of A and F. Who is the immediate neighbour of A and F if M and S exchange their positions?

- Ans
- 1. U
  - 2. K
  - 3. S
  - 4. M

Question ID : 26433068077  
Status : Not Answered  
Chosen Option : --

Q.10 In a certain code language, 'find a solution' is coded as '418', 'be attentive' is coded as '29' and 'answers are correct' is coded as '737'. How will 'check the question' be coded in that language?

- Ans
- 1. 835
  - 2. 427
  - 3. 538
  - 4. 649

Question ID : 26433067779  
Status : Answered  
Chosen Option : 3

Q.11 Select the set in which the numbers are related in the same way as are the numbers of the following set.

(NOTE : Operations should be performed on the whole numbers, without breaking down the numbers into its constituent digits. E.g. 13 – Operations on 13 such as adding /subtracting/multiplying etc. to 13 can be performed. Breaking down 13 into 1 and 3 and then performing mathematical operations on 1 and 3 is NOT allowed)  
(216, 12, 15)  
(432, 23, 31)

- Ans
- 1. (304, 14, 24)
  - 2. (380, 24, 18)
  - 3. (150, 11, 14)
  - 4. (484, 16, 32)

Question ID : 26433076475  
Status : Not Attempted and Marked For Review  
Chosen Option : --

Q.12 Which option represents the correct order of the given words as they would appear in the English dictionary?

- 1 Seminar
- 2 Semolina
- 3 Senior
- 4 September
- 5 Serious

- Ans
- 1. 5,4,3,2,1
  - 2. 1,3,4,2,5
  - 3. 1,2,3,4,5
  - 4. 5,3,4,1,2

Question ID : 26433069306  
Status : Answered  
Chosen Option : 3

Q.13 Which of the following numbers will replace the question mark (?) in the given series?  
3, 21, 147, ?, 7203

- Ans
- 1. 882
  - 2. 1323
  - 3. 1218
  - 4. 1029

Question ID : 26433092490  
Status : Answered  
Chosen Option : 4

Q.14 Select the option that is related to the third word in the same way as the second word is related to the first word.  
(The words must be considered as meaningful English words and must not be related to each other based on the number of letters/number of consonants/vowels in the word.)

Mumbai : Maharashtra :: Bhopal : ?

- Ans
- 1. Madhya Pradesh
  - 2. Delhi
  - 3. Uttar Pradesh
  - 4. Andhra Pradesh

Question ID : 26433087260  
Status : Answered  
Chosen Option : 1

Q.15 Select the number from among the given options that can replace the question mark (?) in the following series.  
213, 216, 225, 240, 261, ?

- Ans
- 1. 286
  - 2. 288
  - 3. 289
  - 4. 268

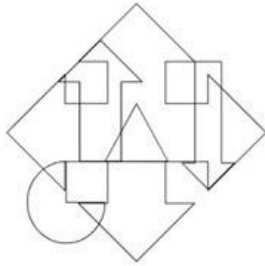
Question ID : 26433078921  
Status : Answered  
Chosen Option : 2

Q.16 Which of the following terms will replace the question mark (?) in the given series?  
LPKT, NNMR, PLOP, ?, THSL

- Ans
- 1. RJQN
  - 2. SJQN
  - 3. SJQO
  - 4. RIQN


Question ID : 26433080688  
Status : Answered  
Chosen Option : 4

**Q.17** Select the option figure which is embedded in the given figure. (Rotation is NOT allowed)

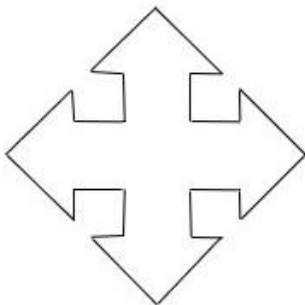


**Ans**

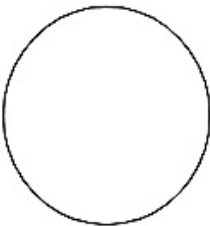
✗ 1.




✓ 2.



✗ 3.



✗ 4.



Question ID : 26433085754  
Status : Answered  
Chosen Option : 2

**Q.18** Select the correct combination of mathematical signs to replace the \* signs and balance the given equation.

$$89 * 5 * 15 * 32 * 8 * 18$$

**Ans**

✗ 1. ÷ , + , - , × , =

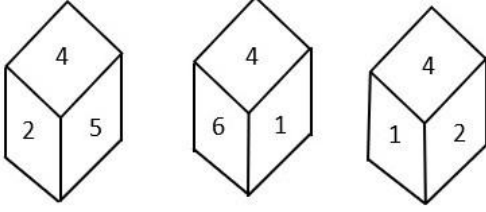
✗ 2. × , + , ÷ , - , =

✗ 3. + , - , ÷ , × , =

✓ 4. - , × , + , ÷ , =

Question ID : 26433085357  
Status : Answered  
Chosen Option : 4

**Q.19** Three different positions of the same dice are shown. Find the number on the face opposite the face showing '4'.

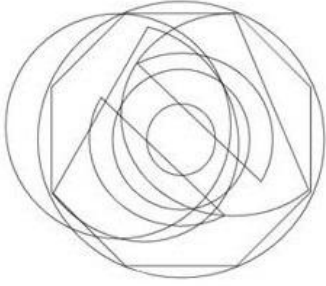


- Ans**
- 1. 2
  - 2. 3
  - 3. 5
  - 4. 1

Question ID : 26433090076  
Status : Answered  
Chosen Option : 2

WWW.GOVtjobsalert.in

**Q.20** Select the option figure which is embedded in the given figure. (Rotation is NOT allowed)



**Ans**

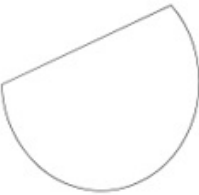
✗ 1.



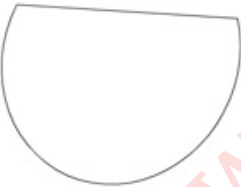
✓ 2.



✗ 3.



✗ 4.



Question ID : 26433085752  
Status : Answered  
Chosen Option : 1

Section : **Part-B-General Knowledge and General awareness**

**Q.1** In the Indian Constitution 'the abolition of untouchability' provision is mentioned in \_\_\_\_\_.

**Ans** ✗ 1. Article 14

✓ 2. Article 17

✗ 3. Article 19

✗ 4. Article 32

Question ID : 26433090671  
Status : Answered  
Chosen Option : 2



**Q.2 What is the colour of the flame when magnesium burns in the presence of oxygen?**

- Ans**  1. Yellow  
 2. Red  
 3. White  
 4. Green

Question ID : 26433087842  
Status : Answered  
Chosen Option : 4

**Q.3 Who among the following Gupta rulers was hailed as 'Indian Napoleon' because of his military achievements?**

- Ans**  1. Chandragupta I  
 2. Chandragupta II  
 3. Srigupta  
 4. Samudragupta

Question ID : 264330115455  
Status : Answered  
Chosen Option : 4

**Q.4 E.Krishna Iyer is associated with which form of dance?**

- Ans**  1. Kathak  
 2. Odissi  
 3. Kuchipudi  
 4. Bharatanatyam

Question ID : 26433086576  
Status : Answered  
Chosen Option : 4

**Q.5 In India, the population census is conducted once every \_\_\_\_\_.**

- Ans**  1. 5 years  
 2. 12 years  
 3. 10 years  
 4. 15 years

Question ID : 264330116024  
Status : Answered  
Chosen Option : 3

**Q.6 Which of the following country is not a part of the Lusofonia Games?**

- Ans**  1. Portugal  
 2. Germany  
 3. India  
 4. Macau

Question ID : 264330115941  
Status : Answered  
Chosen Option : 3

Q.7 Radio broadcasting started in India in 1923 by the \_\_\_\_\_.

- Ans  1. Radio Club of Bombay  
 2. Lions Club of Bombay  
 3. Rotary Club of Bombay  
 4. Rotaract Club Of Bombay

Question ID : 264330115603  
Status : Answered  
Chosen Option : 1

Q.8 Which Article of the Constitution of India talks about Superintendence, direction and control of elections?

- Ans  1. Article 324  
 2. Article 333  
 3. Article 356  
 4. Article 367

Question ID : 26433074899  
Status : Answered  
Chosen Option : 1

Q.9 As of November 2022, who among the following is the Lieutenant Governor of Delhi, India?

- Ans  1. Anil Bajjal  
 2. Vinai Kumar Saxena  
 3. Arvind Kejriwal  
 4. Manoj Sinha

Question ID : 264330114937  
Status : Answered  
Chosen Option : 2

Q.10 While computing the national income, \_\_\_\_\_ is taken as a factor.

- Ans  1. Chemical used  
 2. Electricity bill  
 3. Export  
 4. Road construction

Question ID : 264330115356  
Status : Answered  
Chosen Option : 3

Q.11 Which among the following festival marks the menstruation period of the Goddess Kamakhya in Assam?

- Ans  1. Moatsu  
 2. Chapchar Kut  
 3. Wangala  
 4. Ambubachi Mela

Question ID : 264330115113  
Status : Answered  
Chosen Option : 4

Q.12 The \_\_\_\_\_ industry covers a wide range of products from transistor sets to television.

- Ans
- 1. fertilizer
  - 2. canal irrigation
  - 3. electronics
  - 4. jute processing

Question ID : 264330115401  
Status : Answered  
Chosen Option : 3

Q.13 Three of the following four are examples of Coelenterata phylum, and therefore form a group. Which is the one that does not belong to that group?

- Ans
- 1. Sea-pen
  - 2. Liver fluke
  - 3. Brain coral
  - 4. Sea anemone

Question ID : 264330115186  
Status : Not Answered  
Chosen Option : --

Q.14 \_\_\_\_\_ launched on 25th June 2015 , intends to provide housing for all in urban areas by year 2022.

- Ans
- 1. O-SMART Scheme
  - 2. Pradhan Mantri Garib Kalyan Anna Yojana
  - 3. Pradhan Mantri Awas Yojana (Urban)
  - 4. Global Housing Technology Challenge

Question ID : 264330116161  
Status : Answered  
Chosen Option : 3

Q.15 In which of the following places was the Indian Grand Prix-4 held in June 2021?

- Ans
- 1. Ludhiana
  - 2. Patiala
  - 3. Amritsar
  - 4. Jalandhar

Question ID : 26433072892  
Status : Not Answered  
Chosen Option : --

Q.16 A \_\_\_\_\_ is a barrier across flowing water that obstructs, directs or retards the flow, often creating a reservoir, lake or impoundment.

- Ans
- 1. meander
  - 2. dam
  - 3. tributary
  - 4. moat

Question ID : 26433092218  
Status : Answered  
Chosen Option : 2

Q.17 Who won the Sangeet Natak Akademi Award in Bharatnatyam in 2018?

- Ans  1. Madambi Subramanian Namboodiri  
 2. Radha Sridhar  
 3. Pasumurthy Ramalinga Sastry  
 4. Akham Lakshmi Devi

Question ID : 264330115815  
Status : Not Answered  
Chosen Option : --

Q.18 Which Union Minister launched the India water pitch-pilot-scale start-up challenge in March 2022?

- Ans  1. Kaushal Kishore  
 2. D Thara  
 3. Manoj Joshi  
 4. Hardeep Singh Puri

Question ID : 26433081828  
Status : Answered  
Chosen Option : 3

Q.19 Swami Dayanand Saraswati founded the \_\_\_\_\_, an organisation that attempted to reform Hinduism.

- Ans  1. Arya Samaj  
 2. Adi Hindu Samaj  
 3. Vedant Samaj  
 4. Adi Dharam Samaj

Question ID : 264330103802  
Status : Answered  
Chosen Option : 1

Q.20 As per RBI, in India, services sector accounted for \_\_\_\_\_ of the GDP in the 1980s.

- Ans  1. 58.6 per cent  
 2. 38.6 per cent  
 3. 18.6 per cent  
 4. 78.6 per cent

Question ID : 264330116114  
Status : Answered  
Chosen Option : 1

Section : Part-C-Elementary Mathematics

Q.1 The value of an article depreciated from ₹18,000 to ₹14,580 in 2 years. Find the yearly rate of depreciation in the value of the article.

- Ans  1. 10%  
 2. 12%  
 3. 9%  
 4. 8%

Question ID : 26433082406  
Status : Not Answered  
Chosen Option : --

Q.2 Ramu and Mohan can separately complete a work in 10 hours and 16 hours, respectively. After working for 2 hours together, Mohan leaves the work. In how many hours will Ramu finish the remaining work?

Ans

1.  $6\frac{1}{4}$

2.  $6\frac{3}{4}$

3.  $5\frac{3}{4}$

4.  $7\frac{3}{4}$

Question ID : 26433075573

Status : Not Answered

Chosen Option : --

Q.3 A car covers a certain distance in 3 h with a speed of 108 km/h. If the speed is reduced by 27 km/h, then the time taken by the car to cover the same distance will be:

Ans

1.  $2\frac{1}{2}$  h

2. 2 h

3.  $3\frac{1}{2}$  h

4. 4 h

Question ID : 26433087375

Status : Answered

Chosen Option : 4

Q.4 Rahul travels a certain distance at a speed of 4 km/h and returns at a speed of 3 km/h via same route. What was his average speed for the entire journey (correct to 2 decimal places)?

Ans

1. 3.43 km/h

2. 5.92 km/h

3. 1.23 km/h

4. 2.5 km/h

Question ID : 26433065293

Status : Not Answered

Chosen Option : --

Q.5 Rohan divides his complete journey in three equal parts and covers the first part at a speed of 30 km/h, the second part at 40 km/h and the last part at 50 km/h with his car. What is the average speed (in km/h) of his car during his entire journey?

Ans

1.  $38\frac{14}{47}$

2.  $35\frac{14}{47}$

3. 40

4. 45

Question ID : 26433075541

Status : Not Answered

Chosen Option : --

Q.6 A can do a piece of work in 8 days and B in 24 days. They begin together, but 4 days before the completion of the work, A leaves. Find the number of days taken by A and B to complete the entire work.

- Ans
- 1. 11 days
  - 2. 8 days
  - 3. 9 days
  - 4. 7 days

Question ID : 264330116845  
Status : Answered  
Chosen Option : 2

Q.7 A thief started his journey at a speed of 60 km/h. After 30 minutes, police started from the same place but at a speed of 80 km/h. How much time (in hours) will the police take to catch the thief?

- Ans
- 1.  $\frac{3}{2}$  hours
  - 2.  $\frac{1}{2}$  hours
  - 3.  $\frac{1}{3}$  hours
  - 4.  $\frac{5}{2}$  hours

Question ID : 26433081044  
Status : Answered  
Chosen Option : 1

Q.8 What is the difference between the compound interest on Rs.5,750 for one year at 16% per annum compounded yearly and compounded half-yearly?

- Ans
- 1. Rs.49.76
  - 2. Rs.36.80
  - 3. Rs.29.50
  - 4. Rs.32.58

Question ID : 26433064989  
Status : Not Answered  
Chosen Option : --

Q.9

Evaluate the following expression.

$$\left[\frac{-4}{7} \div \frac{1}{12}\right] \div \left[-\frac{4}{5} \times \{(-2) - \left(-\frac{2}{7}\right)\}\right]$$

- Ans
- 1. -5
  - 2.  $-\frac{1}{5}$
  - 3.  $\frac{1}{5}$
  - 4. 5

Question ID : 26433090248  
Status : Answered  
Chosen Option : 1

**Q.10** The volumes of two cones are in the ratio of 3 : 2 and their radii are in the ratio 3 : 4. The ratio of their heights is:

- Ans  1. 8:3  
 2. 9:4  
 3. 4:9  
 4. 2:1

Question ID : 26433075481  
Status : Not Answered  
Chosen Option : --

**Q.11** In an election, there were two candidates A and B. The total number of voters in the constituency was 90000 and 70% of the total votes were polled. If 60% of the polled votes were cast in favour of A, how many votes were received by B?

- Ans  1. 28500  
 2. 25200  
 3. 28700  
 4. 28600

Question ID : 26433079770  
Status : Not Answered  
Chosen Option : --

**Q.12** The curved surface area of a sphere is  $1386 \text{ cm}^2$ . The volume of this sphere is:

- Ans  1.  $4815 \text{ cm}^3$   
 2.  $4851 \text{ cm}^3$   
 3.  $2425.5 \text{ cm}^3$   
 4.  $1617 \text{ cm}^3$

Question ID : 26433087406  
Status : Not Answered  
Chosen Option : --

**Q.13** The ratio of milk and water in two containers of 20 litres and 36 litres are in the ratio 3 : 7 and 7 : 5, respectively. What will be the ratio of milk and water if the two containers are mixed together?

- Ans  1. 9 : 13  
 2. 27 : 29  
 3. 21 : 23  
 4. 21 : 25

Question ID : 26433091899  
Status : Not Answered  
Chosen Option : --

**Q.14** The square of 28 is divided by the largest number that can exactly divide both 42 and 56. What is the result?

- Ans  1. 28  
 2. 14  
 3. 42  
 4. 56

Question ID : 264330116654  
Status : Answered  
Chosen Option : 1

**Q.15** A table whose marked price ₹300 is sold at two successive discounts of 20% and 10%. If in addition, a discount of 5% is offered on cash payment, then the cash price for the table is:

- Ans
- 1. ₹210.25
  - 2. ₹216.50
  - 3. ₹240.25
  - 4. ₹205.20

Question ID : 26433082095  
Status : Not Answered  
Chosen Option : --

**Q.16** The price of petrol is raised to Rs.96.5 per litre from Rs.92 per litre. What is the percentage increase in price of petrol?

- Ans
- 1. 4.5%
  - 2. 4.7%
  - 3. 4.9%
  - 4. 5.1%

Question ID : 26433071246  
Status : Not Answered  
Chosen Option : --

**Q.17** The third proportional to 24 and 36 is:

- Ans
- 1. 45
  - 2. 64
  - 3. 54
  - 4. 46

Question ID : 26433074993  
Status : Not Answered  
Chosen Option : --

**Q.18** Under a discount scheme, after allowing a discount of 20%, there is still a gain of 10%. The marked price is what percentage more than the cost price?

- Ans
- 1. 39%
  - 2. 37.5%
  - 3. 40%
  - 4. 35.2%

Question ID : 26433083042  
Status : Not Answered  
Chosen Option : --

**Q.19** Harshi bought a new sweatshirt at the store, when they were giving a 40 percent discount. If the marked price of the sweatshirt was Rs. 2999, then how much did Harshi pay with the discount?

- Ans
- 1. Rs. 2099.20
  - 2. Rs. 1799.40
  - 3. Rs. 2399.50
  - 4. Rs. 1899.80

Question ID : 264330116730  
Status : Not Answered  
Chosen Option : --



Q.20 A man sold two chairs for Rs.475 each, gaining 25% on one and losing 20% on the other. Had he sold the two chairs for Rs.575 each, what would have been his gain/loss percentage (rounded off to the nearest integer)?

- Ans
- 1. 45% gain
  - 2. 18% gain
  - 3. 41% gain
  - 4. 25% loss

Question ID : 26433071284  
Status : Not Answered  
Chosen Option : --

Section : Part-D-English

Q.1 Select the most appropriate option to fill in the blank.

We would \_\_\_\_\_ to travel by train rather than bus due to the poor road conditions in the village.

- Ans
- 1. prefer
  - 2. assure
  - 3. make it
  - 4. drop

Question ID : 26433091877  
Status : Answered  
Chosen Option : 1

Q.2 Select the most appropriate option that can substitute the underlined segment in the given sentence.

The participants are rehearse their roles.

- Ans
- 1. are rehearsed
  - 2. has been rehearsing
  - 3. have rehearse
  - 4. are rehearsing

Question ID : 26433091869  
Status : Answered  
Chosen Option : 4

Q.3 Select the option with the correct spelling to replace the underlined word in the given sentence.

She hit him in a moment of abomination.

- Ans
- 1. aberation
  - 2. abberation
  - 3. aberattion
  - 4. aberration

Question ID : 26433094408  
Status : Answered  
Chosen Option : 1

Q.4 Select the most appropriate **ANTONYM** of the given word.

**Anxious**

- Ans  1. Considerate  
 2. Unconcerned  
 3. Stealthy  
 4. Haughty

Question ID : 26433074380  
Status : Answered  
Chosen Option : 3

Q.5 Identify the correctly spelt sentence.

- Ans  1. My grandfather planted couliflower in the garden.  
 2. My grandfather planted kauliflower in the garden.  
 3. My grandfather planted cauleflower in the garden.  
 4. My grandfather planted cauliflower in the garden.

Question ID : 26433072831  
Status : Answered  
Chosen Option : 4

Q.6 Select the most appropriate synonym of the underlined word.

Music is a therapy for everyone – plants, birds, animals and human-beings – to flourish and rejuvenate.

- Ans  1. modify  
 2. prosper  
 3. refreshen  
 4. fortify

Question ID : 26433089100  
Status : Answered  
Chosen Option : 3

Q.7 Select the most appropriate meaning of the given idiom.

**After one's own heart**

- Ans  1. Having a face as one's own  
 2. Having likes and dislikes dissimilar to one's own  
 3. Having likes and dislikes far to one's own  
 4. Having likes and dislikes similar to one's own

Question ID : 26433072278  
Status : Answered  
Chosen Option : 4

**Q.8** The following sentence has been divided into parts. One of them may contain an error. Select the part that contains the error from the given options. If you don't find any error, mark 'No error' as your answer.  
Our soldiers have being / making a clean sweep of the / sheep and poultry on the route.

- Ans**
- 1. No error
  - 2. sheep and poultry on the route
  - 3. Our soldiers have being
  - 4. making a clean sweep of the

Question ID : 264330114510  
Status : Answered  
Chosen Option : 4

**Q.9** Select the most appropriate ANTONYM of the italicised word in the given sentence.

It is *absurd* to argue about this.

- Ans**
- 1. facetious
  - 2. fundamental
  - 3. reasonable
  - 4. amazing

Question ID : 26433096209  
Status : Answered  
Chosen Option : 3

**Q.10** Select the most appropriate option to fill in the blank.

\_\_\_\_\_ men command respect.

- Ans**
- 1. Holy
  - 2. Holey
  - 3. Holly
  - 4. Wholly

Question ID : 26433073934  
Status : Answered  
Chosen Option : 1

**Q.11** Select the most appropriate synonym of the given word.

Sumptuous

- Ans**
- 1. Mammoth
  - 2. Humble
  - 3. Minuscule
  - 4. Lavish

Question ID : 26433073980  
Status : Not Answered  
Chosen Option : --

**Q.12** Select the most appropriate idiom to substitute the underlined group of words in the given sentence.

Once in a year, the management of the institute surveys the whole situation.

- Ans**
- 1. take stock of
  - 2. perplexed with
  - 3. makes a mark
  - 4. comes to the front

Question ID : 26433073878  
Status : **Answered**  
Chosen Option : 3

**Q.13** Select the correct pair of words for the blanks in the given sentence.

My cousin likes \_\_\_\_\_ root and \_\_\_\_\_ around the bush is one of the idioms in English.

- Ans**
- 1. beat; beat
  - 2. beat; beet
  - 3. beet; beat
  - 4. beet; beet

Question ID : 26433060543  
Status : **Not Answered**  
Chosen Option : --

**Q.14** Select the most appropriate homonym to fill in the blank.  
He confessed about his affairs as the \_\_\_\_\_ made him sleepless.

- Ans**
- 1. guilt
  - 2. gilled
  - 3. gild
  - 4. guild

Question ID : 26433058525  
Status : **Not Answered**  
Chosen Option : --

**Q.15** Select the most appropriate option that can substitute the underlined segment in the given sentence.

The students were boring by the lecture delivered on environmental issues.

- Ans**
- 1. The students were bores
  - 2. The students bored
  - 3. The students were barring
  - 4. The students were bored

Question ID : 26433091771  
Status : **Answered**  
Chosen Option : 2

**Comprehension:**

In the following passage, some words have been deleted. Read the passage carefully and select the most appropriate option to fill in each blank.

Children especially (1)\_\_\_\_\_ avoid such foods or try to reduce intake and instead, eat healthy food for (2)\_\_\_\_\_ growth. Schools can (3)\_\_\_\_\_ the quality of the food being sold in the canteens and also ensure that the children bring wholesome nutrition food (4)\_\_\_\_\_ home. (5)\_\_\_\_\_ should be appointed to check the calories content and food value of food served in the canteens and setting definite tiffin patterns.

**SubQuestion No : 16**

**Q.16 Select the most appropriate option to fill in blank number 1.**

- Ans  1. might  
 2. will  
 3. should  
 4. shall

Question ID : 26433089046  
Status : Answered  
Chosen Option : 3

**Comprehension:**

In the following passage, some words have been deleted. Read the passage carefully and select the most appropriate option to fill in each blank.

Children especially (1)\_\_\_\_\_ avoid such foods or try to reduce intake and instead, eat healthy food for (2)\_\_\_\_\_ growth. Schools can (3)\_\_\_\_\_ the quality of the food being sold in the canteens and also ensure that the children bring wholesome nutrition food (4)\_\_\_\_\_ home. (5)\_\_\_\_\_ should be appointed to check the calories content and food value of food served in the canteens and setting definite tiffin patterns.

**SubQuestion No : 17**

**Q.17 Select the most appropriate option to fill in blank number 2.**

- Ans  1. elegant  
 2. proper  
 3. interesting  
 4. awkward

Question ID : 26433089047  
Status : Answered  
Chosen Option : 2

**Comprehension:**

In the following passage, some words have been deleted. Read the passage carefully and select the most appropriate option to fill in each blank.

Children especially (1)\_\_\_\_\_ avoid such foods or try to reduce intake and instead, eat healthy food for (2)\_\_\_\_\_ growth. Schools can (3)\_\_\_\_\_ the quality of the food being sold in the canteens and also ensure that the children bring wholesome nutrition food (4)\_\_\_\_\_ home. (5)\_\_\_\_\_ should be appointed to check the calories content and food value of food served in the canteens and setting definite tiffin patterns.

**SubQuestion No : 18**

**Q.18 Select the most appropriate option to fill in blank number 3.**

- Ans  1. allow  
 2. show  
 3. proclaim  
 4. monitor

Question ID : 26433089048  
Status : Answered  
Chosen Option : 4

**Comprehension:**

In the following passage, some words have been deleted. Read the passage carefully and select the most appropriate option to fill in each blank.

Children especially (1)\_\_\_\_\_ avoid such foods or try to reduce intake and instead, eat healthy food for (2)\_\_\_\_\_ growth. Schools can (3)\_\_\_\_\_ the quality of the food being sold in the canteens and also ensure that the children bring wholesome nutrition food (4)\_\_\_\_\_ home. (5)\_\_\_\_\_ should be appointed to check the calories content and food value of food served in the canteens and setting definite tiffin patterns.

**SubQuestion No : 19**

**Q.19 Select the most appropriate option to fill in blank number 4.**

- Ans**  1. through  
 2. with  
 3. from  
 4. in

Question ID : 26433089049  
Status : Answered  
Chosen Option : 3

**Comprehension:**

In the following passage, some words have been deleted. Read the passage carefully and select the most appropriate option to fill in each blank.

Children especially (1)\_\_\_\_\_ avoid such foods or try to reduce intake and instead, eat healthy food for (2)\_\_\_\_\_ growth. Schools can (3)\_\_\_\_\_ the quality of the food being sold in the canteens and also ensure that the children bring wholesome nutrition food (4)\_\_\_\_\_ home. (5)\_\_\_\_\_ should be appointed to check the calories content and food value of food served in the canteens and setting definite tiffin patterns.

**SubQuestion No : 20**

**Q.20 Select the most appropriate option to fill in blank number 5.**

- Ans**  1. Technicians  
 2. Dieticians  
 3. Paediatricians  
 4. Opticians

Question ID : 26433089050  
Status : Answered  
Chosen Option : 2

**Section : Part-D-Hindi**

**Q.1** 'नव्या ने सुमति की बहुत भर्त्सना की'  
उक्त वाक्य में प्रयुक्त 'भर्त्सना' के स्थान पर उसके विलोम शब्द का प्रयोग निम्न में से किस वाक्य में किया गया है?

- Ans**  1. नव्या ने सुमति की बहुत बुराई की।  
 2. नव्या ने सुमति की बहुत आलोचना की।  
 3. नव्या ने सुमति की बहुत निंदा की।  
 4. नव्या ने सुमति की बहुत प्रशंसा की।

Question ID : 26433067027  
Status : Not Answered  
Chosen Option : --

Q.2 वाक्य में रेखांकित शब्द को दिए गए शब्दों में से उचित शब्द से बदलें।  
भरत को कैकयी की करनी पर करूणा हुई।

- Ans  1. क्षोभ  
 2. दया  
 3. दुःख  
 4. पश्चात्ताप

Question ID : 26433062873  
Status : Not Answered  
Chosen Option : --

Q.3 निम्नलिखित वाक्यांश के लिय उपयुक्त सार्थक शब्द है-  
बिना स्वार्थ के कार्य करने वाला

- Ans  1. हितेषी  
 2. सहायक  
 3. निस्वार्थी  
 4. स्वार्थी

Question ID : 26433065765  
Status : Not Answered  
Chosen Option : --

Q.4 निम्नलिखित वाक्यों में रिक्त स्थान की पूर्ति उचित एकार्थी शब्द-युग्म से करें-  
साहसी व्यक्ति \_\_\_\_\_ हो जाता है। कछुआ \_\_\_\_\_-चर जीव है।

- Ans  1. भय सहित- केवल एक  
 2. जिसमें भय हो- जिसमें भय ना हो  
 3. साथ साथ- ऊपर  
 4. अभय-उभय

Question ID : 26433091326  
Status : Not Answered  
Chosen Option : --

Q.5 'लेने के देने पड़ना' मुहावरे का उचित अर्थ है-

- Ans  1. लाभ के बदले हानि  
 2. कुछ न देना  
 3. बहुत अधिक लाभ होना  
 4. व्यापार करना

Question ID : 26433065879  
Status : Not Answered  
Chosen Option : --

Q.6 वर्तनी की दृष्टि से दिए गए वाक्य के अशुद्ध भाग का चयन कीजिए-  
पूर्ण स्वस्थ के लिए शुद्ध आहार-विहार आवश्यक है।

- Ans  1. आहार-विहार  
 2. पूर्ण स्वस्थ  
 3. के लिए शुद्ध  
 4. आवश्यक है।

Question ID : 26433062885  
Status : Not Answered  
Chosen Option : --

Q.7 निम्न में से कौन-सा शब्द 'हाथ' शब्द का पर्यायवाची शब्द नहीं है?

- Ans
- 1. बाहु
  - 2. पाणि
  - 3. कर
  - 4. दन्त

Question ID : 26433067083  
Status : Not Answered  
Chosen Option : --

Q.8 निम्नलिखित में से शुद्ध वाक्य का चयन कीजिए-

- Ans
- 1. आप कब्बे आए?
  - 2. आप कब आए?
  - 3. आप कब आया?
  - 4. आप कब आयो?

Question ID : 26433091312  
Status : Not Answered  
Chosen Option : --

Q.9 'हिमालय की चोटियाँ तो \_\_\_\_\_ करती हैं।' वाक्य में रिक्त स्थान की पूर्ति उचित मुहावरे द्वारा कीजिए।

- Ans
- 1. गगनचुम्बी हैं
  - 2. आसमान चूमती है
  - 3. आसमान से बातें करती हैं
  - 4. राई का पहाड़ है

Question ID : 26433062610  
Status : Not Answered  
Chosen Option : --

Q.10 'वह धन जो आधिकारिक रूप से राज्य को मिलता हो' - वाक्यांश के लिए एक शब्द होगा

- Ans
- 1. कर
  - 2. राजस्व
  - 3. चुंगी
  - 4. राजधन

Question ID : 26433065729  
Status : Not Answered  
Chosen Option : --

Q.11 निम्नलिखित विकल्पों में से किस एक वाक्य में संख्यावाचक विशेषण का उचित प्रयोग नहीं किया गया है?

- Ans
- 1. नव्या के काले बाल हैं।
  - 2. दुर्घटना में पहलवान को अधिक घाव हो गए हैं।
  - 3. हमारी बगिया में कुछ अधिक वृक्ष हो गए हैं।
  - 4. महात्मा गाँधी बहुत थोड़े कपड़े पहनते थे।

Question ID : 26433062966  
Status : Not Answered  
Chosen Option : --



Q.12 किसी पदार्थ या राज्य का दूसरे पदार्थ या राज्य में मिल जाना - वाक्यांश के लिए एक शब्द होगा-

- Ans
- 1. संगम
  - 2. सहयोग
  - 3. विलय
  - 4. एकीकरण

Question ID : 26433065727  
Status : Not Answered  
Chosen Option : --

Q.13 निम्न में से कौन-सा शब्द 'कुबेर' शब्द का पर्यायवाची शब्द नहीं है?

- Ans
- 1. धनपति
  - 2. किन्नरपति
  - 3. मुनि
  - 4. यक्ष

Question ID : 26433067085  
Status : Not Answered  
Chosen Option : --

Q.14 निम्नलिखित विकल्पों में से कौन सा एक वाक्य प्रश्नवाचक सर्वनाम से संबंधित नहीं है?

- Ans
- 1. यह मूर्खता किसने की है?
  - 2. संसार का संचालन और नियमन कौन करता है?
  - 3. यह गाड़ी किसकी है?
  - 4. किसी ने जोर से चीत्कार की?

Question ID : 26433091239  
Status : Not Answered  
Chosen Option : --

Q.15 दिए गये वाक्य के अशुद्ध भाग का चयन कीजिए।  
एक मेरे प्रिय मेधावी छात्र ने अच्छा नाम कमाया।

- Ans
- 1. प्रिय मेधावी
  - 2. छात्र ने अच्छा
  - 3. नाम कमाया।
  - 4. एक मेरे

Question ID : 26433085086  
Status : Not Answered  
Chosen Option : --

**Comprehension:**

निम्नलिखित गद्यांश में कुछ शब्दों को हटा दिया गया है। दिए गए विकल्पों की सहायता से रिक्त स्थानों की पूर्ति कीजिए। प्रत्येक संख्या के लिए सबसे उपयुक्त विकल्प का चयन करें।

आज का जीवन 1. \_\_\_\_\_ से भरा है। महत्त्वपूर्ण और अनिवार्य 2. \_\_\_\_\_ को पूरा करने में अत्यधिक संघर्ष करना पड़ता है। महँगाई बहुत 3. \_\_\_\_\_ गई है। इसके साथ ही बच्चों से लेकर 4. \_\_\_\_\_ तक की आवश्यकताएँ इतनी अधिक हो गई हैं कि परिवार के प्रत्येक सदस्य को धनोपार्जन के लिए घर से बाहर जाना पड़ता है। घर और अपनों के लिए समय ही नहीं होता। जीवन संघर्ष का 5. \_\_\_\_\_ बन गया है।

**SubQuestion No : 16**

Q.16 रिक्त स्थान 1 की पूर्ति के लिए सबसे उपयुक्त विकल्प का चयन कीजिए।

- Ans
- 1. कार्य
  - 2. सदस्यों
  - 3. खेल-कूद
  - 4. भागदौड़

Question ID : 264330111119  
Status : Not Answered  
Chosen Option : --

**Comprehension:**

निम्नलिखित गद्यांश में कुछ शब्दों को हटा दिया गया है। दिए गए विकल्पों की सहायता से रिक्त स्थानों की पूर्ति कीजिए। प्रत्येक संख्या के लिए सबसे उपयुक्त विकल्प का चयन करें।

आज का जीवन 1. \_\_\_\_\_ से भरा है। महत्त्वपूर्ण और अनिवार्य 2. \_\_\_\_\_ को पूरा करने में अत्यधिक संघर्ष करना पड़ता है। महँगाई बहुत 3. \_\_\_\_\_ गई है। इसके साथ ही बच्चों से लेकर 4. \_\_\_\_\_ तक की आवश्यकताएँ इतनी अधिक हो गई हैं कि परिवार के प्रत्येक सदस्य को धनोपार्जन के लिए घर से बाहर जाना पड़ता है। घर और अपनों के लिए समय ही नहीं होता। जीवन संघर्ष का 5. \_\_\_\_\_ बन गया है।

**SubQuestion No : 17**

Q.17 रिक्त स्थान 2 की पूर्ति के लिए सबसे उपयुक्त विकल्प का चयन कीजिए।

- Ans
- 1. आवश्यकताओं
  - 2. अवसर
  - 3. भावना
  - 4. घटना

Question ID : 2643301111120  
Status : Not Answered  
Chosen Option : --

**Comprehension:**

निम्नलिखित गद्यांश में कुछ शब्दों को हटा दिया गया है। दिए गए विकल्पों की सहायता से रिक्त स्थानों की पूर्ति कीजिए। प्रत्येक संख्या के लिए सबसे उपयुक्त विकल्प का चयन करें।

आज का जीवन 1. \_\_\_\_\_ से भरा है। महत्त्वपूर्ण और अनिवार्य 2. \_\_\_\_\_ को पूरा करने में अत्यधिक संघर्ष करना पड़ता है। महँगाई बहुत 3. \_\_\_\_\_ गई है। इसके साथ ही बच्चों से लेकर 4. \_\_\_\_\_ तक की आवश्यकताएँ इतनी अधिक हो गई हैं कि परिवार के प्रत्येक सदस्य को धनोपार्जन के लिए घर से बाहर जाना पड़ता है। घर और अपनों के लिए समय ही नहीं होता। जीवन संघर्ष का 5. \_\_\_\_\_ बन गया है।

**SubQuestion No : 18**

Q.18 रिक्त स्थान 3 की पूर्ति के लिए सबसे उपयुक्त विकल्प का चयन कीजिए।

- Ans
- 1. नीचे
  - 2. बन
  - 3. कम
  - 4. बढ़

Question ID : 2643301111121  
Status : Not Answered  
Chosen Option : --

**Comprehension:**

निम्नलिखित गद्यांश में कुछ शब्दों को हटा दिया गया है। दिए गए विकल्पों की सहायता से रिक्त स्थानों की पूर्ति कीजिए। प्रत्येक संख्या के लिए सबसे उपयुक्त विकल्प का चयन करें।

आज का जीवन 1. \_\_\_\_\_ से भरा है। महत्त्वपूर्ण और अनिवार्य 2. \_\_\_\_\_ को पूरा करने में अत्यधिक संघर्ष करना पड़ता है। महँगाई बहुत 3. \_\_\_\_\_ गई है। इसके साथ ही बच्चों से लेकर 4. \_\_\_\_\_ तक की आवश्यकताएँ इतनी अधिक हो गई हैं कि परिवार के प्रत्येक सदस्य को धनोपार्जन के लिए घर से बाहर जाना पड़ता है। घर और अपनों के लिए समय ही नहीं होता। जीवन संघर्ष का 5. \_\_\_\_\_ बन गया है।

**SubQuestion No : 19**

Q.19 रिक्त स्थान 4 की पूर्ति के लिए सबसे उपयुक्त विकल्प का चयन कीजिए।

- Ans  1. बूढ़ों  
 2. सरकार  
 3. बाहर  
 4. किसी की भी

Question ID : 264330111122  
Status : Not Answered  
Chosen Option : --

**Comprehension:**

निम्नलिखित गद्यांश में कुछ शब्दों को हटा दिया गया है। दिए गए विकल्पों की सहायता से रिक्त स्थानों की पूर्ति कीजिए। प्रत्येक संख्या के लिए सबसे उपयुक्त विकल्प का चयन करें।

आज का जीवन 1. \_\_\_\_\_ से भरा है। महत्त्वपूर्ण और अनिवार्य 2. \_\_\_\_\_ को पूरा करने में अत्यधिक संघर्ष करना पड़ता है। महँगाई बहुत 3. \_\_\_\_\_ गई है। इसके साथ ही बच्चों से लेकर 4. \_\_\_\_\_ तक की आवश्यकताएँ इतनी अधिक हो गई हैं कि परिवार के प्रत्येक सदस्य को धनोपार्जन के लिए घर से बाहर जाना पड़ता है। घर और अपनों के लिए समय ही नहीं होता। जीवन संघर्ष का 5. \_\_\_\_\_ बन गया है।

**SubQuestion No : 20**

Q.20 रिक्त स्थान 5 की पूर्ति के लिए सबसे उपयुक्त विकल्प का चयन कीजिए।

- Ans  1. प्रकार  
 2. सहायक  
 3. कारण  
 4. पर्याय

Question ID : 264330111123  
Status : Not Answered  
Chosen Option : --