

Constable GD in CAPFs SSF Rifleman GD in Assam Rifles and Sepoy in NCB Examination 2022

Roll Number	www.govtjobsalert.in
Candidate Name	www.govtjobsalert.in
Venue Name	ION Digital Zone iDZ 2 Sector 62
Exam Date	01/02/2023
Exam Time	11:45 AM - 12:45 PM
Subject	Constable GD Examination 2022

Section : Part-A-General Intelligence and Reasoning

Q.1 Eight people are sitting in two parallel rows with 4 people each in such a way that there is equal distance between adjacent persons.
In row I – A, B, C and D are seated and all of them are facing south.
In row II – V, X, Y and Z are seated and all of them are facing north.
B is the only neighbour of A and A sits exactly opposite Y. V sits at the extreme left end of their row and is exactly opposite C. D sits to the immediate left of C and exactly opposite X.
Who sits at the immediate left of Y?

- Ans
- 1. X
 - 2. Z
 - 3. V
 - 4. A

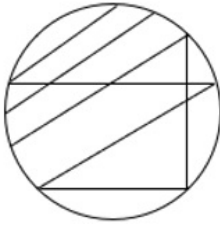
Question ID : 26433068746
Status : Answered
Chosen Option : 1

Q.2 Which option represents the correct order of the given words as they would appear in the English dictionary?
1 universe
2 unicorn
3 understood
4 unhappy
5 uniform

- Ans
- 1. 3,4,2,5,1
 - 2. 3,4,5,1,2
 - 3. 3,2,1,5,4
 - 4. 3,2,1,4,5

Question ID : 26433069323
Status : Answered
Chosen Option : 1

Q.3 Select the option figure which is embedded in the given figure. (Rotation is NOT allowed)

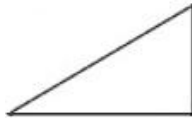


Ans

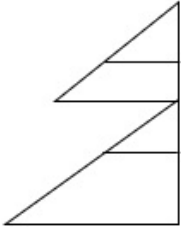
✗ 1.




✓ 2.



✗ 3.



✗ 4.



Question ID : 26433069351
Status : Answered
Chosen Option : 2

Q.4 Three Statements are given followed by Three conclusions numbered I, II and III. Assuming the statements to be true, even if they seem to be at variance with commonly known facts, decide which of the conclusions logically follow(s) from the statements.

Statements:

Some tapes are glue.

Some glue are paints.

All paints are computers.

Conclusions:

I. Some tapes are paints.

II. All glue are paints.

III. Some glue are computers.

Ans

✗ 1. Only conclusion II follows.

✗ 2. Only conclusion I follows.

✗ 3. None of the conclusions follow.

✓ 4. Only conclusion III follows.

Question ID : 26433081793
Status : Answered
Chosen Option : 4

Q.5 Which of the following terms will replace the question mark (?) in the given series?
BSWG, CTXE, DUYC, ?, FWAY

- Ans
- 1. AAZV
 - 2. EVZA
 - 3. VEAZ
 - 4. ZVEA

Question ID : 26433068981
Status : Answered
Chosen Option : 2

Q.6 Which number will replace the question mark (?) in the following series?
63, 60, 66, 57, ?

- Ans
- 1. 69
 - 2. 70
 - 3. 55
 - 4. 65

Question ID : 26433068473
Status : Answered
Chosen Option : 1

Q.7 Select the option that is related to the fifth letter-cluster in the same way as the second letter-cluster is related to the first letter-cluster and the fourth letter-cluster is related to the third letter-cluster.
KBT : PEU :: UQA : ZTB :: FJR : ?

- Ans
- 1. LNT
 - 2. KMQ
 - 3. JMU
 - 4. KMS

Question ID : 26433057746
Status : Answered
Chosen Option : 1

Q.8 Which two signs should be interchanged to make the below equation mathematically correct?
 $112 - 14 \div 40 + 4 \times 18 = 40$

- Ans
- 1. \div and $-$
 - 2. $+$ and $+$
 - 3. $+$ and \times
 - 4. $-$ and $+$

Question ID : 264330117507
Status : Answered
Chosen Option : 1

Q.9 In a code language, 'our son's car' is coded as 'fu da be', 'son's birthday today' is coded as 'la fu ja', 'today our match' is coded as 'he da la'. What is the code for the words 'car match'?

- Ans
- 1. da he
 - 2. fu be
 - 3. la he
 - 4. he be

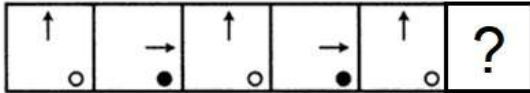
Question ID : 26433086986
Status : Answered
Chosen Option : 4

Q.10 Which of the following numbers will replace the question mark (?) in the given series?
1, 5, 17, 53, ?

- Ans
- 1. 157
 - 2. 145
 - 3. 161
 - 4. 178

Question ID : 26433082008
Status : Answered
Chosen Option : 3

Q.11 Select the figure from among the given options that can replace the question mark (?) in the following series.



Ans

- 1.
- 2.
- 3.
- 4.

Question ID : 26433080501
Status : Answered
Chosen Option : 1

Q.12 Select the correct combination of mathematical signs to sequentially replace the * signs and to balance the given equation.
 $45 * 15 * 13 * 52 * 26 * 37$

- Ans
- 1. =, -, +, +, +
 - 2. +, x, =, +, x
 - 3. =, x, =, +, +
 - 4. =, x, +, -, -

Question ID : 26433087191
Status : Answered
Chosen Option : 3

Q.13 A @ B means 'A is the husband of B'.
 A & B means 'A is the mother of B'.
 A # B means 'A is the daughter of B'.
 A % B means 'A is the sibling of B'.
 If R # P @ W % F & K, then how is R related to K?

Ans 1. Mother's sister's daughter

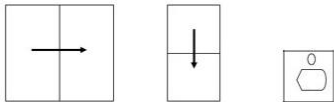
2. Brother

3. Brother-in-law

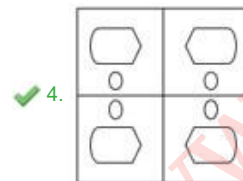
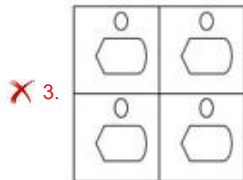
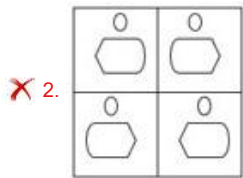
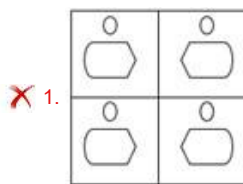
4. Nephew

Question ID : 26433069616
 Status : Answered
 Chosen Option : 1

Q.14 एक कागज को नीचे दिखाये गए रूप में मोड़ा और काटा जाता है। खोलने पर यह कैसे दिखाई देगा?



Ans



Question ID : 26433089785
 Status : Answered
 Chosen Option : 4

Q.15 Select the set in which the numbers are related in the same way as are the numbers of the following sets.

(NOTE : Operations should be performed on the whole numbers, without breaking down the numbers into its constituent digits. E.g. 13 – Operations on 13 such as adding/subtracting/multiplying etc. to 13 can be performed. Breaking down 13 into 1 and 3 and then performing mathematical operations on 1 and 3 is not allowed)

(40, 175, 15)

(30, 133, 11)

Ans 1. (29, 110, 13)

2. (25, 91, 12)

3. (17, 45, 10)

4. (25, 108, 10)

Question ID : 26433076547

Status : Answered

Chosen Option : 4

Q.16 Select the correct mirror image of the given figure when the mirror is placed at MN as shown below.



Ans 1. l k h n t f r w m

2. l k h k l u t t r w m

3. l k h k l n t f r w m

4. l k h k l n t f r w w

Question ID : 26433082332

Status : Answered

Chosen Option : 1

Q.17 उस विकल्प का चयन कीजिए जो तीसरे शब्द से उसी प्रकार संबंधित है जिस प्रकार दूसरा शब्द पहले शब्द से संबंधित है (शब्दों को अर्थपूर्ण शब्दों के रूप में माना जाना चाहिए और शब्द में अक्षरों/व्यंजनों /स्वरों की संख्या के आधार पर एक दूसरे से संबंधित नहीं किया जाना चाहिए)
शंकु : आकृति :: कार : _____

Ans 1. स्टेयरिंग

2. टायर

3. वाहन

4. सड़क

Question ID : 26433078825

Status : Answered

Chosen Option : 3

Q.18 Six people A, B, C, D, E and F are sitting around a circular table, facing the centre. E is sitting second to the right of B. F is the immediate neighbour of B and A. D is sitting second to the left of F. Who is sitting to the immediate right of C?

Ans 1. D

2. E

3. B

4. A

Question ID : 26433081515

Status : Answered

Chosen Option : 2

Q.19 In a certain code language, 'PEOPLE' is written as 'QEOQME' and 'MONKEY' is written as 'NOOLEZ'. How will 'SILVER' be written in that language?

- Ans
- 1. TJWMES
 - 2. TIMWES
 - 3. TWJMSE
 - 4. TJWMSE

Question ID : 26433068890
Status : Answered
Chosen Option : 2

Q.20 Which of the following terms will replace the question mark (?) in the given series?
ZLJI, XJHG, VHFE, ?, RDBA

- Ans
- 1. TFDC
 - 2. TFEC
 - 3. RFDC
 - 4. TFDE

Question ID : 26433068633
Status : Answered
Chosen Option : 1

Section : Part-B-General Knowledge and General awareness

Q.1 Who among the following was the court poet of Harshavardhana and the author of 'Harshacharita'?

- Ans
- 1. Rajashekhar
 - 2. Kalidas
 - 3. Aryabhata
 - 4. Banabhata

Question ID : 26433089126
Status : Answered
Chosen Option : 4

Q.2 माइक्रोफाइनेंस ऋण को किसी संपार्श्विक की आवश्यकता _____ है।

- Ans
- 1. नहीं होती
 - 2. होती
 - 3. हमेशा होती
 - 4. अधिकांशतः होती

Question ID : 264330115294
Status : Not Answered
Chosen Option : --

Q.3 उत्तर-पूर्वी पवनें कहां से उत्पन्न होती हैं?

- Ans
- 1. दक्षिणी गोलार्ध के उष्ण कटिबंधीय उच्च दाब कटिबंध
 - 2. उत्तरी गोलार्ध के उपोष्णकटिबंधीय उच्च दाब कटिबंध
 - 3. उत्तरी गोलार्ध के उष्ण कटिबंधीय निम्न दाब कटिबंध
 - 4. दक्षिणी गोलार्ध के उपोष्णकटिबंधीय उच्च दाब कटिबंध

Question ID : 26433087883
Status : Answered
Chosen Option : 3

Q.4 Who was recognized as the Global Peace Ambassador at the India International Conclave 2022?

- Ans**
- 1. Aadesh Gindodiya
 - 2. Ankita Sharma
 - 3. Anchal Kumar Srivastava
 - 4. Babita Singh

Question ID : 264330114997
Status : Not Answered
Chosen Option : --

Q.5 How many points advantage must a freestyle wrestler must have against his/ her opponent for the bout to be declared over?

- Ans**
- 1. 10
 - 2. 14
 - 3. 12
 - 4. 8

Question ID : 264330115934
Status : Not Answered
Chosen Option : --

Q.6 In India Green Revolution was led by :

- Ans**
- 1. Norman Borlaug
 - 2. M.S. Swaminathan
 - 3. Jawahar Lal Nehru
 - 4. Mahatma Gandhi

Question ID : 264330115416
Status : Answered
Chosen Option : 2

Q.7 Which of the following is known as the Flying Sikh of India?

- Ans**
- 1. Mohinder Singh
 - 2. Ajit Pal Singh
 - 3. Joginder Singh
 - 4. Milkha Singh

Question ID : 264330116259
Status : Answered
Chosen Option : 4

Q.8 Skill India Mission was launched under the flagship of _____.

- Ans**
- 1. Ministry of Skill Development and Entrepreneurship
 - 2. Ministry of Information and Broadcasting
 - 3. Ministry of Labour and Employment
 - 4. Ministry of Commerce and Industry

Question ID : 264330116191
Status : Answered
Chosen Option : 3

Q.9 What was the approximate percentage contribution of the industrial sector to GDP in 1950-51?

- Ans** 1. 11.8
 2. 15.2
 3. 22.4
 4. 6.2

Question ID : 264330116140
Status : Not Answered
Chosen Option : --

Q.10 The Sattriya Dance in Assam is inspired by _____.

- Ans** 1. Shakti Movement
 2. Bhakti Movement
 3. Tantrism
 4. Sufi Movement

Question ID : 26433086564
Status : Answered
Chosen Option : 3

Q.11 What is the atomic mass of Nitrogen?

- Ans** 1. 18
 2. 14
 3. 16
 4. 12

Question ID : 264330115173
Status : Answered
Chosen Option : 2

Q.12 In 1866, who among the following founded the East India Association in London?

- Ans** 1. Raja Ram Mohan Roy
 2. Dadabhai Naoroji
 3. Satyendra Nath Tagore
 4. Sayyid Ahmad Khan

Question ID : 26433090584
Status : Answered
Chosen Option : 1

Q.13 Rukmini Devi Arundale won various accolades in which dance form?

- Ans** 1. Kathak
 2. Kathakali
 3. Bharatnatyam
 4. Lavani

Question ID : 264330115845
Status : Answered
Chosen Option : 3

Q.14 Which article of the Indian Constitution states that India is a 'Union of States'?

- Ans 1. Article 1
 2. Article 2
 3. Article 10
 4. Article 11

Question ID : 26433089908
Status : Answered
Chosen Option : 1

Q.15 प्रत्येक बारह वर्ष बाद मनाया जाने वाला 'महामस्तकाभिषेक' एक _____ त्योहार है।

- Ans 1. सिख
 2. बौद्ध
 3. जैन
 4. हिंदू

Question ID : 26433094889
Status : Answered
Chosen Option : 4

Q.16 Pick the odd one out. (Hint: farm processes)

- Ans 1. ploughing
 2. sowing
 3. eating
 4. spraying

Question ID : 264330115541
Status : Answered
Chosen Option : 3

Q.17 According to the Census 2011, which state has the lowest female literacy rate in India?

- Ans 1. Bihar
 2. Rajasthan
 3. Himachal Pradesh
 4. Uttar Pradesh

Question ID : 264330116054
Status : Answered
Chosen Option : 1

Q.18 भारत के किस केंद्रीय मंत्री ने नवंबर 2022 में भारत अंतर्राष्ट्रीय व्यापार मेले में खादी इंडिया पवेलियन का उद्घाटन किया?

- Ans 1. नारायण राणे
 2. निर्मला सीतारमण
 3. सुब्रह्मण्यम जयशंकर
 4. किरण रिजिजू

Question ID : 264330114954
Status : Answered
Chosen Option : 3

Q.19 Under article 100(3) of the Constitution of India, the quorum to constitute a sitting of either House of Parliament is _____ of the total number of Members of the House.

- Ans**
- 1. one-fifth
 - 2. one-third
 - 3. half
 - 4. one-tenth

Question ID : 26433089913
Status : Answered
Chosen Option : 2

Q.20 Which of the following is a symptom of bacterial infection?

- Ans**
- 1. cardiac arrest
 - 2. fracture
 - 3. heart attack
 - 4. fever

Question ID : 264330115228
Status : Answered
Chosen Option : 4

Section : Part-C-Elementary Mathematics

Q.1 The total surface area of a cube whose side is 0.75 cm is:

- Ans**
- 1. 3.735 cm²
 - 2. 3.357 cm²
 - 3. 3.375 cm²
 - 4. 3.537 cm²

Question ID : 26433073050
Status : Answered
Chosen Option : 3

Q.2 The compound interest, compounded annually, on Rs.30,000 at 9% per annum is Rs.5,643. The time period (in years) is:

- Ans**
- 1. three
 - 2. Five
 - 3. two
 - 4. four

Question ID : 26433075239
Status : Answered
Chosen Option : 3

Q.3 After the successive discounts of 10% and 12% on the marked price of an item, it is sold for Rs.9,504, then the marked price is _____.

- Ans**
- 1. Rs.12,000
 - 2. Rs.15,000
 - 3. Rs.13,000
 - 4. Rs.14,000

Question ID : 26433061306
Status : Answered
Chosen Option : 1

Q.4 On a certain sum of money lent out at 40% per annum, the difference between the compound interest for 1 year, payable half yearly, simple interest for 1 year is ₹200. The sum is:

- Ans
- 1. ₹4,500
 - 2. ₹4,000
 - 3. ₹5,500
 - 4. ₹5,000

Question ID : 26433090291
Status : Answered
Chosen Option : 4

Q.5 A vendor buys 20 apples for Rs.300 and sells them at 15 for Rs.300. How many apples should be bought and sold to earn a profit of Rs.300?

- Ans
- 1. 65
 - 2. 50
 - 3. 55
 - 4. 60

Question ID : 26433080359
Status : Answered
Chosen Option : 4

Q.6 A scooter's value was reduced by 20 percent and is now worth Rs. 72000. What was its original price?

- Ans
- 1. Rs. 88000
 - 2. Rs. 94000
 - 3. Rs. 90000
 - 4. Rs. 100000

Question ID : 264330116795
Status : Answered
Chosen Option : 3

Q.7 The score of the eleven players of a cricket team is as follows. 12, 9, 52, 34, 30, 22, 0, 56, 16, 27 and 72. Find the average score of the team.

- Ans
- 1. 35
 - 2. 30
 - 3. 27
 - 4. 34

Question ID : 26433075965
Status : Answered
Chosen Option : 2

Q.8 Calculate the volume of a cylinder having a height of 56 cm and a base radius of 28 cm. (Use $\pi = \frac{22}{7}$)

- Ans
- 1. 216135 cm³
 - 2. 154853 cm³
 - 3. 123962 cm³
 - 4. 137984 cm³

Question ID : 26433080072
Status : Answered
Chosen Option : 4

Q.9 Mohan and Sohan are going from same place at 8 km/h and 9 km/h respectively. If Mohan and Sohan are going in the same direction, then what is the distance between Mohan and Sohan after 4.5 h?

- Ans 1. 4.5 km
 2. 5.5 km
 3. 5.0 km
 4. 4.0 km

Question ID : 26433075688
Status : Answered
Chosen Option : 1

Q.10 Find the fourth proportional to 7, 4 and 7.

- Ans 1. 9
 2. 6
 3. 4
 4. 7

Question ID : 26433080033
Status : Answered
Chosen Option : 3

Q.11 The cost of a washing machine is Rs.25,000. The cost was first increased by 20% and later on it was reduced by 20%. The present cost of the washing machine is:

- Ans 1. Rs.24,000
 2. Rs.25,500
 3. Rs.25,000
 4. Rs.24,500

Question ID : 26433082362
Status : Answered
Chosen Option : 1

Q.12 Kapil, Mohan, and Raju can do a piece of work separately in 18, 36, and 54 days. They started the work together but Mohan left the work 8 days before the completion of work and Raju left the work 6 days before the completion of the work. Find the (approximate) time in which the work is completed.

- Ans 1. 19 days
 2. 13 days
 3. 15 days
 4. 12 days

Question ID : 264330116875
Status : Answered
Chosen Option : 2

Q.13 Find the ratio in which rice at Rs.120 per kg is mixed with rice at Rs.155 per kg to get a mixture worth Rs.135 a kg.

- Ans 1. 3 : 4
 2. 2 : 3
 3. 1 : 3
 4. 4 : 3

Question ID : 26433074915
Status : Answered
Chosen Option : 4

Q.14 Amol raised the price of their products by 20 percent. How much discount should they give so as to sell the products on no gain no loss basis?

- Ans 1. $50/3$ percent
 2. $22/5$ percent
 3. $27/5$ percent
 4. $35/3$ percent

Question ID : 264330116760
Status : Answered
Chosen Option : 1

Q.15 The HCF of two numbers is 6 and their LCM is 253080. If one of the numbers is 4218, what is the second number?

- Ans 1. 488
 2. 120
 3. 245
 4. 360

Question ID : 26433080271
Status : Answered
Chosen Option : 4

Q.16 Ramesh and Naresh start running on a circular track of length 1920 metres from the same point simultaneously in the same direction with speed of 40 m/sec and 64 m/sec. After how much time from the start will they meet for the first time anywhere on the track?

- Ans 1. 60 sec
 2. 90 sec
 3. 80 sec
 4. 70 sec

Question ID : 26433075530
Status : Answered
Chosen Option : 3

Q.17 The highest common factor and the least common multiple of 432, 648 and 576 are _____ and _____, respectively.

- Ans 1. 72, 5184
 2. 36, 5184
 3. 36, 2592
 4. 72, 2592

Question ID : 26433085417
Status : Answered
Chosen Option : 2

Q.18 By selling a computer for Rs.26,000, a man gains 4%. If he sells the computer for Rs.19,000, then his loss will be:

- Ans 1. 24%
 2. 14%
 3. 20%
 4. 16%

Question ID : 26433074986
Status : Answered
Chosen Option : 1

Q.19 Samreen and Garima completed a piece of work together in 8 days. If Samreen can complete the same work in 10 days working independently, in how many days will Garima complete the same work alone?

- Ans
- 1. 20
 - 2. 35
 - 3. 40
 - 4. 45

Question ID : 26433075566
Status : Answered
Chosen Option : 3

Q.20 Which of the following fractions is the largest?

$$\frac{3}{5}, \frac{7}{10}, \frac{11}{15}, \frac{13}{20}$$

- Ans
- 1. $\frac{11}{15}$
 - 2. $\frac{13}{20}$
 - 3. $\frac{7}{10}$
 - 4. $\frac{3}{5}$

Question ID : 26433080320
Status : Answered
Chosen Option : 1

Section : Part-D-English

Q.1 Select the most appropriate meaning of the given idiom.

Face the music

- Ans
- 1. Listening to melodies from music albums
 - 2. Music for peace and health
 - 3. Dance according to the tune
 - 4. To face the unpleasant consequences of one's actions

Question ID : 26433072576
Status : Answered
Chosen Option : 4

Q.2 Select the INCORRECTLY spelt word.

- Ans
- 1. Sentence
 - 2. Tendancy
 - 3. Artificial
 - 4. Matrimony

Question ID : 26433073503
Status : Answered
Chosen Option : 2

Q.3 Select the most appropriate synonym of the given word.

Queer

- Ans
- 1. Expedite
 - 2. Ordinary
 - 3. Valid
 - 4. Strange

Question ID : 26433072189
Status : Answered
Chosen Option : 4

Q.4 Select the most appropriate option that can substitute the underlined segment in the given sentence. If there is no need to substitute it, select 'No substitution'.
Some passengers misplaced their luggages before boarding the train.

- Ans
- 1. misplaced their luggage
 - 2. No substitution
 - 3. misplaces their luggages
 - 4. misplaced his luggages

Question ID : 26433093078
Status : Answered
Chosen Option : 1

Q.5 Fill in the blanks with the correct homophone.

_____ of anything is destructive in nature.

- Ans
- 1. Excess
 - 2. Access
 - 3. Axes
 - 4. Axis

Question ID : 26433092935
Status : Answered
Chosen Option : 1

Q.6 Select the most appropriate option that can substitute the underlined segment in the given sentence.

Land with unoccupied possession is pretending to be more valuable.

- Ans
- 1. was similarly to be
 - 2. are likely to be
 - 3. have likely to be
 - 4. is likely to be

Question ID : 26433088506
Status : Answered
Chosen Option : 4

Q.7 Select the option that expresses the given sentence in simple past tense.

- A. Arun knew the concepts of geometry.
- B. Arun had been knowing the concepts of geometry.
- C. Arun had known the concepts of geometry.
- D. Arun was knowing the concepts of geometry.

- Ans
- 1. A
 - 2. D
 - 3. C
 - 4. B

Question ID : 26433073515
Status : Answered
Chosen Option : 1

Q.8 Select the correct option to substitute the underlined segment in the given sentence. If no substitution is required, select 'No substitution'.

She is married with a doctor.

- Ans
- 1. a doctor
 - 2. for a doctor
 - 3. to a doctor
 - 4. No substitution

Question ID : 26433090817
Status : Answered
Chosen Option : 3

Q.9 Select the most appropriate ANTONYM of the underlined word.

As a boy, Charles was a boor who bullied other kids in his neighbourhood.

- Ans
- 1. creep
 - 2. blighter
 - 3. gentleman
 - 4. scum

Question ID : 26433088840
Status : Answered
Chosen Option : 3

Q.10 Select the most appropriate synonym of the given word.

Competent

- Ans
- 1. Capable
 - 2. Overqualified
 - 3. Unfit
 - 4. Unskilled

Question ID : 26433086484
Status : Answered
Chosen Option : 1

Q.11 Select the most appropriate meaning of the given idiom.

Royal road

- Ans 1. Achieving something by birth
 2. Achieving something by truth
 3. Achieving something by false means
 4. Achieving something trouble free

Question ID : 26433084754
Status : Answered
Chosen Option : 1

Q.12 Select the most appropriate ANTONYM of the given word.

Perplex

- Ans 1. Comprehensive
 2. Complex
 3. Simplify
 4. Classify

Question ID : 26433072272
Status : Answered
Chosen Option : 1

Q.13 Select the INCORRECTLY spelt word.

- Ans 1. Jeweller
 2. Naturally
 3. Maintainance
 4. Laundry

Question ID : 26433073739
Status : Answered
Chosen Option : 3

Q.14 Select the most appropriate option to fill in the blanks and make the sentence meaningful.

She hurt her _____ and _____.

- Ans 1. heal; tow
 2. heal; toe
 3. heel; toe
 4. heel; tow

Question ID : 26433092102
Status : Answered
Chosen Option : 3

Q.15 Select the most appropriate ANTONYM of the word given in the bracket to fill in the blank.

My stomach is so _____ (empty) I couldn't possibly eat more.

- Ans 1. teeming
 2. overfed
 3. flush
 4. drained

Question ID : 26433084613
Status : Answered
Chosen Option : 2

Comprehension:

In the following passage, some words have been deleted. Read the passage carefully and select the most appropriate option to fill in each blank.

The oldest hub of carpet weaving in India is Mirzapur in Bhadohi district of Uttar Pradesh. The Ganga (1)_____ past this town with its ghats, ancient temples and waterfalls. The genesis of carpet making in Mirzapur can be (2)_____ to the Mughal emperor, Akbar, in the 16th century. A (3)_____ of Persian carpet weavers, it is said, on its way to the Mughal court was (4)_____ and injured by dacoits on the Grand Trunk Road. The weavers were rescued and given shelter by local villagers. The master weaver of the group decided to settle down here and share his skills with his (5)_____. That is how the renowned carpet industry of Mirzapur took root.

SubQuestion No : 16

Q.16 Select the most appropriate option to fill in blank 1.

- Ans 1. spreads
 2. grows
 3. sets
 4. flows

Question ID : 26433090525

Status : Answered

Chosen Option : 4

Comprehension:

In the following passage, some words have been deleted. Read the passage carefully and select the most appropriate option to fill in each blank.

The oldest hub of carpet weaving in India is Mirzapur in Bhadohi district of Uttar Pradesh. The Ganga (1)_____ past this town with its ghats, ancient temples and waterfalls. The genesis of carpet making in Mirzapur can be (2)_____ to the Mughal emperor, Akbar, in the 16th century. A (3)_____ of Persian carpet weavers, it is said, on its way to the Mughal court was (4)_____ and injured by dacoits on the Grand Trunk Road. The weavers were rescued and given shelter by local villagers. The master weaver of the group decided to settle down here and share his skills with his (5)_____. That is how the renowned carpet industry of Mirzapur took root.

SubQuestion No : 17

Q.17 Select the most appropriate option to fill in blank 2.

- Ans 1. extracted
 2. reduced
 3. traced
 4. found

Question ID : 26433090526

Status : Answered

Chosen Option : 3

Comprehension:

In the following passage, some words have been deleted. Read the passage carefully and select the most appropriate option to fill in each blank.

The oldest hub of carpet weaving in India is Mirzapur in Bhadohi district of Uttar Pradesh. The Ganga (1)_____ past this town with its ghats, ancient temples and waterfalls. The genesis of carpet making in Mirzapur can be (2)_____ to the Mughal emperor, Akbar, in the 16th century. A (3)_____ of Persian carpet weavers, it is said, on its way to the Mughal court was (4)_____ and injured by dacoits on the Grand Trunk Road. The weavers were rescued and given shelter by local villagers. The master weaver of the group decided to settle down here and share his skills with his (5)_____. That is how the renowned carpet industry of Mirzapur took root.

SubQuestion No : 18

Q.18 Select the most appropriate option to fill in blank 3.

- Ans
- 1. crowd
 - 2. army
 - 3. caravan
 - 4. band

Question ID : 26433090527

Status : Answered

Chosen Option : 3

Comprehension:

In the following passage, some words have been deleted. Read the passage carefully and select the most appropriate option to fill in each blank.

The oldest hub of carpet weaving in India is Mirzapur in Bhadohi district of Uttar Pradesh. The Ganga (1)_____ past this town with its ghats, ancient temples and waterfalls. The genesis of carpet making in Mirzapur can be (2)_____ to the Mughal emperor, Akbar, in the 16th century. A (3)_____ of Persian carpet weavers, it is said, on its way to the Mughal court was (4)_____ and injured by dacoits on the Grand Trunk Road. The weavers were rescued and given shelter by local villagers. The master weaver of the group decided to settle down here and share his skills with his (5)_____. That is how the renowned carpet industry of Mirzapur took root.

SubQuestion No : 19

Q.19 Select the most appropriate option to fill in blank 4.

- Ans
- 1. encroached
 - 2. lost
 - 3. hindered
 - 4. waylaid

Question ID : 26433090528

Status : Answered

Chosen Option : 3

Comprehension:

In the following passage, some words have been deleted. Read the passage carefully and select the most appropriate option to fill in each blank.

The oldest hub of carpet weaving in India is Mirzapur in Bhadohi district of Uttar Pradesh. The Ganga (1)_____ past this town with its ghats, ancient temples and waterfalls. The genesis of carpet making in Mirzapur can be (2)_____ to the Mughal emperor, Akbar, in the 16th century. A (3)_____ of Persian carpet weavers, it is said, on its way to the Mughal court was (4)_____ and injured by dacoits on the Grand Trunk Road. The weavers were rescued and given shelter by local villagers. The master weaver of the group decided to settle down here and share his skills with his (5)_____. That is how the renowned carpet industry of Mirzapur took root.

SubQuestion No : 20

Q.20 Select the most appropriate option to fill in blank 5.

- Ans 1. benefactors
 2. beneficiaries
 3. recipients
 4. sponsors

Question ID : 26433090529
Status : Answered
Chosen Option : 4

Section : Part-D-Hindi

Q.1 प्रातःकाल में सूरज की किरणें मन को भाती हैं।

उपरोक्त वाक्य में रेखांकित शब्द के उचित पर्यायवाची शब्द का चयन विकल्पों में से कीजिए।

- Ans 1. रश्मि
 2. ईख
 3. जया
 4. प्रभात

Question ID : 26433079720
Status : Not Answered
Chosen Option : --

Q.2 "उसे यहाँ आने के लिए बोल दो।"

उपरोक्त वाक्य में क्रिया सम्बन्धी त्रुटि पहचानकर निम्नलिखित में से शुद्ध वाक्य का चयन कीजिए।

- Ans 1. उसे यहाँ आने के लिए कह दो।
 2. उसे यहाँ आने के लिए सूचना दो।
 3. उसे यहाँ आने के लिए भेज दो।
 4. उसे यहाँ आने के लिए बता दो।

Question ID : 26433066973
Status : Not Answered
Chosen Option : --

Q.3 निम्नलिखित वाक्य में रेखांकित शब्द के स्थान पर उपयुक्त पर्यायवाची शब्द कौन-सा होगा?

राम कुशल कारीगर है।

- Ans 1. भुवन
 2. अलक
 3. चंचल
 4. निपुण

Question ID : 26433066899
Status : Not Answered
Chosen Option : --

Q.4 जिसको लाँघना कठिन हो।
ऊपर दिए गए वाक्यांश के लिए एक शब्द क्या होगा?

- Ans 1. दुर्लभ
 2. दुर्दम्य
 3. दुर्लघ्य
 4. दुःसाध्य

Question ID : 26433070058
Status : Not Answered
Chosen Option : --

Q.5 निम्न वाक्य में रेखांकित शब्द के स्थान पर सर्वोचित शब्द का चयन कीजिए।
इस पर 'जिसकी लाठी उसकी भैंस' वाली कथा चरितार्थ होती है।

- Ans 1. आख्यायिका
 2. गाथा
 3. कहावत
 4. कहानी

Question ID : 26433065694
Status : Not Answered
Chosen Option : --

Q.6 'जो अंडे से जन्म लेता है' वाक्यांश के लिए इनमें से उपयुक्त शब्द कौन-सा है?

- Ans 1. अंत्यज
 2. जलज
 3. अंडज
 4. मलयज

Question ID : 26433066886
Status : Not Answered
Chosen Option : --

Q.7 'बीज बोने के थोड़े दिन बाद आंकुर निकलने लगे।' वाक्य के किस भाग में अशुद्ध वर्तनी वाला शब्द है?

- Ans 1. बीज बोने
 2. बाद आंकुर
 3. निकलने लगे।
 4. के थोड़े दिन

Question ID : 26433069699
Status : Not Answered
Chosen Option : --

Q.8 'महिला जब भाषण दे रही थी, उसकी आवाज में एक आकर्षण था।' निम्न में से कौन सा इस वाक्य में प्रयुक्त 'आकर्षण' शब्द का विलोम नहीं है?

- Ans 1. अनाकर्षण
 2. विपकर्षण
 3. अपकर्षण
 4. विकर्षण

Question ID : 26433069746
Status : Not Answered
Chosen Option : --

Q.9 'पीतांबर _____।' उपर्युक्त वाक्य में रिक्त स्थान के लिए उपयुक्त विकल्प निम्न में से क्या होगा?

- Ans
- 1. का अर्थ है – पीले रंग का आकाश
 - 2. का अर्थ है – पीले रंग का व्यक्ति
 - 3. का अर्थ है – पीले रंग का रथ
 - 4. का अर्थ है – पीले रंग का वस्त्र

Question ID : 26433067043
Status : Not Answered
Chosen Option : --

Q.10 निम्नलिखित मुहावरे का उपयुक्त अर्थ क्या होगा?
कागजी घोड़े दौड़ाना

- Ans
- 1. बिना मतलब का काम करना
 - 2. बहुत पढ़ना लिखना
 - 3. अत्याधिक प्रयास करना
 - 4. पढ़ाई लिखाई करना

Question ID : 26433065777
Status : Not Answered
Chosen Option : --

Q.11 उद्यम से ही सफलता मिलती है। उपरोक्त वाक्य में रेखांकित शब्द के विलोम शब्द का चयन विकल्पों में से कीजिए।

- Ans
- 1. नकारा
 - 2. प्रयत्न
 - 3. उद्यमी
 - 4. निरुद्यम

Question ID : 26433079747
Status : Not Answered
Chosen Option : --

Q.12 निम्नलिखित अर्थ वाले मुहावरे का चयन विकल्पों में से कीजिए।
किसी व्यक्ति का पुरानी परंपरा के साथ चलना

- Ans
- 1. मक्खी मारना
 - 2. शेघी बघारना
 - 3. राई का पहाड़ बनाना
 - 4. लकीर का फकीर होना

Question ID : 26433070003
Status : Not Answered
Chosen Option : --

Q.13 निम्नलिखित में से अशुद्ध वाक्य कौन-सा है?

- Ans
- 1. प्रत्येक व्यक्ति कविता नहीं कर सकते।
 - 2. मैं बचपन में वहाँ जाता था।
 - 3. रघु ने निकिता को मिठाई दी।
 - 4. बैल और बकरी घास चरते हैं।

Question ID : 26433066985
Status : Not Answered
Chosen Option : --

Q.14 क्षेत्र को लेकर भारत में संघर्ष अब आम बात हो गई है।
उपरोक्त वाक्य में रेखांकित शब्द के स्थान पर भाववाचक संज्ञा शब्द क्या होगा?

- Ans
- 1. क्षेत्रित
 - 2. क्षत्रिय
 - 3. क्षेत्रीय
 - 4. क्षेत्रीयता

Question ID : 26433062857
Status : Not Answered
Chosen Option : --

Q.15 'आशा से बहुत अधिक' इस वाक्यांश के लिए सार्थक शब्द है -

- Ans
- 1. आशातीत
 - 2. वांछित
 - 3. प्रतीक्षित
 - 4. इच्छित

Question ID : 26433062332
Status : Not Answered
Chosen Option : --

Comprehension:

निम्नलिखित गद्यांश में से कुछ शब्द हटा दिए गए हैं। दिए गए विकल्पों की सहायता से रिक्त स्थानों की पूर्ति कीजिए। प्रत्येक संख्या के लिए उपयुक्त विकल्प का चयन कीजिए।
एक बार बिल्ली ने उचककर दो में से 1. _____ अंडा तोड़ दिया। मेरी माँ ने 2. _____ तो उसे दुख हुआ।
उसने स्टूल 3. _____ चढ़कर दूसरे अंडे को बचाने की कोशिश की। लेकिन 4. _____ कोशिश में दूसरा अंडा उसी के हाथ से गिरकर टूट 5. _____।

SubQuestion No : 16

Q.16 रिक्त स्थान 1 की पूर्ति के लिए सर्वाधिक उपयुक्त विकल्प का चयन कीजिए।

- Ans
- 1. चार
 - 2. पाँच
 - 3. तीन
 - 4. एक

Question ID : 26433079585
Status : Not Answered
Chosen Option : --

Comprehension:

निम्नलिखित गद्यांश में से कुछ शब्द हटा दिए गए हैं। दिए गए विकल्पों की सहायता से रिक्त स्थानों की पूर्ति कीजिए। प्रत्येक संख्या के लिए उपयुक्त विकल्प का चयन कीजिए।
एक बार बिल्ली ने उचककर दो में से 1. _____ अंडा तोड़ दिया। मेरी माँ ने 2. _____ तो उसे दुख हुआ।
उसने स्टूल 3. _____ चढ़कर दूसरे अंडे को बचाने की कोशिश की। लेकिन 4. _____ कोशिश में दूसरा अंडा उसी के हाथ से गिरकर टूट 5. _____।

SubQuestion No : 17

Q.17 रिक्त स्थान 2 की पूर्ति के लिए सर्वाधिक उपयुक्त विकल्प का चयन कीजिए।

- Ans
- 1. सूँघा
 - 2. देखा
 - 3. पकड़ा
 - 4. सोचा

Question ID : 26433079586
Status : Not Answered
Chosen Option : --

Comprehension:

निम्नलिखित गद्यांश में से कुछ शब्द हटा दिए गए हैं। दिए गए विकल्पों की सहायता से रिक्त स्थानों की पूर्ति कीजिए। प्रत्येक संख्या के लिए उपयुक्त विकल्प का चयन कीजिए।

एक बार बिल्ली ने उचककर दो में से 1. _____ अंडा तोड़ दिया। मेरी माँ ने 2. _____ तो उसे दुख हुआ। उसने स्टूल 3. _____ चढ़कर दूसरे अंडे को बचाने की कोशिश की। लेकिन 4. _____ कोशिश में दूसरा अंडा उसी के हाथ से गिरकर टूट 5. _____।

SubQuestion No : 18

Q.18 रिक्त स्थान 3 की पूर्ति के लिए सर्वाधिक उपयुक्त विकल्प का चयन कीजिए।

- Ans
- 1. के लिए
 - 2. तक
 - 3. में
 - 4. पर

Question ID : 26433079587

Status : Not Answered

Chosen Option : --

Comprehension:

निम्नलिखित गद्यांश में से कुछ शब्द हटा दिए गए हैं। दिए गए विकल्पों की सहायता से रिक्त स्थानों की पूर्ति कीजिए। प्रत्येक संख्या के लिए उपयुक्त विकल्प का चयन कीजिए।

एक बार बिल्ली ने उचककर दो में से 1. _____ अंडा तोड़ दिया। मेरी माँ ने 2. _____ तो उसे दुख हुआ। उसने स्टूल 3. _____ चढ़कर दूसरे अंडे को बचाने की कोशिश की। लेकिन 4. _____ कोशिश में दूसरा अंडा उसी के हाथ से गिरकर टूट 5. _____।

SubQuestion No : 19

Q.19 रिक्त स्थान 4 की पूर्ति के लिए सर्वाधिक उपयुक्त विकल्प का चयन कीजिए।

- Ans
- 1. इससे
 - 2. इसलिए
 - 3. इस
 - 4. इसकी

Question ID : 26433079588

Status : Not Answered

Chosen Option : --

Comprehension:

निम्नलिखित गद्यांश में से कुछ शब्द हटा दिए गए हैं। दिए गए विकल्पों की सहायता से रिक्त स्थानों की पूर्ति कीजिए। प्रत्येक संख्या के लिए उपयुक्त विकल्प का चयन कीजिए।

एक बार बिल्ली ने उचककर दो में से 1. _____ अंडा तोड़ दिया। मेरी माँ ने 2. _____ तो उसे दुख हुआ। उसने स्टूल 3. _____ चढ़कर दूसरे अंडे को बचाने की कोशिश की। लेकिन 4. _____ कोशिश में दूसरा अंडा उसी के हाथ से गिरकर टूट 5. _____।

SubQuestion No : 20

Q.20 रिक्त स्थान 5 की पूर्ति के लिए सर्वाधिक उपयुक्त विकल्प का चयन कीजिए।

- Ans
- 1. गए
 - 2. हुआ
 - 3. गया
 - 4. गई

Question ID : 26433079589

Status : Not Answered

Chosen Option : --