

## Constable GD in CAPFs SSF Rifleman GD in Assam Rifles and Sepoy in NCB Examination 2022

Roll Number	<a href="http://www.govtjobsalert.in">www.govtjobsalert.in</a>
Candidate Name	<a href="http://www.govtjobsalert.in">www.govtjobsalert.in</a>
Venue Name	TCS Gito Bitan
Exam Date	23/01/2023
Exam Time	11:45 AM - 12:45 PM
Subject	Constable GD Examination 2022

### Section : Part-A-General Intelligence and Reasoning

Q.1 In a certain code language, 'CHILL' is written as 'HDNHQ' and 'HARSH' is written as 'MWWOM'. How will 'DEVIL' be written in the same code language?

- Ans
- 1. JBECQ
  - 2. IBADQ
  - 3. IAAEQ
  - 4. JAERQ

Question ID : 26433068142  
Status : Answered  
Chosen Option : 3

Q.2 Which of the following terms will replace the question mark (?) in the given series?  
KDN, JEO, GHQ, ?, UTX, LCC

- Ans
- 1. BMT
  - 2. BMS
  - 3. BNT
  - 4. BNN

Question ID : 26433069455  
Status : Not Attempted and Marked For Review  
Chosen Option : --

Q.3 Which of the following numbers will replace the question mark (?) in the given series?  
3, 11, 27, 59, ?

- Ans
- 1. 123
  - 2. 111
  - 3. 118
  - 4. 127

Question ID : 26433067880  
Status : Answered  
Chosen Option : 1

Q.4 A @ B means 'A is the sister of B'.  
A & B means 'A is the brother of B'.  
A # B means 'A is the wife of B'.  
A ^ B means 'A is the mother of B'.  
A + B means 'A is the father of B'.  
If U + Q ^ R @ N & C ^ I @ J # A, then which of the following statements is NOT correct?

- Ans
- 1. A is the son of C.
  - 2. Q is the mother of N.
  - 3. U is the maternal grandfather of R.
  - 4. C is the daughter of Q.

Question ID : 26433068948  
Status : Answered  
Chosen Option : 1

Q.5 Which of the following terms will replace the question mark (?) in the given series?  
NOTK, LQQN, ? , HUKT, FWHW

- Ans
- 1. KSMQ
  - 2. JSMP
  - 3. JSNQ
  - 4. KSNP

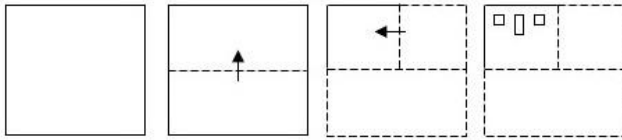
Question ID : 26433068305  
Status : Answered  
Chosen Option : 3

Q.6 In a certain code, 'Love And Light' is written as 513. 'I Love Sugar' is written as 437 and 'Sugar And Spice' is written as 614. What is the digit code for the word 'Love'?

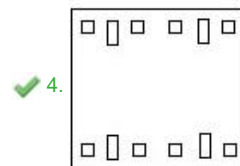
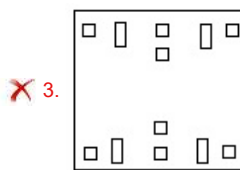
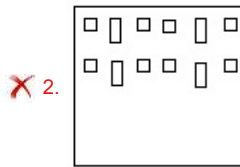
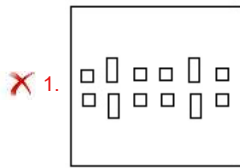
- Ans
- 1. 1
  - 2. 7
  - 3. 4
  - 4. 3

Question ID : 26433090109  
Status : Answered  
Chosen Option : 4

Q.7 A paper is folded and cut as shown below. How will it appear when unfolded?



Ans



Question ID : 26433090956

Status : Answered

Chosen Option : 4

Q.8 Three Statements are given followed by Three conclusions numbered I, II and III. Assuming the statements to be true, even if they seem to be at variance with commonly known facts, decide which of the conclusions logically follow(s) from the statements.

Statements:

Some fans are big.

All big are coats.

Some coats are flat.

Conclusions:

I. All fans are big.

II. Some coats are big.

III. Some flats are coats.

Ans ✓ 1. Both conclusions II and III follow.

✗ 2. Both conclusions I and II follow.

✗ 3. Both conclusions I and III follow.

✗ 4. All conclusions follow.

Question ID : 26433074636

Status : Answered

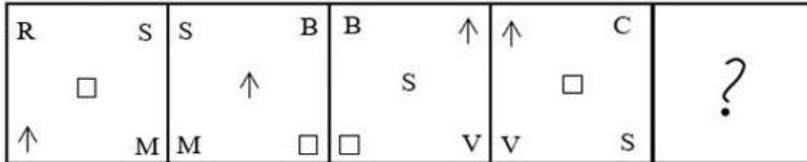
Chosen Option : 1

**Q.9** Which of the following numbers will replace the question mark (?) in the given series?  
5, 9, 25, 97, 481, ?

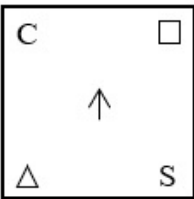
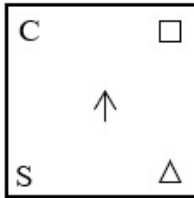
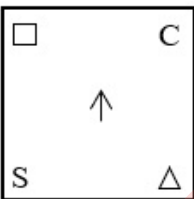
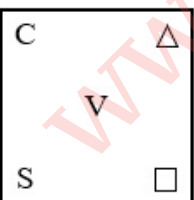
- Ans**  1. 2881  
 2. 2684  
 3. 2788  
 4. 2885

Question ID : 26433085643  
 Status : Answered  
 Chosen Option : 1

**Q.10** Select the figure that will come in place of the question mark (?) in the following figure series.



**Ans**

1. 
2. 
3. 
4. 

Question ID : 26433081695  
 Status : Answered  
 Chosen Option : 4

Q.11 Select the option that is related to the third term in the same way as the second term is related to the first term.

ROSE : 36303810 :: LILY : ?

- Ans
- 1. 34303816
  - 2. 24192456
  - 3. 34363816
  - 4. 24182450

Question ID : 26433057690  
Status : Answered  
Chosen Option : 4

Q.12 Which of the following options represents the correct order of the given words as they would appear in the English dictionary?

1. Leave
2. Learn
3. Leap
4. Lease
5. Least

- Ans
- 1. 3, 2, 4, 1, 5
  - 2. 3, 4, 2, 1, 5
  - 3. 2, 3, 4, 1, 5
  - 4. 3, 2, 4, 5, 1

Question ID : 26433086970  
Status : Answered  
Chosen Option : 4

Q.13 Select the correct combination of mathematical signs to sequentially replace the \* signs and to balance the given equation.

$7 * 10 * 280 * 2 * 10 * 80$

- Ans
- 1.  $\times, =, \div, +, -$
  - 2.  $=, +, \times, +, -$
  - 3.  $\times, +, =, \div, -$
  - 4.  $-, +, \times, \div, =$

Question ID : 26433094995  
Status : Answered  
Chosen Option : 1

Q.14 Select the correct mirror image of the given figure when the mirror is placed at MN as shown below.

B C h 3 5 4 k x

M ————— N

- Ans
- 1. B C h 3 2 4 K X
  - 2. B C 4 3 2 4 K X
  - 3. B C h 3 2 4 K X
  - 4. B C 4 3 2 4 K X

Question ID : 26433080813  
Status : Answered  
Chosen Option : 3

Q.15 Six students are sitting around a circular table facing the centre. A sits to the immediate left of C. E sits third to the right of D. D is an immediate neighbour of C. B is an immediate neighbour of both E and F. Who sits to the immediate right of F?

- Ans
- 1. D
  - 2. C
  - 3. B
  - 4. E

Question ID : 26433079506  
Status : Answered  
Chosen Option : 3

Q.16 Which two signs should be interchanged to make the below equation mathematically correct?

$$124 - 8 + 96 \div 16 \times 20 = 12$$

- Ans
- 1. - and  $\times$
  - 2. - and +
  - 3. + and  $\div$
  - 4.  $\times$  and  $\div$

Question ID : 264330117496  
Status : Answered  
Chosen Option : 2

Q.17 Six friends are sitting in a circle facing the centre. They are P, Q, R, S, T and U. P is the immediate neighbour of T and S. S is sitting to the immediate left of Q. U is sitting to the immediate right of Q. R is the immediate neighbour of U and T. Who is sitting to the immediate right of T?

- Ans
- 1. S
  - 2. R
  - 3. Q
  - 4. P

Question ID : 26433074604  
Status : Answered  
Chosen Option : 4

Q.18 Select the option that is related to the fifth letter-cluster in the same way as the second letter-cluster is related to the first letter-cluster and the fourth letter-cluster is related to the third letter-cluster.

FACTORY : AFTCYRO :: FASHION : AFHSNOI :: EXPLAIN : ?

- Ans
- 1. XELPNIA
  - 2. NIALPXE
  - 3. PLAINEX
  - 4. EXALPNI

Question ID : 26433069634  
Status : Answered  
Chosen Option : 1

**Q.19** Select the set in which the numbers are related in the same way as are the numbers of the following sets.

(NOTE : Operations should be performed on the whole numbers, without breaking down the numbers into its constituent digits. E.g. 13 – Operations on 13 such as adding/subtracting/multiplying etc. to 13 can be performed. Breaking down 13 into 1 and 3 and then performing mathematical operations on 1 and 3 is not allowed)

(6, 9, 324)

(5, 8, 240)

**Ans** ✓ 1. (10, 6, 360)

✗ 2. (9, 4, 232)

✗ 3. (8, 5, 280)

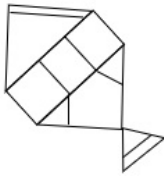
✗ 4. (9, 5, 260)

Question ID : 26433076538

Status : Answered

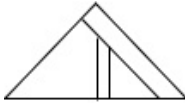
Chosen Option : 1

**Q.20** Select the option figure which is embedded in the given figure. (Rotation is NOT allowed)

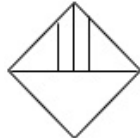


**Ans**

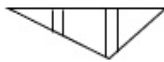
✗ 1.



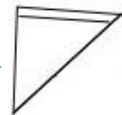
✗ 2.



✗ 3.



✓ 4.



Question ID : 26433069338

Status : Answered

Chosen Option : 4

Section : Part-B-General Knowledge and General awareness

**Q.1** What is the strong, hot and dry local wind that blows in the northern parts of the country in the months of May and June called?

**Ans** ✗ 1. Mango Showers

✗ 2. Cherry Blossoms

✓ 3. Loo

✗ 4. Kalbaisakhi

Question ID : 264330115985

Status : Answered

Chosen Option : 3

**Q.2 What do you call the distance between the centre of the nucleus and the outermost shell of an isolated atom?**

- Ans**  1. Isotope  
 2. Atomic size  
 3. Electron  
 4. Atomic mass

Question ID : 26433087854  
Status : Answered  
Chosen Option : 3

**Q.3 Based on the projects identified in City Water Balance Plans,\_\_\_\_\_ (CWAP) will be devised.**

- Ans**  1. City Water Area Plan  
 2. City Water Action Plan  
 3. Conserve Water Action Plan  
 4. City Water Action Period

Question ID : 264330116182  
Status : Answered  
Chosen Option : 3

**Q.4 Who among the following is believed to be the author of 'Natyashastra'?**

- Ans**  1. Sankara  
 2. Bharata  
 3. Raghava  
 4. Vishnu

Question ID : 26433071448  
Status : Answered  
Chosen Option : 3

**Q.5 Who among the following became Member of Legislative Assembly from Gopalganj, Bihar in India, in November 2022?**

- Ans**  1. Nitish Kumar  
 2. Kusum Devi  
 3. Lalmuni Chaubey  
 4. Narendra Modi

Question ID : 264330114973  
Status : Answered  
Chosen Option : 3

**Q.6 Which article of Indian Constitution is related with the Conduct of business of the Government of a State?**

- Ans**  1. 132  
 2. 178  
 3. 144  
 4. 166

Question ID : 26433089966  
Status : Answered  
Chosen Option : 1



Q.7 The price of one unit of foreign currency in terms of domestic currency is called

- Ans
- 1. fixed exchange rate
  - 2. nominal exchange rate
  - 3. real exchange rate
  - 4. pegged float rate

Question ID : 264330115435  
Status : Answered  
Chosen Option : 2

Q.8 Vempati Chinna Satyam received recognition in which dance form?

- Ans
- 1. Sattriya
  - 2. Mohiniattam
  - 3. Kuchipudi
  - 4. Creative dance

Question ID : 264330115836  
Status : Answered  
Chosen Option : 3

Q.9 Which country has the longest written constitution?

- Ans
- 1. India
  - 2. Indonesia
  - 3. Canada
  - 4. United States of America

Question ID : 264330115618  
Status : Answered  
Chosen Option : 1

Q.10 Match the following:

- a) Cereals and Grains i) lentil
- b) Milk and meat ii) rice
- c) Fats and sugars iii) fish
- d) Pulses and legumes iv) ghee

- Ans
- 1. a-iii, b-iv, c-ii, d-i
  - 2. a-ii, b-iii, c-iv, d-i
  - 3. a-iii, b-i, c-ii, d-iv
  - 4. a-i, b-ii, c-iii, d-iv

Question ID : 264330115219  
Status : Answered  
Chosen Option : 2

Q.11 \_\_\_\_\_ is a kharif crop in north and rabi crop in south India.

- Ans
- 1. Sesamum
  - 2. Mustard
  - 3. Castor
  - 4. Linseed

Question ID : 264330115530  
Status : Answered  
Chosen Option : 3

Q.12 Which of the following spring festivals is celebrated in Goa?

- Ans  1. Shigmo  
 2. Mim Kut  
 3. Losar  
 4. Rouf

Question ID : 264330106219  
Status : Answered  
Chosen Option : 3

Q.13 The width of the lobby marked on the sides of the kabaddi playfield is:

- Ans  1. 2.5 m  
 2. 1.5 m  
 3. 1 m  
 4. 2 m

Question ID : 26433096227  
Status : Answered  
Chosen Option : 3

Q.14 On November 26, 1949, Dr. Rajendra Prasad signed the document as president of the assembly. Which document is being referred to here?

- Ans  1. The Instrument of Accession  
 2. The first Constitution draft  
 3. The Constitution of India  
 4. The Preamble

Question ID : 264330115692  
Status : Answered  
Chosen Option : 3

Q.15 Receipts of the government which create liability or reduce financial assets are termed as \_\_\_\_\_.

- Ans  1. service agreements  
 2. capital receipts  
 3. reserves  
 4. revenue receipts

Question ID : 264330115283  
Status : Answered  
Chosen Option : 3

Q.16 Which Indian state has the lowest population density as per the Census 2011?

- Ans  1. Sikkim  
 2. Nagaland  
 3. Arunachal Pradesh  
 4. Mizoram

Question ID : 264330116045  
Status : Answered  
Chosen Option : 4

Q.17 Who took oath as the new Chief Minister of Maharashtra in June 2022?

- Ans  1. Eknath Sambhaji Shinde  
 2. Prithviraj Chavan  
 3. Uddhav Thackeray  
 4. Devendra Fadnavis

Question ID : 264330114986  
Status : Answered  
Chosen Option : 1

Q.18 Indian weightlifter Saikhom Mirabai Chanu created history in 2021 when she became the first Indian weightlifter to clinch a silver medal at the \_\_\_\_\_.

- Ans  1. Tokyo Olympics  
 2. Netherlands Championship  
 3. Asian Championship  
 4. World Championship in Spain

Question ID : 26433089927  
Status : Answered  
Chosen Option : 1

Q.19 As a country develops, it undergoes 'structural changes'. Which of the following is a indicator of these structural changes?

- Ans  1. The share of the industrial sector in GDP decreases  
 2. The share of agriculture in GDP declines  
 3. The share of agriculture in GDP increases  
 4. The share of agriculture in GDP becomes more than 50 percent

Question ID : 26433090756  
Status : Answered  
Chosen Option : 3

Q.20 Charaka is known as the father of \_\_\_\_\_.

- Ans  1. Yoga  
 2. Indian Raga  
 3. Classical Dance of India  
 4. Ayurveda

Question ID : 26433089864  
Status : Answered  
Chosen Option : 3

Section : Part-C-Elementary Mathematics

Q.1 A person covers a certain distance by bullet train at 84 km/h and returns back to the starting point by bus at a speed of 66 km/h. Find the average speed of the person for the whole journey.

- Ans  1. 74.92 km/h  
 2. 73.92 km/h  
 3. 75.92 km/h  
 4. 72.92 km/h

Question ID : 26433080194  
Status : Answered  
Chosen Option : 2

Q.2 If a shopkeeper wants to give 20% discount on the cost price of the article, then he has to sell it for Rs.400. If he sells it at Rs.520, then his gain percentage is:

- Ans
- 1. 6%
  - 2. 8%
  - 3. 4%
  - 4. 5%

Question ID : 26433066305  
Status : Answered  
Chosen Option : 3

Q.3 Mohan buys a chair at Rs.1,200. If he sells it at Rs.1,440, then what is the profit percentage?

- Ans
- 1. 18%
  - 2. 12%
  - 3. 20%
  - 4. 15%

Question ID : 26433075651  
Status : Answered  
Chosen Option : 3

Q.4 If the curved surface area of a solid right circular cylinder of height  $h$  and radius  $r$  is one-third of its total surface area, then:

- Ans
- 1.  $h = 2r$
  - 2.  $h = r$
  - 3.  $h = \left(\frac{1}{3}\right)r$
  - 4.  $h = \left(\frac{1}{2}\right)r$

Question ID : 26433075280  
Status : Not Answered  
Chosen Option : --

Q.5 Manish can do a piece of work in 7 days while Anil can do the same piece of work in 6 days. The wage for full work is Rs. 390, If they both work together to complete the work, then find the earnings of Manish.

- Ans
- 1. Rs. 400
  - 2. Rs. 180
  - 3. Rs. 200
  - 4. Rs. 500

Question ID : 264330116866  
Status : Answered  
Chosen Option : 2

Q.6 The ratio of expenditure to saving of a person is 7:3. If the income increases by 12% and the expenditure increases by 8%, then by what percentage his savings will increase? (Correct to 2 decimal places)

- Ans
- 1. 23.33 Percent
  - 2. 24.33 Percent
  - 3. 22.33 Percent
  - 4. 21.33 Percent

Question ID : 26433080163  
Status : Answered  
Chosen Option : 4

Q.7 Which of the following pairs represents the co-prime numbers?

- Ans  1. (15, 141)  
 2. (15, 94)  
 3. (15, 235)  
 4. (51, 141)

Question ID : 26433080283  
Status : Answered  
Chosen Option : 2

Q.8 Kunal bought an article and sold it at a loss of 15%. If he had bought it for 18% less and sold it for ₹108 more, then he would have had a profit of 30%. Find the cost price of the article.

- Ans  1. ₹540  
 2. ₹560  
 3. ₹570  
 4. ₹500

Question ID : 26433080165  
Status : Not Attempted and Marked For Review  
Chosen Option : --

Q.9 The smallest number that is exactly divisible by 12, 15, 18 and 27 is:

- Ans  1. 508  
 2. 680  
 3. 540  
 4. 740

Question ID : 26433091500  
Status : Answered  
Chosen Option : 3

Q.10 A bag contains 50 kg of pulses. There are three pulses, A, B, and C, mixed in it in the ratio of 4 : 3 : 3. The prices of pulses A, B, and C are ₹80 per kg, ₹60 per kg and ₹80 per kg respectively. What will be the average cost of 1 kg mixture of pulses?

- Ans  1. ₹74  
 2. ₹80  
 3. ₹70  
 4. ₹72

Question ID : 26433082499  
Status : Answered  
Chosen Option : 1

Q.11 In a circular race of 625 m, A and B start from the same point, at the same time and at speeds of 90 km/h and 72 km/h, respectively. After how much time will they meet again for the first time on the track if they are running in the same directions?

- Ans
- 1. In 115 seconds
  - 2. In 122 seconds
  - 3. In 125 seconds
  - 4. In 120 seconds

Question ID : 26433076383  
Status : Answered  
Chosen Option : 3

Q.12 615 coins consist of one rupee, 50 paise and 25 paise coins. Their values are in the ratio of 3 : 5 : 7, respectively. Find the number of 50 paise coins.

- Ans
- 1. 150
  - 2. 180
  - 3. 160
  - 4. 170

Question ID : 26433080179  
Status : Answered  
Chosen Option : 1

Q.13 Find the volume of a right circular cylinder whose curved surface area is 1012 cm<sup>2</sup> and circumference of base is 22 cm. (Use  $\pi = 22/7$ )

- Ans
- 1. 1771 cm<sup>3</sup>
  - 2. 1672 cm<sup>3</sup>
  - 3. 1487 cm<sup>3</sup>
  - 4. 1325 cm<sup>3</sup>

Question ID : 26433066326  
Status : Not Answered  
Chosen Option : --

Q.14 What is the yearly rate of compound interest, compounding annually at which a principal becomes Rs.500 in two years and Rs.700 in three years?

- Ans
- 1. 32%
  - 2. 38%
  - 3. 40%
  - 4. 35%

Question ID : 26433080337  
Status : Answered  
Chosen Option : 1

Q.15 If 30 copies of a compact disc (CD) cost Rs.140, how much will 24 copies of the same CD cost?

- Ans
- 1. Rs.121
  - 2. Rs.112
  - 3. Rs.101
  - 4. Rs.110

Question ID : 26433080330  
Status : Answered  
Chosen Option : 2

Q.16 The marked price of a fan is Rs. 1850 and the shopkeeper allows a discount of 9.5 percent on it. The selling price of the fan is:

- Ans  1. Rs. 1580.60  
 2. Rs. 1674.25  
 3. Rs. 1448.80  
 4. Rs. 1752.50

Question ID : 264330116751  
Status : Answered  
Chosen Option : 2

Q.17 Jaishankar borrowed a sum of money from his employer at the rate of 8% per annum compound interest, compounded annually. He would have to pay ₹58,320 after a period of two years to finish the loan. How much did he borrow?

- Ans  1. ₹50,000  
 2. ₹50,100  
 3. ₹51,000  
 4. ₹49,900

Question ID : 26433091623  
Status : Answered  
Chosen Option : 1

Q.18 Rabia can finish a work in 12 days. Sarita can finish the same work in 18 days. In how many days will the work be finished if they work together?

- Ans  1.  $6\frac{2}{10}$   
 2.  $7\frac{2}{10}$   
 3.  $\frac{10}{72}$   
 4.  $7\frac{4}{10}$

Question ID : 26433080382  
Status : Answered  
Chosen Option : 2

Q.19 A man's working hours per day were increased by 25% and his wages per hour were increased by 20%. By how much percent were his daily earnings increased?

- Ans  1. 40%  
 2. 35%  
 3. 50%  
 4. 45%

Question ID : 26433080357  
Status : Not Answered  
Chosen Option : --

**Q.20** A person drives a car for 4 hours at the speed of 75 kmph and for next 6 hours at the speed of 90 kmph. Find the average speed of the car during the entire journey.

- Ans**
- 1. 84 kmph
  - 2. 80 kmph
  - 3. 85 kmph
  - 4. 82.50 kmph

Question ID : 264330116690  
Status : Not Answered  
Chosen Option : --

Section : Part-D-English

**Q.1** Select the most appropriate meaning of the given idiom.

**Hit the sack**

- Ans**
- 1. To go to bed in order to read
  - 2. To go to bed in order to write
  - 3. To go to bed in order to sleep
  - 4. Go to bed in order to sit

Question ID : 26433073647  
Status : Answered  
Chosen Option : 3

**Q.2** Select the INCORRECTLY spelt word.

- Ans**
- 1. Cognisant
  - 2. Troublesome
  - 3. Pathetic
  - 4. Hierarchial

Question ID : 26433073658  
Status : Answered  
Chosen Option : 1

**Q.3** Complete the sentence with the most appropriate synonym of the word in brackets.

Tell everyone to clear the \_\_\_\_\_ (hallway) as the bride and her father have arrived.

- Ans**
- 1. driveway
  - 2. aisle
  - 3. stage
  - 4. avenue

Question ID : 26433089753  
Status : Answered  
Chosen Option : 2

**Q.4** Identify the correctly spelt sentence.

- Ans**
- 1. He is a leading manufakturer in the clothing industry.
  - 2. He is a leading manufacturer in the clothing endustry.
  - 3. He is a leading manufacturer in the clothing industry.
  - 4. He is a leading manufacturer in the clothing indosty.

Question ID : 26433072827  
Status : Answered  
Chosen Option : 3



Q.5 Select the most appropriate ANTONYM of the given word.

Shabby

- Ans  1. Dilapidated  
 2. Miserable  
 3. Respectable  
 4. Impoverished

Question ID : 26433073572  
Status : Not Answered  
Chosen Option : --

Q.6 Select the most appropriate alternative to replace the underlined segment in the given sentence.

They met yesterday, haven't they?

- Ans  1. isn't it?  
 2. don't they?  
 3. did they?  
 4. didn't they?

Question ID : 26433092352  
Status : Answered  
Chosen Option : 2

Q.7 Select the most appropriate ANTONYM of the word given in the bracket to fill in the blank.

His \_\_\_\_\_ (repulsive) behaviour could not be ignored.

- Ans  1. logical  
 2. innocuous  
 3. ambitious  
 4. faithful

Question ID : 26433060326  
Status : Answered  
Chosen Option : 2

Q.8 Which of the following options is most similar in meaning to the given word?

Allude

- Ans  1. Tell  
 2. Refer  
 3. Demonstrate  
 4. Instruct

Question ID : 26433088810  
Status : Not Answered  
Chosen Option : --

Q.9 Select the most appropriate option that can substitute the underlined segment in the given sentence.

Prime Minister Narendra Modi paid tribute to Pandit Jawaharlal Nehru on his death day.

- Ans  1. death anniversary  
 2. death ceremony  
 3. death festivity  
 4. death recurrence

Question ID : 26433088164  
Status : Answered  
Chosen Option : 1

Q.10 Replace the word in bold in the given sentence with its ANTONYM.

Reforms were also made in the **tedious** technicalities of the feudal law.

- Ans  1. drab  
 2. tiring  
 3. exciting  
 4. boring

Question ID : 26433072157  
Status : Not Answered  
Chosen Option : --

Q.11 Select the most appropriate option to fill in the blank.

His ashes were deposited in a golden \_\_\_\_\_.

- Ans  1. earn  
 2. urn  
 3. yearn  
 4. years

Question ID : 26433090385  
Status : Answered  
Chosen Option : 4

Q.12 Select the most appropriate synonym of the given word.

Sailor

- Ans  1. Prosecutor  
 2. Enterpriser  
 3. Mariner  
 4. Trainer

Question ID : 26433089340  
Status : Not Answered  
Chosen Option : --

**Q.13** Select the most appropriate option to substitute the underlined segment in the given sentence.

Guess that vessel holds the least water?

- Ans
- 1. vessel which holds
  - 2. which vessel hold
  - 3. that vessel hold
  - 4. which vessel holds

Question ID : 26433093020  
Status : Answered  
Chosen Option : 2

**Q.14** The following sentence has been split into four segments. Identify the segment that contains a grammatical error.

I hope / you will / helped me / this weekend.

- Ans
- 1. I hope
  - 2. helped me
  - 3. you will
  - 4. this weekend

Question ID : 26433092273  
Status : Answered  
Chosen Option : 3

**Q.15** Select the most appropriate meaning of the given idiom.

Out of the woods

- Ans
- 1. Risking life
  - 2. Being arrogant
  - 3. Not in danger
  - 4. Always happy

Question ID : 26433072279  
Status : Answered  
Chosen Option : 4

**Comprehension:**

In the following passage some words have been deleted. Fill in the blanks with the help of the alternatives given. Select the most appropriate option for each number.

I hope you will find this series (1)\_\_\_\_\_ in developing language skills of the learners through diverse reading (2)\_\_\_\_\_ such as fairy tales, fables, classics, adventure, biography, drama and so on. The prose pieces (3)\_\_\_\_\_ for intensive language study while the poems (4)\_\_\_\_\_ enable children to develop an ear for (5)\_\_\_\_\_ and rhythm.

**SubQuestion No : 16**

**Q.16** Select the most appropriate option to fill in blank 1.

- Ans
- 1. helpful
  - 2. demanding
  - 3. distasteful
  - 4. challenging

Question ID : 26433093027  
Status : Answered  
Chosen Option : 1

**Comprehension:**

In the following passage some words have been deleted. Fill in the blanks with the help of the alternatives given. Select the most appropriate option for each number.

I hope you will find this series (1)\_\_\_\_\_ in developing language skills of the learners through diverse reading (2)\_\_\_\_\_ such as fairy tales, fables, classics, adventure, biography, drama and so on. The prose pieces (3)\_\_\_\_\_ for intensive language study while the poems (4)\_\_\_\_\_ enable children to develop an ear for (5)\_\_\_\_\_ and rhythm.

**SubQuestion No : 17**

**Q.17 Select the most appropriate option to fill in blank 2.**

- Ans  1. habits  
 2. papers  
 3. genres  
 4. mediums

Question ID : 26433093028  
Status : Answered  
Chosen Option : 1

**Comprehension:**

In the following passage some words have been deleted. Fill in the blanks with the help of the alternatives given. Select the most appropriate option for each number.

I hope you will find this series (1)\_\_\_\_\_ in developing language skills of the learners through diverse reading (2)\_\_\_\_\_ such as fairy tales, fables, classics, adventure, biography, drama and so on. The prose pieces (3)\_\_\_\_\_ for intensive language study while the poems (4)\_\_\_\_\_ enable children to develop an ear for (5)\_\_\_\_\_ and rhythm.

**SubQuestion No : 18**

**Q.18 Select the most appropriate option to fill in blank 3.**

- Ans  1. were given  
 2. are deleted  
 3. are meant  
 4. will be added

Question ID : 26433093029  
Status : Answered  
Chosen Option : 3

**Comprehension:**

In the following passage some words have been deleted. Fill in the blanks with the help of the alternatives given. Select the most appropriate option for each number.

I hope you will find this series (1)\_\_\_\_\_ in developing language skills of the learners through diverse reading (2)\_\_\_\_\_ such as fairy tales, fables, classics, adventure, biography, drama and so on. The prose pieces (3)\_\_\_\_\_ for intensive language study while the poems (4)\_\_\_\_\_ enable children to develop an ear for (5)\_\_\_\_\_ and rhythm.

**SubQuestion No : 19**

**Q.19 Select the most appropriate option to fill in blank 4.**

- Ans  1. was  
 2. will  
 3. is  
 4. has

Question ID : 26433093030  
Status : Answered  
Chosen Option : 2

**Comprehension:**

In the following passage some words have been deleted. Fill in the blanks with the help of the alternatives given. Select the most appropriate option for each number.

I hope you will find this series (1)\_\_\_\_\_ in developing language skills of the learners through diverse reading (2)\_\_\_\_\_ such as fairy tales, fables, classics, adventure, biography, drama and so on. The prose pieces (3)\_\_\_\_\_ for intensive language study while the poems (4)\_\_\_\_\_ enable children to develop an ear for (5)\_\_\_\_\_ and rhythm.

**SubQuestion No : 20****Q.20 Select the most appropriate option to fill in blank 5.**

- Ans  1. personification  
 2. simile  
 3. onomatopoeia  
 4. rhyme

Question ID : 26433093031  
Status : Answered  
Chosen Option : 3

**Section : Part-D-Hindi****Q.1 'वह व्यक्ति जो काव्य अथवा कविता की रचना करता हो' वाक्यांश के लिए सार्थक शब्द है-**

- Ans  1. कटु  
 2. कल्प  
 3. कपि  
 4. कवि

Question ID : 26433062231  
Status : Not Answered  
Chosen Option : --

**Q.2 मुहावरों और उनके अर्थ का निम्नलिखित में से कौन सा युग्म अशुद्ध है?**

- Ans  1. हाथ का मैल- तुच्छ वस्तु  
 2. हाथ पैर मारना- प्रयत्न करना  
 3. सर खपाना- दिमाग लगाना  
 4. लकीर का फकीर- प्रगतिशील होना

Question ID : 26433062556  
Status : Not Answered  
Chosen Option : --

**Q.3 निम्न शब्दों में से उचित शब्द का प्रयोग करके दिए गए वाक्य के रिक्त स्थान की पूर्ति कीजिए। आपको क्या पता कि उसने मेरे साथ क्या \_\_\_\_\_ की?**

- Ans  1. कठिनाई  
 2. खूबी  
 3. विशेषता  
 4. भलाई

Question ID : 26433074417  
Status : Not Answered  
Chosen Option : --

Q.4 जल ही जीवन है।  
उपरोक्त वाक्य में रेखांकित शब्द के पर्यायवाची शब्द का चयन विकल्पों में से कीजिए।

- Ans
- 1. दृग
  - 2. मतंग
  - 3. हर
  - 4. पानी

Question ID : 26433079617  
Status : Not Answered  
Chosen Option : --

Q.5 निम्नलिखित में से कौन सा एक कारक चिन्ह नहीं है?

- Ans
- 1. द्वारा
  - 2. जाना
  - 3. के लिए
  - 4. पर

Question ID : 26433085028  
Status : Not Answered  
Chosen Option : --

Q.6 'भोजन बहुत सुन्दर बना है।' इस वाक्य में रेखांकित शब्द के स्थान पर उपयुक्त शब्द क्या होगा?

- Ans
- 1. बेहतर
  - 2. स्वादिष्ट
  - 3. खुबसूरत
  - 4. उन्नत

Question ID : 26433066799  
Status : Not Answered  
Chosen Option : --

Q.7 निम्नलिखित विकल्पों में से कौन सा एक निजवाचक सर्वनाम का वाक्य नहीं है?

- Ans
- 1. ये फाइलें मैं अपने आप देखूँगा।
  - 2. यह सब वे अपने आप देख लेंगे।
  - 3. वे अपने आपही यह जिम्मेदारी सँभालने को तैयार हो गए।
  - 4. आप कुछ पूछना चाहते हैं?

Question ID : 26433091240  
Status : Not Answered  
Chosen Option : --

Q.8 निम्न में से कौन-सा शब्द 'अर्जुन' शब्द का पर्यायवाची शब्द है?

- Ans
- 1. विनायक
  - 2. सव्यसाची
  - 3. जगन्नाथ
  - 4. अमरपति

Question ID : 26433067074  
Status : Not Answered  
Chosen Option : --

Q.9 'जिसका कोई नाथ न हो' वाक्यांश के लिए सार्थक शब्द है-

- Ans  1. नाथ  
 2. नास्तिक  
 3. अनाथ  
 4. सनाथ

Question ID : 26433065861  
Status : Not Answered  
Chosen Option : --

Q.10 "गुरु हथौड़े से वह प्रहार कर रहा था।"

उक्त वाक्य में प्रयुक्त 'गुरु' के स्थान पर उसके विलोम शब्द का प्रयोग निम्न में से किस वाक्य में किया गया है?

- Ans  1. वजनदार हथौड़े से वह प्रहार कर रहा था।  
 2. लघु हथौड़े से वह प्रहार कर रहा था।  
 3. भारी हथौड़े से वह प्रहार कर रहा था।  
 4. बड़े हथौड़े से वह प्रहार कर रहा था।

Question ID : 26433067022  
Status : Not Answered  
Chosen Option : --

Q.11 निम्नलिखित वाक्य में से अशुद्धि पहचानें-  
तुम लोग कुते की मौत मरोगे।

- Ans  1. तुम  
 2. मरोगे  
 3. मौत  
 4. कुते

Question ID : 26433066830  
Status : Not Answered  
Chosen Option : --

Q.12 "सुयश अमेरिका गया होगा।"

उपरोक्त वाक्य को पूर्ण भूतकाल का प्रयोग करते हुए पुनः लिखिए।

- Ans  1. सुयश अमेरिका जा रहा था।  
 2. सुयश अमेरिका गया था।  
 3. सुयश अमेरिका जाएगा।  
 4. सुयश अमेरिका गया है।

Question ID : 26433066981  
Status : Not Answered  
Chosen Option : --

Q.13 निम्नलिखित वाक्यांश के लिए एक सार्थक शब्द क्या होगा?  
गज के समान गति से चलने वाली

- Ans  1. मृणालकान्ति  
 2. गजगामिनी  
 3. हंसवाहिनी  
 4. मृगनयनी

Question ID : 26433069989  
Status : Not Answered  
Chosen Option : --

Q.14 निम्नलिखित वाक्य के किस खंड में अशुद्धि है?  
आप अपनी कार को भी ले आना।

- Ans
- 1. आना
  - 2. आप
  - 3. को भी
  - 4. अपनी

Question ID : 26433066754  
Status : Not Answered  
Chosen Option : --

Q.15 ' \_\_\_\_\_ भर पानी में डूब मरना।'   
मुहावरे में रिक्त स्थान की पूर्ति उपयुक्त शब्द द्वारा कीजिए।

- Ans
- 1. सूखे
  - 2. चुल्लू
  - 3. बाल्टी
  - 4. तालाब

Question ID : 26433069686  
Status : Not Answered  
Chosen Option : --

**Comprehension:**

प्रश्न संख्या 1-5 के उत्तर निम्न गद्यांश के आधार पर दीजिए।

गुरु नानक ने प्रेम का संदेश दिया है उनका कथन था कि ईश्वर नाम के सम्मुख जाति और कुल के बंधन (1) \_\_\_\_\_ हैं, क्योंकि मनुष्य जीवन का जो चरम प्राप्तव्य है वह स्वयं प्रेमरूप है प्रेम ही उसका स्वभाव है, (2) \_\_\_\_\_ ही उसका साधन है अरे ओ मुग्ध मनुष्य, सच्ची प्रीति से ही तेरा मान-अभिमान नष्ट होगा, तेरी छोटाई की सीमा (3) \_\_\_\_\_ होगी, परम मंगलमय शिव तुझे प्राप्त होगा उसी सच्चे प्रेम की साधना ही तेरे जीवन का परम लक्ष्य है बाह्य (4) \_\_\_\_\_ को तू धर्म समझ रहा है मूल संस्कारों को तू आस्था मानता है नहीं प्यारे, यह सब धर्म नहीं है धर्म तो स्वयं रूप होकर भगवान के रूप में तेरे भीतर (5) \_\_\_\_\_ है उनका मत था कि विश्व का परित्याग कर सन्यास लेना ईश्वर की दृष्टि में आवश्यक नहीं है उसके लिए तो धार्मिक सन्यासी तथा भक्त व गृहस्थ सभी समान हैं।

**SubQuestion No : 16**

Q.16 रिक्त स्थान (1) के लिए सर्वाधिक उपयुक्त शब्द इनमें से कौन सा होगा?

- Ans
- 1. अनिवार्य
  - 2. जरूरी
  - 3. निरर्थक
  - 4. सार्थक

Question ID : 26433092232  
Status : Not Answered  
Chosen Option : --



**Comprehension:**

प्रश्न संख्या 1-5 के उत्तर निम्न गद्यांश के आधार पर दीजिए।

गुरु नानक ने प्रेम का संदेश दिया है उनका कथन था कि ईश्वर नाम के सम्मुख जाति और कुल के बंधन (1) \_\_\_\_\_ हैं, क्योंकि मनुष्य जीवन का जो चरम प्राप्तव्य है वह स्वयं प्रेमरूप है प्रेम ही उसका स्वभाव है, (2) \_\_\_\_\_ ही उसका साधन है अरे ओ मुग्ध मनुष्य, सच्ची प्रीति से ही तेरा मान-अभिमान नष्ट होगा, तेरी छोटाई की सीमा (3) \_\_\_\_\_ होगी, परम मंगलमय शिव तुझे प्राप्त होगा उसी सच्चे प्रेम की साधना ही तेरे जीवन का परम लक्ष्य है बाह्य (4) \_\_\_\_\_ को तू धर्म समझ रहा है मूल संस्कारों को तू आस्था मानता है नहीं प्यारे, यह सब धर्म नहीं है धर्म तो स्वयं रूप होकर भगवान के रूप में तेरे भीतर (5) \_\_\_\_\_ है उनका मत था कि विश्व का परित्याग कर सन्यास लेना ईश्वर की दृष्टि में आवश्यक नहीं है उसके लिए तो धार्मिक सन्यासी तथा भक्त व गृहस्थ सभी समान हैं।

**SubQuestion No : 17**

Q.17 रिक्त स्थान (2) के लिए सर्वाधिक उपयुक्त शब्द इनमें से कौन सा होगा?

- Ans  1. शत्रुता  
 2. घृणा  
 3. प्रेम  
 4. गुस्सा

Question ID : 26433092233

Status : Not Answered

Chosen Option : --

**Comprehension:**

प्रश्न संख्या 1-5 के उत्तर निम्न गद्यांश के आधार पर दीजिए।

गुरु नानक ने प्रेम का संदेश दिया है उनका कथन था कि ईश्वर नाम के सम्मुख जाति और कुल के बंधन (1) \_\_\_\_\_ हैं, क्योंकि मनुष्य जीवन का जो चरम प्राप्तव्य है वह स्वयं प्रेमरूप है प्रेम ही उसका स्वभाव है, (2) \_\_\_\_\_ ही उसका साधन है अरे ओ मुग्ध मनुष्य, सच्ची प्रीति से ही तेरा मान-अभिमान नष्ट होगा, तेरी छोटाई की सीमा (3) \_\_\_\_\_ होगी, परम मंगलमय शिव तुझे प्राप्त होगा उसी सच्चे प्रेम की साधना ही तेरे जीवन का परम लक्ष्य है बाह्य (4) \_\_\_\_\_ को तू धर्म समझ रहा है मूल संस्कारों को तू आस्था मानता है नहीं प्यारे, यह सब धर्म नहीं है धर्म तो स्वयं रूप होकर भगवान के रूप में तेरे भीतर (5) \_\_\_\_\_ है उनका मत था कि विश्व का परित्याग कर सन्यास लेना ईश्वर की दृष्टि में आवश्यक नहीं है उसके लिए तो धार्मिक सन्यासी तथा भक्त व गृहस्थ सभी समान हैं।

**SubQuestion No : 18**

Q.18 रिक्त स्थान (3) के लिए सर्वाधिक उपयुक्त शब्द इनमें से कौन सा होगा?

- Ans  1. समाप्त  
 2. प्रगति  
 3. शुरू  
 4. उद्भव

Question ID : 26433092234

Status : Not Answered

Chosen Option : --

**Comprehension:**

प्रश्न संख्या 1-5 के उत्तर निम्न गद्यांश के आधार पर दीजिए।

गुरु नानक ने प्रेम का संदेश दिया है उनका कथन था कि ईश्वर नाम के सम्मुख जाति और कुल के बंधन (1) \_\_\_\_\_ हैं, क्योंकि मनुष्य जीवन का जो चरम प्राप्तव्य है वह स्वयं प्रेमरूप है प्रेम ही उसका स्वभाव है, (2) \_\_\_\_\_ ही उसका साधन है अरे ओ मुग्ध मनुष्य, सच्ची प्रीति से ही तेरा मान-अभिमान नष्ट होगा, तेरी छोटाई की सीमा (3) \_\_\_\_\_ होगी, परम मंगलमय शिव तुझे प्राप्त होगा उसी सच्चे प्रेम की साधना ही तेरे जीवन का परम लक्ष्य है बाह्य (4) \_\_\_\_\_ को तू धर्म समझ रहा है मूल संस्कारों को तू आस्था मानता है नहीं प्यारे, यह सब धर्म नहीं है धर्म तो स्वयं रूप होकर भगवान के रूप में तेरे भीतर (5) \_\_\_\_\_ है उनका मत था कि विश्व का परित्याग कर सन्यास लेना ईश्वर की दृष्टि में आवश्यक नहीं है उसके लिए तो धार्मिक सन्यासी तथा भक्त व गृहस्थ सभी समान हैं।

**SubQuestion No : 19**

Q.19 रिक्त स्थान (4) के लिए सर्वाधिक उपयुक्त शब्द इनमें से कौन सा होगा?

- Ans  1. संस्कारों  
 2. विश्वासों  
 3. आडंबरों  
 4. नीतियों

Question ID : 26433092235

Status : Not Answered

Chosen Option : --

**Comprehension:**

प्रश्न संख्या 1-5 के उत्तर निम्न गद्यांश के आधार पर दीजिए।

गुरु नानक ने प्रेम का संदेश दिया है उनका कथन था कि ईश्वर नाम के सम्मुख जाति और कुल के बंधन (1) \_\_\_\_\_ हैं, क्योंकि मनुष्य जीवन का जो चरम प्राप्तव्य है वह स्वयं प्रेमरूप है प्रेम ही उसका स्वभाव है, (2) \_\_\_\_\_ ही उसका साधन है अरे ओ मुग्ध मनुष्य, सच्ची प्रीति से ही तेरा मान-अभिमान नष्ट होगा, तेरी छोटाई की सीमा (3) \_\_\_\_\_ होगी, परम मंगलमय शिव तुझे प्राप्त होगा उसी सच्चे प्रेम की साधना ही तेरे जीवन का परम लक्ष्य है बाह्य (4) \_\_\_\_\_ को तू धर्म समझ रहा है मूल संस्कारों को तू आस्था मानता है नहीं प्यारे, यह सब धर्म नहीं है धर्म तो स्वयं रूप होकर भगवान के रूप में तेरे भीतर (5) \_\_\_\_\_ है उनका मत था कि विश्व का परित्याग कर सन्यास लेना ईश्वर की दृष्टि में आवश्यक नहीं है उसके लिए तो धार्मिक सन्यासी तथा भक्त व गृहस्थ सभी समान हैं।

**SubQuestion No : 20**

Q.20 रिक्त स्थान (5) के लिए सर्वाधिक उपयुक्त शब्द इनमें से कौन सा होगा?

- Ans  1. विराजमान  
 2. साधना  
 3. गायब  
 4. बाहर

Question ID : 26433092236

Status : Not Answered

Chosen Option : --