

Constable GD in CAPFs SSF Rifleman GD in Assam Rifles and Sepoy in NCB Examination 2022

Roll Number	www.govtjobsalert.in
Candidate Name	www.govtjobsalert.in
Venue Name	ION Digital Zone iDZ Lahowal
Exam Date	24/01/2023
Exam Time	11:45 AM - 12:45 PM
Subject	Constable GD Examination 2022

Section : Part-A-General Intelligence and Reasoning

Q.1 In a certain code language, 'STORY' is written as 'ZSPUT' and 'MUSIC' is written as 'DJTVN'. How will 'PRINT' be written in that language?

- Ans
- 1. QSJOU
 - 2. UOJSQ
 - 3. UJOSQ
 - 4. UOJTQ

Question ID : 26433069639
Status : Answered
Chosen Option : 2

Q.2 Select the correct mirror image of the given figure when the mirror is placed at MN as shown below.

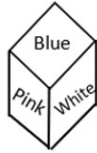
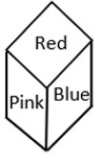
aStRonaUT



- Ans
- 1. TU6noЯt26
 - 2. Tυ6noЯt2A
 - 3. Tυ6noЯt2A
 - 4. Tυ6noЯt26

Question ID : 26433085563
Status : Answered
Chosen Option : 1

Q.3 Two different positions of the same dice are shown having colours- Red, Blue, Pink, Green, white and black.
Find the colour on the face opposite to the face showing 'Red'.



- Ans**
- 1. Green
 - 2. Pink
 - 3. Black
 - 4. White

Question ID : 26433085516
Status : Answered
Chosen Option : 1

Q.4 If '+' means 'x', '-' means '÷', '÷' means '+', and 'x' means '÷'. Which of the following will be the value of the expression?
 $12 + 5 - 24 \times 3 \div 5$

- Ans**
- 1. 53
 - 2. 68
 - 3. 63
 - 4. 13

Question ID : 264330114187
Status : Answered
Chosen Option : 3

Q.5 Which of the following numbers will replace the question marks (?) in the given series?
101, 110, 122, 137, ?, 176, ?

- Ans**
- 1. 165, 230
 - 2. 160, 220
 - 3. 170, 240
 - 4. 155, 200

Question ID : 26433070227
Status : Answered
Chosen Option : 4

Q.6 Which two signs should be interchanged to make the below equation mathematically correct?
 $96 \times 8 + 27 \div 6 - 12 = 162$

- Ans**
- 1. + and -
 - 2. ÷ and -
 - 3. × and ÷
 - 4. × and +

Question ID : 264330117531
Status : Answered
Chosen Option : 3

Q.7 Which option represents the correct order of the given words as they would appear in the English dictionary?

- 1 Naughty
- 2 Nasty
- 3 Nail
- 4 Name
- 5 Natural

- Ans
- 1. 4,3,2,5,1
 - 2. 3,4,1,2,5
 - 3. 3,4,2,5,1
 - 4. 3,2,5,4,1

Question ID : 26433069275
Status : Answered
Chosen Option : 3

Q.8 There are seven people in a family. A is married to C. A has two children, B and E. A is the mother of B and E. B is the wife of L. P is the wife of E. L has one daughter G. E has one daughter K. How is C related to K ?

- Ans
- 1. Son
 - 2. Mother's father
 - 3. Father's father
 - 4. Brother

Question ID : 26433074596
Status : Answered
Chosen Option : 3

Q.9 Select the option that is related to the third word in the same way as the second word is related to the first word.

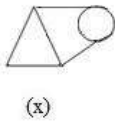
(The words must be considered as meaningful English words and must not be related to each other based on the number of letters/number of consonants/vowels in the word)

Ludo : Dice :: Cricket : ?

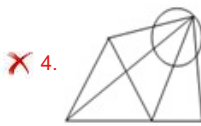
- Ans
- 1. Bat
 - 2. Fast
 - 3. Football
 - 4. Outdoor

Question ID : 26433079481
Status : Answered
Chosen Option : 1

Q.10 Select the option figure in which the given figure (X) is embedded as its part (rotation is NOT allowed).



Ans



Question ID : 26433069545
Status : Answered
Chosen Option : 4

Q.11 Which of the following letter-clusters will replace the question mark (?) and complete the following letter-cluster series?
CC, XD, SE, NF, ?

Ans

✓ 1. IG

✗ 2. IF

✗ 3. JG

✗ 4. IH

Question ID : 26433067289
Status : Answered
Chosen Option : 2

Q.12 Which of the following numbers will replace the question marks (?) in the given series?

1, 3, 6, 10, ?, ?, 28, 36, 45, 55

Ans

✗ 1. 21, 24

✗ 2. 12, 15

✓ 3. 15, 21

✗ 4. 16, 24

Question ID : 26433069053
Status : Answered
Chosen Option : 3

Q.13 Which of the following letter-clusters will replace the question mark (?) in the given series?

FJOT, GIPS, ?, IGRQ, JFSP

- Ans
- 1. IHPR
 - 2. HIQQ
 - 3. HHRQ
 - 4. HHQR

Question ID : 26433076435
 Status : Answered
 Chosen Option : 3

Q.14 Which figure should replace the question mark (?) if the series were to be continued?

□	9	↑	↑	X	S	S	↑	X	X	B	9	?
	X			4			B			□		
V	4	S	□	9	V	V	□	9	S	↑	V	

Ans

1.

V	X	B
	9	
□	S	↑

2.

B	9	X
	6	
↑	V	S

3.

9	X	B
	6	
V	S	↑

4.

9	X	B
	□	
V	S	↑

Question ID : 26433076626
 Status : Answered
 Chosen Option : 2

Q.15 Select the option that is related to the fifth number in the same way as the second number is related to the first number and the fourth number is related to the third number.

34 : 5 :: 13 : 2 :: 27 : ?

- Ans
- 1. 6
 - 2. 4
 - 3. 11
 - 4. 9

Question ID : 26433069419
Status : Answered
Chosen Option : 1

Q.16 Five people P, Q, R, S, and T are sitting in a straight row facing North. P is sitting to the immediate right of S. S is sitting between T and P. Q is sitting at the extreme left of the row. R is sitting to the immediate right of Q. Who is sitting between Q and T?

- Ans
- 1. T
 - 2. S
 - 3. R
 - 4. P

Question ID : 26433074623
Status : Answered
Chosen Option : 3

Q.17 Six students are sitting around a circular table facing the centre. F is an immediate neighbour of A. D sits second to the right of E. B is an immediate neighbour of E and sits second to the right of C. F sits second to the right of D. A is not an immediate neighbour of E. Who sit between D and C from the right of D?

- Ans
- 1. A and B
 - 2. A and F
 - 3. F and B
 - 4. A and E

Question ID : 26433086263
Status : Answered
Chosen Option : 2

Q.18 Select the option that is related to the third word in the same way as the second word is related to the first word. (The words must be considered as meaningful English words and must not be related to each other based on the number of letters/number of consonants/vowels in the word.)
Denmark : Copenhagen :: Kenya : ?

- Ans
- 1. Athens
 - 2. Nairobi
 - 3. Maputo
 - 4. Oslo

Question ID : 26433067372
Status : Answered
Chosen Option : 2

Q.19 In a certain language, TRAVEL is coded as GIZEVO, POLICY is coded as KLORXB, how will FAMILY be coded in the same language?

- Ans 1. UZNROB
 2. GBNJMZ
 3. YLIMAF
 4. MAFYIL

Question ID : 26433074594
Status : Answered
Chosen Option : 2

Q.20 Three statements are given followed by three conclusions. Assuming the statements to be true, even if they seem to be at variance with commonly known facts, decide which of the conclusions logically follow(s) from the statements.

Statements:

Some silks are cottons.

All cottons are jutes.

Some jutes are not silks.

Conclusions:

1. Some jutes are silks.

2. All silks are jutes.

3. All cottons are silks.

- Ans 1. Only conclusion 3 follows.
 2. Only conclusions 1 and 2 follow.
 3. Only conclusion 1 follows.
 4. Only conclusions 2 and 3 follow.

Question ID : 26433089425
Status : Answered
Chosen Option : 3

Section : Part-B-General Knowledge and General awareness

Q.1 _____ is the first state in India which has made roof top rainwater harvesting structure compulsory to all the houses across the state.

- Ans 1. Tamil Nadu
 2. Haryana
 3. West Bengal
 4. Uttar Pradesh

Question ID : 264330116001
Status : Answered
Chosen Option : 1

Q.2 In _____ the Muslim League had moved a resolution demanding "Independent States" for Muslims in the north-western and eastern areas of the country.

- Ans 1. 1942
 2. 1943
 3. 1940
 4. 1938

Question ID : 264330115699
Status : Answered
Chosen Option : 3

Q.3 The _____, 2019 is an Act of the Parliament of India criminalising triple talaq.

- Ans 1. Muslim Women (Protection of Rights on Marriage) Act
 2. Protection of Children from Sexual Offences Act
 3. Women right Act
 4. Protection of Women Act

Question ID : 264330116225
Status : Answered
Chosen Option : 1

Q.4 In its first phase, The National Rural Employment Guarantee Act initially covered how many districts before it was extended?

- Ans 1. 300
 2. 500
 3. 400
 4. 200

Question ID : 264330116079
Status : Answered
Chosen Option : 1

Q.5 Identify the correct statement with respect to Earth.

- Ans 1. The diameter of the equator increases till the poles.
 2. The radius of earth increases from the poles to the equator.
 3. The diameter of earth decreases from the poles to the equator.
 4. The radius of earth decreases from the poles to the equator.

Question ID : 26433086738
Status : Answered
Chosen Option : 2

Q.6 Which Sub-Section of Fundamental Duties talks about the duty to cherish and follow the noble ideals that inspired our national struggle for freedom?

- Ans 1. Sub-Section b
 2. Sub-Section d
 3. Sub-Section c
 4. Sub-Section a

Question ID : 26433054525
Status : Answered
Chosen Option : 1

Q.7 _____ are foreign currency assets held by the central banks of countries.

- Ans 1. Rate exchange
 2. Foreign exchange Reserves
 3. Credit control
 4. Local exchange

Question ID : 264330115318
Status : Answered
Chosen Option : 2

Q.8 In Cricket, what is the distance between two wickets?

- Ans** 1. 22 yards
 2. 21 Yards
 3. 23 yards
 4. 24 yards

Question ID : 264330116296
Status : Answered
Chosen Option : 1

Q.9 Which among the following festivals is also known as the festival of winter season?

- Ans** 1. Moatsu
 2. Chakan Gaan-Ngai
 3. Wangala
 4. Chapchar Kut

Question ID : 264330115092
Status : Answered
Chosen Option : 2

Q.10 The second phase of green revolution in India existed from _____.

- Ans** 1. mid-1950s to mid-1960s
 2. mid-1960s to mid-1970s
 3. mid-1970s to mid-1980s
 4. mid-1980s to mid-1990s

Question ID : 264330116159
Status : Answered
Chosen Option : 3

Q.11 Inamgaon village is located in which state of India?

- Ans** 1. Madhya Pradesh
 2. Maharashtra
 3. Punjab
 4. Kerala

Question ID : 26433090570
Status : Answered
Chosen Option : 1

Q.12 What is a group of industries that tend to come together to make use of the advantages offered by the urban centers known as ?

- Ans** 1. rural economies
 2. amalgamation economies
 3. urban economies
 4. agglomeration economies

Question ID : 264330115565
Status : Answered
Chosen Option : 3

Q.13 Whom has Samir Venkatapathy Kamat replaced as the new Chairman of Defence Research and Development Organisation in August 2022??

- Ans**
- 1. Bhujanga Rao
 - 2. Lalit Kumar
 - 3. Rajwant Singh
 - 4. G Satheesh Reddy

Question ID : 264330115021
Status : Answered
Chosen Option : 4

Q.14 Zo Mal Lok, is the famous dance associated with which of the following states?

- Ans**
- 1. Bihar
 - 2. Uttarakhand
 - 3. Sikkim
 - 4. Haryana

Question ID : 26433071662
Status : Answered
Chosen Option : 3

Q.15 Where does hydrarch succession take place?

- Ans**
- 1. semi-arid areas
 - 2. grasslands
 - 3. wet areas
 - 4. dry areas

Question ID : 264330115255
Status : Answered
Chosen Option : 2

Q.16 The period of first five year plan was between _____.

- Ans**
- 1. 1951-1956
 - 2. 1910-1915
 - 3. 1960-1965
 - 4. 1980-1985

Question ID : 264330115372
Status : Answered
Chosen Option : 1

Q.17 Gopal Prasad Dubey won Padma Shri in which dance form?

- Ans**
- 1. Creative dance
 - 2. Mohiniyattam
 - 3. Chhau
 - 4. Kuchipudi

Question ID : 264330115879
Status : Answered
Chosen Option : 3

Q.18 In India, the Executive power of the state is vested in _____.

- Ans 1. Council of Ministers
 2. Governor
 3. Chief Justice of High Court
 4. Chief Minister

Question ID : 26433086853
Status : Answered
Chosen Option : 2

Q.19 Which of the following state won the maximum number of silver medals in the 2015 National Games of India?

- Ans 1. Kerala
 2. Goa
 3. Madhya Pradesh
 4. Haryana

Question ID : 264330115958
Status : Answered
Chosen Option : 4

Q.20 Which political leader succeeded Bandhu Tirkey to become Member of Legislative Assembly from Mandar, Jharkhand in June 2022?

- Ans 1. Dasrath Tirkey
 2. Shilpi Neha Tirkey
 3. Arvind Kejriwal
 4. Raghav Chadha

Question ID : 264330114906
Status : Answered
Chosen Option : 4

Section : Part-C-Elementary Mathematics

Q.1 Compound interest of Rs.21,515 is received on sum of Rs.65,000 in a period of three years. What was the rate of interest on which the sum was being compounded annually?

- Ans 1. 11%
 2. 12%
 3. 13%
 4. 10%

Question ID : 26433075862
Status : Answered
Chosen Option : 1

Q.2 Mona purchased two handbags for Rs.1,500 each. She sold these bags, gaining 8% on one bag and loss 4% on the other. Find her gain or loss percent in the whole transaction.

- Ans 1. 1%
 2. 2%
 3. 4%
 4. 3%

Question ID : 26433066360
Status : Answered
Chosen Option : 2

Q.3 A single discount equivalent to three successive discounts of 20%, 5% and 2% is:

- Ans
- 1. 25.25%
 - 2. 26.52%
 - 3. 27%
 - 4. 25.52%

Question ID : 26433087364
Status : Answered
Chosen Option : 4

Q.4 A vegetable seller has a faulty weight of 2 kg which is 100g less than the actual weight. He sold 2 kg of potatoes to a customer using the same faulty weight for Rs.44. The cost price of potatoes to the seller was Rs.18 per kg. How much profit did he earn on selling the potatoes?

- Ans
- 1. Rs.9.8
 - 2. Rs.9.2
 - 3. Rs.8.9
 - 4. Rs.8

Question ID : 26433075060
Status : Answered
Chosen Option : 1

Q.5 Umesh and Ramesh can complete a work in 28 and 21 days, respectively. Starting with Umesh, they work on alternate days. In how many days will the work be completed?

- Ans
- 1. 16 days
 - 2. 26 days
 - 3. 12 days
 - 4. 24 days

Question ID : 26433075741
Status : Answered
Chosen Option : 4

Q.6 Find the area of the triangle whose sides are 13 cm, 14 cm and 15 cm.

- Ans
- 1. 64 cm²
 - 2. 84 cm²
 - 3. 94 cm²
 - 4. 74 cm²

Question ID : 26433075173
Status : Answered
Chosen Option : 2

Q.7 Find the third proportional of $(b^2 - a^2)$ and $(b^2 - ab)$.

- Ans
- 1. $\frac{b^2(b-a)}{(b+a)}$
 - 2. $(b-a)$
 - 3. $\frac{b^2(b+a)}{(b-a)}$
 - 4. $(b+a)$

Question ID : 26433075553
Status : Answered
Chosen Option : 3

Q.8 Find the average of all prime numbers up to 40.(Correct to 2 decimal places)

- Ans
- 1. 18.42
 - 2. 17.42
 - 3. 16.42
 - 4. 19.42

Question ID : 26433080150
Status : Answered
Chosen Option : 3

Q.9 In a sports club, 86% of the members are men and 14% of the members are women. If the average age of the men is 25 years and the average age of the women is 35 years, then what is the average age (in years) of all the members?

- Ans
- 1. 26.8
 - 2. 26.4
 - 3. 26.6
 - 4. 26.2

Question ID : 26433082958
Status : Answered
Chosen Option : 2

Q.10 A man borrows ₹3,310 and undertakes to pay it back with compound interest at 10% per annum in three equal yearly instalments at the end of the first, second and third years. What is the amount of each instalment?

- Ans
- 1. ₹1,021
 - 2. ₹2,110
 - 3. ₹1,120
 - 4. ₹1,331

Question ID : 26433086272
Status : Answered
Chosen Option : 4

Q.11 The value of $3\frac{6}{7} \div 5\frac{1}{7} \times 3\frac{1}{2} \div 5\frac{1}{4}$ is:

- Ans
- 1. $\frac{1}{5}$
 - 2. $\frac{1}{2}$
 - 3. $\frac{3}{7}$
 - 4. $\frac{1}{7}$

Question ID : 26433074447
Status : Answered
Chosen Option : 2

Q.12 By selling an article for Rs.880, a shopkeeper gains 10%. Due to reduction on sales, he allows a discount of 25% on previous selling price. His gain/loss percentage during the sale is:

- Ans
- 1. gain 17.5%
 - 2. loss 17.5%
 - 3. loss 18.6%
 - 4. gain 18.6 %

Question ID : 26433066312
Status : Answered
Chosen Option : 2

Q.13 The length of a train is 150 metres. In 3 seconds, it passes a man moving at a speed of 2 km/h in the same direction as the train. Determine the train's speed.

- Ans
- 1. 190 km/h
 - 2. 167 km/h
 - 3. 172 km/h
 - 4. 182 km/h

Question ID : 26433065294
Status : Answered
Chosen Option : 2

Q.14 In an election between two candidates, the candidate getting 70% of the votes polled is elected by a majority of 16,000 votes. The number of votes polled in favour of the winning candidate is:

- Ans
- 1. 24000
 - 2. 30000
 - 3. 26000
 - 4. 28000

Question ID : 26433082964
Status : Answered
Chosen Option : 4

Q.15 Prasad alone can complete a work in 144 days. How many people were required with the same efficiency as Prasad to complete the same work in 16 days?

- Ans 1. 9
 2. 7
 3. 11
 4. 6

Question ID : 264330116909
Status : Answered
Chosen Option : 3

Q.16 Find the volume of the hemisphere whose radius is 5.5 cm. (upto two decimal points)

- Ans 1. 34860 cm³
 2. 348.60 cm³
 3. 3486.0 cm³
 4. 34.860 cm³

Question ID : 26433075509
Status : Answered
Chosen Option : 2

Q.17 Which of the following pairs of numbers are relatively prime?

- Ans 1. 24 and 38
 2. 24 and 92
 3. 39 and 68
 4. 24 and 68

Question ID : 26433082593
Status : Answered
Chosen Option : 3

Q.18 Prakash can swim at a speed of 32 km/h in upstream and 44 km/h in downstream. What is the speed of the current?

- Ans 1. 4 km/h
 2. 5 km/h
 3. 6 km/h
 4. 7 km/h

Question ID : 26433075564
Status : Answered
Chosen Option : 3

Q.19 Abdul's salary is Rs.1,50,000 per month. He spends 10% of his salary on paying the school fees. He got an increment of 3% in his salary in the month of July, but the school fee was hiked by 5% the same month. What will be the net change in his saving in the month of July if the other expenditures are the same?

- Ans 1. Decrease of Rs.3,750
 2. Decrease of Rs.2,750
 3. Increase of Rs.3,750
 4. Increase of Rs.2,750

Question ID : 26433075967
Status : Answered
Chosen Option : 3

Q.20 When the same number is subtracted from each of 6, 8, 12 and 20, the resulting numbers are in proportion. The number subtracted is:

- Ans
- 1. 2
 - 2. 3
 - 3. 6
 - 4. 4

Question ID : 26433082391
Status : Answered
Chosen Option : 2

Section : Part-D-English

Q.1 Select the most appropriate ANTONYM of the underlined word.

We must learn to negotiate with every difficult situation in life.

- Ans
- 1. Discuss
 - 2. Disagree
 - 3. Practice
 - 4. Bargain

Question ID : 26433089762
Status : Answered
Chosen Option : 2

Q.2 The sentence given below has one misspelt word. Spot the INCORRECTLY spelt word and select its correct spelling.

Her husband's death left a vacuum in her life.

- Ans
- 1. Vacuum
 - 2. Vakum
 - 3. Vaccum
 - 4. Vaccuum

Question ID : 26433073558
Status : Answered
Chosen Option : 3

Q.3 The following sentence has been split into four segments. Identify the segment that contains a grammatical error.

The patient / look / a little more cheerful / this morning

- Ans
- 1. The patient
 - 2. this morning
 - 3. look
 - 4. a little more cheerful

Question ID : 26433088099
Status : Answered
Chosen Option : 3

Q.4 Select the most appropriate ANTONYM of the given word.

Recede

- Ans 1. Advance
 2. Argue
 3. Ransack
 4. Irritate

Question ID : 26433071974
Status : Answered
Chosen Option : 1

Q.5 Fill in the blank in the following sentence using the ANTONYM of the word given in the brackets.

Can you _____ the UNO cards on the table? (gather)

- Ans 1. spread
 2. lift
 3. collect
 4. place

Question ID : 26433088828
Status : Answered
Chosen Option : 1

Q.6 Select the most appropriate meaning of the underlined idiom.

The husband promised the earth to his wife.

- Ans 1. Promised an impossible thing
 2. Promised an inexpensive thing
 3. Promised land
 4. Promised a necklace

Question ID : 26433072175
Status : Answered
Chosen Option : 1

Q.7 Select the most appropriate synonym of the given word.

Proficient

- Ans 1. Condensed
 2. Inadequate
 3. Vulgar
 4. Skilful

Question ID : 26433073434
Status : Answered
Chosen Option : 4

Q.8 Select the INCORRECTLY spelt word.

- Ans 1. Marrige
 2. Breakage
 3. Wreckage
 4. Drainage

Question ID : 26433071819
Status : Answered
Chosen Option : 1

Q.9 Select the most appropriate option to fill in the blank.

It is believed that God is _____.

- Ans
- 1. pacifist
 - 2. optimist
 - 3. omnipresent
 - 4. omnivorous

Question ID : 26433073407
Status : Answered
Chosen Option : 3

Q.10 Select the most appropriate synonym of the given word.

Hades is the god of the underworld and wealth in Greek mythology.

- Ans
- 1. riches
 - 2. sterility
 - 3. debts
 - 4. shades

Question ID : 26433084597
Status : Answered
Chosen Option : 1

Q.11 Select the most appropriate option that can substitute the underlined segment in the given sentence.

The enthusiastic readers are eagerly waiting of the quick completion of her forthcoming novel.

- Ans
- 1. eagerly waiting about the quick
 - 2. eagerly waiting in the quick
 - 3. eagerly waiting for the quick
 - 4. eagerly waiting on the quick

Question ID : 264330100992
Status : Answered
Chosen Option : 3

Q.12 Select the most appropriate synonym of the word given in brackets to fill in the blank.

He had _____ (Enough) time to finish the task.

- Ans
- 1. sufficient
 - 2. insufficient
 - 3. massive
 - 4. perpetual

Question ID : 26433089077
Status : Answered
Chosen Option : 1

Q.13 Choose the appropriate meaning of the underlying idiom.

She wants to reach the target by hook or by crook.

- Ans 1. By one or the other means
 2. With all of one's (her) belongings
 3. Without deception
 4. Very rapidly

Question ID : 26433084691
Status : Answered
Chosen Option : 1

Q.14 Select the most appropriate option that can substitute the underlined segment in the given sentence. If there is no need to substitute it, select 'No substitution'.

Sea levels have been risen all around the world threatening natural calamities like tsunamis, floods, etc.

- Ans 1. No substitution
 2. will rising
 3. have been rising
 4. are raised

Question ID : 26433088911
Status : Answered
Chosen Option : 3

Q.15 Select the most appropriate ANTONYM of the underlined word in the given sentence.

We all must agree on the fact that life is fragile.

- Ans 1. healthy
 2. infirm
 3. violent
 4. weak

Question ID : 26433092095
Status : Answered
Chosen Option : 1

Comprehension:

In the following passage, some words have been deleted. Read the passage carefully and select the most appropriate option to fill in each blank.

There are over 9000 species of birds on this planet (1) _____ of which over 1360 are found in India alone. 81 species of birds (2) _____ endemic to India. Because birds are found everywhere, and in all (3) _____ zones, their sizes, shapes and wings are (4) _____ according to the needs of their habitat. For instance, eagles and hawks have massive soaring wings with primary feather that (5) _____ out and allow them to soar high in the sky.

SubQuestion No : 16

Q.16 Select the most appropriate option to fill in blank number 1.

- Ans 1. out
 2. some
 3. across
 4. in

Question ID : 26433063169
Status : Answered
Chosen Option : 1

Comprehension:

In the following passage, some words have been deleted. Read the passage carefully and select the most appropriate option to fill in each blank.

There are over 9000 species of birds on this planet (1) _____ of which over 1360 are found in India alone. 81 species of birds (2) _____ endemic to India. Because birds are found everywhere, and in all (3) _____ zones, their sizes, shapes and wings are (4) _____ according to the needs of their habitat. For instance, eagles and hawks have massive soaring wings with primary feather that (5) _____ out and allow them to soar high in the sky.

SubQuestion No : 17

Q.17 Select the most appropriate option to fill in blank number 2.

- Ans 1. was
 2. were
 3. are
 4. is

Question ID : 26433063170
Status : Answered
Chosen Option : 4

Comprehension:

In the following passage, some words have been deleted. Read the passage carefully and select the most appropriate option to fill in each blank.

There are over 9000 species of birds on this planet (1) _____ of which over 1360 are found in India alone. 81 species of birds (2) _____ endemic to India. Because birds are found everywhere, and in all (3) _____ zones, their sizes, shapes and wings are (4) _____ according to the needs of their habitat. For instance, eagles and hawks have massive soaring wings with primary feather that (5) _____ out and allow them to soar high in the sky.

SubQuestion No : 18

Q.18 Select the most appropriate option to fill in blank number 3.

- Ans 1. climatic
 2. administrative
 3. atmospheric
 4. aerial

Question ID : 26433063171
Status : Answered
Chosen Option : 1

Comprehension:

In the following passage, some words have been deleted. Read the passage carefully and select the most appropriate option to fill in each blank.

There are over 9000 species of birds on this planet (1) _____ of which over 1360 are found in India alone. 81 species of birds (2) _____ endemic to India. Because birds are found everywhere, and in all (3) _____ zones, their sizes, shapes and wings are (4) _____ according to the needs of their habitat. For instance, eagles and hawks have massive soaring wings with primary feather that (5) _____ out and allow them to soar high in the sky.

SubQuestion No : 19

Q.19 Select the most appropriate option to fill in blank number 4.

- Ans 1. changed
 2. adopted
 3. converted
 4. adapted

Question ID : 26433063172
Status : Answered
Chosen Option : 4

Comprehension:

In the following passage, some words have been deleted. Read the passage carefully and select the most appropriate option to fill in each blank.

There are over 9000 species of birds on this planet (1) _____ of which over 1360 are found in India alone. 81 species of birds (2) _____ endemic to India. Because birds are found everywhere, and in all (3) _____ zones, their sizes, shapes and wings are (4) _____ according to the needs of their habitat. For instance, eagles and hawks have massive soaring wings with primary feather that (5) _____ out and allow them to soar high in the sky.

SubQuestion No : 20

Q.20 Select the most appropriate option to fill in blank number 5.

- Ans 1. reach
 2. grow
 3. rise
 4. spread

Question ID : 26433063173
Status : Answered
Chosen Option : 4

Section : Part-D-Hindi

Q.1 निम्नलिखित वाक्य में से शुद्ध वाक्य कौन सा है?

- Ans 1. यह कमर सब कमरों से बड़ा है।
 2. यह कमरा सब कमर से बड़ा है।
 3. यह कमरा सब कमरों से बड़ा है।
 4. यह कमरा सब कमरों से बड़ है।

Question ID : 26433066843
Status : Not Answered
Chosen Option : --

Q.2 निम्नलिखित वाक्यों में से कौन सा कर्म कारक का एक उदाहरण है?

- Ans 1. हमसे पढ़ा नहीं जाएगा।
 2. कर्मवीर पथ से नहीं डिगता।
 3. मैंने वस्त्र धारण किया है।
 4. ज्वाला प्रसाद को स्नान करते दस बज गए।

Question ID : 26433085033
Status : Not Answered
Chosen Option : --

Q.3 निम्नलिखित में से क्रिया विशेषण शब्द नहीं है-

- Ans 1. पुस्तक
 2. शायद
 3. पहले
 4. मीठा

Question ID : 26433085046
Status : Not Answered
Chosen Option : --

Q.4 निम्नलिखित वाक्य के रिक्त स्थान में सबसे उपयुक्त मुहावरा क्या होगा?
'प्रेमचंद की किताबें _____ है।'

- Ans
- 1. बाएँ हाथ का खेल
 - 2. पानी-पानी होना
 - 3. हाथों-हाथ बिक जाती
 - 4. सूर्य को दिया दिखाना

Question ID : 26433066726
Status : Not Answered
Chosen Option : --

Q.5 वर्तनी की दृष्टि से अशुद्ध वाक्य का चयन कीजिए-

- Ans
- 1. गाड़ी के समय पर आने की सम्भावना है।
 - 2. लड़की अपनी पुस्तक पढ़ रही है।
 - 3. गली का तीसरा मकान मेरा घर है।
 - 4. ये इमारतें ऊँचाई में भिन्न नहीं हैं।

Question ID : 26433062890
Status : Not Answered
Chosen Option : --

Q.6 निम्नलिखित में से क्या 'पानी' का अर्थ नहीं होता है?

- Ans
- 1. इज्जत
 - 2. बिजली
 - 3. जल
 - 4. चमक

Question ID : 26433080943
Status : Not Answered
Chosen Option : --

Q.7 विकल्पों में से क्या निम्न वाक्य के रेखांकित अंश के स्थान पर आएगा?
प्रेमचंद ने गोदान की रचना लिखी है।

- Ans
- 1. की
 - 2. सुनी
 - 3. कि
 - 4. पढ़ी

Question ID : 26433066871
Status : Not Answered
Chosen Option : --

Q.8 निम्नलिखित विकल्पों में से 'जो भेदा न जा सके' वाक्यांश के लिए एक सार्थक शब्द क्या होगा ?

- Ans
- 1. निर्द्वन्द्व
 - 2. अभेद्य
 - 3. द्वंद्व
 - 4. प्रतिबन्ध

Question ID : 26433062473
Status : Not Answered
Chosen Option : --

Q.9 विकल्पों में दिए गए समानार्थी शब्दों में से सर्वोचित शब्द का प्रयोग करके दिए गए वाक्य के रिक्त स्थान की पूर्ति करें।

मिल मज़दूर मिल में आठ-आठ घंटे लगातार _____ करते हैं।

- Ans
- 1. उद्यम
 - 2. अभ्यास
 - 3. ज़ोर
 - 4. श्रम

Question ID : 26433062930
Status : Not Answered
Chosen Option : --

Q.10 निम्नलिखित वाक्य में रेखांकित खंड के स्थान पर प्रयुक्त होने वाले सबसे उपयुक्त विकल्प का चयन कीजिए।

कोयला सूखकर राख हो गया।

- Ans
- 1. चलकर
 - 2. जलकर
 - 3. तपकर
 - 4. गीला होकर

Question ID : 26433079569
Status : Not Answered
Chosen Option : --

Q.11 बार-बार बोलना

ऊपर दिए गए वाक्यांश के लिए एक शब्द क्या होगा?

- Ans
- 1. विलाप
 - 2. प्रलाप
 - 3. एकालाप
 - 4. अनुलाप

Question ID : 26433070052
Status : Not Answered
Chosen Option : --

Q.12 'मुकुट में लगा कोहिनूर बहुमूल्य हीरा है।' इस वाक्य में प्रयुक्त 'बहुमूल्य' शब्द का अर्थ क्या है?

- Ans
- 1. साधारण से कम कीमत वाला
 - 2. जिसका कोई मूल्य न हो
 - 3. अत्यधिक कीमत वाला
 - 4. साधारण कीमत वाला

Question ID : 26433069734
Status : Not Answered
Chosen Option : --

Q.13 गृहस्थ हो या _____ पेट की भूख तो सबको ही सताती है।
'मुनि' के पर्याय से उपरोक्त वाक्य पूर्ण करें।

- Ans
- 1. भोगी
 - 2. निरोगी
 - 3. वैरागी
 - 4. अलौकिक

Question ID : 26433084988
Status : Not Answered
Chosen Option : --

Q.14 मिश्र वाक्य- 'इस गाँव का जो प्रधान है, वह अच्छा आदमी नहीं है।'
उपरोक्त वाक्य के लिए निम्नलिखित विकल्पों में से कौन सा एक उचित सरल वाक्य होगा?

- Ans
- 1. जो प्रधान है, वह बिलकुल अच्छा आदमी नहीं है।
 - 2. इस गाँव का प्रधान अच्छा आदमी नहीं है।
 - 3. प्रधान अच्छा आदमी इस गाँव का नहीं है।
 - 4. गाँव का जो प्रधान वह अच्छा आदमी नहीं है।

Question ID : 26433062437
Status : Not Answered
Chosen Option : --

Q.15 निम्न में से किस मुहावरे का अर्थ बुरी तरह पछताना है?

- Ans
- 1. कुएं में गिरना
 - 2. अंगारों पर लोटना
 - 3. आँखें चार होना
 - 4. आठ- आठ आंसू रोना

Question ID : 26433062815
Status : Not Answered
Chosen Option : --

Comprehension:

निम्नलिखित गद्यांश में कुछ शब्दों को हटा दिया गया है। दिए गए विकल्पों की सहायता से रिक्त स्थानों की पूर्ति कीजिए। प्रत्येक संख्या के लिए सबसे उपयुक्त विकल्प का चयन कीजिए।

महिलाएं 1. _____ की भांति शिक्षित हो रही हैं और 2. _____ में कार्य भी कर रही हैं। जीवन के तकरीबन हर क्षेत्र में चाहे वह 3. _____ हो या सामाजिक, सरकारी हो या गैर-सरकारी नौकरी, नारी हर जगह अपने 4. _____ बढ़ा चुकी है। नारी को स्वावलम्बी और 5. _____ बनने के लिए नौकरी का सहारा लेना पड़ा। इससे उनका आत्मविश्वास बढ़ता है। वह अपनी नौकरी भी पूरी जिम्मेदारी के साथ निभाती है।

SubQuestion No : 16

Q.16 रिक्त स्थान 1 की पूर्ति के लिए सबसे उपयुक्त विकल्प का चयन करें।

- Ans
- 1. पुरुषों
 - 2. युवाओं
 - 3. छात्रों
 - 4. बालकों

Question ID : 264330110933
Status : Not Answered
Chosen Option : --

Comprehension:

निम्नलिखित गद्यांश में कुछ शब्दों को हटा दिया गया है। दिए गए विकल्पों की सहायता से रिक्त स्थानों की पूर्ति कीजिए। प्रत्येक संख्या के लिए सबसे उपयुक्त विकल्प का चयन कीजिए।

महिलाएं 1. _____ की भांति शिक्षित हो रही हैं और 2. _____ में कार्य भी कर रही हैं। जीवन के तकरीबन हर क्षेत्र में चाहे वह 3. _____ हो या सामाजिक, सरकारी हो या गैर-सरकारी नौकरी, नारी हर जगह अपने 4. _____ बढ़ा चुकी है। नारी को स्वावलम्बी और 5. _____ बनने के लिए नौकरी का सहारा लेना पड़ा। इससे उनका आत्मविश्वास बढ़ता है। वह अपनी नौकरी भी पूरी जिम्मेदारी के साथ निभाती है।

SubQuestion No : 17

Q.17 रिक्त स्थान 2 की पूर्ति के लिए सबसे उपयुक्त विकल्प का चयन करें।

- Ans
- 1. दफ्तरों
 - 2. दुकानों
 - 3. मंदिरों
 - 4. घर में

Question ID : 264330110934
Status : Not Answered
Chosen Option : --

Comprehension:

निम्नलिखित गद्यांश में कुछ शब्दों को हटा दिया गया है। दिए गए विकल्पों की सहायता से रिक्त स्थानों की पूर्ति कीजिए। प्रत्येक संख्या के लिए सबसे उपयुक्त विकल्प का चयन कीजिए।

महिलाएं 1. _____ की भांति शिक्षित हो रही हैं और 2. _____ में कार्य भी कर रही हैं। जीवन के तकरीबन हर क्षेत्र में चाहे वह 3. _____ हो या सामाजिक, सरकारी हो या गैर-सरकारी नौकरी, नारी हर जगह अपने 4. _____ बढ़ा चुकी है। नारी को स्वावलम्बी और 5. _____ बनने के लिए नौकरी का सहारा लेना पड़ा। इससे उनका आत्मविश्वास बढ़ता है। वह अपनी नौकरी भी पूरी जिम्मेदारी के साथ निभाती है।

SubQuestion No : 18

Q.18 रिक्त स्थान 3 की पूर्ति के लिए सबसे उपयुक्त विकल्प का चयन करें।

- Ans
- 1. पर्यटन
 - 2. स्कूलों
 - 3. व्यवसायों
 - 4. राजनीतिक

Question ID : 264330110935
Status : Not Answered
Chosen Option : --

Comprehension:

निम्नलिखित गद्यांश में कुछ शब्दों को हटा दिया गया है। दिए गए विकल्पों की सहायता से रिक्त स्थानों की पूर्ति कीजिए। प्रत्येक संख्या के लिए सबसे उपयुक्त विकल्प का चयन कीजिए।

महिलाएं 1. _____ की भांति शिक्षित हो रही हैं और 2. _____ में कार्य भी कर रही हैं। जीवन के तकरीबन हर क्षेत्र में चाहे वह 3. _____ हो या सामाजिक, सरकारी हो या गैर-सरकारी नौकरी, नारी हर जगह अपने 4. _____ बढ़ा चुकी है। नारी को स्वावलम्बी और 5. _____ बनने के लिए नौकरी का सहारा लेना पड़ा। इससे उनका आत्मविश्वास बढ़ता है। वह अपनी नौकरी भी पूरी जिम्मेदारी के साथ निभाती है।

SubQuestion No : 19

Q.19 रिक्त स्थान 4 की पूर्ति के लिए सबसे उपयुक्त विकल्प का चयन करें।

- Ans
- 1. हाथ
 - 2. दायरा
 - 3. कदम
 - 4. फासले

Question ID : 264330110936
Status : Not Answered
Chosen Option : --

Comprehension:

निम्नलिखित गद्यांश में कुछ शब्दों को हटा दिया गया है। दिए गए विकल्पों की सहायता से रिक्त स्थानों की पूर्ति कीजिए। प्रत्येक संख्या के लिए सबसे उपयुक्त विकल्प का चयन कीजिए।

महिलाएं 1. _____ की भांति शिक्षित हो रही हैं और 2. _____ में कार्य भी कर रही हैं। जीवन के तकरीबन हर क्षेत्र में चाहे वह 3. _____ हो या सामाजिक, सरकारी हो या गैर-सरकारी नौकरी, नारी हर जगह अपने 4. _____ बढ़ा चुकी है। नारी को स्वावलम्बी और 5. _____ बनने के लिए नौकरी का सहारा लेना पड़ा। इससे उनका आत्मविश्वास बढ़ता है। वह अपनी नौकरी भी पूरी जिम्मेदारी के साथ निभाती है।

SubQuestion No : 20

Q.20 रिक्त स्थान 5 की पूर्ति के लिए सबसे उपयुक्त विकल्प का चयन करें।

- Ans
- 1. आत्मनिर्भर
 - 2. पराधीन
 - 3. आश्रित
 - 4. निराश्रय

Question ID : 264330110937
Status : Not Answered
Chosen Option : --