

Constable GD in CAPFs SSF Rifleman GD in Assam Rifles and Sepoy in NCB Examination 2022

Roll Number	www.govtjobsalert.in
Candidate Name	www.govtjobsalert.in
Venue Name	iON Digital Zone iDZ 1 Sector 62
Exam Date	27/01/2023
Exam Time	9:00 AM - 10:00 AM
Subject	Constable GD Examination 2022

Section : **Part-A-General Intelligence and Reasoning**

Q.1 Which letter cluster will replace the question mark (?) to complete the given series?

HSCQ, JVZR, ?, NBTT, PEQU

- Ans
- 1. LPXS
 - 2. LYWS
 - 3. LTYT
 - 4. LQGT

Question ID : 26433079426

Status : Answered

Chosen Option : 2

Q.2 In this question, three statements are given, followed by two conclusions numbered I and II. Assuming the statements to be true, even if they seem to be at variance with commonly known facts, decide which of the conclusions logically follows/follow from the statements.

Statements:

All leaves are plants.

All plants are trees.

All trees are big.

Conclusions:

I. Some trees are leaves.

II. All leaves are big.

- Ans
- 1. Only conclusion I follows.
 - 2. Both conclusions I and II follow.
 - 3. Only conclusion II follows.
 - 4. Neither conclusion I nor II follows.

Question ID : 26433070385

Status : Answered

Chosen Option : 1

Q.3 Six students A, B, C, D, E and F are sitting around a circular table, all facing opposite to the centre. D is to the immediate right of E, who is to the immediate right of F. A is the immediate neighbour of D and C. Who among the following is sitting second to the left of E?

- Ans
- 1. A
 - 2. F
 - 3. B
 - 4. C

Question ID : 26433068488
Status : Answered
Chosen Option : 3

Q.4 Which of the mathematical signs should be interchanged in the below equation to make it mathematically correct?

$$15 \div 5 \times 27 + 3 - 9 = 51$$

- Ans
- 1. + and ×
 - 2. ÷ and ×
 - 3. ÷ and +
 - 4. + and -

Question ID : 264330114176
Status : Answered
Chosen Option : 3

Q.5 Select the set in which the numbers are related in the same way as are the numbers of the following set.

(NOTE : Operations should be performed on the whole numbers, without breaking down the numbers into its constituent digits. E.g. 13 – Operations on 13 such as adding /subtracting/multiplying etc. to 13 can be performed. Breaking down 13 into 1 and 3 and then performing mathematical operations on 1 and 3 is NOT allowed)

(264, 43, 19)

(132, 27, 15)

- Ans
- 1. (331, 50, 29)
 - 2. (240, 59, 39)
 - 3. (176, 39, 23)
 - 4. (151, 63, 52)

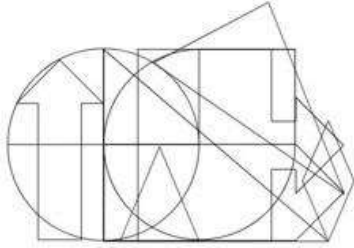
Question ID : 26433076479
Status : Not Answered
Chosen Option : --

Q.6 In a certain code language, 'HOUSE' is coded as IQVUF and 'GARDEN' is coded as HCSFFP. How will 'ORANGE' be coded in that language?

- Ans
- 1. PSBOHF
 - 2. LIZMTV
 - 3. QSCOIF
 - 4. PTBPHG

Question ID : 26433074515
Status : Answered
Chosen Option : 4

Q.7 Select the option figure which is embedded in the given figure. (Rotation is NOT allowed)



Ans

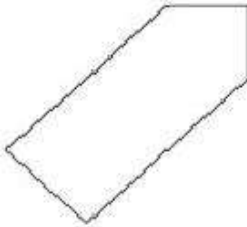
✓ 1.



✗ 2.



✗ 3.



✗ 4.



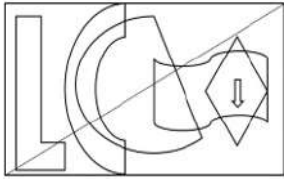
Question ID : 26433085746

Status : Answered

Chosen Option : 2

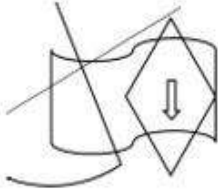
WWW.GOVtjobsalert.in

Q.8 Select the option figure which is embedded in the given figure. (Rotation is NOT allowed).

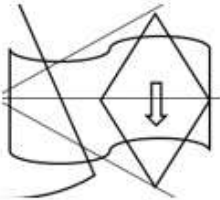


Ans

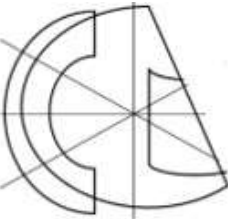
✓ 1.



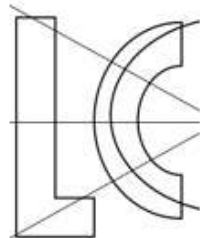
✗ 2.



✗ 3.



✗ 4.



Question ID : 26433089775
Status : Answered
Chosen Option : 1

Q.9 Which of the following numbers will replace the question mark (?) in the given series?
946 ,721 ,552 ,? ,350 ,301

Ans ✗ 1. 439

✗ 2. 442

✓ 3. 431

✗ 4. 445

Question ID : 26433089791
Status : Answered
Chosen Option : 3

Q.10 Which of the mathematical signs should be interchanged in the below equation to make it mathematically correct?

$$105 \div 15 \times 54 + 6 - 18 = 222$$

- Ans
- 1. + and -
 - 2. \div and \times
 - 3. + and \times
 - 4. \div and +

Question ID : 264330117563

Status : Marked For Review

Chosen Option : 4

Q.11 'F – G' means 'F is the brother of G'
'F * G' means 'F is the sister of G'
'F + G' means 'F is the father of G'
'F \$ G' means 'F is the mother of G'
If 'H \$ I + J – K', then how is H related to K?

- Ans
- 1. Sister
 - 2. Paternal grandfather
 - 3. Paternal grandmother
 - 4. Father

Question ID : 26433087127

Status : Answered

Chosen Option : 3

Q.12 Select the option that is related to the fifth term in the same way as the second term is related to the first term and the fourth term is related to the third term.
BRIGHT : DTKIJV :: DANGER : FCPIGT :: FOREST : ?

- Ans
- 1. EPQDRS
 - 2. HQTGUV
 - 3. HQTGSU
 - 4. RESTOF

Question ID : 26433087194

Status : Answered

Chosen Option : 2

Q.13 Which of the following letters will replace the question mark (?) and complete the following letter series?

B, D, E, G, H, J, ?

- Ans
- 1. M
 - 2. J
 - 3. L
 - 4. K

Question ID : 26433067278

Status : Answered

Chosen Option : 4

Q.14 Which option represents the correct order of the given words as they would appear in the English dictionary?

- 1 Difficult
- 2 Differentiate
- 3 Dissolve
- 4 Dilute
- 5 Distance

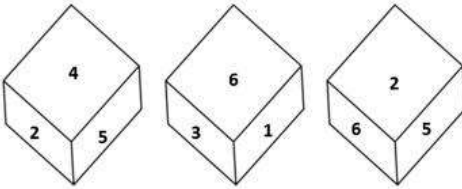
- Ans 1. 1,4,2,3,5
 2. 2,1,4,3,5
 3. 1,3,2,5,4
 4. 2,3,1,4,5

Question ID : 26433069264

Status : Answered

Chosen Option : 2

Q.15 Three different positions of the same dice are shown. Find the number on the face opposite the face showing '1'.



- Ans 1. 6
 2. 2
 3. 3
 4. 4

Question ID : 26433082891

Status : Answered

Chosen Option : 2

Q.16 Seven people Q, R, Y, W, T, E, and U are sitting in a straight row, facing north. Only three people sit to the left of R. U sits at the extreme right. Only two people sit between Q and R. T is the immediate neighbour of R and Y. W is the immediate neighbour of Q and E. Who sits at the centre of the row?

- Ans 1. R
 2. E
 3. T
 4. W

Question ID : 26433092596

Status : Answered

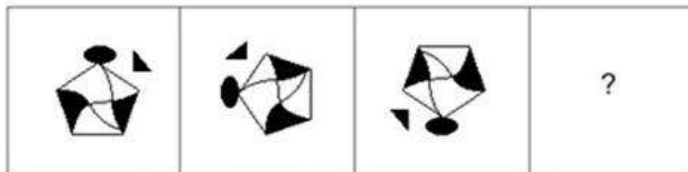
Chosen Option : 1

Q.17 Which number will replace the question mark (?) in the following series?
32, 34, ?, 212, 850, 4252

- Ans
- 1. 100
 - 2. 120
 - 3. 70
 - 4. 68

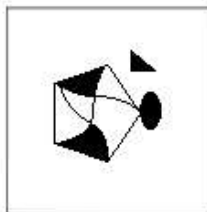
Question ID : 26433068972
Status : Not Answered
Chosen Option : --

Q.18 Select the figure that will replace the question mark (?) in the following figure series.




Ans

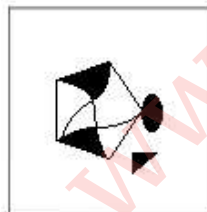
1.



2.



3.



4.



Question ID : 26433070421
Status : Answered
Chosen Option : 3

Q.19 Select the option that is related to the fifth letter-cluster in the same way as the second letter-cluster is related to the first letter-cluster and the fourth letter-cluster is related to the third letter-cluster.

NEST: OVHU :: STIR : TGRS :: BAKE : ?

- Ans
- 1. YBLV
 - 2. CZPF
 - 3. YZPV
 - 4. CBLF

Question ID : 26433057481
Status : Answered
Chosen Option : 2

Q.20 In a certain code language, FLASH is written as 'INDUK', and GAMES is written as 'JCPGV'. How will 'TRUST' be written in the same code language?

- Ans
- 1. WTXVW
 - 2. WUXVW
 - 3. WTYVW
 - 4. WTXUW

Question ID : 26433067987
Status : Answered
Chosen Option : 4

Section : Part-B-General Knowledge and General awareness

Q.1 Lui-Ngai-Ni is celebrated as a seed sowing festival by the people of _____.

- Ans
- 1. Manipur
 - 2. Assam
 - 3. Arunachal Pradesh
 - 4. Sikkim

Question ID : 264330115081
Status : Not Answered
Chosen Option : --

Q.2 Name the facility available for sale and purchase of goods through internet and fax.

- Ans
- 1. E-Commerce
 - 2. Television
 - 3. Postal Service
 - 4. Telephone Service

Question ID : 264330115597
Status : Answered
Chosen Option : 1

Q.3 Anindita Neogy Anaam has been awarded with_____.

- Ans 1. Padma Vibhushan
 2. National Nritya Shiromani
 3. Abhinandan Saroja National Award
 4. Padma Bhushan

Question ID : 264330115819
Status : Answered
Chosen Option : 2

Q.4 net exports = total exports - _____.

- Ans 1. total revenue
 2. total interest
 3. total imports
 4. total income

Question ID : 264330115350
Status : Answered
Chosen Option : 3

Q.5 On heating gypsum at _____, it losses water molecules and becomes calcium sulphate hemihydrate.

- Ans 1. 115 K
 2. 173 K
 3. 215 K
 4. 373 K

Question ID : 264330115143
Status : Answered
Chosen Option : 4

Q.6 Which of the following books was written by Dayanand Saraswati?

- Ans 1. Gitanjali
 2. Kabuliwala
 3. Stray Birds
 4. Satyarth Prakash

Question ID : 264330115727
Status : Answered
Chosen Option : 4

Q.7 Which of the following part of Harappan cities was known as citadel?

- Ans 1. North
 2. East
 3. West
 4. South

Question ID : 264330115441
Status : Answered
Chosen Option : 2

Q.8 Which is the least populated state in India as per the Census 2011?

- Ans 1. Mizoram
 2. Goa
 3. Sikkim
 4. Punjab

Question ID : 264330116028
Status : Answered
Chosen Option : 3

Q.9 The total number of sports in the 36th edition of the National Games 2022 of India were

- Ans 1. 40
 2. 44
 3. 36
 4. 50

Question ID : 264330115910
Status : Answered
Chosen Option : 2

Q.10 _____ are a kind of waste disposal system of the cell.

- Ans 1. Ribosome
 2. Lysosome
 3. Mitochondria
 4. Vacuole

Question ID : 264330115190
Status : Answered
Chosen Option : 2

Q.11 Which of the following Articles of the Indian Constitution provides for an independent office of the Comptroller and Auditor General of India?

- Ans 1. Article 148
 2. Article 134
 3. Article 158
 4. Article 160

Question ID : 26433086822
Status : Answered
Chosen Option : 1

Q.12 Prime Minister Narendra Modi flagged off the first Vande Bharat Express Train on which route in South India?

- Ans**
- 1. Ernakulam – Kollam
 - 2. Mettupalayam – Ooty
 - 3. Mysuru-Chennai
 - 4. Bangalore – Chennai

Question ID : 264330115053
Status : Answered
Chosen Option : 4

Q.13 Prime Minister, Shri Narendra Modi launched the 'Jal Shakti Abhiyan : _____' campaign on World Water Day, 2021. Fill the blank space with appropriate option.

- Ans**
- 1. Conserve the rain
 - 2. Catch the rain
 - 3. Cast the rain
 - 4. Call the rain

Question ID : 264330116165
Status : Answered
Chosen Option : 1

Q.14 The first seven Five Years Plans gave importance to _____.

- Ans**
- 1. Self-Reliance
 - 2. Modernization
 - 3. Equity
 - 4. Increase Export

Question ID : 264330116118
Status : Answered
Chosen Option : 1

Q.15 Pushkar Singh Dhami, who became the chief minister of Uttarakhand state of India in March 2022, belongs to _____ political party.

- Ans**
- 1. Bharatiya Janata Party
 - 2. Communist Party of India
 - 3. Indian National Congress
 - 4. Nationalist Congress Party

Question ID : 264330114895
Status : Answered
Chosen Option : 1

Q.16 Which of the following rivers discharge its water into the Arabian sea?

- Ans 1. Mahanadi
 2. Krishna
 3. Narmada
 4. Ganga

Question ID : 26433089664
Status : Answered
Chosen Option : 3

Q.17 Who among the following is NOT a Kathak dancer?

- Ans 1. Sitara Devi
 2. Ananda Shankar
 3. Gopi Krishna
 4. Shambu Maharaj

Question ID : 26433071692
Status : Answered
Chosen Option : 3

Q.18 Who was the captain of the Indian hockey men's team in the 1936 Berlin Olympics?

- Ans 1. Sayed Jaffar
 2. Roop Singh
 3. Ahmed Khan
 4. Dhyan Chand

Question ID : 26433090749
Status : Answered
Chosen Option : 4

Q.19 Under which of the following articles is the abolition of titles recognised?

- Ans 1. Article 19
 2. Article 20
 3. Article 18
 4. Article 17

Question ID : 26433089182
Status : Answered
Chosen Option : 3

Q.20 Actual growth rate during tenth five year plan of India was _____.

- Ans 1. 7 percent
 2. 5 percent
 3. 7.6 percent
 4. 6.2 percent

Question ID : 264330115361
Status : Answered
Chosen Option : 3

Q.1 If a sum of ₹1,00,000 is to be paid back in two equal annual instalments at $2\frac{3}{4}$ percent compound interest per annum in case of annual compounding, then what is the value of each instalment? (Rounded off to nearest integral value)

- Ans**
- ✓ 1. ₹52,072
 - ✗ 2. ₹53,072
 - ✗ 3. ₹50,072
 - ✗ 4. ₹51,072

Question ID : 26433074226
Status : Not Answered
Chosen Option : --

Q.2 If $0.25 : x :: 3 : 8$, then $x = ?$

- Ans**
- ✓ 1. 0.66
 - ✗ 2. 0.56
 - ✗ 3. 0.55
 - ✗ 4. 0.69

Question ID : 26433076376
Status : Answered
Chosen Option : 1

Q.3 P, Q and R can complete a task in 20, 30, and 60 days, respectively. How many days will it take to finish the work if P is helped by Q and R every third day?

- Ans**
- ✓ 1. 15
 - ✗ 2. 17
 - ✗ 3. 12
 - ✗ 4. 18

Question ID : 26433065299
Status : Answered
Chosen Option : 1

Q.4 Simplify the expression $2 \div \frac{5}{7}$ of $(7 + 9 \times 2) + \left[\frac{15}{6} \div \frac{5}{18} - \frac{24}{12} \right]$.

- Ans
- 1. $\frac{47}{125}$
 - 2. $\frac{166}{7}$
 - 3. $\frac{889}{125}$
 - 4. $\frac{146}{7}$

Question ID : 26433082918
Status : Answered
Chosen Option : 3

Q.5 25 articles were bought for ₹8,625 and sold for ₹12,675. Find the approximate profit percentage per article.

- Ans
- 1. 32%
 - 2. 47%
 - 3. 39%
 - 4. 45%

Question ID : 26433076176
Status : Answered
Chosen Option : 2

Q.6 A discount of 4.5 percent is given to the customer on marked price of an article. A girl bought the article for Rs. 191. The marked price of the article is:

- Ans
- 1. Rs. 300
 - 2. Rs. 200
 - 3. Rs. 500
 - 4. Rs. 400

Question ID : 264330116734
Status : Answered
Chosen Option : 2

Q.7 A shopkeeper buys 10 fans and sells 8 fans at the cost price of 10 fans. What is the profit percentage?

- Ans
- 1. 24%
 - 2. 25%
 - 3. 22%
 - 4. 23%

Question ID : 26433074958
Status : Answered
Chosen Option : 2

Q.8 If $A = \frac{2}{3}B$ and $B = \frac{3}{5}C$, then what is A:B:C?

- Ans
- 1. 5:3:7
 - 2. 2:3:5
 - 3. 3:5:7
 - 4. 3:2:5

Question ID : 26433075666
Status : Answered
Chosen Option : 2

Q.9 Radius of a sphere is 6 cm. The numerical value of the surface area of this sphere is what percentage of the numerical value of its volume?

- Ans
- 1. 40%
 - 2. 50%
 - 3. 30%
 - 4. 60%

Question ID : 26433092172
Status : Answered
Chosen Option : 2

Q.10 Average score of 11 players of a cricket team in a one day match is 32. The runs scored by the ten players are 11, 51, 2, 96, 21, 33, 0, 32, 9 and 14. What is the score of 11th player?

- Ans
- 1. 96
 - 2. 91
 - 3. 83
 - 4. 79

Question ID : 26433075096
Status : Answered
Chosen Option : 3

Q.11 There are only two candidates in an election. A person got 40 percent votes and lost by 50 votes. Assuming that there were no invalid votes, the total number of votes are :

- Ans
- 1. 150
 - 2. 250
 - 3. 120
 - 4. 450

Question ID : 26433079852
Status : Answered
Chosen Option : 2

Q.12 On buying 20 bangles, Riya gets 5 bangles free of cost. What is the discount percentage that Riya gets?

- Ans
- 1. 10%
 - 2. 20%
 - 3. 15%
 - 4. 25%

Question ID : 26433076427
Status : Answered
Chosen Option : 2

Q.13 What would be the (Approximate) compound interest (in Rs.) on the principal amount of Rs.10,000 for 2 years at an interest rate of 16% per annum (compounding is done half-yearly)?

- Ans
- 1. 3800
 - 2. 3200
 - 3. 3604
 - 4. 3306

Question ID : 26433071329
Status : Answered
Chosen Option : 3

Q.14 A solution consists of 50 litres of pure milk. 10 litres of milk is replaced with equal quantity of water. Again 10 litres of the mixture is substituted by 10 litres of water and this operation is repeated one more time. Find the quantity of milk in the final solution.

- Ans
- 1. 25 litres
 - 2. 25.6 litres
 - 3. 25.4 litres
 - 4. 25.2 litres

Question ID : 26433081549
Status : Answered
Chosen Option : 3

Q.15 If a natural number when divided by 2,3, and 4 leaves a remainder of 1 in each case, then what is the smallest possible three digit natural number?

- Ans
- 1. 107
 - 2. 103
 - 3. 109
 - 4. 105

Question ID : 26433075634
Status : Answered
Chosen Option : 3

Q.16 A bus covered 60 km at a speed of 15 km/h, 100 km at a speed of 25 km/h and 20 km at a speed of 5 km/h. What is its average speed during the entire journey (in m/sec)?

- Ans
- 1. 15
 - 2. $\frac{21}{2}$
 - 3. 20
 - 4. $\frac{25}{6}$

Question ID : 26433075198
Status : Not Answered
Chosen Option : --

Q.17 The halves of the diagonals of a rhombus are 75 cm and 90 cm. Find its area.

- Ans
- 1. 6750 cm^2
 - 2. 27000 cm^2
 - 3. 3375 cm^2
 - 4. 13500 cm^2

Question ID : 26433075743
Status : Answered
Chosen Option : 2

Q.18 A thief started running at a speed of 12 m/s, after running for 10 sec a policeman started running to catch the thief in the same direction at a speed of 14.5 m/s. What is the time taken by the policeman to catch the thief?

- Ans
- 1. 36 sec
 - 2. 30 sec
 - 3. 44 sec
 - 4. 48 sec

Question ID : 26433075693
Status : Not Answered
Chosen Option : --

Q.19 In a town there are 5500 people who can vote in an election. If the number of male voters increases by 11% and female voters increases by 20%, then the number of voters becomes 6330. Find the initial number of male and female voters, respectively, in the town.

- Ans 1. 3000, 2500
 2. 2000, 3500
 3. 2500, 3000
 4. 3500, 2000

Question ID : 26433082091
Status : Not Answered
Chosen Option : --

Q.20 When Ashish finishes a certain work, he gets a total wage of Rs. 70. When Kanika finishes the same work, he gets a total wage of Rs. 165. The daily wages of Ashish and Kanika are Rs. 3.5 and Rs. 5.5 respectively. If both of them do it together, what is the cost of the work?

- Ans 1. Rs.108
 2. Rs.144
 3. Rs.120
 4. Rs.140

Question ID : 264330116849
Status : Not Answered
Chosen Option : --

Section : Part-D-English

Q.1 Select the most appropriate option to fill in the blank.

Janaki remains _____ while talking about her dark past.

- Ans 1. gracious
 2. cautious
 3. dignified
 4. turbulent

Question ID : 26433071883
Status : Not Answered
Chosen Option : --

Q.2 Identify the MISSPELT word in the following sentence.

In some regions of the world, child poverty remains a serious issue, significantly in relation of the geospatial and living standards in which children grow up.

- Ans 1. issue
 2. significantly
 3. geospatial
 4. regions

Question ID : 26433073661
Status : Not Answered
Chosen Option : --

Q.3 Select the most appropriate meaning of the underlined idiom in the following sentence.

Keep an eye on the situation around, and take your decision accordingly.

- Ans 1. Ignore
2. Observe continually and carefully
3. Cries over spilt milk
4. Be aggressive with red eyes

Question ID : 26433072513
Status : Not Answered
Chosen Option : --

Q.4 The given sentence is divided into three segments. Select the option that has the segment with a grammatical error. If there is no error, select 'no error' as your answer.

It will take / 5 minutes to / preparing a cup of tea.

- Ans 1. No error
2. preparing a cup of tea
3. It will take
4. 5 minutes to

Question ID : 26433071858
Status : Not Answered
Chosen Option : --

Q.5 Select the most appropriate meaning of the underlined idiom that can be substituted in the following sentence.

My son was disappointed with his failure, but he took heart and tried again

- Ans 1. felt encouraged
2. loved dearly
3. was deeply affected
4. cried miserably

Question ID : 26433072236
Status : Not Answered
Chosen Option : --

Q.6 Select the most appropriate ANTONYM of the given word.

Accuse

- Ans 1. Incriminate
2. Defend
3. Charge
4. Allege

Question ID : 26433073577
Status : Not Answered
Chosen Option : --

Q.7 Select the most appropriate option to fill in the blank.

The _____ of this beautiful garden is so exciting.

- Ans
- 1. site
 - 2. slight
 - 3. cite
 - 4. sight

Question ID : 26433073932
Status : Not Answered
Chosen Option : --

Q.8 Select the most appropriate option to substitute the underlined segment in the given sentence to make it a meaningful sentence. If no substitution is required, select 'No substitution'.

The first step towards the prevention of cybercrimes will obviously to promote awareness about criminal activities and tighten up security.

- Ans
- 1. would obviously been to promote awareness about criminal activities
 - 2. would obviously be to promote awareness about criminal activities
 - 3. No substitution
 - 4. would obviously be to promote awareness for criminal activities

Question ID : 26433092042
Status : Not Answered
Chosen Option : --

Q.9 Select the most appropriate homonym to fill in the blank.

These products _____ for a long time.

- Ans
- 1. lust
 - 2. last
 - 3. lost
 - 4. least

Question ID : 26433088789
Status : Not Answered
Chosen Option : --

Q.10 Complete the sentence by choosing the most appropriate synonym of the underlined word.

When you want to leave, you _____ the building.

- Ans
- 1. move in
 - 2. catch
 - 3. jump
 - 4. exit

Question ID : 26433088864
Status : Not Answered
Chosen Option : --

Q.11 Select the most appropriate option that can substitute the underlined segment in the given sentence. If there is no need to substitute it, select 'No substitution'.

Many instances of corruption have been reported by authorities posted theyre.

- Ans
- 1. No substitution
 - 2. authorities in which were posted theyre
 - 3. authorities whom were posted theyre
 - 4. authorities posted there

Question ID : 26433091764
Status : Not Answered
Chosen Option : --

Q.12 Select the most appropriate ANTONYM of the given word.
Grumble

- Ans
- 1. Navigate
 - 2. Stray
 - 3. Raise
 - 4. Praise

Question ID : 26433066086
Status : Not Answered
Chosen Option : --

Q.13 Select the most appropriate synonym of the given word.

Commerce

- Ans
- 1. Stream
 - 2. Trade
 - 3. Class
 - 4. Bank

Question ID : 26433072350
Status : Not Answered
Chosen Option : --

Q.14 Select the INCORRECTLY spelt word.

- Ans
- 1. Spiteful
 - 2. Rotational
 - 3. Magnificentt
 - 4. Debatable

Question ID : 26433073505
Status : Not Answered
Chosen Option : --

Q.15 Select the most appropriate **ANTONYM** for the underlined word in the following sentence.

He is a spendthrift and spends money lavishly.

- Ans
- 1. Careful
 - 2. Wicked
 - 3. Miser
 - 4. Mean

Question ID : 26433093035

Status : Not Answered

Chosen Option : --

Comprehension:

In the following passage, some words have been deleted. Read the passage carefully and select the most appropriate option to fill in each blank.

The build up to the 2020 Tokyo Olympics, which (1)_____ on July 23 and finished on August 8, as defined by cautious optimism, as well as a slew of (2)_____ that came with staging the Games under tight safety standards and without (3)_____ during the COVID-19 outbreak. While Indian competitors had shown enough potential to (4)_____ expect a big return of medals in the Games, the disappointments of Rio 2016 lingered. What happened was that India delivered its best-ever performance at the Games, beginning with Mirabai Chanu's silver medal in weightlifting on the first day and culminating with Neeraj Chopra's (5)_____ gold medal in javelin throw on the country's last day of competition in Tokyo.

SubQuestion No : 16

Q.16 Select the most appropriate option to fill in blank no. 1.

- Ans
- 1. beginning
 - 2. begin
 - 3. began
 - 4. begun

Question ID : 26433058733

Status : Not Answered

Chosen Option : --

Comprehension:

In the following passage, some words have been deleted. Read the passage carefully and select the most appropriate option to fill in each blank.

The build up to the 2020 Tokyo Olympics, which (1)_____ on July 23 and finished on August 8, as defined by cautious optimism, as well as a slew of (2)_____ that came with staging the Games under tight safety standards and without (3)_____ during the COVID-19 outbreak. While Indian competitors had shown enough potential to (4)_____ expect a big return of medals in the Games, the disappointments of Rio 2016 lingered. What happened was that India delivered its best-ever performance at the Games, beginning with Mirabai Chanu's silver medal in weightlifting on the first day and culminating with Neeraj Chopra's (5)_____ gold medal in javelin throw on the country's last day of competition in Tokyo.

SubQuestion No : 17

Q.17 Select the most appropriate option to fill in blank no. 2.

- Ans
- 1. certainty
 - 2. configuration
 - 3. enjoyment
 - 4. anxiety

Question ID : 26433058734
Status : Not Answered
Chosen Option : --

Comprehension:

In the following passage, some words have been deleted. Read the passage carefully and select the most appropriate option to fill in each blank.

The build up to the 2020 Tokyo Olympics, which (1)_____ on July 23 and finished on August 8, as defined by cautious optimism, as well as a slew of (2)_____ that came with staging the Games under tight safety standards and without (3)_____ during the COVID-19 outbreak. While Indian competitors had shown enough potential to (4)_____ expect a big return of medals in the Games, the disappointments of Rio 2016 lingered. What happened was that India delivered its best-ever performance at the Games, beginning with Mirabai Chanu's silver medal in weightlifting on the first day and culminating with Neeraj Chopra's (5)_____ gold medal in javelin throw on the country's last day of competition in Tokyo.

SubQuestion No : 18

Q.18 Select the most appropriate option to fill in blank no. 3.

- Ans
- 1. athletes
 - 2. spectators
 - 3. preachers
 - 4. tools

Question ID : 26433058735
Status : Not Answered
Chosen Option : --

Comprehension:

In the following passage, some words have been deleted. Read the passage carefully and select the most appropriate option to fill in each blank.

The build up to the 2020 Tokyo Olympics, which (1)_____ on July 23 and finished on August 8, as defined by cautious optimism, as well as a slew of (2)_____ that came with staging the Games under tight safety standards and without (3)_____ during the COVID-19 outbreak. While Indian competitors had shown enough potential to (4)_____ expect a big return of medals in the Games, the disappointments of Rio 2016 lingered. What happened was that India delivered its best-ever performance at the Games, beginning with Mirabai Chanu's silver medal in weightlifting on the first day and culminating with Neeraj Chopra's (5)_____ gold medal in javelin throw on the country's last day of competition in Tokyo.

SubQuestion No : 19

Q.19 Select the most appropriate option to fill in blank no. 4.

- Ans
- 1. casually
 - 2. constitutionally
 - 3. authoritatively
 - 4. legitimately

Question ID : 26433058736
Status : Not Answered
Chosen Option : --

Comprehension:

In the following passage, some words have been deleted. Read the passage carefully and select the most appropriate option to fill in each blank.

The build up to the 2020 Tokyo Olympics, which (1)_____ on July 23 and finished on August 8, as defined by cautious optimism, as well as a slew of (2)_____ that came with staging the Games under tight safety standards and without (3)_____ during the COVID-19 outbreak. While Indian competitors had shown enough potential to (4)_____ expect a big return of medals in the Games, the disappointments of Rio 2016 lingered. What happened was that India delivered its best-ever performance at the Games, beginning with Mirabai Chanu's silver medal in weightlifting on the first day and culminating with Neeraj Chopra's (5)_____ gold medal in javelin throw on the country's last day of competition in Tokyo.

SubQuestion No : 20

Q.20 Select the most appropriate option to fill in blank no. 5.

- Ans
- 1. historic
 - 2. insignificant
 - 3. Asiatic
 - 4. non-fictional

Question ID : 26433058737
Status : Not Answered
Chosen Option : --

Q.1 नीचे दिए गए वाक्य में प्रयुक्त गलत विभक्ति चिह्न को पहचानकर बताइए कि उसके स्थान पर कौन सा विभक्ति चिह्न सही होगा?
'अच्छी सेहत को प्रतिदिन योग करना चाहिए।'

- Ans
- 1. द्वारा
 - 2. में
 - 3. के लिए
 - 4. से

Question ID : 26433062866
Status : Answered
Chosen Option : 3

Q.2 'रात और संध्या के बीच की वेला' वाक्यांश के लिए सार्थक शब्द है-

- Ans
- 1. भोर
 - 2. गोधूलि
 - 3. पर्णी
 - 4. क्षितिज

Question ID : 26433065868
Status : Answered
Chosen Option : 2

Q.3 निम्नलिखित शब्द के सही पर्यायवाची शब्द का चयन विकल्पों में से कीजिए।
सुंदर

- Ans
- 1. माणिक
 - 2. पीताम्बर
 - 3. भानु
 - 4. ललित

Question ID : 26433066942
Status : Answered
Chosen Option : 1

Q.4 हमारे माता-पिता का तो कहना ही यही है कि सबके साथ भला करो, यदि _____।
रिक्त स्थान की पूर्ति उचित मुहावरे द्वारा कीजिए।

- Ans
- 1. परोपकार सर्वोपरि है
 - 2. अपना काम स्वयं करो
 - 3. आप काज महाकाज
 - 4. आप भले तो जग भला

Question ID : 26433062603
Status : Answered
Chosen Option : 4

Q.5 निम्नलिखित में से शुद्ध वाक्य है-

- Ans
- 1. हमलोग उत्तर लिखते हैं।
 - 2. हमलोग उत्तर लिखत हैं।
 - 3. हम लोग उत्तर लिखते हैं।
 - 4. हमलोग उतर लिखते हैं।

Question ID : 26433080933
Status : Answered
Chosen Option : 3

Q.6 'वह आंख से कुबड़ा है।' इस वाक्य में रेखांकित शब्द के अर्थ स्थान पर उचित शब्द क्या होगा?

- Ans
- 1. दृष्टिहीन
 - 2. गूंगा
 - 3. वाचाल
 - 4. बहरा

Question ID : 26433062203
Status : Answered
Chosen Option : 1

Q.7 'अनुराग' का विलोम है-

- Ans
- 1. विराग
 - 2. सुहाग
 - 3. वियोग
 - 4. विहंग

Question ID : 26433062923
Status : Answered
Chosen Option : 1

Q.8 'फैला अपने रवि कर जाल।'

उपरोक्त वाक्य में प्रयुक्त 'कर' शब्द निम्न में से किस अर्थ को व्यक्त करता है?

- Ans
- 1. हाथ
 - 2. किरण
 - 3. टैक्स
 - 4. सूँड़

Question ID : 26433069732
Status : Answered
Chosen Option : 2

Q.9 'सौ वर्ष का समय' वाक्यांश के लिए एक शब्द होगा-

- Ans 1. शताब्दी
 2. सहस्राब्दी
 3. युग
 4. वार्षिक

Question ID : 26433065733
Status : Answered
Chosen Option : 1

Q.10 निम्नलिखित वाक्य में कौन से भाग में त्रुटि है?
'बिद्वानो का दल आ रहा है।'

- Ans 1. दल
 2. आ रहा है।
 3. का
 4. बिद्वानो

Question ID : 26433063063
Status : Answered
Chosen Option : 4

Q.11 निम्नलिखित वाक्य में रेखांकित शब्द के स्थान पर सर्वोचित विकल्प चुनिए।
'वह इस आशा में विश्राम करता रहा कि मुझसे मुलाकात हो जाएगी।'

- Ans 1. प्रतीक्षा
 2. विश्वास
 3. उपासना
 4. परिश्रम

Question ID : 26433084964
Status : Answered
Chosen Option : 1

Q.12 'अनंत विश्व में अनेक देवताओं की कहानियाँ प्रचलित हैं।' इस वाक्य में प्रयुक्त 'अनंत' शब्द निम्न में से किस अर्थ को व्यक्त करता है?

- Ans 1. अंतहीन
 2. ईश्वर
 3. शेष
 4. आकाश

Question ID : 26433069728
Status : Answered
Chosen Option : 1

Q.13 निम्नलिखित वाक्य के रिक्त स्थान में सबसे उपयुक्त मुहावरा क्या होगा?
'बुद्धिजीवी और पत्रकार _____ खाते हैं।'

- Ans
- 1. घास की रोटी
 - 2. गेहूँ की रोटी
 - 3. अक्ल की रोटी
 - 4. मक्के की रोटी

Question ID : 26433066734
Status : Answered
Chosen Option : 1

Q.14 निम्नलिखित में से किस वाक्य में सर्वनाम सम्बन्धी अशुद्धि है?

- Ans
- 1. तुम यह पुस्तक पढ़ कर देखो।
 - 2. हम अपना काम स्वयं करता हूँ।
 - 3. यह पुस्तक बहुत उपयोगी है।
 - 4. वह अपना और अपनी सखी का काम करेगी।

Question ID : 26433062999
Status : Answered
Chosen Option : 2

Q.15 'जो किये गये उपकारों को मानता है' वाक्यांश के लिए एक शब्द _____ है।

- Ans
- 1. कृतज्ञ
 - 2. कारीगर
 - 3. कृतघ्न
 - 4. कृपण

Question ID : 26433062938
Status : Answered
Chosen Option : 3

Comprehension:

निम्नलिखित गद्यांश में कुछ शब्दों को हटा दिया गया है। दिए गए विकल्पों की सहायता से रिक्त स्थानों की पूर्ति कीजिए। प्रत्येक संख्या के लिए सबसे उपयुक्त विकल्प का चयन कीजिए।

"जैसी संगति बैठिये तैसोई फल दीन" उक्ति का अर्थ है-मनुष्य जिस 1. _____ में बैठता है, उसे वैसा ही फल मिलता है। बुरे की संगति में 2. _____ मिलता है। अच्छे के साथ रहने से अच्छा परिणाम निकलता है। यदि सज्जन 3. _____ से घिरा रहेगा तो दुर्जनों के अवगुण उस पर अवश्य प्रभाव छोड़ेंगे। जिन मित्रों के साथ हम रहते हैं, उनके 4. _____ से बचना अत्यंत कठिन है। यदि मित्र अच्छे होंगे तो हमें 5. _____ की ओर अग्रसर करेंगे।

SubQuestion No : 16

Q.16 रिक्त स्थान 1 की पूर्ति के लिए सबसे उपयुक्त विकल्प का चयन करें।

- Ans
- 1. चौराहे
 - 2. संगति
 - 3. जगह
 - 4. अकेला

Question ID : 264330110867
Status : Answered
Chosen Option : 2

Comprehension:

निम्नलिखित गद्यांश में कुछ शब्दों को हटा दिया गया है। दिए गए विकल्पों की सहायता से रिक्त स्थानों की पूर्ति कीजिए। प्रत्येक संख्या के लिए सबसे उपयुक्त विकल्प का चयन कीजिए।
"जैसी संगति बैठिये तैसी फल दीन" उक्ति का अर्थ है-मनुष्य जिस 1. _____ में बैठता है, उसे वैसा ही फल मिलता है। बुरे की संगति में 2. _____ मिलता है। अच्छे के साथ रहने से अच्छा परिणाम निकलता है। यदि सज्जन 3. _____ से घिरा रहेगा तो दुर्जनों के अवगुण उस पर अवश्य प्रभाव छोड़ेंगे। जिन मित्रों के साथ हम रहते हैं, उनके 4. _____ से बचना अत्यंत कठिन है। यदि मित्र अच्छे होंगे तो हमें 5. _____ की ओर अग्रसर करेंगे।

SubQuestion No : 17

Q.17 रिक्त स्थान 2 की पूर्ति के लिए सबसे उपयुक्त विकल्प का चयन करें।

- Ans
- 1. कडवा फल
 - 2. खट्टा फल
 - 3. बुरा फल
 - 4. मीठा फल

Question ID : 264330110868

Status : Answered

Chosen Option : 3

Comprehension:

निम्नलिखित गद्यांश में कुछ शब्दों को हटा दिया गया है। दिए गए विकल्पों की सहायता से रिक्त स्थानों की पूर्ति कीजिए। प्रत्येक संख्या के लिए सबसे उपयुक्त विकल्प का चयन कीजिए।
"जैसी संगति बैठिये तैसी फल दीन" उक्ति का अर्थ है-मनुष्य जिस 1. _____ में बैठता है, उसे वैसा ही फल मिलता है। बुरे की संगति में 2. _____ मिलता है। अच्छे के साथ रहने से अच्छा परिणाम निकलता है। यदि सज्जन 3. _____ से घिरा रहेगा तो दुर्जनों के अवगुण उस पर अवश्य प्रभाव छोड़ेंगे। जिन मित्रों के साथ हम रहते हैं, उनके 4. _____ से बचना अत्यंत कठिन है। यदि मित्र अच्छे होंगे तो हमें 5. _____ की ओर अग्रसर करेंगे।

SubQuestion No : 18

Q.18 रिक्त स्थान 3 की पूर्ति के लिए सबसे उपयुक्त विकल्प का चयन करें।

- Ans
- 1. दुर्जनों
 - 2. शीलवान
 - 3. सज्जनों
 - 4. नेक

Question ID : 264330110869

Status : Answered

Chosen Option : 1

Comprehension:

निम्नलिखित गद्यांश में कुछ शब्दों को हटा दिया गया है। दिए गए विकल्पों की सहायता से रिक्त स्थानों की पूर्ति कीजिए। प्रत्येक संख्या के लिए सबसे उपयुक्त विकल्प का चयन कीजिए।
"जैसी संगति बैठिये तैसी फल दीन" उक्ति का अर्थ है-मनुष्य जिस 1. _____ में बैठता है, उसे वैसा ही फल मिलता है। बुरे की संगति में 2. _____ मिलता है। अच्छे के साथ रहने से अच्छा परिणाम निकलता है। यदि सज्जन 3. _____ से घिरा रहेगा तो दुर्जनों के अवगुण उस पर अवश्य प्रभाव छोड़ेंगे। जिन मित्रों के साथ हम रहते हैं, उनके 4. _____ से बचना अत्यंत कठिन है। यदि मित्र अच्छे होंगे तो हमें 5. _____ की ओर अग्रसर करेंगे।

SubQuestion No : 19

Q.19 रिक्त स्थान 4 की पूर्ति के लिए सबसे उपयुक्त विकल्प का चयन करें।

- Ans 1. प्रभाव
 2. दुष्प्रभाव
 3. गौण प्रभाव
 4. कुप्रभाव

Question ID : 264330110870

Status : Answered

Chosen Option : 2

Comprehension:

निम्नलिखित गद्यांश में कुछ शब्दों को हटा दिया गया है। दिए गए विकल्पों की सहायता से रिक्त स्थानों की पूर्ति कीजिए। प्रत्येक संख्या के लिए सबसे उपयुक्त विकल्प का चयन कीजिए।
"जैसी संगति बैठिये तैसी फल दीन" उक्ति का अर्थ है-मनुष्य जिस 1. _____ में बैठता है, उसे वैसा ही फल मिलता है। बुरे की संगति में 2. _____ मिलता है। अच्छे के साथ रहने से अच्छा परिणाम निकलता है। यदि सज्जन 3. _____ से घिरा रहेगा तो दुर्जनों के अवगुण उस पर अवश्य प्रभाव छोड़ेंगे। जिन मित्रों के साथ हम रहते हैं, उनके 4. _____ से बचना अत्यंत कठिन है। यदि मित्र अच्छे होंगे तो हमें 5. _____ की ओर अग्रसर करेंगे।

SubQuestion No : 20

Q.20 रिक्त स्थान 5 की पूर्ति के लिए सबसे उपयुक्त विकल्प का चयन करें।

- Ans 1. तीव्र
 2. बुराई
 3. अच्छाई
 4. चालाकी

Question ID : 264330110871

Status : Not Answered

Chosen Option : --