

Constable GD in CAPFs SSF Rifleman GD in Assam Rifles and Sepoy in NCB Examination 2022

Roll Number	www.govtjobsalert.in
Candidate Name	www.govtjobsalert.in
Venue Name	Aurobindo International School Jaipur
Exam Date	07/02/2023
Exam Time	11:45 AM - 12:45 PM
Subject	Constable GD Examination 2022

Section : Part-A-General Intelligence and Reasoning

Q.1 C \$ D' means 'C is the brother of D'
'C # D' means 'C is the sister of D'
'C + D' means 'C is the father of D'
'C - D' means 'C is the mother of D'
If 'P \$ Z + Q \$ B', then how is P related to B?

- Ans
- 1. P is the brother of B
 - 2. P is the father of B
 - 3. P is the father-in-law of B
 - 4. P is the paternal uncle of B

Question ID : 26433087126
Status : Answered
Chosen Option : 4

Q.2 Select the option that is related to the fifth term in the same way as the second term is related to the first term and the fourth term is related to the third term.
STAY : ASTY :: BEAM : ABEM :: RIDE : ?

- Ans
- 1. SJEF
 - 2. DRIE
 - 3. DEIR
 - 4. EFHQ

Question ID : 26433087193
Status : Answered
Chosen Option : 2

Q.3 Five friends A, B, C, D and E are sitting in a row facing north. E is to the immediate right of D and A is at the extreme left. C is exactly in between A and D. Who will be to the immediate right of E?

- Ans
- 1. B
 - 2. C
 - 3. A
 - 4. D

Question ID : 26433079063
Status : Answered
Chosen Option : 1

Q.4 Which of the following numbers will replace the question mark (?) in the given series?
23, 50, 108, 228, ?, 964

Ans 1. 472

2. 468

3. 474

4. 478

Question ID : 26433085642

Status : Answered

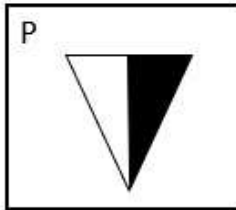
Chosen Option : 1

Q.5 Select the figure that will come in place of the question mark (?) in the following figure series.

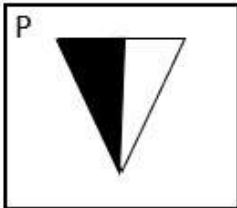


Ans

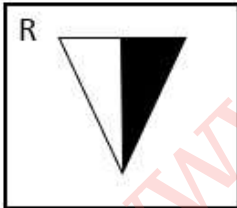
1.



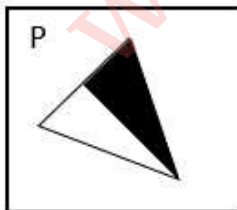
2.



3.



4.



Question ID : 26433081693

Status : Answered

Chosen Option : 1

Q.6 Select the option that is related to the third word in the same way as the second word is related to the first word.
(The words must be considered as meaningful English words and must not be related to each other based on the number of letters/number of consonants/vowels in the word)

Monday : Thursday :: Wednesday : ?

Ans 1. Monday

2. Saturday

3. Friday

4. Sunday

Question ID : 26433067977

Status : Answered

Chosen Option : 2

Q.7 In a certain code language, 'we can go' is written as 'ti mi pi', 'can i sit' is written as 'pi ri di' and 'sit and go' is written as 'di si ti'. How will 'and' be written in that language?

Ans 1. ti

2. si

3. di

4. pi

Question ID : 26433070327

Status : Answered

Chosen Option : 2

Q.8 Which letter cluster will replace the question mark (?) to complete the given series?
KSCA, OXWG, ?, WHKS, AMEY

Ans 1. TQMS

2. XTRM

3. VGMR

4. SCQM

Question ID : 26433079425

Status : Answered

Chosen Option : 4

Q.9 Select the correct combination of mathematical signs to sequentially replace the * signs and to balance the given equation.

$91 * 7 * 2 * 4 * 10 * 5$

Ans 1. +, -, =, ÷, ×

2. ×, ÷, +, -, =

3. ÷, =, ×, +, -

4. ×, ÷, +, =, -

Question ID : 26433094994

Status : Answered

Chosen Option : 3

Q.10 Which of the following options represents the correct order of the given words as they would appear in the English dictionary?

1. Expensive
2. Experiment
3. Expertise
4. Expiry
5. Expert

- Ans
- 1. 2, 1, 5, 3, 4
 - 2. 1, 2, 3, 5, 4
 - 3. 1, 2, 3, 4, 5
 - 4. 1, 2, 5, 3, 4

Question ID : 26433086969

Status : Answered

Chosen Option : 4

Q.11 Three statements are given, followed by three conclusions numbered I, II and III. Assuming the statements to be true, even if they seem to be at variance with commonly known facts, decide which of the conclusions logically follow(s) from the statements.

Statements:

- All apples are oranges.
- Some oranges are bananas.
- All bananas are kiwis.

Conclusions:

- I. Some oranges are kiwis.
- II. Some oranges are apples.
- III. Some apples are bananas.

- Ans
- 1. Only conclusions II and III follow
 - 2. Only conclusions I and II follow
 - 3. All conclusions follow
 - 4. Only conclusion III follows

Question ID : 26433090998

Status : Answered

Chosen Option : 2

Q.12 Which of the following terms will replace the question mark (?) in the given series?
DVH, FWM, JZR, LAW, PDB, ?

- Ans
- 1. REG
 - 2. RFH
 - 3. SFG
 - 4. SHE

Question ID : 26433069454

Status : Answered

Chosen Option : 1

Q.13 Eight people, D, E, G, H, M, N, Y and Z are sitting in a straight line, facing north. Y sits at one of the extreme ends of the line. Only two people sit between Y and Z. E sits third to the right of Z. Only four people sit between E and D. G sits at one of the positions to the right of E. N is not an immediate neighbour of Z. H sits second to the right of M. How many people sit to the left of M?

- Ans
- 1. Two
 - 2. None
 - 3. Three
 - 4. One

Question ID : 26433092425
Status : Answered
Chosen Option : 1

Q.14 Which of the mathematical signs should be interchanged in the below equation to make it mathematically correct?
 $12 + 112 \div 16 - 8 \times 64 = 140$

- Ans
- 1. + and -
 - 2. \div and \times
 - 3. + and \times
 - 4. + and \div

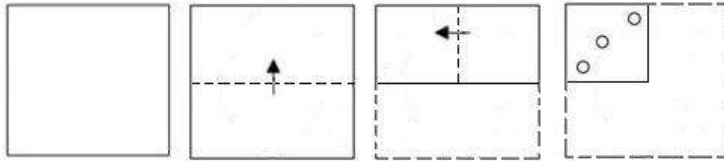
Question ID : 264330117562
Status : Answered
Chosen Option : 3

Q.15 Which of the following numbers will replace the question mark (?) in the given series?
665, 670, 663, 674, 661, 678, ?, 682

- Ans
- 1. 680
 - 2. 625
 - 3. 676
 - 4. 659

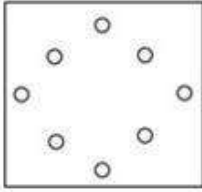
Question ID : 26433089767
Status : Answered
Chosen Option : 4

Q.16 A paper is folded and cut as shown below. How will it appear when unfolded?

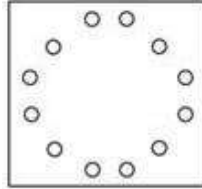


Ans

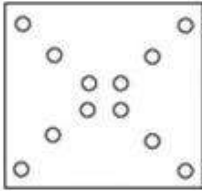
✗ 1.



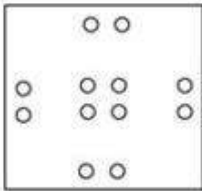
✓ 2.



✗ 3.

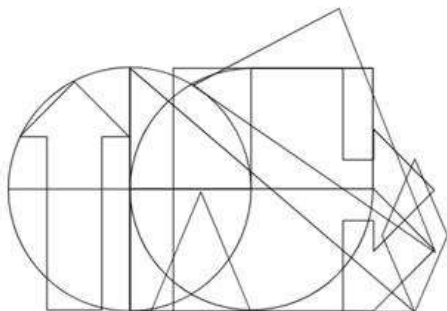


✗ 4.




Question ID : 26433090955
Status : Answered
Chosen Option : 2

Q.17 Select the option figure which is embedded in the given figure. (Rotation is Not allowed)




Ans

✗ 1.



✗ 2.



✓ 3.



✗ 4.



Question ID : 26433085745
Status : Answered
Chosen Option : 3

Q.18 In a certain code language, the word 'GLAD' is written as ZLADG. The word 'SCAR' is written as 'ZCARS'. How is the word 'LOST' written in the same code language?

- Ans
- 1. ZTLOS
 - 2. ZOSTL
 - 3. ZOTLS
 - 4. ZLOST

Question ID : 26433090108
Status : Answered
Chosen Option : 2

Q.19 Select the option that is related to the fourth term in the same way as the first term is related to the second term and the fifth term is related to the sixth term.
407 : 37 :: ? : 59 :: 253 : 23

- Ans
- 1. 649
 - 2. 738
 - 3. 341
 - 4. 539

Question ID : 26433074549
Status : Answered
Chosen Option : 1

Q.20 Select the correct mirror image of the given figure, when the mirror is placed at MN as shown below.



- Ans
- 1. $b\uparrow\cap C\uparrow\Delta E$
 - 2. $b\uparrow a C\uparrow\nabla E$
 - 3. $b\uparrow a \cap \uparrow \Delta E$
 - 4. $b\uparrow t \cap C\uparrow \Delta E$

Question ID : 26433090147
Status : Answered
Chosen Option : 1

Q.1 Famous ruler Kanishka belonged to the _____ dynasty.

- Ans 1. Huna
 2. Kushana
 3. Shaka
 4. Shunga

Question ID : 26433089863
Status : Answered
Chosen Option : 2

Q.2 All executive actions of the Governor of a state shall be expressed to be taken in the name of _____.

- Ans 1. Advocate general
 2. Chief Minister
 3. Governor
 4. Council of Ministers

Question ID : 26433089187
Status : Answered
Chosen Option : 4

Q.3 Battle of Buxar was fought in _____.

- Ans 1. 1755
 2. 1764
 3. 1757
 4. 1760

Question ID : 264330115726
Status : Answered
Chosen Option : 2

Q.4 Vishu is predominantly celebrated in which of the following states of India?

- Ans 1. Assam
 2. Rajasthan
 3. Madhya Pradesh
 4. Kerala

Question ID : 26433094896
Status : Answered
Chosen Option : 1

Q.5 From the _____ budget, the practice of showing budget deficit has been discontinued in India.

Ans 1. 1997-98

2. 1994-95

3. 2001-02

4. 2003-04

Question ID : 26433054803

Status : Not Answered

Chosen Option : --

Q.6 The maximum length of the touch line in a football match is _____

Ans 1. 110 m

2. 100 m

3. 90 m

4. 120 m

Question ID : 26433090753

Status : Answered

Chosen Option : 3

Q.7 A nation that has positive net exports enjoys a trade _____.

Ans 1. surplus

2. deficit

3. loan

4. amount

Question ID : 264330115349

Status : Answered

Chosen Option : 1

Q.8 The sun is about _____ km away from the earth.

Ans 1. 20 million

2. 150 million

3. 50 million

4. 100 million

Question ID : 264330116092

Status : Answered

Chosen Option : 4

Q.9 The 108 feet bronze statue of prosperity in Bengaluru, inaugurated by Prime Minister Narendra Modi, has been built to commemorate whom?

- Ans**
- 1. Vallabhbhai Patel
 - 2. Rishabhanatha
 - 3. Nadaprabhu Kempegowda
 - 4. Magadi Kempegowda

Question ID : 264330115052
Status : Answered
Chosen Option : 2

Q.10 Tanjore Balasaraswati was a well-known _____ dancer.

- Ans**
- 1. Kuchipudi
 - 2. Odissi
 - 3. Sattriya
 - 4. Bharatnatyam

Question ID : 264330115894
Status : Not Answered
Chosen Option : --

Q.11 Give an example of means of personal communication.

- Ans**
- 1. television
 - 2. computer
 - 3. radio
 - 4. telephone service

Question ID : 264330115596
Status : Answered
Chosen Option : 4

Q.12 Under which of the following articles has the Right to property been shifted as a legal right?

- Ans**
- 1. Article 301-A
 - 2. Article 333
 - 3. Article 300-A
 - 4. Article 345

Question ID : 26433089181
Status : Answered
Chosen Option : 3

Q.13 Who among the following political leaders succeeded Venkaiah Naidu to become Vice President of India in August 2022?

- Ans
- 1. Bhagat Singh Koshyari
 - 2. Arif Mohammed Khan
 - 3. Biswabhusan Harichandan
 - 4. Jagdeep Dhankhar

Question ID : 264330114888
Status : Answered
Chosen Option : 4

Q.14 Among the given options, _____ is the method of irrigation.

- Ans
- 1. double cropping
 - 2. ploughing
 - 3. step cultivation
 - 4. canal

Question ID : 264330115434
Status : Answered
Chosen Option : 4

Q.15 Identify an element that is NOT a semi-metal.

- Ans
- 1. Germanium
 - 2. Caesium
 - 3. Arsenic
 - 4. Silicon

Question ID : 26433087853
Status : Not Answered
Chosen Option : --

Q.16 Where can you find 70 percent of freshwater resources on the Earth?

- Ans
- 1. The Pacific Ocean
 - 2. Himalayas and the Arctic Ocean
 - 3. Antarctica, Greenland and the mountainous regions of the world
 - 4. Himalayas and the Bay of Bengal

Question ID : 26433087892
Status : Answered
Chosen Option : 3

Q.17 Which political leader became Member of Legislative Assembly from Thrikkakara constituency, Kerala in June 2022?

- Ans** 1. Uma Thomas
 2. Pinarayi Vijayan
 3. Amit Shah
 4. Jagdeep Dhankhar

Question ID : 264330114972
Status : Not Answered
Chosen Option : --

Q.18 Consumers expect better-quality foods with _____ of nutrients.

- Ans** 1. contamination
 2. adulteration
 3. retention
 4. exclusion

Question ID : 264330115265
Status : Answered
Chosen Option : 1

Q.19 What are the height of Badminton posts?

- Ans** 1. 1.80 m
 2. 1.45 m
 3. 1.85 m
 4. 1.55 m

Question ID : 26433092336
Status : Answered
Chosen Option : 4

Q.20 Who among the following is a Bharatanatyam performer?

- Ans** 1. Sitara Devi
 2. Kalamandalam Kalyanikutty Amma
 3. V Satyanarayana Sarma
 4. Tanjore Balasaraswati

Question ID : 26433071691
Status : Not Answered
Chosen Option : --

Section : Part-C-Elementary Mathematics

Q.1 40 men can complete a work in 15 days. They started working, and after 5 days 10 more men joined them. In how many days will the total work be completed?

- Ans
- 1. 10
 - 2. 12
 - 3. 11
 - 4. 13

Question ID : 26433082991

Status : Answered

Chosen Option : 4

Q.2 The ticket of an IPL match in Chennai was ₹2,500. When the price of the ticket was lowered, the sale(number of tickets) of the tickets was increased by 50%, but the revenue noticed a reduction of 15%. What was the reduced price of the ticket (rounded off to two decimal places)?

- Ans
- 1. ₹2,125.67
 - 2. ₹2,250.33
 - 3. ₹1416.67
 - 4. ₹1,450.33

Question ID : 26433076222

Status : Answered

Chosen Option : 3

Q.3 A mixture of milk and water contains 18 parts of milk and 8 parts of water. How much fraction of the mixture should be removed and replaced by water so the ratio of water and milk are equal?

- Ans
- 1. $\frac{1}{18}$
 - 2. $\frac{12}{18}$
 - 3. $\frac{10}{18}$
 - 4. $\frac{5}{18}$

Question ID : 26433081548

Status : Answered

Chosen Option : 4

Q.4 If the height of a cylinder is increased by 25%, and the radius of its base is decreased by 15%, then find the percentage increase/decrease in its curved surface area.

- Ans
- 1. increases 3.25%
 - 2. decreases 4.15%
 - 3. decreases 2.23%
 - 4. increases 6.25%

Question ID : 26433075006
Status : Answered
Chosen Option : 4

Q.5 A sum of ₹1,20,000 was invested in a fixed deposit in the year 2019 at the rate of 12% per annum compounding annually. What will its approximate value be in the year 2022?

- Ans
- 1. ₹1,68,591
 - 2. ₹1,43,200
 - 3. ₹1,61,253
 - 4. ₹1,56,400

Question ID : 26433091564
Status : Answered
Chosen Option : 1

Q.6 A and B working together can finish a project in 16 days while B alone can do it in 24 days. In how many days can A alone finish the project?

- Ans
- 1. 36 days
 - 2. 44 days
 - 3. 48 days
 - 4. 42 days

Question ID : 26433080362
Status : Answered
Chosen Option : 3

Q.7 A policeman spots a thief 120 m ahead, immediately the policeman starts chasing the thief. The policeman runs 26 m in a minute and the thief runs 20 m in a minute. In what time will the policeman catch the thief?

- Ans
- 1. 21 min
 - 2. 20 min
 - 3. 19 min
 - 4. 18 min

Question ID : 26433075474
Status : Answered
Chosen Option : 2

Q.8 An almirah was bought for ₹15,500 and ₹260 was spent on its transportation. At what price should it be sold to gain 20%?

- Ans
- 1. ₹18912
 - 2. ₹18916
 - 3. ₹18914
 - 4. ₹18910

Question ID : 26433079772
Status : Answered
Chosen Option : 1

Q.9 A thief is observed by a policeman from a distance of 420 m. The thief starts running and the policeman chases him. The policeman and the thief run at a speed of 25 km/h and 20 km/h, respectively. What is the distance between them after three minutes?

- Ans
- 1. 250 m
 - 2. 320 m
 - 3. 230 m
 - 4. 170 m

Question ID : 26433075739
Status : Answered
Chosen Option : 4

Q.10 What is the value of the given expression?

$$9 \div \frac{3}{5} + 25 \left(\frac{4}{5} + \frac{3}{15} \right) - 9 \text{ of } \frac{2}{3}$$

- Ans
- 1. 45
 - 2. 34
 - 3. 42
 - 4. 37

Question ID : 26433081636
Status : Answered
Chosen Option : 2

Q.11 If the LCM of the first 110 natural numbers is N, then find the LCM of the first 115 natural numbers.

- Ans
- 1. $111 \times 112 \times 113 \times 114 \times 115N$
 - 2. 113N
 - 3. 115N
 - 4. $111 \times 113N$

Question ID : 26433090316
Status : Answered
Chosen Option : 2

Q.12 A shopkeeper is selling a gift packet of fruits in which he is mixing apples and mangoes. The packet contains total of 12 kg fruits at an average rate of ₹100 per kg. In the packet there are 8 kg of apples at the rate of ₹90 per kg, while there are 4 kg of mangoes at the rate of ₹X per kg. Find the value of 'X'.
Note: All other charges are to be ignored for packing.

- Ans
- 1. 95
 - 2. 100
 - 3. 120
 - 4. 110

Question ID : 26433082498
Status : Answered
Chosen Option : 3

Q.13 The total surface area of a sphere is 22176 cm^2 . The diameter of the sphere is:

(use $\pi = \frac{22}{7}$)

- Ans
- 1. 42 cm
 - 2. 84 cm
 - 3. 24 cm
 - 4. 21 cm

Question ID : 26433087407
Status : Answered
Chosen Option : 2

Q.14 A sum of money becomes Rs.4,900 in 3 years and Rs.6,400 in 5 years on compound interest, compounded annually. Find the rate of interest p.a.

- Ans
- 1. $11\frac{2}{7}\%$
 - 2. $12\frac{2}{7}\%$
 - 3. $14\frac{2}{7}\%$
 - 4. $13\frac{2}{7}\%$

Question ID : 26433082979
Status : Answered
Chosen Option : 3

Q.15 If 12 men can build a wall 60 metres long in 5 days, then what length of a similar wall can be built by 24 men in 2 days?

- Ans
- 1. 48 metres
 - 2. 44 metres
 - 3. 46 metres
 - 4. 42 metres

Question ID : 26433080122
Status : Answered
Chosen Option : 1

Q.16 Ramesh was receiving two offers on a book with a marked price of ₹800. Either two successive discounts of 20% each, or two successive discounts of 30% and 10%. How much more must Ramesh have saved if he chose the superior scheme over the other?

- Ans
- 1. ₹6
 - 2. ₹8
 - 3. ₹16
 - 4. ₹20

Question ID : 26433076328
Status : Answered
Chosen Option : 2

Q.17 The profit percentage made on an item sold for Rs.1,920 is equal to the loss percentage made on selling the same item for Rs.1,280. What should the item be sold for in order to make a 25% profit?

- Ans
- 1. Rs.1,940
 - 2. Rs.2,020
 - 3. Rs.2,000
 - 4. Rs.1,960

Question ID : 26433075847
Status : Answered
Chosen Option : 3

Q.18 When the price of a Bluetooth earphone is increased by 12%, its sale(number of Bluetooth earphones) is reduced by 20%. What is the net impact on its revenue?

- Ans
- 1. 14.0% decrement
 - 2. 10.4% increment
 - 3. 14.0% increment
 - 4. 10.4% decrement

Question ID : 26433080294
Status : Answered
Chosen Option : 4

Q.19 An electronic shop is giving 20% discount on the purchase of any electronic device having price ₹80,000 or above, 16% discount on the items priced between ₹50,000 and ₹79,999, 10% discount on items ranging from ₹20,000 to ₹49,999, and 3% discount on purchase of any mobile accessories such as mobile covers, earphones, chargers, etc. As per terms and conditions, all these discounts are independent and are offered only on the basis of price range. Ajay bought a mobile of price ₹40,000, a laptop of ₹90,000, and a mobile cover of ₹400. How much total discount did he get?

- Ans
- 1. ₹22,002
 - 2. ₹21,012
 - 3. ₹22,120
 - 4. ₹22,012

Question ID : 26433082504
Status : Answered
Chosen Option : 4

Q.20 In 90 litres of a mixture of milk and water, the ratio of milk and water is 4 : 1. How much water should be added in the mixture so that the ratio of milk to water becomes 3 : 1?

- Ans
- 1. 5.5 litres
 - 2. 6.5 litres
 - 3. 7 litres
 - 4. 6 litres

Question ID : 26433076189
Status : Answered
Chosen Option : 4

Section : Part-D-English

Q.1 Select the correct spelling of the word to fill in the blank in the given sentence.

Trouble and disease give us bad _____.

- Ans
- 1. expereinces
 - 2. xperiences
 - 3. xpreiences
 - 4. experiences

Question ID : 26433084768
Status : Answered
Chosen Option : 4

Q.2 Identify the MISSPELT word in the following sentence.

In our school, innovative and effective academic and evaluation strategies and intervantions are needed.

- Ans
- 1. strategies
 - 2. innovative
 - 3. intervantions
 - 4. effective

Question ID : 26433073660
Status : Answered
Chosen Option : 3

Q.3 Select the most appropriate option that can substitute the underlined segment in the given sentence.

Travel on a hot dusty train gives me no pleasure.

- Ans
- 1. Travelling at a
 - 2. Travel in a
 - 3. Travels on a
 - 4. Travelling on a

Question ID : 264330102395
Status : Answered
Chosen Option : 4

Q.4 Complete the sentence by choosing the most appropriate synonym of the underlined word.

If the answer is false, it is _____.

- Ans
- 1. genuine
 - 2. correct
 - 3. right
 - 4. untrue

Question ID : 26433088863
Status : Answered
Chosen Option : 4

Q.5 The following sentence has been split into four segments. Identify the segment that contains a grammatical error.

I visit my school / once a year / to meeting / my former teachers.

- Ans
- 1. my former teachers
 - 2. I visit my school
 - 3. once a year
 - 4. to meeting

Question ID : 264330108880
Status : Answered
Chosen Option : 4

Q.6 Select the most appropriate meaning of the underlined idiom that can be substituted in the following sentence.

I am at sea after listening to the arguments.

- Ans
- 1. sailing on the seas
 - 2. perplexed
 - 3. stuck in the seas
 - 4. totally relaxed

Question ID : 26433072235
Status : Answered
Chosen Option : 4

Q.7 Select the most appropriate synonym of the given word.

Slack

- Ans
- 1. Hyperactive
 - 2. Provocation
 - 3. Tight
 - 4. Inactive

Question ID : 26433088760
Status : Answered
Chosen Option : 4

Q.8 Select the correct option to substitute the underlined segment in the given sentence. If no substitution is required, select 'No substitution'.

One must do his work.

- Ans
- 1. her work
 - 2. their work
 - 3. one's work
 - 4. No substitution

Question ID : 26433090809
Status : Answered
Chosen Option : 3

Q.9 Select the most appropriate idiom for the underlined segment.
I thought I finished my work but I realised that all of my work is faulty. I have to start it over again.

- Ans
- 1. break new ground
 - 2. get a pat on the back
 - 3. go back to the drawing board
 - 4. break the back of something

Question ID : 264330100298
Status : Answered
Chosen Option : 3

Q.10 Select the most appropriate synonym of the word given in brackets and complete the sentence.

The weather is _____ (gloomy) and windy.

- Ans
- 1. bright
 - 2. jovial
 - 3. cloudy
 - 4. shiny

Question ID : 26433089400
Status : Answered
Chosen Option : 3

Q.11 Select the most appropriate option that can substitute the underlined segment in the given sentence.

She heard a loud humming noise and guess that it is being an aeroplane.

- Ans
- 1. to guess that it is being the aeroplane
 - 2. guessed that it was an aeroplane
 - 3. guessing that it were aeroplane
 - 4. has guessed that it is aeroplane

Question ID : 26433092289
Status : Answered
Chosen Option : 2

Q.12 Select the most appropriate homonym to fill in the blank.

I had to keep very _____ when the photographer was taking my picture.

- Ans
- 1. lid
 - 2. chum
 - 3. shrill
 - 4. still

Question ID : 26433088788
Status : Answered
Chosen Option : 4

Q.13 Select the most appropriate ANTONYM of the word given in the bracket to fill in the blank.

If a person commits a crime with (malice) _____, they did it on purpose.

- Ans
- 1. rancour
 - 2. goodwill
 - 3. disdain
 - 4. disgust

Question ID : 26433059598
Status : Answered
Chosen Option : 3

Q.14 Select the most appropriate synonym for the underlined word in the given sentence.

He was brusque and candid in the interview.

- Ans
- 1. abrupt
 - 2. vociferous
 - 3. brave
 - 4. pursue

Question ID : 26433072074
Status : Answered
Chosen Option : 2

Q.15 Select the most appropriate ANTONYM of the underlined word in the given sentence.

The engineers finally destroyed the ship to its original form.

- Ans
- 1. reversed
 - 2. restored
 - 3. started
 - 4. abolished

Question ID : 26433055484
Status : Answered
Chosen Option : 2

Comprehension:

In the following passage, some words have been deleted. Read the passage carefully and select the most appropriate option to fill in each blank.

And you could hardly call it a (1) _____ at all, because Uncle Bob held his (2) _____ as though he had hold of a shovel, and tried to scoop up every ball that came over the net, even those he should have left for Uncle Ted. And then he took off his (3) _____ and played in just his trousers and stockinged feet, and with his face split nearly in two by his grin, he started (4) _____ over the net, and playing on Arnold's side instead. And the ball would (5) _____ on the roof of the house, or land in the rambler roses and bring down a shower of petals, and getting it again Uncle Bob would shake down more petals all over himself, so they'd be in his hair.

SubQuestion No : 16

Q.16 Select the most appropriate option to fill in blank no. 1.

Ans 1. game

2. cork

3. racket

4. ball

Question ID : 26433092980

Status : Answered

Chosen Option : 1

Comprehension:

In the following passage, some words have been deleted. Read the passage carefully and select the most appropriate option to fill in each blank.

And you could hardly call it a (1) _____ at all, because Uncle Bob held his (2) _____ as though he had hold of a shovel, and tried to scoop up every ball that came over the net, even those he should have left for Uncle Ted. And then he took off his (3) _____ and played in just his trousers and stockinged feet, and with his face split nearly in two by his grin, he started (4) _____ over the net, and playing on Arnold's side instead. And the ball would (5) _____ on the roof of the house, or land in the rambler roses and bring down a shower of petals, and getting it again Uncle Bob would shake down more petals all over himself, so they'd be in his hair.

SubQuestion No : 17

Q.17 Select the most appropriate option to fill in blank no. 2.

Ans 1. softball

2. racket

3. ball

4. cork

Question ID : 26433092981

Status : Answered

Chosen Option : 2

Comprehension:

In the following passage, some words have been deleted. Read the passage carefully and select the most appropriate option to fill in each blank.

And you could hardly call it a (1) _____ at all, because Uncle Bob held his (2) _____ as though he had hold of a shovel, and tried to scoop up every ball that came over the net, even those he should have left for Uncle Ted. And then he took off his (3) _____ and played in just his trousers and stockinged feet, and with his face split nearly in two by his grin, he started (4) _____ over the net, and playing on Arnold's side instead. And the ball would (5) _____ on the roof of the house, or land in the rambler roses and bring down a shower of petals, and getting it again Uncle Bob would shake down more petals all over himself, so they'd be in his hair.

SubQuestion No : 18

Q.18 Select the most appropriate option to fill in blank no. 3.

- Ans
- 1. pants
 - 2. belt
 - 3. shirt
 - 4. trousers

Question ID : 26433092982

Status : Answered

Chosen Option : 3

Comprehension:

In the following passage, some words have been deleted. Read the passage carefully and select the most appropriate option to fill in each blank.

And you could hardly call it a (1) _____ at all, because Uncle Bob held his (2) _____ as though he had hold of a shovel, and tried to scoop up every ball that came over the net, even those he should have left for Uncle Ted. And then he took off his (3) _____ and played in just his trousers and stockinged feet, and with his face split nearly in two by his grin, he started (4) _____ over the net, and playing on Arnold's side instead. And the ball would (5) _____ on the roof of the house, or land in the rambler roses and bring down a shower of petals, and getting it again Uncle Bob would shake down more petals all over himself, so they'd be in his hair.

SubQuestion No : 19

Q.19 Select the most appropriate option to fill in blank no. 4.

- Ans
- 1. swimming
 - 2. slimming
 - 3. skipping
 - 4. jumping

Question ID : 26433092983

Status : Answered

Chosen Option : 4

Comprehension:

In the following passage, some words have been deleted. Read the passage carefully and select the most appropriate option to fill in each blank.

And you could hardly call it a (1) _____ at all, because Uncle Bob held his (2) _____ as though he had hold of a shovel, and tried to scoop up every ball that came over the net, even those he should have left for Uncle Ted. And then he took off his (3) _____ and played in just his trousers and stockinged feet, and with his face split nearly in two by his grin, he started (4) _____ over the net, and playing on Arnold's side instead. And the ball would (5) _____ on the roof of the house, or land in the rambler roses and bring down a shower of petals, and getting it again Uncle Bob would shake down more petals all over himself, so they'd be in his hair.

SubQuestion No : 20

Q.20 Select the most appropriate option to fill in blank no. 5.

Ans 1. bounce

2. flake

3. jump

4. leap

Question ID : 26433092984

Status : Answered

Chosen Option : 1

Section : Part-D-Hindi

Q.1 'चक्की के दो पाटों में कोई सबुत नहीं बचता।' इस वाक्य के निम्न में से किस शब्द में वर्तनी की अशुद्धि है?

Ans 1. बचता

2. पाटों

3. सबुत

4. चक्की

Question ID : 26433085066

Status : Not Answered

Chosen Option : --

Q.2 निम्नलिखित में से 'युद्ध' के लिए समानार्थी शब्द नहीं है-

Ans 1. रण

2. समर

3. संग्राम

4. सहचर

Question ID : 26433085082

Status : Not Answered

Chosen Option : --

Q.3 निम्नलिखित शब्द के सही पर्यायवाची शब्द का चयन विकल्पों में से कीजिए।
समुद्र

- Ans
- 1. सरिता
 - 2. सारंग
 - 3. पयोनिधि
 - 4. व्याल

Question ID : 26433066941
Status : Not Answered
Chosen Option : --

Q.4 'घाव पर नमक _____',
उपरोक्त मुहावरे में रिक्त स्थान के लिए उपयुक्त विकल्प का चयन कीजिए।

- Ans
- 1. मलना
 - 2. डालना
 - 3. छिड़कना
 - 4. रगड़ना

Question ID : 26433069685
Status : Not Answered
Chosen Option : --

Q.5 निम्नलिखित विकल्पों में से किस एक वाक्य में सर्वनाम के प्रयोग सम्बन्धी अशुद्धि है?

- Ans
- 1. ये मेरे पिता जी हैं।
 - 2. जो कुछ मेरा है, वह सब आपका है।
 - 3. मोहन तुम आकर क्षमा माँगेगा।
 - 4. तू बड़ा हो गया है, तेरी शादी करा दूँ।

Question ID : 26433062976
Status : Not Answered
Chosen Option : --

Q.6 'पंजाब _____।'।
उपर्युक्त वाक्य में रिक्त स्थान के लिए उपयुक्त विकल्प निम्न में से क्या होगा?

- Ans
- 1. से अभिप्राय पांच नदियों की धरती से है
 - 2. से अभिप्राय पांच धर्मों की धरती से है
 - 3. से अभिप्राय पांच ऋषियों की धरती से है
 - 4. से अभिप्राय पांच संतों की धरती से है

Question ID : 26433067050
Status : Not Answered
Chosen Option : --

Q.7 "वह व्यक्ति उनका अनुचर है।"
उक्त वाक्य में प्रयुक्त 'अनुचर' के स्थान पर उसके समानार्थी शब्द का प्रयोग निम्न में से किस वाक्य में नहीं किया गया है?

- Ans 1. वह व्यक्ति उनका निर्जर है।
 2. वह व्यक्ति उनका सेवक है।
 3. वह व्यक्ति उनका चाकर है।
 4. वह व्यक्ति उनका नौकर है।

Question ID : 26433067034
Status : Not Answered
Chosen Option : --

Q.8 निम्नलिखित में से शुद्ध वाक्य है-

- Ans 1. मोहन बहुत मेधावी छात्र है।
 2. मोहन बहुत माधव छात्रा है।
 3. मोहन बहत मेधावी छात्र है।
 4. मोहन बहुत मेधाव छात्र है।

Question ID : 26433080932
Status : Not Answered
Chosen Option : --

Q.9 निम्न में से कौन-सा शब्द समूह 'बादल' शब्द का पर्यायवाची समूह है?

- Ans 1. जलद, नीरद
 2. जलधर, नग
 3. क्षणदा, जलधर
 4. गिरी, ओद्रे

Question ID : 26433067073
Status : Not Answered
Chosen Option : --

Q.10 निम्नलिखित में से उस वाक्य का चयन कीजिए जिसमें 'अनिश्चयवाचक सर्वनाम' का शुद्ध प्रयोग किया गया है।

- Ans 1. आपने तो मेरी बात का कुछ का कुछ अर्थ निकाल लिया।
 2. आप कोई हैं जो दुखी होकर वन में भटक रहे हैं।
 3. यह कार्य कुछ नहीं कर सकता।
 4. मेरी समझ में कोई न कोई नहीं आ रहा है।

Question ID : 26433063007
Status : Not Answered
Chosen Option : --

Q.11 'अनुचित बात के लिए आग्रह', वाक्यांश के लिए एक शब्द _____ है।

- Ans
- 1. सत्याग्रह
 - 2. दुस्साहस
 - 3. दुराग्रही
 - 4. दुराग्रह

Question ID : 26433062937
Status : Not Answered
Chosen Option : --

Q.12 'डंके की _____ पर कहना'
उक्त मुहावरे में रिक्त स्थान की पूर्ति उचित शब्द द्वारा कीजिए।

- Ans
- 1. टंकार
 - 2. आवाज
 - 3. चोट
 - 4. मार

Question ID : 26433069690
Status : Not Answered
Chosen Option : --

Q.13 निम्नलिखित वाक्य के रेखांकित शब्द के स्थान पर सर्वोचित विकल्प का चयन कीजिए।
उसने उपाय किया ताकि परीक्षा उत्तीर्ण कर सके।

- Ans
- 1. तप
 - 2. अनुष्ठान
 - 3. सहयोग
 - 4. परिश्रम

Question ID : 26433084963
Status : Not Answered
Chosen Option : --

Q.14 निम्न वाक्यांश के लिए उपयुक्त एक शब्द का चयन विकल्पों में से कीजिए।
भविष्य में होने वाला

- Ans
- 1. क्रेता
 - 2. अपूर्व
 - 3. भावी
 - 4. वक्ता

Question ID : 26433070093
Status : Not Answered
Chosen Option : --

Q.15 'आज की कथा को ध्यान से सुननी चाहिए।' इस वाक्य में अशुद्ध शब्द है-

- Ans 1. सुननी
 2. चाहिए
 3. कथा
 4. ध्यान

Question ID : 26433066798

Status : Not Answered

Chosen Option : --

Comprehension:

प्रश्न संख्या 1-5 के उत्तर निम्न अवतरण के आधार पर दीजिए।
भारतीय मनीषा ने जिस प्रकार संतोष करने के लिए हमें सीख दी है, उसी तरह (1). _____ करने के लिए भी कहा है। चाणक्य के अनुसार हमें इन तीन उपक्रमों में संतोष नहीं करना चाहिए- त्रिषु नैव कर्तव्यः विद्यायां जप दानयोः अर्थात् विद्यार्जन में कभी संतोष नहीं करना चाहिए कि बस, बहुत ज्ञान (2). _____ कर लिया इसी तरह जप और दान करने में भी (3). _____ नहीं करना चाहिए। वैसे संतोष करने के लिए तो कहा गया है- जब आवे संतोष धन, सब धन धुरि समान। हमें जो प्राप्त हो उसमें ही संतोष करना चाहिए- 'साईं इतना दीजिए जामे कुटुंब समाय मैं भी भूखा न रहूँ, (4). _____ न भूखा जाए'। आज के मनुष्य की सांसारिकता में बढ़ती लिप्तता, वैश्विक बाज़ारवाद और भौतिकता की चकाचौंध के कारण संत्रास, कुंठा और असंतोष दिन-प्रतिदिन बढ़ता ही जा रहा है। इसी असंतोष को दूर करने के लिए संतोषी बनना (5). _____ हो गया है।

SubQuestion No : 16

Q.16 रिक्त स्थान (1) के लिए सर्वाधिक उपयुक्त शब्द इनमें से कौन सा होगा?

- Ans 1. प्रेम
 2. लालच
 3. गुस्सा
 4. असंतोष

Question ID : 26433092226

Status : Not Answered

Chosen Option : --

Comprehension:

प्रश्न संख्या 1-5 के उत्तर निम्न अवतरण के आधार पर दीजिए।
भारतीय मनीषा ने जिस प्रकार संतोष करने के लिए हमें सीख दी है, उसी तरह (1). _____ करने के लिए भी कहा है। चाणक्य के अनुसार हमें इन तीन उपक्रमों में संतोष नहीं करना चाहिए- त्रिषु नैव कर्तव्यः विद्यायां जप दानयोः अर्थात् विद्यार्जन में कभी संतोष नहीं करना चाहिए कि बस, बहुत ज्ञान (2). _____ कर लिया इसी तरह जप और दान करने में भी (3). _____ नहीं करना चाहिए। वैसे संतोष करने के लिए तो कहा गया है- जब आवे संतोष धन, सब धन धुरि समान। हमें जो प्राप्त हो उसमें ही संतोष करना चाहिए- 'साईं इतना दीजिए जामे कुटुंब समाय मैं भी भूखा न रहूँ, (4). _____ न भूखा जाए'। आज के मनुष्य की सांसारिकता में बढ़ती लिप्तता, वैश्विक बाज़ारवाद और भौतिकता की चकाचौंध के कारण संत्रास, कुंठा और असंतोष दिन-प्रतिदिन बढ़ता ही जा रहा है। इसी असंतोष को दूर करने के लिए संतोषी बनना (5). _____ हो गया है।

SubQuestion No : 17

Q.17 रिक्त स्थान (2) के लिए सर्वाधिक उपयुक्त शब्द इनमें से कौन सा होगा?

- Ans 1. दान
 2. अर्जित
 3. इकठ्ठा
 4. प्रदान

Question ID : 26433092227

Status : Not Answered

Chosen Option : --

Comprehension:

प्रश्न संख्या 1-5 के उत्तर निम्न अवतरण के आधार पर दीजिए।
भारतीय मनीषा ने जिस प्रकार संतोष करने के लिए हमें सीख दी है, उसी तरह (1). _____ करने के लिए भी कहा है। चाणक्य के अनुसार हमें इन तीन उपक्रमों में संतोष नहीं करना चाहिए- त्रिषु नैव कर्तव्यः विद्यायां जप दानयोः अर्थात् विद्यार्जन में कभी संतोष नहीं करना चाहिए कि बस, बहुत ज्ञान (2). _____ कर लिया इसी तरह जप और दान करने में भी (3). _____ नहीं करना चाहिए। वैसे संतोष करने के लिए तो कहा गया है- जब आवे संतोष धन, सब धन धुरि समान। हमें जो प्राप्त हो उसमें ही संतोष करना चाहिए- 'साई इतना दीजिए जामे कुटुंब समाय मैं भी भूखा न रहूँ, (4). _____ न भूखा जाए'। आज के मनुष्य की सांसारिकता में बढ़ती लिप्तता, वैश्विक बाज़ारवाद और भौतिकता की चकाचौंध के कारण संत्रास, कुंठा और असंतोष दिन-प्रतिदिन बढ़ता ही जा रहा है। इसी असंतोष को दूर करने के लिए संतोषी बनना (5). _____ हो गया है।

SubQuestion No : 18

Q.18 रिक्त स्थान (3) के लिए सर्वाधिक उपयुक्त शब्द इनमें से कौन सा होगा?

- Ans 1. अधिक
 2. संतोष
 3. कम
 4. गुस्सा

Question ID : 26433092228

Status : Not Answered

Chosen Option : --

Comprehension:

प्रश्न संख्या 1-5 के उत्तर निम्न अवतरण के आधार पर दीजिए।
भारतीय मनीषा ने जिस प्रकार संतोष करने के लिए हमें सीख दी है, उसी तरह (1). _____ करने के लिए भी कहा है। चाणक्य के अनुसार हमें इन तीन उपक्रमों में संतोष नहीं करना चाहिए- त्रिषु नैव कर्तव्यः विद्यायां जप दानयोः अर्थात् विद्यार्जन में कभी संतोष नहीं करना चाहिए कि बस, बहुत ज्ञान (2). _____ कर लिया इसी तरह जप और दान करने में भी (3). _____ नहीं करना चाहिए। वैसे संतोष करने के लिए तो कहा गया है- जब आवे संतोष धन, सब धन धुरि समान। हमें जो प्राप्त हो उसमें ही संतोष करना चाहिए- 'साई इतना दीजिए जामे कुटुंब समाय मैं भी भूखा न रहूँ, (4). _____ न भूखा जाए'। आज के मनुष्य की सांसारिकता में बढ़ती लिप्तता, वैश्विक बाज़ारवाद और भौतिकता की चकाचौंध के कारण संत्रास, कुंठा और असंतोष दिन-प्रतिदिन बढ़ता ही जा रहा है। इसी असंतोष को दूर करने के लिए संतोषी बनना (5). _____ हो गया है।

SubQuestion No : 19

Q.19 रिक्त स्थान (4) के लिए सर्वाधिक उपयुक्त शब्द इनमें से कौन सा होगा?

- Ans 1. शत्रु
 2. राजा
 3. मित्र
 4. साधु

Question ID : 26433092229

Status : Not Answered

Chosen Option : --

Comprehension:

प्रश्न संख्या 1-5 के उत्तर निम्न अवतरण के आधार पर दीजिए।
भारतीय मनीषा ने जिस प्रकार संतोष करने के लिए हमें सीख दी है, उसी तरह (1). _____ करने के लिए भी कहा है। चाणक्य के अनुसार हमें इन तीन उपक्रमों में संतोष नहीं करना चाहिए- त्रिषु नैव कर्तव्यः विद्यायां जप दानयोः अर्थात् विद्यार्जन में कभी संतोष नहीं करना चाहिए कि बस, बहुत ज्ञान (2). _____ कर लिया इसी तरह जप और दान करने में भी (3). _____ नहीं करना चाहिए। जैसे संतोष करने के लिए तो कहा गया है- जब आवे संतोष धन, सब धन धुरि समान। हमें जो प्राप्त हो उसमें ही संतोष करना चाहिए- 'सांई इतना दीजिए जामे कुटुंब समाय मैं भी भूखा न रहूँ, (4). _____ न भूखा जाए'। आज के मनुष्य की सांसारिकता में बढ़ती लिप्तता, वैश्विक बाज़ारवाद और भौतिकता की चकाचौंध के कारण संत्रास, कुंठा और असंतोष दिन-प्रतिदिन बढ़ता ही जा रहा है। इसी असंतोष को दूर करने के लिए संतोषी बनना (5). _____ हो गया है।

SubQuestion No : 20

Q.20 रिक्त स्थान (5) के लिए सर्वाधिक उपयुक्त शब्द इनमें से कौन सा होगा?

- Ans
- 1. कम
 - 2. अधिक
 - 3. नहीं
 - 4. आवश्यक

Question ID : 26433092230

Status : Not Answered

Chosen Option : --

WWW.GOV TJOB SALE .IN