

# Constable GD in CAPFs SSF Rifleman GD in Assam Rifles and Sepoy in NCB Examination 2022

Roll Number	<a href="http://www.govtjobsalert.in">www.govtjobsalert.in</a>
Candidate Name	<a href="http://www.govtjobsalert.in">www.govtjobsalert.in</a>
Venue Name	Dr. Ghanshyam Singh College Of Education
Exam Date	06/02/2023
Exam Time	9:00 AM - 10:00 AM
Subject	Constable GD Examination 2022

## Section : Part-A-General Intelligence and Reasoning

Q.1 In a certain code language, 'FIRST' is coded as 79191921 and 'TIME' is coded as 219145. How will 'BETTER' be coded in that language?

- Ans  1. 352120618  
 2. 262021519  
 3. 252020518  
 4. 362121619

Question ID : 26433074512  
Status : Answered  
Chosen Option : 1

Q.2 'A + B' means 'A is the father of B'  
'A - B' means 'A is the wife of B'  
'A × B' means 'A is the brother of B'  
'A ÷ B' means 'A is the daughter of B'  
As per which of the following expressions 'S is the wife of P'?

- Ans  1.  $S + Q \times R + P$   
 2.  $P + Q \times R + S$   
 3.  $S \times Q + R + P$   
 4.  $S \times Q + R \times P$

Question ID : 26433082760  
Status : Answered  
Chosen Option : 2

Q.3 Which of the mathematical signs should be interchanged in the below equation to make it mathematically correct?  
 $360 \times 8 - 320 + 72 \div 5 = 85$

- Ans  1. - and +  
 2. × and +  
 3. + and ×  
 4. + and ÷

Question ID : 264330114173  
Status : Answered  
Chosen Option : 1

Q.4 A, B, C, D, E, F and G are sitting in a row facing North. G is to the immediate right of E. G is sitting to the extreme right of the row. A is sitting to the third place from the left of E. B is sitting to the immediate right of A. C is sitting to the right of B. D is sitting to the immediate left of A. Who is sitting to the extreme left of the row?

- Ans
- 1. A
  - 2. F
  - 3. D
  - 4. G

Question ID : 26433074624  
Status : Answered  
Chosen Option : 2

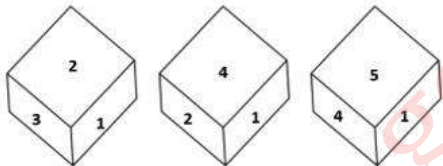
Q.5 Which two signs should be interchanged to make the below equation mathematically correct?

$$24 \times 108 - 36 \div 6 + 18 = 84$$

- Ans
- 1. + and ×
  - 2. ÷ and –
  - 3. – and +
  - 4. + and ÷

Question ID : 264330117550  
Status : Not Answered  
Chosen Option : --

Q.6 Three different positions of the same dice are shown. Find the number on the face opposite the face showing '6'.



- Ans
- 1. 3
  - 2. 5
  - 3. 1
  - 4. 2

Question ID : 26433082888  
Status : Answered  
Chosen Option : 3

**Q.7** Which number will replace the question mark (?) in the following series?  
18, 20, ?, 128, 514, 2572

Ans  1. 42

2. 40

3. 22

4. 80

Question ID : 26433068968

Status : Not Answered

Chosen Option : --

**Q.8** Select the option that is related to the fifth number in the same way as the second number is related to the first number and the fourth number is related to the third number.

12 : 3 :: 28 : 7 :: 32 : ?

Ans  1. 8

2. 12

3. 11

4. 6

Question ID : 26433069420

Status : Answered

Chosen Option : 1

**Q.9** Which option represents the correct order of the given words as they would appear in the English dictionary?

1 Broken

2 Bread

3 Bridge

4 Bride

5 Broom

Ans  1. 2,4,3,1,5

2. 4,5,2,1,3

3. 2,4,5,1,3

4. 4,2,3,5,1

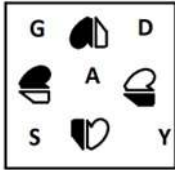
Question ID : 26433069256

Status : Answered

Chosen Option : 1

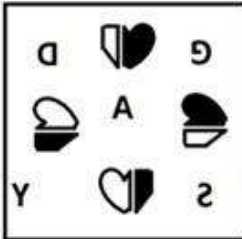
Q.10 Which of the following figures is the exact mirror image of the given problem figure when the mirror is held at the right side?

Problem figure:

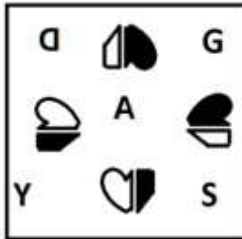


Ans

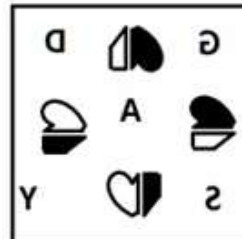
X 1.



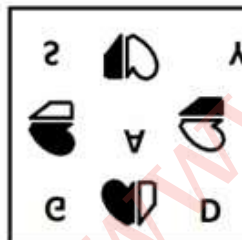
X 2.



✓ 3.



X 4.




Question ID : 26433087084

Status : Answered


Chosen Option : 3

Q.11 Select the figure that will replace the question mark (?) in the following figure series.




Ans

✗ 1.



✓ 2.



✗ 3.



✗ 4.



Question ID : 26433070418  
Status : Answered  
Chosen Option : 2

Q.12 Amir, Bunty, Leslie, Pradeep, Eshan, Faiz, Gaurav and Harish are sitting around a square table facing the centre of the table. Some of them are sitting at the corners, while some are sitting at the exact centre of the sides. Pradeep sits third to the right of Gaurav. Pradeep sits at one of the corners. Bunty sits second to the right of Faiz. Faiz does not sit at any of the corners. Bunty is not an immediate neighbour of Pradeep. Harish is an immediate neighbour of Amir. Harish does not sit at any of the middle of the sides. Only one person sits between Harish and Leslie.  
Who sits third to the right of Amir?

- Ans  1. Eshan  
 2. Leslie  
 3. Bunty  
 4. Gaurav

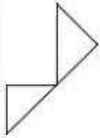
Question ID : 26433082292  
Status : Answered  
Chosen Option : 1

Q.13 उस विकल्प का चयन कीजिए जो तीसरे शब्द से उसी प्रकार संबंधित है जिस प्रकार दूसरा शब्द पहले शब्द से संबंधित है। (शब्दों को अर्थपूर्ण शब्दों के रूप में मानना है और उन्हें शब्द में अक्षरों/व्यंजनों/स्वरों की संख्या के आधार पर एक-दूसरे से संबंधित नहीं करना है।)  
यहूदी : तौरात :: ईसाई : ?

- Ans  1. चर्च  
 2. ओल्ड टेस्टामेंट  
 3. न्यू टेस्टामेंट  
 4. बाइबिल

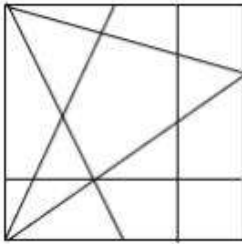
Question ID : 26433067373  
Status : Not Answered  
Chosen Option : --

Q.14 Select the option in which the given figure is embedded (rotation is NOT allowed).

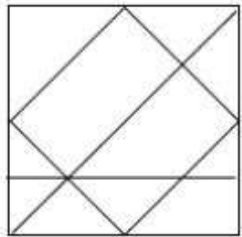


Ans

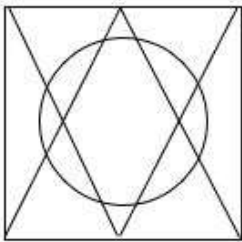
✗ 1.



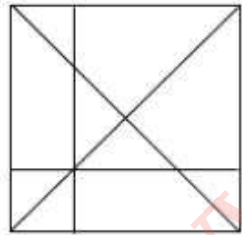
✗ 2.



✗ 3.



✓ 4.



Question ID : 26433076720

Status : Answered

Chosen Option : 4

Q.15 Select the letter-cluster from among the given options that can replace the question mark (?) in the following series.  
KILT, OMPX, SQT B, WUXF, ?

Ans ✗ 1. AYBK

✓ 2. AYBJ

✗ 3. AZBJ

✗ 4. AZBK

Question ID : 26433079031

Status : Answered

Chosen Option : 2

Q.16 Select the option that is related to the third word in the same way as the second word is related to the first word. (The words must be considered as meaningful English words and must not be related to each other based on the number of letters/number of consonants/vowels in the word)

Ore : Metal :: Milk : ?

- Ans
- 1. Curd
  - 2. Cloth
  - 3. Cow
  - 4. Glass

Question ID : 26433082934  
Status : Answered  
Chosen Option : 1

Q.17 In a certain code language, 'HEALTH' is written as 'CGJJVN' and 'CHARGE' is written as 'CJEGIT'. How will 'HOURSE' be written as in that language?

- Ans
- 1. WQJGUT
  - 2. TNGDRQ
  - 3. GNSSTF
  - 4. VPIFTS

Question ID : 26433069640  
Status : Not Answered  
Chosen Option : --

Q.18 Read the given statements and conclusions carefully. Assuming that the information given in the statements is true, even if it appears to be at variance with commonly known facts, decide which of the given conclusions logically follows from the statements.

Statements:

All camels are fractals.

No fractal is a tube.

All pianos are camels.

Conclusions:

I. Some tubes are camels.

II. No piano is a tube.

- Ans
- 1. Either conclusion I or II follows
  - 2. Neither conclusion I nor II follows
  - 3. Only conclusion II follows
  - 4. Only conclusion I follows

Question ID : 26433089548  
Status : Answered  
Chosen Option : 3



**Q.19** Which of the following letter-clusters will replace the question mark (?) and complete the following letter-cluster series?  
HSU, JQO, LOI, NME, ?

- Ans
- 1. PLA
  - 2. PKB
  - 3. OKA
  - 4. PKA

Question ID : 26433067275  
Status : Answered  
Chosen Option : 3

**Q.20** Which of the following numbers will replace the question mark (?) in the given series?  
1995, 1895, 1695, 1395, ?

- Ans
- 1. 1005
  - 2. 885
  - 3. 995
  - 4. 1195

Question ID : 26433085352  
Status : Answered  
Chosen Option : 3

Section : Part-B-General Knowledge and General awareness

**Q.1** Who was the flag bearer for India for the opening ceremony of the Asian Games 2018?

- Ans
- 1. Rani Rampal
  - 2. Sanjeev Rajput
  - 3. Neeraj Chopra
  - 4. Deepak Kumar

Question ID : 264330115907  
Status : Not Answered  
Chosen Option : --

**Q.2** Who took over as the Director of Intelligence Bureau on 24 June 2022?

- Ans
- 1. Rajiv Jain
  - 2. Tapan Kumar Deka
  - 3. Arvind Kumar
  - 4. Dineshwar Sharma

Question ID : 264330115040  
Status : Answered  
Chosen Option : 3

Q.3 Yuki Bhambri is related to which of the following game?

- Ans  1. Cricket  
 2. Baseball  
 3. Badminton  
 4. Tennis

Question ID : 264330116297  
Status : Not Answered  
Chosen Option : --

Q.4 Which among the following instruments is used to measure the humidity of the air or a gas?

- Ans  1. Hygrometer  
 2. Anemometer  
 3. Bolometer  
 4. Hydrometer

Question ID : 264330115140  
Status : Answered  
Chosen Option : 4

Q.5 Rajagriha was the capital of Magadha for several years. Later the capital was shifted to \_\_\_\_\_.

- Ans  1. Ujjain  
 2. Kanchipuram  
 3. Taxila  
 4. Pataliputra

Question ID : 264330115438  
Status : Answered  
Chosen Option : 4

Q.6 Only Indian citizen above the age of \_\_\_\_\_ years are eligible for the appointment of the Governor of a State.

- Ans  1. 28  
 2. 40  
 3. 25  
 4. 35

Question ID : 26433086854  
Status : Answered  
Chosen Option : 4

Q.7 Which of the following is NOT a freshwater lake in India?

- Ans
- 1. Bhimtal
  - 2. Loktak
  - 3. Barapani
  - 4. Sambhar

Question ID : 264330116008  
Status : Not Answered  
Chosen Option : --

Q.8 Which of the following folk dances is associated with the state of Tamil Nadu?

- Ans
- 1. Ghapal
  - 2. Lavani
  - 3. Bhand
  - 4. Kummi

Question ID : 26433086716  
Status : Answered  
Chosen Option : 3

Q.9 \_\_\_\_\_ was passed in 2019 and as a result of which the security of Prime Minister of India and other former Prime Ministers was restricted.

- Ans
- 1. SUDDEN PROTECTION GROUP (AMENDMENT) ACT, 2019
  - 2. SPECIAL PROTECTION GROUP (AMENDMENT) ACT, 2019
  - 3. SECURITY PROTECTION GROUP (AMENDMENT) ACT, 2019
  - 4. SPECIAL PROTOCOL GROUP (AMENDMENT) ACT, 2019

Question ID : 264330116226  
Status : Answered  
Chosen Option : 2

Q.10 Pick the odd one out (Hint: textile industry)

- Ans
- 1. electrical industry
  - 2. silk industry
  - 3. cotton industry
  - 4. woollen industry

Question ID : 264330115584  
Status : Answered  
Chosen Option : 1

Q.11 Darshana Jhaveri received the Padma Shri for which dance form?

- Ans
- 1. Manipuri
  - 2. Lavani
  - 3. Kathakali
  - 4. Kathak

Question ID : 264330115880  
Status : Not Answered  
Chosen Option : --

Q.12 Total value of final goods and services produced \_\_\_\_\_ domestic territory during an accounting year is domestic income.

- Ans  1. within  
 2. away from  
 3. other than  
 4. outside

Question ID : 264330115337  
Status : Answered  
Chosen Option : 1

Q.13 Which article of the Constitution of India abolishes the concept of 'untouchability' and prohibits its practice in any shape or form?

- Ans  1. 16  
 2. 15  
 3. 17  
 4. 14

Question ID : 264330115638  
Status : Answered  
Chosen Option : 3

Q.14 Who among the following was sworn in as chief minister of Goa in March 2022?

- Ans  1. Pramod Sawant  
 2. Manohar Parrikar  
 3. Digambar Kamat  
 4. Sudin Dhavalikar

Question ID : 264330114892  
Status : Not Answered  
Chosen Option : --

Q.15 The famous Pushkar Fair of Rajasthan is held \_\_\_\_\_ in a year.

- Ans  1. two times  
 2. four times  
 3. three times  
 4. one time

Question ID : 264330115078  
Status : Not Answered  
Chosen Option : --

Q.16 The Fifth five year plan of India, was focused on :

- Ans
- 1. Centralization of states
  - 2. Waste Management
  - 3. Removal of poverty
  - 4. Removal of forests

Question ID : 264330115358  
Status : Answered  
Chosen Option : 3

Q.17 At independence, about 75 percent of India's population was dependent on \_\_\_\_\_.

- Ans
- 1. service
  - 2. manufacturing
  - 3. agricultural
  - 4. mining

Question ID : 26433054623  
Status : Answered  
Chosen Option : 3

Q.18 Who among the following was one of the "Lal-Bal-Pal" of the freedom movement of India?

- Ans
- 1. Chittaranjan Das
  - 2. Lala Lajpat Rai
  - 3. Lal Bahadur Shastri
  - 4. Jawaharlal Nehru

Question ID : 26433089897  
Status : Not Answered  
Chosen Option : --

Q.19 The species that \_\_\_\_\_ a bare area are called pioneer species.

- Ans
- 1. invade
  - 2. avoid
  - 3. stay in
  - 4. leave

Question ID : 264330115256  
Status : Not Answered  
Chosen Option : --

Q.20 What is the rank of India in terms of Human Development Index 2021?

Ans  1. 112

2. 132

3. 124

4. 154

Question ID : 26433092885  
Status : Answered  
Chosen Option : 2

Section : Part-C-Elementary Mathematics

Q.1 A store is running a 'Buy 4 Get 1 Free' promotion scheme. What is the net discount percentage?

Ans  1. 20%

2. 15%

3. 22%

4. 18.5%

Question ID : 26433065277  
Status : Answered  
Chosen Option : 1

Q.2 A train crosses another train running at the same speed in the opposite direction in 5 seconds. If the speed of the first train is doubled and the speed of the second train is halved, then the time taken by the trains to cross is \_\_\_\_\_ seconds.

Ans  1. 6

2. 4

3. 3

4. 5

Question ID : 26433071263  
Status : Not Answered  
Chosen Option : --

Q.3 What is the least value of  $x$  so that the 5-digit number  $725x3$  becomes divisible by 9?

Ans  1. 0

2. 6

3. 3

4. 1

Question ID : 26433074450  
Status : Answered  
Chosen Option : 4

Q.4 The cash difference between the selling prices of an article at a profit of 5% and 10% is Rs.5.

The ratio of the two selling prices is:

- Ans
- 1. 23 : 25
  - 2. 10 : 5
  - 3. 21 : 22
  - 4. 5 : 10

Question ID : 26433073008  
Status : Answered  
Chosen Option : 3

Q.5 The average marks of eight students is 7. It was found that marks of one student was taken as 10 instead of 6. Find the correct average.

- Ans
- 1. 6.5
  - 2. 7.5
  - 3. 7
  - 4. 6.8

Question ID : 26433074563  
Status : Answered  
Chosen Option : 1

Q.6 P and Q can complete a work in 8 days, Q and R in 12 days, and R and P in 15 days. How many days will R alone take to complete the work?

- Ans
- 1. 90
  - 2. 50
  - 3. 80
  - 4. 70

Question ID : 26433064932  
Status : Answered  
Chosen Option : 4

Q.7 Anish can do a piece of work in 88 days. Yug can do this work in 66 days. Anish started the work alone. After how many days should Yug join him, so that the work is finished in 44 days?

- Ans
- 1. 13 days
  - 2. 11 days
  - 3. 15 days
  - 4. 12 days

Question ID : 264330116910  
Status : Answered  
Chosen Option : 2

Q.8 If the diameter of a sphere is 14 cm, find its volume (take  $\pi = \frac{22}{7}$ ).

- Ans
- 1. 1437.33 cm<sup>3</sup>
  - 2. 2437.34 cm<sup>3</sup>
  - 3. 1637.13 cm<sup>3</sup>
  - 4. 1537.23 cm<sup>3</sup>

Question ID : 26433075249  
Status : Answered  
Chosen Option : 1

Q.9 A, B and C are three batsmen of a cricket team. Given is the ratio of the runs scored by them in a certain match.

A : B = 6 : 7 and B : C = 5 : 6. At the end of the match, A, B and C together scored 856 runs. The number of runs scored by B is:

- Ans
- 1. 265
  - 2. 280
  - 3. 216
  - 4. 224

Question ID : 26433074992  
Status : Answered  
Chosen Option : 2

Q.10 If each side of a cube is increased by 15%, then the volume of the cube will increase by : (Consider integral part only)

- Ans
- 1. 45%
  - 2. 52%
  - 3. 42%
  - 4. 35%

Question ID : 26433076264  
Status : Answered  
Chosen Option : 2

Q.11 A dealer buys an old car listed at ₹85,000 and gets successive discounts of 20% and 10%. He spends ₹3,800 on its repairs and sells it at a profit of 20%. Find the selling price of the car.

- Ans
- 1. ₹80,000
  - 2. ₹78,000
  - 3. ₹75,000
  - 4. ₹1,00,000

Question ID : 26433090287  
Status : Answered  
Chosen Option : 2



Q.12 Compound interest is charged on a certain sum for 2 years at 10% rate per annum, compounding annually. If the amount becomes ₹605, then the principal (in ₹) is:

- Ans
- 1. 600
  - 2. 550
  - 3. 500
  - 4. 650

Question ID : 26433075884  
Status : Answered  
Chosen Option : 3

Q.13 In a city, there are 12000 voters. Out of them, 30% voted for A, 25% voted for B and 40% voted for C. Determine the number of voters that did not vote for any of these three participants.

- Ans
- 1. 800
  - 2. 600
  - 3. 400
  - 4. 500

Question ID : 26433071303  
Status : Answered  
Chosen Option : 2

Q.14 After allowing a discount of 10% on its marked price, the value of a washing machine is Rs.28,800. If no discount is allowed, then the shopkeeper gains 25%. The cost price of the washing machine is:

- Ans
- 1. Rs.26,200
  - 2. Rs.28,000
  - 3. Rs.25,600
  - 4. Rs.26,600

Question ID : 26433074960  
Status : Answered  
Chosen Option : 3

Q.15 An equilateral triangle with side  $a$  units is cut on the vertices to make it a regular hexagon. What is the area of the hexagon?

- Ans
- 1.  $\frac{3a^2}{2\sqrt{3}}$  square units
  - 2.  $\frac{2a^2}{3\sqrt{3}}$  square units
  - 3.  $\frac{2a^2}{\sqrt{3}}$  square units
  - 4.  $\frac{a^2}{2\sqrt{3}}$  square units

Question ID : 26433071368  
Status : Answered  
Chosen Option : 1

Q.16 Two trains start at the same time from two stations and proceed toward each other at the speed of 40 km/h and 45 km/h, respectively. When they meet, it is found that one train has travelled 20 km more than the other. Find the distance between the two stations.

- Ans
- 1. 390 km
  - 2. 400 km
  - 3. 395 km
  - 4. 340 km

Question ID : 26433074967  
Status : Not Answered  
Chosen Option : --

Q.17 A, B and C invested ₹10,000, ₹15,000 and ₹20,000 respectively. After one year each of A and B invested ₹5,000 more, while C withdrew ₹10,000. What will be the ratio of profit of A, B and C after three years from starting?

- Ans
- 1. 8 : 11 : 8
  - 2. 2 : 2 : 4
  - 3. 2 : 3 : 4
  - 4. 8 : 8 : 11

Question ID : 26433082098  
Status : Answered  
Chosen Option : 1

Q.18 Simplify the following.

$$15.2625 - [5.2 + 0.25 \times (4.78 - 1.5 \times 3.02)]$$

- Ans
- 1. 9
  - 2. 10
  - 3. 8
  - 4. 11

Question ID : 26433076300  
Status : Answered  
Chosen Option : 2

Q.19 A train starts from station P, runs through stations Q, R, S, T and reaches station U. It stops at stations Q, R, S and T for 2 minutes, 4 minutes, 6 minutes, and 8 minutes, respectively. The distance between P and U is 50 km. What is the average speed of the train between stations P and U (in km/h), if it runs for 70 minutes between the stations, with uniform speed?

Ans

1.  $\frac{100}{6}$

2.  $\frac{110}{3}$

3.  $\frac{110}{4}$

4.  $\frac{100}{3}$

Question ID : 26433085431

Status : Not Answered

Chosen Option : --

Q.20 The compound interest on ₹10,00,000 at 3% per annum, compounding annually is ₹92,727. The number of years required for this is:

Ans  1. 4

2. 2

3. 5

4. 3

Question ID : 26433091993

Status : Not Answered

Chosen Option : --

Section : Part-D-English

Q.1 Select the most appropriate ANTONYM of the given word.

Diminish

Ans  1. Grow

2. Empty

3. Futile

4. Decline

Question ID : 26433090790

Status : Answered

Chosen Option : 1

**Q.2** Select the most appropriate synonym of the capitalised word in the given sentence.

We paid her a **FLEETING** visit before leaving the country.

- Ans  1. Brief  
 2. Final  
 3. Hasty  
 4. Last

Question ID : 26433088206  
Status : Answered  
Chosen Option : 4

**Q.3** Select the most appropriate meaning of the given idiom.

**Be riding high**

- Ans  1. To be in good mood  
 2. A person who is a pilot  
 3. A drunken person  
 4. To be very successful

Question ID : 26433085200  
Status : Not Answered  
Chosen Option : --

**Q.4** The following sentence has been split into four segments. Identify the segment that contains a grammatical error.

Very few animals / was / as faithful as / the dog.

- Ans  1. the dog  
 2. as faithful as  
 3. was  
 4. Very few animals

Question ID : 26433088100  
Status : Answered  
Chosen Option : 3

**Q.5** Select the most appropriate meaning of the given idiom.

**A vicious cycle**

- Ans  1. When one problem causes another problem  
 2. Series of fortunate events  
 3. Cyclical relationships  
 4. Victorious efforts

Question ID : 26433073998  
Status : Not Answered  
Chosen Option : --

**Q.6** Select the most appropriate option that can substitute the underlined segment in the given sentence. If there is no need to substitute it, select 'No substitution'.

Having a party is a bad idea because the neighbours are complain.

- Ans
- 1. No substitution
  - 2. because the neighbours will complain
  - 3. because the neighbours has been complaining
  - 4. because the neighbours had complained

Question ID : 264330101019  
Status : Answered  
Chosen Option : 3

**Q.7** Complete the sentence with the most appropriate synonym of the word in brackets.

The \_\_\_\_\_ (glowing) fireflies lit up the field like city lights at night.

- Ans
- 1. devious
  - 2. dazzling
  - 3. furious
  - 4. gracious

Question ID : 26433089752  
Status : Answered  
Chosen Option : 4

**Q.8** Select the most appropriate option to fill in the blank.

History is not only a very vast subject \_\_\_\_\_ very intriguing.

- Ans
- 1. but also
  - 2. besides
  - 3. and
  - 4. also

Question ID : 26433071814  
Status : Answered  
Chosen Option : 4

**Q.9** Select the most appropriate synonym of the given word.

**Antagonist**

- Ans
- 1. Evil
  - 2. Adversary
  - 3. Nerd
  - 4. Amiable

Question ID : 26433072346  
Status : Not Answered  
Chosen Option : --

**Q.10** Select the most appropriate **ANTONYM** of the given word.  
**Cruel**

- Ans**  1. Sympathetic  
 2. Sensible  
 3. Unkind  
 4. Derogatory

Question ID : 26433093033  
Status : Answered  
Chosen Option : 2

**Q.11** The sentence given below has one misspelt word. Spot the **INCORRECTLY** spelt word and select its correct spelling.

There are some venmuous snakes which spit and hiss when they are cornered.

- Ans**  1. Venomous  
 2. Wenomos  
 3. Wenomous  
 4. Venomos

Question ID : 26433073559  
Status : Not Answered  
Chosen Option : --

**Q.12** Select the most appropriate option to fill in the blank.

He used to \_\_\_\_\_ letters to his parents from Bangalore.

- Ans**  1. wright  
 2. rite  
 3. write  
 4. right

Question ID : 26433084713  
Status : Answered  
Chosen Option : 3

**Q.13** Identify the correctly spelt sentence.

- Ans**  1. Egypt is famous for its pyramid.  
 2. Egypt is famous for its piramid.  
 3. Egypt is famous for its peryamid.  
 4. Egypt is famous for its peramid.

Question ID : 26433072838  
Status : Answered  
Chosen Option : 1

Q.14 Select the most appropriate option that can substitute the underlined segment in the given sentence. If there is no need to substitute it, select 'No substitution required'.

Rising prices are causing great concern on Indian economists at the present moment.

- Ans
- 1. are causing a great concern to Indian economists
  - 2. are causing great concern to Indian economists
  - 3. No substitution required
  - 4. are causing a great concern for Indian economists

Question ID : 26433089401

Status : Answered

Chosen Option : 4

Q.15 Select the most appropriate ANTONYM of the word given in the bracket to fill in the blank.

She looks like a young Sigourney Weaver and plays the (naive) \_\_\_\_\_ heroine well, if a little too credulous for my taste.

- Ans
- 1. childish
  - 2. sophisticated
  - 3. tricked
  - 4. careless

Question ID : 26433072046

Status : Answered

Chosen Option : 4

#### Comprehension:

In the following passage, some words have been deleted. Read the passage carefully and select the most appropriate option to fill in each blank.

A puzzle is a game, challenge, or toy that (1) \_\_\_\_\_ one's inventiveness or knowledge. The solver of a puzzle is supposed to (2) \_\_\_\_\_ parts together logically to arrive at the correct or enjoyable solution to the challenge. Crossword puzzles, word-search puzzles, number puzzles, relational puzzles, and logic puzzles are examples of puzzle (3) \_\_\_\_\_. Puzzles are frequently developed for fun purposes, but they may also result from (4) \_\_\_\_\_ mathematical or logical challenges. In such circumstances, its answer might make an important (5) \_\_\_\_\_ to mathematical research.

SubQuestion No : 16

Q.16 Select the most appropriate option to fill in blank no. 1.

- Ans
- 1. enjoys
  - 2. elicits
  - 3. invokes
  - 4. tests

Question ID : 26433058709

Status : Answered

Chosen Option : 4

**Comprehension:**

In the following passage, some words have been deleted. Read the passage carefully and select the most appropriate option to fill in each blank.

A puzzle is a game, challenge, or toy that (1)\_\_\_\_\_ one's inventiveness or knowledge. The solver of a puzzle is supposed to (2)\_\_\_\_\_ parts together logically to arrive at the correct or enjoyable solution to the challenge. Crossword puzzles, word-search puzzles, number puzzles, relational puzzles, and logic puzzles are examples of puzzle (3)\_\_\_\_\_. Puzzles are frequently developed for fun purposes, but they may also result from (4)\_\_\_\_\_ mathematical or logical challenges. In such circumstances, its answer might make an important (5)\_\_\_\_\_ to mathematical research.

**SubQuestion No : 17**

**Q.17 Select the most appropriate option to fill in blank no. 2.**

- Ans
- 1. manifest
  - 2. disintegrate
  - 3. fit
  - 4. paste

Question ID : 26433058710

Status : Answered

Chosen Option : 3

**Comprehension:**

In the following passage, some words have been deleted. Read the passage carefully and select the most appropriate option to fill in each blank.

A puzzle is a game, challenge, or toy that (1)\_\_\_\_\_ one's inventiveness or knowledge. The solver of a puzzle is supposed to (2)\_\_\_\_\_ parts together logically to arrive at the correct or enjoyable solution to the challenge. Crossword puzzles, word-search puzzles, number puzzles, relational puzzles, and logic puzzles are examples of puzzle (3)\_\_\_\_\_. Puzzles are frequently developed for fun purposes, but they may also result from (4)\_\_\_\_\_ mathematical or logical challenges. In such circumstances, its answer might make an important (5)\_\_\_\_\_ to mathematical research.

**SubQuestion No : 18**

**Q.18 Select the most appropriate option to fill in blank no. 3.**

- Ans
- 1. species
  - 2. genres
  - 3. attachment
  - 4. aggregates

Question ID : 26433058711

Status : Answered

Chosen Option : 4



**Comprehension:**

In the following passage, some words have been deleted. Read the passage carefully and select the most appropriate option to fill in each blank.

A puzzle is a game, challenge, or toy that (1)\_\_\_\_\_ one's inventiveness or knowledge. The solver of a puzzle is supposed to (2)\_\_\_\_\_ parts together logically to arrive at the correct or enjoyable solution to the challenge. Crossword puzzles, word-search puzzles, number puzzles, relational puzzles, and logic puzzles are examples of puzzle (3)\_\_\_\_\_. Puzzles are frequently developed for fun purposes, but they may also result from (4)\_\_\_\_\_ mathematical or logical challenges. In such circumstances, its answer might make an important (5)\_\_\_\_\_ to mathematical research.

**SubQuestion No : 19**

**Q.19** Select the most appropriate option to fill in blank no. 4.

- Ans  1. servile  
 2. subsidiary  
 3. significant  
 4. subordinate

Question ID : 26433058712

Status : Answered

Chosen Option : 3

**Comprehension:**

In the following passage, some words have been deleted. Read the passage carefully and select the most appropriate option to fill in each blank.

A puzzle is a game, challenge, or toy that (1)\_\_\_\_\_ one's inventiveness or knowledge. The solver of a puzzle is supposed to (2)\_\_\_\_\_ parts together logically to arrive at the correct or enjoyable solution to the challenge. Crossword puzzles, word-search puzzles, number puzzles, relational puzzles, and logic puzzles are examples of puzzle (3)\_\_\_\_\_. Puzzles are frequently developed for fun purposes, but they may also result from (4)\_\_\_\_\_ mathematical or logical challenges. In such circumstances, its answer might make an important (5)\_\_\_\_\_ to mathematical research.

**SubQuestion No : 20**

**Q.20** Select the most appropriate option to fill in blank no. 5.

- Ans  1. deviation  
 2. annexation  
 3. inspection  
 4. addition

Question ID : 26433058713

Status : Answered

Chosen Option : 2

Section : Part-D-Hindi

**Q.1** 'समाचार पत्रों में \_\_\_\_\_ के लिए सूचना प्रकाशित की जाती है।'  
उपरोक्त वाक्य के रिक्त स्थान की पूर्ति विकल्पों में से सर्वोचित शब्द के चयन द्वारा कीजिए।

- Ans  1. साधारण  
 2. आपके  
 3. हमारे  
 4. सर्वसाधारण

Question ID : 26433080898

Status : Not Answered

Chosen Option : --

Q.2 विकल्पों में दिया गया कौन सा शब्द निम्नलिखित वाक्य में रेखांकित शब्द का पर्यायवाची नहीं है?  
मेरा घर मेरे विद्यालय के 'पास' ही है।

- Ans
- 1. निकट
  - 2. सन्निकट
  - 3. समीप
  - 4. दूर

Question ID : 26433091335  
Status : Not Answered  
Chosen Option : --

Q.3 निम्न समानार्थी शब्दों में से उचित शब्द का प्रयोग करके दिए गए वाक्य के रिक्त स्थान की पूर्ति करें—  
विधानसभा का चुनाव एक निश्चित \_\_\_\_\_ के लिए होता है।

- Ans
- 1. अवधि
  - 2. समय
  - 3. काल
  - 4. युग

Question ID : 26433062931  
Status : Not Answered  
Chosen Option : --

Q.4 'कुत्ता रेंकता है।' इस वाक्य में रेखांकित शब्द के स्थान पर कौनसा शब्द उपयुक्त होगा?

- Ans
- 1. रम्भाता
  - 2. चिंघाड़ता
  - 3. दहाड़ता
  - 4. भौंकता

Question ID : 26433062200  
Status : Not Answered  
Chosen Option : --

Q.5 'अपना हाथ जगन्नाथ' मुहावरे का सही अर्थ क्या है?

- Ans
- 1. अपना काम खुद करने से भला होता है
  - 2. आशीर्वाद पाना
  - 3. आशीर्वाद देना
  - 4. किसी व्यक्ति के हाथ से सब अच्छा होना

Question ID : 26433062600  
Status : Not Answered  
Chosen Option : --

Q.6 'आँख में अंजन दांत में मंजन।' वाक्य में प्रयुक्त 'अंजन' शब्द निम्न में से किस अर्थ को व्यक्त करता है?

- Ans
- 1. लेप
  - 2. काजल
  - 3. माया
  - 4. रात

Question ID : 26433069729  
Status : Not Answered  
Chosen Option : --

Q.7 'जिसे मापा न जा सके'  
ऊपर दिए गए वाक्यांश के लिए एक शब्द क्या होगा?

- Ans
- 1. सीमित
  - 2. परिमाण
  - 3. अपरिमेय
  - 4. अप्रमेय

Question ID : 26433070053  
Status : Not Answered  
Chosen Option : --

Q.8 'सुकृति' का अर्थ है, पुण्य। आप 'सुकृती' के अर्थ से निम्न वाक्य पूर्ति कीजिए।  
\_\_\_\_\_ व्यक्ति ही मोक्ष प्राप्त करता है।

- Ans
- 1. सुंदर
  - 2. पुण्यवान
  - 3. पंडित
  - 4. अमीर

Question ID : 26433063079  
Status : Not Answered  
Chosen Option : --

Q.9 दिए गये वाक्यांश के लिए सार्थक शब्द बताइए - 'जो गाँव से सम्बन्धित हो'

- Ans
- 1. ग्रामीण
  - 2. देशज
  - 3. ग्रमागत
  - 4. ग्रामसेवी

Question ID : 26433062593  
Status : Not Answered  
Chosen Option : --

Q.10 निम्नलिखित में से शुद्ध वाक्य है-

- Ans
- 1. सीता कितब पढ़ती है।
  - 2. सीता किताब पढ़ है।
  - 3. सीता किताब पढ़ती है।
  - 4. सीता किताब पठित है।

Question ID : 26433066837  
Status : Not Answered  
Chosen Option : --

Q.11 'बंदर क्या जाने नींबू का स्वाद।' इस मुहावरे में कौन सा शब्द अशुद्ध है?

- Ans
- 1. बंदर
  - 2. नींबू
  - 3. क्या
  - 4. स्वाद

Question ID : 26433062816  
Status : Not Answered  
Chosen Option : --

Q.12 निम्नलिखित में से शुद्ध वाक्य है-

- Ans
- 1. लाल रोशनी देखकर सावधान हो जाओ।
  - 2. लाल रोशनी देखकर सावधान हो जाओ।
  - 3. लाल रोशनी देखकर शवधान हो जाओ।
  - 4. लाल रोशन देखकर सावधान हो जाओ।

Question ID : 26433066844  
Status : Not Answered  
Chosen Option : --

Q.13 निम्न वाक्य में रेखांकित अंश के स्थान पर सबसे उपयुक्त विकल्प इनमें से कौन-सा होगा?  
दूध में जामुन डालने से दही बनता है।

- Ans
- 1. जामन
  - 2. आम
  - 3. लीची
  - 4. इमली

Question ID : 26433066872  
Status : Not Answered  
Chosen Option : --

Q.14 निम्नलिखित में से कौन-सा वाक्य संज्ञा के प्रयोग की दृष्टि से सर्वाधिक उपयुक्त है?

- Ans
- 1. उन्नति के मार्ग में बड़े दुःख हैं।
  - 2. उन्नति के मार्ग में बहुत आपत्ति हैं।
  - 3. उन्नति के मार्ग में बहुत संकट हैं।
  - 4. उन्नति के मार्ग में अनेक बाधाएँ हैं।

Question ID : 26433066955  
Status : Not Answered  
Chosen Option : --

Q.15 दिए गए वाक्यों में से किस वाक्य में सही विभक्ति चिह्न का प्रयोग नहीं हुआ है?

- Ans
- 1. अमिताभ बच्चन की फिल्में अच्छी होती हैं।
  - 2. सारा तीलियों ने एक पेंटिंग बना रही है।
  - 3. वह आज हम सब के लिए मिठाई लाया था।
  - 4. आंटी ने उसे एक डिब्बे में मिठाई दी थी।

Question ID : 26433062863  
Status : Not Answered  
Chosen Option : --

**Comprehension:**

निम्नलिखित गद्यांश में कुछ शब्दों को हटा दिया गया है। दिए गए विकल्पों की सहायता से रिक्त स्थानों की पूर्ति कीजिए। प्रत्येक संख्या के लिए सबसे उपयुक्त विकल्प का चयन करें।  
सच्चा मित्र एक 1. \_\_\_\_\_ की तरह होता है। सच्चा मित्र खोज पाना 2. \_\_\_\_\_ काम नहीं है। ऐसा मित्र 3. \_\_\_\_\_ नहीं होता। उसे आपकी 4. \_\_\_\_\_ से कोई मोह नहीं होता। वह अपने मित्र की 5. \_\_\_\_\_ को किसी के सामने उजागर नहीं करता।

**SubQuestion No : 16**

Q.16 रिक्त स्थान 1 की पूर्ति के लिए सबसे उपयुक्त विकल्प का चयन करें।

- Ans
- 1. सोना
  - 2. रुपए
  - 3. मंडन
  - 4. खजाने

Question ID : 264330110849  
Status : Not Answered  
Chosen Option : --

**Comprehension:**

निम्नलिखित गद्यांश में कुछ शब्दों को हटा दिया गया है। दिए गए विकल्पों की सहायता से रिक्त स्थानों की पूर्ति कीजिए। प्रत्येक संख्या के लिए सबसे उपयुक्त विकल्प का चयन करें।  
सच्चा मित्र एक 1. \_\_\_\_\_ की तरह होता है। सच्चा मित्र खोज पाना 2. \_\_\_\_\_ काम नहीं है। ऐसा मित्र 3. \_\_\_\_\_ नहीं होता। उसे आपकी 4. \_\_\_\_\_ से कोई मोह नहीं होता। वह अपने मित्र की 5. \_\_\_\_\_ को किसी के सामने उजागर नहीं करता।

**SubQuestion No : 17**

Q.17 रिक्त स्थान 2 की पूर्ति के लिए सबसे उपयुक्त विकल्प का चयन करें।

- Ans
- 1. कठिन
  - 2. दुर्बोध
  - 3. सरल
  - 4. विकट

Question ID : 264330110850  
Status : Not Answered  
Chosen Option : --

**Comprehension:**

निम्नलिखित गद्यांश में कुछ शब्दों को हटा दिया गया है। दिए गए विकल्पों की सहायता से रिक्त स्थानों की पूर्ति कीजिए। प्रत्येक संख्या के लिए सबसे उपयुक्त विकल्प का चयन करें।  
सच्चा मित्र एक 1. \_\_\_\_\_ की तरह होता है। सच्चा मित्र खोज पाना 2. \_\_\_\_\_ काम नहीं है। ऐसा मित्र 3. \_\_\_\_\_ नहीं होता। उसे आपकी 4. \_\_\_\_\_ से कोई मोह नहीं होता। वह अपने मित्र की 5. \_\_\_\_\_ को किसी के सामने उजागर नहीं करता।

**SubQuestion No : 18**

Q.18 रिक्त स्थान 3 की पूर्ति के लिए सबसे उपयुक्त विकल्प का चयन करें।

- Ans
- 1. सामान्य
  - 2. स्वार्थी
  - 3. परमार्थ
  - 4. प्रयोजन

Question ID : 264330110851  
Status : Not Answered  
Chosen Option : --

**Comprehension:**

निम्नलिखित गद्यांश में कुछ शब्दों को हटा दिया गया है। दिए गए विकल्पों की सहायता से रिक्त स्थानों की पूर्ति कीजिए। प्रत्येक संख्या के लिए सबसे उपयुक्त विकल्प का चयन करें।  
सच्चा मित्र एक 1. \_\_\_\_\_ की तरह होता है। सच्चा मित्र खोज पाना 2. \_\_\_\_\_ काम नहीं है। ऐसा मित्र 3. \_\_\_\_\_ नहीं होता। उसे आपकी 4. \_\_\_\_\_ से कोई मोह नहीं होता। वह अपने मित्र की 5. \_\_\_\_\_ को किसी के सामने उजागर नहीं करता।

**SubQuestion No : 19**

Q.19 रिक्त स्थान 4 की पूर्ति के लिए सबसे उपयुक्त विकल्प का चयन करें।

- Ans
- 1. उदारता
  - 2. नाकामयाबी
  - 3. धन-दौलत
  - 4. प्रसिद्धि

Question ID : 264330110852  
Status : Not Answered  
Chosen Option : --

**Comprehension:**

निम्नलिखित गद्यांश में कुछ शब्दों को हटा दिया गया है। दिए गए विकल्पों की सहायता से रिक्त स्थानों की पूर्ति कीजिए। प्रत्येक संख्या के लिए सबसे उपयुक्त विकल्प का चयन करें।  
सच्चा मित्र एक 1. \_\_\_\_\_ की तरह होता है। सच्चा मित्र खोज पाना 2. \_\_\_\_\_ काम नहीं है। ऐसा मित्र 3. \_\_\_\_\_ नहीं होता। उसे आपकी 4. \_\_\_\_\_ से कोई मोह नहीं होता। वह अपने मित्र की 5. \_\_\_\_\_ को किसी के सामने उजागर नहीं करता।

**SubQuestion No : 20**

Q.20 रिक्त स्थान 5 की पूर्ति के लिए सबसे उपयुक्त विकल्प का चयन करें।

- Ans
- 1. लोकप्रियता
  - 2. कामयाबी
  - 3. गुमनामी
  - 4. कमजोरी

Question ID : 264330110853

Status : Not Answered

Chosen Option : --

WWW.GOVtJOBSALERT.COM