

# Constable GD in CAPFs SSF Rifleman GD in Assam Rifles and Sepoy in NCB Examination 2022

Roll Number	<a href="http://www.govtjobsalert.in">www.govtjobsalert.in</a>
Candidate Name	<a href="http://www.govtjobsalert.in">www.govtjobsalert.in</a>
Venue Name	iON Digital Zone iDZ 1 Sector 62
Exam Date	16/01/2023
Exam Time	9:00 AM - 10:00 AM
Subject	Constable GD Examination 2022

Section : Part-A-General Intelligence and Reasoning

**Q.1** Three statements are given followed by three conclusions numbered I, II and III. Assuming the statements to be true, even if they seem to be at variance with commonly known facts, decide which of the conclusions logically follow(s) from the statements.

Statements:

All stems are leaves.

All fruits are leaves.

All leaves are trunks.

Conclusions:

I. All fruits are trunks.

II. All trunks are stems.

III. Some trunks are fruits.

- Ans
- 1. Only conclusions II and III follow
  - 2. Only conclusions I and II follow
  - 3. Only conclusions I and III follow
  - 4. All conclusions follow

Question ID : 26433082311

Status : Answered

Chosen Option : 3

**Q.2** Which of the following terms will replace the question mark (?) in the given series?  
BGR, CIV, ELZ, HPD, LUH, ?

- Ans
- 1. QBL
  - 2. QAK
  - 3. QBK
  - 4. QAL

Question ID : 26433069453

Status : Answered

Chosen Option : 4

Q.3 Select the option that is related to the fifth letter-cluster in the same way as the second letter-cluster is related to the first letter-cluster and the fourth letter-cluster is related to the third letter-cluster.

QPON : RRRR :: IJGK : JLJO :: PKON : ?

- Ans  1. QMRR  
 2. RQRM  
 3. MQRR  
 4. RRMQ

Question ID : 26433080463  
Status : Answered  
Chosen Option : 1

Q.4 Select the correct mirror image of the given figure when the mirror is placed at MN as shown below.

Sa65Ge784RT  
M  
|  
N

- Ans  1. 2a65Ge784RT  
 2. tR487E82a62  
 3. 2a65Ge784RT  
 4. 2a65Ge784RT

Question ID : 26433085545  
Status : Answered  
Chosen Option : 4

Q.5 Select the number from among the given options that can replace the question mark (?) in the following series.  
83, 299, 424, 488, ?

- Ans  1. 415  
 2. 515  
 3. 625  
 4. 589

Question ID : 26433074536  
Status : Answered  
Chosen Option : 2

**Q.6** Select the option that is related to the fifth term in the same way as the second term is related to the first term and the fourth term is related to the third term.  
BIND : FFKH :: ROMP : VLJT :: SPUN : ?

- Ans  1. WMRR  
 2. VLRS  
 3. VLQR  
 4. WMQS

Question ID : 26433058010  
Status : Answered  
Chosen Option : 1

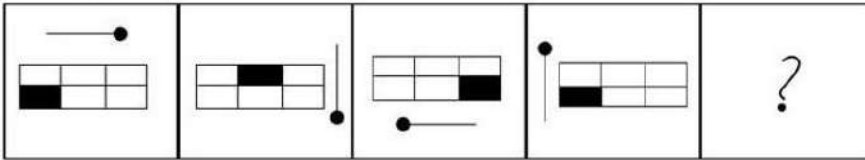
**Q.7** Select the correct combination of mathematical signs to sequentially replace the \* signs and to balance the given equation.  
 $11 * 10 * 10 * 240 * 2$

- Ans  1.  $\times, \div, =, +$   
 2.  $\times, +, =, \div$   
 3.  $=, +, \div, \times$   
 4.  $\div, \times, =, +$

Question ID : 26433094993  
Status : Answered  
Chosen Option : 2

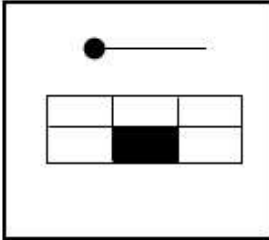
WWW.GOVtJOBSAlert.in

**Q.8** : Select the figure that will come in place of the question mark (?) in the following figure series.

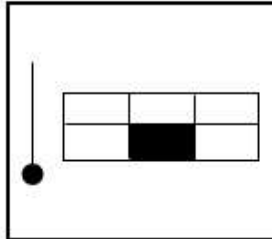


**Ans**

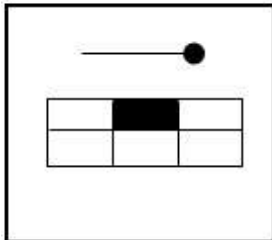
✗ 1.



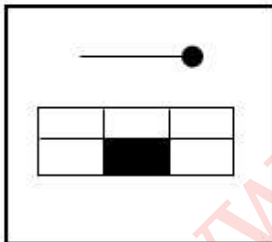
✗ 2.



✓ 3.



✗ 4.



Question ID : 26433081692

Status : Answered

Chosen Option : 3

**Q.9** Seven people, A, B, C, D, E, F and G are sitting in a straight row, facing north. A sits second from the left. Only two people sit between A and C. Only three people sit between D and F and D is an immediate neighbour of A. B is an immediate neighbour of D and E is not an immediate neighbour of C. Who sits to the extreme left?

**Ans** ✗ 1. D

✗ 2. G

✗ 3. F

✓ 4. E

Question ID : 26433056931

Status : Answered

Chosen Option : 4

Q.10 In a certain code language, 'grasshopper ant' is coded as 'ja do', 'seed blade' is coded as 'ju fo', 'blade ant' is coded as 'fo do', and 'grasshopper seed' is coded as 'ja ju'. What is the code for 'blade'?

- Ans  1. fo  
 2. zu  
 3. ja  
 4. do

Question ID : 26433069041  
Status : Answered  
Chosen Option : 1

Q.11 Which two signs should be interchanged to make the below equation mathematically correct?

$$48 + 36 - 81 \times 9 \div 2 = 66$$

- Ans  1. + and -  
 2.  $\times$  and +  
 3.  $\div$  and  $\times$   
 4.  $\div$  and -

Question ID : 264330117536  
Status : Answered  
Chosen Option : 3

Q.12 Which of the following letter-clusters will replace the question mark (?) in the given series?

DHVV, GKSV, ?, MQMP, PTJM

- Ans  1. JNPS  
 2. JPMR  
 3. KNPR  
 4. JNQS

Question ID : 26433076440  
Status : Answered  
Chosen Option : 1

Q.13 Six students are sitting around a circular table facing the centre. F is an immediate neighbour of A. D sits second to the right of E. B is an immediate neighbour of E and sits second to the right of C. F sits second to the right of D. A is not an immediate neighbour of E. Who sits to the immediate left of E?

- Ans  1. C  
 2. F  
 3. A  
 4. B

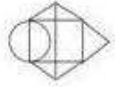
Question ID : 26433092767  
Status : Answered  
Chosen Option : 1

Q.14 Select the option figure in which the given figure is embedded. (Rotation is NOT allowed).

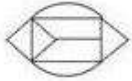


Ans

✗ 1.



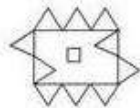
✓ 2.



✗ 3.



✗ 4.



Question ID : 26433070207

Status : Answered

Chosen Option : 2

Q.15 Looking at a photograph, Anjali said, "He is the only son of my father." How is the man in the photograph related to Anjali?

Ans ✓ 1. Brother

✗ 2. Father's father

✗ 3. Son

✗ 4. Mother's father

Question ID : 26433074601

Status : Answered

Chosen Option : 1

Q.16 Select the option that is related to the third term in the same way as the second term is related to the first term and the sixth term is related to the fifth term.

13 : 225 :: 16 : ? :: 17 : 361

Ans ✗ 1. 376

✓ 2. 324

✗ 3. 345

✗ 4. 328

Question ID : 26433069094

Status : Answered

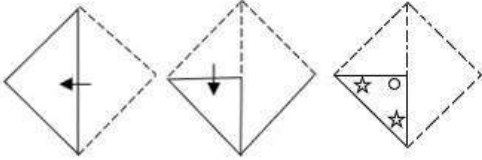
Chosen Option : 2

Q.17 Which of the following numbers will replace the question mark (?) in the given series?  
10, 11, 15, 42, 58, 183, ?

- Ans
- 1. 218
  - 2. 217
  - 3. 220
  - 4. 219

Question ID : 26433085641  
Status : Answered  
Chosen Option : 4

Q.18 A paper is folded and cut as shown below. How will it appear when unfolded?



Ans

- 1.
- 2.
- 3.
- 4.

Question ID : 26433090954  
Status : Answered  
Chosen Option : 4

Q.19 In a certain code the word 'BARK' is numerically coded as 5132. The word 'BEND' is numerically coded as 5749. How is the word 'BEARD' numerically coded in the same code?

- Ans
- 1. 57123
  - 2. 51739
  - 3. 57132
  - 4. 57139

Question ID : 26433090107  
Status : Answered  
Chosen Option : 4

Q.20 Which of the following options represents the correct order of the given words as they would appear in the English dictionary?

1. Glob
2. Globule
3. Global
4. Globe
5. Gloom

- Ans
- 1. 3, 4, 2, 1, 5
  - 2. 1, 3, 4, 2, 5
  - 3. 1, 3, 4, 5, 2
  - 4. 1, 2, 4, 3, 5

Question ID : 26433086968  
Status : Answered  
Chosen Option : 2

Section : Part-B-General Knowledge and General awareness

Q.1 The World Chess Champion Vishwanathan Anand belongs to which Country?

- Ans
- 1. India
  - 2. Sri Lanka
  - 3. Nepal
  - 4. Bangladesh

Question ID : 264330116275  
Status : Answered  
Chosen Option : 1

Q.2 As of 10 April 2022, how many general elections have been held to the Lok Sabha?

- Ans
- 1. 19
  - 2. 15
  - 3. 21
  - 4. 17

Question ID : 26433054550  
Status : Answered  
Chosen Option : 4



Q.3 Plastids containing \_\_\_\_\_ pigment chlorophyll are called chloroplasts.

- Ans  1. brown  
 2. yellow  
 3. green  
 4. colourless

Question ID : 264330115240  
Status : Answered  
Chosen Option : 3

Q.4 Who among the following was awarded the Sangeet Natak Akademi Award in 2001?

- Ans  1. Sonal Mansingh  
 2. Anuradha Pandey  
 3. M.R Krishnamurthy  
 4. Alarmel Valli

Question ID : 264330115861  
Status : Answered  
Chosen Option : 3

Q.5 \_\_\_\_\_, who lived in the court of Kanishka, composed a biography of the Buddha, the Buddhacharita.

- Ans  1. Mathara  
 2. Nagarjuna  
 3. Ashvaghosha  
 4. Samgharaksha

Question ID : 26433089862  
Status : Answered  
Chosen Option : 3

Q.6 \_\_\_\_\_ restrict/s imports and help/s domestic producers from foreign competition.

- (A) Tariffs  
(B) Quotas

- Ans  1. Neither A nor B  
 2. Both A and B  
 3. Only A  
 4. Only B

Question ID : 26433054781  
Status : Answered  
Chosen Option : 2

**Q.7 Which industry does aluminium smelting belong to?**

- Ans
- 1. textile Industry
  - 2. chemical industry
  - 3. sugar Industry
  - 4. metallurgical industry

Question ID : 264330115570  
Status : Answered  
Chosen Option : 4

**Q.8 Which of the following is an outer planet of the solar system?**

- Ans
- 1. Venus
  - 2. Earth
  - 3. Mercury
  - 4. Saturn

Question ID : 26433087886  
Status : Answered  
Chosen Option : 4

**Q.9 Which of the following dance forms is associated with Sikkim?**

- Ans
- 1. Tashi Sabdo
  - 2. Munari
  - 3. Bhangra
  - 4. Kolattam

Question ID : 26433071689  
Status : Answered  
Chosen Option : 1

**Q.10 The Goods and Services Tax, Act commenced from\_\_\_\_\_.**

- Ans
- 1. 1 July 2017
  - 2. 1 April 2018
  - 3. 1 July 2016
  - 4. 1 April 2016

Question ID : 264330116207  
Status : Answered  
Chosen Option : 1

**Q.11 How many elements were known when Mendeleev started his work?**

- Ans
- 1. 73
  - 2. 53
  - 3. 63
  - 4. 93

Question ID : 26433087852  
Status : Answered  
Chosen Option : 3

Q.12 Which neighbouring country of India is NOT a part of Commonwealth Games?

- Ans  1. China  
 2. Bangladesh  
 3. Pakistan  
 4. Sri Lanka

Question ID : 264330116099  
Status : Answered  
Chosen Option : 2

Q.13 Which of the following harvest festivals is primarily celebrated by the people of western Odisha?

- Ans  1. Onam  
 2. Gudi Padwa  
 3. Wangala  
 4. Nuakhai

Question ID : 26433094895  
Status : Answered  
Chosen Option : 2

Q.14 Which of the following is a stroke use in swimming?

- Ans  1. Shark  
 2. Butterfly  
 3. Lion  
 4. Dog

Question ID : 26433089941  
Status : Answered  
Chosen Option : 2

Q.15 The 42nd Amendment Act in 1976 inserted which new Part in the Indian Constitution?

- Ans  1. Part II A  
 2. Part I A  
 3. Part IV A  
 4. Part III A

Question ID : 26433089949  
Status : Answered  
Chosen Option : 3

**Q.16 Which political leader won the bypoll election from Gola Gokarannath constituency in Uttar Pradesh, in November 2022?**

- Ans
- 1. Piyush Goyal
  - 2. Vikram Singh Saini
  - 3. Azam Khan
  - 4. Aman Giri

Question ID : 264330114971  
Status : Answered  
Chosen Option : 2

**Q.17 Who has been appointed as the Governor of West Bengal in November 2022?**

- Ans
- 1. Jagdeep Dhankhar
  - 2. C. V. Ananda Bose
  - 3. La. Ganesan
  - 4. D.Y. Patil

Question ID : 264330115026  
Status : Answered  
Chosen Option : 3

**Q.18 Jallianwala Bagh massacre happened in 1919. Where is Jallianwala Bagh located?**

- Ans
- 1. Haryana
  - 2. Uttar Pradesh
  - 3. Madhya Pradesh
  - 4. Punjab

Question ID : 264330115704  
Status : Answered  
Chosen Option : 4

**Q.19 The interest rate at which the Reserve Bank absorbs liquidity from banks against the collateral of eligible government securities under the LAF is called the \_\_\_\_\_.**

- Ans
- 1. Rent rate
  - 2. Statutory rate
  - 3. Repo rate
  - 4. Reverse repo rate

Question ID : 264330115323  
Status : Answered  
Chosen Option : 2

Q.20 परंपरागत आदानों का उपयोग और आधुनिक तकनीकों की अनुपस्थिति कृषि उत्पादकता को \_\_\_\_\_ की ओर ले जाती है।

- Ans
- 1. सर्वोच्च स्तर
  - 2. उच्च स्तर
  - 3. निम्न स्तर
  - 4. ईष्टतम स्तर

Question ID : 264330115433  
Status : Answered  
Chosen Option : 3

Section : Part-C-Elementary Mathematics

Q.1 S buys sugar for Rs.40 per kg and sells at Rs. x per kg. Due to a fault in the weighing machine, it shows 1 kg when the actual weight is 800 gm. What is the value of x per kg if his profit percentage is 30%?

- Ans
- 1. 48.6
  - 2. 46.1
  - 3. 41.6
  - 4. 52.1

Question ID : 26433071255  
Status : Answered  
Chosen Option : 3

Q.2 The difference in compound interest, under annual compounding, and simple interest on a certain sum at the same rate of interest in 2 years is 144% of the sum. Find the rate of interest per annum.

- Ans
- 1. 15%
  - 2. 100%
  - 3. 120%
  - 4. 20%

Question ID : 26433081724  
Status : Answered  
Chosen Option : 3

Q.3 What is the height of a solid cylinder whose radius is 7 cm and total surface area is  $1144\text{cm}^2$ ? (Use  $\pi = \frac{22}{7}$ )

- Ans
- 1. 19 cm
  - 2. 22 cm
  - 3. 12 cm
  - 4. 18 cm

Question ID : 26433074945  
Status : Answered  
Chosen Option : 1

Q.4 A man rows upstream 15 km and downstream 18 km, he takes 3 hours each time. The speed of the current is:

- Ans
- 1.  $\frac{1}{2}$  km/h
  - 2.  $\frac{3}{2}$  km/h
  - 3. 1 km/h
  - 4. 2 km/h

Question ID : 26433081045  
Status : Answered  
Chosen Option : 1

Q.5 The radius of a hemisphere is 21 cm. Its volume (in  $\text{cm}^3$ ) will be:  
(Use  $\pi = \frac{22}{7}$ )

- Ans
- 1. 19404
  - 2. 20112
  - 3. 21109
  - 4. 22101

Question ID : 26433085769  
Status : Answered  
Chosen Option : 1

Q.6 M can do a piece of work in 12 days and N in 24 days. They begin together, but M leaves the work 6 days before the completion of the work. Find the total number of days to complete the entire work.

- Ans
- 1. 10 days
  - 2. 12 days
  - 3. 7 days
  - 4. 6 days

Question ID : 264330116891  
Status : Answered  
Chosen Option : 2

Q.7 The population of a village is 24000. If it is expected to decrease by 4 percent the next year, then what will be the population of the village next year?

- Ans
- 1. 23520
  - 2. 22080
  - 3. 22560
  - 4. 23040

Question ID : 264330116811  
Status : Answered  
Chosen Option : 4

Q.8

Find the LCM of  $\frac{2}{5}$ ,  $\frac{4}{15}$  and  $\frac{6}{25}$ .

Ans

1.  $\frac{12}{7}$

2.  $\frac{11}{5}$

3.  $\frac{12}{5}$

4.  $\frac{5}{12}$

Question ID : 26433090315

Status : Answered

Chosen Option : 3

Q.9 Ravi can decorate a wall in 6 hours, while Ankita can decorate the same wall in 10 hours. In how many hours will they decorate the wall working simultaneously?

Ans  1. 4.75 hours

2. 4 hours

3. 3 hours

4. 3.75 hours

Question ID : 26433080341

Status : Answered

Chosen Option : 4

Q.10 A dealer marked the price of an item 45% more than its cost price and sold it by allowing a discount of 20%. Find his profit percentage.

Ans  1. 30%

2. 25%

3. 20%

4. 16%

Question ID : 26433083039

Status : Answered

Chosen Option : 4

Q.11 In a bag of rice of Rs.70 per kg, two different types are mixed. First type of rice is 8 kg in quantity of Rs.60 per kg, while the second type of rice is 4 kg in quantity. What is the price per kg of the second type of rice?

- Ans
- 1. Rs.75
  - 2. Rs.65
  - 3. Rs.80
  - 4. Rs.90

Question ID : 26433081638  
Status : Answered  
Chosen Option : 4

Q.12 If the length of a rectangle is reduced by 15% and breadth is increased by 10%, what is the percentage change in the area of the rectangle?

- Ans
- 1. 5.6% decrement
  - 2. 5.6% increment
  - 3. 6.5% decrement
  - 4. 6.5% increment

Question ID : 26433080293  
Status : Answered  
Chosen Option : 3

Q.13 A store announces the following three schemes to sell its articles. Which of these gives the maximum discount to the buyer?

- A. Two successive discounts of 20% and 24%
- B. Buy 5 get 3 free
- C. Buy 13 get 7 free

- Ans
- 1. All are equal
  - 2. B
  - 3. C
  - 4. A

Question ID : 26433075763  
Status : Answered  
Chosen Option : 4

Q.14 Rani goes to school from home at a certain speed and returns to home at the speed of 50 km/h. If the distance between her home and school is 20 km and the average speed of the whole journey is 37.5 km/h, then what is her speed from home to school?

- Ans
- 1. 35 km/h
  - 2. 40 km/h
  - 3. 30 km/h
  - 4. 45 km/h

Question ID : 26433075644  
Status : Answered  
Chosen Option : 3



Q.15 What principal will amount to Rs.5,324 in 2 years, when the interest is compounded at 10% per annum, compounding annually?

- Ans  1. Rs.4,400  
 2. Rs.4,324  
 3. Rs.4,420  
 4. Rs.4,440

Question ID : 26433083045  
Status : Answered  
Chosen Option : 1

Q.16 A bike takes 3 hours to cover a distance of 162 km. What distance will it cover in 5 hours?

- Ans  1. 240 km  
 2. 292 km  
 3. 301 km  
 4. 270 km

Question ID : 26433080121  
Status : Answered  
Chosen Option : 4

Q.17 A dishonest merchant uses a false weight of 200 gm instead of 250 gm. What is his profit percentage?

- Ans  1. 15%  
 2. 25%  
 3. 20%  
 4. 10%

Question ID : 26433075725  
Status : Answered  
Chosen Option : 2

Q.18 A boat covers a distance of 375 metres in upstream in 30 min, and returns back to the starting point in 18 min. Find the ratio of the speed of the boat in still water and the speed of the stream.

- Ans  1. 5 : 6  
 2. 7 : 13  
 3. 13 : 7  
 4. 4 : 1

Question ID : 26433079958  
Status : Answered  
Chosen Option : 4

Q.19 If  $a : b = 2 : 7$  and 343 is the third proportional to  $a$  and  $b$ , then the value of  $b - a$  is:

- Ans  1. 98  
 2. 70  
 3. 49  
 4. 126

Question ID : 26433079942  
Status : Answered  
Chosen Option : 2

Q.20 Evaluate  $65 \div 13 \times 4 + (35 \div 7 \times 9)^2 + 100 \div 5$  of  $4 \times 80$ .

- Ans  1. 2045  
 2. 2445  
 3. 2345  
 4. 2545

Question ID : 26433075109  
Status : Answered  
Chosen Option : 2

Section : Part-D-English

Q.1 Select the most appropriate option that can substitute the underlined segment in the given sentence.

If we have to sending a mail today, we shall get a reply in two days.

- Ans  1. If we would send a mail today  
 2. If we send a mail today  
 3. If we will send a mail today  
 4. If we have sending a mail today

Question ID : 26433092288  
Status : Not Answered  
Chosen Option : --

Q.2 Select the option that expresses the given sentence in past tense form.

The home nurse is expecting a salary hike from the relatives of the new family.

- Ans  1. The home nurse will be expecting a salary hike from the relatives of the new family.  
 2. The home nurse expects a salary hike from the relatives of the new family.  
 3. The home nurse was expecting a salary hike from the relatives of the new family.  
 4. The home nurse has been expecting a salary hike from the relatives of the new family.

Question ID : 26433089296  
Status : Not Answered  
Chosen Option : --

**Q.3** Select the word segment that substitutes (replaces) the bracketed word segment correctly and completes the sentence meaningfully.

The thief who (have taken the pony) was found guilty by the jury.

- Ans
- 1. has took the pony
  - 2. had taken the pony
  - 3. have took the pony
  - 4. has taken the pony

Question ID : 26433088962  
Status : Not Answered  
Chosen Option : --

**Q.4** Select the MISSPELT word.

- Ans
- 1. Extrime
  - 2. Eccentricity
  - 3. Electricity
  - 4. Excite

Question ID : 26433086334  
Status : Not Answered  
Chosen Option : --

**Q.5** Select the most appropriate meaning of the given idiom.

To be in the doldrums

- Ans
- 1. To be in high energy and happiness
  - 2. To be in utter confusion
  - 3. To be in low and dull spirits
  - 4. To be in helpless condition

Question ID : 26433073479  
Status : Not Answered  
Chosen Option : --

**Q.6** Select the most appropriate option to fill in the blank.

I am born and \_\_\_\_\_ in a cultured family.

- Ans
- 1. bare
  - 2. bread
  - 3. bred
  - 4. beard

Question ID : 26433060330  
Status : Not Answered  
Chosen Option : --

Q.7 Select the most appropriate ANTONYM of the given word.

Cease

- Ans  1. Terminate  
 2. Stop  
 3. Commence  
 4. Quit

Question ID : 26433074053  
Status : Not Answered  
Chosen Option : --

Q.8 Select the most appropriate option that can substitute the underlined segment in the given sentence.

There is a few rice left in the cooker.

- Ans  1. fewest rice left in  
 2. little rice left in  
 3. less rice left on  
 4. any rice left in

Question ID : 26433099867  
Status : Not Answered  
Chosen Option : --

Q.9 Select the most appropriate meaning of the given idiom.

The best thing since sliced bread

- Ans  1. A really good invention  
 2. A thoroughly examined food  
 3. An openly performed confession  
 4. A sincerely made apology

Question ID : 26433073490  
Status : Not Answered  
Chosen Option : --

Q.10 Select the most appropriate option to complete the given sentence.

Mechanical Engineering students from IIT, Madras, have developed an unnamed sailing boat that can reach any given destination \_\_\_\_\_.

- Ans  1. highly  
 2. autonomously  
 3. verbally  
 4. collaboratively

Question ID : 26433089089  
Status : Not Answered  
Chosen Option : --

Q.11 Select the most appropriate synonym of the word given in the brackets to fill in the blank.

Consuming coffee every day can have \_\_\_\_\_ (negative) effects on one's health.

- Ans  1. hospitable  
 2. adverse  
 3. despairing  
 4. arbitrary

Question ID : 26433071889  
Status : Not Answered  
Chosen Option : --

Q.12 Select the most appropriate synonym of the underlined word in the given sentence.

Instead of studying rules and definitions, Helen acquired language through experience and habit.

- Ans  1. Obtained  
 2. Forfeited  
 3. Admired  
 4. Awarded

Question ID : 26433084892  
Status : Not Answered  
Chosen Option : --

Q.13 Select the most appropriate ANTONYM of the word given in the bracket to fill in the blank.

She was too (feeble) \_\_\_\_\_ to leave her room.

- Ans  1. wimpy  
 2. effete  
 3. strong  
 4. asthenic

Question ID : 26433059597  
Status : Not Answered  
Chosen Option : --

Q.14 Identify the INCORRECT spelling from the given sentence and select its correct spelling.

Voting allows every citezen to have a say in choosing who should run the government.

- Ans  1. allouse  
 2. chosing  
 3. goverment  
 4. citizen

Question ID : 26433072039  
Status : Not Answered  
Chosen Option : --

**Q.15 Select the most appropriate synonym of the given word.**

**Contagion**

- Ans
- 1. Grandeur
  - 2. Illusion
  - 3. Transfusion
  - 4. Transmission

Question ID : 26433088759

Status : Not Answered

Chosen Option : --

**Comprehension:**

In the following passage some words have been deleted. Fill in the blanks with the help of the alternatives given. Select the most appropriate option for each number.

A low-pressure area characterised by rapid and frequently damaging air circulation is what (1)\_\_\_\_\_ cyclones. Storms and (2)\_\_\_\_\_ weather are frequently present during cyclones. In the Northern hemisphere, the air moves counter clockwise, (3)\_\_\_\_\_, in the Southern hemisphere, it moves clockwise. Extratropical cyclones, sometimes known as temperate cyclones, and tropical cyclones are the two (4)\_\_\_\_\_ under which cyclones fall. The name 'Cyclone' comes from the Greek word 'Cyclos' which means a snake's coils. Henry Paddington came up with the term because tropical storms in the Arabian Sea and Bay of Bengal (5)\_\_\_\_\_ coiled sea serpents.

**SubQuestion No : 16**

**Q.16 Select the most appropriate answer for blank 1.**

- Ans
- 1. inspires
  - 2. spawns
  - 3. destroys
  - 4. generates

Question ID : 26433092917

Status : Not Answered

Chosen Option : --

**Comprehension:**

In the following passage some words have been deleted. Fill in the blanks with the help of the alternatives given. Select the most appropriate option for each number.

A low-pressure area characterised by rapid and frequently damaging air circulation is what (1)\_\_\_\_\_ cyclones. Storms and (2)\_\_\_\_\_ weather are frequently present during cyclones. In the Northern hemisphere, the air moves counter clockwise, (3)\_\_\_\_\_, in the Southern hemisphere, it moves clockwise. Extratropical cyclones, sometimes known as temperate cyclones, and tropical cyclones are the two (4)\_\_\_\_\_ under which cyclones fall. The name 'Cyclone' comes from the Greek word 'Cyclos' which means a snake's coils. Henry Paddington came up with the term because tropical storms in the Arabian Sea and Bay of Bengal (5)\_\_\_\_\_ coiled sea serpents.

**SubQuestion No : 17**

**Q.17 Select the most appropriate answer for blank 2.**

- Ans
- 1. unfavourable
  - 2. accustomed
  - 3. advantageous
  - 4. unaccepted

Question ID : 26433092918

Status : Not Answered

Chosen Option : --

**Comprehension:**

In the following passage some words have been deleted. Fill in the blanks with the help of the alternatives given. Select the most appropriate option for each number.

A low-pressure area characterised by rapid and frequently damaging air circulation is what (1)\_\_\_\_\_ cyclones. Storms and (2)\_\_\_\_\_ weather are frequently present during cyclones. In the Northern hemisphere, the air moves counter clockwise, (3)\_\_\_\_\_, in the Southern hemisphere, it moves clockwise. Extratropical cyclones, sometimes known as temperate cyclones, and tropical cyclones are the two (4)\_\_\_\_\_ under which cyclones fall. The name 'Cyclone' comes from the Greek word 'Cyclos' which means a snake's coils. Henry Paddington came up with the term because tropical storms in the Arabian Sea and Bay of Bengal (5)\_\_\_\_\_ coiled sea serpents.

**SubQuestion No : 18**

**Q.18 Select the most appropriate answer for blank 3.**

- Ans  1. whereas  
 2. because  
 3. or  
 4. unless

Question ID : 26433092919  
Status : Not Answered  
Chosen Option : --

**Comprehension:**

In the following passage some words have been deleted. Fill in the blanks with the help of the alternatives given. Select the most appropriate option for each number.

A low-pressure area characterised by rapid and frequently damaging air circulation is what (1)\_\_\_\_\_ cyclones. Storms and (2)\_\_\_\_\_ weather are frequently present during cyclones. In the Northern hemisphere, the air moves counter clockwise, (3)\_\_\_\_\_, in the Southern hemisphere, it moves clockwise. Extratropical cyclones, sometimes known as temperate cyclones, and tropical cyclones are the two (4)\_\_\_\_\_ under which cyclones fall. The name 'Cyclone' comes from the Greek word 'Cyclos' which means a snake's coils. Henry Paddington came up with the term because tropical storms in the Arabian Sea and Bay of Bengal (5)\_\_\_\_\_ coiled sea serpents.

**SubQuestion No : 19**

**Q.19 Select the most appropriate answer for blank 4.**

- Ans  1. ranks  
 2. statuses  
 3. categories  
 4. species

Question ID : 26433092920  
Status : Not Answered  
Chosen Option : --

**Comprehension:**

In the following passage some words have been deleted. Fill in the blanks with the help of the alternatives given. Select the most appropriate option for each number.

A low-pressure area characterised by rapid and frequently damaging air circulation is what (1)\_\_\_\_\_ cyclones. Storms and (2)\_\_\_\_\_ weather are frequently present during cyclones. In the Northern hemisphere, the air moves counter clockwise, (3)\_\_\_\_\_, in the Southern hemisphere, it moves clockwise. Extratropical cyclones, sometimes known as temperate cyclones, and tropical cyclones are the two (4)\_\_\_\_\_ under which cyclones fall. The name 'Cyclone' comes from the Greek word 'Cyclos' which means a snake's coils. Henry Paddington came up with the term because tropical storms in the Arabian Sea and Bay of Bengal (5)\_\_\_\_\_ coiled sea serpents.

**SubQuestion No : 20**

**Q.20** Select the most appropriate answer for blank 5.

- Ans
- 1. collect
  - 2. negate
  - 3. mimic
  - 4. resemble

Question ID : 26433092921  
Status : Not Answered  
Chosen Option : --

Section : Part-D-Hindi

**Q.1** निम्नलिखित वाक्य में रेखांकित खंड के स्थान पर प्रयुक्त होने वाले सबसे उपयुक्त विकल्प का चयन कीजिए।  
श्याम ने बर्फी खाया।

- Ans
- 1. खाई
  - 2. खा
  - 3. खाए
  - 4. खाली

Question ID : 26433079660  
Status : Answered  
Chosen Option : 1

**Q.2** निम्न विकल्पों में से शुद्ध वाक्य का चयन कीजिए।

- Ans
- 1. मोहन भूख में तड़प रहा था।
  - 2. पढ़ाई की वजह से उसकी आँखें कमजोर हो गयीं।
  - 3. वह चिंता करती – करती मर गए।
  - 4. श्रद्धा के द्वारा उसका मस्तष्क नत था।

Question ID : 26433063072  
Status : Answered  
Chosen Option : 2



Q.3 निम्नलिखित में से 'सम्बन्धवाचक सर्वनाम' सम्बन्धी अशुद्धि वाले वाक्य की पहचान कीजिए।

- Ans  1. यह वही फिल्म है, जिसे तुम देखना चाहते हो।  
 2. मेरी वह किताब खो गयी एक मैने कल पुस्तक मेले से खरीदा था।  
 3. जो मेहनत करते हैं, वे सफल होते हैं।  
 4. यह वही आदमी है, जिसका पुत्र परीक्षा में अक्ल आया है।

Question ID : 26433063006  
Status : Answered  
Chosen Option : 2

Q.4 निम्न में से क्या 'चंद्रमा' शब्द का पर्यायवाची है?

- Ans  1. घटक  
 2. अंशुमाली  
 3. शशि  
 4. दिनकर

Question ID : 26433067072  
Status : Answered  
Chosen Option : 3

Q.5 'जिसे वचन द्वारा व्यक्त नहीं किया जा सके' वाक्यांश के लिए उचित शब्द क्या होगा?

- Ans  1. अनिर्वचनीय  
 2. अनिवार्य  
 3. अलौकिक  
 4. अनुकरणीय

Question ID : 26433067064  
Status : Answered  
Chosen Option : 1

Q.6 'उसके प्राण पखेरू चले गए।' में रेखांकित शब्द के स्थान पर उपयुक्त शब्द क्या होगा?

- Ans  1. उड़  
 2. गुम  
 3. तैर  
 4. सो

Question ID : 26433066797  
Status : Answered  
Chosen Option : 1

Q.7 'घोड़े बेचकर \_\_\_\_\_।' उपरोक्त मुहावरे में रिक्त स्थान की पूर्ति उचित शब्द द्वारा कीजिए।

- Ans
- 1. खाना
  - 2. सोना
  - 3. रहना
  - 4. घूमना

Question ID : 26433069684  
Status : Answered  
Chosen Option : 2

Q.8 निम्नलिखित विकल्पों में से किस एक वाक्य में विशेषण का उचित प्रयोग किया गया है?

- Ans
- 1. नीना खाती है।
  - 2. करीम खेलता है।
  - 3. राधा के लम्बे बाल हैं।
  - 4. शीला सोती है।

Question ID : 26433062964  
Status : Answered  
Chosen Option : 3

Q.9 "सीमा की बात सुनकर जया को आश्चर्य हुआ।" उक्त वाक्य में प्रयुक्त 'आश्चर्य' के स्थान पर उसके समानार्थी शब्द का प्रयोग निम्न में से किस वाक्य में नहीं किया गया है?

- Ans
- 1. सीमा की बात सुनकर जया को अचरज हुआ।
  - 2. सीमा की बात सुनकर जया को विस्मय हुआ।
  - 3. सीमा की बात सुनकर जया को मनोरथ लगा।
  - 4. सीमा की बात सुनकर जया को अचंभा हुआ।

Question ID : 26433067033  
Status : Answered  
Chosen Option : 4

Q.10 निम्नलिखित विकल्पों में से 'जो कभी बूढ़ा न हो' वाक्यांश के लिए एक सार्थक शब्द क्या होगा ?

- Ans
- 1. अजर
  - 2. अपार
  - 3. अजन्मा
  - 4. अमर

Question ID : 26433062534  
Status : Answered  
Chosen Option : 1

Q.11 संसार शूर को हमेशा उसकी बहादुरी के लिए याद करता है और \_\_\_\_\_ को उसकी कायरता के लिए।

'शूर' के विलोम शब्द से उपरोक्त वाक्य पूर्ण कीजिए।

- Ans
- 1. सरस
  - 2. भीरु
  - 3. निर्भय
  - 4. दिलेर

Question ID : 26433080873

Status : Answered

Chosen Option : 2

Q.12 निम्नलिखित में से कौन सा वर्तनी की दृष्टि से अशुद्ध वाक्य है?

- Ans
- 1. वह उस स्कूल में पढ़ा जो उसके गाँव के निकट था।
  - 2. मैं उसे चुप रहने को कहता रहा पर उसने एक नहीं सुनी।
  - 3. पृथ्वी गोल है और हम इसे प्रमाणित कर सकते हैं।
  - 4. पोत नष्ट हो गया, पर यात्रीयों को बचा लिया गया।

Question ID : 26433062895

Status : Answered

Chosen Option : 4

Q.13 निम्न वाक्यांश के लिए सही एक-शब्द का चयन विकल्पों में से कीजिए।  
जो कल्पना से परे हो

- Ans
- 1. कल्पनातीत
  - 2. प्रामाणिक
  - 3. काल्पनिक
  - 4. कालातीत

Question ID : 26433070101

Status : Answered

Chosen Option : 1

Q.14 निम्नलिखित वाक्य में रेखांकित शब्द का पर्यायवाची शब्द क्या होगा?  
कमज़ोर अदमी को एक ना एक रोग लगा रहता है।

- Ans
- 1. अभिशाप
  - 2. बहाना
  - 3. व्याधि
  - 4. वरदान

Question ID : 26433085070

Status : Answered

Chosen Option : 3

Q.15 'बाँछे खिल जाना' मुहावरे का सही अर्थ है -

- Ans
- 1. दोस्त मिल जाना
  - 2. फूल खिल जाना
  - 3. प्रसन्न हो जाना
  - 4. सुंदर हो जाना

Question ID : 26433065927

Status : Answered

Chosen Option : 3

**Comprehension:**

आगे पूछे गए प्रश्न संख्या 1 से 5 तक के उत्तर निम्न गद्यांश के आधार पर दीजिए।  
आचार्य महावीर प्रसाद द्विवेदी ने यह अकारण नहीं कहा था कि 'साहित्य समाज का दर्पण है। निःसंदेह साहित्य और समाज का अटूट संबंध है। साहित्य समाज का प्रतिबिंब भी है और मार्गदर्शक भी। मानव समाज का हित चिंतन और उसका पथप्रदर्शन करना साहित्य का लक्ष्य है। साहित्य, (1) \_\_\_\_\_ की चेतना को विकसित करता है। साहित्य वह है जिसमें समाज अपना चेहरा देखता है। साहित्य ही वह है जो समाज की शोभा, उसकी यशसंपन्नता एवं मान-मर्यादा को प्रतिबिंबित करता है। यदि समाज शरीर है, तो साहित्य उसकी (2) \_\_\_\_\_ है। जिस समाज का साहित्य जितना समृद्ध एवं (3) \_\_\_\_\_ होता है, वह समाज उतना ही श्रेष्ठ माना जाता है। समाज का नवसृजन करने वाला साहित्य एक सशक्त माध्यम तो है ही, यह (4) \_\_\_\_\_ के सम्मुख बहुत ही सहज ढंग से (5) \_\_\_\_\_ की सभ्यता और संस्कृति को भी प्रस्तुत करता है।

SubQuestion No : 16

Q.16 रिक्त स्थान (1) के लिए सर्वाधिक उपयुक्त शब्द इनमें से कौन सा होगा?

- Ans
- 1. कहानी
  - 2. समाज
  - 3. राजनीति
  - 4. कविता

Question ID : 26433092220

Status : Answered

Chosen Option : 2

**Comprehension:**

आगे पूछे गए प्रश्न संख्या 1 से 5 तक के उत्तर निम्न गद्यांश के आधार पर दीजिए।  
आचार्य महावीर प्रसाद द्विवेदी ने यह अकारण नहीं कहा था कि 'साहित्य समाज का दर्पण है। निःसंदेह साहित्य और समाज का अटूट संबंध है। साहित्य समाज का प्रतिबिंब भी है और मार्गदर्शक भी। मानव समाज का हित चिंतन और उसका पथप्रदर्शन करना साहित्य का लक्ष्य है। साहित्य, (1) \_\_\_\_\_ की चेतना को विकसित करता है। साहित्य वह है जिसमें समाज अपना चेहरा देखता है। साहित्य ही वह है जो समाज की शोभा, उसकी यशसंपन्नता एवं मान-मर्यादा को प्रतिबिंबित करता है। यदि समाज शरीर है, तो साहित्य उसकी (2) \_\_\_\_\_ है। जिस समाज का साहित्य जितना समृद्ध एवं (3) \_\_\_\_\_ होता है, वह समाज उतना ही श्रेष्ठ माना जाता है। समाज का नवसृजन करने वाला साहित्य एक सशक्त माध्यम तो है ही, यह (4) \_\_\_\_\_ के सम्मुख बहुत ही सहज ढंग से (5) \_\_\_\_\_ की सभ्यता और संस्कृति को भी प्रस्तुत करता है।

SubQuestion No : 17

Q.17 रिक्त स्थान (2) के लिए सर्वाधिक उपयुक्त शब्द इनमें से कौन सा होगा?

- Ans
- 1. भावना
  - 2. आँख
  - 3. आत्मा
  - 4. बुद्धि

Question ID : 26433092221

Status : Answered

Chosen Option : 3

**Comprehension:**

आगे पूछे गए प्रश्न संख्या 1 से 5 तक के उत्तर निम्न गद्यांश के आधार पर दीजिए।  
आचार्य महावीर प्रसाद द्विवेदी ने यह अकारण नहीं कहा था कि 'साहित्य समाज का दर्पण है। निःसंदेह साहित्य और समाज का अटूट संबंध है। साहित्य समाज का प्रतिबिंब भी है और मार्गदर्शक भी। मानव समाज का हित चिंतन और उसका पथप्रदर्शन करना साहित्य का लक्ष्य है। साहित्य, (1) \_\_\_\_\_ की चेतना को विकसित करता है। साहित्य वह है जिसमें समाज अपना चेहरा देखता है। साहित्य ही वह है जो समाज की शोभा, उसकी यशसंपन्नता एवं मान-मर्यादा को प्रतिबिंबित करता है। यदि समाज शरीर है, तो साहित्य उसकी (2) \_\_\_\_\_ है। जिस समाज का साहित्य जितना समृद्ध एवं (3) \_\_\_\_\_ होता है, वह समाज उतना ही श्रेष्ठ माना जाता है। समाज का नवसृजन करने वाला साहित्य एक सशक्त माध्यम तो है ही, यह (4) \_\_\_\_\_ के सम्मुख बहुत ही सहज ढंग से (5) \_\_\_\_\_ की सभ्यता और संस्कृति को भी प्रस्तुत करता है।

**SubQuestion No : 18**

Q.18 रिक्त स्थान (3) के लिए सर्वाधिक उपयुक्त शब्द इनमें से कौन सा होगा?

- Ans  1. उन्नति  
 2. प्रोन्नत  
 3. उन्नत  
 4. अवनत

Question ID : 26433092222

Status : Answered

Chosen Option : 3

**Comprehension:**

आगे पूछे गए प्रश्न संख्या 1 से 5 तक के उत्तर निम्न गद्यांश के आधार पर दीजिए।  
आचार्य महावीर प्रसाद द्विवेदी ने यह अकारण नहीं कहा था कि 'साहित्य समाज का दर्पण है। निःसंदेह साहित्य और समाज का अटूट संबंध है। साहित्य समाज का प्रतिबिंब भी है और मार्गदर्शक भी। मानव समाज का हित चिंतन और उसका पथप्रदर्शन करना साहित्य का लक्ष्य है। साहित्य, (1) \_\_\_\_\_ की चेतना को विकसित करता है। साहित्य वह है जिसमें समाज अपना चेहरा देखता है। साहित्य ही वह है जो समाज की शोभा, उसकी यशसंपन्नता एवं मान-मर्यादा को प्रतिबिंबित करता है। यदि समाज शरीर है, तो साहित्य उसकी (2) \_\_\_\_\_ है। जिस समाज का साहित्य जितना समृद्ध एवं (3) \_\_\_\_\_ होता है, वह समाज उतना ही श्रेष्ठ माना जाता है। समाज का नवसृजन करने वाला साहित्य एक सशक्त माध्यम तो है ही, यह (4) \_\_\_\_\_ के सम्मुख बहुत ही सहज ढंग से (5) \_\_\_\_\_ की सभ्यता और संस्कृति को भी प्रस्तुत करता है।

**SubQuestion No : 19**

Q.19 रिक्त स्थान (4) के लिए सर्वाधिक उपयुक्त शब्द इनमें से कौन सा होगा?

- Ans  1. जनमंच  
 2. जनमन  
 3. जनसामान्य  
 4. जागरण

Question ID : 26433092223

Status : Answered

Chosen Option : 1

**Comprehension:**

आगे पूछे गए प्रश्न संख्या 1 से 5 तक के उत्तर निम्न गद्यांश के आधार पर दीजिए।  
आचार्य महावीर प्रसाद द्विवेदी ने यह अकारण नहीं कहा था कि 'साहित्य समाज का दर्पण है। निःसंदेह साहित्य और समाज का अटूट संबंध है। साहित्य समाज का प्रतिबिंब भी है और मार्गदर्शक भी। मानव समाज का हित चिंतन और उसका पथप्रदर्शन करना साहित्य का लक्ष्य है। साहित्य, (1) \_\_\_\_\_ की चेतना को विकसित करता है। साहित्य वह है जिसमें समाज अपना चेहरा देखता है। साहित्य ही वह है जो समाज की शोभा, उसकी यशसंपन्नता एवं मान-मर्यादा को प्रतिबिंबित करता है। यदि समाज शरीर है, तो साहित्य उसकी (2) \_\_\_\_\_ है। जिस समाज का साहित्य जितना समृद्ध एवं (3) \_\_\_\_\_ होता है, वह समाज उतना ही श्रेष्ठ माना जाता है। समाज का नवसृजन करने वाला साहित्य एक सशक्त माध्यम तो है ही, यह (4) \_\_\_\_\_ के सम्मुख बहुत ही सहज ढंग से (5) \_\_\_\_\_ की सभ्यता और संस्कृति को भी प्रस्तुत करता है।

**SubQuestion No : 20**

Q.20 रिक्त स्थान (5) के लिए सर्वाधिक उपयुक्त शब्द इनमें से कौन सा होगा?

- Ans
- 1. दहशत
  - 2. दासता
  - 3. देशकाल
  - 4. दक्षता

Question ID : 26433092224

Status : Answered

Chosen Option : 4

WWW.GOV TJOB SALE .IN