

Constable GD in CAPFs SSF Rifleman GD in Assam Rifles and Sepoy in NCB Examination 2022

Roll Number	www.govtjobsalert.in
Candidate Name	www.govtjobsalert.in
Venue Name	iON Digital Zone iDZ 2 Sector 62
Exam Date	11/01/2023
Exam Time	11:45 AM - 12:45 PM
Subject	Constable GD Examination 2022

Section : Part-A-General Intelligence and Reasoning

Q.1 Select the option that is related to the fifth letter-cluster in the same way as the second letter-cluster is related to the first letter-cluster and the fourth letter-cluster is related to the third letter-cluster.

MUZHUK : KVXIGI :: QUACKY : OVYDIW :: ZEBECK : ?

- Ans
- 1. IAFZFX
 - 2. XFFZAI
 - 3. XFZF AI
 - 4. XAIFZF

Question ID : 26433083107
Status : Answered
Chosen Option : 3

Q.2 In a certain code language, 'CLUTCH' is written as 'DNXXHN' and 'CREDIT' is written as 'DTHHNZ'. How will 'WALLET' be written in that language?

- Ans
- 1. XOCPJZ
 - 2. XCOPJZ
 - 3. XCPOJZ
 - 4. XCOJPZ

Question ID : 26433068226
Status : Answered
Chosen Option : 2

Q.3 Select the letter-cluster from among the given options that can replace the question mark (?) in the following series.

HS, PK, XC, FU, ?

- Ans
- 1. PM
 - 2. PN
 - 3. NM
 - 4. MN

Question ID : 26433079037
Status : Answered
Chosen Option : 3

Q.4 Select the correct mirror image of the given figure when the mirror is placed at MN as shown below.



- Ans
- ✓ 1. s 2 H 8 6 | d b s
 - ✗ 2. s 2 H 8 6 | b d s
 - ✗ 3. s 2 8 H | d b s
 - ✗ 4. s 2 H 8 6 | b d s

Question ID : 26433082329

Status : Answered

Chosen Option : 1

Q.5 In a certain code language, 'COMBAT' is written as 'NPDVCD' and 'CREATE' is written as 'FSDGVC'. How will 'CREDIT' be written as in that language?

- Ans
- ✗ 1. ERCVKF
 - ✓ 2. FSDVKF
 - ✗ 3. ERCTID
 - ✗ 4. TIDERC

Question ID : 26433090040

Status : Answered

Chosen Option : 2

Q.6 Select the option that represents the correct order of the given words as they would appear in an English dictionary.

1. PURVEY
2. PURSE
3. PURPLE
4. PURELY
5. PUTTER
6. PUSTULE

- Ans
- ✗ 1. 3, 4, 2, 1, 6, 5
 - ✗ 2. 3, 4, 2, 1, 5, 6
 - ✓ 3. 4, 3, 2, 1, 6, 5
 - ✗ 4. 6, 5, 4, 3, 2, 1

Question ID : 26433079377

Status : Answered

Chosen Option : 3

Q.7 Select the correct combination of mathematical signs to sequentially replace the * signs and balance the given equation.

$$14 * 1 * 15 * 75 * 21 = 30$$

- Ans
- 1. ÷, -, +, ×
 - 2. ×, ÷, +, -
 - 3. -, ×, +, ÷
 - 4. -, ÷, ×, +

Question ID : 26433091646

Status : Answered

Chosen Option : 4

Q.8 Which of the following numbers will replace the question mark (?) in the given series?
5, 11, 23, 47, 95, ?

- Ans
- 1. 196
 - 2. 191
 - 3. 161
 - 4. 181

Question ID : 26433082015

Status : Answered

Chosen Option : 2

Q.9 Three Statements are given followed by Three conclusions numbered I, II and III. Assuming the statements to be true, even if they seem to be at variance with commonly known facts, decide which of the conclusions logically follow(s) from the statements.

Statements:

All cans are dogs.

Some dogs are rats.

Some rats are apples.

Conclusions:

I. No cans are dogs.

II. Some rats are not dogs.

III. Some apples are rats.

- Ans
- 1. Only conclusion III follows.
 - 2. None of the conclusions follow.
 - 3. Only conclusion II follows.
 - 4. Only conclusion I follows

Question ID : 26433081790

Status : Answered

Chosen Option : 1

Q.10 Eight people, A, B, C, D, E, F, G and H are sitting in a straight line, facing north. Only three people sit to the left of A. B sits third to the right of A. Only four people sit between B and D. F sits to the immediate right of G. C does not sit at any of the extreme ends of the line. E sits at one of the positions to the right of H. How many people sit between H and A?

- Ans
- 1. None
 - 2. Three
 - 3. One
 - 4. Two

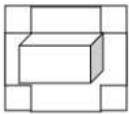
Question ID : 26433092419
Status : Answered
Chosen Option : 4

Q.11 Select the option that is related to the fifth letter-cluster in the same way as the second letter-cluster is related to the first letter-cluster and the fourth letter-cluster is related to the third letter-cluster.
DGS : PEC :: NST : QQM :: EHK : ?

- Ans
- 1. HJF
 - 2. JFB
 - 3. NFD
 - 4. HFD

Question ID : 26433057743
Status : Answered
Chosen Option : 4

Q.12 Select the option that is embedded in the given figure (rotation is NOT allowed).



- Ans
- 1.
 - 2.
 - 3.
 - 4.

Question ID : 26433082899
Status : Answered
Chosen Option : 4

Q.13 Which of the following terms will replace the question mark (?) in the given series?
 QCSD, ?, WGQZ, ZIPX, CKOV

- Ans
- 1. ERTB
 - 2. BTER
 - 3. RETB
 - 4. TERB

Question ID : 26433068987
 Status : Answered
 Chosen Option : 4

Q.14 Select the figure from among the given options that can replace the question mark (?) in the following series.

X	=	M	☆	?
↑	C	↑	C	
=	M	☆	S	
C	↑	C	↑	

Ans

- 1.

S
↑
☆
C
- 2.

↑
S
T
C
- 3.

S
↑
T
C
- 4.

S
↑
C
T

Question ID : 26433080755
 Status : Answered
 Chosen Option : 3

Q.15 'P % Q' means 'P is the brother of Q'.
'P + Q' means 'P is the daughter of Q'.
'P = Q' means 'P is the son of Q'.
'P # Q' means 'P is the wife of Q'.
If $A + B \% C = D \# F$, how is F related to A?

- Ans
- 1. Father's brother's wife
 - 2. Father's brother
 - 3. Father's father
 - 4. Mother's mother

Question ID : 26433086999
Status : Answered
Chosen Option : 3

Q.16 Which two signs should be interchanged to make the below equation mathematically correct?
 $54 \times 8 - 48 \div 12 + 27 = 24$

- Ans
- 1. - and +
 - 2. ÷ and -
 - 3. + and ×
 - 4. + and ÷

Question ID : 264330117556
Status : Answered
Chosen Option : 2

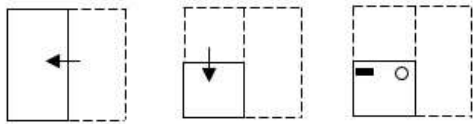
Q.17 Select the set in which the numbers are related in the same way as are the numbers of the following sets.

(NOTE : Operations should be performed on the whole numbers, without breaking down the numbers into its constituent digits. E.g. 13 – Operations on 13 such as adding/subtracting/multiplying etc. to 13 can be performed. Breaking down 13 into 1 and 3 and then performing mathematical operations on 1 and 3 is not allowed)
(6, 135, 9)
(13, 261, 16)

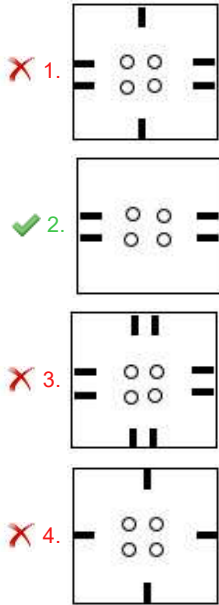
- Ans
- 1. (7, 216, 17)
 - 2. (9, 190, 13)
 - 3. (9, 224, 19)
 - 4. (11, 249, 16)

Question ID : 26433076544
Status : Not Answered
Chosen Option : --

Q.18 A paper is folded and cut as shown below. How will it appear when unfolded?



Ans



Question ID : 26433090087

Status : Answered

Chosen Option : 2

Q.19 Which of the following options will replace the question mark (?) in the given series?
416, 341, 276, ?, 176, 141, 116

- Ans
- 1. 196
 - 2. 221
 - 3. 211
 - 4. 201

Question ID : 26433089438

Status : Answered

Chosen Option : 2

Q.20 Eight people are sitting in two parallel rows with 4 people each, in such a way that there is equal distance between adjacent persons and people of one row are facing the people of other row.

In Row I – 6, 7, 8 and 9 are seated and all of them are facing south.

In Row II – 1, 2, 3 and 4 are seated and all of them are facing north.

9 sits next to the person at the extreme left end of their row and is exactly opposite 4.

3 sits at the extreme left end of their row and 2 is his immediate neighbour.

Who sits at the extreme right end of the row facing North?

- Ans
- 1. 3
 - 2. 4
 - 3. 2
 - 4. 1

Question ID : 26433068743
Status : Answered
Chosen Option : 4

Section : Part-B-General Knowledge and General awareness

Q.1 Who among the following personalities has won the Padma Shri for her contributions in Kathakali dance form in the year 2019?

- Ans
- 1. Geeta Kapoor
 - 2. Vaibhavi Merchant
 - 3. Shovana Narayan
 - 4. Milena Salvini

Question ID : 26433070807
Status : Not Answered
Chosen Option : --

Q.2 Cow Dung is used in agriculture as a _____.

- Ans
- 1. organic fertilizer
 - 2. inorganic fertilizer
 - 3. chemical fertilizer
 - 4. waste product

Question ID : 264330115422
Status : Answered
Chosen Option : 1

Q.3 In which city is the cricket stadium M Chinnaswamy located?

- Ans
- 1. Delhi
 - 2. Kolkata
 - 3. Bengaluru
 - 4. Mumbai

Question ID : 26433092327
Status : Answered
Chosen Option : 3

Q.4 In which of the following Parts of the Constitution of India are Fundamental Rights embodied?

- Ans 1. IV
 2. I
 3. III
 4. II

Question ID : 26433054894
Status : Answered
Chosen Option : 3

Q.5 Who among the following became Member of Legislative Assembly from Khairagarh, Chhattisgarh in India, in April 2022?

- Ans 1. Musafir Paswan
 2. Bandhu Tirkey
 3. Yashoda Verma
 4. Manoj Singh Mandavi

Question ID : 264330114960
Status : Not Answered
Chosen Option : --

Q.6 Prime Minister Narendra Modi launched the Jal Jeevan Mission in _____.

- Ans 1. 2022
 2. 2019
 3. 2018
 4. 2014

Question ID : 264330116188
Status : Not Answered
Chosen Option : --

Q.7 On which festival does people of North India worship goddess Lakshmi and lord Ganesha together?

- Ans 1. Dussehra
 2. Janmashtami
 3. Holi
 4. Diwali

Question ID : 264330109310
Status : Answered
Chosen Option : 4

Q.8 Which means of transport is now being used to transfer crude oil, petroleum products and natural gas?

- Ans 1. bus
 2. pipelines
 3. cable
 4. airways

Question ID : 264330115590
Status : Answered
Chosen Option : 2

Q.9 Which waterway connects the Atlantic Ocean with the Pacific Ocean?

- Ans 1. Suez Canal
 2. Kiel Canal
 3. Volga-Don Canal
 4. Panama Canal

Question ID : 264330116014
Status : Answered
Chosen Option : 1

Q.10 Which dancing legend was the youngest recipient of Padma Bhushan in 1992?

- Ans 1. Anuradha Pandey
 2. Sonal Mansingh
 3. Uday Shankar
 4. Pandit Birju Maharaj

Question ID : 264330115842
Status : Not Answered
Chosen Option : --

Q.11 According to the Article 243 of the Constitution of India, _____ means an institution of self-government constituted under article 243B, for the rural areas.

- Ans 1. Gram Sabha
 2. Municipal Committee
 3. Panchayat
 4. Municipal Corporation

Question ID : 26433086833
Status : Not Answered
Chosen Option : --

Q.12 Lakshya Sen is a player of which sport?

- Ans** 1. Badminton
 2. Table Tennis
 3. Cricket
 4. Kabbadi

Question ID : 264330115946
Status : Answered
Chosen Option : 1

Q.13 What best describes bulimia?

- Ans** 1. eating disorder
 2. neurodevelopmental disorder
 3. bipolar disorder
 4. anxiety disorder

Question ID : 264330115225
Status : Answered
Chosen Option : 2

Q.14 Prior to the country's independence, India was particularly known for its _____ industries.

- Ans** 1. Flower
 2. Spices
 3. Metal
 4. Handicraft

Question ID : 264330116137
Status : Answered
Chosen Option : 2

Q.15 Which of the following organisations conducts the sample surveys for calculating poverty line in India?

- Ans** 1. Ministry of Finance
 2. RBI
 3. CSO
 4. NSSO

Question ID : 264330115343
Status : Answered
Chosen Option : 2

Q.16 Who has been appointed as the Director General of National Investigation Agency by the Appointments Committee of the Cabinet (ACC) in June 2022?

- Ans 1. Aamir Subhami
 2. Arun Mishra
 3. Naresh Kumar
 4. Dinkar Gupta

Question ID : 264330115046
Status : Answered
Chosen Option : 4

Q.17 India accounts for how much of total world's surface area?

- Ans 1. 2.8%
 2. 3.9%
 3. 4.2%
 4. 2.4%

Question ID : 264330116051
Status : Answered
Chosen Option : 4

Q.18 _____ spent a lot of time at Harshavardhana's court and left a detailed account of what he saw.

- Ans 1. Xuan Zang
 2. Faxian
 3. Kang Seng
 4. Yijing

Question ID : 264330106592
Status : Answered
Chosen Option : 1

Q.19 In which year was Jhansi annexed by Lord Dalhousie under the policy Doctrine of Lapse?

- Ans 1. 1854
 2. 1850
 3. 1852
 4. 1848

Question ID : 26433099172
Status : Answered
Chosen Option : 4

Q.20 एक बर्तन लंबे समय तक नम हवा के संपर्क में रहता है। यह एक हल्की, हरी कोटिंग प्राप्त करता है। बर्तन किससे बना हुआ है?

- Ans
- 1. फास्फोरस
 - 2. कार्बन
 - 3. ताँबा
 - 4. लोह

Question ID : 264330115179
Status : Answered
Chosen Option : 3

Section : Part-C-Elementary Mathematics

Q.1 The curved surface area of a sphere of radius 14 cm is:

Take $\pi = \frac{22}{7}$

- Ans
- 1. 2,446 cm²
 - 2. 2,464 cm²
 - 3. 2,428 cm²
 - 4. 2,454 cm²

Question ID : 26433076054
Status : Answered
Chosen Option : 2

Q.2 A company charges 10% per annum compound interest on loan. A sum of ₹2,20,000 is given by the company for a period of 2 years. The company compounded the interest every six months instead of every year. How much money would have been saved by the borrower if the company compounded the interest annually (rounded up to one decimal place)?

- Ans
- 1. ₹1,211.40
 - 2. ₹1,412.20
 - 3. ₹1,312.20
 - 4. ₹1,111.40

Question ID : 26433085461
Status : Answered
Chosen Option : 1

Q.3 Find the smallest number divisible by the numbers 8, 16, 20 and 32.

- Ans
- 1. 120
 - 2. 200
 - 3. 144
 - 4. 160

Question ID : 26433082345
Status : Answered
Chosen Option : 4

Q.4 Two trains, 140 m and 160 m in length, are running towards each other on parallel lines, one at the speed of 40 km/h and the other at 50 km/h. In how much time will they be clear of each other from the moment they meet?

- Ans
- 1. 10 sec
 - 2. 15 sec
 - 3. 13 sec
 - 4. 12 sec

Question ID : 26433076201
Status : Answered
Chosen Option : 4

Q.5 Find the value of $40 - [20 - \{14 - (16 - 6 \times 4 - 2)\}]$.

- Ans
- 1. 42
 - 2. 44
 - 3. 40
 - 4. 38

Question ID : 26433079765
Status : Answered
Chosen Option : 2

Q.6 The average attendance at a cricket club dropped from 5640 last year to 3820 this year. What was the percent decrease from last year to this year?

- Ans
- 1. 24.48 percent
 - 2. 18.20 percent
 - 3. 32.26 percent
 - 4. 28.82 percent

Question ID : 264330116792
Status : Answered
Chosen Option : 3

Q.7 A book is listed at Rs. 300, with a discount of 20 percent. What additional discount must be offered to bring the selling price to Rs. 216?

- Ans
- 1. 20 percent
 - 2. 10 percent
 - 3. 9 percent
 - 4. 16 percent

Question ID : 264330116757
Status : Answered
Chosen Option : 2

Q.8 The weight of a liquid varies directly with its volume. A liquid that weighs 12 kg has volume of 3 litres. What will be the weight of a liquid that has volume 4 litres?

- Ans
- 1. 12 kg
 - 2. 16 kg
 - 3. 14 kg
 - 4. 8 kg

Question ID : 26433075194
Status : Answered
Chosen Option : 2

Q.9 Out of 10 persons, 9 persons spent ₹15 each on their breakfast. The tenth person spent ₹9 more than the average expenditure of all of them. The total amount spent by all of them is:

- Ans
- 1. ₹144
 - 2. ₹135
 - 3. ₹10
 - 4. ₹160

Question ID : 26433076370
Status : Answered
Chosen Option : 4

Q.10 Arun bought a laptop from Sanchit for Rs.1,12,500. Sanchit earned a profit of 25% on the laptop. Raman sold the laptop to Sanchit at a gain of 20%. How much did Raman pay to buy the laptop?

- Ans
- 1. Rs.85,000
 - 2. Rs.80,000
 - 3. Rs.75,000
 - 4. Rs.90,000

Question ID : 26433075059
Status : Not Answered
Chosen Option : --

Q.11 A bus can run 20% faster than a bike. Both start from the same place at the same time and reach the same destination 60 km away at the same time. On the way, however, the bus stops at the stations for 10 minutes. The speed of the bike is:

- Ans 1. 60 km/h
 2. 70 km/h
 3. 55 km/h
 4. 65 km/h

Question ID : 26433075197
Status : Answered
Chosen Option : 3

Q.12 By selling 55 toffees, a shopkeeper earns a profit of 11 toffees. Determine the percentage profit earned.

- Ans 1. 25%
 2. 15%
 3. 11%
 4. 20%

Question ID : 26433071310
Status : Answered
Chosen Option : 4

Q.13 A can do a piece of work in 72 days and B in 90 days. They worked together for 30 days and then B left. Find the days taken by A to finish the remaining work.

- Ans 1. 18 days
 2. 17 days
 3. 16 days
 4. 14 days

Question ID : 264330116872
Status : Answered
Chosen Option : 1

Q.14 A company offers three types of successive discounts: First offer: 25% and 5%, Second offer: 20% and 10%, Third offer: 15% and 15%. Which offer is the best for a customer?

- Ans 1. All are equally good
 2. Third offer
 3. First offer
 4. Second offer

Question ID : 26433075190
Status : Answered
Chosen Option : 4

Q.15 A can do a piece of work in 20 days and B can do the same in 24 days. How many days will they take if both work together?

- Ans
- 1. $10\frac{11}{10}$
 - 2. $10\frac{10}{11}$
 - 3. $8\frac{10}{11}$
 - 4. $10\frac{10}{8}$

Question ID : 26433076204
Status : Answered
Chosen Option : 2

Q.16 If x is directly proportional to y and x = 10 when y = 8, then what is the value of x when y = 36?

- Ans
- 1. 45
 - 2. 42
 - 3. 48
 - 4. 40

Question ID : 26433075555
Status : Answered
Chosen Option : 1

Q.17 A number is increased by 30% and then again increased by 30%. By what percentage should the increased number be reduced so as to get back the original number?

- Ans
- 1. 40.82%
 - 2. 48.20%
 - 3. 42.80%
 - 4. 38.28%

Question ID : 26433072999
Status : Answered
Chosen Option : 3

Q.18 A sum of ₹10,500 deposited 2 years ago, compounded annually, with the rate of interest 10% per annum during the first year, and 12% per annum during the second year, will amount to _____.

- Ans
- 1. ₹12,937
 - 2. ₹12,936
 - 3. ₹12,705
 - 4. ₹12,396

Question ID : 26433076197
Status : Answered
Chosen Option : 2

Q.19 If a shopkeeper mixes two types of pulses worth Rs.80 per kg and Rs.95 per kg, in the ratio 2:3, then what is the average cost of the mixture?

- Ans
- 1. Rs.87 per kg
 - 2. Rs.91 per kg
 - 3. Rs.89 per kg
 - 4. Rs.90 per kg

Question ID : 26433075642
Status : Answered
Chosen Option : 3

Q.20 If the longest diagonal of a cube is $\sqrt{432}$ cm, then its volume is:

- Ans
- 1. 1,928cm³
 - 2. 1,625cm³
 - 3. 1,825cm³
 - 4. 1,728cm³

Question ID : 26433074474
Status : Answered
Chosen Option : 4

Section : Part-D-English

Q.1 Select the INCORRECTLY spelt word.

- Ans
- 1. Efficient
 - 2. Compassion
 - 3. Mortality
 - 4. Loneliness

Question ID : 26433073736
Status : Answered
Chosen Option : 4

Q.2 Select the most appropriate synonym of the underlined word.

Ultimately it turned out to be a fair decision.

- Ans
- 1. Unbiased
 - 2. Hollow
 - 3. Effective
 - 4. Drowsy

Question ID : 26433088761
Status : Answered
Chosen Option : 1

Q.3 Select the most appropriate option to substitute the underlined segment in the given sentence.

Due to increased international travel, the tourism sector has grown to be a global tracker to the global economy.

- Ans
- 1. a complementary distributor
 - 2. a major importer
 - 3. a worthless trade
 - 4. a substantial contributor

Question ID : 26433089830
Status : Answered
Chosen Option : 4

Q.4 The following sentence has been split into four segments. Identify the segment that contains a grammatical error.
This day next year / I will having a conference with / the international board / discussing the environment.

- Ans
- 1. I will having a conference with
 - 2. the international board
 - 3. This day next year,
 - 4. discussing the environment

Question ID : 264330100303
Status : Answered
Chosen Option : 1

Q.5 Select the most appropriate meaning of the given idiom.

In dire straits

- Ans
- 1. Crumble under autocracy
 - 2. Eliminate doubts and fears
 - 3. Futuristic hope
 - 4. Very bad situation

Question ID : 26433073997
Status : Answered
Chosen Option : 1

Q.6 Select the most appropriate synonym of the given word.

Drowsy

- Ans
- 1. Stimulant
 - 2. Restive
 - 3. Sleepy
 - 4. Active

Question ID : 26433088128
Status : Answered
Chosen Option : 3

Q.7 Select the most appropriate idiom that can substitute the italicised words in the given sentence.

It was *a difficult task* to complete a relay run of 5 km in minutes yet our team managed to do it successfully.

- Ans
- 1. seeing pink elephants
 - 2. a Herculean effort
 - 3. kangaroo court
 - 4. the heels of Achilles

Question ID : 26433071999
Status : Answered
Chosen Option : 2

Q.8 Select the most appropriate ANTONYM of the given word.

Fatuity

- Ans
- 1. Sapience
 - 2. Folly
 - 3. Obey
 - 4. Disregard

Question ID : 26433072214
Status : Answered
Chosen Option : 3

Q.9 Select the most appropriate synonym of the given word to fill in the blank in the sentence.

Procure

It is very difficult to _____ food and fuel for daily necessities for people living below poverty line in the world.

- Ans
- 1. effort
 - 2. obtain
 - 3. guarantee
 - 4. console

Question ID : 26433060555
Status : Answered
Chosen Option : 2

Q.10 The sentence given below has one misspelt word. Spot the INCORRECTLY spelt word and select its correct spelling.

The play depicts a futuristec society.

- Ans
- 1. Faturistic
 - 2. Fewchuristic
 - 3. Fuetristic
 - 4. Futuristic

Question ID : 26433073547
Status : Answered
Chosen Option : 4

Q.11 Select the most appropriate option that can substitute the underlined segment in the given sentence. If there is no need to substitute it, select 'No substitution'.
Rapid deforestation may put the lives of many indigenous communities in a danger.

- Ans 1. in some danger
 2. in danger
 3. in the danger
 4. No substitution

Question ID : 26433093075
Status : Answered
Chosen Option : 2

Q.12 Select the most appropriate ANTONYM of the given word.

Neglect

- Ans 1. Remember
 2. Slight
 3. Omit
 4. Overlook

Question ID : 26433090786
Status : Answered
Chosen Option : 1

Q.13 Select the most appropriate option that can substitute the underlined segment in the given sentence.

In the olden days, when people went on pilgrimages, they created a feeling of belonging towards all, convey a message of brotherhood among all they came across.

- Ans 1. conveying
 2. has conveyed
 3. conveyed
 4. have conveyed

Question ID : 26433091870
Status : Answered
Chosen Option : 3

Q.14 Select the most appropriate option to fill in the blanks in the given sentence.

The minister was supposed to _____ the gathering located at the _____ of Hotel Mao Inn.

- Ans 1. treat
 2. address
 3. deliver
 4. speech

Question ID : 26433084771
Status : Answered
Chosen Option : 2

Q.15 Select the most appropriate option to fill in the blanks and make the sentence meaningful.

My _____ intention was to have a good time in the excellent _____.

- Ans
- 1. soul; weather
 - 2. soul; whether
 - 3. sole; weather
 - 4. sole; whether

Question ID : 26433092099

Status : Answered

Chosen Option : 3

Comprehension:

In the following passage, some words have been deleted. Read the passage carefully and select the most appropriate option to fill in each blank.

The beach is often (1) _____ to as nature's most (2) _____ tourist spot. Going to the beach allows you to take in all of nature's splendour, which includes a (3) _____ of (4) _____ sights. The beach is the perfect place where I can sit, relax and enjoy the (5) _____ and beautiful natural surroundings.

SubQuestion No : 16

Q.16 Select the most appropriate option to fill in blank number 1.

- Ans
- 1. named
 - 2. referred
 - 3. called
 - 4. associated

Question ID : 26433091727

Status : Answered

Chosen Option : 2

Comprehension:

In the following passage, some words have been deleted. Read the passage carefully and select the most appropriate option to fill in each blank.

The beach is often (1) _____ to as nature's most (2) _____ tourist spot. Going to the beach allows you to take in all of nature's splendour, which includes a (3) _____ of (4) _____ sights. The beach is the perfect place where I can sit, relax and enjoy the (5) _____ and beautiful natural surroundings.

SubQuestion No : 17

Q.17 Select the most appropriate option to fill in blank number 2.

- Ans
- 1. recognised
 - 2. natural
 - 3. crowded
 - 4. organised

Question ID : 26433091728

Status : Answered

Chosen Option : 4

Comprehension:

In the following passage, some words have been deleted. Read the passage carefully and select the most appropriate option to fill in each blank.

The beach is often (1) _____ to as nature's most (2) _____ tourist spot. Going to the beach allows you to take in all of nature's splendour, which includes a (3) _____ of (4) _____ sights. The beach is the perfect place where I can sit, relax and enjoy the (5) _____ and beautiful natural surroundings.

SubQuestion No : 18

Q.18 Select the most appropriate option to fill in blank number 3.

- Ans 1. plethora
 2. view
 3. means
 4. kind

Question ID : 26433091729
Status : Answered
Chosen Option : 2

Comprehension:

In the following passage, some words have been deleted. Read the passage carefully and select the most appropriate option to fill in each blank.

The beach is often (1) _____ to as nature's most (2) _____ tourist spot. Going to the beach allows you to take in all of nature's splendour, which includes a (3) _____ of (4) _____ sights. The beach is the perfect place where I can sit, relax and enjoy the (5) _____ and beautiful natural surroundings.

SubQuestion No : 19

Q.19 Select the most appropriate option to fill in blank number 4.

- Ans 1. rare
 2. captivating
 3. sorrowful
 4. costly

Question ID : 26433091730
Status : Answered
Chosen Option : 1

Comprehension:

In the following passage, some words have been deleted. Read the passage carefully and select the most appropriate option to fill in each blank.

The beach is often (1) _____ to as nature's most (2) _____ tourist spot. Going to the beach allows you to take in all of nature's splendour, which includes a (3) _____ of (4) _____ sights. The beach is the perfect place where I can sit, relax and enjoy the (5) _____ and beautiful natural surroundings.

SubQuestion No : 20

Q.20 Select the most appropriate option to fill in blank number 5.

- Ans 1. cognizant
 2. polluted
 3. costliest
 4. peaceful

Question ID : 26433091731
Status : Answered
Chosen Option : 4

Q.1 निम्नलिखित वाक्यांश के लिए एक सार्थक शब्द चुनिए।
जिसे पार करना कठिन हो

- Ans
- 1. दूरदर्शी
 - 2. दुस्तर
 - 3. दत्तक
 - 4. पारंगत

Question ID : 26433062734
Status : Not Answered
Chosen Option : --

Q.2 'जो अपनी जगह से न डिगे' वाक्यांश के लिए उचित शब्द बताइए -

- Ans
- 1. आधार
 - 2. अखंड
 - 3. असीमित
 - 4. अडिग

Question ID : 26433065904
Status : Not Answered
Chosen Option : --

Q.3 'ऊंट के मुंह में पान भरना।' रेखांकित वाक्यांश के स्थान पर शुद्ध वाक्यांश होगा-

- Ans
- 1. जीरा देना
 - 2. पानी भरना
 - 3. नमक देना
 - 4. धनिया देना

Question ID : 26433062813
Status : Not Answered
Chosen Option : --

Q.4 'लालकिला भारत की _____ इमारत है।' वाक्य में रिक्त स्थान की पूर्ति शुद्ध शब्द द्वारा कीजिए।

- Ans
- 1. एतिहासिक
 - 2. इतिहासिक
 - 3. ऐतिहासिक
 - 4. इतिहाषिक

Question ID : 26433069702
Status : Not Answered
Chosen Option : --

Q.5 निम्नलिखित वाक्यांश के लिए उपयुक्त शब्द का चयन विकल्पों में से कीजिए।
जो प्रमाण द्वारा सिद्ध न हो सके

- Ans
- 1. अचिंत्य
 - 2. अद्वितीय
 - 3. अनिर्वचनीय
 - 4. अप्रमेय

Question ID : 26433069995
Status : Not Answered
Chosen Option : --

Q.6 वाक्य में रेखांकित शब्द के स्थान पर सर्वोचित शब्द का चयन कीजिए।

प्रत्येक भारतवासी को हिंदी का सामान्य ज्ञान होना चाहिए।

- Ans
- 1. व्यावहारिक
 - 2. लौकिक
 - 3. सामाजिक
 - 4. साहित्यिक

Question ID : 26433065700
Status : Not Answered
Chosen Option : --

Q.7 'भारत देश के रहने वाले बहुत सारे लोग गौतम बुद्ध के अनुयायी थे।' वाक्य में प्रयुक्त 'अनुयायी' का विलोम शब्द है।

- Ans
- 1. पुजारी
 - 2. अनुगामी
 - 3. प्रसंशक
 - 4. विरोधी

Question ID : 26433069743
Status : Not Answered
Chosen Option : --

Q.8 निम्नलिखित मुहावरे के लिए उपयुक्त सार्थक शब्द है-
बहती गंगा में हाथ धोना

- Ans
- 1. सम्मान देना
 - 2. अवसर का फायदा उठाना
 - 3. बहुत अधिक परिश्रम करना
 - 4. अपमान सहन कर लेना

Question ID : 26433065774
Status : Not Answered
Chosen Option : --

Q.9 'स्वर्ग' का पर्यायवाची शब्द इनमें से क्या होगा?

- Ans
- 1. क्षितिज
 - 2. ब्रह्मांड
 - 3. देवलोक
 - 4. द्यौ

Question ID : 26433066905
Status : Not Answered
Chosen Option : --

Q.10 निम्न में से किस वाक्य में 'गंगा' के सही पर्यायवाची शब्द का प्रयोग हुआ है?

- Ans
- 1. वेदवती का जल अत्यन्त पवित्र होता है।
 - 2. कालिंदी में स्नान करना फलदायक है।
 - 3. कालगंगा का जल बहुत पवित्र होता है।
 - 4. देवनदी का जल पवित्र होता है।

Question ID : 26433066933
Status : Not Answered
Chosen Option : --

Q.11 रिक्त स्थान की पूर्ति उचित संज्ञा शब्द से करें।
_____ तरल अवस्था में होता है।

- Ans
- 1. कुछ
 - 2. वह
 - 3. सुन्दरी
 - 4. पारा

Question ID : 26433085022
Status : Not Answered
Chosen Option : --

Q.12 निम्नलिखित में से कौन-सा वाक्य संज्ञा के प्रयोग की दृष्टि से शुद्ध है?

- Ans
- 1. रघुवीर मेरा अग्रज बड़ा भाई है।
 - 2. रघुवीर मेरा अग्रज छोटा भाई है।
 - 3. रघुवीर मेरा अग्रज भाई है।
 - 4. रघुवीर मेरा अग्रज है।

Question ID : 26433066960
Status : Not Answered
Chosen Option : --

Q.13 'दादा-दादी का सबके जीवन में पूजनीय स्थान होता है।' उपरोक्त वाक्य के किस भाग में अशुद्ध वर्तनी वाला शब्द है?

- Ans
- 1. सबके जीवन में
 - 2. पूजनीय स्थान
 - 3. दादा-दादी का
 - 4. होता है।

Question ID : 26433069696
Status : Not Answered
Chosen Option : --

Q.14 वीर और साहसी पुरुष साधारण नहीं होते, अपितु _____ प्रतिभा से युक्त होते हैं।

साधारण के विलोम शब्द से वाक्य पूर्ण करें।

- Ans
- 1. विलक्षण
 - 2. बड़ी
 - 3. सामान्य
 - 4. कठोर

Question ID : 26433080879
Status : Not Answered
Chosen Option : --

Q.15 रेखांकित शब्द के स्थान पर सर्वोचित विकल्प चुनिए।
आवश्यक काम में रूत रहने के कारण मुझे अवकाश नहीं मिला।

- Ans
- 1. आसक्त
 - 2. व्यस्त
 - 3. विरक्त
 - 4. विलीन

Question ID : 26433084957
Status : Not Answered
Chosen Option : --

Comprehension:

निम्नलिखित गद्यांश में से कुछ शब्द हटा दिए गए हैं। दिए गए विकल्पों की सहायता से रिक्त स्थानों की पूर्ति कीजिए। प्रत्येक संख्या के लिए उपयुक्त विकल्प का चयन कीजिए-

बाबाजी भी मनुष्य ही थे। अपनी वस्तु की 1. _____ दूसरे के मुख से सुनने के लिए उनका हृदय अधीर हो गया। घोड़े को खोलकर बाहर गए। 2. _____ वायुवेग से उड़ने लगा। 3. _____ चाल देखकर खड्ग सिंह के हृदय पर साँप 4. _____ गया। वह डाकू था और जो वस्तु उसे पसंद आ जाए उस पर 5. _____ अपना अधिकार समझता था।

SubQuestion No : 16

Q.16 रिक्त स्थान 1 की पूर्ति के लिए सर्वाधिक उपयुक्त विकल्प का चयन कीजिए।

- Ans
- 1. नाम
 - 2. निंदा
 - 3. प्रशंसा
 - 4. बुराई

Question ID : 26433079692

Status : Not Answered

Chosen Option : --

Comprehension:

निम्नलिखित गद्यांश में से कुछ शब्द हटा दिए गए हैं। दिए गए विकल्पों की सहायता से रिक्त स्थानों की पूर्ति कीजिए। प्रत्येक संख्या के लिए उपयुक्त विकल्प का चयन कीजिए-

बाबाजी भी मनुष्य ही थे। अपनी वस्तु की 1. _____ दूसरे के मुख से सुनने के लिए उनका हृदय अधीर हो गया। घोड़े को खोलकर बाहर गए। 2. _____ वायुवेग से उड़ने लगा। 3. _____ चाल देखकर खड्ग सिंह के हृदय पर साँप 4. _____ गया। वह डाकू था और जो वस्तु उसे पसंद आ जाए उस पर 5. _____ अपना अधिकार समझता था।

SubQuestion No : 17

Q.17 रिक्त स्थान 2 की पूर्ति के लिए सर्वाधिक उपयुक्त विकल्प का चयन कीजिए।

- Ans
- 1. बैल
 - 2. घोड़ा
 - 3. मनुष्य
 - 4. बाबा

Question ID : 26433079693

Status : Not Answered

Chosen Option : --

Comprehension:

निम्नलिखित गद्यांश में से कुछ शब्द हटा दिए गए हैं। दिए गए विकल्पों की सहायता से रिक्त स्थानों की पूर्ति कीजिए। प्रत्येक संख्या के लिए उपयुक्त विकल्प का चयन कीजिए-

बाबाजी भी मनुष्य ही थे। अपनी वस्तु की 1. _____ दूसरे के मुख से सुनने के लिए उनका हृदय अधीर हो गया। घोड़े को खोलकर बाहर गए। 2. _____ वायुवेग से उड़ने लगा। 3. _____ चाल देखकर खड्ग सिंह के हृदय पर साँप 4. _____ गया। वह डाकू था और जो वस्तु उसे पसंद आ जाए उस पर 5. _____ अपना अधिकार समझता था।

SubQuestion No : 18

Q.18 रिक्त स्थान 3 की पूर्ति के लिए सर्वाधिक उपयुक्त विकल्प का चयन कीजिए।

- Ans
- 1. सबकी
 - 2. किसकी
 - 3. मेरी
 - 4. उसकी

Question ID : 26433079694

Status : Not Answered

Chosen Option : --

Comprehension:

निम्नलिखित गद्यांश में से कुछ शब्द हटा दिए गए हैं। दिए गए विकल्पों की सहायता से रिक्त स्थानों की पूर्ति कीजिए। प्रत्येक संख्या के लिए उपयुक्त विकल्प का चयन कीजिए-

बाबाजी भी मनुष्य ही थे। अपनी वस्तु की 1. _____ दूसरे के मुख से सुनने के लिए उनका हृदय अधीर हो गया। घोड़े को खोलकर बाहर गए। 2. _____ वायुवेग से उड़ने लगा। 3. _____ चाल देखकर खड्ग सिंह के हृदय पर साँप 4. _____ गया। वह डाकू था और जो वस्तु उसे पसंद आ जाए उस पर 5. _____ अपना अधिकार समझता था।

SubQuestion No : 19

Q.19 रिक्त स्थान 4 की पूर्ति के लिए सर्वाधिक उपयुक्त विकल्प का चयन कीजिए।

- Ans
- 1. रुक
 - 2. लोट
 - 3. छिप
 - 4. भाग

Question ID : 26433079695

Status : Not Answered

Chosen Option : --

Comprehension:

निम्नलिखित गद्यांश में से कुछ शब्द हटा दिए गए हैं। दिए गए विकल्पों की सहायता से रिक्त स्थानों की पूर्ति कीजिए। प्रत्येक संख्या के लिए उपयुक्त विकल्प का चयन कीजिए-

बाबाजी भी मनुष्य ही थे। अपनी वस्तु की 1. _____ दूसरे के मुख से सुनने के लिए उनका हृदय अधीर हो गया। घोड़े को खोलकर बाहर गए। 2. _____ वायुवेग से उड़ने लगा। 3. _____ चाल देखकर खड्ग सिंह के हृदय पर साँप 4. _____ गया। वह डाकू था और जो वस्तु उसे पसंद आ जाए उस पर 5. _____ अपना अधिकार समझता था।

SubQuestion No : 20

Q.20 रिक्त स्थान 5 की पूर्ति के लिए सर्वाधिक उपयुक्त विकल्प का चयन कीजिए।

- Ans
- 1. मुझे
 - 2. हम
 - 3. वह
 - 4. मैं

Question ID : 26433079696

Status : Not Answered

Chosen Option : --

WWW.GOV TJOB SALE .IN