

# Constable GD in CAPFs SSF Rifleman GD in Assam Rifles and Sepoy in NCB Examination 2022

Roll Number	www.govtjobsalert.in
Candidate Name	www.govtjobsalert.in
Venue Name	iON Digital Zone iDZ Green Park
Exam Date	24/01/2023
Exam Time	9:00 AM - 10:00 AM
Subject	Constable GD Examination 2022

## Section : Part-A-General Intelligence and Reasoning

Q.1 In a certain code language, 'OUTGROW' is written as '56GRPX' and 'THINNER' is written as '37NNFS'. How will 'THOUGHT' be written as in that language?

- Ans
- 1. 43UGHT
  - 2. 33UGIU
  - 3. 33UGHT
  - 4. 43UGIU

Question ID : 26433069645  
Status : Answered  
Chosen Option : 4

Q.2 Which of the following options will replace the question mark (?) in the given series?  
57, 63, 71, ?, 93, 107

- Ans
- 1. 81
  - 2. 83
  - 3. 77
  - 4. 87

Question ID : 26433089436  
Status : Answered  
Chosen Option : 1

Q.3 Select the option that is related to the third word in the same way as the second word is related to the first word. (The words must be considered as meaningful English words and must not be related to each other based on the number of letters/number of consonants/vowels in the word.)  
Dog : Four :: Sparrow : ?

- Ans
- 1. Two
  - 2. Six
  - 3. Five
  - 4. Seven

Question ID : 26433067378  
Status : Answered  
Chosen Option : 1

Q.4 Which two signs should be interchanged to make the below equation mathematically correct?

$$132 \div 6 - 24 \times 5 + 9 = 43$$

- Ans
- 1. + and ×
  - 2. + and ÷
  - 3. - and +
  - 4. + and ×

Question ID : 264330117554  
Status : Answered  
Chosen Option : 4

Q.5 Which of the following letters will replace the question mark (?) and complete the following letter series?

F, D, J, B, N, Z, ?

- Ans
- 1. S
  - 2. P
  - 3. Q
  - 4. R

Question ID : 26433067294  
Status : Answered  
Chosen Option : 4

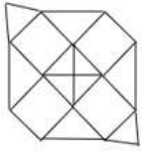
Q.6 Which option represents the correct order of the given words as they would appear in the English dictionary?

1. Elegant
2. Emerald
3. Elaborate
4. Elasticity
5. Elephant

- Ans
- 1. 3,4,5,1,2
  - 2. 3,4,1,5,2
  - 3. 4,3,2,1,5
  - 4. 4,3,1,5,2

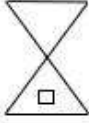
Question ID : 26433069279  
Status : Answered  
Chosen Option : 2

Q.7 Select the option that is embedded in the given figure (rotation is NOT allowed).




Ans


✗ 1.



✓ 2.



✗ 3.



✗ 4.



Question ID : 26433082897

Status : Answered

Chosen Option : 2

Q.8 6 people P, Q, R, S, T, and U are sitting on a wall facing North. P is to the immediate left of Q. R is to the immediate right of Q. Only S is sitting between R and T. U is sitting to the immediate right of T. Who is sitting between Q and S?

Ans ✗ 1. Q

✓ 2. R

✗ 3. T

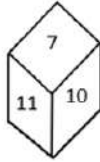
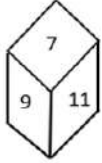
✗ 4. U

Question ID : 26433074628

Status : Answered

Chosen Option : 2

**Q.9** Two different positions of the same dice are shown having numbers 7 to 12. Find the number on the face opposite the face showing '9'.



- Ans
- 1. 8
  - 2. 10
  - 3. 11
  - 4. 12

Question ID : 26433085520  
Status : Answered  
Chosen Option : 2

**Q.10** Select the option that is related to the fifth number in the same way as the second number is related to the first number and the fourth number is related to the third number.

14 : 4 :: 18 : 6 :: 22 : ?

- Ans
- 1. 7
  - 2. 9
  - 3. 8
  - 4. 10

Question ID : 26433069426  
Status : Not Answered  
Chosen Option : --

**Q.11** Select the option that is related to the third word in the same way as the second word is related to the first word.

(The words must be considered as meaningful English words and must not be related to each other based on the number of letters/number of consonants/vowels in the word.)

Rupee : India :: Dollar : ?

- Ans
- 1. United States Of America
  - 2. England
  - 3. Europe
  - 4. United Arab Emirates

Question ID : 26433082938  
Status : Answered  
Chosen Option : 1

**Q.12** In a certain code language ACCOUNT is written as 'EBGNMYX' and MANOR is written as 'QZRRNV'. How will PATTERN be written in the same code language?

**Ans** ✓ 1. TZXSIQR

✗ 2. TZXSJQR

✗ 3. TBXSJQR

✗ 4. TBYTIQS

Question ID : 26433076686

Status : Answered

Chosen Option : 1

**Q.13** Select the letter-cluster from among the given options that can replace the question mark (?) in the following series.  
JRY, GOV, DLS, AIP, ?

**Ans** ✓ 1. XFM

✗ 2. YEF

✗ 3. XEN

✗ 4. YEN

Question ID : 26433079035

Status : Answered

Chosen Option : 1

WWW.GOVtjobsalert.in

Q.14 Which figure should replace the question mark (?) if the series were to be continued?

P	A	6	=	
A ↑ C	▽ 6 P	= C ▽	A ↑ 6	?
6 ▽ =	= C ↑	↑ A P	P ▽ C	

Ans

✗ 1.

▽		
P = A		
C ↑ 6		

✓ 2.

↑		
P ▽ A		
C = 6		

✗ 3.

▽		
6 = C		
A ↑ P		

✗ 4.

↑		
6 ▽ C		
A = P		

Question ID : 26433076631

Status : Answered

Chosen Option : 1

Q.15 'C / D' means 'C is the sister of D'.  
 'C < D' means 'C is the husband of D'.  
 'C @ D' means 'C is the father of D'.  
 'C + D' means 'C is the son of D'.  
 If P @ Q + R / S < T, how is T related to Q?

- Ans
- ✗ 1. Father's wife's sister
  - ✗ 2. Mother's mother
  - ✓ 3. Mother's brother's wife
  - ✗ 4. Mother's sister's husband

Question ID : 26433086997

Status : Not Answered

Chosen Option : --

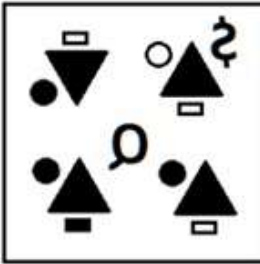
**Q.16** Which of the following figures is the exact mirror image of the given problem figure when the mirror is held at the right side?

Problem figure:

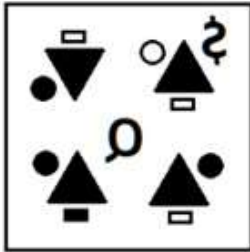


Ans


✗ 1.



✓ 2.



✗ 3.



✗ 4.



Question ID : 26433087088  
 Status : Answered  
 Chosen Option : 2

Q.17 If '+' means '-', '-' means '+', '÷' means 'x', and 'x' means '÷'. Which of the following will be the value of the expression?  
 $117 - 13 \div 6 + 24 \times 26$

- Ans  1. 36  
 2. 56  
 3. 46  
 4. 66

Question ID : 264330114191  
Status : Answered  
Chosen Option : 2

Q.18 Three statements are given, followed by three conclusions numbered I, II and III. Assuming the statements to be true, even if they seem to be at variance with commonly known facts, decide which of the conclusions logically follow(s) from the statements.

Statements:

No keys are phones.

All keys are clips.

Some keys are tables.

Conclusions:

I. Some clips are not phones.

II. Some tables are not phones.

III. Some clips are tables.

- Ans  1. Only conclusions I and III follow  
 2. Only conclusions II and III follow  
 3. All conclusions follow  
 4. Only conclusion III follows

Question ID : 26433090987  
Status : Answered  
Chosen Option : 4

Q.19 Seven people F, H, K, G, J, D, and L are sitting in a straight row, facing north. Only two people sit to the right of G. Only two people sit to the left of J. H sits between G and J. K sits between J and L. F sits between G and D. Who sits at the extreme right of the row?

- Ans  1. D  
 2. L  
 3. H  
 4. F

Question ID : 26433082637  
Status : Answered  
Chosen Option : 1



**Q.20** Which of the following numbers will replace the question mark (?) in the given series?  
23629, 23593, 23568, ?, 23543, 23539

- Ans
- 1. 23548
  - 2. 23551
  - 3. 23563
  - 4. 23552

Question ID : 26433069084  
Status : Answered  
Chosen Option : 4

Section : Part-B-General Knowledge and General awareness

**Q.1** Which of the following type of unemployment is there in rural areas?

- I. Seasonal Unemployment
- II. Disguised Unemployment

- Ans
- 1. Both I and II
  - 2. Only I
  - 3. Neither I nor II
  - 4. Only II

Question ID : 264330116082  
Status : Answered  
Chosen Option : 2

**Q.2** The golden quadrilateral super highways connect Delhi, \_\_\_\_\_, Chennai, and Mumbai.

- Ans
- 1. Kolkata
  - 2. Nagpur
  - 3. Jhansi
  - 4. Dehradun

Question ID : 264330115588  
Status : Answered  
Chosen Option : 1

**Q.3** According to Megasthenes, how many gates were there in Pataliputra?

- Ans
- 1. 261
  - 2. 366
  - 3. 125
  - 4. 64

Question ID : 264330115448  
Status : Not Answered  
Chosen Option : --

**Q.4 Which Article authorises the President to appoint the Governor of a State as the administrator of an adjoining Union territory?**

- Ans  1. Article 238(2)  
 2. Article 239(2)  
 3. Article 237(2)  
 4. Article 231(2)

Question ID : 26433089973  
Status : Not Answered  
Chosen Option : --

**Q.5 Whom has the Union Home Ministry appointed as the new Commissioner of Delhi Police in July 2022?**

- Ans  1. Sanjeev Bakshi  
 2. Mohan Malaviya  
 3. Sanjay Arora  
 4. Sumeet Bansal

Question ID : 264330115044  
Status : Answered  
Chosen Option : 3

**Q.6 In \_\_\_\_\_ method of calculating national income, we calculate the aggregate annual value of goods and services produced (if a year is the unit of time).**

- Ans  1. loan  
 2. purchase  
 3. tax  
 4. product

Question ID : 264330115341  
Status : Answered  
Chosen Option : 4

**Q.7 The deadline for the abolition of the reservation of Scheduled Castes and Scheduled Tribes in the year 2020 was extended for further \_\_\_\_\_ years.**

- Ans  1. 20  
 2. 10  
 3. 15  
 4. 5

Question ID : 264330116230  
Status : Answered  
Chosen Option : 2

Q.8 Kunchu Kurup is widely recognised for which dance form?

- Ans
- 1. Kuchipudi
  - 2. Mohiniyattam
  - 3. Kathakali
  - 4. Sattriya

Question ID : 264330115884  
Status : Answered  
Chosen Option : 4

Q.9 Which political leader won the by-poll election from Champawat constituency in Uttarakhand, in May 2022?

- Ans
- 1. Jagat Prakash Nadda
  - 2. Pushkar Singh Dhama
  - 3. Piyush Goyal
  - 4. Narendra Modi

Question ID : 264330114910  
Status : Answered  
Chosen Option : 2

Q.10 The base of the ecological pyramid is usually broad and it narrows towards the \_\_\_\_\_.

- Ans
- 1. bottom
  - 2. center
  - 3. apex
  - 4. sides

Question ID : 264330115260  
Status : Answered  
Chosen Option : 3

Q.11 The theme of the 6th International Day of Yoga-2020 was \_\_\_\_\_.

- Ans
- 1. Do Yog at home
  - 2. Har Ghar Yog
  - 3. Yoga at Home and Yoga with Family
  - 4. Be with Yoga, Be at Home!

Question ID : 26433086725  
Status : Answered  
Chosen Option : 4

Q.12 Radha Reddy and Raja Reddy are famous proponents of which dance?

- Ans  1. Kuchipudi  
 2. Bharatanatyam  
 3. Mohiniyattam  
 4. Kathakali

Question ID : 26433066534  
Status : Answered  
Chosen Option : 1

Q.13 Which of the following is a benefit of the Green Revolution?

- Ans  1. Self-sufficiency in food grains  
 2. decrease in food grain stock of government  
 3. Increase in the price of food grains  
 4. Increase in the import of food grains

Question ID : 26433054627  
Status : Answered  
Chosen Option : 4

Q.14 Which of the following is one of the principal advantage of using a solar cell?

- Ans  1. It shows oscillatory motion.  
 2. It has metal in the outer area.  
 3. It has moving parts.  
 4. It has no moving parts.

Question ID : 26433087840  
Status : Answered  
Chosen Option : 1

Q.15 Gangotri Glacier lies in which state?

- Ans  1. Arunachal Pradesh  
 2. Uttarakhand  
 3. Himachal Pradesh  
 4. Sikkim

Question ID : 264330116012  
Status : Answered  
Chosen Option : 2

Q.16 Third Five Year plans were aimed at making India \_\_\_\_\_.

- Ans  1. self reliant  
 2. an IT nation  
 3. dependent  
 4. deficient

Question ID : 264330115376  
Status : Answered  
Chosen Option : 2

**Q.17** The first Rajiv Gandhi Khel Ratna award was given to which of the following sports person?

- Ans**
- 1. Major Dhyanchand
  - 2. Sachin Tendulkar
  - 3. Vishwanathan Anand
  - 4. Saina Nehwal

Question ID : 264330116301  
Status : Answered  
Chosen Option : 3

**Q.18** Which article of the Indian Constitution deals with the abolition of titles?

- Ans**
- 1. Article 18
  - 2. Article 19
  - 3. Article 16
  - 4. Article 17

Question ID : 264330115642  
Status : Answered  
Chosen Option : 4

**Q.19** Who among the following wrote the song Vande Mataram?

- Ans**
- 1. Vir Singh Salgaonka
  - 2. Anil Chandra Banerjee
  - 3. Bankim Chandra Chattopadhyay
  - 4. Lal Makhan Singh

Question ID : 26433091465  
Status : Answered  
Chosen Option : 3

**Q.20** The Bumchu festival is primarily celebrated in which of the following states of India?

- Ans**
- 1. Sikkim
  - 2. Himachal Pradesh
  - 3. Maharashtra
  - 4. Andhra Pradesh

Question ID : 26433094881  
Status : Answered  
Chosen Option : 4

Q.1 The fourth proportional to 16, 26 and 32 is:

- Ans  1. 22  
 2. 51  
 3. 52  
 4. 23

Question ID : 26433075388  
Status : Answered  
Chosen Option : 3

Q.2 Jack can do a piece of work in 30 days. Ryan can do this work in 14 days. Jack started the work alone. After how many days should Ryan join him, so that the work is finished in 15 days?

- Ans  1. 4 days  
 2. 7 days  
 3. 8 days  
 4. 5 days

Question ID : 264330116914  
Status : Answered  
Chosen Option : 2

Q.3 The average weight of 100 employees in a company is 62 kg and that of the remaining 25 employees is 52 kg. Find the average weight of all the employees in the company.

- Ans  1. 55 kg  
 2. 60 kg  
 3. 57 kg  
 4. 58 kg

Question ID : 26433074913  
Status : Answered  
Chosen Option : 2

Q.4 In how many years ₹4,000 will amount to ₹5,324 at 10 percent per annum compound interest, compounded annually?

- Ans  1. 2  
 2. 2.5  
 3. 3  
 4. 4

Question ID : 26433079875  
Status : Answered  
Chosen Option : 3

**Q.5** After allowing a discount of 10% on its marked price, the value of a mobile phone is Rs.20,250. If no discount is allowed, then the shopkeeper gains 20%. The cost price of the mobile phone is:

- Ans
- 1. Rs.19,000
  - 2. Rs.18,000
  - 3. Rs.19,250
  - 4. Rs.18,750

Question ID : 26433074959  
Status : Not Answered  
Chosen Option : --

**Q.6** The price of an article is reduced by 10% but the daily sale of the article is increased by 20%. The net effect on the daily sale receipts is:

- Ans
- 1. Increase in 10%
  - 2. Increase in 12%
  - 3. Increase in 8%
  - 4. Increase in 5%

Question ID : 26433080103  
Status : Answered  
Chosen Option : 3

**Q.7** If a train 90-m-long crosses a platform of 210-m-long in 20 sec, then what is the speed of the train?

- Ans
- 1. 58 km/h
  - 2. 52 km/h
  - 3. 54 km/h
  - 4. 56 km/h

Question ID : 26433075692  
Status : Answered  
Chosen Option : 3

**Q.8** A man saves 25% of his monthly income. Due to a 20% increase in his income, his expenditure also increases by 20%. Now he can save Rs.1,500 per month. Find his original monthly income.

- Ans
- 1. Rs.7,500
  - 2. Rs.6,500
  - 3. Rs.5,500
  - 4. Rs.5,000

Question ID : 26433075465  
Status : Answered  
Chosen Option : 4

Q.9 Ram and Lakshman can complete a work in 15 and 20 days, respectively. If Bharat, Ram and Lakshman all are working together, then they can complete the work in 5 days. How long will Bharat take to finish the work?

- Ans
- 1. 20 days
  - 2. 10 days
  - 3. 12 days
  - 4. 15 days

Question ID : 26433075893  
Status : Answered  
Chosen Option : 3

Q.10 Two trains A and B of lengths 190 m and 195 m are running at speeds of 50 km/h and 76 km/h, respectively, towards each other on parallel tracks. In how much time will they cross each other?

- Ans
- 1. 14 seconds
  - 2. 13 seconds
  - 3. 12 seconds
  - 4. 11 seconds

Question ID : 26433075738  
Status : Answered  
Chosen Option : 4

Q.11 In a triangle, if the longest side has length 15 cm, one of the another side has length 12 cm and its perimeter is 34 cm, then the area of the triangle in  $\text{cm}^2$  is:

- Ans
- 1.  $10\sqrt{17}$
  - 2.  $5\sqrt{17}$
  - 3.  $5\sqrt{15}$
  - 4.  $10\sqrt{15}$

Question ID : 26433079971  
Status : Not Answered  
Chosen Option : --

Q.12 A dealer offers 25% discount on an item. He offers a further discount of 15% on cash payment. A customer paid ₹255 in cash. Find the marked price of the item.

- Ans
- 1. ₹600
  - 2. ₹500
  - 3. ₹300
  - 4. ₹400

Question ID : 26433074459  
Status : Not Answered  
Chosen Option : --



Q.13 The total surface area of a hemisphere is  $4158 \text{ cm}^2$ . The radius of the hemisphere is:

(use  $\pi = \frac{22}{7}$ )

- Ans  1. 21 cm  
 2. 7 cm  
 3. 42 cm  
 4. 14 cm

Question ID : 26433087408  
Status : Answered  
Chosen Option : 1

Q.14 The price of a car is Rs.2,50,000. In the first year, its value depreciates by 10%, and in the second year, it depreciates by 15%. What will be the value of the car after 2 years?

- Ans  1. Rs.1,91,250  
 2. Rs.1,85,670  
 3. Rs.1,75,000  
 4. Rs.1,90,300

Question ID : 26433065289  
Status : Answered  
Chosen Option : 1

Q.15 Rakesh sells two watches for Rs.2,530 each, gaining 15% on one and losing 15% on the other. Find his approximate gain or loss percentage in the whole transaction.

- Ans  1. Loss, 2.25%  
 2. Loss, 3.30%  
 3. Gain, 2.25%  
 4. Gain, 3.30%

Question ID : 26433075233  
Status : Answered  
Chosen Option : 1

Q.16 Arvind bought an item under successive discount scheme having 20% and 25% discounts successively, and paid ₹6,000 as the bill. MRP of the item was:

- Ans  1. ₹10,450  
 2. ₹9,420  
 3. ₹8,020  
 4. ₹10,000

Question ID : 26433080025  
Status : Answered  
Chosen Option : 4

Q.17 Simplify the following.

$$\frac{1}{8} - \left\{ \frac{1}{5} + (1 - 0.6) \right\}$$

Ans

1.  $\frac{-3}{20}$

2.  $\frac{1}{20}$

3.  $\frac{13}{40}$

4.  $\frac{-19}{40}$

Question ID : 26433082606

Status : Answered

Chosen Option : 4

Q.18 Select the correct combination and order of mathematical signs to replace '\*' such that the equation is balanced:

$$172 * 86 * 14 * 2 = 30$$

Ans  1. +, -, +

2. +, +, ×

3. +, -, ×

4. +, +, +

Question ID : 26433076408

Status : Answered

Chosen Option : 2

Q.19 A bike rider covers 100 km at a speed of 75 km/h. At what speed does the rider have to drive for the next one hour to get an average speed of 90 km/h?

Ans  1. 110 km/h

2. 90 km/h

3. 80 km/h

4. 100 km/h

Question ID : 26433091901

Status : Not Answered

Chosen Option : --

Q.20 In a college canteen, food items were collected to serve 96 students for 5 days. But due to new admissions, 64 more students joined. Now, for how many days the food items would last?

- Ans
- 1. 5 days
  - 2. 4 days
  - 3. 3 days
  - 4. 2 days

Question ID : 26433073111  
Status : Answered  
Chosen Option : 3

Section : Part-D-English

Q.1 Select the appropriate idiom that can replace the underlined phrase in the following sentence.

Geet talks incessantly about cycling in her town.

- Ans
- 1. put a bee on someone
  - 2. has a bee in her bonnet
  - 3. gives a buzz
  - 4. makes a bee line

Question ID : 26433072283  
Status : Not Answered  
Chosen Option : --

Q.2 Select the most appropriate option to fill in the blanks in the given sentence.

The vice chancellor is supposed to \_\_\_\_\_ the gathering tonight, and Seema was late as she could not find the \_\_\_\_\_ of Geeta.

- Ans
- 1. speak
  - 2. address
  - 3. home
  - 4. convey

Question ID : 26433084769  
Status : Not Answered  
Chosen Option : --

Q.3 Select the most appropriate option that can substitute the underlined segment in the given sentence.

His wife is aiding and abets him in his dishonest deeds.

- Ans
- 1. aiding and bets
  - 2. aiding and betting
  - 3. aids and abets
  - 4. aids and betting

Question ID : 26433071933  
Status : Not Answered  
Chosen Option : --

**Q.4** Select the most appropriate **ANTONYM** of the word given in brackets to fill in the blank.

We are (last) \_\_\_\_\_ in line.

- Ans
- 1. eventual
  - 2. further
  - 3. foremost
  - 4. maimed

Question ID : 26433090382  
Status : **Not Answered**  
Chosen Option : --

**Q.5** Select the most appropriate option that can substitute the underlined segment in the given sentence. If there is no need to substitute it, select 'No substitution'.

I have to save this coupon in case I come back to the store tomorrow.

- Ans
- 1. No substitution
  - 2. in case I came back to the store tomorrow
  - 3. if in case I come back to the store tomorrow
  - 4. in case I will come back to the store tomorrow

Question ID : 264330101023  
Status : **Not Answered**  
Chosen Option : --

**Q.6** Select the most appropriate synonym of the given word.

Indebted

- Ans
- 1. Careless
  - 2. Doubtful
  - 3. Envious
  - 4. Thankful

Question ID : 26433073461  
Status : **Not Answered**  
Chosen Option : --

**Q.7** The sentence given below has one misspelt word. Spot the **INCORRECTLY** spelt word and select its correct spelling.

You need to give tremendous input for excellence.

- Ans
- 1. Tremendous
  - 2. Tremindous
  - 3. Trimendous
  - 4. Tremandous

Question ID : 26433073563  
Status : **Not Answered**  
Chosen Option : --

Q.8 Select the most appropriate ANTONYM of the given word.

Cramped

- Ans
- 1. Remote
  - 2. Vicinity
  - 3. Straight
  - 4. Extensive

Question ID : 26433072204  
Status : Not Answered  
Chosen Option : --

Q.9 Select the most appropriate option to substitute the underlined segment in the given sentence.

A thin layer of substance called soil maintains the level of the Earth and is where plant roots are found.

- Ans
- 1. controls the growth
  - 2. covers the surface
  - 3. removes the texture
  - 4. designs the cultivation

Question ID : 26433089828  
Status : Not Answered  
Chosen Option : --

Q.10 Select the most appropriate synonym of the underlined word in the given sentence.

Prashant is obstinate by nature.

- Ans
- 1. adamant
  - 2. pliable
  - 3. generous
  - 4. flexible

Question ID : 26433092107  
Status : Not Answered  
Chosen Option : --

Q.11 Select the most appropriate option to fill in the blank.

Residents of the area are still trying to come to terms with the \_\_\_\_\_ of the disaster.

- Ans
- 1. heinousness
  - 2. duress
  - 3. atrocity
  - 4. enormity

Question ID : 26433073581  
Status : Not Answered  
Chosen Option : --

Q.12 Select the most appropriate ANTONYM of the given word.

Sustain

- Ans  1. Embrace  
 2. Rectify  
 3. Obstruct  
 4. Continue

Question ID : 26433090794  
Status : Not Answered  
Chosen Option : --

Q.13 Parts of the following sentence have been given as options. One of them may contain an error. Select the part that contains the error from the given options. If you don't find any error, mark 'No error' as your answer.

Her knowledge of English are very limited.

- Ans  1. knowledge of English are  
 2. very limited  
 3. Her  
 4. No Error

Question ID : 26433088857  
Status : Not Answered  
Chosen Option : --

Q.14 The sentence given below has one misspelt word. Spot the INCORRECTLY spelt word and select its correct spelling.

The number of bankrupcies was especially high last year.

- Ans  1. Bankrapcies  
 2. Bankerupcies  
 3. Bankrupsies  
 4. Bankruptcies

Question ID : 26433073545  
Status : Not Answered  
Chosen Option : --

Q.15 Select the most appropriate synonym of the underlined word.

He has a nasty habit of picking his nose.

- Ans  1. Laudable  
 2. Indolent  
 3. Cowardly  
 4. Despicable

Question ID : 26433088449  
Status : Not Answered  
Chosen Option : --

**Comprehension:**

In the following passage, some words have been deleted. Read the passage carefully and select the most appropriate option to fill in each blank.

I understood why these highly (1) \_\_\_\_\_ professionals remained in the closet. I was one of (2) \_\_\_\_\_. We could not deny our (3) \_\_\_\_\_ experiences and senses. Yet our training was in many ways diametrically (4) \_\_\_\_\_ to the information, experiences and beliefs we had accumulated. So we remained (5) \_\_\_\_\_.

**SubQuestion No : 16**

**Q.16 Select the most appropriate option to fill in blank number 1.**

- Ans  1. thought  
 2. train  
 3. studied  
 4. trained

Question ID : 26433070778  
Status : Not Answered  
Chosen Option : --

**Comprehension:**

In the following passage, some words have been deleted. Read the passage carefully and select the most appropriate option to fill in each blank.

I understood why these highly (1) \_\_\_\_\_ professionals remained in the closet. I was one of (2) \_\_\_\_\_. We could not deny our (3) \_\_\_\_\_ experiences and senses. Yet our training was in many ways diametrically (4) \_\_\_\_\_ to the information, experiences and beliefs we had accumulated. So we remained (5) \_\_\_\_\_.

**SubQuestion No : 17**

**Q.17 Select the most appropriate option to fill in blank number 2.**

- Ans  1. them  
 2. then  
 3. this  
 4. these

Question ID : 26433070779  
Status : Not Answered  
Chosen Option : --

**Comprehension:**

In the following passage, some words have been deleted. Read the passage carefully and select the most appropriate option to fill in each blank.

I understood why these highly (1) \_\_\_\_\_ professionals remained in the closet. I was one of (2) \_\_\_\_\_. We could not deny our (3) \_\_\_\_\_ experiences and senses. Yet our training was in many ways diametrically (4) \_\_\_\_\_ to the information, experiences and beliefs we had accumulated. So we remained (5) \_\_\_\_\_.

**SubQuestion No : 18**

**Q.18 Select the most appropriate option to fill in blank number 3.**

- Ans  1. his  
 2. theirs  
 3. own  
 4. hers

Question ID : 26433070780  
Status : Not Answered  
Chosen Option : --

**Comprehension:**

In the following passage, some words have been deleted. Read the passage carefully and select the most appropriate option to fill in each blank.

I understood why these highly (1) \_\_\_\_\_ professionals remained in the closet. I was one of (2) \_\_\_\_\_. We could not deny our (3) \_\_\_\_\_ experiences and senses. Yet our training was in many ways diametrically (4) \_\_\_\_\_ to the information, experiences and beliefs we had accumulated. So we remained (5) \_\_\_\_\_.

**SubQuestion No : 19**

**Q.19** Select the most appropriate option to fill in blank number 4.

- Ans  1. straight  
 2. opposite  
 3. perpendicular  
 4. diagonal

Question ID : 26433070781  
Status : Not Answered  
Chosen Option : --

**Comprehension:**

In the following passage, some words have been deleted. Read the passage carefully and select the most appropriate option to fill in each blank.

I understood why these highly (1) \_\_\_\_\_ professionals remained in the closet. I was one of (2) \_\_\_\_\_. We could not deny our (3) \_\_\_\_\_ experiences and senses. Yet our training was in many ways diametrically (4) \_\_\_\_\_ to the information, experiences and beliefs we had accumulated. So we remained (5) \_\_\_\_\_.

**SubQuestion No : 20**

**Q.20** Select the most appropriate option to fill in blank number 5.

- Ans  1. quiet  
 2. shut  
 3. quite  
 4. drawn

Question ID : 26433070782  
Status : Not Answered  
Chosen Option : --

Section : Part-D-Hindi

**Q.1** दिए गए मुहावरे में रेखांकित अंश के स्थान पर सबसे उपयुक्त विकल्प कौन-सा होगा?  
चेहरे पर मिठाईयां उड़ना।

- Ans  1. दवाईयां  
 2. हवाईयां  
 3. कलाईयां  
 4. रुलाईयां

Question ID : 26433066744  
Status : Answered  
Chosen Option : 2



Q.2 निम्नलिखित वाक्यांश के लिए एक सार्थक शब्द चुनिए।  
अनुचित बात के लिए हठ -

- Ans  1. दुराग्रह  
 2. पारदर्शक  
 3. दुर्गम्य  
 4. दृष्टव्य

Question ID : 26433062732  
Status : Answered  
Chosen Option : 1

Q.3 "घर के सभी सदस्यों ने मिलकर इसको विचार किया।" इस वाक्य का शुद्ध रूप क्या होगा?

- Ans  1. घर के सभी सदस्यों ने मिलकर इस पर विचार किया।  
 2. घर के सभी सदस्यों ने मिलकर इसमें विचार किया।  
 3. घर के सभी सदस्यों मिलकर इसे विचारा।  
 4. घर के सभी सदस्यों ने मिलकर इसे विचार किया।

Question ID : 26433066995  
Status : Answered  
Chosen Option : 1

Q.4 पूज्य व्यक्तियों की सेवा कीजिए।  
उपरोक्त वाक्य में रेखांकित पद के बदले निम्न में से उसका कौन-सा समानार्थी शब्द प्रयोग हो सकता है?

- Ans  1. शुश्रूषा  
 2. प्रार्थना  
 3. भक्ति  
 4. स्तुति

Question ID : 26433063098  
Status : Answered  
Chosen Option : 3

Q.5 निम्नलिखित विकल्पों में से किस एक वाक्य में क्रिया सम्बन्धी अशुद्धि है?

- Ans  1. उसका कहना था कि आप उसे जानते हैं।  
 2. आप वहाँ जाने सकेगे।  
 3. मैंने उस पत्र पर हस्ताक्षर कर दिए।  
 4. वह भोजन कर चुका है।

Question ID : 26433062944  
Status : Answered  
Chosen Option : 2

Q.6 'राहुल की मित्रता सोहन के अनुकूल है।' इस वाक्य में प्रयुक्त 'अनुकूल' शब्द का अर्थ क्या होगा?

- Ans
- 1. किसी के लिए निकम्मा होना
  - 2. किसी के लिए उपयोगी न होना
  - 3. अनुपयुक्तता का भाव
  - 4. किसी पक्ष के लिए लाभकारी होना

Question ID : 26433080920  
Status : Answered  
Chosen Option : 4

Q.7 निम्न वाक्य के रेखांकित अंश को विकल्पों में दिए गए किस शब्द से बदला जा सकता है?  
बहुत-से लोग उनके विवाह-समारोह में सम्मिलित हुए।

- Ans
- 1. मदनोत्सव
  - 2. महोत्सव
  - 3. विवाहोत्सव
  - 4. तिलकोत्सव

Question ID : 26433066876  
Status : Answered  
Chosen Option : 3

Q.8 निम्न में से किस वाक्य में 'कर' के सही अनेकार्थी शब्द का प्रयोग हुआ है?

- Ans
- 1. नयन ने वह कार्य पूरा नहीं किया।
  - 2. यह अत्यंत गंभीर मामला है।
  - 3. विकास अत्यंत उत्साही था।
  - 4. राजीव ने अपने हाथ खड़े कर दिए।

Question ID : 26433085143  
Status : Answered  
Chosen Option : 4

Q.9 इनमें से कौन-सा शब्द 'चंदन' का पर्यायवाची नहीं है?

- Ans
- 1. मलयज
  - 2. नौध
  - 3. दारुसार
  - 4. गंधराज

Question ID : 26433066903  
Status : Not Answered  
Chosen Option : --

Q.10 संयुक्त वाक्य - 'वह दंड से बचना चाहता था, इसलिए भाग गया।' निम्नलिखित विकल्पों में से इस वाक्य के लिए कौन सा एक उचित सरल वाक्य होगा?

- Ans  1. दंड से बचने के लिए वह भाग गया।  
 2. वह दंड से बचना चाहता था भाग गया।  
 3. बचना चाहता था,इसलिए भाग गया।  
 4. वह बचना चाहता था,इसलिए भाग गया।

Question ID : 26433062441  
Status : Answered  
Chosen Option : 1

Q.11 निम्नलिखित वाक्य के रिक्त स्थान में सबसे उपयुक्त मुहावरा क्या होगा?  
'सेठ जी \_\_\_\_\_ का हिसाब लेते हैं'

- Ans  1. पाई- पाई  
 2. पानी-पानी  
 3. बात-बात  
 4. कदम-कदम

Question ID : 26433066730  
Status : Answered  
Chosen Option : 1

Q.12 निम्न वाक्य में द्रव्य वाचक संज्ञा का गलत प्रयोग हुआ है। त्रुटि पहचानिए।  
घर में घी पीसा गया।

- Ans  1. गया  
 2. घर में  
 3. घी  
 4. पीसा

Question ID : 26433079223  
Status : Answered  
Chosen Option : 4

Q.13 'बादल की तरह गरजने वाला'  
ऊपर दिए गए वाक्यांश के लिए एक शब्द क्या होगा?

- Ans  1. तमिस्रा  
 2. मेघनाद  
 3. हिमनद  
 4. व्यापाद

Question ID : 26433070057  
Status : Answered  
Chosen Option : 2

Q.14 उपस्थित व्यक्तियों में सब ने उसकी पूजा की।  
उपरोक्त वाक्य में रेखांकित शब्द के स्थान पर आ सकने वाला सर्वोचित विकल्प चुनिए।

- Ans  1. प्रशंसा  
 2. स्तुति  
 3. उपासना  
 4. कामना

Question ID : 26433084955  
Status : Answered  
Chosen Option : 3

Q.15 निम्नलिखित में से शुद्ध वाक्य कौन-सा है?

- Ans  1. विंध्याचल पर्वत भारत के मध्य भाग में स्थित है।  
 2. यहाँ शुद्ध भैंस का दूध मिलता है।  
 3. वह सोमवार के दिन आएगा।  
 4. ग्रीष्मकाल में दिन छोटा होते हैं।

Question ID : 26433066996  
Status : Answered  
Chosen Option : 1

**Comprehension:**

निम्नलिखित गद्यांश में कुछ शब्दों को हटा दिया गया है। दिए गए विकल्पों की सहायता से रिक्त स्थानों की पूर्ति कीजिए। प्रत्येक संख्या के लिए सबसे उपयुक्त विकल्प का चयन कीजिए।  
मानव सृष्टि पाँच 1. \_\_\_\_\_ से मिल कर बनी है। उनमें जल का 2. \_\_\_\_\_ किसी से कम नहीं है। सूर्य का ताप इस जल को 3. \_\_\_\_\_ के रूप में परिवर्तित करता है जो बादल बनकर पर्वतों पर बर्फ के रूप में तथा मैदानी क्षेत्रों में वर्षा के रूप में फिर आ जाता है। पर्वतीय क्षेत्रों में बर्फ पिघलकर नदियों के रूप में समुद्र तक की 4. \_\_\_\_\_ करती है। इस प्रकार समुद्र का जल फिर समुद्र में जाकर 5. \_\_\_\_\_ जाता है।

**SubQuestion No : 16**

Q.16 रिक्त स्थान 1 की पूर्ति के लिए सबसे उपयुक्त विकल्प का चयन कीजिए।

- Ans  1. प्रकारों  
 2. तत्वों  
 3. प्रकृति  
 4. कारणों

Question ID : 264330110957  
Status : Answered  
Chosen Option : 2

**Comprehension:**

निम्नलिखित गद्यांश में कुछ शब्दों को हटा दिया गया है। दिए गए विकल्पों की सहायता से रिक्त स्थानों की पूर्ति कीजिए। प्रत्येक संख्या के लिए सबसे उपयुक्त विकल्प का चयन कीजिए।  
मानव सृष्टि पाँच 1. \_\_\_\_\_ से मिल कर बनी है। उनमें जल का 2. \_\_\_\_\_ किसी से कम नहीं है। सूर्य का ताप इस जल को 3. \_\_\_\_\_ के रूप में परिवर्तित करता है जो बादल बनकर पर्वतों पर बर्फ के रूप में तथा मैदानी क्षेत्रों में वर्षा के रूप में फिर आ जाता है। पर्वतीय क्षेत्रों में बर्फ पिघलकर नदियों के रूप में समुद्र तक की 4. \_\_\_\_\_ करती है। इस प्रकार समुद्र का जल फिर समुद्र में जाकर 5. \_\_\_\_\_ जाता है।

**SubQuestion No : 17**

Q.17 रिक्त स्थान 2 की पूर्ति के लिए सबसे उपयुक्त विकल्प का चयन कीजिए।

- Ans
- 1. कारण
  - 2. पानी
  - 3. बचाव
  - 4. महत्व

Question ID : 264330110958

Status : Answered

Chosen Option : 4

**Comprehension:**

निम्नलिखित गद्यांश में कुछ शब्दों को हटा दिया गया है। दिए गए विकल्पों की सहायता से रिक्त स्थानों की पूर्ति कीजिए। प्रत्येक संख्या के लिए सबसे उपयुक्त विकल्प का चयन कीजिए।  
मानव सृष्टि पाँच 1. \_\_\_\_\_ से मिल कर बनी है। उनमें जल का 2. \_\_\_\_\_ किसी से कम नहीं है। सूर्य का ताप इस जल को 3. \_\_\_\_\_ के रूप में परिवर्तित करता है जो बादल बनकर पर्वतों पर बर्फ के रूप में तथा मैदानी क्षेत्रों में वर्षा के रूप में फिर आ जाता है। पर्वतीय क्षेत्रों में बर्फ पिघलकर नदियों के रूप में समुद्र तक की 4. \_\_\_\_\_ करती है। इस प्रकार समुद्र का जल फिर समुद्र में जाकर 5. \_\_\_\_\_ जाता है।

**SubQuestion No : 18**

Q.18 रिक्त स्थान 3 की पूर्ति के लिए सबसे उपयुक्त विकल्प का चयन कीजिए।

- Ans
- 1. वाष्प
  - 2. कण
  - 3. वर्षा
  - 4. बर्फ

Question ID : 264330110959

Status : Answered

Chosen Option : 1

**Comprehension:**

निम्नलिखित गद्यांश में कुछ शब्दों को हटा दिया गया है। दिए गए विकल्पों की सहायता से रिक्त स्थानों की पूर्ति कीजिए। प्रत्येक संख्या के लिए सबसे उपयुक्त विकल्प का चयन कीजिए।  
मानव सृष्टि पाँच 1. \_\_\_\_\_ से मिल कर बनी है। उनमें जल का 2. \_\_\_\_\_ किसी से कम नहीं है। सूर्य का ताप इस जल को 3. \_\_\_\_\_ के रूप में परिवर्तित करता है जो बादल बनकर पर्वतों पर बर्फ के रूप में तथा मैदानी क्षेत्रों में वर्षा के रूप में फिर आ जाता है। पर्वतीय क्षेत्रों में बर्फ पिघलकर नदियों के रूप में समुद्र तक की 4. \_\_\_\_\_ करती है। इस प्रकार समुद्र का जल फिर समुद्र में जाकर 5. \_\_\_\_\_ जाता है।

**SubQuestion No : 19**

Q.19 रिक्त स्थान 4 की पूर्ति के लिए सबसे उपयुक्त विकल्प का चयन कीजिए।

- Ans
- 1. स्थान
  - 2. चर्चा
  - 3. यात्रा
  - 4. क्षेत्र

Question ID : 264330110960

Status : Answered

Chosen Option : 3

**Comprehension:**

निम्नलिखित गद्यांश में कुछ शब्दों को हटा दिया गया है। दिए गए विकल्पों की सहायता से रिक्त स्थानों की पूर्ति कीजिए। प्रत्येक संख्या के लिए सबसे उपयुक्त विकल्प का चयन कीजिए।  
मानव सृष्टि पाँच 1. \_\_\_\_\_ से मिल कर बनी है। उनमें जल का 2. \_\_\_\_\_ किसी से कम नहीं है। सूर्य का ताप इस जल को 3. \_\_\_\_\_ के रूप में परिवर्तित करता है जो बादल बनकर पर्वतों पर बर्फ के रूप में तथा मैदानी क्षेत्रों में वर्षा के रूप में फिर आ जाता है। पर्वतीय क्षेत्रों में बर्फ पिघलकर नदियों के रूप में समुद्र तक की 4. \_\_\_\_\_ करती है। इस प्रकार समुद्र का जल फिर समुद्र में जाकर 5. \_\_\_\_\_ जाता है।

**SubQuestion No : 20**

Q.20 रिक्त स्थान 5 की पूर्ति के लिए सबसे उपयुक्त विकल्प का चयन कीजिए।

- Ans
- 1. बन
  - 2. दे
  - 3. बह
  - 4. मिल

Question ID : 264330110961

Status : Answered

Chosen Option : 4