

Constable GD in CAPFs SSF Rifleman GD in Assam Rifles and Sepoy in NCB Examination 2022

Roll Number	www.govtjobsalert.in
Candidate Name	www.govtjobsalert.in
Venue Name	TCS Gito Bitan
Exam Date	08/02/2023
Exam Time	2:30 PM - 3:30 PM
Subject	Constable GD Examination 2022

Section : Part-A-General Intelligence and Reasoning

Q.1 Which of the mathematical signs should be interchanged in the below equation to make it mathematically correct?
 $360 \times 9 - 320 + 72 \div 5 = 80$

- Ans
- 1. + and ÷
 - 2. - and ÷
 - 3. × and +
 - 4. + and ×

Question ID : 264330117488

Status : Answered

Chosen Option : 3

Q.2 In this question, three statements are given, followed by two conclusions numbered I and II. Assuming the statements to be true, even if they seem to be at variance with commonly known facts, decide which of the conclusion(s) logically follows/follow from the statements.

Statements:

All fields are gardens.

All gardens are parks.

Some gardens are apartments.

Conclusions:

I. Some apartments are parks.

II. All fields are parks.

- Ans
- 1. Only conclusion II follows.
 - 2. Both conclusions I and II follow.
 - 3. Only conclusion I follow.
 - 4. Neither conclusion I nor II follows.

Question ID : 26433083095

Status : Answered

Chosen Option : 2

Q.3 Select the option that is related to the third word in the same way as the second word is related to the first word. (The words must be considered as meaningful English words and must not be related to each other based on the number of letters/number of consonants/vowels in the word.)

Mare : Stallion :: Cow : ?

- Ans
- 1. Herd
 - 2. Milk
 - 3. Calf
 - 4. Bull

Question ID : 26433069577
Status : Answered
Chosen Option : 3

Q.4 In a certain code language, 'fever origin' is coded as 'tree cloud', 'apple origin' is coded as 'brown cloud', and 'sandwich fever' is coded as 'shoe tree'. What is the code word for 'apple'?

- Ans
- 1. fever
 - 2. cloud
 - 3. sandwich
 - 4. brown

Question ID : 26433079363
Status : Answered
Chosen Option : 4

Q.5 Which option represents the correct order of the given words as they would appear in the English dictionary?

- 1 Magical
- 2 Magnificent
- 3 Marble
- 4 Marvellous
- 5 Marigold

- Ans
- 1. 1,2,3,4,5
 - 2. 1,4,3,2,5
 - 3. 1,3,2,4,5
 - 4. 1,2,3,5,4

Question ID : 26433069281
Status : Answered
Chosen Option : 4

Q.6 Select the option that is related to the fifth term in the same way as the second term is related to the first term and fourth term is related to the third term.
ENGLISH : HSILGNE :: BIOLOGY : YGOLOIB :: PHYSICS : ?

- Ans
- 1. SPSICSY
 - 2. SYPHSIC
 - 3. SCISYHP
 - 4. PYHISCS

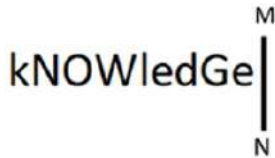
Question ID : 26433067267
Status : Answered
Chosen Option : 3

Q.7 Which letter-cluster will replace the question mark (?) to complete the given series?
JSCM, ?, NYKW, PBOB, RESG

- Ans 1. LVGR
 2. NXIS
 3. MUHQ
 4. MWHS

Question ID : 26433068035
Status : Answered
Chosen Option : 1

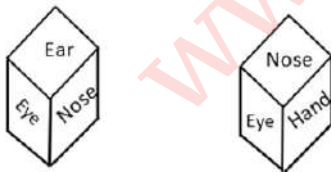
Q.8 Select the correct mirror image of the given figure when the mirror is placed at MN as shown below.



- Ans 1.
 2.
 3.
 4.

Question ID : 26433085553
Status : Answered
Chosen Option : 3

Q.9 Two different positions of the same dice are shown having names of different body parts – Ear, Eye, Nose, Mouth, Head and Hand. Find the body part on the face opposite the face showing 'Ear'.



- Ans 1. Eye
 2. Hand
 3. Mouth
 4. Head

Question ID : 26433085522
Status : Answered
Chosen Option : 2

Q.10 'A + B' means 'B is the father of A'
'A @ B' means 'B is the brother of A'
'A \$ B' means 'B is the husband of A'
'A & B' means 'B is the wife of A'
If A @ B + C & D @ E, then how is E related to A?

Ans 1. Mother's brother

2. Son

3. Husband

4. Brother

Question ID : 26433068528

Status : Answered

Chosen Option : 1

Q.11 Select the option that is related to the fifth number in the same way as the second number is related to the first number and the fourth number is related to the third number.

20 : 2 :: 42 : 4 :: 72 : ?

Ans 1. 14

2. 10

3. 6

4. 8

Question ID : 26433069409

Status : Answered

Chosen Option : 3

Q.12 Which figure should replace the question mark (?) if the series were to be continued?

X	↑	O	Y	
O Y 3	3 O Y	X ↑ Δ	Δ X ↑	?
Δ ↑	X Δ	3 Y	O 3	

Ans

✗ 1.

O		
↑	Δ	X
3		Y

✗ 2.

X		
3	Y	O
↑		Δ

✗ 3.

3		
↑	Δ	X
Y		O

✓ 4.

X		
O	Y	3
Δ		↑

Question ID : 26433076633

Status : Answered

Chosen Option : 2

Q.13 Seven people, A, B, C, D, E, F and G are sitting in a straight row, facing north. Only two people sit between D and G. Only four people sit between G and A. B sits fourth to the right of A. G is sitting immediately between B and F. F is sitting fifth to the right of C. Who is sitting at the third position from the left end of the row?

- Ans
- ✗ 1. E
 - ✗ 2. B
 - ✗ 3. A
 - ✓ 4. D

Question ID : 26433068282

Status : Answered

Chosen Option : 2

Q.14 Four friends Ram, Shyam, Sunil and Anil are sitting around a circular table facing the centre. If Ram is sitting to the immediate left of Sunil and Shyam is not sitting next to Ram, then who is sitting to the immediate left of Shyam?

- Ans
- 1. Ram
 - 2. Either Ram or Sunil
 - 3. Sunil
 - 4. Anil

Question ID : 264330114205
Status : Answered
Chosen Option : 4

Q.15 Which of the following numbers will replace the question mark (?) in the given series?
59, 72, 87, 104, ?, 144

- Ans
- 1. 123
 - 2. 127
 - 3. 121
 - 4. 125

Question ID : 26433069394
Status : Answered
Chosen Option : 1

Q.16 If '+' means 'x', '÷' means '+', '-' means '÷', and 'x' means '-'. Which of the following will be the value of the expression $48 \div 72 - 6 \times 18 + 3$

- Ans
- 1. 6
 - 2. 12
 - 3. 16
 - 4. 18

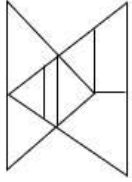
Question ID : 264330114193
Status : Answered
Chosen Option : 3

Q.17 Which number will replace the question mark (?) in the following series?
125, 120, 130, ?, 135, 110

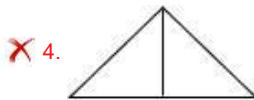
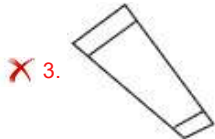
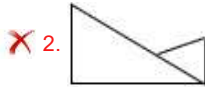
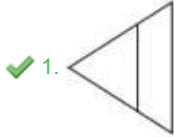
- Ans
- 1. 140
 - 2. 115
 - 3. 150
 - 4. 110

Question ID : 26433067837
Status : Answered
Chosen Option : 2

Q.18 Select the option figure which is embedded in the given figure. (Rotation is NOT allowed)



Ans



Question ID : 26433069330
Status : Answered
Chosen Option : 1

Q.19 Which of the following letters will replace the question mark (?) and complete the following letter series?
K, N, R, W, C, ?

- Ans ✓ 1. J
✗ 2. K
✗ 3. L
✗ 4. I

Question ID : 26433067296
Status : Answered
Chosen Option : 1

Q.20 In a code language, 'he came forward' is coded as 'ar ka mu', 'move forward' is coded as 'ba mu', and 'he must move' is coded as 'ar du ba'. What is the code for the word 'must'?

- Ans ✗ 1. mu
✗ 2. ar
✓ 3. du
✗ 4. ba

Question ID : 26433069469
Status : Answered
Chosen Option : 3

Q.1 In a food chain, _____ can be taken as the average value for the amount of organic matter that is present at each step and reaches the next level of consumers.

- Ans
- 1. 1%
 - 2. 0.01%
 - 3. 0.1%
 - 4. 10%

Question ID : 264330115197
Status : Answered
Chosen Option : 2

Q.2 Who has been appointed as the second Chief of Defence Staff of India?

- Ans
- 1. General Manoj Mukund Naravane
 - 2. Lieutenant General Anil Chauhan
 - 3. General Manoj Pande
 - 4. Lieutenant General Baggavalli Somashekar Raju

Question ID : 264330114978
Status : Answered
Chosen Option : 3

Q.3 Electric current in a circuit is measured by _____.

- Ans
- 1. voltmeter
 - 2. odometer
 - 3. potential meter
 - 4. ammeter

Question ID : 26433089645
Status : Answered
Chosen Option : 1

Q.4 In 1986, an operation had to be conducted against terrorists in the Golden Temple. What was the name of this operation?

- Ans
- 1. Operation Lightning Thunder
 - 2. Operation Thunder
 - 3. Operation Black Thunder
 - 4. Operation Rain and Thunder

Question ID : 264330115684
Status : Not Answered
Chosen Option : --

Q.5 In which year was the Rural Employment Generation Program launched in India?

Ans 1. 1995

2. 2000

3. 2004

4. 1997

Question ID : 264330116069

Status : Answered

Chosen Option : 3

Q.6 Natya Visharadha presented by His Excellency Shankar Dayal Sharma, in 1994 was given to _____.

Ans 1. Sunanda Nair

2. G. Padmaja Reddy

3. Shovana Narayan

4. Anuradha Pandey

Question ID : 264330115869

Status : Not Answered

Chosen Option : --

Q.7 When a national GST subsumed central taxes on July 1, 2017, how many petroleum goods were kept out of its purview for the time being?

Ans 1. Five

2. Four

3. Six

4. Three

Question ID : 264330116215

Status : Not Answered

Chosen Option : --

Q.8 Fa Xian began his journey back from _____.

Ans 1. Tibet

2. Madurai

3. Bengal

4. Patliputra

Question ID : 264330115450

Status : Answered

Chosen Option : 1

Q.9 Vishu is a _____ festival, celebrated primarily in the southern part of India.

- Ans
- 1. Buddhist
 - 2. Parsi
 - 3. Hindu
 - 4. Jain

Question ID : 26433094883
Status : Answered
Chosen Option : 4

Q.10 As of November 2022, who among the following is the Chief Minister of Jharkhand, India?

- Ans
- 1. Raghubar Das
 - 2. Pankaj Mishra
 - 3. Hemant Soren
 - 4. Amit Shah

Question ID : 264330114912
Status : Answered
Chosen Option : 3

Q.11 There were two Annual Programs implemented in India in 1990-91 and 1991-92 (between _____ five year plans).

- Ans
- 1. first and second
 - 2. third and fourth
 - 3. fifth and sixth
 - 4. seventh and eighth

Question ID : 264330115378
Status : Not Answered
Chosen Option : --

Q.12 In India, the 'Green Revolution' mainly started in the _____.

- Ans
- 1. 1950's
 - 2. 1980's
 - 3. 1970's
 - 4. 1960's

Question ID : 264330116149
Status : Answered
Chosen Option : 2

Q.13 Which of the following is caused by Loo?

- Ans
- 1. Hypothermia
 - 2. Frost Bite
 - 3. Heat Stroke
 - 4. Chilblains

Question ID : 264330115977
Status : Answered
Chosen Option : 1

Q.14 Parliament consists of _____.

- (i) President
- (ii) The Council of States
- (iii) The House of the People

- Ans
- 1. (i), (ii) and (iii)
 - 2. Both (i) and (iii)
 - 3. Both (ii) and (iii)
 - 4. Only (i)

Question ID : 26433089914
Status : Answered
Chosen Option : 2

Q.15 Which schedule of Indian constitution contains languages of Republic of India?

- Ans
- 1. 8
 - 2. 7
 - 3. 9
 - 4. 6

Question ID : 264330115610
Status : Answered
Chosen Option : 4

Q.16 What happens in plantation farming?

- Ans
- 1. single crop is grown
 - 2. multiple crops are grown
 - 3. only two crops are grown
 - 4. crop is rotated

Question ID : 264330115522
Status : Answered
Chosen Option : 2

Q.17 There are _____ hand gestures in Mohiniyattam which are mainly adopted from Hastalakshana Deepika text.

- Ans
- 1. 18
 - 2. 20
 - 3. 24
 - 4. 28

Question ID : 264330115061
Status : Not Answered
Chosen Option : --

Q.18 Milkha Singh, the Flying Sikh, was the first Indian to win a gold medal in which of the following games?

- Ans
- 1. Championship Series
 - 2. Asian Games
 - 3. Winter Olympics
 - 4. Commonwealth Games

Question ID : 26433089920
Status : Answered
Chosen Option : 4

Q.19 The Logo of 36th National Games of India contains a Picture of _____.

- Ans
- 1. Zebra
 - 2. Tiger
 - 3. Horse
 - 4. Lion

Question ID : 264330116283
Status : Answered
Chosen Option : 2

Q.20 Constitutional requirement to present the Annual Financial Statement before parliament is given in article _____ of the Constitution of India.

- Ans
- 1. 12
 - 2. 123
 - 3. 121
 - 4. 112

Question ID : 264330115275
Status : Answered
Chosen Option : 4

Q.1 In a 100-metre race, A can beat B by 20 m and B can beat by C 10 m. In the same race, A can beat C by:

- Ans 1. 28 m
 2. 30 m
 3. 26 m
 4. 20 m

Question ID : 26433073043
Status : Answered
Chosen Option : 2

Q.2 A batsman scores 50, 56, 42, 38 and 78 in his 5 innings. How much does he need to score in his 6th inning to get his average to 60 in 6 innings?

- Ans 1. 90
 2. 96
 3. 100
 4. 106

Question ID : 264330116682
Status : Not Answered
Chosen Option : --

Q.3 Find the discount, if the marked price of book is Rs.500 and sold it for Rs. 400.

- Ans 1. Rs. 60
 2. Rs. 100
 3. Rs. 50
 4. Rs. 200

Question ID : 264330116714
Status : Answered
Chosen Option : 2

Q.4 Potato's per-kilogram price has risen from Rs.18 to Rs.25. What should be the percentage reduction in potato use so that expenditure does NOT increase?

- Ans 1. 28%
 2. 31%
 3. 22%
 4. 34%

Question ID : 26433075846
Status : Answered
Chosen Option : 1

Q.5 The base diameter of a closed cylinder is 20 cm and its height is 11 cm. Find the total surface area of the cylinder.(Use $\pi=22/7$)

- Ans
- 1. 1330 cm²
 - 2. 1320 cm²
 - 3. 1325 cm²
 - 4. 1315 cm²

Question ID : 26433076311
Status : Answered
Chosen Option : 2

Q.6 The difference between the value of a number increased by 5 percent and the value of a number decreased by 15 percent is 9. What is the original number?

- Ans
- 1. 30
 - 2. 60
 - 3. 55
 - 4. 45

Question ID : 264330116819
Status : Not Answered
Chosen Option : --

Q.7 $3^5 + 3^6 + 3^7 + 3^8$ is completely divisible by

- Ans
- 1. 10
 - 2. 14
 - 3. 17
 - 4. 11

Question ID : 26433076301
Status : Answered
Chosen Option : 3

Q.8 The sides of a triangle are 5 cm, 12 cm and 13 cm. The area (in cm²) of the triangle formed by joining the mid-points of the sides of the triangle is:

- Ans
- 1. 7.5 cm²
 - 2. 21.5 cm²
 - 3. 15 cm²
 - 4. 30 cm²

Question ID : 26433087404
Status : Answered
Chosen Option : 1

Q.9 When 20% of first number is added to second number, the second number increases by 50%. What is the ratio of the first number to the second number?

- Ans
- 1. 5 : 3
 - 2. 2 : 5
 - 3. 3 : 5
 - 4. 5 : 2

Question ID : 26433073126
Status : Answered
Chosen Option : 4

Q.10 What will be the amount due on Rs.25,000 in 2 years when the rate of interest in successive years is 12% and 10% per annum respectively (interest is compounding annually)?

- Ans
- 1. Rs.30,800
 - 2. Rs.33,800
 - 3. Rs.28,000
 - 4. Rs.27,800

Question ID : 26433072971
Status : Answered
Chosen Option : 3

Q.11 Prem can do a piece of work in 112 days. Ben can do this work in 90 days. Prem started the work alone. After how many days should Ben join him, so that the total work is finished in 56 days?

- Ans
- 1. 10 days
 - 2. 8 days
 - 3. 11 days
 - 4. 7 days

Question ID : 264330116899
Status : Answered
Chosen Option : 2

Q.12 What is the fourth proportional to the numbers 10,16 and 20?

- Ans
- 1. 28
 - 2. 24
 - 3. 32
 - 4. 30

Question ID : 26433075670
Status : Answered
Chosen Option : 2

Q.13 The difference between the selling prices of an article available in two schemes of successive discounts 25% followed by 30%, and 25% followed by 20% is ₹75. Find the marked price of the article (in ₹).

- Ans
- 1. 900
 - 2. 1500
 - 3. 1200
 - 4. 1000

Question ID : 26433081570
Status : Not Answered
Chosen Option : --

Q.14 A watch is sold for Rs.15,000 at a loss of 25%. What is the cost price of the watch?

- Ans
- 1. Rs.18,500
 - 2. Rs.20,000
 - 3. Rs.16,000
 - 4. Rs.18,000

Question ID : 26433073084
Status : Answered
Chosen Option : 4

Q.15 Ajay can do a piece of work in 20 days and Vijay can do the same work in 22 days. In how many days they will complete the work together if they work on alternate days and the work is started by Vijay?

- Ans
- 1. 20
 - 2. 21
 - 3. 22
 - 4. 24

Question ID : 26433075956
Status : Answered
Chosen Option : 2

Q.16 Find the value of $\frac{(0.0002)^2 + (0.0033)^2 + (0.0444)^2}{(0.00002)^2 + (0.00033)^2 + (0.00444)^2}$.

- Ans
- 1. 100
 - 2. 80
 - 3. 90
 - 4. 110

Question ID : 26433091983
Status : Answered
Chosen Option : 4

Q.17 A faulty machine weighs 900 g as 1000 g. A shopkeeper uses this weighing machine to sell 45 kg of rice at Rs.65 per kg which he bought at Rs.58 per kg. His overall profit percentage is approximately equal to:

- Ans
- 1. 23.8%
 - 2. 18.9%
 - 3. 22.6%
 - 4. 24.5%

Question ID : 26433075315
Status : Not Answered
Chosen Option : --

Q.18 The value of a machine in a company depreciates by 10% every year. Determine the value (in Rs.) of the machine after 2 years if the current value is Rs.2 lakh.

- Ans
- 1. 1,64,000
 - 2. 1,80,000
 - 3. 1,60,000
 - 4. 1,62,000

Question ID : 26433071331
Status : Answered
Chosen Option : 2

Q.19 There are four sections: A, B, C and D of class X in a school. In every section, there are 30 students. The average score in maths of the four sections is 89.8, 92.6, 99.1 and 94.5, respectively. What is the average score in maths of the whole class X in that school?

- Ans
- 1. 96.8
 - 2. 95.0
 - 3. 92.5
 - 4. 94.0

Question ID : 26433075097
Status : Answered
Chosen Option : 2

Q.20 R runs for 10 hours at speeds of 10 km/h, 9 km/h, ..., 1 km/h, respectively, in the first hour, second hour, and so on. His average speed is _____ km/h.

- Ans
- 1. 4.5
 - 2. 5
 - 3. 6
 - 4. 5.5

Question ID : 26433071261
Status : Answered
Chosen Option : 2

Q.1 Select the word similar in meaning to the given word.

Skip

- Ans 1. Overlook
 2. Insert
 3. Notice
 4. Introduce

Question ID : 26433088862
Status : Answered
Chosen Option : 1

Q.2 Select the most appropriate option that can substitute the underlined segment in the given sentence.

After studying the evidence thoroughly, the detective inferred the motive.

- Ans 1. unusually concealed
 2. logically concluded
 3. intensely disliked
 4. violently criticised

Question ID : 26433099878
Status : Answered
Chosen Option : 2

Q.3 Select the most appropriate ANTONYM of the underlined word to fill in the blank.

The servile nature of the employees was contrary to the employer's _____ nature.

- Ans 1. dishonest
 2. dominant
 3. curious
 4. furious

Question ID : 26433091847
Status : Answered
Chosen Option : 1

Q.4 Select the most appropriate ANTONYM of the given word.

Influence

- Ans 1. Impact
 2. Stir
 3. Effect
 4. Deter

Question ID : 26433085199
Status : Answered
Chosen Option : 4

Q.5 Parts of the given sentence have been given as options. One of them contains a spelling error. Select the option that rectifies the error.

Superbugs are the bacteria that have acquired resistance to several types of antibiotics either through genetic mutation or through buildup resistance over time.

- Ans
- 1. resistance
 - 2. bacteria
 - 3. mutattion
 - 4. acquired

Question ID : 26433072043
Status : Answered
Chosen Option : 1

Q.6 Select the most appropriate meaning of the underlined idiom in the given sentence.

If the linguistic minority refuses to vote, it may rock the boat.

- Ans
- 1. Lead to protests
 - 2. Topple the government
 - 3. Upset the balance
 - 4. Restore the equilibrium

Question ID : 26433071995
Status : Answered
Chosen Option : 3

Q.7 Select the option in which all the words are spelt correctly.

- Ans
- 1. Our school principal declared that the new rule was applicable to everyone.
 - 2. Our school principal declared that the new rule was aplicable to everyone.
 - 3. Our school principal declared that the new rule was appleecable to everyone.
 - 4. Our school principal declared that the new rule was applikable to everyone.

Question ID : 26433072286
Status : Answered
Chosen Option : 1

Q.8 Select the most appropriate option that can substitute the underlined segment in the given sentence.

My dad asked my mom to prepare lunch early as he was feeling very hungry.

- Ans
- 1. terrible
 - 2. exhausted
 - 3. starved
 - 4. tired

Question ID : 26433086459
Status : Answered
Chosen Option : 3

Q.9 Select the most appropriate option to fill in the blank.

Due to some technical emergency, the helicopter was supposed to land on a _____ (occupied) piece of land.

- Ans
- 1. jammed
 - 2. active
 - 3. vacant
 - 4. teeming

Question ID : 26433060719
Status : Answered
Chosen Option : 1

Q.10 Select the most appropriate synonym of the given word.

Amputate

- Ans
- 1. Brighten
 - 2. Energise
 - 3. Sever
 - 4. Argue

Question ID : 26433073463
Status : Answered
Chosen Option : 3

Q.11 Select the most appropriate synonym of the word given in brackets to fill in the blank.

His best friend _____ (disclose) his business secrets in the press conference.

- Ans
- 1. revealed
 - 2. deceived
 - 3. concealed
 - 4. superseded

Question ID : 26433084720
Status : Answered
Chosen Option : 1

Q.12 The following sentence has been split into four segments. Identify the segment that contains a grammatical error.

The policeman / walk along the / road when I saw / a body in the gutter.

- Ans
- 1. walk along the
 - 2. a body in the gutter
 - 3. The policeman
 - 4. road when I saw

Question ID : 26433092276
Status : Answered
Chosen Option : 1

Q.13 Select the most appropriate meaning of the given idiom.

Once in a blue moon

- Ans 1. Very rarely
 2. To agree reluctantly
 3. A quick response
 4. Moon in the night

Question ID : 26433073705
Status : Answered
Chosen Option : 1

Q.14 Select the most appropriate ANTONYM of the given word.

Rival

- Ans 1. Employer
 2. Comrade
 3. Opponent
 4. Antagonist

Question ID : 26433072206
Status : Answered
Chosen Option : 2

Q.15 Select the most appropriate option to fill in the blank.

One should never _____ from pals or activities that formerly provided solace.

- Ans 1. remove
 2. withdraw
 3. suspend
 4. deduct

Question ID : 26433073617
Status : Answered
Chosen Option : 1

Comprehension:

In the following passage, some words have been deleted. Read the passage carefully and select the most appropriate option to fill in each blank.

One of the (1) _____ that Elizabeth had to attend was ballet, and she loathed it. She would stuff (2) _____ into her pink tut, and stare at her (3) _____ in the mirror and try to tell herself that she was not made for dance. But the truth was (4) _____ for her to see. She was having two left feet. She (5) _____ never be a ballet dancer.

SubQuestion No : 16

Q.16 Select the most appropriate option to fill in blank number 1.

- Ans
- 1. Seminars
 - 2. lectures
 - 3. classes
 - 4. Meetings

Question ID : 26433071904
Status : Answered
Chosen Option : 4

Comprehension:

In the following passage, some words have been deleted. Read the passage carefully and select the most appropriate option to fill in each blank.

One of the (1) _____ that Elizabeth had to attend was ballet, and she loathed it. She would stuff (2) _____ into her pink tut, and stare at her (3) _____ in the mirror and try to tell herself that she was not made for dance. But the truth was (4) _____ for her to see. She was having two left feet. She (5) _____ never be a ballet dancer.

SubQuestion No : 17

Q.17 Select the most appropriate option to fill in blank number 2.

- Ans
- 1. oneself
 - 2. himself
 - 3. herself
 - 4. Ourselves

Question ID : 26433071905
Status : Answered
Chosen Option : 3

Comprehension:

In the following passage, some words have been deleted. Read the passage carefully and select the most appropriate option to fill in each blank.

One of the (1) _____ that Elizabeth had to attend was ballet, and she loathed it. She would stuff (2) _____ into her pink tut, and stare at her (3) _____ in the mirror and try to tell herself that she was not made for dance. But the truth was (4) _____ for her to see. She was having two left feet. She (5) _____ never be a ballet dancer.

SubQuestion No : 18

Q.18 Select the most appropriate option to fill in blank number 3.

- Ans 1. photograph
 2. Sketch
 3. Painting
 4. image

Question ID : 26433071906
Status : Answered
Chosen Option : 4

Comprehension:

In the following passage, some words have been deleted. Read the passage carefully and select the most appropriate option to fill in each blank.

One of the (1) _____ that Elizabeth had to attend was ballet, and she loathed it. She would stuff (2) _____ into her pink tut, and stare at her (3) _____ in the mirror and try to tell herself that she was not made for dance. But the truth was (4) _____ for her to see. She was having two left feet. She (5) _____ never be a ballet dancer.

SubQuestion No : 19

Q.19 Select the most appropriate option to fill in blank number 4.

- Ans 1. their
 2. there
 3. Therein
 4. Here

Question ID : 26433071907
Status : Answered
Chosen Option : 2

Comprehension:

In the following passage, some words have been deleted. Read the passage carefully and select the most appropriate option to fill in each blank.

One of the (1) _____ that Elizabeth had to attend was ballet, and she loathed it. She would stuff (2) _____ into her pink tut, and stare at her (3) _____ in the mirror and try to tell herself that she was not made for dance. But the truth was (4) _____ for her to see. She was having two left feet. She (5) _____ never be a ballet dancer.

SubQuestion No : 20

Q.20 Select the most appropriate option to fill in blank number 5.

- Ans 1. Ever
 2. would
 3. can't
 4. won't

Question ID : 26433071908
Status : Answered
Chosen Option : 2

Section : Part-D-Hindi

Q.1 निम्नलिखित मुहावरे के सही अर्थ का चयन विकल्पों में से कीजिए।
भूजी भांग न होना

- Ans 1. संदेह की स्थिति में होना
 2. सबसे परे रहना
 3. अत्यंत दरिद्र होना
 4. कष्ट झेलना

Question ID : 26433070010
Status : Not Answered
Chosen Option : --

Q.2 निम्नलिखित विकल्पों में से किस एक वाक्य में क्रिया सम्बन्धी अशुद्धि है?

- Ans 1. मैंने पानी पी लिया।
 2. आज मैंने भरपेट खाया।
 3. बहुत दिनों बाद आज उसने मुझे देखा।
 4. मैं उसे सहायता देना चाहता हूँ।

Question ID : 26433062946
Status : Not Answered
Chosen Option : --

Q.3 'छक्के छुड़ाना' मुहावरे का अर्थ क्या है?

- Ans 1. बुरी तरह हराना
 2. बहुत मेहनत करना
 3. काम आसान करना
 4. मैच में छक्का लगाना

Question ID : 26433066805
Status : Not Answered
Chosen Option : --

Q.4 'भौरे गाते गुनगुन गाना।' विकल्पों में दिया गया कौन सा शब्द उक्त वाक्य में प्रयुक्त 'भौरे' शब्द का पर्यायवाची नहीं है?

- Ans 1. शफरी
 2. मधुप
 3. अलि
 4. भ्रमर

Question ID : 26433069736
Status : Not Answered
Chosen Option : --

Q.5 निम्न में से 'सरस्वती' का पर्याय नहीं है-

- Ans 1. वागेश्वरी
 2. भारती
 3. शारदा
 4. दामिनी

Question ID : 26433062158
Status : Not Answered
Chosen Option : --

Q.6 निम्न वाक्य के रिक्त स्थान की पूर्ति कोष्ठक में दिए गए शब्द के विकल्पों में दिए गए सही विलोम शब्द से कीजिए।
समुद्र का विस्तार _____ है। (ससीम)

- Ans 1. सीमा
 2. अवशेष
 3. असीम
 4. अवलंबित

Question ID : 26433085178
Status : Not Answered
Chosen Option : --

Q.7 निम्नलिखित वाक्यांश के लिए सार्थक शब्द चुनिए।
आवश्यकता से अधिक बरसात

- Ans 1. अनावृष्टि
 2. अल्पवृष्टि
 3. अतिवृष्टि
 4. अतिक्रमण

Question ID : 26433069980
Status : Not Answered
Chosen Option : --

Q.8 निम्नलिखित वाक्य में रेखांकित एकार्थी शब्दों के अर्थ बताइए।
व्यक्ति के जीवन में 'शम' होनी चाहिए और उसके व्यवहार में 'सम' होना अति आवश्यक है।

- Ans 1. शांति-समान
 2. कुछ-भाग
 3. समान-गणित का प्रश्न
 4. श्याम-रात

Question ID : 26433091329
Status : Not Answered
Chosen Option : --

Q.9 निम्न वाक्य में रेखांकित अंश के स्थान पर आने वाले सबसे उपयुक्त विकल्प का चयन कीजिए।
इस गीत की दो चार लड़ियाँ सुना दो।

- Ans 1. कविता
 2. कड़ियाँ
 3. लाईन
 4. शब्द

Question ID : 26433066867
Status : Not Answered
Chosen Option : --

Q.10 निम्न में से किस वाक्य में 'खग' के सही अनेकार्थी शब्द का प्रयोग हुआ है?

- Ans 1. किशोर दुष्ट लड़का है।
 2. सुहास की भाषा अत्यंत दुर्बोध है।
 3. पक्षी कलरव कर रहे हैं।
 4. वह बहुत बड़ा डाकू था।

Question ID : 26433085145
Status : Not Answered
Chosen Option : --

Q.11 निम्न वाक्य को अधिकरण कारक के अनुसार शुद्ध कीजिए।
कपड़े छत को सूख रहे हैं।

- Ans 1. कपड़े छत के अनुसार सूख रहे हैं।
 2. कपड़े छत पर सूख रहे हैं।
 3. कपड़े छत के सूख रहे हैं।
 4. कपड़े छत से सूख रहे हैं।

Question ID : 26433063034
Status : Not Answered
Chosen Option : --

Q.12 संयुक्त वाक्य - 'शिक्षा साध्य नहीं है, साधन है।' निम्नलिखित विकल्पों में से इस वाक्य के लिए कौन सा एक उचित सरल वाक्य होगा?

- Ans
- 1. शिक्षा एक साधन है।
 - 2. शिक्षा माध्यम नहीं साधन है।
 - 3. शिक्षा साधन है।
 - 4. शिक्षा साध्य न होकर साधन है।

Question ID : 26433062443
Status : Not Answered
Chosen Option : --

Q.13 निम्नलिखित वाक्य के किस भाग में त्रुटि है?
'मेरी समझ में नहीं आ रहा है कि आपके द्वारा इतने परिश्रम से कमाया गया यह धन अखिर किस काम में आएगा।'

- Ans
- 1. कमाया गया यह धन
 - 2. कि आपके द्वारा इतने परिश्रम से
 - 3. मेरी समझ में नहीं आ रहा है
 - 4. अखिर किस काम में आएगा।

Question ID : 26433063024
Status : Not Answered
Chosen Option : --

Q.14 निम्नलिखित वाक्यांश के लिए उपयुक्त सार्थक शब्द का चयन विकल्पों में से कीजिए।
वह बात जिसे सुना नहीं गया हो

- Ans
- 1. नासुना
 - 2. सुनासुना
 - 3. सुना
 - 4. अनसुनी

Question ID : 26433073313
Status : Not Answered
Chosen Option : --

Q.15 निम्नलिखित वाक्य के किस शब्द में अशुद्धि है?
इसी कारण देश में अशांति बढ़ रही है।

- Ans
- 1. बढ़
 - 2. अशांति
 - 3. देश
 - 4. कारण

Question ID : 26433066768
Status : Not Answered
Chosen Option : --

Comprehension:

निम्नलिखित गद्यांश में कुछ शब्दों को हटा दिया गया है। दिए गए विकल्पों की सहायता से रिक्त स्थानों की पूर्ति कीजिए। प्रत्येक संख्या के लिए सबसे उपयुक्त विकल्प का चयन कीजिए।
वर्तमान युग विज्ञान का युग है। वैज्ञानिक 1. _____ ने हमारे जीवन को सुखी बनाया है। वहीं दूसरी ओर समाज के सम्मुख अनेक समस्याएं भी 2. _____ की हैं। इनमें प्रदूषण की समस्या अत्यंत 3. _____ है। इसका अर्थ है 4. _____ का दूषित होना। वस्तुतः हम सभी प्रकृति के संतुलन में 5. _____ व्यतीत करते हैं।

SubQuestion No : 16

Q.16 रिक्त स्थान 1 की पूर्ति के लिए सबसे उपयुक्त विकल्प का चयन कीजिए।

- Ans
- 1. समस्या
 - 2. तिरस्कारों
 - 3. असंतुलन
 - 4. आविष्कारों

Question ID : 264330110969

Status : Not Answered

Chosen Option : --

Comprehension:

निम्नलिखित गद्यांश में कुछ शब्दों को हटा दिया गया है। दिए गए विकल्पों की सहायता से रिक्त स्थानों की पूर्ति कीजिए। प्रत्येक संख्या के लिए सबसे उपयुक्त विकल्प का चयन कीजिए।
वर्तमान युग विज्ञान का युग है। वैज्ञानिक 1. _____ ने हमारे जीवन को सुखी बनाया है। वहीं दूसरी ओर समाज के सम्मुख अनेक समस्याएं भी 2. _____ की हैं। इनमें प्रदूषण की समस्या अत्यंत 3. _____ है। इसका अर्थ है 4. _____ का दूषित होना। वस्तुतः हम सभी प्रकृति के संतुलन में 5. _____ व्यतीत करते हैं।

SubQuestion No : 17

Q.17 रिक्त स्थान 2 की पूर्ति के लिए सबसे उपयुक्त विकल्प का चयन कीजिए।

- Ans
- 1. परीक्षण
 - 2. बढ़ते
 - 3. त्रस्त
 - 4. उत्पन्न

Question ID : 264330110970

Status : Not Answered

Chosen Option : --

Comprehension:

निम्नलिखित गद्यांश में कुछ शब्दों को हटा दिया गया है। दिए गए विकल्पों की सहायता से रिक्त स्थानों की पूर्ति कीजिए। प्रत्येक संख्या के लिए सबसे उपयुक्त विकल्प का चयन कीजिए।
वर्तमान युग विज्ञान का युग है। वैज्ञानिक 1. _____ ने हमारे जीवन को सुखी बनाया है। वहीं दूसरी ओर समाज के सम्मुख अनेक समस्याएं भी 2. _____ की हैं। इनमें प्रदूषण की समस्या अत्यंत 3. _____ है। इसका अर्थ है 4. _____ का दूषित होना। वस्तुतः हम सभी प्रकृति के संतुलन में 5. _____ व्यतीत करते हैं।

SubQuestion No : 18

Q.18 रिक्त स्थान 3 की पूर्ति के लिए सबसे उपयुक्त विकल्प का चयन कीजिए।

- Ans
- 1. तात्पर्य
 - 2. प्रभावित
 - 3. गंभीर
 - 4. व्यवस्थित

Question ID : 264330110971

Status : Not Answered

Chosen Option : --

Comprehension:

निम्नलिखित गद्यांश में कुछ शब्दों को हटा दिया गया है। दिए गए विकल्पों की सहायता से रिक्त स्थानों की पूर्ति कीजिए। प्रत्येक संख्या के लिए सबसे उपयुक्त विकल्प का चयन कीजिए।
वर्तमान युग विज्ञान का युग है। वैज्ञानिक 1. _____ ने हमारे जीवन को सुखी बनाया है। वहीं दूसरी ओर समाज के सम्मुख अनेक समस्याएं भी 2. _____ की हैं। इनमें प्रदूषण की समस्या अत्यंत 3. _____ है। इसका अर्थ है 4. _____ का दूषित होना। वस्तुतः हम सभी प्रकृति के संतुलन में 5. _____ व्यतीत करते हैं।

SubQuestion No : 19

Q.19 रिक्त स्थान 4 की पूर्ति के लिए सबसे उपयुक्त विकल्प का चयन कीजिए।

- Ans
- 1. जीवन
 - 2. कारखानों
 - 3. वातावरण
 - 4. नगरों

Question ID : 264330110972

Status : Not Answered

Chosen Option : --

Comprehension:

निम्नलिखित गद्यांश में कुछ शब्दों को हटा दिया गया है। दिए गए विकल्पों की सहायता से रिक्त स्थानों की पूर्ति कीजिए। प्रत्येक संख्या के लिए सबसे उपयुक्त विकल्प का चयन कीजिए।
वर्तमान युग विज्ञान का युग है। वैज्ञानिक 1. _____ ने हमारे जीवन को सुखी बनाया है। वहीं दूसरी ओर समाज के सम्मुख अनेक समस्याएँ भी 2. _____ की हैं। इनमें प्रदूषण की समस्या अत्यंत 3. _____ है। इसका अर्थ है 4. _____ का दूषित होना। वस्तुतः हम सभी प्रकृति के संतुलन में 5. _____ व्यतीत करते हैं।

SubQuestion No : 20

Q.20 रिक्त स्थान 5 की पूर्ति के लिए सबसे उपयुक्त विकल्प का चयन कीजिए।

- Ans
- 1. युग
 - 2. सुख-साधन
 - 3. सुख
 - 4. जीवन

Question ID : 264330110973

Status : Not Answered

Chosen Option : --

WWW.GOVtJOBSALERT.COM