

# Constable GD in CAPFs SSF Rifleman GD in Assam Rifles and Sepoy in NCB Examination 2022

Roll Number	<a href="http://www.govtjobsalert.in">www.govtjobsalert.in</a>
Candidate Name	<a href="http://www.govtjobsalert.in">www.govtjobsalert.in</a>
Venue Name	ION Digital Zone iDZ Tehra
Exam Date	13/02/2023
Exam Time	11:45 AM - 12:45 PM
Subject	Constable GD Examination 2022

## Section : Part-A-General Intelligence and Reasoning

**Q.1** Three different positions of the same dice are shown. Find the number on the face opposite the face showing '4'.

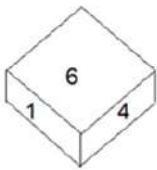


Figure 1

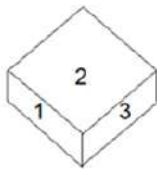


Figure 2

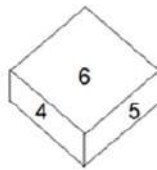


Figure 3

- Ans
- 1. 5
  - 2. 3
  - 3. 6
  - 4. 2

Question ID : 26433089455  
Status : Answered  
Chosen Option : 2

**Q.2** Which letter-cluster will replace the question mark (?) to complete the given series?  
ZYXV, UTSQ, PONL, KJIG, ?

- Ans
- 1. FDCB
  - 2. FEDB
  - 3. FEDC
  - 4. FDDB

Question ID : 26433067719  
Status : Answered  
Chosen Option : 2

**Q.3** In a certain code language, GUIDE is written as 'KWMFI', and SLICE is written as 'WNMEI'. How will 'FAITH' be written in the same code language?

- Ans
- 1. JDNVL
  - 2. JDNWL
  - 3. JCNVL
  - 4. JCMVL

Question ID : 26433067988  
Status : Answered  
Chosen Option : 4

**Q.4** Six students P,Q,R,S,T and U are sitting around a circular table facing the centre. P is sitting second to the right of Q. S is an immediate neighbour of both Q and R. U is sitting third to the left of R. T is an immediate neighbour of both P and R. Who is the immediate neighbour of P and Q?

- Ans**
- 1. S
  - 2. T
  - 3. U
  - 4. R

Question ID : 26433068865  
 Status : Answered  
 Chosen Option : 3

**Q.5** In a certain code language, 'RESULT' is written as 'LUTERS' and 'BARLEY' is written as 'ELYABR'. How will 'HEAVEN' be written in the same code language?

- Ans**
- 1. EVNEHA
  - 2. EANVHE
  - 3. VEENAH
  - 4. AEVNHA

Question ID : 26433079487  
 Status : Answered  
 Chosen Option : 1

**Q.6** Select the option figure which is embedded in the given figure. (Rotation is NOT allowed).

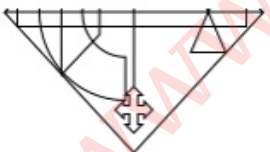


**Ans**

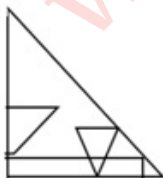
1.



2.



3.



4.



Question ID : 26433089776  
 Status : Answered  
 Chosen Option : 1

Q.7 Select the option that is related to the third word in the same way as the second word is related to the first word.

(The words must be considered as meaningful English words and must not be related to each other based on the number of letters/number of consonants/vowels in the word)

Mango : Fruit :: Rumba : ?

- Ans
- 1. Sea
  - 2. Dance
  - 3. Tall
  - 4. Food

Question ID : 26433079483  
Status : Answered  
Chosen Option : 2

Q.8 Which two signs should be interchanged to make the below equation mathematically correct?

$$81 + 3 \div 27 - 8 \times 24 = 25$$

- Ans
- 1. ÷ and +
  - 2. + and -
  - 3. ÷ and ×
  - 4. × and +

Question ID : 264330117533  
Status : Answered  
Chosen Option : 4

Q.9 Which of the following numbers will replace the question mark (?) in the given series?  
198, 194, 185, ?, 144, 108

- Ans
- 1. 172
  - 2. 175
  - 3. 169
  - 4. 182

Question ID : 26433076740  
Status : Answered  
Chosen Option : 3

Q.10 Eight girls P, Q, R, S, U, V, T and W are sitting around a circular table, facing the centre. V is sitting to the immediate left of Q and to the immediate right of U. W is sitting third to the left of V and second to the right of P. R is the immediate neighbour of P and Q. T is sitting fourth to the left of R. Who is sitting third to the left of U?

- Ans
- 1. S
  - 2. V
  - 3. P
  - 4. T

Question ID : 26433091415  
Status : Answered  
Chosen Option : 1

Q.11 Select the number from among the given options that can replace the question mark (?) in the following series.

$$\frac{1}{248}, \frac{1}{217}, \frac{1}{186}, ?, \frac{1}{124}$$

Ans

1.  $\frac{1}{179}$

2.  $\frac{1}{138}$

3.  $\frac{1}{147}$

4.  $\frac{1}{155}$

Question ID : 26433074529

Status : Answered

Chosen Option : 4

Q.12 Which two symbols, from the given options, should be interchanged to make the given equation correct?

$$(9 \div 3 + 169 \times 13) \div 5 - 10 + 16 = 206$$

Ans

1.  $\times$  and  $-$

2.  $\div$  and  $\times$

3.  $+$  and  $-$

4.  $+$  and  $\times$

Question ID : 26433082481

Status : Not Attempted and Marked For Review

Chosen Option : --

Q.13 Select the set in which the numbers are related in the same way as are the numbers of the following set.

(NOTE : Operations should be performed on the whole numbers, without breaking down the numbers into its constituent digits. E.g. 13 – Operations on 13 such as adding /subtracting/multiplying etc. to 13 can be performed. Breaking down 13 into 1 and 3 and then performing mathematical operations on 1 and 3 is NOT allowed)

(12, 87, 17)  
(19, 117, 20)

Ans

1. (13, 75, 12)

2. (8, 96, 14)

3. (11, 121, 22)

4. (15, 69, 9)

Question ID : 26433076480

Status : Not Attempted and Marked For Review

Chosen Option : --

Q.14 Select the option that is related to the fifth letter-cluster in the same way as the second letter-cluster is related to the first letter-cluster and the fourth letter-cluster is related to the third letter-cluster.

NEAR : PVZP :: GONE: ILMC :: TAXI: ?

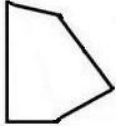
- Ans
- 1. GZCR
  - 2. RCZK
  - 3. VZCM
  - 4. VZCG

Question ID : 26433057484

Status : Answered

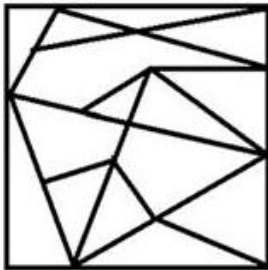
Chosen Option : 1

Q.15 Select the option figure in which the given figure is embedded (rotation is NOT allowed).

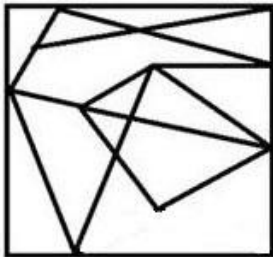


Ans

1.



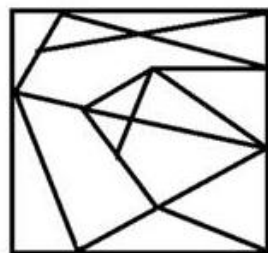
2.



3.



4.



Question ID : 26433069593

Status : Answered

Chosen Option : 3

**Q.16** Which option represents the correct order of the given words as they would appear in the English dictionary?

- 1 danger
- 2 damage
- 3 daring
- 4 darling
- 5 dark

**Ans** ✓ 1. 2,1,3,5,4

✗ 2. 2,3,1,4,5

✗ 3. 2,1,3,4,5

✗ 4. 3,1,2,4,5

Question ID : 26433069291

Status : Answered

Chosen Option : 1

**Q.17** In this question, three statements are given, followed by two conclusions numbered I and II. Assuming the statements to be true, even if they seem to be at variance with commonly known facts, decide which of the conclusions logically follows/follow from the statements.

**Statements:**

All apples are fruits.

All fruits are vegetables.

Some vegetables are fresh.

**Conclusions:**

I. All apples are fresh.

II. Some fruits are fresh.

**Ans** ✗ 1. Only conclusion I follows.

✗ 2. Only conclusion II follows.

✓ 3. Neither conclusion I nor II follows.

✗ 4. Both conclusions I and II follow.

Question ID : 26433070386

Status : Answered

Chosen Option : 3

WWW.GOVtJOBSALERT.IN

Q.18 Find the options which is related to the third figure in the same manner as second figure is related with the first figure. (First figure is the leftmost figure.)



Ans

- 1.
- 2.
- 3.
- 4.

Question ID : 26433078858  
Status : Answered  
Chosen Option : 4

Q.19 In a family, there are 7 members. X and Y are a married couple. X is the father of L. M is the wife of L. C is the brother of L. C has one son O. P is the sister of O. How is C related to P?

- Ans  1. Father
- 2. Son
  - 3. Father's father
  - 4. Father's brother

Question ID : 26433074598  
Status : Answered  
Chosen Option : 1

Q.20 Which of the following letter-clusters will replace the question mark (?) in the given series?  
DHMO, EILN, FJKM, ?, HLIK

- Ans  1. GLKL
- 2. GLJL
  - 3. GKJL
  - 4. HKJK

Question ID : 26433076437  
Status : Answered  
Chosen Option : 3

Q.1 'Paika' is a folk dance performed by members of the society in \_\_\_\_\_.

- Ans
- 1. Maharashtra
  - 2. Tamil Nadu
  - 3. Haryana
  - 4. Jharkhand

Question ID : 26433071664  
Status : Answered  
Chosen Option : 4

Q.2 The \_\_\_\_\_ (ABDM) aims to develop the backbone necessary to support the integrated digital health infrastructure of the country.

- Ans
- 1. Ajay Bharat Digital Mission
  - 2. Ayushman Bharat Digital Management
  - 3. Ayushman Bharat Digital Mission
  - 4. Ayushman Bharat Digital Map

Question ID : 264330116166  
Status : Answered  
Chosen Option : 3

Q.3 Which one of them is NOT a fundamental duty?

- Ans
- 1. Cherishing the ideas of national freedom struggle
  - 2. Respecting the national anthem
  - 3. Respecting the national flag
  - 4. Duty to cast your vote

Question ID : 26433089180  
Status : Answered  
Chosen Option : 1

Q.4 Ziyauddin Barani wrote his chronicle's first version in \_\_\_\_\_ year.

- Ans
- 1. 1356
  - 2. 1288
  - 3. 1358
  - 4. 1402

Question ID : 26433089124  
Status : Not Answered  
Chosen Option : --

Q.5 Dhananjaya Yashwant Chandrachud has been appointed as the \_\_\_\_\_ Chief Justice of India in October 2022.

- Ans
- 1. 30th
  - 2. 20th
  - 3. 40th
  - 4. 50th

Question ID : 264330114922  
Status : Answered  
Chosen Option : 4



**Q.6 Who has been selected as the new Chief Executive Officer of National Intelligence Grid (NATGRID) in August 2022 by the Central Government?**

- Ans**  1. Piyush Goyal  
 2. Ashish Gupta  
 3. Satya Lolla  
 4. Raghu Raman

Question ID : 264330115023  
Status : Not Answered  
Chosen Option : --

**Q.7 The festival of Ram Navami is celebrated in the Hindu month of \_\_\_\_\_.**

- Ans**  1. Kartik  
 2. Phalgun  
 3. Chaitra  
 4. Ashvin

Question ID : 264330115098  
Status : Answered  
Chosen Option : 1

**Q.8 Battle of Plassey was fought in \_\_\_\_\_.**

- Ans**  1. 1764  
 2. 1755  
 3. 1760  
 4. 1757

Question ID : 264330115701  
Status : Answered  
Chosen Option : 4

**Q.9 Which among the following articles of the Indian Constitution relates to the Attorney General of India?**

- Ans**  1. Article 76  
 2. Article 279A  
 3. Article 243ZE  
 4. Article 243I

Question ID : 26433089912  
Status : Answered  
Chosen Option : 1

**Q.10 Husk of a coconut is made of \_\_\_\_\_ tissue.**

- Ans**  1. Sclerenchyma  
 2. Collenchyma  
 3. Xylem  
 4. Parenchyma

Question ID : 264330115203  
Status : Not Answered  
Chosen Option : --

Q.11 \_\_\_\_\_ is a trade policy that doesn't restrict imports or exports.

- Ans
- 1. Fair trade
  - 2. Free trade
  - 3. Local trade
  - 4. Swiss trade

Question ID : 264330115386  
Status : Answered  
Chosen Option : 2

Q.12 Who was the first transgender to be honoured with Padma Shri?

- Ans
- 1. Karthik Chandra Rath
  - 2. Shanti Devi
  - 3. Narthaki Nataraj
  - 4. Rama Murthy

Question ID : 264330115820  
Status : Answered  
Chosen Option : 3

Q.13 Who was the host of the Asian Games 2018?

- Ans
- 1. Singapore
  - 2. India
  - 3. Indonesia
  - 4. China

Question ID : 264330115917  
Status : Answered  
Chosen Option : 4

Q.14 As a Banker to Banks, the \_\_\_\_\_ also acts as the 'lender of the last resort'.

- Ans
- 1. Nationalised bank of India
  - 2. State bank of India
  - 3. Reserve bank of India
  - 4. Union bank of India

Question ID : 264330115320  
Status : Answered  
Chosen Option : 3

Q.15 India won its last ODI Cricket world cup in which year as of 2022?

- Ans
- 1. 2011
  - 2. 2003
  - 3. 2007
  - 4. 1983

Question ID : 264330116248  
Status : Answered  
Chosen Option : 1

Q.16 The chemical reaction which involves addition of \_\_\_\_\_ or removal of \_\_\_\_\_ is called reduction.

- Ans
- 1. carbon dioxide, hydrogen
  - 2. carbon dioxide, oxygen
  - 3. hydrogen, oxygen
  - 4. oxygen, hydrogen

Question ID : 264330115157  
Status : Answered  
Chosen Option : 3

Q.17 Match the following types of industries to their examples:

- a) Agro based industry i) Hotels and Restaurants
- b) Public sector industry ii) Iron and steel industry
- c) Private sector industry iii) Silk textile
- d) Mineral based industry iv) BHEL and SAIL

- Ans
- 1. a-iv,b-iii,c-ii,d-i
  - 2. a-i,b-ii,c-iii,d-iv
  - 3. a-iv,b-ii,c-i,d-iii
  - 4. a-iii,b-iv,c-i,d-ii

Question ID : 264330115567  
Status : Not Answered  
Chosen Option : --

Q.18 Which instrument is used to measure the vibrations during an earthquake?

- Ans
- 1. Mercalli scale
  - 2. Seismograph
  - 3. Hygrometer
  - 4. Richter Scale

Question ID : 264330116003  
Status : Answered  
Chosen Option : 2

Q.19 What was the slogan of the 2011 Census of India?

- Ans
- 1. Our Census - Our Pride
  - 2. Our Census - Secured Future
  - 3. India's Census - India's Pride
  - 4. Our Census - Our Future

Question ID : 264330116029  
Status : Not Answered  
Chosen Option : --

Q.20 The Fourth Five Year Plan had began in the year \_\_\_\_\_.

- Ans
- 1. 1969
  - 2. 1966
  - 3. 1962
  - 4. 1973

Question ID : 264330116119  
Status : Not Attempted and Marked For Review  
Chosen Option : --

Q.1 The average weight of eight persons is 40 kg. If one person is removed, then the average weight becomes 38 kg. The weight of the removed person is:

- Ans  1. 38 kg  
 2. 54 kg  
 3. 33.25 kg  
 4. 78 kg

Question ID : 26433087343  
Status : Answered  
Chosen Option : 2

Q.2 The cost price of an article is 64% of the marked price. Calculate the gain percentage after allowing a discount of 20%.

- Ans  1. 35%  
 2. 25%  
 3. 30%  
 4. 20%

Question ID : 26433073015  
Status : Answered  
Chosen Option : 2

Q.3 Atul alone can complete a work in 114 days. How many persons were required with the same efficiency as Atul to complete the same work in 19 days?

- Ans  1. 7  
 2. 6  
 3. 5  
 4. 8

Question ID : 264330116850  
Status : Answered  
Chosen Option : 2

Q.4 There is a cone with diameter 14 cm and height 12 cm. It is being filled with water at a rate of  $4 \text{ cm}^3$  in every 10 s. How long will it take to fill the cone? (Use  $\pi = \frac{22}{7}$ )

- Ans  1. 616 s  
 2. 1540 s  
 3. 3080 s  
 4. 6160 s

Question ID : 26433087414  
Status : Not Attempted and Marked For Review  
Chosen Option : --

Q.5 The fourth proportional to 2 hours 40 minutes, 1 hours 20 minutes and 10 hours is:

- Ans  1. 4 hours  
 2. 6 hours  
 3. 5 hours  
 4. 2 hours

Question ID : 26433081579  
Status : Answered  
Chosen Option : 3

Q.6 The average weight of 34 persons is increased by 3 kg when one person weighing 90 kg is replaced by a new person. Weight of the new person is:

- Ans
- 1. 196 kg
  - 2. 202 kg
  - 3. 190 kg
  - 4. 192 kg

Question ID : 26433079998

Status : **Not Attempted and Marked For Review**

Chosen Option : --

Q.7 Find the difference between the digits of the greatest number that can exactly divide 144 and 216?

- Ans
- 1. 2
  - 2. 4
  - 3. 3
  - 4. 5

Question ID : 264330116639

Status : **Answered**

Chosen Option : 3

Q.8 Two persons P and Q working together can do a piece of work in 36 days. Q alone can do it in 45 days. Q alone start the work and left the work after 5 days. How many days will P take to complete the remaining work?

- Ans
- 1. 180
  - 2. 120
  - 3. 140
  - 4. 160

Question ID : 26433080229

Status : **Answered**

Chosen Option : 4

Q.9 Divide ₹ 5,309 between A and B, so that the amount of A after 4 years is equal to the amount B after 6 years, the interest being compounded at 6% per annum, compounding annually.

- Ans
- 1. ₹2,809, ₹2,500
  - 2. ₹2,759, ₹2,550
  - 3. ₹2,659, ₹2,650
  - 4. ₹2,709, ₹2,600

Question ID : 26433074299

Status : **Not Answered**

Chosen Option : --

Q.10 If the third proportion to 3 and 27 is 'x', then what would be the HCF of 'x' and 27?

- Ans
- 1. 9
  - 2. 27
  - 3. 3
  - 4. 15

Question ID : 26433076008  
Status : Answered  
Chosen Option : 2

Q.11 If  $\frac{5}{8}$  of  $184 \times 15 \div 5 + k = 513 \div 9 + 435$ , then the value of k is:

- Ans
- 1. 192
  - 2. 147
  - 3. 239
  - 4. 136

Question ID : 26433074974  
Status : Answered  
Chosen Option : 2

Q.12 In an election between two candidates, 80% of the voters cast their votes out of which 5% of votes were declared invalid. A candidate got 285000 votes which was 75% of the total valid votes. The total number of voters enrolled for that election was:

- Ans
- 1. 500000
  - 2. 450000
  - 3. 400000
  - 4. 550000

Question ID : 26433087351  
Status : Not Answered  
Chosen Option : --

Q.13 A solid hemisphere has a volume of  $1,152 \pi \text{ cm}^3$ . Find the curved surface area of the hemisphere.

- Ans
- 1.  $344 \text{ cm}^2$
  - 2.  $288 \pi \text{ cm}^2$
  - 3.  $302 \pi \text{ cm}^2$
  - 4.  $294 \text{ cm}^2$

Question ID : 26433075857  
Status : Answered  
Chosen Option : 2

Q.14 The population of a city in the beginning of 2019 was 82,000. Its population is increasing at a rate of 2% annually. What is its population (rounded off to the nearest integer) in the beginning of 2022?

- Ans
- 1. 85000
  - 2. 86789
  - 3. 88000
  - 4. 87019

Question ID : 26433075983  
Status : Answered  
Chosen Option : 1

Q.15 Shlok drives the first 140 km in 3 hrs and the next 180 km in 5 hrs. What is his average speed (in km/h) for the entire trip?

- Ans
- 1. 50
  - 2. 45
  - 3. 30
  - 4. 40

Question ID : 26433075241  
Status : Answered  
Chosen Option : 4

Q.16 A man sells rice at 10% profit and uses a weight that is 20% less than the actual measure. His gain percentage is:

- Ans
- 1.  $37\frac{2}{3}\%$
  - 2.  $37\frac{1}{2}\%$
  - 3.  $37\frac{1}{5}\%$
  - 4.  $37\frac{1}{3}\%$

Question ID : 26433075149  
Status : Answered  
Chosen Option : 3

Q.17 The selling price of a product is such that the seller earns a profit of 20% on the cost price. Determine the ratio of selling price to cost price.

- Ans
- 1.  $\frac{3}{4}$
  - 2.  $\frac{5}{6}$
  - 3.  $\frac{6}{5}$
  - 4.  $\frac{4}{3}$

Question ID : 26433071306  
Status : Answered  
Chosen Option : 3

Q.18 Marked price of an article is Rs. 1600 but Rohan gets a discount of 20 percent. He sells the article for Rs. 1600. Rohan's gain percent is:

- Ans
- 1. 18 percent
  - 2. 22 percent
  - 3. 25 percent
  - 4. 20 percent

Question ID : 264330116735  
Status : Answered  
Chosen Option : 3

Q.19 A fruit merchant makes a profit of 25% by selling mangoes at a certain price. If he charges Rs.3 more on each mango, he will gain 40%. Find the cost price of one mango

- Ans
- 1. Rs.30
  - 2. Rs.25
  - 3. Rs.20
  - 4. Rs.15

Question ID : 26433074985

Status : **Not Attempted and Marked For Review**

Chosen Option : --

Q.20 A boat is moving in still water at a speed of 15 km/h. The speed of the stream is 3 km/h. How much time will the boat take to cover 6 km upstream?

- Ans
- 1. 30 minutes
  - 2. 15 minutes
  - 3. 20 minutes
  - 4. 45 minutes

Question ID : 26433075986

Status : **Answered**

Chosen Option : 3

Section : **Part-D-English**

Q.1 In the following passage, some words have been deleted. Read the passage carefully and select the most appropriate option to fill in the blanks.  
Blood transfusion is a procedure that starts with the doctor (1)\_\_\_\_\_ the patients' blood type. In case of a wrong transfusion in the immune (2)\_\_\_\_\_ of an individual, it leads to an infection.

- Ans
- 1. diagnosing; structure
  - 2. treating; process
  - 3. determining; system
  - 4. settling; order

Question ID : 26433084742

Status : **Answered**

Chosen Option : 3

Q.2 Select the most appropriate synonym of the underlined word.

Since the last few hours his pulse rate is constant.

- Ans
- 1. Steady
  - 2. Fickle
  - 3. Pitiful
  - 4. Reflective

Question ID : 26433084682

Status : **Answered**

Chosen Option : 1



**Q.3** Select the most appropriate option to substitute the underlined segment in the given sentence to make it a meaningful sentence. If no substitution is required, select 'No substitution'.

There are hundred of superstitions that survive in various parts of the country, and the study of them is rather amusing.

- Ans**
- 1. There are hundred of superstition that survive in various parts of the country, and the study of them is rather amusing.
  - 2. There are hundred of superstition that survived in various parts of the country, and the study of them is rather amusing.
  - 3. No substitution
  - 4. There are hundreds of superstitions that survive in various parts of the country, and the study of them is rather amusing.

Question ID : 26433092043  
Status : Answered  
Chosen Option : 4

**Q.4** Select the most appropriate meaning of the given idiom.

**Wear your heart on your sleeve**

- Ans**
- 1. Imagining unreal things about others
  - 2. Wearing untidy clothes intentionally
  - 3. Spreading scandals mercilessly
  - 4. Expressing emotions very openly

Question ID : 26433073486  
Status : Answered  
Chosen Option : 4

**Q.5** Select the most appropriate ANTONYM of the given word.

**Lucid**

- Ans**
- 1. Dark
  - 2. Bloat
  - 3. Jolt
  - 4. Stark

Question ID : 26433066087  
Status : Answered  
Chosen Option : 1

**Q.6** Select the most appropriate synonym of the given word.

**Valid**

- Ans**
- 1. Illicit
  - 2. Evil
  - 3. Logical
  - 4. Fake

Question ID : 26433073688  
Status : Answered  
Chosen Option : 3

Q.7 Select the most appropriate ANTONYM of the given word.

Verbose

- Ans  1. Talkative  
 2. Brief  
 3. Polished  
 4. Wordy

Question ID : 26433072665  
Status : Answered  
Chosen Option : 2

Q.8 The given sentence is divided into three segments. Select the option that has the segment with a grammatical error. If there is no error, select 'no error' as your answer.

Ameya won't / eat / any junk food at all.

- Ans  1. Ameya won't  
 2. No error  
 3. eat  
 4. any junk food at all

Question ID : 26433071859  
Status : Answered  
Chosen Option : 1

Q.9 Select the INCORRECTLY spelt word.

- Ans  1. Brandish  
 2. Covardice  
 3. Treachery  
 4. Statutory

Question ID : 26433073506  
Status : Answered  
Chosen Option : 2

Q.10 Select the most appropriate option to fill in the blank.

My uncle's legal \_\_\_\_\_ is his son.

- Ans  1. heir  
 2. hair  
 3. here  
 4. hare

Question ID : 26433073933  
Status : Answered  
Chosen Option : 1

Q.11 Select the most appropriate spelling that can correctly substitute the misspelt underlined segment in the given sentence.

The thick dirt on the building was the acretion of ages.

- Ans  1. accration  
 2. accretion  
 3. acration  
 4. acrettion

Question ID : 26433071936  
Status : Answered  
Chosen Option : 2

Q.12 Select the most appropriate option to fill in the blank.

I have made the basket for going to the picnic and I've packed some sandwiches

- Ans
- 1. two
  - 2. too
  - 3. to
  - 4. toot

Question ID : 26433084617  
Status : Answered  
Chosen Option : 2

Q.13 Select the most appropriate homonym to fill in the blank.  
The authorities \_\_\_\_\_ the unregistered companies.

- Ans
- 1. sees
  - 2. seize
  - 3. seas
  - 4. cease

Question ID : 26433058519  
Status : Answered  
Chosen Option : 2

Q.14 Select the most appropriate meaning of the given idiom.

To add fuel to fire.

- Ans
- 1. To make a bad situation worse
  - 2. To speak against someone
  - 3. To fight over trivial thing
  - 4. To start the conversation

Question ID : 26433072537  
Status : Answered  
Chosen Option : 1

Q.15 Substitute the underlined words with the option that is closest in meaning to it.

Rahul likes to keep his house spic and span.

- Ans
- 1. shabby and dirty
  - 2. neat and clean
  - 3. bright and glory
  - 4. rich and famous

Question ID : 26433088952  
Status : Answered  
Chosen Option : 2

**Comprehension:**

In the following passage some words have been deleted. Fill in the blanks with the help of the alternatives given. Select the most appropriate option for each number.

Ayurveda views a person more than bones and muscle. According to it, you are a spirit that represents the *vata*, *pitta*, and *kapha* elements. Ayurveda (1) \_\_\_\_ impacts your health by bringing an (2) \_\_\_\_ in your body, mind, and soul. By consuming healthy food according to the body's constitution, and performing yoga stretches, and meditation, you will start to see (3) \_\_\_\_ results. Ayurveda impacts the body at the deepest cellular levels. It helps in healing, and (4) \_\_\_\_ of cells, to protect it from a wide range of ailments naturally. According to Ayurveda, when a person eats wrong food, then "ama" or toxin gets deposited in the body. If this waste-product is not eliminated from the body soon, then it starts to spread in different areas of the body. This is the major reason behind experiencing an (5) \_\_\_\_ in the body.

**SubQuestion No : 16**

**Q.16 Select the most appropriate option to fill in blank 1.**

- Ans  1. casually  
 2. positively  
 3. negatively  
 4. probably

Question ID : 26433073176  
Status : Answered  
Chosen Option : 2

**Comprehension:**

In the following passage some words have been deleted. Fill in the blanks with the help of the alternatives given. Select the most appropriate option for each number.

Ayurveda views a person more than bones and muscle. According to it, you are a spirit that represents the *vata*, *pitta*, and *kapha* elements. Ayurveda (1) \_\_\_\_ impacts your health by bringing an (2) \_\_\_\_ in your body, mind, and soul. By consuming healthy food according to the body's constitution, and performing yoga stretches, and meditation, you will start to see (3) \_\_\_\_ results. Ayurveda impacts the body at the deepest cellular levels. It helps in healing, and (4) \_\_\_\_ of cells, to protect it from a wide range of ailments naturally. According to Ayurveda, when a person eats wrong food, then "ama" or toxin gets deposited in the body. If this waste-product is not eliminated from the body soon, then it starts to spread in different areas of the body. This is the major reason behind experiencing an (5) \_\_\_\_ in the body.

**SubQuestion No : 17**

**Q.17 Select the most appropriate option to fill in blank 2.**

- Ans  1. foundation  
 2. equilibrium  
 3. basis  
 4. substance

Question ID : 26433073177  
Status : Answered  
Chosen Option : 2

**Comprehension:**

In the following passage some words have been deleted. Fill in the blanks with the help of the alternatives given. Select the most appropriate option for each number.

Ayurveda views a person more than bones and muscle. According to it, you are a spirit that represents the *vata*, *pitta*, and *kapha* elements. Ayurveda (1) \_\_\_\_ impacts your health by bringing an (2) \_\_\_\_ in your body, mind, and soul. By consuming healthy food according to the body's constitution, and performing yoga stretches, and meditation, you will start to see (3) \_\_\_\_ results. Ayurveda impacts the body at the deepest cellular levels. It helps in healing, and (4) \_\_\_\_ of cells, to protect it from a wide range of ailments naturally. According to Ayurveda, when a person eats wrong food, then "ama" or toxin gets deposited in the body. If this waste-product is not eliminated from the body soon, then it starts to spread in different areas of the body. This is the major reason behind experiencing an (5) \_\_\_\_ in the body.

**SubQuestion No : 18**

**Q.18 Select the most appropriate option to fill in blank 3.**

**Ans**  1. invisible

2. gentle

3. sluggish

4. visible

Question ID : 26433073178

Status : Answered

Chosen Option : 4

**Comprehension:**

In the following passage some words have been deleted. Fill in the blanks with the help of the alternatives given. Select the most appropriate option for each number.

Ayurveda views a person more than bones and muscle. According to it, you are a spirit that represents the *vata*, *pitta*, and *kapha* elements. Ayurveda (1) \_\_\_\_ impacts your health by bringing an (2) \_\_\_\_ in your body, mind, and soul. By consuming healthy food according to the body's constitution, and performing yoga stretches, and meditation, you will start to see (3) \_\_\_\_ results. Ayurveda impacts the body at the deepest cellular levels. It helps in healing, and (4) \_\_\_\_ of cells, to protect it from a wide range of ailments naturally. According to Ayurveda, when a person eats wrong food, then "ama" or toxin gets deposited in the body. If this waste-product is not eliminated from the body soon, then it starts to spread in different areas of the body. This is the major reason behind experiencing an (5) \_\_\_\_ in the body.

**SubQuestion No : 19**

**Q.19 Select the most appropriate option to fill in blank 4.**

**Ans**  1. regeneration

2. benefit

3. degeneration

4. loss

Question ID : 26433073179

Status : Answered

Chosen Option : 1

**Comprehension:**

In the following passage some words have been deleted. Fill in the blanks with the help of the alternatives given. Select the most appropriate option for each number.

Ayurveda views a person more than bones and muscle. According to it, you are a spirit that represents the *vata*, *pitta*, and *kapha* elements. Ayurveda (1) \_\_\_\_\_ impacts your health by bringing an (2) \_\_\_\_\_ in your body, mind, and soul. By consuming healthy food according to the body's constitution, and performing yoga stretches, and meditation, you will start to see (3) \_\_\_\_\_ results. Ayurveda impacts the body at the deepest cellular levels. It helps in healing, and (4) \_\_\_\_\_ of cells, to protect it from a wide range of ailments naturally. According to Ayurveda, when a person eats wrong food, then "ama" or toxin gets deposited in the body. If this waste-product is not eliminated from the body soon, then it starts to spread in different areas of the body. This is the major reason behind experiencing an (5) \_\_\_\_\_ in the body.

**SubQuestion No : 20**

**Q.20** Select the most appropriate option to fill in blank 5.

- Ans
- 1. weakness
  - 2. potential
  - 3. energy
  - 4. imbalance

Question ID : 26433073180  
Status : Answered  
Chosen Option : 4

**Section : Part-D-Hindi**

**Q.1** 'वसंत ऋतु में वृक्षों में नव पल्लव आते हैं।' वाक्य में प्रयुक्त 'पल्लव' शब्द का अर्थ है-

- Ans
- 1. पत्ता
  - 2. डाली
  - 3. फूल
  - 4. शाखा

Question ID : 26433069742  
Status : Not Answered  
Chosen Option : --

**Q.2** 'कुत्ता रेंकता है।' इस वाक्य में रेखांकित शब्द के स्थान पर उपयुक्त शब्द क्या होगा?

- Ans
- 1. चहचहाता
  - 2. गुटरगू करता
  - 3. भौंकता
  - 4. मिमियाता

Question ID : 26433062779  
Status : Not Answered  
Chosen Option : --

**Q.3** 'अतिवृष्टि' का सही विलोम निम्न में से क्या है?

- Ans
- 1. बाढ़
  - 2. निवृष्टि
  - 3. अनावृष्टि
  - 4. अवृष्टि

Question ID : 26433062924  
Status : Not Answered  
Chosen Option : --

Q.4 निम्नलिखित विकल्पों में से 'साधारण या व्यापक नियम के विरुद्ध चीजें' वाक्यांश के लिए एक सार्थक शब्द क्या होगा ?

- Ans
- 1. नीरवता
  - 2. अपवाद
  - 3. अपूर्व
  - 4. आलोचक

Question ID : 26433062475  
Status : Not Answered  
Chosen Option : --

Q.5 'क्रम के अनुसार' वाक्यांश के लिए सार्थक शब्द है-

- Ans
- 1. सक्रम
  - 2. यथाक्रम
  - 3. क्रमांक
  - 4. असंख्या

Question ID : 26433065869  
Status : Not Answered  
Chosen Option : --

Q.6 निम्नलिखित वाक्य के रिक्त स्थान में सबसे उपयुक्त मुहावरा क्या होगा?  
'श्रवण कुमार अपने माता पिता के लिए \_\_\_\_\_ थे।'

- Ans
- 1. दाढ़ी में तिनका
  - 2. अंधे की लकड़ी
  - 3. काठ के उल्लू
  - 4. हाथी के दांत

Question ID : 26433066735  
Status : Not Answered  
Chosen Option : --

Q.7 वर्तनी की दृष्टि से अशुद्ध वाक्य का चयन कीजिए-

- Ans
- 1. मैं आपसे छुट्टी के लिए प्रार्थना करता हूँ।
  - 2. मैंने उसकी अस्वस्थता के बारे में सुना था।
  - 3. वह अपनी उम्र के तीसवें वर्ष तक अविवाहित था।
  - 4. राम का शत्रू रावण मारा गया।

Question ID : 26433062892  
Status : Not Answered  
Chosen Option : --

Q.8 निम्नलिखित विकल्पों में से किस एक वाक्य में क्रिया सम्बन्धी अशुद्धि है?

- Ans
- 1. चोरी करते हुए पकड़े जाने पर उस पर घड़ों पानी पड़ गया।
  - 2. वह लड़का दौड़ता है।
  - 3. दूसरों के चरित्र पर अकारण ही कीचड़ नहीं डालना चाहिए।
  - 4. कृपया उत्तर शीघ्र दें।

Question ID : 26433091233  
Status : Not Answered  
Chosen Option : --

Q.9 'साहित्य से संबंधित' वाक्यांश के लिए एक शब्द होगा-

- Ans  1. सरोकार  
 2. साहित्यिक  
 3. दर्पण  
 4. सामाजिक

Question ID : 26433065734  
Status : Not Answered  
Chosen Option : --

Q.10 अशुद्ध वर्तनी वाला वाक्य पहचानिए।

- Ans  1. बहुत भाग - दउड़ के बाद कलेज में उनका प्रवेश हुआ।  
 2. मेरी पत्नी बीमार है।  
 3. दादी की मृत्यु से हमें बड़ा शोक हुआ।  
 4. मुझे तुमसे मिलने की उत्सुकता थी।

Question ID : 26433063064  
Status : Not Answered  
Chosen Option : --

Q.11 निम्नलिखित वाक्य में रेखांकित खंड के स्थान पर प्रयुक्त होने वाले सबसे उपयुक्त विकल्प का चयन कीजिए।

उसके चाची का लड़की हुई है।

- Ans  1. से  
 2. में  
 3. को  
 4. के

Question ID : 26433079571  
Status : Not Answered  
Chosen Option : --

Q.12 निम्नलिखित विकल्पों में से किस एक वाक्य में विशेषण का उचित प्रयोग किया गया है?

- Ans  1. पानी से नहाओ।  
 2. रोज स्कूल जाओ।  
 3. मीठा फल खाओ।  
 4. खाना खाओ।

Question ID : 26433062961  
Status : Not Answered  
Chosen Option : --

Q.13 निम्नलिखित विकल्पों में से 'धुन लगना' मुहावरे का अर्थ क्या है?

- Ans  1. भय होना  
 2. निराश होना  
 3. खुश होना  
 4. क्षय होना

Question ID : 26433062552  
Status : Not Answered  
Chosen Option : --



Q.14 सृष्टि के निर्माता ब्रह्मा हैं, तो विनाशक \_\_\_\_\_ ।  
'शिव' के पर्याय से उक्त वाक्य में रिक्त स्थान की पूर्ति कीजिए।

- Ans
- 1. मार्तण्ड
  - 2. लोकेश
  - 3. विभु
  - 4. त्रिलोचन

Question ID : 26433084990  
Status : Not Answered  
Chosen Option : --

Q.15 "भिखारी को देखकर उसे उस पर \_\_\_\_\_ आ गई।"  
उपरोक्त वाक्य में रिक्त स्थान पर निम्न में से किस शब्द का प्रयोग सर्वाधिक उपयुक्त होगा?

- Ans
- 1. अनुकंपा
  - 2. माया
  - 3. कृपा
  - 4. दया

Question ID : 26433067005  
Status : Not Answered  
Chosen Option : --

**Comprehension:**

निम्नलिखित गद्यांश में कुछ शब्दों को हटा दिया गया है। दिए गए विकल्पों की सहायता से रिक्त स्थानों की पूर्ति कीजिए। प्रत्येक संख्या के लिए सबसे उपयुक्त विकल्प का चयन करें।  
संसार में सैकड़ों प्रकार के प्राणी हैं, इनमें मानव जीवन 1. \_\_\_\_\_ है। वह सोच-समझ कर 2. \_\_\_\_\_ लेता है कि उसे क्या करना चाहिए तथा उसके लिए क्या उपयोगी है जो उसे अपने 3. \_\_\_\_\_ तक पहुँचा दे। उसके जीवन की 4. \_\_\_\_\_ तभी है जब वह आकांक्षा या लक्ष्य लेकर जीवन व्यतीत करे। जीवन एक प्रकार की 5. \_\_\_\_\_ है, जहाँ नित्य नए-नए अनुभव होते हैं।

SubQuestion No : 16

Q.16 रिक्त स्थान 1 की पूर्ति के लिए सबसे उपयुक्त विकल्प का चयन कीजिए।

- Ans
- 1. प्रारंभ
  - 2. सर्वश्रेष्ठ
  - 3. अधूरा
  - 4. पूरा

Question ID : 264330111029  
Status : Not Answered  
Chosen Option : --

**Comprehension:**

निम्नलिखित गद्यांश में कुछ शब्दों को हटा दिया गया है। दिए गए विकल्पों की सहायता से रिक्त स्थानों की पूर्ति कीजिए। प्रत्येक संख्या के लिए सबसे उपयुक्त विकल्प का चयन करें।  
संसार में सैकड़ों प्रकार के प्राणी हैं, इनमें मानव जीवन 1. \_\_\_\_\_ है। वह सोच-समझ कर 2. \_\_\_\_\_ लेता है कि उसे क्या करना चाहिए तथा उसके लिए क्या उपयोगी है जो उसे अपने 3. \_\_\_\_\_ तक पहुँचा दे। उसके जीवन की 4. \_\_\_\_\_ तभी है जब वह आकांक्षा या लक्ष्य लेकर जीवन व्यतीत करे। जीवन एक प्रकार की 5. \_\_\_\_\_ है, जहाँ नित्य नए-नए अनुभव होते हैं।

SubQuestion No : 17

Q.17 रिक्त स्थान 2 की पूर्ति के लिए सबसे उपयुक्त विकल्प का चयन कीजिए।

- Ans
- 1. उपचार
  - 2. अनिवार्य
  - 3. निर्णय
  - 4. देखता

Question ID : 264330111030  
Status : Not Answered  
Chosen Option : --

**Comprehension:**

निम्नलिखित गद्यांश में कुछ शब्दों को हटा दिया गया है। दिए गए विकल्पों की सहायता से रिक्त स्थानों की पूर्ति कीजिए। प्रत्येक संख्या के लिए सबसे उपयुक्त विकल्प का चयन करें।  
संसार में सैकड़ों प्रकार के प्राणी हैं, इनमें मानव जीवन 1. \_\_\_\_\_ है। वह सोच-समझ कर 2. \_\_\_\_\_ लेता है कि उसे क्या करना चाहिए तथा उसके लिए क्या उपयोगी है जो उसे अपने 3. \_\_\_\_\_ तक पहुँचा दे। उसके जीवन की 4. \_\_\_\_\_ तभी है जब वह आकांक्षा या लक्ष्य लेकर जीवन व्यतीत करें। जीवन एक प्रकार की 5. \_\_\_\_\_ है, जहाँ नित्य नए-नए अनुभव होते हैं।

**SubQuestion No : 18****Q.18 रिक्त स्थान 3 की पूर्ति के लिए सबसे उपयुक्त विकल्प का चयन कीजिए।**

- Ans
- 1. कर्तव्य
  - 2. प्रारंभ
  - 3. लक्ष्य
  - 4. सीमा

Question ID : 264330111031  
Status : Not Answered  
Chosen Option : --

**Comprehension:**

निम्नलिखित गद्यांश में कुछ शब्दों को हटा दिया गया है। दिए गए विकल्पों की सहायता से रिक्त स्थानों की पूर्ति कीजिए। प्रत्येक संख्या के लिए सबसे उपयुक्त विकल्प का चयन करें।  
संसार में सैकड़ों प्रकार के प्राणी हैं, इनमें मानव जीवन 1. \_\_\_\_\_ है। वह सोच-समझ कर 2. \_\_\_\_\_ लेता है कि उसे क्या करना चाहिए तथा उसके लिए क्या उपयोगी है जो उसे अपने 3. \_\_\_\_\_ तक पहुँचा दे। उसके जीवन की 4. \_\_\_\_\_ तभी है जब वह आकांक्षा या लक्ष्य लेकर जीवन व्यतीत करें। जीवन एक प्रकार की 5. \_\_\_\_\_ है, जहाँ नित्य नए-नए अनुभव होते हैं।

**SubQuestion No : 19****Q.19 रिक्त स्थान 4 की पूर्ति के लिए सबसे उपयुक्त विकल्प का चयन कीजिए।**

- Ans
- 1. विफलता
  - 2. महत्त्वपूर्ण
  - 3. निश्चय
  - 4. सार्थकता

Question ID : 264330111032  
Status : Not Answered  
Chosen Option : --

**Comprehension:**

निम्नलिखित गद्यांश में कुछ शब्दों को हटा दिया गया है। दिए गए विकल्पों की सहायता से रिक्त स्थानों की पूर्ति कीजिए। प्रत्येक संख्या के लिए सबसे उपयुक्त विकल्प का चयन करें।  
संसार में सैकड़ों प्रकार के प्राणी हैं, इनमें मानव जीवन 1. \_\_\_\_\_ है। वह सोच-समझ कर 2. \_\_\_\_\_ लेता है कि उसे क्या करना चाहिए तथा उसके लिए क्या उपयोगी है जो उसे अपने 3. \_\_\_\_\_ तक पहुँचा दे। उसके जीवन की 4. \_\_\_\_\_ तभी है जब वह आकांक्षा या लक्ष्य लेकर जीवन व्यतीत करें। जीवन एक प्रकार की 5. \_\_\_\_\_ है, जहाँ नित्य नए-नए अनुभव होते हैं।

**SubQuestion No : 20****Q.20 रिक्त स्थान 5 की पूर्ति के लिए सबसे उपयुक्त विकल्प का चयन कीजिए।**

- Ans
- 1. प्रयोगशाला
  - 2. किताबशाला
  - 3. कृतज्ञता
  - 4. योग्यता

Question ID : 264330111033  
Status : Not Answered  
Chosen Option : --